

Combined Graduate Level Examination 2024 Tier I

Roll Number	
Candidate Name	
Venue Name	
Exam Date	10/09/2024
Exam Time	12:30 PM - 1:30 PM
Subject	Combined Graduate Level Examination Tier I

Section : General Intelligence and Reasoning

Q.1 Which of the following letter-clusters will replace the question mark (?) in the given series to make it logically complete?
ICT, FES, CGR, ZIQ, ?

- Ans
- 1. WJP
 - 2. XKP
 - 3. WKP
 - 4. XLO

Question ID : 630680416609
Option 1 ID : 6306801625201
Option 2 ID : 6306801625202
Option 3 ID : 6306801625200
Option 4 ID : 6306801625199
Status : Answered
Chosen Option : 3

Q.2 Select the pair in which the numbers are related to each other in the same way as are the numbers in the given pairs.
(NOTE: Operations should be performed on the whole numbers, without breaking down the numbers into its constituent digits. E.g. 13 – Operations on 13 such as adding /deleting/multiplying etc. to 13 can be performed. Breaking down 13 into 1 and 3 and then performing mathematical operations on 1 and 3 is not allowed.)

12 : 25
11 : 23

- Ans
- 1. 15 : 29
 - 2. 18 : 35
 - 3. 25 : 49
 - 4. 21 : 43

Question ID : 630680313728
Option 1 ID : 6306801220761
Option 2 ID : 6306801220762
Option 3 ID : 6306801220764
Option 4 ID : 6306801220763
Status : Answered
Chosen Option : 4

Q.3 Select the option that is related to the fifth letter-cluster in the same way as the second letter-cluster is related to the first letter-cluster and the fourth letter-cluster is related to the third letter-cluster.

DOY:PAK :: BQM:NCY :: ILU:?

- Ans
- 1. UYG
 - 2. TYG
 - 3. UXG
 - 4. TXG

Question ID : 630680416750
Option 1 ID : 6306801625763
Option 2 ID : 6306801625766
Option 3 ID : 6306801625765
Option 4 ID : 6306801625764
Status : Answered
Chosen Option : 3

Q.4 In a certain code language, 'TIZZ' is written as 'VKBB' and 'QOPH' is written as 'SQRJ'. How will 'CKAU' be written in that language?

- Ans
- 1. ENCV
 - 2. DNBV
 - 3. EMCW
 - 4. DMBW

Question ID : 630680172753
Option 1 ID : 630680669412
Option 2 ID : 630680669414
Option 3 ID : 630680669413
Option 4 ID : 630680669415
Status : Answered
Chosen Option : 3

Q.5 104 is related to 13 following a certain logic. Following the same logic, 136 is related to 17. To which of the following is 232 related, following the same logic?

(NOTE: Operations should be performed on the whole numbers, without breaking down the numbers into its constituent digits. E.g. 13 – Operations on 13 such as adding /deleting /multiplying etc. to 13 can be performed. Breaking down 13 into 1 and 3 and then performing mathematical operations on 1 and 3 is not allowed)

- Ans
- 1. 31
 - 2. 27
 - 3. 29
 - 4. 33

Question ID : 630680344661
Option 1 ID : 6306801340954
Option 2 ID : 6306801340953
Option 3 ID : 6306801340955
Option 4 ID : 6306801340956
Status : Answered
Chosen Option : 3

Q.6 Each vowel in the word 'SIMILAR' is changed to the following letter in the English alphabetical order and each consonant is changed to the preceding letter in the English alphabetical order. How many letters are there in the English alphabetical order between the letter which is the second from the left end and the third from the left end in the group of letters thus formed?

- Ans 1. Two
 2. One
 3. Four
 4. Three

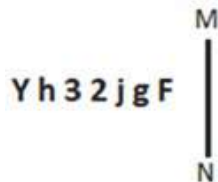
Question ID : 630680313411
 Option 1 ID : 6306801219512
 Option 2 ID : 6306801219511
 Option 3 ID : 6306801219509
 Option 4 ID : 6306801219510
 Status : Answered
 Chosen Option : 2

Q.7 Three of the following number-pairs are alike in some manner and hence form a group. Which number-pair does not belong to that group?
 (NOTE: Operations should be performed on the whole numbers, without breaking down the numbers into its constituent digits. E.g. 13 – Operations on 13 such as adding/subtracting/multiplying etc. to 13 can be performed. Breaking down 13 into 1 and 3 and then performing mathematical operations on 1 and 3 is not allowed.)

- Ans 1. 15 – 240
 2. 18 – 306
 3. 22 – 462
 4. 21 – 420

Question ID : 630680349005
 Option 1 ID : 6306801358311
 Option 2 ID : 6306801358309
 Option 3 ID : 6306801358312
 Option 4 ID : 6306801358310
 Status : Answered
 Chosen Option : 1

Q.8 Select the correct mirror image of the given figure when the mirror is placed at MN.



- Ans 1. Fgij32hY
 2. FgijSEhY
 3. FgiSEhY
 4. FgiZSEhY

Question ID : 630680325838
 Option 1 ID : 6306801267547
 Option 2 ID : 6306801267546
 Option 3 ID : 6306801267548
 Option 4 ID : 6306801267545
 Status : Answered
 Chosen Option : 3

Q.9 Select the option that represents the letters that when placed from left to right in the blanks below will complete the given letter series.
DF_IJOD_HIJO_FHIJODF_IJOD_

- Ans**
- 1. FHDHF
 - 2. HFHDF
 - 3. HFDHF
 - 4. HFFDH

Question ID : 630680416266
Option 1 ID : 6306801623830
Option 2 ID : 6306801623828
Option 3 ID : 6306801623829
Option 4 ID : 6306801623827
Status : Answered
Chosen Option : 3

Q.10 Which two numbers (not digits) should be interchanged to make the given equation correct?
 $116 - 92 \div 4 + 25 \times 2 - 20 = 150$

- Ans**
- 1. 2 and 4
 - 2. 25 and 20
 - 3. 116 and 92
 - 4. 20 and 92

Question ID : 630680319374
Option 1 ID : 6306801242401
Option 2 ID : 6306801242402
Option 3 ID : 6306801242404
Option 4 ID : 6306801242403
Status : Answered
Chosen Option : 1

Q.11 Identify the figure given in the options which when put in place of ? will logically complete the series.



Ans

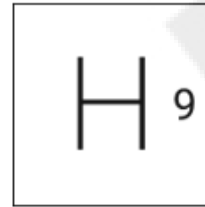
✗ 1.



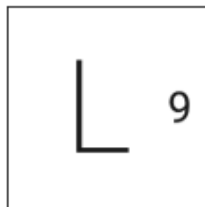
✗ 2.



✓ 3.



✗ 4.



Question ID : 630680524400

Option 1 ID : 6306802049700

Option 2 ID : 6306802049702

Option 3 ID : 6306802049699

Option 4 ID : 6306802049701

Status : Not Answered

Chosen Option : --

Q.12 Select the set in which the numbers are related in the same way as are the numbers of the following sets.

(NOTE: Operations should be performed on the whole numbers, without breaking down the numbers into its constituent digits. E.g. 13 – Operations on 13 such as adding /deleting /multiplying etc. to 13 can be performed. Breaking down 13 into 1 and 3 and then performing mathematical operations on 1 and 3 is not allowed.)

(25, 300, 6)
(19, 342, 9)

- Ans
- 1. (24, 600, 5)
 - 2. (14, 364, 7)
 - 3. (17, 476, 7)
 - 4. (18, 288, 8)

Question ID : 630680336441
Option 1 ID : 6306801308487
Option 2 ID : 6306801308486
Option 3 ID : 6306801308488
Option 4 ID : 6306801308485
Status : Answered
Chosen Option : 4


Q.13 Select the option that is related to the fifth letter-cluster in the same way as the second letter-cluster is related to the first letter-cluster and the fourth letter-cluster is related to the third letter-cluster.

BACK : CCBI :: TEST : UGRR :: WORK : ?

- Ans
- 1. YQQJ
 - 2. XQQI
 - 3. XQSI
 - 4. YQPI

Question ID : 630680416282
Option 1 ID : 6306801623891
Option 2 ID : 6306801623892
Option 3 ID : 6306801623893
Option 4 ID : 6306801623894
Status : Answered
Chosen Option : 2

Q.14 Select the correct mirror image of the given figure when the mirror is placed at MN.



- Ans
- 1. eA7εbfi
 - 2. Ae7εbfj
 - 3. eA7εdFj
 - 4. eA7εbfj

Question ID : 630680325835
Option 1 ID : 6306801267534
Option 2 ID : 6306801267536
Option 3 ID : 6306801267535
Option 4 ID : 6306801267533
Status : Answered
Chosen Option : 1

Q.15 Select the number from among the given options that can replace the question mark (?) in the following series.
543, 518, 495, 474, 455, ?

Ans 1. 444

2. 438

3. 440

4. 442

Question ID : 630680411896

Option 1 ID : 6306801606422

Option 2 ID : 6306801606419

Option 3 ID : 6306801606420

Option 4 ID : 6306801606421

Status : Answered

Chosen Option : 2

Q.16 In a certain code language, 'COWS' is coded as '7935' and 'OILY' is coded as '2568'.
What is the code for 'O' in that language?

Ans 1. 8

2. 9

3. 5

4. 2

Question ID : 630680360216

Option 1 ID : 6306801402783

Option 2 ID : 6306801402781

Option 3 ID : 6306801402784

Option 4 ID : 6306801402782

Status : Answered

Chosen Option : 3

Q.17 Read the given statements and conclusions carefully. Assuming that the information given in the statements is true, even if it appears to be at variance with commonly known facts, decide which of the given conclusions logically follow(s) from the statements.

Statements:

Some bags are purses.

All purses are wallets.

All wallets are sacks.

Conclusions:

(I) All purses are sacks.

(II) Some wallets are bags.

Ans 1. Only conclusion (I) is follow

2. Neither conclusion (I) nor (II) is follow

3. Both conclusions (I) and (II) are follow

4. Only conclusion (II) is follow

Question ID : 630680397740

Option 1 ID : 6306801550974

Option 2 ID : 6306801550976

Option 3 ID : 6306801550977

Option 4 ID : 6306801550975

Status : Answered

Chosen Option : 3

Q.18 Which figure should replace the question mark (?) if the following series were to be continued?

P	V	☆	3	S	☆	7	3	?			
7	0	S	V	N	P	V	N		☆	I	S
☆	3	S	7	7	3	N	P				

Ans

✗ 1.

P	7
S	☆
3	N

✓ 2.

N	7
S	☆
P	3

✗ 3.

☆	P
N	7
I	S

✗ 4.

N	S
7	3
☆	I

Question ID : 630680214464

Option 1 ID : 630680831889

Option 2 ID : 630680831888

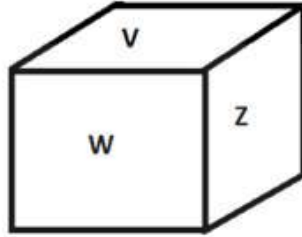
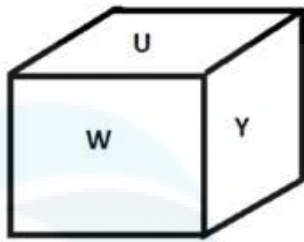
Option 3 ID : 630680831887

Option 4 ID : 630680831890

Status : Not Answered

Chosen Option : --

Q.19 Six letters U, V, W, X, Y and Z are written on different faces of a dice. Two positions of this dice are shown in the figure below. Find the letter on the face opposite to Z.



- Ans
- 1. W
 - 2. Y
 - 3. U
 - 4. X

Question ID : 630680189138
 Option 1 ID : 630680733362
 Option 2 ID : 630680733361
 Option 3 ID : 630680733363
 Option 4 ID : 630680733364
 Status : Answered
 Chosen Option : 2

Q.20 Which two numbers (not digits) should be interchanged to make the given equation correct?

$$72 - 6 + (18 \div 4) + 17 - (22 \times 2) = 44$$

- Ans
- 1. 22 and 18
 - 2. 6 and 4
 - 3. 6 and 22
 - 4. 2 and 4

Question ID : 630680411681
 Option 1 ID : 6306801605561
 Option 2 ID : 6306801605559
 Option 3 ID : 6306801605562
 Option 4 ID : 6306801605560
 Status : Answered
 Chosen Option : 2

Q.21 In a certain code language,

A + B means 'A is the brother of B'.

A - B means 'A is the father of B'.

A × B means 'A is the mother of B'.

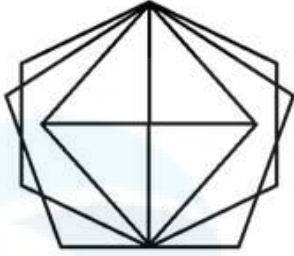
A ÷ B means 'A is the wife of B'.

Based on the above, how is P related to T if 'P × Q + R ÷ S - T'?

- Ans
- 1. Mother's mother
 - 2. Mother
 - 3. Sister
 - 4. Wife

Question ID : 630680313754
 Option 1 ID : 6306801220857
 Option 2 ID : 6306801220858
 Option 3 ID : 6306801220859
 Option 4 ID : 6306801220860
 Status : Answered
 Chosen Option : 1

Q.22 How many triangles are there in the given figure?



- Ans
- 1. 17
 - 2. 16
 - 3. 14
 - 4. 15

Question ID : 630680189145
Option 1 ID : 630680733391
Option 2 ID : 630680733389
Option 3 ID : 630680733392
Option 4 ID : 630680733390
Status : Not Answered
Chosen Option : --

Q.23 Three of the following four are alike in a certain way and thus form a group. Which is the one that does NOT belong to that group? The odd one out is not based on the number of consonants/vowels or their position in the letter cluster

- Ans
- 1. DHK
 - 2. BFJ
 - 3. EIM
 - 4. IMQ

Question ID : 63068075414
Option 1 ID : 630680291810
Option 2 ID : 630680291807
Option 3 ID : 630680291808
Option 4 ID : 630680291809
Status : Answered
Chosen Option : 1

Q.24 Three statements are given, followed by three conclusions numbered I, II and III. Assuming the statements to be true, even if they seem to be at variance with commonly known facts, decide which of the conclusions logically follow(s) from the statements.

Statements:
No bench is chair.
All sofas are benches.
All tables are sofas.

Conclusions:
I. No table is a chair.
II. Some sofas are chairs.
III. All tables are benches.

- Ans**
- 1. Only conclusion II follows
 - 2. Only conclusions I and II follow
 - 3. Only conclusions I and III follow
 - 4. Only conclusion I follows

Question ID : 630680416382
Option 1 ID : 6306801624292
Option 2 ID : 6306801624293
Option 3 ID : 6306801624294
Option 4 ID : 6306801624291
Status : Answered
Chosen Option : 3

Q.25 Six letters A, T, M, P, S and R are written on different faces of a dice. Two positions of this dice are shown in the figure below. Find the letter on the face opposite to the one having R.



- Ans**
- 1. M
 - 2. T
 - 3. A
 - 4. S

Question ID : 630680382715
Option 1 ID : 6306801491775
Option 2 ID : 6306801491777
Option 3 ID : 6306801491776
Option 4 ID : 6306801491778
Status : Answered
Chosen Option : 1

Q.1 Which of the following has the highest salinity?

- Ans** 1. Great salt lake
 2. Dead sea
 3. Red sea
 4. Lake Van

Question ID : 63068098925
Option 1 ID : 630680384406
Option 2 ID : 630680384405
Option 3 ID : 630680384404
Option 4 ID : 630680384407
Status : Answered
Chosen Option : 1

Q.2 Which of the following social reformers of 19th century India was the author of 'Stree Purush Tulana'?

- Ans** 1. Pandita Ramabai
 2. Tarabai Shinde
 3. Usha Mehta
 4. Swarnakumari Devi

Question ID : 630680412368
Option 1 ID : 6306801608298
Option 2 ID : 6306801608297
Option 3 ID : 6306801608296
Option 4 ID : 6306801608295
Status : Answered
Chosen Option : 4

Q.3 Harela is a festival of greenery, peace, prosperity, and environmental conservation, primarily celebrated in which of the following states?

- Ans** 1. Madhya Pradesh
 2. Assam
 3. Uttarakhand
 4. Haryana

Question ID : 630680305970
Option 1 ID : 6306801190235
Option 2 ID : 6306801190233
Option 3 ID : 6306801190234
Option 4 ID : 6306801190236
Status : Answered
Chosen Option : 1

Q.4 Which state initiated the implementation of the Mid-day Meal scheme in elementary schools?

- Ans** 1. Uttar Pradesh
 2. Tamil Nadu
 3. Madhya Pradesh
 4. Karnataka

Question ID : 6306801048060
Option 1 ID : 6306804114287
Option 2 ID : 6306804114289
Option 3 ID : 6306804114288
Option 4 ID : 6306804114286
Status : Not Answered
Chosen Option : --

Q.5 In which of the following games is one player known as the Wicketkeeper?

- Ans** 1. Cricket
 2. Basketball
 3. Hockey
 4. Football

Question ID : 630680510768
Option 1 ID : 6306801996204
Option 2 ID : 6306801996205
Option 3 ID : 6306801996203
Option 4 ID : 6306801996202
Status : Answered
Chosen Option : 1

Q.6 'Au' is the symbol for which of the following elements?

- Ans** 1. Gold
 2. Aluminium
 3. Argon
 4. Silver

Question ID : 63068091171
Option 1 ID : 630680353440
Option 2 ID : 630680353438
Option 3 ID : 630680353439
Option 4 ID : 630680353441
Status : Answered
Chosen Option : 1

Q.7 Who among the following freedom fighters of India is the author of the book, 'The Indian Struggle'?

- Ans** 1. Vallabhbhai Patel
 2. Motilal Nehru
 3. Mahatma Gandhi
 4. Subhas Chandra Bose

Question ID : 630680511501
Option 1 ID : 6306801999128
Option 2 ID : 6306801999129
Option 3 ID : 6306801999126
Option 4 ID : 6306801999127
Status : Answered
Chosen Option : 3

Q.8 Which Article of the Constitution of India grants power to the President to appoint Judges of the Supreme Court?

- Ans** 1. Article 124(2)
 2. Article 123(1)
 3. Article 128(4)
 4. Article 127(3)

Question ID : 630680303640
Option 1 ID : 6306801181130
Option 2 ID : 6306801181129
Option 3 ID : 6306801181132
Option 4 ID : 6306801181131
Status : Answered
Chosen Option : 1

Q.9 Mohiniyattam is associated with which of the following traditional dance styles?

- Ans** 1. Lasya style
 2. Samapadam
 3. Tribhanga
 4. Chowk

Question ID : 630680402016
Option 1 ID : 6306801567778
Option 2 ID : 6306801567781
Option 3 ID : 6306801567780
Option 4 ID : 6306801567779
Status : Answered
Chosen Option : 3

Q.10 As of March 2023, how many High Courts are there in India?

- Ans** 1. 20
 2. 35
 3. 25
 4. 30

Question ID : 630680413057
Option 1 ID : 6306801611052
Option 2 ID : 6306801611051
Option 3 ID : 6306801611054
Option 4 ID : 6306801611053
Status : Not Answered
Chosen Option : --

Q.11 In which year was the International Olympic Committee formed?

- Ans** 1. 1898
 2. 1892
 3. 1896
 4. 1894

Question ID : 630680309502
Option 1 ID : 6306801204164
Option 2 ID : 6306801204161
Option 3 ID : 6306801204163
Option 4 ID : 6306801204162
Status : Answered
Chosen Option : 3

Q.12 Ustad Vilayat Ali Khan is a maestro in _____.

- Ans** 1. Tabla
 2. Flute
 3. Sitar
 4. Mridangam

Question ID : 630680216238
Option 1 ID : 630680838927
Option 2 ID : 630680838928
Option 3 ID : 630680838930
Option 4 ID : 630680838929
Status : Not Answered
Chosen Option : --

Q.13 Which physical feature of India prevents the cold winds from central Asia from entering the Indian subcontinents?

- Ans** 1. Himalayas
 2. Indian plains
 3. Coastal area
 4. Indian desert

Question ID : 630680328139
Option 1 ID : 6306801276525
Option 2 ID : 6306801276528
Option 3 ID : 6306801276527
Option 4 ID : 6306801276526
Status : Answered
Chosen Option : 1

Q.14 Which of the following is the transboundary river between India and Pakistan?

- Ans** 1. Beas
 2. Indus
 3. Ravi
 4. Jhelum

Question ID : 630680134800
Option 1 ID : 630680522020
Option 2 ID : 630680522019
Option 3 ID : 630680522021
Option 4 ID : 630680522018
Status : Answered
Chosen Option : 4

Q.15 To which group do the alkaline earth metals such as radium, barium and strontium belong?

- Ans** 1. Group 3A
 2. Group 1A
 3. Group 2A
 4. Group 5A

Question ID : 63068076944
Option 1 ID : 630680297875
Option 2 ID : 630680297874
Option 3 ID : 630680297873
Option 4 ID : 630680297876
Status : Answered
Chosen Option : 3

Q.16 According to the Agricultural and Processed food products Export Development Authority (APEDA) 2020-2021, which state of India has the first rank in grapes production?

- Ans**
- 1. Bihar
 - 2. Uttar Pradesh
 - 3. Karnataka
 - 4. Maharashtra

Question ID : 630680327611
Option 1 ID : 6306801274443
Option 2 ID : 6306801274442
Option 3 ID : 6306801274444
Option 4 ID : 6306801274441
Status : Not Answered
Chosen Option : --

Q.17 Which of the following Articles of the Indian Constitution mentions about the organisation of 'Village Panchayats'?

- Ans**
- 1. Article 38
 - 2. Article 31
 - 3. Article 40
 - 4. Article 36

Question ID : 630680408255
Option 1 ID : 6306801591915
Option 2 ID : 6306801591917
Option 3 ID : 6306801591918
Option 4 ID : 6306801591916
Status : Answered
Chosen Option : 1

Q.18 Which of the following Articles of the Indian Constitution contains Fundamental Duties?

- Ans**
- 1. 45A
 - 2. 32A
 - 3. 51A
 - 4. 62B

Question ID : 630680413117
Option 1 ID : 6306801611292
Option 2 ID : 6306801611294
Option 3 ID : 6306801611293
Option 4 ID : 6306801611291
Status : Answered
Chosen Option : 3

Q.19 How many medals did India win in International Shooting Sport Federation (ISSF) World Cup 2022, which was held in Cairo, Egypt?

Ans 1.9

2.7

3.6

4.8

Question ID : 630680310838

Option 1 ID : 6306801209484

Option 2 ID : 6306801209482

Option 3 ID : 6306801209481

Option 4 ID : 6306801209483

Status : Not Answered

Chosen Option : --

Q.20 Which species is known as black lipped pearl oyster found in the Indo-Pacific, within tropical coral reefs?

Ans 1. *Aplysia dactylomela*

2. *Chaetopleura apiculata*

3. *Dentalium neohexagonum*

4. *Pinctada margaritifera*

Question ID : 630680407473

Option 1 ID : 6306801588830

Option 2 ID : 6306801588833

Option 3 ID : 6306801588831

Option 4 ID : 6306801588832

Status : Not Answered

Chosen Option : --

Q.21 In the 7th Century AD, a new religion called Islam was born in _____.

Ans 1. South Africa

2. Indonesia

3. Malaysia

4. Arabia

Question ID : 630680412431

Option 1 ID : 6306801608547

Option 2 ID : 6306801608549

Option 3 ID : 6306801608550

Option 4 ID : 6306801608548

Status : Answered

Chosen Option : 4

Q.22 Sitar maestro, Pandit Ravi Shankar was awarded which of the following awards by the Government of India in 1999?

Ans 1. Padma Shri

2. Bharat Ratna

3. Padma Vibhushan

4. Padma Bhushan

Question ID : 630680415799

Option 1 ID : 6306801621966

Option 2 ID : 6306801621963

Option 3 ID : 6306801621964

Option 4 ID : 6306801621965

Status : Answered

Chosen Option : 2

Q.23 Gautamiputra Satakarni titled Rajaraja and Maharaja is related to which of the following dynasties?

Ans ✓ 1. Satavahana

✗ 2. Shaka

✗ 3. Shunga

✗ 4. Pandya

Question ID : 630680412472

Option 1 ID : 6306801608714

Option 2 ID : 6306801608711

Option 3 ID : 6306801608713

Option 4 ID : 6306801608712

Status : Answered

Chosen Option : 2

Q.24 Which of the following options is associated with the class of cold-blooded animals?

Ans ✗ 1. Pavo

✓ 2. Chameleon

✗ 3. Macropus

✗ 4. Psittacula

Question ID : 630680311581

Option 1 ID : 6306801212419

Option 2 ID : 6306801212420

Option 3 ID : 6306801212417

Option 4 ID : 6306801212418

Status : Not Answered

Chosen Option : --

Q.25 The CSO adopted the concept of Gross Value Added in _____.

Ans ✗ 1. January 2012

✗ 2. January 2017

✗ 3. January 2013

✓ 4. January 2015

Question ID : 63068051014

Option 1 ID : 630680196322

Option 2 ID : 630680196325

Option 3 ID : 630680196323

Option 4 ID : 630680196324

Status : Not Answered

Chosen Option : --

Section : Quantitative Aptitude

Q.1 Akshay purchased pens and notebooks from a shop for a total sum of ₹180. From the following data, what is the value of 'X'?

Items	Price per unit (in ₹)	Quantity
Pens	10	X
Notebooks	20	6

Ans 1.6

2.4

3.5

4.7

Question ID : 630680428087

Option 1 ID : 6306801670394

Option 2 ID : 6306801670392

Option 3 ID : 6306801670393

Option 4 ID : 6306801670395

Status : Answered

Chosen Option : 1

Q.2 The concentrations of three acids, A, B, and C, are specified as 20%, 30%, and 40%, respectively. They are blended in a ratio of 3 : 5 : a, yielding a solution with a concentration of 30%. What is the value of 'a'?

Ans 1.4

2.1

3.3

4.2

Question ID : 6306801047988

Option 1 ID : 6306804113997

Option 2 ID : 6306804113994

Option 3 ID : 6306804113996

Option 4 ID : 6306804113995

Status : Answered

Chosen Option : 3

Q.3 Find the values of x, y and z, so as to satisfy the equations given below:
 $x + y + z = 12$; $x + y - z = 6$; $x - y + z = 4$

Ans 1. $x = 5, y = 4, z = -3$

2. $x = 5, y = -4, z = 3$

3. $x = 5, y = -4, z = -3$

4. $x = 5, y = 4, z = 3$

Question ID : 630680295368

Option 1 ID : 6306801149199

Option 2 ID : 6306801149196

Option 3 ID : 6306801149198

Option 4 ID : 6306801149197

Status : Answered

Chosen Option : 4

Q.4 A policeman noticed a thief at a distance of 500 metres. The policeman started running and the thief also started running at the same time. The thief is running at a speed of 15 km/h. It took 15 minutes for the policeman to catch the thief. Find the speed of the policeman (in km/h).

Ans 1. 10

2. 17

3. 11

4. 12

Question ID : 630680428498

Option 1 ID : 6306801672037

Option 2 ID : 6306801672039

Option 3 ID : 6306801672036

Option 4 ID : 6306801672038

Status : Answered

Chosen Option : 2

Q.5 $\triangle EFG$ and $\triangle HIJ$ are similar. Also, $\angle E = \angle H$ and $\angle F = \angle I$. If $3EF = HI$ and $FG = 9$ cm, then IJ is equal to ____.

Ans 1. 27 cm

2. 9 cm

3. 18 cm

4. 3 cm

Question ID : 630680526523

Option 1 ID : 6306802058161

Option 2 ID : 6306802058159

Option 3 ID : 6306802058160

Option 4 ID : 6306802058158

Status : Answered

Chosen Option : 1

Q.6 Simplify $\frac{0.58 \times 0.58 \times 0.58 - 0.001}{0.58 \times 0.58 + 0.058 + 0.01}$.

Ans 1. 0.37

2. 0.28

3. 0.48

4. 0.42

Question ID : 630680413498

Option 1 ID : 6306801612817

Option 2 ID : 6306801612816

Option 3 ID : 6306801612819

Option 4 ID : 6306801612818

Status : Answered

Chosen Option : 3

Q.7 Pipe L can fill a pool in 30 hours and pipe M in 45 hours. If both the pipes are opened in an empty pool, how much time will they take to fill it?

- Ans 1. 17 hours
 2. 18 hours
 3. 24 hours
 4. 20 hours

Question ID : 630680403295
Option 1 ID : 6306801572680
Option 2 ID : 6306801572681
Option 3 ID : 6306801572679
Option 4 ID : 6306801572678
Status : Answered
Chosen Option : 2

Q.8 If $A:B = 6 : 8$ and $B:C = 5 : 12$, then $A:B:C$ is:

- Ans 1. 10:23:14
 2. 11:32:44
 3. 14:31:28
 4. 15:20:48

Question ID : 630680915059
Option 1 ID : 6306803585281
Option 2 ID : 6306803585282
Option 3 ID : 6306803585283
Option 4 ID : 6306803585280
Status : Answered
Chosen Option : 4

Q.9 The given table shows the number of books on different subjects.

Subjects	Number of books
B1	120
B2	150
B3	150
B4	120
B5	120

What is the ratio of the number of books for subject B1 to the average number of books per subject?

- Ans 1. 3 : 5
 2. 2 : 5
 3. 10 : 11
 4. 4 : 5

Question ID : 630680428136
Option 1 ID : 6306801670591
Option 2 ID : 6306801670589
Option 3 ID : 6306801670588
Option 4 ID : 6306801670590
Status : Answered
Chosen Option : 3

Q.10

If $2 \tan \theta = 3$, then $\frac{3 \sin \theta - 2 \cos \theta}{3 \sin \theta + 2 \cos \theta}$ is equal to:

Ans

1. $\frac{6}{13}$

2. $\frac{5}{13}$

3. $\frac{6}{7}$

4. $\frac{5}{7}$

Question ID : 630680518878

Option 1 ID : 6306802027986

Option 2 ID : 6306802027987

Option 3 ID : 6306802027984

Option 4 ID : 6306802027985

Status : Answered

Chosen Option : 2

Q.11 If $\cot \theta = 4/3$, then evaluate $(\sec \theta(1 + \cot^2 \theta)(\operatorname{cosec}^2 \theta - \cot^2 \theta))/\operatorname{cosec}^3 \theta$.

Ans

1. $4/5$

2. $3/5$

3. $3/4$

4. $4/3$

Question ID : 630680403306

Option 1 ID : 6306801572722

Option 2 ID : 6306801572723

Option 3 ID : 6306801572724

Option 4 ID : 6306801572725

Status : Answered

Chosen Option : 3

Q.12 A right triangle with sides 3 cm, 4 cm and 5 cm is rotated about the sides of 3 cm to form a cone. The volume of the cone so formed is:

Ans

1. $25\pi \text{ cm}^3$

2. $28\pi \text{ cm}^3$

3. $20\pi \text{ cm}^3$

4. $16\pi \text{ cm}^3$

Question ID : 630680421519

Option 1 ID : 6306801644541

Option 2 ID : 6306801644542

Option 3 ID : 6306801644540

Option 4 ID : 6306801644539

Status : Answered

Chosen Option : 3

Q.13 If $\sqrt{x} + \frac{1}{\sqrt{x}} = 7$, then the value of $x + \frac{1}{x}$ is equal to:

Ans 1. 47

2. 51

3. 45

4. 49

Question ID : 630680413553
Option 1 ID : 6306801613038
Option 2 ID : 6306801613036
Option 3 ID : 6306801613039
Option 4 ID : 6306801613037
Status : Answered
Chosen Option : 1

Q.14 Two successive discounts of 40% and 30% are equal to a single discount of:

Ans 1. 60%

2. 70%

3. 35%

4. 58%

Question ID : 630680217285
Option 1 ID : 630680843078
Option 2 ID : 630680843075
Option 3 ID : 630680843076
Option 4 ID : 630680843077
Status : Answered
Chosen Option : 4

Q.15 Ravi's salary was increased by 50%. After some time, his new salary was also increased by 50%. Find his gain percentage of salary.

Ans 1. 200%

2. 150%

3. 125%

4. 100%

Question ID : 630680388630
Option 1 ID : 6306801514985
Option 2 ID : 6306801514982
Option 3 ID : 6306801514984
Option 4 ID : 6306801514983
Status : Answered
Chosen Option : 3

Q.16 If 45° and 65° are the angles of a triangle, then find the exterior angle of the third angle (remaining angle).

- Ans
- 1. 120°
 - 2. 100°
 - 3. 110°
 - 4. 70°

Question ID : 630680421381
Option 1 ID : 6306801643988
Option 2 ID : 6306801643990
Option 3 ID : 6306801643989
Option 4 ID : 6306801643987
Status : Answered
Chosen Option : 3

Q.17 A merchant has 1000 kg of sugar, part of which he sells at a 10% profit and the rest at a 40% profit. He gains 20% on the whole. The quantity sold at 40% profit is:

- Ans
- 1. $383\frac{1}{3}$ kg
 - 2. $443\frac{1}{3}$ kg
 - 3. $543\frac{1}{3}$ kg
 - 4. $333\frac{1}{3}$ kg

Question ID : 630680429000
Option 1 ID : 6306801674044
Option 2 ID : 6306801674047
Option 3 ID : 6306801674045
Option 4 ID : 6306801674046
Status : Answered
Chosen Option : 4

Q.18 If $(77^{77}+77)$ is divided by 78, then the remainder will be:

- Ans
- 1. 78
 - 2. 77
 - 3. 76
 - 4. 1

Question ID : 630680138107
Option 1 ID : 630680534682
Option 2 ID : 630680534683
Option 3 ID : 630680534684
Option 4 ID : 630680534685
Status : Answered
Chosen Option : 3

Q.19 What annual instalment will discharge a debt of ₹26,160 due in 4 years at 6% simple interest p.a.?

- Ans
- 1. ₹5,800
 - 2. ₹5,500
 - 3. ₹4,500
 - 4. ₹6,000

Question ID : 63068071031
Option 1 ID : 630680274736
Option 2 ID : 630680274735
Option 3 ID : 630680274734
Option 4 ID : 630680274737
Status : Not Answered
Chosen Option : --

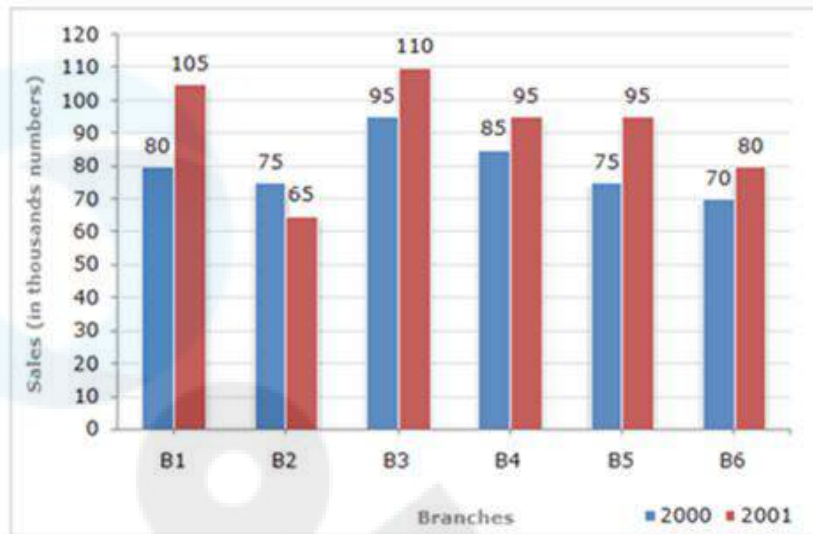
Q.20 If $p \cos A = 2q \sin A$ and $2p \operatorname{cosec} A - q \sec A = 3$, then the value of $p^2 + 4q^2$ is:

- Ans
- 1. 4
 - 2. 2
 - 3. 3
 - 4. 1

Question ID : 630680379674
Option 1 ID : 6306801479742
Option 2 ID : 6306801479740
Option 3 ID : 6306801479741
Option 4 ID : 6306801479739
Status : Answered
Chosen Option : 1

Q.21 Study the given bar-graph and answer the question that follows.

The bar-graph shows the sales of books (in thousands) from six branches (B1, B2, B3, B4, B5 and B6) of a publishing company during two consecutive years 2000 and 2001.



The total sales of branch B6 for both the years is what percentage of the total sales of branch B3 for both the years (correct up to two decimal places)?

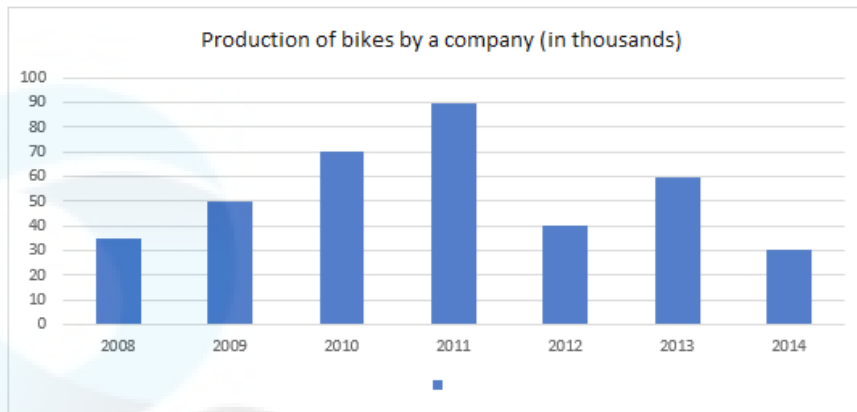
- Ans
- 1. 69.25%
 - 2. 73.17%
 - 3. 70.69%
 - 4. 82.26%

Question ID : 630680428212
Option 1 ID : 6306801670892
Option 2 ID : 6306801670894
Option 3 ID : 6306801670893
Option 4 ID : 6306801670895

Status : Answered

Chosen Option : 2

Q.22 The given bar graph shows the production of bikes by a company (in thousands) over the years.



In how many of the given years was the production of bikes more than the average production of bikes over the years?.

- Ans
- 1. 2 years
 - 2. 1 year
 - 3. 4 years
 - 4. 3 years

Question ID : 630680428231
Option 1 ID : 6306801670969
Option 2 ID : 6306801670968
Option 3 ID : 6306801670971
Option 4 ID : 6306801670970
Status : Not Answered
Chosen Option : --

Q.23 In a circle of radius $5\sqrt{13}$ cm, a chord is at a distance of 10 cm from the centre of the circle. Find the length (in cm) of the chord.

- Ans
- 1. 36
 - 2. 15
 - 3. 28
 - 4. 30

Question ID : 630680404007
Option 1 ID : 6306801575517
Option 2 ID : 6306801575514
Option 3 ID : 6306801575516
Option 4 ID : 6306801575515
Status : Answered
Chosen Option : 4

Q.24 Places A and B are 20 km apart on the highway. A car starts from A and another from B at the same time. If the cars travel in the same direction at different speeds, they meet in one hour. If they travelled towards each other, they met in 12 minutes. What are the speeds (in km/h) of two cars?

Ans 1. 51, 49

2. 60, 40

3. 55, 45

4. 52, 48

Question ID : 630680379690

Option 1 ID : 6306801479806

Option 2 ID : 6306801479803

Option 3 ID : 6306801479804

Option 4 ID : 6306801479805

Status : Not Answered

Chosen Option : --

Q.25 Simplify
 $21 - [6 + 7 - \{3.22 - (1.1 \times 0.2)\}]$.

Ans 1. 11

2. 13

3. 12

4. 10

Question ID : 630680426287

Option 1 ID : 6306801663248

Option 2 ID : 6306801663250

Option 3 ID : 6306801663249

Option 4 ID : 6306801663247

Status : Answered

Chosen Option : 1

Section : English Comprehension

Q.1 Select the most appropriate ANTONYM of the underlined word.
Their sporting achievements at the highest level are being utterly ignored.

Ans 1. Minimally

2. Correctly

3. Totally

4. Extremely

Question ID : 630680402903

Option 1 ID : 6306801571206

Option 2 ID : 6306801571208

Option 3 ID : 6306801571207

Option 4 ID : 6306801571205

Status : Answered

Chosen Option : 1

Q.2 Select the most appropriate meaning of the phrase in bold.
Your so-called friend has cooked your goose.

- Ans 1. To interfere with, disrupt or ruin something for someone
2. When something develops completely and reaches maturity; when a child becomes an adult
3. To complete a lot of work or a wide range of things
4. To spend a lot of time and energy but achieve nothing

Question ID : 630680319147
Option 1 ID : 6306801241494
Option 2 ID : 6306801241495
Option 3 ID : 6306801241496
Option 4 ID : 6306801241493
Status : Answered
Chosen Option : 4

Q.3 The following sentence has been split into four segments. Identify the segment that contains a grammatical error.
Our family is planning / a trip to Europe next summer / where we should visit several famous / landmarks and enjoy local cuisine.

- Ans 1. Our family is planning
2. a trip to Europe next summer
3. landmarks and enjoy local cuisine
4. where we should visit several famous

Question ID : 630680512940
Option 1 ID : 6306802004706
Option 2 ID : 6306802004707
Option 3 ID : 6306802004709
Option 4 ID : 6306802004708
Status : Answered
Chosen Option : 4

Q.4 Select the correctly spelt word.

- Ans 1. Privilege
2. Privilej
3. Priviledge
4. Privelege

Question ID : 630680374413
Option 1 ID : 6306801458835
Option 2 ID : 6306801458838
Option 3 ID : 6306801458836
Option 4 ID : 6306801458837
Status : Answered
Chosen Option : 1

Q.5 Select the most appropriate ANTONYM of the given word.

Risible

- Ans** 1. Curious
 2. Giddy
 3. Serious
 4. Droll

Question ID : 630680517416
Option 1 ID : 6306802022062
Option 2 ID : 6306802022061
Option 3 ID : 6306802022060
Option 4 ID : 6306802022063
Status : Not Answered
Chosen Option : --

Q.6 In the given question, a statement divided into different segments is given. Rearrange all the segments to form a coherent statement.

O: its first constitution
P: and soon got himself elected
Q: the administration of the country
R: general Ayub Khan took over
S: after Pakistan framed

- Ans** 1. POSRQ
 2. ROPQS
 3. SORQP
 4. SPORQ

Question ID : 630680383219
Option 1 ID : 6306801493784
Option 2 ID : 6306801493783
Option 3 ID : 6306801493786
Option 4 ID : 6306801493785
Status : Answered
Chosen Option : 3

Q.7 Select the option that expresses the following sentence in active voice.
The letter will be delivered by the postman tomorrow.

- Ans** 1. The postman delivered the letter tomorrow
 2. The postman will deliver the letter tomorrow.
 3. The postman will have delivered the letter tomorrow.
 4. The postman will be delivering the letter tomorrow.

Question ID : 630680415302
Option 1 ID : 6306801619958
Option 2 ID : 6306801619955
Option 3 ID : 6306801619956
Option 4 ID : 6306801619957
Status : Answered
Chosen Option : 2

Q.8 Select the most appropriate option that can substitute the underlined words in the given sentence.
He was an irresponsible person to the matter of taking up responsibilities.

- Ans** 1. in the matter of taking up
 2. at the matter of taking up
 3. by the matter of taking up
 4. along the matter of taking up

Question ID : 630680182089
Option 1 ID : 630680705581
Option 2 ID : 630680705580
Option 3 ID : 630680705579
Option 4 ID : 630680705578
Status : Answered
Chosen Option : 2

Q.9 Select the most appropriate synonym of the given word.
Pugnacious

- Ans** 1. Sly
 2. Dogmatic
 3. Belligerent
 4. Ally

Question ID : 630680129860
Option 1 ID : 630680503031
Option 2 ID : 630680503030
Option 3 ID : 630680503032
Option 4 ID : 630680503033
Status : Answered
Chosen Option : 3

Q.10 Select the most appropriate synonym of the given word.
Stationary

- Ans** 1. Portable
 2. Swindle
 3. Still
 4. Motile

Question ID : 630680295220
Option 1 ID : 6306801148604
Option 2 ID : 6306801148607
Option 3 ID : 6306801148606
Option 4 ID : 6306801148605
Status : Answered
Chosen Option : 1

Q.11 Select the option that can be used as a one word substitute for the given group of words.

An often-imaginary place or state of utter perfection and happiness

- Ans
- 1. Dystopia
 - 2. Euphoria
 - 3. Inferno
 - 4. Utopia

Question ID : 630680158564
Option 1 ID : 630680613766
Option 2 ID : 630680613765
Option 3 ID : 630680613764
Option 4 ID : 630680613767
Status : Answered
Chosen Option : 4

Q.12 Sentences of a paragraph are given below in jumbled order. Arrange the sentences in the correct order to form a meaningful and coherent paragraph.

- A. It is also called a nuclear family.
- B. It is good to be in a small family because there is better management of resources.
- C. A small family is one with parents and a maximum of two children.
- D. The advantages of a small family are numerous.

- Ans
- 1. CADB
 - 2. ACBD
 - 3. CBDA
 - 4. BACD

Question ID : 630680514947
Option 1 ID : 6306802012395
Option 2 ID : 6306802012396
Option 3 ID : 6306802012394
Option 4 ID : 6306802012393
Status : Answered
Chosen Option : 1

Q.13 Select the most appropriate ANTONYM of the underlined word in the following sentence to fill in the blank.

Most of the land near the town is barren, but the efforts of the farmers have turned it

- Ans
- 1. sterile
 - 2. unfruitful
 - 3. infertile
 - 4. fertile

Question ID : 630680316709
Option 1 ID : 6306801232013
Option 2 ID : 6306801232014
Option 3 ID : 6306801232016
Option 4 ID : 6306801232015
Status : Answered
Chosen Option : 4

Q.14 Select the correct spelling to fill in the blank.

Subir's long absence is likely to have _____ for employees in the office.

- Ans 1. reperrussions
 2. rapercussions
 3. repercussions
 4. repercusions

Question ID : 630680409975
Option 1 ID : 6306801598729
Option 2 ID : 6306801598730
Option 3 ID : 6306801598732
Option 4 ID : 6306801598731
Status : Answered
Chosen Option : 3

Q.15 Parts of a sentence are given below in jumbled order. Arrange the parts in the correct order to form a meaningful sentence.

O. delicious
R. she
Q. a
P. baked
S. chocolate cake

- Ans 1. SRPQO
 2. QOSRP
 3. RPQOS
 4. OPQRS

Question ID : 630680374395
Option 1 ID : 6306801458765
Option 2 ID : 6306801458766
Option 3 ID : 6306801458763
Option 4 ID : 6306801458764
Status : Answered
Chosen Option : 3

Q.16 Select the most appropriate ANTONYM of the underlined word in the following sentence to fill in the blank.

Most of the flowers bloom in the spring season but they start to _____ during summer.

- Ans 1. flush
 2. flourish
 3. blossom
 4. wither

Question ID : 630680316708
Option 1 ID : 6306801232012
Option 2 ID : 6306801232011
Option 3 ID : 6306801232009
Option 4 ID : 6306801232010
Status : Answered
Chosen Option : 2

Q.17 Select the option that correctly expresses the given sentence in passive voice.

The shareholders will elect him a director.

- Ans 1. The shareholders have elected him a director.
 2. He will be elected as director by the shareholders.
 3. The shareholders elected him a director.
 4. He will be elected a director.

Question ID : 630680310902
Option 1 ID : 6306801209734
Option 2 ID : 6306801209736
Option 3 ID : 6306801209735
Option 4 ID : 6306801209733
Status : Answered
Chosen Option : 2

Q.18 Parts of the following sentence have been given as options. Select the option that contains an error.

No other place in this country is so better as Gulmarg, Kashmir.

- Ans 1. No other place
 2. in this country is
 3. so better as
 4. Gulmarg, Kashmir

Question ID : 630680514371
Option 1 ID : 6306802010109
Option 2 ID : 6306802010110
Option 3 ID : 6306802010111
Option 4 ID : 6306802010112
Status : Answered
Chosen Option : 3

Q.19 Select the most appropriate option that can substitute the underlined words in the given sentence.

Rare species of frogs were very quicker identified by Stella.

- Ans 1. of frogs were very quickly
 2. to frogs were very quickly
 3. of frogs were very quicklier
 4. in frogs were very quicker

Question ID : 630680182091
Option 1 ID : 630680705586
Option 2 ID : 630680705587
Option 3 ID : 630680705588
Option 4 ID : 630680705589
Status : Answered
Chosen Option : 1

Q.20 What does the idiom 'Bite the bullet' mean?

- Ans**
- 1. Enjoy a delicious meal
 - 2. Give someone a piece of advice
 - 3. Avoid confrontation
 - 4. Face a difficult situation with courage

Question ID : 630680377261
Option 1 ID : 6306801470107
Option 2 ID : 6306801470109
Option 3 ID : 6306801470110
Option 4 ID : 6306801470108
Status : Answered
Chosen Option : 4

Comprehension:

In the following passage, some words have been deleted. Read the passage carefully and select the most appropriate option to fill in each blank.

Americans have been arguing about pandemic (1) _____ for two years, and the debate is particularly fraught among parents of small children, for good reasons. While (2) _____ such as masking and isolation mean temporary discomfort or inconvenience for most people, their (3) _____ for still-developing young children are more mysterious, and possibly more significant and lasting. Children with speech or language disorders offer perhaps the (4) _____ example of these murky trade-offs. Pandemic restrictions vary by state, county and school district, but I spoke with parents in California, New York, Massachusetts, Washington, New Jersey, Iowa and Maryland, who said their children's speech therapy has been (5) _____: first by the loss of in-person therapy and then by masking requirements, in places that have them.

SubQuestion No : 21

Q.21 Select the most appropriate option to fill in blank no. 1

- Ans**
- 1. advantages
 - 2. intemperance
 - 3. handicap
 - 4. restrictions

Question ID : 630680147456
Option 1 ID : 630680570603
Option 2 ID : 630680570604
Option 3 ID : 630680570605
Option 4 ID : 630680570602
Status : Answered
Chosen Option : 4

Comprehension:

In the following passage, some words have been deleted. Read the passage carefully and select the most appropriate option to fill in each blank.

Americans have been arguing about pandemic (1) _____ for two years, and the debate is particularly fraught among parents of small children, for good reasons. While (2) _____ such as masking and isolation mean temporary discomfort or inconvenience for most people, their (3) _____ for still-developing young children are more mysterious, and possibly more significant and lasting. Children with speech or language disorders offer perhaps the (4) _____ example of these murky trade-offs. Pandemic restrictions vary by state, county and school district, but I spoke with parents in California, New York, Massachusetts, Washington, New Jersey, Iowa and Maryland, who said their children's speech therapy has been (5) _____: first by the loss of in-person therapy and then by masking requirements, in places that have them.

SubQuestion No : 22

Q.22 Select the most appropriate option to fill in blank no. 2

- Ans** 1. measures
 2. brandings
 3. models
 4. sluggishness

Question ID : 630680147457
Option 1 ID : 630680570607
Option 2 ID : 630680570606
Option 3 ID : 630680570608
Option 4 ID : 630680570609
Status : Answered
Chosen Option : 1

Comprehension:

In the following passage, some words have been deleted. Read the passage carefully and select the most appropriate option to fill in each blank.

Americans have been arguing about pandemic (1) _____ for two years, and the debate is particularly fraught among parents of small children, for good reasons. While (2) _____ such as masking and isolation mean temporary discomfort or inconvenience for most people, their (3) _____ for still-developing young children are more mysterious, and possibly more significant and lasting. Children with speech or language disorders offer perhaps the (4) _____ example of these murky trade-offs. Pandemic restrictions vary by state, county and school district, but I spoke with parents in California, New York, Massachusetts, Washington, New Jersey, Iowa and Maryland, who said their children's speech therapy has been (5) _____: first by the loss of in-person therapy and then by masking requirements, in places that have them.

SubQuestion No : 23

Q.23 Select the most appropriate option to fill in blank no. 3

- Ans** 1. marginalisation
 2. disapproval
 3. consequences
 4. foundations

Question ID : 630680147458
Option 1 ID : 630680570611
Option 2 ID : 630680570612
Option 3 ID : 630680570613
Option 4 ID : 630680570610
Status : Answered
Chosen Option : 3

Comprehension:

In the following passage, some words have been deleted. Read the passage carefully and select the most appropriate option to fill in each blank.

Americans have been arguing about pandemic (1) _____ for two years, and the debate is particularly fraught among parents of small children, for good reasons. While (2) _____ such as masking and isolation mean temporary discomfort or inconvenience for most people, their (3) _____ for still-developing young children are more mysterious, and possibly more significant and lasting. Children with speech or language disorders offer perhaps the (4) _____ example of these murky trade-offs. Pandemic restrictions vary by state, county and school district, but I spoke with parents in California, New York, Massachusetts, Washington, New Jersey, Iowa and Maryland, who said their children's speech therapy has been (5) _____: first by the loss of in-person therapy and then by masking requirements, in places that have them.

SubQuestion No : 24

Q.24 Select the most appropriate option to fill in blank no. 4.

- Ans**
- 1. indistinct
 - 2. nebulous
 - 3. clearest
 - 4. vague

Question ID : 630680147459
Option 1 ID : 630680570615
Option 2 ID : 630680570617
Option 3 ID : 630680570616
Option 4 ID : 630680570614
Status : Answered
Chosen Option : 3

Comprehension:

In the following passage, some words have been deleted. Read the passage carefully and select the most appropriate option to fill in each blank.

Americans have been arguing about pandemic (1) _____ for two years, and the debate is particularly fraught among parents of small children, for good reasons. While (2) _____ such as masking and isolation mean temporary discomfort or inconvenience for most people, their (3) _____ for still-developing young children are more mysterious, and possibly more significant and lasting. Children with speech or language disorders offer perhaps the (4) _____ example of these murky trade-offs. Pandemic restrictions vary by state, county and school district, but I spoke with parents in California, New York, Massachusetts, Washington, New Jersey, Iowa and Maryland, who said their children's speech therapy has been (5) _____: first by the loss of in-person therapy and then by masking requirements, in places that have them.

SubQuestion No : 25

Q.25 Select the most appropriate option to fill in blank no. 5.

- Ans**
- 1. normalised
 - 2. disrupted
 - 3. measured
 - 4. regulated

Question ID : 630680147460
Option 1 ID : 630680570619
Option 2 ID : 630680570621
Option 3 ID : 630680570620
Option 4 ID : 630680570618
Status : Answered
Chosen Option : 2