

## Combined Graduate Level Examination 2024 Tier I

Roll Number	
Candidate Name	
Venue Name	
Exam Date	10/09/2024
Exam Time	4:00 PM - 5:00 PM
Subject	Combined Graduate Level Examination Tier I

Section : General Intelligence and Reasoning

**Q.1** Three of the following four options are alike in a certain way and thus form a group. Which is the one that does NOT belong to that group?

(NOTE: Operations should be performed on the whole numbers, without breaking down the numbers into its constituent digits. E.g. 13 – Operations on 13 such as adding/subtracting/multiplying etc. to 13 can be performed. Breaking down 13 into 1 and 3 and then performing mathematical operations on 1 and 3 is not allowed.)

- Ans
- 1.  $81 - 118 - 91$
  - 2.  $52 - 68 - 51$
  - 3.  $21 - 38 - 31$
  - 4.  $99 - 104 - 71$

Question ID : 630680196587

Option 1 ID : 630680762649

Option 2 ID : 630680762648

Option 3 ID : 630680762647

Option 4 ID : 630680762650

Status : Not Answered

Chosen Option : --

**Q.2** In a certain code language,

'A + B' means 'A is the mother of B';  
'A - B' means 'A is the brother of B';  
'A × B' means 'A is the wife of B' and  
'A ÷ B' means 'A is the father of B'.

Based on the above, how is 5 related to 3 if ' $5 - 2 \times 4 \div 3$ '?

- Ans
- 1. Father's brother
  - 2. Father's sister
  - 3. Mother's sister
  - 4. Mother's brother

Question ID : 630680300378

Option 1 ID : 6306801168412

Option 2 ID : 6306801168411

Option 3 ID : 6306801168414

Option 4 ID : 6306801168413

Status : Answered

Chosen Option : 1

**Q.3** In a certain code language, 'VERY' is written as '6314' and 'VARY' is written as '1438'.  
How will 'A' be written in that language?

Ans  1. 6

2. 8

3. 4

4. 1

Question ID : 630680339168  
Option 1 ID : 6306801319243  
Option 2 ID : 6306801319242  
Option 3 ID : 6306801319241  
Option 4 ID : 6306801319244  
Status : Answered  
Chosen Option : 2

**Q.4** Select the option that is related to the fifth term in the same way as the second term is related to the first term and the fourth term is related to the third term.  
SWEET : WSETE :: SALTY : ASLYT :: DRINK : ?

Ans  1. ESJOL

2. RDIKN

3. RDNIK

4. DRIKN

Question ID : 630680416203  
Option 1 ID : 6306801623576  
Option 2 ID : 6306801623578  
Option 3 ID : 6306801623575  
Option 4 ID : 6306801623577  
Status : Answered  
Chosen Option : 2

**Q.5** Select the set in which the numbers are related in the same way as are the numbers of the following sets.

(173, 246)

(148, 196)

(NOTE: Operations should be performed on the whole numbers, without breaking down the numbers into its constituent digits. E.g. 13 – Operations on 13 such as adding /deleting /multiplying etc. to 13 can be performed. Breaking down 13 into 1 and 3 and then performing mathematical operations on 1 and 3 is not allowed)

Ans  1. (127, 194)

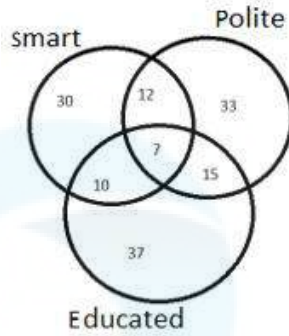
2. (142, 176)

3. (154, 208)

4. (169, 247)

Question ID : 630680329241  
Option 1 ID : 6306801280787  
Option 2 ID : 6306801280788  
Option 3 ID : 6306801280786  
Option 4 ID : 6306801280785  
Status : Answered  
Chosen Option : 3

Q.6 Study the given Venn diagram and answer the question that follows.



How many smart people are polite?

- Ans
- 1. 63
  - 2. 19
  - 3. 7
  - 4. 12

Question ID : 630680199099  
Option 1 ID : 630680772104  
Option 2 ID : 630680772106  
Option 3 ID : 630680772105  
Option 4 ID : 630680772103  
Status : Answered  
Chosen Option : 2

Q.7 Select the set in which the numbers are related in the same way as are the numbers of the following set.

(121, 93, 214)

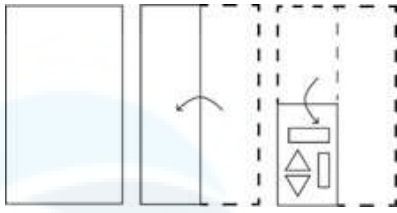
(115, 87, 202)

(NOTE: Operations should be performed on the whole numbers, without breaking down the numbers into its constituent digits. E.g. 13 – Operations on 13 such as adding/deleting/multiplying etc. to 13 can be performed. Breaking down 13 into 1 and 3 and then performing mathematical operations on 1 and 3 is not allowed.)

- Ans
- 1. (135, 117, 259)
  - 2. (97, 112, 209)
  - 3. (110, 94, 224)
  - 4. (84, 99, 189)

Question ID : 630680329201  
Option 1 ID : 6306801280625  
Option 2 ID : 6306801280628  
Option 3 ID : 6306801280627  
Option 4 ID : 6306801280626  
Status : Not Answered  
Chosen Option : --

**Q.8** The sequence of folding a paper and the manner in which the folded paper is cut is shown in the following figures. How would this paper look when unfolded?



**Ans**

- ✓ 1.
- ✗ 2.
- ✗ 3.
- ✗ 4.

Question ID : 630680344228  
 Option 1 ID : 6306801339226  
 Option 2 ID : 6306801339225  
 Option 3 ID : 6306801339227  
 Option 4 ID : 6306801339228  
 Status : Not Answered  
 Chosen Option : --

**Q.9** Select the option that represents the letters that when placed from left to right in the blanks below will complete the given letter series.  
 P Q \_ S \_ P P Q P \_ A P P Q \_ S A P \_ Q

- Ans**
- ✗ 1. PQSAP
  - ✓ 2. PASPP
  - ✗ 3. QPASP
  - ✗ 4. QSPAP

Question ID : 630680416270  
 Option 1 ID : 6306801623844  
 Option 2 ID : 6306801623843  
 Option 3 ID : 6306801623846  
 Option 4 ID : 6306801623845  
 Status : Answered  
 Chosen Option : 2

Q.10 In a certain code language, 'make some more' is coded as 'pb gq st' and 'need more time' is coded as 'ru ek gq'. What is the code for 'more' in that language?

- Ans
- 1. pb
  - 2. st
  - 3. gq
  - 4. ek

Question ID : 630680222447  
Option 1 ID : 630680863548  
Option 2 ID : 630680863547  
Option 3 ID : 630680863550  
Option 4 ID : 630680863549  
Status : Answered  
Chosen Option : 3

Q.11 Select the correct mirror image of the given figure when the mirror is placed at MN.



- Ans
- 1. dg741sT
  - 2. dg741sT
  - 3. gb741sT
  - 4. dg741eT

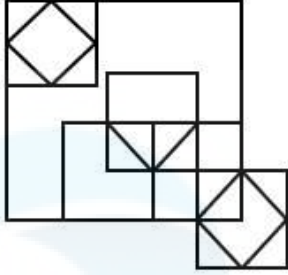
Question ID : 630680325839  
Option 1 ID : 6306801267550  
Option 2 ID : 6306801267549  
Option 3 ID : 6306801267552  
Option 4 ID : 6306801267551  
Status : Answered  
Chosen Option : 3

Q.12 Select the word pair that best represents a similar relationship to the one expressed in the pair of words given below. (The words must be considered as meaningful English words and must not be related to each other based on the number of letters/number of consonants/vowels in the word)  
Presence : Abundance

- Ans
- 1. Nourish : Neglect
  - 2. Abstract : Concrete
  - 3. Infinite : Cosmic
  - 4. Concise : Verbose

Question ID : 630680416648  
Option 1 ID : 6306801625355  
Option 2 ID : 6306801625356  
Option 3 ID : 6306801625357  
Option 4 ID : 6306801625358  
Status : Answered  
Chosen Option : 4

Q.13 How many squares are there in the given figure?



- Ans
- 1. 10
  - 2. 13
  - 3. 11
  - 4. 12

Question ID : 630680163560  
Option 1 ID : 630680633424  
Option 2 ID : 630680633426  
Option 3 ID : 630680633425  
Option 4 ID : 630680633427  
Status : Answered  
Chosen Option : 2

Q.14 Identify the figure given in the options which when put in place of the question mark (?) will logically complete the series?

Y	X	P	Y	E	P	4	E	
	P		E		4		X	?
E	4	4	X	X	Y	Y	P	

Ans

✓ 1.

X		4
	Y	
P		E

✗ 2.

X		E
	Y	
4		P

✗ 3.

X		4
	E	
Y		P

✗ 4.

X		4
	Y	
E		P

Question ID : 630680471487

Option 1 ID : 6306801841663

Option 2 ID : 6306801841665

Option 3 ID : 6306801841664

Option 4 ID : 6306801841662

Status : Answered

Chosen Option : 1

Q.15 Which of the following letter-clusters will replace the question mark (?) in the given series to make it logically complete?  
NUT, RYX, VCB, ZGF, ?

Ans ✓ 1. DKJ

✗ 2. EKJ

✗ 3. EKL

✗ 4. DKL

Question ID : 630680416935

Option 1 ID : 6306801626504

Option 2 ID : 6306801626503

Option 3 ID : 6306801626506

Option 4 ID : 6306801626505

Status : Not Answered

Chosen Option : --

Q.16 Six letters K, L, M, N, O and P are written on different faces of a dice. Three positions of this dice are shown in the figure. Find the letter on the face opposite to M.



- Ans
- 1. K
  - 2. P
  - 3. L
  - 4. N

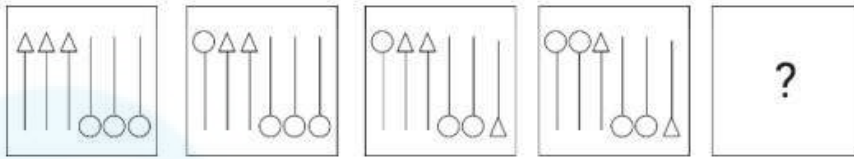
Question ID : 630680296577  
Option 1 ID : 6306801153959  
Option 2 ID : 6306801153962  
Option 3 ID : 6306801153961  
Option 4 ID : 6306801153960  
Status : Answered  
Chosen Option : 4

Q.17 62 is related to 79 following certain logic. Following the same logic, 98 is related to 119. To which of the following numbers is 14 related, following the same logic? (NOTE : Operations should be performed on the whole numbers, without breaking down the numbers into its constituent digits. E.g. 13 – Operations on 13 such as adding /deleting /multiplying etc., to 13 can be performed. Breaking down 13 into 1 and 3 and then performing mathematical operations on 1 and 3 is not allowed.)

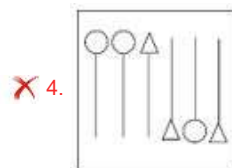
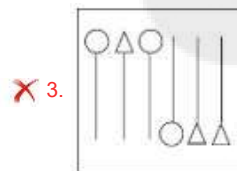
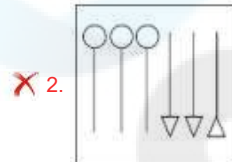
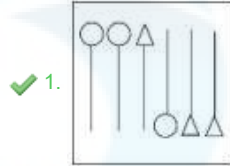
- Ans
- 1. 19
  - 2. 21
  - 3. 23
  - 4. 24

Question ID : 630680162511  
Option 1 ID : 630680629340  
Option 2 ID : 630680629341  
Option 3 ID : 630680629342  
Option 4 ID : 630680629343  
Status : Not Answered  
Chosen Option : --

**Q.18** Select the figure from among the given options that can replace the question mark (?) in the following series.



**Ans**



Question ID : 630680339307

Option 1 ID : 6306801319798

Option 2 ID : 6306801319797

Option 3 ID : 6306801319799

Option 4 ID : 6306801319800

Status : Answered

Chosen Option : 1

**Q.19** What will come in the place of '?' in the following equation, if '+' and '-' are interchanged and 'x' and '÷' are interchanged?

$$15 \times 9 + 7 \div 26 - 13 = ?$$

**Ans** ✓ 1. 76

✗ 2. 84

✗ 3. 68

✗ 4. 72

Question ID : 630680339257

Option 1 ID : 6306801319600

Option 2 ID : 6306801319597

Option 3 ID : 6306801319598

Option 4 ID : 6306801319599

Status : Answered

Chosen Option : 1

Q.20 Two different positions of the same dice with faces 3, 7, 8, 2, 9 and 4 are shown below. Select the number that will be on the face opposite to the one having 4.



- Ans
- 1. 9
  - 2. 3
  - 3. 8
  - 4. 2

Question ID : 630680349069  
Option 1 ID : 6306801358566  
Option 2 ID : 6306801358567  
Option 3 ID : 6306801358568  
Option 4 ID : 6306801358565  
Status : Answered  
Chosen Option : 3

Q.21 All of the letters in the word 'WISDOM' are arranged in alphabetical order. How many letters are there in the English alphabetical series between the letter which is third from the left end and the one which is second from the right end in the new letter-cluster thus formed?

- Ans
- 1. Three
  - 2. Six
  - 3. Five
  - 4. Two

Question ID : 630680222292  
Option 1 ID : 630680863000  
Option 2 ID : 630680863002  
Option 3 ID : 630680863001  
Option 4 ID : 630680862999  
Status : Answered  
Chosen Option : 3

Q.22 Three of the following four are alike in a certain way and thus form a group. Which is the one that does NOT belong to that group? ( Note :The odd one out is not based on the number of consonants/vowels or their position in the letter cluster)

- Ans
- 1. FKN
  - 2. DIM
  - 3. EJM
  - 4. CHK

Question ID : 63068075411  
Option 1 ID : 630680291798  
Option 2 ID : 630680291796  
Option 3 ID : 630680291797  
Option 4 ID : 630680291795  
Status : Answered  
Chosen Option : 2

Q.23 Which of the following numbers will replace the question marks (?) in the given series?

4, ?, ?, 49, 121, 169, 289

Ans  1. 9, 25

2. 3, 9

3. 9, 16

4. 16, 25

Question ID : 630680411865

Option 1 ID : 6306801606296

Option 2 ID : 6306801606298

Option 3 ID : 6306801606295

Option 4 ID : 6306801606297

Status : Answered

Chosen Option : 1

Q.24 Select the number that will come in the place of the question mark(?), if '+' and '-' are interchanged and 'x' and '÷' are interchanged

$11 \div 12 - 78 \times 6 + 57 = ?$

Ans  1. 74

2. 83

3. 88

4. 95

Question ID : 630680163581

Option 1 ID : 630680633510

Option 2 ID : 630680633508

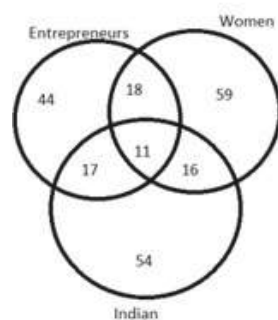
Option 3 ID : 630680633511

Option 4 ID : 630680633509

Status : Answered

Chosen Option : 3

Q.25 Study the given Venn diagram and answer the question that follows.



How many women entrepreneurs are NOT Indian?

Ans  1. 11

2. 17

3. 29

4. 18

Question ID : 630680199104

Option 1 ID : 630680772125

Option 2 ID : 630680772126

Option 3 ID : 630680772123

Option 4 ID : 630680772124

Status : Answered

Chosen Option : 4

**Q.1 MG Music Awards is presented annually by which of the following states?**

- Ans**
- 1. Manipur
  - 2. Mizoram
  - 3. Nagaland
  - 4. Chhattisgarh

Question ID : 630680412062  
Option 1 ID : 6306801607085  
Option 2 ID : 6306801607086  
Option 3 ID : 6306801607084  
Option 4 ID : 6306801607083  
Status : Not Answered  
Chosen Option : --

**Q.2 National Sports University is situated in \_\_\_\_\_.**

- Ans**
- 1. Mizoram
  - 2. Tripura
  - 3. Manipur
  - 4. Meghalaya

Question ID : 630680309513  
Option 1 ID : 6306801204205  
Option 2 ID : 6306801204208  
Option 3 ID : 6306801204206  
Option 4 ID : 6306801204207  
Status : Not Answered  
Chosen Option : --

**Q.3 Which of the following is the main cause of land degradation in Jharkhand and Chhattisgarh?**

- Ans**
- 1. Deforestation due to mining
  - 2. Overgrazing
  - 3. Intensive use of manure
  - 4. Over-irrigation

Question ID : 630680401291  
Option 1 ID : 6306801564971  
Option 2 ID : 6306801564970  
Option 3 ID : 6306801564972  
Option 4 ID : 6306801564969  
Status : Answered  
Chosen Option : 1

**Q.4 Which country has the Republic feature of the Indian Constitution been borrowed from?**

- Ans**
- 1. Irish Constitution
  - 2. British Constitution
  - 3. French Constitution
  - 4. Australian Constitution

Question ID : 630680329437  
Option 1 ID : 6306801281491  
Option 2 ID : 6306801281490  
Option 3 ID : 6306801281492  
Option 4 ID : 6306801281489  
Status : Answered  
Chosen Option : 4

**Q.5 Rudrasena II of which of the following dynasties married Prabhavatigupta, the daughter of Chandragupta II of the Gupta dynasty?**

- Ans**  1. Vakataka  
 2. Chalukya  
 3. Pallava  
 4. Pushyabhuti

Question ID : 630680412477  
Option 1 ID : 6306801608732  
Option 2 ID : 6306801608733  
Option 3 ID : 6306801608734  
Option 4 ID : 6306801608731  
Status : Not Answered  
Chosen Option : --

**Q.6 As of 2021, which is the world's largest drainage basin with an area of about 70,00,000 km<sup>2</sup>?**

- Ans**  1. Amazon basin  
 2. Congo basin  
 3. Amur basin  
 4. Nile basin

Question ID : 63068094194  
Option 1 ID : 630680365474  
Option 2 ID : 630680365473  
Option 3 ID : 630680365471  
Option 4 ID : 630680365472  
Status : Not Answered  
Chosen Option : --

**Q.7 'Sangken' is a festival celebrated in Arunachal Pradesh by people of which of the following religions?**

- Ans**  1. Jainism  
 2. Islam  
 3. Hinduism  
 4. Buddhism

Question ID : 630680163297  
Option 1 ID : 630680632392  
Option 2 ID : 630680632395  
Option 3 ID : 630680632394  
Option 4 ID : 630680632393  
Status : Not Answered  
Chosen Option : --

**Q.8 The cause of a redox reaction is the:**

- Ans**  1. transfer of neutrons between two reactants  
 2. transfer of electrons between two products  
 3. transfer of electrons between two reactants  
 4. exchange of halogens between two reactants

Question ID : 630680134694  
Option 1 ID : 630680521596  
Option 2 ID : 630680521595  
Option 3 ID : 630680521594  
Option 4 ID : 630680521597  
Status : Answered  
Chosen Option : 3

**Q.9** Which of the following States has declared a social security scheme for registered newspaper hawkers in the State in 2021 considering the losses they faced during the pandemic and that they are a part of the unorganised sector?

- Ans**
- 1. Maharashtra
  - 2. Gujarat
  - 3. Tamil Nadu
  - 4. Odisha

Question ID : 630680114033  
Option 1 ID : 630680441535  
Option 2 ID : 630680441534  
Option 3 ID : 630680441537  
Option 4 ID : 630680441536  
Status : Answered  
Chosen Option : 1

**Q.10** Which of the following characteristics is NOT of Aves?

- Ans**
- 1. They give birth to live young ones with some exceptions those lay eggs.
  - 2. They have four-chambered heart.
  - 3. They breathe through the lungs
  - 4. These are warm-blooded animals.

Question ID : 630680517146  
Option 1 ID : 6306802020983  
Option 2 ID : 6306802020981  
Option 3 ID : 6306802020982  
Option 4 ID : 6306802020980  
Status : Not Answered  
Chosen Option : --

**Q.11** Which of the following books is INCORRECTLY paired with its respective author?

- Ans**
- 1. Hind Swaraj – Mahatma Gandhi
  - 2. Why I am an Atheist – Bhagat Singh
  - 3. Gitanjali – Rabindranath Tagore
  - 4. The Discovery of India – Subhash Chandra Bose

Question ID : 630680412377  
Option 1 ID : 6306801608334  
Option 2 ID : 6306801608331  
Option 3 ID : 6306801608332  
Option 4 ID : 6306801608333  
Status : Answered  
Chosen Option : 4

**Q.12** What is the aim of the PM Ujjwala 2.0 Yojna launched in August 2021?

- Ans**
- 1. Free gas stove for BPL Households
  - 2. 20 million LPG connections will be provided to the beneficiaries
  - 3. Free LPG connections for commercial use
  - 4. 10 million LPG connections will be provided to the beneficiaries

Question ID : 630680112082  
Option 1 ID : 630680434056  
Option 2 ID : 630680434057  
Option 3 ID : 630680434055  
Option 4 ID : 630680434054  
Status : Answered  
Chosen Option : 1

**Q.13** Which cell organelle is defined as the small round organelle that undergoes oxidation reaction to produce hydrogen peroxide?

- Ans
- 1. Vacuole
  - 2. Nucleus
  - 3. Centrosome
  - 4. Peroxisomes

Question ID : 630680407463  
Option 1 ID : 6306801588790  
Option 2 ID : 6306801588792  
Option 3 ID : 6306801588791  
Option 4 ID : 6306801588793  
Status : Not Answered  
Chosen Option : --

**Q.14** As for the year 2020-21, which of the following states had the lowest unemployment rate among persons aged 15 years and above?

- Ans
- 1. Gujarat
  - 2. Sikkim
  - 3. Madhya Pradesh
  - 4. Chhattisgarh

Question ID : 630680409676  
Option 1 ID : 6306801597536  
Option 2 ID : 6306801597533  
Option 3 ID : 6306801597535  
Option 4 ID : 6306801597534  
Status : Answered  
Chosen Option : 1

**Q.15** The Accelerated Female Literacy Programme was initiated in districts where the female literacy rate, based on the 2001 census, was \_\_\_\_\_.

- Ans
- 1. below 35%
  - 2. below 50%
  - 3. below 45%
  - 4. below 30%

Question ID : 6306801048058  
Option 1 ID : 6306804114281  
Option 2 ID : 6306804114278  
Option 3 ID : 6306804114280  
Option 4 ID : 6306804114279  
Status : Not Answered  
Chosen Option : --

**Q.16** Who among the following was a poet who won Nobel Prize for literature in 1913?

- Ans
- 1. Rudyard Kipling
  - 2. Bankin Chandra Chattopadhyay
  - 3. Aurobindo Ghose
  - 4. Rabindranath Tagore

Question ID : 630680511520  
Option 1 ID : 6306801999204  
Option 2 ID : 6306801999202  
Option 3 ID : 6306801999205  
Option 4 ID : 6306801999203  
Status : Not Answered  
Chosen Option : --

**Q.17 Which group of people will be benefited by the Mukhya Mantri Sukh Ashray Yojana approved by Himachal Pradesh?**

**Ans** ✓ 1. Orphans, specially abled children, destitute women and senior citizens

✗ 2. Students and teachers

✗ 3. Farmers and agricultural labourers

✗ 4. Unemployed youth

Question ID : 630680413080

Option 1 ID : 6306801611144

Option 2 ID : 6306801611145

Option 3 ID : 6306801611143

Option 4 ID : 6306801611146

Status : Answered

Chosen Option : 1

**Q.18 Which of the following departments of Delhi Sultanate was reorganized by Balban?**

**Ans** ✗ 1. Diwan-i-Mustakhraj

✓ 2. Diwan-i-Arz

✗ 3. Diwan-i-Ishtiaq

✗ 4. Diwan-i-Risalat

Question ID : 630680412411

Option 1 ID : 6306801608470

Option 2 ID : 6306801608469

Option 3 ID : 6306801608468

Option 4 ID : 6306801608467

Status : Not Answered

Chosen Option : --

**Q.19 When was the Indian Hockey Federation established?**

**Ans** ✓ 1. 1925

✗ 2. 1945

✗ 3. 1935

✗ 4. 1955

Question ID : 630680510818

Option 1 ID : 6306801996402

Option 2 ID : 6306801996404

Option 3 ID : 6306801996403

Option 4 ID : 6306801996405

Status : Not Answered

Chosen Option : --

**Q.20 Which of the following elements is a metalloid?**

**Ans** ✗ 1. Sodium

✗ 2. Iron

✓ 3. Silicon

✗ 4. Oxygen

Question ID : 63068098946

Option 1 ID : 630680384490

Option 2 ID : 630680384488

Option 3 ID : 630680384489

Option 4 ID : 630680384491

Status : Answered

Chosen Option : 3

**Q.21 Madhuri Barthwal, a folk singer and Padma Shri 2022 awardee, belongs to which of the following states of India?**

- Ans**
- 1. Maharashtra
  - 2. Himachal Pradesh
  - 3. Uttarakhand
  - 4. Uttar Pradesh

Question ID : 630680309204  
Option 1 ID : 6306801202996  
Option 2 ID : 6306801202994  
Option 3 ID : 6306801202993  
Option 4 ID : 6306801202995  
Status : Not Answered  
Chosen Option : --

**Q.22 If assets of a bank are greater than liabilities, it will be recorded as:**

- Ans**
- 1. net worth
  - 2. liabilities
  - 3. assets
  - 4. reserves

Question ID : 63068069513  
Option 1 ID : 630680268720  
Option 2 ID : 630680268719  
Option 3 ID : 630680268718  
Option 4 ID : 630680268721  
Status : Answered  
Chosen Option : 1

**Q.23 In which of the following states is the development of rail transport less, due to its geographical conditions?**

- Ans**
- 1. Bihar
  - 2. Uttar Pradesh
  - 3. Sikkim
  - 4. Haryana

Question ID : 63068087516  
Option 1 ID : 630680339451  
Option 2 ID : 630680339449  
Option 3 ID : 630680339452  
Option 4 ID : 630680339450  
Status : Answered  
Chosen Option : 3

**Q.24 Which of the following options is the legislative organ of the Union government?**

- Ans**
- 1. Parliament
  - 2. Executive
  - 3. Legislative assembly
  - 4. Judiciary

Question ID : 630680329458  
Option 1 ID : 6306801281573  
Option 2 ID : 6306801281574  
Option 3 ID : 6306801281576  
Option 4 ID : 6306801281575  
Status : Answered  
Chosen Option : 1

**Q.25** In which year was the National Institute of Kathak Dance established?

- Ans**  1. 1961  
 2. 1969  
 3. 1954  
 4. 1964

Question ID : 630680160192  
Option 1 ID : 630680620141  
Option 2 ID : 630680620143  
Option 3 ID : 630680620140  
Option 4 ID : 630680620142  
Status : Not Answered  
Chosen Option : --

Section : Quantitative Aptitude

**Q.1** The table below shows incomes (in rupees) earned by five employees of a company during the month of March 2019 and the income sources.

Source/Name of Employee	Reeta	Seeta	Geeta	Neeta	Aneeta
Overtime	2,500	2,800	2,300	2,200	2,600
Arrears	4,500	4,800	4,900	5,300	5,600
Bonus	2,300	2,100	2,500	2,700	2,800
Salary	24,000	30,000	29,000	32,000	34,000

The total amount of arrears paid by the company during the given period is what percentage of the total amount of bonus paid during the given period?

- Ans**  1. 102.42%  
 2. 402.42%  
 3. 202.42%  
 4. 302.42%

Question ID : 630680428154  
Option 1 ID : 6306801670660  
Option 2 ID : 6306801670663  
Option 3 ID : 6306801670661  
Option 4 ID : 6306801670662  
Status : Not Answered  
Chosen Option : --

**Q.2** Study the given table and answer the question that follows.

The following table shows the population of a city at the end of the years mentioned.

Year	Population
2012	64.5
2013	68.4
2014	72.6
2015	83.8
2016	100.6
2017	112.8
2018	128.4
2019	134.6
2020	156.8
2021	176.4

Which of the following years has the highest rate of increase compared to the previous year?

- Ans**  1. 2016  
 2. 2015  
 3. 2018  
 4. 2019

Question ID : 630680396985  
Option 1 ID : 6306801547999  
Option 2 ID : 6306801547997  
Option 3 ID : 6306801547998  
Option 4 ID : 6306801547996  
Status : Answered  
Chosen Option : 1

**Q.3** A bronze article having a marked price of ₹1,000 is sold during a festive season sale after three successive discounts of 20% and 30% and 10%. What will be the amount (in ₹) to be paid by a customer if she buys the article during the festival season?

- Ans**  1. 496  
 2. 504  
 3. 564  
 4. 508

Question ID : 630680239492  
Option 1 ID : 630680928919  
Option 2 ID : 630680928921  
Option 3 ID : 630680928922  
Option 4 ID : 630680928920  
Status : Answered  
Chosen Option : 2

Q.4 A rectangular piece of paper is 50 cm long and 22 cm wide. If a cylinder is formed by rolling the paper along its breadth, then the volume of the cylinder is:

- Ans
- 1.  $1,925 \text{ cm}^3$
  - 2.  $2,125 \text{ cm}^3$
  - 3.  $2,025 \text{ cm}^3$
  - 4.  $1,825 \text{ cm}^3$

Question ID : 63068091885  
Option 1 ID : 630680356275  
Option 2 ID : 630680356277  
Option 3 ID : 630680356276  
Option 4 ID : 630680356274  
Status : Not Answered  
Chosen Option : --

Q.5 If  $\triangle PQR \cong \triangle MON$  such that  $\angle PQR = 82^\circ, \angle QRP = 47^\circ, \angle RPQ = 51^\circ, \angle MON = (5y - 8)^\circ, QR = 24$  and  $ON = 3x + y$ , then find  $(x + y)$ .

- Ans
- 1. 20
  - 2. 14
  - 3. 18
  - 4. 16

Question ID : 630680526504  
Option 1 ID : 6306802058085  
Option 2 ID : 6306802058083  
Option 3 ID : 6306802058084  
Option 4 ID : 6306802058082  
Status : Not Answered  
Chosen Option : --

Q.6 If  $45 \div 3 + 4 \times A - 48 \div 24 + 4 = 1$ , then the value of A is:

- Ans
- 1. 2
  - 2. 4
  - 3. -4
  - 4. -2

Question ID : 630680388400  
Option 1 ID : 6306801514120  
Option 2 ID : 6306801514118  
Option 3 ID : 6306801514119  
Option 4 ID : 6306801514121  
Status : Not Answered  
Chosen Option : --

**Q.7** Simple interest on a certain sum is one-fifth of the sum and the interest rate per cent per annum is 5 times the number of years. If the rate of interest increases by 3%, then how much will the simple interest (in ₹) be on ₹5,600 for 6 years?

**Ans**  1. 4268

2. 4668

3. 4168

4. 4368

Question ID : 630680344789

Option 1 ID : 6306801341467

Option 2 ID : 6306801341465

Option 3 ID : 6306801341468

Option 4 ID : 6306801341466

Status : Not Answered

Chosen Option : --

**Q.8** The average of the squares of the first 45 natural numbers is

**Ans**  1. 699.67

2. 697.67

3. 696.67

4. 698.67

Question ID : 630680568972

Option 1 ID : 6306802224700

Option 2 ID : 6306802224697

Option 3 ID : 6306802224699

Option 4 ID : 6306802224698

Status : Not Answered

Chosen Option : --

**Q.9** The pie chart given below shows the number of hours spent by a student for different activities on a working day.  
The percentage of hours spent at school in a day is \_\_\_\_\_.

hours/day



■ sleep ■ school ■ homework ■ play ■ other

- Ans**
- 1. 30%
  - 2. 35%
  - 3. 40%
  - 4. 25%

Question ID : 630680405097  
Option 1 ID : 6306801579786  
Option 2 ID : 6306801579785  
Option 3 ID : 6306801579787  
Option 4 ID : 6306801579788  
Status : Answered  
Chosen Option : 4

**Q.10** In an election between Sunita and Mamata, 85% of voters cast their votes but 2% of votes were invalid. If Sunita got 64,974 votes which is 78% of valid votes, then the total number of voters enrolled in the election was:

- Ans**
- 1. 1,65,000
  - 2. 1,00,000
  - 3. 1,25,000
  - 4. 1,80,000

Question ID : 630680432457  
Option 1 ID : 6306801687833  
Option 2 ID : 6306801687831  
Option 3 ID : 6306801687832  
Option 4 ID : 6306801687834  
Status : Not Answered  
Chosen Option : --

Q.11 If one man adds 6 litres of water to 10 litres of milk and another man adds 4 litres of water to 8 litres of milk. Find the ratio of milk in the two mixtures.

Ans  1. 15 : 16

2. 16 : 15

3. 12 : 11

4. 16 : 17

Question ID : 630680397224

Option 1 ID : 6306801548952

Option 2 ID : 6306801548953

Option 3 ID : 6306801548955

Option 4 ID : 6306801548954

Status : Not Answered

Chosen Option : --

Q.12 The speed of a boat in still water is 18 km/h and the speed of the stream is 3 km/h. How much time (in hours) will it take to cover a distance of 105 km in downstream and in coming back?

Ans  1. 12

2. 10

3. 9

4. 15

Question ID : 630680428555

Option 1 ID : 6306801672264

Option 2 ID : 6306801672265

Option 3 ID : 6306801672267

Option 4 ID : 6306801672266

Status : Answered

Chosen Option : 1

Q.13  $\frac{3\sin 58^\circ}{5\cos 32^\circ} + \frac{2\cos 62^\circ}{5\sin 28^\circ}$  is equal to:

Ans  1. 2

2. 0

3. 1

4. 3

Question ID : 630680518871

Option 1 ID : 6306802027958

Option 2 ID : 6306802027956

Option 3 ID : 6306802027957

Option 4 ID : 6306802027959

Status : Answered

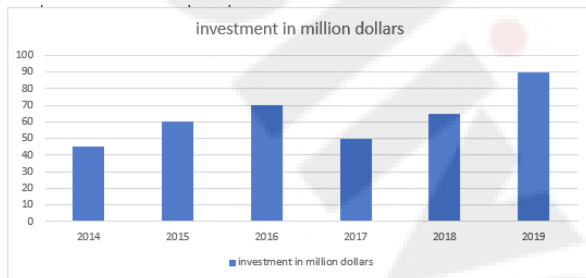
Chosen Option : 3

**Q.14** Pipes P and Q can completely fill a water tank in 10 hours and 15 hours, respectively. A pipe R can empty a tank filled completely with water in 12 hours. Initially, the tank is empty and only pipes P and Q are opened at 6 a.m. and pipe R is also opened at 9 a.m. By what time will the tank be completely filled?

- Ans  1. 3 p.m.  
 2. 11 a.m.  
 3. 1 p.m.  
 4. 2 p.m.

Question ID : 630680395281  
 Option 1 ID : 6306801541335  
 Option 2 ID : 6306801541332  
 Option 3 ID : 6306801541333  
 Option 4 ID : 6306801541334  
 Status : Not Answered  
 Chosen Option : --

**Q.15** The given bar graph shows the foreign direct investment (in million dollars) in Country A from all over the world over the given years.



What was the ratio of investment in 2018 to that in 2015?

- Ans  1. 11 : 12  
 2. 13 : 12  
 3. 12 : 11  
 4. 13 : 11

Question ID : 630680428150  
 Option 1 ID : 6306801670644  
 Option 2 ID : 6306801670646  
 Option 3 ID : 6306801670645  
 Option 4 ID : 6306801670647  
 Status : Answered  
 Chosen Option : 2

**Q.16** Which digits should come in the place of \* and #, respectively, if the 7-digit number 62684\*# is divisible by both 8 and 5?

- Ans  1. 0 and 5  
 2. 4 and 0  
 3. 5 and 0  
 4. 2 and 0

Question ID : 630680131179  
 Option 1 ID : 630680507983  
 Option 2 ID : 630680507982  
 Option 3 ID : 630680507984  
 Option 4 ID : 630680507985  
 Status : Answered  
 Chosen Option : 2

Q.17 What is the central angle of a sector of a circle whose area and perimeter are, respectively, equal to  $209 \text{ cm}^2$  and  $63 \text{ cm}$  if it is given that its radius is a non-negative integer (roundup to one decimal place)?

Ans  1.  $49.5^\circ$

2.  $55.5^\circ$

3.  $53.5^\circ$

4.  $51.5^\circ$

Question ID : 630680410857

Option 1 ID : 6306801602183

Option 2 ID : 6306801602186

Option 3 ID : 6306801602185

Option 4 ID : 6306801602184

Status : Not Answered

Chosen Option : --

Q.18 If  $x^2 + y^2 = 280$  and  $xy = 120$ , then find the value of  $\frac{x-y}{x+y}$ .

Ans  1.  $\sqrt{15}$

2.  $\sqrt{13}$

3.  $\frac{1}{\sqrt{15}}$

4.  $\frac{1}{\sqrt{13}}$

Question ID : 630680413501

Option 1 ID : 6306801612830

Option 2 ID : 6306801612829

Option 3 ID : 6306801612831

Option 4 ID : 6306801612828

Status : Answered

Chosen Option : 4

Q

9  
1  
If  $7 \cos^2 \theta + 5 \sin^2 \theta - 6 = 0$ , ( $0^\circ < \theta < 90^\circ$ ), then what is the value of  $1 + \sqrt{\frac{\sec \theta + \tan \theta}{\sec \theta - \tan \theta}}$ ?

A  
n  
s  1.  $\sqrt{2} + 2$

2.  $\sqrt{2} + 1$

3.  $\sqrt{2} - 1$

4.  $\sqrt{2} - 2$

Question ID : 630680397627

Option 1 ID : 6306801550433

Option 2 ID : 6306801550432

Option 3 ID : 6306801550430

Option 4 ID : 6306801550431

Status : Not Answered

Chosen Option : --

Q.20 For what value of k will the lines  $2x + 7ky - 8 = 0$  and  $x + y - 9 = 0$  have no solution?

- Ans
- 1.  $\frac{8}{9}$
  - 2.  $\frac{1}{2}$
  - 3.  $\frac{2}{7}$
  - 4.  $\frac{9}{7}$

Question ID : 630680296072  
Option 1 ID : 6306801151958  
Option 2 ID : 6306801151957  
Option 3 ID : 6306801151956  
Option 4 ID : 6306801151959  
Status : Answered  
Chosen Option : 3

Q.21 The area of a square is  $16x^2 + 40x + 25$  square units. Find the perimeter of the square.

- Ans
- 1.  $3(8x + 10)$
  - 2.  $3(10x + 8)$
  - 3.  $2(10x + 8)$
  - 4.  $2(8x + 10)$

Question ID : 630680413547  
Option 1 ID : 6306801613012  
Option 2 ID : 6306801613015  
Option 3 ID : 6306801613013  
Option 4 ID : 6306801613014  
Status : Not Answered  
Chosen Option : --

Q.22 The radii of two circle are 5 cm and 10 cm and the distance between their centres is 17 cm. Find the length of the transverse common tangent.

- Ans
- 1. 6 cm
  - 2. 7.5 cm
  - 3. 9 cm
  - 4. 8 cm

Question ID : 630680404008  
Option 1 ID : 6306801575518  
Option 2 ID : 6306801575520  
Option 3 ID : 6306801575521  
Option 4 ID : 6306801575519  
Status : Not Answered  
Chosen Option : --

Q.23 A shopkeeper allows a discount of 20% on the marked price of an item and thus gains 10%. What is the ratio of the cost price to the marked price of the item?

- Ans
- 1. 9:13
  - 2. 7:10
  - 3. 11:14
  - 4. 8:11

Question ID : 630680429049  
Option 1 ID : 6306801674242  
Option 2 ID : 6306801674240  
Option 3 ID : 6306801674243  
Option 4 ID : 6306801674241  
Status : Answered  
Chosen Option : 2

Q.24 If  $7 \tan \theta = 3$ , and  $\theta$  is an acute angle, then  $\frac{5 \sin \theta - \cos \theta}{5 \sin \theta + 2 \cos \theta}$  is equal to:

- Ans
- 1.  $\frac{11}{29}$
  - 2.  $\frac{7}{29}$
  - 3.  $\frac{8}{29}$
  - 4.  $\frac{9}{29}$

Question ID : 630680526478  
Option 1 ID : 6306802057978  
Option 2 ID : 6306802057980  
Option 3 ID : 6306802057979  
Option 4 ID : 6306802057981  
Status : Answered  
Chosen Option : 3

Q.25 If the length of a common external tangent to two circles is 9 and that of a common internal tangent is 5, then the product of the radii of the two circles is:

- Ans
- 1. 12
  - 2. 14
  - 3. 10
  - 4. 8

Question ID : 630680195537  
Option 1 ID : 630680758619  
Option 2 ID : 630680758620  
Option 3 ID : 630680758618  
Option 4 ID : 630680758617  
Status : Not Answered  
Chosen Option : --

**Q.1** Select the most appropriate synonym of the given word.

**Evaluate**

**Ans** ✓ 1. Assess

✗ 2. Unity

✗ 3. Misquote

✗ 4. Misjudge

Question ID : 630680209304

Option 1 ID : 630680811432

Option 2 ID : 630680811433

Option 3 ID : 630680811431

Option 4 ID : 630680811434

Status : Answered

Chosen Option : 1

**Q.2** Select the option that expresses the given sentence in passive voice.  
Historians tell us how this country was divided into three.

**Ans** ✗ 1. We have been told by historians how this country was divided into three.

✗ 2. We are told by historians how this country divided into three.

✓ 3. We are told by historians how this country was divided into three.

✗ 4. We are told by historians how this country has been divided into three.

Question ID : 630680415192

Option 1 ID : 6306801619515

Option 2 ID : 6306801619517

Option 3 ID : 6306801619518

Option 4 ID : 6306801619516

Status : Not Answered

Chosen Option : --

**Q.3** Select the most appropriate ANTONYM of the given word.  
Mechanical

**Ans** ✗ 1. Yielding

✗ 2. Automatised

✓ 3. Manual

✗ 4. Surrogate

Question ID : 630680517572

Option 1 ID : 6306802022686

Option 2 ID : 6306802022684

Option 3 ID : 6306802022687

Option 4 ID : 6306802022685

Status : Answered

Chosen Option : 3

**Q.4** Select the option that can be used as a one-word substitute for the given group of words.

a short section (as of a book) that leads to or explains the main part.

- Ans
- 1. Conclusion
  - 2. Foreword
  - 3. Paraphrase
  - 4. Postscript

Question ID : 630680414776  
Option 1 ID : 6306801617848  
Option 2 ID : 6306801617847  
Option 3 ID : 6306801617850  
Option 4 ID : 6306801617849  
Status : Answered  
Chosen Option : 1

**Q.5** Select the option that expresses the given sentence in passive voice.

The company will launch the new product next month, and they are already promoting it through various marketing channels.

- Ans
- 1. The new product were been launched by the company next month, and it already was promoting through various marketing channels.
  - 2. The new product will have been launched by the company next month, and it was already being promoted through various marketing channels.
  - 3. The new product will be launched by the company next month, and it is already being promoted through various marketing channels.
  - 4. The new product was launched by the company next month, and it is already promoted through various marketing channels.

Question ID : 630680374380  
Option 1 ID : 6306801458706  
Option 2 ID : 6306801458705  
Option 3 ID : 6306801458703  
Option 4 ID : 6306801458704  
Status : Not Answered  
Chosen Option : --

**Q.6** Select the most appropriate option to fill in the blank.

The group of travellers were wonderstruck by the \_\_\_\_\_ of the coin.

- Ans
- 1. white
  - 2. wait
  - 3. weight
  - 4. wide

Question ID : 63068069102  
Option 1 ID : 630680267087  
Option 2 ID : 630680267086  
Option 3 ID : 630680267088  
Option 4 ID : 630680267089  
Status : Answered  
Chosen Option : 3

**Q.7** Parts of a sentence are given below in jumbled order. Select the option that arranges the parts in the correct sequence to form a meaningful sentence.  
(P) technology has revolutionised  
(Q) and it has transformed the way  
(O) every aspect of our lives  
(R) we communicate and connect

- Ans
- 1. RPOQ
  - 2. ORQP
  - 3. RPQO
  - 4. POQR

Question ID : 630680380983  
Option 1 ID : 6306801484922  
Option 2 ID : 6306801484921  
Option 3 ID : 6306801484919  
Option 4 ID : 6306801484920  
Status : Answered  
Chosen Option : 4

**Q.8** Select the most appropriate ANTONYM of the word in the brackets to fill in the blank.

The \_\_\_\_\_ to the venue was decorated with beautiful lights. [exit]

- Ans
- 1. house
  - 2. entry
  - 3. road
  - 4. ceremony

Question ID : 630680132560  
Option 1 ID : 630680513376  
Option 2 ID : 630680513375  
Option 3 ID : 630680513374  
Option 4 ID : 630680513377  
Status : Answered  
Chosen Option : 2

**Q.9** Select the most appropriate synonym of the bracketed word in the following sentence to fill in the blank.

The media, these days, constructs \_\_\_\_\_ (misleading) narratives on politics and celebrities to increase the viewership.

- Ans
- 1. candid
  - 2. sincere
  - 3. mendacious
  - 4. true

Question ID : 630680310098  
Option 1 ID : 6306801206534  
Option 2 ID : 6306801206535  
Option 3 ID : 6306801206536  
Option 4 ID : 6306801206533  
Status : Answered  
Chosen Option : 3

**Q.10** Select the most appropriate meaning of the given idiom.

**Care a hang**

- Ans**  1. Caring too much  
 2. Hanging clothes to dry  
 3. Showing no interest  
 4. Putting an outfit on a hanger

Question ID : 630680374772  
Option 1 ID : 6306801460255  
Option 2 ID : 6306801460258  
Option 3 ID : 6306801460256  
Option 4 ID : 6306801460257  
Status : Answered  
Chosen Option : 3

**Q.11** Select the word which means the same as the group of words given.

**Choice between two unsatisfactory alternatives**

- Ans**  1. Problem  
 2. Dilemma  
 3. Confusion  
 4. Difficulty

Question ID : 630680414700  
Option 1 ID : 6306801617545  
Option 2 ID : 6306801617543  
Option 3 ID : 6306801617544  
Option 4 ID : 6306801617546  
Status : Answered  
Chosen Option : 2

**Q.12** Select the option that can be used as a one-word substitute for the given group of words.

**Fear of closed spaces**

- Ans**  1. Photophobia  
 2. Claustrophobia  
 3. Agoraphobia  
 4. Optophobia

Question ID : 630680405384  
Option 1 ID : 6306801580748  
Option 2 ID : 6306801580746  
Option 3 ID : 6306801580747  
Option 4 ID : 6306801580749  
Status : Answered  
Chosen Option : 2

Q.13 Select the correctly spelt word to fill in the blank.

The transistors are used as the main \_\_\_\_\_, which are built into computer chips.

- Ans  1. cumponents  
 2. components  
 3. kamponents  
 4. kumponents

Question ID : 630680374785  
Option 1 ID : 6306801460310  
Option 2 ID : 6306801460309  
Option 3 ID : 6306801460308  
Option 4 ID : 6306801460307  
Status : Answered  
Chosen Option : 2

Q.14 Select the most appropriate option to substitute the underlined segment in the given sentence.

To tell others secret information only for enjoyment is not a good practice.

- Ans  1. spill the words  
 2. spill the cat  
 3. spill the beans  
 4. spill the onions

Question ID : 630680316363  
Option 1 ID : 6306801231078  
Option 2 ID : 6306801231079  
Option 3 ID : 6306801231077  
Option 4 ID : 6306801231080  
Status : Answered  
Chosen Option : 1

Q.15 Select the INCORRECTLY spelt word.

- Ans  1. Voluptuous  
 2. Vomitus  
 3. Verminous  
 4. Verifiability

Question ID : 630680409979  
Option 1 ID : 6306801598747  
Option 2 ID : 6306801598746  
Option 3 ID : 6306801598745  
Option 4 ID : 6306801598748  
Status : Answered  
Chosen Option : 4

**Q.16** Select the option that can substitute/replace the bracketed word correctly and complete the sentence.

They could (always) stay in, or go for a walk.

- Ans  1. either  
 2. not only  
 3. had better  
 4. neither

Question ID : 630680176612  
Option 1 ID : 630680684669  
Option 2 ID : 630680684671  
Option 3 ID : 630680684670  
Option 4 ID : 630680684668  
Status : Answered  
Chosen Option : 1

**Q.17** Select the most appropriate meaning of the underlined word.  
Solomon's reputation as an accountant is taintless .

- Ans  1. dubious  
 2. inconsistent  
 3. faultless  
 4. flawed

Question ID : 630680182096  
Option 1 ID : 630680705609  
Option 2 ID : 630680705608  
Option 3 ID : 630680705607  
Option 4 ID : 630680705606  
Status : Answered  
Chosen Option : 3

**Q.18** Parts of the following sentence have been underlined and given as options. Select the option that contains an error.

The supermarket is open from 10 a.m. still 10 p.m.

- Ans  1. open  
 2. from 10 a.m.  
 3. The supermarket  
 4. still 10 p.m.

Question ID : 630680398609  
Option 1 ID : 6306801554439  
Option 2 ID : 6306801554440  
Option 3 ID : 6306801554438  
Option 4 ID : 6306801554441  
Status : Answered  
Chosen Option : 4

**Q.19** The following sentence has been divided into four segments. Identify the segment that contains a grammatical error.

My sister, Juliet, / got married / as her / was 23.

Ans  1. as her

2. My sister, Juliet,

3. got married

4. was 23.

Question ID : 630680300645

Option 1 ID : 6306801169405

Option 2 ID : 6306801169403

Option 3 ID : 6306801169404

Option 4 ID : 6306801169406

Status : Answered

Chosen Option : 1

**Q.20** Select the most appropriate option to substitute the underlined word in the given sentence.

Mayra has the ability for mathematics.

Ans  1. astute

2. aptitude

3. attitude

4. altitude

Question ID : 630680158965

Option 1 ID : 630680615331

Option 2 ID : 630680615329

Option 3 ID : 630680615328

Option 4 ID : 630680615330

Status : Answered

Chosen Option : 2

**Comprehension:**

In the following passage, some words have been deleted. Read the passage carefully and select the most appropriate option to fill in each blank.

As a result of Covid-19, the quick (1) \_\_\_\_\_ to digital training has exposed the hazards of student disengagement and the resulting consequences of lower student performance across (2) \_\_\_\_\_ courses.

The latest (3) \_\_\_\_\_ has altered the education of millions of people around the world. New approaches and improvements in the school system are urgently required. Considering the increasing digital divide, the strategy may exacerbate existing inequality disparities. More than 500 million students, at various levels, around the world were forced to (4) \_\_\_\_\_ their studies. These changes have caused and will continue to cause some inconvenience, but they will also foster innovation and future reforms inside this education system.

During a global Covid-19 pandemic, the 'pile-on effect' of the coronavirus can have long-term consequences for schooling, notably for the most vulnerable. Children, (5) \_\_\_\_\_ basic, core learning (reading, math, languages, etc.) was weak to begin with, face a significant risk of regression. During Covid-19, millions of children whose right to education has already been violated, particularly girls, are exposed to greater health and well-being hazards (both psychosocial and physical).

**SubQuestion No : 21****Q.21 Select the most appropriate option to fill in blank number 1.****Ans** ✓ 1. transition

✗ 2. end

✗ 3. stagnation

✗ 4. set

Question ID : 630680156415

Option 1 ID : 630680605322

Option 2 ID : 630680605323

Option 3 ID : 630680605320

Option 4 ID : 630680605321

Status : Answered

Chosen Option : 1

**Comprehension:**

In the following passage, some words have been deleted. Read the passage carefully and select the most appropriate option to fill in each blank.

As a result of Covid-19, the quick (1) \_\_\_\_\_ to digital training has exposed the hazards of student disengagement and the resulting consequences of lower student performance across (2) \_\_\_\_\_ courses.

The latest (3) \_\_\_\_\_ has altered the education of millions of people around the world. New approaches and improvements in the school system are urgently required. Considering the increasing digital divide, the strategy may exacerbate existing inequality disparities. More than 500 million students, at various levels, around the world were forced to (4) \_\_\_\_\_ their studies. These changes have caused and will continue to cause some inconvenience, but they will also foster innovation and future reforms inside this education system.

During a global Covid-19 pandemic, the 'pile-on effect' of the coronavirus can have long-term consequences for schooling, notably for the most vulnerable. Children, (5) \_\_\_\_\_ basic, core learning (reading, math, languages, etc.) was weak to begin with, face a significant risk of regression. During Covid-19, millions of children whose right to education has already been violated, particularly girls, are exposed to greater health and well-being hazards (both psychosocial and physical).

**SubQuestion No : 22****Q.22 Select the most appropriate option to fill in blank number 2.****Ans** ✓ 1. numerous

✗ 2. fewer

✗ 3. particular

✗ 4. limit

Question ID : 630680156416

Option 1 ID : 630680605324

Option 2 ID : 630680605327

Option 3 ID : 630680605325

Option 4 ID : 630680605326

Status : Answered

Chosen Option : 1

**Comprehension:**

In the following passage, some words have been deleted. Read the passage carefully and select the most appropriate option to fill in each blank.

As a result of Covid-19, the quick (1) \_\_\_\_\_ to digital training has exposed the hazards of student disengagement and the resulting consequences of lower student performance across (2) \_\_\_\_\_ courses.

The latest (3) \_\_\_\_\_ has altered the education of millions of people around the world. New approaches and improvements in the school system are urgently required. Considering the increasing digital divide, the strategy may exacerbate existing inequality disparities. More than 500 million students, at various levels, around the world were forced to (4) \_\_\_\_\_ their studies. These changes have caused and will continue to cause some inconvenience, but they will also foster innovation and future reforms inside this education system.

During a global Covid-19 pandemic, the 'pile-on effect' of the coronavirus can have long-term consequences for schooling, notably for the most vulnerable. Children, (5) \_\_\_\_\_ basic, core learning (reading, math, languages, etc.) was weak to begin with, face a significant risk of regression. During Covid-19, millions of children whose right to education has already been violated, particularly girls, are exposed to greater health and well-being hazards (both psychosocial and physical).

**SubQuestion No : 23****Q.23 Select the most appropriate option to fill in blank number 3.**

- Ans
- 1. epidemic
  - 2. local
  - 3. endemic
  - 4. pandemic

Question ID : 630680156417

Option 1 ID : 630680605329

Option 2 ID : 630680605328

Option 3 ID : 630680605330

Option 4 ID : 630680605331

Status : Answered

Chosen Option : 4

**Comprehension:**

In the following passage, some words have been deleted. Read the passage carefully and select the most appropriate option to fill in each blank.

As a result of Covid-19, the quick (1) \_\_\_\_\_ to digital training has exposed the hazards of student disengagement and the resulting consequences of lower student performance across (2) \_\_\_\_\_ courses.

The latest (3) \_\_\_\_\_ has altered the education of millions of people around the world. New approaches and improvements in the school system are urgently required. Considering the increasing digital divide, the strategy may exacerbate existing inequality disparities. More than 500 million students, at various levels, around the world were forced to (4) \_\_\_\_\_ their studies. These changes have caused and will continue to cause some inconvenience, but they will also foster innovation and future reforms inside this education system.

During a global Covid-19 pandemic, the 'pile-on effect' of the coronavirus can have long-term consequences for schooling, notably for the most vulnerable. Children, (5) \_\_\_\_\_ basic, core learning (reading, math, languages, etc.) was weak to begin with, face a significant risk of regression. During Covid-19, millions of children whose right to education has already been violated, particularly girls, are exposed to greater health and well-being hazards (both psychosocial and physical).

**SubQuestion No : 24****Q.24 Select the most appropriate option to fill in blank number 4.**

- Ans
- 1. suspend
  - 2. carry on
  - 3. resume
  - 4. reopened

Question ID : 630680156418

Option 1 ID : 630680605333

Option 2 ID : 630680605335

Option 3 ID : 630680605332

Option 4 ID : 630680605334

Status : Answered

Chosen Option : 1

**Comprehension:**

In the following passage, some words have been deleted. Read the passage carefully and select the most appropriate option to fill in each blank.

As a result of Covid-19, the quick (1) \_\_\_\_\_ to digital training has exposed the hazards of student disengagement and the resulting consequences of lower student performance across (2) \_\_\_\_\_ courses.

The latest (3) \_\_\_\_\_ has altered the education of millions of people around the world. New approaches and improvements in the school system are urgently required. Considering the increasing digital divide, the strategy may exacerbate existing inequality disparities. More than 500 million students, at various levels, around the world were forced to (4) \_\_\_\_\_ their studies. These changes have caused and will continue to cause some inconvenience, but they will also foster innovation and future reforms inside this education system.

During a global Covid-19 pandemic, the 'pile-on effect' of the coronavirus can have long-term consequences for schooling, notably for the most vulnerable. Children, (5) \_\_\_\_\_ basic, core learning (reading, math, languages, etc.) was weak to begin with, face a significant risk of regression. During Covid-19, millions of children whose right to education has already been violated, particularly girls, are exposed to greater health and well-being hazards (both psychosocial and physical).

**SubQuestion No : 25**

**Q.25** Select the most appropriate option to fill in blank number 5.

- Ans**
- 1. whom
  - 2. whose
  - 3. who
  - 4. which

Question ID : 630680156419

Option 1 ID : 630680605338

Option 2 ID : 630680605336

Option 3 ID : 630680605337

Option 4 ID : 630680605339

Status : Answered

Chosen Option : 2