

## Combined Graduate Level Examination 2024 Tier I

Roll Number	
Candidate Name	
Venue Name	
Exam Date	11/09/2024
Exam Time	9:00 AM - 10:00 AM
Subject	Combined Graduate Level Examination Tier I

Section : General Intelligence and Reasoning

**Q.1** Which two numbers (not digits) should be interchanged to make the given equation correct?

$$48 \div 3 + 12 \times 4 - 6 \times 7 + 21 = 27$$

- Ans
- 1. 12 and 21
  - 2. 4 and 7
  - 3. 3 and 4
  - 4. 3 and 6

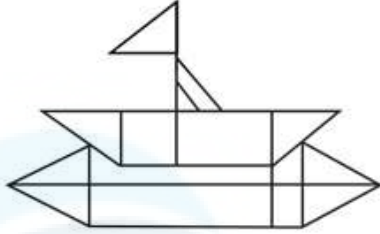
Question ID : 630680319373  
Option 1 ID : 6306801242398  
Option 2 ID : 6306801242400  
Option 3 ID : 6306801242397  
Option 4 ID : 6306801242399  
Status : Answered  
Chosen Option : 3

**Q.2** In the following number-pairs, the second number is obtained by applying certain mathematical operations to the first number. Select the set in which the numbers are related in the same way as are the numbers of the following sets.  
(NOTE : Operations should be performed on the whole numbers, without breaking down the numbers into its constituent digits. E.g. 13 – Operations on 13 such as adding /deleting /multiplying etc., to 13 can be performed. Breaking down 13 into 1 and 3 and then performing mathematical operations on 1 and 3 is not allowed.)  
(280, 140)  
(186, 93)

- Ans
- 1. (92, 51)
  - 2. (86, 48)
  - 3. (166, 84)
  - 4. (118, 59)

Question ID : 630680338903  
Option 1 ID : 6306801318204  
Option 2 ID : 6306801318201  
Option 3 ID : 6306801318203  
Option 4 ID : 6306801318202  
Status : Answered  
Chosen Option : 4

Q.3 How many triangles are there in the given figure?



- Ans
- 1. 9
  - 2. 10
  - 3. 8
  - 4. 11

Question ID : 630680296584

Option 1 ID : 6306801153988

Option 2 ID : 6306801153989

Option 3 ID : 6306801153987

Option 4 ID : 6306801153990

Status : Answered

Chosen Option : 4

Q.4 Three statements are given, followed by three conclusions numbered I, II and III. Assuming the statements to be true, even if they seem to be at variance with commonly known facts, decide which of the conclusions logically follow(s) from the statements.

Statements:

All bottles are jugs.

Some bottles are flasks.

All flasks are bins.

Conclusions:

I. Some bottles are bins.

II. Some jugs are bins.

III. Some flasks are jugs.

- Ans
- 1. All conclusions I, II and III follow
  - 2. Only conclusions II and III follow
  - 3. Either conclusion I or II follows
  - 4. Only conclusions I and II follow

Question ID : 630680416386

Option 1 ID : 6306801624310

Option 2 ID : 6306801624307

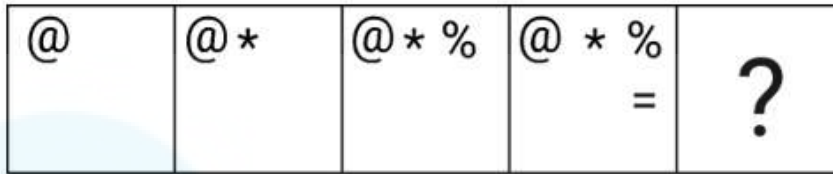
Option 3 ID : 6306801624309

Option 4 ID : 6306801624308

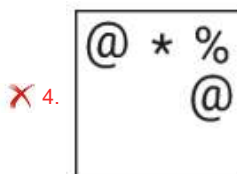
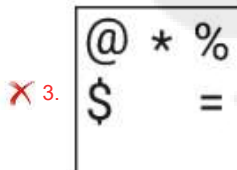


Status : Answered

Chosen Option : 1

Q.5 Identify the figure given in the options which when put in place of ? will logically complete the series.



Ans



Question ID : 630680524392

Option 1 ID : 6306802049669

Option 2 ID : 6306802049668

Option 3 ID : 6306802049667

Option 4 ID : 6306802049670

Status : Answered

Chosen Option : 1

Q.6 In a certain code language,  
 A + B means 'A is the son of B',  
 A - B means 'A is the wife of B',  
 A × B means 'A is the brother of B' and  
 A ÷ B means 'A is the mother of B'.  
 Based on the above, if 'P + Q ÷ R - T × M', which of the following is true?

- Ans
- ✗ 1. T is the brother of P.
  - ✗ 2. M is the sister of T.
  - ✓ 3. P is the brother of R.
  - ✗ 4. Q is the mother of M.

Question ID : 630680284896

Option 1 ID : 6306801107583

Option 2 ID : 6306801107586

Option 3 ID : 6306801107585

Option 4 ID : 6306801107584

Status : Answered

Chosen Option : 1

**Q.7** Select the option that is related to the fifth letter-cluster in the same way as the second letter-cluster is related to the first letter-cluster and the fourth letter-cluster is related to the third letter-cluster.

**RATE : SCWI :: HIGH : IKJL :: OPEN : ?**

**Ans**  1. PQHR

2. PRHR

3. PRIS

4. PSIR

Question ID : 630680416283

Option 1 ID : 6306801623898

Option 2 ID : 6306801623896

Option 3 ID : 6306801623897

Option 4 ID : 6306801623895

Status : Answered

Chosen Option : 2

**Q.8** In a certain code language, 'CONFUSED' is coded as '7' and 'CHAIN' is coded as '4'. How will 'ADULTHOOD' be coded in that language?

**Ans**  1. 6

2. 7

3. 8

4. 9

Question ID : 630680172758

Option 1 ID : 630680669435

Option 2 ID : 630680669433

Option 3 ID : 630680669434

Option 4 ID : 630680669432

Status : Answered

Chosen Option : 3

**Q.9** The question contains pairs of words that are related to each other in a certain way. Three of the following four word pairs are alike as these have the same relationship and thus form a group. Which word pair is the one that DOES NOT belong to that group?

(The words must be considered as meaningful English words and must not be related to each other based on the number of letters / number of consonants/vowels in the word.)

**Ans**  1. Eye – ophthalmologist

2. Bone – orthopaedic

3. Stomach – gastroenterologist

4. Uterus – urologist

Question ID : 630680798748

Option 1 ID : 6306803129844

Option 2 ID : 6306803129845

Option 3 ID : 6306803129846

Option 4 ID : 6306803129847

Status : Answered

Chosen Option : 4

Q.10 Select the combination of letters that when sequentially placed in the blanks of the given series will complete the series.

q p \_ r \_ r q \_ p \_ r p \_ q \_ p r \_ p \_ q

Ans  1. r p q r r p r q

2. r p q r r q r p

3. r p q r r q r r

4. r p q q r q r p

Question ID : 630680265665

Option 1 ID : 6306801032129

Option 2 ID : 6306801032127

Option 3 ID : 6306801032128

Option 4 ID : 6306801032130

Status : Answered

Chosen Option : 3

Q.11 Which of the following numbers will replace the question mark (?) in the given series?

17, 38, 84, ?, 376, 772

Ans  1. 150

2. 190

3. 180

4. 200

Question ID : 630680411887

Option 1 ID : 6306801606383

Option 2 ID : 6306801606385

Option 3 ID : 6306801606384

Option 4 ID : 6306801606386

Status : Answered

Chosen Option : 3

Q.12 Select the correct mirror image of the given figure when the mirror is placed at MN as shown.

y z v o n | M  
N

Ans

1. n o v z y

2. n o v z y

3. n o v z y

4. n o v z y

Question ID : 630680389697

Option 1 ID : 6306801519246

Option 2 ID : 6306801519247

Option 3 ID : 6306801519248

Option 4 ID : 6306801519249

Status : Answered

Chosen Option : 4

Q.13 The same operation(s) are followed in all the given number pairs except one. Find that odd number pair.

(NOTE : Operations should be performed on the whole numbers, without breaking down the numbers into its constituent digits. E.g. 13 – Operations on 13 such as adding /deleting /multiplying etc., to 13 can be performed. Breaking down 13 into 1 and 3 and then performing mathematical operations on 1 and 3 is not allowed.)

Ans  1. 135 : 17

2. 151 : 19

3. 128 : 16

4. 103 : 13

Question ID : 630680412036

Option 1 ID : 6306801606980

Option 2 ID : 6306801606982

Option 3 ID : 6306801606979

Option 4 ID : 6306801606981

Status : Answered

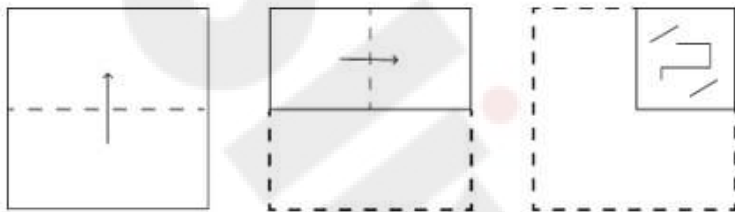
Chosen Option : 3

Q.14 Which of the following terms will replace the question mark (?) in the given series?  
 GASM, CCOO, YEKQ, ? , QICU

- Ans
- 1. UGGT
  - 2. UGGS
  - 3. UCGS
  - 4. TGFS

Question ID : 630680417055  
 Option 1 ID : 6306801626985  
 Option 2 ID : 6306801626983  
 Option 3 ID : 6306801626986  
 Option 4 ID : 6306801626984  
 Status : Answered  
 Chosen Option : 2

Q.15 A paper is folded and cut as shown below. How will it appear when unfolded?



Ans

- 1.
- 2.
- 3.
- 4.

Question ID : 630680285667  
 Option 1 ID : 6306801110637  
 Option 2 ID : 6306801110636  
 Option 3 ID : 6306801110638  
 Option 4 ID : 6306801110635  
 Status : Answered  
 Chosen Option : 3

Q.16 उस विकल्प का चयन करें जो तीसरे शब्द से उसी प्रकार संबंधित है जैसे दूसरा शब्द पहले शब्द से संबंधित है। (शब्दों को अर्थपूर्ण अंग्रेजी शब्दों के रूप में माना जाना चाहिए और शब्द आपस में अक्षरों की संख्या/व्यंजन/स्वरों की संख्या के आधार पर एक दूसरे से संबंधित नहीं होना चाहिए)  
कटुता : मानवता :: संभालना : ?

Ans  1. नियुक्त करना

2. निग्रह

3. त्यागना

4. खींचना

Question ID : 630680195785

Option 1 ID : 630680759593

Option 2 ID : 630680759594

Option 3 ID : 630680759592

Option 4 ID : 630680759591

Status : Answered

Chosen Option : 3

Q.17 The position(s) of how many letters will remain unchanged if all the letters in the word 'MEADOW' are arranged in English alphabetical order?

Ans  1. Two

2. One

3. None

4. Three

Question ID : 630680375923

Option 1 ID : 6306801464766

Option 2 ID : 6306801464765

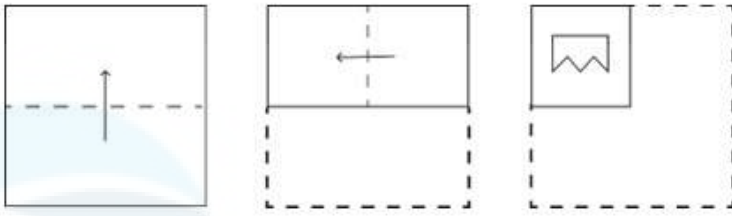
Option 3 ID : 6306801464763

Option 4 ID : 6306801464764

Status : Answered

Chosen Option : 1

Q.18 A paper is folded and cut as shown below. How will it appear when unfolded?



Ans

- 1.
- 2.
- 3.
- 4.

Question ID : 630680285666  
Option 1 ID : 6306801110633  
Option 2 ID : 6306801110632  
Option 3 ID : 6306801110634  
Option 4 ID : 6306801110631  
Status : Answered  
Chosen Option : 2

Q.19 'Summer' is related to 'Season' in the same way as 'Cotton' is related to '\_\_\_\_\_'.  
Ans

- 1. Grain
- 2. Tree
- 3. Dye
- 4. Cloth

Question ID : 630680416729  
Option 1 ID : 6306801625681  
Option 2 ID : 6306801625680  
Option 3 ID : 6306801625679  
Option 4 ID : 6306801625682  
Status : Answered  
Chosen Option : 4

Q.20 16 is related to 112 following a certain logic. Following the same logic, 26 is related to 182. To which of the following is 44 related, following the same logic?

(NOTE: Operations should be performed on the whole numbers, without breaking down the numbers into its constituent digits. E.g. 13 – Operations on 13 such as adding /deleting /multiplying etc. to 13 can be performed. Breaking down 13 into 1 and 3 and then performing mathematical operations on 1 and 3 is not allowed)

- Ans
- 1. 310
  - 2. 302
  - 3. 308
  - 4. 312

Question ID : 630680344650  
Option 1 ID : 6306801340911  
Option 2 ID : 6306801340909  
Option 3 ID : 6306801340910  
Option 4 ID : 6306801340912  
Status : Answered  
Chosen Option : 3

Q.21 8 is related to 512 following a certain logic. Following the same logic, 12 is related to 1728. To which of the following is 15 related, following the same logic?

(NOTE: Operations should be performed on the whole numbers, without breaking down the numbers into its constituent digits. E.g. 13 – Operations on 13 such as adding /deleting /multiplying etc. to 13 can be performed. Breaking down 13 into 1 and 3 and then performing mathematical operations on 1 and 3 is not allowed)

- Ans
- 1. 3375
  - 2. 2725
  - 3. 3735
  - 4. 2275

Question ID : 630680344657  
Option 1 ID : 6306801340940  
Option 2 ID : 6306801340938  
Option 3 ID : 6306801340939  
Option 4 ID : 6306801340937  
Status : Answered  
Chosen Option : 1

Q.22 What will come in place of the question mark (?) in the following equation, if '+' and '-' are interchanged and 'x' and '÷' are interchanged?  
 $14014 \times 14 - 10 \div 8 + 14 = ?$

- Ans
- 1. 1062
  - 2. 1063
  - 3. 1067
  - 4. 1064

Question ID : 630680411731  
Option 1 ID : 6306801605759  
Option 2 ID : 6306801605760  
Option 3 ID : 6306801605762  
Option 4 ID : 6306801605761  
Status : Answered  
Chosen Option : 3

Q.23 Which figure should replace the question mark (?) if the following series were to be continued?

☆	D	2	+	D	N	+	☆	
	N	2	☆	8	2	+	D	8
+		8	D	N	☆	8	N	2
								?

Ans

✓ 1.

N	2
	+ ☆
D	8

✗ 2.

2	N
	☆ +
D	8

✗ 3.

2	N
	+ ☆
8	D

✗ 4.

D	2
	N ☆
+	8

Question ID : 630680214432

Option 1 ID : 630680831760

Option 2 ID : 630680831759

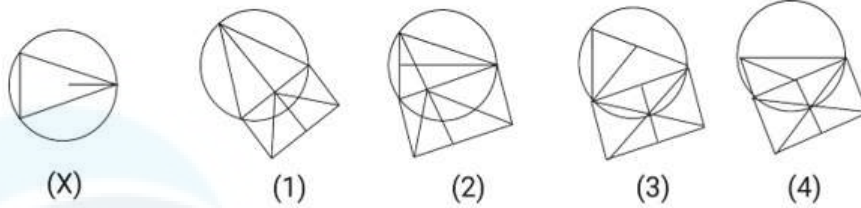
Option 3 ID : 630680831761

Option 4 ID : 630680831762

Status : Answered

Chosen Option : 1

Q.24 Figure X is followed by four figures numbered (1), (2), (3), (4). Identify the figure among the four in which figure X is embedded (i.e. contains figure X in the same form).



- Ans  1. 2  
 2. 3  
 3. 4  
 4. 1

Question ID : 630680388184  
Option 1 ID : 6306801513299  
Option 2 ID : 6306801513300  
Option 3 ID : 6306801513301  
Option 4 ID : 6306801513298  
Status : Answered  
Chosen Option : 1

Q.25 In a certain code language, 'DEMAND' is written as '410132144' and 'SUPPLY' is written as '194216161225'. How will 'PRODUCT' be written in that language?

- Ans  1. 161815421320  
 2. 161830442320  
 3. 323615821640  
 4. 161542320

Question ID : 630680416226  
Option 1 ID : 6306801623669  
Option 2 ID : 6306801623670  
Option 3 ID : 6306801623667  
Option 4 ID : 6306801623668  
Status : Answered  
Chosen Option : 2

Section : General Awareness

Q.1 Consider the following statements associated with the India Infrastructure Project Development Fund (IIPDF).  
1. IIPDF was set up in 2017.  
2. The funds for IIPDF are provided by the Central Government?  
3. This scheme is notified under the Department of Economic Affairs.  
Which of the above statements is/are INCORRECT?

- Ans  1. Only 1 and 2  
 2. Only 1  
 3. Only 2 and 3  
 4. Only 3

Question ID : 630680319748  
Option 1 ID : 6306801243898  
Option 2 ID : 6306801243900  
Option 3 ID : 6306801243899  
Option 4 ID : 6306801243897  
Status : Marked For Review  
Chosen Option : 4

**Q.2 Which party formed the government in Britain in the year 1945?**

- Ans**  1. Labour Party  
 2. Socialist Party  
 3. Democratic Party  
 4. Liberal Party

Question ID : 630680511553  
Option 1 ID : 6306801999337  
Option 2 ID : 6306801999335  
Option 3 ID : 6306801999334  
Option 4 ID : 6306801999336  
Status : Answered  
Chosen Option : 1

**Q.3 Which type of radiation has very short ( $<10^{-3}$  nm) wavelengths, produced by nuclear explosions, lightning and less dramatic activity of radioactive decay?**

- Ans**  1. Microwave  
 2. Infra-red  
 3. Ultraviolet  
 4. Gamma

Question ID : 630680302889  
Option 1 ID : 6306801178221  
Option 2 ID : 6306801178218  
Option 3 ID : 6306801178219  
Option 4 ID : 6306801178220  
Status : Answered  
Chosen Option : 4

**Q.4 Bharatanatyam dance style is associated with which of the following states?**

- Ans**  1. Karnataka  
 2. Tamil Nadu  
 3. Bihar  
 4. Manipur

Question ID : 630680402014  
Option 1 ID : 6306801567768  
Option 2 ID : 6306801567766  
Option 3 ID : 6306801567767  
Option 4 ID : 6306801567769  
Status : Answered  
Chosen Option : 2

**Q.5 Which Indian marathon event is considered the largest marathon in Asia?**

- Ans**  1. Kaveri Trail Marathon  
 2. Mumbai Marathon  
 3. Delhi Half Marathon  
 4. Pinkathon

Question ID : 630680510759  
Option 1 ID : 6306801996167  
Option 2 ID : 6306801996166  
Option 3 ID : 6306801996168  
Option 4 ID : 6306801996169  
Status : Not Answered  
Chosen Option : --

**Q.6** Which of the following organisations, divided into two branches, was established by Lokmanya Bal Gangadhar Tilak and Annie Besant?

- Ans  1. Theosophical society  
 2. Home Rule League  
 3. East Indian Association  
 4. Indian Association

Question ID : 630680412384  
Option 1 ID : 6306801608362  
Option 2 ID : 6306801608359  
Option 3 ID : 6306801608360  
Option 4 ID : 6306801608361  
Status : Answered  
Chosen Option : 2

**Q.7** Consider the following statements and choose the correct statement(s) from the following:

1. The UDAN scheme has completed five years since its implementation in 2017.
2. It is the flagship scheme of the Ministry of Science and Technology.
3. The Airports Authority of India is the implementing agency of this scheme.

- Ans  1. Only statement 2  
 2. Only statements 1 and 3  
 3. Only statements 2 and 3  
 4. Only statement 3

Question ID : 630680195343  
Option 1 ID : 630680757844  
Option 2 ID : 630680757842  
Option 3 ID : 630680757841  
Option 4 ID : 630680757843  
Status : Not Answered  
Chosen Option : --

**Q.8** In which of the following years did India NOT host the ICC Cricket World Cup Tournament?

- Ans  1. 1996  
 2. 1983  
 3. 1987  
 4. 2011

Question ID : 630680510794  
Option 1 ID : 6306801996308  
Option 2 ID : 6306801996306  
Option 3 ID : 6306801996307  
Option 4 ID : 6306801996309  
Status : Answered  
Chosen Option : 3

**Q.9 Ebony and Mahogany trees are found in which type of forests?**

- Ans**  1. Montane forests  
 2. Mangrove forests  
 3. Tropical evergreen forests  
 4. Tropical deciduous forests

Question ID : 630680328136  
Option 1 ID : 6306801276514  
Option 2 ID : 6306801276513  
Option 3 ID : 6306801276515  
Option 4 ID : 6306801276516  
Status : Answered  
Chosen Option : 3

**Q.10 Who among the following was one of the Navratnas of Akbar?**

- Ans**  1. Amir Khusro  
 2. Purandar Das  
 3. Swami Haridas  
 4. Tansen

Question ID : 630680512249  
Option 1 ID : 6306802001967  
Option 2 ID : 6306802001968  
Option 3 ID : 6306802001969  
Option 4 ID : 6306802001966  
Status : Answered  
Chosen Option : 4

**Q.11 In which year was the PM Ayushman Bharat Health Infrastructure Mission launched?**

- Ans**  1. 2022  
 2. 2020  
 3. 2023  
 4. 2021

Question ID : 630680394654  
Option 1 ID : 6306801538904  
Option 2 ID : 6306801538902  
Option 3 ID : 6306801538905  
Option 4 ID : 6306801538903  
Status : Answered  
Chosen Option : 3

**Q.12 When was the Duty-Free Tariff Preference (DFTP) Scheme for Least Developed Countries (LDCs) announced by India?**

- Ans**  1. 2006  
 2. 2009  
 3. 2010  
 4. 2008

Question ID : 6306801048056  
Option 1 ID : 6306804114270  
Option 2 ID : 6306804114271  
Option 3 ID : 6306804114272  
Option 4 ID : 6306804114273  
Status : Not Answered  
Chosen Option : --

Q.13 Which of the following options is mostly caused by overpopulation?

- Ans  1. Reduction in the scarcity of water  
 2. Land and other renewable resources are under pressure  
 3. Increase in the area covered by forests  
 4. Adequate natural resource storage

Question ID : 630680314144  
Option 1 ID : 6306801222381  
Option 2 ID : 6306801222384  
Option 3 ID : 6306801222382  
Option 4 ID : 6306801222383  
Status : Answered  
Chosen Option : 2

Q.14 On which of the following dates does India celebrate its Constitution Day?

- Ans  1. 15<sup>th</sup> August  
 2. 2<sup>th</sup> October  
 3. 26<sup>th</sup> November  
 4. 26<sup>th</sup> January

Question ID : 630680329439  
Option 1 ID : 6306801281497  
Option 2 ID : 6306801281500  
Option 3 ID : 6306801281499  
Option 4 ID : 6306801281498  
Status : Answered  
Chosen Option : 3

Q.15 Match the following books with their respective authors.

Book	Author
a) Tajul Ma'asir	i) Yahya bin Ahmad Sirhimdi
b) Khazain-ul Futuh	ii) Hasan Nizami
c) Tarikh-i-Firuzshahi	iii) Ziauddin Barani
d) Tarikh-i-Mubarakshahi	iv) Amir Khusrav

- Ans  1. a-i; b-iii; c-ii; d-iv  
 2. a-iii; b-i; c-iv; d-ii  
 3. a-ii; b-iv; c-iii; d-i  
 4. a-iv; b-iii; c-i; d-ii

Question ID : 630680412338  
Option 1 ID : 6306801608175  
Option 2 ID : 6306801608178  
Option 3 ID : 6306801608176  
Option 4 ID : 6306801608177  
Status : Answered  
Chosen Option : 3

Q.16 Which of the following pairs do NOT share any borders?

- Ans  1. Bhutan and West Bengal  
 2. Bhutan and Meghalaya  
 3. Bhutan and Arunachal Pradesh  
 4. Bhutan and Assam

Question ID : 630680409600  
Option 1 ID : 6306801597229  
Option 2 ID : 6306801597231  
Option 3 ID : 6306801597232  
Option 4 ID : 6306801597230  
Status : Answered  
Chosen Option : 3

Q.17 Palladium on barium sulphate ( $\text{Pd}/\text{BaSO}_4$ ) is also known as:

- Ans  1. an aldol reaction catalyst  
 2. a Cannizzaro reaction catalyst  
 3. the Rosenmund catalyst  
 4. a Hillman reaction catalyst

Question ID : 630680199619  
Option 1 ID : 630680774086  
Option 2 ID : 630680774084  
Option 3 ID : 630680774083  
Option 4 ID : 630680774085  
Status : Not Answered  
Chosen Option : --

Q.18 Which of the following types of direct tax collection increased as of 10 February 2023 budget?

- Ans  1. Octroi duties  
 2. Personal income tax  
 3. Commercial tax  
 4. Corporate tax

Question ID : 630680314402  
Option 1 ID : 6306801223411  
Option 2 ID : 6306801223410  
Option 3 ID : 6306801223412  
Option 4 ID : 6306801223409  
Status : Answered  
Chosen Option : 4

Q.19 Which Ghazal singer was conferred with the prestigious Deenanath Mangeshkar Award in April 2023?

- Ans  1. Ghazal Srinivas  
 2. Pankaj Udhas  
 3. Bhupinder Singh  
 4. Talat Aziz

Question ID : 630680511804  
Option 1 ID : 6306802000189  
Option 2 ID : 6306802000186  
Option 3 ID : 6306802000188  
Option 4 ID : 6306802000187  
Status : Answered  
Chosen Option : 2

Q.20 What kind of radiation is absorbed by the ozone layer?

- Ans
- 1. Infrared radiation
  - 2. Visible radiation
  - 3. Green radiation
  - 4. Ultraviolet radiation

Question ID : 630680303274  
Option 1 ID : 6306801179750  
Option 2 ID : 6306801179753  
Option 3 ID : 6306801179752  
Option 4 ID : 6306801179751  
Status : Answered  
Chosen Option : 4

Q.21 The organisation that Comptroller and Auditor General heads is known as \_\_\_\_\_.

- Ans
- 1. Indian Civil Accounts Organisation
  - 2. Indian Audit and Accounts Department
  - 3. Controller General of Accounts
  - 4. Institute of Chartered Accountants of India

Question ID : 630680161104  
Option 1 ID : 630680623781  
Option 2 ID : 630680623782  
Option 3 ID : 630680623783  
Option 4 ID : 630680623780  
Status : Answered  
Chosen Option : 2

Q.22 Which of the following categories does Gonyaulax belong to?

- Ans
- 1. Chrysophytes
  - 2. Dinoflagellates
  - 3. Euglenoids
  - 4. Protozoans

Question ID : 63068099109  
Option 1 ID : 630680385140  
Option 2 ID : 630680385143  
Option 3 ID : 630680385141  
Option 4 ID : 630680385142  
Status : Not Answered  
Chosen Option : --

Q.23 Valabhi, a city of ancient India was the capital of the \_\_\_\_\_ dynasty from the 5th to 8th Century CE.

- Ans
- 1. Chalukya
  - 2. Maitraka
  - 3. Vakataka
  - 4. Pallava

Question ID : 630680412475  
Option 1 ID : 6306801608726  
Option 2 ID : 6306801608725  
Option 3 ID : 6306801608724  
Option 4 ID : 6306801608723  
Status : Answered  
Chosen Option : 1

**Q.24** Who has written the book 'Fearless Governance', published in January 2021, describing her stint as Governor?

- Ans**  1. Draupadi Murmu  
 2. Kiran Bedi  
 3. Anandi ben Patel  
 4. Baby Rani Maurya

Question ID : 630680394951  
Option 1 ID : 6306801540073  
Option 2 ID : 6306801540072  
Option 3 ID : 6306801540075  
Option 4 ID : 6306801540074  
Status : Answered  
Chosen Option : 2

**Q.25** Shab-e-Barat is celebrated by which religious group?

- Ans**  1. Buddhist  
 2. Muslim  
 3. Jain  
 4. Parsi

Question ID : 630680158769  
Option 1 ID : 630680614568  
Option 2 ID : 630680614571  
Option 3 ID : 630680614570  
Option 4 ID : 630680614569  
Status : Answered  
Chosen Option : 2

Section : Quantitative Aptitude

**Q.1** In a rhombus ABCD, O is any interior point such that  $OA = OC$ . What is five-ninths of the degree measure of  $\angle DOB$ ?

- Ans**  1.  $150^\circ$   
 2.  $100^\circ$   
 3.  $90^\circ$   
 4.  $120^\circ$

Question ID : 630680387087  
Option 1 ID : 6306801509060  
Option 2 ID : 6306801509058  
Option 3 ID : 6306801509059  
Option 4 ID : 6306801509061  
Status : Answered  
Chosen Option : 2

Q.2 A group of 30 students appeared in a test. The average score of 12 students is 62, and that of the rest is 62. What is the average score of the group?

- Ans
- 1. 60
  - 2. 63
  - 3. 62
  - 4. 61

Question ID : 630680566256  
Option 1 ID : 6306802214015  
Option 2 ID : 6306802214014  
Option 3 ID : 6306802214012  
Option 4 ID : 6306802214013  
Status : Answered  
Chosen Option : 3

Q.3 A dishonest merchant sells his grocery using weights that are 12% less than the true weights and makes a profit of 10%. Find his total gain percentage.

- Ans
- 1. 15%
  - 2. 20%
  - 3. 10%
  - 4. 25%

Question ID : 630680429072  
Option 1 ID : 6306801674333  
Option 2 ID : 6306801674334  
Option 3 ID : 6306801674332  
Option 4 ID : 6306801674335  
Status : Answered  
Chosen Option : 4

Q.4 If the perimeter of an equilateral triangle is 36 units, then its area is (in square units):

- Ans
- 1.  $144\sqrt{2}$
  - 2.  $36\sqrt{3}$
  - 3.  $36\sqrt{2}$
  - 4.  $144\sqrt{3}$

Question ID : 630680421359  
Option 1 ID : 6306801643900  
Option 2 ID : 6306801643901  
Option 3 ID : 6306801643902  
Option 4 ID : 6306801643899  
Status : Answered  
Chosen Option : 2

Q.5

Find the value of  $\frac{\sec 35^\circ}{\operatorname{cosec} 55^\circ} - \frac{\cos 25^\circ}{\sin 65^\circ}$ .

- Ans
- 1. 2
  - 2. 0
  - 3. 1
  - 4.  $\frac{1}{2}$

Question ID : 630680526445  
Option 1 ID : 6306802057849  
Option 2 ID : 6306802057848  
Option 3 ID : 6306802057847  
Option 4 ID : 6306802057846  
Status : Answered  
Chosen Option : 2

Q.6 If  $x + \frac{1}{x} = 2\sqrt{10}$ , where  $x > 1$ , then the value of  $(x^3 - \frac{1}{x^3})$  is:

- Ans
- 1. 198
  - 2. 234
  - 3. 216
  - 4. 221

Question ID : 630680413505  
Option 1 ID : 6306801612846  
Option 2 ID : 6306801612844  
Option 3 ID : 6306801612847  
Option 4 ID : 6306801612845  
Status : Answered  
Chosen Option : 2

Q.7 If  $a\sin^3 X + b\cos^3 X = \sin X \cos X$  and  $a\sin X = b\cos X$ , then find the value of  $a^2 + b^2$ , provided that  $x$  is neither  $0^\circ$  nor  $90^\circ$ .

- Ans
- 1.  $a^2 - b^2$
  - 2. 1
  - 3. 0
  - 4.  $a^2 + b^2$

Question ID : 630680354950  
Option 1 ID : 6306801381876  
Option 2 ID : 6306801381874  
Option 3 ID : 6306801381873  
Option 4 ID : 6306801381875  
Status : Answered  
Chosen Option : 2

**Q.8** Find the smallest number to be added to 999, so that 99 divides the sum exactly.

**Ans** ✓ 1. 90

✗ 2. 0

✗ 3. 9

✗ 4. 99

Question ID : 630680108185

Option 1 ID : 630680419806

Option 2 ID : 630680419807

Option 3 ID : 630680419804

Option 4 ID : 630680419805

Status : Answered

Chosen Option : 1

**Q.9** The interest accrued on a sum of ₹16,000 lent at a simple interest rate of 14% p.a. for the time in those many years, which gives a simple interest of three-fifths of a certain sum at 10% p.a., is:

**Ans** ✓ 1. ₹13,440

✗ 2. ₹15,360

✗ 3. ₹14,280

✗ 4. ₹12,970

Question ID : 630680392970

Option 1 ID : 6306801532215

Option 2 ID : 6306801532214

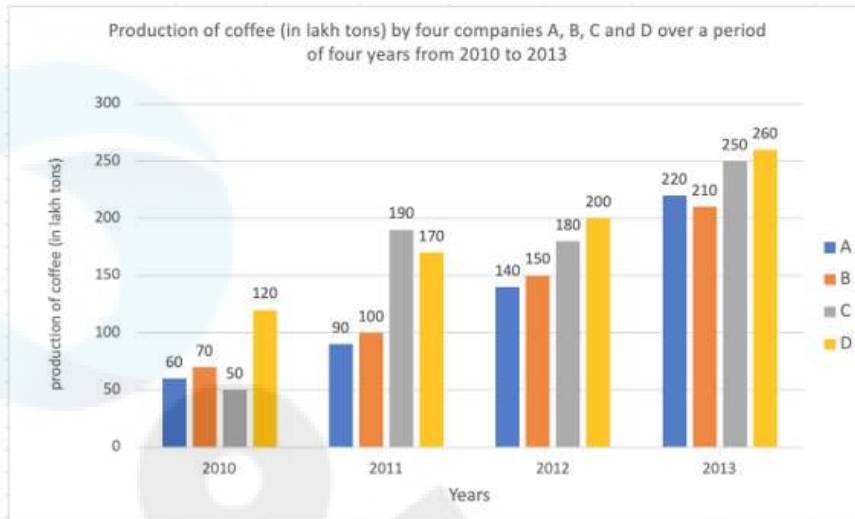
Option 3 ID : 6306801532217

Option 4 ID : 6306801532216

Status : Answered

Chosen Option : 1

**Q.10** The bar graph below shows the production of coffee (in lakh tons) by four companies A, B, C and D over a period of four years from 2010 to 2013. Study the graph and answer the question that follows.



The combined average production for four years of companies A and C is what percentage (rounded off to 2 decimal places) more/less than the combined average production for four years of companies B and D?

- Ans
- 1. More, 10.51%
  - 2. Less, 10.51%
  - 3. More, 7.81%
  - 4. Less, 7.81%

Question ID : 630680387062

Option 1 ID : 6306801508958

Option 2 ID : 6306801508961

Option 3 ID : 6306801508960

Option 4 ID : 6306801508959

Status : Not Attempted and Marked For Review

Chosen Option : --

**Q.11** In a circle, two chords MN and PQ intersect at O. If MO = 9 cm, ON = 5 cm and OQ = 6 cm, then the value of OP (in cm) is:

- Ans
- 1. 6.5
  - 2. 6
  - 3. 7
  - 4. 7.5

Question ID : 630680397551

Option 1 ID : 6306801550123

Option 2 ID : 6306801550122

Option 3 ID : 6306801550124

Option 4 ID : 6306801550125

Status : Answered

Chosen Option : 4

**Q.12** A rectangular courtyard is 4m 95cm long and 16m 65cm broad. It is to be paved with the square tiles of the same size. Find the least number of such square tiles required to pave the rectangular courtyard.

**Ans** ✓ 1. 407

✗ 2. 388

✗ 3. 877

✗ 4. 944

Question ID : 630680421536

Option 1 ID : 6306801644608

Option 2 ID : 6306801644607

Option 3 ID : 6306801644609

Option 4 ID : 6306801644610

Status : Answered

Chosen Option : 4

**Q.13** In an election between two candidates P and Q, P got 78% of the total valid votes. If the total votes of the electorate were 75,60,000, then what was the number of valid votes that Q got if 10% of the voters did not cast their vote and 15% of the votes polled were declared invalid?

**Ans** ✓ 1. 12,72,348

✗ 2. 1,47,312

✗ 3. 1,41,732

✗ 4. 1,41,372

Question ID : 630680427952

Option 1 ID : 6306801669854

Option 2 ID : 6306801669852

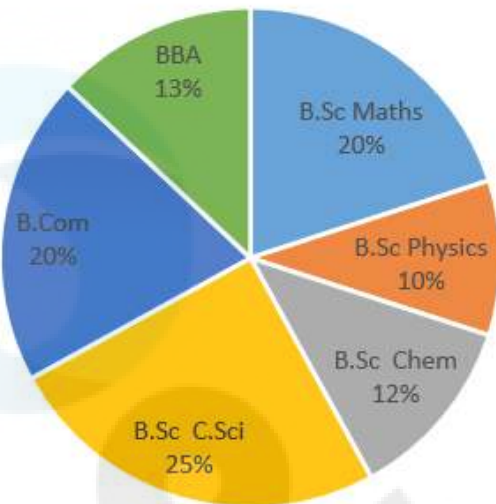
Option 3 ID : 6306801669855

Option 4 ID : 6306801669853

Status : Answered

Chosen Option : 1

Q.14 The following pie chart shows the distribution of the percentage of students in various courses at the university. The total number of students (boys and girls only) in the university is 7000.



In B.Com, there are 60% girls and in B.Sc. C.Sci, there are 40% boys. The total number of girls who took admission in B.Sc C.Sci and B.Com courses is what percentage of the total students admitted to the university?

- Ans
- 1. 25%
  - 2. 27%
  - 3. 29%
  - 4. 23%

Question ID : 630680422123  
 Option 1 ID : 6306801646928  
 Option 2 ID : 6306801646929  
 Option 3 ID : 6306801646930  
 Option 4 ID : 6306801646927  
 Status : Answered  
 Chosen Option : 2

Q. In a  $\triangle ABC$  right-angled at C, if  $\tan A = \sqrt{3}$ , then the value of  $\sin A \cos B \cot(A + B)$  is:

- Ans
- 1. 1
  - 2. 2
  - 3. 0
  - 4.  $\sqrt{3}$

Question ID : 630680396995  
 Option 1 ID : 6306801548037  
 Option 2 ID : 6306801548039  
 Option 3 ID : 6306801548036  
 Option 4 ID : 6306801548038  
 Status : Answered  
 Chosen Option : 3

Q.16 Solve the given set of three equations to get the value of the unknowns:

$$\begin{aligned}x + 2z &= 3 \\x + 2y + 3z &= 5 \\3x - 5z &= -13\end{aligned}$$

- Ans
- 1.  $x = 0, y = -1, z = 2$
  - 2.  $x = 2, y = 0, z = -1$
  - 3.  $x = -1, y = 0, z = 2$
  - 4.  $x = -1, y = 2, z = 0$

Question ID : 630680285560

Option 1 ID : 6306801110209

Option 2 ID : 6306801110207

Option 3 ID : 6306801110208

Option 4 ID : 6306801110210

Status : Answered

Chosen Option : 3

Q.17 There are two pipes to fill a tank. Together, they can fill the tank in 15 minutes. If one pipe can fill the tank in one and a half times as fast as the other, the faster pipe alone can fill the tank in:

- Ans
- 1. 10 minutes
  - 2. 20 minutes
  - 3. 25 minutes
  - 4.  $32\frac{1}{2}$  minutes

Question ID : 6306801047985

Option 1 ID : 6306804113982

Option 2 ID : 6306804113983

Option 3 ID : 6306804113984

Option 4 ID : 6306804113985

Status : Not Answered

Chosen Option : --

Q.18 A shopkeeper, on the eve of Diwali, allowed a series of discounts on television sets. Find the selling price of a television set, if the marked price of television is ₹1,200 and successive discounts are 15% and 10%.

- Ans
- 1. ₹945
  - 2. ₹975
  - 3. ₹918
  - 4. ₹965

Question ID : 630680178722

Option 1 ID : 630680692981

Option 2 ID : 630680692983

Option 3 ID : 630680692980

Option 4 ID : 630680692982

Status : Answered

Chosen Option : 3

**Q.19** Study the given table and answer the question that follows.

The given table shows the number of candidates who appeared (both male and female) in a Public Examination and the percentage of those who qualified in the examination from two states X and Z. Few values are missing in the table (indicated by -----). You will be required to fill them up according to the question.

Year	State X		State Z	
	Number of appeared candidates	Percentage of qualified candidates	Number of appeared candidates	Percentage of qualified candidates
2008	480	70%	-----	70%
2009	560	75%	500	80%
2010	-----	60%	650	50%
2011	450	89%	720	72%
2012	790	-----	660	-----

Out of the number of qualified candidates from State X in 2010, the ratio of male to female candidates is 5 : 7. If the number of female qualified candidates from State X in 2010 is 168, what is the number of appeared candidates (both male and female) from State X in 2010?

Ans  1. 480

2. 640

3. 540

4. 360

Question ID : 630680523743

Option 1 ID : 6306802047125

Option 2 ID : 6306802047124

Option 3 ID : 6306802047123

Option 4 ID : 6306802047126

Status : Not Answered

Chosen Option : --

**Q.20** Mrudula starts her job with a certain monthly salary and earns a fixed increment every year. If her salary was ₹28,400 after six years of service and ₹52,997 after fifteen years, find her annual increment.

Ans  1. ₹1,824

2. ₹12,002

3. ₹1,200

4. ₹2,733

Question ID : 630680382687

Option 1 ID : 6306801491666

Option 2 ID : 6306801491663

Option 3 ID : 6306801491664

Option 4 ID : 6306801491665

Status : Answered

Chosen Option : 4

**Q.21** The below table gives the marks out of 100 obtained by five students in four different subjects in an examination. Study the table and answer the question that follows.

Student/subject	Mathematics	Physics	Biology	English
Suresh	70	80	65	60
Ramesh	85	70	70	55
Ankith	90	80	60	65
Ranjith	95	70	65	60
Aryan	75	65	65	70

What are the average marks obtained by all five students in Mathematics?

- Ans**
- 1. 85
  - 2. 83
  - 3. 84
  - 4. 80

Question ID : 630680428116  
Option 1 ID : 6306801670509  
Option 2 ID : 6306801670508  
Option 3 ID : 6306801670511  
Option 4 ID : 6306801670510  
Status : Answered  
Chosen Option : 2

**Q.22** The inner and outer radii of a circular track are 28 m and 25 m, respectively. The cost (in ₹) of levelling the track at ₹28 per m<sup>2</sup> is:

[Use  $\pi = \frac{22}{7}$ ]

- Ans**
- 1. 17,355
  - 2. 13,992
  - 3. 15,421
  - 4. 11,229

Question ID : 630680358045  
Option 1 ID : 6306801394169  
Option 2 ID : 6306801394171  
Option 3 ID : 6306801394170  
Option 4 ID : 6306801394172  
Status : Answered  
Chosen Option : 2

**Q.23** In a division problem, the divisor is 4 times the quotient and 2 times the remainder. If the remainder is 32, then find the dividend.

- Ans**
- 1. 1065
  - 2. 3240
  - 3. 1650
  - 4. 1056

Question ID : 630680108754  
Option 1 ID : 630680421929  
Option 2 ID : 630680421930  
Option 3 ID : 630680421931  
Option 4 ID : 630680421928  
Status : Answered  
Chosen Option : 4

**Q.24** Atul gives Vishu a head-start of 20 seconds in a 900 m race and beats him by 135 m. While running the same race again Atul gives a start of 189 m and beats him by 8 seconds. In how much time can Vishu complete the full race of 900 m?

- Ans**
- 1. 2 minutes 50 seconds
  - 2. 3 minutes 20 seconds
  - 3. 3 minutes 10 seconds
  - 4. 3 minutes 30 seconds

Question ID : 630680428186  
Option 1 ID : 6306801670788  
Option 2 ID : 6306801670790  
Option 3 ID : 6306801670789  
Option 4 ID : 6306801670791  
Status : Not Answered  
Chosen Option : --

**Q.25** A sum of money is divided among P, Q, R and S in the proportion of 4 : 9 : 2 : 3. If Q gets ₹560 more than R, then the share of S is:

- Ans**
- 1. ₹140
  - 2. ₹340
  - 3. ₹440
  - 4. ₹240

Question ID : 630680455637  
Option 1 ID : 6306801779462  
Option 2 ID : 6306801779464  
Option 3 ID : 6306801779465  
Option 4 ID : 6306801779463  
Status : Answered  
Chosen Option : 4

Section : English Comprehension

**Q.1** Select the option that correctly expresses the given sentence in passive voice.  
The teachers of our school have already taken this training.

- Ans**
- 1. This training has already been taken by the teachers of our school.
  - 2. This training has already been taken by the our school teachers.
  - 3. This training was already taken by the teachers of our school.
  - 4. This training has been taken by the teachers of our school.

Question ID : 630680317877  
Option 1 ID : 6306801236600  
Option 2 ID : 6306801236599  
Option 3 ID : 6306801236598  
Option 4 ID : 6306801236597  
Status : Answered  
Chosen Option : 1

**Q.2** Select the option that can be used as a one-word substitute for the given group of words.

Awkward in movement or manner

- Ans
- 1. Clownish
  - 2. Alert
  - 3. Imbalanced
  - 4. Clumsy

Question ID : 630680158478  
Option 1 ID : 630680613438  
Option 2 ID : 630680613436  
Option 3 ID : 630680613439  
Option 4 ID : 630680613437  
Status : Answered  
Chosen Option : 4

**Q.3** Select the most appropriate ANTONYM of the underlined word.

He was very cruel in dealing with the students.

- Ans
- 1. Skittish
  - 2. Malevolent
  - 3. Kind
  - 4. Kingly

Question ID : 630680517533  
Option 1 ID : 6306802022530  
Option 2 ID : 6306802022528  
Option 3 ID : 6306802022529  
Option 4 ID : 6306802022531  
Status : Answered  
Chosen Option : 3

**Q.4** The following sentence contains a word with a spelling error. Rectify the sentence by selecting the correct spelling of the identified word from the given options.

I was upstaires when somebody rang the doorbell.

- Ans
- 1. Upstares
  - 2. Upstairs
  - 3. upsatires
  - 4. Upstaire

Question ID : 630680360840  
Option 1 ID : 6306801405236  
Option 2 ID : 6306801405233  
Option 3 ID : 6306801405235  
Option 4 ID : 6306801405234  
Status : Answered  
Chosen Option : 2

**Q.5** Parts of a sentence are given below in jumbled order. Arrange the parts in the correct order to form a meaningful sentence.

- (A) while the employees
- (B) meeting on time
- (C) the boss arrived at the
- (D) despite the heavy traffic
- (E) were late

Ans  1. BACED

2. DCBAE

3. DACEB

4. ACEDB

Question ID : 630680360060

Option 1 ID : 6306801402187

Option 2 ID : 6306801402185

Option 3 ID : 6306801402188

Option 4 ID : 6306801402186

Status : Answered

Chosen Option : 2

**Q.6** Select the option that can be used as a one-word substitute for the given group of words.

An instrument for viewing distant objects in space.

Ans  1. Telescope

2. Spectrograph

3. Microscope

4. Binoculars

Question ID : 630680129694

Option 1 ID : 630680502385

Option 2 ID : 630680502384

Option 3 ID : 630680502383

Option 4 ID : 630680502382

Status : Answered

Chosen Option : 1

**Q.7** Parts of a sentence are given below in jumbled order. Arrange the parts in the correct order to form a meaningful sentence.

- (A) he had to take the bus
- (B) his friend, who used to give
- (C) to his office because he had
- (D) him a lift, was on vacation
- (E) never learned to drive and

Ans  1. EBADC

2. ACEBD

3. DACEB

4. BADEC

Question ID : 630680360061

Option 1 ID : 6306801402189

Option 2 ID : 6306801402192

Option 3 ID : 6306801402191

Option 4 ID : 6306801402190

Status : Not Answered

Chosen Option : --

**Q.8** Select the most appropriate synonym of the underlined word.  
She was overstrung before her dance performance.

- Ans
- 1. Placid
  - 2. Calm
  - 3. Cheerful
  - 4. Nervous

Question ID : 630680204387  
Option 1 ID : 630680792631  
Option 2 ID : 630680792633  
Option 3 ID : 630680792634  
Option 4 ID : 630680792632  
Status : Answered  
Chosen Option : 4

**Q.9** Select the most appropriate ANTONYM of the following word.

**Forbid**

- Ans
- 1. Call
  - 2. Allow
  - 3. Prohibit
  - 4. Forsake

Question ID : 630680396792  
Option 1 ID : 6306801547255  
Option 2 ID : 6306801547253  
Option 3 ID : 6306801547252  
Option 4 ID : 6306801547254  
Status : Answered  
Chosen Option : 2

**Q.10** Substitute the underlined word-segment with most appropriate idiom.

The doctors tried very hard to save his mother but they were unsuccessful.

- Ans
- 1. faced the music
  - 2. drew the line
  - 3. moved heaven and earth
  - 4. ran like clockwork

Question ID : 630680123853  
Option 1 ID : 630680480282  
Option 2 ID : 630680480284  
Option 3 ID : 630680480283  
Option 4 ID : 630680480285  
Status : Answered  
Chosen Option : 3

**Q.11** Select the option that expresses the following sentence in passive voice.  
Ravi will play the match.

- Ans**  1. The match is played by Ravi.  
 2. The match will have been played by Ravi.  
 3. The match will be playing by Ravi.  
 4. The match will be played by Ravi.

Question ID : 630680415246  
Option 1 ID : 6306801619732  
Option 2 ID : 6306801619734  
Option 3 ID : 6306801619733  
Option 4 ID : 6306801619731  
Status : Answered  
Chosen Option : 4

**Q.12** Parts of the following sentence have been given as options. Select the option that contains an error.  
It is he who work for the company for more than a decade.

- Ans**  1. for the company  
 2. for more than a decade  
 3. It is he  
 4. who work

Question ID : 630680514366  
Option 1 ID : 6306802010091  
Option 2 ID : 6306802010092  
Option 3 ID : 6306802010089  
Option 4 ID : 6306802010090  
Status : Answered  
Chosen Option : 3

**Q.13** Identify the correct synonym of the word given below.  
**FATIGUE**

- Ans**  1. Mission  
 2. Obese  
 3. Vigour  
 4. Tiredness

Question ID : 630680294226  
Option 1 ID : 6306801144653  
Option 2 ID : 6306801144652  
Option 3 ID : 6306801144655  
Option 4 ID : 6306801144654  
Status : Answered  
Chosen Option : 4

**Q.14** The following sentence has been split into four segments. Identify the segment that contains a grammatical error.  
The windows / violent banged / during the / storm yesterday.

- Ans**
- 1. The windows
  - 2. storm yesterday.
  - 3. during the
  - 4. violent banged

Question ID : 630680381369  
Option 1 ID : 6306801486427  
Option 2 ID : 6306801486430  
Option 3 ID : 6306801486429  
Option 4 ID : 6306801486428  
Status : Answered  
Chosen Option : 4

**Q.15** Select the most appropriate synonym of the given word.  
Adversity

- Ans**
- 1. Pleasure
  - 2. Misfortune
  - 3. Success
  - 4. Advantage

Question ID : 630680158914  
Option 1 ID : 630680615127  
Option 2 ID : 630680615126  
Option 3 ID : 630680615125  
Option 4 ID : 630680615124  
Status : Answered  
Chosen Option : 2

**Q.16** Select the most appropriate option that can substitute the underlined word in the given sentence.  
Our legal system must frame proper legal rules for juvenile criminals.

- Ans**
- 1. young
  - 2. dotage
  - 3. senile
  - 4. old

Question ID : 630680145481  
Option 1 ID : 630680562901  
Option 2 ID : 630680562898  
Option 3 ID : 630680562899  
Option 4 ID : 630680562900  
Status : Answered  
Chosen Option : 1

**Q.17** Select the option that can be used as a one-word substitute for the underlined group of words in the following sentence.  
Despite recent superficial moves toward political reconciliation, Libya remains in the grip of a bloodstained corrupt military exclusive circle of people with a common purpose.

- Ans
- 1. oblique
  - 2. pique
  - 3. antique
  - 4. clique

Question ID : 630680310039  
Option 1 ID : 6306801206304  
Option 2 ID : 6306801206301  
Option 3 ID : 6306801206303  
Option 4 ID : 6306801206302  
Status : Answered  
Chosen Option : 4

**Q.18** Identify the INCORRECTLY spelt word in the following sentence and select its correct spelling from the given options.  
His acquaintance with the author led to many fruitful collaborations.

- Ans
- 1. acuiantance
  - 2. acquaintance
  - 3. aquaintance
  - 4. acquaintence

Question ID : 630680409941  
Option 1 ID : 6306801598593  
Option 2 ID : 6306801598596  
Option 3 ID : 6306801598594  
Option 4 ID : 6306801598595  
Status : Answered  
Chosen Option : 2

**Q.19** Select the most appropriate option to substitute the underlined segment in the given sentence.

Charles Darwin is renowned for his book on evolution, 'On the Origin of Species', which laid down a treasure of substantiation that evolution occurs, and projected a mechanism, that is, natural selection, for how it does so.

- Ans
- 1. laid away a treasure of substantiation
  - 2. laid about a treasure of substantiation
  - 3. laid out a treasure of substantiation
  - 4. laid into a treasure of substantiation

Question ID : 630680176811  
Option 1 ID : 630680685456  
Option 2 ID : 630680685459  
Option 3 ID : 630680685457  
Option 4 ID : 630680685458  
Status : Answered  
Chosen Option : 3

**Q.20** Select the most appropriate meaning of the given idiom.

**Hit the nail on the head**

- Ans**
- 1. They hit a nail with a hammer.
  - 2. They are experiencing a headache.
  - 3. They're uncertain about a decision.
  - 4. They have accurately identified or explained something.

Question ID : 630680374408  
Option 1 ID : 6306801458815  
Option 2 ID : 6306801458818  
Option 3 ID : 6306801458816  
Option 4 ID : 6306801458817  
Status : Answered  
Chosen Option : 4

**Comprehension:**

In the following passage, some words have been deleted. Read the passage carefully and select the most appropriate option to fill in each blank.

Azadi Ka Amrit Mahotsav is an (1) \_\_\_\_\_ by the Government of India to celebrate and remember 75 years of independence and the beautiful history of its people, culture and achievements. This Mahotsav is (2) \_\_\_\_\_ to the people of India, who have not only been instrumental in bringing India this far in its evolutionary journey but also (3) \_\_\_\_\_ the power and potential to realise Prime Minister, Narendra Modi's (4) \_\_\_\_\_ of activating India 2.0, fuelled by the spirit of Aatmanirbhar Bharat. The formal journey of Azadi Ka Amrit Mahotsav began on 12 March 2021, beginning a (5) \_\_\_\_\_ to our 75th anniversary of independence and will finish a year later on 15 August 2023.

**SubQuestion No : 21**

**Q.21** Select the most appropriate answer for blank number 1.%

- Ans**
- 1. associate
  - 2. obligation
  - 3. initiative
  - 4. occult

Question ID : 630680147713  
Option 1 ID : 630680571585  
Option 2 ID : 630680571583  
Option 3 ID : 630680571584  
Option 4 ID : 630680571582  
Status : Answered  
Chosen Option : 3

**Comprehension:**

In the following passage, some words have been deleted. Read the passage carefully and select the most appropriate option to fill in each blank.

Azadi Ka Amrit Mahotsav is an (1) \_\_\_\_\_ by the Government of India to celebrate and remember 75 years of independence and the beautiful history of its people, culture and achievements. This Mahotsav is (2) \_\_\_\_\_ to the people of India, who have not only been instrumental in bringing India this far in its evolutionary journey but also (3) \_\_\_\_\_ the power and potential to realise Prime Minister, Narendra Modi's (4) \_\_\_\_\_ of activating India 2.0, fuelled by the spirit of Aatmanirbhar Bharat. The formal journey of Azadi Ka Amrit Mahotsav began on 12 March 2021, beginning a (5) \_\_\_\_\_ to our 75th anniversary of independence and will finish a year later on 15 August 2023.

**SubQuestion No : 22**

**Q.22 Select the most appropriate answer for blank number 2.%**

- Ans**  1. refused  
 2. dedicated  
 3. withhold  
 4. alienated

Question ID : 630680147714

Option 1 ID : 630680571587

Option 2 ID : 630680571586

Option 3 ID : 630680571589

Option 4 ID : 630680571588

Status : Answered

Chosen Option : 2

**Comprehension:**

In the following passage, some words have been deleted. Read the passage carefully and select the most appropriate option to fill in each blank.

Azadi Ka Amrit Mahotsav is an (1) \_\_\_\_\_ by the Government of India to celebrate and remember 75 years of independence and the beautiful history of its people, culture and achievements. This Mahotsav is (2) \_\_\_\_\_ to the people of India, who have not only been instrumental in bringing India this far in its evolutionary journey but also (3) \_\_\_\_\_ the power and potential to realise Prime Minister, Narendra Modi's (4) \_\_\_\_\_ of activating India 2.0, fuelled by the spirit of Aatmanirbhar Bharat. The formal journey of Azadi Ka Amrit Mahotsav began on 12 March 2021, beginning a (5) \_\_\_\_\_ to our 75th anniversary of independence and will finish a year later on 15 August 2023.

**SubQuestion No : 23**

**Q.23 Select the most appropriate answer for blank number 3.%**

- Ans**  1. concludes  
 2. possess  
 3. clarifies  
 4. obtains

Question ID : 630680147715

Option 1 ID : 630680571590

Option 2 ID : 630680571592

Option 3 ID : 630680571591

Option 4 ID : 630680571593

Status : Answered

Chosen Option : 2

**Comprehension:**

In the following passage, some words have been deleted. Read the passage carefully and select the most appropriate option to fill in each blank.

Azadi Ka Amrit Mahotsav is an (1) \_\_\_\_\_ by the Government of India to celebrate and remember 75 years of independence and the beautiful history of its people, culture and achievements. This Mahotsav is (2) \_\_\_\_\_ to the people of India, who have not only been instrumental in bringing India this far in its evolutionary journey but also (3) \_\_\_\_\_ the power and potential to realise Prime Minister, Narendra Modi's (4) \_\_\_\_\_ of activating India 2.0, fuelled by the spirit of Aatmanirbhar Bharat. The formal journey of Azadi Ka Amrit Mahotsav began on 12 March 2021, beginning a (5) \_\_\_\_\_ to our 75th anniversary of independence and will finish a year later on 15 August 2023.

**SubQuestion No : 24**

**Q.24 Select the most appropriate answer for blank number 4.%**

- Ans**  1. vision  
 2. design  
 3. control  
 4. graphics

Question ID : 630680147716

Option 1 ID : 630680571595

Option 2 ID : 630680571596

Option 3 ID : 630680571597

Option 4 ID : 630680571594

Status : Answered

Chosen Option : 1

**Comprehension:**

In the following passage, some words have been deleted. Read the passage carefully and select the most appropriate option to fill in each blank.

Azadi Ka Amrit Mahotsav is an (1) \_\_\_\_\_ by the Government of India to celebrate and remember 75 years of independence and the beautiful history of its people, culture and achievements. This Mahotsav is (2) \_\_\_\_\_ to the people of India, who have not only been instrumental in bringing India this far in its evolutionary journey but also (3) \_\_\_\_\_ the power and potential to realise Prime Minister, Narendra Modi's (4) \_\_\_\_\_ of activating India 2.0, fuelled by the spirit of Aatmanirbhar Bharat. The formal journey of Azadi Ka Amrit Mahotsav began on 12 March 2021, beginning a (5) \_\_\_\_\_ to our 75th anniversary of independence and will finish a year later on 15 August 2023.

**SubQuestion No : 25**

**Q.25 Select the most appropriate answer for blank number 5.%**

- Ans**  1. allocation  
 2. breakdown  
 3. countdown  
 4. custom

Question ID : 630680147717

Option 1 ID : 630680571598

Option 2 ID : 630680571600

Option 3 ID : 630680571601

Option 4 ID : 630680571599

Status : Answered

Chosen Option : 2