

Combined Graduate Level Examination 2024 Tier I

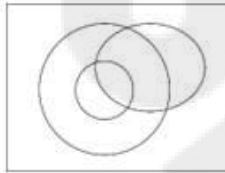
Roll Number	
Candidate Name	
Venue Name	
Exam Date	11/09/2024
Exam Time	4:00 PM - 5:00 PM
Subject	Combined Graduate Level Examination Tier I

Section : General Intelligence and Reasoning

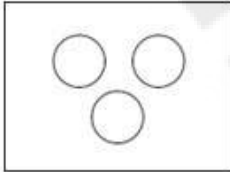
Q.1 Select the Venn diagram that best illustrates the relationship between the following classes.
Men, Engineers and Fathers

Ans

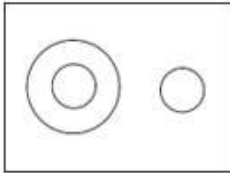
✓ 1.




✗ 2.



✗ 3.



✗ 4.



Question ID : 630680392636

Option 1 ID : 6306801530892

Option 2 ID : 6306801530890

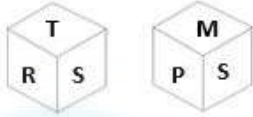
Option 3 ID : 6306801530893

Option 4 ID : 6306801530891

Status : Answered

Chosen Option : 1

Q.2 Two different positions of the same dice with faces R, P, T, S, M and B are shown below. Select the letter that will be on the face opposite to the one having S.



- Ans
- 1. M
 - 2. R
 - 3. T
 - 4. B

Question ID : 630680349070
Option 1 ID : 6306801358572
Option 2 ID : 6306801358570
Option 3 ID : 6306801358569
Option 4 ID : 6306801358571
Status : Answered
Chosen Option : 4

Q.3 Select the option that represents the letters that, when sequentially placed from left to right in the blanks below, will complete the letter series.
R F _ G T R _ V G _ R F V _ T _ F V G T

- Ans
- 1. V F V G R
 - 2. V T T G R
 - 3. V F T G R
 - 4. V F T G G

Question ID : 630680261796
Option 1 ID : 6306801016841
Option 2 ID : 6306801016840
Option 3 ID : 6306801016839
Option 4 ID : 6306801016842
Status : Answered
Chosen Option : 3

Q.4 In a certain code language, 'MAN' is coded as '15316' and 'SHE' is coded as '21107'.
How will 'OUT' be coded in that language?

- Ans
- 1. 152222
 - 2. 172121
 - 3. 172322
 - 4. 152120

Question ID : 630680172757
Option 1 ID : 630680669431
Option 2 ID : 630680669430
Option 3 ID : 630680669428
Option 4 ID : 630680669429
Status : Answered
Chosen Option : 3

Q.5 Select the word pair that best represents a similar relationship to the one expressed in the pair of words given below. (The words must be considered as meaningful English words and must not be related to each other based on the number of letters/number of consonants/vowels in the word)
Calcium : Osteomalacia

- Ans**
- 1. Lungs : Tuberculosis
 - 2. Iron : Anaemia
 - 3. Heart : Cardiovascular
 - 4. Stomach : Blindness

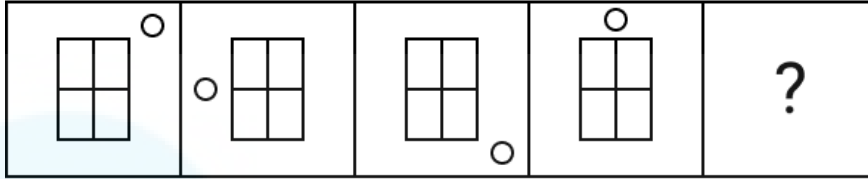
Question ID : 630680416645
Option 1 ID : 6306801625344
Option 2 ID : 6306801625346
Option 3 ID : 6306801625343
Option 4 ID : 6306801625345
Status : Answered
Chosen Option : 2

Q.6 All of the letters in the word 'JUNGLE' are arranged in alphabetical order. How many letters are there in the English alphabetical series between the letter which is second from the left end and the one which is third from the right end in the new letter-cluster thus formed?

- Ans**
- 1. Five
 - 2. Three
 - 3. Two
 - 4. Four

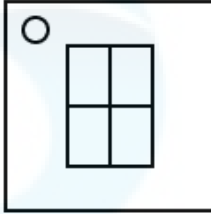
Question ID : 630680222294
Option 1 ID : 630680863010
Option 2 ID : 630680863008
Option 3 ID : 630680863007
Option 4 ID : 630680863009
Status : Answered
Chosen Option : 4

Q.7 Select the figure from among the given options which when put in place of the question mark (?) will logically complete the series.

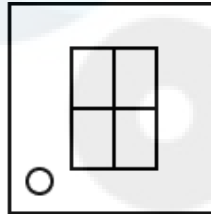


Ans

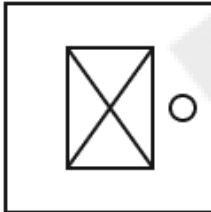
✗ 1.



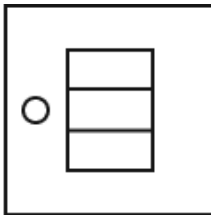
✓ 2.



✗ 3.



✗ 4.



Question ID : 630680467437
Option 1 ID : 6306801825695
Option 2 ID : 6306801825694
Option 3 ID : 6306801825696
Option 4 ID : 6306801825697
Status : Answered
Chosen Option : 2

Q.8 Identify the figure given in the options which when put in place of the question mark (?) will logically complete the series.

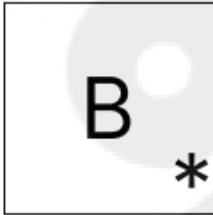
* B	* B	* B	* B *	?
--------	--------	--------	----------	---

Ans


✓ 1.



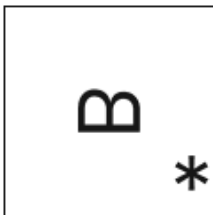
✗ 2.



✗ 3.



✗ 4.



Question ID : 630680471507

Option 1 ID : 6306801841742

Option 2 ID : 6306801841743

Option 3 ID : 6306801841745

Option 4 ID : 6306801841744

Status : Answered

Chosen Option : 1

Q.9 Select the set in which the numbers are related in the same way as are the numbers of the following set.

(66, 57, 48)

(94, 85, 76)

(NOTE: Operations should be performed on the whole numbers, without breaking down the numbers into its constituent digits. E.g. 13 – Operations on 13 such as adding/deleting/multiplying etc. to 13 can be performed. Breaking down 13 into 1 and 3 and then performing mathematical operations on 1 and 3 is not allowed.)

Ans 1. (85, 77, 64)

2. (79, 70, 59)

3. (81, 72, 63)

4. (98, 90, 83)

Question ID : 630680329200

Option 1 ID : 6306801280621

Option 2 ID : 6306801280622

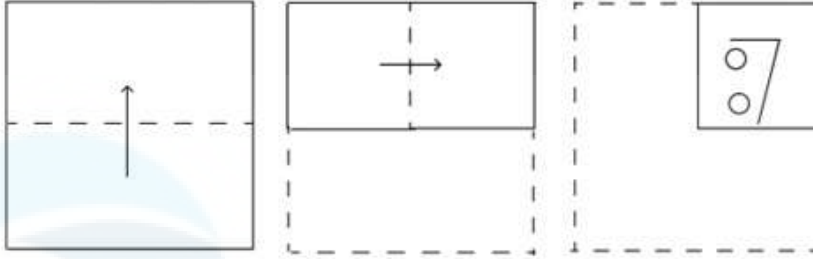
Option 3 ID : 6306801280623

Option 4 ID : 6306801280624

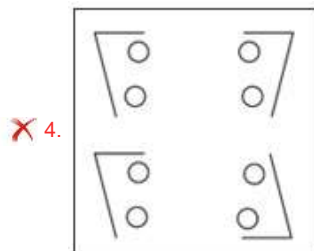
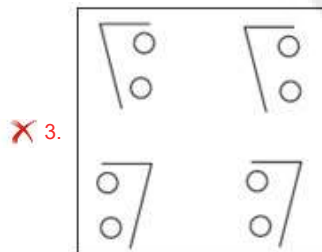
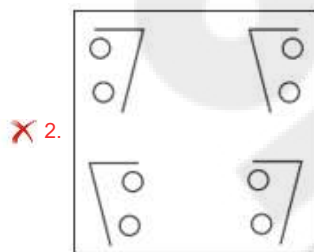
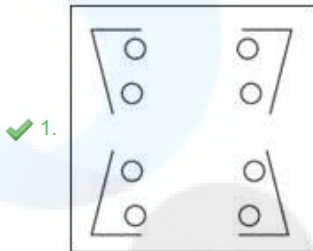
Status : Answered

Chosen Option : 3

Q.10 A paper is folded and cut as shown below. How will it appear when unfolded?



Ans



Question ID : 630680294954

Option 1 ID : 6306801147544

Option 2 ID : 6306801147547

Option 3 ID : 6306801147546

Option 4 ID : 6306801147545

Status : Answered

Chosen Option : 1

Q.11 Select the option in which the numbers share the same relationship as that shared by the given pair of numbers.
(NOTE: Operations should be performed on the whole numbers, without breaking down the numbers into its constituent digits. E.g. 13 – Operations on 13 such as adding/deleting/multiplying etc. to 13 can be performed. Breaking down 13 into 1 and 3 and then performing mathematical operations on 1 and 3 is not allowed.)

17 : 253
19 : 271

Ans 1. 21 : 289

2. 23 : 207

3. 32 : 387

4. 31 : 400

Question ID : 630680326566
Option 1 ID : 6306801270352
Option 2 ID : 6306801270351
Option 3 ID : 6306801270350
Option 4 ID : 6306801270349
Status : Not Answered
Chosen Option : --

Q.12 Three statements are given, followed by three conclusions numbered I, II and III. Assuming the statements to be true, even if they seem to be at variance with commonly known facts, decide which of the conclusions logically follow(s) from the statements.

Statements:

Some rats are mouse.

No mouse is a rodent.

Some rats are kittens.

Conclusions:

I. No rodent is a kitten.

II. Some rats are rodent.

III. No kitten is a mouse.

Ans 1. Only conclusion I follows

2. Neither conclusion follows

3. Only conclusion III follows

4. Only conclusion II follows

Question ID : 630680416378
Option 1 ID : 6306801624275
Option 2 ID : 6306801624278
Option 3 ID : 6306801624277
Option 4 ID : 6306801624276
Status : Answered
Chosen Option : 2

Q.13 Select the option that is related to the fifth letter-cluster in the same way as the second letter-cluster is related to the first letter-cluster and the fourth letter-cluster is related to the third letter-cluster.

OUR : NPTVQS :: BIG : ACHJFH :: FOR : ?

Ans 1. EGNOQR

2. GEPNSQ

3. EGNPQS

4. GENPRS

Question ID : 630680416285
Option 1 ID : 6306801623904
Option 2 ID : 6306801623906
Option 3 ID : 6306801623903
Option 4 ID : 6306801623905
Status : Answered
Chosen Option : 3

Q.14 In a certain code language, BRING is coded as '7149182' and SMILE is coded as '51291319'. What will be the code for FORGIVE?

Ans 1. 5229718156

2. 5219717166

3. 5228717156

4. 5229179156

Question ID : 630680351483

Option 1 ID : 6306801368031

Option 2 ID : 6306801368030

Option 3 ID : 6306801368032

Option 4 ID : 6306801368029

Status : Answered

Chosen Option : 1

Q.15 In a certain code language,

R + T means 'R is the sister of T'.

R - T means 'R is the father of T'.

R * T means 'R is the wife of T'.

R ÷ T means 'R is the mother of T'.

Based on the above, how is M related to Q if 'M * N - P + Q ÷ R + T'?

Ans 1. Mother's mother

2. Mother

3. Mother's sister

4. Sister

Question ID : 630680332509

Option 1 ID : 6306801293473

Option 2 ID : 6306801293474

Option 3 ID : 6306801293476

Option 4 ID : 6306801293475

Status : Answered

Chosen Option : 2

Q.16 What will come in the place of the question mark (?) in the following equation, if '+' and '-' are interchanged and 'x' and '÷' are interchanged?

$$304 \times 19 - 101 + 23 \div 5 = ?$$

Ans 1. 6

2. 21

3. 12

4. 2

Question ID : 630680336424

Option 1 ID : 6306801308418

Option 2 ID : 6306801308420

Option 3 ID : 6306801308417

Option 4 ID : 6306801308419

Status : Answered

Chosen Option : 4

Q.17 What will come in place of the question mark (?) in the following equation, if '+' and '-' are interchanged and 'x' and '÷' are interchanged?
 $164 - 173 \div 110 + 140 \times 5 = ?$

- Ans**
- 1. 11619
 - 2. 19616
 - 3. 19166
 - 4. 11916

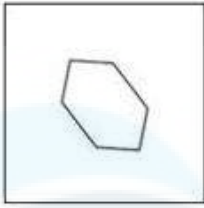
Question ID : 630680411717
Option 1 ID : 6306801605706
Option 2 ID : 6306801605704
Option 3 ID : 6306801605703
Option 4 ID : 6306801605705
Status : Answered
Chosen Option : 3

Q.18 Four letter-clusters have been given, out of which three are alike in some manner and one is different. Select the one that is different.
Note : The odd one out is not based on the number of consonants/vowels or their position in the letter cluster

- Ans**
- 1. ONM
 - 2. BCD
 - 3. JKL
 - 4. RST

Question ID : 63068062115
Option 1 ID : 630680239780
Option 2 ID : 630680239778
Option 3 ID : 630680239779
Option 4 ID : 630680239781
Status : Answered
Chosen Option : 1

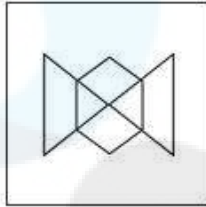
Q.19 Select the option figure in which the given figure (X) is embedded (rotation is NOT allowed).



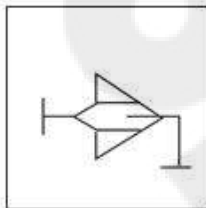
(X)

Ans

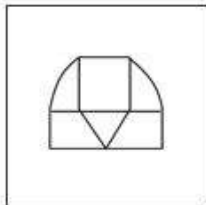
✗ 1.



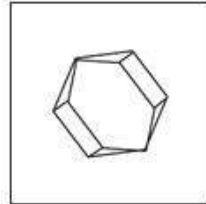
✗ 2.



✗ 3.



✓ 4.



Question ID : 630680296896

Option 1 ID : 6306801155228

Option 2 ID : 6306801155230

Option 3 ID : 6306801155227

Option 4 ID : 6306801155229

Status : Answered

Chosen Option : 4

Q.20 Which of the following numbers will replace the question mark (?) in the given series?
12, 25, 49, ?, 197, 395

Ans ✗ 1. 100

✗ 2. 96

✓ 3. 99

✗ 4. 121

Question ID : 630680411884

Option 1 ID : 6306801606373

Option 2 ID : 6306801606374

Option 3 ID : 6306801606372

Option 4 ID : 6306801606371

Status : Answered

Chosen Option : 3

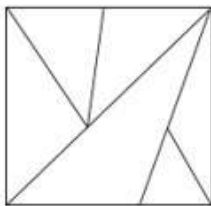
Q.21 Select the correct mirror image of the given figure when the mirror is placed at MN.



- Ans
- ✓ 1. **ᄁᄁᄁᄁᄁᄁᄁᄁ**
 - ✗ 2. **HfC632a**
 - ✗ 3. **HfC632a**
 - ✗ 4. **HfC632a**

Question ID : 630680325822
Option 1 ID : 6306801267484
Option 2 ID : 6306801267481
Option 3 ID : 6306801267482
Option 4 ID : 6306801267483
Status : Answered
Chosen Option : 1

Q.22 What is the number of triangles in the following figure?



- Ans
- ✗ 1. 9
 - ✗ 2. 8
 - ✓ 3. 10
 - ✗ 4. 11

Question ID : 630680285673
Option 1 ID : 6306801110659
Option 2 ID : 6306801110662
Option 3 ID : 6306801110661
Option 4 ID : 6306801110660
Status : Answered
Chosen Option : 3

Q.23 The same operation(s) are followed in all the given number pairs except one. Find that odd number pair.
(NOTE : Operations should be performed on the whole numbers, without breaking down the numbers into its constituent digits. E.g. 13 – Operations on 13 such as adding /deleting /multiplying etc., to 13 can be performed. Breaking down 13 into 1 and 3 and then performing mathematical operations on 1 and 3 is not allowed.)

- Ans
- 1. 56 : 9
 - 2. 44 : 7
 - 3. 68 : 11
 - 4. 72 : 12

Question ID : 630680412037
Option 1 ID : 6306801606984
Option 2 ID : 6306801606983
Option 3 ID : 6306801606985
Option 4 ID : 6306801606986
Status : Answered
Chosen Option : 4

Q.24 Two sets of numbers are given below. In each set of numbers, certain mathematical operation(s) on the first number result(s) in the second number. Similarly, certain mathematical operation(s) on the second number result(s) in the third number and so on. Which of the given options follows the same set of operations as in the given sets?

(NOTE: Operations should be performed on the whole numbers, without breaking down the numbers into their constituent digits. E.g. 13 – Operations on 13 such as adding/subtracting/multiplying to 13 can be performed. Breaking down 13 into 1 and 3 and then performing mathematical operations on 1 and 3 is not allowed.)

14 – 196 – 186 – 172; 15 – 225 – 215 – 200

- Ans
- 1. 3 – 9 – 19 – 14
 - 2. 9 – 81 – 71 – 62
 - 3. 6 – 36 – 26 – 22
 - 4. 8 – 64 – 54 – 40

Question ID : 630680814082
Option 1 ID : 6306803189545
Option 2 ID : 6306803189548
Option 3 ID : 6306803189546
Option 4 ID : 6306803189547
Status : Answered
Chosen Option : 2

Q.25 Select the combination of letters that when sequentially placed in the blanks of the given series will logically complete the series.
BYN_J_YNF_X_NFJVY_FJ

- Ans
- 1. FJZNY
 - 2. FZJYN
 - 3. FZYVJ
 - 4. FNJYV

Question ID : 630680216604
Option 1 ID : 630680840379
Option 2 ID : 630680840382
Option 3 ID : 630680840381
Option 4 ID : 630680840380
Status : Answered
Chosen Option : 2

Q.1 Lata Mangeshkar was honoured with the Bharat Ratna in the year _____.

- Ans
- 1. 2004
 - 2. 2003
 - 3. 2001
 - 4. 2002

Question ID : 630680512247
Option 1 ID : 6306802001961
Option 2 ID : 6306802001960
Option 3 ID : 6306802001958
Option 4 ID : 6306802001959
Status : Answered
Chosen Option : 3

Q.2 What is the reason for the similar size of the vascular bundle in monocot leaves?

- Ans
- 1. Radial venation
 - 2. Parallel venation
 - 3. Cubical venation
 - 4. Rectangular venation

Question ID : 630680305640
Option 1 ID : 6306801188933
Option 2 ID : 6306801188935
Option 3 ID : 6306801188936
Option 4 ID : 6306801188934
Status : Marked For Review
Chosen Option : 2

Q.3 In which state of India was the Neeru-Meeru programme introduced for construction of water harvesting structures?

- Ans
- 1. Uttar Pradesh
 - 2. Andhra Pradesh
 - 3. Punjab
 - 4. Rajasthan

Question ID : 630680327616
Option 1 ID : 6306801274462
Option 2 ID : 6306801274461
Option 3 ID : 6306801274464
Option 4 ID : 6306801274463
Status : Not Answered
Chosen Option : --

Q.4 Hariprasad Chaurasia, an Indian flutist in the Hindustani classical tradition, was awarded with which of the following awards in 2000?

- Ans
- 1. Padma Vibhushan
 - 2. Padma Bhushan
 - 3. Padma Shri
 - 4. Bharat Ratna

Question ID : 630680415813
Option 1 ID : 6306801622020
Option 2 ID : 6306801622021
Option 3 ID : 6306801622022
Option 4 ID : 6306801622019
Status : Marked For Review
Chosen Option : 4

Q.5 Which of the following events took place in the United Provinces in February, 1922?

- Ans** 1. Chauri Chaura
 2. Quit India
 3. Kakori Incident
 4. Khilafat Movement

Question ID : 630680511496
Option 1 ID : 6306801999109
Option 2 ID : 6306801999108
Option 3 ID : 6306801999107
Option 4 ID : 6306801999106
Status : Answered
Chosen Option : 1

Q.6 What do we mean by Allen's rule?

- Ans** 1. The body compensates low oxygen availability by increasing red blood cell production, decreasing the binding affinity of haemoglobin and by increasing the breathing rate.
 2. Some plants have no leaves – they are reduced to spines – and the photosynthetic function is taken over by the flattened stems.
 3. Desert lizards lack the physiological ability that mammals have to deal with the high temperatures of their habitat.
 4. Mammals from colder climates generally have shorter ears and limbs to minimise heat loss.

Question ID : 63068049646
Option 1 ID : 630680191014
Option 2 ID : 630680191017
Option 3 ID : 630680191016
Option 4 ID : 630680191015
Status : Not Answered
Chosen Option : --

Q.7 Ernest Rutherford used about _____ thick gold foil for alpha scattering experiments.

- Ans** 1. 1000 atoms
 2. 700 atoms
 3. 900 atoms
 4. 500 atoms

Question ID : 63068094228
Option 1 ID : 630680365610
Option 2 ID : 630680365608
Option 3 ID : 630680365609
Option 4 ID : 630680365607
Status : Not Answered
Chosen Option : --

Q.8 Which Article of the Constitution of India deals with the conduct of business of the Government of a state?

- Ans**
- 1. Article 164
 - 2. Article 167
 - 3. Article 166
 - 4. Article 177

Question ID : 630680305554
Option 1 ID : 6306801188589
Option 2 ID : 6306801188591
Option 3 ID : 6306801188590
Option 4 ID : 6306801188592
Status : Not Answered
Chosen Option : --

Q.9 In which of the following districts of Rajasthan are the 'Barchans' found?

- Ans**
- 1. Jaisalmer
 - 2. Alwar
 - 3. Udaipur
 - 4. Bhilwara

Question ID : 630680328127
Option 1 ID : 6306801276477
Option 2 ID : 6306801276480
Option 3 ID : 6306801276478
Option 4 ID : 6306801276479
Status : Not Answered
Chosen Option : --

Q.10 In May 2022, Then President Ram Nath Kovind appointed _____ as the Lieutenant Governor of Delhi.

- Ans**
- 1. Vijai Kapoor
 - 2. Vinai Kumar Saxena
 - 3. Anil Bajjal
 - 4. Kiran Bedi

Question ID : 630680195357
Option 1 ID : 630680757899
Option 2 ID : 630680757897
Option 3 ID : 630680757898
Option 4 ID : 630680757900
Status : Marked For Review
Chosen Option : 3

Q.11 Which of the following Constitutions inspired the law-making process in India?

- Ans**
- 1. British Constitution
 - 2. US Constitution
 - 3. Irish Constitution
 - 4. Canadian Constitution

Question ID : 630680408209
Option 1 ID : 6306801591733
Option 2 ID : 6306801591734
Option 3 ID : 6306801591731
Option 4 ID : 6306801591732
Status : Answered
Chosen Option : 2

Q.12 According to which of the following foreign travellers, people of Delhi used to write letters containing abuses to the Sultan, therefore, in order to punish them Sultan decided to shift the capital?

Ans 1. Hasan Nizami

2. Isami

3. Ibn Batuta

4. Al Biruni

Question ID : 630680412432
Option 1 ID : 6306801608554
Option 2 ID : 6306801608552
Option 3 ID : 6306801608551
Option 4 ID : 6306801608553
Status : Not Answered
Chosen Option : --

Q.13 How many players are there on each side of the Kabaddi Team in the field?

Ans 1. 9

2. 10

3. 8

4. 7

Question ID : 630680510812
Option 1 ID : 6306801996380
Option 2 ID : 6306801996381
Option 3 ID : 6306801996378
Option 4 ID : 6306801996379
Status : Marked For Review
Chosen Option : 2

Q.14 In 2022, which of the following railway stations has been selected for the 'One Station One Product' scheme launched by Indian Railways, which identifies Kanchipuram sarees as the chosen product?

Ans 1. Patna Jn

2. Visakhapatnam

3. Chennai Central

4. Howrah

Question ID : 630680413083
Option 1 ID : 6306801611155
Option 2 ID : 6306801611156
Option 3 ID : 6306801611157
Option 4 ID : 6306801611158
Status : Marked For Review
Chosen Option : 2

Q.15 Which of the following definitions best describes the concept of microfinance?

- Ans** 1. A microfinance institution is a digital-only and mobile-first bank.
2. Microfinance is a banking service provided to unemployed or low-income individuals or groups, who otherwise would have no other access to financial services.
3. Microfinance refers to providing banking services to individuals living in rural areas.
4. A microfinance institution is a company registered under the Companies Act, 1956, and engaged in the business of loans and advances and acquisition of shares/stocks/bonds/debentures/securities issued by the government.

Question ID : 630680195215
Option 1 ID : 630680757351
Option 2 ID : 630680757349
Option 3 ID : 630680757352
Option 4 ID : 630680757350
Status : Answered
Chosen Option : 2

Q.16 How long will a sound wave take to travel 1.5km, which has a frequency of 5 kHz and wavelength of 6 cm?

- Ans** 1. 25 seconds
2. 5 seconds
3. 50 seconds
4. 2.5 seconds

Question ID : 630680517172
Option 1 ID : 6306802021085
Option 2 ID : 6306802021086
Option 3 ID : 6306802021084
Option 4 ID : 6306802021087
Status : Not Answered
Chosen Option : --

Q.17 With reference to Morley-Minto Reforms of 1909, consider the following statements.

- a) They are also called the Indian Councils Act, 1909.
b) They increased the strength of Legislative Councils.
c) The right to separate electorate was given to the Muslims.
Which of the above statements is/are correct?

- Ans** 1. a, b
2. c, a
3. b, c
4. a, b, c

Question ID : 630680412332
Option 1 ID : 6306801608151
Option 2 ID : 6306801608152
Option 3 ID : 6306801608153
Option 4 ID : 6306801608154
Status : Answered
Chosen Option : 3

Q.18 Which of the following types of unemployment is found in India when people are employed for a certain period of a year in tourist resorts and various tourism-related activities in the mountain regions, but are unemployed in off-seasons?

- Ans 1. Under employment
 2. Seasonal unemployment
 3. Disguised unemployment
 4. Cyclical unemployment

Question ID : 630680134790
Option 1 ID : 630680521981
Option 2 ID : 630680521979
Option 3 ID : 630680521978
Option 4 ID : 630680521980
Status : Answered
Chosen Option : 2

Q.19 Which of the following terms is NOT related to cricket?

- Ans 1. No Ball
 2. Wide Ball
 3. Deuce
 4. Wicket

Question ID : 630680510781
Option 1 ID : 6306801996254
Option 2 ID : 6306801996255
Option 3 ID : 6306801996257
Option 4 ID : 6306801996256
Status : Answered
Chosen Option : 3

Q.20 Which of the following schemes enables students mobility across Higher Education Institutions?

- Ans 1. Academic Bank of Credits
 2. National Educational Technology Forum
 3. Structured Assessment for Analysing Learning Levels (SAFAL)
 4. PM Umeed scheme

Question ID : 63068099700
Option 1 ID : 630680387497
Option 2 ID : 630680387499
Option 3 ID : 630680387498
Option 4 ID : 630680387496
Status : Answered
Chosen Option : 4

Q.21 When was the Jawaharlal Nehru Manipur Dance Academy established?

- Ans 1. 1954
 2. 1951
 3. 1952
 4. 1953

Question ID : 630680157849
Option 1 ID : 630680610926
Option 2 ID : 630680610927
Option 3 ID : 630680610924
Option 4 ID : 630680610925
Status : Not Answered
Chosen Option : --

Q.22 Who developed the theory of combustion as a chemical reaction with oxygen in the 18th century, that excluded phlogiston theory?

- Ans 1. Friedrich Wöhler
 2. Antoine Lavoisier
 3. Robert Boyle
 4. Johann Becher

Question ID : 63068085792
Option 1 ID : 630680332631
Option 2 ID : 630680332629
Option 3 ID : 630680332630
Option 4 ID : 630680332628
Status : Answered
Chosen Option : 4

Q.23 The Mahalanobis model was the basis for which Five-Year Plan?

- Ans 1. Fourth Five-Year Plan
 2. Second Five-Year Plan
 3. First Five-Year Plan
 4. Sixth Five-Year Plan

Question ID : 630680411052
Option 1 ID : 6306801602962
Option 2 ID : 6306801602961
Option 3 ID : 6306801602960
Option 4 ID : 6306801602963
Status : Answered
Chosen Option : 2

Q.24 'Poush Mela' is a unique festival celebrated in which of the following Indian states?

- Ans 1. Uttar Pradesh
 2. Madhya Pradesh
 3. Himachal Pradesh
 4. West Bengal

Question ID : 630680163295
Option 1 ID : 630680632385
Option 2 ID : 630680632386
Option 3 ID : 630680632387
Option 4 ID : 630680632384
Status : Answered
Chosen Option : 1

Q.25 Vasudeva I who issued coins in gold (dinars and quarter dinars) and copper (single denomination) was a _____ king.

- Ans 1. Shunga
 2. Shaka
 3. Vakataka
 4. Kushana

Question ID : 630680412468
Option 1 ID : 6306801608698
Option 2 ID : 6306801608695
Option 3 ID : 6306801608697
Option 4 ID : 6306801608696
Status : Answered
Chosen Option : 2

Section : Quantitative Aptitude

Q.1 Simplify $4\frac{4}{5} \times \frac{3}{8} + \left(3\frac{1}{2} + \frac{2}{3}\right) \times \frac{4}{5}$

- Ans
- 1. $\frac{3}{10}$
 - 2. $\frac{77}{15}$
 - 3. $\frac{15}{77}$
 - 4. $\frac{10}{3}$

Question ID : 630680427964
Option 1 ID : 6306801669900
Option 2 ID : 6306801669902
Option 3 ID : 6306801669901
Option 4 ID : 6306801669903
Status : Answered
Chosen Option : 2

Q.2 If $p \sin A - \cos A = 1$, then $p^2 - (1 + p^2) \cos A$ equals:

- Ans
- 1. 0
 - 2. 1
 - 3. -1
 - 4. 2

Question ID : 630680361829
Option 1 ID : 6306801409081
Option 2 ID : 6306801409084
Option 3 ID : 6306801409082
Option 4 ID : 6306801409083
Status : Answered
Chosen Option : 3

Q.3 Naman bought few apples for ₹720 from a shop. He negotiated the price and the shopkeeper reduced it by ₹2 per apple. Due to this Naman could buy four more apples than what he had bought earlier. How many apples did he originally buy?

- Ans
- 1. 36
 - 2. 44
 - 3. 40
 - 4. 48

Question ID : 630680382128
Option 1 ID : 6306801489428
Option 2 ID : 6306801489429
Option 3 ID : 6306801489427
Option 4 ID : 6306801489430
Status : Marked For Review
Chosen Option : 1

Q.4 What is the ratio of the mean proportional of 1.21 and 0.09 with the mean proportional of 0.16 and 0.36?

- Ans 1. 13 : 8
 2. 11 : 8
 3. 11 : 13
 4. 13 : 12

Question ID : 630680428537
Option 1 ID : 6306801672195
Option 2 ID : 6306801672192
Option 3 ID : 6306801672194
Option 4 ID : 6306801672193
Status : Answered
Chosen Option : 2

Q.5 If Ram purchases a fan, he gets 8% discount, however, if he purchases three fans he gets 6% on the first, 10% on the second and 12% on the third. If the price paid by the Ram for three fans is ₹6,800, then what will be the marked price of each fan?

- Ans 1. ₹2,550
 2. ₹2,500
 3. ₹2,400
 4. ₹2,450

Question ID : 630680395544
Option 1 ID : 6306801542343
Option 2 ID : 6306801542342
Option 3 ID : 6306801542340
Option 4 ID : 6306801542341
Status : Not Answered
Chosen Option : --

Q.6 The tank is filled by three pipes with different uniform flow rates. While the first two pipes are operating simultaneously, they fill the tank in the same duration that the third pipe takes to fill it alone. The second pipe can fill the tank 5 hours quicker than the first pipe, yet 4 hours slower than the third pipe. What is the time (in hours) needed for the first pipe to fill the tank?

- Ans 1. 18
 2. 9
 3. 12
 4. 15

Question ID : 630680381398
Option 1 ID : 6306801486534
Option 2 ID : 6306801486531
Option 3 ID : 6306801486532
Option 4 ID : 6306801486533
Status : Not Answered
Chosen Option : --

Q.7 Express $\sin 74^\circ + \tan 74^\circ$ in terms of trigonometric ratios of angles between 0° and 45° .

Ans 1. $\operatorname{cosec} 16^\circ + \sec 16^\circ$

2. $\operatorname{cosec} 16^\circ + \cot 16^\circ$

3. $\cos 16^\circ + \cot 16^\circ$

4. $\sec 16^\circ + \cot 16^\circ$

Question ID : 630680518883
Option 1 ID : 6306802028006
Option 2 ID : 6306802028005
Option 3 ID : 6306802028007
Option 4 ID : 6306802028004
Status : Answered
Chosen Option : 3

Q.8 In $\triangle ABC$, two medians AD and BE intersect at G at right angles. If $AD = 12$ cm and $BE = 9$ cm, then the length of AB is equal to:

Ans 1. 12 cm

2. 14 cm

3. 10 cm

4. 16 cm

Question ID : 630680395276
Option 1 ID : 6306801541314
Option 2 ID : 6306801541313
Option 3 ID : 6306801541315
Option 4 ID : 6306801541312
Status : Not Attempted and Marked For Review
Chosen Option : --

Q.9 A class of 30 students appeared in a test. The average score of 12 students is 62, and that of the rest is 74. What is the average score of the class?

Ans 1. 67.2

2. 68.2

3. 69.2

4. 70.2

Question ID : 630680566262
Option 1 ID : 6306802214039
Option 2 ID : 6306802214037
Option 3 ID : 6306802214036
Option 4 ID : 6306802214038
Status : Answered
Chosen Option : 3

Q.10 A boat can go 54 km upstream in 6 hours. If the speed of the stream is 4.8 km/h, then how much time (in hours) will the boat take to cover a distance of 279 km downstream?

Ans 1. 18

2. 15

3. 16

4. 20

Question ID : 630680428413

Option 1 ID : 6306801671697

Option 2 ID : 6306801671699

Option 3 ID : 6306801671698

Option 4 ID : 6306801671696

Status : Answered

Chosen Option : 2

Q.11 If $x + \frac{1}{9x} = 3$, then the value of $9x^2 + \frac{1}{9x^2}$ is:

Ans 1. 81

2. 79

3. 77

4. 87

Question ID : 630680413529

Option 1 ID : 6306801612941

Option 2 ID : 6306801612942

Option 3 ID : 6306801612940

Option 4 ID : 6306801612943

Status : Answered

Chosen Option : 2

Q.12 Replace * by the smallest digit so that $723*56*$ is divisible by 6.

Ans 1. 1

2. 2

3. 3

4. 4

Question ID : 630680121038

Option 1 ID : 630680469119

Option 2 ID : 630680469118

Option 3 ID : 630680469120

Option 4 ID : 630680469121

Status : Answered

Chosen Option : 2

Q. Find the gain percentage, given that Siddhi sold her scooter for ₹31902 gaining $\frac{1}{6}$ th of the selling price.

1
3
A
n
s

✓ 1. 20%

✗ 2. 25%

✗ 3. 5%

✗ 4. 30%

Question ID : 630680922776
Option 1 ID : 6306803615950
Option 2 ID : 6306803615952
Option 3 ID : 6306803615953
Option 4 ID : 6306803615951
Status : Answered
Chosen Option : 1

Q.14 The given table shows the number of bananas produced by five farms over 4 years.

Year	Farm				
	L	M	N	O	P
2020	17,500	14,180	16,300	17,405	15,805
2021	11,200	13,900	14,600	15,304	16,207
2022	12,300	17,652	14,800	15,150	16,404
2023	14,650	15,558	17,465	14,185	15,450

What is the respective ratio of the dozens of bananas produced by farm M to farm P in the year 2022?

Ans ✗ 1. 1331 : 1230

✗ 2. 1367 : 1471

✓ 3. 1471 : 1367

✗ 4. 1230 : 1331

Question ID : 630680523765
Option 1 ID : 6306802047214
Option 2 ID : 6306802047211
Option 3 ID : 6306802047213
Option 4 ID : 6306802047212
Status : Answered
Chosen Option : 3

Q.15 A cuboid of dimensions 50 cm, 150 cm, 175 cm can be divided into how many identical largest cubes?

Ans ✓ 1. 84

✗ 2. 75

✗ 3. 90

✗ 4. 85

Question ID : 630680421533
Option 1 ID : 6306801644595
Option 2 ID : 6306801644597
Option 3 ID : 6306801644596
Option 4 ID : 6306801644598
Status : Marked For Review
Chosen Option : 2

Q.16 P and Q are centres of two circles whose radii are 7 cm and 3 cm, respectively. If the direct common tangents to the circles meet PQ extended at A, then A divides PQ

- Ans
- 1. externally in the ratio 3 : 7
 - 2. externally in the ratio 7 : 3
 - 3. internally in the ratio 7 : 3
 - 4. internally in the ratio 3 : 7

Question ID : 630680194643
Option 1 ID : 630680755097
Option 2 ID : 630680755100
Option 3 ID : 630680755099
Option 4 ID : 630680755098
Status : Answered
Chosen Option : 2

Q.17 The table given here represents the distance (in km) travelled by two athletes X and Y in the same direction.

Hour	Distance Travelled (in Km)	
	X	Y
1 st	25	30
2 nd	35	45
3 rd	25	40
4 th	20	30
5 th	25	20
6 th	20	15

Y's average speed (km/hour) during the first five hours is:

- Ans
- 1. 31
 - 2. 34
 - 3. 32
 - 4. 33

Question ID : 630680382680
Option 1 ID : 6306801491635
Option 2 ID : 6306801491638
Option 3 ID : 6306801491636
Option 4 ID : 6306801491637
Status : Answered
Chosen Option : 4

Q.18 Sohan borrows a sum of ₹1,41,545 at the rate of 11% per annum simple interest. At the end of the first year, he repays ₹25,490 towards return of principal amount borrowed. If Sohan clears all pending dues at the end of the second year, including interest payment that accrued during the first year, how much does he pay (in ₹) at the end of the second year?

- Ans
- 1. 1,37,407
 - 2. 1,36,453
 - 3. 1,44,391
 - 4. 1,41,222

Question ID : 630680809864
Option 1 ID : 6306803173036
Option 2 ID : 6306803173037
Option 3 ID : 6306803173035
Option 4 ID : 6306803173038
Status : Answered
Chosen Option : 3

Q.19 A woman spends $\frac{2}{3}$ of her income. If her income increases by 18% and the expenditure increases by 24%, then the percentage increase in her savings will be:

- Ans** 1. 3%
 2. 6%
 3. 4%
 4. 5%

Question ID : 630680428078
Option 1 ID : 6306801670357
Option 2 ID : 6306801670359
Option 3 ID : 6306801670358
Option 4 ID : 6306801670356
Status : Answered
Chosen Option : 2

Q.20 In a $\triangle LMN$, $\angle L = 118^\circ$ and $LM = LN$. Find $\angle N$.

- Ans** 1. 31°
 2. 62°
 3. 42°
 4. 65°

Question ID : 630680285627
Option 1 ID : 6306801110475
Option 2 ID : 6306801110477
Option 3 ID : 6306801110476
Option 4 ID : 6306801110478
Status : Answered
Chosen Option : 1

Q.21 Simplify the following expression.

$$\left(\frac{3}{a} + 3a\right)\left(\frac{9}{a^2} - 9 + 9a^2\right) \text{ if } a = 1$$

- Ans** 1. 54
 2. 81
 3. 63
 4. 27

Question ID : 630680413536
Option 1 ID : 6306801612968
Option 2 ID : 6306801612970
Option 3 ID : 6306801612971
Option 4 ID : 6306801612969
Status : Answered
Chosen Option : 1

Q.22 Consider the given table for total imports of goods of 5 companies over 5 years (in lakhs), and answer the question that follows.

Companies	R	S	T	U	V
Year					
2012	60	40	15	45	25
2013	30	60	70	15	90
2014	51	25	55	100	110
2015	45	51	20	70	65
2016	24	35	60	55	125

If the total exports of all companies together in the year 2013 is ₹300 lakh, then the profit/loss of all companies together in year 2013 is:

(Assume: Profit = Exports – Imports)

- Ans
- 1. loss of ₹27 lakh
 - 2. loss of ₹18 lakh
 - 3. profit of ₹35 lakh
 - 4. profit of ₹30 lakh

Question ID : 630680432341
 Option 1 ID : 6306801687373
 Option 2 ID : 6306801687374
 Option 3 ID : 6306801687371
 Option 4 ID : 6306801687372
 Status : Answered
 Chosen Option : 3

Q.23 The percentage distribution of expenditure over various items of Saloni's monthly income is given in the following table. Study the table carefully and answer the question that follows.

Items	Rent	Food	Education	Bills	Miscellaneous
Percentage distribution	30%	20%	25%	20%	5%

If Saloni's monthly income is ₹75,000, how much money (in ₹) does she spend on Rent and Education?

- Ans
- 1. 43,250
 - 2. 41,250
 - 3. 40,150
 - 4. 42,150

Question ID : 630680428189
 Option 1 ID : 6306801670803
 Option 2 ID : 6306801670801
 Option 3 ID : 6306801670800
 Option 4 ID : 6306801670802
 Status : Answered
 Chosen Option : 2

Q.24 Consider a triangle PQR, right angled at R, in which PQ = 29 units, QR = 21 units and $\angle PQR = \theta$. Find the value of $\cos^2\theta - \sin^2\theta$.

Ans 1. 1

2. $\frac{41}{841}$

3. $\frac{21}{841}$

4. $\frac{20}{841}$

Question ID : 6306801048021

Option 1 ID : 6306804114130

Option 2 ID : 6306804114131

Option 3 ID : 6306804114132

Option 4 ID : 6306804114133

Status : Answered

Chosen Option : 2

Q.25 In a ΔABC , if $\frac{1}{2}\angle A + \angle B + \angle C = 120^\circ$, then the value of $\frac{1}{4}\angle A$ is:

Ans 1. 30°

2. 60°

3. 20°

4. 40°

Question ID : 6306801048018

Option 1 ID : 6306804114118

Option 2 ID : 6306804114121

Option 3 ID : 6306804114119

Option 4 ID : 6306804114120

Status : Answered

Chosen Option : 1

Section : English Comprehension

Q.1 Select the option that can be used as a one-word substitute for the given group of words.

Failing to give proper care and attention

Ans 1. Wild

2. Cautious

3. Provident

4. Lax

Question ID : 630680414695

Option 1 ID : 6306801617526

Option 2 ID : 6306801617523

Option 3 ID : 6306801617524

Option 4 ID : 6306801617525

Status : Answered

Chosen Option : 4

Q.2 Sentences of a paragraph are given below in jumbled order. Arrange the sentences in the correct order to form a meaningful and coherent paragraph.

- A. A big fancy dress ball was arranged to celebrate their homecoming.
- B. It must have been a terrible shock for a young girl.
- C. They had been married a month, just home from their honeymoon.
- D. Just as the guests were starting to arrive, Charney locked himself into his bedroom and shot himself.

- Ans
- 1. ABCD
 - 2. DACB
 - 3. BCAD
 - 4. BCDA

Question ID : 630680396647
Option 1 ID : 6306801546683
Option 2 ID : 6306801546681
Option 3 ID : 6306801546682
Option 4 ID : 6306801546680
Status : Answered
Chosen Option : 3

Q.3 Select the most appropriate synonym of the given word.
Expertise

- Ans
- 1. Clumsiness
 - 2. Proficiency
 - 3. Lack
 - 4. Ignorance

Question ID : 630680209305
Option 1 ID : 630680811435
Option 2 ID : 630680811438
Option 3 ID : 630680811436
Option 4 ID : 630680811437
Status : Answered
Chosen Option : 2

Q.4 In the following sentence, four words are underlined out of which one word is misspelt. Identify the INCORRECTLY spelt word.

I took out a water tumbler(A) for a drink, but found the water in the metal container (B) had frozen so I couldn't quanch (C) my thirst. I ate some biscuits and offered(D) some to Hillary.

- Ans
- 1. A
 - 2. B
 - 3. C
 - 4. D

Question ID : 630680409957
Option 1 ID : 6306801598660
Option 2 ID : 6306801598659
Option 3 ID : 6306801598658
Option 4 ID : 6306801598657
Status : Answered
Chosen Option : 3

Q.5 Select the option that expresses the given sentence in passive voice.
He must deliver pizza.

- Ans 1. Pizza can be delivered by him.
 2. Pizza must be delivered by him.
 3. Pizza has to be delivered by him.
 4. Pizza have to be delivered by him.

Question ID : 630680415151
Option 1 ID : 6306801619353
Option 2 ID : 6306801619352
Option 3 ID : 6306801619351
Option 4 ID : 6306801619354
Status : Answered
Chosen Option : 2

Q.6 Parts of a sentence are given below in jumbled order. Select the option that arranges the parts in the correct sequence to form a meaningful sentence.

- (P) an open mind
(Q) seek it with
(O) for personal growth and development
(R) knowledge is a powerful tool

- Ans 1. QROP
 2. ORPQ
 3. PQRO
 4. ROQP

Question ID : 630680380985
Option 1 ID : 6306801484929
Option 2 ID : 6306801484927
Option 3 ID : 6306801484928
Option 4 ID : 6306801484930
Status : Answered
Chosen Option : 4

Q.7 Select the most appropriate synonym of the word in brackets to fill in the blank.
The _____(crux) of his argument was that education should continue throughout life.

- Ans 1. essence
 2. etiquette
 3. proposal
 4. draft

Question ID : 630680295945
Option 1 ID : 6306801151493
Option 2 ID : 6306801151494
Option 3 ID : 6306801151495
Option 4 ID : 6306801151492
Status : Answered
Chosen Option : 1

Q.8 Select the most appropriate ANTONYM of the underlined word in the given sentence.
Success is not a destination, it's a journey.

- Ans 1. Failure
 2. Sensation
 3. Victory
 4. Opulence

Question ID : 630680396415
Option 1 ID : 6306801545770
Option 2 ID : 6306801545771
Option 3 ID : 6306801545769
Option 4 ID : 6306801545768
Status : Answered
Chosen Option : 1

Q.9 Select the most appropriate option to substitute the underlined segment in the given sentence.
She believed she had been blamed for the mistakes of others for what happened.

- Ans 1. Made a sceptic
 2. Made a savage
 3. Made a spinster
 4. Made a scapegoat

Question ID : 630680205194
Option 1 ID : 630680795642
Option 2 ID : 630680795639
Option 3 ID : 630680795640
Option 4 ID : 630680795641
Status : Answered
Chosen Option : 4

Q.10 Select the most appropriate synonym of the bold word in the following sentence.
His **eloquent** speech always persuades people to work for their betterment.

- Ans 1. Articulate
 2. Vague
 3. Inarticulate
 4. Short

Question ID : 630680283527
Option 1 ID : 6306801102229
Option 2 ID : 6306801102230
Option 3 ID : 6306801102227
Option 4 ID : 6306801102228
Status : Answered
Chosen Option : 1

Q.11 Select the option that can be used as a one-word substitute for the underlined group of words.

Out of those group members, Rohan is the one who opposes others, no matter what they tell him.

- Ans
- 1. anatomist
 - 2. antagonist
 - 3. protagonist
 - 4. agonist

Question ID : 630680158616
Option 1 ID : 630680613959
Option 2 ID : 630680613957
Option 3 ID : 630680613956
Option 4 ID : 630680613958
Status : Answered
Chosen Option : 2

Q.12 Select the correctly spelt word to fill in the blank.

All the chefs in the world are famous because of their _____ skills.

- Ans
- 1. colinary
 - 2. kolinary
 - 3. kulinary
 - 4. culinary

Question ID : 630680374781
Option 1 ID : 6306801460292
Option 2 ID : 6306801460293
Option 3 ID : 6306801460291
Option 4 ID : 6306801460294
Status : Answered
Chosen Option : 4

Q.13 Parts of the following sentence have been given as options. Select the option that contains an error.

Solutions to the country's interior problems are still a long way away.

- Ans
- 1. a long way away.
 - 2. the country's interior
 - 3. problems are still
 - 4. Solutions to

Question ID : 630680296378
Option 1 ID : 6306801153183
Option 2 ID : 6306801153181
Option 3 ID : 6306801153182
Option 4 ID : 6306801153180
Status : Answered
Chosen Option : 2

Q.14 Select the most appropriate ANTONYM of the given word.
Brittle

- Ans 1. Crunchy
 2. Resilient
 3. Delicate
 4. Aloof

Question ID : 630680377993
Option 1 ID : 6306801473031
Option 2 ID : 6306801473033
Option 3 ID : 6306801473034
Option 4 ID : 6306801473032
Status : Answered
Chosen Option : 2

Q.15 Select the option that expresses the given sentence in active voice.

The letter was being typed by the secretary when the phone rang.

- Ans 1. The secretary will type the letter when the phone rings.
 2. The secretary is typing the letter when the phone rings.
 3. The secretary was typing the letter when the phone rang.
 4. The secretary types the letter when the phone rings.

Question ID : 630680415200
Option 1 ID : 6306801619548
Option 2 ID : 6306801619549
Option 3 ID : 6306801619550
Option 4 ID : 6306801619547
Status : Answered
Chosen Option : 3

Q.16 Select the option that will improve the underlined part of the given sentence.
When I saw him, I will ask him to return the book he borrowed.

- Ans 1. see him
 2. had seen him
 3. shall see him
 4. have seen him

Question ID : 630680160925
Option 1 ID : 630680623067
Option 2 ID : 630680623066
Option 3 ID : 630680623064
Option 4 ID : 630680623065
Status : Answered
Chosen Option : 1

Q.17 Select the most appropriate meaning of the given idiom.
Nobody's fool

- Ans** 1. Not easily deceived
 2. The wisest person
 3. A complete fool
 4. All are fools

Question ID : 630680199445
Option 1 ID : 630680773422
Option 2 ID : 630680773420
Option 3 ID : 630680773419
Option 4 ID : 630680773421
Status : Marked For Review
Chosen Option : 1

Q.18 Select the most appropriate meaning of the given idiom.
A dime a dozen

- Ans** 1. Something common and not special
 2. Very wealthy
 3. Variety of amenities
 4. A fair trade

Question ID : 630680360083
Option 1 ID : 6306801402277
Option 2 ID : 6306801402278
Option 3 ID : 6306801402279
Option 4 ID : 6306801402280
Status : Answered
Chosen Option : 1

Q.19 Select the most appropriate synonym of the given word.

Paramount

- Ans** 1. trivial
 2. collateral
 3. inferior
 4. supreme

Question ID : 630680130841
Option 1 ID : 630680506655
Option 2 ID : 630680506656
Option 3 ID : 630680506657
Option 4 ID : 630680506654
Status : Answered
Chosen Option : 4

Q.20 The following sentence has been split into four segments. Identify the segment that contains an error.
They secret / decided / to leave / the town.

- Ans**
- 1. the town
 - 2. to leave
 - 3. decided
 - 4. They secret

Question ID : 630680514349
Option 1 ID : 6306802010024
Option 2 ID : 6306802010023
Option 3 ID : 6306802010022
Option 4 ID : 6306802010021
Status : Answered
Chosen Option : 4

Comprehension:

In the following passage, some words have been deleted. Read the passage carefully and select the most appropriate option to fill in each blank.

Now, we have Mr. X as the President of India. It has come as a surprise (1)_____ Scheduled Tribes who are (2)_____ the most marginalised groups of the country. The Adivasis of India have been (3)_____ socially, economically and culturally. Despite various efforts taken by the Government of India, they are still under (4)_____ and suffering. Therefore, the (5)_____ a leader from a marginalised community or group does not indicate that now the entire community will be uplifted. However, this kind of move may bring certain changes in the status of the Adivasis.

SubQuestion No : 21

Q.21 Select the most appropriate option to fill in blank no.1

- Ans**
- 1. at
 - 2. off
 - 3. in
 - 4. to

Question ID : 630680154509
Option 1 ID : 630680597853
Option 2 ID : 630680597855
Option 3 ID : 630680597854
Option 4 ID : 630680597852
Status : Answered
Chosen Option : 4

Comprehension:

In the following passage, some words have been deleted. Read the passage carefully and select the most appropriate option to fill in each blank.

Now, we have Mr. X as the President of India. It has come as a surprise (1)_____ Scheduled Tribes who are (2)_____ the most marginalised groups of the country. The Adivasis of India have been (3)_____ socially, economically and culturally. Despite various efforts taken by the Government of India, they are still under (4)_____ and suffering. Therefore, the (5)_____ a leader from a marginalised community or group does not indicate that now the entire community will be uplifted. However, this kind of move may bring certain changes in the status of the Adivasis.

SubQuestion No : 22

Q.22 Select the most appropriate option to fill in blank no.2

- Ans**
- 1. therefore
 - 2. through
 - 3. among
 - 4. onto

Question ID : 630680154510
Option 1 ID : 630680597859
Option 2 ID : 630680597856
Option 3 ID : 630680597858
Option 4 ID : 630680597857
Status : Answered
Chosen Option : 3

Comprehension:

In the following passage, some words have been deleted. Read the passage carefully and select the most appropriate option to fill in each blank.

Now, we have Mr. X as the President of India. It has come as a surprise (1)_____ Scheduled Tribes who are (2)_____ the most marginalised groups of the country. The Adivasis of India have been (3)_____ socially, economically and culturally. Despite various efforts taken by the Government of India, they are still under (4)_____ and suffering. Therefore, the (5)_____ a leader from a marginalised community or group does not indicate that now the entire community will be uplifted. However, this kind of move may bring certain changes in the status of the Adivasis.

SubQuestion No : 23

Q.23 Select the most appropriate option to fill in blank no.3

- Ans**
- 1. marginalised
 - 2. censored
 - 3. elevated
 - 4. uplifted

Question ID : 630680154511
Option 1 ID : 630680597863
Option 2 ID : 630680597862
Option 3 ID : 630680597860
Option 4 ID : 630680597861
Status : Answered
Chosen Option : 1

Comprehension:

In the following passage, some words have been deleted. Read the passage carefully and select the most appropriate option to fill in each blank.

Now, we have Mr. X as the President of India. It has come as a surprise (1)_____ Scheduled Tribes who are (2)_____ the most marginalised groups of the country. The Adivasis of India have been (3)_____ socially, economically and culturally. Despite various efforts taken by the Government of India, they are still under (4)_____ and suffering. Therefore, the (5)_____ a leader from a marginalised community or group does not indicate that now the entire community will be uplifted. However, this kind of move may bring certain changes in the status of the Adivasis.

SubQuestion No : 24

Q.24 Select the most appropriate option to fill in blank no.4

- Ans
- 1. abundance
 - 2. river
 - 3. poverty
 - 4. forest

Question ID : 630680154512
Option 1 ID : 630680597864
Option 2 ID : 630680597867
Option 3 ID : 630680597865
Option 4 ID : 630680597866
Status : Answered
Chosen Option : 3

Comprehension:

In the following passage, some words have been deleted. Read the passage carefully and select the most appropriate option to fill in each blank.

Now, we have Mr. X as the President of India. It has come as a surprise (1)_____ Scheduled Tribes who are (2)_____ the most marginalised groups of the country. The Adivasis of India have been (3)_____ socially, economically and culturally. Despite various efforts taken by the Government of India, they are still under (4)_____ and suffering. Therefore, the (5)_____ a leader from a marginalised community or group does not indicate that now the entire community will be uplifted. However, this kind of move may bring certain changes in the status of the Adivasis.

SubQuestion No : 25

Q.25 Select the most appropriate option to fill in blank no.5

- Ans
- 1. elevation of
 - 2. rejection of
 - 3. president of
 - 4. exclusion of

Question ID : 630680154513
Option 1 ID : 630680597869
Option 2 ID : 630680597871
Option 3 ID : 630680597868
Option 4 ID : 630680597870
Status : Answered
Chosen Option : 1