

Combined Graduate Level Examination 2024 Tier I

Roll Number	
Candidate Name	
Venue Name	
Exam Date	12/09/2024
Exam Time	9:00 AM - 10:00 AM
Subject	Combined Graduate Level Examination Tier I

Section : General Intelligence and Reasoning

Q.1 The position of how many letters will remain unchanged if all the letters in the word **BINDER** are arranged in English alphabetical order?

- Ans
- 1. One
 - 2. Three
 - 3. None
 - 4. Two

Question ID : 630680131815
Option 1 ID : 630680510471
Option 2 ID : 630680510473
Option 3 ID : 630680510470
Option 4 ID : 630680510472
Status : Answered
Chosen Option : 4

Q.2 In the following series, only one letter-cluster is incorrect. Select the incorrect letter-cluster.

YCG IMQ SVZ CGK MQU

- Ans
- 1. CGK
 - 2. MQU
 - 3. SVZ
 - 4. IMQ

Question ID : 630680790683
Option 1 ID : 6306803098487
Option 2 ID : 6306803098485
Option 3 ID : 6306803098484
Option 4 ID : 6306803098486
Status : Answered
Chosen Option : 3

Q.3 Three of the following four options are alike in a certain way and thus form a group. Which is the one that does NOT belong to that group?
(NOTE: Operations should be performed on the whole numbers, without breaking down the numbers into its constituent digits. E.g. 13 – Operations on 13 such as adding/subtracting/multiplying etc. to 13 can be performed. Breaking down 13 into 1 and 3 and then performing mathematical operations on 1 and 3 is not allowed.)

- Ans 1. $540 - 188 - 128$
 2. $81 - 101 - 92$
 3. $90 - 22 - 12$
 4. $72 - 284 - 266$

Question ID : 630680196584
Option 1 ID : 630680762637
Option 2 ID : 630680762636
Option 3 ID : 630680762635
Option 4 ID : 630680762638
Status : Answered
Chosen Option : 1

Q.4 What will come in the place of the question mark (?) in the following equation, if '+' and '-' are interchanged and 'x' and '÷' are interchanged?
 $342 \times 18 + 79 - 45 \div 3 = ?$

- Ans 1. 65
 2. 75
 3. 55
 4. 85

Question ID : 630680336425
Option 1 ID : 6306801308422
Option 2 ID : 6306801308421
Option 3 ID : 6306801308424
Option 4 ID : 6306801308423
Status : Answered
Chosen Option : 2

Q.5 Two sets of numbers are given below. In each set of numbers, certain mathematical operation(s) on the first number result(s) in the second number. Similarly, certain mathematical operation(s) on the second number result(s) in the third number and so on. Which of the given options follows the same set of operations as in the given sets?

(NOTE: Operations should be performed on the whole numbers, without breaking down the numbers into their constituent digits. E.g. 13 – Operations on 13 such as adding/subtracting/multiplying to 13 can be performed. Breaking down 13 into 1 and 3 and then performing mathematical operations on 1 and 3 is not allowed.)

$18 - 36 - 72 - 107$; $15 - 30 - 60 - 95$

- Ans 1. $30 - 60 - 90 - 115$
 2. $25 - 50 - 100 - 125$
 3. $22 - 44 - 88 - 123$
 4. $11 - 22 - 66 - 101$

Question ID : 630680791155
Option 1 ID : 6306803100346
Option 2 ID : 6306803100344
Option 3 ID : 6306803100345
Option 4 ID : 6306803100343
Status : Answered
Chosen Option : 3

Q.6 Which of the following terms will replace the question mark (?) in the given series?
IMHP, MPJQ, QSLR, UVNS, ?

- Ans
- 1. XYPT
 - 2. YYPT
 - 3. YXPT
 - 4. YYOT

Question ID : 630680417060
Option 1 ID : 6306801627005
Option 2 ID : 6306801627004
Option 3 ID : 6306801627003
Option 4 ID : 6306801627006
Status : Answered
Chosen Option : 2

Q.7 Select the figure from among the given options that can replace the question mark (?) in the following series.



Ans

- 1.
- 2.
- 3.
- 4.

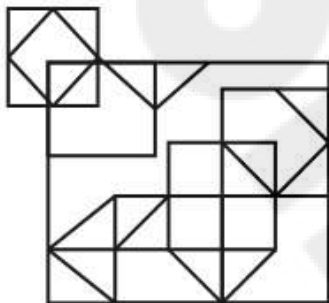
Question ID : 63068057468
Option 1 ID : 630680221716
Option 2 ID : 630680221715
Option 3 ID : 630680221717
Option 4 ID : 630680221714
Status : Answered
Chosen Option : 1

Q.8 In a certain code language, 'FACED' is written as 'GZDDE' and 'VACAY' is written as 'WZDZZ'. How will 'LABOR' be written in that language?

- Ans
- 1. MBCPS
 - 2. MZCNS
 - 3. MBDPS
 - 4. MADMS

Question ID : 630680172749
Option 1 ID : 630680669397
Option 2 ID : 630680669396
Option 3 ID : 630680669399
Option 4 ID : 630680669398
Status : Answered
Chosen Option : 2

Q.9 How many triangles are there in the given figure?



- Ans
- 1. 16
 - 2. 21
 - 3. 20
 - 4. 18

Question ID : 630680281042
Option 1 ID : 6306801092404
Option 2 ID : 6306801092405
Option 3 ID : 6306801092406
Option 4 ID : 6306801092403
Status : Answered
Chosen Option : 2

Q.10 In a certain code language, 'FIVE' is written as '12184410' and FOUR is written as '12304236'. How will 'THREE' be written in that language?

- Ans
- 1. 4016361310
 - 2. 4016361010
 - 3. 4016361110
 - 4. 4016361212

Question ID : 630680416224
Option 1 ID : 6306801623660
Option 2 ID : 6306801623661
Option 3 ID : 6306801623662
Option 4 ID : 6306801623659
Status : Answered
Chosen Option : 2

Q.11 Three statements are given, followed by three conclusions numbered I, II and III. Assuming the statements to be true, even if they seem to be at variance with commonly known facts, decide which of the conclusions logically follow(s) from the statements.

Statements:
All pages are diaries.
Some diaries are books.
All books are notebooks.

Conclusions:
I. No page is a notebook.
II. All pages are notebooks.
III. All diaries being notebooks is a possibility.

- Ans**
- 1. Both conclusion I and II follow
 - 2. Only conclusions I and III follow
 - 3. Only conclusion II follows
 - 4. Only conclusion III follows

Question ID : 630680416385
Option 1 ID : 6306801624305
Option 2 ID : 6306801624306
Option 3 ID : 6306801624304
Option 4 ID : 6306801624303
Status : Answered
Chosen Option : 4

Q.12 $\left[\frac{24}{7}\right]$ is related to $\left[\frac{12}{7}\right]$ following a certain logic. Following the same logic, $\left[\frac{11}{15}\right]$ is related to $\left[\frac{11}{30}\right]$. To which of the following is $\left[\frac{2}{13}\right]$ related, following the same logic?

(NOTE : Operations should be performed on the whole numbers, without breaking down the numbers into its constituent digits. E.g. 13 – Operations on 13 such as adding /deleting /multiplying etc., to 13 can be performed. Breaking down 13 into 1 and 3 and then performing mathematical operations on 1 and 3 is not allowed.)

- Ans**
- 1. $\left[\frac{15}{26}\right]$
 - 2. $\left[\frac{9}{26}\right]$
 - 3. $\left[\frac{9}{39}\right]$
 - 4. $\left[\frac{10}{27}\right]$

Question ID : 630680344256
Option 1 ID : 6306801339337
Option 2 ID : 6306801339339
Option 3 ID : 6306801339340
Option 4 ID : 6306801339338
Status : Answered
Chosen Option : 2

Q.13 Six words Eat, Cry, Play, Sleep, Run and Bath are written on different faces of a dice. Three positions of this dice are shown in the figure. Find the word on the face opposite to Eat.



- Ans
- 1. Cry
 - 2. Run
 - 3. Sleep
 - 4. Play

Question ID : 630680296578
Option 1 ID : 6306801153963
Option 2 ID : 6306801153964
Option 3 ID : 6306801153965
Option 4 ID : 6306801153966
Status : Answered
Chosen Option : 2

Q.14 Select the word-pair that best represents a similar relationship to the one expressed in the pair of words given below.
(The words must be considered as meaningful English words and must NOT be related to each other based on the number of letters/number of consonants/vowels in the word)

Virus : Parasite

- Ans
- 1. Amaltas : Tree
 - 2. Fungus : Jasmine
 - 3. Algae : Flower
 - 4. Fenugreek : Micro organism

Question ID : 630680417411
Option 1 ID : 6306801628407
Option 2 ID : 6306801628409
Option 3 ID : 6306801628408
Option 4 ID : 6306801628410
Status : Answered
Chosen Option : 4

Q.15 Select the number from the given options to complete the series.
25, 30, 40, 55, 75, ____

- Ans
- 1. 80
 - 2. 100
 - 3. 105
 - 4. 85

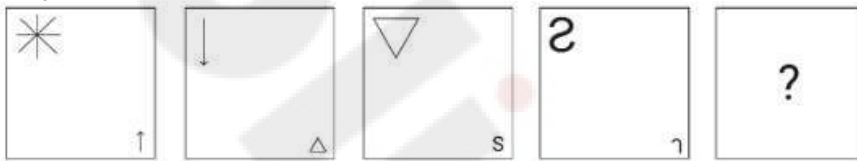
Question ID : 630680411911
Option 1 ID : 6306801606479
Option 2 ID : 6306801606481
Option 3 ID : 6306801606482
Option 4 ID : 6306801606480
Status : Answered
Chosen Option : 2

Q.16 'WISK' is related to 'DRHP' in a certain way based on the English alphabetical order. In the same way, 'LENT' is related to 'OVMG'. To which of the following is 'BANG' related, following the same logic?

- Ans
- 1. ZYNS
 - 2. YZMT
 - 3. ZYLU
 - 4. YZNU

Question ID : 630680416358
 Option 1 ID : 6306801624197
 Option 2 ID : 6306801624198
 Option 3 ID : 6306801624195
 Option 4 ID : 6306801624196
 Status : Answered
 Chosen Option : 2

Q.17 Identify the figure given in the options which when put in place of '?' will logically complete the series.

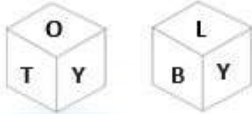


Ans

- 1.
- 2.
- 3.
- 4.

Question ID : 630680366157
 Option 1 ID : 6306801426156
 Option 2 ID : 6306801426154
 Option 3 ID : 6306801426155
 Option 4 ID : 6306801426153
 Status : Answered
 Chosen Option : 2

Q.18 Two different positions of the same dice with faces T, O, B, L, Y and V are shown below. Select the letter that will be on the face opposite to the one having L.



- Ans 1. O
 2. Y
 3. V
 4. B

Question ID : 630680349072
Option 1 ID : 6306801358579
Option 2 ID : 6306801358580
Option 3 ID : 6306801358577
Option 4 ID : 6306801358578
Status : Answered
Chosen Option : 1

Q.19 Which two signs should be interchanged to make the following equation correct?
 $247 \div 13 + 16 \times 3 - 148 = 119$

- Ans 1. - and +
 2. + and ×
 3. - and ×
 4. + and ×

Question ID : 630680204290
Option 1 ID : 630680792244
Option 2 ID : 630680792243
Option 3 ID : 630680792245
Option 4 ID : 630680792246
Status : Answered
Chosen Option : 1

Q.20 The position(s) of how many letters will remain unchanged if all the letters in the word 'ENTOMB' are arranged in English alphabetical order?

- Ans 1. One
 2. Two
 3. None
 4. Three

Question ID : 630680375918
Option 1 ID : 6306801464744
Option 2 ID : 6306801464745
Option 3 ID : 6306801464743
Option 4 ID : 6306801464746
Status : Answered
Chosen Option : 3

Q.21 Select the correct mirror image of the given figure when the mirror is placed at MN.



- Ans
- 1. K G 2 F 7 p e
 - 2. e p 7 F 2 G K
 - 3. K G 2 F 7 p e
 - 4. e p 7 F 2 G K

Question ID : 630680325821
Option 1 ID : 6306801267479
Option 2 ID : 6306801267477
Option 3 ID : 6306801267478
Option 4 ID : 6306801267480
Status : Answered
Chosen Option : 3

Q.22 Select the set in which the numbers are related in the same way as are the numbers of the given sets.

(213, 157), (185, 129)

(NOTE : Operations should be performed on the whole numbers, without breaking down the numbers into its constituent digits. E.g., 13 – Operations on 13 such as adding /deleting /multiplying etc. to 13 can be performed. Breaking down 13 into 1 and 3 and then performing mathematical operations on 1 and 3 is not allowed)

- Ans
- 1. (192, 152)
 - 2. (164, 108)
 - 3. (171, 123)
 - 4. (189, 141)

Question ID : 630680319359
Option 1 ID : 6306801242342
Option 2 ID : 6306801242344
Option 3 ID : 6306801242343
Option 4 ID : 6306801242341
Status : Answered
Chosen Option : 2

Q.23 In a certain code language,

'A + B' means 'A is the mother of B';
'A - B' means 'A is the brother of B';
'A × B' means 'A is the wife of B' and
'A ÷ B' means 'A is the father of B'.

Based on the above, how is 4 related to 2 if '4 + 3 ÷ 2 ÷ 1 - 5'?

- Ans
- 1. Mother's father
 - 2. Father's father
 - 3. Mother's mother
 - 4. Father's mother

Question ID : 630680300377
Option 1 ID : 6306801168408
Option 2 ID : 6306801168407
Option 3 ID : 6306801168410
Option 4 ID : 6306801168409
Status : Answered
Chosen Option : 4

Q.24 Based on the English alphabetical order, three of the following four letter-clusters are alike in a certain way and thus form a group. Which is the one that DOES NOT belong to that group?

(Note: The odd man out is not based on the number of consonants/vowels or their position in the letter-cluster.)

- Ans
- 1. FDZ
 - 2. JHD
 - 3. AYU
 - 4. KJE

Question ID : 630680812274
Option 1 ID : 6306803182544
Option 2 ID : 6306803182542
Option 3 ID : 6306803182543
Option 4 ID : 6306803182541
Status : Answered
Chosen Option : 4

Q.25 Select the correct mirror image of the given figure when the mirror is placed at MN as shown below.



- Ans
- 1. @ 4 7 w R h
 - 2. @ 4 7 w R h
 - 3. @ 4 7 w R h
 - 4. @ 4 7 w R h

Question ID : 630680356660
Option 1 ID : 6306801388643
Option 2 ID : 6306801388641
Option 3 ID : 6306801388642
Option 4 ID : 6306801388644
Status : Answered
Chosen Option : 2

Section : General Awareness

Q.1 The organisms that do not have a defined nucleus or organelles are classified in to _____ Kingdom.

- Ans
- 1. Fungi
 - 2. Monera
 - 3. Protista
 - 4. Plantae

Question ID : 630680517135
Option 1 ID : 6306802020936
Option 2 ID : 6306802020938
Option 3 ID : 6306802020937
Option 4 ID : 6306802020939
Status : Marked For Review
Chosen Option : 1

Q.2 Kathakali, one of the classical dances of India, is predominantly performed in which of the following states of India?

- Ans
- 1. Uttar Pradesh
 - 2. Assam
 - 3. Kerala
 - 4. Manipur

Question ID : 630680405000
Option 1 ID : 6306801579431
Option 2 ID : 6306801579433
Option 3 ID : 6306801579432
Option 4 ID : 6306801579434
Status : Answered
Chosen Option : 3

Q.3 In 2002, Zakir Hussain became the youngest percussionist to be honoured with which award?

- Ans** 1. Padma Bhushan
 2. National Heritage Fellowship
 3. Grammy Award
 4. Sangeet Natak Akademi Award

Question ID : 630680511802
Option 1 ID : 6306802000179
Option 2 ID : 6306802000181
Option 3 ID : 6306802000178
Option 4 ID : 6306802000180
Status : Answered
Chosen Option : 3

Q.4 Microbes like Rhizobium, Nitrosomonas and Nitrobacter are used for:

- Ans** 1. carbon cycling
 2. nitrogen cycling
 3. water cycling
 4. sulphur cycling

Question ID : 630680305605
Option 1 ID : 6306801188794
Option 2 ID : 6306801188793
Option 3 ID : 6306801188796
Option 4 ID : 6306801188795
Status : Marked For Review
Chosen Option : 2

Q.5 Which is the National Mission for Financial Inclusion to ensure access to financial services, namely, a basic savings and deposits accounts, remittance, credit, insurance, pension in an affordable manner?

- Ans** 1. Swarnjayanti Gram Swarozgar Yojana
 2. Pradhan Mantri Jan Dhan Yojana
 3. Deendayal Antyodaya Yojana
 4. Deen Dayal Upadhyaya Grameen Kaushalya Yojana

Question ID : 630680213955
Option 1 ID : 630680829870
Option 2 ID : 630680829869
Option 3 ID : 630680829867
Option 4 ID : 630680829868
Status : Answered
Chosen Option : 2

Q.6 What is net investment?

- Ans** 1. Gross investment + depreciation
 2. Gross investment - depreciation
 3. Gross capital investment - indirect taxes
 4. Sum of all the investments in a country

Question ID : 63068068591
Option 1 ID : 630680265054
Option 2 ID : 630680265055
Option 3 ID : 630680265056
Option 4 ID : 630680265057
Status : Answered
Chosen Option : 2

Q.7 Match the following institutes with their respective founders of British India.

Institutes

- a. Asiatic Society of Bengal
- b. Sanskrit College of Benaras
- c. Fort William College
- d. Calcutta Madrasa

Their respective founders

- i. Warren Hastings
- ii. Lord Wellesley
- iii. Jonathan Duncan
- iv. Sir William Jones

- Ans**
- 1. a-i, b-ii, c-iii, d-iv
 - 2. a-iv, b-iii, c-ii, d-i
 - 3. a-iii, b-iv, c-i, d-ii
 - 4. a-ii, b-i, c-iv, d-iii

Question ID : 630680412386
Option 1 ID : 6306801608369
Option 2 ID : 6306801608368
Option 3 ID : 6306801608367
Option 4 ID : 6306801608370
Status : Answered
Chosen Option : 2

Q.8 In which state/UT is the Hemis festival celebrated?

- Ans**
- 1. Sikkim
 - 2. Punjab
 - 3. Lakshadweep
 - 4. Ladakh

Question ID : 630680158770
Option 1 ID : 630680614573
Option 2 ID : 630680614575
Option 3 ID : 630680614572
Option 4 ID : 630680614574
Status : Answered
Chosen Option : 4

Q.9 A javelin thrown by an athlete is in _____ motion.

- Ans**
- 1. rectilinear
 - 2. periodic
 - 3. curvilinear
 - 4. oscillatory

Question ID : 63068094225
Option 1 ID : 630680365596
Option 2 ID : 630680365597
Option 3 ID : 630680365595
Option 4 ID : 630680365598
Status : Answered
Chosen Option : 4

Q.10 Who among the following is the world renowned exponent of the bamboo flute?

- Ans 1. MS Subbulakshmi
 2. Hariprasad Chaurasia
 3. Ravi Shankar
 4. Bismillah Khan

Question ID : 63068089803
Option 1 ID : 630680347986
Option 2 ID : 630680347987
Option 3 ID : 630680347989
Option 4 ID : 630680347988
Status : Answered
Chosen Option : 2

Q.11 The magnificent Kailasa temple at Ellora was built during the reign of which Rashtrakuta king?

- Ans 1. Indra III
 2. Govinda III
 3. Krishna I
 4. Amoghavarsha

Question ID : 630680412407
Option 1 ID : 6306801608454
Option 2 ID : 6306801608452
Option 3 ID : 6306801608451
Option 4 ID : 6306801608453
Status : Marked For Review
Chosen Option : 3

Q.12 Which Article of the Constitution of India provides that 'there shall be a Vice President of India'?

- Ans 1. Article 61
 2. Article 63
 3. Article 65
 4. Article 62

Question ID : 630680215485
Option 1 ID : 630680835919
Option 2 ID : 630680835921
Option 3 ID : 630680835922
Option 4 ID : 630680835920
Status : Answered
Chosen Option : 2

Q.13 Purvanchal Himalayas does NOT comprise of:

- Ans 1. Pir Panjal range
 2. Mizo hills
 3. Manipur hills
 4. Naga hills

Question ID : 630680309101
Option 1 ID : 6306801202582
Option 2 ID : 6306801202583
Option 3 ID : 6306801202584
Option 4 ID : 6306801202581
Status : Answered
Chosen Option : 1

Q.14 Which of the following plays was NOT written by Harshavardhana?

Ans 1. Vikramorvasiyam

2. Nagananda

3. Ratnavali

4. Priyadarshika

Question ID : 630680412478
Option 1 ID : 6306801608735
Option 2 ID : 6306801608736
Option 3 ID : 6306801608738
Option 4 ID : 6306801608737
Status : Answered
Chosen Option : 4

Q.15 In August 2022, the Ministry of Social Justice and Empowerment launched the _____ scheme, with an aim to provide comprehensive rehabilitation services to people engaged in begging in 75 municipalities.

Ans 1. SMILE-75

2. BEAM-75

3. TWINKLE-75

4. RISE-75

Question ID : 630680327510
Option 1 ID : 6306801274040
Option 2 ID : 6306801274039
Option 3 ID : 6306801274037
Option 4 ID : 6306801274038
Status : Answered
Chosen Option : 1

Q.16 A student, on his school assignment, is taking a session on how to make compost at home for using it at a park. Which fundamental duty is he performing?

Ans 1. To strive towards excellence in all spheres of individual and collective activity

2. To protect and improve the natural environment

3. To develop the scientific temper, humanism and the spirit of inquiry

4. To safeguard public property and to abjure violence

Question ID : 630680229988
Option 1 ID : 630680892393
Option 2 ID : 630680892394
Option 3 ID : 630680892391
Option 4 ID : 630680892392
Status : Answered
Chosen Option : 4

Q.17 India won the ICC Men Cricket World Cup for the first time in which of the following years?

- Ans 1. 1992
 2. 1987
 3. 1996
 4. 1983

Question ID : 630680510790
Option 1 ID : 6306801996292
Option 2 ID : 6306801996291
Option 3 ID : 6306801996293
Option 4 ID : 6306801996290
Status : Answered
Chosen Option : 4

Q.18 Calculate the oxidation number of 'S' in $H_2S_2O_7$.

- Ans 1. 3
 2. 7
 3. 2
 4. 6

Question ID : 630680184312
Option 1 ID : 630680714258
Option 2 ID : 630680714260
Option 3 ID : 630680714257
Option 4 ID : 630680714259
Status : Not Answered
Chosen Option : --

Q.19 Which of the following is NOT an amendment made to the Airport Economic Regulatory Authority (AERA) Amendment Act, 2021?

- Ans 1. The government can call any airport a major airport just by notification.
 2. A major airport is one which has an annual traffic of minimum 35 lakh passengers.
 3. The government will club together profit-making and loss-making airports.
 4. The government can offer airports as a package in PPP mode to the prospective bidders.

Question ID : 630680114023
Option 1 ID : 630680441495
Option 2 ID : 630680441497
Option 3 ID : 630680441494
Option 4 ID : 630680441496
Status : Not Answered
Chosen Option : --

Q.20 In which year did India make its Olympic debut in hockey?

- Ans 1. 1936
 2. 1928
 3. 1924
 4. 1932

Question ID : 630680510755
Option 1 ID : 6306801996153
Option 2 ID : 6306801996151
Option 3 ID : 6306801996150
Option 4 ID : 6306801996152
Status : Answered
Chosen Option : 2

Q.21 Who among the following was selected as the Sherpa for India's G20 hosted in 2022-23?

- Ans 1. Amitabh Kant
 2. Piyush Goyal
 3. Ashwini Vaishnav
 4. Shaktikanta Das

Question ID : 630680413020
Option 1 ID : 6306801610904
Option 2 ID : 6306801610903
Option 3 ID : 6306801610905
Option 4 ID : 6306801610906
Status : Answered
Chosen Option : 1

Q.22 With reference to Sepoy Mutiny of 1857, on which of the following dates did the soldiers at Meerut start their journey to Delhi?

- Ans 1. 29 March
 2. 10 May
 3. 2 June
 4. 19 April

Question ID : 630680511526
Option 1 ID : 6306801999226
Option 2 ID : 6306801999228
Option 3 ID : 6306801999229
Option 4 ID : 6306801999227
Status : Marked For Review
Chosen Option : 2

Q.23 The green revolution technology resulted in an increase in production of cereal production from 72.4 million tons in 1965-66 to _____ million tons in 1978-79.

- Ans 1. 150.8
 2. 165.9
 3. 141.2
 4. 131.9

Question ID : 6306801048049
Option 1 ID : 6306804114242
Option 2 ID : 6306804114245
Option 3 ID : 6306804114244
Option 4 ID : 6306804114243
Status : Not Answered
Chosen Option : --

Q.24 Identify the oldest iron and steel company of India from the following options.

- Ans 1. Mysore Iron & Steel Works
 2. Tata Iron & Steel Company(TISCO)
 3. Visvesvaraiya Iron & Steel Works
 4. Indian Iron & Steel Company (IISCO)

Question ID : 630680394655
Option 1 ID : 6306801538907
Option 2 ID : 6306801538908
Option 3 ID : 6306801538909
Option 4 ID : 6306801538906
Status : Answered
Chosen Option : 2

Q.25 Which of the following is the largest artificial lake of Asia?

- Ans 1. Chilika Lake
 2. Dal Lake
 3. Bhopal Lake
 4. Naini Lake

Question ID : 630680115420
Option 1 ID : 630680447033
Option 2 ID : 630680447032
Option 3 ID : 630680447031
Option 4 ID : 630680447030
Status : Answered
Chosen Option : 1

Section : Quantitative Aptitude

Q.1 Which digits should come in place * and \$, respectively, if the number 72864*\$ is divisible by both 8 and 5?

- Ans 1. 4 and 5
 2. 2 and 0
 3. 4 and 0
 4. 2 and 5

Question ID : 630680135106
Option 1 ID : 630680523212
Option 2 ID : 630680523211
Option 3 ID : 630680523210
Option 4 ID : 630680523213
Status : Answered
Chosen Option : 3

Q.2 A shopkeeper marked an article at ₹5,000. The shopkeeper allows successive discounts of 20%,15% and 10%. The selling price of the article is:

- Ans 1. ₹3,060
 2. ₹2,750
 3. ₹3,000
 4. ₹2,800

Question ID : 63068068319
Option 1 ID : 630680263986
Option 2 ID : 630680263987
Option 3 ID : 630680263988
Option 4 ID : 630680263989
Status : Answered
Chosen Option : 1

Q.3 The measures of the three angles of a triangle are in the ratio 17 : 13 : 15. Find the positive difference between the greatest and the smallest of these three angles.

- Ans
- 1. 24°
 - 2. 20°
 - 3. 16°
 - 4. 12°

Question ID : 630680196702
Option 1 ID : 630680763110
Option 2 ID : 630680763109
Option 3 ID : 630680763108
Option 4 ID : 630680763107
Status : Answered
Chosen Option : 3

Q.4 A certain sum of money becomes seven times itself when invested at a certain rate of simple interest, in 14 years. How much time (in years, rounded off to 2 decimal places) will it take to become 18 times itself at the same rate?

- Ans
- 1. 35.5
 - 2. 27.33
 - 3. 42.78
 - 4. 39.67

Question ID : 630680392654
Option 1 ID : 6306801530957
Option 2 ID : 6306801530955
Option 3 ID : 6306801530956
Option 4 ID : 6306801530954
Status : Answered
Chosen Option : 4

Q.5 In a triangle PQR, S is a point on the side QR such that $PS \perp QR$, then which of the following options is true?

- Ans
- 1. $PS^2 + QS^2 = PQ^2 + PR^2$
 - 2. $PS^2 + PR^2 = PQ^2 + QR^2$
 - 3. $PQ^2 + PR^2 = QS^2 + SR^2$
 - 4. $PR^2 + QS^2 = PQ^2 + SR^2$

Question ID : 630680421424
Option 1 ID : 6306801644162
Option 2 ID : 6306801644160
Option 3 ID : 6306801644159
Option 4 ID : 6306801644161
Status : Answered
Chosen Option : 3

Q.6 M and N walk along a circular track. They start at 5:00 a.m. from the same point in the opposite directions. M and N walk at a speed of 5 rounds per hour and 2 rounds per hour, respectively. How many times will they cross each other before 6.30 a.m. on the same day?

Ans 1.3

2.7

3.10

4.5

Question ID : 630680138077

Option 1 ID : 630680534579

Option 2 ID : 630680534578

Option 3 ID : 630680534580

Option 4 ID : 630680534581

Status : Answered

Chosen Option : 2

Q.7 Two pipes, A and B, can fill a tank in 10 minutes and 20 minutes, respectively. The pipe C can empty the tank in 30 minutes. All the three pipes are opened at a time in the beginning. However, pipe C is closed 2 minutes before the tank is filled. In what time, will the tank be full (in minutes)?

Ans 1.10

2.8

3.12

4.6

Question ID : 630680388586

Option 1 ID : 6306801514809

Option 2 ID : 6306801514807

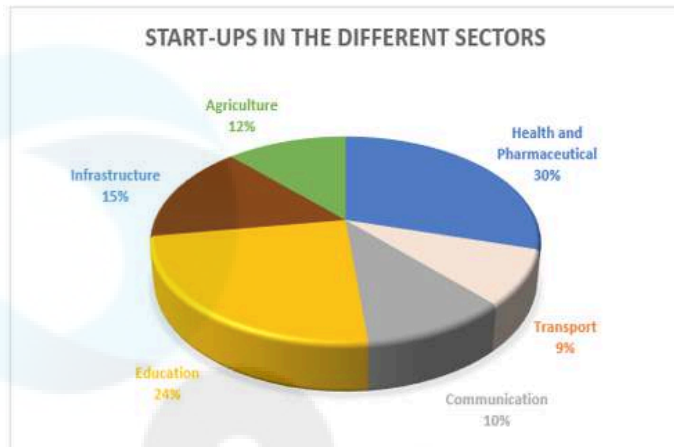
Option 3 ID : 6306801514806

Option 4 ID : 6306801514808

Status : Answered

Chosen Option : 2

- Q.8** Study the given pie chart carefully and answer the question that follows.
The given pie chart shows the number of successful start-ups in different sectors in a particular year.



If the total number of successful start-ups is 2910, then find the number of start-ups in the education and agriculture sectors. (Neglect the decimal part.)

- Ans**
- 1. 1074
 - 2. 698
 - 3. 1048
 - 4. 1047

Question ID : 630680428001
Option 1 ID : 6306801670051
Option 2 ID : 6306801670050
Option 3 ID : 6306801670048
Option 4 ID : 6306801670049
Status : Answered
Chosen Option : 4

- Q.9** The incomes of P, Q and R are in the ratio 10 : 12 : 9 and their expenditures are in the ratio 12 : 15 : 8. If Q saves 25% of his income, then what is the ratio of the savings of P, Q and R?

- Ans**
- 1. 21 : 14 : 15
 - 2. 15 : 14 : 21
 - 3. 21 : 15 : 14
 - 4. 14 : 15 : 21

Question ID : 630680427951
Option 1 ID : 6306801669849
Option 2 ID : 6306801669851
Option 3 ID : 6306801669850
Option 4 ID : 6306801669848
Status : Not Answered
Chosen Option : --

Q.10

Let $t = \frac{2}{5}$, then the value of the expression $t^3 + \left(\frac{3}{5}\right)^3 + \frac{9}{5}t$ is:

Ans

1. $\frac{1}{2}$

2. 2

3. $\frac{1}{5}$

4. 1

Question ID : 630680413484
Option 1 ID : 6306801612762
Option 2 ID : 6306801612761
Option 3 ID : 6306801612763
Option 4 ID : 6306801612760
Status : Answered
Chosen Option : 4

Q.11 The average of 12 numbers is 48. The average of the first 5 numbers is 45 and the average of next 4 numbers is 52. If the 10th number is 10 less than the 11th number and is 5 more than the 12th number, then the average of the 11th and 12th numbers is:

Ans 1. 48.5

2. 47.5

3. 46.5

4. 50.5

Question ID : 630680397520
Option 1 ID : 6306801550000
Option 2 ID : 6306801549999
Option 3 ID : 6306801549998
Option 4 ID : 6306801550001
Status : Answered
Chosen Option : 4

Q.12 The classification of 100 students based on the marks obtained by them in English and Mathematics in an examination is given in the table below. Study the table and answer the question that follows.

MARKS OUT OF 50					
SUBJECT	40 and above	30 and above	20 and above	10 and above	0 and above
ENGLISH	10	31	80	92	100
MATHEMATICS	3	23	65	81	100
AGGREGATE	7	27	73	87	100

If at least 40% marks in Mathematics are required for pursuing higher studies in Mathematics, how many students will be eligible to pursue higher studies in Mathematics?

Ans 1. 65

2. 70

3. 55

4. 50

Question ID : 630680405109
Option 1 ID : 6306801579796
Option 2 ID : 6306801579795
Option 3 ID : 6306801579793
Option 4 ID : 6306801579794
Status : Answered
Chosen Option : 1

Q.13 Study the given table and answer the question that follows.

The given table shows the production of different types of refrigerators in a company.

Years	Types of Refrigerators		
	A	B	C
2011	2018	1800	1932
2012	2040	1890	1800
2013	2035	1910	1890
2014	2020	1940	1978
2015	1997	1960	1900

In which of the given year(s) was the production of B type refrigerator closest to its average production over the given years?

- Ans
- 1. Both 2012 and 2013
 - 2. Both 2013 and 2015
 - 3. Only 2012
 - 4. 2014

Question ID : 630680410324
Option 1 ID : 6306801600030
Option 2 ID : 6306801600029
Option 3 ID : 6306801600027
Option 4 ID : 6306801600028
Status : Not Answered
Chosen Option : --

Q.14 The height of a cylinder is 20 cm. The lateral surface area is 1760 cm^2 . Its volume is:

- Ans
- 1. 12032 cm^3
 - 2. 12302 cm^3
 - 3. 12320 cm^3
 - 4. 12203 cm^3

Question ID : 630680101508
Option 1 ID : 630680394552
Option 2 ID : 630680394554
Option 3 ID : 630680394553
Option 4 ID : 630680394555
Status : Answered
Chosen Option : 3

Q.15 Raj divides ₹1,200 in the ratio 2 : 1 : 3 among three of his friends. The amount equal to the sum of three times the largest share and two times the smallest share is:

- Ans
- 1. ₹1,800
 - 2. ₹2,400
 - 3. ₹2,000
 - 4. ₹2,200

Question ID : 630680429073
Option 1 ID : 6306801674338
Option 2 ID : 6306801674337
Option 3 ID : 6306801674339
Option 4 ID : 6306801674336
Status : Answered
Chosen Option : 4

Q.16

If $x + \frac{1}{x} = 15$, then the value of $\frac{7x^2 - 9x + 7}{x^2 - x + 1}$ is:

Ans

1. $-\frac{22}{7}$

2. $\frac{22}{7}$

3. $-\frac{48}{7}$

4. $\frac{48}{7}$

Question ID : 630680413499

Option 1 ID : 6306801612823

Option 2 ID : 6306801612820

Option 3 ID : 6306801612822

Option 4 ID : 6306801612821

Status : Answered

Chosen Option : 4

Q.17 In triangles ABC and DEF, $AB = FD$ and $\angle A = \angle D$. The two triangles are congruent by SAS criterion if:

Ans 1. $AC = DE$

2. $AC = EF$

3. $BC = DE$

4. $BC = EF$

Question ID : 630680526507

Option 1 ID : 6306802058096

Option 2 ID : 6306802058097

Option 3 ID : 6306802058095

Option 4 ID : 6306802058094

Status : Answered

Chosen Option : 1

Q.18 The given table shows the number of soaps sold by four different companies in 4 different months.

Month Company	May	June	July	August
P	1924	1780	1820	1490
Q	1540	1245	1648	2450
R	2035	1485	1350	1650
S	1736	1855	1470	1180

The total number of soaps sold by companies Q and S together in May, is what percentage more than the number of soaps sold by company P in July?

- Ans**
- 1. 65%
 - 2. 90%
 - 3. 80%
 - 4. 75%

Question ID : 630680523768
Option 1 ID : 6306802047223
Option 2 ID : 6306802047226
Option 3 ID : 6306802047225
Option 4 ID : 6306802047224
Status : Not Answered
Chosen Option : --

Q.19 If $28.9 : x :: x : 36.1$, and $x > 0$, then find the value of x .

- Ans**
- 1. 38.3
 - 2. 30.4
 - 3. 35
 - 4. 32.3

Question ID : 630680802597
Option 1 ID : 6306803144546
Option 2 ID : 6306803144547
Option 3 ID : 6306803144545
Option 4 ID : 6306803144544
Status : Answered
Chosen Option : 4

Q.20 A payment of ₹120 is made with ₹10, ₹5 and ₹2 coins. A total of 25 coins are used. Which of the following is the number of ₹10 coins used in the payment?

- Ans**
- 1. 10
 - 2. 4
 - 3. 8
 - 4. 6

Question ID : 630680387754
Option 1 ID : 6306801511649
Option 2 ID : 6306801511650
Option 3 ID : 6306801511648
Option 4 ID : 6306801511651
Status : Answered
Chosen Option : 3

Q.2 If $2\operatorname{cosec}^2\theta + 3\cot^2\theta = 17$, then the value of ' θ ' when $0^\circ \leq \theta \leq 90^\circ$ is:

1

Ans 1. 45°

2. 30°

3. 75°

4. 90°

Question ID : 630680397023

Option 1 ID : 6306801548144

Option 2 ID : 6306801548147

Option 3 ID : 6306801548146

Option 4 ID : 6306801548145

Status : Answered

Chosen Option : 2

Q.22 Find the value of the following expression.

$$\sqrt{\frac{1+\sin\theta}{1-\sin\theta}}$$

Ans 1. $\operatorname{cosec}\theta + \cot\theta$

2. $\sec\theta + \tan\theta$

3. $\operatorname{cosec}\theta + \tan\theta$

4. $\sec\theta + \cot\theta$

Question ID : 630680385446

Option 1 ID : 6306801502598

Option 2 ID : 6306801502599

Option 3 ID : 6306801502600

Option 4 ID : 6306801502601

Status : Answered

Chosen Option : 3

Q.23 Simplify

$$15.5 - [3 - \{7 - (5 - (14.5 - 13.5))\}].$$

Ans 1. 15.5

2. 13.5

3. 14.5

4. 12.5

Question ID : 630680426225

Option 1 ID : 6306801663006

Option 2 ID : 6306801663004

Option 3 ID : 6306801663005

Option 4 ID : 6306801663003

Status : Answered

Chosen Option : 1

Q.24 Two circles C_1 and C_2 touch each other externally. The radius of $C_1 = 16$ cm and the radius of $C_2 = 8$ cm. Find the length (in cm) of their common tangent.

- Ans
- 1. $8\sqrt{2}$
 - 2. $16\sqrt{2}$
 - 3. $8\sqrt{3}$
 - 4. $16\sqrt{3}$

Question ID : 630680285611
Option 1 ID : 6306801110411
Option 2 ID : 6306801110412
Option 3 ID : 6306801110414
Option 4 ID : 6306801110413
Status : Answered
Chosen Option : 2

Q.25 The value of $\left(\frac{\sin\theta - 2\sin^3\theta}{2\cos^3\theta - \cos\theta}\right)^3 \frac{1}{\tan\theta} - \sec^2\theta$ is:

- Ans
- 1. 2
 - 2. -1
 - 3. 1
 - 4. 0

Question ID : 630680397722
Option 1 ID : 6306801550886
Option 2 ID : 6306801550883
Option 3 ID : 6306801550885
Option 4 ID : 6306801550884
Status : Answered
Chosen Option : 2

Section : English Comprehension

Q.1 Identify the most appropriate ANTONYM of the given word.
Secure

- Ans
- 1. Trundle
 - 2. Save
 - 3. Succeed
 - 4. Attack

Question ID : 630680392740
Option 1 ID : 6306801531301
Option 2 ID : 6306801531298
Option 3 ID : 6306801531299
Option 4 ID : 6306801531300
Status : Answered
Chosen Option : 4

Q.2 Select the most appropriate synonym of the given word.
Acquiesce

- Ans** 1. Thwart
 2. Cease
 3. Desist
 4. Concur

Question ID : 630680177546
Option 1 ID : 630680688345
Option 2 ID : 630680688347
Option 3 ID : 630680688346
Option 4 ID : 630680688344
Status : Answered
Chosen Option : 1

Q.3 Select the option that can be used as a one-word substitute for the underlined group of words.

In Indian mythology, most of the Asuras wish to be never able to die.

- Ans** 1. Immortal
 2. Invisible
 3. Impervious
 4. Invincible

Question ID : 630680129380
Option 1 ID : 630680501141
Option 2 ID : 630680501138
Option 3 ID : 630680501139
Option 4 ID : 630680501140
Status : Answered
Chosen Option : 1

Q.4 Sentences of a paragraph are given below in jumbled order. Arrange the sentences in the correct order to form a meaningful and coherent paragraph.

- A. The genuine beliefs, though not unconsciously acquired by most children; and even if they depart from these beliefs in later life
B. Something of them remains deeply implanted, ready to emerge in a time of stress of crisis
C. The importance of education in forming character and opinion is very great and well recognised by all
D. Education is, as a rule, the strongest force on the side of what exists and again fundamental change

- Ans** 1. DABC
 2. CBAD
 3. DCAB
 4. CABD

Question ID : 630680167079
Option 1 ID : 630680647177
Option 2 ID : 630680647176
Option 3 ID : 630680647178
Option 4 ID : 630680647179
Status : Answered
Chosen Option : 3

Q.5 Select the most appropriate meaning of the underlined idiom in the following sentence.

In my new office, all employees were different, so I felt like a fish out of water.

- Ans
- 1. Disappointed
 - 2. Frustrated
 - 3. Homeless
 - 4. Uncomfortable

Question ID : 630680316702
Option 1 ID : 6306801231987
Option 2 ID : 6306801231985
Option 3 ID : 6306801231986
Option 4 ID : 6306801231988
Status : Answered
Chosen Option : 4

Q.6 Select the most appropriate synonym of the bracketed word in the following sentence to fill in the blank.

During Covid times, many organisations made _____ (sentimental) appeals to raise funds for migrant workers.

- Ans
- 1. practical
 - 2. mawkish
 - 3. cynical
 - 4. sincere

Question ID : 630680310099
Option 1 ID : 6306801206539
Option 2 ID : 6306801206537
Option 3 ID : 6306801206538
Option 4 ID : 6306801206540
Status : Answered
Chosen Option : 4

Q.7 Select the option that will improve the underlined part of the given sentence.
If I was the queen, I would give a handsome sum towards education.

- Ans
- 1. will be the queen
 - 2. would be the queen
 - 3. have been the queen
 - 4. were the queen

Question ID : 630680160926
Option 1 ID : 630680623069
Option 2 ID : 630680623071
Option 3 ID : 630680623068
Option 4 ID : 630680623070
Status : Answered
Chosen Option : 4

Q.8 Select the **INCORRECTLY** spelt word.

- Ans 1. Embarrass
 2. Accommodate
 3. Exhilerate
 4. Occurrence

Question ID : 63068040927
Option 1 ID : 6306801598538
Option 2 ID : 6306801598537
Option 3 ID : 6306801598539
Option 4 ID : 6306801598540
Status : Answered
Chosen Option : 4

Q.9 Select the **INCORRECTLY** spelt word.

- Ans 1. Succeed
 2. Preceed
 3. Proceed
 4. Exceed

Question ID : 630680360089
Option 1 ID : 6306801402301
Option 2 ID : 6306801402302
Option 3 ID : 6306801402304
Option 4 ID : 6306801402303
Status : Answered
Chosen Option : 2

Q.10 Select the option that expresses the following sentence in passive voice.
Sonam does not like bananas.

- Ans 1. Bananas had not been liked by Sonam.
 2. Bananas have not been liked by Sonam.
 3. Bananas are not liked by Sonam.
 4. Banana is not liked by Sonam.

Question ID : 630680415245
Option 1 ID : 6306801619730
Option 2 ID : 6306801619729
Option 3 ID : 6306801619728
Option 4 ID : 6306801619727
Status : Answered
Chosen Option : 3

Q.11 Select the most appropriate synonym for the underlined word in the given sentence.
His ambition in life is to become a happy and satisfied man.

- Ans 1. Eagerness
 2. Amend
 3. Satisfaction
 4. Apathy

Question ID : 630680167053
Option 1 ID : 630680647072
Option 2 ID : 630680647075
Option 3 ID : 630680647074
Option 4 ID : 630680647073
Status : Answered
Chosen Option : 3

Q.12 Read the sentence carefully and select the most suitable idiom to fill in the blank.

The renowned publisher decided to withdraw a book from the market. No one was interested in the book as the arguments presented were _____.

- Ans
- 1. under the rose
 - 2. high and mighty
 - 3. beside the mark
 - 4. out of the woods

Question ID : 630680123921
Option 1 ID : 630680480546
Option 2 ID : 630680480547
Option 3 ID : 630680480548
Option 4 ID : 630680480549
Status : Answered
Chosen Option : 3

Q.13 The following sentence has been divided into four segments. Identify the segment that contains an error.

Mrs. Sreelakshmi's / musical intelligence / is superior than / Mrs. Suma's.

- Ans
- 1. Mrs. Sreelakshmi's
 - 2. musical intelligence
 - 3. Mrs. Suma's.
 - 4. is superior than

Question ID : 630680206703
Option 1 ID : 630680801411
Option 2 ID : 630680801412
Option 3 ID : 630680801414
Option 4 ID : 630680801413
Status : Answered
Chosen Option : 4

Q.14 Select the most appropriate meaning of the underlined word in the given sentence.
He is an atheist, although he respects everyone's belief.

- Ans
- 1. One who believes in nature
 - 2. One who does not believe in God
 - 3. One who believes in God
 - 4. One who is extremist

Question ID : 630680129839
Option 1 ID : 630680502946
Option 2 ID : 630680502949
Option 3 ID : 630680502948
Option 4 ID : 630680502947
Status : Answered
Chosen Option : 2

Q.15 Select the most appropriate ANTONYM of the given word.
Receive

- Ans 1. Reward
 2. Admit
 3. Exile
 4. Fund

Question ID : 630680517354
Option 1 ID : 6306802021815
Option 2 ID : 6306802021812
Option 3 ID : 6306802021813
Option 4 ID : 6306802021814
Status : Answered
Chosen Option : 3

Q.16 Select the most appropriate option to substitute the underlined segment in the given sentence.
Gourav was no good than a foolish person.

- Ans 1. no best
 2. not good
 3. no better
 4. not best

Question ID : 630680180697
Option 1 ID : 630680700285
Option 2 ID : 630680700287
Option 3 ID : 630680700284
Option 4 ID : 630680700286
Status : Answered
Chosen Option : 3

Q.17 Select the option that expresses the given sentence in passive voice
Someone has taken my secret diary.

- Ans 1. My secret diary has to be taken by someone.
 2. My secret diary had been taken by someone.
 3. My secret diary will have been taken by someone.
 4. My secret diary has been taken by someone.

Question ID : 630680415260
Option 1 ID : 6306801619788
Option 2 ID : 6306801619789
Option 3 ID : 6306801619787
Option 4 ID : 6306801619790
Status : Answered
Chosen Option : 4

Q.18 Select the option that can be used as a one-word substitute for the given group of words.

That which cannot be conquered

- Ans
- 1. Ineffable
 - 2. Indelible
 - 3. Invisible
 - 4. Invincible

Question ID : 630680129471
Option 1 ID : 630680501505
Option 2 ID : 630680501504
Option 3 ID : 630680501502
Option 4 ID : 630680501503
Status : Answered
Chosen Option : 4

Q.19 Select the option that corrects the error in the given sentence.
He ran quick to catch the bus.

- Ans
- 1. insipid
 - 2. rapid
 - 3. quiet
 - 4. quickly

Question ID : 630680514390
Option 1 ID : 6306802010186
Option 2 ID : 6306802010187
Option 3 ID : 6306802010188
Option 4 ID : 6306802010185
Status : Answered
Chosen Option : 4

Q.20 Select the option that can be used as a one-word-substitute for the given group of words.

A false idea or belief

- Ans
- 1. Entropy
 - 2. Fallacy
 - 3. Reticence
 - 4. Atrophy

Question ID : 630680317313
Option 1 ID : 6306801234381
Option 2 ID : 6306801234382
Option 3 ID : 6306801234383
Option 4 ID : 6306801234384
Status : Answered
Chosen Option : 2

Comprehension:

In the following passage, some words have been deleted. Read the passage carefully and select the most appropriate option to fill in each blank.

The beginning of the story is (1)_____ in its presentation but (2)_____ the style eases out and becomes haunting in its simplicity. The author brings out the human elements in his story. This common element of sympathy and sacrifice is given a new (3)_____ by the old artist who shows by his last desperate act that one can be a hero for one day if only one cares (4)_____. O Henry's treatment of his material is balanced and controlled, a fine (5)_____ of humour and pathos.

SubQuestion No : 21

Q.21 Select the most appropriate option to fill in blank number 1.

- Ans**
- 1. prone
 - 2. delectable
 - 3. quaint
 - 4. habitual

Question ID : 630680147131
Option 1 ID : 630680569341
Option 2 ID : 630680569340
Option 3 ID : 630680569339
Option 4 ID : 630680569338
Status : Answered
Chosen Option : 2

Comprehension:

In the following passage, some words have been deleted. Read the passage carefully and select the most appropriate option to fill in each blank.

The beginning of the story is (1)_____ in its presentation but (2)_____ the style eases out and becomes haunting in its simplicity. The author brings out the human elements in his story. This common element of sympathy and sacrifice is given a new (3)_____ by the old artist who shows by his last desperate act that one can be a hero for one day if only one cares (4)_____. O Henry's treatment of his material is balanced and controlled, a fine (5)_____ of humour and pathos.

SubQuestion No : 22

Q.22 Select the most appropriate option to fill in blank number 2.

- Ans**
- 1. hardly
 - 2. gradually
 - 3. recently
 - 4. initially

Question ID : 630680147132
Option 1 ID : 630680569345
Option 2 ID : 630680569344
Option 3 ID : 630680569343
Option 4 ID : 630680569342
Status : Answered
Chosen Option : 2

Comprehension:

In the following passage, some words have been deleted. Read the passage carefully and select the most appropriate option to fill in each blank.

The beginning of the story is (1)_____ in its presentation but (2)_____ the style eases out and becomes haunting in its simplicity. The author brings out the human elements in his story. This common element of sympathy and sacrifice is given a new (3)_____ by the old artist who shows by his last desperate act that one can be a hero for one day if only one cares (4)_____. O Henry's treatment of his material is balanced and controlled, a fine (5)_____ of humour and pathos.

SubQuestion No : 23

Q.23 Select the most appropriate option to fill in blank number 3.

- Ans**
- 1. infection
 - 2. condition
 - 3. supervision
 - 4. dimension

Question ID : 630680147133
Option 1 ID : 630680569347
Option 2 ID : 630680569349
Option 3 ID : 630680569348
Option 4 ID : 630680569346
Status : Answered
Chosen Option : 4

Comprehension:

In the following passage, some words have been deleted. Read the passage carefully and select the most appropriate option to fill in each blank.

The beginning of the story is (1)_____ in its presentation but (2)_____ the style eases out and becomes haunting in its simplicity. The author brings out the human elements in his story. This common element of sympathy and sacrifice is given a new (3)_____ by the old artist who shows by his last desperate act that one can be a hero for one day if only one cares (4)_____. O Henry's treatment of his material is balanced and controlled, a fine (5)_____ of humour and pathos.

SubQuestion No : 24

Q.24 Select the most appropriate option to fill in blank number 4.

- Ans**
- 1. enough
 - 2. tough
 - 3. through
 - 4. though

Question ID : 630680147134
Option 1 ID : 630680569353
Option 2 ID : 630680569350
Option 3 ID : 630680569352
Option 4 ID : 630680569351
Status : Answered
Chosen Option : 1

Comprehension:

In the following passage, some words have been deleted. Read the passage carefully and select the most appropriate option to fill in each blank.

The beginning of the story is (1)_____ in its presentation but (2)_____ the style eases out and becomes haunting in its simplicity. The author brings out the human elements in his story. This common element of sympathy and sacrifice is given a new (3)_____ by the old artist who shows by his last desperate act that one can be a hero for one day if only one cares (4)_____. O Henry's treatment of his material is balanced and controlled, a fine (5)_____ of humour and pathos.

SubQuestion No : 25

Q.25 Select the most appropriate option to fill in blank number 5.

- Ans 1. ascend
 2. blend
 3. legend
 4. amend

Question ID : 630680147135

Option 1 ID : 630680569357

Option 2 ID : 630680569355

Option 3 ID : 630680569354

Option 4 ID : 630680569356

Status : Answered

Chosen Option : 4