

Combined Graduate Level Examination 2024 Tier I

Roll Number	
Candidate Name	
Venue Name	
Exam Date	12/09/2024
Exam Time	12:30 PM - 1:30 PM
Subject	Combined Graduate Level Examination Tier I

Section : General Intelligence and Reasoning

Q.1 Which of the following numbers will replace the question marks (?) in the given series?

16, 36, 64, ?, ?, 196, 256, 324

- Ans
- 1. 81, 100
 - 2. 81, 121
 - 3. 100, 121
 - 4. 100, 144

Question ID : 630680411866
Option 1 ID : 6306801606301
Option 2 ID : 6306801606299
Option 3 ID : 6306801606302
Option 4 ID : 6306801606300
Status : Answered
Chosen Option : 4

Q.2 Two sets of numbers are given below. In each set of numbers, certain mathematical operation(s) on the first number result(s) in the second number. Similarly, certain mathematical operation(s) on the second number result(s) in the third number and so on. Which of the given options follows the same set of operations as in the given sets?

(NOTE: Operations should be performed on the whole numbers, without breaking down the numbers into their constituent digits. E.g. 13 – Operations on 13 such as adding/subtracting/multiplying to 13 can be performed. Breaking down 13 into 1 and 3 and then performing mathematical operations on 1 and 3 is not allowed.)

10 – 12 – 8 – 15; 12 – 14 – 10 – 19

- Ans
- 1. 8 – 6 – 10 – 18
 - 2. 11 – 13 – 9 – 17
 - 3. 6 – 8 – 12 – 16
 - 4. 15 – 13 – 9 – 19

Question ID : 630680814077
Option 1 ID : 6306803189526
Option 2 ID : 6306803189527
Option 3 ID : 6306803189525
Option 4 ID : 6306803189528
Status : Answered
Chosen Option : 2

Q.3 Which figure should replace the question mark (?) if the following series were to be continued?

B	000	00	X X X X	
000	X X	X X X X	B B	?
X X	B	B B	00	

Ans

✗ 1.

X X X
B B B
000

✗ 2.

X X X X X
B B B B
000

✗ 3.

X X X X
B B B
00

✓ 4.

X X X
B B B B
000

Question ID : 630680214426
 Option 1 ID : 630680831737
 Option 2 ID : 630680831736
 Option 3 ID : 630680831738
 Option 4 ID : 630680831735
 Status : Marked For Review
 Chosen Option : 3

Q.4 Based on the English alphabetical order, three of the following four letter-clusters are alike in a certain way and thus form a group. Which is the letter-cluster that DOES NOT belong to that group?

(Note: The odd man out is not based on the number of consonants/vowels or their position in the letter-cluster.)

- Ans
- ✗ 1. DGK
 - ✗ 2. HKO
 - ✓ 3. ACG
 - ✗ 4. MPT

Question ID : 630680798702
 Option 1 ID : 6306803129669
 Option 2 ID : 6306803129670
 Option 3 ID : 6306803129668
 Option 4 ID : 6306803129671
 Status : Answered
 Chosen Option : 3

Q.5 Select the set in which the numbers are related in the same way as are the numbers of the following set.

(11, 16.5, 22)

(14.5, 20, 25.5)

(NOTE: Operations should be performed on the whole numbers, without breaking down the numbers into its constituent digits. E.g. 13 – Operations on 13 such as adding/deleting/multiplying etc. to 13 can be performed. Breaking down 13 into 1 and 3 and then performing mathematical operations on 1 and 3 is not allowed.)

Ans 1. (14, 18.5, 23.5)

2. (21.5, 25, 31.5)

3. (24.5, 30, 36.5)

4. (18, 23.5, 29)

Question ID : 630680329207

Option 1 ID : 6306801280651

Option 2 ID : 6306801280652

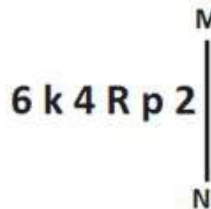
Option 3 ID : 6306801280649

Option 4 ID : 6306801280650

Status : Answered

Chosen Option : 4

Q.6 Select the correct mirror image of the given figure when the mirror is placed at MN as shown below.



Ans 1. ɹ ƚ ʌ ʀ ʞ ǝ

2. ɹ ƚ ʌ ʀ ʞ ǝ

3. ɹ ƚ ʌ ʀ ʞ ǝ

4. ɹ ƚ ʌ ʀ ʞ ǝ

Question ID : 630680356651

Option 1 ID : 6306801388607

Option 2 ID : 6306801388606

Option 3 ID : 6306801388605

Option 4 ID : 6306801388608

Status : Answered

Chosen Option : 3

Q.7 Which of the following terms will replace the question mark (?) in the given series?
HPL, KLQ, NHV, QDA, TZF, ?

Ans 1. WVK

2. XVK

3. WDK

4. XWK

Question ID : 630680417050

Option 1 ID : 6306801626963

Option 2 ID : 6306801626966

Option 3 ID : 6306801626965

Option 4 ID : 6306801626964

Status : Answered

Chosen Option : 1

Q.8 In a certain code language,
A + B means 'A is the son of B',
A - B means 'A is the wife of B',
A × B means 'A is the brother of B' and
A ÷ B means 'A is the daughter of B'.
Based on the above, how is P related to R if 'P × S ÷ M - T + R'?

- Ans**
- 1. Daughter
 - 2. Brother
 - 3. Father's mother
 - 4. Son's son

Question ID : 630680284894
Option 1 ID : 6306801107577
Option 2 ID : 6306801107576
Option 3 ID : 6306801107575
Option 4 ID : 6306801107578
Status : Answered
Chosen Option : 4

Q.9 Three statements are given followed by three conclusions numbered I, II and III.
Assuming the statements to be true, even if they seem to be at variance with
commonly known facts, decide which of the conclusions logically follow(s) from the
statements.

Statements:

All cards are postcards.
Some postcards are books.
All books are novels.

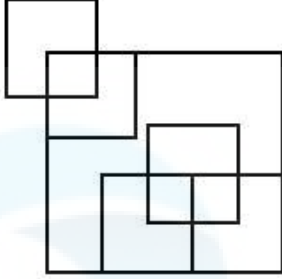
Conclusions:

I. Some postcards are novels.
II. No card is a book.
III. All cards are novels.

- Ans**
- 1. Only II and III conclusion follow
 - 2. Only I and II conclusion follow
 - 3. Only conclusion I follows
 - 4. Only conclusion III follows

Question ID : 630680416207
Option 1 ID : 6306801623593
Option 2 ID : 6306801623592
Option 3 ID : 6306801623591
Option 4 ID : 6306801623594
Status : Answered
Chosen Option : 3

Q.10 How many squares are there in the given figure?



- Ans
- 1. 10
 - 2. 9
 - 3. 7
 - 4. 8

Question ID : 630680163563
Option 1 ID : 630680633439
Option 2 ID : 630680633436
Option 3 ID : 630680633438
Option 4 ID : 630680633437
Status : Answered
Chosen Option : 2

Q.11 'NGRP' is related to 'JCNL' in a certain way based on the English alphabetical order. In the same way, 'FKLT' is related to 'BGHP'. To which of the following is 'SQUO' related, following the same logic?

- Ans
- 1. PNRL
 - 2. PMRK
 - 3. ONQL
 - 4. OMQK

Question ID : 630680416366
Option 1 ID : 6306801624230
Option 2 ID : 6306801624227
Option 3 ID : 6306801624229
Option 4 ID : 6306801624228
Status : Answered
Chosen Option : 4

Q.12 Three of the following numbers are alike in a certain way and one is different. Pick the odd one out.
(NOTE : Operations should be performed on the whole numbers, without breaking down the numbers into its constituent digits. E.g. 13 – Operations on 13 such as adding /deleting /multiplying etc., to 13 can be performed. Breaking down 13 into 1 and 3 and then performing mathematical operations on 1 and 3 is not allowed.)

- Ans
- 1. $12 - 7 - 209$
 - 2. $19 - 11 - 330$
 - 3. $23 - 8 - 343$
 - 4. $15 - 9 - 264$

Question ID : 630680389590
Option 1 ID : 6306801518818
Option 2 ID : 6306801518820
Option 3 ID : 6306801518819
Option 4 ID : 6306801518821
Status : Answered
Chosen Option : 3

Q.13 Which of the following operations should be interchanged to make the following equation correct?
 $12 + 12 - 4 \times 4 \div 2 = 22$

- Ans
- 1. - and +
 - 2. + and ÷
 - 3. ÷ and -
 - 4. × and -

Question ID : 630680411778
Option 1 ID : 6306801605950
Option 2 ID : 6306801605949
Option 3 ID : 6306801605948
Option 4 ID : 6306801605947
Status : Answered
Chosen Option : 3

Q.14 Select the combination of letters that when sequentially placed in the blanks of the given series will complete the series.

E_GHEI_GELK__OME

- Ans
- 1. IFGE
 - 2. IGFE
 - 3. FIFE
 - 4. FGEI

Question ID : 630680325786
Option 1 ID : 6306801267337
Option 2 ID : 6306801267340
Option 3 ID : 6306801267339
Option 4 ID : 6306801267338
Status : Answered
Chosen Option : 3

Q.15 In a certain code language, 'talk to me' is coded as 'aq yt bl' and 'do not talk' is coded as 'yt me wc'. What is the code for 'talk' in that language?

- Ans
- 1. aq
 - 2. wc
 - 3. yt
 - 4. bl

Question ID : 630680222446
Option 1 ID : 630680863543
Option 2 ID : 630680863544
Option 3 ID : 630680863545
Option 4 ID : 630680863546
Status : Answered
Chosen Option : 3

Q.16 What will come in place of the question mark (?) in the following equation if '+' and '-' are interchanged and 'x' and '÷' are interchanged?

$$16 \div 4 + 8 \times 8 - 4 = ?$$

Ans 1. 67

2. 42

3. 11

4. 36

Question ID : 630680327806
 Option 1 ID : 6306801275193
 Option 2 ID : 6306801275196
 Option 3 ID : 6306801275195
 Option 4 ID : 6306801275194
 Status : Answered
 Chosen Option : 1

Q.17 Identify the figure from the given options, which when put in place of the question mark (?), will logically complete the series.

↑	+	D	△	\$	+	↑	△	
\$			↑		D		\$?
D	△	\$	+	↑	△	D	+	

Ans

1.

\$	△
D	
↑	+

2.

D	+
	↑
\$	△

3.

\$	△
D	
+	↑

4.

D	\$
	↑
+	△

Question ID : 630680309939
 Option 1 ID : 6306801205903
 Option 2 ID : 6306801205904
 Option 3 ID : 6306801205902
 Option 4 ID : 6306801205901
 Status : Answered
 Chosen Option : 2

Q.18 346 is related to 245 by certain logic. Following the same logic, 580 is related to 479. To which of the following is 613 related, following the same logic? (NOTE : Operations should be performed on the whole numbers, without breaking down the numbers into its constituent digits. E.g. 13 – Operations on 13 such as adding /deleting /multiplying etc., to 13 can be performed. Breaking down 13 into 1 and 3 and then performing mathematical operations on 1 and 3 is not allowed.)

Ans 1. 512

2. 460

3. 720

4. 630

Question ID : 630680326558

Option 1 ID : 6306801270319

Option 2 ID : 6306801270317

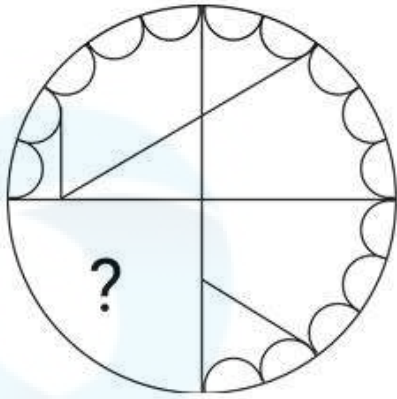
Option 3 ID : 6306801270320

Option 4 ID : 6306801270318

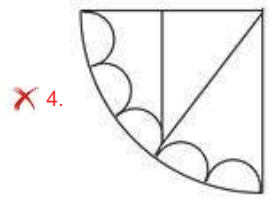
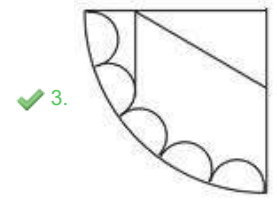
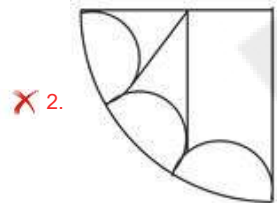
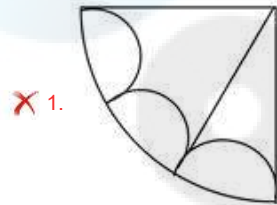
Status : Answered

Chosen Option : 1

Q.19 Select the option figure that will replace the question mark (?) in the figure given below and complete the pattern.



Ans



Question ID : 630680296921

Option 1 ID : 6306801155330

Option 2 ID : 6306801155327

Option 3 ID : 6306801155328

Option 4 ID : 6306801155329

Status : Answered

Chosen Option : 3

Q.20 Select the word-pair that best represents a similar relationship to the one expressed in the pair of words given below.
(The words must be considered as meaningful English words and must NOT be related to each other based on the number of letters/number of consonants/vowels in the word)

Duleep Trophy : Cricket

- Ans
- 1. Burdwan Trophy : Polo
 - 2. Agha Khan Cup : Hockey
 - 3. Dhyan Chand Trophy : Badminton
 - 4. Durand Cup : Cricket

Question ID : 630680417413
Option 1 ID : 6306801628417
Option 2 ID : 6306801628415
Option 3 ID : 6306801628416
Option 4 ID : 6306801628418
Status : Answered
Chosen Option : 2

Q.21 Each vowel in the word 'STAMINA' is changed to the preceding letter in the English alphabetical order and each consonant is changed to the following letter in the English alphabetical order. How many letters are there in the English alphabetical order between the letter which is the third from the right and the fourth from the left in the group of letters thus formed?

- Ans
- 1. Four
 - 2. Six
 - 3. Seven
 - 4. Five

Question ID : 630680222503
Option 1 ID : 630680863771
Option 2 ID : 630680863773
Option 3 ID : 630680863774
Option 4 ID : 630680863772
Status : Answered
Chosen Option : 4

Q.22 In a certain code language, 'can we play' is coded as 'ae tc nx' and 'play in school' is coded as 'tc rm ef'. How is 'play' coded in that language?

- Ans
- 1. ae
 - 2. rm
 - 3. ef
 - 4. tc

Question ID : 630680124867
Option 1 ID : 630680484274
Option 2 ID : 630680484275
Option 3 ID : 630680484276
Option 4 ID : 630680484277
Status : Answered
Chosen Option : 4

Q.23 In a certain code language, 'BOOK' is written as 'ZNNI' and 'SHOP' is written as 'QFNN'. How will 'NOTES' be written in that language?

Ans 1. LNRDQ

2. LRDQN

3. LDNQR

4. QDRNL

Question ID : 630680416131

Option 1 ID : 6306801623288

Option 2 ID : 6306801623290

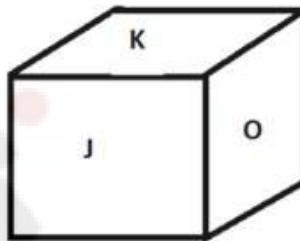
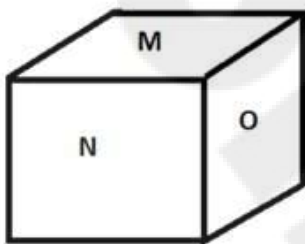
Option 3 ID : 6306801623289

Option 4 ID : 6306801623287

Status : Answered

Chosen Option : 1

Q.24 Six letters J, K, L, M, N and O are written on different faces of a dice. Two positions of this dice are shown in the figure below. Find the letter on the face opposite to J.



Ans 1. N

2. M

3. O

4. L

Question ID : 630680189140

Option 1 ID : 630680733369

Option 2 ID : 630680733370

Option 3 ID : 630680733371

Option 4 ID : 630680733372

Status : Answered

Chosen Option : 1

Q.25 Six letters U, V, W, X, Y and Z are written on different faces of a dice. Two positions of this dice are shown in the figure. Find the letter on the face opposite to V.



Ans 1. Z

2. W

3. X

4. Y

Question ID : 630680296581

Option 1 ID : 6306801153977

Option 2 ID : 6306801153975

Option 3 ID : 6306801153978

Option 4 ID : 6306801153976

Status : Answered

Chosen Option : 1

Q.1 Chand Bardai's famous literary work _____, mentions Prithviraj Chauhan's love story and heroic deeds.

- Ans**
- 1. Rajamartanda
 - 2. Harakeli Nataka
 - 3. Prithviraj Raso
 - 4. Abhidhana Chintamani

Question ID : 630680412291
Option 1 ID : 6306801607989
Option 2 ID : 6306801607988
Option 3 ID : 6306801607987
Option 4 ID : 6306801607990
Status : Answered
Chosen Option : 3

Q.2 Who established Shantiniketan and when?

- Ans**
- 1. Ravindranath Tagore, 1905
 - 2. Mahatma Gandhi, 1910
 - 3. Ravindranath Tagore, 1901
 - 4. Devendranath Tagore, 1915

Question ID : 630680511552
Option 1 ID : 6306801999330
Option 2 ID : 6306801999331
Option 3 ID : 6306801999332
Option 4 ID : 6306801999333
Status : Answered
Chosen Option : 1

Q.3 In which year was the Digital India mission launched?

- Ans**
- 1. 2017
 - 2. 2015
 - 3. 2014
 - 4. 2016

Question ID : 630680310826
Option 1 ID : 6306801209436
Option 2 ID : 6306801209434
Option 3 ID : 6306801209433
Option 4 ID : 6306801209435
Status : Answered
Chosen Option : 2

Q.4 In July 2020, which state initiated the 'Ashirwad Scheme' to extend financial support for a daughter's marriage who belongs to a family earning a lower income?

- Ans**
- 1. Rajasthan
 - 2. Bihar
 - 3. Uttar Pradesh
 - 4. Punjab

Question ID : 630680112080
Option 1 ID : 630680434046
Option 2 ID : 630680434049
Option 3 ID : 630680434048
Option 4 ID : 630680434047
Status : Answered
Chosen Option : 1

Q.5 Hindustani singer Pandit Venkatesh Kumar was honoured with 'Kalidas Samman-2022' by which state government?

- Ans** 1. Maharashtra
 2. Madhya Pradesh
 3. Gujarat
 4. Uttar Pradesh

Question ID : 630680511809
Option 1 ID : 6306802000209
Option 2 ID : 6306802000208
Option 3 ID : 6306802000206
Option 4 ID : 6306802000207
Status : Answered
Chosen Option : 2

Q.6 Which of the following institutes was founded by Mrinalini Sarabhai who was a Bharatanatyam and Kathakali dancer?

- Ans** 1. Nalanda Nritya Kala Mahavidyalaya
 2. Nrityanjali Institute of Performing Arts
 3. Sri Thyagaraja College of Music and Dance
 4. Darpana Academy of Performing Arts

Question ID : 630680309166
Option 1 ID : 6306801202841
Option 2 ID : 6306801202844
Option 3 ID : 6306801202843
Option 4 ID : 6306801202842
Status : Answered
Chosen Option : 1

Q.7 Match the points under Column A with those under Column B.

Column A	Column B
i. Annelida	a. Tapeworm
ii. Arthropoda	b. Sea star
iii. Echinodermata	c. Ant
iv. Platyhelminthes	d. Earthworm

- Ans** 1. i-a, ii-c, iii-b, iv-d
 2. i-a, ii-b, iii-c, iv-d
 3. i-d, ii-c, iii-b, iv-a
 4. i-b, ii-a, iii-c, iv-d

Question ID : 630680199661
Option 1 ID : 630680774252
Option 2 ID : 630680774251
Option 3 ID : 630680774254
Option 4 ID : 630680774253
Status : Answered
Chosen Option : 2

Q.8 Which of the following hills is located in the Eastern Ghats?

Ans ✓ 1. Shevaroy hills

✗ 2. Khasi hills

✗ 3. Anamudi hills

✗ 4. Naga hills

Question ID : 630680328128
Option 1 ID : 6306801276484
Option 2 ID : 6306801276482
Option 3 ID : 6306801276483
Option 4 ID : 6306801276481
Status : Answered
Chosen Option : 3

Q.9 Who among the following players is related to table tennis?

Ans ✗ 1. Pankaj Advani

✓ 2. Manika Batra

✗ 3. K Srikanth

✗ 4. Manish Narwal

Question ID : 630680510799
Option 1 ID : 6306801996327
Option 2 ID : 6306801996326
Option 3 ID : 6306801996329
Option 4 ID : 6306801996328
Status : Answered
Chosen Option : 2

Q.10 What are the five Fs of indirect transmission?

Ans ✗ 1. Fruit, fingers, flu, food and fluid

✓ 2. Flies, fingers, fomites, food and fluid

✗ 3. Flies, fingers, friends, food and fruit

✗ 4. Flies, fingers, fomites, food and fruit

Question ID : 630680407437
Option 1 ID : 6306801588689
Option 2 ID : 6306801588687
Option 3 ID : 6306801588686
Option 4 ID : 6306801588688
Status : Not Answered
Chosen Option : --

Q.11 Which of the following is an example of public sector industry in India?

Ans ✗ 1. Tata Iron Steel Company

✗ 2. Bajaj Auto

✗ 3. Dabur

✓ 4. Bharat Heavy Electricals Limited

Question ID : 630680216373
Option 1 ID : 630680839467
Option 2 ID : 630680839470
Option 3 ID : 630680839468
Option 4 ID : 630680839469
Status : Answered
Chosen Option : 4

Q.12 The Election Laws Amendment Bill passed in the Parliament recently seeks to implement certain electoral reforms. One of them is the eligibility date. Till now, only one date – 1 January was considered for deciding eligibility with respect to age. What reform does the Bill seek in this regard?

- Ans**
- 1. Eliminating the idea of eligibility date – enrolment throughout the year
 - 2. Introducing three dates – 1 January, 1 May, 1 September
 - 3. Introducing four dates – 1 January, 1 April, 1 July, 1 October
 - 4. Introducing two dates – 1 January and 1 June

Question ID : 630680114024
Option 1 ID : 630680441501
Option 2 ID : 630680441499
Option 3 ID : 630680441500
Option 4 ID : 630680441498
Status : Not Attempted and Marked For Review
Chosen Option : --

Q.13 Which of the following is NOT a Fundamental Duty of the Indian citizens?

- Ans**
- 1. To cherish and follow the noble ideas that inspired our national struggle for freedom.
 - 2. Mandatory national service of 5 years.
 - 3. To develop scientific temper, humanism and the spirit of inquiry and reform.
 - 4. To safeguard public property and to abjure violence.

Question ID : 630680329446
Option 1 ID : 6306801281525
Option 2 ID : 6306801281528
Option 3 ID : 6306801281526
Option 4 ID : 6306801281527
Status : Answered
Chosen Option : 2

Q.14 _____ leaves are used to make bidis.

- Ans**
- 1. Neem
 - 2. Betel
 - 3. Tendu
 - 4. Champa

Question ID : 630680194567
Option 1 ID : 630680754796
Option 2 ID : 630680754793
Option 3 ID : 630680754794
Option 4 ID : 630680754795
Status : Answered
Chosen Option : 3

Q.15 Buddhadev Dasgupta is famous for playing which of the following musical instruments?

- Ans 1. Sarangi
 2. Sarod
 3. Bansuri
 4. Mridangam

Question ID : 630680410182
Option 1 ID : 6306801599550
Option 2 ID : 6306801599549
Option 3 ID : 6306801599552
Option 4 ID : 6306801599551
Status : Not Answered
Chosen Option : --

Q.16 In which of the following years was Pro Kabaddi League established in India?

- Ans 1. 2016
 2. 2015
 3. 2014
 4. 2013

Question ID : 630680510753
Option 1 ID : 6306801996145
Option 2 ID : 6306801996144
Option 3 ID : 6306801996143
Option 4 ID : 6306801996142
Status : Answered
Chosen Option : 3

Q.17 According to Census of India 2011, what is the gap between male and female literacy rate in India?

- Ans 1. 21.59%
 2. 24.84%
 3. 16.68%
 4. 18.30%

Question ID : 630680409647
Option 1 ID : 6306801597417
Option 2 ID : 6306801597418
Option 3 ID : 6306801597420
Option 4 ID : 6306801597419
Status : Answered
Chosen Option : 3

Q.18 In which form of exchange are goods used as medium of exchange?

- Ans 1. Barter exchange
 2. Currency exchange
 3. Credit exchange
 4. Online exchange

Question ID : 630680127437
Option 1 ID : 630680494009
Option 2 ID : 630680494010
Option 3 ID : 630680494011
Option 4 ID : 630680494008
Status : Answered
Chosen Option : 1

Q.19 What is the product formed when zinc and sulphuric acid react?

- Ans
- 1. Zinc oxide
 - 2. Zinc sulphide
 - 3. Zinc sulphate
 - 4. Zinc hydroxide

Question ID : 630680194558
Option 1 ID : 630680754757
Option 2 ID : 630680754759
Option 3 ID : 630680754758
Option 4 ID : 630680754760
Status : Answered
Chosen Option : 3

Q.20 In the state legislative assembly, the Money bill can be introduced with the prior permission of _____.

- Ans
- 1. Auditor General
 - 2. Finance Minister
 - 3. Governor
 - 4. CAG

Question ID : 630680329472
Option 1 ID : 6306801281632
Option 2 ID : 6306801281630
Option 3 ID : 6306801281629
Option 4 ID : 6306801281631
Status : Answered
Chosen Option : 3

Q.21 Which of the following gases emits red light when electricity is passed through it?

- Ans
- 1. Argon
 - 2. Neon
 - 3. Hydrogen
 - 4. Helium

Question ID : 630680184310
Option 1 ID : 630680714251
Option 2 ID : 630680714249
Option 3 ID : 630680714252
Option 4 ID : 630680714250
Status : Answered
Chosen Option : 4

Q.22 The Vedangas are Hindu auxiliary disciplines that originated in ancient times and are linked to the study of the Vedas. These are _____ in number.

- Ans
- 1. seven
 - 2. five
 - 3. six
 - 4. four

Question ID : 630680412488
Option 1 ID : 6306801608778
Option 2 ID : 6306801608776
Option 3 ID : 6306801608777
Option 4 ID : 6306801608775
Status : Answered
Chosen Option : 3

Q.23 Gangaur Festival, Pushkar Fair, Nagaur Fair and Urs Fair are the popular fairs and festivals of which state?

- Ans** 1. Maharashtra
 2. Tripura
 3. Rajasthan
 4. Punjab

Question ID : 630680162597
Option 1 ID : 630680629684
Option 2 ID : 630680629685
Option 3 ID : 630680629687
Option 4 ID : 630680629686
Status : Answered
Chosen Option : 3

Q.24 Who among the following freedom fighters is known as 'Deshbandhu'?

- Ans** 1. Gopal Krishna Gokhale
 2. Chittaranjan Das
 3. Subhas Chandra Bose
 4. Bhagat Singh

Question ID : 630680412315
Option 1 ID : 6306801608084
Option 2 ID : 6306801608086
Option 3 ID : 6306801608085
Option 4 ID : 6306801608083
Status : Answered
Chosen Option : 2

Q.25 What was the actual growth rate of the first five-year plan?

- Ans** 1. 4.2%
 2. 2.6%
 3. 3.6%
 4. 2.1%

Question ID : 630680410434
Option 1 ID : 6306801600458
Option 2 ID : 6306801600456
Option 3 ID : 6306801600457
Option 4 ID : 6306801600455
Status : Answered
Chosen Option : 3

Section : Quantitative Aptitude

Q.1 The average of the squares of the first 46 natural numbers is

Ans 1. 730.5

2. 727.5

3. 729.5

4. 728.5

Question ID : 630680568973

Option 1 ID : 6306802224704

Option 2 ID : 6306802224703

Option 3 ID : 6306802224702

Option 4 ID : 6306802224701

Status : Not Attempted and
Marked For Review

Chosen Option : --

Q.2

A person borrowed some money on simple interest. After 4 years, he returned $\frac{9}{5}$ of the money to lender. What was the rate of interest?

Ans 1. 19% p.a.

2. 18% p.a.

3. 17% p.a.

4. 20% p.a.

Question ID : 630680367805

Option 1 ID : 6306801432663

Option 2 ID : 6306801432662

Option 3 ID : 6306801432661

Option 4 ID : 6306801432664

Status : Answered

Chosen Option : 4

Q.3 The MP of an article was Rs.180 and it was sold at a discount of 15%, the discount in Rs. is:

Ans 1. 27

2. 15

3. 12

4. 18

Question ID : 630680150546

Option 1 ID : 630680582300

Option 2 ID : 630680582301

Option 3 ID : 630680582303

Option 4 ID : 630680582302

Status : Answered

Chosen Option : 1

Q.4 In $\triangle DEF$, the bisector of $\angle D$ intersects side EF at point N . If $DE = 36$ cm, $DF = 40$ cm and $EF = 38$ cm, then the length (in cm) of NF is _____.

Ans 1. 18

2. 20

3. 12

4. 16

Question ID : 630680380387

Option 1 ID : 6306801482544

Option 2 ID : 6306801482545

Option 3 ID : 6306801482546

Option 4 ID : 6306801482543

Status : Answered

Chosen Option : 2

Q.5 Find the area of a sector with an arc length of 44 cm, which subtends a central angle of 30° .

Ans 1. 1584 cm^2

2. 1488 cm^2

3. 1884 cm^2

4. 1848 cm^2

Question ID : 630680421378

Option 1 ID : 6306801643975

Option 2 ID : 6306801643977

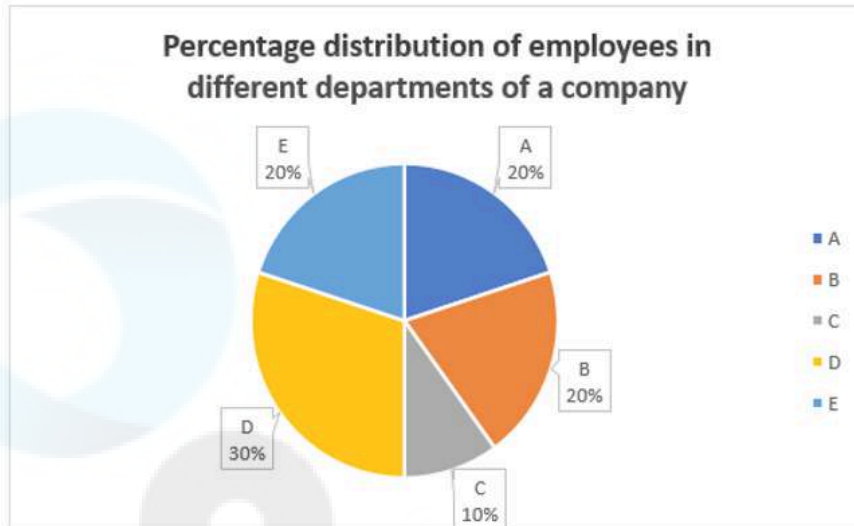
Option 3 ID : 6306801643978

Option 4 ID : 6306801643976

Status : Answered

Chosen Option : 1

Q.6 The given pie-chart shows the percentage distribution of 20,000 employees in a company.



Study the given chart and answer the question that follows.

If 30% of the employees in department D are females, then how many male employees are there in that department?

- Ans
- 1. 4500
 - 2. 4000
 - 3. 5000
 - 4. 4200

Question ID : 630680428130
Option 1 ID : 6306801670566
Option 2 ID : 6306801670564
Option 3 ID : 6306801670567
Option 4 ID : 6306801670565
Status : Answered
Chosen Option : 4

Q.7 If $m + n = 24$, then $(m - 16)^3 + (n - 8)^3$ is _____.

- Ans
- 1. 0
 - 2. 320
 - 3. 576
 - 4. 40

Question ID : 630680413555
Option 1 ID : 6306801613047
Option 2 ID : 6306801613045
Option 3 ID : 6306801613046
Option 4 ID : 6306801613044
Status : Answered
Chosen Option : 1

Q.8 Solve the following:

$$\frac{1}{1 + \cos\theta} + \frac{1}{1 - \cos\theta} = ?$$

- Ans
- 1. $2\sin^2\theta$
 - 2. $2\sec^2\theta$
 - 3. $2\operatorname{cosec}^2\theta$
 - 4. $2\tan^2\theta$

Question ID : 630680195560
Option 1 ID : 630680758709
Option 2 ID : 630680758712
Option 3 ID : 630680758710
Option 4 ID : 630680758711
Status : Answered
Chosen Option : 3

Q.9 Find the gain percentage, given that Siddhi sold her scooter for ₹24318 gaining $\frac{1}{6}$ th of the selling price.

- Ans
- 1. 25%
 - 2. 35%
 - 3. 5%
 - 4. 20%

Question ID : 630680922769
Option 1 ID : 6306803615923
Option 2 ID : 6306803615925
Option 3 ID : 6306803615924
Option 4 ID : 6306803615922
Status : Answered
Chosen Option : 4

Q.10 Solve the following:

$$\left[(2.5 + 1.5)^2 \div 4 \text{ of } \frac{1}{2} \times 8 - 1 \right]$$

- Ans
- 1. 63
 - 2. 81
 - 3. 27.1
 - 4. 0

Question ID : 630680397185
Option 1 ID : 6306801548799
Option 2 ID : 6306801548798
Option 3 ID : 6306801548797
Option 4 ID : 6306801548796
Status : Answered
Chosen Option : 1

Q.11 A thief pursued by a policeman was 150 m ahead at the start. If the ratio of the speed of the policeman to that of the thief was 5 : 4, then how far (distance in metres) could the thief go before he is caught by the policeman?

Ans 1. 200

2. 600

3. 400

4. 350

Question ID : 630680428632

Option 1 ID : 6306801672575

Option 2 ID : 6306801672573

Option 3 ID : 6306801672572

Option 4 ID : 6306801672574

Status : Answered

Chosen Option : 2

Q.12 The ratio between male and female members in a club is 2 : 3. If the number of male members is increased by 200, the ratio becomes 5 : 6. How many female members are there in the club?

Ans 1. 1400

2. 1000

3. 1200

4. 900

Question ID : 630680397574

Option 1 ID : 6306801550219

Option 2 ID : 6306801550218

Option 3 ID : 6306801550217

Option 4 ID : 6306801550220

Status : Answered

Chosen Option : 3

Q.13

If $7 \tan \theta = 3$, then $\frac{7 \sin \theta + 5 \cos \theta}{7 \sin \theta - 2 \cos \theta}$ is:

Ans 1. 8

2. 6

3. 5

4. 7

Question ID : 630680518876

Option 1 ID : 6306802027978

Option 2 ID : 6306802027977

Option 3 ID : 6306802027976

Option 4 ID : 6306802027979

Status : Answered

Chosen Option : 1

Q.14 Two pipes A and B can fill a tank in 48 minutes and 66 minutes, respectively. If both the pipes are opened simultaneously, then after how many minutes should pipe B be closed so that the tank gets filled in 32 minutes?

Ans 1. 22

2. 20

3. 16

4. 18

Question ID : 630680470630

Option 1 ID : 6306801838291

Option 2 ID : 6306801838294

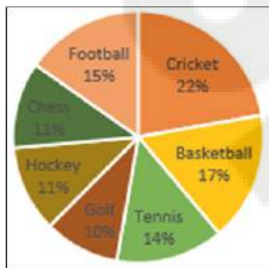
Option 3 ID : 6306801838293

Option 4 ID : 6306801838292

Status : Answered

Chosen Option : 1

Q.15 The given pie chart shows the expenditure by a state government on various sports during a particular year.



If the total amount spent on tennis and football is ₹1,45,000, then the total amount (in ₹) spent on all the given sports is:

Ans 1. 3,10,000

2. 5,00,000

3. 4,50,000

4. 4,10,000

Question ID : 630680428149

Option 1 ID : 6306801670640

Option 2 ID : 6306801670643

Option 3 ID : 6306801670642

Option 4 ID : 6306801670641

Status : Answered

Chosen Option : 2

Q.16 Every month, a man consumes 20 kg of rice and 8 kg of wheat. The price of rice is 20% of the price of wheat, resulting in a total expenditure of ₹300 per month for rice and wheat combined. If the price of wheat is increased by 20%, what percentage reduction in rice consumption is needed to maintain the same expenditure of ₹300? (Given that price of rice and consumption of wheat is constant.)

Ans 1. 24%

2. 22%

3. 40%

4. 38%

Question ID : 630680427946

Option 1 ID : 6306801669831

Option 2 ID : 6306801669830

Option 3 ID : 6306801669829

Option 4 ID : 6306801669828

Status : Answered

Chosen Option : 3

Q.17 In triangle ABC, the length of side BC is 2 cm less than twice the length of side AB. The length of side AC exceeds the length of side AB by 10 cm. The perimeter of the triangle is 40 cm. Determine the length (in cm) of the smallest side of the triangle.

- Ans**
- 1. 12
 - 2. 10
 - 3. 14
 - 4. 8

Question ID : 630680421396
Option 1 ID : 6306801644049
Option 2 ID : 6306801644048
Option 3 ID : 6306801644050
Option 4 ID : 6306801644047
Status : Answered
Chosen Option : 4

Q.18 From a point T, the length of the tangent to a circle is 32 cm and the distance of T from the centre is 40 cm. The diameter (in cm) of the circle is:

- Ans**
- 1. 48
 - 2. 16
 - 3. 32
 - 4. 36

Question ID : 630680198937
Option 1 ID : 630680771478
Option 2 ID : 630680771475
Option 3 ID : 630680771476
Option 4 ID : 630680771477
Status : Answered
Chosen Option : 1

Q.19 Two cylinders have the radii of their bases in the ratio 4 : 5 and their heights are in the ratio 5 : 7. Find the ratio of their curved surface areas.

- Ans**
- 1. 5 : 4
 - 2. 4 : 5
 - 3. 1 : 2
 - 4. 4 : 7

Question ID : 630680421506
Option 1 ID : 6306801644488
Option 2 ID : 6306801644489
Option 3 ID : 6306801644487
Option 4 ID : 6306801644490
Status : Answered
Chosen Option : 4

Q.20 In a garden, there are 6 daisy plants the first year. Each year, a gardener adds 3 new daisy plants. He has 26 jasmine plants the first year and loses 2 each year. When will the number of daisy plants equal to the number of jasmine plants after the first year?

Ans 1. 6 years

2. 4 years

3. 5 years

4. 2 years

Question ID : 630680296219
Option 1 ID : 6306801152546
Option 2 ID : 6306801152545
Option 3 ID : 6306801152547
Option 4 ID : 6306801152544
Status : Answered
Chosen Option : 2

Q.21 Which of following numbers is NOT divisible by 11?

Ans 1. 109153

2. 5445

3. 80124

4. 128041

Question ID : 630680108868
Option 1 ID : 630680422365
Option 2 ID : 630680422367
Option 3 ID : 630680422364
Option 4 ID : 630680422366
Status : Answered
Chosen Option : 4

Q.22 If $\cot^4\phi - \cot^2\phi = 1$, then the value of $\cos^4\phi + \cos^2\phi$ is:

Ans 1. 1

2. $\frac{3}{2}$


3. $\frac{1}{\sqrt{3}}$

4. 2

Question ID : 630680397022
Option 1 ID : 6306801548141
Option 2 ID : 6306801548140
Option 3 ID : 6306801548142
Option 4 ID : 6306801548143
Status : Not Answered
Chosen Option : --

Q.23 The following pie chart shows the study time of different subjects of a student in a day. Study the pie chart and answer the question.

Percentage distribution of study-time of different subjects



If the student studied English for 3 hours, then he studied Mathematics for:

- Ans
- 1. 5 hours
 - 2. 1 hour
 - 3. 2 hours
 - 4. 7 hours

Question ID : 630680403288
Option 1 ID : 6306801572652
Option 2 ID : 6306801572650
Option 3 ID : 6306801572651
Option 4 ID : 6306801572653
Status : Answered
Chosen Option : 4

Q.24 The given table shows the production of iron rods by a company for a period of 6 months. Study the table and answer the question that follows.

Month	January	March	May	July	September	November
Production	60	75	45	85	90	108

What is the ratio of the month having the highest production to the month having the least production?

- Ans
- 1. 12 : 5
 - 2. 1 : 2
 - 3. 5 : 12
 - 4. 9 : 5

Question ID : 630680428092
Option 1 ID : 6306801670412
Option 2 ID : 6306801670414
Option 3 ID : 6306801670413
Option 4 ID : 6306801670415
Status : Answered
Chosen Option : 1

Q.25 For the following equations, what are the values of a and b to have infinitely many solutions?
 $ax + by = 2$
 $3x - (5 - 2a)y = 6$

- Ans**
- 1. $a = 1, b = -1$
 - 2. $a = -1, b = -1$
 - 3. $a = -1, b = 1$
 - 4. $a = 1, b = 1$

Question ID : 630680285463
Option 1 ID : 6306801109821
Option 2 ID : 6306801109819
Option 3 ID : 6306801109822
Option 4 ID : 6306801109820
Status : Answered
Chosen Option : 1

Section : English Comprehension

Q.1 Select the most appropriate option to fill in the blanks.

He had _____ the _____ into smaller clips.

- Ans**
- 1. clipping, clips
 - 2. clips, clipping
 - 3. clipped, clipping
 - 4. clipping, clipped

Question ID : 630680129396
Option 1 ID : 630680501205
Option 2 ID : 630680501202
Option 3 ID : 630680501204
Option 4 ID : 630680501203
Status : Answered
Chosen Option : 3

Q.2 Select the sentence that does NOT have a spelling error.

- Ans**
- 1. The focus of the exhibition is to reinforce versatility and creative thinking.
 - 2. The insouciance of the rock star considering the importance of the occasion, came as a shock to the audience who expected stressful moments.
 - 3. The artist received recognition for her impressive etchings, buclic landscapes, and recreation of natural scenes around her.
 - 4. The paintings are structured chronologically, starting from cubism to surrealism.

Question ID : 630680409937
Option 1 ID : 6306801598580
Option 2 ID : 6306801598579
Option 3 ID : 6306801598577
Option 4 ID : 6306801598578
Status : Answered
Chosen Option : 4

Q.3 Select the most appropriate option to substitute the underlined segment in the given sentence.

My sisters wished me good luck before I went on the stage to sing.

- Ans**
- 1. Told me to break an arm
 - 2. Told me to break the ice
 - 3. Told me to sit on the fence
 - 4. Told me to break a leg

Question ID : 630680316364
Option 1 ID : 6306801231084
Option 2 ID : 6306801231082
Option 3 ID : 6306801231083
Option 4 ID : 6306801231081
Status : Answered
Chosen Option : 1

Q.4 Select the option that expresses the given sentence in active voice.
The drug pedlar was arrested by the narcotics team.

- Ans**
- 1. The narcotics team arrest the drug pedlar.
 - 2. The narcotics team has arrested the drug pedlar.
 - 3. The narcotics team was arrested the drug pedlar.
 - 4. The narcotics team arrested the drug pedlar.

Question ID : 630680415255
Option 1 ID : 6306801619769
Option 2 ID : 6306801619768
Option 3 ID : 6306801619767
Option 4 ID : 6306801619770
Status : Answered
Chosen Option : 4

Q.5 Select the correct option to form a meaningful sentence.

I / that / the chef / to work / in / the new / heard / restaurant / is going / across the road.

(a) (b) (c) (d) (e) (f) (g) (h) (i) (j)

- Ans**
- 1. a, b, d, c, g, e, f, h, i, j
 - 2. a, c, g, b, h, i, f, e, d, j
 - 3. a, b, d, c, e, f, h, g, i, j
 - 4. a, g, b, c, i, d, e, f, h, j

Question ID : 630680356626
Option 1 ID : 6306801388506
Option 2 ID : 6306801388507
Option 3 ID : 6306801388508
Option 4 ID : 6306801388505
Status : Answered
Chosen Option : 4

Q.6 Select the most appropriate synonym of the underlined word.
Many people love to visit enchanted hills.

- Ans
- 1. risky
 - 2. alluring
 - 3. echoing
 - 4. cool

Question ID : 630680192718
Option 1 ID : 630680747418
Option 2 ID : 630680747420
Option 3 ID : 630680747417
Option 4 ID : 630680747419
Status : Answered
Chosen Option : 2

Q.7 Parts of a sentence are given below in jumbled order. Arrange the parts in the correct order to form a meaningful sentence.

- A. needs to be
- B. the shelf in
- C. a piece of wood
- D. the kitchen
- E. need to buy
- F. replaced, so I will

- Ans
- 1. BDAFEC
 - 2. ACDBFE
 - 3. DEBACF
 - 4. BEFCAD

Question ID : 630680102445
Option 1 ID : 630680398049
Option 2 ID : 630680398048
Option 3 ID : 630680398050
Option 4 ID : 630680398047
Status : Answered
Chosen Option : 1

Q.8 Select the option that can be used as a one-word substitute for the given group of words.

The list of subjects to be discussed at a meeting

- Ans
- 1. Agenda
 - 2. Menu
 - 3. Minutes
 - 4. Objectives

Question ID : 630680414630
Option 1 ID : 6306801617264
Option 2 ID : 6306801617263
Option 3 ID : 6306801617265
Option 4 ID : 6306801617266
Status : Answered
Chosen Option : 1

Q.9 Select the most appropriate ANTONYM of the word in brackets to fill in the blank.
She has _____ (witty) remarks about everything.

- Ans 1. whimsical
 2. unamusing
 3. woeful
 4. sorry

Question ID : 630680158584
Option 1 ID : 630680613844
Option 2 ID : 630680613846
Option 3 ID : 630680613847
Option 4 ID : 630680613845
Status : Answered
Chosen Option : 3

Q.10 Select the most appropriate ANTONYM of the given word.
Paralysed

- Ans 1. Demure
 2. Healthy
 3. Stified
 4. Sultry

Question ID : 630680517573
Option 1 ID : 6306802022688
Option 2 ID : 6306802022689
Option 3 ID : 6306802022690
Option 4 ID : 6306802022691
Status : Answered
Chosen Option : 2

Q.11 The following sentence has been divided into four segments. Identify the segment that contains an adverbial usage error.
Mr. Arun / will pay dear / for his / financial mistake.

- Ans 1. Mr. Arun
 2. financial mistake
 3. for his
 4. will pay dear

Question ID : 630680206708
Option 1 ID : 630680801431
Option 2 ID : 630680801434
Option 3 ID : 630680801433
Option 4 ID : 630680801432
Status : Answered
Chosen Option : 4

Q.12 Select the most appropriate synonym of the word in brackets to fill in the blank.
Listening to the same lecture everyday appeared very _____ to him. (boring)

Ans 1. monotonous

2. furious

3. monolithic

4. nervous

Question ID : 630680168478

Option 1 ID : 630680652525

Option 2 ID : 630680652527

Option 3 ID : 630680652524

Option 4 ID : 630680652526

Status : Answered

Chosen Option : 1

Q.13 Select the most appropriate option to fill in the blank.
We have postponed this movie outing too many times, so we are going tomorrow,
come _____ or shine.

Ans 1. hail

2. rain

3. mountain

4. thunder

Question ID : 630680375534

Option 1 ID : 6306801463294

Option 2 ID : 6306801463292

Option 3 ID : 6306801463291

Option 4 ID : 6306801463293

Status : Answered

Chosen Option : 2

Q.14 Parts of a sentence are given below in jumbled order. Arrange the parts in the correct order to form a meaningful sentence.

O. went
P. yesterday
Q. we
R. to the
S. park

Ans 1. QORSP

2. PSROQ

3. RQOSP

4. OPQRS

Question ID : 630680374392

Option 1 ID : 6306801458751

Option 2 ID : 6306801458753

Option 3 ID : 6306801458752

Option 4 ID : 6306801458754

Status : Answered

Chosen Option : 1

Q.15 Select the most appropriate synonym of the given word.
Repulse

- Ans
- 1. Substitute
 - 2. Recover
 - 3. Reprove
 - 4. Repel

Question ID : 630680300700
Option 1 ID : 6306801169616
Option 2 ID : 6306801169618
Option 3 ID : 6306801169617
Option 4 ID : 6306801169615
Status : Answered
Chosen Option : 4

Q.16 Select the INCORRECTLY spelt word in the given sentence.

One must be confident of winning and gaining one's goals and must face situations, disasters, trials and setbacks of life with confidence.

- Ans
- 1. Setbacks
 - 2. Trials
 - 3. Disasters
 - 4. Confident

Question ID : 630680360835
Option 1 ID : 6306801405216
Option 2 ID : 6306801405215
Option 3 ID : 6306801405214
Option 4 ID : 6306801405213
Status : Answered
Chosen Option : 1

Q.17 Select the most appropriate option that can substitute the underlined segment in the given sentence.

Five years later, I was eating this same dish at the same restaurant.

- Ans
- 1. had been eating
 - 2. am eating
 - 3. has been eating
 - 4. will have be eating

Question ID : 630680183561
Option 1 ID : 630680711254
Option 2 ID : 630680711256
Option 3 ID : 630680711255
Option 4 ID : 630680711253
Status : Answered
Chosen Option : 4

Q.18 Select the option that expresses the given sentence in passive voice.

Scientists were conducting experiments on the newly discovered species.

- Ans 1. The newly discovered species has been conducting experiments by scientists.
 2. Experiments were being conducted on the newly discovered species by scientists.
 3. The newly discovered species has been experimented on by scientists.
 4. Experiments on the newly discovered species had been conducted by the scientists.

Question ID : 630680415187
Option 1 ID : 6306801619497
Option 2 ID : 6306801619495
Option 3 ID : 6306801619496
Option 4 ID : 6306801619498
Status : Answered
Chosen Option : 2

Q.19 Parts of a sentence are given below in jumbled order. Select the option that arranges the parts in the correct sequence to form a meaningful sentence.

- (P) the sun
(Q) to our planet, Earth
(O) provides essential energy
(R) sustaining life and warmth

- Ans 1. QROP
 2. POQR
 3. ROQP
 4. ORPQ

Question ID : 630680380978
Option 1 ID : 6306801484901
Option 2 ID : 6306801484899
Option 3 ID : 6306801484900
Option 4 ID : 6306801484902
Status : Answered
Chosen Option : 2

Q.20 The given sentence is divided into four segments. Select the option that has the segment with a grammatical error.

The employees were comfortable / with me and they talked about / their problems since / I has worked there as a manager.

- Ans 1. with me and they talked about
 2. I has worked there as a manager.
 3. their problems since
 4. The employees were comfortable

Question ID : 630680199801
Option 1 ID : 630680774812
Option 2 ID : 630680774814
Option 3 ID : 630680774813
Option 4 ID : 630680774811
Status : Answered
Chosen Option : 2

Comprehension:

In the following passage, some words have been deleted. Read the passage carefully and select the most appropriate option to fill in each blank.

People often say that the stars govern their fate but they forget the fact that success or failure is the result of one's own (1)_____. If we sow chaff, we can't reap grain; and the result or consequence of an action depends on what one does and to the extent he (2)_____ it. If we work hard, we succeed only to the extent that we work. People who think that the law of karma is (3)_____ may feel that if one is destined to get something he will always get it whether he strives for it or not. But experience tells us that reward and punishments are the direct result of our action. Honesty and hard work never go unrewarded and (4)_____ and evil deeds never go (5)_____. In fact even the law of karma, in its proper sense, means that the fruit we get is decided by whatever actions we did in the past.

SubQuestion No : 21

Q.21 Select the most appropriate option to fill in blank number 1.

- Ans**
- 1. incidents
 - 2. case
 - 3. power
 - 4. actions

Question ID : 630680156298

Option 1 ID : 630680604880

Option 2 ID : 630680604883

Option 3 ID : 630680604882

Option 4 ID : 630680604881

Status : Answered

Chosen Option : 4

Comprehension:

In the following passage, some words have been deleted. Read the passage carefully and select the most appropriate option to fill in each blank.

People often say that the stars govern their fate but they forget the fact that success or failure is the result of one's own (1)_____. If we sow chaff, we can't reap grain; and the result or consequence of an action depends on what one does and to the extent he (2)_____ it. If we work hard, we succeed only to the extent that we work. People who think that the law of karma is (3)_____ may feel that if one is destined to get something he will always get it whether he strives for it or not. But experience tells us that reward and punishments are the direct result of our action. Honesty and hard work never go unrewarded and (4)_____ and evil deeds never go (5)_____. In fact even the law of karma, in its proper sense, means that the fruit we get is decided by whatever actions we did in the past.

SubQuestion No : 22

Q.22 Select the most appropriate option to fill in blank number 2.

- Ans**
- 1. does
 - 2. have
 - 3. put
 - 4. create

Question ID : 630680156299

Option 1 ID : 630680604887

Option 2 ID : 630680604886

Option 3 ID : 630680604884

Option 4 ID : 630680604885

Status : Answered

Chosen Option : 3

Comprehension:

In the following passage, some words have been deleted. Read the passage carefully and select the most appropriate option to fill in each blank.
People often say that the stars govern their fate but they forget the fact that success or failure is the result of one's own (1)_____. If we sow chaff, we can't reap grain; and the result or consequence of an action depends on what one does and to the extent he (2)_____ it. If we work hard, we succeed only to the extent that we work. People who think that the law of karma is (3)_____ may feel that if one is destined to get something he will always get it whether he strives for it or not. But experience tells us that reward and punishments are the direct result of our action. Honesty and hard work never go unrewarded and (4)_____ and evil deeds never go (5)_____. In fact even the law of karma, in its proper sense, means that the fruit we get is decided by whatever actions we did in the past.

SubQuestion No : 23

Q.23 Select the most appropriate option to fill in blank number 3.

- Ans** 1. supreme
 2. most
 3. more
 4. greatest

Question ID : 630680156300
Option 1 ID : 630680604891
Option 2 ID : 630680604890
Option 3 ID : 630680604888
Option 4 ID : 630680604889
Status : Answered
Chosen Option : 1

Comprehension:

In the following passage, some words have been deleted. Read the passage carefully and select the most appropriate option to fill in each blank.
People often say that the stars govern their fate but they forget the fact that success or failure is the result of one's own (1)_____. If we sow chaff, we can't reap grain; and the result or consequence of an action depends on what one does and to the extent he (2)_____ it. If we work hard, we succeed only to the extent that we work. People who think that the law of karma is (3)_____ may feel that if one is destined to get something he will always get it whether he strives for it or not. But experience tells us that reward and punishments are the direct result of our action. Honesty and hard work never go unrewarded and (4)_____ and evil deeds never go (5)_____. In fact even the law of karma, in its proper sense, means that the fruit we get is decided by whatever actions we did in the past.

SubQuestion No : 24

Q.24 Select the most appropriate option to fill in blank number 4.

- Ans** 1. horribly
 2. fairness
 3. badly
 4. dishonesty

Question ID : 630680156301
Option 1 ID : 630680604895
Option 2 ID : 630680604894
Option 3 ID : 630680604892
Option 4 ID : 630680604893
Status : Answered
Chosen Option : 4

Comprehension:

In the following passage, some words have been deleted. Read the passage carefully and select the most appropriate option to fill in each blank.

People often say that the stars govern their fate but they forget the fact that success or failure is the result of one's own (1)_____. If we sow chaff, we can't reap grain; and the result or consequence of an action depends on what one does and to the extent he (2)_____ it. If we work hard, we succeed only to the extent that we work. People who think that the law of karma is (3)_____ may feel that if one is destined to get something he will always get it whether he strives for it or not. But experience tells us that reward and punishments are the direct result of our action. Honesty and hard work never go unrewarded and (4)_____ and evil deeds never go (5)_____. In fact even the law of karma, in its proper sense, means that the fruit we get is decided by whatever actions we did in the past.

SubQuestion No : 25

Q.25 Select the most appropriate option to fill in blank number 5.

- Ans 1. vile
 2. unpunished
 3. waste
 4. punished

Question ID : 630680156302

Option 1 ID : 630680604899

Option 2 ID : 630680604898

Option 3 ID : 630680604896

Option 4 ID : 630680604897

Status : Answered

Chosen Option : 2