

Combined Graduate level Examination 2023 Tier I

Roll Number	
Candidate Name	
Venue Name	
Exam Date	17/07/2023
Exam Time	9:00 AM - 10:00 AM
Subject	Combined Graduate Level Examination Tier I 2023

Section : General Intelligence and Reasoning

Q.1 Select the option that is related to the fifth letter-cluster in the same way as the second letter-cluster is related to the first letter-cluster and the fourth letter-cluster is related to the third letter-cluster.

CIVILIAN : AGREFCSF :: DOCTRINE : BMYPLCFW :: EQUATION : ?

- Ans
- 1. NUGFSDAX
 - 2. BURDSTER
 - 3. VUGHLOPA
 - 4. COQWNCGF

Question ID : 26433069035
Status : Answered
Chosen Option : 4

Q.2 Select the correct combination of mathematical signs to sequentially replace the * signs and balance the given equation.

$76 * 34 * 23 * 12 * 6 * 21$

- Ans
- 1. +, -, +, +, =
 - 2. -, -, +, +, =
 - 3. x, -, +, +, =
 - 4. -, -, +, +, =

Question ID : 26433068688
Status : Answered
Chosen Option : 4

Q.3 Select the option that is related to the fifth term in the same way as the second term is related to the first term and the fourth term is related to the third term.

$132 : 10 :: 42 : 5 :: 272 : ?$

- Ans
- 1. 15
 - 2. 16
 - 3. 13
 - 4. 14

Question ID : 26433082872
Status : Not Answered
Chosen Option : --

Q.4 Which of the following numbers will replace the question mark (?) in the given series?

19, 26, ?, 46, 59, 74

- Ans
- 1. 33
 - 2. 30
 - 3. 35
 - 4. 32

Question ID : 26433091002
Status : Answered
Chosen Option : 3

Q.5 Select the option that represents the letters that, when placed from left to right in the blanks below, will complete the letter series.

A B C _ A _ C C A B _ C _ B _ C

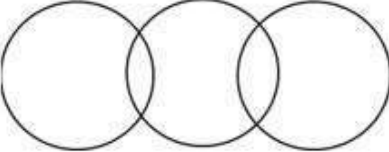
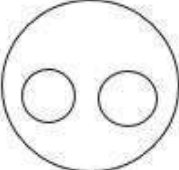
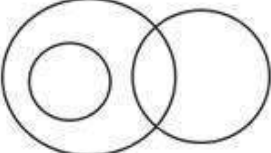
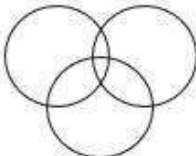
- Ans
- 1. A B B C C
 - 2. C A B B A
 - 3. C B C A C
 - 4. A C C B A

Question ID : 264330143731
Status : Answered
Chosen Option : 3

Q.6 Select the Venn diagram that best represents the relationship between the following classes.

Actors, Comedians, Politicians

Ans

- 1. 
- 2. 
- 3. 
- 4. 

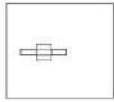
Question ID : 264330143722
Status : Answered
Chosen Option : 4

Q.7 In a certain code language, 'CURD' is written as '342184' and 'BREAD' is written as '2181024'. How will 'BUTTER' be written in that language?

- Ans
- 1. 421201018
 - 2. 442201018
 - 3. 24220201018
 - 4. 2212020518

Question ID : 26433065602
Status : Answered
Chosen Option : 3

Q.8 Select the option figure in which given figure is embedded. (Rotation is NOT allowed)



Ans

- 1.
- 2.
- 3.
- 4.

Question ID : 264330101319
Status : Answered
Chosen Option : 3

Q.9 Select the set in which the numbers are related in the same way as are the numbers of the following set.

(NOTE : Operations should be performed on the whole numbers, without breaking down the numbers into their constituent digits. E.g. 13 – Operations on 13 such as adding /subtracting /multiplying etc. to 13 can be performed. Breaking down 13 into 1 and 3 and then performing mathematical operations on 1 and 3 is not allowed)

(26, 14, 170)

(31, 7, 18)

- Ans
- 1. (11, 5, 17)
 - 2. (34, 10, 72)
 - 3. (21, 9, 60)
 - 4. (14, 6, 24)

Question ID : 26433079166
Status : Answered
Chosen Option : 3

Q.10 Three of the following four triads are alike in a certain way as they are formed by performing same mathematical operations among themselves and thus form a group. Which triad does NOT belong to that group?

- Ans
- 1. 12 : 47 : 60
 - 2. 4 : 16 : 20
 - 3. 2 : 7 : 10
 - 4. 5 : 19 : 25

Question ID : 264330143697
Status : Answered
Chosen Option : 2

Q.11 Which two signs should be interchanged to make the given equation correct?

$$912 - 456 \times 28 + 390 \div 2 = 444$$

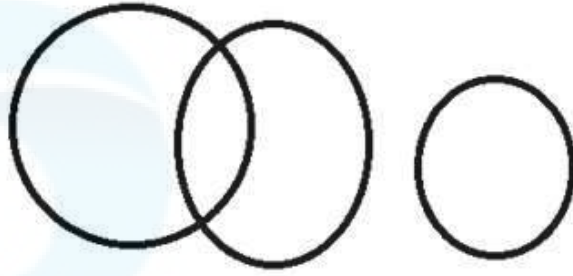
- Ans
- 1. \div and $-$
 - 2. $+$ and $+$
 - 3. $-$ and $+$
 - 4. $+$ and \times

Question ID : 264330132506
Status : Answered
Chosen Option : 1

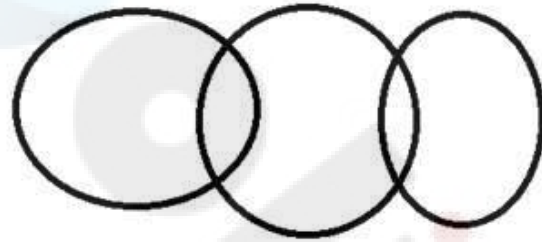
Q.12 Select the Venn diagram that best illustrates the relationship between the following classes.
Ministers, Farmers and Engineers

Ans

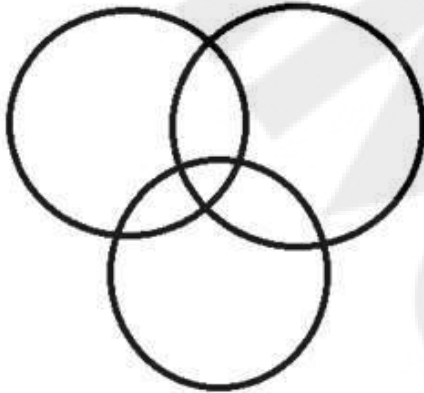
✗ 1.



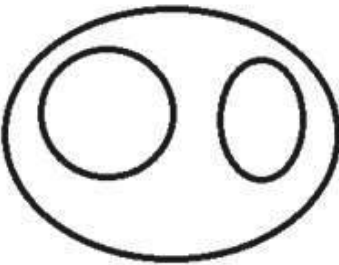
✗ 2.



✓ 3.



✗ 4.



Question ID : 264330133240
Status : Answered
Chosen Option : 3

Q.13 Select the option that represents the correct order of the given words as they would appear in an English dictionary.

1. Refinery
2. Reflect
3. Reference
4. Refugee
5. Refillable
6. Reformist

Ans 1. 3, 5, 1, 2, 6, 4
 2. 5, 1, 3, 2, 4, 6
 3. 5, 1, 3, 2, 6, 4
 4. 3, 1, 5, 2, 6, 4

Question ID : 264330132159
Status : Answered
Chosen Option : 3

Q.14 Study the given pattern carefully and select the number that can replace the question mark (?) in it.

(6, 4, 6)
(18, 9, 13)

(8, 6, ?)

(NOTE: Operations should be performed on the whole numbers, without breaking down the numbers into its constituent digits. E.g. 13 – Operations on 13 such as adding/subtracting/multiplying etc. to 13 can be performed. Breaking down 13 into 1 and 3 and then performing mathematical operations on 1 and 3 is not allowed)

Ans 1. 8
 2. 14
 3. 4
 4. 6

Question ID : 26433082469
Status : Not Answered
Chosen Option : --


Q.15 Which of the answer figures is the exact mirror image of the given problem figure when the mirror is held at the right side?

Problem figure:




Ans


✓ 1.



✗ 2.



✗ 3.



✗ 4.



Question ID : 26433067410
Status : Answered
Chosen Option : 1

Q.16 Select the option that is related to the fifth number in the same way as the second number is related to the first number and the fourth number is related to the third number.

1 : 7 :: 3 : 215 :: 4 : ?

Ans ✗ 1. 453

✗ 2. 342

✓ 3. 511

✗ 4. 363

Question ID : 26433082449
Status : Answered
Chosen Option : 3

Q.17 'A + B' means 'A is brother of B'
'A - B' means 'A is mother of B'
'A × B' means 'A is husband of B'
'A ÷ B' means 'A is sister of B'
If $C \div B - E + A \times F - D$, then which of the following statements is NOT correct?

- Ans
- 1. D is the daughter of B.
 - 2. C is the sister of the mother of A.
 - 3. F is the wife of the son of B.
 - 4. B is the mother of A.

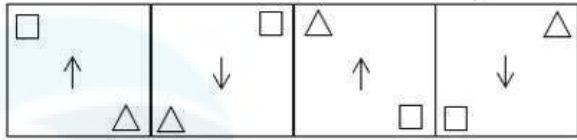
Question ID : 26433092588
Status : Answered
Chosen Option : 1

Q.18 In a certain code language, "DICTATOR" is written as "DROTATCI" and "GLIMPSE" is written as "GESPMIL". How will "CONDEMN" be written in that language?

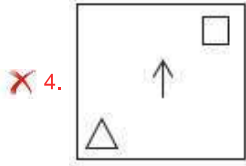
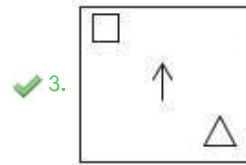
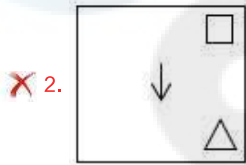
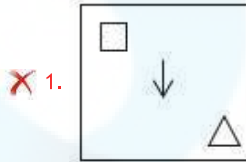
- Ans
- 1. CNONMED
 - 2. NMEDNOC
 - 3. NCONDEM
 - 4. CNMEDNO

Question ID : 264330130318
Status : Answered
Chosen Option : 4

Q.19 Which of the given figures when placed in the 5th position would continue the series that is established by the first four figures?

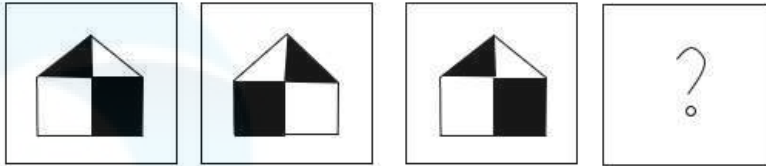


Ans



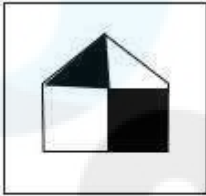
Question ID : 26433087299
 Status : Answered
 Chosen Option : 3

Q.20 Select the figure that will replace the question mark (?) in the following figure series.

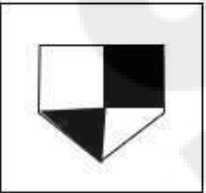


Ans

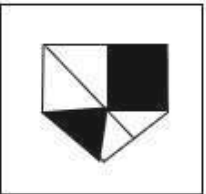
✗ 1.



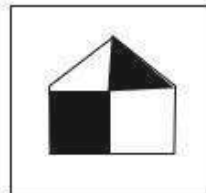
✗ 2.



✗ 3.

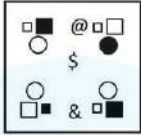


✓ 4.



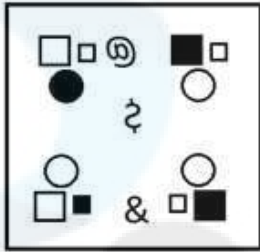
Question ID : 26433069146
Status : Answered
Chosen Option : 4

Q.21 Select the correct mirror image from the following options, when the mirror is placed on the right side of the given figure.

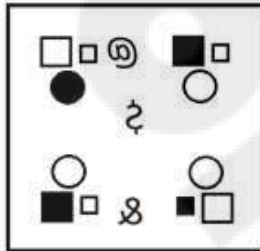


Ans

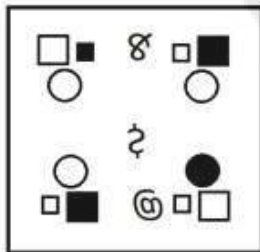
✗ 1.



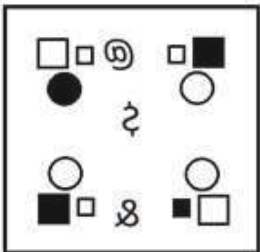
✓ 2.



✗ 3.



✗ 4.



Question ID : 264330103209
 Status : Answered
 Chosen Option : 2

Q.22 Select the option that is related to the third word in the same way as the second word is related to the first word. (The words must be considered as meaningful English words and must not be related to each other based on the number of letters/number of consonants/vowels in the word)
Diet : Dietician :: High blood sugar : ?

- Ans 1. Oncologist
 2. Urologist
 3. Dermatologist
 4. Diabetologist

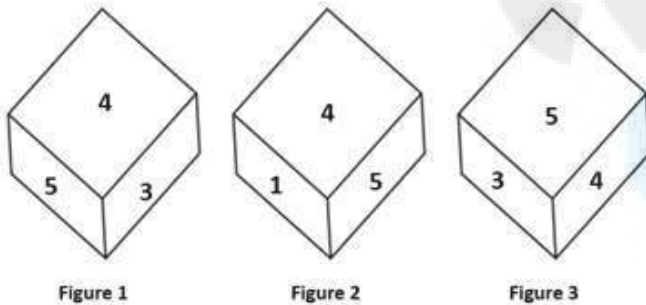
Question ID : 26433067802
Status : Answered
Chosen Option : 2

Q.23 Which of the following letter-clusters can replace the question mark (?) in the given series to make it logically complete?
DNU, ?, NXE, SCJ, XHO

- Ans 1. GQW
 2. GPV
 3. HRY
 4. ISZ

Question ID : 26433082557
Status : Answered
Chosen Option : 4

Q.24 Three different positions of the same dice are shown. Find the number on the face opposite the face showing '1'.



- Ans 1. 2
 2. 3
 3. 6
 4. 4

Question ID : 26433069063
Status : Not Answered
Chosen Option : --

Q.25 Three of the following four letter-clusters are alike in a certain way and one is different.
Pick the odd one out.

AFKP
GKPS
SXCH
JOTY

- Ans
- 1. JOTY
 - 2. SXCH
 - 3. GKPS
 - 4. AFKP

Question ID : 26433092610
Status : Answered
Chosen Option : 3

Section : General Awareness

Q.1 The Pradhan Mantri Rojgar Yojana was started during the _____.

- Ans
- 1. Ninth Five Year Plan
 - 2. Eighth Five Year Plan
 - 3. Seventh Five Year Plan
 - 4. Tenth Five Year Plan

Question ID : 264330109988
Status : Not Answered
Chosen Option : --

Q.2 Banganga festival takes place annually at which of the following places in Maharashtra?

- Ans
- 1. Pune
 - 2. Nashik
 - 3. Mumbai
 - 4. Nagpur

Question ID : 264330114473
Status : Answered
Chosen Option : 2

Q.3 Who was the first social reformer to view modern education as a vehicle for the spread of modern ideas in the country?

- Ans
- 1. Raja Ram Mohan Roy
 - 2. DK Karve
 - 3. Savitribai Phule
 - 4. Swami Vivekananda

Question ID : 264330132689
Status : Answered
Chosen Option : 1

Q.4 The Mana Ooru - Mana Badi programme was formally launched by the _____ government in March 2022 to introduce English medium in government schools.

- Ans
- 1. Odisha
 - 2. West Bengal
 - 3. Andhra Pradesh
 - 4. Telangana

Question ID : 26433090640
Status : Not Answered
Chosen Option : --

Q.5 Which of the following is used to chemically test starch?

- Ans
- 1. Chlorine solution
 - 2. Iodine solution
 - 3. Sulphur solution
 - 4. Bromine solution

Question ID : 26433066699
Status : Answered
Chosen Option : 2

Q.6 Which of the following is the correct match of the column-A with column-B?

Column-A (Nutrients)

- i. Protein rich food
- ii. Fat rich food
- iii. Carbohydrate rich food
- iv. Vitamin C rich food

Column-B (Source)

- a. Wheat
- b. Lemon
- c. Egg white
- d. Butter and cheese

- Ans
- 1. i-c, ii-a, iii-b, iv-d
 - 2. i-c, ii-d, iii-b, iv-a
 - 3. i-c, ii-d, iii-a, iv-b
 - 4. i-d, ii-c, iii-b, iv-a

Question ID : 264330131792
Status : Answered
Chosen Option : 3

Q.7 Who was the first Odissi dancer from Odisha to receive Padma Vibhushan?

- Ans
- 1. Sonal Mansingh
 - 2. Sanjukta Panigrahi
 - 3. Kelucharan Mohapatra
 - 4. Madhvi Mudgal

Question ID : 26433064261
Status : Answered
Chosen Option : 3

Q.8 In which state is the Maski inscription located at present?

- Ans 1. Tamil Nadu
 2. Andhra Pradesh
 3. Madhya Pradesh
 4. Karnataka

Question ID : 264330114024
Status : Answered
Chosen Option : 3

Q.9 When did the Drafting Committee publish the first draft of the Indian Constitution?

- Ans 1. June 1948
 2. May 1948
 3. January 1948
 4. February 1948

Question ID : 264330113364
Status : Not Answered
Chosen Option : --

Q.10 Identify the subsidiary of SAIL that is located along the Kolkata-Asansol railway line?

- Ans 1. ESL Steel Limited (ESL)
 2. Jindal Steel and Power Ltd (JSPL)
 3. Indian Iron and Steel Company (IISCO)
 4. Tata Iron and Steel plant (TISCO)

Question ID : 264330111315
Status : Answered
Chosen Option : 3

Q.11 Name the French jeweller who travelled to India at least six times during the Mughal period.

- Ans 1. Antonio Monserrate
 2. Jean-Baptiste Tavernier
 3. Seydi Ali Reis
 4. Peter Mundy

Question ID : 264330111391
Status : Answered
Chosen Option : 2

Q.12 Which of the following states in India, during October to December, receive rainfall due to Northeast monsoon?

- Ans** 1. Tamil Nadu, Kerala and Andhra Pradesh
 2. Punjab, Haryana and Madhya Pradesh
 3. Andhra Pradesh, Madhya Pradesh and Karnataka
 4. Uttar Pradesh, Bihar and West Bengal

Question ID : 264330109941
Status : Answered
Chosen Option : 1

Q.13 Machines, tools and implements, and buildings are examples of which type of goods?

- Ans** 1. Consumer goods
 2. Inferior goods
 3. Intermediate goods
 4. Capital goods

Question ID : 26433059254
Status : Answered
Chosen Option : 4

Q.14 Which of the following has the highest value of resistivity?

- Ans** 1. Silver
 2. Nichrome
 3. Chromium
 4. Iron

Question ID : 26433059080
Status : Answered
Chosen Option : 2

Q.15 Asad Ali Khan is best known for his mastery over which of the given musical instruments?

- Ans** 1. Surbahar
 2. Violin
 3. Tabla
 4. Rudra Veena

Question ID : 264330131304
Status : Answered
Chosen Option : 1

Q.16 The part of the Himalayas lying between Satluj and _____ rivers is known as Kumaon Himalayas.

- Ans 1. Indus
 2. Kali
 3. Brahmaputra
 4. Teesta

Question ID : 264330113286
Status : Answered
Chosen Option : 2

Q.17 In December 2021, Aanchal Thakur was in news for winning a bronze medal at an international event. Which sport is she associated with?

- Ans 1. Alpine Skiing
 2. Biathlon
 3. Billiards
 4. Figure Skating

Question ID : 26433092457
Status : Not Answered
Chosen Option : --

Q.18 Which of the following organisations is credited with writing literary pieces for the abolition of Sati Pratha?

- Ans 1. The Harijan Sevak Sangh
 2. The Brahmo Samaj
 3. The Satya Shodhak Samaj
 4. The Bahujan Samaj

Question ID : 264330109821
Status : Answered
Chosen Option : 2

Q.19 The pensions payable to or in respect of the officers and servants of the Supreme Court are charged upon _____.

- Ans 1. Consolidated Fund of India
 2. Reserve Bank of India
 3. Public Account of India
 4. Finance Commission of India

Question ID : 264330133077
Status : Answered
Chosen Option : 1

Q.20 On 20 July 2021, the Supreme Court struck down certain provisions of part IX B of the Constitution of India. Part IX B was related to:

- Ans
- 1. Panchayats
 - 2. Municipalities
 - 3. Co-operative Societies
 - 4. Sub-ordinate Courts

Question ID : 26433072894
Status : Answered
Chosen Option : 3

Q.21 Which of the following Indian states was the host of the 36th national games?

- Ans
- 1. Punjab
 - 2. Maharashtra
 - 3. Gujarat
 - 4. Haryana

Question ID : 264330130627
Status : Answered
Chosen Option : 3

Q.22 Which element of Group 17 has two isotopes of masses 35 and 37 amu with average abundance of 75.77% and 24.23%, respectively?

- Ans
- 1. Chlorine
 - 2. Iodine
 - 3. Fluorine
 - 4. Astatine

Question ID : 264330110046
Status : Answered
Chosen Option : 1

Q.23 'Dalkhai' is a folk dance of which of the following states of India?

- Ans
- 1. Punjab
 - 2. Kerala
 - 3. Odisha
 - 4. Karnataka

Question ID : 26433094871
Status : Answered
Chosen Option : 3

Q.24 Which of the following countries never hosted the Paralympic games ?

- Ans 1. Israel
 2. Japan
 3. South Korea
 4. India

Question ID : 264330109683
Status : Not Answered
Chosen Option : --

Q.25 The 'Right to Work' plan, under the National Rural Employment Guarantee Act, 2005, was implemented in how many districts in the first phase?

- Ans 1. 150
 2. 200
 3. 100
 4. 120

Question ID : 264330144074
Status : Not Answered
Chosen Option : --

Section : Quantitative Aptitude

Q.1 Simplify

$$2.5 \times [144 \div 198 \times \{121 \times 81 \div (11 \times 9)\}]$$

- Ans 1. 180
 2. 175
 3. 185
 4. 190

Question ID : 264330143484
Status : Answered
Chosen Option : 1

Q.2 There are 3 members in a family. The average age of the father and mother is 40 years. The average age of the father, mother and daughter is 30 years. Find the age (in years) of the daughter.

- Ans 1. 6
 2. 12
 3. 10
 4. 8

Question ID : 264330129920
Status : Answered
Chosen Option : 3

Q.3 A shopkeeper sells an item at a profit of 15% and uses a weight which is 20% less.
Find his actual profit percentage.

- Ans
- 1. 42.5%
 - 2. 50%
 - 3. 40%
 - 4. 43.75%

Question ID : 26433082380
Status : Answered
Chosen Option : 4

Q.4 Find the smallest number that can be subtracted from 148109326 so that it becomes divisible by 8.

- Ans
- 1. 4
 - 2. 8
 - 3. 6
 - 4. 10

Question ID : 264330129914
Status : Answered
Chosen Option : 3

Q.5 Simplify the following expression.
 $(3x+5)^2 + (3x-5)^2$

- Ans
- 1. $500x$
 - 2. $450x$
 - 3. $9x^2 + 50$
 - 4. $2(9x^2 + 25)$

Question ID : 264330145534
Status : Answered
Chosen Option : 4

Q.6 The volume of a cone with height equal to radius, and slant height 5 cm is :

- Ans
- 1. $\frac{125\pi}{12\sqrt{3}} \text{ cm}^3$
 - 2. $\frac{125\pi}{6\sqrt{3}} \text{ cm}^3$
 - 3. $\frac{125\pi}{12\sqrt{2}} \text{ cm}^3$
 - 4. $\frac{125\pi}{6\sqrt{2}} \text{ cm}^3$

Question ID : 26433081741
Status : Not Answered
Chosen Option : --

Q.7 A policeman noticed a thief from 300 m. The thief started running and the policeman was chasing him. The thief and the policeman ran at the speeds of 8 km/h and 9 km/h, respectively. What was the distance between them after 3 minutes?

- Ans
- 1. 225 m
 - 2. 250 m
 - 3. 300 m
 - 4. 200 m

Question ID : 264330122079

Status : **Not Attempted and Marked For Review**

Chosen Option : --

Q.8 If $\sin t + \cos t = \frac{4}{5}$, then find $\sin t \cdot \cos t$.

- Ans
- 1. $\frac{9}{50}$
 - 2. $-\frac{9}{50}$
 - 3. $\frac{9}{25}$
 - 4. $-\frac{9}{25}$

Question ID : 264330122102

Status : **Not Answered**

Chosen Option : --

Q.9 Simplify the given expression.
 $y + 2x - [(y - (y - x + y) - (x + y) + y) - 2y]$.

- Ans
- 1. -y
 - 2. -2x
 - 3. Y
 - 4. 2x

Question ID : 264330130398

Status : **Not Answered**

Chosen Option : --

Q.10 A, B and C, working alone, can complete a job in 16, 24 and 36 days, respectively. In how many days can they complete the job if they work together?

- Ans
- 1. $7\frac{11}{19}$
 - 2. $5\frac{17}{19}$
 - 3. $4\frac{13}{19}$
 - 4. $6\frac{7}{19}$

Question ID : 264330112850
Status : Answered
Chosen Option : 1

Q.11 A person deposited ₹500 for 3 years, ₹650 for 5 years, and ₹1,250 for 7 years. He received a total simple interest of ₹1,620. The rate of interest per annum is:

- Ans
- 1. 12%
 - 2. 13%
 - 3. 10.8%
 - 4. 11%

Question ID : 264330104359
Status : Answered
Chosen Option : 1

Q.12 Rakshit, Ajay, and Satish are sanitation workers in a Municipal Corporation. Rakshit alone takes 20 hours to clean a drain while Ajay takes 12 hours when working alone to do the same. All three together take only 5 hours to clean the drain. In how many hours, can Satish complete the work alone?

- Ans
- 1. 12
 - 2. 10
 - 3. 15
 - 4. 18

Question ID : 264330130020
Status : Answered
Chosen Option : 3

Q.13 $\triangle ABC \sim \triangle DEF$ and the perimeters of $\triangle ABC$ and $\triangle DEF$ are 40 cm and 12 cm, respectively. If $DE = 6$ cm, then AB is:

- Ans
- 1. 12.6 cm
 - 2. 24 cm
 - 3. 20 cm
 - 4. 10 cm

Question ID : 264330143615
Status : Not Answered
Chosen Option : --

Q.14 On a circular path of 693 m, Sujata and Anjali start walking from the same point but in the opposite directions at the speed of 2.85 km/h and 1.5 m/sec, respectively. When they will meet for the first time?

- Ans
- 1. After 6.75 minutes
 - 2. After 6.05 minutes
 - 3. After 5.04 minutes
 - 4. After 4.56 minutes

Question ID : 26433080394
Status : Not Answered
Chosen Option : --

Q.15 Select the INCORRECT formula from the following options.

- Ans
- 1. $\sec^2 \theta - \tan^2 \theta = 1$
 - 2. $\sin^2 \theta + \cos^2 \theta = 1$
 - 3. $\operatorname{cosec}^2 \theta - \cot^2 \theta = 1$
 - 4. $\sec^2 \theta + \cos^2 \theta = 1$

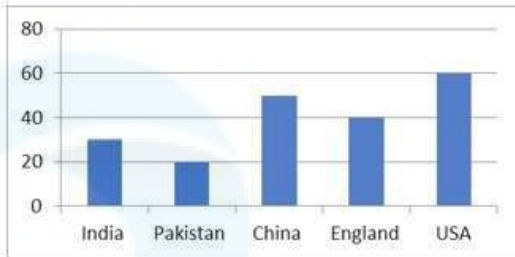
Question ID : 264330145501
Status : Answered
Chosen Option : 4

Q.16 15 men and 25 women can complete a piece of work in 9.6 days. If 16 women can complete the same work in 27 days, find the number of days in which 16 men can complete the same work.

- Ans
- 1. 22.50
 - 2. 20.25
 - 3. 19.20
 - 4. 21.60

Question ID : 264330114518
Status : Not Answered
Chosen Option : --

Q.17 Industrial growth of different countries (in crores of ₹):



How many countries' industrial growth is more than the average industrial growth?

- Ans
- 1. 3
 - 2. 4
 - 3. 2
 - 4. 1

Question ID : 264330132696
Status : Answered
Chosen Option : 3

Q.18 If the area of a circle is 616 cm^2 and a chord $XY = 10 \text{ cm}$, then find the perpendicular distance from the center of the circle to the chord XY .

- Ans
- 1. $\sqrt{171} \text{ cm}$
 - 2. $\sqrt{161} \text{ cm}$
 - 3. $\sqrt{117} \text{ cm}$
 - 4. $\sqrt{181} \text{ cm}$

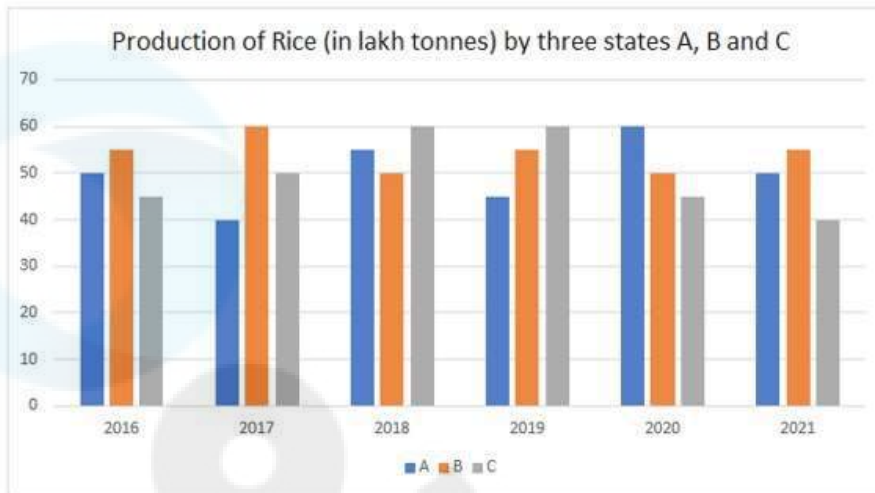
Question ID : 264330143524
Status : Not Answered
Chosen Option : --

Q.19 Find the value of $\sin^2 25^\circ + \sin^2 65^\circ$.

- Ans
- 1. -1
 - 2. $\frac{1}{2}$
 - 3. 0
 - 4. 1

Question ID : 264330143544
Status : Answered
Chosen Option : 4

Q.20 Select the correct statement with respect to the below bar graph.



- Ans
- 1. Rice production by A in 2016 is less than the rice production by C in 2020.
 - 2. B produced more rice than A and C in 2018.
 - 3. The highest production of rice was in the year 2017.
 - 4. Rice production by B in 2017 is equal to the rice production by A in 2020.

Question ID : 26433099037
Status : Answered
Chosen Option : 4

Q.21 If $x\%$ of 280 = 15% of 240 + 20% of 310, then the value of x is:

- Ans
- 1. 38
 - 2. 35
 - 3. 30
 - 4. 40

Question ID : 26433090297
Status : Answered
Chosen Option : 2

Q.22 If $(x^2 + \frac{1}{x^2}) = 7$, and $0 < x < 1$, find the value of $x^2 - \frac{1}{x^2}$.

- Ans
- 1. $3\sqrt{5}$
 - 2. $4\sqrt{3}$
 - 3. $-4\sqrt{3}$
 - 4. $-3\sqrt{5}$

Question ID : 264330114556
Status : Not Attempted and Marked For Review
Chosen Option : --

Q.23 A shopkeeper offers the following discount schemes for buyers on an article:

- i. Two successive discounts of 15% each
- ii. A discount of 25% followed by a discount of 5%
- iii. Two successive discounts of 20% and 10%
- iv. A discount of 30%

Under which scheme will the selling price be maximum?

- Ans
- 1. Scheme iv
 - 2. Scheme iii
 - 3. Scheme ii
 - 4. Scheme i

Question ID : 264330103496
Status : Not Answered
Chosen Option : --

Q.24 The area of two triangles is in the ratio 5 : 3 and their heights are in the ratio 5 : 7. Find the ratio of their bases.

- Ans
- 1. 3 : 5
 - 2. 7 : 3
 - 3. 7 : 5
 - 4. 2 : 3

Question ID : 264330129963
Status : Not Answered
Chosen Option : --

Q.25 If the LCM and the HCF of two numbers are 12 and 2 respectively, then find the mean proportional of these numbers.

- Ans
- 1. $2\sqrt{6}$
 - 2. $\sqrt{14}$
 - 3. 2
 - 4. $\sqrt{6}$

Question ID : 264330131412
Status : Not Answered
Chosen Option : --

Section : English Comprehension

Q.1 Select the most appropriate one-word substitution of the given group of words.

Irreverent behaviour toward anything held sacred or concerning God.

- Ans
- 1. Agnosticism
 - 2. Pantheism
 - 3. Theism
 - 4. Blasphemy

Question ID : 26433090858
Status : Answered
Chosen Option : 4

Q.2 Sentences of a paragraph are given below in jumbled order. Arrange the sentences in the correct order to form a meaningful and coherent paragraph.

- A. Many countries throughout the world have achieved full digitalisation.
- B. Initially, the entire world transitioned to digitalisation.
- C. This type of internet is known as a metaverse.
- D. This existing kind of internet technology, which gives us access to various aspects, is about to change into a better and newer version.
- E. The Metaverse is an intriguing technology that has been described as the 'newer version of the internet'.

- Ans
- 1. BCEDA
 - 2. DCEBA
 - 3. ABCDE
 - 4. EADCB

Question ID : 264330100245
Status : Answered
Chosen Option : 4

Q.3 Select the option that can be used as a one-word substitute for the given group of words.

Huge fire for celebration

- Ans
- 1. Firepower
 - 2. Festivity
 - 3. Firefight
 - 4. Bonfire

Question ID : 26433073976
Status : Answered
Chosen Option : 4

Q.4 Select the most appropriate option that can substitute the underlined segment in the given sentence. If there is no need to substitute it, select 'No substitution required'.

It is reported that she has win a prize money of ten lakhs at a reality show.

- Ans
- 1. she will won
 - 2. she had win
 - 3. No substitution required
 - 4. she has won

Question ID : 26433073377
Status : Answered
Chosen Option : 4

Q.5 Select the option that expresses the given sentence in passive voice.
Joseph opened the Bible.

- Ans
- 1. The Bible is being opened by Joseph.
 - 2. Joseph is opening the Bible.
 - 3. The Bible was opened by Joseph.
 - 4. Joseph opens the Bible.

Question ID : 264330133296
Status : Answered
Chosen Option : 3

Q.6 The following sentence has been divided into parts. One of them may contain an error. Select the part that contains the error from the given options. If you don't find any error, mark 'No error' as your answer.
He promised them / that he would sure repay / the loan urgently.

- Ans
- 1. No error
 - 2. He promised them
 - 3. the loan urgently
 - 4. that he would sure repay

Question ID : 26433060128
Status : Answered
Chosen Option : 4

Q.7 Select the most appropriate ANTONYM of the given word.

Gullible

- Ans
- 1. Credulous
 - 2. Pliant
 - 3. Cynical
 - 4. Simple

Question ID : 26433099093
Status : Answered
Chosen Option : 3

Q.8 Select the option that expresses the given sentence in active voice.
The ball of yarn was being nudged by the kitten.

- Ans
- 1. The kitten was nudged by the ball of yarn.
 - 2. The kitten is nudging the ball of yarn.
 - 3. The kitten was nudging the ball of yarn.
 - 4. The kitten has been nudging the ball of yarn.

Question ID : 264330133415
Status : Answered
Chosen Option : 3

Q.9 Select the most appropriate homonym of the underlined word to fill in the blank.
He was complimented for his appearance. His shirt _____ his trousers perfectly.

- Ans
- 1. competed
 - 2. complement
 - 3. commented
 - 4. complemented

Question ID : 26433097024
Status : Answered
Chosen Option : 4

Q.10 Select the correctly spelt option that can substitute the underlined word in the given sentence.

Patrol is very costly these days.

- Ans
- 1. Petrole
 - 2. Petrul
 - 3. Patrole
 - 4. Petrol

Question ID : 264330117184
Status : Answered
Chosen Option : 4

Q.11 Select the correctly spelt option that can substitute the underlined word in the given sentence.

The goods were taken on a public career.

- Ans
- 1. carier
 - 2. carryer
 - 3. carrier
 - 4. courier

Question ID : 264330117186
Status : Answered
Chosen Option : 3

Q.12 Select the most appropriate ANTONYM of the underlined word.

Is there any portal to redeem these coupons that I have collected from the store?

- Ans
- 1. forsake
 - 2. deplore
 - 3. forfeit
 - 4. embezzle

Question ID : 264330141556
Status : Answered
Chosen Option : 3

Q.13 Select the most appropriate meaning of the underlined idiom/phrase in the given sentence.

Today, the country's nationalists rule the roost and hand out the jobs.

- Ans
- 1. To be in charge
 - 2. To be prejudiced
 - 3. To save a criminal
 - 4. To exploit someone

Question ID : 26433088225
Status : Answered
Chosen Option : 1

Q.14 Select the most appropriate meaning of the given idiom.

Keep someone at arm's length

- Ans 1. Avoid becoming friendly with someone
 2. Avoid playing with someone
 3. Being someone's enemy
 4. Avoid becoming bitter with someone

Question ID : 26433090378
Status : Answered
Chosen Option : 1

Q.15 Select the most appropriate synonym of the bracketed word given in the sentence.
The efforts will be _____ (vain) if we do not submit the project report on time.

- Ans 1. useless
 2. careless
 3. delightful
 4. sensible

Question ID : 26433096352
Status : Answered
Chosen Option : 1

Q.16 Select the most appropriate option to fill in the blank.
The patient looked _____ and tired.

- Ans 1. pail
 2. pale
 3. pall
 4. peel

Question ID : 264330123030
Status : Answered
Chosen Option : 2

Q.17 Select the most appropriate option that can substitute the underlined segment in the given sentence.
Natwar was a fraudster who always tried to fooling others.

- Ans 1. betraying
 2. deceive
 3. cheating
 4. revealing

Question ID : 26433098981
Status : Answered
Chosen Option : 2

Q.18 Select the most appropriate synonym of the given word.
Consent

- Ans 1. Avert
 2. Assent
 3. Disturb
 4. Dissent

Question ID : 26433096993
Status : Answered
Chosen Option : 2

Q.19 Select the option that can be used as a one-word substitute for the given group of words.

A place to play games and bet on them

- Ans 1. Motel
 2. Hotel
 3. Casino
 4. Pub

Question ID : 26433073970
Status : Answered
Chosen Option : 3

Q.20 The following sentence has been divided into parts. One of them may contain an error. Select the part that contains the error from the given options. If you don't find any error, mark 'No error' as your answer.

Karan call the restaurant / to ask if he could / reserve a table for tomorrow.

- Ans 1. Karan call the restaurant
 2. reserve a table for tomorrow
 3. to ask if he could
 4. No error

Question ID : 26433084572
Status : Answered
Chosen Option : 1

Comprehension:

In the following passage, some words have been deleted. Read the passage carefully and select the most appropriate option to fill in each blank.

We must understand that people can process very little information presented orally. So, it is (1)____, particularly for a teacher, to realise that the students have sometimes listened to three or four teachers (2) ____you. So, the teacher must have props like notes, handouts and slides that will make the learning material (3) ____ alive for the students and stay that way with them. A visual aid, a little movement or colour will get the students' attention. Another important thing to (4)____ is that long, complicated sentences spoken fast are simply too difficult for students to understand. It is, therefore, (5)____to use short sentences that make sense to them instantly.

SubQuestion No : 21

Q.21 Select the most appropriate option to fill in blank no. 1.

- Ans 1. urgent
 2. immaterial
 3. unnecessary
 4. important

Question ID : 264330139817
Status : Answered
Chosen Option : 4

Comprehension:

In the following passage, some words have been deleted. Read the passage carefully and select the most appropriate option to fill in each blank.

We must understand that people can process very little information presented orally. So, it is (1)____, particularly for a teacher, to realise that the students have sometimes listened to three or four teachers (2) ____you. So, the teacher must have props like notes, handouts and slides that will make the learning material (3) ____ alive for the students and stay that way with them. A visual aid, a little movement or colour will get the students' attention. Another important thing to (4)____ is that long, complicated sentences spoken fast are simply too difficult for students to understand. It is, therefore, (5)____to use short sentences that make sense to them instantly.

SubQuestion No : 22

Q.22 Select the most appropriate option to fill in blank no. 2.

- Ans 1. behind
 2. beside
 3. before
 4. after

Question ID : 264330139818
Status : Answered
Chosen Option : 2

Comprehension:

In the following passage, some words have been deleted. Read the passage carefully and select the most appropriate option to fill in each blank.

We must understand that people can process very little information presented orally. So, it is (1)____, particularly for a teacher, to realise that the students have sometimes listened to three or four teachers (2) ____you. So, the teacher must have props like notes, handouts and slides that will make the learning material (3) ____ alive for the students and stay that way with them. A visual aid, a little movement or colour will get the students' attention. Another important thing to (4)____ is that long, complicated sentences spoken fast are simply too difficult for students to understand. It is, therefore, (5)____to use short sentences that make sense to them instantly.

SubQuestion No : 23

Q.23 Select the most appropriate option to fill in blank no. 3.

- Ans 1. stay
 2. depart
 3. go
 4. come

Question ID : 264330139819
Status : Answered
Chosen Option : 4

Comprehension:

In the following passage, some words have been deleted. Read the passage carefully and select the most appropriate option to fill in each blank.

We must understand that people can process very little information presented orally. So, it is (1)____, particularly for a teacher, to realise that the students have sometimes listened to three or four teachers (2) ____you. So, the teacher must have props like notes, handouts and slides that will make the learning material (3) ____ alive for the students and stay that way with them. A visual aid, a little movement or colour will get the students' attention. Another important thing to (4)____ is that long, complicated sentences spoken fast are simply too difficult for students to understand. It is, therefore, (5)____to use short sentences that make sense to them instantly.

SubQuestion No : 24

Q.24 Select the most appropriate option to fill in blank no. 4.

- Ans 1. guess
 2. detect
 3. realise
 4. decide

Question ID : 264330139820
Status : Answered
Chosen Option : 3

Comprehension:

In the following passage, some words have been deleted. Read the passage carefully and select the most appropriate option to fill in each blank.

We must understand that people can process very little information presented orally. So, it is (1)____, particularly for a teacher, to realise that the students have sometimes listened to three or four teachers (2) ____you. So, the teacher must have props like notes, handouts and slides that will make the learning material (3) ____ alive for the students and stay that way with them. A visual aid, a little movement or colour will get the students' attention. Another important thing to (4)____ is that long, complicated sentences spoken fast are simply too difficult for students to understand. It is, therefore, (5)____to use short sentences that make sense to them instantly.

SubQuestion No : 25

Q.25 Select the most appropriate option to fill in blank no. 5.

Ans 1. compulsory

2. advisable

3. mandatory

4. prohibited

Question ID : 264330139821

Status : Answered

Chosen Option : 2