

Multi Tasking Non Technical Staff and Havaladar CBIC and CBN Examination 2023

Roll Number	
Candidate Name	
Venue Name	Dr. Kalam Academy
Exam Date	11/09/2023
Exam Time	12:30 PM - 2:30 PM
Subject	MTS Non Tech Havaladar CBIC and CBN Examination 2023

Section : Numerical and Mathematical Ability

Q.1 The price of a bed is first increased by 32% and later on decreased by 20% due to reduction in sales. Find the net percentage change in the final price of the bed.

- Ans** ☒ 1. 5.6%
☒ 2. 6.2%
☒ 3. 7.5%
☒ 4. 4.9%

Question ID : 264330156179

Option 1 ID : 264330612115

Option 2 ID : 264330612116

Option 3 ID : 264330612117

Option 4 ID : 264330612118

Status : Answered

Chosen Option : 1

Q.2 A cone has base diameter 4 m and height 1.5 m. Find the slant height of the cone (in m).

- Ans** ☒ 1. 2.1
☒ 2. 2.3
☒ 3. 2.7
☒ 4. 2.5

Question ID : 264330156244

Option 1 ID : 264330612375

Option 2 ID : 264330612376

Option 3 ID : 264330612378

Option 4 ID : 264330612377

Status : Answered

Chosen Option : 4

Q.3 Robin purchases a fan for ₹2,000 and later sells it at a loss of 15%. At what price did he sell the fan?

- Ans**
- ☒ 1. ₹1,900
 - ☒ 2. ₹1,800
 - ☒ 3. ₹1,700
 - ☒ 4. ₹2,100

Question ID : 264330156103

Option 1 ID : 264330611814

Option 2 ID : 264330611812

Option 3 ID : 264330611811

Option 4 ID : 264330611813

Status : Answered

Chosen Option : 3

Q.4 What is the compound interest (in ₹) on ₹20,500 for 2 years at 10% per annum, if the interest is compounded annually?

- Ans**
- ☒ 1. 5,403
 - ☒ 2. 4,305
 - ☒ 3. 4,530
 - ☒ 4. 4,350

Question ID : 264330153773

Option 1 ID : 264330602556

Option 2 ID : 264330602558

Option 3 ID : 264330602557

Option 4 ID : 264330602555

Status : Answered

Chosen Option : 2

Q.5 What is the value of R, if, $10(8 + 4R) \div (12 \times 5) - 5 \times 2^3 = 6$?

- Ans**
- ☒ 1. 86
 - ☒ 2. 68
 - ☒ 3. 76
 - ☒ 4. 67

Question ID : 264330153756

Option 1 ID : 264330602488

Option 2 ID : 264330602487

Option 3 ID : 264330602489

Option 4 ID : 264330602490

Status : Answered

Chosen Option : 4

Q.6 A and B working separately can do a piece of work in 16 days and 28 days, respectively. If they work on alternate days beginning with B, in how many days will the work be completed?

Ans

☒ 1. $18\frac{1}{2}$

☒ 2. $20\frac{1}{2}$

☒ 3. $21\frac{1}{2}$

☒ 4. $19\frac{1}{2}$

Question ID : 264330155758

Option 1 ID : 264330610438

Option 2 ID : 264330610436

Option 3 ID : 264330610435

Option 4 ID : 264330610437

Status : Answered

Chosen Option : 2

Q.7 The average weight of 15 parcels is 20 kg. Addition of another new parcel increases the average weight by 250 grams. What is the weight of the new parcel?

Ans

☒ 1. 28 kg

☒ 2. 24 kg

☒ 3. 22 kg

☒ 4. 26 kg

Question ID : 264330156291

Option 1 ID : 264330612563

Option 2 ID : 264330612564

Option 3 ID : 264330612565

Option 4 ID : 264330612566

Status : Answered

Chosen Option : 2

Q.8 ₹8,000 becomes ₹9,800 in three years at simple interest rate. If the rate of interest becomes two times of itself, then what will be the amount of the same principle in four years?

Ans

☒ 1. ₹10,800

☒ 2. ₹11,800

☒ 3. ₹12,800

☒ 4. ₹13,500

Question ID : 264330158214

Option 1 ID : 264330620217

Option 2 ID : 264330620215

Option 3 ID : 264330620216

Option 4 ID : 264330620218

Status : Answered

Chosen Option : 3

Q.9 Neha walks at the rate of 8 km/h and crosses a bridge in 27 minutes. What is the length of the bridge in metres?

- Ans**
- ☒ 1. 4850
 - ☒ 2. 3600
 - ☒ 3. 3000
 - ☒ 4. 2400

Question ID : 264330156112

Option 1 ID : 264330611850

Option 2 ID : 264330611848

Option 3 ID : 264330611847

Option 4 ID : 264330611849

Status : Answered

Chosen Option : 2

Q.10 Sanjay wants to exactly measure the lengths 7000 mm, 3850 mm and 12950 mm using a single measuring tape. What will be the greatest possible length (in cm) of the measuring tape?

- Ans**
- ☒ 1. 40
 - ☒ 2. 45
 - ☒ 3. 35
 - ☒ 4. 30

Question ID : 264330155682

Option 1 ID : 264330610133

Option 2 ID : 264330610134

Option 3 ID : 264330610132

Option 4 ID : 264330610131

Status : Answered

Chosen Option : 3

Q.11 If $A : B = 3 : 4$ and $B : C = 6 : 5$, then $A : B : C$ is:

- Ans**
- ☒ 1. 9 : 12 : 20
 - ☒ 2. 9 : 10 : 20
 - ☒ 3. 9 : 10 : 12
 - ☒ 4. 9 : 12 : 10

Question ID : 264330153872

Option 1 ID : 264330602951

Option 2 ID : 264330602952

Option 3 ID : 264330602953

Option 4 ID : 264330602954

Status : Answered

Chosen Option : 4

Q.12 5 pipes are required to fill a tank in 1 hour and 40 minutes. How long (in minutes) will it take to fill the same tank if 4 pipes of the same type are used?

- Ans
- ☒ 1. 115
 - ☒ 2. 150
 - ☒ 3. 125
 - ☒ 4. 140

Question ID : 264330153772

Option 1 ID : 264330602552

Option 2 ID : 264330602554

Option 3 ID : 264330602553

Option 4 ID : 264330602551

Status : Answered

Chosen Option : 3

Q.13 The mean of 23 observations is 36. If the mean of the first 12 observations is 32 and that of the last 12 observations is 39, find the 12th observation.

- Ans
- ☒ 1. 26
 - ☒ 2. 23
 - ☒ 3. 24
 - ☒ 4. 25

Question ID : 264330156096

Option 1 ID : 264330611785

Option 2 ID : 264330611783

Option 3 ID : 264330611786

Option 4 ID : 264330611784

Status : Answered

Chosen Option : 3

Q.14 By investing ₹12,000 in a scheme, R gets ₹15,500 back in return. What is his percentage of profit?

- Ans
- ☒ 1. 27.19%
 - ☒ 2. 29.17%
 - ☒ 3. 17.92%
 - ☒ 4. 19.17%

Question ID : 264330160010

Option 1 ID : 264330627388

Option 2 ID : 264330627387

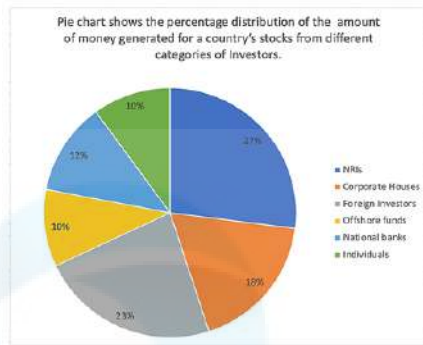
Option 3 ID : 264330627390

Option 4 ID : 264330627389

Status : Answered

Chosen Option : 2

Q.15 The following Pie chart shows the amount of money generated for a country's stocks from different categories of Investors.



If the total investment other than by NRIs, foreign investors and corporate houses is ₹456 crore, then the investment by National banks and offshore funds (in crore ₹) will be:

- Ans
- ✗ 1. 231.5
 - ✗ 2. 331.5
 - ✗ 3. 213.5
 - ✓ 4. 313.5

Question ID : 264330153783

Option 1 ID : 264330602597

Option 2 ID : 264330602595

Option 3 ID : 264330602598

Option 4 ID : 264330602596

Status : Answered

Chosen Option : 4

Q.16 A man rows to a place at a distance of 72 km and comes back in 36 hours. He finds that he can row 12 km with the stream in the same time as 4 km against the stream. The speed (in km/h, rounded off to 2 decimal places) of the stream is:

- Ans
- ✗ 1. 3.75
 - ✗ 2. 2.45
 - ✓ 3. 2.67
 - ✗ 4. 2.33

Question ID : 264330153777

Option 1 ID : 264330602573

Option 2 ID : 264330602572

Option 3 ID : 264330602571

Option 4 ID : 264330602574

Status : Answered

Chosen Option : 3

Q.17 A milk vendor mixes water with milk and by selling the mixture at the cost price he gains $16\frac{1}{4}\%$. Find the ratio of milk to water in the mixture.

- Ans
- ✗ 1. 7 : 40
 - ✓ 2. 80 : 13
 - ✗ 3. 13 : 80
 - ✗ 4. 40 : 7

Question ID : 264330153836

Option 1 ID : 264330602810

Option 2 ID : 264330602808

Option 3 ID : 264330602809

Option 4 ID : 264330602807

Status : Answered

Chosen Option : 2

Q.18 If the length of the longest diagonal of a cubical box is $\sqrt{300}$ cm, find its volume.

- Ans**
- ☐ 1. 10000 cm³
 - ☐ 2. 400 cm³
 - ☐ 3. 100 cm³
 - ☒ 4. 1000 cm³

Question ID : 264330156084

Option 1 ID : 264330611737

Option 2 ID : 264330611738

Option 3 ID : 264330611736

Option 4 ID : 264330611735

Status : Answered

Chosen Option : 4

Q.19 A, B and C can complete a work in 10, 15 and 25 days, respectively. The time taken by A, B and C together to do the work is:

- Ans**
- ☐ 1. $3\frac{16}{31}$ days
 - ☒ 2. $4\frac{26}{31}$ days
 - ☐ 3. $3\frac{11}{31}$ days
 - ☐ 4. $4\frac{27}{31}$ days

Question ID : 264330156531

Option 1 ID : 264330613513

Option 2 ID : 264330613511

Option 3 ID : 264330613512

Option 4 ID : 264330613514

Status : Answered

Chosen Option : 2

Q.20 A person jogged daily as per the given table:

Day	Monday	Tuesday	Wednesday	Thursday	Friday	Saturday	Sunday
Distance jogged (in kms)	4.5	3.5	2.5	3.0	2.0	4.0	1.5

What is the mean distance jogged by the person in a week?

- Ans**
- ☐ 1. 2
 - ☐ 2. 3.5
 - ☐ 3. 2.5
 - ☒ 4. 3

Question ID : 264330154097

Option 1 ID : 264330603852

Option 2 ID : 264330603851

Option 3 ID : 264330603854

Option 4 ID : 264330603853

Status : Answered

Chosen Option : 4

Q.1 Read the given statements and conclusions carefully. You have to take the given statements to be true even if they seem to be at variance from commonly known facts. You have to decide which conclusion/s logically follow/s from the given statements.

Statements: All dogs are cats. Some cats are hens. All hens are pink.

Conclusion I: Some dogs are cats.

Conclusion II: Some cats are pink.

- Ans**
- ☒ 1. Neither conclusion (I) nor (II) is follow.
 - ☒ 2. Both conclusions (I) and (II) are follow.
 - ☒ 3. Only conclusion (II) is follow.
 - ☒ 4. Only conclusion (I) is follow.

Question ID : 264330155923

Option 1 ID : 264330611097

Option 2 ID : 264330611098

Option 3 ID : 264330611096

Option 4 ID : 264330611095

Status : Answered

Chosen Option : 2

Q.2 5 is related to 24 following a certain logic. Following the same logic, 9 is related to 80. To which of the following is 14 related to, following the same logic?

- Ans**
- ☒ 1. 197
 - ☒ 2. 195
 - ☒ 3. 196
 - ☒ 4. 198

Question ID : 264330151585

Option 1 ID : 264330593969

Option 2 ID : 264330593967

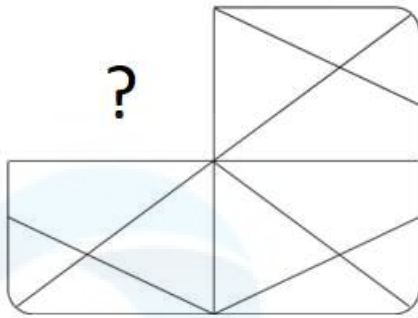
Option 3 ID : 264330593968

Option 4 ID : 264330593970

Status : Answered

Chosen Option : 2

Q.3 Identify the figure that completes the pattern (rotation is NOT allowed).

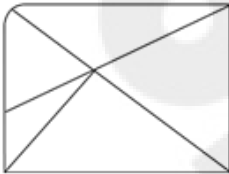


Ans

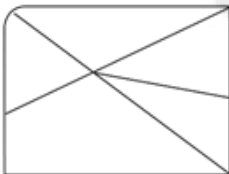
✗ 1.



✗ 2.



✗ 3.



✓ 4.



Question ID : 264330154521

Option 1 ID : 264330605549

Option 2 ID : 264330605548

Option 3 ID : 264330605547

Option 4 ID : 264330605550

Status : Answered

Chosen Option : 4

Q.4 What should come in place of '?' in the given series?

14 47 146 443 1334 ?

Ans

✓ 1. 4007

✗ 2. 4171

✗ 3. 4078

✗ 4. 4001

Question ID : 264330151489

Option 1 ID : 264330593584

Option 2 ID : 264330593586

Option 3 ID : 264330593585

Option 4 ID : 264330593583

Status : Answered

Chosen Option : 1

Q.5 Select the combination of letters that when sequentially placed in the blanks of the given series, will complete the series.

_ TU _ T _ TT _ _ TU

- Ans**
- ☒ 1. UTUTU
 - ☒ 2. TTUUT
 - ☒ 3. UUTUU
 - ☒ 4. TUTUU

Question ID : 264330151647

Option 1 ID : 264330594216

Option 2 ID : 264330594218

Option 3 ID : 264330594215

Option 4 ID : 264330594217

Status : Answered

Chosen Option : 2

Q.6 Shagun, Pragya, Yati, Lovey, Savi and Frooti are sitting around a circular table facing the centre. Shagun sits 2nd to the left of Pragya. Yati sits 2nd to the left of Shagun. Lovey sits 3rd to the left of Yati. Savi sits 2nd to the left of Lovey. Who sits 3rd to the left of Shagun?

- Ans**
- ☒ 1. Pragya
 - ☒ 2. Lovey
 - ☒ 3. Savi
 - ☒ 4. Frooti

Question ID : 264330155653

Option 1 ID : 264330610017

Option 2 ID : 264330610016

Option 3 ID : 264330610018

Option 4 ID : 264330610015

Status : Answered

Chosen Option : 4

Q.7 If 15th Feb 2010 is Monday, then what will be the day of the week on 7th July 2011?

- Ans**
- ☒ 1. Saturday
 - ☒ 2. Monday
 - ☒ 3. Wednesday
 - ☒ 4. Thursday

Question ID : 264330154333

Option 1 ID : 264330604797

Option 2 ID : 264330604796

Option 3 ID : 264330604798

Option 4 ID : 264330604795

Status : Answered

Chosen Option : 4

Q.8 In a certain code language, 'ARC' is coded as '1-18-3' and 'BOY' is coded as '2-15-25'. What is the code for 'FAD' in the given code language?

- Ans**
- ☒ 1. 7-2-5
 - ☒ 2. 6-1-4
 - ☒ 3. 5-2-6
 - ☒ 4. 6-2-4

Question ID : 264330155817

Option 1 ID : 264330610673

Option 2 ID : 264330610672

Option 3 ID : 264330610671

Option 4 ID : 264330610674

Status : Answered

Chosen Option : 2

Q.9 What should come in place of ? in the given series based on the English alphabetical order?

HVP, JZO, LDN, NHM, ?

- Ans**
- ☒ 1. PLL
 - ☒ 2. NLN
 - ☒ 3. MLM
 - ☒ 4. OLL

Question ID : 264330155799

Option 1 ID : 264330610600

Option 2 ID : 264330610601

Option 3 ID : 264330610599

Option 4 ID : 264330610602

Status : Answered

Chosen Option : 1

Q.10 Select the set in which the numbers are related in the same way as are the numbers of the following sets.

(NOTE: Operations should be performed on the whole numbers, without breaking down the numbers into its constituent digits. E.g. 13 – Operations on 13 such as adding / subtracting / multiplying etc. to 13 can be performed.

Breaking down 13 into 1 and 3 and then performing mathematical operations on 1 and 3 is not allowed)

(2, 8, 32)

(5, 7, 70)

- Ans**
- ☒ 1. 7, 12, 84
 - ☒ 2. 3, 5, 15
 - ☒ 3. 6, 11, 56
 - ☒ 4. 4, 12, 96

Question ID : 264330151616

Option 1 ID : 264330594094

Option 2 ID : 264330594091

Option 3 ID : 264330594093

Option 4 ID : 264330594092

Status : Answered

Chosen Option : 4

Q.11 In a certain code language, 'NEAR' is coded as 4968 and 'REAP' is coded as 9865. What is the code for 'P' in the given code language?

- Ans
- ☒ 1. 9
 - ☒ 2. 8
 - ☒ 3. 5
 - ☒ 4. 6

Question ID : 264330155870

Option 1 ID : 264330610883

Option 2 ID : 264330610884

Option 3 ID : 264330610886

Option 4 ID : 264330610885

Status : Answered

Chosen Option : 3

Q.12 What will come in place of '?' in the following equation, if '+' and '-' are interchanged and '×' and '÷' are interchanged?

$$10 + 6 - 5 \times 5 \div 3 = ?$$

- Ans
- ☒ 1. 7
 - ☒ 2. 8
 - ☒ 3. 5
 - ☒ 4. 4

Question ID : 264330154664

Option 1 ID : 264330606121

Option 2 ID : 264330606122

Option 3 ID : 264330606120

Option 4 ID : 264330606119

Status : Answered

Chosen Option : 1

Q.13 EH 11 is related to CF 16 in a certain way. In the same way, JV 15 is related to HT 20. To which of the following is FN 13 related to following the same logic?

- Ans
- ☒ 1. DK 19
 - ☒ 2. CL 18
 - ☒ 3. EM 17
 - ☒ 4. DL 18

Question ID : 264330151659

Option 1 ID : 264330594264

Option 2 ID : 264330594263

Option 3 ID : 264330594265

Option 4 ID : 264330594266

Status : Answered

Chosen Option : 4

Q.14 Find out the correct alternative that when filled in the blanks in the same sequence will make the series logically complete.

G_KPN_RPUXY_BE_PL_MP

- Ans
- ☒ 1. QJLDP
 - ☒ 2. JPFLC
 - ☒ 3. JQPFL
 - ☒ 4. QFDPA

Question ID : 264330154728

Option 1 ID : 264330606376

Option 2 ID : 264330606377

Option 3 ID : 264330606375

Option 4 ID : 264330606378

Status : Answered

Chosen Option : 3

Q.15 What should come in place of '?' in the given series?

7 33 137 553 2217 ?

- Ans
- ☒ 1. 8873
 - ☒ 2. 8723
 - ☒ 3. 8931
 - ☒ 4. 8827

Question ID : 264330151457

Option 1 ID : 264330593457

Option 2 ID : 264330593455

Option 3 ID : 264330593458

Option 4 ID : 264330593456

Status : Answered

Chosen Option : 1

Q.16 Read the given statements and conclusions carefully. You have to take the given statements to be true even if they seem to be at variance from commonly known facts. You have to decide which conclusion/s logically follow/s from the given statements.

Statements: All clowns are bottles. Some bottles are steel. All steel are keys.

Conclusion I: Some clowns are bottles.

Conclusion II: All steel are bottles.

- Ans
- ☒ 1. Both conclusions (I) and (II) are follow.
 - ☒ 2. Only conclusion (I) is follow.
 - ☒ 3. Only conclusion (II) is follow.
 - ☒ 4. Neither conclusion (I) nor (II) is follow.

Question ID : 264330155905

Option 1 ID : 264330611026

Option 2 ID : 264330611023

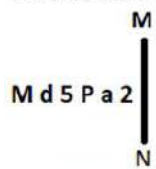
Option 3 ID : 264330611024

Option 4 ID : 264330611025

Status : Answered

Chosen Option : 2

Q.17 Select the correct mirror image of the given figure when the mirror is placed at MN as shown below.



Ans

☒ 1. a 2 5 P b M

☒ 2. 2 5 P b M

☒ 3. 2 5 P b M

☒ 4. 2 5 P b M

Question ID : 264330151523

Option 1 ID : 264330593722

Option 2 ID : 264330593719

Option 3 ID : 264330593720

Option 4 ID : 264330593721

Status : Answered

Chosen Option : 2

Q.18 Which figure should replace the question mark (?) if the following figure series were to be continued?

S	4	S	=	
= X 4 A D S 4 V = X A S				?
D A X = A X V 4				

Ans

✗ 1.

S		
A 4 =		
X V		

✗ 2.

S		
= A 4		
X V		

✓ 3.

S		
= 6 4		
X V		

✗ 4.

S		
= 6 4		
A X		

Question ID : 264330154752

Option 1 ID : 264330606473

Option 2 ID : 264330606474

Option 3 ID : 264330606471

Option 4 ID : 264330606472

Status : Answered

Chosen Option : 3

Q.19 What should come in place of '?' in the given series?

12 18 30 54 102 ?

Ans

✗ 1. 204

✓ 2. 198

✗ 3. 187

✗ 4. 190

Question ID : 264330151452

Option 1 ID : 264330593438

Option 2 ID : 264330593437

Option 3 ID : 264330593435

Option 4 ID : 264330593436

Status : Answered

Chosen Option : 2

Q.20 What will come in the place of '?' in the following equation, if '+' and '-' are interchanged and '×' and '÷' are interchanged?

$$216 \times 36 - 6 \div 17 + 39 = ?$$

Ans ✓ 1. 69

✗ 2. 89

✗ 3. 79

✗ 4. 59

Question ID : 264330155678

Option 1 ID : 264330610117

Option 2 ID : 264330610115

Option 3 ID : 264330610116

Option 4 ID : 264330610118

Status : Answered

Chosen Option : 1

Section : General Awareness

Q.1 Who propounded the concept of 'Rule of Law'?

Ans ✓ 1. AV Dicey

✗ 2. CK Daphtary

✗ 3. Austin

✗ 4. AK Sen

Question ID : 264330159590

Option 1 ID : 264330625719

Option 2 ID : 264330625721

Option 3 ID : 264330625722

Option 4 ID : 264330625720

Status : Answered

Chosen Option : 1

Q.2 In which state is Vijay Stambh situated?

Ans ✓ 1. Rajasthan

✗ 2. Punjab

✗ 3. Uttar Pradesh

✗ 4. Gujarat

Question ID : 264330160771

Option 1 ID : 264330630415

Option 2 ID : 264330630418

Option 3 ID : 264330630417

Option 4 ID : 264330630416

Status : Answered

Chosen Option : 1

Q.3 Which state passed a bill for the protection of advocates and became the first state to do so?

- Ans ☒ 1. Punjab
☒ 2. Rajasthan
☒ 3. Haryana
☒ 4. Himachal Pradesh

Question ID : 264330158337
Option 1 ID : 264330620708
Option 2 ID : 264330620710
Option 3 ID : 264330620709
Option 4 ID : 264330620707
Status : Answered
Chosen Option : 3

Q.4 Chaoite, Buckminsterfullerene and Graphene are related to which element?

- Ans ☒ 1. Arsenic
☒ 2. Carbon
☒ 3. Sulphur
☒ 4. Bromine

Question ID : 264330161059
Option 1 ID : 264330631569
Option 2 ID : 264330631567
Option 3 ID : 264330631568
Option 4 ID : 264330631570
Status : Answered
Chosen Option : 2

Q.5 Who is credited with the establishment of Servants of India Society?

- Ans ☒ 1. Lala Lajpat Rai
☒ 2. Gopal Krishna Gokhale
☒ 3. MG Ranade
☒ 4. CR Das

Question ID : 264330162331
Option 1 ID : 264330636653
Option 2 ID : 264330636654
Option 3 ID : 264330636651
Option 4 ID : 264330636652
Status : Answered
Chosen Option : 2

Q.6 The value of all final goods and services produced within the country during one year is known as _____.

- Ans ☒ 1. gross national product
☒ 2. net national product
☒ 3. gross domestic product
☒ 4. net domestic product

Question ID : 264330161457
Option 1 ID : 264330633157
Option 2 ID : 264330633158
Option 3 ID : 264330633156
Option 4 ID : 264330633155
Status : Answered
Chosen Option : 3

Q.7 Who was the first speaker of the Lok Sabha?

- Ans**
- ☒ 1. NS Reddy
 - ☒ 2. GV Mavalankar
 - ☒ 3. Ananthasayanam Ayyangar
 - ☒ 4. Mira Kumar

Question ID : 264330159921
Option 1 ID : 264330627034
Option 2 ID : 264330627031
Option 3 ID : 264330627032
Option 4 ID : 264330627033
Status : Answered
Chosen Option : 2

Q.8 'The Story of My Experiments with Truth' is an autobiography of _____.

- Ans**
- ☒ 1. Dr. Rajendra Prasad
 - ☒ 2. Mahatma Gandhi
 - ☒ 3. Vivekanand
 - ☒ 4. Jawaharlal Nehru

Question ID : 264330155489
Option 1 ID : 264330609362
Option 2 ID : 264330609359
Option 3 ID : 264330609361
Option 4 ID : 264330609360
Status : Answered
Chosen Option : 2

Q.9 Who was the music director of the famous film 'Sholay' released in 1975?

- Ans**
- ☒ 1. Madan Mohan
 - ☒ 2. Jatin - Lalit
 - ☒ 3. Nadeem - Shravan
 - ☒ 4. RD Burman

Question ID : 264330155517
Option 1 ID : 264330609474
Option 2 ID : 264330609473
Option 3 ID : 264330609472
Option 4 ID : 264330609471
Status : Answered
Chosen Option : 4

Q.10 The technique of classical dancing was codified by _____ in about the 5th century B.C.

- Ans ☒ 1. Sudraka
☒ 2. Bharata
☒ 3. Chanakya
☒ 4. Kalhana

Question ID : 264330159046
Option 1 ID : 264330623543
Option 2 ID : 264330623545
Option 3 ID : 264330623544
Option 4 ID : 264330623546
Status : Answered
Chosen Option : 2

Q.11 Who among the following is the author of the novel 'Animal Farm'?

- Ans ☒ 1. Thomas Hardy
☒ 2. George Orwell
☒ 3. Roald Dahl
☒ 4. Charles Dickens

Question ID : 264330161759
Option 1 ID : 264330634364
Option 2 ID : 264330634363
Option 3 ID : 264330634365
Option 4 ID : 264330634366
Status : Not Answered
Chosen Option : --

Q.12 Who among the following is credited with starting a Fusion Dance form called 'Hi-Dance'?

- Ans ☒ 1. Shashadhar Acharya
☒ 2. Uday Shankar
☒ 3. Kartik Ram
☒ 4. Mani Damodara

Question ID : 264330155477
Option 1 ID : 264330609311
Option 2 ID : 264330609313
Option 3 ID : 264330609314
Option 4 ID : 264330609312
Status : Answered
Chosen Option : 2

Q.13 According to the Census of India 2011, which of the following states has the lowest population?

- Ans ☒ 1. Sikkim
☒ 2. Goa
☒ 3. Manipur
☒ 4. Mizoram

Question ID : 264330160157
Option 1 ID : 264330627970
Option 2 ID : 264330627969
Option 3 ID : 264330627968
Option 4 ID : 264330627967
Status : Answered
Chosen Option : 1

Q.14 The Lambadi dance is a folk dance form of the _____ tribe and originated in Andhra Pradesh.

- Ans ☒ 1. Sugali
☒ 2. Banjara
☒ 3. Nakkala
☒ 4. Dabba Yerukula

Question ID : 264330160798
Option 1 ID : 264330630525
Option 2 ID : 264330630523
Option 3 ID : 264330630526
Option 4 ID : 264330630524
Status : Not Answered
Chosen Option : --

Q.15 In which of the following years was the Child Marriage Restraint Act passed?

- Ans ☒ 1. 1856
☒ 2. 1947
☒ 3. 1878
☒ 4. 1929

Question ID : 264330162349
Option 1 ID : 264330636726
Option 2 ID : 264330636725
Option 3 ID : 264330636723
Option 4 ID : 264330636724
Status : Answered
Chosen Option : 4

Q.16 What is the main reason behind the substantial rainfall during summer on the western coasts of India?

- Ans ☒ 1. Western Ghats
☒ 2. Eastern winds
☒ 3. Indus River
☒ 4. Eastern Ghats

Question ID : 264330161305
Option 1 ID : 264330632549
Option 2 ID : 264330632547
Option 3 ID : 264330632548
Option 4 ID : 264330632550
Status : Answered
Chosen Option : 1

Q.17 The second edition of Khelo India Youth Games, 2019 was organised in which city?

- Ans** ☒ 1. Pune
☐ 2. Guwahati
☐ 3. New Delhi
☐ 4. Mumbai

Question ID : 264330158219
Option 1 ID : 264330620236
Option 2 ID : 264330620237
Option 3 ID : 264330620235
Option 4 ID : 264330620238
Status : Answered
Chosen Option : 2

Q.18 ACF conferred Grandmaster _____ with Player of the Year award, who is only the sixth Indian to break the 2700 Elo-rating mark and the youngest Grandmaster from the country to be rated above 2700.

- Ans** ☐ 1. NR Vignesh
☐ 2. Aadit Khan
☐ 3. Koshy Varugeese
☒ 4. D Gukesh

Question ID : 264330161439
Option 1 ID : 264330633085
Option 2 ID : 264330633084
Option 3 ID : 264330633083
Option 4 ID : 264330633086
Status : Answered
Chosen Option : 3

Q.19 Which condition causes bone pain, poor growth, and soft, weak bones that can lead to bone deformities?

- Ans** ☒ 1. Rickets
☐ 2. Cerebral Palsy
☐ 3. Pertussis
☐ 4. Asplenia

Question ID : 264330161079
Option 1 ID : 264330631647
Option 2 ID : 264330631649
Option 3 ID : 264330631648
Option 4 ID : 264330631650
Status : Answered
Chosen Option : 1

Q.20 In which Indian musician's name did the state of Massachusetts in the USA declare April 20th in 1984 as a day in his name?

- Ans
- ☒ 1. Brij Narayan
 - ☒ 2. Ali Akbar Khan
 - ☒ 3. Rajeev Taranath
 - ☒ 4. Amjad Ali Khan

Question ID : 264330161909

Option 1 ID : 264330634966

Option 2 ID : 264330634965

Option 3 ID : 264330634963

Option 4 ID : 264330634964

Status : Not Answered

Chosen Option : --

Q.21 Which of the following is an advantage of microfinance institutions in India?

- Ans
- ☒ 1. Limited impact on poverty reduction
 - ☒ 2. Increased reliance on informal lending sources
 - ☒ 3. Minimal support for women entrepreneurs
 - ☒ 4. Enhanced financial inclusion

Question ID : 264330157291

Option 1 ID : 264330616528

Option 2 ID : 264330616527

Option 3 ID : 264330616530

Option 4 ID : 264330616529

Status : Answered

Chosen Option : 4

Q.22 Which of the following statements about Mahatma Gandhi is INCORRECT?

- Ans
- ☒ 1. Mahatma Gandhi was born in 1869 in Porbandar.
 - ☒ 2. In 1942, he launched the Quit India Movement.
 - ☒ 3. He led the Champaran Satyagraha in 1910.
 - ☒ 4. He led the Dandi Salt March in 1930.

Question ID : 264330160826

Option 1 ID : 264330630635

Option 2 ID : 264330630638

Option 3 ID : 264330630637

Option 4 ID : 264330630636

Status : Answered

Chosen Option : 3

Q.23 Which university won the first place in the 3rd Khelo India University Games?

- Ans
- ☒ 1. University of Mumbai
 - ☒ 2. Panjab University
 - ☒ 3. Shivaji University
 - ☒ 4. University of Madras

Question ID : 264330158230

Option 1 ID : 264330620282

Option 2 ID : 264330620279

Option 3 ID : 264330620280

Option 4 ID : 264330620281

Status : Answered

Chosen Option : 2

Q.24 In which of the following states of India is the maximum extent of alluvial soil found?

- Ans** ☒ 1. Telangana
☒ 2. Uttar Pradesh
☒ 3. Karnataka
☒ 4. Maharashtra

Question ID : 264330161528

Option 1 ID : 264330633439

Option 2 ID : 264330633442

Option 3 ID : 264330633440

Option 4 ID : 264330633441

Status : Answered

Chosen Option : 2

Q.25 The _____ port was developed after Independence to ease the volume of trade on the Mumbai port.

- Ans** ☒ 1. Kandla
☒ 2. Kolkata
☒ 3. Chennai
☒ 4. Visakhapatnam

Question ID : 264330161513

Option 1 ID : 264330633382

Option 2 ID : 264330633381

Option 3 ID : 264330633380

Option 4 ID : 264330633379

Status : Answered

Chosen Option : 1

Section : English Language and Comprehension

Q.1 Select the INCORRECTLY spelt word.

- Ans** ☒ 1. Curiosity
☒ 2. Vehemence
☒ 3. Superficial
☒ 4. Synagogue

Question ID : 264330153220

Option 1 ID : 264330600442

Option 2 ID : 264330600439

Option 3 ID : 264330600441

Option 4 ID : 264330600440

Status : Answered

Chosen Option : 1

Q.2 Select the most appropriate meaning of the underlined idiom in the following sentence.

Riddhi believes in wearing her heart on her sleeve. That is why she has so many friends.

- Ans
- ☒ 1. To criticise everybody
 - ☒ 2. To wear a badge of honour
 - ☒ 3. To openly and freely express one's emotions
 - ☒ 4. To talk aloud

Question ID : 264330153052

Option 1 ID : 264330599778

Option 2 ID : 264330599776

Option 3 ID : 264330599777

Option 4 ID : 264330599775

Status : Answered

Chosen Option : 3

Q.3 Select the most appropriate meaning of the given idiom.
To cross swords

- Ans
- ☒ 1. To kill
 - ☒ 2. To arrange
 - ☒ 3. To fight
 - ☒ 4. To defend

Question ID : 264330156174

Option 1 ID : 264330612095

Option 2 ID : 264330612098

Option 3 ID : 264330612097

Option 4 ID : 264330612096

Status : Answered

Chosen Option : 3

Q.4 Select the most appropriate option to fill in the blank.
Virtual worlds are recently new phenomena in that they _____ people to meet and socially interact with others in a variety of online environments.

- Ans
- ☒ 1. forbid
 - ☒ 2. bring
 - ☒ 3. choose
 - ☒ 4. enable

Question ID : 264330151904

Option 1 ID : 264330595231

Option 2 ID : 264330595232

Option 3 ID : 264330595234

Option 4 ID : 264330595233

Status : Answered

Chosen Option : 2

Q.5 The following sentence has been split into four segments. Identify the segment that contains an error.

I have seen / a movie / on schooling / yesterday.

Ans ☒ 1. I have seen

☒ 2. on schooling

☒ 3. yesterday

☒ 4. a movie

Question ID : 264330155322

Option 1 ID : 264330608727

Option 2 ID : 264330608729

Option 3 ID : 264330608730

Option 4 ID : 264330608728

Status : Answered

Chosen Option : 1

Q.6 Select the most appropriate ANTONYM of the given word.
Cheap

Ans ☒ 1. Expensive

☒ 2. Ignorant

☒ 3. Old

☒ 4. Untangle

Question ID : 264330152717

Option 1 ID : 264330598468

Option 2 ID : 264330598467

Option 3 ID : 264330598470

Option 4 ID : 264330598469

Status : Answered

Chosen Option : 1

Q.7 Select the most appropriate option that can substitute the underlined segment in the given sentence.

Kavya invited all her friends, isn't it?

Ans ☒ 1. didn't she?

☒ 2. did she?

☒ 3. don't she?

☒ 4. isn't she?

Question ID : 264330152730

Option 1 ID : 264330598521

Option 2 ID : 264330598520

Option 3 ID : 264330598522

Option 4 ID : 264330598519

Status : Answered

Chosen Option : 1

Q.8 Select the most appropriate idiom to fill in the blank.
The deal was _____ for three months.

- Ans
- ☒ 1. cut no ice
 - ☒ 2. broken the ice
 - ☒ 3. tipped of the iceberg
 - ☒ 4. put on ice

Question ID : 264330153102

Option 1 ID : 264330599971

Option 2 ID : 264330599972

Option 3 ID : 264330599973

Option 4 ID : 264330599974

Status : Answered

Chosen Option : 4

Q.9 The given sentence contains an error. Select the option that correctly rectifies the error.

This is the eldest standing structure of Chola architecture in India.

- Ans
- ☒ 1. This is the more older standing structure of Chola architecture in India.
 - ☒ 2. This is the most old standing structure of Chola architecture in India.
 - ☒ 3. This is the more elder standing structure of Chola architecture in India.
 - ☒ 4. This is the oldest standing structure of Chola architecture in India.

Question ID : 264330152611

Option 1 ID : 264330598047

Option 2 ID : 264330598048

Option 3 ID : 264330598050

Option 4 ID : 264330598049

Status : Answered

Chosen Option : 4

Q.10 The following sentence has been split into four segments. Identify the segment that contains a grammatical error.

They decided to / travel in train / instead of driving / to New Delhi.

- Ans
- ☒ 1. They decided to
 - ☒ 2. travel in train
 - ☒ 3. to New Delhi
 - ☒ 4. instead of driving

Question ID : 264330155429

Option 1 ID : 264330609123

Option 2 ID : 264330609124

Option 3 ID : 264330609126

Option 4 ID : 264330609125

Status : Answered

Chosen Option : 2

Q.11 Select the most appropriate **ANTONYM** of the given word.
Strengthen

- Ans** ☒ 1. Debilitate
 ☐ 2. Strain
 ☐ 3. Fortify
 ☐ 4. Ascend

Question ID : **264330151875**
Option 1 ID : **264330595120**
Option 2 ID : **264330595122**
Option 3 ID : **264330595119**
Option 4 ID : **264330595121**
Status : **Answered**
Chosen Option : **1**

Q.12 Select the most appropriate **ANTONYM** of the given word.
Fame

- Ans** ☐ 1. Name
 ☒ 2. Shame
 ☐ 3. Scandal
 ☐ 4. Stingy

Question ID : **264330152592**
Option 1 ID : **264330597971**
Option 2 ID : **264330597974**
Option 3 ID : **264330597972**
Option 4 ID : **264330597973**
Status : **Answered**
Chosen Option : **2**

Q.13 Select the sentence that has **NO** spelling errors.

- Ans** ☐ 1. My new phone has a high-resolusion screen and powerful proccessor, which makes it perfect for streming videos and playing games.
 ☐ 2. My new phone has a high-resollution screen and a powerfull procesor, which makes it perfect for streaming videos and playing games.
 ☒ 3. My new phone has a high-resolution screen and a powerful processor, which makes it perfect for streaming videos and playing games.
 ☐ 4. My new phone has a high-resolution screan and powerfull procesor, which makes it perfect for streming videos and playing games.

Question ID : **264330152647**
Option 1 ID : **264330598191**
Option 2 ID : **264330598193**
Option 3 ID : **264330598192**
Option 4 ID : **264330598194**
Status : **Answered**
Chosen Option : **3**

Q.14 Identify the **INCORRECTLY** spelt word in the following sentence.
Being a doktor, my sister Meera is prepared for an emergency usually.

- Ans ☒ 1. prepared
☒ 2. doktor
☒ 3. usually
☒ 4. emergency

Question ID : 264330152599
Option 1 ID : 264330598000
Option 2 ID : 264330597999
Option 3 ID : 264330598002
Option 4 ID : 264330598001
Status : Answered
Chosen Option : 2

Q.15 Select the option that can be used as a one-word substitute for the underlined group of words.
I suppose dancing that well would require a lot of actual application.

- Ans ☒ 1. prevention
☒ 2. perseverance
☒ 3. practice
☒ 4. perception

Question ID : 264330153493
Option 1 ID : 264330601487
Option 2 ID : 264330601490
Option 3 ID : 264330601489
Option 4 ID : 264330601488
Status : Answered
Chosen Option : 3

Q.16 The following sentence has been split into four segments. Identify the segment that contains a grammatical error.

A music / is a great way / to express / your emotions.

- Ans ☒ 1. to express
☒ 2. is a great way
☒ 3. A music
☒ 4. your emotions

Question ID : 264330155414
Option 1 ID : 264330609065
Option 2 ID : 264330609064
Option 3 ID : 264330609063
Option 4 ID : 264330609066
Status : Answered
Chosen Option : 3

Q.17 Select the most appropriate idiom to fill in the blank.
You are an intellectual with a professional degree; you can do wonders as _____.

- Ans
- ☒ 1. you are playing with fire
 - ☒ 2. you can say it again
 - ☒ 3. your mileage may vary
 - ☒ 4. the world is your oyster

Question ID : 264330153560

Option 1 ID : 264330601742

Option 2 ID : 264330601739

Option 3 ID : 264330601741

Option 4 ID : 264330601740

Status : Answered

Chosen Option : 4

Q.18 Select the most appropriate option that can substitute the underlined segment in the given sentence.
Rashmi works at the hospital, don't she?

- Ans
- ☒ 1. does she?
 - ☒ 2. has she?
 - ☒ 3. doesn't she?
 - ☒ 4. do she?

Question ID : 264330153595

Option 1 ID : 264330601868

Option 2 ID : 264330601867

Option 3 ID : 264330601870

Option 4 ID : 264330601869

Status : Answered

Chosen Option : 3

Q.19 Parts of the following sentence have been given as options. Select the option that contains an error.
Radha will have learnt cooking by the time she will have married.

- Ans
- ☒ 1. learnt cooking
 - ☒ 2. by the time
 - ☒ 3. she will have married
 - ☒ 4. Radha will have

Question ID : 264330152820

Option 1 ID : 264330598872

Option 2 ID : 264330598873

Option 3 ID : 264330598874

Option 4 ID : 264330598871

Status : Answered

Chosen Option : 3

Q.20 Select the option that can be used as a one-word substitute for the given group of words.

Fear of closed spaces

- Ans ☒ 1. Xenophobia
☒ 2. Claustrophobia
☒ 3. Hydrophobia
☒ 4. Zoophobia

Question ID : 264330151867

Option 1 ID : 264330595087

Option 2 ID : 264330595090

Option 3 ID : 264330595089

Option 4 ID : 264330595088

Status : Answered

Chosen Option : 2

Comprehension:

In the following passage, some words have been deleted. Read the passage carefully and select the most appropriate option to fill in each blank.

A cashless India is the first step towards making the dream of digital India a reality.

Government is trying to (1)_____ a cashless environment in the country.

Demonetisation appears to be a stepping (2)_____ in that direction. To help facilitate this, government even (3)_____ its own app 'BHIM' built for the same purpose. The

(4)_____ of conducting online financial transactions is probably the biggest motivator to go digital. You will no longer need to carry wads of cash, plastic cards or even queue up for ATM withdrawals. It's also safer and easier spending option when you are travelling. Making transactions digitally makes it easy to keep track of your finances. The (5)_____ are enormous for everyone if you leave out the low-income group, which will face a huge challenge. For the rest of the country, it is constructive and simple. However, the convenience of net-banking, m-banking, card or mobile wallet transactions can make you spend more than your budget.

SubQuestion No : 21

Q.21 Select the most appropriate option to fill in blank No. 1.

- Ans ☒ 1. preach
☒ 2. determine
☒ 3. precede
☒ 4. create

Question ID : 264330152700

Option 1 ID : 264330598399

Option 2 ID : 264330598400

Option 3 ID : 264330598401

Option 4 ID : 264330598402

Status : Answered

Chosen Option : 4

Comprehension:

In the following passage, some words have been deleted. Read the passage carefully and select the most appropriate option to fill in each blank.

A cashless India is the first step towards making the dream of digital India a reality. Government is trying to (1)_____ a cashless environment in the country. Demonetisation appears to be a stepping (2)_____ in that direction. To help facilitate this, government even (3)_____ its own app 'BHIM' built for the same purpose. The (4)_____ of conducting online financial transactions is probably the biggest motivator to go digital. You will no longer need to carry wads of cash, plastic cards or even queue up for ATM withdrawals. It's also safer and easier spending option when you are travelling. Making transactions digitally makes it easy to keep track of your finances. The (5)_____ are enormous for everyone if you leave out the low-income group, which will face a huge challenge. For the rest of the country, it is constructive and simple. However, the convenience of net-banking, m-banking, card or mobile wallet transactions can make you spend more than your budget.

SubQuestion No : 22

Q.22 Select the most appropriate option to fill in blank No. 2.

- Ans ☒ 1. method
☒ 2. matter
☒ 3. stairs
☒ 4. stone

Question ID : 264330152701

Option 1 ID : 264330598405

Option 2 ID : 264330598403

Option 3 ID : 264330598406

Option 4 ID : 264330598404

Status : Answered

Chosen Option : 1

Comprehension:

In the following passage, some words have been deleted. Read the passage carefully and select the most appropriate option to fill in each blank.

A cashless India is the first step towards making the dream of digital India a reality. Government is trying to (1)_____ a cashless environment in the country. Demonetisation appears to be a stepping (2)_____ in that direction. To help facilitate this, government even (3)_____ its own app 'BHIM' built for the same purpose. The (4)_____ of conducting online financial transactions is probably the biggest motivator to go digital. You will no longer need to carry wads of cash, plastic cards or even queue up for ATM withdrawals. It's also safer and easier spending option when you are travelling. Making transactions digitally makes it easy to keep track of your finances. The (5)_____ are enormous for everyone if you leave out the low-income group, which will face a huge challenge. For the rest of the country, it is constructive and simple. However, the convenience of net-banking, m-banking, card or mobile wallet transactions can make you spend more than your budget.

SubQuestion No : 23

Q.23 Select the most appropriate option to fill in blank No. 3.

- Ans ☒ 1. followed
☒ 2. sensed
☒ 3. launched
☒ 4. submitted

Question ID : 264330152702

Option 1 ID : 264330598410

Option 2 ID : 264330598409

Option 3 ID : 264330598407

Option 4 ID : 264330598408

Status : Answered

Chosen Option : 3

Comprehension:

In the following passage, some words have been deleted. Read the passage carefully and select the most appropriate option to fill in each blank.

A cashless India is the first step towards making the dream of digital India a reality. Government is trying to (1)_____ a cashless environment in the country. Demonetisation appears to be a stepping (2)_____ in that direction. To help facilitate this, government even (3)_____ its own app 'BHIM' built for the same purpose. The (4)_____ of conducting online financial transactions is probably the biggest motivator to go digital. You will no longer need to carry wads of cash, plastic cards or even queue up for ATM withdrawals. It's also safer and easier spending option when you are travelling. Making transactions digitally makes it easy to keep track of your finances. The (5)_____ are enormous for everyone if you leave out the low-income group, which will face a huge challenge. For the rest of the country, it is constructive and simple. However, the convenience of net-banking, m-banking, card or mobile wallet transactions can make you spend more than your budget.

SubQuestion No : 24

Q.24 Select the most appropriate option to fill in blank No. 4.

- Ans ☒ 1. hassle
☒ 2. ease
☐ 3. agony
☐ 4. delay

Question ID : 264330152703

Option 1 ID : 264330598412

Option 2 ID : 264330598414

Option 3 ID : 264330598411

Option 4 ID : 264330598413

Status : Answered

Chosen Option : 2

Comprehension:

In the following passage, some words have been deleted. Read the passage carefully and select the most appropriate option to fill in each blank.

A cashless India is the first step towards making the dream of digital India a reality. Government is trying to (1)_____ a cashless environment in the country. Demonetisation appears to be a stepping (2)_____ in that direction. To help facilitate this, government even (3)_____ its own app 'BHIM' built for the same purpose. The (4)_____ of conducting online financial transactions is probably the biggest motivator to go digital. You will no longer need to carry wads of cash, plastic cards or even queue up for ATM withdrawals. It's also safer and easier spending option when you are travelling. Making transactions digitally makes it easy to keep track of your finances. The (5)_____ are enormous for everyone if you leave out the low-income group, which will face a huge challenge. For the rest of the country, it is constructive and simple. However, the convenience of net-banking, m-banking, card or mobile wallet transactions can make you spend more than your budget.

SubQuestion No : 25

Q.25 Select the most appropriate option to fill in blank No. 5.

- Ans ☐ 1. attempts
☐ 2. scenarios
☒ 3. benefits
☐ 4. severity

Question ID : 264330152704

Option 1 ID : 264330598417

Option 2 ID : 264330598415

Option 3 ID : 264330598416

Option 4 ID : 264330598418

Status : Answered

Chosen Option : 3