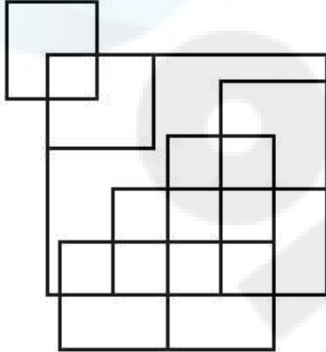


Combined Graduate Level Examination 2024 Tier I

Roll Number	
Candidate Name	
Venue Name	
Exam Date	17/09/2024
Exam Time	12:30 PM - 1:30 PM
Subject	Combined Graduate Level Examination Tier I

Section : General Intelligence and Reasoning

Q.1 How many squares are there in the given figure?



Ans 1. 20

2. 17

3. 19

4. 18

Question ID : 630680163564

Option 1 ID : 630680633441

Option 2 ID : 630680633440

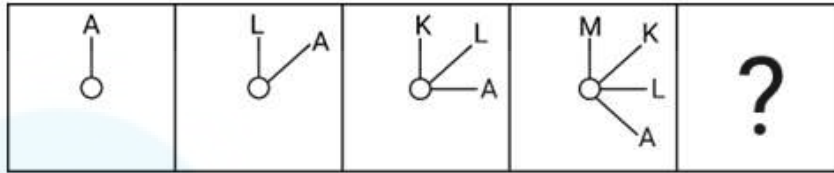
Option 3 ID : 630680633442

Option 4 ID : 630680633443

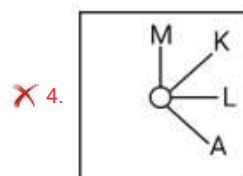
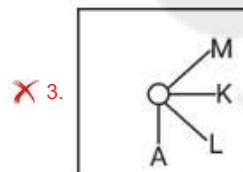
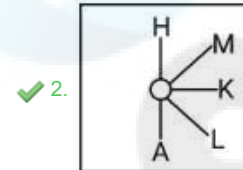
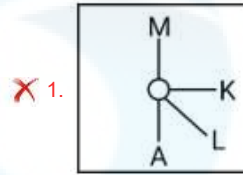
Status : Answered

Chosen Option : 3

Q.2 Identify the figure given in the options which when put in place of ? will logically complete the series.



Ans



Question ID : 630680524394

Option 1 ID : 6306802049678

Option 2 ID : 6306802049677

Option 3 ID : 6306802049676

Option 4 ID : 6306802049675

Status : Answered

Chosen Option : 2

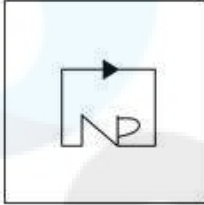
Q.3 Select the option figure in which the given figure (X) is embedded (rotation is NOT allowed).



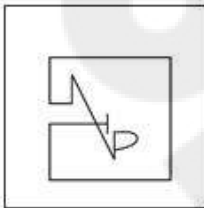
(X)

Ans

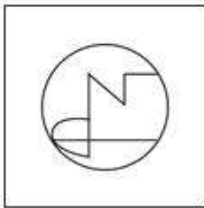
✗ 1.



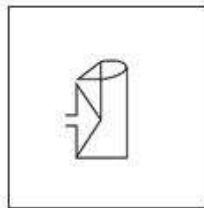
✗ 2.



✗ 3.



✓ 4.



Question ID : 630680296895

Option 1 ID : 6306801155225

Option 2 ID : 6306801155226

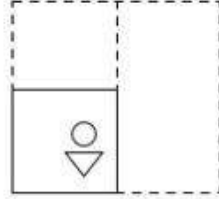
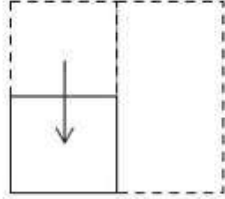
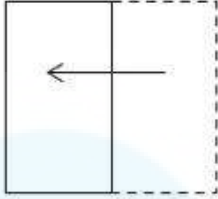
Option 3 ID : 6306801155224

Option 4 ID : 6306801155223

Status : Answered

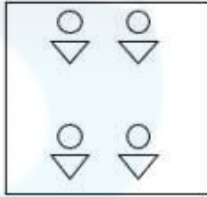
Chosen Option : 3

Q.4 A paper is folded and cut as shown below. How will it appear when unfolded?

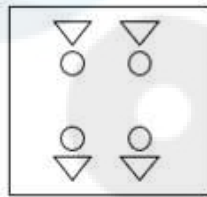


Ans

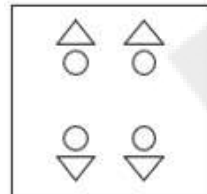
✗ 1.



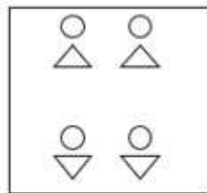
✗ 2.



✓ 3.



✗ 4.



Question ID : 630680147858

Option 1 ID : 630680572146

Option 2 ID : 630680572149

Option 3 ID : 630680572147

Option 4 ID : 630680572148

Status : Answered

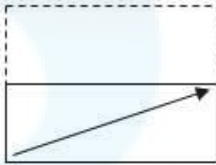
Chosen Option : 3

Q.5 A transparent sheet with a pattern is given in the following figure. Identify from amongst the options as to how the pattern would appear when the transparent sheet is folded at the middle horizontal line.

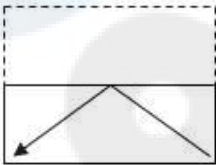


Ans

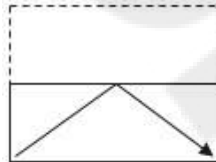
1.



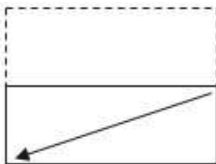
2.



3.



4.



Question ID : 630680287579
 Option 1 ID : 6306801118225
 Option 2 ID : 6306801118223
 Option 3 ID : 6306801118224
 Option 4 ID : 6306801118226
 Status : Answered
 Chosen Option : 3

Q.6 'Noise' is related to 'Silence' in the same way as 'Light' is related to '_____'.

- Ans**
- 1. Warmth
 - 2. Radiant
 - 3. Brightness
 - 4. Darkness

Question ID : 630680416732
 Option 1 ID : 6306801625692
 Option 2 ID : 6306801625694
 Option 3 ID : 6306801625693
 Option 4 ID : 6306801625691
 Status : Answered
 Chosen Option : 4

Q.7 In this question, three statements are given, followed by three conclusions numbered I, II and III. Assuming the statements to be true, even if they seem to be at variance with commonly known facts, decide which of the conclusions logically follow(s) from the statements.

Statements:

All computers are printers.

Some printers are laptops.

All laptops are mobiles.

Conclusions:

I. Some printers are computers.

II. Some laptops are printers.

III. Some mobiles are laptops.

Ans 1. Only conclusions II and III follow.

2. Only conclusion III follows.

3. Only conclusions I and III follow.

4. All the conclusions follow.

Question ID : 630680416520

Option 1 ID : 6306801624844

Option 2 ID : 6306801624845

Option 3 ID : 6306801624843

Option 4 ID : 6306801624846

Status : Answered

Chosen Option : 4

Q.8 In a certain code language, 'TIDE' is coded as '9457' and 'DENT' is coded as '7593'.
What is the code for 'N' in that language?

Ans 1. 5

2. 9

3. 7

4. 3

Question ID : 630680222449

Option 1 ID : 630680863557

Option 2 ID : 630680863555

Option 3 ID : 630680863558

Option 4 ID : 630680863556

Status : Answered

Chosen Option : 4

Q.9 Which of the following terms will replace the question mark (?) in the given series?
EQBY, GPDX, ?, KNHV, MMJU

Ans 1. IPFW

2. HOFW

3. IOEW

4. IOFW

Question ID : 630680416897

Option 1 ID : 6306801626354

Option 2 ID : 6306801626352

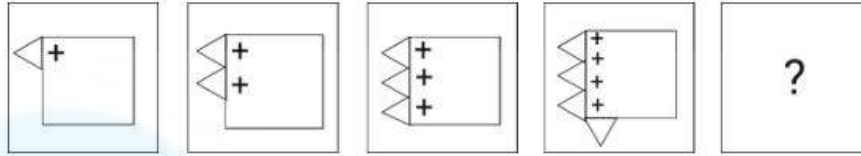
Option 3 ID : 6306801626351

Option 4 ID : 6306801626353

Status : Answered

Chosen Option : 4

Q.10 Identify the figure given in the options which when put in place of '?' will logically complete the series.



Ans

- 1.
- 2.
- 3.
- 4.

Question ID : 630680366158
 Option 1 ID : 6306801426157
 Option 2 ID : 6306801426158
 Option 3 ID : 6306801426159
 Option 4 ID : 6306801426160
 Status : Answered
 Chosen Option : 3

Q.11 Read the given statements and conclusions carefully. You have to take the given statements to be true even if they seem to be at variance from commonly known facts. You have to decide which conclusion/s logically follow/s from the given statements.

Statements:

Some telephones are curtains.

All curtains are lamps.

No lamps is books.

Conclusions:

(I) All lamps are telephones.

(II) No books is lamps.

- Ans**
- 1. Only conclusion (II) is follow
 - 2. Neither conclusion (I) nor (II) is follow
 - 3. Only conclusion (I) is follow
 - 4. Both conclusions (I) and (II) are follow

Question ID : 630680392635
 Option 1 ID : 6306801530887
 Option 2 ID : 6306801530888
 Option 3 ID : 6306801530886
 Option 4 ID : 6306801530889
 Status : Answered
 Chosen Option : 1

Q.12 In a certain code language, 'What you think you become' is written as 'Fe Mo Su Ta Za' and 'What you think you achieve' is written as 'Mo Su Te Fe Za'. How will 'achieve' be written in that language?

- Ans
- 1. Mo
 - 2. Fe
 - 3. Za
 - 4. Te

Question ID : 630680339167
Option 1 ID : 6306801319237
Option 2 ID : 6306801319239
Option 3 ID : 6306801319238
Option 4 ID : 6306801319240
Status : Answered
Chosen Option : 4

Q.13 Select the option that represents the letters that when placed from left to right in the blanks below will complete the given letter series.
M N _ O J K M _ Q O J K _ N Q _ J K M N Q O _ K M N

- Ans
- 1. QMNJO
 - 2. QNJMO
 - 3. QNMOJ
 - 4. QNMJO

Question ID : 630680416263
Option 1 ID : 6306801623815
Option 2 ID : 6306801623816
Option 3 ID : 6306801623818
Option 4 ID : 6306801623817
Status : Answered
Chosen Option : 3

Q.14 34 is related to 191 by certain logic. Following the same logic, 56 is related to 301. To which of the following is 63 related, following the same logic?
(NOTE : Operations should be performed on the whole numbers, without breaking down the numbers into its constituent digits. E.g. 13 – Operations on 13 such as adding /deleting /multiplying etc., to 13 can be performed. Breaking down 13 into 1 and 3 and then performing mathematical operations on 1 and 3 is not allowed.)

- Ans
- 1. 340
 - 2. 386
 - 3. 336
 - 4. 319

Question ID : 630680326551
Option 1 ID : 6306801270289
Option 2 ID : 6306801270292
Option 3 ID : 6306801270290
Option 4 ID : 6306801270291
Status : Not Answered
Chosen Option : --

Q.15 In a certain code language,

'A + B' means 'A is the mother of B';
'A - B' means 'A is the brother of B';
'A × B' means 'A is the wife of B' and
'A ÷ B' means 'A is the father of B'.

Based on the above, how is 5 related to 2 if '5 ÷ 1 × 3 ÷ 4 - 2'?

- Ans
- 1. Mother's mother
 - 2. Father's father
 - 3. Mother's father
 - 4. Father's mother

Question ID : 630680300376
Option 1 ID : 6306801168406
Option 2 ID : 6306801168403
Option 3 ID : 6306801168404
Option 4 ID : 6306801168405
Status : Answered
Chosen Option : 2

Q.16 Four letter-clusters have been given, out of which three are alike in some manner and one is different. Select the letter-cluster that is different.

Note: The odd one out is not based on the number of consonants/vowels or their position in the letter cluster.

- Ans
- 1. LPN
 - 2. GIK
 - 3. HLJ
 - 4. BFD

Question ID : 63068083231
Option 1 ID : 630680322787
Option 2 ID : 630680322786
Option 3 ID : 630680322784
Option 4 ID : 630680322785
Status : Answered
Chosen Option : 2

Q.17 27 is related to 119 following a certain logic. Following the same logic, 33 is related to 143. To which of the following is 42 related, following the same logic? (NOTE : Operations should be performed on the whole numbers, without breaking down the numbers into its constituent digits. E.g. 13 – Operations on 13 such as adding /deleting /multiplying etc., to 13 can be performed. Breaking down 13 into 1 and 3 and then performing mathematical operations on 1 and 3 is not allowed.)

- Ans
- 1. 162
 - 2. 153
 - 3. 179
 - 4. 188

Question ID : 630680326610
Option 1 ID : 6306801270525
Option 2 ID : 6306801270526
Option 3 ID : 6306801270528
Option 4 ID : 6306801270527
Status : Answered
Chosen Option : 3

Q.18 Select the number that will come in the place of the question mark(?), if '+' and '-' are interchanged and 'x' and '÷' are interchanged
 $31 \div 3 - 186 \times 6 + 17 = ?$

Ans ✓ 1. 107

✗ 2. 96

✗ 3. 118

✗ 4. 103

Question ID : 630680163580

Option 1 ID : 630680633506

Option 2 ID : 630680633504

Option 3 ID : 630680633507

Option 4 ID : 630680633505

Status : Answered

Chosen Option : 1

Q.19 The same operation(s) are followed in all the given number pairs except one. Find that odd number pair.

(NOTE : Operations should be performed on the whole numbers, without breaking down the numbers into its constituent digits. E.g. 13 – Operations on 13 such as adding /deleting /multiplying etc., to 13 can be performed. Breaking down 13 into 1 and 3 and then performing mathematical operations on 1 and 3 is not allowed.)

Ans ✓ 1. 40 : 52

✗ 2. 45 : 54

✗ 3. 35 : 42

✗ 4. 55 : 66

Question ID : 630680412040

Option 1 ID : 6306801606998

Option 2 ID : 6306801606996

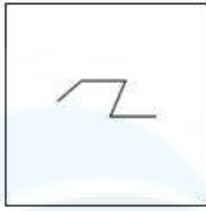
Option 3 ID : 6306801606995

Option 4 ID : 6306801606997

Status : Answered

Chosen Option : 1

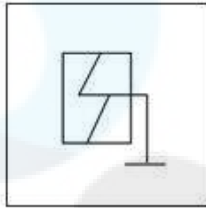
Q.20 Select the option figure in which the given figure (X) is embedded (rotation is NOT allowed).



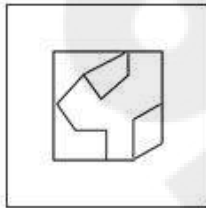
(X)

Ans

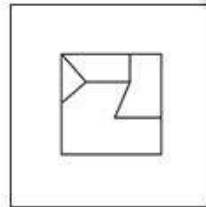
✗ 1.



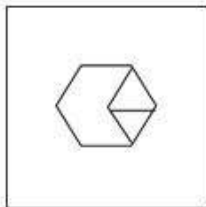
✗ 2.



✓ 3.



✗ 4.



Question ID : 630680296890

Option 1 ID : 6306801155203

Option 2 ID : 6306801155204

Option 3 ID : 6306801155205

Option 4 ID : 6306801155206

Status : Answered

Chosen Option : 3

Q.21 'ACKO' is related to 'ZXPL' in a certain way based on the English alphabetical order. In the same way, 'HIND' is related to 'SRMW'. To which of the following is 'PUKE' related, following the same logic?

Ans ✗ 1. JGQW

✗ 2. Lfqv

✓ 3. KFPV

✗ 4. JGPW

Question ID : 630680416363

Option 1 ID : 6306801624218

Option 2 ID : 6306801624216

Option 3 ID : 6306801624215

Option 4 ID : 6306801624217

Status : Answered

Chosen Option : 3

Q.22 Select the option in which the numbers share the same relationship as that shared by the given pair of numbers.
(NOTE: Operations should be performed on the whole numbers, without breaking down the numbers into its constituent digits. E.g. 13 – Operations on 13 such as adding/deleting/multiplying etc. to 13 can be performed. Breaking down 13 into 1 and 3 and then performing mathematical operations on 1 and 3 is not allowed.)

8 : 79
6 : 51

- Ans 1. 7 : 62
 2. 4 : 32
 3. 9 : 96
 4. 5 : 39

Question ID : 630680326559
Option 1 ID : 6306801270322
Option 2 ID : 6306801270323
Option 3 ID : 6306801270324
Option 4 ID : 6306801270321
Status : Answered
Chosen Option : 4

Q.23 Each of the letters in the word 'LASTING' is arranged in the English alphabetical order. How many letters are there in the English alphabetical series between the letter which is second from the left end and the one which is fourth from the right end in the new letter-cluster thus formed?

- Ans 1. Five
 2. Six
 3. Four
 4. Three

Question ID : 630680327768
Option 1 ID : 6306801275063
Option 2 ID : 6306801275064
Option 3 ID : 6306801275062
Option 4 ID : 6306801275061
Status : Not Answered
Chosen Option : --

Q.24 Select the number from among the given options that can replace the question mark (?) in the following series.
949, 1006, 1066, 1129, 1195, ?

- Ans 1. 1264
 2. 1233
 3. 1254
 4. 1244

Question ID : 630680411891
Option 1 ID : 6306801606401
Option 2 ID : 6306801606402
Option 3 ID : 6306801606400
Option 4 ID : 6306801606399
Status : Answered
Chosen Option : 1

Q.25 What will come in place of '?' in the following equation, if '+' and '-' are interchanged and 'x' and '÷' are interchanged?
 $63 \times 9 + 21 - 4 \div 5 = ?$

Ans 1. 5

2. 6

3. 4

4. 7

Question ID : 630680327969

Option 1 ID : 6306801275846

Option 2 ID : 6306801275847

Option 3 ID : 6306801275845

Option 4 ID : 6306801275848

Status : Answered

Chosen Option : 1

Section : General Awareness

Q.1 Which of the following articles from Directive Principles of state policy mentions about organization of Village Panchayats?

Ans 1. Article 40

2. Article 36

3. Article 42

4. Article 38

Question ID : 630680329452

Option 1 ID : 6306801281551

Option 2 ID : 6306801281549

Option 3 ID : 6306801281552

Option 4 ID : 6306801281550

Status : Not Answered

Chosen Option : --

Q.2 Who among the following sports persons is designated as brand ambassador for Nikshay Mitra, an initiative under Pradhan Mantri TB Mukh Bharat Abhiyaan by Ministry of Health and Family welfare of GOI in November 2022?

Ans 1. Deepa Malik

2. Abhinav Bindra

3. Pallela Gopichand

4. Mary Kom

Question ID : 630680413024

Option 1 ID : 6306801610922

Option 2 ID : 6306801610920

Option 3 ID : 6306801610919

Option 4 ID : 6306801610921

Status : Not Answered

Chosen Option : --

Q.3 Which of the following was the mascot of the Khelo India University Games 2022?

- Ans
- 1. Moga
 - 2. Bheema
 - 3. Jitu
 - 4. Saavaj

Question ID : 630680510801
Option 1 ID : 6306801996337
Option 2 ID : 6306801996335
Option 3 ID : 6306801996334
Option 4 ID : 6306801996336
Status : Not Answered
Chosen Option : --

Q.4 Which of the following statements about the aims of National Mission for Sustainable Agriculture (NMSA) of India is/are correct?
1.To make agriculture more productive.
2.To make agriculture more sustainable.
3.To promote organic farming.

- Ans
- 1. Only 1 is correct.
 - 2. Only 2 and 3 are correct.
 - 3. Only 1 and 2 are correct.
 - 4. 1, 2 and 3 are correct.

Question ID : 630680117306
Option 1 ID : 630680454510
Option 2 ID : 630680454513
Option 3 ID : 630680454511
Option 4 ID : 630680454512
Status : Not Answered
Chosen Option : --

Q.5 On 29th October 2020, the Ministry of Science and Technology launched the SERB-POWER Scheme. What is the objective of the scheme?

- Ans
- 1. To strengthen the solar programme of India with France
 - 2. To mitigate gender disparity in science and engineering research funding in various academic programmes and laboratories
 - 3. To allow reservation for women in the Parliament and Judiciary
 - 4. To allow reservation for women in the Ministry of Science and Technology

Question ID : 630680100089
Option 1 ID : 630680389053
Option 2 ID : 630680389055
Option 3 ID : 630680389054
Option 4 ID : 630680389052
Status : Not Answered
Chosen Option : --

Q.6 Samata Sainik Dal was formed in 1927 by whom among the following personalities?

- Ans 1. Savitribai Phule
 2. Mahatma Gandhi
 3. Narayana Guru
 4. BR Ambedkar

Question ID : 630680412321
Option 1 ID : 6306801608109
Option 2 ID : 6306801608108
Option 3 ID : 6306801608110
Option 4 ID : 6306801608107
Status : Not Answered
Chosen Option : --

Q.7 Which of the following is NOT a halogen gas?

- Ans 1. Cl
 2. He
 3. Br
 4. F

Question ID : 630680102240
Option 1 ID : 630680397245
Option 2 ID : 630680397243
Option 3 ID : 630680397246
Option 4 ID : 630680397244
Status : Answered
Chosen Option : 4

Q.8 The chemical formula of glucose is $C_6H_{12}O_6$. The weight % of carbon in glucose is:

- Ans 1. 53
 2. 25
 3. 72
 4. 40

Question ID : 630680517114
Option 1 ID : 6306802020852
Option 2 ID : 6306802020855
Option 3 ID : 6306802020854
Option 4 ID : 6306802020853
Status : Answered
Chosen Option : 3

Q.9 Deimachus who was a Greek ambassador came to India during the reign of the Mauryan king, _____.

- Ans 1. Shatadhanvan
 2. Ashoka
 3. Chandragupta Maurya
 4. Bindusara

Question ID : 630680412485
Option 1 ID : 6306801608766
Option 2 ID : 6306801608765
Option 3 ID : 6306801608763
Option 4 ID : 6306801608764
Status : Not Answered
Chosen Option : --

Q.10 Which of the following countries has the highest Hindu population after India?

- Ans 1. Sri Lanka
 2. Bhutan
 3. Myanmar
 4. Nepal

Question ID : 630680409673
Option 1 ID : 6306801597522
Option 2 ID : 6306801597523
Option 3 ID : 6306801597524
Option 4 ID : 6306801597521
Status : Not Answered
Chosen Option : --

Q.11 Indira PP Bora is a Padma Shri Awardee 2020 for her contribution to which Indian classical dance?

- Ans 1. Bharatanatyam
 2. Kathak
 3. Kuchipudi
 4. Sattriya

Question ID : 630680409340
Option 1 ID : 6306801596192
Option 2 ID : 6306801596191
Option 3 ID : 6306801596190
Option 4 ID : 6306801596189
Status : Answered
Chosen Option : 4

Q.12 Which article of the Constitution of India lays down that it shall be the duty of the Advocate-General to give advice to the Government of the State upon legal matters?

- Ans 1. Article 168
 2. Article 167
 3. Article 166
 4. Article 165

Question ID : 630680302225
Option 1 ID : 6306801175577
Option 2 ID : 6306801175576
Option 3 ID : 6306801175575
Option 4 ID : 6306801175574
Status : Answered
Chosen Option : 3

Q.13 Which of the following peninsular rivers falls into the Arabian Sea?

- Ans 1. Mahanadi river
 2. Krishna river
 3. Sabarmati river
 4. Godavari river

Question ID : 630680401709
Option 1 ID : 6306801566612
Option 2 ID : 6306801566611
Option 3 ID : 6306801566613
Option 4 ID : 6306801566610
Status : Answered
Chosen Option : 1

Q.14 Follow On is related to which of the following cricket formats?

- Ans 1. Only Test Matches
 2. Both test and One-day matches
 3. Only One Day matches
 4. Only T20 matches

Question ID : 630680510767
Option 1 ID : 6306801996199
Option 2 ID : 6306801996201
Option 3 ID : 6306801996198
Option 4 ID : 6306801996200
Status : Not Answered
Chosen Option : --

Q.15 Who among the following rulers built five astronomical observatories at different places in north India?

- Ans 1. Madho Singh
 2. Maharana Pratap
 3. Sawai Mansingh
 4. Sawai Jaisingh II

Question ID : 630680511547
Option 1 ID : 6306801999313
Option 2 ID : 6306801999311
Option 3 ID : 6306801999310
Option 4 ID : 6306801999312
Status : Not Answered
Chosen Option : --

Q.16 Which of the following festivals is celebrated in Madhya Pradesh?

- Ans 1. Thaipusam Festival
 2. Bihu Festival
 3. Jaisalmer Desert Festival
 4. Khajuraho Dance Festival

Question ID : 630680160213
Option 1 ID : 630680620225
Option 2 ID : 630680620226
Option 3 ID : 630680620224
Option 4 ID : 630680620227
Status : Answered
Chosen Option : 1

Q.17 In the ancient temple of Mahadev at Mahabaleshwar, the spout emerging from the mouth of a cow statue is the source of which river basin?

- Ans 1. Kaveri
 2. Godavari
 3. Narmada
 4. Krishna

Question ID : 630680305516
Option 1 ID : 6306801188439
Option 2 ID : 6306801188440
Option 3 ID : 6306801188438
Option 4 ID : 6306801188437
Status : Answered
Chosen Option : 4

Q.18 Which is a serious contagious bacterial infection that usually affects the mucous membranes of the nose and throat?

Ans ✓ 1. Diphtheria

✗ 2. Meningococcal

✗ 3. Shigellosis

✗ 4. Chlamydia

Question ID : 630680407468

Option 1 ID : 6306801588812

Option 2 ID : 6306801588811

Option 3 ID : 6306801588813

Option 4 ID : 6306801588810

Status : Not Answered

Chosen Option : --

Q.19 Who among the following is a Sarod player popularly known as 'Sarod Samrat'?

Ans ✓ 1. Ustad Amjad Ali Khan Bangash

✗ 2. Pandit Kishan Maharaj

✗ 3. Pandit Shivkumar Sharma

✗ 4. Pandit Ravi Shankar

Question ID : 630680560775

Option 1 ID : 6306802192083

Option 2 ID : 6306802192080

Option 3 ID : 6306802192082

Option 4 ID : 6306802192081

Status : Answered

Chosen Option : 1

Q.20 What was a significant negative environmental impact of the Green Revolution?

Ans ✗ 1. Ozone layer depletion

✗ 2. Increase in air pollution

✗ 3. Deforestation

✓ 4. Soil degradation

Question ID : 630680411106

Option 1 ID : 6306801603179

Option 2 ID : 6306801603178

Option 3 ID : 6306801603176

Option 4 ID : 6306801603177

Status : Answered

Chosen Option : 1

Q.21 What is subtracted from GDP to arrive at NDP?

Ans ✗ 1. Net indirect taxes

✗ 2. Subsidies

✓ 3. Depreciation

✗ 4. Net factor income from abroad

Question ID : 630680103675

Option 1 ID : 630680402931

Option 2 ID : 630680402934

Option 3 ID : 630680402932

Option 4 ID : 630680402933

Status : Answered

Chosen Option : 3

Q.22 The Maharashtra Bhushan was conferred upon _____ in the year 2002.

- Ans
- 1. Pandit Ravi Shankar
 - 2. Pandit Jasraj
 - 3. Pandit Hari Prasad Chaurasia
 - 4. Pandit Bhimsen Joshi

Question ID : 6306801048035
Option 1 ID : 6306804114187
Option 2 ID : 6306804114188
Option 3 ID : 6306804114186
Option 4 ID : 6306804114189
Status : Not Answered
Chosen Option : --

Q.23 What is the tenure of office for the Chief Election Commissioner?

- Ans
- 1. 5 years or up to the age of 60 years
 - 2. 6 years or up to the age of 60 years
 - 3. 6 years or up to the age of 65 years
 - 4. 5 years or up to the age of 65 years

Question ID : 630680413119
Option 1 ID : 6306801611302
Option 2 ID : 6306801611300
Option 3 ID : 6306801611301
Option 4 ID : 6306801611299
Status : Answered
Chosen Option : 4

Q.24 Which of the following animals was the emblem of the Chola dynasty?

- Ans
- 1. Horse
 - 2. Wolf
 - 3. Elephant
 - 4. Tiger

Question ID : 630680412284
Option 1 ID : 6306801607962
Option 2 ID : 6306801607961
Option 3 ID : 6306801607960
Option 4 ID : 6306801607959
Status : Answered
Chosen Option : 3

Q.25 Which of the following does NOT belong to the category of Porifera?

- Ans
- 1. Spongilla
 - 2. Hydra
 - 3. Euplectella
 - 4. Sycon

Question ID : 630680517147
Option 1 ID : 6306802020987
Option 2 ID : 6306802020985
Option 3 ID : 6306802020984
Option 4 ID : 6306802020986
Status : Answered
Chosen Option : 2

Q.1 Find the least value of x for which $57x716$ is divisible by 9.

- Ans
- 1. 8
 - 2. 9
 - 3. 0
 - 4. 1

Question ID : 630680108682
Option 1 ID : 630680421658
Option 2 ID : 630680421657
Option 3 ID : 630680421659
Option 4 ID : 630680421656
Status : Answered
Chosen Option : 4

Q.2 AB and CD are two parallel chords drawn in a circle with centre O. The distance between the two chords is 21 cm. If the lengths of AB and CD are 24 cm and 18 cm, respectively, then the radius of the circle is equal to:

- Ans
- 1. 15 cm
 - 2. 18 cm
 - 3. 24 cm
 - 4. 20 cm

Question ID : 630680357967
Option 1 ID : 6306801393857
Option 2 ID : 6306801393858
Option 3 ID : 6306801393860
Option 4 ID : 6306801393859
Status : Not Answered
Chosen Option : --

Q.3 For what value of k, the system of equations $4x + 12y + 36 = 0$ and $5x + ky + 45 = 0$ has an infinite number of solutions?

- Ans
- 1. 22
 - 2. 20
 - 3. 25
 - 4. 15

Question ID : 630680198891
Option 1 ID : 630680771293
Option 2 ID : 630680771292
Option 3 ID : 630680771294
Option 4 ID : 630680771291
Status : Not Answered
Chosen Option : --

Q.4 M and N are, respectively, the centres of two circles of radii 12 cm and 8 cm. QR is the common tangent to the circles. If MN = 16 cm, then what will be the length of QR?

- Ans
- 1. $5\sqrt{17}$ cm
 - 2. $3\sqrt{19}$ cm
 - 3. $6\sqrt{8}$ cm
 - 4. $4\sqrt{15}$ cm

Question ID : 630680403939
Option 1 ID : 6306801575243
Option 2 ID : 6306801575245
Option 3 ID : 6306801575244
Option 4 ID : 6306801575242
Status : Not Answered
Chosen Option : --

Q.5 The table shows the production of different types of bikes (in thousands).

Years	2015	2016	2017	2018
Bikes				
A	157	194	271	290
B	138	225	146	206
C	255	227	213	239
D	196	304	162	224

The number of years, in which the production of bikes of type C is less than the average production of type A bikes over the years is

- Ans
- 1. 4%
 - 2. 2%
 - 3. 1%
 - 4. 3%

Question ID : 630680523806
Option 1 ID : 6306802047377
Option 2 ID : 6306802047375
Option 3 ID : 6306802047376
Option 4 ID : 6306802047378
Status : Not Answered
Chosen Option : --

Q.6 If $a = x\cos\theta + y\sin\theta$ and $b = x\sin\theta - y\cos\theta$, then $a^2 + b^2$ is equal to:

- Ans
- 1. $x^2 + y^2$
 - 2. $x + y$
 - 3. $x^2 - y^2$
 - 4. $x - y$

Question ID : 630680397684
Option 1 ID : 6306801550662
Option 2 ID : 6306801550663
Option 3 ID : 6306801550661
Option 4 ID : 6306801550664
Status : Not Answered
Chosen Option : --

Q.7 Simplify the following.

$$\left(5 - \frac{15}{16}\right) \times 1\frac{12}{13}$$

Ans

1. $7\frac{11}{16}$
2. $5\frac{13}{16}$
3. $5\frac{11}{16}$
4. $7\frac{13}{16}$

Question ID : 630680399204

Option 1 ID : 6306801556764

Option 2 ID : 6306801556766

Option 3 ID : 6306801556765

Option 4 ID : 6306801556763

Status : Not Answered

Chosen Option : --

Q.8 Study the following table and answer the question that follows.

Expenditures of a Company (in Lakh Rupees) Per Annum over Different Heads in the Given Years

Year	Item of Expenditure				
	Salary	Fuel and Transport	Bonus	Interest on Loans	Taxes
2010	310	98	3.84	23.4	83
2011	324	112	3.68	32.5	108
2012	338	101	3.00	41.6	74
2013	346	133	2.52	36.4	88
2014	410	142	3.96	49.4	98

The total amount of bonus paid by the company during the given period is approximately what percentage of the total amount of salary paid during this period? (Rounded off to the nearest integer.)

- Ans 1. 1.5%
2. 1%
3. 2.5%
4. 2%

Question ID : 630680386865

Option 1 ID : 6306801508173

Option 2 ID : 6306801508170

Option 3 ID : 6306801508172

Option 4 ID : 6306801508171

Status : Not Answered

Chosen Option : --

Q.9 If the height and diameter of a cylinder are 12 cm and 28 cm, respectively, then find the ratio of the total surface area to the curved surface area.

Ans 1. 13 : 6

2. 10 : 3

3. 13 : 5

4. 11 : 6

Question ID : 630680421534
Option 1 ID : 6306801644602
Option 2 ID : 6306801644599
Option 3 ID : 6306801644600
Option 4 ID : 6306801644601
Status : Not Answered
Chosen Option : --

Q.10 In a company, the ratio of men and women is 5 : 3, respectively. When 150 additional women are employed in the company, the ratio becomes 5 : 4. How many men are employed in the company?

Ans 1. 850

2. 750

3. 550

4. 950

Question ID : 630680524267
Option 1 ID : 6306802049219
Option 2 ID : 6306802049222
Option 3 ID : 6306802049221
Option 4 ID : 6306802049220
Status : Answered
Chosen Option : 3

Q.11 In right-angled triangle ABC, $\angle C=90^\circ$, CM is perpendicular on AB. If AB = 18 cm and BM = 6 cm, then find the length of CM.

Ans 1. $2\sqrt{2}$ cm

2. $6\sqrt{2}$ cm

3. $7\sqrt{2}$ cm

4. $4\sqrt{2}$ cm

Question ID : 630680401742
Option 1 ID : 6306801566734
Option 2 ID : 6306801566736
Option 3 ID : 6306801566737
Option 4 ID : 6306801566735
Status : Answered
Chosen Option : 2

Q.12 A motorboat takes 18 hours to go downstream, and it takes 36 hours to return the same distance. Find the ratio of the speed of the boat in still water to the speed of the stream.

Ans 1. 3 : 2

2. 3 : 1

3. 2 : 1

4. 2 : 3

Question ID : 630680428504

Option 1 ID : 6306801672063

Option 2 ID : 6306801672062

Option 3 ID : 6306801672061

Option 4 ID : 6306801672060

Status : Answered

Chosen Option : 3

Q.13 In a rhombus PQRS, O is any interior point such that $OP = OR$. What is the degree measure of $\angle SOQ$?

Ans 1. 240°

2. 120°

3. 180°

4. 200°

Question ID : 630680379339

Option 1 ID : 6306801478402

Option 2 ID : 6306801478400

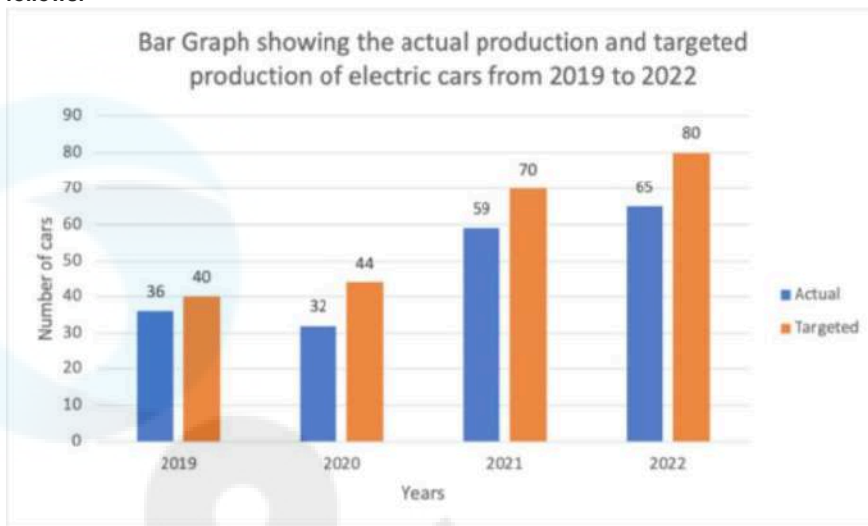
Option 3 ID : 6306801478399

Option 4 ID : 6306801478401

Status : Answered

Chosen Option : 3

Q.14 The given bar graph shows the actual production and targeted production of electric cars from 2019 to 2022. Study the given bar graph and answer the question that follows.



What is the ratio of the total targeted production of cars in 2021 and 2022 to the actual production of cars from 2019 to 2022 taken together?

- Ans
- 1. 25 : 36
 - 2. 36 : 25
 - 3. 25 : 32
 - 4. 32 : 25

Question ID : 630680421289
 Option 1 ID : 6306801643634
 Option 2 ID : 6306801643633
 Option 3 ID : 6306801643632
 Option 4 ID : 6306801643631
 Status : Answered
 Chosen Option : 3

Q.15 If $\sin A + \cos A = \frac{1}{2\sqrt{2}}$, then find the value of $\sin^4 A + \cos^4 A$.

- Ans
- 1. $\frac{5}{13}$
 - 2. $\frac{79}{128}$
 - 3. $\frac{79}{126}$
 - 4. $\frac{7}{13}$

Question ID : 630680526458
 Option 1 ID : 6306802057900
 Option 2 ID : 6306802057899
 Option 3 ID : 6306802057898
 Option 4 ID : 6306802057901
 Status : Not Answered
 Chosen Option : --

Q.16 If $8a^3 + b^3 + 27c^3 = 18abc$, then the relation among a, b and c is:

- Ans
- 1. $b + 3c = 2a$
 - 2. $b + 3c = -2a$
 - 3. $2a + 3c = b$
 - 4. $2a + b = 3c$

Question ID : 630680413514
Option 1 ID : 6306801612883
Option 2 ID : 6306801612882
Option 3 ID : 6306801612881
Option 4 ID : 6306801612880
Status : Not Answered
Chosen Option : --

Q.17

Find the value of $\left[\frac{4 \cos(90 - \theta) \sin^3(90 + \theta) - 4 \sin(90 + \theta) \cos^3(90 - \theta)}{\cos\left(\frac{180 + 2\theta}{2}\right)} \right]$.

- Ans
- 1. -1
 - 2. 1
 - 3. 2
 - 4. 0

Question ID : 630680358058
Option 1 ID : 6306801394221
Option 2 ID : 6306801394223
Option 3 ID : 6306801394224
Option 4 ID : 6306801394222
Status : Not Answered
Chosen Option : --

Q.18 An article passing through two hands is sold at a total profit of 40% of the original cost price. If the first dealer makes a profit of 30%, then the profit percentage made by the second dealer is:

- Ans
- 1. $7\frac{1}{13}\%$
 - 2. $7\frac{9}{13}\%$
 - 3. $6\frac{3}{13}\%$
 - 4. $8\frac{6}{13}\%$

Question ID : 630680429012
Option 1 ID : 6306801674093
Option 2 ID : 6306801674095
Option 3 ID : 6306801674092
Option 4 ID : 6306801674094
Status : Answered
Chosen Option : 1

Q.19 If $a^3 + 3a^2 + 3a = 7$, then the value of $a^2 + 2a$ is:

- Ans
- 1. 4
 - 2. 2
 - 3. 3
 - 4. 1

Question ID : 630680413517
Option 1 ID : 6306801612895
Option 2 ID : 6306801612893
Option 3 ID : 6306801612892
Option 4 ID : 6306801612894
Status : Not Answered
Chosen Option : --

Q.20 A group of 30 students appeared in a test. The average score of 12 students is 62, and that of the rest is 76. What is the average score of the group?

- Ans
- 1. 71.4
 - 2. 70.4
 - 3. 69.4
 - 4. 68.4

Question ID : 630680566263
Option 1 ID : 6306802214042
Option 2 ID : 6306802214040
Option 3 ID : 6306802214041
Option 4 ID : 6306802214043
Status : Not Answered
Chosen Option : --

Q.21 What is the rate of interest per annum for simple interest at which ₹1,040 amounts to ₹1,230 in $1\frac{1}{2}$ years?

- Ans
- 1. $11\frac{7}{39}\%$
 - 2. $13\frac{7}{39}\%$
 - 3. $12\frac{7}{39}\%$
 - 4. $10\frac{7}{39}\%$

Question ID : 630680358023
Option 1 ID : 6306801394081
Option 2 ID : 6306801394084
Option 3 ID : 6306801394083
Option 4 ID : 6306801394082
Status : Not Answered
Chosen Option : --

Q.22 Two candidates contested in an election. 80% of the voters cast their votes, out of which 5% of the polled votes were invalid. The winning candidate got 70% of valid votes and won by a majority of 36,480 votes. Find the total number of voters.

- Ans
- 1. 1,18,000
 - 2. 1,15,000
 - 3. 1,20,000
 - 4. 1,25,000

Question ID : 630680419648
Option 1 ID : 6306801637090
Option 2 ID : 6306801637089
Option 3 ID : 6306801637088
Option 4 ID : 6306801637087
Status : Not Answered
Chosen Option : --

Q.23 The following table shows the categorisation of 100 students based on their marks in Physics and Chemistry in an examination.

Subject	Marks out of 50				
	40 and above	30 and above	20 and above	10 and above	0 and above
Physics	9	32	80	92	100
Chemistry	4	21	66	81	100

If a minimum of 40% marks in Chemistry is required to pursue higher studies in Chemistry, how many students will be eligible to pursue higher studies in Chemistry?

- Ans
- 1. 25
 - 2. 21
 - 3. 45
 - 4. 66

Question ID : 630680523693
Option 1 ID : 6306802046926
Option 2 ID : 6306802046925
Option 3 ID : 6306802046924
Option 4 ID : 6306802046923
Status : Answered
Chosen Option : 1

Q.24 A shopkeeper allows 40% discount on his goods. He further gives 20% discount. What is the single discount equivalent to these two successive discounts?

- Ans
- 1. 50%
 - 2. 60%
 - 3. 62%
 - 4. 52%

Question ID : 630680182422
Option 1 ID : 630680706874
Option 2 ID : 630680706876
Option 3 ID : 630680706875
Option 4 ID : 630680706877
Status : Answered
Chosen Option : 4

Q.25 A cistern can be filled by two pipes in 8 minutes and 10 minutes, separately. Both the pipes are opened together for a certain time, but due to an obstruction, only $\frac{5}{8}$ of the full quantity of water flowed through the former pipe and $\frac{3}{5}$ through the latter pipe. However, the obstruction was suddenly removed, and the cistern was filled in 3 minutes from that moment. How long did it take before the full flow began?

Ans

- 1. $3\frac{1}{16}$ minutes
- 2. $9\frac{6}{7}$ minutes
- 3. $2\frac{6}{17}$ minutes
- 4. $2\frac{30}{37}$ minutes

Question ID : 630680384349
Option 1 ID : 6306801498283
Option 2 ID : 6306801498284
Option 3 ID : 6306801498282
Option 4 ID : 6306801498285
Status : Not Answered
Chosen Option : --

Section : English Comprehension

Q.1 Select the most appropriate meaning of the following idiom.

To bring to light

- Ans
- 1. To disengage
 - 2. To engage in conversation
 - 3. To disclose
 - 4. To lighten

Question ID : 630680360829
Option 1 ID : 6306801405191
Option 2 ID : 6306801405190
Option 3 ID : 6306801405192
Option 4 ID : 6306801405189
Status : Answered
Chosen Option : 3

Q.2 Select the most appropriate ANTONYM of the underlined word.
We should plan our actions judiciously before going to war.

- Ans
- 1. Irrelevant
 - 2. Irreverent
 - 3. Irritatingly
 - 4. Irrational

Question ID : 630680360079
Option 1 ID : 6306801402261
Option 2 ID : 6306801402262
Option 3 ID : 6306801402264
Option 4 ID : 6306801402263
Status : Answered
Chosen Option : 4

Q.3 The following sentence has been split into four segments. Identify the segment that contains an error.

The principal gave up / the prizes to / the winners on / Republic Day.

- Ans
- 1. the prizes to
 - 2. the winners on
 - 3. Republic Day
 - 4. The principal gave up

Question ID : 630680512935
Option 1 ID : 6306802004687
Option 2 ID : 6306802004688
Option 3 ID : 6306802004689
Option 4 ID : 6306802004686
Status : Answered
Chosen Option : 4

Q.4 Select the option that can be used as a one-word substitute for the underlined group of words in the following sentence.

Almost immediately, they heard the high shrill piercing cry of tires on the side road.

- Ans
- 1. beseech
 - 2. screech
 - 3. creche
 - 4. bleach

Question ID : 630680310038
Option 1 ID : 6306801206298
Option 2 ID : 6306801206300
Option 3 ID : 6306801206297
Option 4 ID : 6306801206299
Status : Not Answered
Chosen Option : --

Q.5 Select the most appropriate ANTONYM of the given word.
Synthetic

- Ans
- 1. Natural
 - 2. Processed
 - 3. Artificial
 - 4. Imitation

Question ID : 630680517355
Option 1 ID : 6306802021818
Option 2 ID : 6306802021819
Option 3 ID : 6306802021817
Option 4 ID : 6306802021816
Status : Answered
Chosen Option : 1

Q.6 Select the most appropriate ANTONYM of the underlined word in the sentence given below.

I refuse to let anything come in the way of my dreams.

Ans ✓ 1. permit

✗ 2. repress

✗ 3. accord

✗ 4. balk

Question ID : 630680319132

Option 1 ID : 6306801241433

Option 2 ID : 6306801241434

Option 3 ID : 6306801241435

Option 4 ID : 6306801241436

Status : Answered

Chosen Option : 1

Q.7 Sentences of a paragraph are given below in jumbled order. Arrange the sentences in the correct order to form a meaningful and coherent paragraph.

A. It was as simple as announcing what you have in your store or the services you offer in your premises.

B. Over the years, advertising has evolved into a major industry that goes beyond informing to persuading and influencing.

C. Advertising was initially meant to make people aware of the goods available in the market.

D. It is a form of brainwashing consumers.

Ans ✗ 1. DABC

✓ 2. CABD

✗ 3. BADC

✗ 4. ADBC

Question ID : 630680160907

Option 1 ID : 630680622995

Option 2 ID : 630680622993

Option 3 ID : 630680622992

Option 4 ID : 630680622994

Status : Answered

Chosen Option : 2

Q.8 Select the most appropriate ANTONYM of the given word.
Attack

Ans ✓ 1. Defence

✗ 2. Ambush

✗ 3. Engagement

✗ 4. Production

Question ID : 630680517373

Option 1 ID : 6306802021888

Option 2 ID : 6306802021889

Option 3 ID : 6306802021891

Option 4 ID : 6306802021890

Status : Answered

Chosen Option : 1

Q.9 Parts of a sentence are given below in jumbled order. Arrange the parts in the correct order to form a meaningful sentence.

- P) willing to go
- Q) is not
- R) my son
- S) camping

- Ans
- 1. QRSP
 - 2. SPRQ
 - 3. PQRS
 - 4. RQPS

Question ID : 630680377246
Option 1 ID : 6306801470048
Option 2 ID : 6306801470050
Option 3 ID : 6306801470047
Option 4 ID : 6306801470049
Status : Answered
Chosen Option : 4

Q.10 Parts of a sentence are given below in jumbled order. Arrange the parts in the correct order to form a meaningful sentence.

- (a) false news websites
- (b) spreading propaganda about politics
- (c) thrive because the advertisements and politicians
- (d) and social networking sites
- (e) make a lot of money

- Ans
- 1. adecb
 - 2. aedcb
 - 3. adcbe
 - 4. aecbd

Question ID : 630680374313
Option 1 ID : 6306801458445
Option 2 ID : 6306801458446
Option 3 ID : 6306801458444
Option 4 ID : 6306801458443
Status : Answered
Chosen Option : 1

Q.11 Select the option that expresses the given sentence in passive voice.
They have built a new bridge across the river.

- Ans
- 1. A new bridge by them has been built across the river.
 - 2. A new bridge has built across the river by them.
 - 3. The river has been built a new bridge by them.
 - 4. A new bridge has been built across the river by them.

Question ID : 630680415211
Option 1 ID : 6306801619591
Option 2 ID : 6306801619594
Option 3 ID : 6306801619593
Option 4 ID : 6306801619592
Status : Answered
Chosen Option : 4

Q.12 Select the most appropriate option to substitute the underlined segment in the given sentence.

Experts acknowledged that some counterfeiting of document techniques are virtually impossible to detect.

- Ans
- 1. frenzy
 - 2. forgery
 - 3. fiasco
 - 4. impromptu

Question ID : 630680170442
Option 1 ID : 630680660363
Option 2 ID : 630680660362
Option 3 ID : 630680660364
Option 4 ID : 630680660361
Status : Answered
Chosen Option : 2

Q.13 Select the correct spelling to fill in the blank.

The thought of eating half-cooked food under compulsion fills me with _____.

- Ans
- 1. repugnance
 - 2. ripugnance
 - 3. repugnence
 - 4. repegnance

Question ID : 630680409976
Option 1 ID : 6306801598733
Option 2 ID : 6306801598736
Option 3 ID : 6306801598735
Option 4 ID : 6306801598734
Status : Not Answered
Chosen Option : --

Q.14 Select the most appropriate ANTONYM of the word in the brackets to fill in the blank.

The chef requires _____ vegetables for the salad. [stale]

- Ans
- 1. green
 - 2. cut
 - 3. leafy
 - 4. fresh

Question ID : 630680132563
Option 1 ID : 630680513387
Option 2 ID : 630680513388
Option 3 ID : 630680513386
Option 4 ID : 630680513389
Status : Answered
Chosen Option : 4

Q.15 Select the option that expresses the given sentence in passive voice.

They are building a new hospital in the city.

- Ans
- 1. A new hospital will be built in the city by them.
 - 2. A new hospital was built in the city by them.
 - 3. A new hospital is being built in the city by them.
 - 4. A new hospital has been built in the city by them.

Question ID : 630680415203
Option 1 ID : 6306801619562
Option 2 ID : 6306801619561
Option 3 ID : 6306801619560
Option 4 ID : 6306801619559
Status : Answered
Chosen Option : 3

Q.16 Select the most appropriate option to substitute the underlined part of the given sentence. If there is no need to substitute it, select 'No substitution'.

As the rulers of the planet, humans like to think that it is the largest creatures that will emerge victorious from the struggle for survival.

- Ans
- 1. No substitution
 - 2. it is the most large creatures
 - 3. they are a largest creature
 - 4. they are the largest creatures

Question ID : 630680200027
Option 1 ID : 630680775535
Option 2 ID : 630680775533
Option 3 ID : 630680775532
Option 4 ID : 630680775534
Status : Answered
Chosen Option : 4

Q.17 Select the correct meaning of the underlined idiom in the following sentence.

Rina pulled a long face since her husband had not bought her a diamond necklace on their anniversary.

- Ans
- 1. To be ecstatic
 - 2. To be euphoric
 - 3. To be electrified
 - 4. To look saddened

Question ID : 630680102548
Option 1 ID : 630680398455
Option 2 ID : 630680398457
Option 3 ID : 630680398458
Option 4 ID : 630680398456
Status : Answered
Chosen Option : 4

Q.18 Select the sentence that has a grammatical error.

Ans ✓ 1. Indian force are known for their loyalty and integrity.

✗ 2. It is said that Joseph was not ready to go to war.

✗ 3. It is impossible to wake Christine up in the morning.

✗ 4. Karl Marx was a renowned social scientist.

Question ID : 630680205364
Option 1 ID : 630680796304
Option 2 ID : 630680796303
Option 3 ID : 630680796306
Option 4 ID : 630680796305
Status : Answered
Chosen Option : 3

Q.19 Select the most appropriate homophone to fill in the blank.

The ointment will help to _____ the wound.

Ans ✗ 1. kneel

✗ 2. he'll

✓ 3. heal

✗ 4. heel

Question ID : 630680129726
Option 1 ID : 630680502511
Option 2 ID : 630680502513
Option 3 ID : 630680502512
Option 4 ID : 630680502510
Status : Answered
Chosen Option : 3

Q.20 Select the INCORRECTLY spelt word from the given sentence .

The resturant offers a wide variety of dishes.

Ans ✗ 1. dishes

✗ 2. variety

✓ 3. resturant

✗ 4. offers

Question ID : 630680374416
Option 1 ID : 6306801458850
Option 2 ID : 6306801458849
Option 3 ID : 6306801458847
Option 4 ID : 6306801458848
Status : Answered
Chosen Option : 3

Comprehension:

In the following passage, some words have been deleted. Read the passage carefully and select the most appropriate option to fill in each blank.

The adverse (1)_____ of climate change and environmental degradation are increasingly driving human mobility the world over, particularly in countries with high exposure and low (2)_____ capacity. While most climate-related mobility currently occurs within countries, desperation and deteriorating environments can also compel people to seek a livelihood elsewhere through (3)_____ migration. While climate change negatively impacts everyone, everywhere, those already in vulnerable situations due to geography, poverty, gender, age, disability, origin, or other status, including migrant women who (4)_____ climate-sensitive livelihoods, and children who are less able to survive extreme weather events, are at the greatest risk of suffering harm. It is (5)_____ to recognise this reality and take meaningful action to protect the human rights of those most affected by climate change, including migrants.

SubQuestion No : 21

Q.21 Select the most appropriate option to fill in blank number 1.

- Ans** 1. affects
 2. effects
 3. renounce
 4. practice

Question ID : 630680158853
Option 1 ID : 630680614884
Option 2 ID : 630680614885
Option 3 ID : 630680614886
Option 4 ID : 630680614887
Status : Answered
Chosen Option : 1

Comprehension:

In the following passage, some words have been deleted. Read the passage carefully and select the most appropriate option to fill in each blank.

The adverse (1)_____ of climate change and environmental degradation are increasingly driving human mobility the world over, particularly in countries with high exposure and low (2)_____ capacity. While most climate-related mobility currently occurs within countries, desperation and deteriorating environments can also compel people to seek a livelihood elsewhere through (3)_____ migration. While climate change negatively impacts everyone, everywhere, those already in vulnerable situations due to geography, poverty, gender, age, disability, origin, or other status, including migrant women who (4)_____ climate-sensitive livelihoods, and children who are less able to survive extreme weather events, are at the greatest risk of suffering harm. It is (5)_____ to recognise this reality and take meaningful action to protect the human rights of those most affected by climate change, including migrants.

SubQuestion No : 22

Q.22 Select the most appropriate option to fill in blank number 2.

- Ans** 1. adaptive
 2. affective
 3. adoptive
 4. minimum

Question ID : 630680158854
Option 1 ID : 630680614888
Option 2 ID : 630680614890
Option 3 ID : 630680614889
Option 4 ID : 630680614891
Status : Answered
Chosen Option : 1

Comprehension:

In the following passage, some words have been deleted. Read the passage carefully and select the most appropriate option to fill in each blank.

The adverse (1)_____ of climate change and environmental degradation are increasingly driving human mobility the world over, particularly in countries with high exposure and low (2)_____ capacity. While most climate-related mobility currently occurs within countries, desperation and deteriorating environments can also compel people to seek a livelihood elsewhere through (3)_____ migration. While climate change negatively impacts everyone, everywhere, those already in vulnerable situations due to geography, poverty, gender, age, disability, origin, or other status, including migrant women who (4)_____ climate-sensitive livelihoods, and children who are less able to survive extreme weather events, are at the greatest risk of suffering harm. It is (5)_____ to recognise this reality and take meaningful action to protect the human rights of those most affected by climate change, including migrants.

SubQuestion No : 23

Q.23 Select the most appropriate option to fill in blank number 3.

- Ans 1. fast
 2. irregular
 3. regard
 4. fixate

Question ID : 630680158855
Option 1 ID : 630680614895
Option 2 ID : 630680614894
Option 3 ID : 630680614893
Option 4 ID : 630680614892
Status : Answered
Chosen Option : 1

Comprehension:

In the following passage, some words have been deleted. Read the passage carefully and select the most appropriate option to fill in each blank.

The adverse (1)_____ of climate change and environmental degradation are increasingly driving human mobility the world over, particularly in countries with high exposure and low (2)_____ capacity. While most climate-related mobility currently occurs within countries, desperation and deteriorating environments can also compel people to seek a livelihood elsewhere through (3)_____ migration. While climate change negatively impacts everyone, everywhere, those already in vulnerable situations due to geography, poverty, gender, age, disability, origin, or other status, including migrant women who (4)_____ climate-sensitive livelihoods, and children who are less able to survive extreme weather events, are at the greatest risk of suffering harm. It is (5)_____ to recognise this reality and take meaningful action to protect the human rights of those most affected by climate change, including migrants.

SubQuestion No : 24

Q.24 Select the most appropriate option to fill in blank number 4.

- Ans 1. depend from
 2. depend on
 3. depend at
 4. depend in

Question ID : 630680158856
Option 1 ID : 630680614898
Option 2 ID : 630680614897
Option 3 ID : 630680614899
Option 4 ID : 630680614896
Status : Answered
Chosen Option : 2

Comprehension:

In the following passage, some words have been deleted. Read the passage carefully and select the most appropriate option to fill in each blank.

The adverse (1)_____ of climate change and environmental degradation are increasingly driving human mobility the world over, particularly in countries with high exposure and low (2)_____ capacity. While most climate-related mobility currently occurs within countries, desperation and deteriorating environments can also compel people to seek a livelihood elsewhere through (3)_____ migration. While climate change negatively impacts everyone, everywhere, those already in vulnerable situations due to geography, poverty, gender, age, disability, origin, or other status, including migrant women who (4)_____ climate-sensitive livelihoods, and children who are less able to survive extreme weather events, are at the greatest risk of suffering harm. It is (5)_____ to recognise this reality and take meaningful action to protect the human rights of those most affected by climate change, including migrants.

SubQuestion No : 25

Q.25 Select the most appropriate option to fill in blank number 5.

- Ans 1. optional
 2. imperative
 3. resistant
 4. secondary

Question ID : 630680158857

Option 1 ID : 630680614902

Option 2 ID : 630680614903

Option 3 ID : 630680614900

Option 4 ID : 630680614901

Status : **Not Answered**

Chosen Option : --