

## Combined Graduate Level Examination 2024 Tier I

Roll Number	
Candidate Name	
Venue Name	
Exam Date	18/09/2024
Exam Time	12:30 PM - 1:30 PM
Subject	Combined Graduate Level Examination Tier I

Section : General Intelligence and Reasoning

**Q.1** In a certain code language,

'A + B' means 'A is the mother of B';  
'A - B' means 'A is the brother of B';  
'A × B' means 'A is the wife of B' and  
'A ÷ B' means 'A is the father of B'.

Based on the above, how is A related to D if 'A × B ÷ C + D'?

- Ans
- 1. Father's mother
  - 2. Mother's father
  - 3. Father's father
  - 4. Mother's mother

Question ID : 630680300379

Option 1 ID : 6306801168417

Option 2 ID : 6306801168416

Option 3 ID : 6306801168415

Option 4 ID : 6306801168418

Status : Answered

Chosen Option : 4

**Q.2** What will come in the place of the question mark (?) in the following equation, if '+' and '-' are interchanged and '×' and '÷' are interchanged?  
 $272 \times 16 + 97 - 23 \div 4 = ?$

- Ans
- 1. 22
  - 2. 12
  - 3. 2
  - 4. 21

Question ID : 630680336423

Option 1 ID : 6306801308414

Option 2 ID : 6306801308413

Option 3 ID : 6306801308415

Option 4 ID : 6306801308416

Status : Answered

Chosen Option : 2

**Q.3** Select the number that will come in the place of the question mark (?), if '+' and '-' are interchanged and 'x' and '÷' are interchanged  
 $121 \times 11 - 28 \div 3 + 17 = ?$

**Ans** ✓ 1. 78

✗ 2. 91

✗ 3. 64

✗ 4. 85

Question ID : 630680163583  
Option 1 ID : 630680633517  
Option 2 ID : 630680633519  
Option 3 ID : 630680633516  
Option 4 ID : 630680633518  
Status : Answered  
Chosen Option : 1

**Q.4** Select the option in which the numbers share the same relationship as that shared by the given pair of numbers.

(7, 333)

(5, 115)

(NOTE: Operations should be performed on the whole numbers, without breaking down the numbers into its constituent digits. E.g. 13 – Operations on 13 such as adding/deleting/multiplying etc. to 13 can be performed. Breaking down 13 into 1 and 3 and then performing mathematical operations on 1 and 3 is not allowed.)

**Ans** ✗ 1. (3, 24)

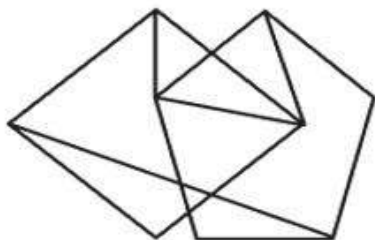
✗ 2. (6, 226)

✗ 3. (8, 492)

✓ 4. (4, 54)

Question ID : 630680329211  
Option 1 ID : 6306801280667  
Option 2 ID : 6306801280666  
Option 3 ID : 6306801280668  
Option 4 ID : 6306801280665  
Status : Answered  
Chosen Option : 4

**Q.5** How many triangles are there in the given figure?



**Ans** ✗ 1. 11

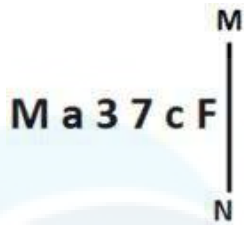
✗ 2. 7

✗ 3. 9

✓ 4. 8

Question ID : 630680295188  
Option 1 ID : 6306801148479  
Option 2 ID : 6306801148476  
Option 3 ID : 6306801148477  
Option 4 ID : 6306801148478  
Status : Answered  
Chosen Option : 3

Q.6 Select the correct mirror image of the given figure when the mirror is placed at MN as shown below.



- Ans
- 1. F c 7 3 a M
  - 2. F c 7 3 a M
  - 3. F c 7 3 a W
  - 4. F c 3 7 a M

Question ID : 630680356653  
Option 1 ID : 6306801388616  
Option 2 ID : 6306801388614  
Option 3 ID : 6306801388613  
Option 4 ID : 6306801388615  
Status : Answered  
Chosen Option : 2

Q.7 Each of the letters in the word 'SLANTED' is arranged in the English alphabetical order. How many letters are there in the English alphabetical series between the letter which is fourth from the left end and the one which is second from the right end in the new letter-cluster thus formed?

- Ans
- 1. Six
  - 2. Eight
  - 3. Five
  - 4. Seven

Question ID : 630680327767  
Option 1 ID : 6306801275058  
Option 2 ID : 6306801275060  
Option 3 ID : 6306801275057  
Option 4 ID : 6306801275059  
Status : Answered  
Chosen Option : 1

Q.8 In a certain code language, 'HIT' is coded as '132' and 'SBYZ' is coded as '144'. How will 'YRF' be coded in that language?

- Ans
- 1. 108
  - 2. 124
  - 3. 112
  - 4. 96

Question ID : 630680416286  
Option 1 ID : 6306801623907  
Option 2 ID : 6306801623909  
Option 3 ID : 6306801623910  
Option 4 ID : 6306801623908  
Status : Answered  
Chosen Option : 4

**Q.9** Two sets of numbers are given below. In each set of numbers, certain mathematical operation(s) on the first number result(s) in the second number. Similarly, certain mathematical operation(s) on the second number result(s) in the third number and so on. Which of the given options follows the same set of operations as in the given sets?

(NOTE: Operations should be performed on the whole numbers, without breaking down the numbers into their constituent digits. E.g. 13 – Operations on 13 such as adding/subtracting/multiplying to 13 can be performed. Breaking down 13 into 1 and 3 and then performing mathematical operations on 1 and 3 is not allowed.)

7 – 14 – 28 – 38; 4 – 8 – 16 – 26

- Ans
- 1. 6 – 12 – 24 – 36
  - 2. 13 – 26 – 52 – 62
  - 3. 8 – 16 – 32 – 40
  - 4. 15 – 25 – 50 – 60

Question ID : 630680814085  
Option 1 ID : 6306803189557  
Option 2 ID : 6306803189560  
Option 3 ID : 6306803189558  
Option 4 ID : 6306803189559  
Status : Answered  
Chosen Option : 2

**Q.10** Select the set in which the numbers are related to each other in the same way as are the numbers of the given sets.

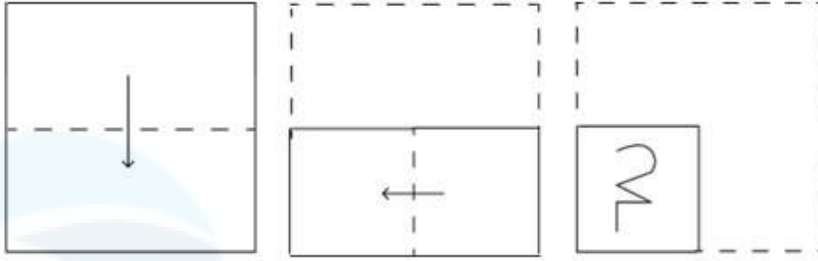
(28, 224); (47, 376)

(NOTE : Operations should be performed on the whole numbers, without breaking down the numbers into its constituent digits. E.g. 13 – Operations on 13 such as adding /deleting /multiplying etc. to 13 can be performed. Breaking down 13 into 1 and 3 and then performing mathematical operations on 1 and 3 is not allowed)

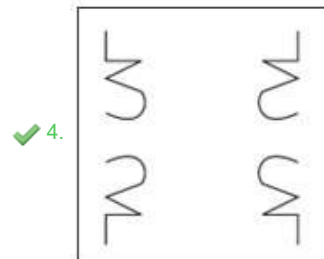
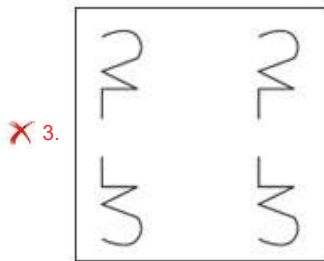
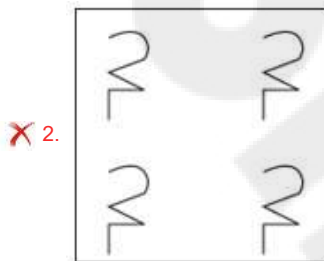
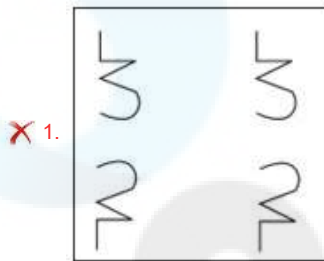
- Ans
- 1. (31, 248)
  - 2. (22, 178)
  - 3. (19, 212)
  - 4. (24, 168)

Question ID : 630680319357  
Option 1 ID : 6306801242334  
Option 2 ID : 6306801242333  
Option 3 ID : 6306801242335  
Option 4 ID : 6306801242336  
Status : Answered  
Chosen Option : 1

Q.11 A paper is folded and cut as shown below. How will it appear when unfolded?



Ans



Question ID : 630680294958

Option 1 ID : 6306801147561

Option 2 ID : 6306801147560

Option 3 ID : 6306801147562

Option 4 ID : 6306801147563

Status : Answered

Chosen Option : 4

**Q.12** Based on the English alphabetical order, three of the following four letter-clusters are alike in a certain way and thus form a group. Which is the one that DOES NOT belong to that group?

(Note: The odd man out is not based on the number of consonants/vowels or their position in the letter-cluster.)

- Ans
- 1. HGF
  - 2. VUT
  - 3. KJI
  - 4. AAY

Question ID : 630680812265  
Option 1 ID : 6306803182512  
Option 2 ID : 6306803182510  
Option 3 ID : 6306803182511  
Option 4 ID : 6306803182509  
Status : Answered  
Chosen Option : 4

**Q.13** Four letter-clusters have been given, out of which three are alike in some manner and one is different. Select the one that is different.

Note: The odd one out is not based on the number of consonants/vowels or their position in the letter cluster.

- Ans
- 1. YWT
  - 2. XVS
  - 3. WUQ
  - 4. ZXU

Question ID : 630680195788  
Option 1 ID : 630680759604  
Option 2 ID : 630680759605  
Option 3 ID : 630680759606  
Option 4 ID : 630680759603  
Status : Answered  
Chosen Option : 3

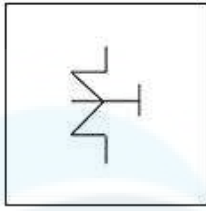
**Q.14** Which of the following numbers will replace the question mark (?) in the given series?

20, 25, 25, 35, 30, 45, ?, 55, 40

- Ans
- 1. 60
  - 2. 35
  - 3. 50
  - 4. 30

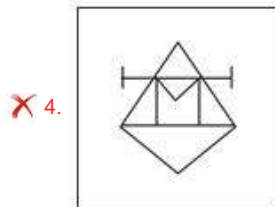
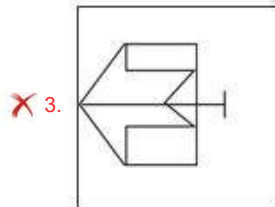
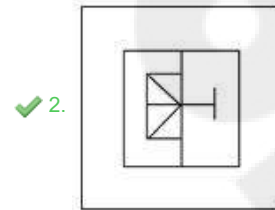
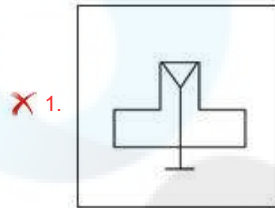
Question ID : 630680411883  
Option 1 ID : 6306801606368  
Option 2 ID : 6306801606369  
Option 3 ID : 6306801606367  
Option 4 ID : 6306801606370  
Status : Answered  
Chosen Option : 2

Q.15 Select the option figure in which the given figure (X) is embedded (rotation is NOT allowed).



(X)

Ans



Question ID : 630680296889  
 Option 1 ID : 6306801155199  
 Option 2 ID : 6306801155200  
 Option 3 ID : 6306801155202  
 Option 4 ID : 6306801155201  
 Status : Answered  
 Chosen Option : 2

Q.16 In a certain code language, 'play in the sunshine' is coded as 'sh ko zm fq' and 'the sunshine is bright' is coded as 'ko sh gp rs'. What is code for 'sunshine' in that language?

- Ans
- ✗ 1. either 'gp' or 'sh'
  - ✓ 2. either 'sh' or 'ko'
  - ✗ 3. ko
  - ✗ 4. zm

Question ID : 630680199100  
 Option 1 ID : 630680772110  
 Option 2 ID : 630680772108  
 Option 3 ID : 630680772107  
 Option 4 ID : 630680772109  
 Status : Answered  
 Chosen Option : 2

Q.17 Three of the following numbers are alike in a certain way and one is different. Pick the odd one out.  
(NOTE : Operations should be performed on the whole numbers, without breaking down the numbers into its constituent digits. E.g. 13 – Operations on 13 such as adding /deleting /multiplying etc., to 13 can be performed. Breaking down 13 into 1 and 3 and then performing mathematical operations on 1 and 3 is not allowed.)

- Ans  1. 11 – 363  
 2. 15 – 450  
 3. 13 – 507  
 4. 9 – 243

Question ID : 630680389581  
Option 1 ID : 6306801518785  
Option 2 ID : 6306801518783  
Option 3 ID : 6306801518782  
Option 4 ID : 6306801518784  
Status : Answered  
Chosen Option : 4

Q.18 'डटे रहना' (Persist), 'टढ़ रहना' (Endure) से उसी प्रकार संबंधित है, जिस प्रकार 'टालना' (Stall) 'से संबंधित है।  
(शब्दों को सार्थक हिंदी शब्द माना जाना चाहिए और शब्दों को अक्षरों की संख्या/व्यंजनों/स्वरों की संख्या के आधार पर एक दूसरे से संबंधित नहीं किया जाना चाहिए।)

- Ans  1. स्थगित करना (Delay)  
 2. उन्नति करना (Progress)  
 3. शिकायत करना (Complain)  
 4. आगे बढ़ना (Surge )

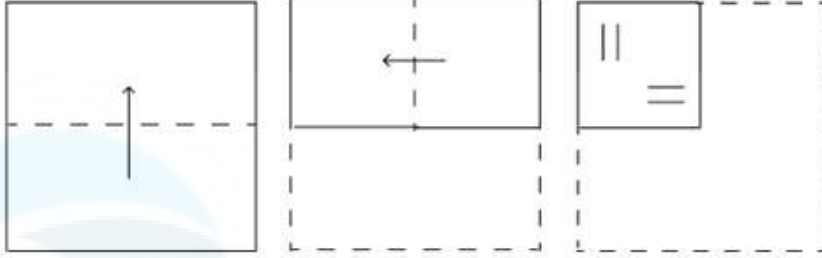
Question ID : 630680416709  
Option 1 ID : 6306801625602  
Option 2 ID : 6306801625600  
Option 3 ID : 6306801625599  
Option 4 ID : 6306801625601  
Status : Answered  
Chosen Option : 1

Q.19 Select the option that is related to the fifth term in the same way as the second term is related to the first term and the fourth term is related to the third term.  
CARBON : ACIYNO :: DAMAGE : ADNZEG :: MARGIN : ?

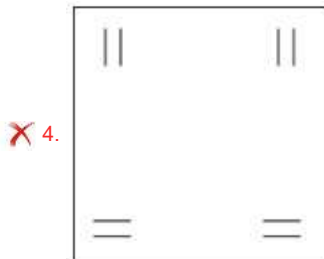
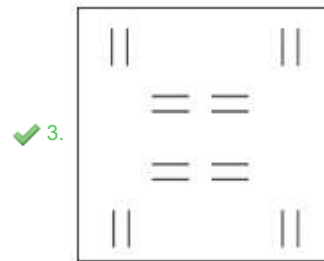
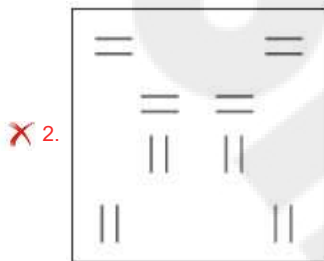
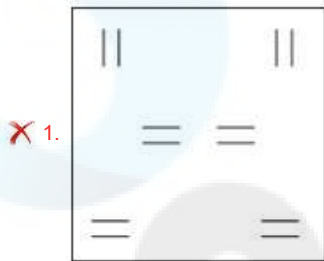
- Ans  1. MARGNI  
 2. AMITNI  
 3. MATINI  
 4. AMGRNI

Question ID : 630680416199  
Option 1 ID : 6306801623559  
Option 2 ID : 6306801623560  
Option 3 ID : 6306801623562  
Option 4 ID : 6306801623561  
Status : Answered  
Chosen Option : 2

Q.20 A paper is folded and cut as shown below. How will it appear when unfolded?



Ans



Question ID : 630680294959

Option 1 ID : 6306801147565

Option 2 ID : 6306801147567

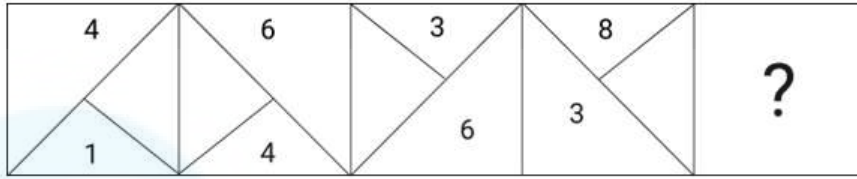
Option 3 ID : 6306801147566

Option 4 ID : 6306801147564

Status : Answered

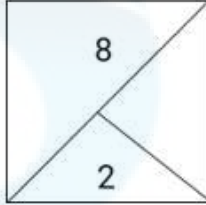
Chosen Option : 3

Q.21 Identify the figure given in the options which when put in place of ? will logically complete the series.

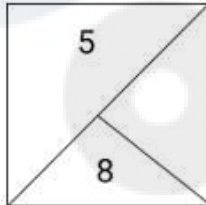


Ans

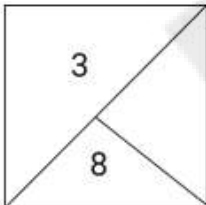
✗ 1.



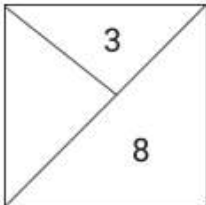
✓ 2.



✗ 3.



✗ 4.



Question ID : 630680524402

Option 1 ID : 6306802049707

Option 2 ID : 6306802049710

Option 3 ID : 6306802049708

Option 4 ID : 6306802049709

Status : Answered

Chosen Option : 2

Q.22 Identify the figure given in the options which when put in place of ? will logically complete the series.

A	A ⊙	A ⊙ S	A ⊙ S T	?
---	-----	-------	------------	---

Ans

✗ 1.

A	⊙	S
		T
		T

✗ 2.

A	⊙	S
T		
R		

✗ 3.

A	⊙	S
		T
		S

✓ 4.

A	⊙	S
		T
		R

Question ID : 630680524406  
 Option 1 ID : 6306802049723  
 Option 2 ID : 6306802049726  
 Option 3 ID : 6306802049724  
 Option 4 ID : 6306802049725  
 Status : Answered  
 Chosen Option : 4

Q.23 Which of the following terms will replace the question mark (?) in the given series?  
 MJPT, PGMW, SDJZ, ?, YXDF

- Ans
- ✗ 1. WAGD
  - ✗ 2. VZFC
  - ✓ 3. VAGC
  - ✗ 4. VAGD

Question ID : 630680417057  
 Option 1 ID : 6306801626993  
 Option 2 ID : 6306801626991  
 Option 3 ID : 6306801626994  
 Option 4 ID : 6306801626992  
 Status : Answered  
 Chosen Option : 3

**Q.24** Select the option that represents the letters that when placed from left to right in the blanks below will complete the given letter series.  
L M N \_ O L L M \_ Q O L L \_ N Q O \_ L M N Q \_ L L M

Ans  1. QLMNO

2. QNMLLO

3. NQLMO

4. QMNLO

Question ID : 630680416267  
Option 1 ID : 6306801623834  
Option 2 ID : 6306801623832  
Option 3 ID : 6306801623833  
Option 4 ID : 6306801623831  
Status : Answered  
Chosen Option : 2

**Q.25** In a certain code language, 'TRIED' is coded as '54123' and 'TREAD' is coded as '12365'. What is the code for 'I' in the given code language?

Ans  1. 5

2. 1

3. 6

4. 4

Question ID : 630680797072  
Option 1 ID : 6306803123246  
Option 2 ID : 6306803123244  
Option 3 ID : 6306803123247  
Option 4 ID : 6306803123245  
Status : Answered  
Chosen Option : 4

Section : General Awareness

**Q.1** How was the growth in all food grains after the Green Revolution?

Ans  1. Unpredictable

2. Proportionate

3. Disproportionate

4. Unitary

Question ID : 630680410839  
Option 1 ID : 6306801602113  
Option 2 ID : 6306801602111  
Option 3 ID : 6306801602112  
Option 4 ID : 6306801602114  
Status : Not Answered  
Chosen Option : --

**Q.2 Which of the following is NOT a feature of the Constitution of India?**

- Ans**
- 1. Independent Judiciary
  - 2. Universal Adult Franchise
  - 3. Dual Citizenship
  - 4. Blend of rigidity & flexibility

Question ID : 630680329440  
Option 1 ID : 6306801281502  
Option 2 ID : 6306801281503  
Option 3 ID : 6306801281504  
Option 4 ID : 6306801281501  
Status : Answered  
Chosen Option : 3

**Q.3 Which of the following is an example of major industrial region of India?**

- Ans**
- 1. Bhojpur-Munger
  - 2. Chota Nagpur region
  - 3. Bilaspur-Korba
  - 4. Jaipur- Ajmer

Question ID : 630680327629  
Option 1 ID : 6306801274514  
Option 2 ID : 6306801274513  
Option 3 ID : 6306801274516  
Option 4 ID : 6306801274515  
Status : Answered  
Chosen Option : 4

**Q.4 What correctly defines change of inventories of a firm during a year?**

- Ans**
- 1. Sale of the firm during the year – Production of the firm during the year
  - 2. Production of the firm during the previous year – Sale of the firm during the year
  - 3. Production of the firm during the year – Sale of the firm during the year
  - 4. Production of the firm during the year – Sale of the firm during the previous year

Question ID : 630680127433  
Option 1 ID : 630680493995  
Option 2 ID : 630680493993  
Option 3 ID : 630680493992  
Option 4 ID : 630680493994  
Status : Not Answered  
Chosen Option : --

**Q.5 Chariot festival is dedicated to Lord Jagannath along with Subhadra and \_\_\_\_\_ .**

- Ans**
- 1. Hanuman
  - 2. Sudama
  - 3. Balabhadra
  - 4. Arjuna

Question ID : 630680160208  
Option 1 ID : 630680620206  
Option 2 ID : 630680620205  
Option 3 ID : 630680620204  
Option 4 ID : 630680620207  
Status : Answered  
Chosen Option : 3

Q.6 'Padayani', a local dance form primarily performed in \_\_\_\_\_ to please Goddess Bhadrakali.

- Ans  1. Kerala  
 2. Odisha  
 3. Assam  
 4. West Bengal

Question ID : 630680309152  
Option 1 ID : 6306801202787  
Option 2 ID : 6306801202788  
Option 3 ID : 6306801202786  
Option 4 ID : 6306801202785  
Status : Not Answered  
Chosen Option : --

Q.7 Which of the following rivers is an east flowing river?

- Ans  1. Godavari river  
 2. Narmada river  
 3. Mahi river  
 4. Tapi river

Question ID : 630680401704  
Option 1 ID : 6306801566590  
Option 2 ID : 6306801566593  
Option 3 ID : 6306801566591  
Option 4 ID : 6306801566592  
Status : Answered  
Chosen Option : 1

Q.8 Filtration of waste products in humans happens in the kidneys. There is a large number of filtration units present inside the kidneys to help them in doing this job. These filtration units are called:

- Ans  1. Bowman's capsules  
 2. alveoli  
 3. nephrons  
 4. capillaries

Question ID : 630680517184  
Option 1 ID : 6306802021134  
Option 2 ID : 6306802021132  
Option 3 ID : 6306802021135  
Option 4 ID : 6306802021133  
Status : Answered  
Chosen Option : 3

**Q.9** Which number is called Avogadro's constant, named after the 19<sup>th</sup> century scientist Amedeo Avogadro?

- Ans**
- 1.  $6.032 \times 10^{19}$
  - 2.  $6.012 \times 10^{21}$
  - 3.  $6.022 \times 10^{23}$
  - 4.  $6.020 \times 10^{20}$

Question ID : 630680302887  
Option 1 ID : 6306801178212  
Option 2 ID : 6306801178213  
Option 3 ID : 6306801178211  
Option 4 ID : 6306801178210  
Status : Answered  
Chosen Option : 3

**Q.10** The Epidemic Diseases (Amendment) Ordinance, 2020 amended which of the following Acts?

- Ans**
- 1. The Epidemic Diseases Act, 1890
  - 2. The Epidemic Diseases Act, 1892
  - 3. The Epidemic Diseases Act, 1895
  - 4. The Epidemic Diseases Act, 1897

Question ID : 630680139322  
Option 1 ID : 630680539362  
Option 2 ID : 630680539363  
Option 3 ID : 630680539365  
Option 4 ID : 630680539364  
Status : Not Answered  
Chosen Option : --

**Q.11** Which Indian political leader was called as Lok Nayak?

- Ans**
- 1. Ram Manohar Lohia
  - 2. Jai Prakash Narayan
  - 3. Subhash Chandra Bose
  - 4. Bal Gangadhar Tilak

Question ID : 630680511494  
Option 1 ID : 6306801999100  
Option 2 ID : 6306801999099  
Option 3 ID : 6306801999098  
Option 4 ID : 6306801999101  
Status : Answered  
Chosen Option : 2

**Q.12** Under the 'Mero Rukh Mero Santati' initiative launched by the Sikkim Chief Minister Prem Singh Tamang in 2023, how many trees will be planted for every child born in Sikkim ?

**Ans** ✓ 1. 100

✗ 2. 150

✗ 3. 200

✗ 4. 50

Question ID : 630680413081

Option 1 ID : 6306801611148

Option 2 ID : 6306801611149

Option 3 ID : 6306801611150

Option 4 ID : 6306801611147

Status : Not Answered

Chosen Option : --

**Q.13** Which of the following statements is correct with respect to the political parties in India?

**Ans** ✗ 1. All parties are registered with the Supreme Court of India.

✗ 2. A political party symbol is assigned by the President of India.

✓ 3. India has a multi-party system classified as national, state or regional level.

✗ 4. Status of party is accorded by the Parliament.

Question ID : 630680157584

Option 1 ID : 630680609866

Option 2 ID : 630680609867

Option 3 ID : 630680609864

Option 4 ID : 630680609865

Status : Answered

Chosen Option : 3

**Q.14** Which of the following kingdoms was divided into subdivisions called Aharas or Rashtras that meant districts?

**Ans** ✓ 1. Satavahana

✗ 2. Kushana

✗ 3. Parthian

✗ 4. Shaka

Question ID : 630680412515

Option 1 ID : 6306801608884

Option 2 ID : 6306801608883

Option 3 ID : 6306801608886

Option 4 ID : 6306801608885

Status : Not Answered

Chosen Option : --

**Q.15 Raja Bhalindra Singh trophy is associated with which of the following national sports events?**

- Ans**  1. National Games  
 2. Khelo India University Games  
 3. Khelo India Youth Games  
 4. Khelo India Winter Games

Question ID : 630680510810  
Option 1 ID : 6306801996370  
Option 2 ID : 6306801996373  
Option 3 ID : 6306801996371  
Option 4 ID : 6306801996372  
Status : Not Answered  
Chosen Option : --

**Q.16 The renowned ghazal singer Girija Devi was born in \_\_\_\_\_.**

- Ans**  1. Bihar  
 2. Punjab  
 3. Karnataka  
 4. Uttar Pradesh

Question ID : 630680164564  
Option 1 ID : 630680637375  
Option 2 ID : 630680637372  
Option 3 ID : 630680637374  
Option 4 ID : 630680637373  
Status : Answered  
Chosen Option : 4

**Q.17 Which Indian musician from Maharashtra received the Padma Vibhushan 2023?**

- Ans**  1. Zakir Hussain  
 2. Milind Date  
 3. Ramdas Palsule  
 4. Bharat Kamat

Question ID : 630680511791  
Option 1 ID : 6306802000136  
Option 2 ID : 6306802000135  
Option 3 ID : 6306802000137  
Option 4 ID : 6306802000134  
Status : Answered  
Chosen Option : 1

**Q.18 Which of the following is a landlocked Salt Lake in South-West Asia between Israel and Jordan?**

- Ans**  1. Don Juan Pond  
 2. Dead Sea  
 3. Caspian Sea  
 4. Aral Sea

Question ID : 630680144815  
Option 1 ID : 630680560303  
Option 2 ID : 630680560302  
Option 3 ID : 630680560305  
Option 4 ID : 630680560304  
Status : Answered  
Chosen Option : 2

**Q.19** The Daroga system in 1792 was introduced by whom among the following Governor-Generals in India?

- Ans  1. Lord Minto  
 2. Lord Cornwallis  
 3. Lord Mayo  
 4. Lord William Bentinck

Question ID : 630680412331  
Option 1 ID : 6306801608147  
Option 2 ID : 6306801608149  
Option 3 ID : 6306801608150  
Option 4 ID : 6306801608148  
Status : Answered  
Chosen Option : 2

**Q.20** Three Indians were featured in Time Magazine's list of '100 most influential people of 2021'. Whose name was NOT included in the list?

- Ans  1. Mamata Banerjee  
 2. Amitabh Bachchan  
 3. Narendra Modi  
 4. Adar Poonawalla

Question ID : 630680115310  
Option 1 ID : 630680446591  
Option 2 ID : 630680446593  
Option 3 ID : 630680446590  
Option 4 ID : 630680446592  
Status : Answered  
Chosen Option : 2

**Q.21** \_\_\_\_\_, authored by Tolkappiyar is the earliest Tamil literature.

- Ans  1. Narrinai  
 2. Tolkappiyam  
 3. Kalittogai  
 4. Ettutogai

Question ID : 630680412283  
Option 1 ID : 6306801607957  
Option 2 ID : 6306801607956  
Option 3 ID : 6306801607958  
Option 4 ID : 6306801607955  
Status : Answered  
Chosen Option : 2

**Q.22** Sports Authority of India comes under which ministry?

- Ans  1. Ministry of Youth Affairs and Sports  
 2. Ministry of Health and Family Welfare  
 3. Ministry of Education  
 4. Ministry of Social Justice

Question ID : 630680339375  
Option 1 ID : 6306801320070  
Option 2 ID : 6306801320071  
Option 3 ID : 6306801320072  
Option 4 ID : 6306801320069  
Status : Answered  
Chosen Option : 1

**Q.23** Which of the following statements are true based on the  $4\text{NH}_3(\text{g})+5\text{O}_2(\text{g})\rightarrow 4\text{NO}(\text{g})+6\text{H}_2\text{O}(\text{g})$ ?  
(a) N gets oxidized.  
(b) O gets oxidized.  
(c) N gets reduced.  
(d) O gets reduced.

- Ans  1. (c) and (d)  
 2. (b) and (c)  
 3. (a) and (d)  
 4. (a) and (b)

Question ID : 630680517158  
Option 1 ID : 6306802021030  
Option 2 ID : 6306802021031  
Option 3 ID : 6306802021028  
Option 4 ID : 6306802021029  
Status : Answered  
Chosen Option : 3

**Q.24** The Drought Prone Area Programme (DPAP) for providing employment to people in drought prone areas was started by the Government of India during the \_\_\_\_\_.

- Ans  1. Fourth Five-Year Plan  
 2. Seventh Five-Year Plan  
 3. Third Five-Year Plan  
 4. Sixth Five-Year Plan

Question ID : 630680409646  
Option 1 ID : 6306801597414  
Option 2 ID : 6306801597416  
Option 3 ID : 6306801597413  
Option 4 ID : 6306801597415  
Status : Answered  
Chosen Option : 4

**Q.25** Which branch of ecology deals with the characteristics of ancient environment and their relationship with ancient plants and animals?

- Ans  1. Demecology  
 2. Mycology  
 3. Ichthyology  
 4. Paleoecology

Question ID : 630680407456  
Option 1 ID : 6306801588762  
Option 2 ID : 6306801588764  
Option 3 ID : 6306801588763  
Option 4 ID : 6306801588765  
Status : Answered  
Chosen Option : 4

Q.1 From the given data, find the ratio of the cost prices of a shirt and a trouser.

Item	Selling Price	Profit
Shirt	₹1,200	20%
Trouser	₹660	10%

- Ans
- 1. 2 : 1
  - 2. 3 : 4
  - 3. 1 : 3
  - 4. 5 : 3

Question ID : 630680428090  
Option 1 ID : 6306801670405  
Option 2 ID : 6306801670407  
Option 3 ID : 6306801670404  
Option 4 ID : 6306801670406  
Status : Answered  
Chosen Option : 4

Q.2 Simplify.

$$\frac{(7.3)^3 - (4.7)^3}{(7.3)^2 + 7.3 \times 4.7 + (4.7)^2}$$

- Ans
- 1. 3.2
  - 2. 2.6
  - 3. 11
  - 4. 12

Question ID : 630680413476  
Option 1 ID : 6306801612729  
Option 2 ID : 6306801612731  
Option 3 ID : 6306801612728  
Option 4 ID : 6306801612730  
Status : Answered  
Chosen Option : 2

Q.3 After offering two successive discounts a toy with a marked price of ₹150 is sold at ₹105. If the value of the first discount is 12.5%, what is the value of the second discount?

- Ans
- 1. 18%
  - 2. 20%
  - 3. 21%
  - 4. 22%

Question ID : 630680218766  
Option 1 ID : 630680848971  
Option 2 ID : 630680848972  
Option 3 ID : 630680848973  
Option 4 ID : 630680848974  
Status : Answered  
Chosen Option : 2

Q.4

If  $x + \frac{1}{x} = 2$ , then find the value of  $\left(x^{2723} + \frac{1}{x^{2256}}\right)$ .

- Ans
- 1. -1
  - 2. 1
  - 3. 0
  - 4. 2

Question ID : 630680413474  
Option 1 ID : 6306801612723  
Option 2 ID : 6306801612721  
Option 3 ID : 6306801612722  
Option 4 ID : 6306801612720  
Status : Answered  
Chosen Option : 4

Q.5

Find the value of  $\frac{\tan 55^\circ}{\cot 35^\circ}$ .

- Ans
- 1. 1
  - 2.  $\sec 55^\circ$
  - 3. 0
  - 4.  $\cos 35^\circ$

Question ID : 630680402545  
Option 1 ID : 6306801569751  
Option 2 ID : 6306801569753  
Option 3 ID : 6306801569752  
Option 4 ID : 6306801569754  
Status : Answered  
Chosen Option : 1

Q.6 In a  $\triangle PQR$ ,  $PQ = PR$  and  $PT$  is perpendicular to  $QR$ . If  $PQ = 17$  cm,  $PT = 15$  cm, then what is the measure (in cm) of  $QR$ ?

- Ans
- 1. 8
  - 2. 32
  - 3. 24
  - 4. 16

Question ID : 630680526542  
Option 1 ID : 6306802058234  
Option 2 ID : 6306802058237  
Option 3 ID : 6306802058236  
Option 4 ID : 6306802058235  
Status : Answered  
Chosen Option : 4

Q.7 If arcs PAQ and RBS of a circle are congruent, then find the ratio of PQ and RS.

Ans  1. 1 : 3

2. 2 : 3

3. 1 : 1

4. 1 : 2

Question ID : 630680198933  
Option 1 ID : 630680771462  
Option 2 ID : 630680771461  
Option 3 ID : 630680771459  
Option 4 ID : 630680771460  
Status : Answered  
Chosen Option : 3

Q.8 Simplify.  $\frac{\sin A}{1 + \cos A} + \cot A$ , where A is an acute angle.

Ans  1.  $\sin A + \cos A$

2.  $\cos A$

3.  $\sin A$

4.  $\operatorname{cosec} A$

Question ID : 630680151962  
Option 1 ID : 630680587895  
Option 2 ID : 630680587893  
Option 3 ID : 630680587894  
Option 4 ID : 630680587892  
Status : Answered  
Chosen Option : 4

Q.9 Refer the below table and answer the question that follows.

Discipline	Boys	Girls
Engineering	120	80
Medical	80	120

What percentage of students who chose medical are boys?

Ans  1. 40%

2. 50%

3. 45%

4. 30%

Question ID : 630680428111  
Option 1 ID : 6306801670489  
Option 2 ID : 6306801670488  
Option 3 ID : 6306801670490  
Option 4 ID : 6306801670491  
Status : Answered  
Chosen Option : 1

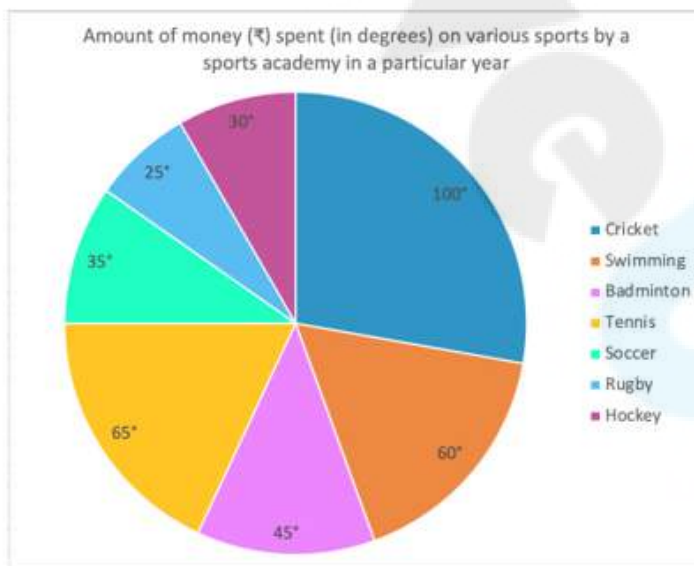
Q.10 Which of the following fractions is the largest?

$$\frac{2}{3}, \frac{6}{53}, \frac{79}{90}, \frac{33}{44}$$

- Ans
- ✓ 1.  $\frac{79}{90}$
  - ✗ 2.  $\frac{2}{3}$
  - ✗ 3.  $\frac{33}{44}$
  - ✗ 4.  $\frac{6}{53}$

Question ID : 630680797476  
Option 1 ID : 6306803124860  
Option 2 ID : 6306803124861  
Option 3 ID : 6306803124863  
Option 4 ID : 6306803124862  
Status : Answered  
Chosen Option : 1

Q.11 The given pie chart shows the amount of money (₹) spent (in degrees) on various sports by a sports academy in a particular year. Study the pie chart and answer the question that follows.



If ₹42,000 were spent on Soccer, then the money spent on Badminton, Tennis and Rugby taken together is what percentage (rounded off to 2 decimal places) more/less than the money spent on Cricket, Swimming and Hockey taken together?

- Ans
- ✓ 1. Less, 28.95%
  - ✗ 2. Less, 34.87%
  - ✗ 3. More, 34.87%
  - ✗ 4. More, 28.95%

Question ID : 630680387064  
Option 1 ID : 6306801508968  
Option 2 ID : 6306801508966  
Option 3 ID : 6306801508967  
Option 4 ID : 6306801508969  
Status : Answered  
Chosen Option : 1

Q.12 In a circular race of 4800m, A and B start from the same point and at the same time with speeds of 36 km/h and 54 km/h. When will they meet again for the first time on the track if they are running in the opposite direction?

- Ans
- 1. 200 second
  - 2. 205 second
  - 3. 192 second
  - 4. 178 second

Question ID : 630680138472  
Option 1 ID : 630680536080  
Option 2 ID : 630680536081  
Option 3 ID : 630680536079  
Option 4 ID : 630680536078  
Status : Answered  
Chosen Option : 3

Q.13 Pipes A and B can fill a tank in 6 hours and 8 hours, respectively. Both pipes are opened together for 3 hours. After that pipe A is closed, and B continues to fill the tank. In how many hours will the tank be filled?

- Ans
- 1. 4
  - 2. 3
  - 3. 6
  - 4. 2

Question ID : 630680477703  
Option 1 ID : 6306801865960  
Option 2 ID : 6306801865961  
Option 3 ID : 6306801865963  
Option 4 ID : 6306801865962  
Status : Answered  
Chosen Option : 1

Q.14 Find the area (in  $\text{cm}^2$ ) of an equilateral triangle whose sides are 18 cm.

- Ans
- 1.  $77\sqrt{3}$
  - 2.  $75\sqrt{3}$
  - 3.  $79\sqrt{3}$
  - 4.  $81\sqrt{3}$

Question ID : 630680421434  
Option 1 ID : 6306801644200  
Option 2 ID : 6306801644199  
Option 3 ID : 6306801644201  
Option 4 ID : 6306801644202  
Status : Answered  
Chosen Option : 4

Q.15 Find the remainder, if  $19^{200}$  is divided by 20.

- Ans
- 1. 3
  - 2. 1
  - 3. -1
  - 4. 2

Question ID : 630680116279  
Option 1 ID : 630680450434  
Option 2 ID : 630680450435  
Option 3 ID : 630680450436  
Option 4 ID : 630680450437  
Status : Answered  
Chosen Option : 2

Q.16 The mean proportional of  $4a^2$  and  $x$  is  $\frac{1}{5a}$ , where  $a$  is a positive number, then the value of  $x$  is \_\_\_\_\_.

- Ans
- 1.  $\frac{1}{100a^2}$
  - 2.  $\frac{1}{25a^4}$
  - 3.  $\frac{1}{25a^2}$
  - 4.  $\frac{1}{100a^4}$

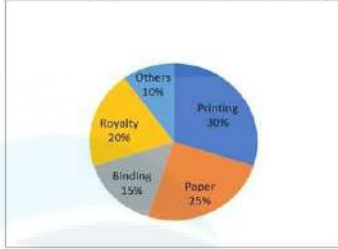
Question ID : 630680428707  
Option 1 ID : 6306801672874  
Option 2 ID : 6306801672873  
Option 3 ID : 6306801672875  
Option 4 ID : 6306801672872  
Status : Answered  
Chosen Option : 4

Q.17 In an election between two candidates, the one who gets 88% of the votes is elected by a majority of 684 votes. What is the total number of votes polled? (all polled votes are valid)

- Ans
- 1. 850
  - 2. 900
  - 3. 800
  - 4. 750

Question ID : 630680428068  
Option 1 ID : 6306801670318  
Option 2 ID : 6306801670319  
Option 3 ID : 6306801670317  
Option 4 ID : 6306801670316  
Status : Answered  
Chosen Option : 2

**Q.18** The following pie chart below shows the expenditure in book publishing by a publisher under various heads.



Given that marked price of a book is ₹270, what is the cost of paper to publish a single copy of the book if the marked price of a book is 20% more than its cost price?

- Ans** ✓ 1. ₹56.25  
✗ 2. ₹58.45  
✗ 3. ₹68.75  
✗ 4. ₹62.15

Question ID : 630680428166  
Option 1 ID : 6306801670710  
Option 2 ID : 6306801670711  
Option 3 ID : 6306801670709  
Option 4 ID : 6306801670708  
Status : Answered  
Chosen Option : 1

**Q.19** The average weight of 10 students is increased by half a kg when one of the students weighing 51 kg is replaced by a new student. Find the weight of the new student.

- Ans** ✗ 1. 45 kg  
✓ 2. 56 kg  
✗ 3. 66 kg  
✗ 4. 75 kg

Question ID : 630680397048  
Option 1 ID : 6306801548251  
Option 2 ID : 6306801548250  
Option 3 ID : 6306801548248  
Option 4 ID : 6306801548249  
Status : Answered  
Chosen Option : 2

**Q.20** A total of ₹2,00,000 is divided into two parts for investing in different banks on simple interest. One yields 4% p.a. while the other yields 6% p.a. If the total interest at the end of one year is equivalent to 4.7% p.a. on the whole amount, the amount (in ₹) invested in each bank is \_\_\_\_\_, respectively.

- Ans** ✓ 1. 1,30,000 and 70,000  
✗ 2. 1,20,000 and 80,000  
✗ 3. 1,45,000 and 55,000  
✗ 4. 1,60,000 and 40,000

Question ID : 630680392930  
Option 1 ID : 6306801532058  
Option 2 ID : 6306801532060  
Option 3 ID : 6306801532061  
Option 4 ID : 6306801532059  
Status : Answered  
Chosen Option : 1

Q.21 If  $\tan \theta = \frac{8}{15}$ , and  $\theta$  is an acute angle, then the value of  $\frac{\sqrt{1 - \sin \theta}}{\sqrt{1 + \sin \theta}}$  is:

- Ans
- 1.  $\frac{4}{5}$
  - 2.  $\frac{2}{5}$
  - 3.  $\frac{1}{5}$
  - 4.  $\frac{3}{5}$

Question ID : 630680526476  
Option 1 ID : 6306802057972  
Option 2 ID : 6306802057971  
Option 3 ID : 6306802057970  
Option 4 ID : 6306802057973  
Status : Answered  
Chosen Option : 4

Q.22 The present ages (in years) of A and B are in the ratio of 3 : 4. Five years back, the ratio of their ages was 2 : 3. What is the present age (in years) of A?

- Ans
- 1. 28
  - 2. 21
  - 3. 15
  - 4. 20

Question ID : 630680295359  
Option 1 ID : 6306801149163  
Option 2 ID : 6306801149162  
Option 3 ID : 6306801149160  
Option 4 ID : 6306801149161  
Status : Answered  
Chosen Option : 3

Q.23 The radius of the base of a right circular cone is 9 cm and its slant height is 49 cm. Find the curved surface area of the cone.

- Ans
- 1.  $1490 \text{ cm}^2$
  - 2.  $1265 \text{ cm}^2$
  - 3.  $1386 \text{ cm}^2$
  - 4.  $1262 \text{ cm}^2$

Question ID : 630680102085  
Option 1 ID : 630680396698  
Option 2 ID : 630680396696  
Option 3 ID : 630680396697  
Option 4 ID : 630680396699  
Status : Answered  
Chosen Option : 3

Q. Find the gain percentage, given that Siddhi sold her scooter for ₹ 71785 gaining  $\frac{1}{5}$ th of the selling price.

2  
4  
A  
n  
s

1. 20%

2. 15%

3. 10%

4. 25%

Question ID : 630680922763

Option 1 ID : 6306803615899

Option 2 ID : 6306803615901

Option 3 ID : 6306803615900

Option 4 ID : 6306803615898

Status : Answered

Chosen Option : 4

Q.25 On a circle of radius 7 units, PQ and QR are chords of length 7 units each. What is the length of the chord PR in units?

Ans

1.  $\frac{28}{\sqrt{3}}$

2.  $\frac{14}{\sqrt{3}}$

3.  $\frac{21}{\sqrt{3}}$

4.  $\frac{7}{\sqrt{3}}$

Question ID : 630680297303

Option 1 ID : 6306801156682

Option 2 ID : 6306801156679

Option 3 ID : 6306801156681

Option 4 ID : 6306801156680

Status : Not Answered

Chosen Option : --

Section : English Comprehension

Q.1 Select the most appropriate meaning of the given group of words.

On cloud nine

Ans  1. Being very delighted

2. Flying in the sky

3. Being angry with someone

4. Being very high

Question ID : 630680317354

Option 1 ID : 6306801234533

Option 2 ID : 6306801234534

Option 3 ID : 6306801234536

Option 4 ID : 6306801234535

Status : Answered

Chosen Option : 1

**Q.2** Parts of a sentence are given below in jumbled order. Arrange the parts in the correct order to form a meaningful sentence.

- A. So I am not very sure
- B. I have a driving license
- C. Of myself reaching home safely
- D. But no real driving experience

Ans  1. BDAC

2. BCAD

3. CABD

4. BDCA

Question ID : 630680166069  
Option 1 ID : 630680643249  
Option 2 ID : 630680643250  
Option 3 ID : 630680643251  
Option 4 ID : 630680643248  
Status : Answered  
Chosen Option : 1

**Q.3** Select the option that can substitute/replace the bracketed word correctly and complete the sentence.

He (seek) for the wallet in his pocket.

Ans  1. Are seeking

2. Sought

3. Seeking

4. Had seeking

Question ID : 630680176847  
Option 1 ID : 630680685595  
Option 2 ID : 630680685592  
Option 3 ID : 630680685593  
Option 4 ID : 630680685594  
Status : Answered  
Chosen Option : 2

**Q.4** Select the most appropriate meaning of the given group of words.

A bitter pill

Ans  1. Talking nonsense

2. Getting furious easily

3. Facing a distressing situation

4. Arguing unnecessarily

Question ID : 630680317356  
Option 1 ID : 6306801234542  
Option 2 ID : 6306801234541  
Option 3 ID : 6306801234543  
Option 4 ID : 6306801234544  
Status : Answered  
Chosen Option : 3

**Q.5** Parts of a sentence are given below in jumbled order. Select the option that arranges the parts in the correct sequence to form a meaningful sentence.  
(P) dreams provide an escape  
(Q) where reality is suspended  
(R) into a world  
(O) of endless possibilities

- Ans
- 1. QORP
  - 2. OPQR
  - 3. PROQ
  - 4. RPOQ

Question ID : 630680380980  
Option 1 ID : 6306801484908  
Option 2 ID : 6306801484910  
Option 3 ID : 6306801484907  
Option 4 ID : 6306801484909  
Status : Answered  
Chosen Option : 3

**Q.6** Select the option that expresses the given sentence in passive voice.  
Can you compose an inspiring poem?

- Ans
- 1. Can an inspiring poem by you composed?
  - 2. Can an inspiring poem be composed?
  - 3. An inspiring poem can be composed by you.
  - 4. Can an inspiring poem be composed by you?

Question ID : 630680192070  
Option 1 ID : 630680744882  
Option 2 ID : 630680744881  
Option 3 ID : 630680744883  
Option 4 ID : 630680744884  
Status : Answered  
Chosen Option : 4

**Q.7** Select the most appropriate option to substitute the underlined segment in the given sentence.

Rohan exercised and ate a lot, lest he should not be weak .

- Ans
- 1. lest he should be weak
  - 2. lest he should not weak
  - 3. lest he would be weak
  - 4. lest he would not be weak.

Question ID : 630680176627  
Option 1 ID : 630680684729  
Option 2 ID : 630680684728  
Option 3 ID : 630680684730  
Option 4 ID : 630680684731  
Status : Answered  
Chosen Option : 1

**Q.8** Select the correctly spelt word to fill in the blank.

Calder Hall is a nuclear power station in England which is known as the first nuclear power station to generate electricity for \_\_\_\_\_ purposes.

- Ans
- 1. comercial
  - 2. comercaill
  - 3. commerceil
  - 4. commercial

Question ID : 630680374786  
Option 1 ID : 6306801460312  
Option 2 ID : 6306801460313  
Option 3 ID : 6306801460314  
Option 4 ID : 6306801460311  
Status : Answered  
Chosen Option : 4

**Q.9** Select the correct spelling to fill in the blank.

When numerous ideas are presented in a historical context, more than mere \_\_\_\_\_ can be seen.

- Ans
- 1. parollelism
  - 2. paralialism
  - 3. paralelism
  - 4. parallelism

Question ID : 630680409977  
Option 1 ID : 6306801598738  
Option 2 ID : 6306801598737  
Option 3 ID : 6306801598740  
Option 4 ID : 6306801598739  
Status : Answered  
Chosen Option : 4

**Q.10** The following sentence has been split into segments. Identify the segment that contains an error. If you don't find any error, mark 'No error' as your answer.  
People admired him, for / he lived by the same principals / that he preached.

- Ans
- 1. he lived by the same principals
  - 2. People admired him, for
  - 3. that he preached
  - 4. No error

Question ID : 630680295984  
Option 1 ID : 6306801151649  
Option 2 ID : 6306801151648  
Option 3 ID : 6306801151650  
Option 4 ID : 6306801151651  
Status : Answered  
Chosen Option : 1

**Q.11** Select the option that expresses the given sentence in passive voice.  
The tutor was not teaching the student.

- Ans**
- 1. The student was not taught by the tutor.
  - 2. The student was teaching the tutor.
  - 3. The student was not being teaching by the tutor.
  - 4. The student was not being taught by the tutor.

Question ID : 630680192069  
Option 1 ID : 630680744877  
Option 2 ID : 630680744880  
Option 3 ID : 630680744879  
Option 4 ID : 630680744878  
Status : Answered  
Chosen Option : 4

**Q.12** Select the most appropriate ANTONYM for the underlined word in the given sentence.  
Despite his annoyance, Rahul knew that rushing the delicate process would only lead to mistakes.

- Ans**
- 1. Absurdity
  - 2. Susceptibility
  - 3. Serenity
  - 4. Gnawer

Question ID : 630680517480  
Option 1 ID : 6306802022319  
Option 2 ID : 6306802022316  
Option 3 ID : 6306802022317  
Option 4 ID : 6306802022318  
Status : Answered  
Chosen Option : 3

**Q.13** Select the most appropriate synonym of the given word.  
Tendency

- Ans**
- 1. Distaste
  - 2. Proneness
  - 3. Decoy
  - 4. Aversion

Question ID : 630680300701  
Option 1 ID : 6306801169619  
Option 2 ID : 6306801169620  
Option 3 ID : 6306801169621  
Option 4 ID : 6306801169622  
Status : Answered  
Chosen Option : 2

**Q.14** Select the most appropriate option that can substitute the underlined word in the given sentence.

Bankrupts are those who are incapable to pay their debts.

- Ans  1. capable  
 2. incompetent  
 3. powerful  
 4. meagre

Question ID : 630680161534  
Option 1 ID : 630680625464  
Option 2 ID : 630680625465  
Option 3 ID : 630680625466  
Option 4 ID : 630680625467  
Status : Answered  
Chosen Option : 2

**Q.15** Select the most appropriate synonym of the given word.  
Condone

- Ans  1. Pardon  
 2. Penalty  
 3. Solace  
 4. Solicitude

Question ID : 630680177544  
Option 1 ID : 630680688338  
Option 2 ID : 630680688339  
Option 3 ID : 630680688336  
Option 4 ID : 630680688337  
Status : Answered  
Chosen Option : 1

**Q.16** Select the most appropriate meaning of the given word.  
Pugnacious

- Ans  1. Impatient  
 2. Waspish  
 3. Good-tempered  
 4. Arrogant

Question ID : 630680132473  
Option 1 ID : 630680513029  
Option 2 ID : 630680513027  
Option 3 ID : 630680513028  
Option 4 ID : 630680513026  
Status : Answered  
Chosen Option : 2

Q.17 Select the most appropriate synonym of the given word.

Kilter

- Ans
- 1. Anarchy
  - 2. Shambles
  - 3. Order
  - 4. Disrepair

Question ID : 630680209306  
Option 1 ID : 630680811442  
Option 2 ID : 630680811439  
Option 3 ID : 630680811441  
Option 4 ID : 630680811440  
Status : Not Answered  
Chosen Option : --

Q.18 Select the most appropriate option that means the same as the underlined group of words to fill in the blank.

Most of the rivers dry up during the summer season, but the Ganga is full of water round the year because it is \_\_\_\_\_.

- Ans
- 1. biennial
  - 2. annual
  - 3. perennial
  - 4. biannual

Question ID : 630680414593  
Option 1 ID : 6306801617124  
Option 2 ID : 6306801617123  
Option 3 ID : 6306801617125  
Option 4 ID : 6306801617126  
Status : Answered  
Chosen Option : 3

Q.19 The given sentence is divided into four segments. Select the option that has the segment with a grammatical error.

We were on the way/ to the party;/ suddenly, there/ will a heavy downpour.

- Ans
- 1. suddenly, there
  - 2. will a heavy downpour.
  - 3. We were on the way
  - 4. to the party;

Question ID : 630680206613  
Option 1 ID : 630680801053  
Option 2 ID : 630680801054  
Option 3 ID : 630680801051  
Option 4 ID : 630680801052  
Status : Answered  
Chosen Option : 2

**Q.20** Select the most appropriate **ANTONYM** of the given word.

**Dogmatic**

**Ans**  1. Conservative

2. Liberal

3. Diplomatic

4. Concerned

Question ID : 630680360823

Option 1 ID : 6306801405165

Option 2 ID : 6306801405168

Option 3 ID : 6306801405167

Option 4 ID : 6306801405166

Status : Answered

Chosen Option : 4

**Comprehension:**

In the following passage, some words have been deleted. Read the passage carefully and select the most appropriate option to fill in each blank.

This Diwali is more significant because we are going to celebrate it after three years, without the evil shadow of Covid-19 that (1)\_\_\_\_\_ looming over all festivities. The lockdowns and endless bad news of death and (2)\_\_\_\_\_ had turned our country into a zone of gloom.

But, this season of Diwali (3)\_\_\_\_\_ all the sorrows of people by lighting the candle of hope in their lives. We can see the lights, the candles, the lanterns, and the busy people coming out of their houses and purchasing toys for their children. Let's (4)\_\_\_\_\_ those people who have made such a huge contribution to (5)\_\_\_\_\_ good thoughts and saving people's lives.

**SubQuestion No : 21**

**Q.21** Select the most appropriate option to fill in blank number 1.

**Ans**  1. were

2. are

3. is

4. was

Question ID : 630680164743

Option 1 ID : 630680638062

Option 2 ID : 630680638063

Option 3 ID : 630680638061

Option 4 ID : 630680638060

Status : Answered

Chosen Option : 4

**Comprehension:**

In the following passage, some words have been deleted. Read the passage carefully and select the most appropriate option to fill in each blank.

This Diwali is more significant because we are going to celebrate it after three years, without the evil shadow of Covid-19 that (1)\_\_\_\_\_ looming over all festivities. The lockdowns and endless bad news of death and (2)\_\_\_\_\_ had turned our country into a zone of gloom. But, this season of Diwali (3)\_\_\_\_\_ all the sorrows of people by lighting the candle of hope in their lives. We can see the lights, the candles, the lanterns, and the busy people coming out of their houses and purchasing toys for their children. Let's (4)\_\_\_\_\_ those people who have made such a huge contribution to (5)\_\_\_\_\_ good thoughts and saving people's lives.

**SubQuestion No : 22**

**Q.22 Select the most appropriate option to fill in blank number 2.**

- Ans**
- 1. new birth
  - 2. demonetisation
  - 3. economic boom
  - 4. disease

Question ID : 630680164744

Option 1 ID : 630680638066

Option 2 ID : 630680638067

Option 3 ID : 630680638064

Option 4 ID : 630680638065

Status : Answered

Chosen Option : 4

**Comprehension:**

In the following passage, some words have been deleted. Read the passage carefully and select the most appropriate option to fill in each blank.

This Diwali is more significant because we are going to celebrate it after three years, without the evil shadow of Covid-19 that (1)\_\_\_\_\_ looming over all festivities. The lockdowns and endless bad news of death and (2)\_\_\_\_\_ had turned our country into a zone of gloom. But, this season of Diwali (3)\_\_\_\_\_ all the sorrows of people by lighting the candle of hope in their lives. We can see the lights, the candles, the lanterns, and the busy people coming out of their houses and purchasing toys for their children. Let's (4)\_\_\_\_\_ those people who have made such a huge contribution to (5)\_\_\_\_\_ good thoughts and saving people's lives.

**SubQuestion No : 23**

**Q.23 Select the most appropriate option to fill in blank number 3.**

- Ans**
- 1. has hovered
  - 2. has adopted
  - 3. had recognised
  - 4. has shed

Question ID : 630680164745

Option 1 ID : 630680638071

Option 2 ID : 630680638069

Option 3 ID : 630680638068

Option 4 ID : 630680638070

Status : Answered

Chosen Option : 1

**Comprehension:**

In the following passage, some words have been deleted. Read the passage carefully and select the most appropriate option to fill in each blank.

This Diwali is more significant because we are going to celebrate it after three years, without the evil shadow of Covid-19 that (1)\_\_\_\_\_ looming over all festivities. The lockdowns and endless bad news of death and (2)\_\_\_\_\_ had turned our country into a zone of gloom. But, this season of Diwali (3)\_\_\_\_\_ all the sorrows of people by lighting the candle of hope in their lives. We can see the lights, the candles, the lanterns, and the busy people coming out of their houses and purchasing toys for their children. Let's (4)\_\_\_\_\_ those people who have made such a huge contribution to (5)\_\_\_\_\_ good thoughts and saving people's lives.

**SubQuestion No : 24**

**Q.24** Select the most appropriate option to fill in blank number 4.

**Ans**  1. onerous

2. terminate

3. salute

4. berate

Question ID : 630680164746

Option 1 ID : 630680638072

Option 2 ID : 630680638074

Option 3 ID : 630680638075

Option 4 ID : 630680638073

Status : Answered

Chosen Option : 3

**Comprehension:**

In the following passage, some words have been deleted. Read the passage carefully and select the most appropriate option to fill in each blank.

This Diwali is more significant because we are going to celebrate it after three years, without the evil shadow of Covid-19 that (1)\_\_\_\_\_ looming over all festivities. The lockdowns and endless bad news of death and (2)\_\_\_\_\_ had turned our country into a zone of gloom. But, this season of Diwali (3)\_\_\_\_\_ all the sorrows of people by lighting the candle of hope in their lives. We can see the lights, the candles, the lanterns, and the busy people coming out of their houses and purchasing toys for their children. Let's (4)\_\_\_\_\_ those people who have made such a huge contribution to (5)\_\_\_\_\_ good thoughts and saving people's lives.

**SubQuestion No : 25**

**Q.25** Select the most appropriate option to fill in blank number 5.

**Ans**  1. stagnating

2. implicating

3. impeding

4. spreading

Question ID : 630680164747

Option 1 ID : 630680638078

Option 2 ID : 630680638077

Option 3 ID : 630680638076

Option 4 ID : 630680638079

Status : Answered

Chosen Option : 4