

Combined Graduate Level Examination 2024 Tier I

Roll Number	
Candidate Name	
Venue Name	
Exam Date	19/09/2024
Exam Time	12:30 PM - 1:30 PM
Subject	Combined Graduate Level Examination Tier I

Section : General Intelligence and Reasoning

Q.1 In a certain code,

'it is raining' is coded as 'dy po ko',
'is raining now' is coded as 'po jo ko' and
'is now it' is coded as 'po jo dy'.

(All the codes are two-letter codes only.)

What is the code for 'raining'?

- Ans
- 1. ko
 - 2. dy
 - 3. jo
 - 4. po

Question ID : 630680797067
Option 1 ID : 6306803123224
Option 2 ID : 6306803123225
Option 3 ID : 6306803123227
Option 4 ID : 6306803123226
Status : Answered
Chosen Option : 1

Q.2 Select the number from among the given options that can replace the question mark (?) in the following series.
625, 382, 301, 274, 265, ?

- Ans
- 1. 258
 - 2. 262
 - 3. 248
 - 4. 260

Question ID : 630680411903
Option 1 ID : 6306801606448
Option 2 ID : 6306801606449
Option 3 ID : 6306801606450
Option 4 ID : 6306801606447
Status : Answered
Chosen Option : 2

Q.3 Select the figure from among the given option that can replace the question mark (?) in the following series.

	6		C		1		2	
2	=	1	M	6	P	P	M	6
P	C	M	1	=	2	=	2	C
								6
								M
								P
								?

Ans

✗ 1.

			C
1	=	2	
P	6	M	

✗ 2.

			P
=	C	1	
2	6	M	

✗ 3.

			6
M	=	1	
P	C	2	

✓ 4.

			6
=	C	1	
M	P	2	

Question ID : 630680283524

Option 1 ID : 6306801102217

Option 2 ID : 6306801102218


Option 3 ID : 6306801102216

Option 4 ID : 6306801102215

Status : Answered

Chosen Option : 4

Q.4 Six letters X, T, S, M, R and O are written on different faces of a dice. Two positions of this dice are shown in the figures below. Find the letter on the face opposite to R.



Ans ✓ 1. S

✗ 2. M

✗ 3. O

✗ 4. T

Question ID : 630680222370

Option 1 ID : 630680863311

Option 2 ID : 630680863314

Option 3 ID : 630680863313

Option 4 ID : 630680863312

Status : Answered

Chosen Option : 1

Q.5 In this question, three statements are given, followed by two conclusions numbered I and II. Assuming the statements to be true, even if they seem to be at variance with commonly known facts, decide which of the conclusion(s) logically follows/follow from the statements.

Statements:

All teachers are dancers.

All dancers are engineers.

Some engineers are beautiful.

Conclusions:

I. All teachers are beautiful.

II. Some dancers are beautiful.

Ans ✓ 1. Neither conclusion I nor II follows.

✗ 2. Only conclusion II follows.

✗ 3. Both conclusions I and II follow.

✗ 4. Only conclusion I follows.

Question ID : 630680416137

Option 1 ID : 6306801623314

Option 2 ID : 6306801623312

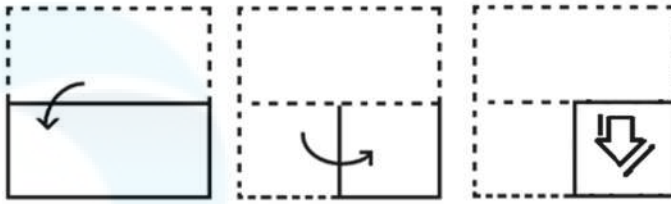
Option 3 ID : 6306801623313

Option 4 ID : 6306801623311


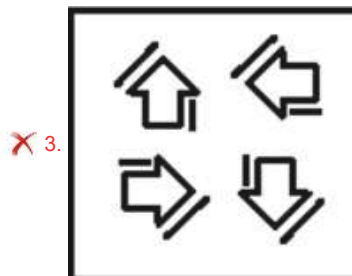

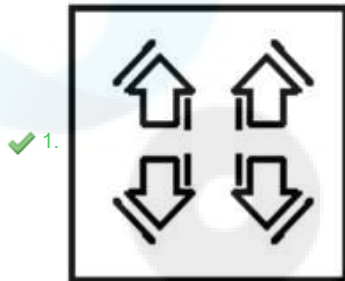
Status : Answered

Chosen Option : 1

Q.6 The sequence of folding a piece of paper and the manner in which the folded paper has been cut is shown in the following figures. How would this paper look when unfolded?



Ans



Question ID : 630680105031

Option 1 ID : 630680408238

Option 2 ID : 630680408237

Option 3 ID : 630680408235

Option 4 ID : 630680408236

Status : Answered

Chosen Option : 1

Q.7 A cube is constructed by folding the given sheet along the lines shown. In the cube so formed, what would be the word on the opposite side of 'Ball'?



- Ans
- 1. Bat
 - 2. Stick
 - 3. Goal
 - 4. Field

Question ID : 630680318342
 Option 1 ID : 6306801238445
 Option 2 ID : 6306801238446
 Option 3 ID : 6306801238448
 Option 4 ID : 6306801238447
 Status : Answered
 Chosen Option : 4

Q.8 13 is related to 119 following a certain logic. Following the same logic, 9 is related to 31. To which of the following is 8 related, following the same logic?
 (NOTE : Operations should be performed on the whole numbers, without breaking down the numbers into its constituent digits. E.g. 13 – Operations on 13 such as adding /deleting /multiplying etc., to 13 can be performed. Breaking down 13 into 1 and 3 and then performing mathematical operations on 1 and 3 is not allowed.)

- Ans
- 1. 14
 - 2. 27
 - 3. 24
 - 4. 10

Question ID : 630680344259
 Option 1 ID : 6306801339351
 Option 2 ID : 6306801339352
 Option 3 ID : 6306801339350
 Option 4 ID : 6306801339349
 Status : Answered
 Chosen Option : 1

Q.9 Select the correct combination of mathematical signs to sequentially place from left to right in the blanks below to balance the given equation.
 $8_27_9_6_5 = 0$

- Ans
- 1. -, +, +, +
 - 2. +, +, -, +
 - 3. +, +, -, -
 - 4. -, +, +, +

Question ID : 630680411780
 Option 1 ID : 6306801605957
 Option 2 ID : 6306801605956
 Option 3 ID : 6306801605955
 Option 4 ID : 6306801605958
 Status : Answered
 Chosen Option : 3

Q.10 Which of the following terms will replace the question mark (?) in the given series?
ABNI, DAQH, ?, JYWF

- Ans 1. CAYG
 2. TGZG
 3. GZTG
 4. GTZG

Question ID : 630680416958
Option 1 ID : 6306801626598
Option 2 ID : 6306801626597
Option 3 ID : 6306801626595
Option 4 ID : 6306801626596
Status : Answered
Chosen Option : 3

Q.11 What will come in place of the question mark (?) in the following equation if '+' and 'x' are interchanged and '-' and '÷' are interchanged?

$$16 - 2 \times 42 + 13 \div 12 = ?$$

- Ans 1. 560
 2. 542
 3. 950
 4. 762

Question ID : 630680327810
Option 1 ID : 6306801275209
Option 2 ID : 6306801275210
Option 3 ID : 6306801275212
Option 4 ID : 6306801275211
Status : Answered
Chosen Option : 2

Q.12 In a certain code language, 'MAIN' is written as 'OHBL' and 'MAIL' is written as 'MHBL'.
How will 'MANY' be written in that language?

- Ans 1. ZBLM
 2. ZMLB
 3. ZMBL
 4. ZLMB

Question ID : 630680416250
Option 1 ID : 6306801623766
Option 2 ID : 6306801623763
Option 3 ID : 6306801623764
Option 4 ID : 6306801623765
Status : Answered
Chosen Option : 3

Q.13 Four letter-clusters have been given, out of which three are alike in some manner and one is different. Select the one that is different.

Note : The odd one out is not based on the number of consonants/vowels or their position in the letter cluster

- Ans**
- 1. LKM
 - 2. HGI
 - 3. TSU
 - 4. XYW

Question ID : 63068062110
Option 1 ID : 630680239758
Option 2 ID : 630680239760
Option 3 ID : 630680239759
Option 4 ID : 630680239761
Status : Answered
Chosen Option : 4

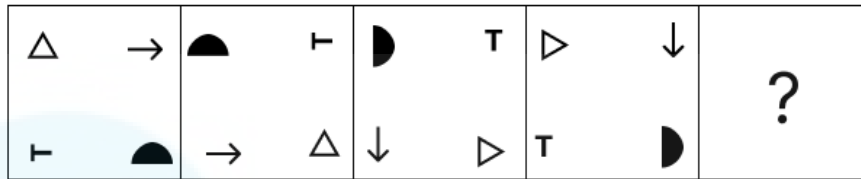
Q.14 Select the word-pair that best represents a similar relationship to the one expressed in the pair of words given below.
(The words must be considered as meaningful English words and must NOT be related to each other based on the number of letters/number of consonants/vowels in the word)

New Zealand : Wellington

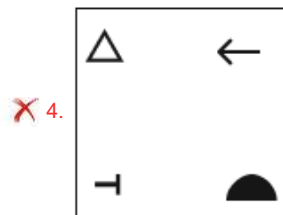
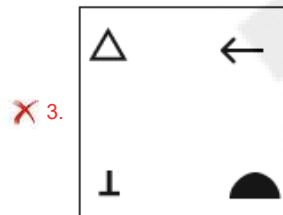
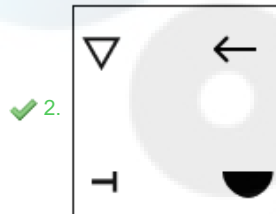
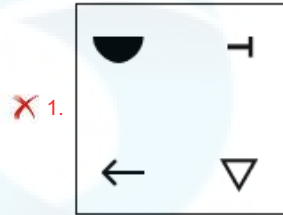
- Ans**
- 1. South Korea : Suwon Si
 - 2. China : Hong Kong
 - 3. Egypt : Tunis
 - 4. Ethiopia : Addis Ababa

Question ID : 630680417414
Option 1 ID : 6306801628422
Option 2 ID : 6306801628419
Option 3 ID : 6306801628421
Option 4 ID : 6306801628420
Status : Not Answered
Chosen Option : --

Q.15 Identify the figure given in the options which when put in place of the question mark (?) will logically complete the series?



Ans



Question ID : 630680471499

Option 1 ID : 6306801841711

Option 2 ID : 6306801841710

Option 3 ID : 6306801841713

Option 4 ID : 6306801841712

Status : Answered

Chosen Option : 2

Q.16 The second number in the given number-pairs is obtained by performing certain mathematical operation(s) on the first number. The same operation(s) is/are followed in all the number-pairs, except one. Find that odd number-pair.

(NOTE: The relation should be found without breaking down the numbers into its constituent digits)

Ans 1. 1521 : 1600

2. 1764 : 1849

3. 1156 : 1225

4. 784 : 961

Question ID : 630680412044

Option 1 ID : 6306801607011

Option 2 ID : 6306801607014

Option 3 ID : 6306801607013

Option 4 ID : 6306801607012

Status : Answered

Chosen Option : 4

Q.17 In a certain code language, 'toys are gadgets' is coded as 'dj sq ty' and 'gadgets are machines' is coded as 'mp ty dj'. What is code for 'gadgets' in that language?

Ans 1. either 'ty' or 'mp'

2. either 'ty' or 'dj'

3. sq

4. dj

Question ID : 630680137034

Option 1 ID : 630680530737

Option 2 ID : 630680530735

Option 3 ID : 630680530736

Option 4 ID : 630680530734

Status : Answered

Chosen Option : 2

Q.18 Select the option in which the numbers share the same relationship as that shared by the given pair of numbers.

(NOTE: Operations should be performed on the whole numbers, without breaking down the numbers into its constituent digits. E.g. 13 – Operations on 13 such as adding/deleting/multiplying etc. to 13 can be performed. Breaking down 13 into 1 and 3 and then performing mathematical operations on 1 and 3 is not allowed.)

13 : 55

23 : 105

Ans 1. 29 : 113

2. 7 : 26

3. 11 : 51

4. 31 : 145

Question ID : 630680327804

Option 1 ID : 6306801275185

Option 2 ID : 6306801275188

Option 3 ID : 6306801275187

Option 4 ID : 6306801275186

Status : Answered

Chosen Option : 4

Q.19 Select the option that represents the letters that when sequentially placed from left to right in the blanks below will complete the letter series.

_ B _ _ A L _ _ L _ _

Ans 1. BLABBALL

2. BBALLBAA

3. LBAALLBA

4. LALBBABA

Question ID : 630680262383

Option 1 ID : 6306801019172

Option 2 ID : 6306801019174

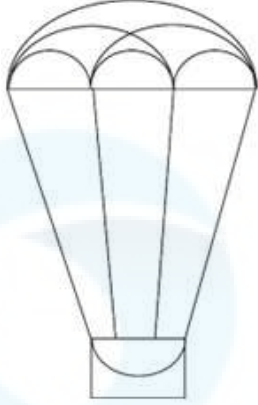
Option 3 ID : 6306801019173

Option 4 ID : 6306801019171

Status : Answered

Chosen Option : 4

Q.20 How many semicircles are there in the given figure?



- Ans
- 1. 6
 - 2. 5
 - 3. 7
 - 4. 8

Question ID : 630680296587
Option 1 ID : 6306801154000
Option 2 ID : 6306801153999
Option 3 ID : 6306801154001
Option 4 ID : 6306801154002
Status : Answered
Chosen Option : 3

Q.21 'NQR P' is related to 'RUV T' in a certain way based on the English alphabetical order. In the same way, 'DGL F' is related to 'HKP J'. To which of the following is 'KCUM' related, following the same logic?

- Ans
- 1. PHYR
 - 2. PGZR
 - 3. OHZQ
 - 4. OGYQ

Question ID : 630680416367
Option 1 ID : 6306801624234
Option 2 ID : 6306801624233
Option 3 ID : 6306801624232
Option 4 ID : 6306801624231
Status : Answered
Chosen Option : 4

Q.22 97 is related to 49 following a certain logic. Following the same logic, 115 is related to 58. To which of the following is 133 related to, following the same logic? (NOTE : Operations should be performed on the whole numbers, without breaking down the numbers into its constituent digits. E.g. 13 – Operations on 13 such as adding /deleting /multiplying etc., to 13 can be performed. Breaking down 13 into 1 and 3 and then performing mathematical operations on 1 and 3 is not allowed.)

- Ans
- 1. 89
 - 2. 82
 - 3. 64
 - 4. 67

Question ID : 630680344255
Option 1 ID : 6306801339336
Option 2 ID : 6306801339335
Option 3 ID : 6306801339333
Option 4 ID : 6306801339334
Status : Answered
Chosen Option : 4

Q.23 Each vowel in the word 'ISOLATED' is changed to the following letter in the English alphabetical order and each consonant is changed to the preceding letter in the English alphabetical order. How many letters are there in the English alphabetical order between the letter which is the third from the left end and the second from the left end in the group of letters thus formed?

Ans 1. Three

2. Four

3. One

4. Two

Question ID : 630680313409
 Option 1 ID : 6306801219502
 Option 2 ID : 6306801219501
 Option 3 ID : 6306801219504
 Option 4 ID : 6306801219503
 Status : Answered
 Chosen Option : 4

Q.24 In a certain code language,
 'A ! B' means 'A is the father of B',
 'A & B' means 'A is the brother of B',
 'A * B' means 'A is the wife of B' and
 'A # B' means 'A is the daughter of B'.
 Which of the following means that S is the husband's brother's wife of M?

Ans 1. S & F * J ! ! # M

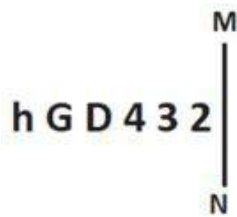
2. S & F ! J * ! # M

3. S * F & J ! ! # M

4. S & F # J ! ! * M

Question ID : 630680797546
 Option 1 ID : 6306803125140
 Option 2 ID : 6306803125142
 Option 3 ID : 6306803125141
 Option 4 ID : 6306803125143
 Status : Not Answered
 Chosen Option : --

Q.25 Select the correct mirror image of the given figure when the mirror is placed at MN as shown below.



Ans 1. 5 E P D Q h

2. 5 3 P D G h

3. 5 E P D Q h

4. 2 E P D Q h

Question ID : 630680356658
 Option 1 ID : 6306801388633
 Option 2 ID : 6306801388634
 Option 3 ID : 6306801388635
 Option 4 ID : 6306801388636
 Status : Answered
 Chosen Option : 1

Section : General Awareness

Q.1 Which Indian musician and sitar player is the founder of the National Orchestra of India ?

- Ans
- 1. Ayyagari Syamasundaram
 - 2. Kishan Maharaj
 - 3. Shahid Parvez Khan
 - 4. Ravi Shankar

Question ID : 630680560748
Option 1 ID : 6306802191975
Option 2 ID : 6306802191973
Option 3 ID : 6306802191972
Option 4 ID : 6306802191974
Status : Not Attempted and Marked For Review
Chosen Option : --

Q.2 What is the disinvestment target of the Finance Ministry for the year 2023-24?

- Ans
- 1. ₹54,000 crore
 - 2. ₹50,000 crore
 - 3. ₹51,000 crore
 - 4. ₹53,000 crore

Question ID : 630680413060
Option 1 ID : 6306801611066
Option 2 ID : 6306801611065
Option 3 ID : 6306801611064
Option 4 ID : 6306801611063
Status : Not Answered
Chosen Option : --

Q.3 Where was the first official summit of the Non-Aligned movement held?

- Ans
- 1. India
 - 2. Egypt
 - 3. Yugoslavia
 - 4. New York

Question ID : 630680511550
Option 1 ID : 6306801999322
Option 2 ID : 6306801999323
Option 3 ID : 6306801999325
Option 4 ID : 6306801999324
Status : Not Answered
Chosen Option : --

Q.4 Gandharva Mahavidyalaya, which was founded by Pandit Vinaya Chandra Maudgalya, is located at _____.

Ans 1. New Delhi

2. Kolkata

3. Pune

4. Mumbai

Question ID : 630680309167

Option 1 ID : 6306801202848

Option 2 ID : 6306801202847

Option 3 ID : 6306801202845

Option 4 ID : 6306801202846

Status : Not Answered

Chosen Option : --

Q.5 For a chemical reaction with rise in temperature by 10° , the rate constant becomes nearly _____.

Ans 1. Triple

2. half

3. Double

4. one-fourth

Question ID : 63068052321

Option 1 ID : 630680201389

Option 2 ID : 630680201386

Option 3 ID : 630680201387

Option 4 ID : 630680201388

Status : Not Answered

Chosen Option : --

Q.6 Which of the following is an example of joint sector industry?

Ans 1. Steel Authority of India Limited

2. Bharat Heavy Electricals Limited

3. Oil India Limited

4. Tata Iron and Steel Company

Question ID : 630680327628

Option 1 ID : 6306801274509

Option 2 ID : 6306801274510

Option 3 ID : 6306801274512

Option 4 ID : 6306801274511

Status : Not Attempted and Marked For Review

Chosen Option : --

Q.7 Which is the joint digital skills initiative for employability through digital skills by National Career Service and Microsoft India?

- Ans 1. Shiksha Vani
 2. Vidyadaan
 3. Swayam
 4. Digisaksham

Question ID : 630680183662
Option 1 ID : 630680711658
Option 2 ID : 630680711659
Option 3 ID : 630680711657
Option 4 ID : 630680711660
Status : Not Answered
Chosen Option : --

Q.8 Which of the following commissions/committees identified the existence of legal provisions for implementation of some of the Fundamental Duties?

- Ans 1. Rajamannar Commission
 2. Justice Verma Committee
 3. Sarkaria Commission
 4. Vasant Rao Naik Committee

Question ID : 630680305668
Option 1 ID : 6306801189046
Option 2 ID : 6306801189045
Option 3 ID : 6306801189047
Option 4 ID : 6306801189048
Status : Answered
Chosen Option : 2

Q.9 Pandwani singer Usha Barle was conferred with which of the following awards by the Government of India in 2023?

- Ans 1. Padma Bhushan
 2. Bharat Ratna
 3. Padma Shri
 4. Padma Vibhushan

Question ID : 630680415815
Option 1 ID : 6306801622029
Option 2 ID : 6306801622027
Option 3 ID : 6306801622030
Option 4 ID : 6306801622028
Status : Answered
Chosen Option : 3

Q.10 Articles 245 to 255 in Part XI of the Indian Constitution deal with the _____.

- Ans 1. emergency provisions
 2. financial relations between the Centre and the states
 3. legislative relations between the Centre and the states
 4. tribunals

Question ID : 630680326536
Option 1 ID : 6306801270232
Option 2 ID : 6306801270230
Option 3 ID : 6306801270229
Option 4 ID : 6306801270231
Status : Marked For Review
Chosen Option : 3

Q.11 In peninsular India, which of the following kingdoms was the local power that ruled over northern Maharashtra and Vidarbha?

- Ans 1. Chalukyas
 2. Maitrakas
 3. Vakatakas
 4. Maukharis

Question ID : 630680412523
Option 1 ID : 6306801608915
Option 2 ID : 6306801608918
Option 3 ID : 6306801608916
Option 4 ID : 6306801608917
Status : Marked For Review
Chosen Option : 1

Q.12 In chess, which of the following may only move forward to the unoccupied square immediately in front of it?

- Ans 1. The Pawn
 2. The Queen
 3. The Bishop
 4. The Rook

Question ID : 630680510774
Option 1 ID : 6306801996226
Option 2 ID : 6306801996229
Option 3 ID : 6306801996228
Option 4 ID : 6306801996227
Status : Answered
Chosen Option : 1

Q.13 In which group of states does the Luni River flow?

- Ans 1. Maharashtra and Karnataka
 2. Rajasthan and Gujarat
 3. Bihar and West Bengal
 4. Andhra Pradesh and Telangana

Question ID : 630680328131
Option 1 ID : 6306801276495
Option 2 ID : 6306801276493
Option 3 ID : 6306801276494
Option 4 ID : 6306801276496
Status : Answered
Chosen Option : 2

Q.14 _____ is the provision of small credit to those who would have no other access to financial services.

- Ans 1. Homeloan
 2. Microfinance
 3. Pradhan Mantri Awas Yojana
 4. Microloan

Question ID : 630680127431
Option 1 ID : 630680493986
Option 2 ID : 630680493984
Option 3 ID : 630680493987
Option 4 ID : 630680493985
Status : Marked For Review
Chosen Option : 2

Q.15 Agricultural shot is a term used in which of the following sports?

- Ans 1. Football
 2. Table Tennis
 3. Cricket
 4. Lawn Tennis

Question ID : 630680510813
Option 1 ID : 6306801996382
Option 2 ID : 6306801996384
Option 3 ID : 6306801996383
Option 4 ID : 6306801996385
Status : Not Answered
Chosen Option : --

Q.16 Which of the following is an example of prokaryotic cells?

- Ans 1. Plasmodium
 2. Yeast
 3. Leishmania
 4. Bacteria

Question ID : 630680113756
Option 1 ID : 630680440550
Option 2 ID : 630680440552
Option 3 ID : 630680440553
Option 4 ID : 630680440551
Status : Answered
Chosen Option : 4

Q.17 The variation between a high air temperature and a low temperature that occurs during the same day is called _____ temperature.

- Ans 1. wet bulb
 2. diurnal
 3. annual
 4. durian

Question ID : 63068099315
Option 1 ID : 630680385966
Option 2 ID : 630680385965
Option 3 ID : 630680385964
Option 4 ID : 630680385967
Status : Answered
Chosen Option : 2

Q.18 As per Mendeleev's prediction, atomic mass of eka-aluminium was:

- Ans 1. 72
 2. 100
 3. 68
 4. 44

Question ID : 63068094251
Option 1 ID : 630680365701
Option 2 ID : 630680365702
Option 3 ID : 630680365700
Option 4 ID : 630680365699
Status : Not Answered
Chosen Option : --

Q.19 Which of the following documents provides a framework, rules and regulations for setting up public and private industries in India?

- Ans**
- 1. Annual report of the trade union
 - 2. Union Budget
 - 3. Company's financial statement
 - 4. Industrial policy

Question ID : 630680410798
Option 1 ID : 6306801601954
Option 2 ID : 6306801601953
Option 3 ID : 6306801601952
Option 4 ID : 6306801601951
Status : Answered
Chosen Option : 4

Q.20 Which of the following is the best definition of ecological efficiency?

- Ans**
- 1. The ratio between the mass and the energy flow at different trophic levels in a food chain
 - 2. The ratio between energy flows at different points in a food chain
 - 3. The amount of energy stored at different trophic levels in a food chain
 - 4. The amount of energy utilised at different trophic levels in a food chain

Question ID : 630680199651
Option 1 ID : 630680774214
Option 2 ID : 630680774212
Option 3 ID : 630680774211
Option 4 ID : 630680774213
Status : Marked For Review
Chosen Option : 4

Q.21 Which state Chief Minister launched the 'Kaushalya Matritva Yojana' in 2022, which provides financial assistance of ₹5,000 to women giving birth to a second girl child for safe motherhood?

- Ans**
- 1. Rajasthan
 - 2. Uttar Pradesh
 - 3. Chhattisgarh
 - 4. Gujarat

Question ID : 630680413082
Option 1 ID : 6306801611152
Option 2 ID : 6306801611153
Option 3 ID : 6306801611151
Option 4 ID : 6306801611154
Status : Not Answered
Chosen Option : --

Q.22 In which of the following states is Me-dam-me-phi festival primarily celebrated?

- Ans 1. Bihar
 2. Nagaland
 3. Assam
 4. Odisha

Question ID : 630680164569
Option 1 ID : 630680637393
Option 2 ID : 630680637394
Option 3 ID : 630680637392
Option 4 ID : 630680637395
Status : Marked For Review
Chosen Option : 2

Q.23 Mulayam Singh Yadav, who passed away in October 2022, served as the Chief Minister of which state?

- Ans 1. Madhya Pradesh
 2. Uttar Pradesh
 3. Gujarat
 4. Bihar

Question ID : 630680413029
Option 1 ID : 6306801610941
Option 2 ID : 6306801610942
Option 3 ID : 6306801610940
Option 4 ID : 6306801610939
Status : Answered
Chosen Option : 2

Q.24 In 10th century India, Queen Didda became the ruler of which of the following regions of north India?

- Ans 1. Kannauj
 2. Delhi
 3. Malwa
 4. Kashmir

Question ID : 630680412416
Option 1 ID : 6306801608489
Option 2 ID : 6306801608488
Option 3 ID : 6306801608487
Option 4 ID : 6306801608490
Status : Not Answered
Chosen Option : --

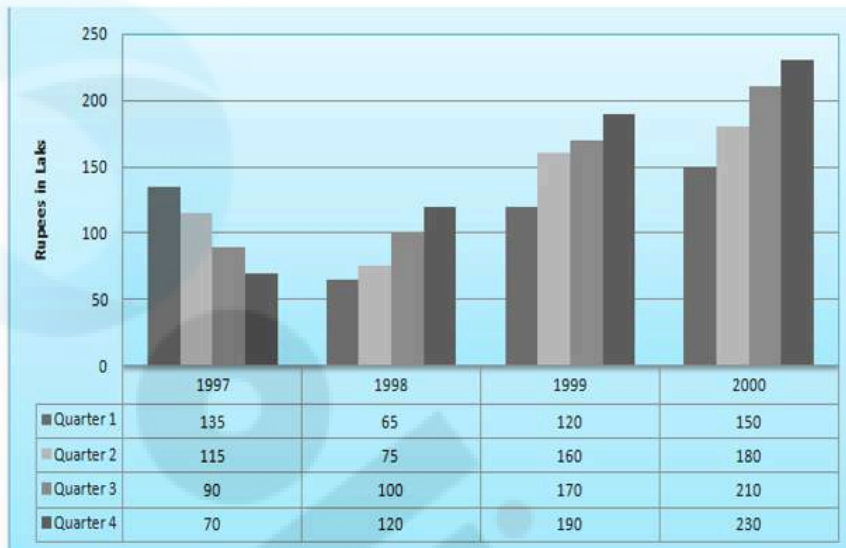
Q.25 In which of the following years was VD Savarkar sent to Andaman Jail by the British?

- Ans 1. 1923
 2. 1922
 3. 1910
 4. 1911

Question ID : 630680412311
Option 1 ID : 6306801608067
Option 2 ID : 6306801608068
Option 3 ID : 6306801608070
Option 4 ID : 6306801608069
Status : Not Answered
Chosen Option : --

Q.1 Study the given bar graph and answer the question that follows.

The following bar graph shows the quarterly profit (in lakhs) of a departmental store from 1997 to 2000.



What was the percentage increase in annual profit of the departmental store from 1997 to 2000?

Ans

- ✓ 1. $87\frac{33}{41}\%$
- ✗ 2. $84\frac{33}{41}\%$
- ✗ 3. $83\frac{33}{41}\%$
- ✗ 4. $85\frac{33}{41}\%$

Question ID : 630680428035
 Option 1 ID : 6306801670184
 Option 2 ID : 6306801670186
 Option 3 ID : 6306801670187
 Option 4 ID : 6306801670185
 Status : Answered
 Chosen Option : 1

Q.2 A quadrilateral PQRS is inscribed in a circle of centre O, such that PQ is a diameter and $\angle PSR = 120^\circ$. Find the value of $\angle QPR$.

- ✗ 1. 50°
- ✗ 2. 60°
- ✗ 3. 40°
- ✓ 4. 30°

Question ID : 630680401713
 Option 1 ID : 6306801566628
 Option 2 ID : 6306801566629
 Option 3 ID : 6306801566627
 Option 4 ID : 6306801566626
 Status : Answered
 Chosen Option : 4

Q.3 Simplify $\left[1 - \sin^2 32^\circ + \frac{1}{1 + \tan^2 58^\circ} \right]$.

- Ans
- 1. $\sqrt{3}$
 - 2. $\frac{1}{2}$
 - 3. 1
 - 4. $\sin 32^\circ$

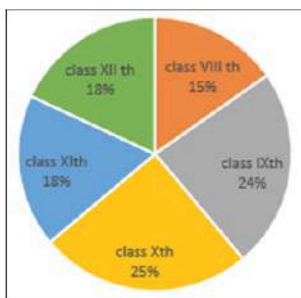
Question ID : 630680396998
 Option 1 ID : 6306801548048
 Option 2 ID : 6306801548051
 Option 3 ID : 6306801548050
 Option 4 ID : 6306801548049
 Status : Answered
 Chosen Option : 3

Q.4 $\triangle ABC$ and $\triangle DEF$ are two triangles such that $\triangle ABC \cong \triangle FDE$. If $AB=17$ cm, $\angle B=52^\circ$ and $\angle A=95^\circ$, then which of the following options is true?

- Ans
- 1. $DE=17$ cm, $\angle E=33^\circ$
 - 2. $DE=17$ cm, $\angle F=33^\circ$
 - 3. $DF=17$ cm, $\angle D=33^\circ$
 - 4. $DF=17$ cm, $\angle E=33^\circ$

Question ID : 630680380384
 Option 1 ID : 6306801482534
 Option 2 ID : 6306801482531
 Option 3 ID : 6306801482533
 Option 4 ID : 6306801482532
 Status : Answered
 Chosen Option : 4

Q.5 The given pie chart shows the number of students admitted in to different classes of a school in the academic year 2022-23.



How many students were more in Class 10 than in Class 12 if 600 students were admitted in to Class 8?

- Ans
- 1. 298
 - 2. 240
 - 3. 295
 - 4. 280

Question ID : 630680428148
 Option 1 ID : 6306801670639
 Option 2 ID : 6306801670636
 Option 3 ID : 6306801670638
 Option 4 ID : 6306801670637
 Status : Answered
 Chosen Option : 4

Q.6 Three years ago, the age of a person was six times the age of his younger brother. Eight years later, the age of the person will be three years less than twice the age of his younger brother. Find the present ages of the person and his younger brother.

- Ans**
- 1. 4 years and 12 years
 - 2. 12 years and 4 years
 - 3. 5 years and 15 years
 - 4. 15 years and 5 years

Question ID : 630680285539
Option 1 ID : 6306801110126
Option 2 ID : 6306801110124
Option 3 ID : 6306801110123
Option 4 ID : 6306801110125
Status : Not Answered
Chosen Option : --

Q.7 An article marked for ₹275 is sold at 5% discount. The seller still gains 4.5%. What did he pay for it?

- Ans**
- 1. ₹250
 - 2. ₹200
 - 3. ₹225
 - 4. ₹125

Question ID : 630680239487
Option 1 ID : 630680928901
Option 2 ID : 630680928900
Option 3 ID : 630680928902
Option 4 ID : 630680928899
Status : Answered
Chosen Option : 1

Q.8 At a school building, there is an overhead tank. To fill this tank 50 buckets of water are required. Assume that the capacity of the bucket is reduced to two-fifth of the present. How many buckets of water are required to fill the same tank?

- Ans**
- 1. 62.5
 - 2. 20
 - 3. 125
 - 4. 60

Question ID : 6306801047987
Option 1 ID : 6306804113992
Option 2 ID : 6306804113993
Option 3 ID : 6306804113990
Option 4 ID : 6306804113991
Status : Answered
Chosen Option : 2

Q.9 A shopkeeper sells rice at the rate of ₹44 per kg whose cost price is ₹40 per kg. Not satisfied with this, he tries to increase his profit by removing 200 grams of rice from each packet. What is the shopkeeper's overall gain percentage?

- Ans
- 1. 35%
 - 2. 37.5%
 - 3. 37%
 - 4. 35.5%

Question ID : 630680429047
Option 1 ID : 6306801674232
Option 2 ID : 6306801674235
Option 3 ID : 6306801674234
Option 4 ID : 6306801674233
Status : Answered
Chosen Option : 2

Q.10 The bar graph given below shows the sales of ball pens (in thousand numbers) from six shops S1, S2, S3, S4, S5, and S6, during two consecutive years, 2011 and 2012.

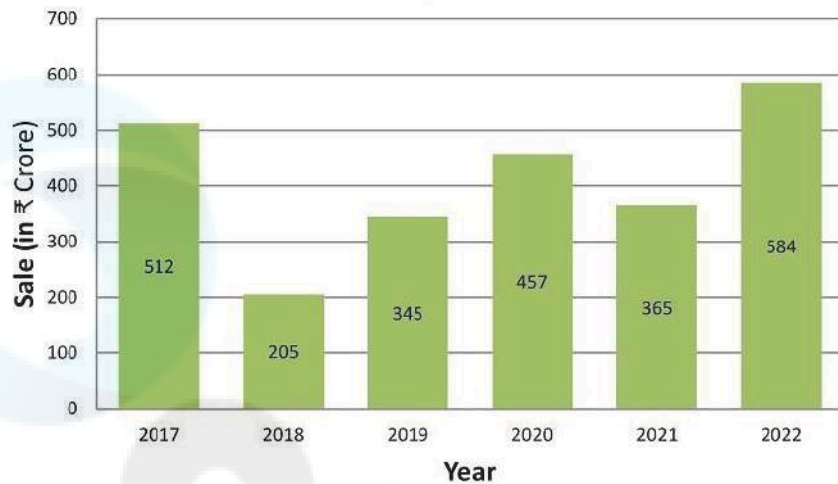


What's is the ratio of the total sales of shop S2 for both years to the total sales of Shop S5 for both years?

- Ans
- 1. 5 : 8
 - 2. 3 : 7
 - 3. 7 : 5
 - 4. 8 : 7

Question ID : 630680397950
Option 1 ID : 6306801551815
Option 2 ID : 6306801551814
Option 3 ID : 6306801551817
Option 4 ID : 6306801551816
Status : Answered
Chosen Option : 4

Q.11 The following bar graph shows the sales of a company (in ₹ crore) in different years. Study the graph and answer the question.



The mean of the highest and lowest sales (in ₹ crore) is:

- Ans 1. 394.5
 2. 326.7
 3. 484.2
 4. 412.3

Question ID : 630680403244

Option 1 ID : 6306801572475

Option 2 ID : 6306801572476

Option 3 ID : 6306801572473

Option 4 ID : 6306801572474

Status : Answered

Chosen Option : 1

Q.12

The value of the expression $\frac{1 - \sin(2t)}{1 + \sin(2t)} \times \frac{\cos(t) + \sin(t)}{\cos(t) - \sin(t)}$ is

- Ans 1. $\frac{1 + 2 \tan(t)}{1 - 2 \tan(t)}$
 2. $\frac{1 - \tan(t)}{1 + \tan(t)}$
 3. $\frac{1 - 2 \tan(t)}{1 + 2 \tan(t)}$
 4. $\frac{1 + \tan(t)}{1 - \tan(t)}$

Question ID : 630680373885

Option 1 ID : 6306801456813

Option 2 ID : 6306801456814

Option 3 ID : 6306801456812

Option 4 ID : 6306801456811

Status : Not Answered

Chosen Option : --

Q.13 The base radius of a circular cylinder is 10.5 cm. If the area of its curved surface is 792 cm², then what is the volume of the cylinder?

- Ans
- 1. 4152 cm³
 - 2. 4158 cm³
 - 3. 4518 cm³
 - 4. 4185 cm³

Question ID : 630680421535
Option 1 ID : 6306801644603
Option 2 ID : 6306801644605
Option 3 ID : 6306801644604
Option 4 ID : 6306801644606
Status : Answered
Chosen Option : 2

Q.14 A and B can do a work in 12 days and 16 days, respectively. If they work together for 6 days, then the fraction of the work left is _____.

- Ans
- 1. $\frac{7}{8}$
 - 2. $\frac{5}{7}$
 - 3. $\frac{1}{7}$
 - 4. $\frac{1}{8}$

Question ID : 630680381423
Option 1 ID : 6306801486631
Option 2 ID : 6306801486632
Option 3 ID : 6306801486633
Option 4 ID : 6306801486634
Status : Answered
Chosen Option : 4

Q.15 Simplify the following expression.
 $25 \div 5 + 3 \text{ of } 2 - 4 + 6 \text{ of } 3 \div 2 - 8 + 4$

- Ans
- 1. 8
 - 2. 16
 - 3. 12
 - 4. 4

Question ID : 630680421213
Option 1 ID : 6306801643328
Option 2 ID : 6306801643330
Option 3 ID : 6306801643329
Option 4 ID : 6306801643327
Status : Answered
Chosen Option : 3

Q.16 The radius of the circle is 10 cm and the perpendicular distance from the chord to the centre is 6 cm. The length of the chord is:

- Ans
- 1. 12 cm
 - 2. 18 cm
 - 3. 16 cm
 - 4. 14 cm

Question ID : 630680196686
Option 1 ID : 630680763043
Option 2 ID : 630680763046
Option 3 ID : 630680763045
Option 4 ID : 630680763044
Status : Answered
Chosen Option : 3

Q.17 The average score of a batsman in twenty matches is 15 and in twenty-five other matches is 24. Find the average score in all the forty-five matches.

- Ans
- 1. 21
 - 2. 20
 - 3. 19.5
 - 4. 22

Question ID : 630680397312
Option 1 ID : 6306801549306
Option 2 ID : 6306801549305
Option 3 ID : 6306801549304
Option 4 ID : 6306801549307
Status : Answered
Chosen Option : 2

Q.18 A thief is spotted by a policeman from a distance of 200 metres. When the policeman starts the chase, the thief also starts running. If the speed of the thief is 9 km/h and that of the policeman 10 km/h, how far will the thief have to run before he is overtaken?

- Ans
- 1. 1.8 km
 - 2. 1.4 km
 - 3. 1.6 km
 - 4. 1.2 km

Question ID : 630680428343
Option 1 ID : 6306801671419
Option 2 ID : 6306801671417
Option 3 ID : 6306801671418
Option 4 ID : 6306801671416
Status : Answered
Chosen Option : 1

Q.19 From the given numbers A, B, C and D, which number is NOT divisible by 11?

A = 712712
B = 177210
C = 64614
D = 756148

Ans 1. D

2. C

3. B

4. A

Question ID : 630680121148
Option 1 ID : 630680469557
Option 2 ID : 630680469556
Option 3 ID : 630680469555
Option 4 ID : 630680469554
Status : Answered
Chosen Option : 1

Q.20 If $\left(x + \frac{1}{x}\right) = 7, x > 0$. The positive value of $\left(x - \frac{1}{x}\right)$ is:

Ans 1. $5\sqrt{4}$

2. $3\sqrt{5}$

3. $5\sqrt{5}$

4. $4\sqrt{5}$

Question ID : 630680413495
Option 1 ID : 6306801612807
Option 2 ID : 6306801612804
Option 3 ID : 6306801612806
Option 4 ID : 6306801612805
Status : Answered
Chosen Option : 2

Q.21 The maximum value of $(2 \sin \theta + 3 \cos \theta)$ is:

Ans 1. 9

2. $\sqrt{17}$

3. $\sqrt{11}$

4. $\sqrt{13}$

Question ID : 630680526473
Option 1 ID : 6306802057959
Option 2 ID : 6306802057960
Option 3 ID : 6306802057958
Option 4 ID : 6306802057961
Status : Answered
Chosen Option : 4

Q.22 The price of an item is increased twice successively. The final price is ₹2,295 and initial price was ₹1,000. The percentage increment the second time was twice the percentage increment the first time. By what percentage was the price increased the second time?

Ans 1. 70%

2. 65%

3. 35%

4. 25%

Question ID : 630680427978

Option 1 ID : 6306801669959

Option 2 ID : 6306801669958

Option 3 ID : 6306801669957

Option 4 ID : 6306801669956

Status : Answered

Chosen Option : 1

Q.23 The sum of the ages of 6 children born at the interval of two years each is 90 years. What is the age (in years) of the eldest child?

Ans 1. 10

2. 16

3. 14

4. 20

Question ID : 630680285564

Option 1 ID : 6306801110223

Option 2 ID : 6306801110225

Option 3 ID : 6306801110224

Option 4 ID : 6306801110226

Status : Answered

Chosen Option : 4

Q.24 PQ and RS are common tangents to two circles intersecting at A and B. A and B, when produced on both the sides, meet the tangents PQ and RS at X and Y, respectively. If $AB = 3$ cm and $XY = 5$ cm, then PQ is _____.

Ans 1. 6 cm

2. 4 cm

3. 5 cm

4. 3 cm

Question ID : 630680285537

Option 1 ID : 6306801110118

Option 2 ID : 6306801110116

Option 3 ID : 6306801110117

Option 4 ID : 6306801110115

Status : Answered

Chosen Option : 2

Q.25 A sum of ₹1,456, when invested for ten years, amounts to ₹2,366 on maturity. Find the rate of simple interest per annum that was to be paid on the sum invested.

Ans 1. 5.75%

2. 6.25%

3. 6.15%

4. 6.5%

Question ID : 63068070516

Option 1 ID : 630680272687

Option 2 ID : 630680272689

Option 3 ID : 630680272686

Option 4 ID : 630680272688

Status : Answered

Chosen Option : 2

Section : English Comprehension

Q.1 Parts of a sentence are given below in jumbled order. Arrange the parts in the correct order to form a meaningful sentence.

(A) a lot

(B) my daily routine

(C) i have missed

(D) since my retirement

(E) at the workplace

Ans 1. BEADC

2. BACED

3. CBEAD

4. BADEC

Question ID : 630680360057

Option 1 ID : 6306801402173

Option 2 ID : 6306801402176

Option 3 ID : 6306801402174

Option 4 ID : 6306801402175

Status : Answered

Chosen Option : 3

Q.2 Select the correctly spelled sentence.

Ans 1. The athlete's acheivements are impressive.

2. The athlete's achievements are impressive.

3. The athletees achievements are impressive.

4. The athlete's achievements are impressive.

Question ID : 630680377274

Option 1 ID : 6306801470159

Option 2 ID : 6306801470162

Option 3 ID : 6306801470161

Option 4 ID : 6306801470160

Status : Answered

Chosen Option : 2

Q.3 Parts of a sentence are given below in jumbled order. Arrange the parts in the correct order to form a meaningful sentence.
A. all the plants and animals of today
B. it is written that Brahma is the God of creation
C. and it is He who has made
D. in the book of Hindu mythology

- Ans 1. DBCA
 2. DACB
 3. CABD
 4. DCBA

Question ID : 630680166070
Option 1 ID : 630680643252
Option 2 ID : 630680643255
Option 3 ID : 630680643254
Option 4 ID : 630680643253
Status : Answered
Chosen Option : 1

Q.4 The following sentence has been split into four segments. Identify the segment that contains a spelling error.
Big Data has inandated / the education industry. / It has transformed it / by leaps and bounds.

- Ans 1. Big Data has inandated
 2. It has transformed it
 3. by leaps and bounds
 4. the education industry

Question ID : 630680409962
Option 1 ID : 6306801598677
Option 2 ID : 6306801598679
Option 3 ID : 6306801598680
Option 4 ID : 6306801598678
Status : Answered
Chosen Option : 1

Q.5 Select the option that expresses the following sentence in active voice.
The concert tickets were bought by my friend

- Ans 1. My friend has bought the concert tickets.
 2. My friend buys the concert tickets.
 3. My friend is buying the concert tickets.
 4. My friend bought the concert tickets.

Question ID : 630680415303
Option 1 ID : 6306801619960
Option 2 ID : 6306801619959
Option 3 ID : 6306801619961
Option 4 ID : 6306801619962
Status : Answered
Chosen Option : 4

Q.6 Select the option that can be used as a one-word substitute for the underlined group of words.

In industries, it is very common to observe that people show undue favour to one's own relative during the hiring process.

- Ans
- 1. nepotism
 - 2. liberalism
 - 3. racism
 - 4. communism

Question ID : 630680158617
Option 1 ID : 630680613962
Option 2 ID : 630680613960
Option 3 ID : 630680613961
Option 4 ID : 630680613963
Status : Answered
Chosen Option : 1

Q.7 Select the most appropriate option that can substitute the underlined segment in the given sentence.

She was foolish enough to think that she be completely safe now.

- Ans
- 1. is completely safe
 - 2. have been completely safe
 - 3. has being completely safe
 - 4. were completely safe

Question ID : 630680159749
Option 1 ID : 630680618459
Option 2 ID : 630680618457
Option 3 ID : 630680618458
Option 4 ID : 630680618456
Status : Answered
Chosen Option : 1

Q.8 Select the most appropriate synonym of the underlined word.

It takes time to adapt to a new environment.

- Ans
- 1. Apply
 - 2. Adjust
 - 3. Understand
 - 4. Control

Question ID : 630680360820
Option 1 ID : 6306801405155
Option 2 ID : 6306801405154
Option 3 ID : 6306801405156
Option 4 ID : 6306801405153
Status : Answered
Chosen Option : 2

Q.9 The following sentence has been divided into three segments. One of them may contain an error. Select the option that has the segment with the error. If you don't find any error, select 'No error' as your answer.
Mr. Ali's shop / is further to / the hospital.

- Ans
- 1. No error
 - 2. Mr. Ali's shop
 - 3. is further to
 - 4. the hospital.

Question ID : 630680206701
Option 1 ID : 630680801406
Option 2 ID : 630680801403
Option 3 ID : 630680801404
Option 4 ID : 630680801405
Status : Answered
Chosen Option : 3

Q.10 Select the most appropriate meaning of the underlined idiom/phrase.

I had heard of henpecked husbands and now, I felt that I saw one.

- Ans
- 1. Oppressed husband
 - 2. Dominating husbands
 - 3. Bossy husbands
 - 4. Controlling husband

Question ID : 630680119690
Option 1 ID : 630680463843
Option 2 ID : 630680463845
Option 3 ID : 630680463842
Option 4 ID : 630680463844
Status : Answered
Chosen Option : 4

Q.11 Identify the most appropriate ANTONYM of the underlined word in the following sentence.

I love the stunning view of the mountain.

- Ans
- 1. Superfluous
 - 2. Smashing
 - 3. Toxic
 - 4. Mundane

Question ID : 630680374325
Option 1 ID : 6306801458491
Option 2 ID : 6306801458493
Option 3 ID : 6306801458494
Option 4 ID : 6306801458492
Status : Answered
Chosen Option : 4

Q.12 Select the option that can be used as a one-word substitute for the given group of words.

The statistical study of human populations.

- Ans
- 1. Photography
 - 2. Astronomy
 - 3. Demography
 - 4. Palaeography

Question ID : 630680414694
Option 1 ID : 6306801617521
Option 2 ID : 6306801617519
Option 3 ID : 6306801617522
Option 4 ID : 6306801617520
Status : Answered
Chosen Option : 3

Q.13 Select the option that can be used as a one-word substitute for the given group of words.

One who tends to look at the dark side of things

- Ans
- 1. Pessimist
 - 2. Polemist
 - 3. Dynamist
 - 4. Optimist

Question ID : 630680129474
Option 1 ID : 630680501514
Option 2 ID : 630680501516
Option 3 ID : 630680501517
Option 4 ID : 630680501515
Status : Answered
Chosen Option : 1

Q.14 Select the most appropriate ANTONYM of the given word.
Hinder

- Ans
- 1. Facilitate
 - 2. Block
 - 3. Praise
 - 4. Joy

Question ID : 630680517557
Option 1 ID : 6306802022626
Option 2 ID : 6306802022627
Option 3 ID : 6306802022625
Option 4 ID : 6306802022624
Status : Answered
Chosen Option : 1

Q.15 Identify from the given options the word which is similar in meaning to the following word.
Morbid

- Ans** 1. Grand
 2. Gloomy
 3. Bet
 4. Blithe

Question ID : 630680360070
Option 1 ID : 6306801402225
Option 2 ID : 6306801402226
Option 3 ID : 6306801402228
Option 4 ID : 6306801402227
Status : Answered
Chosen Option : 2

Q.16 Select the most appropriate ANTONYM of the given word.
Inevitable

- Ans** 1. Confident
 2. Avoidable
 3. Clear
 4. Inexorable

Question ID : 630680517369
Option 1 ID : 6306802021873
Option 2 ID : 6306802021874
Option 3 ID : 6306802021872
Option 4 ID : 6306802021875
Status : Answered
Chosen Option : 2

Q.17 Select the most appropriate idiom that can substitute the underlined segment in the given sentence.
Roshan, it's time for you to give your speech to the whole school, wishing you luck to do well.

- Ans** 1. break a leg
 2. hands down
 3. high five
 4. down in the dumps

Question ID : 630680375538
Option 1 ID : 6306801463307
Option 2 ID : 6306801463310
Option 3 ID : 6306801463308
Option 4 ID : 6306801463309
Status : Answered
Chosen Option : 1

Q.18 Select the option that expresses the given sentence in passive voice.
Inayat did not greet her.

- Ans** 1. She was not greeted by Inayat.
 2. She was not going to be greeted by Inayat.
 3. She was not at all greeted by Inayat.
 4. She was not being greeted by Inayat.

Question ID : 630680206653
Option 1 ID : 630680801214
Option 2 ID : 630680801213
Option 3 ID : 630680801212
Option 4 ID : 630680801211
Status : Answered
Chosen Option : 1

Q.19 Parts of the following sentence have been given as options. Select the option that contains an error.
It rain a lot in this part of the country.

- Ans** 1. of the country
 2. a lot
 3. It rain
 4. in this part

Question ID : 630680514368
Option 1 ID : 6306802010100
Option 2 ID : 6306802010098
Option 3 ID : 6306802010097
Option 4 ID : 6306802010099
Status : Answered
Chosen Option : 3

Q.20 Select the most appropriate synonym of the underlined word in the given sentence.
She is a very creative artist and one can see that in her paintings.

- Ans** 1. Likeable
 2. Good
 3. Innovative
 4. Pedantic

Question ID : 630680129933
Option 1 ID : 630680503321
Option 2 ID : 630680503320
Option 3 ID : 630680503318
Option 4 ID : 630680503319
Status : Answered
Chosen Option : 3

Comprehension:

In the following passage, some words have been deleted. Read the passage carefully and select the most appropriate option to fill in each blank.

Recently, the (1)_____ of heart-attacks in young Indians (2)_____ increased tremendously. Doctors are surprised to note that young men and women with seemingly healthy lifestyle are suffering deadly heart attacks. (3)_____ diet and exercise play a (4)_____ role in a person's overall wellbeing, mental health is also a valuable factor. The (5)_____ urban lifestyle is causing anxiety and depression in young Indians which may be a major factor behind the increased numbers.

SubQuestion No : 21

Q.21 Select the most appropriate option to fill in blank number 1.

- Ans** 1. number
 2. percent
 3. height
 4. amount

Question ID : 630680146350

Option 1 ID : 630680566282

Option 2 ID : 630680566284

Option 3 ID : 630680566285

Option 4 ID : 630680566283

Status : Answered

Chosen Option : 1

Comprehension:

In the following passage, some words have been deleted. Read the passage carefully and select the most appropriate option to fill in each blank.

Recently, the (1)_____ of heart-attacks in young Indians (2)_____ increased tremendously. Doctors are surprised to note that young men and women with seemingly healthy lifestyle are suffering deadly heart attacks. (3)_____ diet and exercise play a (4)_____ role in a person's overall wellbeing, mental health is also a valuable factor. The (5)_____ urban lifestyle is causing anxiety and depression in young Indians which may be a major factor behind the increased numbers.

SubQuestion No : 22

Q.22 Select the most appropriate option to fill in blank number 2.

- Ans** 1. have
 2. have been
 3. had
 4. has

Question ID : 630680146351

Option 1 ID : 630680566287

Option 2 ID : 630680566289

Option 3 ID : 630680566288

Option 4 ID : 630680566286

Status : Answered

Chosen Option : 4

Comprehension:

In the following passage, some words have been deleted. Read the passage carefully and select the most appropriate option to fill in each blank.

Recently, the (1)_____ of heart-attacks in young Indians (2)_____ increased tremendously. Doctors are surprised to note that young men and women with seemingly healthy lifestyle are suffering deadly heart attacks. (3)_____ diet and exercise play a (4)_____ role in a person's overall wellbeing, mental health is also a valuable factor. The (5)_____ urban lifestyle is causing anxiety and depression in young Indians which may be a major factor behind the increased numbers.

SubQuestion No : 23

Q.23 Select the most appropriate option to fill in blank number 3.

- Ans**
- 1. However
 - 2. Since
 - 3. Although
 - 4. In spite of

Question ID : 630680146352
Option 1 ID : 630680566292
Option 2 ID : 630680566293
Option 3 ID : 630680566291
Option 4 ID : 630680566290

Status : **Marked For Review**

Chosen Option : 3

Comprehension:

In the following passage, some words have been deleted. Read the passage carefully and select the most appropriate option to fill in each blank.

Recently, the (1)_____ of heart-attacks in young Indians (2)_____ increased tremendously. Doctors are surprised to note that young men and women with seemingly healthy lifestyle are suffering deadly heart attacks. (3)_____ diet and exercise play a (4)_____ role in a person's overall wellbeing, mental health is also a valuable factor. The (5)_____ urban lifestyle is causing anxiety and depression in young Indians which may be a major factor behind the increased numbers.

SubQuestion No : 24

Q.24 Select the most appropriate option to fill in blank number 4.

- Ans**
- 1. increased
 - 2. epic
 - 3. historic
 - 4. monumental

Question ID : 630680146353
Option 1 ID : 630680566294
Option 2 ID : 630680566295
Option 3 ID : 630680566297
Option 4 ID : 630680566296

Status : **Answered**

Chosen Option : 1

Comprehension:

In the following passage, some words have been deleted. Read the passage carefully and select the most appropriate option to fill in each blank.

Recently, the (1)_____ of heart-attacks in young Indians (2)_____ increased tremendously. Doctors are surprised to note that young men and women with seemingly healthy lifestyle are suffering deadly heart attacks. (3)_____ diet and exercise play a (4)_____ role in a person's overall wellbeing, mental health is also a valuable factor. The (5)_____ urban lifestyle is causing anxiety and depression in young Indians which may be a major factor behind the increased numbers.

SubQuestion No : 25

Q.25 Select the most appropriate option to fill in blank number 5.

- Ans**
- 1. wilderness
 - 2. cosmic
 - 3. rapidly
 - 4. fast-paced

Question ID : 630680146354

Option 1 ID : 630680566298

Option 2 ID : 630680566300

Option 3 ID : 630680566299

Option 4 ID : 630680566301

Status : Answered

Chosen Option : 4