

Multi Tasking Non Technical Staff and Havaladar CBIC and CBN Examination 2023

Roll Number	
Candidate Name	
Venue Name	iON Digital Zone iDZ 2 Sector 62
Exam Date	13/09/2023
Exam Time	12:30 PM - 2:30 PM
Subject	MTS Non Tech Havaladar CBIC and CBN Examination 2023

Section : Numerical and Mathematical Ability

Q.1 A policeman sees a thief and starts chasing him. The distance between the thief and the policeman is 200 m and the speed of the thief is 8 km/h. If the policeman was able to catch the thief in 20 minutes, then the speed of the policeman is ____ km/h.

- Ans**
- ☒ 1. 8.4
 - ☒ 2. 9.2
 - ☒ 3. 8.6
 - ☒ 4. 8.2

Question ID : 264330153812

Option 1 ID : 264330602713

Option 2 ID : 264330602711

Option 3 ID : 264330602714

Option 4 ID : 264330602712

Status : Answered

Chosen Option : 3

Q.2 What sum of money (in ₹) will amount to ₹20,400 at the rate of 9% per annum simple interest in four years?

- Ans**
- ☒ 1. 18,000
 - ☒ 2. 12,000
 - ☒ 3. 20,000
 - ☒ 4. 15,000

Question ID : 264330156485

Option 1 ID : 264330613327

Option 2 ID : 264330613329

Option 3 ID : 264330613328

Option 4 ID : 264330613330

Status : Answered

Chosen Option : 4

Q.3 A medical store owner purchased medicines worth ₹18,000 from a company. He sold $\frac{2}{5}$ part of the medicine at a 35% loss. On which gain, he should sell the rest of the medicines so that he has neither gain nor loss?

- Ans**
- ☐ 1. $23\frac{2}{3}\%$
- ☐ 2. $20\frac{2}{3}\%$
- ☐ 3. $20\frac{1}{3}\%$
- ☒ 4. $23\frac{1}{3}\%$

Question ID : 264330155736

Option 1 ID : 264330610348

Option 2 ID : 264330610350

Option 3 ID : 264330610347

Option 4 ID : 264330610349

Status : Answered

Chosen Option : 4

Q.4 A mixture contains spirit and water in the ratio 3 : 2. If 2 litres of water is added to the mixture, the ratio becomes 5 : 4. Find the quantity of spirit in the mixture (in litres).

- Ans**
- ☒ 1. 15
- ☐ 2. 20
- ☐ 3. 25
- ☐ 4. 10

Question ID : 264330153844

Option 1 ID : 264330602840

Option 2 ID : 264330602839

Option 3 ID : 264330602841

Option 4 ID : 264330602842

Status : Answered

Chosen Option : 1

Q.5 A table showing the percentages of the total population of a Town by age group for the year 2016 is given below.

Age Group (in years)	Per cent
up to 15	35
16-30	18.5
30-40	12.5
40-50	25.77
51 and above	8.23

Out of every 1920 persons, the number of persons below 16 years is:

- Ans**
- ☒ 1. 672
- ☐ 2. 355
- ☐ 3. 312
- ☐ 4. 1027

Question ID : 264330153886

Option 1 ID : 264330603008

Option 2 ID : 264330603007

Option 3 ID : 264330603009

Option 4 ID : 264330603010

Status : Answered

Chosen Option : 1

Q.6 A number decreased by $\frac{75}{2}\%$ gives 378. What is the number?

- Ans
- ☐ 1. 606.4
 - ☐ 2. 608.0
 - ☐ 3. 603.2
 - ☒ 4. 604.8

Question ID : 264330155698
Option 1 ID : 264330610197
Option 2 ID : 264330610198
Option 3 ID : 264330610195
Option 4 ID : 264330610196
Status : Answered
Chosen Option : 4

Q.7 The LCM of the two numbers is 1440 and their HCF is 32. If the first number is 288, then find the second number.

- Ans
- ☐ 1. 150
 - ☐ 2. 145
 - ☐ 3. 180
 - ☒ 4. 160

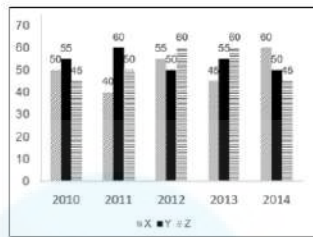
Question ID : 264330155724
Option 1 ID : 264330610300
Option 2 ID : 264330610301
Option 3 ID : 264330610302
Option 4 ID : 264330610299
Status : Answered
Chosen Option : 4

Q.8 A lady travels a distance of 150 metres in 30 minutes and the next 350 metres in 50 minutes. Her average speed during the whole journey is:

- Ans
- ☐ 1. $\frac{21}{24}$ km/h
 - ☐ 2. $\frac{11}{24}$ km/h
 - ☒ 3. $\frac{9}{24}$ km/h
 - ☐ 4. $\frac{7}{24}$ km/h

Question ID : 264330156513
Option 1 ID : 264330613441
Option 2 ID : 264330613439
Option 3 ID : 264330613440
Option 4 ID : 264330613442
Status : Answered
Chosen Option : 3

Q.9 The graph shows the production of tyres (in Lakhs) by three different companies X, Y, and Z over the years.
Directions: Study the following graph carefully to answer the question given below it.



What is the difference between the production of company Z in 2010 and the production of company X in 2014?

- Ans**
- ☒ 1. 20 lakhs
 - ☒ 2. 15 lakhs
 - ☒ 3. 10 lakhs
 - ☒ 4. 5 lakhs

Question ID : 264330153888

Option 1 ID : 264330603018

Option 2 ID : 264330603016

Option 3 ID : 264330603015

Option 4 ID : 264330603017

Status : Answered

Chosen Option : 2

Q.10 Three years ago, the value of car was ₹2,50,000. If the value depreciates by 6% every year, its value now is:

- Ans**
- ☒ 1. ₹2,04,676
 - ☒ 2. ₹2,07,646
 - ☒ 3. ₹2,07,466
 - ☒ 4. ₹2,04,766

Question ID : 264330153879

Option 1 ID : 264330602981

Option 2 ID : 264330602980

Option 3 ID : 264330602979

Option 4 ID : 264330602982

Status : Answered

Chosen Option : 2

Q.11 The income of A and B are in the ratio of 5 : 4 and the income of B and C are in the ratio of 5 : 6. What is the ratio of incomes of A and C?

- Ans**
- ☒ 1. 5 : 6
 - ☒ 2. 24 : 25
 - ☒ 3. 25 : 24
 - ☒ 4. 6 : 5

Question ID : 264330153805

Option 1 ID : 264330602685

Option 2 ID : 264330602684

Option 3 ID : 264330602683

Option 4 ID : 264330602686

Status : Answered

Chosen Option : 3

Q.12 Find the volume a cube, each of whose sides measures 7 cm.

- Ans
- ✓ 1. 343 cm^3
 - ✗ 2. 282 cm^3
 - ✗ 3. 294 cm^3
 - ✗ 4. 49 cm^3

Question ID : 264330153895

Option 1 ID : 264330603045

Option 2 ID : 264330603044

Option 3 ID : 264330603046

Option 4 ID : 264330603043

Status : Answered

Chosen Option : 1

Q.13 A person crosses a 750 m long street in 5 minutes. Find his speed in km/h.

- Ans
- ✗ 1. 8.40
 - ✓ 2. 9.00
 - ✗ 3. 7.20
 - ✗ 4. 10.80

Question ID : 264330156365

Option 1 ID : 264330612860

Option 2 ID : 264330612861

Option 3 ID : 264330612859

Option 4 ID : 264330612862

Status : Answered

Chosen Option : 2

Q.14 While calculating the average marks of a class, the score increased by 0.5 when marks of one student is wrongly entered as 54 instead of 45. The number of students in the class is:

- Ans
- ✗ 1. 36
 - ✓ 2. 18
 - ✗ 3. 45
 - ✗ 4. 54

Question ID : 264330154041

Option 1 ID : 264330603630

Option 2 ID : 264330603629

Option 3 ID : 264330603628

Option 4 ID : 264330603627

Status : Answered

Chosen Option : 2

Q.15 Two cuboids of dimension $2 \times 3 \times 4$ units and $2 \times 5 \times 4$ units are melted and a single cube is made. What is the side of the cube in units?

- Ans
- ☐ 1. 3.5
 - ☐ 2. 3.0
 - ☒ 3. 4.0
 - ☐ 4. 2.5

Question ID : 264330153828

Option 1 ID : 264330602777

Option 2 ID : 264330602776

Option 3 ID : 264330602778

Option 4 ID : 264330602775

Status : Answered

Chosen Option : 3

Q.16 Simplify the following expression.

$$\left(\frac{5}{3} + \frac{6}{5} \div \frac{18}{5}\right) \text{ of } \frac{5}{12} - \left(\frac{5}{6} \div \frac{5}{12}\right) \text{ of } \frac{5}{12} + \frac{2}{3} \text{ of } \frac{3}{2}$$

- Ans
- ☒ 1. 1
 - ☐ 2. $\frac{5}{6}$
 - ☐ 3. $\frac{6}{5}$
 - ☐ 4. 0

Question ID : 264330153832

Option 1 ID : 264330602792

Option 2 ID : 264330602793

Option 3 ID : 264330602794

Option 4 ID : 264330602791

Status : Answered

Chosen Option : 1

Q.17 A can complete a piece of work in 40 days and B can complete the same work in 60 days. They work together for 8 days. How much work is left?

- Ans
- ☐ 1. $\frac{2}{5}$
 - ☐ 2. $\frac{1}{5}$
 - ☒ 3. $\frac{2}{3}$
 - ☐ 4. $\frac{1}{3}$

Question ID : 264330155973

Option 1 ID : 264330611294

Option 2 ID : 264330611293

Option 3 ID : 264330611292

Option 4 ID : 264330611291

Status : Answered

Chosen Option : 3

Q.18 Ramesh purchased a bag for ₹1,275 and sold it at a gain of 15% but calculated on the selling price. Find the selling price of the bag.

- Ans
- ☒ 1. ₹1,325
 - ☒ 2. ₹1,400
 - ☒ 3. ₹1,475
 - ☒ 4. ₹1,500

Question ID : 264330158210

Option 1 ID : 264330620199

Option 2 ID : 264330620200

Option 3 ID : 264330620201

Option 4 ID : 264330620202

Status : Answered

Chosen Option : 3

Q.19 If the average marks of three sections of Class IX, having 25, 35 and 40 students, respectively, is 60, 70 and 80, then the average marks of all the students of Class IX is:

- Ans
- ☒ 1. 75
 - ☒ 2. 71.5
 - ☒ 3. 70.5
 - ☒ 4. 72

Question ID : 264330156467

Option 1 ID : 264330613255

Option 2 ID : 264330613256

Option 3 ID : 264330613257

Option 4 ID : 264330613258

Status : Answered

Chosen Option : 2

Q.20 A and B can do a piece of work in 5 days. B and C can do the same work in 8 days, while C and A can do it in 16 days. Find the time (in days) in which A, B and C can finish the work, working together.

- Ans
- ☒ 1. $5\frac{4}{31}$
 - ☒ 2. $4\frac{5}{31}$
 - ☒ 3. $5\frac{5}{17}$
 - ☒ 4. $5\frac{5}{31}$

Question ID : 264330155756

Option 1 ID : 264330610428

Option 2 ID : 264330610427

Option 3 ID : 264330610430

Option 4 ID : 264330610429

Status : Answered

Chosen Option : 4

Q.1 What should come in place of ? in the given series?

10 21 43 87 175 ?

- Ans ☒ 1. 308
☒ 2. 351
☒ 3. 376
☒ 4. 367

Question ID : 264330151556

Option 1 ID : 264330593853

Option 2 ID : 264330593854

Option 3 ID : 264330593851

Option 4 ID : 264330593852

Status : Answered

Chosen Option : 2

Q.2 If 'P' stands for '×', 'Q' stands for '+', 'R' stands for '-' and 'S' stands for '÷', what will come in place of the question mark (?) in the following equation?
9 P 9 R (7 P 3) S 24 R 6 P 2 = ?

- Ans ☒ 1. 76
☒ 2. 72
☒ 3. 63
☒ 4. 54

Question ID : 264330151794

Option 1 ID : 264330594804

Option 2 ID : 264330594806

Option 3 ID : 264330594805

Option 4 ID : 264330594803

Status : Answered

Chosen Option : 2

Q.3 Select the correct mirror image of the given figure when the mirror is placed at MN as shown below.

Trw2g5s
M
N

- Ans ☒ 1. s5g2w1T
☒ 2. 22g5w1T
☒ 3. 22g5w1T
☒ 4. 22gw21T

Question ID : 264330151517

Option 1 ID : 264330593696

Option 2 ID : 264330593695

Option 3 ID : 264330593698

Option 4 ID : 264330593697

Status : Answered

Chosen Option : 3

Q.4 Select the word-pair that best represents a similar relationship to the one expressed in the pair of words given below.

(The words must be considered as meaningful English words and must not be related to each other based on the number of letters/number of consonants/vowels in the word)

Lava : Volcano

- Ans**
- ☒ 1. Avalanche : Ice
 - ☒ 2. Ice : Glass
 - ☒ 3. Steam : Geyser
 - ☒ 4. Cascade : Precipice

Question ID : 264330154637

Option 1 ID : 264330606014

Option 2 ID : 264330606011

Option 3 ID : 264330606013

Option 4 ID : 264330606012

Status : Answered

Chosen Option : 3

Q.5 In a certain code language, 'krishi might be coming' is written as 'gi ji hi fi' and 'prem will be going' is written as 'li mi ri hi'. How is 'be' written in the given language?

- Ans**
- ☒ 1. li
 - ☒ 2. ri
 - ☒ 3. hi
 - ☒ 4. mi

Question ID : 264330155636

Option 1 ID : 264330609947

Option 2 ID : 264330609950

Option 3 ID : 264330609949

Option 4 ID : 264330609948

Status : Answered

Chosen Option : 3

Q.6 What should come in place of ? in the given series?

16 20 28 40 56 ?

- Ans**
- ☒ 1. 78
 - ☒ 2. 69
 - ☒ 3. 75
 - ☒ 4. 76

Question ID : 264330151714

Option 1 ID : 264330594484

Option 2 ID : 264330594485

Option 3 ID : 264330594486

Option 4 ID : 264330594483

Status : Answered

Chosen Option : 4

Q.7 10 is related to 97 following a certain logic. Following the same logic, 12 is related to 141. To which of the following is 14 related to, following the same logic?

- Ans** ☒ 1. 193
☐ 2. 191
☐ 3. 194
☐ 4. 192

Question ID : 264330151600
Option 1 ID : 264330594029
Option 2 ID : 264330594027
Option 3 ID : 264330594030
Option 4 ID : 264330594028
Status : Answered
Chosen Option : 1

Q.8 If F means '-', G means '×', D means '+', B means '÷', then what will come in place of the question mark (?) in the following equation?
15 G 10 D 30 B 43 F 28 = ?

- Ans** ☐ 1. 30
☒ 2. 20
☐ 3. 25
☐ 4. 10

Question ID : 264330154683
Option 1 ID : 264330606198
Option 2 ID : 264330606196
Option 3 ID : 264330606197
Option 4 ID : 264330606195
Status : Answered
Chosen Option : 2

Q.9 What should come in place of '?' in the given series?

46 ? 358 1060 3166 9484 28438

- Ans** ☐ 1. 132
☐ 2. 122
☐ 3. 116
☒ 4. 124

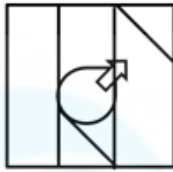
Question ID : 264330151444
Option 1 ID : 264330593404
Option 2 ID : 264330593403
Option 3 ID : 264330593406
Option 4 ID : 264330593405
Status : Not Answered
Chosen Option : --

Q.10 Select the option figure in which the given figure (X) is embedded as its part (rotation is NOT allowed).

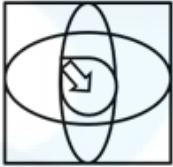


Ans

☒ 1.



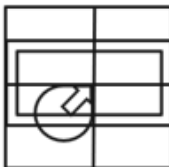
☒ 2.



☒ 3.



☒ 4.



Question ID : 264330151731

Option 1 ID : 264330594554

Option 2 ID : 264330594552

Option 3 ID : 264330594553

Option 4 ID : 264330594551

Status : Answered

Chosen Option : 4

Q.11 12 is related to 59 following a certain logic. Following the same logic, 17 is related to 84. To which of the following is 19 related to, following the same logic?

Ans

☒ 1. 91

☒ 2. 94

☒ 3. 93

☒ 4. 92

Question ID : 264330151588

Option 1 ID : 264330593979

Option 2 ID : 264330593982

Option 3 ID : 264330593981

Option 4 ID : 264330593980

Status : Answered

Chosen Option : 2

Q.12 In a certain code language, 'DEAF' is coded as '5718' and 'HEAD' is coded as '8137'. What is the code for 'H' in the given code language?

- Ans
- ☒ 1. 1
 - ☒ 2. 3
 - ☒ 3. 8
 - ☒ 4. 7

Question ID : 264330151694

Option 1 ID : 264330594405

Option 2 ID : 264330594403

Option 3 ID : 264330594406

Option 4 ID : 264330594404

Status : Answered

Chosen Option : 2

Q.13 What should come in place of ? in the given series based on the English alphabetical order?

YIQ, AKR, CMS, EOT, ?

- Ans
- ☒ 1. HPV
 - ☒ 2. GQU
 - ☒ 3. FPU
 - ☒ 4. FRV

Question ID : 264330155785

Option 1 ID : 264330610546

Option 2 ID : 264330610544

Option 3 ID : 264330610545

Option 4 ID : 264330610543

Status : Answered

Chosen Option : 2

Q.14 What should come in place of ? in the given series based on the English alphabetical order?

FQS, IUT, LYU, OCV, ?

- Ans
- ☒ 1. QFV
 - ☒ 2. QHU
 - ☒ 3. SHV
 - ☒ 4. RGW

Question ID : 264330155798

Option 1 ID : 264330610595

Option 2 ID : 264330610597

Option 3 ID : 264330610598

Option 4 ID : 264330610596

Status : Answered

Chosen Option : 4

Q.15 Read the given statements and conclusions carefully. You have to take the given statements to be true even if they seem to be at variance from commonly known facts. You have to decide which conclusion/s logically follow/s from the given statements.

Statements: All wool is crochet. Some crochet are skirts. All skirts are bread.

Conclusion I: Some crochet is wool.

Conclusion II: Some bread is crochet.

- Ans
- ☒ 1. Neither conclusion (I) nor (II) is follow.
 - ☒ 2. Only conclusion (I) is follow.
 - ☒ 3. Both conclusions (I) and (II) are follow.
 - ☒ 4. Only conclusion (II) is follow.

Question ID : 264330155933

Option 1 ID : 264330611137

Option 2 ID : 264330611135

Option 3 ID : 264330611138

Option 4 ID : 264330611136

Status : Answered

Chosen Option : 3

Q.16 K, L, M, N, O, P, Q and R are sitting around a square table facing the center of the table. Some of them are sitting at the corners while some are sitting at the exact center of the sides. R sits second to the right of Q. Q sits in one of the corners. M sits third to the left of N. M does not sit in any of the corners. O is the immediate neighbour of Q and R. K is not the neighbour of N. L sits third to the left of R.

How many people sit between K and Q, when counted from the right of K?

- Ans
- ☒ 1. Two
 - ☒ 2. One
 - ☒ 3. Three
 - ☒ 4. Four

Question ID : 264330155537

Option 1 ID : 264330609552

Option 2 ID : 264330609551

Option 3 ID : 264330609553

Option 4 ID : 264330609554

Status : Answered

Chosen Option : 3

Q.17 Read the given statements and conclusions carefully. You have to take the given statements to be true even if they seem to be at variance from commonly known facts. You have to decide which conclusion/s logically follow/s from the given statements.

Statements: Some chairs are fans. All fans are pots. Some pots are hot.

Conclusion I: Some fans are chairs.

Conclusion II: Some hot are pots.

- Ans
- ☒ 1. Only conclusion (I) is follow.
 - ☒ 2. Both conclusions (I) and (II) are follow.
 - ☒ 3. Only conclusion (II) is follow.
 - ☒ 4. Neither conclusion (I) nor (II) is follow.

Question ID : 264330155897

Option 1 ID : 264330610991

Option 2 ID : 264330610994

Option 3 ID : 264330610992

Option 4 ID : 264330610993

Status : Answered

Chosen Option : 2

Q.18 Select the combination of letters that when sequentially placed in the blanks of the given series, will complete the series.

P _ Q _ Q Q _ _ Q P _ Q

- Ans
- ☒ 1. PPQQP
 - ☒ 2. QPPQQ
 - ☒ 3. PPQPP
 - ☒ 4. QPQPQ

Question ID : 264330151651

Option 1 ID : 264330594231

Option 2 ID : 264330594232

Option 3 ID : 264330594233

Option 4 ID : 264330594234

Status : Answered

Chosen Option : 2

Q.19 Which figure should replace the question mark (?) if the following figure series were to be continued?

Z	7	4	=	
B 4 7 =	= Z S B	S B = Z	Z 4 F S	?
S	4	F	B	

Ans

☒ 1.

S
= F 4 B
Z

☒ 2.

B
S Z 4 F
△

☒ 3.

B
F S 4 Z
△

☒ 4.

B
F S Z 4
△

Question ID : 264330154749

Option 1 ID : 264330606459

Option 2 ID : 264330606461

Option 3 ID : 264330606462

Option 4 ID : 264330606460

Status : Answered

Chosen Option : 3

Q.20 If 7th Nov 2005 is Monday, then what will be the day of the week on 17th Nov 2015?

- Ans**
- ☒ 1. Monday
 - ☒ 2. Tuesday
 - ☒ 3. Saturday
 - ☒ 4. Friday

Question ID : 264330154336

Option 1 ID : 264330604808

Option 2 ID : 264330604807

Option 3 ID : 264330604810

Option 4 ID : 264330604809

Status : Answered

Chosen Option : 2

Section : General Awareness

Q.1 The novel 'God of Small Things' is a creation of which novelist?

- Ans**
- ☒ 1. Kamala Das
 - ☒ 2. Amrita Pritam
 - ☒ 3. Ashapurna Devi
 - ☒ 4. Arundhati Roy

Question ID : 264330160970

Option 1 ID : 264330631212

Option 2 ID : 264330631213

Option 3 ID : 264330631211

Option 4 ID : 264330631214

Status : Not Answered

Chosen Option : --

Q.2 Which of the following terms best describes the average number of runs a batter makes per 100 deliveries in cricket?

- Ans**
- ☒ 1. Economy rate
 - ☒ 2. Batting average
 - ☒ 3. Strike rate
 - ☒ 4. Batting rate

Question ID : 264330161160

Option 1 ID : 264330631971

Option 2 ID : 264330631973

Option 3 ID : 264330631972

Option 4 ID : 264330631974

Status : Answered

Chosen Option : 3

Q.3 Yuki Bhambri and Saketh Myneni won the Bangkok Open Challenger title 2023. They are related to which sport?

- Ans ☒ 1. Badminton
☒ 2. Squash
☒ 3. Tennis
☒ 4. Table Tennis

Question ID : 264330158368
Option 1 ID : 264330620832
Option 2 ID : 264330620834
Option 3 ID : 264330620831
Option 4 ID : 264330620833
Status : Not Answered
Chosen Option : --

Q.4 Deba Prasad Das, Pankaj Charan Das and Gangadhar Pradhan are associated with which of the following dance forms?

- Ans ☒ 1. Odissi
☒ 2. Bharatanatyam
☒ 3. Manipuri
☒ 4. Kathak

Question ID : 264330160814
Option 1 ID : 264330630587
Option 2 ID : 264330630589
Option 3 ID : 264330630590
Option 4 ID : 264330630588
Status : Not Answered
Chosen Option : --

Q.5 Which of the following is NOT a fundamental duty listed in the Indian Constitution?

- Ans ☒ 1. To uphold and protect the sovereignty, unity and integrity of India
☒ 2. To engage in political activities to promote democracy
☒ 3. To value and preserve the rich heritage of our composite culture
☒ 4. To safeguard public property and to abjure violence

Question ID : 264330162246
Option 1 ID : 264330636311
Option 2 ID : 264330636314
Option 3 ID : 264330636313
Option 4 ID : 264330636312
Status : Answered
Chosen Option : 1

Q.6 As of 2022, 12-feet statue of Adi Shankaracharya, which was unveiled by the Prime Minister of India is located in _____

- Ans ☒ 1. Pune
☒ 2. Ahmedabad
☒ 3. Varanasi
☒ 4. Kedarnath

Question ID : 264330162698
Option 1 ID : 264330638113
Option 2 ID : 264330638114
Option 3 ID : 264330638112
Option 4 ID : 264330638111
Status : Answered
Chosen Option : 1

Q.7 During cell division, the formation of a new cell wall is followed by the accumulation of:

- Ans
- ☒ 1. peristome
 - ☒ 2. periplasm
 - ☒ 3. phragmoplast
 - ☒ 4. protoplast

Question ID : 264330156616

Option 1 ID : 264330613854

Option 2 ID : 264330613853

Option 3 ID : 264330613851

Option 4 ID : 264330613852

Status : Answered

Chosen Option : 4

Q.8 Bhanu Ji is associated with which of the following Gharanas of Kathak?

- Ans
- ☒ 1. Lucknow
 - ☒ 2. Raigarh
 - ☒ 3. Banaras
 - ☒ 4. Jaipur

Question ID : 264330160808

Option 1 ID : 264330630564

Option 2 ID : 264330630566

Option 3 ID : 264330630565

Option 4 ID : 264330630563

Status : Not Answered

Chosen Option : --

Q.9 Which of the following is an example of capital expenditure in the government budget?

- Ans
- ☒ 1. Interest payment on a loan
 - ☒ 2. Purchase of military equipment
 - ☒ 3. Maintenance of government buildings
 - ☒ 4. Subsidies provided to farmers

Question ID : 264330157276

Option 1 ID : 264330616469

Option 2 ID : 264330616468

Option 3 ID : 264330616470

Option 4 ID : 264330616467

Status : Answered

Chosen Option : 2

Q.10 FIH Men's Hockey World Cup 2023 was held in which Indian state/UT?

- Ans
- ☒ 1. Maharashtra
 - ☒ 2. New Delhi
 - ☒ 3. Odisha
 - ☒ 4. Gujarat

Question ID : 264330158218

Option 1 ID : 264330620232

Option 2 ID : 264330620233

Option 3 ID : 264330620231

Option 4 ID : 264330620234

Status : Answered

Chosen Option : 3

Q.11 An image of which of the following elements is shown by the map of Cyprus from which the element got its name?

- Ans
- ☒ 1. Silver
 - ☒ 2. Cobalt
 - ☒ 3. Copper
 - ☒ 4. Sulphur

Question ID : 264330161058

Option 1 ID : 264330631564

Option 2 ID : 264330631566

Option 3 ID : 264330631565

Option 4 ID : 264330631563

Status : Answered

Chosen Option : 3

Q.12 Consider the following statements about Abhinav Bharat Society.

- 1) The society was a community of socialists believed in an armed revolution.
- 2) The society was founded by Jaya Prakash Narayan.
- 3) Mitra Mela, a revolutionary secret society was renamed Abhinav Bharat in 1904.

Select the correct statement(s) using the codes given below.

- Ans
- ☒ 1. Both 1 and 2
 - ☒ 2. 1, 2 and 3
 - ☒ 3. Both 2 and 3
 - ☒ 4. Both 1 and 3

Question ID : 264330160884

Option 1 ID : 264330630867

Option 2 ID : 264330630870

Option 3 ID : 264330630869

Option 4 ID : 264330630868

Status : Answered

Chosen Option : 3

Q.13 The Pradhan Mantri Garib Kalyan Rojgar Abhiyaan (PMGKRA) was launched in the year 2020 by which Ministry of Government of India?

- Ans
- ☒ 1. Ministry of Ports, Shipping and Waterways
 - ☒ 2. Ministry of Social Justice and Empowerment
 - ☒ 3. Ministry of Micro, Small and Medium Enterprises
 - ☒ 4. Ministry of Rural Development

Question ID : 264330161577

Option 1 ID : 264330633637

Option 2 ID : 264330633636

Option 3 ID : 264330633635

Option 4 ID : 264330633638

Status : Answered

Chosen Option : 4

Q.14 Who among the following is the author of the Hindi novel 'Raag Darbari'?

- Ans** ☒ 1. Shrilal Shukla
☐ 2. Rahul Sankrityayan
☐ 3. Premchand
☐ 4. Kashinath Singh

Question ID : 264330161763
Option 1 ID : 264330634382
Option 2 ID : 264330634380
Option 3 ID : 264330634381
Option 4 ID : 264330634379
Status : Not Answered
Chosen Option : --

Q.15 Who is the first female classical dancer in Indian history to be nominated as a Member of Rajya Sabha, the upper house of the Parliament of India?

- Ans** ☐ 1. Mukti Mohan
☐ 2. Shobha Naidu
☐ 3. Sanjukta Panigrahi
☒ 4. Rukmini Devi Arundale

Question ID : 264330160982
Option 1 ID : 264330631262
Option 2 ID : 264330631259
Option 3 ID : 264330631260
Option 4 ID : 264330631261
Status : Not Answered
Chosen Option : --

Q.16 What does the term 'Overdraft' mean in banking?

- Ans** ☐ 1. The process of transferring funds between bank accounts
☐ 2. The maximum withdrawal limit from an ATM
☒ 3. Short-term financing facility
☐ 4. The interest charged on loans

Question ID : 264330161586
Option 1 ID : 264330633671
Option 2 ID : 264330633673
Option 3 ID : 264330633674
Option 4 ID : 264330633672
Status : Answered
Chosen Option : 3

Q.17 Which of the following is an example of Eastern Ghats peak?

- Ans** ☐ 1. Doddabetta
☒ 2. Mahendragiri
☐ 3. Guru Shikhar
☐ 4. Anamudi

Question ID : 264330161494
Option 1 ID : 264330633303
Option 2 ID : 264330633306
Option 3 ID : 264330633305
Option 4 ID : 264330633304
Status : Answered
Chosen Option : 4

Q.18 Indian musician, Pandit Hari Prasad Chaurasia used to play which of the following musical instruments?

- Ans ☒ 1. Veena
☒ 2. Flute
☒ 3. Sarangi
☒ 4. Guitar

Question ID : 264330161766
Option 1 ID : 264330634391
Option 2 ID : 264330634394
Option 3 ID : 264330634392
Option 4 ID : 264330634393
Status : Not Answered
Chosen Option : --

Q.19 Which of the following was the first major and decisive victory for the East India Company on the soil of India?

- Ans ☒ 1. Battle of Sindhuli
☒ 2. First Anglo-Maratha War
☒ 3. Battle of Plassey
☒ 4. Battle of Tiruvannamalai

Question ID : 264330161736
Option 1 ID : 264330634274
Option 2 ID : 264330634272
Option 3 ID : 264330634273
Option 4 ID : 264330634271
Status : Answered
Chosen Option : 3

Q.20 Which of the following locations receives the most rainfall in India?

- Ans ☒ 1. Prayagraj
☒ 2. Guwahati
☒ 3. Jaisalmer
☒ 4. Mawsynram

Question ID : 264330161306
Option 1 ID : 264330632551
Option 2 ID : 264330632553
Option 3 ID : 264330632554
Option 4 ID : 264330632552
Status : Answered
Chosen Option : 4

Q.21 According to the Census of India 2011, what was the literacy rate recorded in Kerala?

- Ans ☒ 1. 85.8%
☒ 2. 90.3%
☒ 3. 87.9%
☒ 4. 94.0%

Question ID : 264330161556
Option 1 ID : 264330633554
Option 2 ID : 264330633552
Option 3 ID : 264330633553
Option 4 ID : 264330633551
Status : Answered
Chosen Option : 2

Q.22 The Digital Lok Adalat, powered by AI (Artificial Intelligence) and Blockchain, was launched by the then National Legal Services Authority Chairman _____ during the 18th All India Legal Services Authorities' meet held in Jaipur in July 2022.

- Ans**
- ☒ 1. Justice RN Mishra
 - ☒ 2. Justice DY Chandrachud
 - ☒ 3. Justice AS Anand
 - ☒ 4. Justice Uday Umesh Lalit

Question ID : 264330161412
Option 1 ID : 264330632978
Option 2 ID : 264330632976
Option 3 ID : 264330632977
Option 4 ID : 264330632975
Status : Answered
Chosen Option : 2

Q.23 Janmashtami is a Hindu festival that celebrates the birth (janma) of the god, Krishna on the eighth (ashtami) day of the dark fortnight of the Hindu month of _____.

- Ans**
- ☒ 1. Bhadrapada
 - ☒ 2. Ashwin
 - ☒ 3. Shravan
 - ☒ 4. Ashadha

Question ID : 264330160829
Option 1 ID : 264330630647
Option 2 ID : 264330630649
Option 3 ID : 264330630648
Option 4 ID : 264330630650
Status : Answered
Chosen Option : 1

Q.24 Which of the following music directors is known as 'Mozart of Madras'?

- Ans**
- ☒ 1. AR Rahman
 - ☒ 2. Madan Mohan
 - ☒ 3. RD Burman
 - ☒ 4. Himesh Reshammiya

Question ID : 264330162285
Option 1 ID : 264330636468
Option 2 ID : 264330636470
Option 3 ID : 264330636467
Option 4 ID : 264330636469
Status : Answered
Chosen Option : 3

Q.25 What is the tenure of the Vice-President of India?

- Ans ☒ 1. Until the age of 65
☒ 2. Until he wants to hold the office
☒ 3. 6 years
☒ 4. 5 years

Question ID : 264330159911

Option 1 ID : 264330626991

Option 2 ID : 264330626994

Option 3 ID : 264330626992

Option 4 ID : 264330626993

Status : Answered

Chosen Option : 4

Section : English Language and Comprehension

Q.1 Select the most appropriate option that can substitute the underlined segment in the given sentence.

If I hand her a flower and say, "Give it to mamma," she take it to her mother.

- Ans ☒ 1. was taking it
☒ 2. takes it
☒ 3. had took it
☒ 4. had taken it

Question ID : 264330153488

Option 1 ID : 264330601468

Option 2 ID : 264330601470

Option 3 ID : 264330601469

Option 4 ID : 264330601467

Status : Answered

Chosen Option : 2

**Q.2 Select the most appropriate ANTONYM of the given word.
Divergent**

- Ans ☒ 1. Addition
☒ 2. Similar
☒ 3. Disrespectful
☒ 4. Obvious

Question ID : 264330152721

Option 1 ID : 264330598485

Option 2 ID : 264330598484

Option 3 ID : 264330598483

Option 4 ID : 264330598486

Status : Answered

Chosen Option : 2

Q.3 Parts of the following sentence have been underlined and given as options. Select the option that contains an error.

To much seriousness hardens the world, pinning it down with rules.

- Ans
- ☒ 1. with rules
 - ☒ 2. hardens the
 - ☒ 3. to much
 - ☒ 4. world, pinning

Question ID : 264330153204

Option 1 ID : 264330600378

Option 2 ID : 264330600375

Option 3 ID : 264330600376

Option 4 ID : 264330600377

Status : Answered

Chosen Option : 3

Q.4 Select the most appropriate meaning of the underlined idiom.

He managed to save his father's business by the sweat of his brow.

- Ans
- ☒ 1. incidentally
 - ☒ 2. hard work
 - ☒ 3. tricks and strategies
 - ☒ 4. any way possible

Question ID : 264330153641

Option 1 ID : 264330602038

Option 2 ID : 264330602037

Option 3 ID : 264330602035

Option 4 ID : 264330602036

Status : Answered

Chosen Option : 3

Q.5 Select the option that can be used as a one-word substitute for the given phrase.

A place where water is collected and stored for future use.

- Ans
- ☒ 1. Aquarium
 - ☒ 2. Resort
 - ☒ 3. Sanatorium
 - ☒ 4. Reservoir

Question ID : 264330152670

Option 1 ID : 264330598285

Option 2 ID : 264330598286

Option 3 ID : 264330598283

Option 4 ID : 264330598284

Status : Answered

Chosen Option : 4

Q.6 Select the option that will improve the underlined part of the given sentence. In case no improvement is needed, select 'No improvement required'.

The new chairman of the company announced attracted bonus for the employees on the occasion of the new year.

- Ans ☒ 1. No improvement required
- ☒ 2. announced an attractive bonus for the employees
- ☒ 3. announcing attracted bonus for the employees
- ☒ 4. announced attracting bonus for the employees

Question ID : 264330153612

Option 1 ID : 264330601934

Option 2 ID : 264330601933

Option 3 ID : 264330601932

Option 4 ID : 264330601931

Status : Answered

Chosen Option : 2

Q.7 The following sentence has been divided into four parts. Identify the part that contains an error.

(A) The institute / (B) have been / (C) divided into / (D) multiple departments

- Ans ☒ 1. A
- ☒ 2. B
- ☒ 3. C
- ☒ 4. D

Question ID : 264330152623

Option 1 ID : 264330598096

Option 2 ID : 264330598095

Option 3 ID : 264330598098

Option 4 ID : 264330598097

Status : Answered

Chosen Option : 2

Q.8 Select the option that can be used as a one-word substitute for the underlined group of words.

They allowed us to powder by crushing the spices, pick over the raisins and lick the stirring spoons.

- Ans ☒ 1. gain
- ☒ 2. greet
- ☒ 3. guess
- ☒ 4. grind

Question ID : 264330153491

Option 1 ID : 264330601482

Option 2 ID : 264330601479

Option 3 ID : 264330601480

Option 4 ID : 264330601481

Status : Answered

Chosen Option : 4

Q.9 Select the most appropriate synonym of the given word.
Mild

- Ans ☒ 1. Scathing
☒ 2. Brittle
☒ 3. Gentle
☒ 4. Severe

Question ID : 264330151823

Option 1 ID : 264330594921

Option 2 ID : 264330594920

Option 3 ID : 264330594919

Option 4 ID : 264330594922

Status : Answered

Chosen Option : 3

Q.10 Select the most appropriate idiom to fill in the blank.
Instead of answering the question directly, the politician kept _____.

- Ans ☒ 1. crying over spilt milk
☒ 2. pointing at his laurels
☒ 3. beating around the bush
☒ 4. spilling the bean

Question ID : 264330151889

Option 1 ID : 264330595177

Option 2 ID : 264330595176

Option 3 ID : 264330595178

Option 4 ID : 264330595175

Status : Answered

Chosen Option : 3

Q.11 Select the most appropriate option that can substitute the underlined segment in the given sentence.
Rishi asked Karan will he get a new football for him?

- Ans ☒ 1. would he get a new football for him?
☒ 2. if he would get a new football for him.
☒ 3. if would he get a new football for him?
☒ 4. if he will get a new football for him?

Question ID : 264330153504

Option 1 ID : 264330601529

Option 2 ID : 264330601530

Option 3 ID : 264330601527

Option 4 ID : 264330601528

Status : Answered

Chosen Option : 2

Q.12 Select the INCORRECTLY spelt word.

- Ans** ☒ 1. Omitted
☒ 2. Retrospect
☒ 3. Conscience
☒ 4. Admission

Question ID : 264330152690

Option 1 ID : 264330598363

Option 2 ID : 264330598364

Option 3 ID : 264330598366

Option 4 ID : 264330598365

Status : Answered

Chosen Option : 2

**Q.13 Select the most appropriate ANTONYM of the given word.
Often**

- Ans** ☒ 1. Generally
☒ 2. Rarely
☒ 3. Periodically
☒ 4. Usually

Question ID : 264330152775

Option 1 ID : 264330598691

Option 2 ID : 264330598692

Option 3 ID : 264330598694

Option 4 ID : 264330598693

Status : Answered

Chosen Option : 2

**Q.14 Parts of the following sentence have been given as options. Select the option that contains an error.
The boy whose the sister is ill has left.**

- Ans** ☒ 1. is ill
☒ 2. has left
☒ 3. The boy
☒ 4. whose the sister

Question ID : 264330152795

Option 1 ID : 264330598773

Option 2 ID : 264330598774

Option 3 ID : 264330598771

Option 4 ID : 264330598772

Status : Answered

Chosen Option : 4

Q.15 Select the most appropriate option to fill in the blank.

A strong _____ for mathematics and problem-solving can be very useful.

- Ans ☒ 1. strength
☒ 2. aptitude
☒ 3. functioning
☒ 4. perception

Question ID : 264330151865

Option 1 ID : 264330595080

Option 2 ID : 264330595081

Option 3 ID : 264330595079

Option 4 ID : 264330595082

Status : Answered

Chosen Option : 2

Q.16 Select the INCORRECTLY spelt word.

- Ans ☒ 1. Recommendation
☒ 2. Priviledge
☒ 3. Affiliate
☒ 4. Parachute

Question ID : 264330152689

Option 1 ID : 264330598361

Option 2 ID : 264330598359

Option 3 ID : 264330598360

Option 4 ID : 264330598362

Status : Answered

Chosen Option : 2

Q.17 Select the most appropriate idiom to fill in the blank.

My manager forced me to resign from my job as a chef since I underwent a spine surgery. I was depressed and had lost all hope. Later my father motivated me to open my own café and showed me ways to be independent. After all it is true that one should not _____.

- Ans ☒ 1. grease the palm
☒ 2. blow one's own trumpet
☒ 3. cry over spilt milk
☒ 4. blow hot and cold

Question ID : 264330152879

Option 1 ID : 264330599108

Option 2 ID : 264330599110

Option 3 ID : 264330599107

Option 4 ID : 264330599109

Status : Answered

Chosen Option : 3

Q.18 Select the most appropriate meaning of the underlined idiom in the following sentence.

He was quaking in his boots when he had to give a speech on the stage.

- Ans
- ☒ 1. To tremble in excitement
 - ☒ 2. To shake in happiness
 - ☒ 3. To tremble with fear
 - ☒ 4. To shake in excitement

Question ID : 264330153075

Option 1 ID : 264330599864

Option 2 ID : 264330599866

Option 3 ID : 264330599865

Option 4 ID : 264330599863

Status : Answered

Chosen Option : 1

Q.19 Select the most appropriate option that can substitute the underlined segment in the given sentence. If there is no need to substitute it, select 'No substitution required'.
If I will get good marks, my father will buy me a laptop.

- Ans
- ☒ 1. No substitution required
 - ☒ 2. am getting
 - ☒ 3. gets
 - ☒ 4. get

Question ID : 264330152728

Option 1 ID : 264330598514

Option 2 ID : 264330598513

Option 3 ID : 264330598511

Option 4 ID : 264330598512

Status : Answered

Chosen Option : 4

Q.20 Four words of the following sentence have been underlined and given as options.
Select the option that contains a spelling error.
Human activities that release longlived greenhouse gases into the atmosphere also leed to the enhancement of concentrations of shorterlived ozone and particulate matter in the atmosphere.

- Ans
- ☒ 1. concentrations
 - ☒ 2. particulate
 - ☒ 3. release
 - ☒ 4. leed

Question ID : 264330151930

Option 1 ID : 264330595337

Option 2 ID : 264330595338

Option 3 ID : 264330595335

Option 4 ID : 264330595336

Status : Answered

Chosen Option : 4

Comprehension:

In the following passage, some words have been deleted. Read the passage carefully and select the most appropriate option to fill in each blank.

Fruits and vegetables contain important vitamins, minerals and plant (1)_____. They also contain fibre. There are many (2)_____ of fruits and vegetables available and many ways to prepare, cook and serve them. A diet (3)_____ in fruit and vegetables can help protect you against cancer, diabetes and heart disease. Eat five kinds of vegetable and two kinds of fruit every day for good health. Most Indians do not eat (4)_____ fruit and vegetables. When buying and serving fruit and vegetables, aim for variety to get the most (5)_____ and appeal.

SubQuestion No : 21

Q.21 Select the most appropriate option to fill in blank number 1.

- Ans
- ☒ 1. residue
 - ☒ 2. bacteria
 - ☒ 3. chemicals
 - ☒ 4. organisms

Question ID : 264330153326

Option 1 ID : 264330600855

Option 2 ID : 264330600858

Option 3 ID : 264330600856

Option 4 ID : 264330600857

Status : Answered

Chosen Option : 3

Comprehension:

In the following passage, some words have been deleted. Read the passage carefully and select the most appropriate option to fill in each blank.

Fruits and vegetables contain important vitamins, minerals and plant (1)_____. They also contain fibre. There are many (2)_____ of fruits and vegetables available and many ways to prepare, cook and serve them. A diet (3)_____ in fruit and vegetables can help protect you against cancer, diabetes and heart disease. Eat five kinds of vegetable and two kinds of fruit every day for good health. Most Indians do not eat (4)_____ fruit and vegetables. When buying and serving fruit and vegetables, aim for variety to get the most (5)_____ and appeal.

SubQuestion No : 22

Q.22 Select the most appropriate option to fill in blank number 2.

- Ans
- ☒ 1. traits
 - ☒ 2. characters
 - ☒ 3. varieties
 - ☒ 4. uses

Question ID : 264330153327

Option 1 ID : 264330600860

Option 2 ID : 264330600861

Option 3 ID : 264330600862

Option 4 ID : 264330600859

Status : Answered

Chosen Option : 3

Comprehension:

In the following passage, some words have been deleted. Read the passage carefully and select the most appropriate option to fill in each blank.

Fruits and vegetables contain important vitamins, minerals and plant (1)_____. They also contain fibre. There are many (2)_____ of fruits and vegetables available and many ways to prepare, cook and serve them. A diet (3)_____ in fruit and vegetables can help protect you against cancer, diabetes and heart disease. Eat five kinds of vegetable and two kinds of fruit every day for good health. Most Indians do not eat (4)_____ fruit and vegetables. When buying and serving fruit and vegetables, aim for variety to get the most (5)_____ and appeal.

SubQuestion No : 23

Q.23 Select the most appropriate option to fill in blank number 3.

- Ans ☒ 1. immersed
☒ 2. rich
☒ 3. content
☒ 4. varied

Question ID : 264330153328

Option 1 ID : 264330600863

Option 2 ID : 264330600865

Option 3 ID : 264330600864

Option 4 ID : 264330600866

Status : Answered

Chosen Option : 2

Comprehension:

In the following passage, some words have been deleted. Read the passage carefully and select the most appropriate option to fill in each blank.

Fruits and vegetables contain important vitamins, minerals and plant (1)_____. They also contain fibre. There are many (2)_____ of fruits and vegetables available and many ways to prepare, cook and serve them. A diet (3)_____ in fruit and vegetables can help protect you against cancer, diabetes and heart disease. Eat five kinds of vegetable and two kinds of fruit every day for good health. Most Indians do not eat (4)_____ fruit and vegetables. When buying and serving fruit and vegetables, aim for variety to get the most (5)_____ and appeal.

SubQuestion No : 24

Q.24 Select the most appropriate option to fill in blank number 4.

- Ans ☒ 1. some
☒ 2. enough
☒ 3. many
☒ 4. plenty

Question ID : 264330153329

Option 1 ID : 264330600869

Option 2 ID : 264330600868

Option 3 ID : 264330600867

Option 4 ID : 264330600870

Status : Answered

Chosen Option : 2

Comprehension:

In the following passage, some words have been deleted. Read the passage carefully and select the most appropriate option to fill in each blank.

Fruits and vegetables contain important vitamins, minerals and plant (1)_____. They also contain fibre. There are many (2)_____ of fruits and vegetables available and many ways to prepare, cook and serve them. A diet (3)_____ in fruit and vegetables can help protect you against cancer, diabetes and heart disease. Eat five kinds of vegetable and two kinds of fruit every day for good health. Most Indians do not eat (4)_____ fruit and vegetables. When buying and serving fruit and vegetables, aim for variety to get the most (5)_____ and appeal.

SubQuestion No : 25

Q.25 Select the most appropriate option to fill in blank number 5.

Ans

- ☒ 1. assortment
- ☒ 2. fun
- ☒ 3. nutrients
- ☒ 4. advancement

Question ID : **264330153330**

Option 1 ID : **264330600872**

Option 2 ID : **264330600873**

Option 3 ID : **264330600874**

Option 4 ID : **264330600871**

Status : **Answered**

Chosen Option : **3**