

Combined Graduate Level Examination 2024 Tier I

Roll Number	
Candidate Name	
Venue Name	
Exam Date	23/09/2024
Exam Time	9:00 AM - 10:00 AM
Subject	Combined Graduate Level Examination Tier I

Section : General Intelligence and Reasoning

Q.1 Based on the position in the English alphabetical order, three of the following letter-clusters are alike in some manner and one is different. Select the odd letter-cluster.
Note: The odd one out is not based on the number of consonants/vowels or their position in the letter cluster.

- Ans** 1. PSKI
 2. TWGD
 3. JMQN
 4. MPNK

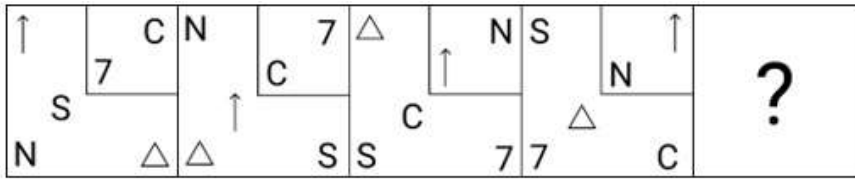
Question ID : 630680416108
Option 1 ID : 6306801623198
Option 2 ID : 6306801623197
Option 3 ID : 6306801623196
Option 4 ID : 6306801623195
Status : Answered
Chosen Option : 1

Q.2 Which of the following terms will replace the question mark (?) in the given series?
JHOQ, NFSO, ?, VBAK, ZZEI

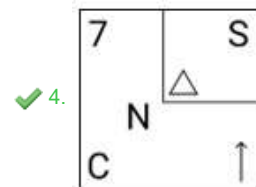
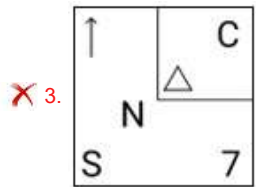
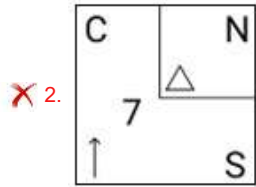
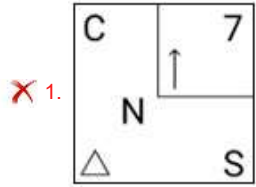
- Ans** 1. RCWM
 2. RCXM
 3. RDMW
 4. RDWM

Question ID : 630680417058
Option 1 ID : 6306801626998
Option 2 ID : 6306801626996
Option 3 ID : 6306801626995
Option 4 ID : 6306801626997
Status : Answered
Chosen Option : 4

Q.3 Which figure should replace the question mark (?) if the following series were to be continued?



Ans



Question ID : 630680214467
 Option 1 ID : 630680831900
 Option 2 ID : 630680831901
 Option 3 ID : 630680831899
 Option 4 ID : 630680831902
 Status : Answered
 Chosen Option : 4

Q.4 Select the number that will come in the place of the question mark(?), if '+' and '-' are interchanged and 'x' and '÷' are interchanged
 $63 \times 7 \div 13 - 64 + 42 = ?$

Ans ✓ 1. 139

✗ 2. 131

✗ 3. 144

✗ 4. 124

Question ID : 630680163584
 Option 1 ID : 630680633522
 Option 2 ID : 630680633523
 Option 3 ID : 630680633521
 Option 4 ID : 630680633520
 Status : Answered
 Chosen Option : 1

Q.5 In a certain code language, 'RADIO' is written as 'SZEHP' and 'FREQUENCY' is written as 'GQFPVDOBZ'. How will 'TELEVISION' be written in that language?

Ans 1. UDMDWHTHPM

2. UDMDWHTHOM

3. UDMDWHTHPN

4. UDMDWHHTPM

Question ID : 630680416222

Option 1 ID : 6306801623652

Option 2 ID : 6306801623654

Option 3 ID : 6306801623653

Option 4 ID : 6306801623651

Status : Answered

Chosen Option : 1

Q.6 Three of the following numbers are alike in a certain way and one is different. Pick the odd one out.

(NOTE : Operations should be performed on the whole numbers, without breaking down the numbers into its constituent digits. E.g. 13 – Operations on 13 such as adding /deleting /multiplying etc., to 13 can be performed. Breaking down 13 into 1 and 3 and then performing mathematical operations on 1 and 3 is not allowed.)

Ans 1. 18 – 11 – 63

2. 12 – 8 – 36

3. 21 – 14 – 72

4. 15 – 3 – 108

Question ID : 630680389589

Option 1 ID : 6306801518817

Option 2 ID : 6306801518815

Option 3 ID : 6306801518814

Option 4 ID : 6306801518816

Status : Answered

Chosen Option : 3

Q.7 Select the option that represents the letters that, when placed from left to right in the blanks below, will complete the letter series.

S _ Y A _ F I K M _ S U W

Ans 1. UCP

2. VCP

3. VCQ

4. VBP

Question ID : 630680417336

Option 1 ID : 6306801628110

Option 2 ID : 6306801628107

Option 3 ID : 6306801628109

Option 4 ID : 6306801628108

Status : Marked For Review

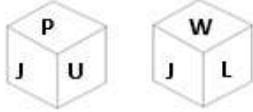
Chosen Option : 2

Q.8 Find the correct combination of letters that when sequentially filled in the blanks of the given series will make the series logically complete.
ABF_HI_NOP_U_WABCDH_

- Ans 1. GMSVI
 2. GMTUI
 3. GMTVI
 4. IMTVI

Question ID : 630680113687
Option 1 ID : 630680440283
Option 2 ID : 630680440285
Option 3 ID : 630680440284
Option 4 ID : 630680440282
Status : Answered
Chosen Option : 3

Q.9 Six letters P, J, U, W, L and K are written on different faces of a dice. Two positions of this dice are shown in the figures below. Find the letter on the face opposite to P.



- Ans 1. K
 2. W
 3. U
 4. J

Question ID : 630680222366
Option 1 ID : 630680863298
Option 2 ID : 630680863295
Option 3 ID : 630680863297
Option 4 ID : 630680863296
Status : Answered
Chosen Option : 2

Q.10 Select the triad in which the numbers are related in the same way as are the numbers of the given triads.
(25, 22, 47), (31, 24, 55)
(NOTE : Operations should be performed on the whole numbers, without breaking down the numbers into its constituent digits. E.g. 13 – Operations on 13 such as adding /deleting /multiplying etc. to 13 can be performed. Breaking down 13 into 1 and 3 and then performing mathematical operations on 1 and 3 is not allowed)

- Ans 1. (17, 15, 22)
 2. (22, 19, 45)
 3. (18, 21, 39)
 4. (27, 25, 42)

Question ID : 630680319362
Option 1 ID : 6306801242356
Option 2 ID : 6306801242354
Option 3 ID : 6306801242353
Option 4 ID : 6306801242355
Status : Answered
Chosen Option : 3

Q.11 The position of how many letters will remain unchanged if all the letters in the word **MOBILE** are arranged in English alphabetical order?

- Ans
- 1. Three
 - 2. One
 - 3. None
 - 4. Two

Question ID : 630680348537
Option 1 ID : 6306801356440
Option 2 ID : 6306801356438
Option 3 ID : 6306801356437
Option 4 ID : 6306801356439
Status : Answered
Chosen Option : 3

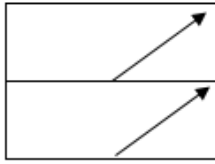
Q.12 What will come in the place of '?' in the following equation, if '+' and '-' are interchanged and 'x' and '÷' are interchanged?

$$25 + 3 \div 9 - 14 \times 2 = ?$$

- Ans
- 1. 5
 - 2. 7
 - 3. 12
 - 4. 0

Question ID : 630680339255
Option 1 ID : 6306801319589
Option 2 ID : 6306801319592
Option 3 ID : 6306801319591
Option 4 ID : 6306801319590
Status : Answered
Chosen Option : 1

Q.13 A transparent sheet with a pattern is given below. Select the option that depicts the pattern that would appear when the given transparent sheet is folded at the middle horizontal line.

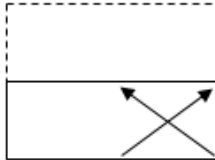


Ans

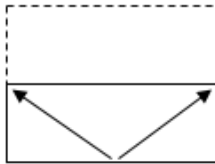
1.



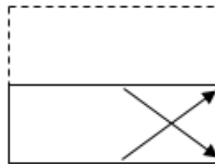
2.



3.



4.



Question ID : 630680389399

Option 1 ID : 6306801518054

Option 2 ID : 6306801518056

Option 3 ID : 6306801518057

Option 4 ID : 6306801518055

Status : Answered

Chosen Option : 4

Q.14 Select the word-pair that best represents a similar relationship to the one expressed in the pair of words given below.

(The words must be considered as meaningful English words and must NOT be related to each other based on the number of letters/number of consonants/vowels in the word)

France : Gallic Rooster

Ans 1. New Zealand : Hornbill

2. Australia : Emu

3. Germany : Swan

4. India : Eagle

Question ID : 630680417415

Option 1 ID : 6306801628423

Option 2 ID : 6306801628425

Option 3 ID : 6306801628426

Option 4 ID : 6306801628424

Status : Answered

Chosen Option : 3

Q.15 12 is related to 235 by certain logic. Following the same logic, 14 is related to 287. To which of the following is 18 related, following the same logic? (NOTE : Operations should be performed on the whole numbers, without breaking down the numbers into its constituent digits. E.g. 13 – Operations on 13 such as adding /deleting /multiplying etc., to 13 can be performed. Breaking down 13 into 1 and 3 and then performing mathematical operations on 1 and 3 is not allowed.)

- Ans 1. 512
 2. 415
 3. 438
 4. 320

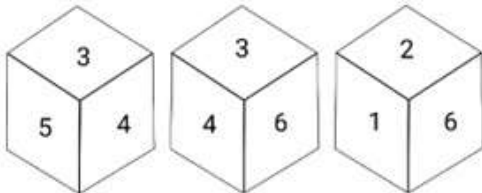
Question ID : 630680326556
Option 1 ID : 6306801270312
Option 2 ID : 6306801270309
Option 3 ID : 6306801270311
Option 4 ID : 6306801270310
Status : Not Answered
Chosen Option : --

Q.16 Select the option that can replace the question mark (?) in the following series.
BH14, CJ17, DL20, EN23, ?

- Ans 1. FP26
 2. GO24
 3. GP26
 4. FO24

Question ID : 630680416296
Option 1 ID : 6306801623948
Option 2 ID : 6306801623947
Option 3 ID : 6306801623949
Option 4 ID : 6306801623950
Status : Answered
Chosen Option : 1

Q.17 Three different positions of the same dice are given. Find the number on the face opposite to the face showing '2'.



- Ans 1. 6
 2. 4
 3. 3
 4. 1

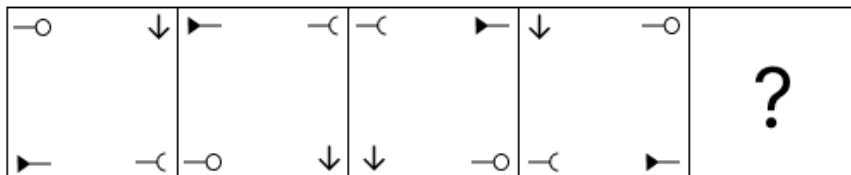
Question ID : 630680367568
Option 1 ID : 6306801431721
Option 2 ID : 6306801431723
Option 3 ID : 6306801431724
Option 4 ID : 6306801431722
Status : Answered
Chosen Option : 3

Q.18 All the alphabets in the word 'DICTIONARY' are arranged in the alphabetical order.
 How many alphabets are there in the English alphabetical series between the alphabet which is fourth from the left end and the one which is second from the right end in the newly formed letter-cluster?

- Ans
- 1. 12
 - 2. 9
 - 3. 11
 - 4. 10

Question ID : 630680199106
 Option 1 ID : 630680772132
 Option 2 ID : 630680772131
 Option 3 ID : 630680772133
 Option 4 ID : 630680772134
 Status : Answered
 Chosen Option : 4

Q.19 Identify the figure given in the options which when put in place of the question mark (?) will logically complete the series?

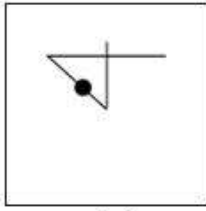


Ans

- 1.
- 2.
- 3.
- 4.

Question ID : 630680471498
 Option 1 ID : 6306801841708
 Option 2 ID : 6306801841706
 Option 3 ID : 6306801841709
 Option 4 ID : 6306801841707
 Status : Answered
 Chosen Option : 1


Q.20 Select the option figure in which the given figure (X) is embedded (rotation is NOT allowed).



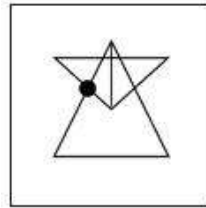
(X)

Ans

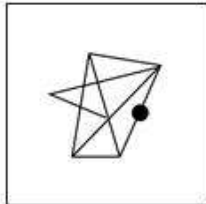
✗ 1.



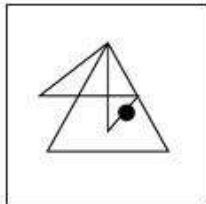
✓ 2.



✗ 3.



✗ 4.



Question ID : 630680296892

Option 1 ID : 6306801155214

Option 2 ID : 6306801155211

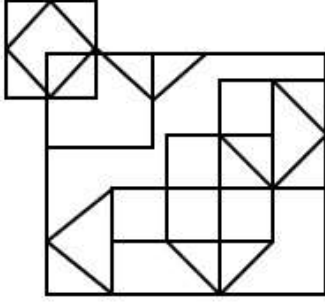
Option 3 ID : 6306801155212

Option 4 ID : 6306801155213

Status : Answered

Chosen Option : 2

Q.21 How many squares are there in the given figure?



- Ans
- 1. 14
 - 2. 12
 - 3. 11
 - 4. 15

Question ID : 630680163561
Option 1 ID : 630680633430
Option 2 ID : 630680633429
Option 3 ID : 630680633428
Option 4 ID : 630680633431
Status : Answered
Chosen Option : 1

Q.22 In a certain code language, 'BOTH' is written as 'DQVJ' and 'DARE' is written as 'FCTG'
How will 'WILL' be written in that language?

- Ans
- 1. YJMN
 - 2. YKNN
 - 3. XJMM
 - 4. XKNM

Question ID : 630680172761
Option 1 ID : 630680669447
Option 2 ID : 630680669444
Option 3 ID : 630680669445
Option 4 ID : 630680669446
Status : Answered
Chosen Option : 2

Q.23 If

'A & Z' means 'A is the brother of Z',
'A # Z' means 'A is the sister of Z',
'A ^ Z' means 'A is the brother of Z's father',
'A @ Z' means 'A is the wife of Z',
'A % Z' means 'A is the mother of Z',
'A α Z' means 'A is the father of Z',
then how is J related to Z in the following expression?

J % K # L @ M α N & Z

- Ans
- 1. Father's mother
 - 2. Mother
 - 3. Mother's mother
 - 4. Mother's sister

Question ID : 630680262033
Option 1 ID : 6306801017782
Option 2 ID : 6306801017781
Option 3 ID : 6306801017779
Option 4 ID : 6306801017780
Status : Answered
Chosen Option : 3

Q.24 Select the number from among the given options that can replace the question mark (?) in the following series.
389, 420, 457, 498, 541, ?

- Ans
- 1. 572
 - 2. 584
 - 3. 588
 - 4. 598

Question ID : 630680411859
Option 1 ID : 6306801606273
Option 2 ID : 6306801606272
Option 3 ID : 6306801606274
Option 4 ID : 6306801606271
Status : Not Answered
Chosen Option : --

Q.25 Select the option in which the numbers share the same relationship as that shared by the given pair of numbers.
(NOTE: Operations should be performed on the whole numbers, without breaking down the numbers into its constituent digits. E.g. 13 – Operations on 13 such as adding/deleting/multiplying etc. to 13 can be performed. Breaking down 13 into 1 and 3 and then performing mathematical operations on 1 and 3 is not allowed.)

40 : 123
63 : 192

- Ans
- 1. 48 : 152
 - 2. 46 : 131
 - 3. 68 : 214
 - 4. 39 : 120

Question ID : 630680326568
Option 1 ID : 6306801270357
Option 2 ID : 6306801270359
Option 3 ID : 6306801270360
Option 4 ID : 6306801270358
Status : Answered
Chosen Option : 4

Section : General Awareness

Q.1 Which of the following is related to neem?

- Ans
- 1. Pinnately
 - 2. Palmately
 - 3. Spines
 - 4. Tendril

Question ID : 630680314127
Option 1 ID : 6306801222316
Option 2 ID : 6306801222313
Option 3 ID : 6306801222315
Option 4 ID : 6306801222314
Status : Not Answered
Chosen Option : --

Q.2 For which film did Asha Bhosle win the International Indian Film Academy (IIFA) Award in the Best Playback Singer Female category in 2002?

- Ans
- 1. Devdas
 - 2. Humraz
 - 3. Om Jai Jagdish
 - 4. Lagaan

Question ID : 630680511798
Option 1 ID : 6306802000163
Option 2 ID : 6306802000162
Option 3 ID : 6306802000165
Option 4 ID : 6306802000164
Status : Answered
Chosen Option : 4

Q.3 What is the duration of monsoon in India?

- Ans
- 1. 100-120 days
 - 2. 150-200 days
 - 3. 40-60 days
 - 4. 50-80 days

Question ID : 630680302661
Option 1 ID : 6306801177312
Option 2 ID : 6306801177313
Option 3 ID : 6306801177310
Option 4 ID : 6306801177311
Status : Answered
Chosen Option : 1

Q.4 The northern plain of the Indian subcontinent has been formed by the interplay of the three major river systems along with their tributaries. Choose the odd one out of the options given.

- Ans
- 1. The Indus
 - 2. The Brahmaputra
 - 3. The Ganga
 - 4. The Godavari

Question ID : 630680309368
Option 1 ID : 6306801203630
Option 2 ID : 6306801203631
Option 3 ID : 6306801203629
Option 4 ID : 6306801203632
Status : Answered
Chosen Option : 4

Q.5 Which of the following is mentioned in Article 1 of the Indian constitution?

- Ans
- 1. India that is Bharat as parliamentary democracy
 - 2. India that is Bharat as federation of states
 - 3. India that is Bharat shall be a Union of states
 - 4. India that is Bharat as presidential form of democracy

Question ID : 630680282979
Option 1 ID : 6306801100048
Option 2 ID : 6306801100049
Option 3 ID : 6306801100050
Option 4 ID : 6306801100047
Status : Answered
Chosen Option : 3

Q.6 Who holds the record for the longest long jump in India as of 2023?

- Ans** 1. Murali S
 2. Nayana James
 3. Jeswin aldrin
 4. TC Yohannan

Question ID : 630680510764
Option 1 ID : 6306801996186
Option 2 ID : 6306801996189
Option 3 ID : 6306801996187
Option 4 ID : 6306801996188
Status : Not Answered
Chosen Option : --

Q.7 Name the phenomenon where an opaque object on the path of light becomes very small and where light has a tendency to bend around it and not walk in a straight line.

- Ans** 1. Reflection of light
 2. Angle of incidence
 3. Diffraction of light
 4. Angle of refraction

Question ID : 630680194546
Option 1 ID : 630680754709
Option 2 ID : 630680754712
Option 3 ID : 630680754711
Option 4 ID : 630680754710
Status : Answered
Chosen Option : 3

Q.8 Articles 52 to 78 in Part V of the Indian Constitution deal with _____.

- Ans** 1. National emergency
 2. Amendment of the Constitution
 3. Finance Commission of India
 4. Union Executive

Question ID : 630680326512
Option 1 ID : 6306801270134
Option 2 ID : 6306801270135
Option 3 ID : 6306801270136
Option 4 ID : 6306801270133
Status : Answered
Chosen Option : 4

Q.9 What is the position of India in the world's telecommunication market, as of March 2024?

- Ans** 1. Fourth
 2. Second
 3. Third
 4. First

Question ID : 630680327625
Option 1 ID : 6306801274500
Option 2 ID : 6306801274498
Option 3 ID : 6306801274499
Option 4 ID : 6306801274497
Status : Not Answered
Chosen Option : --

Q.10 The National Youth Policy was launched in:

- Ans 1. 2015
 2. 2014
 3. 2013
 4. 2012

Question ID : 630680409609
Option 1 ID : 6306801597268
Option 2 ID : 6306801597267
Option 3 ID : 6306801597266
Option 4 ID : 6306801597265
Status : Not Answered
Chosen Option : --

Q.11 Who among the following was the President of the Belgaum Session of the Indian National Congress held in 1924?

- Ans 1. Vallabhbhai Patel
 2. Mahatma Gandhi
 3. Subhas Chandra Bose
 4. Jawaharlal Nehru

Question ID : 630680511502
Option 1 ID : 6306801999131
Option 2 ID : 6306801999130
Option 3 ID : 6306801999132
Option 4 ID : 6306801999133
Status : Answered
Chosen Option : 2

Q.12 Ali Akbar Khan is known for playing the _____.

- Ans 1. Ektara
 2. Sarangi
 3. Tanpura
 4. Sarod

Question ID : 630680511894
Option 1 ID : 6306802000548
Option 2 ID : 6306802000547
Option 3 ID : 6306802000549
Option 4 ID : 6306802000546
Status : Answered
Chosen Option : 2

Q.13 Consider the following statements related to the Online Dispute Resolution (ODR) handbook.

- 1.It will be launched by the Ministry of Science and Technology.
- 2.ODR is the resolution for cases outside courts using digital technology and techniques of Alternative Dispute Resolution (ADR), such as negotiation, mediation and arbitration.
- 3.The development of ICT and increased use of internet has played a major role for ODR.

Which of the given statements is/are correct?

Ans 1. Only 2 and 3

2. Only 1 and 3

3. Only 2

4. Only 1

Question ID : 630680139324
Option 1 ID : 630680539371
Option 2 ID : 630680539370
Option 3 ID : 630680539372
Option 4 ID : 630680539373
Status : Not Answered
Chosen Option : --

Q.14 The Flexible Inflation Targeting Framework (FITF) was introduced in India post the amendment of the Reserve Bank of India (RBI) Act, 1934 in _____.

Ans 1. 2010

2. 2014

3. 2016

4. 2020

Question ID : 630680144749
Option 1 ID : 630680560040
Option 2 ID : 630680560039
Option 3 ID : 630680560038
Option 4 ID : 630680560041
Status : Not Answered
Chosen Option : --

Q.15 The government of which of the following states allocated ₹11,728 crore for the Aasara pension scheme in its annual budget for the fiscal year 2022-23?

Ans 1. Telangana

2. Odisha

3. Chhattisgarh

4. Gujarat

Question ID : 630680327505
Option 1 ID : 6306801274019
Option 2 ID : 6306801274018
Option 3 ID : 6306801274017
Option 4 ID : 6306801274020
Status : Not Answered
Chosen Option : --

Q.16 'Atla Taddi' is the widely celebrated festival of which Indian state?

- Ans 1. West Bengal
 2. Bihar
 3. Punjab
 4. Andhra Pradesh

Question ID : 630680216005
Option 1 ID : 630680837998
Option 2 ID : 630680837997
Option 3 ID : 630680837995
Option 4 ID : 630680837996
Status : Not Answered
Chosen Option : --

Q.17 Which national park in the Andaman and Nicobar Islands is home to species like Megapode, crab-eating Macaque, Nicobar Pigeon, and Giant Robber Crab?

- Ans 1. Campbell Bay National Park
 2. Raimona National Park
 3. Mouling National Park
 4. Papikonda National Park

Question ID : 630680407455
Option 1 ID : 6306801588758
Option 2 ID : 6306801588761
Option 3 ID : 6306801588760
Option 4 ID : 6306801588759
Status : Answered
Chosen Option : 1

Q.18 The Permanent Settlement came into operation in which of the following years?

- Ans 1. 1793
 2. 1890
 3. 1789
 4. 1790

Question ID : 630680412327
Option 1 ID : 6306801608132
Option 2 ID : 6306801608131
Option 3 ID : 6306801608134
Option 4 ID : 6306801608133
Status : Not Answered
Chosen Option : --

Q.19 Which part of the Constitution deals with the Panchayats?

- Ans 1. Part IV
 2. Part X
 3. Part IX
 4. Part VII

Question ID : 630680413118
Option 1 ID : 6306801611296
Option 2 ID : 6306801611297
Option 3 ID : 6306801611298
Option 4 ID : 6306801611295
Status : Answered
Chosen Option : 3

Q.20 Which of the following battles was fought between Babur and Rana Sanga in 1527?

- Ans 1. Battle of Chanderi
 2. Battle of Bayana
 3. Battle of Khanwa
 4. Second battle of Panipat

Question ID : 630680412406
Option 1 ID : 6306801608448
Option 2 ID : 6306801608449
Option 3 ID : 6306801608450
Option 4 ID : 6306801608447
Status : Answered
Chosen Option : 1

Q.21 Which among the following was NOT a part of the three sections of the Rigvedic tribe?

- Ans 1. Warriors
 2. Priests
 3. Ordinary people
 4. Craftsman

Question ID : 630680412438
Option 1 ID : 6306801608576
Option 2 ID : 6306801608577
Option 3 ID : 6306801608578
Option 4 ID : 6306801608575
Status : Answered
Chosen Option : 4

Q.22 Which of the following statements is/are correct?

- i. The first green revolution led to over-exploitation of natural resources.
ii. The second Green Revolution was more focused on Southern India.
iii. The second green revolution ensured in achieving sustainable livelihood security.

- Ans 1. Only ii
 2. i and ii
 3. ii and iii
 4. i and iii

Question ID : 6306801048046
Option 1 ID : 6306804114233
Option 2 ID : 6306804114230
Option 3 ID : 6306804114231
Option 4 ID : 6306804114232
Status : Not Answered
Chosen Option : --

Q.23 In which of the following states of India is Hojagiri dance predominantly performed?

- Ans 1. Kerala
 2. Maharashtra
 3. Tripura
 4. Himachal Pradesh

Question ID : 630680408973
Option 1 ID : 6306801594816
Option 2 ID : 6306801594817
Option 3 ID : 6306801594815
Option 4 ID : 6306801594818
Status : Answered
Chosen Option : 3

Q.24 A chemical reaction in which the rate of reaction is directly proportional to the first power of the concentration of the reacting substance is called:

- Ans 1. second order reaction
 2. first order reaction
 3. zero order reaction
 4. third order reaction

Question ID : 630680111958
Option 1 ID : 630680433560
Option 2 ID : 630680433559
Option 3 ID : 630680433558
Option 4 ID : 630680433561
Status : Not Answered
Chosen Option : --

Q.25 Where was the 1st World Cup of Kabaddi organised in 2004?

- Ans 1. Hyderabad
 2. Mumbai
 3. Punjab
 4. Kolkata

Question ID : 630680510814
Option 1 ID : 6306801996386
Option 2 ID : 6306801996388
Option 3 ID : 6306801996389
Option 4 ID : 6306801996387
Status : Not Answered
Chosen Option : --

Section : Quantitative Aptitude

Q.1 10 years ago, the age of Sunita was thrice the age of her daughter Tanya. 10 years hence, the age of Sunita will be twice the age of Tanya. What is the ratio of their present ages?

- Ans 1. 2 : 7
 2. 7 : 2
 3. 7 : 3
 4. 3 : 7

Question ID : 630680285563
Option 1 ID : 6306801110222
Option 2 ID : 6306801110221
Option 3 ID : 6306801110219
Option 4 ID : 6306801110220
Status : Answered
Chosen Option : 3

Q.2 A thief is noticed by a policeman from a distance of 92 m. The thief starts running and the policeman chases him. The thief and the policeman run at the speed of 90 km/h and 104.4 km/h, respectively. In how much time will the policeman catch the thief?

- Ans** 1. 21 seconds
 2. 26 seconds
 3. 22 seconds
 4. 23 seconds

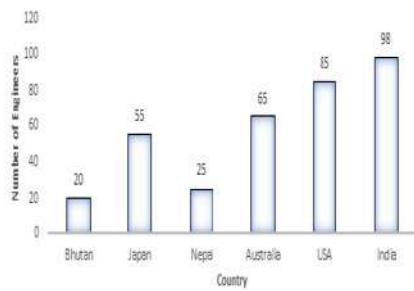
Question ID : 630680428622
Option 1 ID : 6306801672532
Option 2 ID : 6306801672533
Option 3 ID : 6306801672535
Option 4 ID : 6306801672534
Status : Answered
Chosen Option : 4

Q.3 R targets to score 85% marks in exams. He scores 450 marks and misses the target by 35%. How much increment in percentage should be there in his scored marks to meet the target?

- Ans** 1. 53
 2. 45
 3. 70
 4. 35

Question ID : 630680428056
Option 1 ID : 6306801670268
Option 2 ID : 6306801670271
Option 3 ID : 6306801670270
Option 4 ID : 6306801670269
Status : Not Answered
Chosen Option : --

Q.4 Study the given bar-graph and answer the question that follows.



What is the ratio of the number of engineers of countries with an above average to the number of engineers of countries with a below average?

Ans

1. $\frac{62}{25}$

2. $\frac{2}{1}$

3. $\frac{1}{1}$

4. $\frac{39}{71}$

Question ID : 630680384351

Option 1 ID : 6306801498290

Option 2 ID : 6306801498293

Option 3 ID : 6306801498291

Option 4 ID : 6306801498292

Status : Not Attempted and Marked For Review

Chosen Option : --

Q.5 Simplify.

$$\frac{(232)^3 + (140)^3 + (353)^3 - 3 \times 232 \times 140 \times 353}{(232)^2 + (140)^2 + (353)^2 - 232 \times 140 - 140 \times 353 - 353 \times 232}$$

Ans 1. 725

2. 596

3. 445

4. 261

Question ID : 630680413475

Option 1 ID : 6306801612725

Option 2 ID : 6306801612727

Option 3 ID : 6306801612724

Option 4 ID : 6306801612726

Status : Answered

Chosen Option : 1

Q.6 In the following sets, which set represents the sides of a right-angled triangle?

- Ans 1. {5, 10, 12}
 2. {3, 4, 6}
 3. {5, 12, 13}
 4. {8, 15, 16}

Question ID : 630680421383
Option 1 ID : 6306801643997
Option 2 ID : 6306801643995
Option 3 ID : 6306801643996
Option 4 ID : 6306801643998
Status : Answered
Chosen Option : 3

Q.7 Simplify
 $6 \times [28 \div 84 \times \{36 \times 49 \div (6 \times 7)\}]$.

- Ans 1. 94
 2. 84
 3. 64
 4. 74

Question ID : 630680410447
Option 1 ID : 6306801600507
Option 2 ID : 6306801600506
Option 3 ID : 6306801600504
Option 4 ID : 6306801600505
Status : Answered
Chosen Option : 2

Q.8 The difference between the simple interests on the principal of ₹500 at an interest rate of 5% per annum for 3 years and 4% per annum for 4 years is:

- Ans 1. ₹15
 2. ₹5
 3. ₹7.5
 4. ₹10

Question ID : 63068070431
Option 1 ID : 630680272352
Option 2 ID : 630680272351
Option 3 ID : 630680272353
Option 4 ID : 630680272350
Status : Answered
Chosen Option : 2

Q.9 Aman has certain number of notes of denomination ₹20 and ₹10 which amount to ₹390. If the numbers of notes of each kind are interchanged, then the new amount is ₹90 less than before. Find the number of notes of ₹20 denomination.

Ans ✓ 1. 16

✗ 2. 14

✗ 3. 15

✗ 4. 12

Question ID : 630680354930

Option 1 ID : 6306801381793

Option 2 ID : 6306801381796

Option 3 ID : 6306801381794

Option 4 ID : 6306801381795

Status : Not Answered

Chosen Option : --

Q.10 Which of the following are the angles of a scalene triangle?

Ans ✓ 1. 60° , 30° and 90°

✗ 2. 110° , 35° and 35°

✗ 3. 60° , 60° and 60°

✗ 4. 90° , 45° and 45°

Question ID : 630680378671

Option 1 ID : 6306801475731

Option 2 ID : 6306801475734

Option 3 ID : 6306801475733

Option 4 ID : 6306801475732

Status : Answered

Chosen Option : 2

Q.11 For two circles of radius 7 units and $\frac{7}{2}$ units, whose centres are 15 units apart, what is the length of the direct common tangent in units? (Correct to 3 decimal places.)

Ans ✓ 1. 14.586

✗ 2. 18.654

✗ 3. 16.584

✗ 4. 15.486

Question ID : 630680297304

Option 1 ID : 6306801156683

Option 2 ID : 6306801156686

Option 3 ID : 6306801156685

Option 4 ID : 6306801156684

Status : Not Answered

Chosen Option : --

Q.12 A tank can be filled by pipe A in 4 hours and pipe B in 6 hours. At 8:00 a.m., pipe A was opened. At what time will the tank be filled if pipe B is opened at 9:00 a.m.?

- Ans
- 1. 10:16 a.m.
 - 2. 10:22 a.m.
 - 3. 10:48 a.m.
 - 4. 10:18 a.m.

Question ID : 630680493242
Option 1 ID : 6306801926715
Option 2 ID : 6306801926717
Option 3 ID : 6306801926718
Option 4 ID : 6306801926716
Status : Answered
Chosen Option : 3

Q.13 A triangle ABC is made on a circle, where AB is diameter of the circle. If BC is equal to the radius of the circle and $\angle ABC = x \angle BAC$, then x is :

- Ans
- 1. 1
 - 2. 2.5
 - 3. 2
 - 4. 1.5

Question ID : 630680421355
Option 1 ID : 6306801643883
Option 2 ID : 6306801643886
Option 3 ID : 6306801643885
Option 4 ID : 6306801643884
Status : Not Answered
Chosen Option : --

Q.14 Amit and Bilal buy goods for ₹1,500 and ₹2,000, respectively. Amit marks his goods up by y%, while Bilal marks his goods up by 2y% and offers a discount of y%. If both make the same profit, then find the value of y.

- Ans
- 1. 10.5
 - 2. 12.5
 - 3. 11.5
 - 4. 12

Question ID : 630680428866
Option 1 ID : 6306801673508
Option 2 ID : 6306801673511
Option 3 ID : 6306801673509
Option 4 ID : 6306801673510
Status : Not Answered
Chosen Option : --

Q.15 30 is the mean proportional of 18 and A. Find the value of A.

Ans 1. 60

2. 40

3. 50

4. 45

Question ID : 630680428477
Option 1 ID : 6306801671953
Option 2 ID : 6306801671954
Option 3 ID : 6306801671952
Option 4 ID : 6306801671955
Status : Answered
Chosen Option : 3

Q.16 If $4\tan\theta - 3 = 0$, then the value of $\frac{1 - \cos 2\theta}{1 + \cos 2\theta}$ is:

Ans 1. $\frac{9}{16}$

2. $\frac{4}{3}$

3. $\frac{7}{15}$

4. 1

Question ID : 630680397005
Option 1 ID : 6306801548078
Option 2 ID : 6306801548077
Option 3 ID : 6306801548076
Option 4 ID : 6306801548079
Status : Not Answered
Chosen Option : --

Q.17 Find the length of the longest stick that can be fitted in a cubical vessel of edge 70 cm.

Ans 1. $70\sqrt{3}$ cm

2. $35\sqrt{3}$ cm

3. $10\sqrt{3}$ cm

4. $70\sqrt{2}$ cm

Question ID : 63068091888
Option 1 ID : 630680356286
Option 2 ID : 630680356288
Option 3 ID : 630680356289
Option 4 ID : 630680356287
Status : Answered
Chosen Option : 1

Q.18 A trader offers the following discount schemes on the purchase of a refrigerator.

- (i) a discount of 10% followed by a discount of 8%
- (ii) successive discounts of 12% and 10%
- (iii) two successive discounts of 12%
- (iv) a discount of 20%

In which scheme is the selling price the lowest?

- Ans
- 1. (i)
 - 2. (iv)
 - 3. (iii)
 - 4. (ii)

Question ID : 630680145358
Option 1 ID : 630680562409
Option 2 ID : 630680562406
Option 3 ID : 630680562407
Option 4 ID : 630680562408
Status : Not Answered
Chosen Option : --

Q.19 For what least value of n , $2^{2n}+2n$ is completely divided by 6, where n is an integer?

- Ans
- 1. 3
 - 2. 2
 - 3. 1
 - 4. 0

Question ID : 630680115939
Option 1 ID : 630680449089
Option 2 ID : 630680449088
Option 3 ID : 630680449087
Option 4 ID : 630680449086
Status : Not Answered
Chosen Option : --

Q.20 There is a 32 l mixture of milk and water. The ratio of milk and water in this mixture is 5 : 3. How many litres of water should be added to this mixture so that the resultant mixture has 50% water in it?

- Ans
- 1. 4
 - 2. 8
 - 3. 6
 - 4. 5

Question ID : 630680518852
Option 1 ID : 6306802027882
Option 2 ID : 6306802027883
Option 3 ID : 6306802027881
Option 4 ID : 6306802027880
Status : Answered
Chosen Option : 2

Q.21 The value of θ , when $\sqrt{3} \cos \theta + \sin \theta = 1$ ($1 \leq \theta \leq 90^\circ$), is:

- Ans
- 1. 60°
 - 2. 30°
 - 3. 20°
 - 4. 90°

Question ID : 630680526469
Option 1 ID : 6306802057945
Option 2 ID : 6306802057943
Option 3 ID : 6306802057942
Option 4 ID : 6306802057944
Status : Not Answered
Chosen Option : --

Q.22 Study the given table and answer the question that follows.
The following table shows the production of printers by four plants of a company over the five years.

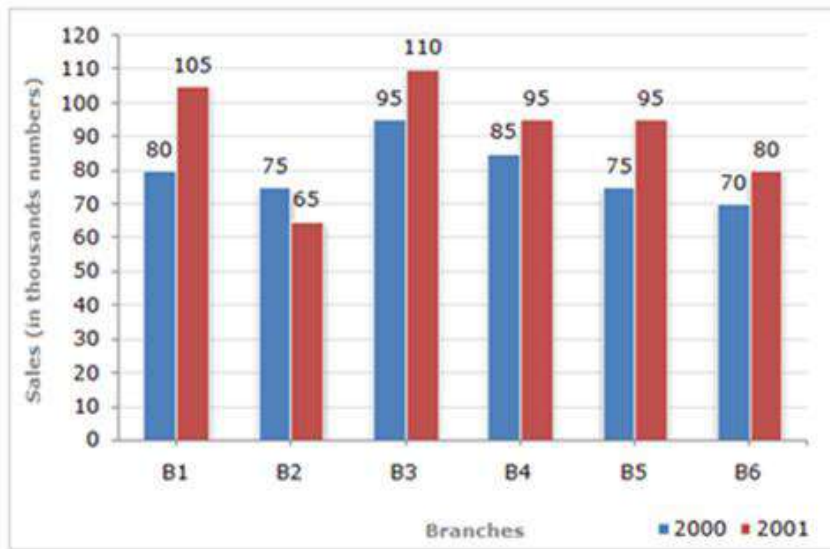
Year	Production (in thousands)			
	Plant 1	Plant 2	Plant 3	Plant 4
2018	35	25	40	45
2019	43	44	44	40
2020	48	39	36	30
2021	32	40	35	48
2022	42	44	30	42

What is the difference between the average production of plant 1 and plant 2 during five years?

- Ans
- 1. 1400
 - 2. 1600
 - 3. 3000
 - 4. 3840

Question ID : 630680428200
Option 1 ID : 6306801670845
Option 2 ID : 6306801670844
Option 3 ID : 6306801670846
Option 4 ID : 6306801670847
Status : Not Answered
Chosen Option : --

Q.23 Study the given bar-graph and answer the question that follows.
 The bar-graph shows the sales of books (in thousands) from six branches (B1, B2, B3, B4, B5 and B6) of a publishing company during two consecutive years 2000 and 2001.



What is the ratio of the total sales of branch B2 for both years to the total sales of branch B4 for both years?

- Ans
- 1. 3 : 5
 - 2. 7 : 9
 - 3. 2 : 3
 - 4. 6 : 7

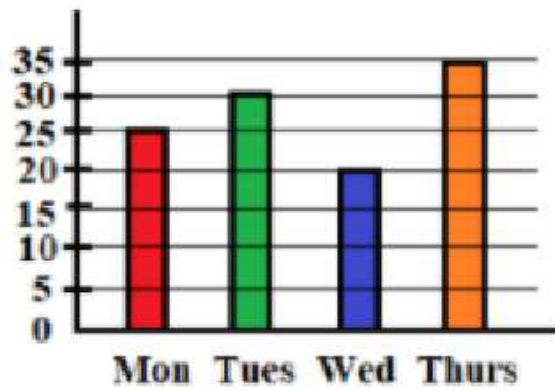
Question ID : 630680428213
 Option 1 ID : 6306801670897
 Option 2 ID : 6306801670899
 Option 3 ID : 6306801670896
 Option 4 ID : 6306801670898
 Status : Answered
 Chosen Option : 2

Q.24 Let $x = r \cos(t)$, $y = r \sin(t) \cos(u)$, $z = r \sin(t) \sin(u)$. Then the value of $x^2 + y^2 + z^2$ is

- Ans
- 1. $2r$
 - 2. $r^2 \cos(u)$
 - 3. r^2
 - 4. $r^2 \sin(t)$

Question ID : 630680285509
 Option 1 ID : 6306801110006
 Option 2 ID : 6306801110005
 Option 3 ID : 6306801110004
 Option 4 ID : 6306801110003
 Status : Not Answered
 Chosen Option : --

Q.25 The bar graph shows the number of students present in a class on four days. The average number of students present on Monday, Tuesday and Wednesday is:



- Ans
- 1. 24
 - 2. 20
 - 3. 25
 - 4. 30

Question ID : 630680407267
Option 1 ID : 6306801588015
Option 2 ID : 6306801588014
Option 3 ID : 6306801588016
Option 4 ID : 6306801588017
Status : Answered
Chosen Option : 3

Section : English Comprehension

Q.1 Parts of a sentence are given below in jumbled order. Arrange the parts in the correct order to form a meaningful sentence.

- (O) attitude is
- (P) or tendency in individuals
- (Q) a broad-based behaviour
- (R) which implies
- (S) a hypothetical postulate

- Ans
- 1. OSRQP
 - 2. SQPRO
 - 3. OPQRS
 - 4. OPSRQ

Question ID : 630680377979
Option 1 ID : 6306801472977
Option 2 ID : 6306801472976
Option 3 ID : 6306801472978
Option 4 ID : 6306801472975
Status : Answered
Chosen Option : 1

Q.2 Select the most appropriate meaning of the given idiom.
Off and on

Ans 1. Now and then

2. Know something thoroughly

3. Object to

4. Remind

Question ID : 630680192300

Option 1 ID : 630680745804

Option 2 ID : 630680745802

Option 3 ID : 630680745801

Option 4 ID : 630680745803

Status : Answered

Chosen Option : 1

Q.3 Select the most appropriate option to substitute the underlined segment in the given sentence.

The food intolerance industry has grown dramatically in the previous decade, chiefly because of a boost in Coeliac and Crohn's disease cases, as well as increasing awareness among health-conscious clients.

Ans 1. pretty much entirely because of a boil-down

2. contextually because of a spark

3. owing primarily to a rise

4. casually due to a growth

Question ID : 630680177246

Option 1 ID : 630680687163

Option 2 ID : 630680687162

Option 3 ID : 630680687161

Option 4 ID : 630680687160

Status : Answered

Chosen Option : 2

Q.4 Select the option that expresses the given sentence in passive voice.

I have booked an apartment in the new residential colony.

Ans 1. An apartment had been booked by me in the new residential colony.

2. An apartment have been booked by me in the new residential colony.

3. An apartment has been booked by me in the new residential colony.

4. An apartment is been booked by me in the new residential colony.

Question ID : 630680415180

Option 1 ID : 6306801619469

Option 2 ID : 6306801619470

Option 3 ID : 6306801619468

Option 4 ID : 6306801619467

Status : Answered

Chosen Option : 3

Q.5 Select the most appropriate synonym of the word in bold.
The city has immense coal piers.

- Ans 1. diminutive
 2. trifling
 3. huge
 4. set

Question ID : 630680319158
Option 1 ID : 6306801241538
Option 2 ID : 6306801241539
Option 3 ID : 6306801241537
Option 4 ID : 6306801241540
Status : Answered
Chosen Option : 3

Q.6 Select the option that can be used as a one-word substitute for the given group of words.
Speaking disrespectfully about sacred or religious things.

- Ans 1. Mystic
 2. Atheist
 3. Blasphemy
 4. Theist

Question ID : 630680160079
Option 1 ID : 630680619703
Option 2 ID : 630680619702
Option 3 ID : 630680619700
Option 4 ID : 630680619701
Status : Answered
Chosen Option : 3

Q.7 Identify the error in the following sentence.
Ourselves should not boast of one's knowledge.

- Ans 1. Ourselves
 2. knowledge
 3. boast
 4. one's

Question ID : 630680206321
Option 1 ID : 630680800063
Option 2 ID : 630680800066
Option 3 ID : 630680800065
Option 4 ID : 630680800064
Status : Answered
Chosen Option : 4

Q.8 Given below are four jumbled sentences. Select the option that gives their correct logical sequence.

- A. These are responsible for producing the major fuel used across the globe.
- B. The country has 100 major oil and gas fields.
- C. The economy of Saudi Arabia is based on petroleum.
- D. The chief oil field is Ghawar Field having an estimated 70 billion reserve resource.

Ans 1. CBAD

2. ABCD

3. BACD

4. DCAB

Question ID : 630680374762

Option 1 ID : 6306801460217

Option 2 ID : 6306801460216

Option 3 ID : 6306801460215

Option 4 ID : 6306801460218

Status : Answered

Chosen Option : 1

Q.9 Select the most appropriate homonyms from the given alternatives to fill in the blanks.

The rowing instructor commanded them to _____ in a _____.

A.row (verb)

B.roe

C.row (sequence)

Ans 1. A, C

2. A, B

3. C, A

4. B, C

Question ID : 630680129395

Option 1 ID : 630680501200

Option 2 ID : 630680501198

Option 3 ID : 630680501201

Option 4 ID : 630680501199

Status : Answered

Chosen Option : 1

Q.10 Select the most appropriate option to substitute the underlined word segment in the given sentence.

Sanat has just arrived in Mysore on transfer; he requests his friend Raghu to help him find an appropriate location.

Ans 1. a suitable elevation

2. a rented accommodation

3. a proper junction

4. an allocation recommendation

Question ID : 630680168512

Option 1 ID : 630680652661

Option 2 ID : 630680652662

Option 3 ID : 630680652660

Option 4 ID : 630680652663

Status : Answered

Chosen Option : 1

Q.11 The given sentence is divided into four segments. Select the option that has the segment with a grammatical error.
Two of the world's / best forwards / has played alongside / David Beckham.

Ans ✓ 1. has played alongside

✗ 2. best forwards

✗ 3. Two of the world's

✗ 4. David Beckham.

Question ID : 630680206626
Option 1 ID : 630680801105
Option 2 ID : 630680801104
Option 3 ID : 630680801103
Option 4 ID : 630680801106
Status : Answered
Chosen Option : 2

Q.12 Select the most appropriate synonym of the given word.

Brittle

Ans ✗ 1. Furtive

✗ 2. Fatal

✓ 3. Fragile

✗ 4. Fickle

Question ID : 630680130677
Option 1 ID : 630680506005
Option 2 ID : 630680506003
Option 3 ID : 630680506004
Option 4 ID : 630680506002
Status : Answered
Chosen Option : 3

Q.13 Select the most appropriate synonym of the given word.

Cherish

Ans ✗ 1. Neglect

✗ 2. Afflict

✓ 3. Nurture

✗ 4. Breach

Question ID : 630680310017
Option 1 ID : 6306801206215
Option 2 ID : 6306801206214
Option 3 ID : 6306801206216
Option 4 ID : 6306801206213
Status : Answered
Chosen Option : 2

Q.14 Select the most appropriate synonym of the given word.
Adequate

- Ans 1. Hidden
 2. Sufficient
 3. Reconcile
 4. Evaluate

Question ID : 630680167062
Option 1 ID : 630680647108
Option 2 ID : 630680647109
Option 3 ID : 630680647111
Option 4 ID : 630680647110
Status : Answered
Chosen Option : 2

Q.15 Select the option that contains all the MISSPELT words in the following sentences.

1. The new restaunt offers a wide variety of delicious dishes.
2. I can't beleive he made such a silly mistake in his presentation.
3. The teacher asked the students to complete the assigment by Friday.
4. She felt utterly embarassed by her colleague's comments.

- Ans 1. restaunt, silly, assigment, colleague
 2. delicious, silly, assigment, colleague
 3. delicious, beleive, assigment, utterly
 4. restaunt, beleive, assigment, embarassed

Question ID : 630680409947
Option 1 ID : 6306801598619
Option 2 ID : 6306801598620
Option 3 ID : 6306801598617
Option 4 ID : 6306801598618
Status : Answered
Chosen Option : 4

Q.16 Select the most appropriate meaning of the given idiom.
At a low ebb

- Ans 1. In a critical moment
 2. In a happy state
 3. In an unemployed mode
 4. In a depressed or weak state

Question ID : 630680316361
Option 1 ID : 6306801231069
Option 2 ID : 6306801231070
Option 3 ID : 6306801231072
Option 4 ID : 6306801231071
Status : Answered
Chosen Option : 4

Q.17 Select the option that expresses the given sentence in passive voice.
The teenager delivered the speech.

- Ans 1. The speech has been delivered by the teenager.
 2. The speech was delivered by the teenager.
 3. The speech was being delivered by the teenager.
 4. The speech is delivered by the teenager.

Question ID : 630680206655
Option 1 ID : 630680801220
Option 2 ID : 630680801221
Option 3 ID : 630680801219
Option 4 ID : 630680801222
Status : Answered
Chosen Option : 2

Q.18 Select the most appropriate option that can substitute the underlined segment in the given sentence.
This book giving us much information about our freedom fighters who lost their lives while serving our motherland.

- Ans 1. give us much information
 2. give us many information
 3. gives us much information
 4. gives us many information

Question ID : 630680156309
Option 1 ID : 630680604927
Option 2 ID : 630680604926
Option 3 ID : 630680604925
Option 4 ID : 630680604924
Status : Answered
Chosen Option : 3

Q.19 Select the correctly spelt word to fill in the blank.
My mother said that every relationship must have some amount of _____.

- Ans 1. flexebility
 2. flexibility
 3. phlexibility
 4. flaxibility

Question ID : 630680374780
Option 1 ID : 6306801460289
Option 2 ID : 6306801460287
Option 3 ID : 6306801460288
Option 4 ID : 6306801460290
Status : Answered
Chosen Option : 2

Q.20 Select the most appropriate **ANTONYM** of the given word.

Material

- Ans** 1. Cheap
 2. Temporary
 3. Abstract
 4. Concrete

Question ID : 630680395156
Option 1 ID : 6306801540884
Option 2 ID : 6306801540887
Option 3 ID : 6306801540886
Option 4 ID : 6306801540885
Status : Answered
Chosen Option : 3

Comprehension:

In the following passage, some words have been deleted. Read the passage carefully and select the most appropriate option to fill in each blank.
Culture is (1)_____, understanding, and protecting, like the cultivation of a garden, not the destruction or eradication of its roots. Understanding the roots and seeds, taking much care and providing instructed nourishment (2)_____ important for good gardening. Culture also is similar; understanding its acquaintance (3)_____ literature and art and careful protection are required. Culture is the way of life of a particular society in which a group of people live together in one place. The society's culture is visible in its literature, arts, social system, language and religion. It is a combination of traditions, customs, institutions, food habits, manners, morals, thoughts, tastes, views and beliefs. Usually, families (4)_____ culture to the younger generations. As family system is becoming weak, schools, colleges and universities should take up this responsibility as education should promote potential values of its culture. The role of universities (5)_____ only to issue course completed certificates.

SubQuestion No : 21

Q.21 Select the most appropriate option to fill in blank number 1.

- Ans** 1. to create
 2. create
 3. creating
 4. creation

Question ID : 630680162876
Option 1 ID : 630680630746
Option 2 ID : 630680630747
Option 3 ID : 630680630744
Option 4 ID : 630680630745
Status : Answered
Chosen Option : 1

Comprehension:

In the following passage, some words have been deleted. Read the passage carefully and select the most appropriate option to fill in each blank.

Culture is (1)_____, understanding, and protecting, like the cultivation of a garden, not the destruction or eradication of its roots. Understanding the roots and seeds, taking much care and providing instructed nourishment (2)_____ important for good gardening. Culture also is similar; understanding its acquaintance (3)_____ literature and art and careful protection are required. Culture is the way of life of a particular society in which a group of people live together in one place. The society's culture is visible in its literature, arts, social system, language and religion. It is a combination of traditions, customs, institutions, food habits, manners, morals, thoughts, tastes, views and beliefs. Usually, families (4)_____ culture to the younger generations. As family system is becoming weak, schools, colleges and universities should take up this responsibility as education should promote potential values of its culture. The role of universities (5)_____ only to issue course completed certificates.

SubQuestion No : 22**Q.22 Select the most appropriate option to fill in blank number 2.**

- Ans 1. was
 2. were
 3. are
 4. is

Question ID : 630680162877
Option 1 ID : 630680630750
Option 2 ID : 630680630751
Option 3 ID : 630680630749
Option 4 ID : 630680630748
Status : Answered
Chosen Option : 4

Comprehension:

In the following passage, some words have been deleted. Read the passage carefully and select the most appropriate option to fill in each blank.

Culture is (1)_____, understanding, and protecting, like the cultivation of a garden, not the destruction or eradication of its roots. Understanding the roots and seeds, taking much care and providing instructed nourishment (2)_____ important for good gardening. Culture also is similar; understanding its acquaintance (3)_____ literature and art and careful protection are required. Culture is the way of life of a particular society in which a group of people live together in one place. The society's culture is visible in its literature, arts, social system, language and religion. It is a combination of traditions, customs, institutions, food habits, manners, morals, thoughts, tastes, views and beliefs. Usually, families (4)_____ culture to the younger generations. As family system is becoming weak, schools, colleges and universities should take up this responsibility as education should promote potential values of its culture. The role of universities (5)_____ only to issue course completed certificates.

SubQuestion No : 23**Q.23 Select the most appropriate option to fill in blank number 3.**

- Ans 1. in
 2. for
 3. with
 4. on

Question ID : 630680162878
Option 1 ID : 630680630754
Option 2 ID : 630680630755
Option 3 ID : 630680630753
Option 4 ID : 630680630752
Status : Answered
Chosen Option : 1

Comprehension:

In the following passage, some words have been deleted. Read the passage carefully and select the most appropriate option to fill in each blank.

Culture is (1)_____, understanding, and protecting, like the cultivation of a garden, not the destruction or eradication of its roots. Understanding the roots and seeds, taking much care and providing instructed nourishment (2)_____ important for good gardening. Culture also is similar; understanding its acquaintance (3)_____ literature and art and careful protection are required. Culture is the way of life of a particular society in which a group of people live together in one place. The society's culture is visible in its literature, arts, social system, language and religion. It is a combination of traditions, customs, institutions, food habits, manners, morals, thoughts, tastes, views and beliefs. Usually, families (4)_____ culture to the younger generations. As family system is becoming weak, schools, colleges and universities should take up this responsibility as education should promote potential values of its culture. The role of universities (5)_____ only to issue course completed certificates.

SubQuestion No : 24**Q.24 Select the most appropriate option to fill in blank number 4.**

- Ans 1. transmit
 2. transmitted
 3. transmits
 4. transmitting

Question ID : 630680162879
Option 1 ID : 630680630756
Option 2 ID : 630680630757
Option 3 ID : 630680630758
Option 4 ID : 630680630759
Status : Answered
Chosen Option : 1

Comprehension:

In the following passage, some words have been deleted. Read the passage carefully and select the most appropriate option to fill in each blank.

Culture is (1)_____, understanding, and protecting, like the cultivation of a garden, not the destruction or eradication of its roots. Understanding the roots and seeds, taking much care and providing instructed nourishment (2)_____ important for good gardening. Culture also is similar; understanding its acquaintance (3)_____ literature and art and careful protection are required. Culture is the way of life of a particular society in which a group of people live together in one place. The society's culture is visible in its literature, arts, social system, language and religion. It is a combination of traditions, customs, institutions, food habits, manners, morals, thoughts, tastes, views and beliefs. Usually, families (4)_____ culture to the younger generations. As family system is becoming weak, schools, colleges and universities should take up this responsibility as education should promote potential values of its culture. The role of universities (5)_____ only to issue course completed certificates.

SubQuestion No : 25**Q.25 Select the most appropriate option to fill in blank number 5.**

- Ans 1. should not be restricted
 2. should be restricted
 3. should restricted
 4. restrict

Question ID : 630680162880
Option 1 ID : 630680630763
Option 2 ID : 630680630761
Option 3 ID : 630680630762
Option 4 ID : 630680630760
Status : Not Answered
Chosen Option : --