

Combined Graduate Level Examination 2024 Tier I

Roll Number	
Candidate Name	
Venue Name	
Exam Date	23/09/2024
Exam Time	12:30 PM - 1:30 PM
Subject	Combined Graduate Level Examination Tier I

Section : General Intelligence and Reasoning

Q.1 What will come in place of the question mark (?) in the following equation, if '+' and '-' are interchanged and 'x' and '÷' are interchanged?

$$6408 \times 8 + 27 - 15 \div 10 = ?$$

Ans 1. 922

2. 923

3. 924

4. 921

Question ID : 630680411728
Option 1 ID : 6306801605748
Option 2 ID : 6306801605749
Option 3 ID : 6306801605750
Option 4 ID : 6306801605747
Status : Answered
Chosen Option : 3

Q.2 Which of the following numbers will replace the question mark (?) in the given series?

81, 65, 50, ?, 23, 11

Ans 1. 37

2. 34

3. 35

4. 36

Question ID : 630680411916
Option 1 ID : 6306801606501
Option 2 ID : 6306801606502
Option 3 ID : 6306801606500
Option 4 ID : 6306801606499
Status : Answered
Chosen Option : 4

Q.3 In a certain code language,
X + Y means 'X is the sister of Y',
X - Y means 'X is the son of Y',
X × Y means 'X is the husband of Y',
X ÷ Y means 'X is the mother of Y'.
Based on the above, how is T related to X if 'T + U - V × W ÷ X'?

- Ans
- 1. Sister
 - 2. Father's sister
 - 3. Mother's sister
 - 4. Father's mother

Question ID : 630680261887
Option 1 ID : 6306801017204
Option 2 ID : 6306801017205
Option 3 ID : 6306801017203
Option 4 ID : 6306801017206
Status : Answered
Chosen Option : 1

Q.4 Three statements are given followed by three conclusions numbered I, II and III.
Assuming the statements to be true, even if they seem to be at variance with commonly known facts, decide which of the conclusions logically follow(s) from the statements.
Statements:
All crows are parrots.
All eagles are parrots.
All parrots are birds.
Conclusions:
I. No crow is a bird.
II. Some birds are eagles.
III. All birds are crows.

- Ans
- 1. All conclusions follow.
 - 2. Both conclusions I and III follow.
 - 3. Either conclusion II or III follows.
 - 4. Only conclusion II follows.

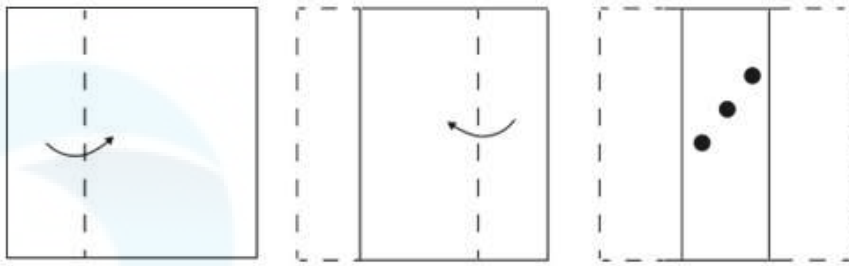
Question ID : 630680416455
Option 1 ID : 6306801624583
Option 2 ID : 6306801624585
Option 3 ID : 6306801624586
Option 4 ID : 6306801624584
Status : Answered
Chosen Option : 4

Q.5 Four letter-clusters have been given, out of which three are alike in some manner and one is different. Select the one that is different. The odd one out is not based on the number of consonants/vowels or their position in the letter cluster

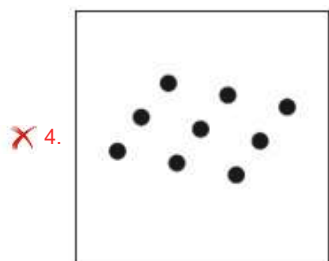
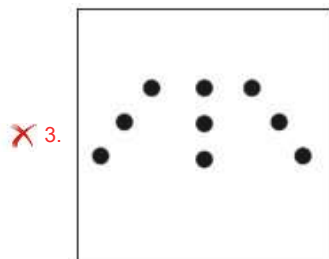
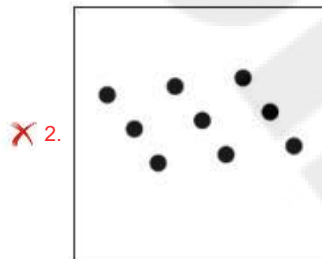
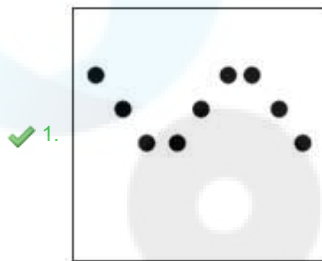
- Ans
- 1. RTTUWW
 - 2. NOPPSS
 - 3. ACCDFF
 - 4. IKKLNN

Question ID : 63068062108
Option 1 ID : 630680239752
Option 2 ID : 630680239753
Option 3 ID : 630680239750
Option 4 ID : 630680239751
Status : Answered
Chosen Option : 2

Q.6 A square sheet of paper is folded along the dotted line successively along the directions shown and is then punched in the last as shown. How would the paper look when unfolded?



Ans



Question ID : 630680324726

Option 1 ID : 6306801263303

Option 2 ID : 6306801263304


Option 3 ID : 6306801263301

Option 4 ID : 6306801263302

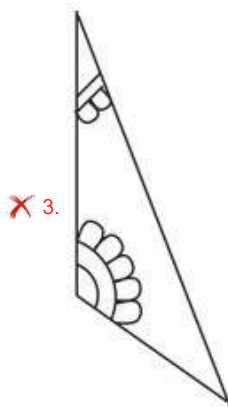
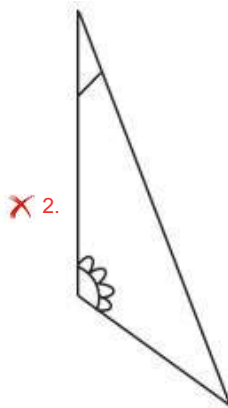
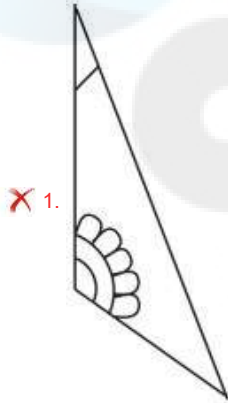
Status : Answered

Chosen Option : 1

Q.7 Select the option figure that will replace the question mark (?) in the figure given below to complete the pattern.



Ans



✓ 4.



Question ID : 630680318349
Option 1 ID : 6306801238475
Option 2 ID : 6306801238474
Option 3 ID : 6306801238476
Option 4 ID : 6306801238473
Status : Answered
Chosen Option : 4

Q.8 In a certain code language, 'FLAKE' is written as '&2348' and 'LAKES' is written as '23@84'. How will 'S' be written in that language?

- Ans
- 1. 4
 - 2. 3
 - 3. &
 - 4. @

Question ID : 630680339164
Option 1 ID : 6306801319227
Option 2 ID : 6306801319226
Option 3 ID : 6306801319225
Option 4 ID : 6306801319228
Status : Answered
Chosen Option : 4

Q.9 The position of how many letters will remain unchanged if each of the letter in the word 'IMPROVE' is arranged in English alphabetical order?

- Ans
- 1. One
 - 2. Three
 - 3. Two
 - 4. Zero

Question ID : 630680349934
Option 1 ID : 6306801362027
Option 2 ID : 6306801362025
Option 3 ID : 6306801362028
Option 4 ID : 6306801362026
Status : Answered
Chosen Option : 4

Q.10 Identify the figure given in the options which when put in place of ? will logically complete the series.

I	H	T	I	K	T	S	K	
	T		K		S		D	?
J	L	L	H	H	I	I	T	

Ans

✗ 1.

S	D
	R
K	T

✗ 2.

S	D
	R
T	K

✗ 3.

D	S
	R
K	T

✓ 4.

D	S
	R
T	K

Question ID : 630680524393

Option 1 ID : 6306802049674

Option 2 ID : 6306802049673

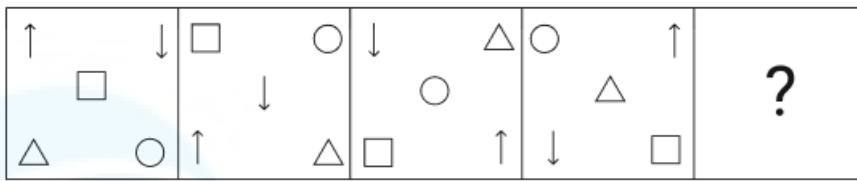
Option 3 ID : 6306802049671

Option 4 ID : 6306802049672

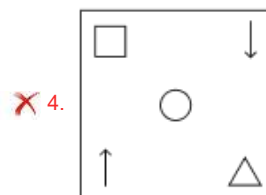
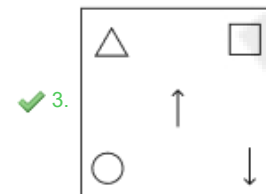
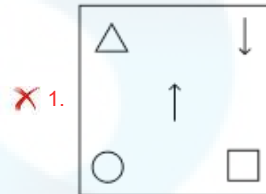
Status : Answered

Chosen Option : 4

Q.11 Identify the option figure that when put in place of the question mark (?) will logically complete the series.



Ans



Question ID : 630680488556
 Option 1 ID : 6306801908252
 Option 2 ID : 6306801908253
 Option 3 ID : 6306801908251
 Option 4 ID : 6306801908254
 Status : Answered
 Chosen Option : 3

Q.12 Three Statements are given followed by three conclusions numbered I, II and III. Assuming the statements to be true, even if they seem to be at variance with commonly known facts, decide which of the conclusions logically follow(s) from the statements.

Statements:

All peas are vegetables.

All carrots are vegetables.

All vegetables are greens.

Conclusions:

I. All peas are greens.

II. All greens are carrots.

III. Some greens are peas.

Ans 1. Both conclusions II and III follow.

2. All conclusions follow.

3. Both conclusions I and III follow.

4. Both conclusions I and II follow.

Question ID : 630680416456

Option 1 ID : 6306801624590

Option 2 ID : 6306801624587

Option 3 ID : 6306801624589

Option 4 ID : 6306801624588

Status : Answered

Chosen Option : 3

Q.13 The same operation(s) are followed in all the given number pairs except one. Find that odd number pair.

(NOTE : Operations should be performed on the whole numbers, without breaking down the numbers into its constituent digits. E.g. 13 – Operations on 13 such as adding /deleting /multiplying etc., to 13 can be performed. Breaking down 13 into 1 and 3 and then performing mathematical operations on 1 and 3 is not allowed.)

Ans 1. 12 : 8

2. 24 : 4

3. 72 : 48

4. 36 : 24

Question ID : 630680412041

Option 1 ID : 6306801607001

Option 2 ID : 6306801606999

Option 3 ID : 6306801607002

Option 4 ID : 6306801607000

Status : Answered

Chosen Option : 2

Q.14 What will come in place of the question mark (?) in the following equation if '+' and '-' are interchanged and 'x' and '÷' are interchanged?

$15 - 7 \div 4 + 36 \times 9 = ?$

Ans 1. 42

2. 39

3. 34

4. 40

Question ID : 630680336512

Option 1 ID : 6306801308771

Option 2 ID : 6306801308770

Option 3 ID : 6306801308769

Option 4 ID : 6306801308772

Status : Answered

Chosen Option : 2

Q.15 In a certain code language, 'BAKE' is coded as 'FDMF' and 'TURN' is coded as 'XXTO'.
How will 'MOCK' be coded in the given language?

- Ans 1. RQGL
 2. QREL
 3. QSEL
 4. RRFL

Question ID : 630680222583
Option 1 ID : 630680864091
Option 2 ID : 630680864093
Option 3 ID : 630680864092
Option 4 ID : 630680864094
Status : Answered
Chosen Option : 2

Q.16 Select the term from among the given options that can replace the question mark (?) in the following series.
MY 84, KW 80, IU 76, GS 72, ?

- Ans 1. FP 69
 2. EQ 68
 3. ER 70
 4. FQ 71

Question ID : 630680416231
Option 1 ID : 6306801623690
Option 2 ID : 6306801623689
Option 3 ID : 6306801623688
Option 4 ID : 6306801623687
Status : Answered
Chosen Option : 2

Q.17 Six letters V, C, R, E, X and Z are written on different faces of a dice. Two positions of this dice are shown in the figures below. Find the letter on the face opposite to C.



- Ans 1. R
 2. Z
 3. V
 4. X

Question ID : 630680222368
Option 1 ID : 630680863305
Option 2 ID : 630680863304
Option 3 ID : 630680863303
Option 4 ID : 630680863306
Status : Answered
Chosen Option : 2

Q.18 Select the set in which the numbers are related in the same way as are the numbers of the given sets.

(3, 9, 27)

(4, 16, 64)

(NOTE : Operations should be performed on the whole numbers, without breaking down the numbers into its constituent digits. E.g. 13 – Operations on 13 such as adding /deleting /multiplying etc., to 13 can be performed. Breaking down 13 into 1 and 3 and then performing mathematical operations on 1 and 3 is not allowed.)

- Ans
- 1. (6, 36, 84)
 - 2. (9, 81, 731)
 - 3. (7, 49, 343)
 - 4. (5, 25, 120)

Question ID : 630680309755
Option 1 ID : 6306801205172
Option 2 ID : 6306801205170
Option 3 ID : 6306801205169
Option 4 ID : 6306801205171
Status : Answered
Chosen Option : 3

Q.19 Which of the following terms will replace the question mark (?) in the given series?
XJUM, VLSO, TNQQ, RPOS, ?

- Ans
- 1. PRMT
 - 2. QRMT
 - 3. PRNU
 - 4. PRMU

Question ID : 630680416900
Option 1 ID : 6306801626365
Option 2 ID : 6306801626364
Option 3 ID : 6306801626366
Option 4 ID : 6306801626363
Status : Answered
Chosen Option : 4

Q.20 Select the option in which the numbers share the same relationship as that shared by the given pair of numbers.

(NOTE: Operations should be performed on the whole numbers, without breaking down the numbers into its constituent digits. E.g. 13 – Operations on 13 such as adding/deleting/multiplying etc. to 13 can be performed. Breaking down 13 into 1 and 3 and then performing mathematical operations on 1 and 3 is not allowed.)

4 : 32

7 : 98

- Ans
- 1. 12 : 144
 - 2. 10 : 1000
 - 3. 8 : 192
 - 4. 3 : 18

Question ID : 630680326570
Option 1 ID : 6306801270367
Option 2 ID : 6306801270368
Option 3 ID : 6306801270365
Option 4 ID : 6306801270366
Status : Answered
Chosen Option : 4

Q.21 Select the set in which the numbers are related in the same way as are the numbers of the following set.

(84, 63, 42)

(79, 47, 64)

(NOTE: Operations should be performed on the whole numbers, without breaking down the numbers into its constituent digits. E.g. 13 – Operations on 13 such as adding/deleting/multiplying etc. to 13 can be performed. Breaking down 13 into 1 and 3 and then performing mathematical operations on 1 and 3 is not allowed.)

Ans ✓ 1. (71, 53, 36)

✗ 2. (64, 51, 52)

✗ 3. (67, 48, 57)

✗ 4. (75, 33, 48)

Question ID : 630680329210

Option 1 ID : 6306801280664

Option 2 ID : 6306801280662

Option 3 ID : 6306801280661

Option 4 ID : 6306801280663

Status : Not Answered

Chosen Option : --

Q.22 Select the word-pair that best represents a similar relationship to the one expressed in the pair of words given below.

(The words must be considered as meaningful English words and must NOT be related to each other based on the number of letters/number of consonants/vowels in the word)

Frequency : Hertz

Ans ✗ 1. Power : Newton

✗ 2. Resistance : Candela

✓ 3. Illuminance : Lux

✗ 4. Force : Volt

Question ID : 630680417417

Option 1 ID : 6306801628431

Option 2 ID : 6306801628433

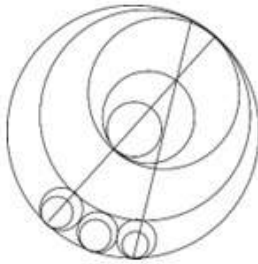
Option 3 ID : 6306801628434

Option 4 ID : 6306801628432

Status : Answered

Chosen Option : 1

Q.23 How many circles are there in the given figure?



Ans ✗ 1. 12

✗ 2. 10

✓ 3. 11

✗ 4. 13

Question ID : 630680296583

Option 1 ID : 6306801153985

Option 2 ID : 6306801153983

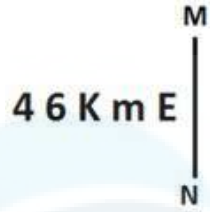
Option 3 ID : 6306801153984

Option 4 ID : 6306801153986

Status : Answered

Chosen Option : 3

Q.24 Select the correct mirror image of the given figure when the mirror is placed at MN as shown below.



- Ans
- 1. E m K ɔ 4
 - 2. E m K ɔ 4
 - 3. E m 6 K ɔ
 - 4. E m K ɔ 4

Question ID : 630680356655
Option 1 ID : 6306801388622
Option 2 ID : 6306801388623
Option 3 ID : 6306801388621
Option 4 ID : 6306801388624
Status : Answered
Chosen Option : 2

Q.25 Select the combination of letters that when sequentially placed in the blanks of the given series will complete the series.

X _ _ Y _ X X _ _ X _ _

- Ans
- 1. Y X X Y Y X X
 - 2. X X Y Y A A X
 - 3. X X X Y X X Y
 - 4. Y Y X Y A X X

Question ID : 630680296795
Option 1 ID : 6306801154828
Option 2 ID : 6306801154830
Option 3 ID : 6306801154829
Option 4 ID : 6306801154827
Status : Answered
Chosen Option : 3

Section : General Awareness

Q.1 Who among the following Indian classical dancers is associated with Kuchipudi?

- Ans
- 1. Meenakshi Medhi
 - 2. Sanjukta Panigrahi
 - 3. Malavika Sarkar
 - 4. Vempati Chinna Satyam

Question ID : 630680512084
Option 1 ID : 6306802001308
Option 2 ID : 6306802001306
Option 3 ID : 6306802001307
Option 4 ID : 6306802001309
Status : Not Answered
Chosen Option : --

Q.2 How many ICC World Cups has India won in ODI?

Ans 1. 3

2. 2

3. 4

4. 1

Question ID : 630680510823
Option 1 ID : 6306801996424
Option 2 ID : 6306801996423
Option 3 ID : 6306801996425
Option 4 ID : 6306801996422
Status : Answered
Chosen Option : 2

Q.3 With reference of Ajivikas, consider the following statements.

a) Makkhali Gosala was the prominent teacher of this sect.

b) Ajivikas believed in fatalism.

Which of the above statements is/are correct?

Ans 1. Both a and b

2. Neither a or b

3. Only b

4. Only a

Question ID : 630680412356
Option 1 ID : 6306801608248
Option 2 ID : 6306801608250
Option 3 ID : 6306801608249
Option 4 ID : 6306801608247
Status : Answered
Chosen Option : 4

Q.4 Who first stated the principle of refraction that postulates that every substance has a specific bending ratio – 'refractive index'?

Ans 1. Dennis Gabor

2. Thomas Young

3. David Brewster

4. Willebrord Snellius

Question ID : 630680295291
Option 1 ID : 6306801148891
Option 2 ID : 6306801148888
Option 3 ID : 6306801148889
Option 4 ID : 6306801148890
Status : Not Answered
Chosen Option : --

Q.5 Who among the following was appointed as the Chief Economic Advisor (CEA) to the Indian government in 2022?

- Ans** 1. Raghuram Rajan
 2. Kaushik Basu
 3. TV Somanathan
 4. Venkatramanan Anantha Nageswaran

Question ID : 630680413022
Option 1 ID : 6306801610914
Option 2 ID : 6306801610911
Option 3 ID : 6306801610912
Option 4 ID : 6306801610913
Status : Not Answered
Chosen Option : --

Q.6 Which Article in the fundamental duty is invoked when you see in a private party that the Indian flag has been used as a covering for the speaker's desk?

- Ans** 1. Article 51A (b)
 2. Article 51A (c)
 3. Article 51A (d)
 4. Article 51A (a)

Question ID : 630680229956
Option 1 ID : 630680892265
Option 2 ID : 630680892264
Option 3 ID : 630680892263
Option 4 ID : 630680892266
Status : Not Answered
Chosen Option : --

Q.7 Kati Bihu is celebrated in which of the following months in Assam?

- Ans** 1. March
 2. November
 3. January
 4. October

Question ID : 630680216072
Option 1 ID : 630680838266
Option 2 ID : 630680838263
Option 3 ID : 630680838265
Option 4 ID : 630680838264
Status : Not Answered
Chosen Option : --

Q.8 Coir conductor Coomi Nariman Wadia was awarded with which of the following awards by the Government of India in 2023?

- Ans** 1. Padma Vibhushan
 2. Bharat Ratna
 3. Padma Bhushan
 4. Padma Shri

Question ID : 630680415817
Option 1 ID : 6306801622032
Option 2 ID : 6306801622031
Option 3 ID : 6306801622033
Option 4 ID : 6306801622034
Status : Not Answered
Chosen Option : --

Q.9 What is the gas evolved when zinc reacts with sulphuric acid?

- Ans
- 1. Carbon dioxide
 - 2. Oxygen
 - 3. Hydrogen sulphide
 - 4. Hydrogen

Question ID : 63068074773
Option 1 ID : 630680289250
Option 2 ID : 630680289247
Option 3 ID : 630680289249
Option 4 ID : 630680289248
Status : Answered
Chosen Option : 2

Q.10 Name the pension scheme that seeks to ensure old age protection for unorganised workers.

- Ans
- 1. Pradhan Mantri Mudra Yojna
 - 2. Pradhan Mantri Shram Yogi Maandhan
 - 3. Pradhan Mantri Suraksha Bhima Yojna
 - 4. Atal Pension Yojana

Question ID : 630680183658
Option 1 ID : 630680711641
Option 2 ID : 630680711643
Option 3 ID : 630680711642
Option 4 ID : 630680711644
Status : Not Answered
Chosen Option : --

Q.11 Who published Systema Naturae in 1735 classifying the three kingdoms of nature and outlining the sexual system for the classification of plants?

- Ans
- 1. Carolus Linnaeus
 - 2. Robert Whittaker
 - 3. Ernst Haeckel
 - 4. Carl Woese

Question ID : 630680407432
Option 1 ID : 6306801588668
Option 2 ID : 6306801588667
Option 3 ID : 6306801588666
Option 4 ID : 6306801588669
Status : Not Answered
Chosen Option : --

Q.12 In 2022, who has been appointed as new Attorney General of India?

- Ans
- 1. R Venkatramani
 - 2. Mukul Rohatgi
 - 3. Niren De
 - 4. KK Venugopal

Question ID : 630680195356
Option 1 ID : 630680757896
Option 2 ID : 630680757894
Option 3 ID : 630680757895
Option 4 ID : 630680757893
Status : Answered
Chosen Option : 1

Q.13 The most common rainfall measurement is the total rainfall depth during a given period, which is expressed in _____.

- Ans** 1. millimetres (mm)
 2. hectopascal (hPa)
 3. millibar (mbar)
 4. kilopascal (kPa)

Question ID : 63068094173
Option 1 ID : 630680365387
Option 2 ID : 630680365389
Option 3 ID : 630680365388
Option 4 ID : 630680365390
Status : Answered
Chosen Option : 1

Q.14 Which of the following is NOT a kharif crop?

- Ans** 1. Cotton
 2. Paddy
 3. Wheat
 4. Soyabean

Question ID : 63068091578
Option 1 ID : 630680355046
Option 2 ID : 630680355048
Option 3 ID : 630680355047
Option 4 ID : 630680355049
Status : Answered
Chosen Option : 1

Q.15 Which of the following statements about the second five-year plan is INCORRECT?

- Ans** 1. The plan was based on the Keynesian Model.
 2. Electricity, Railway, Steel etc. industries were established during the plan.
 3. The plan stressed the rapid industrialisation of heavy and basic industries.
 4. The socialist pattern of the society was reflected in the plan.

Question ID : 630680410438
Option 1 ID : 6306801600468
Option 2 ID : 6306801600471
Option 3 ID : 6306801600469
Option 4 ID : 6306801600470
Status : Answered
Chosen Option : 1

Q.16 Being the President of the Indian National Congress, who among the following had called for complete independence from the British Raj in 1929?

- Ans** 1. Subhas Chandra Bose
 2. Sardar Vallabhbhai Patel
 3. Jawaharlal Nehru
 4. Mahatma Gandhi

Question ID : 630680511500
Option 1 ID : 6306801999122
Option 2 ID : 6306801999123
Option 3 ID : 6306801999125
Option 4 ID : 6306801999124
Status : Answered
Chosen Option : 3

Q.17 Which of the following is NOT a tributary of Ganga?

- Ans 1. Yamuna
 2. Kosi
 3. Lohit
 4. Gandak

Question ID : 630680309104
Option 1 ID : 6306801202595
Option 2 ID : 6306801202593
Option 3 ID : 6306801202594
Option 4 ID : 6306801202596
Status : Answered
Chosen Option : 3

Q.18 Which of the following ministries launched the PM Daksh scheme?

- Ans 1. Ministry of Electronics and Information Technology
 2. Ministry of Education
 3. Ministry of Social Justice and Empowerment
 4. Ministry of Food Processing Industries

Question ID : 630680113585
Option 1 ID : 630680439876
Option 2 ID : 630680439875
Option 3 ID : 630680439874
Option 4 ID : 630680439877
Status : Not Answered
Chosen Option : --

Q.19 When a person is NOT paying anything for public goods, it is known as _____.

- Ans 1. private good
 2. rivalrous
 3. non-excludable
 4. free rider

Question ID : 630680324424
Option 1 ID : 6306801262180
Option 2 ID : 6306801262177
Option 3 ID : 6306801262178
Option 4 ID : 6306801262179
Status : Not Answered
Chosen Option : --

Q.20 Which of the following team events is included in the Target Olympic Podium Scheme?

- Ans 1. Hockey
 2. Cricket
 3. Football
 4. Tennis

Question ID : 630680309511
Option 1 ID : 6306801204198
Option 2 ID : 6306801204197
Option 3 ID : 6306801204199
Option 4 ID : 6306801204200
Status : Not Answered
Chosen Option : --

Q.21 _____ is often touted as Tansen of the 20th century, this musical genius blended the best of classical music and created a unique style of his own.

- Ans
- 1. Ustad Ali Baksh Khan
 - 2. Bade Ghulam Ali Khan
 - 3. Barkat Ali Khan
 - 4. Mubarak Ali Khan

Question ID : 630680409223
Option 1 ID : 6306801595723
Option 2 ID : 6306801595724
Option 3 ID : 6306801595722
Option 4 ID : 6306801595721
Status : Not Answered
Chosen Option : --

Q.22 In 1936, The Independent Labour Party was founded by _____.

- Ans
- 1. BR Ambedkar
 - 2. Bhagat Singh
 - 3. Bal Gangadhar Tilak
 - 4. Mohan Singh Bhakhna

Question ID : 630680412313
Option 1 ID : 6306801608076
Option 2 ID : 6306801608077
Option 3 ID : 6306801608075
Option 4 ID : 6306801608078
Status : Not Answered
Chosen Option : --

Q.23 Which of the following is another name of vitamin C?

- Ans
- 1. Pyridoxal
 - 2. Pyridoxine
 - 3. Pyridoxamine
 - 4. Ascorbic acid

Question ID : 630680305636
Option 1 ID : 6306801188918
Option 2 ID : 6306801188917
Option 3 ID : 6306801188920
Option 4 ID : 6306801188919
Status : Answered
Chosen Option : 4

Q.24 Articles 214 to 231 in Part VI of the Indian Constitution deal with the _____.

- Ans
- 1. High Courts
 - 2. Supreme Court
 - 3. Subordinate Courts
 - 4. District Courts

Question ID : 630680326515
Option 1 ID : 6306801270145
Option 2 ID : 6306801270146
Option 3 ID : 6306801270147
Option 4 ID : 6306801270148
Status : Answered
Chosen Option : 1

Q.25 Which of the following Sultans of Delhi primarily adopted a policy of consolidation rather than expansion?

- Ans 1. Bahlol Lodi
 2. Ibrahim Lodi
 3. Balban
 4. Alauddin Khalji

Question ID : 630680412430
Option 1 ID : 6306801608545
Option 2 ID : 6306801608546
Option 3 ID : 6306801608544
Option 4 ID : 6306801608543
Status : Not Answered
Chosen Option : --

Section : Quantitative Aptitude

Q.1 Study the below table and answer the question that follows.

Day of the week	Distance jogged (in km)
Monday	6
Tuesday	5.5
Wednesday	5.5
Thursday	7
Friday	5
Saturday	3.5
Sunday	7.5

If 300 calories are burned by jogging 6 km, then how many calories were burnt in the given week?

- Ans 1. 1600
 2. 2000
 3. 2200
 4. 1800

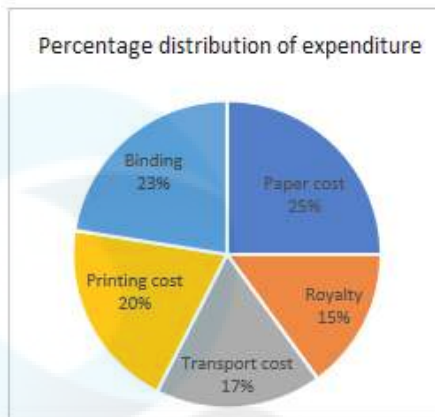
Question ID : 630680428113
Option 1 ID : 6306801670496
Option 2 ID : 6306801670499
Option 3 ID : 6306801670497
Option 4 ID : 6306801670498
Status : Answered
Chosen Option : 2

Q.2 XAB and XCD are two secants to a circle. If $XA = 18$ cm, $AB = 22$ cm and $XC = 24$ cm, then find the value of XD (in cm).

- Ans 1. 28
 2. 34
 3. 30
 4. 21

Question ID : 630680403924
Option 1 ID : 6306801575189
Option 2 ID : 6306801575188
Option 3 ID : 6306801575187
Option 4 ID : 6306801575186
Status : Not Answered
Chosen Option : --

Q.3 The given pie-chart shows the percentage distribution of the expenditure incurred in publishing a book.



What is the central angle of the sector corresponding to the expenditure incurred on binding?

- Ans** ✓ 1. 82.8°
✗ 2. 48.8°
✗ 3. 78.8°
✗ 4. 61.8°

Question ID : 630680428005
Option 1 ID : 6306801670067
Option 2 ID : 6306801670064
Option 3 ID : 6306801670066
Option 4 ID : 6306801670065
Status : Answered
Chosen Option : 1

Q.4 Find the fourth proportional to 4, 9 and 16.

- Ans** ✓ 1. 36
✗ 2. 18
✗ 3. 16
✗ 4. 27

Question ID : 630680428636
Option 1 ID : 6306801672589
Option 2 ID : 6306801672591
Option 3 ID : 6306801672590
Option 4 ID : 6306801672588
Status : Answered
Chosen Option : 1

Q.5 If $\sin A - \cos A = \frac{\sqrt{3}-\sqrt{2}}{2}$, then the value of $\sin A \cdot \cos A$ is:

Ans

1. $\frac{2\sqrt{2}-1}{8}$

2. $\frac{2\sqrt{6}-1}{8}$

3. $\frac{3\sqrt{2}-1}{4}$

4. $\frac{2\sqrt{3}-1}{4}$

Question ID : 630680526475
Option 1 ID : 6306802057969
Option 2 ID : 6306802057966
Option 3 ID : 6306802057968
Option 4 ID : 6306802057967
Status : Not Answered
Chosen Option : --

Q.6 If the medians of a triangle are equal, then the triangle will be:

- Ans 1. right angled triangle
 2. obtuse angle triangle
 3. scalene triangle
 4. equilateral triangle

Question ID : 630680526579
Option 1 ID : 6306802058382
Option 2 ID : 6306802058384
Option 3 ID : 6306802058385
Option 4 ID : 6306802058383
Status : Answered
Chosen Option : 4

Q.7 The value of $\frac{1}{\operatorname{cosec}\theta - \cot\theta} - \frac{1}{\sin\theta}$ is equal to:

- Ans 1. $\cot \theta$
 2. $\sec \theta$
 3. $\operatorname{cosec} \theta$
 4. $\tan \theta$

Question ID : 630680357977
Option 1 ID : 6306801393897
Option 2 ID : 6306801393900
Option 3 ID : 6306801393899
Option 4 ID : 6306801393898
Status : Not Answered
Chosen Option : --

Q.8 The length, breadth and height of a room is 15 m, 9 m, and 5 m, respectively. From each can of paint 40 square metre of area is painted. How many cans of paint will be needed to paint only the walls of the room?

Ans ✓ 1. 6

✗ 2. 12

✗ 3. 8

✗ 4. 4

Question ID : 630680421511

Option 1 ID : 6306801644509

Option 2 ID : 6306801644510

Option 3 ID : 6306801644508

Option 4 ID : 6306801644507

Status : Not Answered

Chosen Option : --

Q.9 A motorboat, whose speed in 15 km/h in still water goes 50 km downstream and comes back in a total of 7 hours 30 minutes. The speed of the stream (in km/h) is:

Ans ✓ 1. 5

✗ 2. 11

✗ 3. 9

✗ 4. 7

Question ID : 630680428631

Option 1 ID : 6306801672570

Option 2 ID : 6306801672571

Option 3 ID : 6306801672569

Option 4 ID : 6306801672568

Status : Not Answered

Chosen Option : --

Q.10 The simple interest on a sum for 8 years is three-fifth of the sum. The rate of interest per annum is:

Ans ✗ 1. 9%

✓ 2. $7\frac{1}{2}\%$

✗ 3. 6%

✗ 4. $5\frac{1}{2}\%$

Question ID : 630680349023

Option 1 ID : 6306801358383

Option 2 ID : 6306801358382

Option 3 ID : 6306801358381

Option 4 ID : 6306801358384

Status : Answered

Chosen Option : 2

Q.11 The marked price of a bed sheet is ₹500. At the time of its sale, two successive discounts of 10% and 5% are available. Find the selling price (in ₹) of the bed sheet.

Ans 1. 427.50

2. 430.00

3. 445.00

4. 432.50

Question ID : 630680216679

Option 1 ID : 630680840679

Option 2 ID : 630680840680

Option 3 ID : 630680840682

Option 4 ID : 630680840681

Status : Answered

Chosen Option : 1

Q.12 Hema is 20 years old and her sister Neha is 30 years old. How many years ago were their ages in the ratio of 3 : 5?

Ans 1. 5

2. 3

3. 2

4. 7

Question ID : 630680285562

Option 1 ID : 6306801110217

Option 2 ID : 6306801110216

Option 3 ID : 6306801110215

Option 4 ID : 6306801110218

Status : Answered

Chosen Option : 1

Q.13 If $a + b + c = 0$, then the value of $(a^2 + b^2 + 2ab)$ is equal to:

Ans 1. $-c$

2. c^2

3. c

4. $-c^2$

Question ID : 630680413486

Option 1 ID : 6306801612770

Option 2 ID : 6306801612769

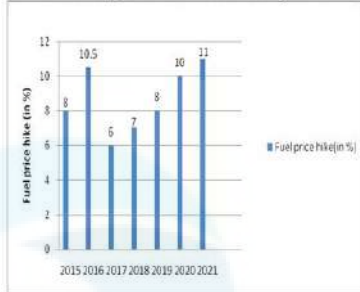
Option 3 ID : 6306801612768

Option 4 ID : 6306801612771

Status : Answered

Chosen Option : 4

Q.14 The following bar chart shows the year-wise percentage hike in the fuel price with respect to the previous year.



In how many years did the fuel prices NOT rise?

- Ans
- 1. 1
 - 2. 5
 - 3. 2
 - 4. 0

Question ID : 630680428168
Option 1 ID : 6306801670716
Option 2 ID : 6306801670719
Option 3 ID : 6306801670718
Option 4 ID : 6306801670717
Status : Answered
Chosen Option : 1

Q.15 Three pipes, P, Q and R, together take four hours to fill a tank. All the three pipes were opened at the same time. After three hours, P was closed, and Q and R filled the remaining tank in two hours. How many hours will P alone take to fill the tank?

- Ans
- 1. 10
 - 2. 12
 - 3. 8
 - 4. 9

Question ID : 630680395097
Option 1 ID : 6306801540658
Option 2 ID : 6306801540659
Option 3 ID : 6306801540656
Option 4 ID : 6306801540657
Status : Not Answered
Chosen Option : --

Q.16 AB is the chord of the circle with centre O. A line segment DOC originating from a point D on the circumference of the circle in major segment AB produced at C such that BC = OD. If angle BCO = 30° , then angle AOD is:

- Ans
- 1. 30°
 - 2. 90°
 - 3. 60°
 - 4. 80°

Question ID : 630680358080
Option 1 ID : 6306801394310
Option 2 ID : 6306801394312
Option 3 ID : 6306801394309
Option 4 ID : 6306801394311
Status : Answered
Chosen Option : 2

Q.17 The distance between the longest chord and the centre of a circle is:

- Ans
- 1. equal to the diameter
 - 2. equal to the radius
 - 3. equal to the half of the radius
 - 4. equal to zero unit

Question ID : 630680401694
Option 1 ID : 6306801566570
Option 2 ID : 6306801566571
Option 3 ID : 6306801566573
Option 4 ID : 6306801566572
Status : Answered
Chosen Option : 4

Q.18 If $\cos A + \cos^2 A = 1$ then $\sin^2 A + \sin^4 A$ is equal to:

- Ans
- 1. 0
 - 2. 1
 - 3. $\frac{\cos A}{\cos^2 A}$
 - 4. $\frac{\cos^2 A}{\cos A}$

Question ID : 630680397694
Option 1 ID : 6306801550729
Option 2 ID : 6306801550730
Option 3 ID : 6306801550731
Option 4 ID : 6306801550732
Status : Answered
Chosen Option : 2

Q.19 A mango juice is made by mixing water and mango concentrate in the ratio 9 : 7. If x litres of water and 3x litres of mango concentrate is mixed in 160 litres of mango juice, then the new ratio becomes 13 : 14. What is the quantity of the new mango juice (in litres)?

- Ans
- 1. 206
 - 2. 216
 - 3. 197
 - 4. 212

Question ID : 630680397523
Option 1 ID : 6306801550011
Option 2 ID : 6306801550013
Option 3 ID : 6306801550010
Option 4 ID : 6306801550012
Status : Not Answered
Chosen Option : --

Q.20 Simplify:

$$25 - (18 - 4 \times 9 \div 3)$$

Ans 1. 19

2. 33

3. -31

4. -17

Question ID : 630680427991

Option 1 ID : 6306801670009

Option 2 ID : 6306801670010

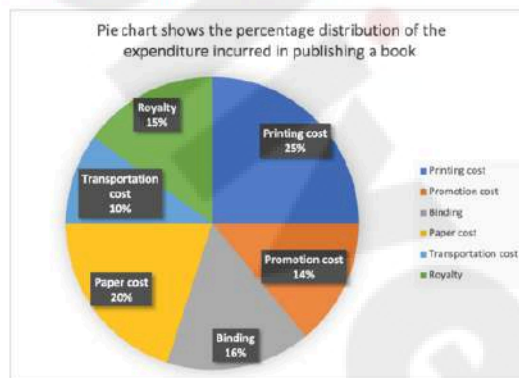
Option 3 ID : 6306801670011

Option 4 ID : 6306801670008

Status : Answered

Chosen Option : 1

Q.21 The following pie chart shows the percentage distribution of the expenditure incurred in publishing a book. Study the pie chart and answer the question that follows.



If the expenditure on royalty in publishing certain number of books be ₹43,500, then what is the combined expenditure (in ₹) on transportation, binding and printing?

Ans 1. 1,79,900

2. 1,97,900

3. 1,79,400

4. 1,47,900

Question ID : 630680421298

Option 1 ID : 6306801643670

Option 2 ID : 6306801643668

Option 3 ID : 6306801643667

Option 4 ID : 6306801643669

Status : Not Answered

Chosen Option : --

Q.22 The marked price of 55 items was equal to the cost price of 99 items. The selling price of 56 items was equal to the marked price of 35 items. Calculate the profit or loss percentage from the sale of each item.

Ans 1. 12.5% profit

2. 15% profit

3. 12.25% profit

4. 12.5% loss

Question ID : 630680429016

Option 1 ID : 6306801674109

Option 2 ID : 6306801674111

Option 3 ID : 6306801674110

Option 4 ID : 6306801674108

Status : Answered

Chosen Option : 1

Q.23 The least number which must be subtracted from 7278745 so as to obtain a sum that is divisible by 11 is:

Ans 1. 1

2. 3

3. 5

4. 2

Question ID : 630680125132

Option 1 ID : 630680485308

Option 2 ID : 630680485306

Option 3 ID : 630680485309

Option 4 ID : 630680485307

Status : Answered

Chosen Option : 1

Q.24 Ten chairs and six tables together cost ₹5,140; three chairs and two tables together cost ₹1,635. The cost of 1 chair and 1 table is:

Ans 1. ₹800

2. ₹700

3. ₹900

4. ₹600

Question ID : 630680378014

Option 1 ID : 6306801473116

Option 2 ID : 6306801473118

Option 3 ID : 6306801473115

Option 4 ID : 6306801473117

Status : Not Answered

Chosen Option : --

Q.25 In an election between two candidates, P received 42% of the valid votes and Q won by 45,360 votes. 20% people did not cast their vote. If 10% of the votes cast were found invalid, what is the total number of votes registered in the poll booth?

- Ans**
- 1. 3,59,000
 - 2. 3,53,790
 - 3. 3,93,750
 - 4. 3,93,600

Question ID : 630680395381
Option 1 ID : 6306801541707
Option 2 ID : 6306801541704
Option 3 ID : 6306801541706
Option 4 ID : 6306801541705
Status : Not Answered
Chosen Option : --

Section : English Comprehension

Q.1 Select the most appropriate synonym of the given word.
Obstinate

- Ans**
- 1. Submissive
 - 2. Stubborn
 - 3. Adaptive
 - 4. Obedient

Question ID : 630680214315
Option 1 ID : 630680831310
Option 2 ID : 630680831307
Option 3 ID : 630680831309
Option 4 ID : 630680831308
Status : Not Answered
Chosen Option : --

Q.2 Select the correctly spelt word to fill in the blank.

My grandmother _____ the preparation of every festival celebration in my house.

- Ans**
- 1. inetiates
 - 2. initiates
 - 3. enitiates
 - 4. enetiates

Question ID : 630680374779
Option 1 ID : 6306801460285
Option 2 ID : 6306801460284
Option 3 ID : 6306801460283
Option 4 ID : 6306801460286
Status : Answered
Chosen Option : 2

Q.3 Select the most appropriate option to substitute the underlined segment in the given sentence.
Aesthetic value is specifically a way in which we can get positive conclude value from the world at large.

- Ans
- 1. can get positive convalescent value
 - 2. can get positive contrastive value
 - 3. can get positive conclusive value
 - 4. can get positive convulsive value

Question ID : 630680176813
Option 1 ID : 630680685465
Option 2 ID : 630680685467
Option 3 ID : 630680685466
Option 4 ID : 630680685464
Status : Answered
Chosen Option : 3

Q.4 Parts of a sentence are given below in jumbled order. Arrange the parts in the correct order to form a meaningful sentence.

- P. and has also created a wide gap between them
- Q. laid too much stress on
- R. teachers and students
- S. online mode of education has

- Ans
- 1. SQRP
 - 2. PSQR
 - 3. RQPS
 - 4. SRPQ

Question ID : 630680134974
Option 1 ID : 630680522713
Option 2 ID : 630680522712
Option 3 ID : 630680522711
Option 4 ID : 630680522710
Status : Answered
Chosen Option : 1

Q.5 Select the option that can be used as a one-word substitute for the given group of words.
A thing that can be easily carried by hands

- Ans
- 1. Import
 - 2. Portable
 - 3. Potable
 - 4. Export

Question ID : 630680414626
Option 1 ID : 6306801617249
Option 2 ID : 6306801617250
Option 3 ID : 6306801617248
Option 4 ID : 6306801617247
Status : Answered
Chosen Option : 2

Q.6 In the question, four alternatives are given for the underlined word in the sentence. Choose the alternative which best expresses the opposite meaning of the word. It was as if the newer hybrids had an insatiable appetite for chemicals.

- Ans**
- 1. Curbed
 - 2. Urgent
 - 3. Pressing
 - 4. Satisfiable

Question ID : 630680517301
Option 1 ID : 6306802021602
Option 2 ID : 6306802021600
Option 3 ID : 6306802021603
Option 4 ID : 6306802021601
Status : Answered
Chosen Option : 4

Q.7 Select the most appropriate meaning of the given idiom.

Left out in the cold

- Ans**
- 1. To be in hiding
 - 2. To be ignored
 - 3. To go underground
 - 4. To be extremely negative

Question ID : 630680129573
Option 1 ID : 630680501910
Option 2 ID : 630680501913
Option 3 ID : 630680501911
Option 4 ID : 630680501912
Status : Answered
Chosen Option : 4

Q.8 Parts of the following sentence have been given as options. Select the option that contains an error.

He always wants to be in the company of those who are intellectually superior than him.

- Ans**
- 1. those who are intellectually
 - 2. superior than him.
 - 3. He always wants to
 - 4. be in the company of

Question ID : 630680297406
Option 1 ID : 6306801157089
Option 2 ID : 6306801157090
Option 3 ID : 6306801157087
Option 4 ID : 6306801157088
Status : Answered
Chosen Option : 4

Q.9 Select the most appropriate meaning of the given idiom.
Break the ice

Ans 1. Nervousness before a performance

2. To say or do something that makes people feel more relaxed, especially at the beginning of a meeting, party

3. Respect for someone's achievements

4. Ill-feeling carried by a person over a period of time

Question ID : 630680375530

Option 1 ID : 6306801463275

Option 2 ID : 6306801463277

Option 3 ID : 6306801463278

Option 4 ID : 6306801463276

Status : Answered

Chosen Option : 2

Q.10 Parts of the following sentence have been given as options. Select the option that contains an error.

I have sing 'Let It Go' before a crowd of thousands of people.

Ans 1. thousands of people

2. a crowd of

3. I have sing

4. 'Let It Go' before

Question ID : 630680319122

Option 1 ID : 6306801241396

Option 2 ID : 6306801241395

Option 3 ID : 6306801241393

Option 4 ID : 6306801241394

Status : Answered

Chosen Option : 1

Q.11 Identify the most appropriate ANTONYM of the underlined word in the given sentence.
Lady Stranleigh continued to smile at him brilliantly.

Ans 1. Brightly

2. Dimly

3. Cunningly

4. Strangely

Question ID : 630680395157

Option 1 ID : 6306801540888

Option 2 ID : 6306801540889

Option 3 ID : 6306801540890

Option 4 ID : 6306801540891

Status : Answered

Chosen Option : 1

Q.12 Parts of a sentence are given below in jumbled order. Arrange the parts in the correct order to form a meaningful sentence.

- O. want
- P. movie tonight
- Q. do you
- R. to watch
- S. the

- Ans
- 1. OSPQR
 - 2. RSPQO
 - 3. OSQPR
 - 4. QORSP

Question ID : 630680374393
Option 1 ID : 6306801458758
Option 2 ID : 6306801458756
Option 3 ID : 6306801458757
Option 4 ID : 6306801458755
Status : Answered
Chosen Option : 4

Q.13 Select the option that correctly expresses the given sentence in passive voice.
Mr. Amar refused him admittance.

- Ans
- 1. Admittance would be refused to him by Mr. Amar.
 - 2. Admittance shall be refused to him by Mr. Amar.
 - 3. Admittance was refused to him by Mr. Amar.
 - 4. Admittance will be refused to him by Mr. Amar.

Question ID : 630680206763
Option 1 ID : 630680801654
Option 2 ID : 630680801653
Option 3 ID : 630680801651
Option 4 ID : 630680801652
Status : Answered
Chosen Option : 3

Q.14 Parts of a sentence are given below in jumbled order. Arrange the parts in the correct order to form a meaningful sentence.

- P) always favours
- Q) only the
- R) fortune
- S) bold

- Ans
- 1. RPQS
 - 2. SQPR
 - 3. SRQP
 - 4. PQRS

Question ID : 630680377252
Option 1 ID : 6306801470072
Option 2 ID : 6306801470074
Option 3 ID : 6306801470071
Option 4 ID : 6306801470073
Status : Answered
Chosen Option : 1

Q.15 Select the most appropriate homophone to fill in the blank.
The summer was _____ hot this year.

- Ans 1. to
 2. tow
 3. two
 4. too

Question ID : 630680131808
Option 1 ID : 630680510442
Option 2 ID : 630680510445
Option 3 ID : 630680510444
Option 4 ID : 630680510443
Status : Answered
Chosen Option : 4

Q.16 Parts of a sentence are given below in jumbled order. Arrange the parts in the correct order to form a meaningful sentence.

- A. Only for themselves
B. Is full of
C. People who live
D. The world

- Ans 1. BCAD
 2. ABCD
 3. DBAC
 4. DBCA

Question ID : 630680360806
Option 1 ID : 6306801405098
Option 2 ID : 6306801405097
Option 3 ID : 6306801405100
Option 4 ID : 6306801405099
Status : Answered
Chosen Option : 4

Q.17 Select the most appropriate synonym of the bracketed word in the following sentence to fill in the blank.

The mothers, who suffer from postpartum depression, feel _____ by their children.
(vexed)

- Ans 1. delighted
 2. pacific
 3. annoyed
 4. recovered

Question ID : 630680332774
Option 1 ID : 6306801294483
Option 2 ID : 6306801294481
Option 3 ID : 6306801294482
Option 4 ID : 6306801294484
Status : Answered
Chosen Option : 3

Q.18 Select the correct spelling of the underlined word in the sentence.
Can you please come back to reality from the fectitious world you live in?

- Ans
- 1. factional
 - 2. fractional
 - 3. fictitious
 - 4. factitious

Question ID : 630680409967
Option 1 ID : 6306801598699
Option 2 ID : 6306801598700
Option 3 ID : 6306801598697
Option 4 ID : 6306801598698
Status : Answered
Chosen Option : 4

Q.19 Select the most appropriate ANTONYM of the given word.
Purify

- Ans
- 1. Chant
 - 2. Invite
 - 3. Pollute
 - 4. Wash

Question ID : 630680517559
Option 1 ID : 6306802022635
Option 2 ID : 6306802022634
Option 3 ID : 6306802022632
Option 4 ID : 6306802022633
Status : Answered
Chosen Option : 3

Q.20 Select the option that expresses the given sentence in active voice.
Trigonometry has been taught by him for donkey's years.

- Ans
- 1. He has been teaching trigonometry for donkey's years.
 - 2. He had been teaching trigonometry for donkey's years.
 - 3. He is teaching trigonometry for donkey's years.
 - 4. He has been trigonometry teaching for donkey's years.

Question ID : 630680415250
Option 1 ID : 6306801619748
Option 2 ID : 6306801619750
Option 3 ID : 6306801619749
Option 4 ID : 6306801619747
Status : Answered
Chosen Option : 1

Comprehension:

In the following passage, some words have been deleted. Read the passage carefully and select the most appropriate option to fill in each blank.

Music is perhaps the most popular and widely practised (1)_____ of fine arts, transcending all kinds of cultural and linguistic barriers. Any form of fine art is (2)_____ to master and almost impossible to perfect, and music is no exception.

Nature, it is learnt, has blessed almost two-thirds of the human race with musical ability of some sort. Music has the power to (3)_____ out the deepest emotions. In fact, it is a magic medicine, and many seek refuge in it when they are depressed or stressed. It is this intimacy that makes us listen to music (4)_____ even hum or sing sometimes. This singing, or realistically speaking, expressing one's emotion musically sometimes takes a serious turn.

The desire to sing before an audience is innocent and beautiful, and indeed, it is perfectly alright to have such a genuine desire. But it is also important to understand that singing is an (5)_____ art—a highly refined one at that, which requires systematic, prolonged and strict training to be acceptable.

SubQuestion No : 21

Q.21 Choose the most appropriate option to fill in blank no. 1.

Ans ✓ 1. form

✗ 2. design

✗ 3. format

✗ 4. substance

Question ID : 630680160893

Option 1 ID : 630680622942

Option 2 ID : 630680622941

Option 3 ID : 630680622943

Option 4 ID : 630680622940

Status : Answered

Chosen Option : 1

Comprehension:

In the following passage, some words have been deleted. Read the passage carefully and select the most appropriate option to fill in each blank.

Music is perhaps the most popular and widely practised (1)_____ of fine arts, transcending all kinds of cultural and linguistic barriers. Any form of fine art is (2)_____ to master and almost impossible to perfect, and music is no exception.

Nature, it is learnt, has blessed almost two-thirds of the human race with musical ability of some sort. Music has the power to (3)_____ out the deepest emotions. In fact, it is a magic medicine, and many seek refuge in it when they are depressed or stressed. It is this intimacy that makes us listen to music (4)_____ even hum or sing sometimes. This singing, or realistically speaking, expressing one's emotion musically sometimes takes a serious turn.

The desire to sing before an audience is innocent and beautiful, and indeed, it is perfectly alright to have such a genuine desire. But it is also important to understand that singing is an (5)_____ art—a highly refined one at that, which requires systematic, prolonged and strict training to be acceptable.

SubQuestion No : 22

Q.22 Choose the most appropriate option to fill in blank no. 2.

Ans ✓ 1. difficult

✗ 2. easy

✗ 3. irksome

✗ 4. serious

Question ID : 630680160894

Option 1 ID : 630680622946

Option 2 ID : 630680622947

Option 3 ID : 630680622945

Option 4 ID : 630680622944

Status : Answered

Chosen Option : 1

Comprehension:

In the following passage, some words have been deleted. Read the passage carefully and select the most appropriate option to fill in each blank.

Music is perhaps the most popular and widely practised (1)_____ of fine arts, transcending all kinds of cultural and linguistic barriers. Any form of fine art is (2)_____ to master and almost impossible to perfect, and music is no exception.

Nature, it is learnt, has blessed almost two-thirds of the human race with musical ability of some sort. Music has the power to (3)_____ out the deepest emotions. In fact, it is a magic medicine, and many seek refuge in it when they are depressed or stressed. It is this intimacy that makes us listen to music (4)_____ even hum or sing sometimes. This singing, or realistically speaking, expressing one's emotion musically sometimes takes a serious turn. The desire to sing before an audience is innocent and beautiful, and indeed, it is perfectly alright to have such a genuine desire. But it is also important to understand that singing is an (5)_____ art—a highly refined one at that, which requires systematic, prolonged and strict training to be acceptable.

SubQuestion No : 23

Q.23 Choose the most appropriate option to fill in blank no. 3.

Ans 1. catalyse

2. yield

3. bring

4. effect

Question ID : 630680160895

Option 1 ID : 630680622951

Option 2 ID : 630680622949

Option 3 ID : 630680622948

Option 4 ID : 630680622950

Status : Not Answered

Chosen Option : --

Comprehension:

In the following passage, some words have been deleted. Read the passage carefully and select the most appropriate option to fill in each blank.

Music is perhaps the most popular and widely practised (1)_____ of fine arts, transcending all kinds of cultural and linguistic barriers. Any form of fine art is (2)_____ to master and almost impossible to perfect, and music is no exception.

Nature, it is learnt, has blessed almost two-thirds of the human race with musical ability of some sort. Music has the power to (3)_____ out the deepest emotions. In fact, it is a magic medicine, and many seek refuge in it when they are depressed or stressed. It is this intimacy that makes us listen to music (4)_____ even hum or sing sometimes. This singing, or realistically speaking, expressing one's emotion musically sometimes takes a serious turn. The desire to sing before an audience is innocent and beautiful, and indeed, it is perfectly alright to have such a genuine desire. But it is also important to understand that singing is an (5)_____ art—a highly refined one at that, which requires systematic, prolonged and strict training to be acceptable.

SubQuestion No : 24

Q.24 Choose the most appropriate option to fill in blank no. 4.

Ans 1. neither

2. nor

3. or

4. either

Question ID : 630680160896

Option 1 ID : 630680622953

Option 2 ID : 630680622954

Option 3 ID : 630680622955

Option 4 ID : 630680622952

Status : Answered

Chosen Option : 4

Comprehension:

In the following passage, some words have been deleted. Read the passage carefully and select the most appropriate option to fill in each blank.

Music is perhaps the most popular and widely practised (1)_____ of fine arts, transcending all kinds of cultural and linguistic barriers. Any form of fine art is (2)_____ to master and almost impossible to perfect, and music is no exception.

Nature, it is learnt, has blessed almost two-thirds of the human race with musical ability of some sort. Music has the power to (3)_____ out the deepest emotions. In fact, it is a magic medicine, and many seek refuge in it when they are depressed or stressed. It is this intimacy that makes us listen to music (4)_____ even hum or sing sometimes. This singing, or realistically speaking, expressing one's emotion musically sometimes takes a serious turn. The desire to sing before an audience is innocent and beautiful, and indeed, it is perfectly alright to have such a genuine desire. But it is also important to understand that singing is an (5)_____ art—a highly refined one at that, which requires systematic, prolonged and strict training to be acceptable.

SubQuestion No : 25

Q.25 Choose the most appropriate option to fill in blank no. 5.

Ans 1. uncomplicated

2. uniform

3. mixed

4. intricate

Question ID : 630680160897

Option 1 ID : 630680622958

Option 2 ID : 630680622959

Option 3 ID : 630680622956

Option 4 ID : 630680622957

Status : Not Answered

Chosen Option : --