

Combined Graduate Level Examination 2024 Tier I

Roll Number	
Candidate Name	
Venue Name	
Exam Date	24/09/2024
Exam Time	4:00 PM - 5:00 PM
Subject	Combined Graduate Level Examination Tier I

Section : General Intelligence and Reasoning

Q.1 Select the correct mirror image of the given figure when the mirror is placed at MN.

Kf59Bar
M
N

- Ans
- 1. 16B02JK
 - 2. 1a862JK
 - 3. 16B02JK
 - 4. 16B02JK

Question ID : 630680325837
Option 1 ID : 6306801267542
Option 2 ID : 6306801267543
Option 3 ID : 6306801267541
Option 4 ID : 6306801267544
Status : Answered
Chosen Option : 3

Q.2 7 is related to 40 by certain logic. Following the same logic, 5 is related to 16. To which of the following is 9 related, following the same logic? (NOTE : Operations should be performed on the whole numbers, without breaking down the numbers into its constituent digits. E.g. 13 – Operations on 13 such as adding /deleting /multiplying etc., to 13 can be performed. Breaking down 13 into 1 and 3 and then performing mathematical operations on 1 and 3 is not allowed.)

- Ans
- 1. 48
 - 2. 72
 - 3. 54
 - 4. 70

Question ID : 630680326550
Option 1 ID : 6306801270286
Option 2 ID : 6306801270285
Option 3 ID : 6306801270287
Option 4 ID : 6306801270288
Status : Answered
Chosen Option : 2

Q.3 64 is related to 4 following a certain logic. Following the same logic, 216 is related to 6. To which of the following is 729 related, following the same logic?

(NOTE: Operations should be performed on the whole numbers, without breaking down the numbers into its constituent digits. E.g. 13 – Operations on 13 such as adding /deleting /multiplying etc. to 13 can be performed. Breaking down 13 into 1 and 3 and then performing mathematical operations on 1 and 3 is not allowed)

- Ans
- 1. 11
 - 2. 7
 - 3. 9
 - 4. 13

Question ID : 630680344659
Option 1 ID : 6306801340946
Option 2 ID : 6306801340945
Option 3 ID : 6306801340947
Option 4 ID : 6306801340948
Status : Answered
Chosen Option : 3

Q.4 Select the combination of letters that when sequentially placed in the blanks of the given series will complete the series.

B _DE_ GDGBK _IB_ DK

- Ans
- 1. CBDP
 - 2. OCBD
 - 3. CODB
 - 4. CBDO

Question ID : 630680325789
Option 1 ID : 6306801267352
Option 2 ID : 6306801267349
Option 3 ID : 6306801267350
Option 4 ID : 6306801267351
Status : Answered
Chosen Option : 4

Q.5 In a certain code language, 'ZCJV' is coded as 'YBIU' and 'GKMD' is coded as 'FJLC'. How will 'EYOR' be coded in that language?

- Ans
- 1. DWMP
 - 2. DXNQ
 - 3. CXNQ
 - 4. QWMP

Question ID : 630680172182
Option 1 ID : 630680667166
Option 2 ID : 630680667165
Option 3 ID : 630680667167
Option 4 ID : 630680667164
Status : Answered
Chosen Option : 2

Q.6 Q is the mother of T. R is the husband of P. S is the father of Q. T is the brother of P. How is P related to S?

- Ans
- 1. Daughter's daughter
 - 2. Mother's father
 - 3. Brother's wife
 - 4. Mother's mother

Question ID : 630680216627
Option 1 ID : 630680840472
Option 2 ID : 630680840471
Option 3 ID : 630680840473
Option 4 ID : 630680840474
Status : Answered
Chosen Option : 2


Q.7 Based on the English alphabetical order, three of the following four letter-clusters are alike in a certain way and thus form a group. Which is the one that DOES NOT belong to that group?

(Note: The odd man out is not based on the number of consonants/vowels or their position in the letter-cluster.)

- Ans
- 1. HKI
 - 2. MPN
 - 3. RUS
 - 4. QUR

Question ID : 630680812277
Option 1 ID : 6306803182556
Option 2 ID : 6306803182555
Option 3 ID : 6306803182554
Option 4 ID : 6306803182553
Status : Answered
Chosen Option : 4

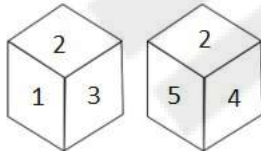
Q.8 How many squares are there in the figure shown below?



- Ans
- 1. 14
 - 2. 12
 - 3. 13
 - 4. 11

Question ID : 630680296651
Option 1 ID : 6306801154256
Option 2 ID : 6306801154255
Option 3 ID : 6306801154258
Option 4 ID : 6306801154257
Status : Answered
Chosen Option : 2

Q.9 Two different positions of the same dice are given below. Which is the number on the face opposite the face containing 5?



- Ans
- 1. 3
 - 2. 2
 - 3. 1
 - 4. 6

Question ID : 630680313768
Option 1 ID : 6306801220916
Option 2 ID : 6306801220915
Option 3 ID : 6306801220914
Option 4 ID : 6306801220913
Status : Answered
Chosen Option : 3

Q.10 In this question, three statements are given, followed by two conclusions numbered I and II. Assuming the statements to be true, even if they seem to be at variance with commonly known facts, decide which of the conclusion(s) logically follows/follow from the statements.

Statements:
All grains are cereals.
Some cereals are fruits.
No fruit is a vegetable.

Conclusions:
I. All cereals can be vegetables.
II. All grains are fruits.

- Ans
- 1. Only Conclusion I follows.
 - 2. Neither Conclusion I nor II follow.
 - 3. Only Conclusion II follows.
 - 4. Both Conclusions I and II follow.

Question ID : 630680416395
Option 1 ID : 6306801624343
Option 2 ID : 6306801624346
Option 3 ID : 6306801624344
Option 4 ID : 6306801624345
Status : Answered
Chosen Option : 2

Q.11 In the following number-pairs, the second number is obtained by applying certain mathematical operations to the first number. Select the set in which the numbers are related in the same way as are the numbers of the following sets.
(NOTE : Operations should be performed on the whole numbers, without breaking down the numbers into its constituent digits. E.g. 13 – Operations on 13 such as adding /deleting /multiplying etc., to 13 can be performed. Breaking down 13 into 1 and 3 and then performing mathematical operations on 1 and 3 is not allowed.)
(26, 114)
(47, 198)

- Ans
- 1. (22, 88)
 - 2. (15, 70)
 - 3. (18, 74)
 - 4. (25, 105)

Question ID : 630680338904
Option 1 ID : 6306801318206
Option 2 ID : 6306801318205
Option 3 ID : 6306801318207
Option 4 ID : 6306801318208
Status : Answered
Chosen Option : 2

Q.12 Select the word pair that best represents a similar relationship to the one expressed in the pair of words given below. (The words must be considered as meaningful English words and must not be related to each other based on the number of letters/number of consonants/vowels in the word)
Love : Harmony

- Ans
- 1. Calm : Sad
 - 2. Peace : Bliss
 - 3. Rage : Cool
 - 4. Anger : Excitement

Question ID : 630680416651
Option 1 ID : 6306801625367
Option 2 ID : 6306801625369
Option 3 ID : 6306801625370
Option 4 ID : 6306801625368
Status : Answered
Chosen Option : 2

Q.13 The position of how many letters will remain unchanged if each of the letters in the word 'SIGNATURE' is re-arranged in the English alphabetical order from left to right?

- Ans
- 1. One
 - 2. Two
 - 3. Four
 - 4. Three

Question ID : 630680106897
Option 1 ID : 630680415163
Option 2 ID : 630680415162
Option 3 ID : 630680415160
Option 4 ID : 630680415161
Status : Answered
Chosen Option : 1

Q.14 Which of the following numbers will replace the question marks (?) in the given series?
61, ?, ?, 73, 79, 83, 89

- Ans
- 1. 67, 69
 - 2. 63, 65
 - 3. 63, 67
 - 4. 67, 71

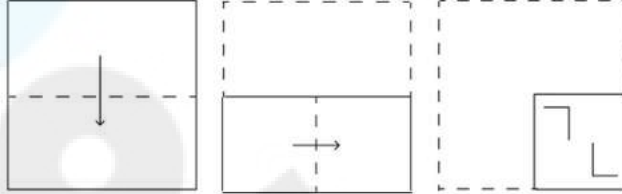
Question ID : 630680411867
Option 1 ID : 6306801606306
Option 2 ID : 6306801606304
Option 3 ID : 6306801606305
Option 4 ID : 6306801606303
Status : Answered
Chosen Option : 4

Q.15 In a certain code language, 'BLEACHERS' is coded as '63' and 'ABACAS' is coded as '42'. How will 'FIZZY' be coded in the same language?

- Ans
- 1. 52
 - 2. 45
 - 3. 44
 - 4. 35

Question ID : 630680416229
Option 1 ID : 6306801623679
Option 2 ID : 6306801623682
Option 3 ID : 6306801623680
Option 4 ID : 6306801623681
Status : Answered
Chosen Option : 4

Q.16 A paper is folded and cut as shown below. How will it appear when unfolded?



Ans

- 1.
- 2.
- 3.
- 4.

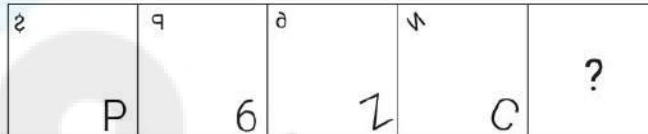
Question ID : 630680294960
Option 1 ID : 6306801147569
Option 2 ID : 6306801147570
Option 3 ID : 6306801147568
Option 4 ID : 6306801147571
Status : Answered
Chosen Option : 3

Q.17 Which number will come in the place of the question mark (?) in the following equation if '+' and '-' are interchanged and 'x' and '+' are interchanged?
 $7 \div 5 - 30 \times 6 + 4 = ?$

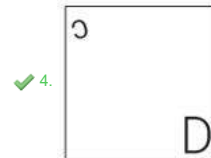
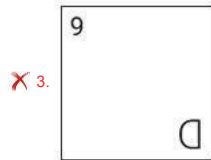
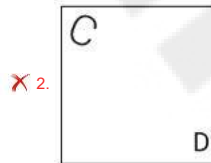
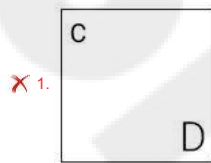
- Ans 1. 32
 2. 36
 3. 30
 4. 34

Question ID : 630680328467
 Option 1 ID : 6306801277838
 Option 2 ID : 6306801277840
 Option 3 ID : 6306801277837
 Option 4 ID : 6306801277839
 Status : Answered
 Chosen Option : 2

Q.18 Identify the figure from among the given options which when put in place of the question mark (?) will logically complete the series.

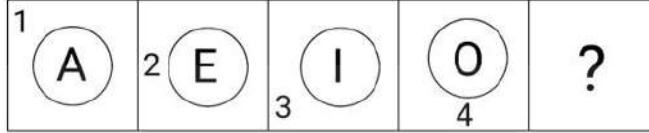


Ans


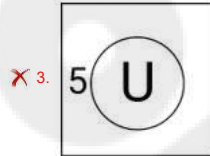
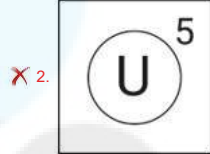



Question ID : 630680296884
 Option 1 ID : 6306801155180
 Option 2 ID : 6306801155181
 Option 3 ID : 6306801155182
 Option 4 ID : 6306801155179
 Status : Answered
 Chosen Option : 4

Q.19 Select the figure from among the given options that can replace the question mark (?) in the following series.

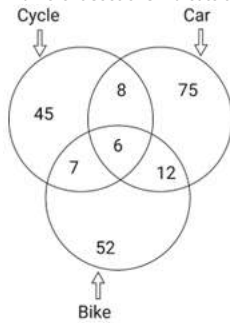


Ans



Question ID : 630680366398
 Option 1 ID : 6306801427110
 Option 2 ID : 6306801427109
 Option 3 ID : 6306801427112
 Option 4 ID : 6306801427111
 Status : Answered
 Chosen Option : 4

Q.20 Study the given diagram carefully and answer the question that follows. The numbers in different sections indicate the number of persons who can drive different vehicles.



What is the difference between the number of persons who can drive all the three vehicles and that of persons who can drive any two of these vehicles?

- Ans
- ✗ 1. 15
 - ✗ 2. 12
 - ✗ 3. 27
 - ✓ 4. 21

Question ID : 630680195791
 Option 1 ID : 630680759618
 Option 2 ID : 630680759617
 Option 3 ID : 630680759616
 Option 4 ID : 630680759615
 Status : Answered
 Chosen Option : 4

Q.21 What will come in place of the question mark (?) in the following equation, if '+' and '-' are interchanged and 'x' and '+' are interchanged?
 $1604 \times 4 + 87 - 16 \div 16 = ?$

- Ans
- 1. 770
 - 2. 870
 - 3. 570
 - 4. 670

Question ID : 630680411729
Option 1 ID : 6306801605752
Option 2 ID : 6306801605751
Option 3 ID : 6306801605754
Option 4 ID : 6306801605753
Status : Answered
Chosen Option : 3

Q.22 Select the option that is related to the third word in the same way as the second word is related to the first word. (The words must be considered as meaningful English words and must not be related to each other based on the number of letters/number of consonants/vowels in the word)
Botany : Plants :: Conchology : ?

- Ans
- 1. Fossils
 - 2. Names
 - 3. Shells
 - 4. Soil

Question ID : 630680416117
Option 1 ID : 6306801623232
Option 2 ID : 6306801623233
Option 3 ID : 6306801623234
Option 4 ID : 6306801623231
Status : Answered
Chosen Option : 3

Q.23 Which of the following letter-clusters will replace the question mark (?) in the given series to make it logically complete?
JAL, MDO, PGR, SJU, ?

- Ans
- 1. WNX
 - 2. WMX
 - 3. VMY
 - 4. VMX

Question ID : 630680416937
Option 1 ID : 6306801626512
Option 2 ID : 6306801626511
Option 3 ID : 6306801626514
Option 4 ID : 6306801626513
Status : Answered
Chosen Option : 4

Q.24 Three of the following numbers are alike in a certain way and one is different. Pick the odd one out.
(NOTE : Operations should be performed on the whole numbers, without breaking down the numbers into its constituent digits. E.g. 13 – Operations on 13 such as adding /deleting /multiplying etc. to 13 can be performed. Breaking down 13 into 1 and 3 and then performing mathematical operations on 1 and 3 is not allowed.)

- Ans
- 1. 829
 - 2. 237
 - 3. 643
 - 4. 821

Question ID : 630680412028
Option 1 ID : 6306801606947
Option 2 ID : 6306801606950
Option 3 ID : 6306801606948
Option 4 ID : 6306801606949
Status : Not Answered
Chosen Option : --

Q.25 Select the correct mirror image of the given figure when the mirror is placed at MN.



- Ans
- 1. $\text{sb}t2\text{P}w\text{C}$
 - 2. $\text{sd}\text{S}t4w\text{C}$
 - 3. $\text{sb}\text{S}t\text{P}w\text{C}$
 - 4. $\text{sb}\text{S}t\text{P}w\text{C}$

Question ID : 630680325832
Option 1 ID : 6306801267521
Option 2 ID : 6306801267522
Option 3 ID : 6306801267524
Option 4 ID : 6306801267523
Status : Answered
Chosen Option : 4

Section : General Awareness

Q.1 Gangubai Hangal belonged to the _____.

- Ans
- 1. Banaras gharana
 - 2. Kirana gharana
 - 3. Gwalior gharana
 - 4. Agra gharana

Question ID : 630680512251
Option 1 ID : 6306802001975
Option 2 ID : 6306802001974
Option 3 ID : 6306802001976
Option 4 ID : 6306802001977
Status : Not Answered
Chosen Option : --

Q.2 In India, Teachers' Day is celebrated annually on September 5 to mark the birthday of:

- Ans
- 1. APJ Abdul Kalam
 - 2. Sardar Vallabhbhai Patel
 - 3. Subash Chandra Bose
 - 4. Sarvepalli Radhakrishnan

Question ID : 630680164572
Option 1 ID : 630680637406
Option 2 ID : 630680637404
Option 3 ID : 630680637405
Option 4 ID : 630680637407
Status : Answered
Chosen Option : 4

Q.3 Which of the following articles of the Indian constitution deals with the parliament and its proceedings?

- Ans
- 1. Article 36 to 51
 - 2. Article 12 to 35
 - 3. Article 51A
 - 4. Article 79 to 122

Question ID : 630680329459
Option 1 ID : 6306801281578
Option 2 ID : 6306801281577
Option 3 ID : 6306801281579
Option 4 ID : 6306801281580
Status : Answered
Chosen Option : 4

Q.4 Which of the following Rajiv Gandhi National Sadbhavana Awards was conferred on Ustad Amjad Ali Khan?

- Ans
- 1. 18th
 - 2. 21st
 - 3. 20th
 - 4. 19th

Question ID : 6306801048037
Option 1 ID : 6306804114194
Option 2 ID : 6306804114197
Option 3 ID : 6306804114196
Option 4 ID : 6306804114195
Status : Not Answered
Chosen Option : --

Q.5 The Pratiharas who first had their capital at Bhinmal gained prominence during the rule of:

- Ans
- 1. Kanishka
 - 2. Nagabhata I
 - 3. Devpala
 - 4. Nagarjuna

Question ID : 630680412292
Option 1 ID : 6306801607993
Option 2 ID : 6306801607991
Option 3 ID : 6306801607994
Option 4 ID : 6306801607992
Status : Not Answered
Chosen Option : --

Q.6 In which state of India is the Chandra Prabha Wildlife Sanctuary located?

- Ans
- 1. Bihar
 - 2. Gujarat
 - 3. Madhya Pradesh
 - 4. Uttar Pradesh

Question ID : 630680362629
Option 1 ID : 6306801412270
Option 2 ID : 6306801412272
Option 3 ID : 6306801412271
Option 4 ID : 6306801412269
Status : Not Answered
Chosen Option : --

Q.7 Which Committee identified the existence of legal provisions for implementation of some of the Fundamental Duties?

- Ans
- 1. Justice Mulla Committee
 - 2. Justice Verma Committee
 - 3. Justice Sapre Committee
 - 4. Justice VR Krishna Iyer Committee

Question ID : 630680309212
Option 1 ID : 6306801203026
Option 2 ID : 6306801203025
Option 3 ID : 6306801203028
Option 4 ID : 6306801203027
Status : Answered
Chosen Option : 2

Q.8 Which of the following is a correct statement?

- Ans
- 1. National Income is NNP at FC.
 - 2. National Income is GDP at MP.
 - 3. National Income is GNP at FC.
 - 4. National Income is NDP at MP.

Question ID : 630680145290
Option 1 ID : 630680562142
Option 2 ID : 630680562144
Option 3 ID : 630680562143
Option 4 ID : 630680562145
Status : Answered
Chosen Option : 2

Q.9 The final match of IPL 2023 was hosted by which of the following cities?

- Ans
- 1. Mumbai
 - 2. Bengaluru
 - 3. Chennai
 - 4. Ahmedabad

Question ID : 630680510789
Option 1 ID : 6306801996287
Option 2 ID : 6306801996289
Option 3 ID : 6306801996288
Option 4 ID : 6306801996286
Status : Answered
Chosen Option : 3

Q.10 Which among the following is NOT a classification criterion of drugs?

- Ans
- 1. Behavioural condition
 - 2. Molecular target
 - 3. Pharmacological effect
 - 4. Chemical structure

Question ID : 630680517219
Option 1 ID : 6306802021274
Option 2 ID : 6306802021273
Option 3 ID : 6306802021272
Option 4 ID : 6306802021275
Status : Answered
Chosen Option : 2

Q.11 What is iGOT launched by the Government of India in April 2020?

- Ans
- 1. Online portal for digital payments
 - 2. Online portal for social security schemes
 - 3. Online training portal for COVID-19 management
 - 4. Online portal for scholarships to single girl child

Question ID : 630680112081
Option 1 ID : 630680434052
Option 2 ID : 630680434053
Option 3 ID : 630680434050
Option 4 ID : 630680434051
Status : Not Answered
Chosen Option : --

Q.12 The _____ portal is a platform provided by the Govt. of India for famers to attain any information related to agriculture.

- Ans
- 1. Agricultural
 - 2. Farmer's
 - 3. Cultivation
 - 4. Cropland

Question ID : 630680409602
Option 1 ID : 6306801597238
Option 2 ID : 6306801597237
Option 3 ID : 6306801597239
Option 4 ID : 6306801597240
Status : Answered
Chosen Option : 2

Q.13 The name of the strait between the Pacific and Arctic oceans, separating the Chukchi Peninsula of the Russian Far East from the Seward Peninsula of Alaska, is the:

- Ans
- 1. Davis Strait
 - 2. Bering Strait
 - 3. Messina Strait
 - 4. Florida Strait

Question ID : 63068076887
Option 1 ID : 630680297648
Option 2 ID : 630680297646
Option 3 ID : 630680297647
Option 4 ID : 630680297645
Status : Not Answered
Chosen Option : --

Q.14 'Ungali Oruvan' (One Among You) is the autobiography of which of the following chief ministers?

- Ans
- 1. K Chandrashekhar Rao
 - 2. Pinarayi Vijayan
 - 3. Basavaraj Bommai
 - 4. MK Stalin

Question ID : 630680195362
Option 1 ID : 630680757920
Option 2 ID : 630680757919
Option 3 ID : 630680757918
Option 4 ID : 630680757917
Status : Not Answered
Chosen Option : --

Q.15 What happens when two forces act in the opposite directions on an object?

- Ans
- 1. The net force acting on the object is the total of the two forces.
 - 2. The net force acting on the object is the difference between the two objects.
 - 3. The net force acting on the object is the sum of the two objects.
 - 4. The net force acting on the object is the difference between the two forces.

Question ID : 630680134714
Option 1 ID : 630680521674
Option 2 ID : 630680521675
Option 3 ID : 630680521677
Option 4 ID : 630680521676
Status : Answered
Chosen Option : 4

Q.16 The first Indian woman to hold the Under-20 World Wrestling Championship is _____.

- Ans
- 1. Hina Khalifa
 - 2. Pranati Nayak
 - 3. Swati Sanjay
 - 4. Antim Panghal

Question ID : 630680329492
Option 1 ID : 6306801281710
Option 2 ID : 6306801281712
Option 3 ID : 6306801281711
Option 4 ID : 6306801281709
Status : Answered
Chosen Option : 4

Q.17 Which industrial policy marked the beginning of liberalisation in the Indian industry, reducing the restrictions on private companies?

- Ans
- 1. Industrial Policy 1956
 - 2. Industrial Policy 1977
 - 3. Industrial Policy 1980
 - 4. Industrial Policy 1991

Question ID : 630680411084
Option 1 ID : 6306801603088
Option 2 ID : 6306801603089
Option 3 ID : 6306801603090
Option 4 ID : 6306801603091
Status : Answered
Chosen Option : 4

Q.18 Which of the following is a saturated hydrocarbon?

- Ans
- 1. C_2H_4
 - 2. C_3H_8
 - 3. C_6H_6
 - 4. C_4H_8

Question ID : 630680517161
Option 1 ID : 6306802021040
Option 2 ID : 6306802021043
Option 3 ID : 6306802021041
Option 4 ID : 6306802021042
Status : Not Answered
Chosen Option : --

Q.19 Who among the following famous badminton players won Swiss Open 2022?

- Ans 1. PV Sindhu
 2. Apama Popat
 3. Jwala Gutta
 4. Saina Nehwal

Question ID : 630680310840
Option 1 ID : 6306801209489
Option 2 ID : 6306801209492
Option 3 ID : 6306801209491
Option 4 ID : 6306801209490
Status : Not Answered
Chosen Option : --

Q.20 The Kuchipudi dance belongs to which of the following states?

- Ans 1. Tamil Nadu
 2. Madhya Pradesh
 3. Manipur
 4. Andhra Pradesh

Question ID : 630680402052
Option 1 ID : 6306801567908
Option 2 ID : 6306801567909
Option 3 ID : 6306801567911
Option 4 ID : 6306801567910
Status : Answered
Chosen Option : 4

Q.21 With reference to Ishwar Chandra Vidyasagar, consider the following statements.
a) He protested child marriage and polygamy.
b) Due to his efforts, the first Hindu Widow Remarriage Act, 1856, was introduced.
c) He was primarily known for his scholarship in Persian language.
Which of the above statements is/are correct?

- Ans 1. b, c
 2. a, c
 3. a, b, c
 4. a, b

Question ID : 630680412308
Option 1 ID : 6306801608057
Option 2 ID : 6306801608058
Option 3 ID : 6306801608055
Option 4 ID : 6306801608056
Status : Answered
Chosen Option : 4

Q.22 A large number of words are derived from the word 'Go' meaning cow. A wealthy person was known as _____ in Vedic times.

- Ans 1. Gotra
 2. Gabaksha
 3. Gomat
 4. Gaveshana

Question ID : 630680412440
Option 1 ID : 6306801608585
Option 2 ID : 6306801608583
Option 3 ID : 6306801608586
Option 4 ID : 6306801608584
Status : Not Answered
Chosen Option : --

Q.23 What was India's annual exponential growth rate as per the 2011 Census?

- Ans 1. 1.64%
 2. 3.54%
 3. 1.10%
 4. 4.34%

Question ID : 630680314147
Option 1 ID : 6306801222394
Option 2 ID : 6306801222395
Option 3 ID : 6306801222393
Option 4 ID : 6306801222396
Status : Answered
Chosen Option : 1

Q.24 Which of the following districts of India is an example of an industrial district?

- Ans
- 1. Faridabad
 - 2. Meerut
 - 3. Jaipur
 - 4. Kota

Question ID : 630680209259
Option 1 ID : 630680811254
Option 2 ID : 630680811252
Option 3 ID : 630680811253
Option 4 ID : 630680811251
Status : Answered
Chosen Option : 4

Q.25 The Non-Cooperation Movement was called off after which of the following incidents?

- Ans
- 1. Kakori train robbery
 - 2. Komagata Maru incident
 - 3. Outbreak of the First World War
 - 4. Chauri-Chaura incident

Question ID : 630680511508
Option 1 ID : 6306801999155
Option 2 ID : 6306801999154
Option 3 ID : 6306801999157
Option 4 ID : 6306801999156
Status : Answered
Chosen Option : 4

Section : Quantitative Aptitude

Q.1 Which composite number can divide the sum of the first 12 natural numbers?

- Ans
- 1. 12
 - 2. 8
 - 3. 6
 - 4. 4

Question ID : 630680108457
Option 1 ID : 630680420795
Option 2 ID : 630680420792
Option 3 ID : 630680420794
Option 4 ID : 630680420793
Status : Not Answered
Chosen Option : --

Q.2 Let ABC be a triangle. If the mid-points of AB, BC and AC are D, E and F, respectively, then $\triangle DEF$ is NOT congruent to _____.

- Ans
- 1. $\triangle BDE$
 - 2. $\triangle ADF$
 - 3. $\triangle ECF$
 - 4. $\triangle ABC$

Question ID : 630680297311
Option 1 ID : 6306801156714
Option 2 ID : 6306801156711
Option 3 ID : 6306801156713
Option 4 ID : 6306801156712
Status : Not Answered
Chosen Option : --

Q.3 The angles of a triangle are in the ratio 1 : 2 : 3. The difference in the largest and smallest angle is (in degrees):

- Ans
- 1. 15
 - 2. 30
 - 3. 45
 - 4. 60

Question ID : 630680421360
Option 1 ID : 6306801643906
Option 2 ID : 6306801643903
Option 3 ID : 6306801643905
Option 4 ID : 6306801643904
Status : Not Answered
Chosen Option : --

Q.4 The income of a person is ₹16,500, and his expenditure is ₹12,000. Next year, his income increases by 24% but his expenditure decreases by 10%. The percentage increase (rounded off to the nearest integer) in his savings is:

- Ans
- 1. 115%
 - 2. 120%
 - 3. 95%
 - 4. 90%

Question ID : 630680427955
Option 1 ID : 6306801669867
Option 2 ID : 6306801669866
Option 3 ID : 6306801669864
Option 4 ID : 6306801669865
Status : Not Answered
Chosen Option : --

Q.5 If two straight lines are coinciding with each other, then the number of points of intersection is/are:

- Ans
- 1. infinitely many points of intersection
 - 2. unique point of intersection
 - 3. finite number of point of intersection
 - 4. no points of intersection

Question ID : 630680194606
Option 1 ID : 630680754950
Option 2 ID : 630680754949
Option 3 ID : 630680754952
Option 4 ID : 630680754951
Status : Not Answered
Chosen Option : --

Q.6 One year ago, the age of B was twice that of A. After 9 years, if the ratio of the ages of B and A would be 4 : 3, then the sum of their present ages is ____ years.

- Ans
- 1. 17
 - 2. 15
 - 3. 21
 - 4. 30

Question ID : 630680297288
Option 1 ID : 6306801156619
Option 2 ID : 6306801156620
Option 3 ID : 6306801156621
Option 4 ID : 6306801156622
Status : Answered
Chosen Option : 1

Q.7 Pipe A can fill a cistern in 4 hours and Pipe B can fill the same cistern in 5 hours. Pipe C can empty a full cistern in 3 hours. If all three pipes are opened together, then the time (in minutes) taken to fill the tank is: (round to the nearest minute)

- Ans
- 1. 625
 - 2. 445
 - 3. 514
 - 4. 800

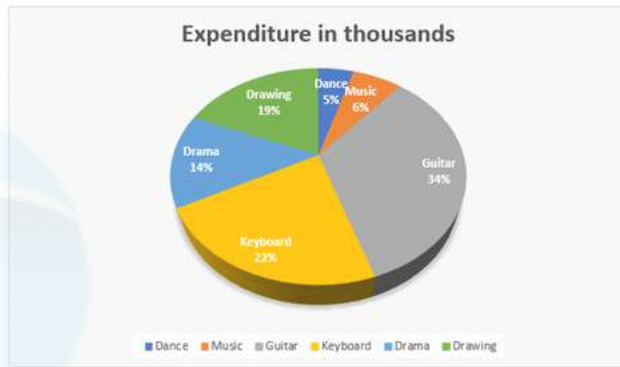
Question ID : 630680397521
Option 1 ID : 6306801550002
Option 2 ID : 6306801550003
Option 3 ID : 6306801550005
Option 4 ID : 6306801550004
Status : Answered
Chosen Option : 3

Q.8 If $a + b = c$, then the expression $a^3 + b^3 - c^3 + 3abc$ will be equal to:

- Ans
- 1. 0
 - 2. 1
 - 3. 3
 - 4. 2

Question ID : 630680413519
Option 1 ID : 6306801612902
Option 2 ID : 6306801612900
Option 3 ID : 6306801612903
Option 4 ID : 6306801612901
Status : Not Answered
Chosen Option : --

Q.9 Study the given pie chart carefully and answer the question that follows.
The given pie chart depicts the expenditure incurred towards different hobby classes of an institute.



If the total expenditure is ₹10,70,000, then find the central angle of the sector representing 'drawing'.

- Ans
- 1. 70°
 - 2. 68.4°
 - 3. 19°
 - 4. 90°

Question ID : 630680427996
 Option 1 ID : 6306801670031
 Option 2 ID : 6306801670029
 Option 3 ID : 6306801670028
 Option 4 ID : 6306801670030
 Status : Not Answered
 Chosen Option : --

Q.10 A policeman is chasing a thief at a speed of 82 km/h. The thief is 1300 m away and is running at a speed of 64 km/h. In how much time will the policeman catch the thief if both are riding on bikes?

- Ans
- 1. 300 sec
 - 2. 350 sec
 - 3. 260 sec
 - 4. 250 sec

Question ID : 630680428431
 Option 1 ID : 6306801671768
 Option 2 ID : 6306801671771
 Option 3 ID : 6306801671770
 Option 4 ID : 6306801671769
 Status : Not Answered
 Chosen Option : --

Q.11 If $A = 15^\circ$, then what is the value of $\frac{11\sqrt{2} \cos 3A + 10 \sin 2A}{7\sqrt{3} \sin 4A}$?

- Ans
- 1. $\frac{32}{21}$
 - 2. $\frac{7}{11}$
 - 3. $\frac{11}{7}$
 - 4. $\frac{21}{32}$

Question ID : 630680402352
 Option 1 ID : 6306801568972
 Option 2 ID : 6306801568974
 Option 3 ID : 6306801568973
 Option 4 ID : 6306801568971
 Status : Not Answered
 Chosen Option : --

Q.12 Ramu lent ₹3,000 to Raju and a certain sum to Ravi at the same time and at the same rate of simple interest of 8% per annum. After 5 years, he received a sum of ₹1,600 from Raju and Ravi together as interest. Find the sum lent to Ravi.

- Ans
- 1. ₹1,000
 - 2. ₹1,250
 - 3. ₹1,200
 - 4. ₹1,500

Question ID : 630680349819
Option 1 ID : 6306801361565
Option 2 ID : 6306801361568
Option 3 ID : 6306801361566
Option 4 ID : 6306801361567
Status : Not Answered
Chosen Option : --

Q.13 The ratio of two numbers is 2 : 5 and their difference is 210. The smaller number is

- Ans
- 1. 60
 - 2. 150
 - 3. 350
 - 4. 140

Question ID : 630680428776
Option 1 ID : 6306801673149
Option 2 ID : 6306801673151
Option 3 ID : 6306801673150
Option 4 ID : 6306801673148
Status : Answered
Chosen Option : 4

Q.14 The number of students in a class who have answered correctly, incorrectly, or not attempted each question in an examination is shown in the table below. The marks for each question are also listed. There is no negative or partial marking.

Q No	Marks	Answered correctly	Answered incorrectly	Not attempted
1	1	20	10	10
2	2	15	15	10
3	5	20	20	0
4	10	12	15	13

Find the average of the marks obtained by the class in the examination.

- Ans
- 1. 5.75
 - 2. 5.25
 - 3. 6.75
 - 4. 6.25

Question ID : 630680428173
Option 1 ID : 6306801670737
Option 2 ID : 6306801670736
Option 3 ID : 6306801670739
Option 4 ID : 6306801670738
Status : Answered
Chosen Option : 3

Q.15 Find the gain percentage, given that Aditi sold her scooter for ₹25404 gaining $\frac{1}{6}$ th of the selling price.

- Ans
- 1. 30%
 - 2. 25%
 - 3. 40%
 - 4. 20%

Question ID : 630680922767
Option 1 ID : 6306803615917
Option 2 ID : 6306803615916
Option 3 ID : 6306803615915
Option 4 ID : 6306803615914
Status : Not Answered
Chosen Option : --

Q.16 A line cuts two concentric circles. The length of chords formed by this line on the circles is 6 cm and 18 cm. Find the difference in the squares of the radii of two circles.

- Ans 1. 72
 2. 90
 3. 120
 4. 60

Question ID : 630680358079
Option 1 ID : 6306801394306
Option 2 ID : 6306801394307
Option 3 ID : 6306801394308
Option 4 ID : 6306801394305
Status : Not Answered
Chosen Option : --

Q.17 The ratio of the length, the breadth, and the height of a solid cuboid is given as 3 : 2 : 1, and the breadth of this cuboid is given as 12 cm. Find the volume (in cm^3) of the cuboid.

- Ans 1. 1500
 2. 1250
 3. 1200
 4. 1296

Question ID : 630680421492
Option 1 ID : 6306801644432
Option 2 ID : 6306801644434
Option 3 ID : 6306801644433
Option 4 ID : 6306801644431
Status : Not Answered
Chosen Option : --

Q.18 A class of 30 students appeared in a test. The average score of 12 students is 62, and that of the rest is 78. What is the average score of the class?

- Ans 1. 69.6
 2. 71.6
 3. 70.6
 4. 72.6

Question ID : 630680566264
Option 1 ID : 6306802214047
Option 2 ID : 6306802214044
Option 3 ID : 6306802214045
Option 4 ID : 6306802214046
Status : Answered
Chosen Option : 2

Q.19 If the market price of a bag is 25% above the cost price, and a discount of 18% is declared on it, then find the gain percentage.

- Ans 1. 1.5%
 2. 3.0%
 3. 2.5%
 4. 2.0%

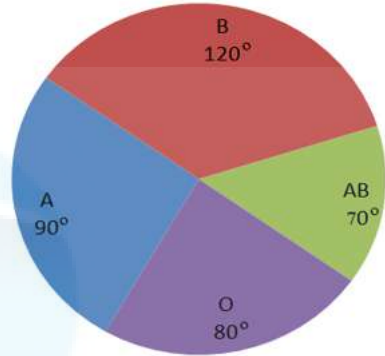
Question ID : 630680428064
Option 1 ID : 6306801670300
Option 2 ID : 6306801670303
Option 3 ID : 6306801670302
Option 4 ID : 6306801670301
Status : Not Answered
Chosen Option : --

Q. In $\triangle ABC$, $AB = 6$ cm, $BC = 9$ cm and $AC = 12$ cm. If AD is the angle bisector of $\angle BAC$, where D is a point on BC , the

- Ans 1. 7
 2. 3
 3. 6
 4. 9

Question ID
Option 1 ID
Option 2 ID
Option 3 ID
Option 4 ID
Status
Chosen Option

Q.21 The given pie-chart shows the data on A, B, O, and AB blood groups of 240 donors. Study the chart and answer the question that follows.



What is the ratio of the average donors of blood groups 'A', 'O', and 'AB' to the donors of blood group 'B'?

- Ans
- 1. 4 : 3
 - 2. 3 : 4
 - 3. 1 : 3
 - 4. 2 : 3

Question ID : 630680387735
 Option 1 ID : 6306801511577
 Option 2 ID : 6306801511574
 Option 3 ID : 6306801511576
 Option 4 ID : 6306801511575
 Status : Not Answered
 Chosen Option : --

Q.22 Simplify $\frac{1 + \sin \theta - \cos \theta}{1 + \sin \theta + \cos \theta}$

- Ans
- 1. $\tan \frac{\theta}{2}$
 - 2. $\cos \frac{\theta}{2}$
 - 3. $\cot \frac{\theta}{2}$
 - 4. $\sin \frac{\theta}{2}$

Question ID : 630680383493
 Option 1 ID : 6306801494869
 Option 2 ID : 6306801494868
 Option 3 ID : 6306801494867
 Option 4 ID : 6306801494870
 Status : Not Answered
 Chosen Option : --

Q.23 Refer the below table and answer the question that follows.

India's exports in 2020	Value in million US \$
Electronics	720
Cotton	680
Jewellery	500
Steel	450
Software	850

Jewellery was what percentage of the total exports? (Rounded to two decimal places)

- Ans
- 1. 14.63%
 - 2. 15.78%
 - 3. 15.63%
 - 4. 14.34%

Question ID : 630680428109
 Option 1 ID : 6306801670483
 Option 2 ID : 6306801670481
 Option 3 ID : 6306801670482
 Option 4 ID : 6306801670480
 Status : Not Answered
 Chosen Option : --

Q.24 If $436P5$ is divisible by 3, then the largest value of P is:

- Ans
- 1. 8
 - 2. 12
 - 3. 9
 - 4. 6

Question ID : 630680136692
Option 1 ID : 630680529383
Option 2 ID : 630680529382
Option 3 ID : 630680529384
Option 4 ID : 630680529385
Status : Not Answered
Chosen Option : --

Q.25 If $10 \sin^2 \theta + 6 \cos^2 \theta = 7$, $0 < \theta < 90^\circ$, then find the value of $\tan \theta$.

- Ans
- 1. 1
 - 2. $\sqrt{3}$
 - 3. $\frac{1}{2}$
 - 4. $\frac{1}{\sqrt{3}}$

Question ID : 630680526459
Option 1 ID : 6306802057904
Option 2 ID : 6306802057903
Option 3 ID : 6306802057905
Option 4 ID : 6306802057902
Status : Not Answered
Chosen Option : --

Section : English Comprehension

Q.1 Select the most appropriate idiom to fill in the blank.

After months of dedication and effort, I finally completed the marathon. I can really _____ for this accomplishment.

- Ans
- 1. up a creek without a paddle
 - 2. eat like a horse
 - 3. pat myself on the back
 - 4. blow hot and cold

Question ID : 630680374410
Option 1 ID : 6306801458826
Option 2 ID : 6306801458825
Option 3 ID : 6306801458823
Option 4 ID : 6306801458824
Status : Answered
Chosen Option : 3

Q.2 Select the most appropriate synonym of the given word.
Grotesque

- Ans
- 1. Shameful
 - 2. Comely
 - 3. Ugly
 - 4. Spontaneous

Question ID : 630680145488
Option 1 ID : 630680562929
Option 2 ID : 630680562928
Option 3 ID : 630680562927
Option 4 ID : 630680562926
Status : Not Answered
Chosen Option : --

Q.3 Select the option that can be used as a one-word substitute for the underlined group of words.
We, as human beings, have a tendency of believing in the things that can be seen and touched.

- Ans
- 1. tangible
 - 2. inexpressible
 - 3. impalpable
 - 4. spiritual

Question ID : 630680158620
Option 1 ID : 630680613973
Option 2 ID : 630680613975
Option 3 ID : 630680613972
Option 4 ID : 630680613974
Status : Answered
Chosen Option : 1

Q.4 Select the correctly spelled sentence.

- Ans
- 1. The resteraunt serves delicious meals.
 - 2. The resturant serves delicious meals.
 - 3. The restaurant serves delicious meals.
 - 4. The restauraunt serves delicious meals.

Question ID : 630680377272
Option 1 ID : 6306801470151
Option 2 ID : 6306801470152
Option 3 ID : 6306801470153
Option 4 ID : 6306801470154
Status : Answered
Chosen Option : 3

Q.5 Select the most appropriate synonym of the given word.
Loving

- Ans
- 1. Offish
 - 2. Rejuvenate
 - 3. Affectionate
 - 4. Subordinate

Question ID : 630680168487
Option 1 ID : 630680652560
Option 2 ID : 630680652563
Option 3 ID : 630680652561
Option 4 ID : 630680652562
Status : Answered
Chosen Option : 3

Q.6 Select the word which means the same as the group of words given.

Essence or main point of any passage, lecture or book

- Ans
- 1. Meaning
 - 2. Gist
 - 3. Significance
 - 4. Heart

Question ID : 630680414697
Option 1 ID : 6306801617534
Option 2 ID : 6306801617533
Option 3 ID : 6306801617532
Option 4 ID : 6306801617531
Status : Answered
Chosen Option : 2

Q.7 Select the most appropriate option that can substitute the underlined segment in the given sentence.

Arushya purchased the most good of all the suits kept in the shop.

- Ans
- 1. the more good
 - 2. the goods
 - 3. the best
 - 4. the good

Question ID : 630680153521
Option 1 ID : 630680594014
Option 2 ID : 630680594015
Option 3 ID : 630680594012
Option 4 ID : 630680594013
Status : Answered
Chosen Option : 3

Q.8 Select the option that expresses the given sentence in passive voice.

The chef prepares the meal with great care.

- Ans
- 1. The meal has been prepared with great care by the chef.
 - 2. The meal will be prepared with great care by the chef.
 - 3. The meal is prepared with great care by the chef.
 - 4. The meal was prepared with great care by the chef.

Question ID : 630680415202
Option 1 ID : 6306801619555
Option 2 ID : 6306801619558
Option 3 ID : 6306801619557
Option 4 ID : 6306801619556
Status : Answered
Chosen Option : 3

Q.9 Select the option that expresses the following sentence in active voice.
The novels of Dickens are being read by Mayank.

- Ans
- 1. Mayank had been reading the novels of Dickens.
 - 2. Mayank is reading the novels of Dickens.
 - 3. Mayank was reading the novels of Dickens.
 - 4. Mayank has been reading the novels of Dickens.

Question ID : 630680415243
Option 1 ID : 6306801619720
Option 2 ID : 6306801619722
Option 3 ID : 6306801619719
Option 4 ID : 6306801619721
Status : Answered
Chosen Option : 2

Q.10 Select the most appropriate synonym of the word in brackets to fill in the blanks.
The soldiers spent long period _____ (convalescing).

- Ans
- 1. travelling
 - 2. attacking
 - 3. ailing
 - 4. recovering

Question ID : 630680186689
Option 1 ID : 630680723708
Option 2 ID : 630680723707
Option 3 ID : 630680723705
Option 4 ID : 630680723706
Status : Answered
Chosen Option : 4

Q.11 Select the most appropriate option that can substitute the underlined segment in the given sentence.

Even if you've never heard his name, you've probably met someone with his words tattooed in their skin or heard them sung at a music concert.

- Ans
- 1. tattooed on their skin
 - 2. tattooed through their skin
 - 3. tattooed until their skin
 - 4. tattooed overdoing their skin

Question ID : 630680147488
Option 1 ID : 630680570722
Option 2 ID : 630680570725
Option 3 ID : 630680570723
Option 4 ID : 630680570724
Status : Answered
Chosen Option : 1

Q.12 The following sentence has been divided into four segments. Identify the segment that contains a grammatical error.

The lions became violently / when the visitors / started throwing / stones at them.

Ans 1. The lions became violently

2. when the visitors

3. started throwing

4. stones at them.

Question ID : 630680317347
Option 1 ID : 6306801234505
Option 2 ID : 6306801234506
Option 3 ID : 6306801234507
Option 4 ID : 6306801234508
Status : Answered
Chosen Option : 1

Q.13 Select the most appropriate synonym of the given word.
Necessary

Ans 1. Essential

2. Spatial

3. Existential

4. Potential

Question ID : 630680168489
Option 1 ID : 630680652570
Option 2 ID : 630680652569
Option 3 ID : 630680652571
Option 4 ID : 630680652568
Status : Answered
Chosen Option : 1

Q.14 Select the most appropriate ANTONYM of the given word.
Intelligible

Ans 1. Incoherent

2. Deliberate

3. Scriptable

4. Embezzle

Question ID : 630680517358
Option 1 ID : 6306802021830
Option 2 ID : 6306802021831
Option 3 ID : 6306802021829
Option 4 ID : 6306802021828
Status : Not Answered
Chosen Option : --

Q.15 Select the INCORRECTLY spelt word.

Ans 1. Possession

2. Referred

3. Weather

4. Unfourseen

Question ID : 630680409966
Option 1 ID : 6306801598693
Option 2 ID : 6306801598694
Option 3 ID : 6306801598696
Option 4 ID : 6306801598695
Status : Answered
Chosen Option : 2

Q.16 Select the option that can be used as a one-word substitute for the given group of words.

Fear of snakes

Ans 1. Claustrophobia

2. Ophidiophobia

3. Xenophobia

4. Syngenesophobia

Question ID : 630680414665
Option 1 ID : 6306801617406
Option 2 ID : 6306801617405
Option 3 ID : 6306801617403
Option 4 ID : 6306801617404
Status : Answered
Chosen Option : 3

Q.17 Select the most appropriate synonym of the given word.
Evoke

- Ans 1. Induce
 2. Abandon
 3. Reduce
 4. Divert

Question ID : 630680295953
Option 1 ID : 6306801151526
Option 2 ID : 6306801151527
Option 3 ID : 6306801151525
Option 4 ID : 6306801151524
Status : Answered
Chosen Option : 1

Q.18 Parts of a sentence are given below in jumbled order. Arrange the parts in the correct order to form a meaningful sentence.

- A. at the same time giving happiness to the poor
B. by providing them with food, clothes, money or grain
C. festivals in India are celebrated to share happiness
D. by being in the presence of the members of the family and

- Ans 1. CABD
 2. ACBD
 3. CDAB
 4. CBAD

Question ID : 630680205029
Option 1 ID : 630680794982
Option 2 ID : 630680794980
Option 3 ID : 630680794979
Option 4 ID : 630680794981
Status : Answered
Chosen Option : 3

Q.19 Select the most appropriate meaning of the underlined idiom in the following sentence.

The leader of the Legislative Assembly won the hearts of the members through his maiden speech during the session in state council.

- Ans 1. closure speech
 2. first speech
 3. logical speech
 4. final speech

Question ID : 630680316704
Option 1 ID : 6306801231996
Option 2 ID : 6306801231995
Option 3 ID : 6306801231993
Option 4 ID : 6306801231994
Status : Answered
Chosen Option : 2

Q.20 The given sentence is divided into four segments. Select the option that has the segment with a grammatical error.
Jerry driving / home late / when the incident / took place.

- Ans 1. Jerry driving
 2. took place.
 3. when the incident
 4. home late

Question ID : 630680206623
Option 1 ID : 630680801091
Option 2 ID : 630680801094
Option 3 ID : 630680801093
Option 4 ID : 630680801092
Status : Answered
Chosen Option : 1

Comprehension:

In the following passage, some words have been deleted. Read the passage carefully and select the most appropriate option, in the questions that follow, to fill in each blank. Listening starts with hearing but goes (1)_____. Hearing, in other words, is necessary, but is not a sufficient (2)_____ for listening. Listening involves hearing with attention. Listening is a process that (3)_____ concentration. While listening, one should also be observant. In other words, listening has to do with the ears, (4)_____ with the eyes and the mind. Listening is to be understood as the total process that involves hearing with attention, being observant and making interpretations. Good communication is essentially a/an (5)_____ process.

SubQuestion No : 21

Q.21 Select the most appropriate option to fill in blank number 1.

- Ans 1. towards
 2. across
 3. beyond
 4. throughout

Question ID : 630680156799
Option 1 ID : 630680606831
Option 2 ID : 630680606828
Option 3 ID : 630680606829
Option 4 ID : 630680606830
Status : Answered
Chosen Option : 3

Comprehension:

In the following passage, some words have been deleted. Read the passage carefully and select the most appropriate option, in the questions that follow, to fill in each blank. Listening starts with hearing but goes (1)_____. Hearing, in other words, is necessary, but is not a sufficient (2)_____ for listening. Listening involves hearing with attention. Listening is a process that (3)_____ concentration. While listening, one should also be observant. In other words, listening has to do with the ears, (4)_____ with the eyes and the mind. Listening is to be understood as the total process that involves hearing with attention, being observant and making interpretations. Good communication is essentially a/an (5)_____ process.

SubQuestion No : 22

Q.22 Select the most appropriate option to fill in blank number 2.

- Ans 1. condition
 2. place
 3. decorum
 4. scenario

Question ID : 630680156800
Option 1 ID : 630680606834
Option 2 ID : 630680606832
Option 3 ID : 630680606835
Option 4 ID : 630680606833
Status : Answered
Chosen Option : 4

Comprehension:

In the following passage, some words have been deleted. Read the passage carefully and select the most appropriate option, in the questions that follow, to fill in each blank. Listening starts with hearing but goes (1)_____. Hearing, in other words, is necessary, but is not a sufficient (2)_____ for listening. Listening involves hearing with attention. Listening is a process that (3)_____ concentration. While listening, one should also be observant. In other words, listening has to do with the ears, (4)_____ with the eyes and the mind. Listening is to be understood as the total process that involves hearing with attention, being observant and making interpretations. Good communication is essentially a/an (5)_____ process.

SubQuestion No : 23

Q.23 Select the most appropriate option to fill in blank number 3.

- Ans 1. brings up
 2. takes for
 3. calls for
 4. disposes of

Question ID : 630680156801
Option 1 ID : 630680606839
Option 2 ID : 630680606838
Option 3 ID : 630680606837
Option 4 ID : 630680606836
Status : Answered
Chosen Option : 3

Comprehension:

In the following passage, some words have been deleted. Read the passage carefully and select the most appropriate option, in the questions that follow, to fill in each blank. Listening starts with hearing but goes (1)_____. Hearing, in other words, is necessary, but is not a sufficient (2)_____ for listening. Listening involves hearing with attention. Listening is a process that (3)_____ concentration. While listening, one should also be observant. In other words, listening has to do with the ears, (4)_____ with the eyes and the mind. Listening is to be understood as the total process that involves hearing with attention, being observant and making interpretations. Good communication is essentially a/an (5)_____ process.

SubQuestion No : 24

Q.24 Select the most appropriate option to fill in blank number 4.

- Ans** 1. although
 2. rather
 3. yet
 4. as well as

Question ID : 630680156802
Option 1 ID : 630680606841
Option 2 ID : 630680606842
Option 3 ID : 630680606843
Option 4 ID : 630680606840
Status : Answered
Chosen Option : 4

Comprehension:

In the following passage, some words have been deleted. Read the passage carefully and select the most appropriate option, in the questions that follow, to fill in each blank. Listening starts with hearing but goes (1)_____. Hearing, in other words, is necessary, but is not a sufficient (2)_____ for listening. Listening involves hearing with attention. Listening is a process that (3)_____ concentration. While listening, one should also be observant. In other words, listening has to do with the ears, (4)_____ with the eyes and the mind. Listening is to be understood as the total process that involves hearing with attention, being observant and making interpretations. Good communication is essentially a/an (5)_____ process.

SubQuestion No : 25

Q.25 Select the most appropriate option to fill in blank number 5.

- Ans** 1. interactive
 2. obnoxious
 3. pecuniary
 4. onerous

Question ID : 630680156803
Option 1 ID : 630680606847
Option 2 ID : 630680606845
Option 3 ID : 630680606844
Option 4 ID : 630680606846
Status : Answered
Chosen Option : 1