

Combined Graduate Level Examination 2024 Tier I

Roll Number	
Candidate Name	
Venue Name	
Exam Date	25/09/2024
Exam Time	4:00 PM - 5:00 PM
Subject	Combined Graduate Level Examination Tier I

Section : General Intelligence and Reasoning

Q.1 'LISP' is related to 'ORHK' in a certain way based on the English alphabetical order. In the same way, 'WAND' is related to 'DZMW'. To which of the following is 'BOTE' related, following the same logic?

- Ans
- 1. YLGV
 - 2. YKFU
 - 3. YMHV
 - 4. YKFW

Question ID : 630680416359
Option 1 ID : 6306801624199
Option 2 ID : 6306801624201
Option 3 ID : 6306801624200
Option 4 ID : 6306801624202
Status : Answered
Chosen Option : 1

Q.2 The position of how many letters will remain unchanged if each of the letters in the word 'DOWNSIZE' is re-arranged in the English alphabetical order from left to right?

- Ans
- 1. One
 - 2. Two
 - 3. Three
 - 4. Four

Question ID : 630680106895
Option 1 ID : 630680415152
Option 2 ID : 630680415153
Option 3 ID : 630680415154
Option 4 ID : 630680415155
Status : Answered
Chosen Option : 2

Q.3 19 is related to 76 following a certain logic. Following the same logic, 27 is related to 108. To which of the following is 49 related, following the same logic?

(NOTE: Operations should be performed on the whole numbers, without breaking down the numbers into its constituent digits. E.g. 13 – Operations on 13 such as adding /deleting /multiplying etc. to 13 can be performed. Breaking down 13 into 1 and 3 and then performing mathematical operations on 1 and 3 is not allowed)

Ans 1. 196

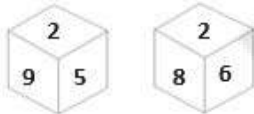
2. 190

3. 202

4. 198

Question ID : 630680344647
Option 1 ID : 6306801340898
Option 2 ID : 6306801340897
Option 3 ID : 6306801340900
Option 4 ID : 6306801340899
Status : Answered
Chosen Option : 1

Q.4 Two different positions of the same dice with faces 9, 2, 5, 3, 8 and 6 are shown below. Select the number that will be on the face opposite to the one having 2.



Ans 1. 6

2. 5

3. 3

4. 9

Question ID : 630680349068
Option 1 ID : 6306801358561
Option 2 ID : 6306801358562
Option 3 ID : 6306801358563
Option 4 ID : 6306801358564
Status : Answered
Chosen Option : 3

Q.5 Four letter-clusters have been given, out of which three are alike in some manner and one is different. Select the letter-cluster that is different.

Note: The odd one out is not based on the number of consonants/vowels or their position in the letter cluster.

Ans 1. IAK

2. UOW

3. LFN

4. PJR

Question ID : 63068083233
Option 1 ID : 630680322793
Option 2 ID : 630680322795
Option 3 ID : 630680322794
Option 4 ID : 630680322792
Status : Answered
Chosen Option : 1

Q.6 14 is related to 42 following a certain logic. Following the same logic, 26 is related to 78. To which of the following is 47 related, following the same logic?

(NOTE: Operations should be performed on the whole numbers, without breaking down the numbers into its constituent digits. E.g. 13 – Operations on 13 such as adding /deleting /multiplying etc. to 13 can be performed. Breaking down 13 into 1 and 3 and then performing mathematical operations on 1 and 3 is not allowed)

Ans 1. 143

2. 135

3. 137

4. 141

Question ID : 630680344646

Option 1 ID : 6306801340895

Option 2 ID : 6306801340896

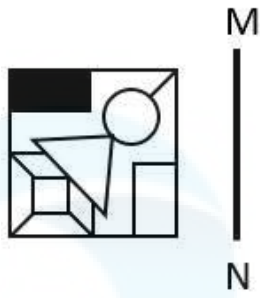
Option 3 ID : 6306801340893

Option 4 ID : 6306801340894

Status : Answered

Chosen Option : 4

Q.7 Select the correct mirror image of the given figure when the mirror is placed at MN as shown.

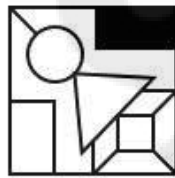


Ans

✗ 1.



✓ 2.



✗ 3.



✗ 4.



Question ID : 630680306827

Option 1 ID : 6306801193597

Option 2 ID : 6306801193598

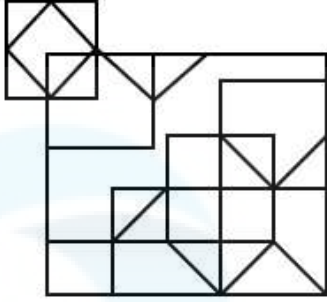
Option 3 ID : 6306801193600

Option 4 ID : 6306801193599

Status : Answered

Chosen Option : 2

Q.8 How many triangles are there in the given figure?



- Ans
- 1. 14
 - 2. 17
 - 3. 18
 - 4. 15

Question ID : 630680163557
Option 1 ID : 630680633414
Option 2 ID : 630680633413
Option 3 ID : 630680633415
Option 4 ID : 630680633412
Status : Not Answered
Chosen Option : --

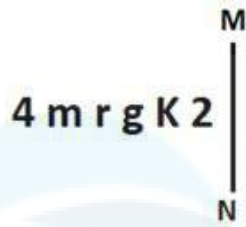
Q.9 What will come in place of the question mark (?) in the following equation if '+' and '-' are interchanged and 'x' and '÷' are interchanged?

$$2 \times 16 \div 36 + 42 - 6 = ?$$

- Ans
- 1. -280
 - 2. -246
 - 3. -234
 - 4. -216

Question ID : 630680327807
Option 1 ID : 6306801275198
Option 2 ID : 6306801275200
Option 3 ID : 6306801275197
Option 4 ID : 6306801275199
Status : Answered
Chosen Option : 3

Q.10 Select the correct mirror image of the given figure when the mirror is placed at MN as shown below.



- Ans
- 1. $\Sigma K g 1 \omega \Phi$
 - 2. $\Sigma \lambda g 1 m 4$
 - 3. $\Sigma \lambda g 1 m \Phi$
 - 4. $\Sigma \lambda g 1 m \psi$

Question ID : 630680356667
 Option 1 ID : 6306801388672
 Option 2 ID : 6306801388670
 Option 3 ID : 6306801388669
 Option 4 ID : 6306801388671
 Status : Answered
 Chosen Option : 3

Q.11 Select the number that will come in the place of the question mark(?), if '+' and '-' are interchanged and 'x' and '÷' are interchanged
 $61 - 42 \times 6 \div 9 + 27 = ?$

- Ans
- 1. 97
 - 2. 101
 - 3. 89
 - 4. 84

Question ID : 630680163578
 Option 1 ID : 630680633496
 Option 2 ID : 630680633499
 Option 3 ID : 630680633497
 Option 4 ID : 630680633498
 Status : Answered
 Chosen Option : 1

Q.12 In a certain code language, 'CASE' is written as 'FTBD' and 'CAKE' is written as 'FLBD'.
 How will 'CALF' be written in that language?

- Ans
- 1. GBDM
 - 2. GBMD
 - 3. GMBD
 - 4. GMDB

Question ID : 630680416244
 Option 1 ID : 6306801623742
 Option 2 ID : 6306801623740
 Option 3 ID : 6306801623739
 Option 4 ID : 6306801623741
 Status : Answered
 Chosen Option : 3

Q.13 Select the option that is related to the fifth number in the same way as the second number is related to the first number and the fourth number is related to the third number.

45 : 56 :: 62 : 73 :: 19 : ?

(NOTE : Operations should be performed on the whole numbers, without breaking down the numbers into its constituent digits. E.g. 13 – Operations on 13 such as adding /deleting /multiplying etc., to 13 can be performed. Breaking down 13 into 1 and 3 and then performing mathematical operations on 1 and 3 is not allowed.)

Ans 1. 31

2. 30

3. 28

4. 27

Question ID : 630680312533

Option 1 ID : 6306801216015

Option 2 ID : 6306801216014

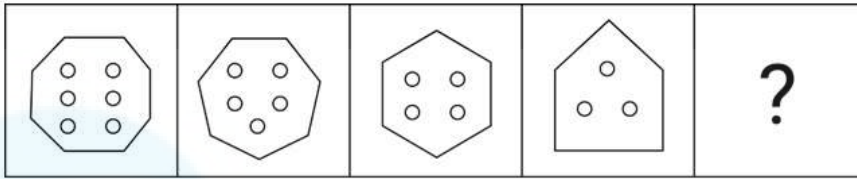
Option 3 ID : 6306801216013

Option 4 ID : 6306801216016

Status : Answered

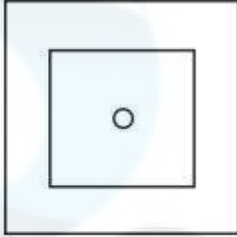
Chosen Option : 2

Q.14 Select the figure from among the given options that can replace the question mark (?) in the following series.

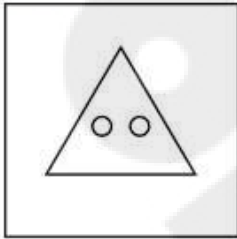


Ans

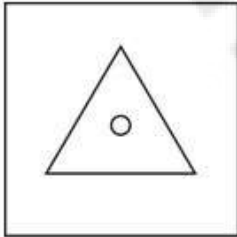
✗ 1.



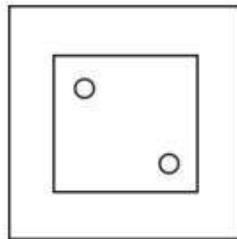
✗ 2.



✗ 3.



✓ 4.



Question ID : 630680366400

Option 1 ID : 6306801427120

Option 2 ID : 6306801427119

Option 3 ID : 6306801427117

Option 4 ID : 6306801427118

Status : Answered

Chosen Option : 2

Q.15 Which of the following numbers will replace the question marks (?) in the given series?

88, 78, 70, 64, 60, ?, ?

Ans 1. 56, 56

2. 56, 54

3. 58, 58

4. 58, 56

Question ID : 630680411868

Option 1 ID : 6306801606310

Option 2 ID : 6306801606309

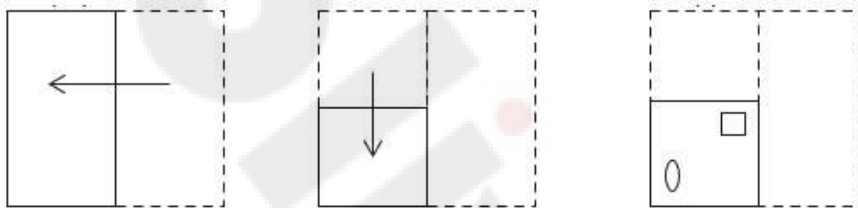
Option 3 ID : 6306801606308

Option 4 ID : 6306801606307

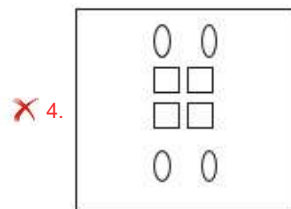
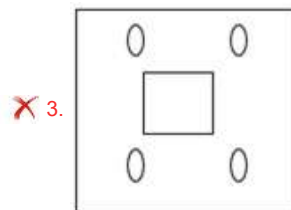
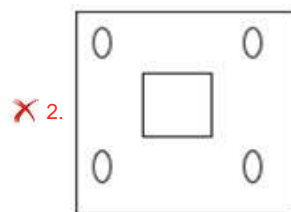
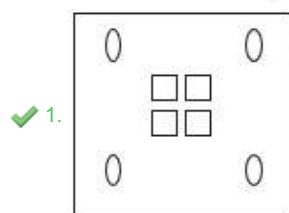
Status : Answered

Chosen Option : 3

Q.16 A paper is folded and cut as shown below. How will it appear when unfolded?



Ans



Question ID : 630680296643

Option 1 ID : 6306801154225

Option 2 ID : 6306801154226

Option 3 ID : 6306801154224

Option 4 ID : 6306801154223

Status : Answered

Chosen Option : 1

Q.17 Which of the following terms will replace the question mark (?) in the given series?
AEYT, CGWR, EIUP, ? , IMQL

- Ans 1. GKTN
 2. GKSN
 3. GLTN
 4. GLSN

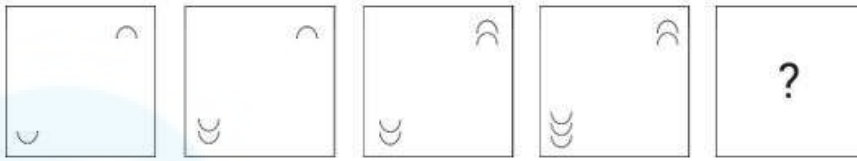
Question ID : 630680416989
Option 1 ID : 6306801626721
Option 2 ID : 6306801626720
Option 3 ID : 6306801626722
Option 4 ID : 6306801626719
Status : Answered
Chosen Option : 2

Q.18 Select the option that represents the letters that when placed from left to right in the
blanks below will complete the given letter series.
C A R E T _ R C A _ E T C R C A R _ T C R _ A R E T _ R C A

- Ans 1. CRCEC
 2. CERCC
 3. CRECC
 4. CRCCE

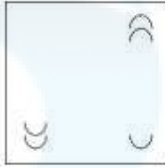
Question ID : 630680416262
Option 1 ID : 6306801623813
Option 2 ID : 6306801623811
Option 3 ID : 6306801623814
Option 4 ID : 6306801623812
Status : Answered
Chosen Option : 3

Q.19 Select the figure from among the given options that can replace the question mark (?) in the following series.



Ans


✗ 1.




✓ 2.



✗ 3.



✗ 4.



Question ID : 630680339310

Option 1 ID : 6306801319810

Option 2 ID : 6306801319812

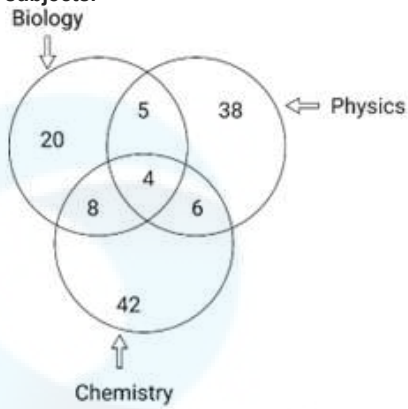
Option 3 ID : 6306801319811

Option 4 ID : 6306801319809

Status : Answered

Chosen Option : 2

Q.20 Study the given diagram carefully and answer the question that follows. The numbers in different sections indicate the number of students who like to study different subjects.



What is the difference between the number of students who like to study all the three subjects and that of students who like to study biology only?

- Ans 1. 16
 2. 3
 3. 17
 4. 19

Question ID : 630680195789
Option 1 ID : 630680759607
Option 2 ID : 630680759608
Option 3 ID : 630680759610
Option 4 ID : 630680759609
Status : Marked For Review
Chosen Option : 2

Q.21 'Tame' is related to 'Wild' in the same way as 'Adjacent' is related to '_____'.
(The words must be considered as meaningful English words and must not be related to each other based on the number of letters/number of consonants/vowels in the word.)

- Ans 1. Neighbouring
 2. Accommodating
 3. Close
 4. Distant

Question ID : 630680416705
Option 1 ID : 6306801625585
Option 2 ID : 6306801625586
Option 3 ID : 6306801625583
Option 4 ID : 6306801625584
Status : Answered
Chosen Option : 4

Q.22 In a certain code language,
A + B means 'A is the husband of B',
A - B means 'B is the mother of A',
A × B means 'B is the sister of A' and
A ÷ B means 'A is the daughter of B'.
Based on the above, how is Q related to T if 'P + Q × R - S ÷ T'?

- Ans
- 1. Sister
 - 2. Daughter's daughter
 - 3. Mother's mother
 - 4. Daughter's husband

Question ID : 630680284900
Option 1 ID : 6306801107599
Option 2 ID : 6306801107602
Option 3 ID : 6306801107601
Option 4 ID : 6306801107600
Status : Answered
Chosen Option : 2

Q.23 In a certain code language, 'BREAK' is coded as '57123' and 'BROKE' is coded as '91753'. What is the code for 'A' in that language?

- Ans
- 1. 2
 - 2. 9
 - 3. 3
 - 4. 5

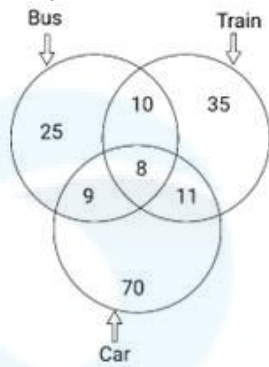
Question ID : 630680296856
Option 1 ID : 6306801155068
Option 2 ID : 6306801155069
Option 3 ID : 6306801155067
Option 4 ID : 6306801155070
Status : Answered
Chosen Option : 1

Q.24 The same operation(s) are followed in all the given number pairs except one. Find that odd number pair.
(NOTE : Operations should be performed on the whole numbers, without breaking down the numbers into its constituent digits. E.g. 13 - Operations on 13 such as adding /deleting /multiplying etc., to 13 can be performed. Breaking down 13 into 1 and 3 and then performing mathematical operations on 1 and 3 is not allowed.)

- Ans
- 1. 11 : 143
 - 2. 13 : 169
 - 3. 12 : 152
 - 4. 15 : 195

Question ID : 630680412033
Option 1 ID : 6306801606968
Option 2 ID : 6306801606967
Option 3 ID : 6306801606970
Option 4 ID : 6306801606969
Status : Answered
Chosen Option : 2

Q.25 Study the given diagram carefully and answer the question that follows. The numbers in different sections indicate the number of persons travelling by different modes of transport.



How many people travel by bus and car both, but NOT by train?

- Ans
- 1. 19
 - 2. 27
 - 3. 17
 - 4. 9

Question ID : 630680180560
 Option 1 ID : 630680699750
 Option 2 ID : 630680699751
 Option 3 ID : 630680699748
 Option 4 ID : 630680699749
 Status : Answered
 Chosen Option : 4

Section : General Awareness

Q.1 According to the inscriptions, Pushyamitra Shunga was a devotee of which of the following Gods?

- Ans
- 1. Krishna
 - 2. Indra
 - 3. Rama
 - 4. Shiva

Question ID : 630680412520
 Option 1 ID : 6306801608905
 Option 2 ID : 6306801608903
 Option 3 ID : 6306801608906
 Option 4 ID : 6306801608904
 Status : Answered
 Chosen Option : 1

Q.2 Hola Mohalla is a festival associated with which religion/belief?

- Ans
- 1. Islam
 - 2. Sikhism
 - 3. Buddhism
 - 4. Jainism

Question ID : 630680176376
 Option 1 ID : 630680683731
 Option 2 ID : 630680683730
 Option 3 ID : 630680683732
 Option 4 ID : 630680683733
 Status : Answered
 Chosen Option : 1

Q.3 What action was taken by the government to celebrate the achievement of the Green Revolution in agriculture?

Ans ✓ 1. Released a special stamp, 'Wheat Revolution'

- ✗ 2. Distributed free food to all the people
- ✗ 3. Distributed green vegetables to the people
- ✗ 4. Released a regular salary for the farmers

Question ID : 630680410835
Option 1 ID : 6306801602095
Option 2 ID : 6306801602097
Option 3 ID : 6306801602096
Option 4 ID : 6306801602098
Status : Answered
Chosen Option : 1

Q.4 Which of the following Constitutional Amendment Acts led to formation of the Goods and Services Tax Council?

Ans ✗ 1. 103rd Constitutional Amendment Act
✗ 2. 102nd Constitutional Amendment Act
✓ 3. 101st Constitutional Amendment Act
✗ 4. 100th Constitutional Amendment Act

Question ID : 630680309214
Option 1 ID : 6306801203036
Option 2 ID : 6306801203035
Option 3 ID : 6306801203034
Option 4 ID : 6306801203033
Status : Answered
Chosen Option : 3

Q.5 Which of the following Acts gave the government enormous powers to repress political activities, and allowed detention of political prisoners without trial for two years?

Ans ✓ 1. Rowlatt Act, 1919
✗ 2. Indian Slavery Act, 1843
✗ 3. India Contract Act, 1872
✗ 4. Criminal Tribes Act, 1871

Question ID : 630680511528
Option 1 ID : 6306801999235
Option 2 ID : 6306801999237
Option 3 ID : 6306801999234
Option 4 ID : 6306801999236
Status : Answered
Chosen Option : 1

Q.6 The term Blue Line is associated with which of the following games?

Ans ✓ 1. Ice Hockey

✗ 2. Cricket

✗ 3. Football

✗ 4. Table Tennis

Question ID : 630680510780

Option 1 ID : 6306801996250

Option 2 ID : 6306801996252

Option 3 ID : 6306801996251

Option 4 ID : 6306801996253

Status : Answered

Chosen Option : 4

Q.7 India finished on which of the following positions in overall medals tally at Commonwealth games 2022?

Ans ✗ 1. 2nd

✓ 2. 4th

✗ 3. 3rd

✗ 4. 1st

Question ID : 630680339490

Option 1 ID : 6306801320531

Option 2 ID : 6306801320529

Option 3 ID : 6306801320530

Option 4 ID : 6306801320532

Status : Answered

Chosen Option : 2

Q.8 In November 2021, the government declared November 15 as 'Janjatiya Gaurav Divas'. It happens to be the birth anniversary of which of the following freedom fighters?

Ans ✓ 1. Birsa Munda

✗ 2. Kanhu Murmu

✗ 3. Arjun Munda

✗ 4. Veer Narayan Singh

Question ID : 630680127550

Option 1 ID : 630680494462

Option 2 ID : 630680494461

Option 3 ID : 630680494463

Option 4 ID : 630680494460

Status : Answered

Chosen Option : 1

Q.9 Which acid is used as a souring agent added to vinegar, pickled vegetables, and sauces, and as a raw material for seasoning?

Ans ✗ 1. Formic acid

✗ 2. Citric acid

✗ 3. Tartaric acid

✓ 4. Acetic acid

Question ID : 630680407427

Option 1 ID : 6306801588647

Option 2 ID : 6306801588646

Option 3 ID : 6306801588649

Option 4 ID : 6306801588648

Status : Answered

Chosen Option : 1

Q.10 Which of the following gases plays an important role in welding titanium, aluminium, stainless steel, and magnesium?

- Ans
- 1. Fluorine
 - 2. Chlorine
 - 3. Argon
 - 4. Neon

Question ID : 630680115432
Option 1 ID : 630680447080
Option 2 ID : 630680447078
Option 3 ID : 630680447081
Option 4 ID : 630680447079
Status : Answered
Chosen Option : 3

Q.11 In the southern ranges of which hills is Mawsynram, which receives the highest rainfall in the world, located?

- Ans
- 1. Mizo hills
 - 2. Naga hills
 - 3. Khasi hills
 - 4. Shevaroy hills

Question ID : 630680362632
Option 1 ID : 6306801412282
Option 2 ID : 6306801412281
Option 3 ID : 6306801412283
Option 4 ID : 6306801412284
Status : Answered
Chosen Option : 3

Q.12 In which year was Ujala Yojana launched?

- Ans
- 1. 2016
 - 2. 2014
 - 3. 2017
 - 4. 2015

Question ID : 630680310824
Option 1 ID : 6306801209427
Option 2 ID : 6306801209425
Option 3 ID : 6306801209428
Option 4 ID : 6306801209426
Status : Answered
Chosen Option : 4

Q.13 Which coal is low-grade, brown and soft with high moisture content?

- Ans
- 1. Metallurgical
 - 2. Anthracite
 - 3. Bituminous
 - 4. Lignite

Question ID : 63068098916
Option 1 ID : 630680384370
Option 2 ID : 630680384368
Option 3 ID : 630680384369
Option 4 ID : 630680384371
Status : Answered
Chosen Option : 4

Q.14 Which award was started by the Government of Madhya Pradesh in 1980 to the exponents of Hindustani classical music?

- Ans** 1. Tansen Samman
 2. Kishore Kumar Samman
 3. Iqbal Samman
 4. Kumar Gandharva Samman

Question ID : 630680511806
Option 1 ID : 6306802000196
Option 2 ID : 6306802000197
Option 3 ID : 6306802000195
Option 4 ID : 6306802000194
Status : Answered
Chosen Option : 1

Q.15 For which of the following tribal music and dance forms was Arjun Singh Dhurve conferred with Tulsī Samman?

- Ans** 1. Mardana
 2. Pawara
 3. Jhumta
 4. Baiga

Question ID : 630680216241
Option 1 ID : 630680838942
Option 2 ID : 630680838941
Option 3 ID : 630680838940
Option 4 ID : 630680838939
Status : Not Answered
Chosen Option : --

Q.16 Which of the following is NOT correct regarding circular flow of income?

- Ans** 1. In a circular flow, leakages are equal to injections.
 2. The income of one sector becomes the expenditure of the other.
 3. The real flow and monetary flow move in a circular manner in an opposite direction.
 4. Savings as well as government expenditure are injections to the circular flow.

Question ID : 630680324078
Option 1 ID : 6306801260807
Option 2 ID : 6306801260805
Option 3 ID : 6306801260806
Option 4 ID : 6306801260808
Status : Answered
Chosen Option : 3

Q.17 Which of the following Articles of the Indian Constitution mentions that 'The State shall, in particular, direct its policy towards securing that the ownership and control of the material resources of the community are so distributed as best to subserve the common good'?

- Ans** 1. Article 39(b)
 2. Article 39(a)
 3. Article 39(c)
 4. Article 39(d)

Question ID : 630680408256
Option 1 ID : 6306801591920
Option 2 ID : 6306801591919
Option 3 ID : 6306801591921
Option 4 ID : 6306801591922
Status : Answered
Chosen Option : 1

Q.18 Khudai Khidmatgars, a non-violent movement among the Pathans was started by _____.

- Ans** 1. Sachindra Bakshi
 2. Bakht Khan
 3. Khan Abdul Ghaffar Khan
 4. Alluri Sitarama Raju

Question ID : 630680412314
Option 1 ID : 6306801608082
Option 2 ID : 6306801608080
Option 3 ID : 6306801608079
Option 4 ID : 6306801608081
Status : Answered
Chosen Option : 3

Q.19 How many athletes were selected to represent India at the 1924 Paris Summer Olympics?

- Ans** 1. 10
 2. 12
 3. 8
 4. 11

Question ID : 630680510826
Option 1 ID : 6306801996435
Option 2 ID : 6306801996437
Option 3 ID : 6306801996434
Option 4 ID : 6306801996436
Status : Not Answered
Chosen Option : --

Q.20 The type of reaction that is typically found when a material that is required for the reaction to proceed, such as a surface or a catalyst, is saturated by the reactants is called a _____ order reaction.

- Ans
- 1. third
 - 2. first
 - 3. second
 - 4. zero

Question ID : 630680102246
Option 1 ID : 630680397270
Option 2 ID : 630680397267
Option 3 ID : 630680397268
Option 4 ID : 630680397269
Status : Answered
Chosen Option : 2

Q.21 Where was the first successful textile mill established in India?

- Ans
- 1. Jaipur
 - 2. Surat
 - 3. Kolkata
 - 4. Mumbai

Question ID : 630680183652
Option 1 ID : 630680711617
Option 2 ID : 630680711619
Option 3 ID : 630680711618
Option 4 ID : 630680711620
Status : Answered
Chosen Option : 2

Q.22 Which of the following researchers observed densely stained reticular structures surrounding the nucleus (Hint: Figure)?



- Ans
- 1. William Harvey
 - 2. Francis Crick
 - 3. Louis Pasteur
 - 4. Camillo Golgi

Question ID : 630680210504
Option 1 ID : 630680816177
Option 2 ID : 630680816176
Option 3 ID : 630680816178
Option 4 ID : 630680816175
Status : Not Answered
Chosen Option : --

Q.23 The registered office of the Sangeet Natak Akademi is at:

- Ans 1. Kolkata
 2. Chennai
 3. Mumbai
 4. New Delhi

Question ID : 630680300503
Option 1 ID : 6306801168899
Option 2 ID : 6306801168902
Option 3 ID : 6306801168901
Option 4 ID : 6306801168900
Status : Answered
Chosen Option : 4

Q.24 To gain control over Kannauj the Tripartite Struggle was fought between which of the following dynasties?

- Ans 1. Khalji, Tughlaq and Lodhi
 2. Pratihara, Rashtrakuta and Pala
 3. Solanki, Parmar and Chandella
 4. Pallava, Pandya and Chola

Question ID : 630680412339
Option 1 ID : 6306801608182
Option 2 ID : 6306801608179
Option 3 ID : 6306801608181
Option 4 ID : 6306801608180
Status : Answered
Chosen Option : 2

Q.25 Which of the following schemes of the Government of India is a part of the 'Target Group' approach?

- Ans 1. Hill Areas Development Programme (HADP)
 2. Drought Prone Areas Programme (DPAP)
 3. Marginal Farmers Development Agency (MFDA)
 4. Command Area Development & Water Management Programme (CADP)

Question ID : 630680409645
Option 1 ID : 6306801597411
Option 2 ID : 6306801597409
Option 3 ID : 6306801597412
Option 4 ID : 6306801597410
Status : Answered
Chosen Option : 2

Section : Quantitative Aptitude

Q.1 Find the value of $3\sin 15^\circ - 4\sin^3 15^\circ$.

- Ans
- 1. $\sqrt{2}$
 - 2. $\frac{1}{\sqrt{2}}$
 - 3. 2
 - 4. $\frac{1}{2}$

Question ID : 630680397494
Option 1 ID : 6306801549899
Option 2 ID : 6306801549900
Option 3 ID : 6306801549901
Option 4 ID : 6306801549898
Status : Answered
Chosen Option : 4

Q.2 Find the gain percentage, given that Aditi sold her scooter for ₹40620 gaining $\frac{1}{5}$ th of the selling price.

- Ans
- 1. 25%
 - 2. 20%
 - 3. 35%
 - 4. 10%

Question ID : 630680922765
Option 1 ID : 6306803615906
Option 2 ID : 6306803615907
Option 3 ID : 6306803615908
Option 4 ID : 6306803615909
Status : Answered
Chosen Option : 2

Q.3 A tap can fill a cistern in 10 minutes and another tap can empty it in 12 minutes. If both the taps are open, the time (in hours) taken to fill the tank will be:

- Ans
- 1. 2 hours
 - 2. 2.5 hours
 - 3. 1 hour
 - 4. 1.5 hours

Question ID : 630680488432
Option 1 ID : 6306801907769
Option 2 ID : 6306801907770
Option 3 ID : 6306801907767
Option 4 ID : 6306801907768
Status : Answered
Chosen Option : 3

Q.4 The ratio of circumference and diameter of a circle is 3 : 5. If the circumference is 6 cm, then the radius of the circle is:

- Ans**
- 1. 1.8 cm
 - 2. 10 cm
 - 3. 15 cm
 - 4. 5 cm

Question ID : 630680397485
Option 1 ID : 6306801549865
Option 2 ID : 6306801549863
Option 3 ID : 6306801549864
Option 4 ID : 6306801549862
Status : Answered
Chosen Option : 2

Q.5 The sales of two kinds of bicycles B1 and B2 (in lakhs) manufactured by a company over a period of three years are shown in the table below.

Year	B1	B2
2004	195	284
2005	230	300
2006	250	416

From 2004 to 2006, what is the ratio of the total sales of bicycles B1 to the total sales of bicycles B2?

- Ans**
- 1. 9 : 10
 - 2. 27 : 40
 - 3. 40 : 27
 - 4. 10 : 9

Question ID : 630680421282
Option 1 ID : 6306801643604
Option 2 ID : 6306801643605
Option 3 ID : 6306801643603
Option 4 ID : 6306801643606
Status : Answered
Chosen Option : 2

Q.6 If $a^2 + b^2 = 148$ and $ab = 54$, then find the value of $\frac{a+b}{a-b}$.

- Ans**
- 1. $\frac{2}{\sqrt{10}}$
 - 2. $8\sqrt{7}$
 - 3. $5\sqrt{3}$
 - 4. $\frac{8}{\sqrt{10}}$

Question ID : 630680413478
Option 1 ID : 6306801612736
Option 2 ID : 6306801612738
Option 3 ID : 6306801612737
Option 4 ID : 6306801612739
Status : Answered
Chosen Option : 2

Q.7 The monthly income of Ramesh in year 2021 was ₹18,600 and his monthly expenditure was ₹12,400. In year 2022 his income increased by 15% and his expenditure increased by 8%. Find the percentage increase in his savings.

Ans 1. 25%

2. 32%

3. 27%

4. 29%

Question ID : 630680395440

Option 1 ID : 6306801541940

Option 2 ID : 6306801541943

Option 3 ID : 6306801541941

Option 4 ID : 6306801541942

Status : Answered

Chosen Option : 4

Q.8 'x' varies directly with the cube of 'y', and inversely with the square of 'z'. If $x = \frac{1}{36}$ when $y = 2$ and $z = 3$, then what is the value of $800x$ when $y = 3$ and $z = 5$?

Ans 1. $\frac{800}{9}$

2. $\frac{9}{800}$

3. 27

4. 9

Question ID : 630680524233

Option 1 ID : 6306802049083

Option 2 ID : 6306802049084

Option 3 ID : 6306802049085

Option 4 ID : 6306802049086

Status : Answered

Chosen Option : 2

Q.9 The below table shows the number of 1 litre bottles of soft drink produced by three companies during 2016-2020. Study the given information carefully and answer the question that follows.

Year	A (in lakhs)	B (in lakhs)	C (in lakhs)
2016	38,000	43,000	51,000
2017	41,000	52,000	57,000
2018	53,000	65,000	63,000
2019	30,000	35,000	32,000
2020	20,000	25,000	28,000

What is the difference in average production of A and C during 2016-2018 (in lakhs)?

- Ans
- 1. 14,000
 - 2. 13,000
 - 3. 9500
 - 4. 7800

Question ID : 630680399114
Option 1 ID : 6306801556416
Option 2 ID : 6306801556414
Option 3 ID : 6306801556417
Option 4 ID : 6306801556415
Status : Answered
Chosen Option : 2

Q.10 The value of N in the equation $9 \times N \text{ of } 4 \div 4 - 15 \times 4 = 12$ is:

- Ans
- 1. 0
 - 2. 9
 - 3. 8
 - 4. 12

Question ID : 630680397187
Option 1 ID : 6306801548805
Option 2 ID : 6306801548807
Option 3 ID : 6306801548806
Option 4 ID : 6306801548804
Status : Answered
Chosen Option : 3

Q.11 Pranav borrows a sum of ₹335180 at the rate of 13% per annum simple interest. At the end of the first year, he repays ₹23060 towards return of principal amount borrowed. If Pranav clears all pending dues at the end of the second year, including interest payment that accrued during the first year, how much does he pay (in ₹) at the end of the second year?

- Ans
- 1. 396269
 - 2. 398876
 - 3. 393949
 - 4. 388076

Question ID : 630680809870
Option 1 ID : 6306803173059
Option 2 ID : 6306803173060
Option 3 ID : 6306803173061
Option 4 ID : 6306803173062
Status : Not Answered
Chosen Option : --

Q.12 A well with 14 cm radius is dug 23 cm deep. Find the volume of the earth taken out of it.

- Ans
- 1. 14,168 cm³
 - 2. 14,108 cm³
 - 3. 15,168 cm³
 - 4. 14,178 cm³

Question ID : 630680421493
Option 1 ID : 6306801644435
Option 2 ID : 6306801644437
Option 3 ID : 6306801644438
Option 4 ID : 6306801644436
Status : Answered
Chosen Option : 1

Q.13 What is the value of $\left(\frac{5}{\sqrt{3}} - \operatorname{cosec} 60^\circ\right)$?

- Ans
- 1. $\frac{1}{\sqrt{3}}$
 - 2. $\frac{2}{\sqrt{3}}$
 - 3. $3\sqrt{3}$
 - 4. $\sqrt{3}$

Question ID : 630680397721
Option 1 ID : 6306801550879
Option 2 ID : 6306801550880
Option 3 ID : 6306801550882
Option 4 ID : 6306801550881
Status : Answered
Chosen Option : 4

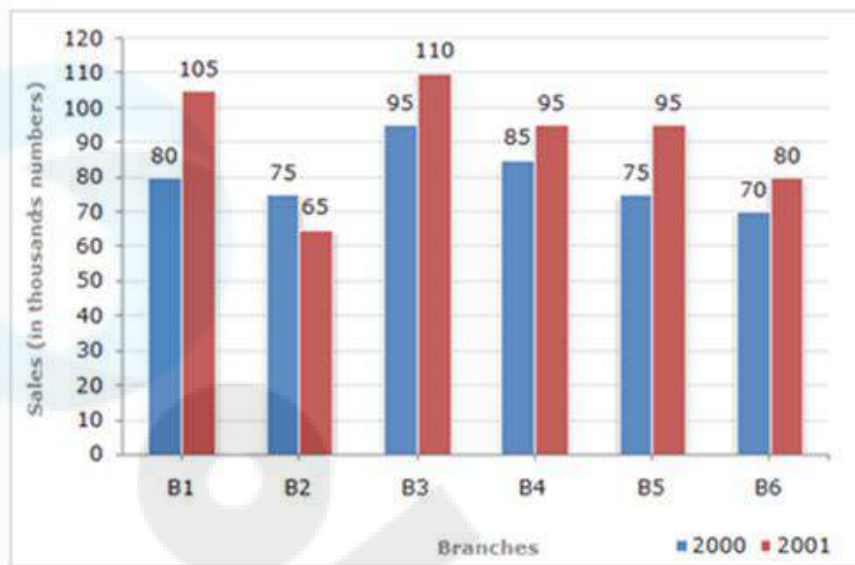
Q.14 If $\sec\theta + \tan\theta = x$, then find $\sin\theta$.

- Ans
- 1. $\frac{x^2 - 1}{1 + x^2}$
 - 2. $\frac{x^2 + 1}{1 - x^2}$
 - 3. $\frac{x^2 - 1}{1 + 2x^2}$
 - 4. $\frac{1 - x^2}{1 + x^2}$

Question ID : 630680526639
Option 1 ID : 6306802058622
Option 2 ID : 6306802058624
Option 3 ID : 6306802058625
Option 4 ID : 6306802058623
Status : Answered
Chosen Option : 1

Q.15 Study the given bar-graph and answer the question that follows.

The bar-graph shows the sales of books (in thousands) from six branches (B1, B2, B3, B4, B5 and B6) of a publishing company during two consecutive years 2000 and 2001.



What percentage of the average sales of branches B1, B2 and B3 in 2001 is the average sales of branches B1, B3 and B6 in 2000?

- Ans 1. 87.5%
2. 80.25%
3. 78.5%
4. 65.25%

Question ID : 630680428211

Option 1 ID : 6306801670891

Option 2 ID : 6306801670890

Option 3 ID : 6306801670889

Option 4 ID : 6306801670888

Status : Answered

Chosen Option : 1

Q.16 Seema walks around a circular field at the rate of 3 rounds per hour, while Priya runs around it at the rate of 8 rounds per hour. They start in the same direction from the same point at 11:54 p.m. They shall first cross each other at:

- Ans 1. 12:06 a.m.
2. 12:06 p.m.
3. 12:00 a.m.
4. 11:59 p.m.

Question ID : 630680428337

Option 1 ID : 6306801671392

Option 2 ID : 6306801671393

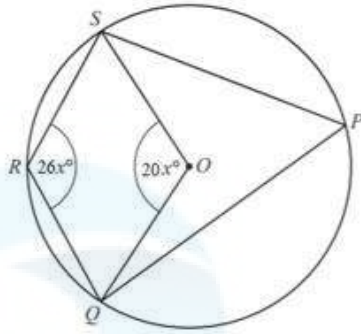
Option 3 ID : 6306801671395

Option 4 ID : 6306801671394

Status : Not Answered

Chosen Option : --

Q.17



NOT TO SCALE

In the figure shown above, quadrilateral PQRS has its vertices on the circumference of the circle with centre O. If $m\angle QOS = 20x^\circ$ and $m\angle QRS = 26x^\circ$, then what is the value of 'x'?

- Ans
- 1. 4
 - 2. 3
 - 3. 6
 - 4. 5

Question ID : 630680196682
Option 1 ID : 630680763029
Option 2 ID : 630680763030
Option 3 ID : 630680763027
Option 4 ID : 630680763028
Status : Answered
Chosen Option : 3

Q.18 Which of the following numbers is divisible by 6?

- Ans
- 1. 62233
 - 2. 438750
 - 3. 12581
 - 4. 128530

Question ID : 630680108867
Option 1 ID : 630680422361
Option 2 ID : 630680422362
Option 3 ID : 630680422360
Option 4 ID : 630680422363
Status : Answered
Chosen Option : 1

Q.19 The number of pages printed by two printers P1 and P2 over three days are given in the following table. Study the table carefully and answer the question given below.

Days/Printer	P1	P2
Monday	200	250
Tuesday	150	300
Wednesday	225	210

What is the difference between the total number of pages printed by the two printers during these three days?

- Ans** 1. 185
 2. 180
 3. 170
 4. 175

Question ID : 630680428188
Option 1 ID : 6306801670799
Option 2 ID : 6306801670798
Option 3 ID : 6306801670796
Option 4 ID : 6306801670797
Status : Answered
Chosen Option : 1

Q.20 A class of 30 students appeared in a test. The average score of 12 students is 60, and that of the rest is 80. What is the average score of the class?

- Ans** 1. 71
 2. 72
 3. 70
 4. 73

Question ID : 630680566254
Option 1 ID : 6306802214005
Option 2 ID : 6306802214004
Option 3 ID : 6306802214007
Option 4 ID : 6306802214006
Status : Answered
Chosen Option : 2

Q.21 If $x^2 + 1 = x$, then the value of $(x^{14} + x^8 + 1)$ is:

- Ans** 1. 1
 2. 3
 3. 0
 4. 2

Question ID : 630680413500
Option 1 ID : 6306801612825
Option 2 ID : 6306801612827
Option 3 ID : 6306801612824
Option 4 ID : 6306801612826
Status : Answered
Chosen Option : 3

Q.22 From a point T, a tangent TP at point P, is drawn to a circle with centre O. A secant TQR (point Q is near to point T) is drawn from the point T. $\triangle PQR$ is inscribed into the circle by joining the points P, Q and R. Draw lines OQ and OR. If $\angle PTQ$ is 27° and $\angle TPQ = 55^\circ$, what is the degree measure of $\angle ROQ$?

Ans 1. 94

2. 86

3. 98

4. 82

Question ID : 630680296082
Option 1 ID : 6306801151997
Option 2 ID : 6306801151998
Option 3 ID : 6306801151999
Option 4 ID : 6306801151996
Status : Not Answered
Chosen Option : --

Q.23 Cindy bought 15 apples and 12 oranges and paid a sum of ₹447 for the purchase. Which of the statements given below is inconsistent with the information given in the previous statement, leading to no possible prices of the two fruits?

Ans 1. Purchased 10 apples and 13 oranges and paid a sum of ₹353

2. Purchased 25 apples and 20 oranges and paid a sum of ₹745

3. Purchased 35 apples and 28 oranges and paid a sum of ₹1,029

4. Purchased 12 apples and 8 oranges and paid a sum of ₹340

Question ID : 630680196068
Option 1 ID : 630680760662
Option 2 ID : 630680760659
Option 3 ID : 630680760661
Option 4 ID : 630680760660
Status : Answered
Chosen Option : 3

Q.24 The single discount equivalent to the discount series of 15%, 20% and 5% is:

Ans 1. 35.4%

2. 20%

3. 32%

4. 32.5%

Question ID : 630680217287
Option 1 ID : 630680843084
Option 2 ID : 630680843086
Option 3 ID : 630680843083
Option 4 ID : 630680843085
Status : Answered
Chosen Option : 1

Q.25 In $\triangle PQR$, S and T are the midpoints of the sides PQ and PR, respectively. The length of the side QR is 12 cm. If ST is parallel to QR, then find the length (in cm) of ST.

- Ans
- 1. 4
 - 2. 8
 - 3. 6
 - 4. 10

Question ID : 630680383486
Option 1 ID : 6306801494839
Option 2 ID : 6306801494841
Option 3 ID : 6306801494840
Option 4 ID : 6306801494842
Status : Answered
Chosen Option : 3

Section : English Comprehension

Q.1 Select the option that expresses the given sentence in active voice.
His father's arm was bandaged by the kind nurse.

- Ans
- 1. The kind nurse bandaged his father's arm.
 - 2. The kind nurse bandages his father's arm.
 - 3. The kind nurse has bandaged his father's arm.
 - 4. The kind nurse had bandaged his father's arm.

Question ID : 630680415283
Option 1 ID : 6306801619879
Option 2 ID : 6306801619881
Option 3 ID : 6306801619882
Option 4 ID : 6306801619880
Status : Answered
Chosen Option : 1

Q.2 Select the most appropriate synonym of the word in bold.
The choice was **judicious** as further events proved.

- Ans
- 1. hasty
 - 2. ridiculous
 - 3. prudent
 - 4. silly

Question ID : 630680319159
Option 1 ID : 6306801241544
Option 2 ID : 6306801241542
Option 3 ID : 6306801241541
Option 4 ID : 6306801241543
Status : Answered
Chosen Option : 3

Q.3 Select the most appropriate option to substitute the underlined segment in the given sentence.

The betrayal of the country was at last unmasked.

- Ans
- 1. theist
 - 2. traitor
 - 3. truant
 - 4. transgressor

Question ID : 630680170439
Option 1 ID : 630680660352
Option 2 ID : 630680660351
Option 3 ID : 630680660350
Option 4 ID : 630680660349
Status : Answered
Chosen Option : 2

Q.4 The following sentence has been divided into four segments. Identify the segment that contains a grammatical error.

Please go and meet the chairperson. / She will be / away for the / few next days.

- Ans
- 1. away for the
 - 2. few next days.
 - 3. Please go and meet the chairperson.
 - 4. She will be

Question ID : 630680300630
Option 1 ID : 6306801169345
Option 2 ID : 6306801169346
Option 3 ID : 6306801169343
Option 4 ID : 6306801169344
Status : Answered
Chosen Option : 2

Q.5 Select the most appropriate option to substitute the underlined word segment in the given sentence.

I picked up my little clock and it began to dance gracefully.

- Ans
- 1. work agreeably
 - 2. move gradually
 - 3. lift smoothly
 - 4. chime prettily

Question ID : 630680168513
Option 1 ID : 630680652666
Option 2 ID : 630680652664
Option 3 ID : 630680652667
Option 4 ID : 630680652665
Status : Answered
Chosen Option : 1

Q.6 Select the option that expresses the given sentence in passive voice.
We should clean the house regularly.

- Ans 1. The house should be cleaned regularly by us.
 2. The house should be being cleaned regularly by us.
 3. The house should be clean regularly by us.
 4. The house should have been cleaned regularly by us.

Question ID : 630680415298
Option 1 ID : 6306801619939
Option 2 ID : 6306801619940
Option 3 ID : 6306801619942
Option 4 ID : 6306801619941
Status : Answered
Chosen Option : 1

Q.7 Select the most appropriate synonym for the underlined word in the given sentence.
It was his decency that he employed him.

- Ans 1. Deception
 2. Courtesy
 3. Rudeness
 4. Perversion

Question ID : 630680167054
Option 1 ID : 630680647078
Option 2 ID : 630680647077
Option 3 ID : 630680647076
Option 4 ID : 630680647079
Status : Answered
Chosen Option : 2

Q.8 Read the sentence carefully and select the ANTONYM of the underlined word from the given options.

I heard his suggestion but I am quite unsure about the risks involved in it.

- Ans 1. Interested
 2. Certain
 3. Doubtful
 4. Thoughtful

Question ID : 630680517493
Option 1 ID : 6306802022369
Option 2 ID : 6306802022370
Option 3 ID : 6306802022368
Option 4 ID : 6306802022371
Status : Answered
Chosen Option : 2

Q.9 Sentences of a paragraph are given below in jumbled order. Select the option that arranges the sentences in the correct order to form a meaningful and coherent paragraph.

A. Summative assessment is the assignment of the student's performance at the end of the academic term.

B. This new pattern ensures that besides just textbook teaching and learning, effective child-teacher interaction is encouraged.

C. The CBSE envisages two types of examinations, Formative and Summative.

D. Formative assessment is a part of the teaching-learning process and is done through conversation, quizzes, interviews, projects, assignments, etc.

Ans ✓ 1. C, D, A, B

✗ 2. A, B, C, D

✗ 3. B, C, A, D

✗ 4. D, A, C, B

Question ID : 630680168496
Option 1 ID : 630680652598
Option 2 ID : 630680652596
Option 3 ID : 630680652599
Option 4 ID : 630680652597
Status : Answered
Chosen Option : 1

Q.10 Select the most appropriate option to substitute the underlined segment in the given sentence.

The line, 'Round the rugged rocks the ragged rascal ran' uses the repetition of usually initial consonant sounds in two or more neighbouring words or syllables .

Ans ✓ 1. alliteration

✗ 2. epithet

✗ 3. allegory

✗ 4. simile

Question ID : 630680170438
Option 1 ID : 630680660347
Option 2 ID : 630680660345
Option 3 ID : 630680660348
Option 4 ID : 630680660346
Status : Answered
Chosen Option : 1

Q.11 Parts of the following sentence have been given as options. Select the option that contains an error.

While I was walking to the store, my friend calls me and ask for a favour.

Ans ✓ 1. my friend calls me and ask

✗ 2. for a favour

✗ 3. to the store

✗ 4. While I was walking

Question ID : 630680514355
Option 1 ID : 6306802010047
Option 2 ID : 6306802010048
Option 3 ID : 6306802010046
Option 4 ID : 6306802010045
Status : Answered
Chosen Option : 4

Q.12 Select the option that substitutes the INCORRECTLY spelt word in the given sentence.
In any time of crisis, there is always one mument that stands out from all the others.

- Ans
- 1. mumont
 - 2. mumunt
 - 3. moment
 - 4. momont

Question ID : 630680375547
Option 1 ID : 6306801463343
Option 2 ID : 6306801463345
Option 3 ID : 6306801463346
Option 4 ID : 6306801463344
Status : Answered
Chosen Option : 3

Q.13 Select the most appropriate ANTONYM of the word in the brackets to fill in the blank.

She left the party _____ because of her parents' strict time restrictions. [late]

- Ans
- 1. early
 - 2. suffer
 - 3. small
 - 4. exit

Question ID : 630680132562
Option 1 ID : 630680513384
Option 2 ID : 630680513382
Option 3 ID : 630680513385
Option 4 ID : 630680513383
Status : Answered
Chosen Option : 1

Q.14 Select the option that can be used as a one-word substitute for the underlined group of words.

The soldier struck the enemy with the short sword fixed onto the end of the gun.

- Ans
- 1. Baron
 - 2. Bayonet
 - 3. Baton
 - 4. Bigot

Question ID : 630680129381
Option 1 ID : 630680501145
Option 2 ID : 630680501142
Option 3 ID : 630680501143
Option 4 ID : 630680501144
Status : Answered
Chosen Option : 3

Q.15 Select the most appropriate option to fill in the blank.

The mother couldn't _____ such an insult from her son in front of the others.

- Ans 1. bier
 2. bear
 3. beer
 4. bare

Question ID : 63068069103
Option 1 ID : 630680267093
Option 2 ID : 630680267091
Option 3 ID : 630680267092
Option 4 ID : 630680267090
Status : Answered
Chosen Option : 4

Q.16 Select the sentence that contains a spelling error.

- Ans 1. Fermented apple juice is touted to have many health benefits though most are anecdotal and not supported by scientific facts.
 2. It is important for scientists to acknowledge their humanity and the implications of their inventions.
 3. Intriguing as it is, the house was never sold because it was thought to be haunted.
 4. There are many believes about ancient artefacts that some of them are patently not true.

Question ID : 630680409933
Option 1 ID : 6306801598563
Option 2 ID : 6306801598561
Option 3 ID : 6306801598562
Option 4 ID : 6306801598564
Status : Answered
Chosen Option : 4

Q.17 Select the correct idiom to substitute the underlined segment in the following sentence.

Due to her impoverished state, most of her relatives treated her with contempt.

- Ans 1. Gave a wide space to her
 2. Turned up their nose at her
 3. Turned the corner at her
 4. Came in handy

Question ID : 63068084494
Option 1 ID : 630680327530
Option 2 ID : 630680327528
Option 3 ID : 630680327529
Option 4 ID : 630680327531
Status : Answered
Chosen Option : 3

Q.18 Parts of a sentence are given below in jumbled order. Select the option that arranges the parts in the correct sequence to form a meaningful sentence.
(P) hard work and perseverance
(Q) no matter how difficult
(O) lead to success
(R) the journey may seem

- Ans
- 1. ORQP
 - 2. RPQO
 - 3. POQR
 - 4. RPOQ

Question ID : 630680380982
Option 1 ID : 6306801484917
Option 2 ID : 6306801484918
Option 3 ID : 6306801484916
Option 4 ID : 6306801484915
Status : Answered
Chosen Option : 3

Q.19 Select the most appropriate homophone to fill in the blank.
Ruby gave her mother a hug and offered to knead the _____.

- Ans
- 1. flora
 - 2. floor
 - 3. flour
 - 4. flavour

Question ID : 630680158492
Option 1 ID : 630680613492
Option 2 ID : 630680613495
Option 3 ID : 630680613494
Option 4 ID : 630680613493
Status : Answered
Chosen Option : 3

Q.20 Select the most appropriate meaning of the given idiom.
Let the dust settle

- Ans
- 1. To make a space tidy
 - 2. To wait for a situation to become clear or certain
 - 3. Wait for the other person to make a move
 - 4. To make use of a situation

Question ID : 630680375531
Option 1 ID : 6306801463280
Option 2 ID : 6306801463279
Option 3 ID : 6306801463281
Option 4 ID : 6306801463282
Status : Answered
Chosen Option : 2

Comprehension:

In the following passage, some words have been deleted. Read the passage carefully and select the most appropriate option to fill in each blank.

The rise in global temperature (1)_____ already occurred is leading to extreme weather events that bring (2)_____ heat waves and droughts, devastating floods and increasingly powerful hurricanes and tropical storms. The combination of these factors means the impact on human health is increasing and is (3)_____ accelerate. But there is room for hope, particularly if governments take action now to (4)_____ the pledges made at Glasgow in November 2021 and to go further in resolving the climate crisis. WHO is (5)_____ governments to lead a just, equitable, and fast phase out of fossil fuels and transition to a clean energy future.

SubQuestion No : 21

Q.21 Select the most appropriate option to fill in blank number 1.

- Ans** 1. that has
 2. that is
 3. which had
 4. which have

Question ID : 630680158847

Option 1 ID : 630680614866

Option 2 ID : 630680614867

Option 3 ID : 630680614865

Option 4 ID : 630680614864

Status : Answered

Chosen Option : 3

Comprehension:

In the following passage, some words have been deleted. Read the passage carefully and select the most appropriate option to fill in each blank.

The rise in global temperature (1)_____ already occurred is leading to extreme weather events that bring (2)_____ heat waves and droughts, devastating floods and increasingly powerful hurricanes and tropical storms. The combination of these factors means the impact on human health is increasing and is (3)_____ accelerate. But there is room for hope, particularly if governments take action now to (4)_____ the pledges made at Glasgow in November 2021 and to go further in resolving the climate crisis. WHO is (5)_____ governments to lead a just, equitable, and fast phase out of fossil fuels and transition to a clean energy future.

SubQuestion No : 22

Q.22 Select the most appropriate option to fill in blank number 2.

- Ans** 1. maximise
 2. mild
 3. intense
 4. minor

Question ID : 630680158848

Option 1 ID : 630680614871

Option 2 ID : 630680614870

Option 3 ID : 630680614868

Option 4 ID : 630680614869

Status : Answered

Chosen Option : 3

Comprehension:

In the following passage, some words have been deleted. Read the passage carefully and select the most appropriate option to fill in each blank.

The rise in global temperature (1)_____ already occurred is leading to extreme weather events that bring (2)_____ heat waves and droughts, devastating floods and increasingly powerful hurricanes and tropical storms. The combination of these factors means the impact on human health is increasing and is (3)_____ accelerate. But there is room for hope, particularly if governments take action now to (4)_____ the pledges made at Glasgow in November 2021 and to go further in resolving the climate crisis. WHO is (5)_____ governments to lead a just, equitable, and fast phase out of fossil fuels and transition to a clean energy future.

SubQuestion No : 23

Q.23 Select the most appropriate option to fill in blank number 3.

Ans ✓ 1. likely to

✗ 2. barely to

✗ 3. rarely to

✗ 4. hardly to

Question ID : 630680158849

Option 1 ID : 630680614875

Option 2 ID : 630680614874

Option 3 ID : 630680614873

Option 4 ID : 630680614872

Status : Answered

Chosen Option : 1

Comprehension:

In the following passage, some words have been deleted. Read the passage carefully and select the most appropriate option to fill in each blank.

The rise in global temperature (1)_____ already occurred is leading to extreme weather events that bring (2)_____ heat waves and droughts, devastating floods and increasingly powerful hurricanes and tropical storms. The combination of these factors means the impact on human health is increasing and is (3)_____ accelerate. But there is room for hope, particularly if governments take action now to (4)_____ the pledges made at Glasgow in November 2021 and to go further in resolving the climate crisis. WHO is (5)_____ governments to lead a just, equitable, and fast phase out of fossil fuels and transition to a clean energy future.

SubQuestion No : 24

Q.24 Select the most appropriate option to fill in blank number 4.

Ans ✗ 1. take

✗ 2. watch

✗ 3. keep

✓ 4. honour

Question ID : 630680158850

Option 1 ID : 630680614879

Option 2 ID : 630680614878

Option 3 ID : 630680614877

Option 4 ID : 630680614876

Status : Answered

Chosen Option : 1

Comprehension:

In the following passage, some words have been deleted. Read the passage carefully and select the most appropriate option to fill in each blank.

The rise in global temperature (1)_____ already occurred is leading to extreme weather events that bring (2)_____ heat waves and droughts, devastating floods and increasingly powerful hurricanes and tropical storms. The combination of these factors means the impact on human health is increasing and is (3)_____ accelerate. But there is room for hope, particularly if governments take action now to (4)_____ the pledges made at Glasgow in November 2021 and to go further in resolving the climate crisis. WHO is (5)_____ governments to lead a just, equitable, and fast phase out of fossil fuels and transition to a clean energy future.

SubQuestion No : 25

Q.25 Select the most appropriate option to fill in blank number 5.

- Ans** 1. calling for
 2. calling on
 3. calling at
 4. calling from

Question ID : 630680158851

Option 1 ID : 630680614880

Option 2 ID : 630680614883

Option 3 ID : 630680614881

Option 4 ID : 630680614882

Status : Answered

Chosen Option : 2