

Multi Tasking Non Technical Staff and Havaladar CBIC and CBN Examination 2023

Roll Number	
Candidate Name	
Venue Name	iON Digital Zone iDZ 2 Sector 62
Exam Date	14/09/2023
Exam Time	12:30 PM - 2:30 PM
Subject	MTS Non Tech Havaladar CBIC and CBN Examination 2023

Section : Numerical and Mathematical Ability

Q.1 The price of a T-shirt is ₹450, and the price of a jeans is ₹1,650. If you buy three T-shirts and two jeans, what is the average cost of each item?

- Ans
- ☒ 1. ₹900
 - ☒ 2. ₹920
 - ☒ 3. ₹910
 - ☒ 4. ₹930

Question ID : 264330156255

Option 1 ID : 264330612419

Option 2 ID : 264330612421

Option 3 ID : 264330612420

Option 4 ID : 264330612422

Status : Answered

Chosen Option : 4

Q.2 On comparing the following two numeric expressions, we find that _____.

$$\left[\left(2\frac{7}{9}\right)^{2\frac{1}{2}}\right]^{\frac{3}{5}} \text{ and } \left[\left(1\frac{2}{3}\right)^5\right]^{\frac{3}{5}}$$

- Ans
- ☒ 1. both the expressions are equal
 - ☒ 2. the first expression is smaller than the second
 - ☒ 3. the first expression is larger than the second
 - ☒ 4. the given two expressions cannot be compared

Question ID : 264330154113

Option 1 ID : 264330603917

Option 2 ID : 264330603916

Option 3 ID : 264330603915

Option 4 ID : 264330603918

Status : Answered

Chosen Option : 1

Q.3 By selling an article for ₹5,280, Geeta lost 12%. For what amount should she sell it to make a profit of 12%?

- Ans
- ☒ 1. ₹6,820
 - ☒ 2. ₹7,150
 - ☒ 3. ₹5,780
 - ☒ 4. ₹6,720

Question ID : 264330159022

Option 1 ID : 264330623447

Option 2 ID : 264330623448

Option 3 ID : 264330623450

Option 4 ID : 264330623449

Status : Answered

Chosen Option : 4

Q.4 Praveen sells a study table to Zoya at a loss of 10%, and Zoya sells the study table to Aadarsh at a profit of 25%. If Aadarsh purchased the study table for ₹2,250, then what was the cost (in ₹) of the study table for Praveen?

- Ans
- ☒ 1. 2,000
 - ☒ 2. 2,100
 - ☒ 3. 1,800
 - ☒ 4. 1,900

Question ID : 264330155711

Option 1 ID : 264330610249

Option 2 ID : 264330610250

Option 3 ID : 264330610247

Option 4 ID : 264330610248

Status : Answered

Chosen Option : 1

Q.5 Suresh could save 20% of his income. But 4 years later, when his income increased by 40%, he could save the same amount only as before. By how much percentage did his expenditure increase?

- Ans
- ☒ 1. 23%
 - ☒ 2. 50%
 - ☒ 3. 22%
 - ☒ 4. 45%

Question ID : 264330157325

Option 1 ID : 264330616663

Option 2 ID : 264330616664

Option 3 ID : 264330616666

Option 4 ID : 264330616665

Status : Answered

Chosen Option : 2

Q.6 If Mohit, Nitu and Soma can complete a piece of work in 5 days, 6 days and 8 days, respectively, then in how many days will the work be completed if they work on alternate days starting with Mohit on first day, then Nitu on second day, then Soma on third day, then Mohit on fourth day and so on.

Ans

☒ 1. $5\frac{7}{12}$

☒ 2. $7\frac{1}{60}$

☒ 3. $4\frac{7}{15}$

☒ 4. $6\frac{1}{12}$

Question ID : 264330156196

Option 1 ID : 264330612185

Option 2 ID : 264330612186

Option 3 ID : 264330612183

Option 4 ID : 264330612184

Status : Answered

Chosen Option : 4

Q.7 A triangle has its sides 5 cm, 12 cm and 13 cm. What will be the area of the triangle formed by joining the mid point of the three sides?

Ans

☒ 1. $7\frac{1}{2} \text{ cm}^2$

☒ 2. $19\frac{1}{2} \text{ cm}^2$

☒ 3. $13\frac{1}{2} \text{ cm}^2$

☒ 4. 15 cm^2

Question ID : 264330156501

Option 1 ID : 264330613392

Option 2 ID : 264330613393

Option 3 ID : 264330613394

Option 4 ID : 264330613391

Status : Answered

Chosen Option : 4

Q.8 A sum of ₹800 amounts to ₹1,040 in 3 years at simple interest. If the interest rate is increased by 3%, find the amount.

Ans

☒ 1. ₹1,102

☒ 2. ₹1,212

☒ 3. ₹1,112

☒ 4. ₹1,012

Question ID : 264330156002

Option 1 ID : 264330611407

Option 2 ID : 264330611408

Option 3 ID : 264330611410

Option 4 ID : 264330611409

Status : Answered

Chosen Option : 3

Q.9 If a person walks at 18 km/hr instead of 12 km/hr, he would have walked 24 km more. What is the actual distance travelled by him?

- Ans**
- ☒ 1. 52 km
 - ☒ 2. 60 km
 - ☒ 3. 55 km
 - ☒ 4. 48 km

Question ID : 264330156289
Option 1 ID : 264330612557
Option 2 ID : 264330612555
Option 3 ID : 264330612558
Option 4 ID : 264330612556
Status : Answered
Chosen Option : 4

Q.10 If $A : B = 2 : 1$ and $B : C = 1 : 3$, then $C : A$ is:

- Ans**
- ☒ 1. 3 : 1
 - ☒ 2. 2 : 3
 - ☒ 3. 3 : 2
 - ☒ 4. 1 : 3

Question ID : 264330153873
Option 1 ID : 264330602956
Option 2 ID : 264330602955
Option 3 ID : 264330602957
Option 4 ID : 264330602958
Status : Answered
Chosen Option : 3

Q.11 Find the smallest three digit number which when added to 5 is exactly divisible by 12, 14 and 18.

- Ans**
- ☒ 1. 240
 - ☒ 2. 225
 - ☒ 3. 245
 - ☒ 4. 247

Question ID : 264330155985
Option 1 ID : 264330611340
Option 2 ID : 264330611342
Option 3 ID : 264330611339
Option 4 ID : 264330611341
Status : Answered
Chosen Option : 4

Q.12 A, B and C working separately can do a piece of work in 11 days, 20 days and 55 days, respectively. If they work together, then the time taken to complete the work is:

- Ans**
- ✓ 1. $6\frac{2}{7}$ days
 - ✗ 2. $5\frac{1}{7}$ days
 - ✗ 3. $4\frac{1}{7}$ days
 - ✗ 4. $\frac{1}{7}$ days

Question ID : 264330156532

Option 1 ID : 264330613516

Option 2 ID : 264330613515

Option 3 ID : 264330613517

Option 4 ID : 264330613518

Status : Answered

Chosen Option : 1

Q.13 The weight of a cube varies directly as the product of its volume and its density. The ratio of densities of the materials of the first cube and second cube is 27 : 16. If the weight of the first cube is 4 times the weight of the second cube, then what is the ratio of the edges of the first cube and second cube?

- Ans**
- ✗ 1. 2 : 3
 - ✗ 2. 3 : 2
 - ✗ 3. 3 : 4
 - ✓ 4. 4 : 3

Question ID : 264330156308

Option 1 ID : 264330612633

Option 2 ID : 264330612634

Option 3 ID : 264330612632

Option 4 ID : 264330612631

Status : Answered

Chosen Option : 4

Q.14 The height of a right circular cone is 20 cm, and its base diameter is 30 cm. What is the curved surface area and the total surface area of the right circular cone, respectively?

- Ans**
- ✗ 1. $335\pi \text{ cm}^2$ and $525\pi \text{ cm}^2$
 - ✗ 2. $390\pi \text{ cm}^2$ and $475\pi \text{ cm}^2$
 - ✗ 3. $450\pi \text{ cm}^2$ and $625\pi \text{ cm}^2$
 - ✓ 4. $375\pi \text{ cm}^2$ and $600\pi \text{ cm}^2$

Question ID : 264330156201

Option 1 ID : 264330612204

Option 2 ID : 264330612203

Option 3 ID : 264330612205

Option 4 ID : 264330612206

Status : Answered

Chosen Option : 4

Q.15 Study the given table and answer the question that follows.

The table gives the percentage of marks obtained by five students in five different subjects.

Students	Subjects (Max Marks = 100)				
	Mathematics	Physics	Chemistry	English	Hindi
Rahul	60	80	75	70	80
Vijay	80	90	80	75	85
Nani	70	80	70	70	80
Ganesh	80	75	60	60	65
Rohit	70	70	50	50	75

What is the average marks obtained by all the five students in Mathematics?

- Ans
- ☒ 1. 70
 - ☒ 2. 75
 - ☒ 3. 72
 - ☒ 4. 65

Question ID : 264330157333

Option 1 ID : 264330616698

Option 2 ID : 264330616696

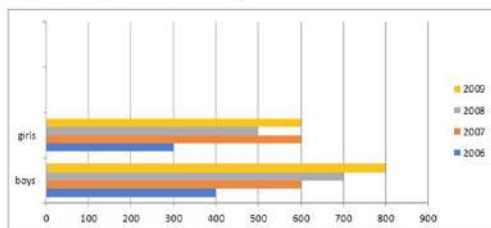
Option 3 ID : 264330616695

Option 4 ID : 264330616697

Status : Answered

Chosen Option : 3

Q.16 The following bar graph indicates the enrolment of boys and girls in a school during the years 2006-2009. Study the bar graph carefully and answer the question.



Find the ratio of the total number of boys to girls enrolled in all the years 2006 to 2009.

- Ans
- ☒ 1. 3 : 4
 - ☒ 2. 3 : 5
 - ☒ 3. 5 : 3
 - ☒ 4. 5 : 4

Question ID : 264330153857

Option 1 ID : 264330602891

Option 2 ID : 264330602893

Option 3 ID : 264330602892

Option 4 ID : 264330602894

Status : Answered

Chosen Option : 4

Q.17 Money is doubled in a bank account in 7 years, when the interest is compounded annually. What time in years is needed to make an amount 8 times in the bank?

- Ans ☒ 1. 21
☐ 2. 14
☐ 3. 35
☐ 4. 28

Question ID : 264330156284

Option 1 ID : 264330612537

Option 2 ID : 264330612535

Option 3 ID : 264330612538

Option 4 ID : 264330612536

Status : Answered

Chosen Option : 1

Q.18 A car travels 200 km at a speed of 50 km/h and then travels another 200 km at a speed of 80 km/h. What is the average speed of the car for the entire journey? (round to two places of decimals)

- Ans ☐ 1. 59.75km/h
☐ 2. 60.24 km/h
☒ 3. 61.54 km/h
☐ 4. 62.53 km/h

Question ID : 264330156258

Option 1 ID : 264330612431

Option 2 ID : 264330612432

Option 3 ID : 264330612433

Option 4 ID : 264330612434

Status : Answered

Chosen Option : 3

Q.19 A thief noticed a policeman from a distance of 300 m and started to run at a speed of 12 km/h. The policeman chased at a speed of 13 km/h and he caught the thief. What was the distance run by the thief?

- Ans ☐ 1. 7200 m
☐ 2. 4800 m
☐ 3. 1800 m
☒ 4. 3600 m

Question ID : 264330154056

Option 1 ID : 264330603688

Option 2 ID : 264330603690

Option 3 ID : 264330603687

Option 4 ID : 264330603689

Status : Answered

Chosen Option : 4

Q.20 S gets 65, 74, 62, 68 and 68 marks in Hindi, English, Mathematics, Physics and Chemistry, respectively. His average marks in Mathematics, Hindi and English are _____ more than the average marks in Mathematics, Physics and Chemistry.

- Ans**
- ☒ 1. 0.5
 - ☒ 2. 1.33
 - ☒ 3. 1.67
 - ☒ 4. 1

Question ID : 264330153798

Option 1 ID : 264330602655

Option 2 ID : 264330602657

Option 3 ID : 264330602658

Option 4 ID : 264330602656

Status : Answered

Chosen Option : 4

Section : Reasoning Ability and Problem Solving

Q.1 What should come in place of ? in the given series?

41 43 47 53 61 ?

- Ans**
- ☒ 1. 73
 - ☒ 2. 74
 - ☒ 3. 71
 - ☒ 4. 72

Question ID : 264330151541

Option 1 ID : 264330593793

Option 2 ID : 264330593794

Option 3 ID : 264330593791

Option 4 ID : 264330593792

Status : Answered

Chosen Option : 3

Q.2 Which figure should replace the question mark (?) if the following figure series were to be continued?

R	C		O	2		E	♥		R	S		
O	♥	E	S	C	R	R	O	2	C	♥	E	
2	S		♥	E		S	C		O	2		?

Ans

✗ 1.

	2	O	
E	C	♥	
S	R		

✗ 2.

	2	E	
S	R	O	
C	♥		

✗ 3.

	2	R	
E	C	♥	
S	O		

✓ 4.

	2	O	
E	R	S	
C	♥		

Question ID : 264330154755

Option 1 ID : 264330606486

Option 2 ID : 264330606485

Option 3 ID : 264330606484

Option 4 ID : 264330606483

Status : Answered

Chosen Option : 4

Q.3 Find out the correct alternative that when filled in the blanks in the same sequence will make the series logically complete.

B_KPBN_R_OKTB_KVBQK_

Ans

✗ 1.

SJORN

✓ 2.

MKBPX

✗ 3.

JFIEH

✗ 4.

MFHID

Question ID : 264330154723

Option 1 ID : 264330606358

Option 2 ID : 264330606356

Option 3 ID : 264330606357

Option 4 ID : 264330606355

Status : Answered

Chosen Option : 2

Q.4 What will come in place of '?' in the following equation, if '+' and '×' are interchanged and '×' and '-' are interchanged?

$$12 - 6 \div 3 + 3 \times 7 = ?$$

- Ans**
- ✓ 1. 66
 - ✗ 2. 14
 - ✗ 3. 11
 - ✗ 4. 33

Question ID : 264330154663

Option 1 ID : 264330606116

Option 2 ID : 264330606118

Option 3 ID : 264330606115

Option 4 ID : 264330606117

Status : Answered

Chosen Option : 1

Q.5 In a certain code language, 'DIAL' is coded as '1326' and 'IDLE' is coded as '6183'. What is the code for 'E' in the given code language?

- Ans**
- ✗ 1. 1
 - ✓ 2. 8
 - ✗ 3. 3
 - ✗ 4. 6

Question ID : 264330151695

Option 1 ID : 264330594407

Option 2 ID : 264330594410

Option 3 ID : 264330594408

Option 4 ID : 264330594409

Status : Answered

Chosen Option : 2

Q.6 If F means '-', C means '×', D means '+', B means '÷', then what will come in place of the question mark (?) in the following equation?

$$44 \text{ F } 18 \text{ C } 3 \text{ B } 108 \text{ D } 6 = ?$$

- Ans**
- ✓ 1. 8
 - ✗ 2. 18
 - ✗ 3. 6
 - ✗ 4. 16

Question ID : 264330154680

Option 1 ID : 264330606184

Option 2 ID : 264330606186

Option 3 ID : 264330606183

Option 4 ID : 264330606185

Status : Answered


Chosen Option : 1

Q.7 Select the option figure in which the given figure (X) is embedded as its part (rotation is NOT allowed).



Ans

✗ 1.



✗ 2.



✗ 3.



✓ 4.



Question ID : 264330151730

Option 1 ID : 264330594548

Option 2 ID : 264330594547

Option 3 ID : 264330594549

Option 4 ID : 264330594550

Status : Answered

Chosen Option : 4

Q.8 What should come in place of ? in the given series based on the English alphabetical order?

HPA, KTD, NXG, QBJ, ?

Ans ✗ 1. UEM

✓ 2. TFM

✗ 3. SEN

✗ 4. SFN

Question ID : 264330155782

Option 1 ID : 264330610531

Option 2 ID : 264330610534

Option 3 ID : 264330610533

Option 4 ID : 264330610532

Status : Answered

Chosen Option : 2

Q.9 In the following number-pairs, the second number is obtained by applying certain mathematical operations to the first number. Select the set in which the numbers are related in the same way as are the numbers of the following sets.

(NOTE: Operations should be performed on the whole numbers, without breaking down the numbers into its constituent digits. E.g. 13 – Operations on 13 such as adding / subtracting /multiplying etc. to 13 can be performed. Breaking down 13 into 1 and 3 and then performing mathematical operations on 1 and 3 is not allowed)

7, 50

15, 226

- Ans
- ☒ 1. 21, 445
 - ☒ 2. 11, 131
 - ☒ 3. 14, 162
 - ☒ 4. 17, 290

Question ID : 264330151621

Option 1 ID : 264330594114

Option 2 ID : 264330594111

Option 3 ID : 264330594112

Option 4 ID : 264330594113

Status : Answered

Chosen Option : 4

Q.10 Read the given statements and conclusions carefully. You have to take the given statements to be true even if they seem to be at variance from commonly known facts. You have to decide which conclusion/s logically follow/s from the given statements.

Statements: Some schools are big. All big are malls. No mall is cheap.

Conclusion I: All big are schools.

Conclusion II: Some malls are big.

- Ans
- ☒ 1. Both conclusions (I) and (II) are follow.
 - ☒ 2. Only conclusion (II) is follow.
 - ☒ 3. Only conclusion (I) is follow.
 - ☒ 4. Neither conclusion (I) nor (II) is follow.

Question ID : 264330155895

Option 1 ID : 264330610986

Option 2 ID : 264330610984

Option 3 ID : 264330610983

Option 4 ID : 264330610985

Status : Answered

Chosen Option : 1

Q.11 Read the given statements and conclusions carefully. You have to take the given statements to be true even if they seem to be at variance from commonly known facts. You have to decide which conclusion/s logically follow/s from the given statements.

Statements: All trash are rags. Some rags are big. All big are crabs.

Conclusion I: All big are rags.

Conclusion II: Some crabs are rags.

- Ans**
- ☒ 1. Both conclusions (I) and (II) are follow.
 - ☒ 2. Only conclusion (I) is follow.
 - ☒ 3. Neither conclusion (I) nor (II) is follow.
 - ☒ 4. Only conclusion (II) is follow.

Question ID : 264330155909

Option 1 ID : 264330611042

Option 2 ID : 264330611039

Option 3 ID : 264330611041

Option 4 ID : 264330611040

Status : Answered

Chosen Option : 1

Q.12 OE 13 is related to MC 17 in a certain way. In the same way, FL 16 is related to DJ 20. To which of the following is RD 15 related to following the same logic?

- Ans**
- ☒ 1. SF 18
 - ☒ 2. QE 18
 - ☒ 3. PB 19
 - ☒ 4. PC 19

Question ID : 264330151676

Option 1 ID : 264330594334

Option 2 ID : 264330594331

Option 3 ID : 264330594332

Option 4 ID : 264330594333

Status : Answered

Chosen Option : 3

Q.13 In the following number-pairs, the second number is obtained by applying certain mathematical operations to the first number. Select the set in which the numbers are related in the same way as are the numbers of the following sets.
(NOTE: Operations should be performed on the whole numbers, without breaking down the numbers into its constituent digits. E.g. 13 – Operations on 13 such as adding /deleting /multiplying etc. to 13 can be performed. Breaking down 13 into 1 and 3 and then performing mathematical operations on 1 and 3 is not allowed)
3 : 7
5 : 23

- Ans**
- ☒ 1. 6 : 34
 - ☒ 2. 8 : 64
 - ☒ 3. 9 : 80
 - ☒ 4. 4 : 18

Question ID : 264330154651

Option 1 ID : 264330606069

Option 2 ID : 264330606068

Option 3 ID : 264330606067

Option 4 ID : 264330606070

Status : Answered

Chosen Option : 1

Q.14 What should come in place of ? in the given series?

16 17 20 21 24 ?

Ans ☒ 1. 30

☒ 2. 25

☒ 3. 28

☒ 4. 27

Question ID : 264330151721

Option 1 ID : 264330594513

Option 2 ID : 264330594511

Option 3 ID : 264330594512

Option 4 ID : 264330594514

Status : Answered

Chosen Option : 2

Q.15 If 3rd Oct 2011 is Monday, then what will be the day of the week on 4th Nov 2021?

Ans ☒ 1. Friday

☒ 2. Tuesday

☒ 3. Thursday

☒ 4. Monday

Question ID : 264330154337

Option 1 ID : 264330604813

Option 2 ID : 264330604814

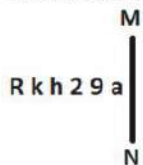
Option 3 ID : 264330604812

Option 4 ID : 264330604811

Status : Answered

Chosen Option : 2

Q.16 Select the correct mirror image of the given figure when the mirror is placed at MN as shown below.



Ans ☒ 1. R k h 2 9 a

☒ 2. R k h 2 9 a

☒ 3. R k h 2 9 a

☒ 4. R k h 2 9 a

Question ID : 264330151527

Option 1 ID : 264330593736

Option 2 ID : 264330593735

Option 3 ID : 264330593738

Option 4 ID : 264330593737

Status : Answered

Chosen Option : 2

Q.17 What should come in place of '?' in the given series?

13 34 76 160 328 ?

- Ans
- ☒ 1. 625
 - ☒ 2. 664
 - ☒ 3. 672
 - ☒ 4. 638

Question ID : 264330151466

Option 1 ID : 264330593491

Option 2 ID : 264330593493

Option 3 ID : 264330593494

Option 4 ID : 264330593492

Status : Answered

Chosen Option : 2

Q.18 In a certain code language, 'ENTER' is coded as 'FOTGT' and 'DICEY' is coded as 'EJCGA'. What is the code for 'CHILD' in the given code language?

- Ans
- ☒ 1. DIINF
 - ☒ 2. DHIME
 - ☒ 3. EJJNE
 - ☒ 4. EHIMF

Question ID : 264330155831

Option 1 ID : 264330610727

Option 2 ID : 264330610730

Option 3 ID : 264330610728

Option 4 ID : 264330610729

Status : Answered

Chosen Option : 1

Q.19 Six people, Kajal, Neetu, Lovey, Omar, Meenu and Jay are sitting in a straight line, facing north. Lovey sits 3rd from the left end. Neetu sits 2nd to the right of Lovey. Omar sits to the immediate right of Neetu. Meenu sits 2nd to the left of Omar. Kajal sits 2nd to the left of Meenu. Who sits to the immediate left of Lovey?

- Ans
- ☒ 1. Kajal
 - ☒ 2. Meenu
 - ☒ 3. Omar
 - ☒ 4. Jay

Question ID : 264330155662

Option 1 ID : 264330610051

Option 2 ID : 264330610053

Option 3 ID : 264330610052

Option 4 ID : 264330610054

Status : Answered

Chosen Option : 1

Q.20 Select the combination of letters that when sequentially placed in the blanks of the given series, will complete the series.

C _ D _ DD _ _ D C _ D

- Ans**
- ☒ 1. DDCCD
 - ☒ 2. DCCDD
 - ☒ 3. CCDCC
 - ☒ 4. DCDCD

Question ID : 264330151642

Option 1 ID : 264330594196

Option 2 ID : 264330594195

Option 3 ID : 264330594198

Option 4 ID : 264330594197

Status : Answered

Chosen Option : 2

Section : General Awareness

Q.1 Swami Dayanand Saraswati founded a reform organisation in 1875 that attempted to reform Hinduism. What was it called?

- Ans**
- ☒ 1. Arya Samaj
 - ☒ 2. Prarthna Samaj
 - ☒ 3. Satyashodhak Samaj
 - ☒ 4. Brahmo Samaj

Question ID : 264330161743

Option 1 ID : 264330634300

Option 2 ID : 264330634301

Option 3 ID : 264330634302

Option 4 ID : 264330634299

Status : Answered

Chosen Option : 1

Q.2 The Brihadeswara Temple at Tanjavur built by:

- Ans**
- ☒ 1. Rajaraja II
 - ☒ 2. Samudragupta
 - ☒ 3. Rajendra Chola
 - ☒ 4. Rajaraja I

Question ID : 264330160783

Option 1 ID : 264330630466

Option 2 ID : 264330630463

Option 3 ID : 264330630464

Option 4 ID : 264330630465

Status : Answered

Chosen Option : 4

Q.3 Which diseases result from a deficiency of Vitamin B due to its insufficient intake?

- Ans**
- ☒ 1. Colour blindness
 - ☒ 2. Rickets
 - ☒ 3. Beri Beri
 - ☒ 4. Scurvy

Question ID : 264330157809

Option 1 ID : 264330618595

Option 2 ID : 264330618596

Option 3 ID : 264330618598

Option 4 ID : 264330618597

Status : Answered

Chosen Option : 3

Q.4 What is the minimum voting age for the citizens of India?

- Ans**
- ☒ 1. 18 years
 - ☒ 2. 21 years
 - ☒ 3. 30 years
 - ☒ 4. 25 years

Question ID : 264330159915

Option 1 ID : 264330627007

Option 2 ID : 264330627008

Option 3 ID : 264330627010

Option 4 ID : 264330627009

Status : Answered

Chosen Option : 1

Q.5 Who among the following singers had a Guinness World Record for recording 28 songs in a single day? (As of December 2022.)

- Ans**
- ☒ 1. Sonu Nigam
 - ☒ 2. Udit Narayan
 - ☒ 3. Kumar Sanu
 - ☒ 4. Arijit Singh

Question ID : 264330155515

Option 1 ID : 264330609464

Option 2 ID : 264330609465

Option 3 ID : 264330609466

Option 4 ID : 264330609463

Status : Answered

Chosen Option : 3

Q.6 'Anandamath' is a famous _____ novel which was written by Bankim Chandra Chatterjee.

- Ans**
- ☒ 1. Gujarati
 - ☒ 2. Rajasthani
 - ☒ 3. Punjabi
 - ☒ 4. Bengali

Question ID : 264330155500

Option 1 ID : 264330609405

Option 2 ID : 264330609403

Option 3 ID : 264330609406

Option 4 ID : 264330609404

Status : Answered

Chosen Option : 4

Q.7 The four Nattuvanars namely Ponaiyah, Vadivelu, Sivanandam and Chinnaiya, who are renowned as Tanjaore Bandhu shaped up the modern day _____.

- Ans**
- ☒ 1. Bharatanatyam
 - ☒ 2. Kuchipudi
 - ☒ 3. Kodiattam
 - ☒ 4. Kathakali

Question ID : 264330160806

Option 1 ID : 264330630556

Option 2 ID : 264330630557

Option 3 ID : 264330630555

Option 4 ID : 264330630558

Status : Answered

Chosen Option : 1

Q.8 In February 2023, Uttar Pradesh government launched a/an _____ called Family ID-One Family One Identity.

- Ans**
- ☒ 1. Portal
 - ☒ 2. News letter
 - ☒ 3. WhatsApp Group
 - ☒ 4. Email Id

Question ID : 264330158328

Option 1 ID : 264330620673

Option 2 ID : 264330620674

Option 3 ID : 264330620671

Option 4 ID : 264330620672

Status : Answered

Chosen Option : 1

Q.9 Which of the following statements is best related to the 'pacific ring of fire'?

- Ans
- ☒ 1. Known for thermal power station
 - ☒ 2. Known for volcano and earthquakes
 - ☒ 3. Known for only glacial formations
 - ☒ 4. Known for tropical rainforests

Question ID : 264330157832

Option 1 ID : 264330618687

Option 2 ID : 264330618688

Option 3 ID : 264330618690

Option 4 ID : 264330618689

Status : Answered

Chosen Option : 2

Q.10 Why are intermediate goods NOT included in the calculation of national income?

- Ans
- ☒ 1. Including intermediate goods would result in double counting.
 - ☒ 2. Intermediate goods are not produced within the country's borders.
 - ☒ 3. Including intermediate goods would decrease the value of national income.
 - ☒ 4. Intermediate goods are not important for measuring economic activity.

Question ID : 264330157313

Option 1 ID : 264330616616

Option 2 ID : 264330616615

Option 3 ID : 264330616618

Option 4 ID : 264330616617

Status : Answered

Chosen Option : 1

Q.11 According to the Global Multidimensional Poverty Index (MPI) 2021, India's rank is _____ out of 109 countries.

- Ans
- ☒ 1. 66th
 - ☒ 2. 71st
 - ☒ 3. 59th
 - ☒ 4. 63rd

Question ID : 264330166018

Option 1 ID : 264330651149

Option 2 ID : 264330651150

Option 3 ID : 264330651147

Option 4 ID : 264330651148

Status : Not Answered

Chosen Option : --

Q.12 The tribal dancer and singer, Arjun Singh Dhurve from _____ has been conferred with ' Padma Shri' in the year 2022.

- Ans**
- ☒ 1. Karnataka
 - ☒ 2. Tamil Nadu
 - ☒ 3. Madhya Pradesh
 - ☒ 4. Andhra Pradesh

Question ID : 264330155530

Option 1 ID : 264330609523

Option 2 ID : 264330609524

Option 3 ID : 264330609526

Option 4 ID : 264330609525

Status : Not Answered

Chosen Option : --

Q.13 What is the main purpose of a bank statement?

- Ans**
- ☒ 1. To track income and expenses
 - ☒ 2. To transfer funds to another account
 - ☒ 3. To advertise new banking products
 - ☒ 4. To have locker facility in the bank

Question ID : 264330157305

Option 1 ID : 264330616583

Option 2 ID : 264330616586

Option 3 ID : 264330616584

Option 4 ID : 264330616585

Status : Answered

Chosen Option : 1

Q.14 The Konark Dance Festival (KDF) has been held at Konark since 1986 between _____ every year.

- Ans**
- ☒ 1. 1st and 5th October
 - ☒ 2. 1st and 5th August
 - ☒ 3. 1st and 5th January
 - ☒ 4. 1st and 5th December

Question ID : 264330160838

Option 1 ID : 264330630685

Option 2 ID : 264330630684

Option 3 ID : 264330630683

Option 4 ID : 264330630686

Status : Not Answered

Chosen Option : --

Q.15 Identify the southernmost range of the Himalaya from the following.

- Ans**
- ☒ 1. Shiwaliks Range
 - ☒ 2. Trans Himalaya Range
 - ☒ 3. Lesser Himalaya Range
 - ☒ 4. Greater Himalaya Range

Question ID : 264330161529

Option 1 ID : 264330633443

Option 2 ID : 264330633446

Option 3 ID : 264330633444

Option 4 ID : 264330633445

Status : Not Answered

Chosen Option : --

Q.16 राज्य के नीति निदेशक सिद्धांतों के बारे में निम्नलिखित में से कौन-सा कथन सही नहीं है?

- Ans
- ☒ 1. पुरुष, स्त्री और बच्चों के लिए उपर्युक्त रोजगार और कार्य का स्वच्छ वातवरण सुनिश्चित करना
 - ☒ 2. स्त्री और पुरुष दोनों के लिए आजीविका के पर्याप्त साधन उपलब्ध कराना
 - ☒ 3. केवल पुरुषों के लिए समान कार्य के लिए समान पारिश्रमिक सुनिश्चित करना
 - ☒ 4. कुछ हाथों में संपत्ति के संकेंद्रण को रोकने के लिए आर्थिक व्यवस्था को पुनर्गठित करना

Question ID : 264330162149

Option 1 ID : 264330635926

Option 2 ID : 264330635923

Option 3 ID : 264330635925

Option 4 ID : 264330635924

Status : Answered

Chosen Option : 3

Q.17 निम्नलिखित में से कौन-सी घटना 1919 में घटित हुई थी?

- Ans
- ☒ 1. चार्टर एक्ट का नवीनीकरण
 - ☒ 2. जनप्रतिनिधित्व अधिनियम पारित किया गया
 - ☒ 3. ठगी एवं डकैती दमन अधिनियम पारित किया गया
 - ☒ 4. रौलेट एक्ट के विरुद्ध सत्याग्रह

Question ID : 264330160877

Option 1 ID : 264330630839

Option 2 ID : 264330630842

Option 3 ID : 264330630841

Option 4 ID : 264330630840

Status : Answered

Chosen Option : 4

Q.18 The novel 'Train to Pakistan' was written by _____.

- Ans
- ☒ 1. Khushwant Singh
 - ☒ 2. Nawaz Sharif
 - ☒ 3. Zakir Hussain
 - ☒ 4. Imran Khan

Question ID : 264330160972

Option 1 ID : 264330631221

Option 2 ID : 264330631219

Option 3 ID : 264330631222

Option 4 ID : 264330631220

Status : Answered

Chosen Option : 1

Q.19 Popular Bollywood actor Kriti Sanon is a trained _____ dancer.

- Ans
- ☒ 1. Kuchipudi
 - ☒ 2. Kathak
 - ☒ 3. Odissi
 - ☒ 4. Bharatanatyam

Question ID : 264330159069

Option 1 ID : 264330623636

Option 2 ID : 264330623637

Option 3 ID : 264330623638

Option 4 ID : 264330623635

Status : Answered

Chosen Option : 4

Q.20 In which of the following cities was the final match of the 2022 Vijay Hazare Trophy held?

- Ans ☒ 1. Ahmedabad
☐ 2. Raipur
☐ 3. Lucknow
☐ 4. Ranchi

Question ID : 264330161156
Option 1 ID : 264330631957
Option 2 ID : 264330631955
Option 3 ID : 264330631958
Option 4 ID : 264330631956
Status : Not Answered
Chosen Option : --

Q.21 Who started the chemical revolution in the 18th century by naming oxygen and helping to organize chemical nomenclature?

- Ans ☐ 1. Dame Kathleen Lonsdale
☐ 2. Svante August Arrhenius
☐ 3. Joseph Priestley
☒ 4. Antoine-Laurent Lavoisier

Question ID : 264330161048
Option 1 ID : 264330631524
Option 2 ID : 264330631523
Option 3 ID : 264330631526
Option 4 ID : 264330631525
Status : Not Answered
Chosen Option : --

Q.22 Aman Sehrawat became the first Indian to win a gold medal in World Wrestling Championship in which category?

- Ans ☐ 1. U-15
☐ 2. U-20
☒ 3. U-23
☐ 4. U-25

Question ID : 264330158372
Option 1 ID : 264330620847
Option 2 ID : 264330620848
Option 3 ID : 264330620849
Option 4 ID : 264330620850
Status : Answered
Chosen Option : 1

Q.23 Independence Day is celebrated every year in Pakistan on _____.

- Ans ☐ 1. 30 January
☒ 2. 14 August
☐ 3. 31 December
☐ 4. 23 March

Question ID : 264330161565
Option 1 ID : 264330633588
Option 2 ID : 264330633587
Option 3 ID : 264330633589
Option 4 ID : 264330633590
Status : Answered
Chosen Option : 2

Q.24 Which of the following Indian musicians was called 'Mallika-e-Ghazal'?

- Ans** ☒ 1. Prabha Bharti
☒ 2. Begum Akhtar
☒ 3. Chitra Singh
☒ 4. Farida Khanum

Question ID : 264330161777

Option 1 ID : 264330634437

Option 2 ID : 264330634435

Option 3 ID : 264330634436

Option 4 ID : 264330634438

Status : **Answered**

Chosen Option : 2

Q.25 The word 'yorker' is related to which sport?

- Ans** ☒ 1. Kho Kho
☒ 2. Cricket
☒ 3. Basketball
☒ 4. Kabaddi

Question ID : 264330158243

Option 1 ID : 264330620333

Option 2 ID : 264330620334

Option 3 ID : 264330620331

Option 4 ID : 264330620332

Status : **Not Answered**

Chosen Option : --

Section : **English Language and Comprehension**

Q.1 Select the most appropriate option to fill in the blank.

I wish we had _____ come here.

- Ans** ☒ 1. right
☒ 2. clear
☒ 3. never
☒ 4. agreed

Question ID : 264330153495

Option 1 ID : 264330601495

Option 2 ID : 264330601496

Option 3 ID : 264330601498

Option 4 ID : 264330601497

Status : **Answered**

Chosen Option : 3

Q.2 Select the most appropriate **ANTONYM** of the given word.
Carnal

- Ans** ☒ 1. Material
☒ 2. Spiritual
☒ 3. Temporal
☒ 4. Somatic

Question ID : 264330153577

Option 1 ID : 264330601805

Option 2 ID : 264330601806

Option 3 ID : 264330601803

Option 4 ID : 264330601804

Status : Answered

Chosen Option : 1

Q.3 Select the option that can be used as a one-word substitute for the given group of words.
Fail to function normally

- Ans** ☒ 1. Maltreat
☒ 2. Mangle
☒ 3. Manipulate
☒ 4. Malfunction

Question ID : 264330151908

Option 1 ID : 264330595247

Option 2 ID : 264330595248

Option 3 ID : 264330595249

Option 4 ID : 264330595250

Status : Answered

Chosen Option : 4

Q.4 Select the most appropriate meaning of the given phrase.

All of a sudden

- Ans** ☒ 1. Intentionally
☒ 2. Quickly and unexpectedly
☒ 3. Quickly and Expectedly
☒ 4. Accidentally

Question ID : 264330155394

Option 1 ID : 264330608987

Option 2 ID : 264330608989

Option 3 ID : 264330608988

Option 4 ID : 264330608990

Status : Answered

Chosen Option : 2

Q.5 The following sentence has been split into four segments. Identify the segment that contains a grammatical error.

My daughter was / invited to lunch / hosted by the Governor / at his residence.

- Ans ☒ 1. at his residence
☒ 2. invited to lunch
☒ 3. hosted by the Governor
☒ 4. My daughter was

Question ID : 264330155412
Option 1 ID : 264330609058
Option 2 ID : 264330609056
Option 3 ID : 264330609057
Option 4 ID : 264330609055
Status : Answered
Chosen Option : 2

Q.6 Select the INCORRECTLY spelt word.

- Ans ☒ 1. Resist
☒ 2. Rectifie
☒ 3. Recruit
☒ 4. Repulse

Question ID : 264330151924
Option 1 ID : 264330595313
Option 2 ID : 264330595311
Option 3 ID : 264330595312
Option 4 ID : 264330595314
Status : Answered
Chosen Option : 2

Q.7 Select the option that rectifies the spelling of the underlined word in the given sentence.

The maintenance department did a fabulous job.

- Ans ☒ 1. mainteanance
☒ 2. maintenance
☒ 3. maintenannce
☒ 4. meintenance

Question ID : 264330153155
Option 1 ID : 264330600182
Option 2 ID : 264330600179
Option 3 ID : 264330600180
Option 4 ID : 264330600181
Status : Answered
Chosen Option : 2

Q.8 Select the most appropriate synonym of the bracketed word in the following sentence to fill in the blank.

The novel's intricate plot and rich character development kept readers _____ (committed) from the beginning to the end.

Ans ☒ 1. engaged

☒ 2. secluded

☒ 3. detached

☒ 4. dismantled

Question ID : 264330152658

Option 1 ID : 264330598236

Option 2 ID : 264330598238

Option 3 ID : 264330598237

Option 4 ID : 264330598235

Status : Answered

Chosen Option : 1

Q.9 Select the most appropriate meaning of the underlined idiom.

These things are very hard to swallow.

Ans ☒ 1. difficult to resist

☒ 2. difficult to speak

☒ 3. difficult to believe

☒ 4. difficult to eat

Question ID : 264330143186

Option 1 ID : 264330561022

Option 2 ID : 264330561021

Option 3 ID : 264330561020

Option 4 ID : 264330561019

Status : Answered

Chosen Option : 3

Q.10 Select the most appropriate idiom to fill in the blank.

The decision to go on a trip after my vacations was the _____.

Ans ☒ 1. ice on the cake

☒ 2. icing on the cake

☒ 3. apple on the cake

☒ 4. icing on the brownie

Question ID : 264330153078

Option 1 ID : 264330599876

Option 2 ID : 264330599877

Option 3 ID : 264330599878

Option 4 ID : 264330599875

Status : Answered

Chosen Option : 2

Q.11 The following sentence has been split into four segments. Identify the segment that contains a grammatical error.

The new software / consists from / several features / and tools.

- Ans** ☒ 1. consists from
 ☐ 2. several features
 ☐ 3. and tools
 ☐ 4. The new software

Question ID : 264330155430

Option 1 ID : 264330609128

Option 2 ID : 264330609129

Option 3 ID : 264330609130

Option 4 ID : 264330609127

Status : **Answered**

Chosen Option : 1

Q.12 Select the most appropriate idiom to fill in the blank.
It's easy to say that you'll start exercising every day, but it is _____.

- Ans** ☐ 1. like fish out of water
 ☒ 2. easier said than done
 ☐ 3. crying wolf
 ☐ 4. going the extra mile

Question ID : 264330151887

Option 1 ID : 264330595168

Option 2 ID : 264330595167

Option 3 ID : 264330595170

Option 4 ID : 264330595169

Status : **Answered**

Chosen Option : 2

Q.13 Select the INCORRECTLY spelt word.

- Ans** ☒ 1. Paralycis
 ☐ 2. Lyricist
 ☐ 3. Indigestion
 ☐ 4. Patron

Question ID : 264330151927

Option 1 ID : 264330595324

Option 2 ID : 264330595325

Option 3 ID : 264330595326

Option 4 ID : 264330595323

Status : **Answered**

Chosen Option : 1

Q.14 Select the most appropriate **ANTONYM** of the word given in brackets to fill in the blank.
Uncle Joe is _____ (reputable) for spending 10 years of his youth in prison due to armed robbery.

- Ans
- ☒ 1. mournful
 - ☒ 2. anxious
 - ☒ 3. well-known
 - ☒ 4. notorious

Question ID : 264330152696
Option 1 ID : 264330598388
Option 2 ID : 264330598389
Option 3 ID : 264330598390
Option 4 ID : 264330598387
Status : Answered
Chosen Option : 4

Q.15 Parts of the following sentence have been given as options. Select the option that contains an error.
If you work hard, you secure good marks.

- Ans
- ☒ 1. good marks
 - ☒ 2. If you
 - ☒ 3. work hard
 - ☒ 4. you secure

Question ID : 264330152819
Option 1 ID : 264330598870
Option 2 ID : 264330598867
Option 3 ID : 264330598868
Option 4 ID : 264330598869
Status : Answered
Chosen Option : 4

Q.16 Select the option that can be used as a one-word substitute for the given group of words.

A person who is skilled in making maps

- Ans
- ☒ 1. Calligrapher
 - ☒ 2. Curator
 - ☒ 3. Cacographer
 - ☒ 4. Cartographer

Question ID : 264330153342
Option 1 ID : 264330600919
Option 2 ID : 264330600920
Option 3 ID : 264330600922
Option 4 ID : 264330600921
Status : Answered
Chosen Option : 4

Q.17 Select the option that can be used as a one-word substitute for the underlined group of words.

Sita loves her glass container in which she has many fish.

- Ans
- ☒ 1. aquarium
 - ☐ 2. cannister
 - ☐ 3. planetarium
 - ☐ 4. museum

Question ID : 264330153514

Option 1 ID : 264330601568

Option 2 ID : 264330601570

Option 3 ID : 264330601569

Option 4 ID : 264330601567

Status : Answered

Chosen Option : 1

Q.18 Select the most appropriate option that can rectify the underlined segment in the given sentence. If there is no need to rectify it, select 'no rectification needed'.

His claim to be the smartly kid in the school was a bit hyperbole!

- Ans
- ☐ 1. no rectification needed
 - ☒ 2. smartest
 - ☐ 3. smarter
 - ☐ 4. smart

Question ID : 264330153464

Option 1 ID : 264330601374

Option 2 ID : 264330601372

Option 3 ID : 264330601373

Option 4 ID : 264330601371

Status : Answered

Chosen Option : 2

Q.19 Select the option that can be used as a one-word substitute for the given group of words.

Easily set on fire

- Ans
- ☐ 1. Innocuous
 - ☐ 2. Ingrained
 - ☒ 3. Inflammable
 - ☐ 4. Inimical

Question ID : 264330151911

Option 1 ID : 264330595262

Option 2 ID : 264330595260

Option 3 ID : 264330595259

Option 4 ID : 264330595261

Status : Answered

Chosen Option : 3

Q.20 The following sentence has been split into four segments. Identify the segment that contains an error.

She has / bought / a car / two years ago.

Ans ☒ 1. She has

☐ 2. bought

☐ 3. two years ago

☐ 4. a car

Question ID : 264330155321

Option 1 ID : 264330608723

Option 2 ID : 264330608724

Option 3 ID : 264330608726

Option 4 ID : 264330608725

Status : Answered

Chosen Option : 1

Comprehension:

In the following passage, some words have been deleted. Read the passage carefully and select the most appropriate option to fill in each blank.

Students put their heart and soul into studies while (1)_____ for examinations. They prepare the syllabus by giving many revisions, making important points on flash cards, preparing notes throughout the year. They read reference books in order to score good marks in the examination. This is the demanding (2)_____ of all the students who are appearing in the examinations. But, most students feel tensed on the day before an examination. Everyone is in a state of (3)_____ as to what questions would be asked in the paper and whether they could write their answers properly to get good marks. Such overthinking is the cause of (4)_____ which definitely affects their performance. They should revise the subject regularly and should not keep their doubts pending. This will not create a (5)_____ of backlog and they will get sufficient time to resolve their problem.

SubQuestion No : 21

Q.21 Select the most appropriate option to fill in blank number 1.

Ans ☐ 1. calculating

☐ 2. guiding

☐ 3. producing

☒ 4. preparing

Question ID : 264330152914

Option 1 ID : 264330599235

Option 2 ID : 264330599238

Option 3 ID : 264330599237

Option 4 ID : 264330599236

Status : Answered

Chosen Option : 4

Comprehension:

In the following passage, some words have been deleted. Read the passage carefully and select the most appropriate option to fill in each blank.

Students put their heart and soul into studies while (1)_____ for examinations. They prepare the syllabus by giving many revisions, making important points on flash cards, preparing notes throughout the year. They read reference books in order to score good marks in the examination. This is the demanding (2)_____ of all the students who are appearing in the examinations. But, most students feel tensed on the day before an examination.

Everyone is in a state of (3)_____ as to what questions would be asked in the paper and whether they could write their answers properly to get good marks. Such overthinking is the cause of (4)_____ which definitely affects their performance. They should revise the subject regularly and should not keep their doubts pending. This will not create a (5)_____ of backlog and they will get sufficient time to resolve their problem.

SubQuestion No : 22

Q.22 Select the most appropriate option to fill in blank number 2.

Ans ☒ 1. principle

☒ 2. method

☒ 3. routine

☒ 4. habit

Question ID : 264330152915

Option 1 ID : 264330599242

Option 2 ID : 264330599239

Option 3 ID : 264330599241

Option 4 ID : 264330599240

Status : Answered

Chosen Option : 3

Comprehension:

In the following passage, some words have been deleted. Read the passage carefully and select the most appropriate option to fill in each blank.

Students put their heart and soul into studies while (1)_____ for examinations. They prepare the syllabus by giving many revisions, making important points on flash cards, preparing notes throughout the year. They read reference books in order to score good marks in the examination. This is the demanding (2)_____ of all the students who are appearing in the examinations. But, most students feel tensed on the day before an examination.

Everyone is in a state of (3)_____ as to what questions would be asked in the paper and whether they could write their answers properly to get good marks. Such overthinking is the cause of (4)_____ which definitely affects their performance. They should revise the subject regularly and should not keep their doubts pending. This will not create a (5)_____ of backlog and they will get sufficient time to resolve their problem.

SubQuestion No : 23

Q.23 Select the most appropriate option to fill in blank number 3.

Ans ☒ 1. confidence

☒ 2. hesitation

☒ 3. assurance

☒ 4. uncertainty

Question ID : 264330152916

Option 1 ID : 264330599244

Option 2 ID : 264330599245

Option 3 ID : 264330599246

Option 4 ID : 264330599243

Status : Answered

Chosen Option : 2

Comprehension:

In the following passage, some words have been deleted. Read the passage carefully and select the most appropriate option to fill in each blank.

Students put their heart and soul into studies while (1)_____ for examinations. They prepare the syllabus by giving many revisions, making important points on flash cards, preparing notes throughout the year. They read reference books in order to score good marks in the examination. This is the demanding (2)_____ of all the students who are appearing in the examinations. But, most students feel tensed on the day before an examination. Everyone is in a state of (3)_____ as to what questions would be asked in the paper and whether they could write their answers properly to get good marks. Such overthinking is the cause of (4)_____ which definitely affects their performance. They should revise the subject regularly and should not keep their doubts pending. This will not create a (5)_____ of backlog and they will get sufficient time to resolve their problem.

SubQuestion No : 24

Q.24 Select the most appropriate option to fill in blank number 4.

- Ans ☒ 1. anxiety
☒ 2. agitation
☒ 3. peace
☒ 4. comfort

Question ID : 264330152917
Option 1 ID : 264330599248
Option 2 ID : 264330599250
Option 3 ID : 264330599247
Option 4 ID : 264330599249

Status : **Answered**

Chosen Option : 1

Comprehension:

In the following passage, some words have been deleted. Read the passage carefully and select the most appropriate option to fill in each blank.

Students put their heart and soul into studies while (1)_____ for examinations. They prepare the syllabus by giving many revisions, making important points on flash cards, preparing notes throughout the year. They read reference books in order to score good marks in the examination. This is the demanding (2)_____ of all the students who are appearing in the examinations. But, most students feel tensed on the day before an examination. Everyone is in a state of (3)_____ as to what questions would be asked in the paper and whether they could write their answers properly to get good marks. Such overthinking is the cause of (4)_____ which definitely affects their performance. They should revise the subject regularly and should not keep their doubts pending. This will not create a (5)_____ of backlog and they will get sufficient time to resolve their problem.

SubQuestion No : 25

Q.25 Select the most appropriate option to fill in blank number 5.

- Ans ☒ 1. burden
☒ 2. mass
☒ 3. weight
☒ 4. power

Question ID : 264330152918
Option 1 ID : 264330599254
Option 2 ID : 264330599252
Option 3 ID : 264330599253
Option 4 ID : 264330599251

Status : **Answered**

Chosen Option : 1