

Combined Graduate Level Examination-2019 (Tier-I)

Roll Number	
Candidate Name	
Venue Name	
Exam Date	06/03/2020
Exam Time	4:00 PM - 5:00 PM
Subject	CGLE Tier I

Section : General Intelligence and Reasoning

Q.1 Select the option in which the numbers are related in the same way as are the numbers in the given set.

(14, 18, 277)

- Ans**
- 1. (20, 22, 521)
 - 2. (24, 20, 576)
 - 3. (18, 16, 485)
 - 4. (12, 32, 320)

Question ID : 816161441

Status : Not Answered

Chosen Option : --

Q.2 Read the given statements and conclusions carefully. Assuming that the information given in the statements is true, even if it appears to be at variance with commonly known facts, decide which of the given conclusions logically follow from the statements.

Statements:

- 1. All helmets are objects.
- 2. Some helmets are vehicles.

Conclusions:

- I. Some objects are helmets.
- II. Some vehicles are helmets.
- III. Some vehicles are objects.

- Ans**
- 1. Only conclusions I and II follow.
 - 2. Only conclusions II and III follow.
 - 3. Only conclusions I and III follow.
 - 4. All conclusions I, II and III follow.

Question ID : 816161437

Status : Answered

Chosen Option : 4

Q.3 Select the correct mirror image of the given figure when a mirror is placed on the right side of the figure.



Ans

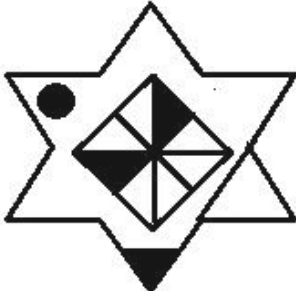
✓ 1.



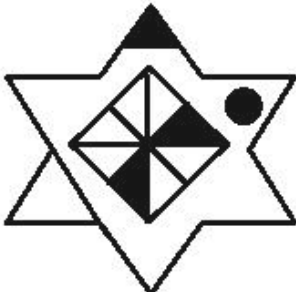
✗ 2.



✗ 3.



✗ 4.



Question ID : 816161449

Status : Answered

Chosen Option : 1

Q.4 $A + B$ means 'A is the husband of B';

$A - B$ means 'A is the wife of B';

$A \times B$ means 'A is the mother of B';

$A \div B$ means 'A is the son of B'.

If, $W \times R \times J - S \div V + L$, then which of the following statements is NOT correct?

- Ans**
- 1. V is the father-in-law of J.
 - 2. L is the mother-in-law of S.
 - 3. W is the maternal grandmother of J.
 - 4. L is the wife of V.

Question ID : 816161436

Status : Answered

Chosen Option : 2

Q.5 Four words have been given, out of which three are alike in some manner and one is different. Select the odd word.


- Ans**
- 1. Television
 - 2. Geyser
 - 3. Computer
 - 4. Machine

Question ID : 816161430

Status : Answered


Chosen Option : 4

Q.6 Select the figure that can replace the question mark (?) in the following series.




Ans


✗ 1.




✓ 2.



✗ 3.



✗ 4.



Question ID : 816161445

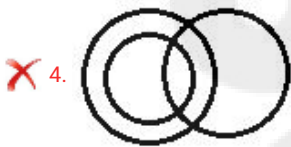
Status : Answered

Chosen Option : 2

Q.7 Which of the following Venn diagrams best represents the relationship between the following classes?

Spices, Cumin Seeds, Food

Ans



Question ID : 816161451

Status : Answered

Chosen Option : 3

Q.8 Select the letter will replace the question mark (?) in the following series.

K, Q, V, ?, C, E, F

Ans

1. Z

2. Y

3. X

4. A

Question ID : 816161427

Status : Answered

Chosen Option : 1

Q.9 Which two numbers should be interchanged to make the given equation correct?

$$28 + 49 - 35 \div 7 \times 4 = 68$$

Ans

1. 49 and 35

2. 28 and 35

3. 4 and 28

4. 28 and 49

Question ID : 816161443

Status : Answered

Chosen Option : 2

Q.10 Select the option in which the given figure X is embedded (rotation is not allowed).

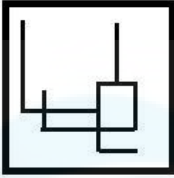
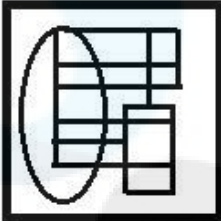


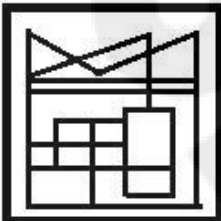
Figure X

Ans

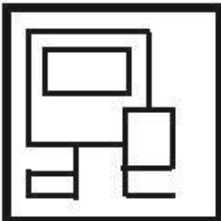
✗ 1.



✓ 2.



✗ 3.



✗ 4.



Question ID : 816161448

Status : Answered

Chosen Option : 2

Q.11 Four letter-clusters have been given, out of which three are alike in some manner and one is different. Select the odd letter-cluster.

Ans

✗ 1. CXE

✗ 2. UFW

✓ 3. KPT

✗ 4. BYD

Question ID : 816161429

Status : Answered

Chosen Option : 3

Q.12 Select the option that is related to the third number in the same way as the second number is related to the first number.

8 : 576 :: 4 : ?

- Ans
- 1. 120
 - 2. 70
 - 3. 80
 - 4. 90

Question ID : 816161439
Status : Answered
Chosen Option : 3

Q.13 Select the option in which the words share the same relationship as that shared by the given pair of words.

Ear : Tinnitus

- Ans
- 1. Skin : Acne
 - 2. Eye : Ophthalmologist
 - 3. Nose : Nerve
 - 4. Joints : Muscles

Question ID : 816161432
Status : Answered
Chosen Option : 4

Q.14 'आकार' का 'मध्यम' से वही संबंध है, जो 'आकृति' का '_____ ' से है।

- Ans
- 1. वस्तु
 - 2. अंडाकार
 - 3. रंग
 - 4. कोना

Question ID : 816161431
Status : Answered
Chosen Option : 2

Q.15 How many triangles are there in the given figure?



- Ans
- 1. 20
 - 2. 22
 - 3. 24
 - 4. 23

Question ID : 816161446
Status : Answered
Chosen Option : 3

Q.16 Arrange the following words in a logical and meaningful order.

1. Class
2. Admission
3. Result
4. Examination
5. Marking

- Ans
- 1. 5, 3, 4, 1, 2
 - 2. 2, 1, 4, 5, 3
 - 3. 3, 4, 2, 1, 5
 - 4. 2, 1, 5, 3, 4

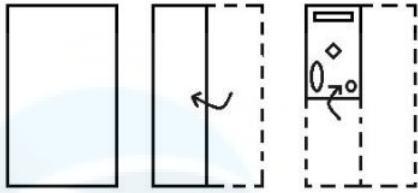
Question ID : 816161428
Status : Answered
Chosen Option : 2

Q.17 Among 160 players in a tournament, 57 did not participate in any of the three games, i.e. Cricket, Hockey and Badminton. A total of 37 players participated in only one game, 10 players participated in both Cricket and Hockey but not in Badminton, 9 players participated in both Hockey and Badminton but not in Cricket, and 13 players participated in both Cricket and Badminton but not in Hockey. How many students participated in all the three games?

- Ans
- 1. 34
 - 2. 32
 - 3. 38
 - 4. 30

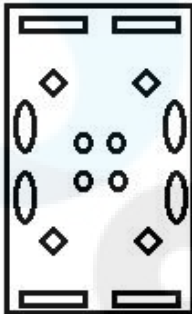
Question ID : 816161444
Status : Not Answered
Chosen Option : --

Q.18 The sequence of folding a piece of paper and the manner in which the folded paper has been cut is shown in the following figures. How would this paper look when unfolded?

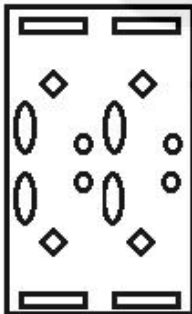


Ans

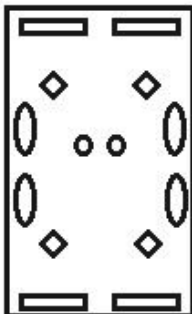
✓ 1.



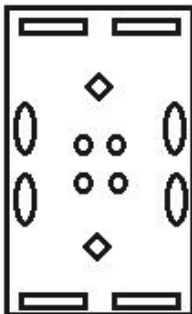
✗ 2.



✗ 3.



✗ 4.



Question ID : 816161450

Status : Answered

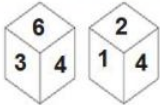
Chosen Option : 1

Q.19 In a certain code language, 'BLINK' is coded as '78' and 'PURSE' is coded as '54'. How will 'FIRST' be coded as in that language?

- Ans
- 1. 71
 - 2. 76
 - 3. 54
 - 4. 64

Question ID : 816161434
Status : Not Answered
Chosen Option : --

Q.20 Two different positions of the same dice are shown, the six faces of which are numbered from 1 to 6. Select the number that will be on the face opposite to the one having '5'.



- Ans
- 1. 3
 - 2. 2
 - 3. 4
 - 4. 6

Question ID : 816161447
Status : Answered
Chosen Option : 3

Q.21 Four number-pairs have been given, out of which three are alike in some manner and one is different. Select the number-pair that is different from the rest.

- Ans
- 1. 85245 : 24
 - 2. 26584 : 25
 - 3. 41263 : 18
 - 4. 77052 : 21

Question ID : 816161440
Status : Answered
Chosen Option : 3

Q.22 Select the number that can replace the question mark (?) in the following series.

58, 73, 99, 138, 193, ?, 368

- Ans
- 1. 329
 - 2. 268
 - 3. 312
 - 4. 260

Question ID : 816161438
Status : Not Answered
Chosen Option : --

Q.23 In a certain code language, 'NECTAR' is written as 'DFOSBU'. How will 'CARPET' be written as in that language?

- Ans**
- 1. SBDUFQ
 - 2. BDSSUG
 - 3. DBSQGR
 - 4. SBDVFR

Question ID : 816161433
Status : Not Answered
Chosen Option : --

Q.24 Study the given pattern carefully and select the number that can replace the question mark (?) in it.

50	48	30
56	32	40
350	192	?

- Ans**
- 1. 150
 - 2. 180
 - 3. 145
 - 4. 140

Question ID : 816161442
Status : Not Answered
Chosen Option : --

Q.25 Select the letter-cluster that can replace the question mark (?) in the following series.

DYKM, GZIN, JAGO, MBEP, ?

- Ans**
- 1. QCCQ
 - 2. PCDR
 - 3. PCCQ
 - 4. PDDQ

Question ID : 816161435
Status : Answered
Chosen Option : 3

Q.1 In which of the following Indian airports will the Wings India 2020, international exhibition and conference on the civil aviation sector, be held?

- Ans
- 1. Chaudhary Charan Singh Airport
 - 2. Begumpet Airport
 - 3. Bagdogra Airport
 - 4. Chennai International Airport

Question ID : 816161476

Status : **Not Attempted and Marked For Review**

Chosen Option : --

Q.2 Who was the Governor General of Bengal during the 3rd Anglo-Mysore war?

- Ans
- 1. Warren Hastings
 - 2. John Macpherson
 - 3. 2nd Earl Cornwallis
 - 4. John Shore

Question ID : 816161465

Status : **Answered**

Chosen Option : 1

Q.3 Who among the following first translated the Bhagvad Gita in to English?

- Ans
- 1. Sir Alexander Cunningham
 - 2. William Jones
 - 3. James Prinsep
 - 4. Charles Wilkins

Question ID : 816161467

Status : **Answered**

Chosen Option : 4

Q.4 Which of the following states topped among all the states with the highest number of fire alerts according to a 2019 report by the Forest Survey of India?

- Ans
- 1. Madhya Pradesh
 - 2. Arunachal Pradesh
 - 3. Odisha
 - 4. Mizoram

Question ID : 816161461

Status : **Not Answered**

Chosen Option : --

Q.5 Which of the following has the lowest melting point?

- Ans
- 1. Lead
 - 2. Zinc
 - 3. Silver
 - 4. Tin

Question ID : 816161459
Status : **Marked For Review**
Chosen Option : 1

Q.6 Who among the following scientists invented Kevlar?

- Ans
- 1. Marry Anderson
 - 2. George Eastman
 - 3. Stephanie Louise Kwolek
 - 4. Steve Wozniak

Question ID : 816161460
Status : **Not Answered**
Chosen Option : --

Q.7 Which of the following is used to remove the green colour from glass?

- Ans
- 1. Silicon dioxide
 - 2. Titanium dioxide
 - 3. Sulphur dioxide
 - 4. Manganese dioxide

Question ID : 816161458
Status : **Not Answered**
Chosen Option : --

Q.8 How many types of isotopes does Scandium have?

- Ans
- 1. 7
 - 2. 10
 - 3. 9
 - 4. 13

Question ID : 816161456
Status : **Not Answered**
Chosen Option : --

Q.9 In which year was the Hindustan Socialist Republican Association (HSRA) founded?

- Ans
- 1. 1929
 - 2. 1928
 - 3. 1930
 - 4. 1926

www.exammix.com

Question ID : 816161464
Status : Answered
Chosen Option : 2

Q.10 Which of the following railway stations has been certified by FSSAI as the country's first 'Eat Right Station'?

- Ans
- 1. Mumbai Central
 - 2. Allahabad
 - 3. Jabalpur
 - 4. Jaipur

Question ID : 816161475
Status : Answered
Chosen Option : 1

Q.11 Who among the following was NOT a minister of Cabinet Mission Plan, 1946?

- Ans
- 1. Sir Pethick Lawrence
 - 2. Lord Wavell
 - 3. Sir Stafford Cripps
 - 4. Alexander

Question ID : 816161466
Status : Answered
Chosen Option : 2

Q.12 Which of the following Indian movies was nominated for the 92nd Oscar Awards?

- Ans
- 1. Gully Boy
 - 2. The Surgical Strike
 - 3. War
 - 4. Mission Mangal

Question ID : 816161468
Status : Answered
Chosen Option : 1

Q.13 What was National Highway 66 (NH 66) previously known as?

- Ans
- 1. NH8
 - 2. NH5
 - 3. NH2
 - 4. NH 17

Question ID : 816161462
Status : Not Answered
Chosen Option : --

Q.14 According to India State of Forest Report 2019, how much of the total geographical area of the country is covered by forests and trees?

- Ans
- 1. 21.30%
 - 2. 34.56%
 - 3. 24.56%
 - 4. 42.56%

Question ID : 816161463
Status : Answered
Chosen Option : 3

Q.15 What is the atomic mass of Zirconium?

- Ans
- 1. 89.22
 - 2. 90.22
 - 3. 91.22
 - 4. 88.22

Question ID : 816161457
Status : Not Answered
Chosen Option : --

Q.16 In which of the following states did Khadi and Village Industries Commission (KVIC) open its first Silk Processing Plant?

- Ans
- 1. Gujarat
 - 2. Haryana
 - 3. Goa
 - 4. Madhya Pradesh

Question ID : 816161454
Status : Answered
Chosen Option : 1

Q.17 Who is the author of the book 'Dreams From My Father'?

- Ans
- 1. Olivia Laing
 - 2. Charles Darwin
 - 3. Barack Obama
 - 4. Navin Chawla

Question ID : 816161469
Status : Not Answered
Chosen Option : --

Q.18 Who among the following is the head of the standing committee on economic statistics set up by Ministry of Statistics and Programme Implementation (MOSPI)?

- Ans
- 1. Krishnamurthy Subramanian
 - 2. Manmohan Singh
 - 3. Pronab Sen
 - 4. Raghuram Rajan

Question ID : 816161455
Status : Not Answered
Chosen Option : --

Q.19 Which player of the Indian Women's Hockey team has been nominated for the 'World Games Athlete of the Year' Award, 2019 by the International Hockey Federation (FIH)?

- Ans
- 1. Reena Khokhar
 - 2. Rajani Etimarpu
 - 3. Bichu Devi Kharibam
 - 4. Rani Rampal

Question ID : 816161472
Status : Answered
Chosen Option : 4

Q.20 In which of the following Indian states is the Lai Haraoba festival celebrated?

- Ans
- 1. Karnataka
 - 2. Goa
 - 3. Kerala
 - 4. Manipur

Question ID : 816161453
Status : Answered
Chosen Option : 4

Q.21 In which of the following temples is the Ambubasi Fair celebrated every year?

- Ans
- 1. Jagnanath temple
 - 2. Kamakhya temple
 - 3. Kashi Vishwanath temple
 - 4. Kedarnath temple

Question ID : 816161452

Status : **Not Attempted and
Marked For Review**

Chosen Option : --

Q.22 Which of the following Articles is related to the Ancillary powers of Supreme Court?

- Ans
- 1. Article 143
 - 2. Article 140
 - 3. Article 138
 - 4. Article 150

Question ID : 816161470

Status : **Marked For Review**

Chosen Option : 1

Q.23 Which of the following countries had the highest number of new born babies on first day of 2020?

- Ans
- 1. India
 - 2. China
 - 3. Pakistan
 - 4. USA

Question ID : 816161474

Status : **Not Attempted and
Marked For Review**

Chosen Option : --

Q.24 In which of the following years were two additional Commissioners appointed to the Election commission of India for the first time?

- Ans
- 1. 1989
 - 2. 1998
 - 3. 1991
 - 4. 1990

Question ID : 816161471

Status : **Not Answered**

Chosen Option : --

Q.25 Which of the following players of the Indian cricket team laid the foundation of the Cricket Stadium and Training Centre at 'Heartfulness Institute's' headquarters in Hyderabad?

- Ans
- 1. Yuvraj Singh
 - 2. Virat Kohli
 - 3. Rohit Sharma
 - 4. Sikhar Dhawan

Question ID : 816161473
Status : Answered
Chosen Option : 3

Section : Quantitative Aptitude

Q.1 The average of 60 student's results is 38. If the average of the first 22 students is 36, and that of the last 32 students is 32, then the average result of the remaining students is:

- Ans
- 1. 77.33
 - 2. 65.30
 - 3. 81.9
 - 4. 52.12

Question ID : 816161479
Status : Answered
Chosen Option : 1

Q.2 The rate of simple interest on a sum of money is 5% p.a. for the first 4 years, 8% p.a. for the next 3 years and 10% p.a. for the period beyond 7 years. If the simple interest accrued by the sum over a period of 10 years is ₹1,850, then the sum is:

- Ans
- 1. ₹1,500
 - 2. ₹2,750
 - 3. ₹1,650
 - 4. ₹2,500

Question ID : 816161484
Status : Answered
Chosen Option : 4

Q.3 A, B and C can individually complete a task in 20 days, 16 days and 30 days, respectively. If A and B started working on the task, and they worked for 4 days and left, then the number of days required by C to finish the remaining task is:

- Ans
- 1. $16\frac{1}{2}$ days
 - 2. $12\frac{1}{2}$ days
 - 3. 13 days
 - 4. 10 days

Question ID : 816161485
Status : Answered
Chosen Option : 1

Q.4 A shopkeeper fixes the price of an article in such a way that after allowing 32% discount, he wants a gain of 14%. If the marked price is ₹342, then the cost price of the article is:

- Ans**
- 1. ₹204
 - 2. ₹218
 - 3. ₹212
 - 4. ₹196

Question ID : 816161480
Status : Answered
Chosen Option : 1

Q.5 The following table gives the details of Five commodities A, B, C, D and E with quantity required and their costs for a family in a month. Study the table and answer the questions that follow.

Commodity	Quantity required/month (in kg)	Rate/kg in ₹	
		Year 2016	Year 2019
A	15	₹60	₹80
B	20	₹50	₹60
C	12	₹35	₹40
D	40	₹75	₹85
E	8	₹64	₹72

The ratio of the total amount spent on A and D commodities in the year 2019 is:

- Ans**
- 1. 3 : 8
 - 2. 15 : 17
 - 3. 6 : 17
 - 4. 1 : 1

Question ID : 816161501
Status : Answered
Chosen Option : 3

Q.6 In a triangle ABC, DE is parallel to BC; AD = a, DB = a + 4, AE = 2a + 3, EC = 7a. What is the value of 'a' if a > 0 ?

- Ans**
- 1. 3
 - 2. 5
 - 3. 6
 - 4. 4

Question ID : 816161494
Status : Answered
Chosen Option : 1

Q.7 The following table gives the details of Five commodities A, B, C, D and E with quantity required and their costs for a family in a month. Study the table and answer the questions that follow.

Commodity	Quantity required/month (in kg)	Rate/kg in ₹	
		Year 2016	Year 2019
A	15	₹60	₹80
B	20	₹50	₹60
C	12	₹35	₹40
D	40	₹75	₹85
E	8	₹64	₹72

The percentage of increase(per kg) in the rate of commodity D from 2016 to 2019 is:

- Ans**
- 1. 38.24%
 - 2. 5%
 - 3. 13.33%
 - 4. 22.17%

Question ID : **816161499**
 Status : **Answered**
 Chosen Option : **3**

Q.8 Two circles of radii 8 cm and 6 cm touch each other externally. The length of the direct common tangent is:

- Ans**
- 1. 13.86
 - 2. 20
 - 3. 24
 - 4. 10.12

Question ID : **816161491**
 Status : **Answered**
 Chosen Option : **1**

Q.9 The following table gives the details of Five commodities A, B, C, D and E with quantity required and their costs for a family in a month. Study the table and answer the questions that follow.

Commodity	Quantity required/month (in kg)	Rate/kg in ₹	
		Year 2016	Year 2019
A	15	₹60	₹80
B	20	₹50	₹60
C	12	₹35	₹40
D	40	₹75	₹85
E	8	₹64	₹72

The amount spent extra on commodities B and C in the year 2019 as compared to that in the year 2016, is:

- Ans**
- 1. ₹260
 - 2. ₹192
 - 3. ₹248
 - 4. ₹110

Question ID : **816161500**
 Status : **Answered**
 Chosen Option : **1**

Q.10 An article was sold at a gain of 16%. If it had been sold for ₹36 more, the gain would have been 20%. The cost price of the article is

- Ans**
- 1. ₹862
 - 2. ₹900
 - 3. ₹720
 - 4. ₹810

Question ID : 816161482
Status : Answered
Chosen Option : 2

Q.11 The sum of the squares of 3 natural numbers is 1029, and they are in the proportion 1 : 2 : 4. The difference between greatest number and smallest number is:

- Ans**
- 1. 21
 - 2. 18
 - 3. 15
 - 4. 31

Question ID : 816161483
Status : Answered
Chosen Option : 1

Q.12 25 litres of a mixture contains 30% of spirit and rest water. If 5 litres of water be mixed in it, the percentage of spirit in the new mixture is:

- Ans**
- 1. $12\frac{1}{2}\%$
 - 2. $33\frac{1}{3}\%$
 - 3. 45%
 - 4. 25%

Question ID : 816161481
Status : Answered
Chosen Option : 4

Q.13 The following Table gives the details of Five commodities A, B, C, D and E with quantity required and their costs for a family in a month. Study the Table and answer the questions that follow.

Commodity	Quantity required/month (in kg)	Rate/kg in ₹	
		Year 2016	Year 2019
A	15	₹60	₹80
B	20	₹50	₹60
C	12	₹35	₹40
D	40	₹75	₹85
E	8	₹64	₹72

The total amount spent on the Five commodities by the family in the year 2019 is:

- Ans 1. ₹6,856
 2. ₹7,248
 3. ₹8,122
 4. ₹5,400

Question ID : 816161498
Status : Answered
Chosen Option : 1

Q.14 In $\triangle ABC$, if the ratio of angles is in the proportion 3 : 5 : 4, then the difference between the biggest and the smallest angles (in degrees) is:

- Ans 1. 35°
 2. 25°
 3. 30°
 4. 20°

Question ID : 816161493
Status : Marked For Review
Chosen Option : 3

Q.15 If $a^3 + \frac{1}{a^2} = 52$, then the value of $2\left(a + \frac{1}{a}\right)$ is:

- Ans 1. 4
 2. 8
 3. 6
 4. 2

Question ID : 816161488
Status : Answered
Chosen Option : 2

Q.16

The value of $4 \left[\frac{(1-\sec A)^2 + (1+\sec A)^2}{1+\sec^2 A} \right]$ is:

- Ans
- 1. 8
 - 2. 1
 - 3. 4
 - 4. 2

Question ID : 816161495

Status : Answered

Chosen Option : 1

Q.17

The inner and outer radius of a circular track are, respectively, 29 m and 23 m. The cost of levelling the track at ₹7/m² is:

- Ans
- 1. ₹3,284
 - 2. ₹5,300
 - 3. ₹7,215
 - 4. ₹6,864

Question ID : 816161487

Status : Answered

Chosen Option : 4

Q.18

What is the smallest integer that is divisible by 3, 7 and 18?

- Ans
- 1. 72
 - 2. 252
 - 3. 63
 - 4. 126

Question ID : 816161477

Status : Answered

Chosen Option : 4

Q.19

If $0 < A, B < 45^\circ$, $\cos(A + B) = \frac{24}{25}$ and $\sin(A - B) = \frac{15}{17}$, then $\tan 2A$ is:

- Ans
- 1. $\frac{213}{4}$
 - 2. 0
 - 3. 1
 - 4. $\frac{416}{87}$

Question ID : 816161497

Status : Not Attempted and Marked For Review

Chosen Option : --

Q.20

The value of $\frac{[54-(5+2)\times 8]+13}{48-4\div 3\times 8-2}$ is:

Ans

1. $\frac{89}{127}$

2. $\frac{89}{106}$

3. $\frac{141}{127}$

4. $\frac{141}{106}$

Question ID : 816161478

Status : **Marked For Review**

Chosen Option : 4

Q.21

If $x^2 - 4x + 4 = 0$, then the value of $16\left(x^4 - \frac{1}{x^4}\right)$ is:

Ans

1. $\frac{127}{16}$

2. 127

3. $\frac{255}{16}$

4. 255

Question ID : 816161489

Status : **Not Attempted and Marked For Review**

Chosen Option : --

Q.22

A, B and C are three points on a circle such that the angles subtended by the chords AB and AC at the centre O are 80° and 120° , respectively. The value of $\angle BAC$ is:

Ans

1. 75°

2. 85°

3. 70°

4. 80°

Question ID : 816161492

Status : **Answered**

Chosen Option : 4

Q.23 A train crosses a platform 180 m long in 60 sec at a speed of 72 km/h. The time taken by the train to cross an electric pole is:

- Ans
- 1. 5.1 sec
 - 2. 51 sec
 - 3. 5.1 min
 - 4. 0.51 min

Question ID : 816161486
Status : Answered
Chosen Option : 2

Q.24 If $b + c = ax$, $c + a = by$, $a + b = cz$, then the value of $\frac{1}{9} \left[\frac{1}{x+1} + \frac{1}{y+1} + \frac{1}{z+1} \right]$ is:

- Ans
- 1. 0
 - 2. 1
 - 3. $\frac{1}{9}$
 - 4. $\frac{1}{3}$

Question ID : 816161490
Status : Answered
Chosen Option : 3

Q.25 If A lies in third quadrant, and $20 \tan A = 21$, then the value of $\frac{5 \sin A - 2 \cos A}{4 \cos A - \frac{5}{7} \sin A}$ is:

- Ans
- 1. $\frac{5}{29}$
 - 2. $-\frac{65}{29}$
 - 3. 1
 - 4. $\frac{13}{12}$

Question ID : 816161496
Status : Answered
Chosen Option : 3

Q.1 Select the correctly spelt word.

- Ans 1. Catalogue
 2. Agression
 3. Temprature
 4. Millionare

Question ID : 816161524
Status : Answered
Chosen Option : 1

Q.2 Given below are four jumbled sentences. Out of the given options pick the one that gives their correct order.

- A. It provides training for the development of oral and aural skills and is a great supplement to classroom teaching.
B. Technology is growing very fast day by day and is contributing a lot towards improving communication skills.
C. Thus, it is the responsibility of a teacher to make the learners understand that their aim is to master the language, not the technology.
D. However, it cannot be a substitute for the conventional method of language teaching.

- Ans 1. ACBD
 2. DACB
 3. BCDA
 4. BADC

Question ID : 816161515
Status : Answered
Chosen Option : 4

Q.3 Select the correct indirect narration of the given sentence.

She said, "We visited Uttarakhand in the summer vacation."

- Ans 1. She said that they will visit to Uttarakhand in the summer vacation.
 2. She said that they had visited Uttarakhand in the summer vacation.
 3. She said that we visited Uttarakhand in the summer vacation.
 4. She said that they have visited Uttarakhand in the summer vacation.

Question ID : 816161505
Status : Answered
Chosen Option : 2

Q.4 Select the most appropriate option to substitute the underlined segment in the given sentence. If no substitution is required, select No Improvement.

If he doesn't score forty percent in all the subjects, he would not be promoted to the next class.

- Ans
- 1. No improvement
 - 2. will not be
 - 3. was not being
 - 4. is not being

Question ID : 816161506
Status : Answered
Chosen Option : 2

Q.5 Select the most appropriate word to fill in the blank.

The reckless young man was _____ for the debts incurred by him.

- Ans
- 1. audacious
 - 2. reliable
 - 3. liable
 - 4. suspicious

Question ID : 816161527
Status : Answered
Chosen Option : 3

Q.6 Given below are four jumbled sentences. Out of the given options pick the one that gives their correct order.

A person who attracts attention with a flashy style

- Ans
- 1. Jockey
 - 2. Glutton
 - 3. Flamboyant
 - 4. Vagabond

Question ID : 816161523
Status : Marked For Review
Chosen Option : 3

Comprehension:

In the following passage some words have been deleted. Fill in the blanks with the help of the alternatives given. Select the most appropriate option for each blank.

Environmental pollution is a global problem and (1)_____ threat to human survival. The causes of pollution are quite (2)_____, such as contamination of water, cutting of trees and forests, emission of toxic gases etc. Due to (3)_____ factors, the flora and fauna are adversely affected. An awareness to protect the environment is everybody's (4)_____ duty and we should collectively come forward for this noble campaign. Government is taking strong (5)_____ to check the menace of pollution.

SubQuestion No : 7

Q.7 Select the most appropriate option for blank No.1

- Ans
- 1. some
 - 2. the
 - 3. a
 - 4. an

Question ID : 816161509

Status : Answered

Chosen Option : 3

Comprehension:

In the following passage some words have been deleted. Fill in the blanks with the help of the alternatives given. Select the most appropriate option for each blank.

Environmental pollution is a global problem and (1)_____ threat to human survival. The causes of pollution are quite (2)_____, such as contamination of water, cutting of trees and forests, emission of toxic gases etc. Due to (3)_____ factors, the flora and fauna are adversely affected. An awareness to protect the environment is everybody's (4)_____ duty and we should collectively come forward for this noble campaign. Government is taking strong (5)_____ to check the menace of pollution.

SubQuestion No : 8

Q.8 Select the most appropriate option for blank No.2

- Ans
- 1. enough
 - 2. plenty
 - 3. many
 - 4. numerous

Question ID : 816161510

Status : Answered

Chosen Option : 1

Comprehension:

In the following passage some words have been deleted. Fill in the blanks with the help of the alternatives given. Select the most appropriate option for each blank.

Environmental pollution is a global problem and (1)_____ threat to human survival. The causes of pollution are quite (2)_____, such as contamination of water, cutting of trees and forests, emission of toxic gases etc. Due to (3)_____ factors, the flora and fauna are adversely affected. An awareness to protect the environment is everybody's (4)_____ duty and we should collectively come forward for this noble campaign. Government is taking strong (5)_____ to check the menace of pollution.

SubQuestion No : 9

Q.9 Select the most appropriate option for blank No.3

- Ans
- 1. that
 - 2. those
 - 3. this
 - 4. these

Question ID : 816161511

Status : Answered

Chosen Option : 4

Comprehension:

In the following passage some words have been deleted. Fill in the blanks with the help of the alternatives given. Select the most appropriate option for each blank.

Environmental pollution is a global problem and (1)_____ threat to human survival. The causes of pollution are quite (2)_____, such as contamination of water, cutting of trees and forests, emission of toxic gases etc. Due to (3)_____ factors, the flora and fauna are adversely affected. An awareness to protect the environment is everybody's (4)_____ duty and we should collectively come forward for this noble campaign. Government is taking strong (5)_____ to check the menace of pollution.

SubQuestion No : 10

Q.10 Select the most appropriate option for blank No.4

- Ans
- 1. pious
 - 2. urgent
 - 3. moral
 - 4. dubious

Question ID : 816161512

Status : Answered

Chosen Option : 3

Comprehension:

In the following passage some words have been deleted. Fill in the blanks with the help of the alternatives given. Select the most appropriate option for each blank.

Environmental pollution is a global problem and (1)_____ threat to human survival. The causes of pollution are quite (2)_____, such as contamination of water, cutting of trees and forests, emission of toxic gases etc. Due to (3)_____ factors, the flora and fauna are adversely affected. An awareness to protect the environment is everybody's (4)_____ duty and we should collectively come forward for this noble campaign. Government is taking strong (5)_____ to check the menace of pollution.

SubQuestion No : 11

Q.11 Select the most appropriate option for blank No.5

- Ans
- 1. programmes
 - 2. attempts
 - 3. enticements
 - 4. measures

Question ID : 816161513
Status : Answered
Chosen Option : 4

Q.12 Given below are four jumbled sentences. Out of the given options pick the one that gives their correct order.

A person who preaches religion and is considered to be a messenger of God.

- Ans
- 1. Prophet
 - 2. Atheist
 - 3. Volunteer
 - 4. Scholar

Question ID : 816161522
Status : Answered
Chosen Option : 1

Q.13 Select the most appropriate antonym of the given word.

GROTESQUE

- Ans
- 1. Monstrous
 - 2. Attractive
 - 3. Distorted
 - 4. Ugly

Question ID : 816161519
Status : Answered
Chosen Option : 2

Q.14 In the sentence identify the segment which contains the grammatical error.

All employees of the National Sugar Factory differ from their boss on the medical and pension policy.

- Ans
- 1. on the medical and pension policy
 - 2. differ from their boss
 - 3. All employees
 - 4. of the National Sugar Factory

Question ID : 816161503
Status : Marked For Review
Chosen Option : 3

Q.15 Select the correctly spelt word.

- Ans
- 1. Itinary
 - 2. Rennaissance
 - 3. Greivance
 - 4. Sovereignty

Question ID : 816161525
Status : Marked For Review
Chosen Option : 2

Q.16 Select the most appropriate synonym of the given word.

Juvenile

- Ans
- 1. Mature
 - 2. Insane
 - 3. Wise
 - 4. Childish

Question ID : 816161516
Status : Answered
Chosen Option : 4

Q.17 Select the most appropriate meaning of the given idiom.

Like a dying duck in a thunderstorm

- Ans
- 1. Daring
 - 2. Confident
 - 3. Dejected
 - 4. Comfortable

Question ID : 816161520
Status : Answered
Chosen Option : 3

Q.18 In the sentence identify the segment which contains the grammatical error.

She behaves in a such a cordial manner that everyone admires her.

- Ans
- 1. She behaves in a
 - 2. such a cordial manner
 - 3. that everyone
 - 4. admires her

Question ID : 816161502
Status : Answered
Chosen Option : 1

Q.19 Given below are four jumbled sentences. Out of the given options pick the one that gives their correct order.

- A. It was an honor as well as a relief to the family of the deceased.
- B. The district collector announced a gallantry award and financial aid for his family.
- C. A soldier died fighting in the battlefield.
- D. The money was promptly disbursed from the Prime Minister's Relief Fund.

- Ans
- 1. BACD
 - 2. CBDA
 - 3. BCAD
 - 4. CDBA

Question ID : 816161514
Status : Answered
Chosen Option : 2

Q.20 Select the most appropriate antonym of the given word.

STRINGENT

- Ans
- 1. Lenient
 - 2. Strict
 - 3. Severe
 - 4. Stern

Question ID : 816161518
Status : Answered
Chosen Option : 1

Q.21 Select the most appropriate synonym of the given word.

Repercussion

- Ans
- 1. Reaction
 - 2. Rearrangement
 - 3. Reminder
 - 4. Recollection

Question ID : 816161517
Status : Answered
Chosen Option : 1

Q.22 Select the correct passive form of the given sentence.

Why do you spend so much money?

- Ans
- 1. Why has so much money been spent by you?
 - 2. Why is so much money being spent by you?
 - 3. Why was so much money spent by you?
 - 4. Why is so much money spent by you?

Question ID : 816161504
Status : Answered
Chosen Option : 4

Q.23 Select the most appropriate word to fill in the blank.

The unruly behaviour of the students _____ their teacher.

- Ans
- 1. calmed
 - 2. pleased
 - 3. comforted
 - 4. irritated

Question ID : 816161526
Status : Answered
Chosen Option : 4

Q.24 Select the most appropriate meaning of the given idiom.

To paddle one's own canoe

- Ans
- 1. Depend on oneself
 - 2. To take rest
 - 3. To exercise hard
 - 4. To act in a childish way

Question ID : 816161521
Status : Marked For Review
Chosen Option : 1

Q.25 Select the most appropriate option to substitute the underlined segment in the given sentence. If no substitution is required, select No Improvement.

No soon the Chief Minister step in than the bomb exploded.

- Ans
- 1. No sooner did the Chief Minister
 - 2. No sooner does the Chief Minister
 - 3. No soon had the Chief Minister
 - 4. No Improvement

Question ID : 816161507
Status : Answered
Chosen Option : 1