

Constable GD in CAPFs SSF Rifleman GD in Assam Rifles and Sepoy in NCB Examination 2022

Roll Number	
Candidate Name	
Venue Name	iON Digital Zone iDZ 1 Sector 62
Exam Date	11/01/2023
Exam Time	2:30 PM - 3:30 PM
Subject	Constable GD Examination 2022

Section : Part-A-General Intelligence and Reasoning

Q.1 Which of the following numbers will replace the question mark (?) in the given series?
19, 21, 25, 33, ?, 81, 145

- Ans
- ☒ 1. 47
 - ☒ 2. 49
 - ☒ 3. 50
 - ☒ 4. 48

Question ID : 26433069388
Status : Answered
Chosen Option : 2

Q.2 Select the correct mirror image of the given figure when the mirror is placed at MN as shown below.

Kr3i7BTew



- Ans
- ☒ 1. wETB7i3rK
 - ☒ 2. w3TB7i3rK
 - ☒ 3. wETB7i3rK
 - ☒ 4. wETB7i3rK

Question ID : 26433089457
Status : Answered
Chosen Option : 3

Q.3 Select the letter-cluster from among the given options that can replace the question mark (?) in the following series.
BQZJ, ELCM, HGFP, ?, NWLV

- Ans
- ☒ 1. EDGA
 - ☒ 2. EBSI
 - ☒ 3. KCUD
 - ☒ 4. KBIS

Question ID : 26433074744
Status : Answered
Chosen Option : 4

Q.4 Select the correct combination of mathematical signs to sequentially replace the * signs and to balance the given equation.
 $30 * 95 * 5 * 32 * 4 * 497$

- Ans
- ☒ 1. +, ×, −, =, ÷
 - ☒ 2. ×, +, −, ÷, =
 - ☒ 3. +, ×, ÷, −, =
 - ☒ 4. +, ×, −, ÷, =

Question ID : 26433083127
Status : Answered
Chosen Option : 4

Q.5 Which letter-cluster will replace the question mark (?) to complete the given series?
ZTQM, YSPL, ?, WQNJ, VPMI

- Ans
- ☒ 1. XROK
 - ☒ 2. XRPK
 - ☒ 3. XSPK
 - ☒ 4. XSOK


Question ID : 26433067945
Status : Answered
Chosen Option : 1

Q.6 Which two signs should be interchanged to make the below equation mathematically correct?
 $24 + 120 \div 8 \times 16 - 48 = 36$

- Ans
- ☒ 1. ÷ and ×
 - ☒ 2. × and −
 - ☒ 3. − and +
 - ☒ 4. ÷ and −

Question ID : 264330117516
Status : Answered
Chosen Option : 1

Q.7 Select the figure that will come next in the following series.



Ans

- ☒ 1.
- ☒ 2.
- ☒ 3.
- ☒ 4.

Question ID : 26433078973

Status : Answered

Chosen Option : 4

Q.8 Select the number from among the given options that can replace the question mark (?) in the following series.
7, 13, 28, 55, 112, ?

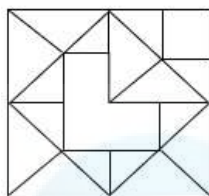
- Ans ☒ 1. 223
- ☒ 2. 222
 - ☒ 3. 322
 - ☒ 4. 232

Question ID : 26433078919

Status : Answered

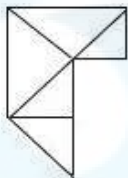
Chosen Option : 1

Q.9 Select the option figure that is embedded in the given figure (rotation is NOT allowed).



Ans

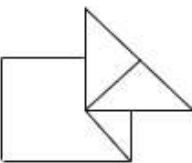
✓ 1.



✗ 2.



✗ 3.



✗ 4.



Question ID : 26433069481

Status : Answered

Chosen Option : 1

Q.10 Select the option that is related to the fourth term in the same way as the first term is related to the second term and the fifth term is related to the sixth term.
 $8 : 6 :: ? : 12 :: 343 : 21$

Ans ✓ 1. 64

✗ 2. 27

✗ 3. 84

✗ 4. 72

Question ID : 26433074545

Status : Answered

Chosen Option : 1

Q.11 Six students are sitting around a circular table facing the centre. Vendyll is sitting fourth to the right of Leander. Michael is sitting third to the right of Vendyll. Gandhar is sitting second to the left of Michael. Yogita is sitting third to the right of Gandhar. Rocky is the immediate neighbour of Vendyll and Yogita. Who is sitting between Leander and Vendyll?

- Ans ☒ 1. Rocky
☒ 2. Gandhar
☒ 3. Yogita
☒ 4. Michael

Question ID : 26433081775
Status : Answered
Chosen Option : 2

Q.12 Select the option that is related to the third word in the same way as the second word is related to the first word. (The words must be considered as meaningful English words and must NOT be related to each other based on the number of letters/number of consonants/vowels in the word)
Drum : Percussion :: Guitar : _____

- Ans ☒ 1. Wind
☒ 2. String
☒ 3. Sitar
☒ 4. Flute

Question ID : 26433079403
Status : Answered
Chosen Option : 2

Q.13 In a certain code language, 'COVER' is written as '18522153' and 'STINK' is written as '111492019'. How will 'PLATE' be written in that language?

- Ans ☒ 1. 52011216
☒ 2. 16121195
☒ 3. 68541264
☒ 4. 56841525

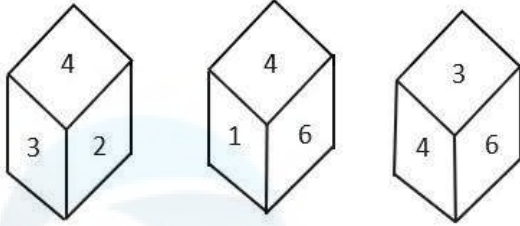
Question ID : 26433081765
Status : Answered
Chosen Option : 1

Q.14 Select the option that is related to the third word in the same way as the second word is related to the first word.
(The words must be considered as meaningful English words and must not be related to each other based on the number of letters/number of consonants/vowels in the word)
Sharp : blunt :: Dim : ?

- Ans ☒ 1. Sight
☒ 2. Dark
☒ 3. Light
☒ 4. Bright

Question ID : 26433067973
Status : Answered
Chosen Option : 4

Q.15 Three different positions of the same dice are shown. Find the number on the face opposite the face showing '4'.



- Ans
- ☒ 1. 3
 - ☒ 2. 5
 - ☒ 3. 2
 - ☒ 4. 1

Question ID : 26433090074
Status : Answered
Chosen Option : 2

Q.16 Which option represents the correct order of the given words as they would appear in the English dictionary?
1 chair
2 chain
3 charm
4 charge
5 charcoal

- Ans
- ☒ 1. 2,1,5,4,3
 - ☒ 2. 1,2,3,4,5
 - ☒ 3. 2,4,1,3,5
 - ☒ 4. 2,3,1,4,5

Question ID : 26433069304
Status : Answered
Chosen Option : 1

Q.17 'A @ B' means 'A is the son of B'
'A & B' means 'A is the mother of B'
'A # B' means 'A is the daughter of B'
Which of the following options means 'Q is the wife of S'?

- Ans
- ☒ 1. P @ Q & R # S
 - ☒ 2. R @ S @ Q # P
 - ☒ 3. R @ S & Q # P
 - ☒ 4. P # Q @ R # S

Question ID : 26433069659
Status : Answered
Chosen Option : 1

Q.18 Three statements are given, followed by three conclusions numbered I, II and III. Assuming the statements to be true, even if they seem to be at variance with commonly known facts, decide which of the conclusions logically follow(s) from the statements.

Statements:

No coats are pants.

All pants are shirts.

Some shirts are coats.

Conclusions:

I. No coats are shirts.

II. Some shirts are pants.

III. Some pants are coats.

- Ans**
- ☒ 1. All conclusions follow
 - ☒ 2. Only conclusions II and III follow
 - ☒ 3. Only conclusion II follows
 - ☒ 4. Only conclusions I and III follow

Question ID : 26433090993

Status : Answered

Chosen Option : 3

Q.19 In a certain code language, 'RESPECT' is written as 'EECPRST', 'HONOUR' is written as 'OOUHNH', how will 'COURAGE' be written as in that language?

- Ans**
- ☒ 1. AEOUCRG
 - ☒ 2. AEOUCGR
 - ☒ 3. CGRAEQU
 - ☒ 4. CRGAEQU

Question ID : 26433069651

Status : Answered

Chosen Option : 2

Q.20 Six persons Hema, Rekha, Jaya, Sushma, Nimmi and Barkha are sitting in a row facing north. Barkha is not sitting beside Jaya and Jaya is sitting at the extreme right. Only Hema is sitting between Nimmi and Barkha. Nimmi is not sitting beside Sushma and Jaya. Only Rekha is sitting between Sushma and Jaya. Who is sitting to the immediate right of Barkha?

- Ans**
- ☒ 1. Jaya
 - ☒ 2. Hema
 - ☒ 3. Sushma
 - ☒ 4. Nimmi

Question ID : 26433079059

Status : Answered

Chosen Option : 3

Q.1 The Council of States also known as _____.

- Ans
- ☐ 1. High Court
 - ☐ 2. Lok Sabha
 - ☐ 3. Supreme Court
 - ☒ 4. Rajya Sabha

Question ID : **26433086860**
Status : **Answered**
Chosen Option : **4**

Q.2 Which university was established in 1857?

- Ans
- ☒ 1. University of Bombay
 - ☐ 2. University of Bundelkhand
 - ☐ 3. University of Punjab
 - ☐ 4. University of Allahabad

Question ID : **264330115710**
Status : **Answered**
Chosen Option : **2**

Q.3 Who among the following founded the Shunga dynasty?

- Ans
- ☒ 1. Pushyamitra
 - ☐ 2. Devabhuti
 - ☐ 3. Agnimitra
 - ☐ 4. Vasumitra

Question ID : **264330106590**
Status : **Not Answered**
Chosen Option : **--**

Q.4 In India, the workforce population does NOT include people of _____.

- Ans
- ☐ 1. 16 years
 - ☐ 2. 20 years
 - ☐ 3. 17 years
 - ☒ 4. 14 years

Question ID : **264330116088**
Status : **Not Answered**
Chosen Option : **--**

Q.5 As per Consumer Protection Rules, 2021, District Commissions shall have jurisdiction to entertain complaints where the value of the goods or services paid as consideration

- Ans**
- ☒ 1. does not exceed ten lakh rupees
 - ☒ 2. exceeds one crore rupees
 - ☒ 3. does not exceed fifty lakh rupees
 - ☒ 4. does not exceed one lakh rupees

Question ID : **264330116236**
Status : **Not Answered**
Chosen Option : --

Q.6 Who has been appointed to the post of Executive Director for India at the International Monetary Fund (IMF) as announced in August 2022??

- Ans**
- ☒ 1. Rajesh Sharma
 - ☒ 2. Gita Gopinath
 - ☒ 3. Ramesh Chand
 - ☒ 4. Krishnamurthy Subramanian

Question ID : **264330115006**
Status : **Answered**
Chosen Option : 2

Q.7 How many Fundamental Duties are mentioned in the Indian constitution? (As on May 2022)

- Ans**
- ☒ 1. 9
 - ☒ 2. 10
 - ☒ 3. 11
 - ☒ 4. 8

Question ID : **264330115621**
Status : **Answered**
Chosen Option : 3

Q.8 Rasheswar Saikia Barbayan is related with _____ dance.

- Ans**
- ☒ 1. Kuchipudi
 - ☒ 2. Odissi
 - ☒ 3. Sattriya
 - ☒ 4. Bharatnatyam

Question ID : **264330115890**
Status : **Marked For Review**
Chosen Option : 2

Q.9 Which non-conventional energy source is/are available in India?

Ans ☒ 1. tidal, wind and solar energy

☒ 2. only solar energy

☒ 3. only solar and wind energy

☒ 4. only tidal energy

Question ID : 264330115550

Status : **Marked For Review**

Chosen Option : 1

Q.10 Who among the following is the founder of the Grameen Bank of Bangladesh?

Ans ☒ 1. Abdus Salam

☒ 2. Muhammad Yunus

☒ 3. Muzaffar Ahmed

☒ 4. Mahbub ul Haq

Question ID : 26433054799

Status : **Not Answered**

Chosen Option : --

Q.11 The chemical name of the acid present in vinegar is called ____.

Ans ☒ 1. nitric acid

☒ 2. acetic acid

☒ 3. formic acid

☒ 4. malonic acid

Question ID : 26433066470

Status : **Answered**

Chosen Option : 4

Q.12 The hot weather season is also the season for localised thunderstorms, associated with violent winds, torrential downpours, often accompanied by hail. In West Bengal, these storms are known as the ____.

Ans ☒ 1. Mahawat

☒ 2. Tahiti

☒ 3. Loo

☒ 4. Kaal baisakhi

Question ID : 26433091487

Status : **Not Answered**

Chosen Option : --

Q.13 Which political leader from Jammu and Kashmir, India started a 3-day visit to Kishtwar-Doda belt in November 2022?

- Ans ☒ 1. Mehbooba Mufti
☒ 2. Farooq Abdullah
☒ 3. Ghulam Nabi Azad
☒ 4. Tariq Hameed Karra

Question ID : 264330114935
Status : Not Answered
Chosen Option : --

Q.14 _____ ≡ Sum total of gross value added of all the firms in the economy

- Ans ☒ 1. NI
☒ 2. GDP
☒ 3. GNP
☒ 4. NNP

Question ID : 264330115303
Status : Answered
Chosen Option : 2

Q.15 The South Asian Games was first held in which year?

- Ans ☒ 1. 1990
☒ 2. 1988
☒ 3. 1985
☒ 4. 1984

Question ID : 264330115939
Status : Answered
Chosen Option : 2

Q.16 Thrissur Pooram festival It is celebrated in which of the following states?

- Ans ☒ 1. Karnataka
☒ 2. Kerala
☒ 3. Andhra Pradesh
☒ 4. Tamil Nadu

Question ID : 264330115111
Status : Answered
Chosen Option : 2

Q.17 Vitamin C is an _____.

- Ans ☒ 1. antioxidant
☒ 2. antibiotic
☒ 3. antigen
☒ 4. antiviral

Question ID : 264330115202
Status : Answered
Chosen Option : 1

Q.18 The horizontal rows of squares in chess are called _____.

- Ans ☒ 1. ranks
☐ 2. pawns
☐ 3. bishops
☐ 4. files

Question ID : 26433071571
Status : Answered
Chosen Option : 3

Q.19 Which of the following can be considered as a major hub of Information Technology industry in India?

- Ans ☐ 1. Surat
☒ 2. Bengaluru
☐ 3. Bhopal
☐ 4. Kashmir

Question ID : 264330115399
Status : Answered
Chosen Option : 2

Q.20 Grida folk dance is performed in the state of Madhya Pradesh during _____ when the rabi crop is ready to be harvested.

- Ans ☒ 1. winter
☐ 2. autumn
☐ 3. summer
☐ 4. spring

Question ID : 264330115068
Status : Answered
Chosen Option : 1

Section : Part-C-Elementary Mathematics

Q.1 Find the mean proportional between 3 and 27.

- Ans ☐ 1. 5
☒ 2. 9
☐ 3. 10
☐ 4. 6

Question ID : 26433082100
Status : Answered
Chosen Option : 2

Q.2 In a library, 25% of the number of mathematics books is equal to two-third of the number of physics books. What is the ratio of the number of mathematics books to that of the physics books in the library?

- Ans
- ☐ 1. 4 : 7
 - ☒ 2. 8 : 3
 - ☐ 3. 7 : 4
 - ☐ 4. 3 : 8

Question ID : 26433082368

Status : Answered

Chosen Option : 2

Q.3 A thief steals a car at 3:30 p.m. and drives it at 80km/h. The theft is discovered at 4:00 p.m. and the owner sets off in another car at 90km/h. When will he catch the thief?

- Ans
- ☒ 1. 8:00 p.m.
 - ☐ 2. 8:30 p.m.
 - ☐ 3. 7:30 p.m.
 - ☐ 4. 7:00 p.m.

Question ID : 26433073039

Status : Answered

Chosen Option : 1

Q.4 The average age of 14 students and their teacher is 20 years. If the teacher is excluded, then their average age reduces by 1.5 years. The teacher's age is:

- Ans
- ☒ 1. 41 years
 - ☐ 2. 30 years
 - ☐ 3. 39 years
 - ☐ 4. 59 years

Question ID : 26433087340

Status : Answered

Chosen Option : 1

Q.5 The HCF of 1020, 850 and 1156 is:

- Ans
- ☐ 1. 28
 - ☐ 2. 24
 - ☒ 3. 34
 - ☐ 4. 22

Question ID : 26433076390

Status : Answered

Chosen Option : 3

Q.6 How much time does Rani take to cover a distance of 200 m, if she runs at a speed of 15 km/h?

- Ans
- ☐ 1. 12 sec
 - ☐ 2. 24 sec
 - ☐ 3. 36 sec
 - ☒ 4. 48 sec

Question ID : 26433073034

Status : Answered

Chosen Option : 4

Q.7 Aman covers a distance of 15 km in 3 hours and a distance of 20 km in 2 hours. What is the average speed of Aman?

- Ans
- ☐ 1. 5 km/h
 - ☐ 2. 8 km/h
 - ☒ 3. 7 km/h
 - ☐ 4. 6 km/h

Question ID : 26433075057

Status : Answered

Chosen Option : 3

Q.8 S can complete a task in 50 days, T can complete it in 40 days and M can complete it in 30 days. S can work on all days of the week; T can work only on Monday, Wednesday, and Friday while M can work only on Saturday and Sunday. The work is started on Monday. In how many weeks it will be completed?

- Ans
- ☐ 1. Between 4 to 5 weeks
 - ☐ 2. Exactly 3 weeks
 - ☒ 3. Between 3 to 4 weeks
 - ☐ 4. Between 2 to 3 weeks

Question ID : 26433085471

Status : Answered

Chosen Option : 3

Q.9 The radius of the base of a right circular cone is 7 cm and its curved surface area is 550 cm^2 . The volume of the cone is:

(Use $\pi = \frac{22}{7}$)

- Ans
- ☐ 1. 1223 cm^3
 - ☐ 2. 1233 cm^3
 - ☐ 3. 1322 cm^3
 - ☒ 4. 1232 cm^3

Question ID : 26433075211

Status : Answered

Chosen Option : 4

Q.10 A bat is bought for Rs.750 and sold at a loss of 8%. What is its selling price?

- Ans
- ☐ 1. Rs.660
 - ☐ 2. Rs.680
 - ☐ 3. Rs.630
 - ☒ 4. Rs.690

Question ID : 26433075145

Status : Answered

Chosen Option : 4

Q.11 Successive discounts of 13 percent and 19 percent are equivalent to a single discount of :

- Ans
- ☐ 1. 9.53 percent
 - ☐ 2. 39.53 percent
 - ☒ 3. 29.53 percent
 - ☐ 4. 19.53 percent

Question ID : 26433074224

Status : Answered

Chosen Option : 3

Q.12 A shopkeeper offers a 20% discount on all garments and offers a further discount of 5% to those customers who pay cash. What does a customer have to pay in cash for a jacket whose marked price is ₹7,200?

- Ans
- ☐ 1. ₹6,972
 - ☐ 2. ₹5,760
 - ☒ 3. ₹5,472
 - ☐ 4. ₹6,048

Question ID : 26433087366

Status : Answered

Chosen Option : 3

Q.13 A hemispherical bowl made of brass has an inner diameter of 14 cm. Find the cost of painting it from the inside at the rate of ₹15 per cm^2 . (Use $\pi = \frac{22}{7}$)

- Ans
- ☐ 1. ₹4,120
 - ☐ 2. ₹3,170
 - ☒ 3. ₹4,620
 - ☐ 4. ₹2,670

Question ID : 26433080068

Status : Answered

Chosen Option : 3

Q.14 The ratio of the cost price to the marked price of a table is 3:4. The shopkeeper gives two equal successive discounts of 25% on the marked price and sells the table for Rs.2,250. Find the loss during this transaction.

- Ans ☒ 1. Rs.1,000
☒ 2. Rs.750
☒ 3. Rs.500
☒ 4. Rs.250

Question ID : 26433075973
Status : Answered
Chosen Option : 1

Q.15 Divide the LCM of the 35 and 42 by the HCF of 32 and 40.

- Ans ☒ 1. 26.375
☒ 2. 26.125
☒ 3. 26.000
☒ 4. 26.250

Question ID : 264330116652
Status : Answered
Chosen Option : 4

Q.16 Find the mean proportional between 9 and 25.

- Ans ☒ 1. 26
☒ 2. 15
☒ 3. 17
☒ 4. 23

Question ID : 26433074950
Status : Answered
Chosen Option : 2

Q.17 In how many years will Rs.12,500 become Rs.21,600 at the rate of 20% per annum on compound interest when interest is compounding annually?

- Ans ☒ 1. 2
☒ 2. 7
☒ 3. 5
☒ 4. 3

Question ID : 26433081475
Status : Answered
Chosen Option : 4

Q.18 Under simple rate of growth, the population (P units) of a city becomes 1.5 times of P in 10 years. In how many years, the population of the city would become double (2 times P) under the same growth rate?

- Ans
- ☒ 1. 20
 - ☐ 2. 15
 - ☐ 3. 17
 - ☐ 4. 12

Question ID : 26433081721
Status : Answered
Chosen Option : 4

Q.19 During the first year, the population of a city increased by 5% and during the second year, it diminished by 4%. At the end of the second year, its population was 30,240. The population at the end of the first year was:

- Ans
- ☐ 1. 30000
 - ☐ 2. 30300
 - ☒ 3. 31500
 - ☐ 4. 31200

Question ID : 26433087347
Status : Answered
Chosen Option : 1

Q.20 Bhanu can do a work in 10 days. Ramesh takes 12 days to complete it. Rohit takes as long as Bhanu and Ramesh would take working together. How long will it take Ramesh and Rohit to complete the work together?

- Ans
- ☐ 1. $3\frac{3}{8}$ days
 - ☐ 2. $3\frac{3}{7}$ days
 - ☒ 3. $3\frac{3}{4}$ days
 - ☐ 4. $3\frac{3}{5}$ days

Question ID : 26433075122
Status : Answered
Chosen Option : 3

Q.1 Select the most appropriate option to fill in the blank with the synonym of the underlined word.

The film was a funny adaption of an old classic. The _____ depiction was well received by the audience.

Ans ☒ 1. humorous

☒ 2. trendy

☒ 3. nervous

☒ 4. tropical

Question ID : 26433094737

Status : Not Answered

Chosen Option : --

Q.2 Select the most appropriate ANTONYM of the given word.

Apparent

Ans ☒ 1. Obvious

☒ 2. Actual

☒ 3. Evident

☒ 4. Hidden

Question ID : 26433074050

Status : Not Answered

Chosen Option : --

Q.3 Select the most appropriate ANTONYM of the word given in the brackets to fill in the blank.

She is a direct _____ (ancestor) of Queen Victoria.

Ans ☒ 1. descendant

☒ 2. primogenitor

☒ 3. antecedent

☒ 4. forerunner

Question ID : 26433088855

Status : Not Answered

Chosen Option : --

Q.4 Select the most appropriate meaning of the given idiom.

Steal someone's thunder

Ans ☒ 1. To follow a successful person's instructions

☒ 2. To imitate others

☒ 3. To take the credit for something someone else did

☒ 4. To find it difficult to choose between two alternatives

Question ID : 26433072852

Status : Not Answered

Chosen Option : --

Q.5 Select the most appropriate synonym of the given word.

Conviction

- Ans
- ☒ 1. Approach
 - ☒ 2. Suspicion
 - ☒ 3. Doubt
 - ☒ 4. Belief

Question ID : 26433073863

Status : Not Answered

Chosen Option : --

Q.6 Select the option that can be used as a one-word substitute for the underlined group of words.

Johnson wrote a drama in which he discusses the study of chemistry in a medieval fashion.

- Ans
- ☒ 1. Rhetoric
 - ☒ 2. Lexicography
 - ☒ 3. Alchemy
 - ☒ 4. Anthropology

Question ID : 26433088613

Status : Not Answered

Chosen Option : --

Q.7 Select the INCORRECTLY spelt word.

- Ans
- ☒ 1. Curriculum
 - ☒ 2. Enthusiastic
 - ☒ 3. Explanation
 - ☒ 4. Height

Question ID : 26433073723

Status : Not Answered

Chosen Option : --

Q.8 Select the most appropriate option that can substitute the underlined word in the given sentence. If there is no need to substitute it, select 'No substitution required'.
The talk was not understandable .

- Ans
- ☒ 1. No substitution required
 - ☒ 2. comprehensible
 - ☒ 3. comprehended
 - ☒ 4. comprehensive

Question ID : 264330101412

Status : Not Answered

Chosen Option : --

Q.9 Select the correct pair of words for the blanks in the given sentence.

Jharkhand is a major _____ producing state in India whereas the union territory of Jammu & Kashmir is a _____ place.

- Ans
- ☒ 1. cold; coal
 - ☒ 2. coal; coal
 - ☒ 3. cold; cold
 - ☒ 4. coal; cold

Question ID : 26433060547

Status : Not Answered

Chosen Option : --

Q.10 Select the correct idiom that can substitute the italicised group of words in the given sentence.

Soma has *made a mess of* her financial affairs.

- Ans
- ☒ 1. made up one's mind
 - ☒ 2. made a mountain out of a molehill
 - ☒ 3. made a hash of
 - ☒ 4. made both ends meet

Question ID : 26433084759

Status : Not Answered

Chosen Option : --

Q.11 Select the most appropriate option to fill in the blank.
William couldn't stop _____ against the comments of the officer.

- Ans
- ☒ 1. reacting
 - ☒ 2. opening
 - ☒ 3. responding
 - ☒ 4. starting

Question ID : 26433091379

Status : Not Answered

Chosen Option : --

Q.12 Select the most appropriate ANTONYM of the given word.

Just

- Ans
- ☒ 1. Unfair
 - ☒ 2. Gullible
 - ☒ 3. Honest
 - ☒ 4. Jovial

Question ID : 26433092071

Status : Not Answered

Chosen Option : --

Q.13 The following sentence has been divided into parts. One of them may contain an error. Select the part that contains the error from the given options. If you don't find any error, mark 'No error' as your answer.

The technician has found it / extremely difficult to fix / the error in the programme.

- Ans ☒ 1. The technician has found it
☒ 2. No error
☒ 3. the error in the programme
☒ 4. extremely difficult to fix

Question ID : **26433094751**
Status : **Not Answered**
Chosen Option : --

Q.14 Select the most appropriate synonym of the underlined word in the following sentence.

He and his family members live in prosperity.

- Ans ☒ 1. Poverty
☒ 2. Richness
☒ 3. Loft
☒ 4. Hardship

Question ID : **26433072353**
Status : **Not Answered**
Chosen Option : --

Q.15 Select the most appropriate option that can substitute the underlined segment in the given sentence. If there is no need to substitute it, select 'No substitution'.

They found it difficult to extract relevent information from the officer.

- Ans ☒ 1. No substitution
☒ 2. relevint
☒ 3. relevant
☒ 4. relivant

Question ID : **26433074004**
Status : **Not Answered**
Chosen Option : --

Comprehension:

In the following passage, some words have been deleted. Read the passage carefully and select the most appropriate option to fill in each blank.

Why does a person become overconfident? The reason lies in over assessment of his capabilities. Sometimes people over assess their (1) _____ and jump into situations that are beyond their control.

Napoleon Bonaparte who became Emperor of France would say that the word 'impossible' was common only (2) _____ fools. The overconfident Napoleon invaded Russia in the winter of 1812. This proved to be a big disaster.

Overconfidence generally (3) _____ people into misadventures, endangering their chances in life. It is wisely said that any achievement is a result of two factors – one's personal planning and support from the external world. People take into account only their planning, generally ignoring external factors. As a result they are unable to (4) _____ future developments. Hence, a great risk of failure.

Then there is the question: how can one manage overconfidence? The formula is very simple.

Before making a decision, discuss the matter with other informed people with an objective mind and when it is proved that you are about to go off the path, accept reality and say without delay, "I was wrong".

Overconfidence is a (5) _____ characterising people who lack the virtue of modesty.

Modesty makes you a realist; you become a person who is cut down to size. People of this kind become very cautious; before taking an action they assess the whole situation. They adopt a realistic approach.

SubQuestion No : 16

Q.16 Select the most appropriate option to fill in blank number 1.

Ans ☒ 1. liability

☒ 2. competence

☒ 3. fidelity

☒ 4. endowment

Question ID : 26433088919

Status : Not Answered

Chosen Option : --

Comprehension:

In the following passage, some words have been deleted. Read the passage carefully and select the most appropriate option to fill in each blank.

Why does a person become overconfident? The reason lies in over assessment of his capabilities. Sometimes people over assess their (1) _____ and jump into situations that are beyond their control.

Napoleon Bonaparte who became Emperor of France would say that the word 'impossible' was common only (2) _____ fools. The overconfident Napoleon invaded Russia in the winter of 1812. This proved to be a big disaster.

Overconfidence generally (3) _____ people into misadventures, endangering their chances in life. It is wisely said that any achievement is a result of two factors – one's personal planning and support from the external world. People take into account only their planning, generally ignoring external factors. As a result they are unable to (4) _____ future developments. Hence, a great risk of failure.

Then there is the question: how can one manage overconfidence? The formula is very simple.

Before making a decision, discuss the matter with other informed people with an objective mind and when it is proved that you are about to go off the path, accept reality and say without delay, "I was wrong".

Overconfidence is a (5) _____ characterising people who lack the virtue of modesty.

Modesty makes you a realist; you become a person who is cut down to size. People of this kind become very cautious; before taking an action they assess the whole situation. They adopt a realistic approach.

SubQuestion No : 17

Q.17 Select the most appropriate option to fill in blank number 2.

Ans ☒ 1. betwixt

☒ 2. amongst

☒ 3. mid

☒ 4. through

Question ID : 26433088920

Status : Not Answered

Chosen Option : --

Comprehension:

In the following passage, some words have been deleted. Read the passage carefully and select the most appropriate option to fill in each blank.

Why does a person become overconfident? The reason lies in over assessment of his capabilities. Sometimes people over assess their (1) _____ and jump into situations that are beyond their control.

Napoleon Bonaparte who became Emperor of France would say that the word 'impossible' was common only (2) _____ fools. The overconfident Napoleon invaded Russia in the winter of 1812. This proved to be a big disaster.

Overconfidence generally (3) _____ people into misadventures, endangering their chances in life. It is wisely said that any achievement is a result of two factors – one's personal planning and support from the external world. People take into account only their planning, generally ignoring external factors. As a result they are unable to (4) _____ future developments. Hence, a great risk of failure.

Then there is the question: how can one manage overconfidence? The formula is very simple.

Before making a decision, discuss the matter with other informed people with an objective mind and when it is proved that you are about to go off the path, accept reality and say without delay, "I was wrong".

Overconfidence is a (5) _____ characterising people who lack the virtue of modesty.

Modesty makes you a realist; you become a person who is cut down to size. People of this kind become very cautious; before taking an action they assess the whole situation. They adopt a realistic approach.

SubQuestion No : 18

Q.18 Select the most appropriate option to fill in blank number 3.

Ans ☒ 1. convoys

☒ 2. leads

☒ 3. manages

☒ 4. attends

Question ID : 26433088921

Status : **Not Answered**

Chosen Option : --

Comprehension:

In the following passage, some words have been deleted. Read the passage carefully and select the most appropriate option to fill in each blank.

Why does a person become overconfident? The reason lies in over assessment of his capabilities. Sometimes people over assess their (1) _____ and jump into situations that are beyond their control.

Napoleon Bonaparte who became Emperor of France would say that the word 'impossible' was common only (2) _____ fools. The overconfident Napoleon invaded Russia in the winter of 1812. This proved to be a big disaster.

Overconfidence generally (3) _____ people into misadventures, endangering their chances in life. It is wisely said that any achievement is a result of two factors – one's personal planning and support from the external world. People take into account only their planning, generally ignoring external factors. As a result they are unable to (4) _____ future developments. Hence, a great risk of failure.

Then there is the question: how can one manage overconfidence? The formula is very simple. Before making a decision, discuss the matter with other informed people with an objective mind and when it is proved that you are about to go off the path, accept reality and say without delay, "I was wrong".

Overconfidence is a (5) _____ characterising people who lack the virtue of modesty. Modesty makes you a realist; you become a person who is cut down to size. People of this kind become very cautious; before taking an action they assess the whole situation. They adopt a realistic approach.

SubQuestion No : 19

Q.19 Select the most appropriate option to fill in blank number 4.

Ans ☒ 1. look

☒ 2. foresee

☒ 3. divine

☒ 4. alert

Question ID : 26433088922

Status : Not Answered

Chosen Option : --

Comprehension:

In the following passage, some words have been deleted. Read the passage carefully and select the most appropriate option to fill in each blank.

Why does a person become overconfident? The reason lies in over assessment of his capabilities. Sometimes people over assess their (1) _____ and jump into situations that are beyond their control.

Napoleon Bonaparte who became Emperor of France would say that the word 'impossible' was common only (2) _____ fools. The overconfident Napoleon invaded Russia in the winter of 1812. This proved to be a big disaster.

Overconfidence generally (3) _____ people into misadventures, endangering their chances in life. It is wisely said that any achievement is a result of two factors – one's personal planning and support from the external world. People take into account only their planning, generally ignoring external factors. As a result they are unable to (4) _____ future developments. Hence, a great risk of failure.

Then there is the question: how can one manage overconfidence? The formula is very simple. Before making a decision, discuss the matter with other informed people with an objective mind and when it is proved that you are about to go off the path, accept reality and say without delay, "I was wrong".

Overconfidence is a (5) _____ characterising people who lack the virtue of modesty. Modesty makes you a realist; you become a person who is cut down to size. People of this kind become very cautious; before taking an action they assess the whole situation. They adopt a realistic approach.

SubQuestion No : 20

Q.20 Select the most appropriate option to fill in blank number 5.

Ans ☒ 1. malformation

☒ 2. flaw

☒ 3. impairment

☒ 4. kink

Question ID : 26433088923

Status : Not Answered

Chosen Option : --

Section : Part-D-Hindi

Q.1 मुझे अभी बहुत बातें सीखना है।
उपरोक्त वाक्य के किस भाग में अशुद्धि है?

Ans ☒ 1. मुझे

☒ 2. अभी बहुत

☒ 3. बातें

☒ 4. सीखना है।

Question ID : 26433079759

Status : Answered

Chosen Option : 4

Q.2 'ऐसे साहित्य के रचयिता अधिक मात्रा में व्याप्त हैं।' – वाक्य के रेखांकित भाग को उचित विकल्प चुनकर प्रतिस्थापित करें।

Ans ☒ 1. अधिक संख्या में व्याप्त

☒ 2. अधिक मात्रा में विद्यमान

☒ 3. बहुत मात्रा में विद्यमान

☒ 4. अधिक संख्या में विद्यमान

Question ID : 26433062810

Status : Answered

Chosen Option : 2

Q.3 निम्न वाक्य में रेखांकित अंश के स्थान पर सबसे उपयुक्त शब्द का चयन विकल्पों में से कीजिए।
इंदिरा गांधी भारत की राजनेता थीं।

- Ans ☒ 1. राजनेत्री
☐ 2. अभिनेता
☐ 3. राजकुमारी
☐ 4. अभिनेत्री

Question ID : 26433072581
Status : Answered
Chosen Option : 1

Q.4 नीचे दिए वाक्यांश के लिए उचित शब्द दिए गए विकल्पों में से चुनिए-
जिसके पास न पहुँचा जा सके

- Ans ☐ 1. अगाध
☐ 2. अगेय
☒ 3. अगम्य
☐ 4. अगवानी

Question ID : 26433062384
Status : Answered
Chosen Option : 3

Q.5 'व्यायामशाला _____।'
उपर्युक्त वाक्य में रिक्त स्थान पर आने वाले उपयुक्त विकल्प का चयन कीजिए।

- Ans ☒ 1. वह स्थान है, जहाँ व्यायाम किया जाता है
☐ 2. वह स्थान है, जहाँ बैठकर चर्चा होती है
☐ 3. वह स्थान है, जहाँ हवन किया जाता है
☐ 4. वह स्थान है, जहाँ न्याय किया जाता है

Question ID : 26433067046
Status : Answered
Chosen Option : 1

Q.6 निम्नलिखित विकल्पों में से कौनसा एक वाक्य अनुबद्ध क्रिया-विशेषण से सम्बन्ध नहीं रखता है?

- Ans ☐ 1. मैंने उसे देखा भर था।
☐ 2. सीता गा तो सकती है।
☒ 3. कल वह गया ही नहीं।
☐ 4. यह कार्य तो किसी ने कर दिया।

Question ID : 26433091236
Status : Answered
Chosen Option : 4

Q.7 'आटे दाल का _____ मालूम होना' इस मुहावरे को पूरा करें।

- Ans
- ☒ 1. रुपया
 - ☒ 2. पैसा
 - ☒ 3. रंग
 - ☒ 4. भाव

Question ID : 26433066817

Status : Answered

Chosen Option : 4

Q.8 निम्न वाक्यांश के लिए एक शब्द का चयन कीजिए।
जिसका जन्म बाद में हुआ हो

- Ans
- ☒ 1. अतुल
 - ☒ 2. अनुज
 - ☒ 3. तनुज
 - ☒ 4. अन्या

Question ID : 26433070089

Status : Answered

Chosen Option : 2

Q.9 जिनका जीवन काँटों के बीच बीतता है वही _____ की चुभन सह सकते हैं।
उपरोक्त वाक्य के रिक्त स्थान को काँटों के पर्याय से पूर्ण कीजिए।

- Ans
- ☒ 1. कील
 - ☒ 2. शूल
 - ☒ 3. शर
 - ☒ 4. बाण

Question ID : 26433080851

Status : Answered

Chosen Option : 3

Q.10 निम्नलिखित वाक्य में रिक्तस्थान की पूर्ति उचित एकार्थी शब्द से करें-
_____ का प्रकोप सब कुछ उखाड़ देता है जबकि _____ का प्रकोप सब कुछ जला देता है।

- Ans
- ☒ 1. अग्नि-मार्ग
 - ☒ 2. सुंदर-तेज
 - ☒ 3. अनिल-अनल
 - ☒ 4. अभिनेता-अग्नि

Question ID : 26433091324

Status : Answered

Chosen Option : 3

Q.11 'आज हवा का वेग अत्यंत तीव्र है।'

उक्त वाक्य में प्रयुक्त 'तीव्र' के स्थान पर उसके विलोम शब्द का प्रयोग निम्न में से किस वाक्य में किया गया है?

- Ans
- ☒ 1. आज हवा का वेग अत्यंत उग्र है।
 - ☒ 2. आज हवा का वेग अत्यंत मंद है।
 - ☒ 3. आज हवा का वेग अत्यंत प्रखर है।
 - ☒ 4. आज हवा का वेग अत्यंत तेज है।

Question ID : 26433067025

Status : Answered

Chosen Option : 2

Q.12 'दिवा-रात्रि' का निम्न में से कौन सा समानार्थी शब्द दिए गए वाक्य में रिक्त स्थान पर प्रयुक्त हो सकता है?

महाशिवरात्रि के समय लोग _____ जागते रहते हैं।

- Ans
- ☒ 1. निर्जल
 - ☒ 2. भरपेट
 - ☒ 3. दिनभर
 - ☒ 4. अहर्निश

Question ID : 26433079243

Status : Answered

Chosen Option : 4

Q.13 'रौनक को चोट लगने पर _____ उपचार के लिए अस्पताल ले जाया गया।' वाक्य में रिक्त स्थान की पूर्ति शुद्ध शब्द द्वारा कीजिए।

- Ans
- ☒ 1. तत्कालिक
 - ☒ 2. तत्कालिक
 - ☒ 3. तत्कालीन
 - ☒ 4. तात्कालिक

Question ID : 26433069706

Status : Answered

Chosen Option : 4

Q.14 निम्नलिखित विकल्पों में से कौन सा एक वाक्य क्रिया-विशेषण से सम्बन्ध रखता है?

- Ans
- ☒ 1. घोड़ा बहुत तेज दौड़ता है।
 - ☒ 2. सोहन सोता है।
 - ☒ 3. बच्चा रोता है।
 - ☒ 4. मोहन हँसता है।

Question ID : 26433062948

Status : Answered

Chosen Option : 1

Q.15 'दाँतों तले उँगली दबाना' मुहावरे का उचित अर्थ है-

- Ans
- ☒ 1. खीस काढ़ना
 - ☒ 2. उँगली में दर्द होना
 - ☒ 3. बहुत भूख लगना
 - ☒ 4. चकित होना

Question ID : 26433065877

Status : Answered

Chosen Option : 4

Comprehension:

निम्नलिखित गद्यांश में कुछ शब्दों को हटा दिया गया है। दिए गए विकल्पों की सहायता से रिक्त स्थानों की पूर्ति कीजिए। प्रत्येक संख्या के लिए सबसे उपयुक्त विकल्प का चयन करें।

बच्चों का अपहरण करना, उन्हें बेचना अथवा उनसे ज़बरदस्ती मज़दूरी कराना 1. _____ अपराध है। सरकार द्वारा इस संबंध में 2. _____ बनाए गए हैं किन्तु उनके क्रियान्वयन का 3. _____ अन्य सरकारी संगठनों पर है। भारत में 5 से 15 वर्ष तक के 4. _____ मजदूरों की संख्या लगभग एक करोड़ से कुछ ऊपर है। सरकारी तंत्र के साथ हमारे पूरे समाज को भी इस दिशा में 5. _____ होना होगा।

SubQuestion No : 16

Q.16 रिक्त स्थान 1 की पूर्ति के लिए सबसे उपयुक्त विकल्प का चयन कीजिए।

- Ans
- ☒ 1. विफल
 - ☒ 2. दयनीय
 - ☒ 3. सोचनीय
 - ☒ 4. दंडनीय

Question ID : 264330111107

Status : Answered

Chosen Option : 4

Comprehension:

निम्नलिखित गद्यांश में कुछ शब्दों को हटा दिया गया है। दिए गए विकल्पों की सहायता से रिक्त स्थानों की पूर्ति कीजिए। प्रत्येक संख्या के लिए सबसे उपयुक्त विकल्प का चयन करें।

बच्चों का अपहरण करना, उन्हें बेचना अथवा उनसे ज़बरदस्ती मज़दूरी कराना 1. _____ अपराध है। सरकार द्वारा इस संबंध में 2. _____ बनाए गए हैं किन्तु उनके क्रियान्वयन का 3. _____ अन्य सरकारी संगठनों पर है। भारत में 5 से 15 वर्ष तक के 4. _____ मजदूरों की संख्या लगभग एक करोड़ से कुछ ऊपर है। सरकारी तंत्र के साथ हमारे पूरे समाज को भी इस दिशा में 5. _____ होना होगा।

SubQuestion No : 17

Q.17 रिक्त स्थान 2 की पूर्ति के लिए सबसे उपयुक्त विकल्प का चयन कीजिए।

- Ans
- ☒ 1. कानून
 - ☒ 2. समय
 - ☒ 3. विचार
 - ☒ 4. पुस्तकें

Question ID : 264330111108

Status : Answered

Chosen Option : 1

Comprehension:

निम्नलिखित गद्यांश में कुछ शब्दों को हटा दिया गया है। दिए गए विकल्पों की सहायता से रिक्त स्थानों की पूर्ति कीजिए। प्रत्येक संख्या के लिए सबसे उपयुक्त विकल्प का चयन करें।

बच्चों का अपहरण करना, उन्हें बेचना अथवा उनसे ज़बरदस्ती मज़दूरी कराना 1. _____ अपराध है। सरकार द्वारा इस संबंध में 2. _____ बनाए गए हैं किन्तु उनके क्रियान्वयन का 3. _____ अन्य सरकारी संगठनों पर है। भारत में 5 से 15 वर्ष तक के 4. _____ मजदूरों की संख्या लगभग एक करोड़ से कुछ ऊपर है। सरकारी तंत्र के साथ हमारे पूरे समाज को भी इस दिशा में 5. _____ होना होगा।

SubQuestion No : 18

Q.18 रिक्त स्थान 3 की पूर्ति के लिए सबसे उपयुक्त विकल्प का चयन कीजिए।

- Ans ☒ 1. उत्तरदायित्व
☒ 2. अभ्यस्त
☒ 3. अहित
☒ 4. संबंध

Question ID : 264330111109

Status : Answered

Chosen Option : 1

Comprehension:

निम्नलिखित गद्यांश में कुछ शब्दों को हटा दिया गया है। दिए गए विकल्पों की सहायता से रिक्त स्थानों की पूर्ति कीजिए। प्रत्येक संख्या के लिए सबसे उपयुक्त विकल्प का चयन करें।

बच्चों का अपहरण करना, उन्हें बेचना अथवा उनसे ज़बरदस्ती मज़दूरी कराना 1. _____ अपराध है। सरकार द्वारा इस संबंध में 2. _____ बनाए गए हैं किन्तु उनके क्रियान्वयन का 3. _____ अन्य सरकारी संगठनों पर है। भारत में 5 से 15 वर्ष तक के 4. _____ मजदूरों की संख्या लगभग एक करोड़ से कुछ ऊपर है। सरकारी तंत्र के साथ हमारे पूरे समाज को भी इस दिशा में 5. _____ होना होगा।

SubQuestion No : 19

Q.19 रिक्त स्थान 4 की पूर्ति के लिए सबसे उपयुक्त विकल्प का चयन कीजिए।

- Ans ☒ 1. श्रमिक
☒ 2. बड़े
☒ 3. मेहनती
☒ 4. बाल

Question ID : 264330111110

Status : Answered

Chosen Option : 4

Comprehension:

निम्नलिखित गद्यांश में कुछ शब्दों को हटा दिया गया है। दिए गए विकल्पों की सहायता से रिक्त स्थानों की पूर्ति कीजिए। प्रत्येक संख्या के लिए सबसे उपयुक्त विकल्प का चयन करें।

बच्चों का अपहरण करना, उन्हें बेचना अथवा उनसे ज़बरदस्ती मज़दूरी कराना 1. _____ अपराध है। सरकार द्वारा इस संबंध में 2. _____ बनाए गए हैं किन्तु उनके क्रियान्वयन का 3. _____ अन्य सरकारी संगठनों पर है। भारत में 5 से 15 वर्ष तक के 4. _____ मजदूरों की संख्या लगभग एक करोड़ से कुछ ऊपर है। सरकारी तंत्र के साथ हमारे पूरे समाज को भी इस दिशा में 5. _____ होना होगा।

SubQuestion No : 20

Q.20 रिक्त स्थान 5 की पूर्ति के लिए सबसे उपयुक्त विकल्प का चयन कीजिए।

- Ans
- ☒ 1. व्यक्तिगत
 - ☒ 2. नियमित
 - ☒ 3. सक्रिय
 - ☒ 4. निष्क्रिय

Question ID : 264330111111

Status : Answered

Chosen Option : 2