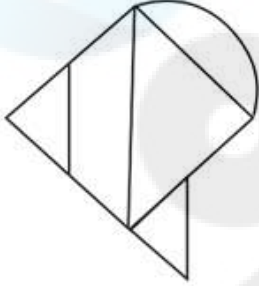


Combined Graduate Level Examination 2024 Tier I

Roll Number	
Candidate Name	
Venue Name	
Exam Date	09/09/2024
Exam Time	12:30 PM - 1:30 PM
Subject	Combined Graduate Level Examination Tier I

Section : General Intelligence and Reasoning

Q.1 How many triangles are there in the given figure?



- Ans 1. 4
 2. 6
 3. 3
 4. 5

Question ID : 630680296586
Option 1 ID : 6306801153996
Option 2 ID : 6306801153998
Option 3 ID : 6306801153995
Option 4 ID : 6306801153997

Status : Answered

Chosen Option : 1

Q.2 Select the correct mirror image of the given figure when the mirror is placed at MN as shown.



Ans

- 1. U M X L M
- 2. U W X J W
- 3. U M X J M
- 4. U W X L M

Question ID : 630680389694

Option 1 ID : 6306801519237

Option 2 ID : 6306801519236

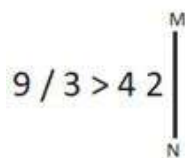
Option 3 ID : 6306801519235

Option 4 ID : 6306801519234

Status : Answered

Chosen Option : 4

Q.3 Select the correct mirror image of the given figure when the mirror is placed at MN as shown below.



Ans

- 1. 54 < /3 e
- 2. 54 < 3 \ e
- 3. 24 < 3 \ e
- 4. 9/3 < 5

Question ID : 630680300290

Option 1 ID : 6306801168063

Option 2 ID : 6306801168065

Option 3 ID : 6306801168064

Option 4 ID : 6306801168066

Status : Answered

Chosen Option : 2

Q.4 Select the triad in which the numbers are related in the same way as are the numbers of the following triads.
(NOTE: Operations should be performed on the whole numbers, without breaking down the numbers into its constituent digits. E.g., 13 – Operations on 13 such as adding/deleting/multiplying etc. to 13 can be performed. Breaking down 13 into 1 and 3 and then performing mathematical operations on 1 and 3 is not allowed.)
(2, 3, 17)
(5, 2, 21)

- Ans 1. (3, 4, 23)
 2. (5, 6, 72)
 3. (2, 5, 42)
 4. (1, 4, 17)

Question ID : 630680166390
Option 1 ID : 630680644515
Option 2 ID : 630680644514
Option 3 ID : 630680644513
Option 4 ID : 630680644512
Status : Answered
Chosen Option : 4

Q.5 Select the option that represents the letters that when placed from left to right in the blanks below will complete the given letter series.
N _ B A N A _ A _ A N A N A B _ N A N A B A _ A N A

- Ans 1. ANANB
 2. NANAB
 3. ANABN
 4. ANBAN

Question ID : 630680416265
Option 1 ID : 6306801623825
Option 2 ID : 6306801623826
Option 3 ID : 6306801623824
Option 4 ID : 6306801623823
Status : Answered
Chosen Option : 4

Q.6 In a certain code language, 'let it go' is coded as 'vc nt ap' and 'this is it' is coded as 'mq vc lh'. What is the code for 'it' in that language?

- Ans 1. nt
 2. lh
 3. vc
 4. mq

Question ID : 630680222448
Option 1 ID : 630680863552
Option 2 ID : 630680863554
Option 3 ID : 630680863551
Option 4 ID : 630680863553
Status : Answered
Chosen Option : 3

Q.7 In this question, three statements are given, followed by three conclusions numbered I, II and III. Assuming the statements to be true, even if they seem to be at variance with commonly known facts, decide which of the conclusions logically follow(s) from the statements.

Statements:

All fans are brown.

Some brown are chairs.

Some chairs are plastic.

Conclusions:

I. Some brown are fans.

II. Some chairs are brown.

III. No chair is plastic.

Ans 1. Only conclusions II and III follow.

2. Only conclusion III follows.

3. None of the conclusions follows.

4. Only conclusions I and II follow.

Question ID : 630680416521

Option 1 ID : 6306801624848

Option 2 ID : 6306801624849

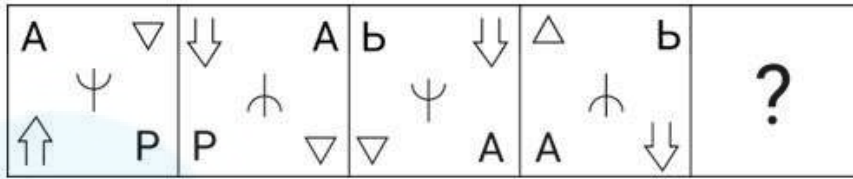
Option 3 ID : 6306801624850

Option 4 ID : 6306801624847

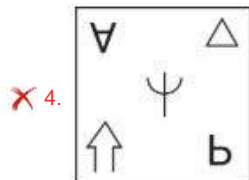
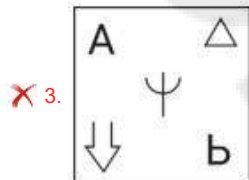
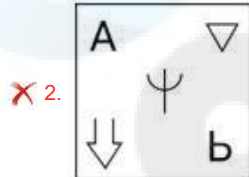
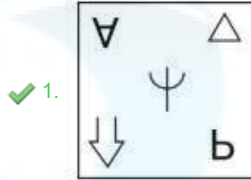
Status : Answered

Chosen Option : 4

Q.8 Select the figure from among the given options that can replace the question mark (?) and logically complete the series.



Ans



Question ID : 630680332551

Option 1 ID : 6306801293643

Option 2 ID : 6306801293642

Option 3 ID : 6306801293641

Option 4 ID : 6306801293644

Status : Answered

Chosen Option : 3

Q.9 In a certain code language,
 R + T means 'R is the sister of T'.
 R - T means 'R is the father of T'.
 R * T means 'R is the wife of T'.
 R ÷ T means 'R is the mother of T'.
 Based on the above, how is F related to C if 'A + B - C ÷ D * E - F ÷ G'?

Ans ✗ 1. Wife

✗ 2. Daughter

✓ 3. Daughter's daughter

✗ 4. Mother

Question ID : 630680332510

Option 1 ID : 6306801293478

Option 2 ID : 6306801293477

Option 3 ID : 6306801293479

Option 4 ID : 6306801293480

Status : Answered

Chosen Option : 3

Q.10 Select the word-pair that best represents a similar relationship to the one expressed in the pair of words given below.
(The words must be considered as meaningful English words and must NOT be related to each other based on the number of letters/number of consonants/vowels in the word)

Egypt : Nile

- Ans
- 1. South Korea : Mekong
 - 2. Brazil : Colorado
 - 3. Russia : Mississippi
 - 4. Myanmar : Irrawaddy

Question ID : 630680417416
Option 1 ID : 6306801628428
Option 2 ID : 6306801628427
Option 3 ID : 6306801628429
Option 4 ID : 6306801628430
Status : Not Answered
Chosen Option : --

Q.11 In a certain code language, 'It's your life' is written as 'Ao Bo Co' and 'It's your food' is written as 'Ba Co Bo'. How will 'food' be written in that language?

- Ans
- 1. Ba
 - 2. Bo
 - 3. Ao
 - 4. Co

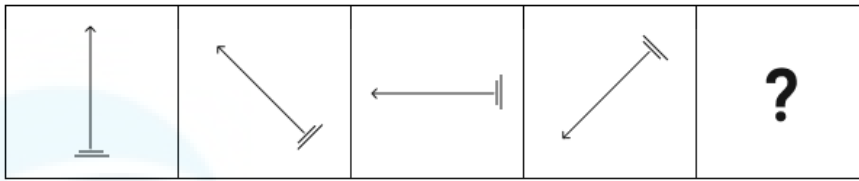
Question ID : 630680339166
Option 1 ID : 6306801319233
Option 2 ID : 6306801319234
Option 3 ID : 6306801319236
Option 4 ID : 6306801319235
Status : Answered
Chosen Option : 1

Q.12 The position of how many letters will change, if each of the letters in the word 'SYSTEM' is arranged in the English alphabetical order?

- Ans
- 1. Three
 - 2. Five
 - 3. Four
 - 4. Six

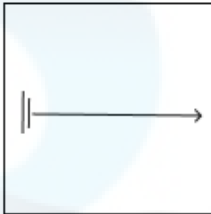
Question ID : 63068085633
Option 1 ID : 630680332027
Option 2 ID : 630680332026
Option 3 ID : 630680332025
Option 4 ID : 630680332024
Status : Answered
Chosen Option : 2

Q.13 Identify the figure given in the options which when put in place of the question mark (?) will logically complete the series.

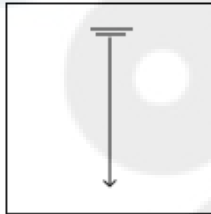


Ans

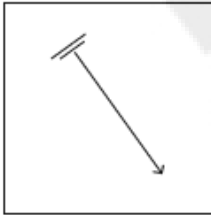
✗ 1.



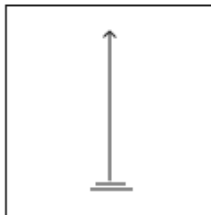
✓ 2.



✗ 3.



✗ 4.



Question ID : 630680471481
Option 1 ID : 6306801841641
Option 2 ID : 6306801841639
Option 3 ID : 6306801841640
Option 4 ID : 6306801841638
Status : Answered
Chosen Option : 2

Q.14 Select the number from among the given options that can replace the question mark (?) in the following series.
99, 123, 150, 180, 213, ?

Ans ✗ 1. 248

✗ 2. 258

✗ 3. 259

✓ 4. 249

Question ID : 630680411893
Option 1 ID : 6306801606408
Option 2 ID : 6306801606410
Option 3 ID : 6306801606407
Option 4 ID : 6306801606409
Status : Answered
Chosen Option : 4

Q.15 Read the given statements and conclusions carefully. You have to take the given statements to be true even if they seem to be at variance from commonly known facts. You have to decide which conclusion(s) logically follow(s) from the given statements

Statements:

No river is a mountain.

Some rivers are animals.

Some birds are mountains.

Conclusions:

I: No animal is a mountain.

II: No river is a bird.

- Ans**
- 1. Both conclusions (I) and (II) follow
 - 2. Neither conclusion (I) nor (II) follows
 - 3. Only conclusion (I) follows
 - 4. Only conclusion (II) follows

Question ID : 630680401329

Option 1 ID : 6306801565120

Option 2 ID : 6306801565119

Option 3 ID : 6306801565117

Option 4 ID : 6306801565118

Status : Answered

Chosen Option : 2

Q.16 Select the set in which the numbers are related in the same way as are the numbers of the following sets.

(NOTE: Operations should be performed on the whole numbers, without breaking down the numbers into its constituent digits. E.g. 13 – Operations on 13 such as adding /deleting /multiplying etc. to 13 can be performed. Breaking down 13 into 1 and 3 and then performing mathematical operations on 1 and 3 is not allowed.)

(18, 378, 7)

(14, 210, 5)

- Ans**
- 1. (17, 272, 8)
 - 2. (17, 204, 6)
 - 3. (23, 230, 5)
 - 4. (15, 405, 9)

Question ID : 630680336437

Option 1 ID : 6306801308472

Option 2 ID : 6306801308470

Option 3 ID : 6306801308471

Option 4 ID : 6306801308469

Status : Answered

Chosen Option : 4

Q.17 Select the triad in which the numbers are related in the same way as are the numbers of the given triads.

(16, 33, 67), (19, 39, 79)

(NOTE : Operations should be performed on the whole numbers, without breaking down the numbers into its constituent digits. E.g. 13 – Operations on 13 such as adding /deleting /multiplying etc. to 13 can be performed. Breaking down 13 into 1 and 3 and then performing mathematical operations on 1 and 3 is not allowed)

Ans 1. (22, 45, 91)

2. (14, 27, 53)

3. (18, 36, 80)

4. (21, 45, 90)

Question ID : 630680319364

Option 1 ID : 6306801242364

Option 2 ID : 6306801242361

Option 3 ID : 6306801242362

Option 4 ID : 6306801242363

Status : Answered

Chosen Option : 1

Q.18 The same operation(s) are followed in all the given number pairs except one. Find that odd number pair.

(NOTE : Operations should be performed on the whole numbers, without breaking down the numbers into its constituent digits. E.g. 13 – Operations on 13 such as adding /deleting /multiplying etc., to 13 can be performed. Breaking down 13 into 1 and 3 and then performing mathematical operations on 1 and 3 is not allowed.)

Ans 1. 15 : 48

2. 12 : 39

3. 13 : 42

4. 11 : 35

Question ID : 630680412034

Option 1 ID : 6306801606973

Option 2 ID : 6306801606972

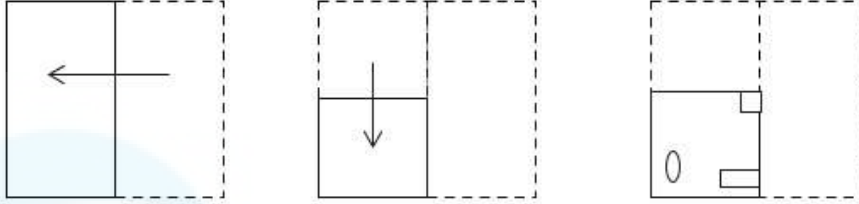
Option 3 ID : 6306801606971

Option 4 ID : 6306801606974

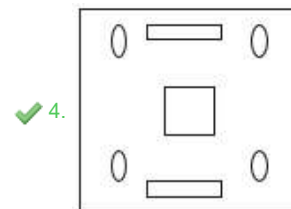
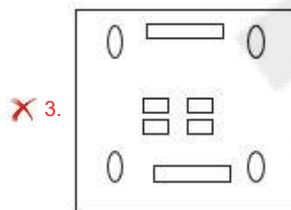
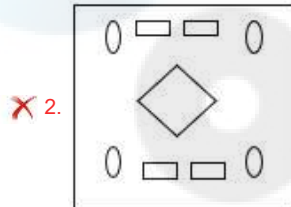
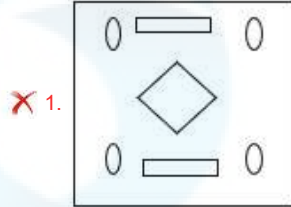
Status : Answered

Chosen Option : 4

Q.19 A paper is folded and cut as shown below. How will it appear when unfolded?



Ans



Question ID : 630680296645

Option 1 ID : 6306801154234

Option 2 ID : 6306801154231

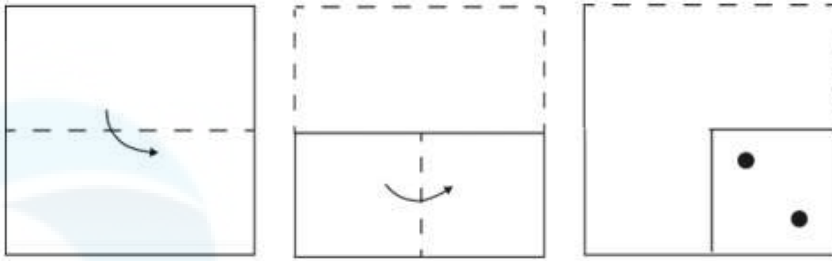
Option 3 ID : 6306801154233

Option 4 ID : 6306801154232

Status : Answered


Chosen Option : 4

Q.20 A square sheet of paper is folded along the dotted lines successively in the directions shown and is then punched in the last. How would the paper look when unfolded?




Ans


✗ 1.




✓ 2.



✗ 3.



✗ 4.



Question ID : 630680296060

Option 1 ID : 6306801151911

Option 2 ID : 6306801151909

Option 3 ID : 6306801151908

Option 4 ID : 6306801151910

Status : Answered

Chosen Option : 2

Q.21 Three of the following four letter-cluster pairs are alike in a certain way and thus form a group. Which is the letter-cluster pair that does NOT belong to that group?
(Note: The odd one out is not based on the number of consonants/vowels or their positions in the letter-cluster.)

- Ans
- 1. EJ - OT
 - 2. KP - UZ
 - 3. PF - OI
 - 4. CH - MR

Question ID : 630680797918
Option 1 ID : 6306803126614
Option 2 ID : 6306803126615
Option 3 ID : 6306803126612
Option 4 ID : 6306803126613
Status : Answered
Chosen Option : 3

Q.22 What will come in place of the question mark (?) in the following equation, if '+' and '-' are interchanged and 'x' and '÷' are interchanged?
 $1604 \times 4 - 525 \div 5 + 73 = ?$

- Ans
- 1. 2953
 - 2. 2935
 - 3. 2539
 - 4. 2395

Question ID : 630680411726
Option 1 ID : 6306801605739
Option 2 ID : 6306801605742
Option 3 ID : 6306801605741
Option 4 ID : 6306801605740
Status : Answered
Chosen Option : 1

Q.23 Select the letter-cluster from among the given options that can replace the question mark (?) to complete the given series.
BVTO, DTVM, ?, HPZI, JNBG

- Ans
- 1. RFXK
 - 2. RXFK
 - 3. FKXR
 - 4. FRXK

Question ID : 630680416238
Option 1 ID : 6306801623718
Option 2 ID : 6306801623715
Option 3 ID : 6306801623717
Option 4 ID : 6306801623716
Status : Answered
Chosen Option : 4

Q.24 Select the option that can replace the question mark (?) in the following series.
VO39, TM35, RK31, PI27, ?

- Ans
- 1. OH24
 - 2. MG22
 - 3. NG23
 - 4. MH24

Question ID : 630680416299
Option 1 ID : 6306801623962
Option 2 ID : 6306801623959
Option 3 ID : 6306801623961
Option 4 ID : 6306801623960
Status : Answered
Chosen Option : 3

Q.25 What will come in the place of '?' in the following equation, if '+' and '-' are interchanged and 'x' and '÷' are interchanged?

$$4 \div 6 + 91 \times 7 - 5 = ?$$

- Ans
- 1. 12
 - 2. 21
 - 3. 16
 - 4. 17

Question ID : 630680339254
Option 1 ID : 6306801319585
Option 2 ID : 6306801319587
Option 3 ID : 6306801319588
Option 4 ID : 6306801319586
Status : Answered
Chosen Option : 3

Section : General Awareness

Q.1 In which part of India does the hot wind 'Loo' blow?

- Ans
- 1. South and Southwestern
 - 2. East and Northeastern
 - 3. West and Southwestern
 - 4. North and Northwestern

Question ID : 630680400885
Option 1 ID : 6306801563377
Option 2 ID : 6306801563379
Option 3 ID : 6306801563380
Option 4 ID : 6306801563378
Status : Answered
Chosen Option : 4

Q.2 The first southern campaign of Alauddin Khilji in 1307-08 AD was led to which of the following regions?

- Ans**
- 1. Madura
 - 2. Warangal
 - 3. Dwar Samudra
 - 4. Devagiri

Question ID : 630680412410
Option 1 ID : 6306801608466
Option 2 ID : 6306801608464
Option 3 ID : 6306801608465
Option 4 ID : 6306801608463
Status : Not Answered
Chosen Option : --

Q.3 Which of the following can be represented as a functional unit of nature?

- Ans**
- 1. Ecosystem
 - 2. Humans
 - 3. Vehicles
 - 4. Plants

Question ID : 630680314146
Option 1 ID : 6306801222392
Option 2 ID : 6306801222391
Option 3 ID : 6306801222389
Option 4 ID : 6306801222390
Status : Answered
Chosen Option : 4

Q.4 At what latitude does the easterly jet stream blow over peninsular India during the summer months?

- Ans**
- 1. 30°N
 - 2. 24°N
 - 3. 28°N
 - 4. 14°N

Question ID : 63068094175
Option 1 ID : 630680365398
Option 2 ID : 630680365396
Option 3 ID : 630680365397
Option 4 ID : 630680365395
Status : Marked For Review
Chosen Option : 2

Q.5 The inaugural match of the Women Premier League 2023 cricket was played in which of the following venues?

- Ans**
- 1. Chennai
 - 2. Kolkata
 - 3. Delhi
 - 4. Mumbai

Question ID : 630680510787
Option 1 ID : 6306801996281
Option 2 ID : 6306801996279
Option 3 ID : 6306801996280
Option 4 ID : 6306801996278
Status : Answered
Chosen Option : 4

Q.6 When electricity is passed through water, what kind of chemical reaction occurs?

- Ans** 1. Decomposition
 2. Double displacement
 3. Combination
 4. Displacement

Question ID : 630680184313
Option 1 ID : 630680714263
Option 2 ID : 630680714264
Option 3 ID : 630680714261
Option 4 ID : 630680714262
Status : Marked For Review
Chosen Option : 1

Q.7 Which music-composer duo was honoured with the National Lata Mangeskar Award for the year 2020?

- Ans** 1. Jatin-Lalit
 2. Anand-Milind
 3. Salim-Sulaiman
 4. Sachin-Jigar

Question ID : 630680511808
Option 1 ID : 6306802000205
Option 2 ID : 6306802000204
Option 3 ID : 6306802000203
Option 4 ID : 6306802000202
Status : Not Answered
Chosen Option : --

Q.8 In which of the following states is Govindji Nartanalaya located?

- Ans** 1. Assam
 2. Nagaland
 3. Tripura
 4. Manipur

Question ID : 630680216044
Option 1 ID : 630680838152
Option 2 ID : 630680838151
Option 3 ID : 630680838154
Option 4 ID : 630680838153
Status : Not Answered
Chosen Option : --

Q.9 In which state of India is Kund or Tanka used for water harvesting?

- Ans** 1. Uttar Pradesh
 2. Punjab
 3. Rajasthan
 4. Andhra Pradesh

Question ID : 630680209254
Option 1 ID : 630680811232
Option 2 ID : 630680811234
Option 3 ID : 630680811233
Option 4 ID : 630680811231
Status : Answered
Chosen Option : 1

Q.10 When was the High Court and Supreme Court Judges (Salaries and Conditions of Service) Amendment Bill, 2021 introduced in Lok Sabha?

Ans 1. 30 November 2021

2. 27 September 2021

3. 29 March 2021

4. 28 April 2021

Question ID : 630680119815

Option 1 ID : 630680464326

Option 2 ID : 630680464329

Option 3 ID : 630680464327

Option 4 ID : 630680464328

Status : Not Answered

Chosen Option : --

Q.11 Which condition, also known as icterus, causes a yellowing of your skin and the whites of your eyes?

Ans 1. Pemphigus

2. Ichthyosis

3. Eczema

4. Jaundice

Question ID : 630680407466

Option 1 ID : 6306801588805

Option 2 ID : 6306801588803

Option 3 ID : 6306801588802

Option 4 ID : 6306801588804

Status : Answered

Chosen Option : 4

Q.12 Which of the following inscriptions of Rudradaman happened to be the first royal inscription of early India composed in chaste Sanskrit?

Ans 1. Mehrauli

2. Prayag

3. Chirand

4. Girnar

Question ID : 630680412519

Option 1 ID : 6306801608902

Option 2 ID : 6306801608900

Option 3 ID : 6306801608901

Option 4 ID : 6306801608899

Status : Not Answered

Chosen Option : --

Q.13 According to Census of India 2011, in rural India, which state has the maximum female workforce participation rate?

- Ans 1. Andhra Pradesh
 2. Arunachal Pradesh
 3. Uttar Pradesh
 4. Himachal Pradesh

Question ID : 630680409644
Option 1 ID : 6306801597406
Option 2 ID : 6306801597408
Option 3 ID : 6306801597405
Option 4 ID : 6306801597407
Status : Answered
Chosen Option : 1

Q.14 Which of the following celebrations is dedicated to Sun God and his wife Usha to thank them for sustaining life on earth and for granting wishes?

- Ans 1. Vishwakarma Puja
 2. Madai Festival
 3. Sorath Sabha
 4. Chhath Puja

Question ID : 630680162600
Option 1 ID : 630680629696
Option 2 ID : 630680629698
Option 3 ID : 630680629699
Option 4 ID : 630680629697
Status : Not Answered
Chosen Option : --

Q.15 At which Olympics did Gagan Narang win a bronze medal?

- Ans 1. Beijing 2008
 2. London 2012
 3. Athens 2004
 4. Rio 2016

Question ID : 630680435730
Option 1 ID : 6306801700844
Option 2 ID : 6306801700842
Option 3 ID : 6306801700841
Option 4 ID : 6306801700843
Status : Not Answered
Chosen Option : --

Q.16 When was a Madrasa opened in Kolkata to promote the study of Arabic, Persian and Islamic law?

- Ans 1. 1772 C.E.
 2. 1783 C.E.
 3. 1781 C.E.
 4. 1774 C.E.

Question ID : 630680511539
Option 1 ID : 6306801999281
Option 2 ID : 6306801999278
Option 3 ID : 6306801999279
Option 4 ID : 6306801999280
Status : Not Answered
Chosen Option : --

Q.17 What is the IUPAC name of tertiarybutyl alcohol?

- Ans
- 1. 1-propylpropan-3-ol
 - 2. 1-ethylpropan-3-ol
 - 3. 1-Methylpropan-3-ol
 - 4. 2-Methylpropan-2-ol

Question ID : 630680113752
Option 1 ID : 630680440537
Option 2 ID : 630680440535
Option 3 ID : 630680440534
Option 4 ID : 630680440536
Status : Not Answered
Chosen Option : --

Q.18 Which Article of the Constitution explains that the executive power of every state shall be so exercised as not to impede or prejudice the exercise of the executive power of the Union, and the executive power of the union shall extend to the giving of such directions to a state as may appear to the Government of India to be necessary for that purpose?

- Ans
- 1. Article 123
 - 2. Article 261
 - 3. Article 257
 - 4. Article 247

Question ID : 630680408185
Option 1 ID : 6306801591635
Option 2 ID : 6306801591638
Option 3 ID : 6306801591637
Option 4 ID : 6306801591636
Status : Marked For Review
Chosen Option : 1

Q.19 Under the leadership of which of the following revolutionaries was Chittagong Armoury Raid conducted?

- Ans
- 1. Rash Behari Bose
 - 2. Surya Sen
 - 3. Hemu Kalani
 - 4. Badal Gupta

Question ID : 630680412375
Option 1 ID : 6306801608324
Option 2 ID : 6306801608325
Option 3 ID : 6306801608323
Option 4 ID : 6306801608326
Status : Not Answered
Chosen Option : --

Q.20 What is the relationship between interest rate and demand for money?

- Ans 1. Inverse
 2. Direct
 3. No relationship exists
 4. Proportionate

Question ID : 63068071460
Option 1 ID : 630680276388
Option 2 ID : 630680276387
Option 3 ID : 630680276389
Option 4 ID : 630680276386
Status : Answered
Chosen Option : 1

Q.21 The government of which of the following states created a draft policy in 2022 for senior citizens on the basis of article 41, which aims to form a directorate for the welfare of senior citizens?

- Ans 1. Karnataka
 2. Kerala
 3. Telangana
 4. Tamil Nadu

Question ID : 630680353932
Option 1 ID : 6306801377803
Option 2 ID : 6306801377802
Option 3 ID : 6306801377804
Option 4 ID : 6306801377801
Status : Not Answered
Chosen Option : --

Q.22 In the year 1952, who among the following lent his voice for the film 'Amar Bhupali', which was being produced in two languages simultaneously and he sang in both Bengali and Marathi ?

- Ans 1. Hemanta Mukherjee
 2. Debabrata Biswas
 3. Kishore Kumar
 4. Manna Dey

Question ID : 630680409224
Option 1 ID : 6306801595727
Option 2 ID : 6306801595728
Option 3 ID : 6306801595725
Option 4 ID : 6306801595726
Status : Not Answered
Chosen Option : --

Q.23 Which of the following statements correctly defines the green revolution?

- Ans**
- 1. It is a new strategy to use green colour for all purposes.
 - 2. It is a new strategy to increase the share of the forest.
 - 3. It is a new strategy in agriculture to produce food grains, especially wheat and rice.
 - 4. It is a new strategy to use only herbal products.

Question ID : 630680410831
Option 1 ID : 6306801602081
Option 2 ID : 6306801602080
Option 3 ID : 6306801602079
Option 4 ID : 6306801602082
Status : Answered
Chosen Option : 3

Q.24 In 2021, in which of the following states did the Prime Minister lay the foundation stone for the Raja Mahendra Pratap Singh State University?

- Ans**
- 1. Gujarat
 - 2. Himachal Pradesh
 - 3. Nagaland
 - 4. Uttar Pradesh

Question ID : 630680115305
Option 1 ID : 630680446570
Option 2 ID : 630680446572
Option 3 ID : 630680446573
Option 4 ID : 630680446571
Status : Not Answered
Chosen Option : --

Q.25 Which of the following is NOT correct about Directive Principles of State Policy?

- Ans**
- 1. They provide guidelines for the governance of the country.
 - 2. They are justiciable in nature.
 - 3. They are morally binding on the government.
 - 4. They ensure social and economic development.

Question ID : 630680229961
Option 1 ID : 630680892285
Option 2 ID : 630680892283
Option 3 ID : 630680892284
Option 4 ID : 630680892286
Status : Marked For Review
Chosen Option : 3

Section : Quantitative Aptitude

Q.1 What is the value of $\sec(t)$, if $\tan(t) = \frac{1}{3}$?

- Ans
- 1. $\frac{\sqrt{3}}{3}$
 - 2. $\frac{2\sqrt{2}}{3}$
 - 3. $\frac{\sqrt{10}}{3}$
 - 4. $\frac{\sqrt{10}}{9}$

Question ID : 630680526448
Option 1 ID : 6306802057860
Option 2 ID : 6306802057859
Option 3 ID : 6306802057858
Option 4 ID : 6306802057861
Status : Answered
Chosen Option : 3

Q.2 The points P and S are on the same side of the line segment QR, such that $\angle PQR = 90^\circ$, $\angle SRQ = 90^\circ$ and $PQ = SR$. Select the correct statement.

- Ans
- 1. $\triangle PQR \cong \triangle SRQ$ by RHS
 - 2. $\triangle PQR \cong \triangle SRQ$ by SAS
 - 3. $\triangle PQR \cong \triangle SQR$ by SAS
 - 4. $\triangle PQR \cong \triangle SQR$ by RHS

Question ID : 630680526485
Option 1 ID : 6306802058008
Option 2 ID : 6306802058007
Option 3 ID : 6306802058009
Option 4 ID : 6306802058006
Status : Answered
Chosen Option : 2

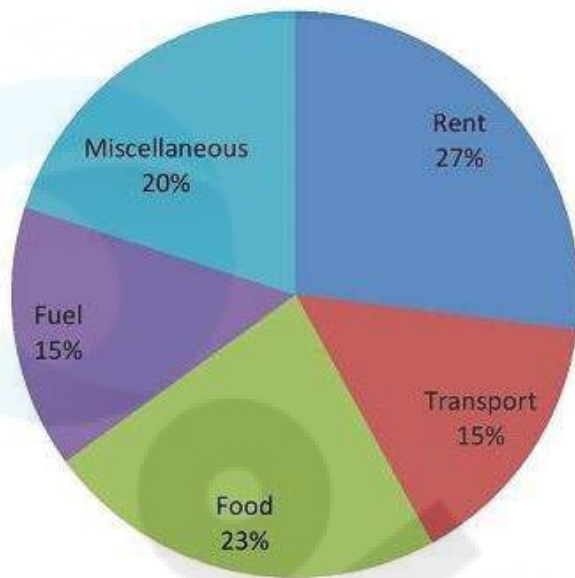
Q.3 Simplify

$$\frac{(8.3)^2 + (9.2)^2 + (6.1)^2 - 3 \times 8.3 \times 9.2 \times 6.1}{(8.3)^2 + (9.2)^2 + (6.1)^2 - 8.3 \times 9.2 - 9.2 \times 6.1 - 6.1 \times 8.3}$$

- Ans
- 1. 30.2
 - 2. 25.5
 - 3. 28.7
 - 4. 23.6

Question ID : 630680413471
Option 1 ID : 6306801612708
Option 2 ID : 6306801612710
Option 3 ID : 6306801612709
Option 4 ID : 6306801612711
Status : Answered
Chosen Option : 4

Q.4 The pie chart given below shows the expenditure (in percentage) of Aditya. The monthly income of Aditya is ₹54,000.



How much does he spend (in ₹) on Food?

- Ans 1. 12,420
 2. 13,420
 3. 12,240
 4. 11,240

Question ID : 630680403292
Option 1 ID : 6306801572667
Option 2 ID : 6306801572669
Option 3 ID : 6306801572668
Option 4 ID : 6306801572666
Status : Answered
Chosen Option : 1

Q.5 Madhav purchased an item for ₹42,000 and sold it at a loss of 20%. With that amount, he purchased another item and sold it at a gain of 30%. What is the overall gain (in ₹)?

- Ans 1. 6720
 2. 4200
 3. 2520
 4. 1680

Question ID : 630680428779
Option 1 ID : 6306801673161
Option 2 ID : 6306801673160
Option 3 ID : 6306801673163
Option 4 ID : 6306801673162
Status : Answered
Chosen Option : 4

Q.6 Seven years ago, Prachi was four times as old as her daughter was at that time. Four years from now, Prachi will be two-and-a-half times as old as her daughter would then be. Find the sum of the present ages (in years) of Prachi and her daughter.

Ans 1. 77

2. 49

3. 72

4. 69

Question ID : 630680325028

Option 1 ID : 6306801264510

Option 2 ID : 6306801264511

Option 3 ID : 6306801264512

Option 4 ID : 6306801264509

Status : Answered

Chosen Option : 4

Q.7 If a sum of ₹5,000 is taken at a simple rate of interest of 15% per annum for 3 years and another sum of ₹8,000 is taken at a simple interest of 12% per annum for 4 years, the positive difference of the interests paid is:

Ans 1. ₹1,286

2. ₹1,378

3. ₹1,643

4. ₹1,590

Question ID : 630680374179

Option 1 ID : 6306801457989

Option 2 ID : 6306801457990

Option 3 ID : 6306801457988

Option 4 ID : 6306801457987

Status : Answered

Chosen Option : 4

Q.8 Let C be a circle with centre O and P be an external point to C. Let PA and PB be two tangents to C with A and B being the points of tangency, respectively. If PA and PB are inclined to each other at an angle of 60° , then find $\angle POA$.

Ans 1. 80°

2. 30°

3. 40°

4. 60°

Question ID : 630680393335

Option 1 ID : 6306801533668

Option 2 ID : 6306801533666

Option 3 ID : 6306801533669

Option 4 ID : 6306801533667

Status : Answered

Chosen Option : 4

Q.9 The average temperature of a city for the first sixteen days of January is 22°C , and the average temperature for the last sixteen days of the same month is 26°C . If the average temperature for the entire month is 24°C , what is the temperature on the sixteenth day?

Ans 1. 23°C

2. 24°C

3. 25°C

4. 22°C

Question ID : 6306801047990

Option 1 ID : 6306804114003

Option 2 ID : 6306804114004

Option 3 ID : 6306804114005

Option 4 ID : 6306804114002

Status : Answered

Chosen Option : 2

Q.10 The monthly wages (in ₹) of three mess workers, Rahul, Sunil and Vipin, of a boy's hostel for three months are given in the following table. Study the table carefully and answer the question given below.

Mess workers/Month	October	November	December
Rahul	10800	11500	12000
Sunil	10000	10500	11500
Vipin	10400	11600	12200

In November, the wages of Sunil is what percentage of the wages of Rahul? (Correct up to two decimal places.)

Ans 1. 91.30%

2. 90.23%

3. 89.30%

4. 88.23%

Question ID : 630680383452

Option 1 ID : 6306801494706

Option 2 ID : 6306801494705

Option 3 ID : 6306801494704

Option 4 ID : 6306801494703

Status : Answered

Chosen Option : 1

Q.11 At present, A is thrice as old as B. C is 5 years elder than B. The sum of the ages of A, B, C is 75 years. The ratio of the age of B five years ago to the age of A three years from now is:

Ans 1. 1 : 4

2. 2 : 3

3. 1 : 5

4. 4 : 7

Question ID : 630680296190

Option 1 ID : 6306801152428

Option 2 ID : 6306801152429

Option 3 ID : 6306801152430

Option 4 ID : 6306801152431

Status : Answered

Chosen Option : 3

Q.12 Simplify the following. $\frac{\sin^3 A - \cos^3 A}{\sin A - \cos A}$, where A is an acute angle.

- Ans
- 1. $3 \cos A - 1$
 - 2. $1 - 3 \sin A$
 - 3. $\sin A + \cos A$
 - 4. $1 + \sin A \cos A$

Question ID : 630680151960
Option 1 ID : 630680587885
Option 2 ID : 630680587887
Option 3 ID : 630680587884
Option 4 ID : 630680587886
Status : Answered
Chosen Option : 4

Q.13 A right-angled isosceles triangle has an area of 50 square units. Its hypotenuse is (in units):

- Ans
- 1. $5\sqrt{5}$
 - 2. $10\sqrt{3}$
 - 3. $5\sqrt{2}$
 - 4. $10\sqrt{2}$

Question ID : 630680421358
Option 1 ID : 6306801643898
Option 2 ID : 6306801643896
Option 3 ID : 6306801643897
Option 4 ID : 6306801643895
Status : Answered
Chosen Option : 4

Q.14 What is the volume (in cm^3) of a cylinder if the radius of the cylinder is 8 cm and the height is 14 cm? (Take $\pi = \frac{22}{7}$)

- Ans
- 1. 2816
 - 2. 2686
 - 3. 2784
 - 4. 2456

Question ID : 630680421503
Option 1 ID : 6306801644477
Option 2 ID : 6306801644475
Option 3 ID : 6306801644476
Option 4 ID : 6306801644478
Status : Answered
Chosen Option : 1

Q.15 A person earns ₹16,000 per month and spends 80% of his income and saves the remaining amount. If his income increases by 20% and expenditure by 10%, find the percentage of increase in his savings.

- Ans**
- 1. 90%
 - 2. 120%
 - 3. 140%
 - 4. 60%

Question ID : 630680419641
Option 1 ID : 6306801637064
Option 2 ID : 6306801637063
Option 3 ID : 6306801637066
Option 4 ID : 6306801637065
Status : Answered
Chosen Option : 4

Q.16 The marked price of an article is 26% more than its cost price. If a discount of 32% is given, what will be the loss percentage?

- Ans**
- 1. 12.26%
 - 2. 15.25%
 - 3. 18.64%
 - 4. 14.32%

Question ID : 630680395016
Option 1 ID : 6306801540332
Option 2 ID : 6306801540334
Option 3 ID : 6306801540335
Option 4 ID : 6306801540333
Status : Answered
Chosen Option : 4

Q.17 Varun and Sandeep started for a car race from the same point, in the same direction and at the same time on a circular track of length 1635 m with the speeds of 90 km/h and 108 km/h, respectively. After how much time (in s) will they meet again for the first time?

- Ans**
- 1. 327
 - 2. 325
 - 3. 324
 - 4. 326

Question ID : 630680135271
Option 1 ID : 630680523846
Option 2 ID : 630680523848
Option 3 ID : 630680523849
Option 4 ID : 630680523847
Status : Answered
Chosen Option : 1

Q.18 The angles of triangle are such that one is average of other two, then the angles are:

1) $\frac{\pi}{6}, \frac{\pi}{3}, \frac{\pi}{2}$

2) $\frac{\pi}{3}, \frac{\pi}{3}, \frac{\pi}{2}$

3) $\frac{\pi}{6}, \frac{\pi}{3}, \frac{\pi}{4}$

4) $\frac{\pi}{2}, \frac{\pi}{2}, \frac{\pi}{3}$

Ans 1. 3

2. 1

3. 4

4. 2

Question ID : 630680397685

Option 1 ID : 6306801550675

Option 2 ID : 6306801550673

Option 3 ID : 6306801550676

Option 4 ID : 6306801550674

Status : Answered

Chosen Option : 2

Q.19 From a circle with the radius of 15.75 cm, a sector with the arc length of 11 cm is cut off. Find the area (in cm^2) of this sector.

Ans 1. 86.625

2. 86.875

3. 86.525

4. 86.125

Question ID : 630680196681

Option 1 ID : 630680763026

Option 2 ID : 630680763025

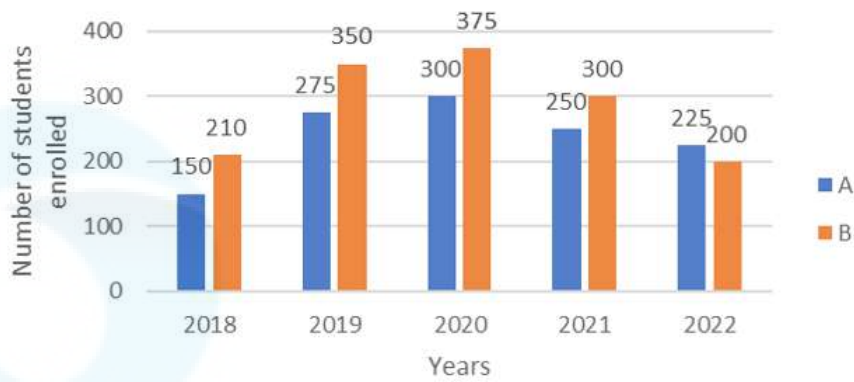
Option 3 ID : 630680763024

Option 4 ID : 630680763023

Status : Answered

Chosen Option : 1

Q.20 The given bar graph shows the number of students enrolled in Institutes A and B during 5 years (2018 to 2022).

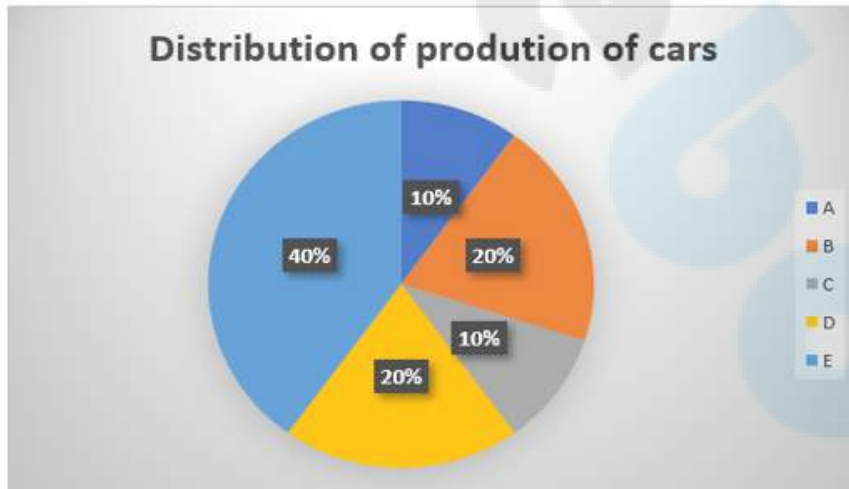


What is the ratio of the total students enrolled in Institute B in 2019, 2020 and 2022 to that of the total students enrolled in Institute A in 2018, 2020 and 2021?

- Ans
- 1. 11 : 28
 - 2. 28 : 37
 - 3. 37 : 28
 - 4. 28 : 11

Question ID : 630680422119
 Option 1 ID : 6306801646913
 Option 2 ID : 6306801646912
 Option 3 ID : 6306801646911
 Option 4 ID : 6306801646914
 Status : Answered
 Chosen Option : 3

Q.21 The given chart shows the production of different types of cars in the year 2021. Study the given chart and answer the question that follows.



If the total production in the year 2021 was 2,00,00,000, then what will be the central angle of the sector representing the production of type D cars in 2021?

- Ans
- 1. 50°
 - 2. 42°
 - 3. 36°
 - 4. 72°

Question ID : 630680428131
 Option 1 ID : 6306801670571
 Option 2 ID : 6306801670570
 Option 3 ID : 6306801670569
 Option 4 ID : 6306801670568
 Status : Answered
 Chosen Option : 4

Q.22 If x varies inversely as y and x = 2 when y = 6, then the value of y when x = 3 is:

Ans 1.3

2.4

3.2

4.6

Question ID : 630680428792
Option 1 ID : 6306801673215
Option 2 ID : 6306801673213
Option 3 ID : 6306801673214
Option 4 ID : 6306801673212
Status : Answered
Chosen Option : 2

Q.23 Without doing the actual division, find the remainder when 28735429 is divided by 9.

Ans 1.4

2.8

3.2

4.9

Question ID : 630680116153
Option 1 ID : 630680449943
Option 2 ID : 630680449944
Option 3 ID : 630680449942
Option 4 ID : 630680449945
Status : Answered
Chosen Option : 1

Q.24 Simplify the following:

$$21 - 4.9 \div 7 + 3.9 \times 0.4 + 0.9$$

Ans 1.26.32

2.18.23

3.22.76

4.24.12

Question ID : 630680402479
Option 1 ID : 6306801569482
Option 2 ID : 6306801569479
Option 3 ID : 6306801569480
Option 4 ID : 6306801569481
Status : Answered
Chosen Option : 3

Q.25 Pipes M, N and S can fill a tank in 25, 50 and 100 minutes, respectively. Initially, pipes N and S are kept open for 10 minutes, and then pipe N is shut while pipe M is opened. Pipe S is closed 15 minutes before the tank overflows. How much time (in minutes) will it take to fill the tank if the three pipes work in this pattern?

Ans ✓ 1. 27

✗ 2. 42

✗ 3. 30

✗ 4. 33

Question ID : 630680387060

Option 1 ID : 6306801508951

Option 2 ID : 6306801508953

Option 3 ID : 6306801508950

Option 4 ID : 6306801508952

Status : Answered

Chosen Option : 1

Section : English Comprehension

Q.1 Select the option that expresses the given sentence in active voice.
The homework must be done by you.

Ans ✗ 1. You will do the homework.

✗ 2. You should have done the homework.

✓ 3. You must do the homework.

✗ 4. You do the homework.

Question ID : 630680415279

Option 1 ID : 6306801619866

Option 2 ID : 6306801619865

Option 3 ID : 6306801619864

Option 4 ID : 6306801619863

Status : Answered

Chosen Option : 3

Q.2 Select the most appropriate option to substitute the underlined word in the given sentence.

Pollution levels have increased so largely that they are almost killing us.

Ans ✗ 1. primarily

✗ 2. slowly

✓ 3. highly

✗ 4. chiefly

Question ID : 630680158874

Option 1 ID : 630680614965

Option 2 ID : 630680614967

Option 3 ID : 630680614966

Option 4 ID : 630680614964

Status : Answered

Chosen Option : 3

Q.3 Parts of a sentence are given below in jumbled order. Arrange the parts in the correct order to form a meaningful sentence.

- (a) the use of animal research
- (b) throughout the past century
- (c) and it continues to be used to understand many diseases
- (d) has been of considerable importance
- (e) in the field of scientific and medical advancements

- Ans
- 1. edcba
 - 2. aecdb
 - 3. ecdba
 - 4. adebc

Question ID : 630680374311
Option 1 ID : 6306801458435
Option 2 ID : 6306801458437
Option 3 ID : 6306801458438
Option 4 ID : 6306801458436
Status : Answered
Chosen Option : 4

Q.4 Select the most appropriate meaning of the given idiom.

Break a leg

- Ans
- 1. Give advice on maintaining physical health.
 - 2. Wish someone good luck before a performance.
 - 3. Suggest taking a short break during work.
 - 4. Encourage someone to engage in risky activities.

Question ID : 630680374407
Option 1 ID : 6306801458813
Option 2 ID : 6306801458812
Option 3 ID : 6306801458814
Option 4 ID : 6306801458811
Status : Answered
Chosen Option : 2

Q.5 Select the most appropriate option that can substitute the underlined segment in the given sentence. If there is no need to substitute it, select 'No substitution'.
Spreading awareness about the rights of the consumers and the relief open to them in case they did not get their money's worth of goods and service has rightly been identified as the first priority.

- Ans
- 1. were unable to get their money's worth
 - 2. did not getting their money's worth
 - 3. will not get their money's worth
 - 4. No substitution

Question ID : 630680156823
Option 1 ID : 630680606925
Option 2 ID : 630680606926
Option 3 ID : 630680606924
Option 4 ID : 630680606927
Status : Answered
Chosen Option : 4

Q.6 Select the **INCORRECTLY** spelt word.

- Ans 1. Allocation
 2. Abismal
 3. Aversion
 4. Allegation

Question ID : 630680409970
Option 1 ID : 6306801598710
Option 2 ID : 6306801598711
Option 3 ID : 6306801598712
Option 4 ID : 6306801598709
Status : Answered
Chosen Option : 2

Q.7 Select the most appropriate **ANTONYM** of the underlined word.

If you want to be a good detective, it helps to have an inquisitive nature.

- Ans 1. Comprehensive
 2. Itemised
 3. Intrusive
 4. Disinterested

Question ID : 630680517413
Option 1 ID : 6306802022049
Option 2 ID : 6306802022051
Option 3 ID : 6306802022048
Option 4 ID : 6306802022050
Status : Answered
Chosen Option : 4

Q.8 Select the option that can be used as a one-word substitute for the given group of words.

One who does not show response to good or bad

- Ans 1. Cynic
 2. Phobic
 3. Sceptic
 4. Stoic

Question ID : 630680405386
Option 1 ID : 6306801580754
Option 2 ID : 6306801580755
Option 3 ID : 6306801580757
Option 4 ID : 6306801580756
Status : Answered
Chosen Option : 4

Q.9 Given below are four jumbled sentences. Select the option that gives their correct logical sequence.

- A. These can turn around to track stars with the rotation of Earth.
- B. Observatories are places to study place.
- C. They are mostly built on the mountain tops.
- D. Telescopes are placed in the dome-shaped roof of the building.

- Ans
- 1. DCBA
 - 2. CBDA
 - 3. BCDA
 - 4. ACDB

Question ID : 630680374759
Option 1 ID : 6306801460205
Option 2 ID : 6306801460206
Option 3 ID : 6306801460203
Option 4 ID : 6306801460204
Status : Answered
Chosen Option : 3

Q.10 Select the correctly spelled sentence.

- Ans
- 1. I will definitely attend the conference.
 - 2. I will definetely attend the conference.
 - 3. I will definately attend the conference.
 - 4. I will defintitly attend the conference.

Question ID : 630680377273
Option 1 ID : 6306801470157
Option 2 ID : 6306801470158
Option 3 ID : 6306801470155
Option 4 ID : 6306801470156
Status : Answered
Chosen Option : 1

Q.11 Parts of a sentence are given below in jumbled order. Arrange the parts in the correct order to form a meaningful sentence.

- (O) as it was the last one of the evening
- (P) the city bus was overcrowded
- (Q) and this gave an opportunity
- (R) to the pickpockets
- (S) to try their skill

- Ans
- 1. PSORQ
 - 2. SRPOQ
 - 3. SROPQ
 - 4. POQRS

Question ID : 630680514935
Option 1 ID : 6306802012348
Option 2 ID : 6306802012346
Option 3 ID : 6306802012347
Option 4 ID : 6306802012345
Status : Answered
Chosen Option : 4

Q.12 Select the most appropriate option to substitute the underlined segment in the given sentence.

Raju's job as a clerk seemed to be bad at first because of the low salary, but resulted in something good happening later because it saved him from being unemployed.

Ans ✓ 1. a blessing in disguise

✗ 2. a boon in disguise

✗ 3. a jolt in disguise

✗ 4. a gift in disguise

Question ID : 630680316362

Option 1 ID : 6306801231073

Option 2 ID : 6306801231074

Option 3 ID : 6306801231075

Option 4 ID : 6306801231076

Status : Answered

Chosen Option : 1

Q.13 Identify the most appropriate antonym of the given word.

Scary

Ans ✗ 1. awful

✗ 2. bright

✓ 3. comforting

✗ 4. Pristine

Question ID : 630680517348

Option 1 ID : 6306802021788

Option 2 ID : 6306802021790

Option 3 ID : 6306802021789

Option 4 ID : 6306802021791

Status : Answered

Chosen Option : 3

Q.14 Select the most appropriate synonym of the given word.

Abundant

Ans ✓ 1. Ample

✗ 2. Difficult

✗ 3. Scarce

✗ 4. Barren

Question ID : 630680176632

Option 1 ID : 630680684749

Option 2 ID : 630680684750

Option 3 ID : 630680684748

Option 4 ID : 630680684751

Status : Answered

Chosen Option : 1

Q.15 Select the most appropriate synonym of the underlined word.

I would love to organise the farewell party at my house.

Ans ✓ 1. Arrange

✗ 2. Derange

✗ 3. Disorder

✗ 4. Confuse

Question ID : 630680297284

Option 1 ID : 6306801156606

Option 2 ID : 6306801156604

Option 3 ID : 6306801156603

Option 4 ID : 6306801156605

Status : Answered

Chosen Option : 1

Q.16 Parts of the following sentence have been given as options. Select the option that contains an error.

Every students in the hostel decided to travel to Delhi to witness the Republic Day parade.

Ans ✗ 1. Republic Day Parade.

✗ 2. to witness the

✓ 3. Every students in the hostel

✗ 4. decided to travel to Delhi

Question ID : 630680316677

Option 1 ID : 6306801231888

Option 2 ID : 6306801231887

Option 3 ID : 6306801231885

Option 4 ID : 6306801231886

Status : Answered

Chosen Option : 4

Q.17 Select the option that expresses the given sentence in active voice.

The meal was not prepared by us.

Ans ✗ 1. We did not preparing the meal.

✗ 2. We did prepare the meal.

✓ 3. We did not prepare the meal.

✗ 4. We had not prepare the meal.

Question ID : 630680415252

Option 1 ID : 6306801619757

Option 2 ID : 6306801619758

Option 3 ID : 6306801619755

Option 4 ID : 6306801619756

Status : Answered

Chosen Option : 3

Q.18 Select the most appropriate synonym of the given word.
Berserk

- Ans 1. Stubborn
 2. Demented
 3. Absurd
 4. Lazy

Question ID : 630680145490
Option 1 ID : 630680562937
Option 2 ID : 630680562934
Option 3 ID : 630680562935
Option 4 ID : 630680562936
Status : Answered
Chosen Option : 3

Q.19 The following sentence has been split into four segments. Identify the segment that contains a grammatical error.
By this time next year / I will had graduated from college / and starting my first job / in the field of marketing.

- Ans 1. in the field of marketing
 2. By this time next year
 3. I will had graduated from college
 4. and starting my first job

Question ID : 630680512941
Option 1 ID : 6306802004713
Option 2 ID : 6306802004710
Option 3 ID : 6306802004711
Option 4 ID : 6306802004712
Status : Answered
Chosen Option : 3

Q.20 Select the most appropriate ANTONYM of the word in bold.

Elisabeth stood at the piano, which did nothing to allay his anxiety.

- Ans 1. aggravate
 2. mitigate
 3. simplify
 4. mollify

Question ID : 630680305299
Option 1 ID : 6306801187586
Option 2 ID : 6306801187585
Option 3 ID : 6306801187588
Option 4 ID : 6306801187587
Status : Answered
Chosen Option : 2

Comprehension:

In the following passage, some words have been deleted. Read the passage carefully and select the most appropriate option to fill in each blank.

From the beginning (1) _____ the eighteenth century, the ladies of European cities covered (2) _____ faces in layers of paint and powder. This particular fashion was largely brought (3) _____ by the urgent need to disguise the ravages of smallpox, (4) _____ left their faces pitted and scarred. During this same period, the 'beauty spot' was introduced to cover (5) _____ a facial defect.

SubQuestion No : 21

Q.21 Select the most appropriate option to fill in blank number 1.

- Ans 1. about
 2. in
 3. on
 4. of

Question ID : 630680146614

Option 1 ID : 630680567334

Option 2 ID : 630680567335

Option 3 ID : 630680567336

Option 4 ID : 630680567337

Status : Answered

Chosen Option : 4

Comprehension:

In the following passage, some words have been deleted. Read the passage carefully and select the most appropriate option to fill in each blank.

From the beginning (1) _____ the eighteenth century, the ladies of European cities covered (2) _____ faces in layers of paint and powder. This particular fashion was largely brought (3) _____ by the urgent need to disguise the ravages of smallpox, (4) _____ left their faces pitted and scarred. During this same period, the 'beauty spot' was introduced to cover (5) _____ a facial defect.

SubQuestion No : 22

Q.22 Select the most appropriate option to fill in blank number 2.

- Ans 1. they're
 2. their
 3. there
 4. them

Question ID : 630680146615

Option 1 ID : 630680567339

Option 2 ID : 630680567340

Option 3 ID : 630680567338

Option 4 ID : 630680567341

Status : Answered

Chosen Option : 2

Comprehension:

In the following passage, some words have been deleted. Read the passage carefully and select the most appropriate option to fill in each blank.

From the beginning (1) _____ the eighteenth century, the ladies of European cities covered (2) _____ faces in layers of paint and powder. This particular fashion was largely brought (3) _____ by the urgent need to disguise the ravages of smallpox, (4) _____ left their faces pitted and scarred. During this same period, the 'beauty spot' was introduced to cover (5) _____ a facial defect.

SubQuestion No : 23

Q.23 Select the most appropriate option to fill in blank number 3.

Ans 1. within

2. about

3. around

4. to

Question ID : 630680146616

Option 1 ID : 630680567342

Option 2 ID : 630680567343

Option 3 ID : 630680567344

Option 4 ID : 630680567345

Status : Answered

Chosen Option : 2

Comprehension:

In the following passage, some words have been deleted. Read the passage carefully and select the most appropriate option to fill in each blank.

From the beginning (1) _____ the eighteenth century, the ladies of European cities covered (2) _____ faces in layers of paint and powder. This particular fashion was largely brought (3) _____ by the urgent need to disguise the ravages of smallpox, (4) _____ left their faces pitted and scarred. During this same period, the 'beauty spot' was introduced to cover (5) _____ a facial defect.

SubQuestion No : 24

Q.24 Select the most appropriate option to fill in blank number 4.

Ans 1. which

2. that

3. when

4. who

Question ID : 630680146617

Option 1 ID : 630680567348

Option 2 ID : 630680567346

Option 3 ID : 630680567349

Option 4 ID : 630680567347

Status : Answered

Chosen Option : 1

Comprehension:

In the following passage, some words have been deleted. Read the passage carefully and select the most appropriate option to fill in each blank.

From the beginning (1) _____ the eighteenth century, the ladies of European cities covered (2) _____ faces in layers of paint and powder. This particular fashion was largely brought (3) _____ by the urgent need to disguise the ravages of smallpox, (4) _____ left their faces pitted and scarred. During this same period, the 'beauty spot' was introduced to cover (5) _____ a facial defect.

SubQuestion No : 25

Q.25 Select the most appropriate option to fill in blank number 5.

Ans 1. to

2. for

3. up

4. on

Question ID : 630680146618

Option 1 ID : 630680567352

Option 2 ID : 630680567353

Option 3 ID : 630680567351

Option 4 ID : 630680567350

Status : Answered

Chosen Option : 3