

## Constable Executive Male and Female in Delhi Police Examination 2023

|                |  |
|----------------|--|
| Roll Number    |  |
| Candidate Name |  |
| Venue Name     |  |
| Exam Date      | 01/12/2023   |
| Exam Time      | 9:00 AM - 10:30 AM   |
| Subject        | Constable Executive Male and Female in Delhi Police Examination 2023 |

Section : General Knowledge

**Q.1** Which of the following Articles of the Constitution of India talks about equality before law or equal protection of the laws?

- Ans
- 1. Article 23
  - 2. Article 14
  - 3. Article 21
  - 4. Article 17

Question ID : 264330180867  
Option 1 ID : 264330709434  
Option 2 ID : 264330709431  
Option 3 ID : 264330709433  
Option 4 ID : 264330709432  
Status : Answered  
Chosen Option : 2

**Q.2** In India, who is regarded as the father of modern dance?

- Ans
- 1. Vempati Chinna Satyam
  - 2. Uday Shankar
  - 3. Bipin Singh
  - 4. Kelucharan Mahapatra

Question ID : 264330112522  
Option 1 ID : 264330442176  
Option 2 ID : 264330442173  
Option 3 ID : 264330442174  
Option 4 ID : 264330442175  
Status : Not Answered  
Chosen Option : --

**Q.3** Which is the oldest living tree species with fan-shaped leaves commonly used in the treatment of blood disorders and memory issues?

- Ans
- 1. Alder
  - 2. Ginkgo
  - 3. Cedar
  - 4. Willow

Question ID : 264330141702  
Option 1 ID : 264330555130  
Option 2 ID : 264330555128  
Option 3 ID : 264330555127  
Option 4 ID : 264330555129  
Status : Not Answered  
Chosen Option : --

**Q.4** Which type of jurisdiction of the Supreme Court can be invoked for the given category of case if the High Court on appeal reverses an order of acquittal of an accused person and sentences him to death?

- Ans
- 1. Appellate jurisdiction in regard to civil matters (Art. 133)
  - 2. Review of judgments or orders by the Supreme Court (Art. 137)
  - 3. Appellate jurisdiction in regard to criminal matters (Art. 134)
  - 4. Appellate jurisdiction in appeals from High Courts in certain cases (Art. 132)

Question ID : 26433069886  
Option 1 ID : 264330274050  
Option 2 ID : 264330274051  
Option 3 ID : 264330274049  
Option 4 ID : 264330274048  
Status : Answered  
Chosen Option : 4

**Q.5** Which of the following committees was constituted in 2012 to review the Poverty Measurement Methodology and submitted its report in June 2014?

- Ans
- 1. Rangarajan Committee
  - 2. Lakdawala Committee
  - 3. Kirit Parikh Committee
  - 4. Dandekar Committee

Question ID : 264330183045  
Option 1 ID : 264330717914  
Option 2 ID : 264330717913  
Option 3 ID : 264330717915  
Option 4 ID : 264330717912  
Status : Answered  
Chosen Option : 1

**Q.6** The Planning Commission looks after crucial aspects such as formulation, implementation and regulation of the Five-Year Plans. In which year was the Planning Commission replaced by a think tank called NITI Aayog?

- Ans
- 1. 2020
  - 2. 2015
  - 3. 2012
  - 4. 2017

Question ID : 264330130663  
Option 1 ID : 264330511763  
Option 2 ID : 264330511765  
Option 3 ID : 264330511766  
Option 4 ID : 264330511764  
Status : Answered  
Chosen Option : 2

Q.7 New economic policy is also known as \_\_\_\_\_.

- Ans
- 1. globalisation
  - 2. new economic law
  - 3. new economic region
  - 4. new economic reforms

Question ID : 264330110024  
Option 1 ID : 264330432376  
Option 2 ID : 264330432375  
Option 3 ID : 264330432374  
Option 4 ID : 264330432373  
Status : Answered  
Chosen Option : 1

Q.8 The National Waterways-4 (NW-4) is associated with which rivers from among the following?

- Ans
- 1. Narmada and Tapi
  - 2. Godavari and Krishna
  - 3. Ganga and Yamuna
  - 4. Chambal and Mahanadi

Question ID : 264330178719  
Option 1 ID : 264330700904  
Option 2 ID : 264330700905  
Option 3 ID : 264330700903  
Option 4 ID : 264330700906  
Status : Not Answered  
Chosen Option : --

Q.9 Pandit Ravi Shankar is known to be a legend in Hindustani classical music. He is associated with which of the following instruments?

- Ans
- 1. Sitar
  - 2. Violin
  - 3. Rudra veena
  - 4. Guitar

Question ID : 264330111957  
Option 1 ID : 264330439915  
Option 2 ID : 264330439913  
Option 3 ID : 264330439916  
Option 4 ID : 264330439914  
Status : Not Answered  
Chosen Option : --

Q.10 Which of the following Writs protects the right to life and personal liberty?

- Ans
- 1. Quo Warranto
  - 2. Prohibition
  - 3. Habeas Corpus
  - 4. Mandamus

Question ID : 264330134571  
Option 1 ID : 264330527242  
Option 2 ID : 264330527241  
Option 3 ID : 264330527240  
Option 4 ID : 264330527239  
Status : Answered  
Chosen Option : 3

**Q.11 Who was the Sultan of the Delhi Sultanate when the Bahmani Kingdom was established in South India?**

- Ans
- 1. Shamsud-Din Iltutmish
  - 2. Muhammad-bin-Tughlaq
  - 3. Ibrahim Lodi
  - 4. Alauddin Khalji

Question ID : 264330182267  
Option 1 ID : 264330714894  
Option 2 ID : 264330714892  
Option 3 ID : 264330714891  
Option 4 ID : 264330714893  
Status : Not Answered  
Chosen Option : --

**Q.12 From which of the following states does singer Shyamamani Devi hail?**

- Ans
- 1. Tripura
  - 2. Uttar Pradesh
  - 3. Odisha
  - 4. Madhya Pradesh

Question ID : 264330112688  
Option 1 ID : 264330442840  
Option 2 ID : 264330442839  
Option 3 ID : 264330442837  
Option 4 ID : 264330442838  
Status : Not Answered  
Chosen Option : --

**Q.13 Which of the following statements is/are correct regarding the Directive Principles of State Policy of the Indian Constitution?**

- A. The 42nd Constitutional Amendment Act of 1976 added six Directive Principles of State Policy to the Constitution.
- B. The 86th Constitutional Amendment Act of 2002 substituted a new article for Article 45 and made elementary education as a Fundamental Right.

- Ans
- 1. B only
  - 2. A only
  - 3. Neither A nor B
  - 4. Both A and B

Question ID : 264330114764  
Option 1 ID : 264330451142  
Option 2 ID : 264330451141  
Option 3 ID : 264330451144  
Option 4 ID : 264330451143  
Status : Answered  
Chosen Option : 4

Q.14 'The Race of My Life' is written by which of the following personalities?

- Ans
- 1. Dutee Chand
  - 2. PT Usha
  - 3. Praveen Kumar
  - 4. Milkha Singh

Question ID : 26433055349  
Option 1 ID : 264330216382  
Option 2 ID : 264330216381  
Option 3 ID : 264330216383  
Option 4 ID : 264330216380  
Status : Answered  
Chosen Option : 2

Q.15 Where was Mahatma Gandhi's first major public appearance in India after his return from South Africa?

- Ans
- 1. At the Indigo Satyagraha at Champaran, in 1917
  - 2. At the opening ceremony of the Banaras Hindu University, Banaras, in 1916
  - 3. At the mill workers' protest at Kheda, in 1917
  - 4. At the protest against the King's visit at Bombay, in 1916

Question ID : 264330118999  
Option 1 ID : 264330466651  
Option 2 ID : 264330466654  
Option 3 ID : 264330466652  
Option 4 ID : 264330466653  
Status : Answered  
Chosen Option : 3

Q.16 Which of the following schemes is for collateral free loans to small/micro business enterprises and individuals in the non-agricultural sector?

- Ans
- 1. PMRPY
  - 2. PMEGP
  - 3. PMMY
  - 4. PMJDY

Question ID : 264330110189  
Option 1 ID : 264330433036  
Option 2 ID : 264330433035  
Option 3 ID : 264330433034  
Option 4 ID : 264330433033  
Status : Answered  
Chosen Option : 3

Q.17 Magma is defined as:

- Ans
- 1. the extremely hot liquid and semi-liquid rock located under the Earth's surface
  - 2. the extremely hot solid core of the Earth
  - 3. the volatile gaseous environment under the Earth's surface
  - 4. the extremely hot water springs of the Atlantic region

Question ID : 264330131818  
Option 1 ID : 264330516371  
Option 2 ID : 264330516372  
Option 3 ID : 264330516373  
Option 4 ID : 264330516374  
Status : Answered  
Chosen Option : 2

Q.18 Which of the following statements are correct regarding the Pushkar Fair of Rajasthan?

- A. The main aim of the Pushkar Fair is to promote show cattle such as camels, horses, cows, goats, sheep etc.
- B. This festival is celebrated in the month of November at the time of Kartik Purnima.
- C. Although this festival is an animal festival, the trade of animals is prohibited in the fair.

- Ans
- 1. A,B and C
  - 2. A and C only
  - 3. A and B only
  - 4. B and C only

Question ID : 264330119836  
Option 1 ID : 264330469619  
Option 2 ID : 264330469622  
Option 3 ID : 264330469620  
Option 4 ID : 264330469621  
Status : Not Answered  
Chosen Option : --

Q.19 Which of the following are also known as a stratovolcanoes, a large volcano generally composed of lava flows, pyroclastic deposits, and mudflow deposits, as well as lava domes?

- Ans
- 1. Shield volcanoes
  - 2. Mid-ocean ridge volcanoes
  - 3. Composite volcanoes
  - 4. Cinder cone volcanoes

Question ID : 264330113519  
Option 1 ID : 264330446162  
Option 2 ID : 264330446163  
Option 3 ID : 264330446161  
Option 4 ID : 264330446164  
Status : Answered  
Chosen Option : 2

Q.20 Which is India's biggest football stadium?

- Ans
- 1. Jawaharlal Nehru Stadium
  - 2. Chandrasekharan Nair Stadium
  - 3. Indira Gandhi Stadium
  - 4. Salt Lake City Stadium

Question ID : 264330119278  
Option 1 ID : 264330467399  
Option 2 ID : 264330467401  
Option 3 ID : 264330467400  
Option 4 ID : 264330467402  
Status : Not Attempted and Marked For Review  
Chosen Option : --

**Q.21** Which of the following rivers is NOT the part of Sapta-Sindhu, the region where early Vedic Aryans lived?

- Ans  1. Asikni  
 2. Bhagirathi  
 3. Parushni  
 4. Vitasta

Question ID : 264330130538  
Option 1 ID : 264330511264  
Option 2 ID : 264330511266  
Option 3 ID : 264330511263  
Option 4 ID : 264330511265  
Status : Not Answered  
Chosen Option : --

**Q.22** Siri Fort at New Delhi of medieval times is an epitome of which of the following architectures?

- Ans  1. Mauryan architecture  
 2. Dravidian architecture  
 3. Islamic Architecture  
 4. Kalinga architecture

Question ID : 264330106236  
Option 1 ID : 264330417248  
Option 2 ID : 264330417245  
Option 3 ID : 264330417247  
Option 4 ID : 264330417246  
Status : Not Answered  
Chosen Option : --

**Q.23** Akbar's half-brother Mirza Hakim was the ruler of \_\_\_\_\_ and revolted against Akbar.

- Ans  1. Lahore  
 2. Kabul  
 3. Ferghana  
 4. Iran

Question ID : 264330106569  
Option 1 ID : 264330418578  
Option 2 ID : 264330418579  
Option 3 ID : 264330418580  
Option 4 ID : 264330418577  
Status : Not Answered  
Chosen Option : --

**Q.24** Who led the famous Satyagraha of Bardoli?

- Ans  1. Vithalbhai Patel  
 2. Sardar Vallabhbhai Patel  
 3. Rajendra Prasad  
 4. Mahatma Gandhi

Question ID : 264330114045  
Option 1 ID : 264330448267  
Option 2 ID : 264330448268  
Option 3 ID : 264330448266  
Option 4 ID : 264330448265  
Status : Not Answered  
Chosen Option : --

Q.25 The part of the Peninsular plateau lying north of the Narmada river is known as:

- Ans  1. Central Highlands  
 2. Western Ghats  
 3. Eastern Ghats  
 4. Deccan Plateau

Question ID : 264330176006  
Option 1 ID : 264330690320  
Option 2 ID : 264330690322  
Option 3 ID : 264330690321  
Option 4 ID : 264330690319  
Status : Answered  
Chosen Option : 1

Q.26 Which of the following statements is INCORRECT?

- Ans  1. NNP at factor cost is referred to as the national income.  
 2. Personal Income and Personal Disposable Incomes are concepts related to households' income.  
 3. GNP includes output produced by a nation's owned factors of production  
 4. From the point of view of employment generation at home, GNP is more relevant than GDP.

Question ID : 264330117581  
Option 1 ID : 264330462350  
Option 2 ID : 264330462352  
Option 3 ID : 264330462349  
Option 4 ID : 264330462351  
Status : Not Attempted and Marked For Review  
Chosen Option : --

Q.27 According to the Census of India 2011, which state of India has the highest Buddhist population?

- Ans  1. Sikkim  
 2. Assam  
 3. Madhya Pradesh  
 4. Maharashtra

Question ID : 264330132730  
Option 1 ID : 264330520016  
Option 2 ID : 264330520015  
Option 3 ID : 264330520018  
Option 4 ID : 264330520017  
Status : Answered  
Chosen Option : 1



Q.28 When does the Raksha Bandhan fall according to the Hindu calendar?

- Ans
- 1. Kartika Poornima (Shukla)
  - 2. Shravana Poornima (Shukla)
  - 3. Phalgun Poornima (Shukla)
  - 4. Bhadrapada Poornima (Shukla)

Question ID : 264330110461  
Option 1 ID : 264330434121  
Option 2 ID : 264330434122  
Option 3 ID : 264330434124  
Option 4 ID : 264330434123  
Status : Not Answered  
Chosen Option : --

Q.29 It has been proved that, during a chemical reaction, atoms are neither created nor destroyed. This law is also known as the:

- Ans
- 1. law of conservation of energy
  - 2. law of conservation of mass
  - 3. law of conservation of momentum
  - 4. law of conservation of charge

Question ID : 264330177019  
Option 1 ID : 264330694271  
Option 2 ID : 264330694273  
Option 3 ID : 264330694272  
Option 4 ID : 264330694274  
Status : Answered  
Chosen Option : 1

Q.30 What does 'Toran' in the Stupa Architecture refers to?

- Ans
- 1. Dome
  - 2. Pillars
  - 3. Entry gates
  - 4. Umbrella

Question ID : 26433086593  
Option 1 ID : 264330340014  
Option 2 ID : 264330340015  
Option 3 ID : 264330340016  
Option 4 ID : 264330340013  
Status : Not Answered  
Chosen Option : --

Q.31 Where is the headquarters of the Squash Rackets Federation of India located?

- Ans
- 1. Chennai
  - 2. Bangalore
  - 3. Mumbai
  - 4. New Delhi

Question ID : 264330118469  
Option 1 ID : 264330465278  
Option 2 ID : 264330465280  
Option 3 ID : 264330465277  
Option 4 ID : 264330465279  
Status : Not Answered  
Chosen Option : --

**Q.32** Impeachment charges against the President can be initiated by either House of the Parliament, but the charges must be signed by \_\_\_\_\_ members of the impeachment house.

- Ans
- 1. one-sixth
  - 2. one-fourth
  - 3. one-third
  - 4. one-tenth

Question ID : 264330130467  
Option 1 ID : 264330510982  
Option 2 ID : 264330510980  
Option 3 ID : 264330510979  
Option 4 ID : 264330510981  
Status : Answered  
Chosen Option : 3

**Q.33** Which Article of the Constitution of India says that the State shall endeavour to secure for the citizens a uniform civil code throughout the territory of India?

- Ans
- 1. Article 51
  - 2. Article 40
  - 3. Article 42
  - 4. Article 44

Question ID : 264330110804  
Option 1 ID : 264330435496  
Option 2 ID : 264330435493  
Option 3 ID : 264330435494  
Option 4 ID : 264330435495  
Status : Answered  
Chosen Option : 4

**Q.34** Which of the following are used as soil binders?

- Ans
- 1. Fungi
  - 2. Algae
  - 3. Pteridophytes
  - 4. Bryophytes

Question ID : 264330117594  
Option 1 ID : 264330462404  
Option 2 ID : 264330462403  
Option 3 ID : 264330462402  
Option 4 ID : 264330462401  
Status : Answered  
Chosen Option : 1

**Q.35 Which of the following is NOT a characteristic of the 4th plan of India?**

- Ans**  1. Implementation of Family Planning Programmes was among the major targets of the Plan.
2. It had twin objectives of "growth with stability" and "progressive achievement of self-reliance".
3. The plan is considered a big success.
4. The influx of Bangladeshi refugees before and after the 1971 Indo-Pak war was an important issue.

Question ID : 264330112897  
Option 1 ID : 264330443674  
Option 2 ID : 264330443673  
Option 3 ID : 264330443676  
Option 4 ID : 264330443675  
Status : Not Answered  
Chosen Option : --

**Q.36 'My Days' is an autobiography written by whom among the following authors?**

- Ans**  1. Vajayantimala
2. RK Narayan
3. Shashi Kapoor
4. Hema Malini

Question ID : 26433064216  
Option 1 ID : 264330251458  
Option 2 ID : 264330251457  
Option 3 ID : 264330251456  
Option 4 ID : 264330251459  
Status : Not Answered  
Chosen Option : --

**Q.37 Name the dance of Rajasthan which uses a fake horse ride as a prop.**

- Ans**  1. Pavri Naach
2. Dindi and Kala
3. Ghode Modni
4. Kacchi Ghodi

Question ID : 264330110429  
Option 1 ID : 264330433995  
Option 2 ID : 264330433996  
Option 3 ID : 264330433993  
Option 4 ID : 264330433994  
Status : Not Answered  
Chosen Option : --

**Q.38 Which of the following institutions govern and control the cricket matches?**

- Ans**  1. FIFA
2. FIDE
3. FIH
4. ICC

Question ID : 264330132555  
Option 1 ID : 264330519317  
Option 2 ID : 264330519318  
Option 3 ID : 264330519316  
Option 4 ID : 264330519315  
Status : Answered  
Chosen Option : 4

Q.39 Kalamandalam Gopi was awarded the Padma Shri for which form of dance?

- Ans
- 1. Bharatanatyam
  - 2. Kuchipudi
  - 3. Kathakali
  - 4. Kathak

Question ID : 26433074875  
Option 1 ID : 264330293589  
Option 2 ID : 264330293591  
Option 3 ID : 264330293588  
Option 4 ID : 264330293590  
Status : Answered  
Chosen Option : 3

Q.40 Who among the following was the recruiter, caretaker and commander of the Rani of Jhansi Regiment?

- Ans
- 1. Usha Mehta
  - 2. Lakshmi Swaminathan
  - 3. Bhikaiji Cama
  - 4. Sucheta Kriplani

Question ID : 264330130567  
Option 1 ID : 264330511380  
Option 2 ID : 264330511379  
Option 3 ID : 264330511381  
Option 4 ID : 264330511382  
Status : Not Answered  
Chosen Option : --

Q.41 Where did Mangal Pandey refuse to use the greased cartridge?

- Ans
- 1. Delhi
  - 2. Kanpur
  - 3. Meerut
  - 4. Barrackpore

Question ID : 264330119307  
Option 1 ID : 264330467517  
Option 2 ID : 264330467518  
Option 3 ID : 264330467516  
Option 4 ID : 264330467515  
Status : Answered  
Chosen Option : 4

Q.42 According to Census of India 2011, what was the population density of India?

- Ans
- 1. 382 person/km<sup>2</sup>
  - 2. 384 person/km<sup>2</sup>
  - 3. 388 person/km<sup>2</sup>
  - 4. 386 person/km<sup>2</sup>

Question ID : 264330120375  
Option 1 ID : 264330471754  
Option 2 ID : 264330471752  
Option 3 ID : 264330471751  
Option 4 ID : 264330471753  
Status : Not Answered  
Chosen Option : --

Q.43 Which of the following is NOT one of the tax slabs under GST?

- Ans
- 1. 28%
  - 2. 30%
  - 3. 12%
  - 4. 5%

Question ID : 26433059313  
Option 1 ID : 264330232130  
Option 2 ID : 264330232131  
Option 3 ID : 264330232129  
Option 4 ID : 264330232128  
Status : Answered  
Chosen Option : 2

Q.44 On what grounds can a judge of the Supreme Court or High Court be removed from the post?

- Ans
- 1. Incapacity and Political links
  - 2. Only Incapacity
  - 3. Proven misbehaviour and Incapacity
  - 4. Only Proven misbehaviour

Question ID : 264330178758  
Option 1 ID : 264330701060  
Option 2 ID : 264330701061  
Option 3 ID : 264330701062  
Option 4 ID : 264330701059  
Status : Answered  
Chosen Option : 1

Q.45 Who among the following artists received the Padma Shri award in 2021 for his contribution to keep alive the tribal folk dance 'Gussadi'?

- Ans
- 1. Gopal Prasad
  - 2. Padmaja Reddy
  - 3. R Muthukannammal
  - 4. Kanaka Raju

Question ID : 264330111206  
Option 1 ID : 264330436909  
Option 2 ID : 264330436910  
Option 3 ID : 264330436912  
Option 4 ID : 264330436911  
Status : Not Answered  
Chosen Option : --

**Q.46** In cricket, the field is oval with a rectangular area in the middle, known as 'pitch', which is \_\_\_\_\_ wide.

- Ans**
- 1. 22 yards (20.12 m) by 10 feet (3.04 m)
  - 2. 15 yards (15.11 m) by 8 feet (2.04 m)
  - 3. 11 yards (10.97 m) by 9 feet (2.26 m)
  - 4. 13 yards (13.52 m) by 7 feet (1.84 m)

Question ID : 264330113762  
Option 1 ID : 264330447135  
Option 2 ID : 264330447134  
Option 3 ID : 264330447136  
Option 4 ID : 264330447133  
Status : Answered  
Chosen Option : 1

**Q.47** Which of the following groups of crops is related to the Kharif season in the northern states of India?

- Ans**
- 1. Jute, Wheat, Pea
  - 2. Wheat, Gram, Rapeseed
  - 3. Rice, Maize, Bajra
  - 4. Barley, Gram, Mustard

Question ID : 264330119778  
Option 1 ID : 264330469390  
Option 2 ID : 264330469388  
Option 3 ID : 264330469389  
Option 4 ID : 264330469387  
Status : Answered  
Chosen Option : 1

**Q.48** Which of the following is absent in prokaryotic cells?

- Ans**
- 1. Nuclear membrane
  - 2. Cell wall
  - 3. Cytoplasm
  - 4. Ribosomes

Question ID : 264330117602  
Option 1 ID : 264330462434  
Option 2 ID : 264330462433  
Option 3 ID : 264330462435  
Option 4 ID : 264330462436  
Status : Answered  
Chosen Option : 2

**Q.49** Identify the correct statement in the context of National Income Accounting.  
(i) Depreciation is unexpected obsolescence.  
(ii) Capital loss is unexpected obsolescence.  
(iii) Intermediate goods get completely used up or are resold during a given year.

- Ans**  1. Only (ii)  
 2. Both (i) and (iii)  
 3. Only (i)  
 4. Only (iii)

Question ID : 264330112894  
Option 1 ID : 264330443662  
Option 2 ID : 264330443664  
Option 3 ID : 264330443661  
Option 4 ID : 264330443663  
Status : **Not Answered**  
Chosen Option : --

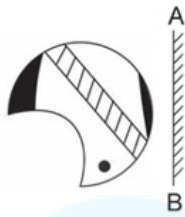
**Q.50** Pulakeshin II who defeated Harshavardhana belonged to \_\_\_\_\_ dynasty.

- Ans**  1. Pallava  
 2. Chalukya  
 3. Chola  
 4. Chera

Question ID : 264330119471  
Option 1 ID : 264330468167  
Option 2 ID : 264330468168  
Option 3 ID : 264330468169  
Option 4 ID : 264330468170  
Status : **Answered**  
Chosen Option : 2

Section : Reasoning

Q.1 Select the correct mirror image of the given figure when the mirror is placed at 'AB' as shown.

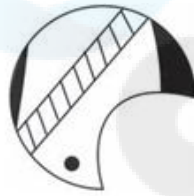


Ans

✗ 1.



✓ 2.



✗ 3.



✗ 4.



Question ID : 264330104136

Option 1 ID : 264330408848

Option 2 ID : 264330408846

Option 3 ID : 264330408845

Option 4 ID : 264330408847

Status : Answered

Chosen Option : 2

Q.2 Which of the following terms will replace the question mark (?) in the given series?

BMRG, FKUF, ?, NGAD, REDC

Ans ✓ 1. JIXE

✗ 2. IMYD

✗ 3. IJXE

✗ 4. JHYD

Question ID : 26433090967

Option 1 ID : 264330357277

Option 2 ID : 264330357280

Option 3 ID : 264330357278

Option 4 ID : 264330357279

Status : Answered

Chosen Option : 1



Q.3 Read the given statements and conclusions carefully. Assuming that the information given in the statements is true, even if it appears to be at variance with commonly known facts, decide which of the given conclusions logically follow(s) from the statements.

Statements:

All mangoes are grapes.

All grapes are guava.

Conclusions:

I. Some guavas are grapes.

II. Some grapes are mangoes.

Ans  1. Both conclusions I and II follow

2. Only conclusion I follows

3. Only conclusion II follows

4. Neither conclusion I nor II follows

Question ID : 26433069510

Option 1 ID : 264330272554

Option 2 ID : 264330272552

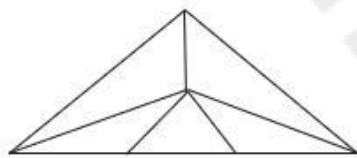
Option 3 ID : 264330272553

Option 4 ID : 264330272555

Status : Answered

Chosen Option : 1

Q.4 How many triangles are there in the given figure?



Ans  1. 8

2. 6

3. 9

4. 10

Question ID : 26433085579

Option 1 ID : 264330336019

Option 2 ID : 264330336018

Option 3 ID : 264330336020

Option 4 ID : 264330336017

Status : Answered

Chosen Option : 3

Q.5 In a certain code language, 'SOLSTICE' is written as 'CEGVUNMU' and 'MAJESTY' is written as 'AVUCLYO'. How will 'INFLUENCE' be written in that language?

Ans  1. KPHNTGPEG

2. GEPGWNHOK

3. GALGTJDLK

4. CEPCSNHPG

Question ID : 26433092579

Option 1 ID : 264330363607

Option 2 ID : 264330363606

Option 3 ID : 264330363608

Option 4 ID : 264330363605

Status : Answered

Chosen Option : 4

**Q.6** 1, 2, 3, 4, 5 and 6 are written on different faces of a dice. Three different positions of the same dice are shown below. Find the number on the face opposite to the one showing '2'.

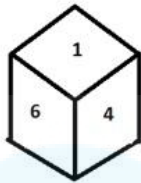


figure 1

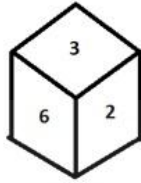


figure 2

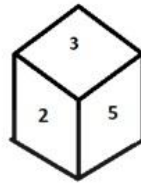


figure 3

- Ans
- 1. 1
  - 2. 5
  - 3. 3
  - 4. 4

Question ID : 264330110554

Option 1 ID : 264330434495

Option 2 ID : 264330434494

Option 3 ID : 264330434496

Option 4 ID : 264330434493

Status : Answered

Chosen Option : 2

**Q.7** Select the correct combination of mathematical signs to sequentially replace the \* signs and to balance the given equation.  
 $999 * 111 * 67 * 87 * 2 * 116$

- Ans
- 1. + - × + =
  - 2. + + - × =
  - 3. + + - × =
  - 4. ÷ - + × =

Question ID : 26433085723

Option 1 ID : 264330336595

Option 2 ID : 264330336596

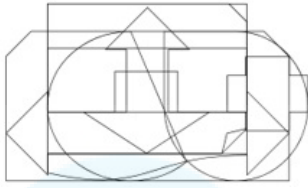
Option 3 ID : 264330336594

Option 4 ID : 264330336593

Status : Answered

Chosen Option : 4

Q.8 Select the option figure which is embedded in the given figure (Rotation is NOT allowed).



Ans

✗ 1.



✗ 2.



✗ 3.



✓ 4.



Question ID : 26433082017

Option 1 ID : 264330321901

Option 2 ID : 264330321902

Option 3 ID : 264330321904

Option 4 ID : 264330321903

Status : Answered

Chosen Option : 4

Q.9 Which figure should replace the question mark (?) if the following series were to be continued?

|   |   |   |   |   |   |   |   |   |   |   |   |   |   |   |   |
|---|---|---|---|---|---|---|---|---|---|---|---|---|---|---|---|
| H | 3 | □ | C | □ | D | 6 | O | A | X | A | □ | H | 3 | C | ? |
| C | O | D | H | 3 | O | X | 3 | □ | 6 | O | 3 | D | O | A |   |
| X | 6 | A | A | X | 6 | D | H | C | C | D | H | □ | 6 | X |   |

Ans

✓ 1.

|   |   |   |
|---|---|---|
| D | C | A |
| H | 3 | O |
| X | □ | 6 |

✗ 2.

|   |   |   |
|---|---|---|
| □ | C | A |
| H | 3 | O |
| D | X | 6 |

✗ 3.

|   |   |   |
|---|---|---|
| □ | 6 | X |
| H | 3 | C |
| D | O | A |

✗ 4.

|   |   |   |
|---|---|---|
| D | O | 3 |
| H | A | C |
| X | □ | 6 |

Question ID : 264330103878

Option 1 ID : 264330407813

Option 2 ID : 264330407816

Option 3 ID : 264330407815

Option 4 ID : 264330407814

Status : Answered

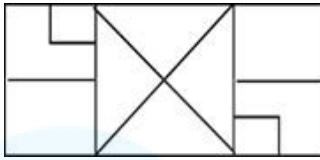
Chosen Option : 1

Q.10 Select the option in which the given figure is embedded (rotation is NOT allowed).



Ans

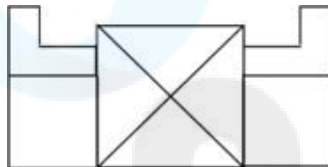
1.



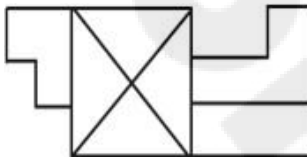
2.



3.



4.



Question ID : 264330111673

Option 1 ID : 264330438779

Option 2 ID : 264330438778

Option 3 ID : 264330438777

Option 4 ID : 264330438780

Status : Answered

Chosen Option : 3

Q.11 P, Q, R, S, T, U and V were sitting in a straight row, facing north. T was to the immediate left of U. V was second to the left of P. Only R was to the right of U. P was exactly between Q and S. Who among the following was at the third position from the left?

Ans  1. S

2. P

3. Q

4. T

Question ID : 26433087021

Option 1 ID : 264330341727

Option 2 ID : 264330341728

Option 3 ID : 264330341726

Option 4 ID : 264330341725

Status : Answered

Chosen Option : 2

**Q.12** Study the given pattern carefully and select the number that can replace the question mark (?) in it.

First row - 3, 16, 13

Second row - 25, 625, 650

Third row - 11, 64, ?

(NOTE : Operations should be performed on the whole numbers, without breaking down the numbers into its constituent digits. Eg. 13 – Operations on 13 such as adding /subtracting/multiplying etc. to 13 can be performed. Breaking down 13 into 1 and 3 and then performing mathematical operations on 1 and 3 is not allowed)

Ans  1. 138

2. 167

3. 169

4. 129

Question ID : 26433087331

Option 1 ID : 264330342962

Option 2 ID : 264330342963

Option 3 ID : 264330342964

Option 4 ID : 264330342961

Status : **Not Attempted and Marked For Review**

Chosen Option : --

**Q.13** Select the word-pair that best represents a similar relationship to the one expressed in the pair of words given below.

(The words must be considered as meaningful English words and must not be related to each other based on the number of letters/number of consonants/vowels in the word.)

Water : Hydrology

Ans  1. Book : Reading

2. Chemistry : Chemist

3. Space : Astronomy

4. Monuments : Archaeologist

Question ID : 26433053228

Option 1 ID : 264330208215

Option 2 ID : 264330208217

Option 3 ID : 264330208214

Option 4 ID : 264330208216

Status : **Answered**

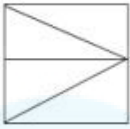
Chosen Option : 3

Q.14 Select the option in which the given figure is embedded (rotation is NOT allowed).



Ans

1.




2.



3.



4.



Question ID : 264330114258

Option 1 ID : 264330449118

Option 2 ID : 264330449120

Option 3 ID : 264330449119

Option 4 ID : 264330449117

Status : Answered

Chosen Option : 4

Q.15 Select the correct combination of mathematical signs to sequentially replace the \* signs and to balance the given equation.  
 $263 * 225 * 5 * 76 * 98 * 3$

Ans  1. + - + × =

2. = - + × +

3. = - + + ×

4. = + - + ×

Question ID : 26433085721

Option 1 ID : 264330336585

Option 2 ID : 264330336588

Option 3 ID : 264330336587

Option 4 ID : 264330336586

Status : Answered

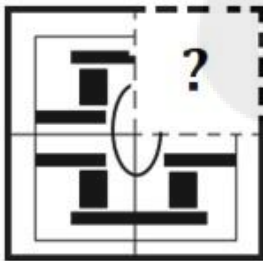
Chosen Option : 4

Q.16 Select the option that is related to the third term in the same way as the second term is related to the first term and the sixth term is related to the fifth term.  
 $2 : 9 :: 8 : ? :: 4 : 65$

- Ans  1. 513  
 2. 65  
 3. 344  
 4. 511

Question ID : 264330101049  
 Option 1 ID : 264330396742  
 Option 2 ID : 264330396741  
 Option 3 ID : 264330396744  
 Option 4 ID : 264330396743  
 Status : Answered  
 Chosen Option : 1

Q.17 Select the option figure that will replace the question mark (?) in the figure given below to complete the pattern.



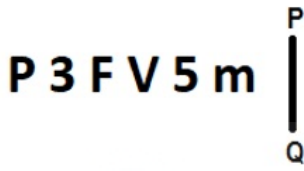
Ans

- 1.
- 2.
- 3.
- 4.

Question ID : 264330131106  
 Option 1 ID : 264330513538  
 Option 2 ID : 264330513535  
 Option 3 ID : 264330513537  
 Option 4 ID : 264330513536  
 Status : Answered  
 Chosen Option : 4



Q.18 Select the correct mirror image of the given figure when the mirror is placed at PQ as shown below.



Ans

- ✓ 1. m 2 V 3 E 9
- ✗ 2. m 2 V 3 E 9
- ✗ 3. m 2 8 3 E 9
- ✗ 4. m 5 V 3 E 9

Question ID : 26433080772  
 Option 1 ID : 264330317024  
 Option 2 ID : 264330317022  
 Option 3 ID : 264330317023  
 Option 4 ID : 264330317021  
 Status : Answered  
 Chosen Option : 1

Q.19 Select the correct mirror image of the given figure when the mirror is placed at 'AB' as shown.

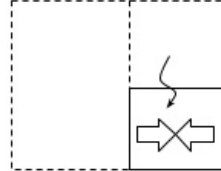
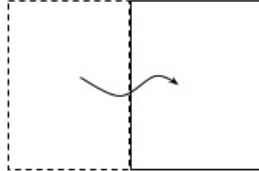


Ans

- ✗ 1. G 7 T M + ⊙ ↙
- ✓ 2. ⊖ 7 T M + ⊙ ↙
- ✗ 3. ⊖ 7 T M C + ⊙ ↗
- ✗ 4. ⊙ ↙ + C M T 7 ⊖

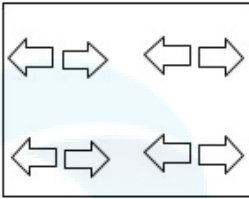
Question ID : 264330114696  
 Option 1 ID : 264330450872  
 Option 2 ID : 264330450869  
 Option 3 ID : 264330450870  
 Option 4 ID : 264330450871  
 Status : Answered  
 Chosen Option : 2

Q.20 A paper is folded and cut as shown below. How will it appear when unfolded?

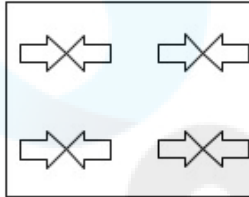


Ans

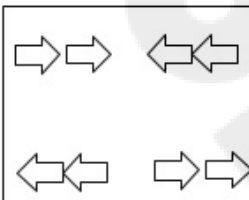
✗ 1.



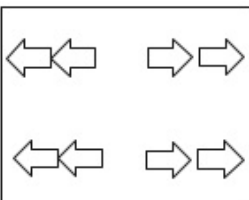
✓ 2.



✗ 3.



✗ 4.



Question ID : 264330118714

Option 1 ID : 264330466109

Option 2 ID : 264330466108

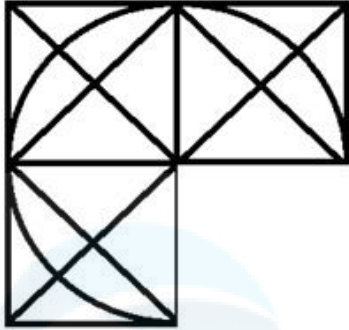
Option 3 ID : 264330466110

Option 4 ID : 264330466107

Status : Answered

Chosen Option : 2

Q.21 Select the option which when placed in the blank space of the given figure will complete the pattern.



Ans

✗ 1.




✗ 2.



✗ 3.



✓ 4.



Question ID : 264330112986

Option 1 ID : 264330444030

Option 2 ID : 264330444032

Option 3 ID : 264330444029

Option 4 ID : 264330444031

Status : Answered

Chosen Option : 4

Q.22 Which figure should replace the question mark (?) if the series were to be continued?

|           |           |           |           |   |
|-----------|-----------|-----------|-----------|---|
| L O V E R | O V E R A | E O V A R | O V A R T | ? |
|-----------|-----------|-----------|-----------|---|

Ans

✗ 1. T O V A R

✗ 2. V A O T R

✓ 3. A O V T R

✗ 4. V O T A R

Question ID : 264330130797

Option 1 ID : 264330512299

Option 2 ID : 264330512301

Option 3 ID : 264330512300

Option 4 ID : 264330512302

Status : Answered

Chosen Option : 3

Q.23 Select the option in which the given figure is embedded (rotation is NOT allowed).



Ans

✗ 1.




✗ 2.



✗ 3.



✓ 4.



Question ID : 264330114689

Option 1 ID : 264330450841

Option 2 ID : 264330450842

Option 3 ID : 264330450843

Option 4 ID : 264330450844

Status : Answered

Chosen Option : 4

Q.24 Select the number from among the given options that can replace the question mark (?) in the following series.

10, 24, 66, 192, 570, ?

- Ans
- 1. 1500
  - 2. 1699
  - 3. 1704
  - 4. 2353

Question ID : 264330109767

Option 1 ID : 264330431345

Option 2 ID : 264330431346

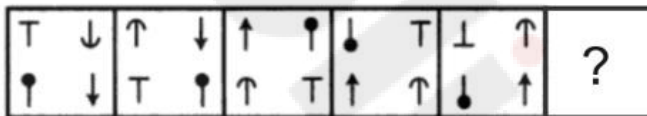
Option 3 ID : 264330431348

Option 4 ID : 264330431347

Status : Not Attempted and Marked For Review

Chosen Option : --

Q.25 Select the figure from among the given options that can replace the question mark (?) in the following series.



Ans

- 1.
- 2.
- 3.
- 4.

Question ID : 26433080541

Option 1 ID : 264330316099

Option 2 ID : 264330316100

Option 3 ID : 264330316097

Option 4 ID : 264330316098

Status : Answered

Chosen Option : 4

Q.1 In five subjects of equal marks, S gets 45, 78, 36, 65 and 56 in the first semester and 48, 72, 55, 46 and 79 in the second semester. What are his average marks in the first year?

- Ans
- 1. 57
  - 2. 56
  - 3. 58
  - 4. 58.5

Question ID : 264330145284  
Option 1 ID : 264330569393  
Option 2 ID : 264330569391  
Option 3 ID : 264330569392  
Option 4 ID : 264330569394  
Status : Answered  
Chosen Option : 3

Q.2 A garrison of 1500 men has provisions for 11 days. How long will the provisions last if the garrison is increased by 1800 men?

- Ans
- 1. 3 days
  - 2. 6 days
  - 3. 5 days
  - 4. 4 days

Question ID : 264330182582  
Option 1 ID : 264330716122  
Option 2 ID : 264330716119  
Option 3 ID : 264330716120  
Option 4 ID : 264330716121  
Status : Answered  
Chosen Option : 3

Q.3 Shanti while driving her car at a speed of 68 km/h, observes that at some moment a moving bus is 40 m ahead of her car. After 10 sec she finds that she is 60 m ahead of the bus. What is the speed of the bus?

- Ans
- 1. 30 km/h
  - 2. 32 km/h
  - 3. 25 km/h
  - 4. 38 km/h

Question ID : 264330183861  
Option 1 ID : 264330721120  
Option 2 ID : 264330721121  
Option 3 ID : 264330721122  
Option 4 ID : 264330721123  
Status : Answered  
Chosen Option : 2

**Q.4** A person promised to pay ₹9,048 to the bank in 5 equal annual instalments at the rate of 8% per annum simple interest. The annual instalment (in ₹) paid is:

- Ans  1. 1560  
 2. 1050  
 3. 1650  
 4. 1100

Question ID : 264330119422  
Option 1 ID : 264330467976  
Option 2 ID : 264330467978  
Option 3 ID : 264330467977  
Option 4 ID : 264330467975  
Status : Answered  
Chosen Option : 1

**Q.5** The average age of three persons is 54 years and their ages are in the proportion 2 : 3 : 4. Find the age of the youngest person.

- Ans  1. 28 years  
 2. 34 years  
 3. 36 years  
 4. 32 years

Question ID : 264330105995  
Option 1 ID : 264330416281  
Option 2 ID : 264330416283  
Option 3 ID : 264330416284  
Option 4 ID : 264330416282  
Status : Answered  
Chosen Option : 3

**Q.6** Asha deposits ₹12,500 in a private bank at the rate of 15%, compounded half-yearly. Find the amount Asha earns (in ₹) in  $1\frac{1}{2}$  years (rounded off to two decimal places).

- Ans  1. 15028.71  
 2. 15258.71  
 3. 15528.71  
 4. 13404.76

Question ID : 264330104261  
Option 1 ID : 264330409347  
Option 2 ID : 264330409346  
Option 3 ID : 264330409345  
Option 4 ID : 264330409348  
Status : Answered  
Chosen Option : 2



Q.7 The greatest number that exactly divides 126, 198 and 162 is:

- Ans  1. 18  
 2. 27  
 3. 9  
 4. 81

Question ID : 264330111427  
Option 1 ID : 264330437795  
Option 2 ID : 264330437794  
Option 3 ID : 264330437793  
Option 4 ID : 264330437796  
Status : Answered  
Chosen Option : 1

Q.8 Pihu buys a chocolate for ₹225 and sells it for ₹300. What will be her gain percentage?  
(Rounded off to two decimal places)

- Ans  1. 33.33%  
 2. 28.25%  
 3. 30.35%  
 4. 25.58%

Question ID : 264330119195  
Option 1 ID : 264330467067  
Option 2 ID : 264330467070  
Option 3 ID : 264330467069  
Option 4 ID : 264330467068  
Status : Answered  
Chosen Option : 1

Q.9 The areas of two similar triangles are  $48 \text{ cm}^2$  and  $156 \text{ cm}^2$ . If the height of the smaller triangle is 6 cm, then the corresponding height (in cm) of the bigger triangle is:

- Ans  1.  $\sqrt{118}$   
 2.  $\sqrt{117}$   
 3.  $\sqrt{119}$   
 4.  $\sqrt{121}$

Question ID : 264330119363  
Option 1 ID : 264330467739  
Option 2 ID : 264330467741  
Option 3 ID : 264330467742  
Option 4 ID : 264330467740  
Status : Not Attempted and Marked For Review  
Chosen Option : --

Q.10 If a number P is 15% less than another number Q, and Q is 12% more than 156, then what is the value of P?

- Ans
- 1. 168.52
  - 2. 138.52
  - 3. 148.51
  - 4. 178.52

Question ID : 264330118414  
Option 1 ID : 264330465059  
Option 2 ID : 264330465057  
Option 3 ID : 264330465058  
Option 4 ID : 264330465060  
Status : Answered  
Chosen Option : 3

Q.11 The sum of three distinct prime numbers is 44. What is the largest possible prime number?

- Ans
- 1. 37
  - 2. 31
  - 3. 41
  - 4. 43

Question ID : 264330111448  
Option 1 ID : 264330437879  
Option 2 ID : 264330437880  
Option 3 ID : 264330437877  
Option 4 ID : 264330437878  
Status : Answered  
Chosen Option : 1

Q.12 A person got a new chair at 35% discount. Had he got no discount, he would have had to pay ₹224 more. What is the marked price (in ₹) of the chair?

- Ans
- 1. 735
  - 2. 640
  - 3. 600
  - 4. 750

Question ID : 264330119407  
Option 1 ID : 264330467918  
Option 2 ID : 264330467915  
Option 3 ID : 264330467916  
Option 4 ID : 264330467917  
Status : Answered  
Chosen Option : 2

Q.13 The price of sugar goes up by 25%. By how much percentage must a family reduce their consumption of sugar so that the expenditure on sugar remains the same?

- Ans
- 1. 25%
  - 2. 26%
  - 3. 23%
  - 4. 20%

Question ID : 264330104286  
Option 1 ID : 264330409447  
Option 2 ID : 264330409448  
Option 3 ID : 264330409446  
Option 4 ID : 264330409445  
Status : Answered  
Chosen Option : 4

Q.14 The HCF of 0.0006, 0.006, 0.06, 0.6 and 6 is:

- Ans
- 1. 0.6
  - 2. 0.06
  - 3. 6
  - 4. 0.0006

Question ID : 264330103576  
Option 1 ID : 264330406611  
Option 2 ID : 264330406610  
Option 3 ID : 264330406612  
Option 4 ID : 264330406609  
Status : Answered  
Chosen Option : 3

Q.15 The radius of the base of a conical tent is 20 feet and the slant height of the cone is 35 feet. Find the area (in square feet) of the canvas that is required for making this tent. Ignore the wastage of canvas.

(Use  $\pi = \frac{22}{7}$ )

- Ans
- 1. 2150
  - 2. 2200
  - 3. 2175
  - 4. 2225

Question ID : 264330109542  
Option 1 ID : 264330430445  
Option 2 ID : 264330430447  
Option 3 ID : 264330430446  
Option 4 ID : 264330430448  
Status : Answered  
Chosen Option : 2

Q.1 In MS word 365, While working with the text the thesaurus tool is used for:

- Ans
- 1. finding repeated words in the document
  - 2. corrects misspelling word
  - 3. correct the format of the text
  - 4. check for synonyms and antonyms

Question ID : 264330175975  
Option 1 ID : 264330690195  
Option 2 ID : 264330690196  
Option 3 ID : 264330690197  
Option 4 ID : 264330690198  
Status : Answered  
Chosen Option : 4

Q.2 What feature in Microsoft Word 365 allows you to create a numbered list with different levels of indentation?

- Ans
- 1. Multi-hierarchy numbering
  - 2. Multi-indenting numbering
  - 3. Multilevel numbering
  - 4. Multi-spaced numbering

Question ID : 264330177669  
Option 1 ID : 264330696794  
Option 2 ID : 264330696792  
Option 3 ID : 264330696791  
Option 4 ID : 264330696793  
Status : Answered  
Chosen Option : 2

Q.3 In MS Excel 365 how can you add a specific number of days to a date in Excel?

- Ans
- 1. Using the EDATE function
  - 2. Using the WORKDAY function
  - 3. Using the DAY function
  - 4. Using the DATE function

Question ID : 264330177667  
Option 1 ID : 264330696784  
Option 2 ID : 264330696786  
Option 3 ID : 264330696785  
Option 4 ID : 264330696783  
Status : Not Attempted and Marked For Review  
Chosen Option : --

Q.4 In MS Excel 365, Which of the following charts in MS Excel shows the change of magnitude over a period of time?

- Ans
- 1. Line chart
  - 2. Area chart
  - 3. Bar chart
  - 4. Pie chart

Question ID : 264330180404  
Option 1 ID : 264330707584  
Option 2 ID : 264330707583  
Option 3 ID : 264330707586  
Option 4 ID : 264330707585  
Status : Answered  
Chosen Option : 1

Q.5 Which of the following options allows you to change page orientation in MS Word 365?

- Ans
- 1. Paragraph alignment
  - 2. Margins
  - 3. Page layout
  - 4. Page break

Question ID : 264330176706  
Option 1 ID : 264330693042  
Option 2 ID : 264330693041  
Option 3 ID : 264330693040  
Option 4 ID : 264330693039  
Status : Answered  
Chosen Option : 3

Q.6 Which of the following keyboard shortcut keys is used to copy the selected text in MS-Word 365?

- Ans
- 1. Ctrl + X
  - 2. Ctrl + V
  - 3. Ctrl + C
  - 4. Ctrl + P

Question ID : 264330178288  
Option 1 ID : 264330699209  
Option 2 ID : 264330699208  
Option 3 ID : 264330699207  
Option 4 ID : 264330699210  
Status : Answered  
Chosen Option : 3

Q.7 In MS Excel 365, the VLOOKUP function in Microsoft Excel is primarily used for:

- Ans
- 1. searching for a value in a table and returning a corresponding value
  - 2. finding the total of a range
  - 3. creating pivot tables
  - 4. calculating percentages

Question ID : 264330180693  
Option 1 ID : 264330708742  
Option 2 ID : 264330708741  
Option 3 ID : 264330708739  
Option 4 ID : 264330708740  
Status : Answered  
Chosen Option : 1

Q.8 Which of the following statements is FALSE regarding attaching a file in an email?

- Ans
- 1. The size of the attachment is unlimited.
  - 2. Attachments can be previewed within the email composition window.
  - 3. You can remove or change attachments before sending the email.
  - 4. Multiple files can be attached in an email message.

Question ID : 264330173548  
Option 1 ID : 264330680671  
Option 2 ID : 264330680674  
Option 3 ID : 264330680673  
Option 4 ID : 264330680672  
Status : Answered  
Chosen Option : 1

**Q.9 Which of the following is an example of internet service provider?**

- Ans**  1. Outlook  
 2. Airtel  
 3. Google  
 4. Mozilla

Question ID : 264330178592  
Option 1 ID : 264330700396  
Option 2 ID : 264330700395  
Option 3 ID : 264330700397  
Option 4 ID : 264330700398  
Status : Answered  
Chosen Option : 2

**Q.10 Which of the following is the purpose of the "Zoom" icon in Microsoft Word 365?**

- Ans**  1. To delete the current page  
 2. To adjust the visual appearance of our document to suit our reading or editing needs  
 3. To increase the font size  
 4. To change the document's page layout

Question ID : 264330182790  
Option 1 ID : 264330716934  
Option 2 ID : 264330716933  
Option 3 ID : 264330716931  
Option 4 ID : 264330716932  
Status : Answered  
Chosen Option : 2