

Constable Executive Male and Female in Delhi Police Examination 2023

Roll Number	
Candidate Name	
Venue Name	
Exam Date	01/12/2023
Exam Time	12:00 PM - 1:30 PM
Subject	Constable Executive Male and Female in Delhi Police Examination 2023

Section : General Knowledge

Q.1 When the sun, the moon and the earth are in a straight line, the height of the tide will be higher. What are these tides called?

Ans 1. Spring tides

2. Autumn tides

3. Neap tides

4. Diurnal tide

Question ID : 264330134908

Option 1 ID : 264330528567

Option 2 ID : 264330528570

Option 3 ID : 264330528568

Option 4 ID : 264330528569

Status : Not Answered

Chosen Option : --

Q.2 Bhangra dance is commonly performed in which of these states?

Ans 1. Maharashtra

2. Uttar Pradesh

3. Chhattisgarh

4. Punjab

Question ID : 264330109285

Option 1 ID : 264330429417

Option 2 ID : 264330429420

Option 3 ID : 264330429418

Option 4 ID : 264330429419

Status : Answered

Chosen Option : 4

Q.3 The goal of Saansad Adarsh Gram Yojana was to develop _____ Adarsh Grams by March 2019.

Ans 1. four

2. three

3. five

4. two

Question ID : 264330119219

Option 1 ID : 264330467164

Option 2 ID : 264330467166

Option 3 ID : 264330467165

Option 4 ID : 264330467163

Status : Not Answered

Chosen Option : --

Q.4 Which of the following architectural features/structures was NOT a part of the citadel in Mohenjo-Daro?

- Ans
- 1. Great Courtyard
 - 2. Warehouse
 - 3. Residential Buildings
 - 4. Pillared Hall

Question ID : 264330165325
Option 1 ID : 264330648380
Option 2 ID : 264330648381
Option 3 ID : 264330648382
Option 4 ID : 264330648379
Status : Answered
Chosen Option : 4

Q.5 Posthumus Padma awardee in 2022, Gosaveedu Shalik Hassan was a renowned player of the _____.

- Ans
- 1. Guitar
 - 2. Sitar
 - 3. Nadaswaram
 - 4. Veena

Question ID : 264330111951
Option 1 ID : 264330439891
Option 2 ID : 264330439889
Option 3 ID : 264330439892
Option 4 ID : 264330439890
Status : Not Answered
Chosen Option : --

Q.6 In Karate, which word is used to denote 'Punch'?

- Ans
- 1. Waza-ari
 - 2. Tsuki
 - 3. Seiri
 - 4. Ippon

Question ID : 264330117801
Option 1 ID : 264330463019
Option 2 ID : 264330463020
Option 3 ID : 264330463022
Option 4 ID : 264330463021
Status : Not Answered
Chosen Option : --

Q.7 Which of the following fungus is used in fermentation technology?

- Ans
- 1. Rhizobium
 - 2. Molds
 - 3. Saccharomyces
 - 4. Smuts

Question ID : 264330118028
Option 1 ID : 264330463928
Option 2 ID : 264330463930
Option 3 ID : 264330463927
Option 4 ID : 264330463929
Status : Answered
Chosen Option : 2

Q.8 As per Article 170 of the Constitution of India, the Legislative Assembly of each State shall consist of NOT more than _____ and not less than 60 members.

- Ans 1. 400
 2. 500
 3. 550
 4. 600

Question ID : 264330110630
Option 1 ID : 264330434797
Option 2 ID : 264330434798
Option 3 ID : 264330434799
Option 4 ID : 264330434800
Status : Answered
Chosen Option : 2

Q.9 Which of the following elements is NOT related to the Trade and Investment Policy Reforms?

- Ans 1. Dismantling of quantitative restrictions on imports and exports
 2. Reduction of tariff rates
 3. Removal of licensing for imports
 4. Increase in export duties

Question ID : 264330111601
Option 1 ID : 264330438489
Option 2 ID : 264330438490
Option 3 ID : 264330438492
Option 4 ID : 264330438491
Status : Answered
Chosen Option : 3

Q.10 The process of privatisation covers three sets of measures. Which of the following is NOT one of those?

- Ans 1. Operational measures
 2. Ownership measures
 3. Organisational measures
 4. Accounting measures

Question ID : 264330112512
Option 1 ID : 264330442136
Option 2 ID : 264330442133
Option 3 ID : 264330442134
Option 4 ID : 264330442135
Status : Answered
Chosen Option : 4

Q.11 The author of Prayag Prashasti, Harisena, was the court poet of whom among the following Gupta rulers?

- Ans 1. Samudragupta
 2. Purugupta
 3. Sri Gupta
 4. Kumaragupta

Question ID : 264330182692
Option 1 ID : 264330716541
Option 2 ID : 264330716539
Option 3 ID : 264330716540
Option 4 ID : 264330716542
Status : Answered
Chosen Option : 1

Q.12 In medieval architecture, Sarais are places used for _____.

- Ans 1. warfare practice
 2. hospitals
 3. temporary accommodation
 4. warehouses

Question ID : 264330109648
Option 1 ID : 264330430870
Option 2 ID : 264330430872
Option 3 ID : 264330430869
Option 4 ID : 264330430871
Status : Not Answered
Chosen Option : --

Q.13 Which country is the host of the 2023 ODI Cricket World Cup event?

- Ans 1. Bangladesh
 2. India
 3. Sri Lanka
 4. Australia

Question ID : 264330176083
Option 1 ID : 264330690628
Option 2 ID : 264330690629
Option 3 ID : 264330690630
Option 4 ID : 264330690627
Status : Answered
Chosen Option : 2

Q.14 Which of the following statements is INCORRECT about the an earthquake?

- Ans 1. An earthquake is shaking of the earth.
 2. An earthquake is caused due to release of energy.
 3. An earthquake is a natural event.
 4. An earthquake creates waves that spread in one direction.

Question ID : 264330116374
Option 1 ID : 264330457581
Option 2 ID : 264330457582
Option 3 ID : 264330457584
Option 4 ID : 264330457583
Status : Answered
Chosen Option : 2

Q.15 In 2022, which sports organisation in India implemented equal match fees for both men and women players?

- Ans
- 1. All India Tennis Association
 - 2. Boxing Federation of India
 - 3. Board of Control for Cricket in India
 - 4. All India Football Federation

Question ID : 264330113773
Option 1 ID : 264330447179
Option 2 ID : 264330447177
Option 3 ID : 264330447180
Option 4 ID : 264330447178
Status : Answered
Chosen Option : 2

Q.16 Which of the following is NOT a component of the Green Revolution?

- Ans
- 1. Fertilisers
 - 2. Pesticides
 - 3. Mining
 - 4. HYV Seeds

Question ID : 264330110178
Option 1 ID : 264330432990
Option 2 ID : 264330432991
Option 3 ID : 264330432989
Option 4 ID : 264330432992
Status : Answered
Chosen Option : 3

Q.17 Identify the 'last-living' Sadir dancer who received the Padma Shri in 2022.

- Ans
- 1. R Muthukannammal
 - 2. K Sashimoni
 - 3. B Saraswathi
 - 4. S Mahananda

Question ID : 264330111207
Option 1 ID : 264330436913
Option 2 ID : 264330436914
Option 3 ID : 264330436915
Option 4 ID : 264330436916
Status : Not Answered
Chosen Option : --

Q.18 Which age group of children was considered to find the child sex ratio in Census 2011?

- Ans
- 1. 2 to 5 years
 - 2. 0 to 6 years
 - 3. 0 to 4 years
 - 4. 2 to 6 years

Question ID : 264330183030
Option 1 ID : 264330717854
Option 2 ID : 264330717853
Option 3 ID : 264330717852
Option 4 ID : 264330717855
Status : Answered
Chosen Option : 2

Q.19 According to the Indian Policy Resolution 1956, which of the following industries is a part of schedule A category?

- Ans
- 1. Textile industry
 - 2. Synthetic rubber
 - 3. Mining
 - 4. Fertiliser

Question ID : 264330131504
Option 1 ID : 264330515122
Option 2 ID : 264330515120
Option 3 ID : 264330515119
Option 4 ID : 264330515121
Status : Not Answered
Chosen Option : --

Q.20 Which of the following Articles of the Indian Constitution mentions that 'Untouchability' is abolished and its practice in any form is forbidden?

- Ans
- 1. Article 13
 - 2. Article 15
 - 3. Article 19
 - 4. Article 17

Question ID : 264330180045
Option 1 ID : 264330706163
Option 2 ID : 264330706164
Option 3 ID : 264330706166
Option 4 ID : 264330706165
Status : Answered
Chosen Option : 4

Q.21 'The Truths We Hold: An American Journey' is an autobiography of which political leader?

- Ans
- 1. Kamala Harris
 - 2. Elise Stefanik
 - 3. Alexandria Ocasio-Cortez
 - 4. Drew Zachary

Question ID : 26433053437
Option 1 ID : 264330209051
Option 2 ID : 264330209052
Option 3 ID : 264330209050
Option 4 ID : 264330209053
Status : Not Answered
Chosen Option : --

Q.22 Which of the following is a low power (30 kW) research reactor fuelled by uranium-233?

- Ans
- 1. SHAURYA
 - 2. PRANASH
 - 3. KAMINI
 - 4. MAITRI

Question ID : 264330141662
Option 1 ID : 264330554968
Option 2 ID : 264330554969
Option 3 ID : 264330554970
Option 4 ID : 264330554967
Status : Not Answered
Chosen Option : --

Q.23 Identify the Sultan of the Delhi Sultanate who constructed a new garrison town named Siri for his soldiers.

- Ans
- 1. Bahlul Lodi
 - 2. Muhammad Tughluq
 - 3. Alauddin Khalji
 - 4. Shamsuddin Iltutmish

Question ID : 264330182263
Option 1 ID : 264330714877
Option 2 ID : 264330714876
Option 3 ID : 264330714875
Option 4 ID : 264330714878
Status : Answered
Chosen Option : 3

Q.24 The Manipuri dance of north-eastern India is grown out of the ritual worship of Lord _____.

- Ans
- 1. Vishnu
 - 2. Krishna
 - 3. Ganesha
 - 4. Rama

Question ID : 264330106182
Option 1 ID : 264330417029
Option 2 ID : 264330417032
Option 3 ID : 264330417031
Option 4 ID : 264330417030
Status : Answered
Chosen Option : 1

Q.25 'A Shot at History: My Obsessive Journey to Olympic Gold', is the autobiography of which of the following Olympian?

- Ans
- 1. Major Dhyan Chand
 - 2. Avani Lekhara
 - 3. Neeraj Chopra
 - 4. Abhinav Bindra

Question ID : 264330112857
Option 1 ID : 264330443516
Option 2 ID : 264330443513
Option 3 ID : 264330443514
Option 4 ID : 264330443515
Status : Answered
Chosen Option : 4

Q.26 Which of the following is the characteristic of the Indian Constitution?

- Ans
- 1. Smallest constitution
 - 2. Rigid as well as flexible
 - 3. Multiple citizenship
 - 4. Presidential form of Government

Question ID : 264330118522
Option 1 ID : 264330465489
Option 2 ID : 264330465491
Option 3 ID : 264330465492
Option 4 ID : 264330465490
Status : Answered
Chosen Option : 2

Q.27 Which of the following increased the legal age of marriage for girls from 10 years to 12 years in British India?

- Ans
- 1. Hindu Widows Remarriage Act of 1856
 - 2. Pitt's India Act of 1784
 - 3. Government of India Act of 1935
 - 4. Age of Consent Bill, 1891

Question ID : 264330119745
Option 1 ID : 264330469255
Option 2 ID : 264330469256
Option 3 ID : 264330469257
Option 4 ID : 264330469258
Status : Not Answered
Chosen Option : --

Q.28 What was the maximum limit of Statutory Liquidity Ratio (SLR) that was recommended by the Narasimhan Committee?

- Ans
- 1. 35%
 - 2. 25%
 - 3. 22%
 - 4. 15%

Question ID : 264330130657
Option 1 ID : 264330511739
Option 2 ID : 264330511741
Option 3 ID : 264330511740
Option 4 ID : 264330511742
Status : Not Answered
Chosen Option : --

Q.29 Which Indian music composer received his second Grammy in the 'Best New Age Album' category for his 14th studio album 'Divine Tides', which he shared with American musician and composer Stewart Copeland at the 2022 Grammy Awards?

- Ans 1. Ricky Kej
 2. Mithoon
 3. Harris Jayaraj
 4. Devi Sri Prasad

Question ID : 264330113240
Option 1 ID : 264330445045
Option 2 ID : 264330445046
Option 3 ID : 264330445048
Option 4 ID : 264330445047
Status : Answered
Chosen Option : 1

Q.30 In which year did plague strike Bombay?

- Ans 1. 1892
 2. 1893
 3. 1896
 4. 1894

Question ID : 264330120149
Option 1 ID : 264330470851
Option 2 ID : 264330470852
Option 3 ID : 264330470854
Option 4 ID : 264330470853
Status : Not Answered
Chosen Option : --

Q.31 The early Delhi Sultans, were preferring to appoint (in administration) their special slaves purchased for military service, called bandagan in _____ language.

- Ans 1. Urdu
 2. Arabic
 3. Persian
 4. Sanskrit

Question ID : 264330114077
Option 1 ID : 264330448394
Option 2 ID : 264330448395
Option 3 ID : 264330448393
Option 4 ID : 264330448396
Status : Answered
Chosen Option : 3

Q.32 Privatisation implies _____ a government owned enterprise.

- Ans 1. shedding of the ownership or management of
 2. strengthening the management of
 3. restricting private players from managing
 4. restricting private players to take control of

Question ID : 264330110023
Option 1 ID : 264330432371
Option 2 ID : 264330432372
Option 3 ID : 264330432369
Option 4 ID : 264330432370
Status : Answered
Chosen Option : 1

Q.33 What is the common name of the class of red algae?

- Ans
- 1. Chlorophyceae
 - 2. Xanthophyceae
 - 3. Rhodophyceae
 - 4. Phaeophyceae

Question ID : 264330113317
Option 1 ID : 264330445353
Option 2 ID : 264330445356
Option 3 ID : 264330445355
Option 4 ID : 264330445354
Status : Not Answered
Chosen Option : --

Q.34 The Guptas were believed to have sprung from which varna?

- Ans
- 1. Kshatriya
 - 2. Brahman
 - 3. Vaisya
 - 4. Shudra

Question ID : 264330134582
Option 1 ID : 264330527284
Option 2 ID : 264330527283
Option 3 ID : 264330527285
Option 4 ID : 264330527286
Status : Answered
Chosen Option : 1

Q.35 Which festival was initiated by Shivaji, in his reign, to channelise the patriotic spirit of Hindus?

- Ans
- 1. Ram Navami
 - 2. Durga Pooja
 - 3. Karva Chauth
 - 4. Ganesh Chaturthi

Question ID : 264330132770
Option 1 ID : 264330520177
Option 2 ID : 264330520176
Option 3 ID : 264330520175
Option 4 ID : 264330520178
Status : Answered
Chosen Option : 1

Q.36 Which is the highest court of appeal in India?

- Ans
- 1. Lok Adalat
 - 2. District Court
 - 3. High Court
 - 4. Supreme Court of India

Question ID : 264330169057
Option 1 ID : 264330663034
Option 2 ID : 264330663033
Option 3 ID : 264330663032
Option 4 ID : 264330663031
Status : Answered
Chosen Option : 4

Q.37 Who among the following attended all the three Round Table Conferences held in London?

- Ans
- 1. Sarojini Naidu
 - 2. Tej Bahadur Sapru
 - 3. Mahatma Gandhi
 - 4. Rajendra Prasad

Question ID : 264330114874
Option 1 ID : 264330451581
Option 2 ID : 264330451582
Option 3 ID : 264330451583
Option 4 ID : 264330451584
Status : Answered
Chosen Option : 1

Q.38 Among the following industries, the promotion of one industry is part of the directive principle of state policy of our Constitution and that industry is _____.

- Ans
- 1. fertiliser industry
 - 2. cottage industry
 - 3. automobile industry
 - 4. steel industry

Question ID : 264330109840
Option 1 ID : 264330431640
Option 2 ID : 264330431637
Option 3 ID : 264330431639
Option 4 ID : 264330431638
Status : Not Answered
Chosen Option : --

Q.39 Which of the following statements about the Mitochondria is INCORRECT?

- Ans
- 1. ATP generating chemical reactions get enhanced by the deeply folded surface area of the mitochondria.
 - 2. The body uses energy stored in ATP for making new chemical compounds and for mechanical work.
 - 3. Mitochondria have two membrane coverings.
 - 4. Mitochondria are not capable of making their own proteins.

Question ID : 264330177330
Option 1 ID : 264330695513
Option 2 ID : 264330695514
Option 3 ID : 264330695511
Option 4 ID : 264330695512
Status : Answered
Chosen Option : 3

Q.40 Which of the following languages is NOT in the top 3 most spoken native languages of India (as of 2021)?

- Ans 1. Telugu
 2. Hindi
 3. Bengali
 4. Marathi

Question ID : 264330120330
Option 1 ID : 264330471572
Option 2 ID : 264330471571
Option 3 ID : 264330471574
Option 4 ID : 264330471573
Status : Answered
Chosen Option : 3

Q.41 What is the distance from the lower edge of the crossbar of a football goal to the ground?

- Ans 1. 10 feet
 2. 11 feet
 3. 8 feet
 4. 9 feet

Question ID : 264330118909
Option 1 ID : 264330466293
Option 2 ID : 264330466294
Option 3 ID : 264330466291
Option 4 ID : 264330466292
Status : Not Answered
Chosen Option : --

Q.42 How many crop varieties with special traits like climate resilience and high nutrient content were launched in 2021 in India?

- Ans 1. 45
 2. 25
 3. 35
 4. 40

Question ID : 264330120358
Option 1 ID : 264330471686
Option 2 ID : 264330471683
Option 3 ID : 264330471684
Option 4 ID : 264330471685
Status : Not Answered
Chosen Option : --

Q.43 The Gangaur festival of Rajasthan starts and ends on which days as per the Hindu calendar?

- Ans
- 1. First day of Phalguna (Krishna)-Third day of Phalguna (Shukla)
 - 2. First day of Jyeshtha (Krishna)-Third day of Jyeshtha (Shukla)
 - 3. First day of Ashadh (Krishna)-Third day of Ashadh (Shukla)
 - 4. First day of Chaitra (Krishna)-Third day of Chaitra (Shukla)

Question ID : 264330110465
Option 1 ID : 264330434138
Option 2 ID : 264330434140
Option 3 ID : 264330434139
Option 4 ID : 264330434137
Status : Not Answered
Chosen Option : --

Q.44 Which of the following refers to 'net indirect taxes'?

- Ans
- 1. Direct taxes – subsidies
 - 2. Direct Taxes + subsidies
 - 3. Indirect taxes + subsidies
 - 4. Indirect taxes – subsidies

Question ID : 264330110164
Option 1 ID : 264330432935
Option 2 ID : 264330432936
Option 3 ID : 264330432933
Option 4 ID : 264330432934
Status : Answered
Chosen Option : 1

Q.45 Which river in the Himalayas flows parallel to the Ganga as a right-bank tributary?

- Ans
- 1. Ghaghara
 - 2. Gandak
 - 3. Yamuna
 - 4. Kosi

Question ID : 264330176009
Option 1 ID : 264330690332
Option 2 ID : 264330690334
Option 3 ID : 264330690331
Option 4 ID : 264330690333
Status : Answered
Chosen Option : 3

Q.46 As per census 2011, which of the following states recorded the lowest female literacy rate?

- Ans
- 1. Kerala
 - 2. Haryana
 - 3. Rajasthan
 - 4. Bihar

Question ID : 264330179556
Option 1 ID : 264330704223
Option 2 ID : 264330704226
Option 3 ID : 264330704225
Option 4 ID : 264330704224
Status : Answered
Chosen Option : 2

Q.47 Articles 36-51 of the Constitution of India pertain to _____.

- Ans
- 1. Fundamental Duties
 - 2. Directive Principles of State Policy
 - 3. Fundamental Rights
 - 4. The Union

Question ID : 264330130682
Option 1 ID : 264330511841
Option 2 ID : 264330511840
Option 3 ID : 264330511839
Option 4 ID : 264330511842
Status : Answered
Chosen Option : 2

Q.48 Who among the following was the founder of Al-Hilal newspaper during British India?

- Ans
- 1. Hasrat Mohani
 - 2. Mohammad Ajmal Khan
 - 3. Maulana Abul Kalam Azad
 - 4. Syed Hasan Imam

Question ID : 264330120266
Option 1 ID : 264330471320
Option 2 ID : 264330471322
Option 3 ID : 264330471319
Option 4 ID : 264330471321
Status : Not Answered
Chosen Option : --

Q.49 _____ empowers the President to remove inconsistencies between laws passed by the Parliament and State Legislatures and the subjects included in the concurrent list.

- Ans
- 1. Article 259
 - 2. Article 254
 - 3. Article 253
 - 4. Article 250

Question ID : 264330134575
Option 1 ID : 264330527256
Option 2 ID : 264330527258
Option 3 ID : 264330527257
Option 4 ID : 264330527255
Status : Not Answered
Chosen Option : --

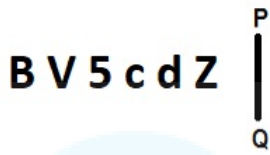
Q.50 Sitara Devi was a dancer of the popular North Indian classical dance form _____.

- Ans
- 1. Manipuri
 - 2. Kathakali
 - 3. Kathak
 - 4. Sattriya

Question ID : 264330111793
Option 1 ID : 264330439260
Option 2 ID : 264330439258
Option 3 ID : 264330439259
Option 4 ID : 264330439257
Status : Not Answered
Chosen Option : --

Section : Reasoning

Q.1 Select the correct mirror image of the given figure when the mirror is placed at PQ as shown below.



Ans

- ✓ 1. Σ b c 2 V B
- ✗ 2. Z b c 2 V B
- ✗ 3. Σ b c 5 B
- ✗ 4. Z b c d Z

Question ID : 26433080778

Option 1 ID : 264330317046

Option 2 ID : 264330317047

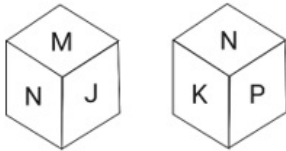
Option 3 ID : 264330317048

Option 4 ID : 264330317045

Status : Answered

Chosen Option : 1

Q.2 Six letters J, K, L, M, N and P are written on different faces of a dice. Two positions of this dice are shown in the figure. Find the letter on the face opposite to 'L'.



Ans

- ✗ 1. P
- ✗ 2. K
- ✗ 3. M
- ✓ 4. N

Question ID : 26433080636

Option 1 ID : 264330316480

Option 2 ID : 264330316479

Option 3 ID : 264330316478

Option 4 ID : 264330316477

Status : Answered

Chosen Option : 4

Q.3 Select the set in which the numbers are related in the same way as are the numbers of the following sets.

(NOTE: Operations should be performed on the whole numbers, without breaking down the numbers into its constituent digits. E.g. 13 – Operations on 13 such as adding/deleting/multiplying etc. to 13 can be performed. Breaking down 13 into 1 and 3 and then performing mathematical operations on 1 and 3 is not allowed)

(5, 23, 74)

(8, 62, 191)

Ans 1. (7, 47, 146)

2. (10, 98, 289)

3. (4, 14, 46)

4. (3, 11, 38)

Question ID : 26433052101

Option 1 ID : 264330203707

Option 2 ID : 264330203709

Option 3 ID : 264330203706

Option 4 ID : 264330203708

Status : Answered

Chosen Option : 1

Q.4 Select the correct combination of mathematical signs to sequentially replace the * signs and to balance the given equation.

$225 * 25 * 3 * 3 * 6 * 6$

Ans 1. $+ * = - +$

2. $+ * + - =$

3. $+ = * - +$

4. $+ * - + =$

Question ID : 26433085718

Option 1 ID : 264330336575

Option 2 ID : 264330336576

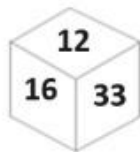
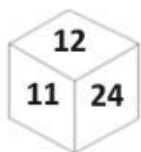
Option 3 ID : 264330336574

Option 4 ID : 264330336573

Status : Answered

Chosen Option : 3

Q.5 Six numbers 11, 12, 42, 16, 24 and 33 are written on different faces of a dice. Two positions of this dice are shown in the figure. Find the number on the face opposite to 24.



Ans 1. 33

2. 16

3. 11

4. 12

Question ID : 264330129791

Option 1 ID : 264330508396

Option 2 ID : 264330508395

Option 3 ID : 264330508397

Option 4 ID : 264330508398

Status : Answered

Chosen Option : 1

Q.6 Select the option that is related to the third word in the same way as the second word is related to the first word. (The words must be considered as meaningful English words and must NOT be related to each other based on the number of letters/number of consonants/vowels in the word)
Synagogue : Religion :: Court : ?

- Ans
- 1. Minister
 - 2. Law
 - 3. Judge
 - 4. Advocate

Question ID : 26433081986
Option 1 ID : 264330321780
Option 2 ID : 264330321779
Option 3 ID : 264330321778
Option 4 ID : 264330321777
Status : Answered
Chosen Option : 2

Q.7 Select the number from among the given options that can replace the question mark (?) in the following series.
5, 15, 23, 29, ?, 35

- Ans
- 1. 32
 - 2. 33
 - 3. 30
 - 4. 31

Question ID : 264330111627
Option 1 ID : 264330438595
Option 2 ID : 264330438593
Option 3 ID : 264330438596
Option 4 ID : 264330438594
Status : Answered
Chosen Option : 2

Q.8 Read the given statements and conclusions carefully. Assuming that the information given in the statements is true, even if it appears to be at variance with commonly known facts, decide which of the given conclusions logically follow(s) from the statements.

Statements:

Some reds are blues.

All blues are greens.

Conclusions:

I. Some reds are greens.

II. Some greens are reds.

- Ans
- 1. Neither conclusion I nor II follows
 - 2. Both conclusions I and II follow
 - 3. Only conclusion I follows
 - 4. Only conclusion II follows

Question ID : 26433068288
Option 1 ID : 264330267667
Option 2 ID : 264330267666
Option 3 ID : 264330267664
Option 4 ID : 264330267665
Status : Answered
Chosen Option : 2

Q.9 Select the option that is related to the fourth number in the same way as the first number is related to the second number and the fifth number is related to the sixth number.

157 : 13 :: ? : 9 :: 241 : 16

- Ans
- 1. 70
 - 2. 81
 - 3. 77
 - 4. 73

Question ID : 26433052019
Option 1 ID : 264330203380
Option 2 ID : 264330203381
Option 3 ID : 264330203379
Option 4 ID : 264330203378
Status : Answered
Chosen Option : 4

Q.10 K, L, M, N, X and Y are sitting around a circular table facing the centre. Only two people sit between M and X. L sits second to the right of X. Y sits to the immediate left of K. How many people sit between N and M when counted from the right of N?

- Ans
- 1. Two
 - 2. Three
 - 3. One
 - 4. None

Question ID : 264330104022
Option 1 ID : 264330408391
Option 2 ID : 264330408392
Option 3 ID : 264330408390
Option 4 ID : 264330408389
Status : Answered
Chosen Option : 2

Q.11 Which figure should replace the question mark (?) if the following series were to be continued?

C O L 3 e	O C e L 3	e O C 3 L	O e L C 3	L O e 3 C	?
-----------	-----------	-----------	-----------	-----------	---

Ans

✓ 1. O L C e 3

✗ 2. e L O C 3

✗ 3. C L O e 3

✗ 4. C 3 O e L

Question ID : 264330103882

Option 1 ID : 264330407830

Option 2 ID : 264330407832

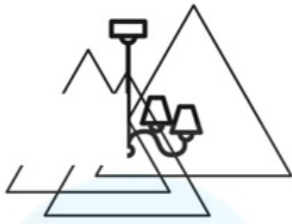
Option 3 ID : 264330407829

Option 4 ID : 264330407831

Status : Answered

Chosen Option : 3

Q.12 Which of the following option figures will complete the pattern in the figure given below?



Ans

✗ 1.



✗ 2.



✗ 3.



✓ 4.



Question ID : 26433080638

Option 1 ID : 264330316485

Option 2 ID : 264330316486

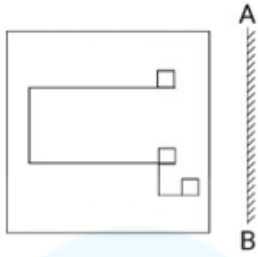
Option 3 ID : 264330316487

Option 4 ID : 264330316488

Status : Answered

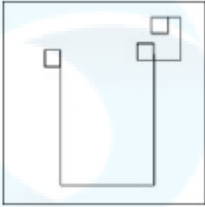
Chosen Option : 4

Q.13 Select the correct mirror image of the given figure when the mirror is placed at 'AB' as shown.

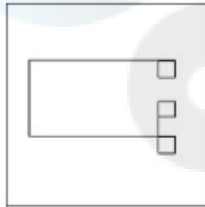


Ans

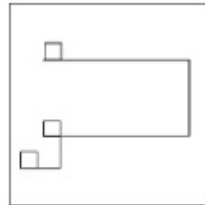
✗ 1.



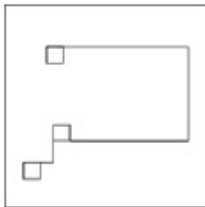
✗ 2.



✓ 3.



✗ 4.



Question ID : 264330114262

Option 1 ID : 264330449135

Option 2 ID : 264330449133

Option 3 ID : 264330449136

Option 4 ID : 264330449134

Status : Answered

Chosen Option : 3

Q.14 Select the correct mirror image of the given figure when the mirror is placed at MN as shown below.



Ans

- ✓ 1. Ʒ ʌ A o ʌ
- ✗ 2. z 5 A o ʌ
- ✗ 3. Ʒ ʌ V o K
- ✗ 4. 5 z A o K

Question ID : 26433016661

Option 1 ID : 264330653684

Option 2 ID : 264330653686

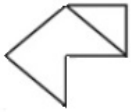
Option 3 ID : 264330653683

Option 4 ID : 264330653685

Status : Answered

Chosen Option : 1

Q.15 Select the option in which the given figure is embedded (rotation is NOT allowed).



Ans

- ✓ 1.
- ✗ 2.
- ✗ 3.
- ✗ 4.

Question ID : 264330101165

Option 1 ID : 264330397208

Option 2 ID : 264330397207

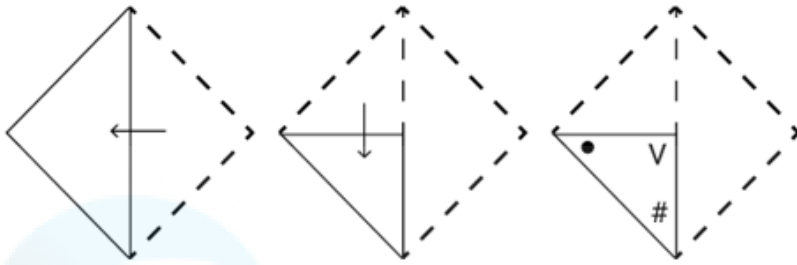
Option 3 ID : 264330397206

Option 4 ID : 264330397205

Status : Answered

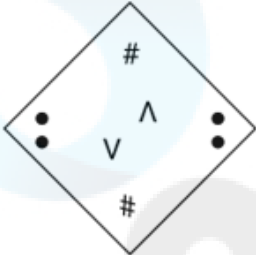
Chosen Option : 1

Q.16 A square sheet of paper is folded along the dotted line successively along the directions shown and is then punched in the last. How would the paper look when unfolded?

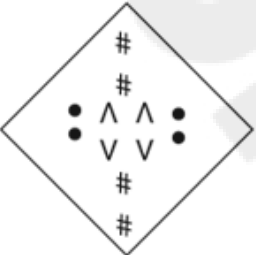


Ans

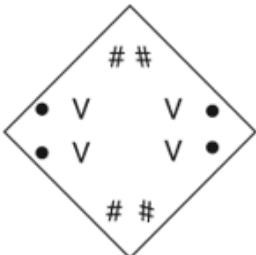
✗ 1.



✗ 2.



✗ 3.



✓ 4.



Question ID : 264330172433

Option 1 ID : 264330676283

Option 2 ID : 264330676285

Option 3 ID : 264330676284

Option 4 ID : 264330676286

Status : Answered

Chosen Option : 4

Q.17 Which of the following option figures will complete the pattern in the figure given below?



Ans

X 1.



X 2.



✓ 3.



X 4.



Question ID : 26433080599
Option 1 ID : 264330316331
Option 2 ID : 264330316332
Option 3 ID : 264330316330
Option 4 ID : 264330316329
Status : Answered
Chosen Option : 3

Q.18 Which of the following terms will replace the question mark (?) in the given series?
NHC, PKG, ?, TQO, VTS

Ans ✓ 1. RNK

X 2. SNK

X 3. SNL

X 4. RML

Question ID : 264330102182
Option 1 ID : 264330401193
Option 2 ID : 264330401194
Option 3 ID : 264330401196
Option 4 ID : 264330401195
Status : Answered
Chosen Option : 1

Q.19 Which figure should replace the question mark (?) if the series were to be continued?

3	O		D	3		9	S		L	9		
	9	L		S	9		3	D		O	3	?
S	D	△	L	△	O	O	L	△	D	△	S	

Ans

✗ 1.

9	3	
L	O	
S	D	△

✗ 2.

L	D	
9	S	
O	3	△

✓ 3.

3	O	
9	L	
S	D	△

✗ 4.

O	L	
3	9	
△	S	D

Question ID : 264330130821

Option 1 ID : 264330512395

Option 2 ID : 264330512397

Option 3 ID : 264330512396

Option 4 ID : 264330512398

Status : Answered

Chosen Option : 3

Q.20 In a code language, if MANGO is coded as 50 and BANANA is coded as 33, then how will COCONUT be coded?

Ans ✗ 1. 97

✗ 2. 87

✗ 3. 80

✓ 4. 91

Question ID : 26433089487

Option 1 ID : 264330351452

Option 2 ID : 264330351450

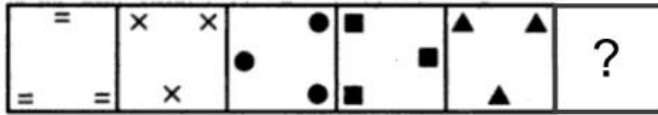
Option 3 ID : 264330351449

Option 4 ID : 264330351451

Status : Answered

Chosen Option : 4

Q.21 Select the figure from among the given options that can replace the question mark (?) in the following series.



Ans

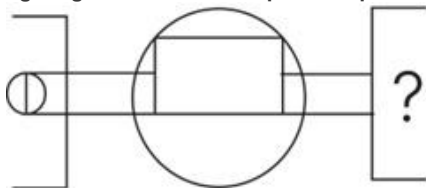
- ✓ 1.
- ✗ 2.
- ✗ 3.
- ✗ 4.

Question ID : 26433080525
 Option 1 ID : 264330316036
 Option 2 ID : 264330316033
 Option 3 ID : 264330316035
 Option 4 ID : 264330316034

Status : Answered

Chosen Option : 3

Q.22 Select the figure from the given options that will replace the question mark (?) in the figure given below to complete the pattern so that the final image is symmetrical.



Ans

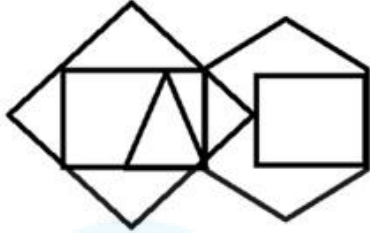
- ✓ 1.
- ✗ 2.
- ✗ 3.
- ✗ 4.

Question ID : 264330114735
 Option 1 ID : 264330451025
 Option 2 ID : 264330451026
 Option 3 ID : 264330451028
 Option 4 ID : 264330451027

Status : Answered

Chosen Option : 1

Q.23 How many triangles are there in the given figure?



- Ans
- 1. 4
 - 2. 3
 - 3. 6
 - 4. 5

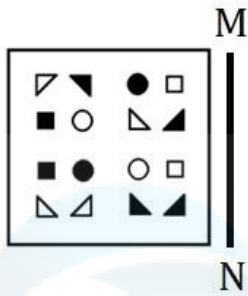
Question ID : 26433068736
Option 1 ID : 264330269458
Option 2 ID : 264330269459
Option 3 ID : 264330269456
Option 4 ID : 264330269457
Status : Answered
Chosen Option : 3

Q.24 Select the correct combination of mathematical signs to sequentially replace the * signs and to balance the given equation.
 $26 * 52 * 38 * 57 * 23 = 53$

- Ans
- 1. +, x, -, +
 - 2. ÷, x, +, -
 - 3. x, ÷, +, -
 - 4. -, x, ÷, -

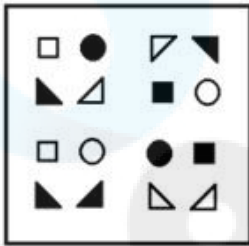
Question ID : 26433092506
Option 1 ID : 264330363314
Option 2 ID : 264330363313
Option 3 ID : 264330363315
Option 4 ID : 264330363316
Status : Answered
Chosen Option : 2

Q.25 Select the correct mirror image of the given figure when the mirror is placed at 'MN' as shown below.




Ans

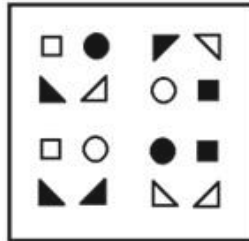
✗ 1.



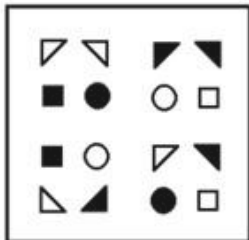
✗ 2.



✓ 3.



✗ 4.



Question ID : 264330172415

Option 1 ID : 264330676214

Option 2 ID : 264330676213

Option 3 ID : 264330676211

Option 4 ID : 264330676212

Status : Answered

Chosen Option : 3

Q.1 The average weight of A, B and C is 65 kg. The average weight of A and B is 62 kg and that of B and C is 57 kg. The weight of B is:

- Ans
- 1. 56 kg
 - 2. 43 kg
 - 3. 40 kg
 - 4. 53 kg

Question ID : 264330168978
Option 1 ID : 264330662717
Option 2 ID : 264330662716
Option 3 ID : 264330662715
Option 4 ID : 264330662718
Status : Answered
Chosen Option : 4

Q.2 A train increases its usual speed by 16% and reaches its destination 30 minutes early. What is the time taken (in hours) normally by the train in the journey?

- Ans
- 1. $2\frac{3}{8}$
 - 2. $6\frac{5}{8}$
 - 3. $3\frac{5}{8}$
 - 4. $1\frac{5}{8}$

Question ID : 264330119349
Option 1 ID : 264330467683
Option 2 ID : 264330467685
Option 3 ID : 264330467684
Option 4 ID : 264330467686
Status : Answered
Chosen Option : 3

Q.3 A person gives 25% discount and still gains 20%. What percentage above the M.P. is the C.P.?

- Ans
- 1. 25%
 - 2. 60%
 - 3. 18%
 - 4. 45%

Question ID : 264330183846
Option 1 ID : 264330721060
Option 2 ID : 264330721061
Option 3 ID : 264330721062
Option 4 ID : 264330721063
Status : Answered
Chosen Option : 2

Q.4 The surface area of a sphere of radius 4 cm is eight times the area of the curved surface area of a cone whose radius 2 cm. Find the volume of the cone.

Ans

1. $\frac{2\pi}{\sqrt{3}} \text{ cm}^3$

2. $\frac{4\pi}{\sqrt{3}} \text{ cm}^3$

3. $\frac{8\pi}{\sqrt{3}} \text{ cm}^3$

4. $\frac{6\pi}{\sqrt{3}} \text{ cm}^3$

Question ID : 264330111497

Option 1 ID : 264330438073

Option 2 ID : 264330438074

Option 3 ID : 264330438076

Option 4 ID : 264330438075

Status : Answered

Chosen Option : 3

Q.5 The number of prime numbers which are greater than 50 and less than 100 is:

Ans 1. 9

2. 10

3. 11

4. 13

Question ID : 264330104478

Option 1 ID : 264330410216

Option 2 ID : 264330410214

Option 3 ID : 264330410213

Option 4 ID : 264330410215

Status : Answered

Chosen Option : 2

Q.6 What is sum of the product of the 1st& 5th prime numbers and the 3rd& 9th prime numbers?

Ans 1. 212

2. 101

3. 118

4. 137

Question ID : 264330104346

Option 1 ID : 264330409688

Option 2 ID : 264330409685

Option 3 ID : 264330409686

Option 4 ID : 264330409687

Status : Answered

Chosen Option : 4

Q.7 What is the difference between the compound interests on ₹8,000 for 1 year at 6% per annum compounded yearly and half-yearly?

- Ans 1. ₹7.2
 2. ₹7.9
 3. ₹6.2
 4. ₹5.5

Question ID : 264330104362
Option 1 ID : 264330409750
Option 2 ID : 264330409752
Option 3 ID : 264330409749
Option 4 ID : 264330409751
Status : Answered
Chosen Option : 1

Q.8 In a village, there is a pond that has the radius 14 m. There is a fountain of diameter 14 m in the centre of the pond. Calculate the area of the pond excluding the fountain. (Use $\pi = \frac{22}{7}$)

- Ans 1. 462 m²
 2. 452 m²
 3. 482 m²
 4. 412 m²

Question ID : 26433091571
Option 1 ID : 264330359651
Option 2 ID : 264330359650
Option 3 ID : 264330359652
Option 4 ID : 264330359649
Status : Answered
Chosen Option : 1

Q.9 A city's population is 1,00,000. Next year it is expected to increase by 12%, and the year after that it is expected to decrease by 10%. Finally, the new population would be:

- Ans 1. 1,01,600
 2. 1,05,600
 3. 1,00,800
 4. 1,08,400

Question ID : 264330104390
Option 1 ID : 264330409863
Option 2 ID : 264330409862
Option 3 ID : 264330409864
Option 4 ID : 264330409861
Status : Answered
Chosen Option : 3

Q.10 400 men have provisions for 23 weeks. They are joined by 60 men. How long will the provisions last?

- Ans
- 1. 24 weeks
 - 2. 16 weeks
 - 3. 20 weeks
 - 4. 26 weeks

Question ID : 264330182571
Option 1 ID : 264330716077
Option 2 ID : 264330716075
Option 3 ID : 264330716076
Option 4 ID : 264330716078
Status : Answered
Chosen Option : 3

Q.11 Two sums of money are proportional to 5 : 9. If the first sum is 55, then the second sum is:

- Ans
- 1. 99
 - 2. 77
 - 3. 88
 - 4. 85

Question ID : 264330130935
Option 1 ID : 264330512852
Option 2 ID : 264330512853
Option 3 ID : 264330512851
Option 4 ID : 264330512854
Status : Answered
Chosen Option : 1

Q.12 A vendor bought buttons at 22 for a rupee. How many must he sell for a rupee to gain 10%?

- Ans
- 1. 20
 - 2. 16
 - 3. 19
 - 4. 18

Question ID : 264330126513
Option 1 ID : 264330495724
Option 2 ID : 264330495727
Option 3 ID : 264330495725
Option 4 ID : 264330495726
Status : Answered
Chosen Option : 1

Q.13 What is the least common multiple of 44, 108, 135, 162 and 198?

- Ans
- 1. 728
 - 2. 1778
 - 3. 820
 - 4. 17820

Question ID : 264330104334
Option 1 ID : 264330409637
Option 2 ID : 264330409639
Option 3 ID : 264330409638
Option 4 ID : 264330409640
Status : Answered
Chosen Option : 4

Q.14 At what rate per annum on simple interest will a sum of money double itself in 8 years?

- Ans
- 1. 5.6%
 - 2. 2.5%
 - 3. 12.5%
 - 4. 6.25%

Question ID : 264330182525
Option 1 ID : 264330715893
Option 2 ID : 264330715894
Option 3 ID : 264330715892
Option 4 ID : 264330715891
Status : Answered
Chosen Option : 3

Q.15 A company is earning an income from which expenditure (other than tax) is deducted to get the amount of profit earned. The company has to pay tax of 22% on the profit earned. If net profit after paying taxes is ₹2,340, which is 18% of expenditure (other than taxes), what was the income (in ₹) of the company?

- Ans
- 1. 16,667
 - 2. 19,000
 - 3. 13,000
 - 4. 16,000

Question ID : 264330129996
Option 1 ID : 264330509218
Option 2 ID : 264330509216
Option 3 ID : 264330509215
Option 4 ID : 264330509217
Status : Answered
Chosen Option : 1

Section : Computer Proficiency

Q.1 What is the shortcut command in MS-Word 365 for cutting the text?

- Ans
- 1. Ctrl + Z
 - 2. Ctrl + V
 - 3. Ctrl + C
 - 4. Ctrl + X

Question ID : 264330171411
Option 1 ID : 264330672262
Option 2 ID : 264330672261
Option 3 ID : 264330672260
Option 4 ID : 264330672259
Status : Answered
Chosen Option : 4

Q.2 Which of the following is the advantage of using an Electronic mail?

- Ans** 1. It is convenient and fast communication with individuals or groups globally.
 2. An overwhelming number of emails can lead to information overload.
 3. Vulnerability to spam and phishing threats.
 4. It can lead to decreased face-to-face communication and loss of personal touch.

Question ID : 264330179435
Option 1 ID : 264330703746
Option 2 ID : 264330703744
Option 3 ID : 264330703743
Option 4 ID : 264330703745
Status : Answered
Chosen Option : 1

Q.3 What is the purpose of the 'Undo' command in Microsoft Excel?

- Ans** 1. It saves the current workbook.
 2. It inserts a new worksheet.
 3. It copies selected cells.
 4. It reverses the last action performed.

Question ID : 264330180698
Option 1 ID : 264330708759
Option 2 ID : 264330708762
Option 3 ID : 264330708760
Option 4 ID : 264330708761
Status : Answered
Chosen Option : 4

Q.4 How do we move a piece of text from one place to another in Microsoft Word 365?

- Ans** 1. Cut and Paste
 2. Cut and Insert
 3. Copy and Insert
 4. Copy and Paste

Question ID : 264330182084
Option 1 ID : 264330714178
Option 2 ID : 264330714177
Option 3 ID : 264330714176
Option 4 ID : 264330714175
Status : Answered
Chosen Option : 1

Q.5 Which of the following is NOT a type of communication on the internet?

- Ans** 1. Chat
 2. Video conferencing
 3. Telepathy
 4. Email

Question ID : 264330178554
Option 1 ID : 264330700244
Option 2 ID : 264330700245
Option 3 ID : 264330700246
Option 4 ID : 264330700243
Status : Answered
Chosen Option : 3

Q.6 In MS Excel 365, which of the following options in MS Excel will arrange data in descending order based on the selected column(s)?

- Ans**
- 1. Click 'Sort A to Z'
 - 2. Click the filter button
 - 3. Click the 'Sort Z to A' button
 - 4. Click on 'Find & Select'

Question ID : 264330180821
Option 1 ID : 264330709247
Option 2 ID : 264330709249
Option 3 ID : 264330709248
Option 4 ID : 264330709250
Status : Answered
Chosen Option : 3

Q.7 In MS-Word 365, which feature allows you to create a new document quickly without having to start from scratch, using a predefined layout and formatting?

- Ans**
- 1. Print Layout View
 - 2. Document Template
 - 3. AutoSave
 - 4. Spelling and Grammar Check

Question ID : 264330173351
Option 1 ID : 264330679885
Option 2 ID : 264330679884
Option 3 ID : 264330679883
Option 4 ID : 264330679886
Status : Answered
Chosen Option : 2

Q.8 What is the purpose of the 'Drag-and-Drop' method in Microsoft Word 365?

- Ans**
- 1. To format text
 - 2. To copy or move text by dragging it to a new location
 - 3. To print text
 - 4. To select text

Question ID : 264330180706
Option 1 ID : 264330708792
Option 2 ID : 264330708793
Option 3 ID : 264330708794
Option 4 ID : 264330708791
Status : Answered
Chosen Option : 2

Q.9 Which of the following Tabs is used to locate Bullets and Numbering icons of MS-Word 2010?

- Ans**
- 1. View Tab
 - 2. Home Tab
 - 3. Design Tab
 - 4. Insert Tab

Question ID : 264330178265
Option 1 ID : 264330699117
Option 2 ID : 264330699116
Option 3 ID : 264330699118
Option 4 ID : 264330699115
Status : Answered
Chosen Option : 4

Q.10 In MS Excel 365, to open an existing spreadsheet, which of the following shortcut keys is used?

- Ans**
- 1. Ctrl + N
 - 2. Ctrl + E
 - 3. Ctrl + O
 - 4. Ctrl + I

Question ID : 264330175949

Option 1 ID : 264330690093

Option 2 ID : 264330690094

Option 3 ID : 264330690091

Option 4 ID : 264330690092

Status : Answered

Chosen Option : 3