

Constable Executive Male and Female in Delhi Police Examination 2023

Roll Number	
Candidate Name	
Venue Name	
Exam Date	01/12/2023
Exam Time	3:00 PM - 4:30 PM
Subject	Constable Executive Male and Female in Delhi Police Examination 2023

Section : General Knowledge

Q.1 Guru Pankaj Charan Das and Guru Debaprasad Das are associated with which of the following dance forms?

- Ans
- 1. Manipuri
 - 2. Odissi
 - 3. Kathak
 - 4. Kathakali

Question ID : 264330110407
Option 1 ID : 264330433905
Option 2 ID : 264330433908
Option 3 ID : 264330433907
Option 4 ID : 264330433906
Status : Answered
Chosen Option : 2

Q.2 Which of the following policies is generally revealed by the annual financial statement of the Government of India?

- Ans
- 1. Monetary policy
 - 2. Industrial policy
 - 3. Fiscal policy
 - 4. Population policy

Question ID : 264330120869
Option 1 ID : 264330473693
Option 2 ID : 264330473692
Option 3 ID : 264330473691
Option 4 ID : 264330473694
Status : Answered
Chosen Option : 3

Q.3 In medieval architecture, Khanqahs are associated with _____.

- Ans
- 1. sufi saints
 - 2. nawabs
 - 3. traders
 - 4. queens

Question ID : 264330109647
Option 1 ID : 264330430866
Option 2 ID : 264330430865
Option 3 ID : 264330430867
Option 4 ID : 264330430868
Status : Answered
Chosen Option : 3

Q.4 Which of the following committees/commissions was set up in 1976 for recommending for fundamental duties by the Indira Gandhi Government?

- Ans
- 1. Thakaar Commission
 - 2. Sarkaria Commission
 - 3. Swaran Singh Committee
 - 4. Shah Commission

Question ID : 264330110125
Option 1 ID : 264330432779
Option 2 ID : 264330432778
Option 3 ID : 264330432780
Option 4 ID : 264330432777
Status : Answered
Chosen Option : 3

Q.5 The Narora Atomic Power Station is situated on the banks of the Ganga in _____ state.

- Ans
- 1. Bihar
 - 2. West Bengal
 - 3. Uttarakhand
 - 4. Uttar Pradesh

Question ID : 264330120315
Option 1 ID : 264330471511
Option 2 ID : 264330471514
Option 3 ID : 264330471512
Option 4 ID : 264330471513
Status : Answered
Chosen Option : 2

Q.6 The rate at which consumers convert the chemical energy in their food into their biomass is called:

- Ans
- 1. primary productivity
 - 2. secondary productivity
 - 3. gross primary productivity
 - 4. net tertiary productivity

Question ID : 264330111893
Option 1 ID : 264330439658
Option 2 ID : 264330439657
Option 3 ID : 264330439659
Option 4 ID : 264330439660
Status : Not Answered
Chosen Option : --

Q.7 Which of the following novels is NOT written by Chetan Bhagat?

- Ans
- 1. The Girl in Room 105
 - 2. One Arranged Murder
 - 3. Who Will Cry When You Die?
 - 4. 400 Days

Question ID : 264330112869
Option 1 ID : 264330443563
Option 2 ID : 264330443564
Option 3 ID : 264330443562
Option 4 ID : 264330443561
Status : Answered
Chosen Option : 3

Q.8 Which of the following festivals is NOT widely celebrated by the tribal people of Jharkhand?

- Ans
- 1. Sarhul
 - 2. Jawa
 - 3. Hareli
 - 4. Karma

Question ID : 264330134248
Option 1 ID : 264330525987
Option 2 ID : 264330525990
Option 3 ID : 264330525988
Option 4 ID : 264330525989
Status : Answered
Chosen Option : 2

Q.9 Who was the autobiographer of 'Ace against Odds'?

- Ans
- 1. Mithali Raj
 - 2. PV Sindhu
 - 3. Sania Nehwal
 - 4. Sania Mirza

Question ID : 26433064215
Option 1 ID : 264330251455
Option 2 ID : 264330251454
Option 3 ID : 264330251453
Option 4 ID : 264330251452
Status : Answered
Chosen Option : 4

Q.10 The Treaty of Rajpurghat was concluded by the East India Company with which Maratha power?

- Ans
- 1. Gaekwads
 - 2. Sindhia
 - 3. Bhonsle
 - 4. Holkar

Question ID : 264330119712
Option 1 ID : 264330469126
Option 2 ID : 264330469123
Option 3 ID : 264330469125
Option 4 ID : 264330469124
Status : Answered
Chosen Option : 4

Q.11 According to the Census of India 2011, which state of India has the highest number of Scheduled Caste population?

- Ans
- 1. Maharashtra
 - 2. Madhya Pradesh
 - 3. Bihar
 - 4. Uttar Pradesh

Question ID : 264330167035
Option 1 ID : 264330655146
Option 2 ID : 264330655143
Option 3 ID : 264330655144
Option 4 ID : 264330655145
Status : Answered
Chosen Option : 4

Q.12 Which place in the Garo hills of Meghalaya may receive an amount of rainfall in a day equal to 10 years of rainfall in Jaisalmer of Rajasthan?

- Ans
- 1. Baghmara
 - 2. Aminda
 - 3. Tura
 - 4. Cherrapunji

Question ID : 264330134894
Option 1 ID : 264330528511
Option 2 ID : 264330528514
Option 3 ID : 264330528512
Option 4 ID : 264330528513
Status : Answered
Chosen Option : 4

Q.13 _____ means the transfer of ownership, management and control of public sector enterprises to the private sector.

- Ans
- 1. Digitalisation
 - 2. Globalisation
 - 3. Liberalisation
 - 4. Privatisation

Question ID : 264330110026
Option 1 ID : 264330432384
Option 2 ID : 264330432383
Option 3 ID : 264330432381
Option 4 ID : 264330432382
Status : Answered
Chosen Option : 4

Q.14 The beautiful square-shaped Mughal architecture, Kanch Mahal is situated in which of the following cities of India?

- Ans
- 1. Agra
 - 2. Ahmedabad
 - 3. Aurangabad
 - 4. Hyderabad

Question ID : 264330111849
Option 1 ID : 264330439484
Option 2 ID : 264330439483
Option 3 ID : 264330439482
Option 4 ID : 264330439481
Status : Not Answered
Chosen Option : --

Q.15 Which of the following is an external agency with which NABARD has collaborated to promote micro-finance in 2005-06?

- Ans
- 1. International Monetary Fund
 - 2. International Bank for Reconstruction and Development
 - 3. Swiss Agency for Development Cooperation
 - 4. New Development Bank, BRICS

Question ID : 264330117579
Option 1 ID : 264330462343
Option 2 ID : 264330462342
Option 3 ID : 264330462341
Option 4 ID : 264330462344
Status : Answered
Chosen Option : 1

Q.16 Who among the following wrote the famous song, 'Amar Sonar Bangla', which became the national anthem of Bangladesh after its independence in 1971?

- Ans
- 1. Bankim Chandra Chatterjee
 - 2. Ramprasad Sen
 - 3. Rabindranath Tagore
 - 4. Madhusudan Dutt

Question ID : 264330113588
Option 1 ID : 264330446439
Option 2 ID : 264330446437
Option 3 ID : 264330446438
Option 4 ID : 264330446440
Status : Answered
Chosen Option : 1

Q.17 Who was the President of the Board of Trade when the Cabinet Mission visited India?

- Ans
- 1. AV Alexander
 - 2. Lord Wavell
 - 3. Stafford Cripps
 - 4. Pethick Lawrence

Question ID : 264330119310
Option 1 ID : 264330467527
Option 2 ID : 264330467530
Option 3 ID : 264330467529
Option 4 ID : 264330467528
Status : Answered
Chosen Option : 1

Q.18 Kalhan, a 12th century author, had described the history of which of the following regions in his book titled 'Rajatarangini'?

- Ans
- 1. Orissa
 - 2. Gujarat
 - 3. Rajasthan
 - 4. Kashmir

Question ID : 264330176885
Option 1 ID : 264330693742
Option 2 ID : 264330693740
Option 3 ID : 264330693739
Option 4 ID : 264330693741
Status : Answered
Chosen Option : 4

Q.19 Lakshmbai National Institute of Physical Education was founded in _____.

- Ans 1. 1965
 2. 1957
 3. 1960
 4. 1956

Question ID : 264330110376
Option 1 ID : 264330433784
Option 2 ID : 264330433783
Option 3 ID : 264330433782
Option 4 ID : 264330433781
Status : Not Answered
Chosen Option : --

Q.20 A wood boring shipworm is:

- Ans 1. umax
 2. teredo
 3. patella
 4. chiton

Question ID : 26433064422
Option 1 ID : 264330252282
Option 2 ID : 264330252280
Option 3 ID : 264330252283
Option 4 ID : 264330252281
Status : Answered
Chosen Option : 2

Q.21 A kangaroo ran 150 m in the first 40 seconds and then, it ran 100 m in the next 10 seconds. Still, its displacement was only 50 m. The average speed of the kangaroo is:

- Ans 1. 1 m/s
 2. 10 m/s
 3. 3.75 m/s
 4. 5 m/s

Question ID : 264330177009
Option 1 ID : 264330694231
Option 2 ID : 264330694233
Option 3 ID : 264330694234
Option 4 ID : 264330694232
Status : Not Answered
Chosen Option : --

Q.22 Chirag Chandrashekhar Shetty is related to _____.

- Ans 1. Cricket
 2. Badminton
 3. Tennis
 4. Chess

Question ID : 264330132523
Option 1 ID : 264330519187
Option 2 ID : 264330519189
Option 3 ID : 264330519190
Option 4 ID : 264330519188
Status : Answered
Chosen Option : 2

Q.23 Palghat Raghu was a famous _____ player.

- Ans 1. sarangi
 2. mridangam
 3. flute
 4. tabla

Question ID : 264330111956
Option 1 ID : 264330439909
Option 2 ID : 264330439911
Option 3 ID : 264330439910
Option 4 ID : 264330439912
Status : Answered
Chosen Option : 3

Q.24 According the Census 2011 of India, which state of India has the second highest literacy rate?

- Ans 1. Meghalaya
 2. Tamil Nadu
 3. Karnataka
 4. Mizoram

Question ID : 264330138076
Option 1 ID : 264330540914
Option 2 ID : 264330540911
Option 3 ID : 264330540913
Option 4 ID : 264330540912
Status : Answered
Chosen Option : 2

Q.25 How many members of Rajya Sabha are nominated by the President?

- Ans 1. 25
 2. 12
 3. 19
 4. 23

Question ID : 26433086849
Option 1 ID : 264330341039
Option 2 ID : 264330341037
Option 3 ID : 264330341038
Option 4 ID : 264330341040
Status : Answered
Chosen Option : 2

Q.26 The Election Commission of India became a three-member body in 1989, again it was made into a single member body in the year _____ .

- Ans 1. 1990
 2. 1993
 3. 1992
 4. 1991

Question ID : 264330137418
Option 1 ID : 264330538299
Option 2 ID : 264330538302
Option 3 ID : 264330538301
Option 4 ID : 264330538300
Status : Answered
Chosen Option : 3

Q.27 In cricket, a full-pitched ball aimed at the batsman's toes or on the crease line is called

- Ans 1. Yorker
 2. Zooter
 3. waft
 4. googly

Question ID : 264330113761
Option 1 ID : 264330447132
Option 2 ID : 264330447131
Option 3 ID : 264330447129
Option 4 ID : 264330447130
Status : Not Answered
Chosen Option : --

Q.28 Which of the following animals had the most prestigious place in society during the later Vedic period?

- Ans 1. Horse
 2. Elephant
 3. Bull
 4. Cow

Question ID : 264330120236
Option 1 ID : 264330471201
Option 2 ID : 264330471200
Option 3 ID : 264330471199
Option 4 ID : 264330471202
Status : Answered
Chosen Option : 4

Q.29 Which instrument is used to measure blood pressure of the body?

- Ans 1. Sphygmomanometer
 2. Thermometer
 3. Stethoscope
 4. Heart Rate Monitor

Question ID : 264330176143
Option 1 ID : 264330690868
Option 2 ID : 264330690870
Option 3 ID : 264330690869
Option 4 ID : 264330690867
Status : Answered
Chosen Option : 1

Q.30 Who among the following was the founder of the slave dynasty who was the army commander of Muhammad Ghori earlier?

- Ans 1. Qutbuddin Aibak
 2. Iltutmish
 3. Nasiruddin Mahmud Shah
 4. Muizuddin Bahram

Question ID : 264330183120
Option 1 ID : 264330718215
Option 2 ID : 264330718214
Option 3 ID : 264330718212
Option 4 ID : 264330718213
Status : Answered
Chosen Option : 1

Q.31 The strong, gusty, hot, dry winds blowing during the day over the north and northwestern India are called:

- Ans
- 1. Loo
 - 2. Foehn
 - 3. Khamsin
 - 4. Sirocco

Question ID : 264330177096
Option 1 ID : 264330694581
Option 2 ID : 264330694579
Option 3 ID : 264330694582
Option 4 ID : 264330694580
Status : Answered
Chosen Option : 1

Q.32 Which of the following states was NOT amongst the top three states with highest total percentage of literacy rate, in the 2011 census?

- Ans
- 1. Kerala
 - 2. Goa
 - 3. Tripura
 - 4. Mizoram

Question ID : 264330120338
Option 1 ID : 264330471604
Option 2 ID : 264330471606
Option 3 ID : 264330471605
Option 4 ID : 264330471603
Status : Answered
Chosen Option : 2

Q.33 As of July 2023, the Vivek Express Train has longest route in India running between _____ and Kanyakumari.

- Ans
- 1. Silchar
 - 2. Guwahati
 - 3. Dispur
 - 4. Dibrugarh

Question ID : 264330180587
Option 1 ID : 264330708318
Option 2 ID : 264330708317
Option 3 ID : 264330708316
Option 4 ID : 264330708315
Status : Answered
Chosen Option : 2

Q.34 Sangeet Natak Akademi award winner, Tapan Kumar Pattanayak is a _____ dancer.

- Ans
- 1. Odissi
 - 2. Chhau
 - 3. Mohiniattam
 - 4. Manipuri

Question ID : 264330111965
Option 1 ID : 264330439946
Option 2 ID : 264330439947
Option 3 ID : 264330439948
Option 4 ID : 264330439945
Status : Answered
Chosen Option : 1

Q.35 Which of the following constitutions inspired for the inclusion of Fundamental Duties in Indian Constitution?

- Ans
- 1. Canadian
 - 2. Irish
 - 3. USSR
 - 4. USA

Question ID : 264330173483
Option 1 ID : 264330680413
Option 2 ID : 264330680414
Option 3 ID : 264330680412
Option 4 ID : 264330680411
Status : Answered
Chosen Option : 3

Q.36 Family planning was introduced in the _____ five-year plan.

- Ans
- 1. third
 - 2. second
 - 3. sixth
 - 4. first

Question ID : 264330118244
Option 1 ID : 264330464792
Option 2 ID : 264330464791
Option 3 ID : 264330464794
Option 4 ID : 264330464793
Status : Answered
Chosen Option : 1

Q.37 Which of the following rights fall under Article 21?

- Ans
- 1. Protection of language, culture of minorities
 - 2. Prohibition of discrimination on caste
 - 3. Protection of life and personal liberty
 - 4. Freedom to manage religious affairs

Question ID : 264330118535
Option 1 ID : 264330465541
Option 2 ID : 264330465544
Option 3 ID : 264330465542
Option 4 ID : 264330465543
Status : Answered
Chosen Option : 3

Q.38 In which year did the members of the Indian Constituent Assembly first meet to draft a constitution for the country?

Ans 1. 1946

2. 1948

3. 1947

4. 1949

Question ID : 264330133041

Option 1 ID : 264330521218

Option 2 ID : 264330521216

Option 3 ID : 264330521217

Option 4 ID : 264330521215

Status : Answered

Chosen Option : 1

Q.39 For which of the following folk music is Lalon Fakir famous?

Ans 1. Baul

2. Pandavani

3. Alha

4. Wanawan

Question ID : 264330111425

Option 1 ID : 264330437785

Option 2 ID : 264330437787

Option 3 ID : 264330437788

Option 4 ID : 264330437786

Status : Not Answered

Chosen Option : --

Q.40 Which of the following food is NOT iron rich?

Ans 1. Spinach

2. Red meat

3. Lemon

4. Peas

Question ID : 264330111907

Option 1 ID : 264330439713

Option 2 ID : 264330439714

Option 3 ID : 264330439716

Option 4 ID : 264330439715

Status : Answered

Chosen Option : 3

Q.41 In which state is Mukhyamantri Krishi Ashirwad Yojana launched?

Ans 1. Jharkhand

2. Odisha

3. Bihar

4. Kerala

Question ID : 264330108912

Option 1 ID : 264330427925

Option 2 ID : 264330427926

Option 3 ID : 264330427927

Option 4 ID : 264330427928

Status : Answered

Chosen Option : 4

Q.42 In the context of introducing the green revolution to Eastern India, a scheme called BGREI was launched. When was this scheme launched?

- Ans
- 1. 2005-06
 - 2. 2009-10
 - 3. 2010-11
 - 4. 2008-09

Question ID : 264330109400
Option 1 ID : 264330429877
Option 2 ID : 264330429879
Option 3 ID : 264330429880
Option 4 ID : 264330429878
Status : Answered
Chosen Option : 1

Q.43 What percentage of the total catchment area of the Krishna basin flows through Karnataka?

- Ans
- 1. 20%
 - 2. 62%
 - 3. 31%
 - 4. 44%

Question ID : 264330113529
Option 1 ID : 264330446201
Option 2 ID : 264330446202
Option 3 ID : 264330446203
Option 4 ID : 264330446204
Status : Answered
Chosen Option : 4

Q.44 The Members of Parliament Local Area Development (MPLAD) scheme is implemented by which Union Ministry?

- Ans
- 1. Ministry of Statistics and Programme Implementation
 - 2. Ministry of Parliament Affairs
 - 3. Ministry of Social Justice and empowerment
 - 4. Ministry of Home Affairs

Question ID : 264330110185
Option 1 ID : 264330433019
Option 2 ID : 264330433017
Option 3 ID : 264330433020
Option 4 ID : 264330433018
Status : Answered
Chosen Option : 2

Q.45 Who among the following recipients of Kalidas Samman is associated with Classical Dance?

- Ans
- 1. Jagdish Swaminathan
 - 2. Sonal Mansingh
 - 3. Manna Dey
 - 4. Vilayat Khan

Question ID : 264330111199
Option 1 ID : 264330436882
Option 2 ID : 264330436884
Option 3 ID : 264330436883
Option 4 ID : 264330436881
Status : Answered
Chosen Option : 2

Q.46 The archaeological site of Inamgaon is situated at the bank of river Ghod which is a tributary of _____.

- Ans
- 1. Bhima
 - 2. Mahanadi
 - 3. Periyar
 - 4. Ganga

Question ID : 264330120416
Option 1 ID : 264330471915
Option 2 ID : 264330471916
Option 3 ID : 264330471917
Option 4 ID : 264330471918
Status : Answered
Chosen Option : 1

Q.47 The Poona Sarvajanik Sabha, which was one of the strongest political organisations of 19th century India in Maharashtra, was launched in the year:

- Ans
- 1. 1865
 - 2. 1870
 - 3. 1872
 - 4. 1868

Question ID : 264330171703
Option 1 ID : 264330673415
Option 2 ID : 264330673417
Option 3 ID : 264330673418
Option 4 ID : 264330673416
Status : Not Answered
Chosen Option : --

Q.48 Which of the following can be considered a DEMERIT of the parliamentary form of government?

- Ans
- 1. Wide representation
 - 2. Unstable government
 - 3. Prevents despotism
 - 4. Responsible government

Question ID : 264330177769
Option 1 ID : 264330697183
Option 2 ID : 264330697184
Option 3 ID : 264330697186
Option 4 ID : 264330697185
Status : Answered
Chosen Option : 2

Q.49 Which of the following awards in the field of dance, art and music is given by the Government of Madhya Pradesh?

- Ans
- 1. Sanatan Sangeet Sankriti Samman
 - 2. Kalidas Samman
 - 3. Sangeet Natak Akademi Award
 - 4. Tagore Ratna

Question ID : 264330111198
Option 1 ID : 264330436877
Option 2 ID : 264330436879
Option 3 ID : 264330436878
Option 4 ID : 264330436880
Status : Not Answered
Chosen Option : --

Q.50 The Dehing Patkai festival is named after which of the following?

- Ans
- 1. River-Mountain
 - 2. Butterfly-Flower
 - 3. Forest-Animal
 - 4. Bird-Tree

Question ID : 264330110456
Option 1 ID : 264330434102
Option 2 ID : 264330434104
Option 3 ID : 264330434101
Option 4 ID : 264330434103
Status : Answered
Chosen Option : 1

Section : Reasoning

Q.1 Select the set in which the numbers are related in the same way as are the numbers of the given sets.

(NOTE: Operations should be performed on the whole numbers, without breaking down the numbers into its constituent digits. E.g., 13 – Operations on 13 such as adding/ deleting/ multiplying etc. to 13 can be performed. Breaking down 13 into 1 and 3 and then performing mathematical operations on 1 and 3 is not allowed.)
(291, 138, 353)
(178, 154, 256)

Ans 1. (410, 104, 428)

2. (331, 197, 452)

3. (125, 136, 191)

4. (206, 148, 280)

Question ID : 264330178750

Option 1 ID : 264330701030

Option 2 ID : 264330701027

Option 3 ID : 264330701029

Option 4 ID : 264330701028

Status : Not Answered

Chosen Option : --

Q.2 In a code language, if BOWLER is coded as 25-12-4-15-22-9 and BATSMAN is coded as 25-26-7-8-14-26-13, then how will UMPIRE be coded?

Ans 1. 7-15-12-19-10-23

2. 5-13-10-17-8-21

3. 6-15-11-19-9-23

4. 6-14-11-18-9-22

Question ID : 26433089485

Option 1 ID : 264330351442

Option 2 ID : 264330351443

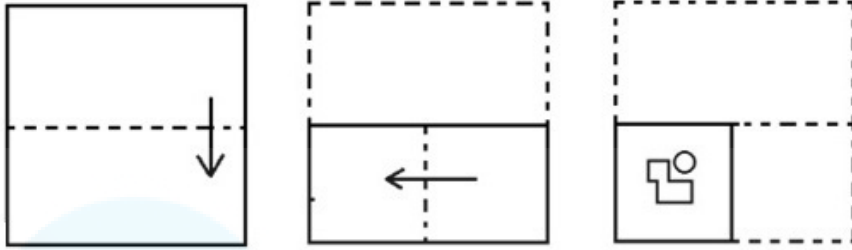
Option 3 ID : 264330351444

Option 4 ID : 264330351441

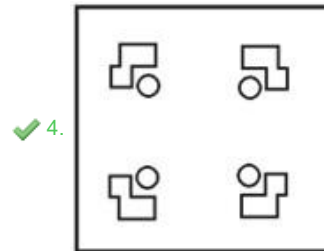
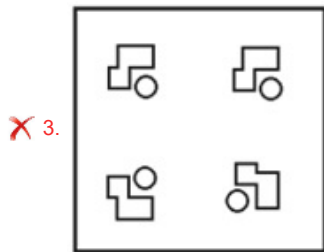
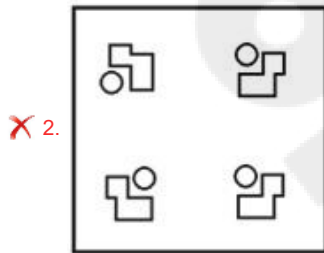
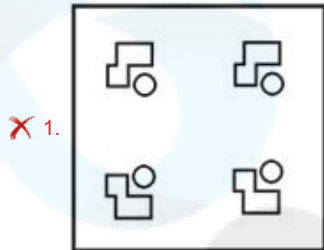
Status : Answered

Chosen Option : 4

Q.3 The sequence of folding a piece of paper and the manner in which the folded paper has been cut is shown below. Choose a figure which would most closely resemble the unfolded form of the paper.



Ans



Question ID : 264330112312

Option 1 ID : 264330441334

Option 2 ID : 264330441333

Option 3 ID : 264330441336

Option 4 ID : 264330441335

Status : Answered

Chosen Option : 4

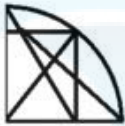
Q.4 Select a figure from amongst the four given options which, when placed in the blank space of figure (X), would complete the pattern.



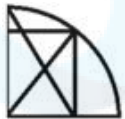
x

Ans

✗ 1.



✓ 2.



✗ 3.



✗ 4.



Question ID : 264330102211

Option 1 ID : 264330401309

Option 2 ID : 264330401311

Option 3 ID : 264330401312

Option 4 ID : 264330401310

Status : Answered

Chosen Option : 2

Q.5 Read the given statements and conclusions carefully. Assuming that the information given in the statements is true, even if it appears to be at variance with commonly known facts, decide which of the given conclusions logically follow(s) from the statements.

Statements:

All keys are locks.

All locks are handles.

Conclusions:

I. Some locks are keys.

II. All keys are handles.

Ans ✗ 1. Only conclusion II follows

✓ 2. Both conclusions I and II follow

✗ 3. Only conclusion I follows

✗ 4. Neither conclusion I nor II follows

Question ID : 26433069507

Option 1 ID : 264330272541

Option 2 ID : 264330272542

Option 3 ID : 264330272540

Option 4 ID : 264330272543

Status : Answered

Chosen Option : 2

Q.6 Select the option that is related to the third word in the same way as the second word is related to the first word. (The words must be considered as meaningful English words and must NOT be related to each other based on the number of letters/number of consonants/vowels in the word)
 Rocks : Mountain :: Grass : ?

- Ans 1. Garden
 2. Sweets
 3. Pen
 4. Shop

Question ID : 26433069142
 Option 1 ID : 264330271080
 Option 2 ID : 264330271082
 Option 3 ID : 264330271081
 Option 4 ID : 264330271083
 Status : Answered
 Chosen Option : 1

Q.7 Select the figure that will come next in the following figure series.

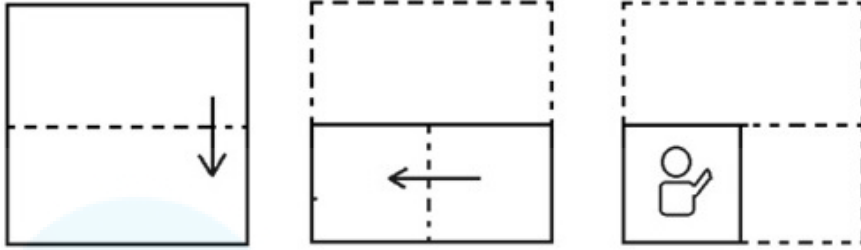


Ans

- 1.
- 2.
- 3.
- 4.

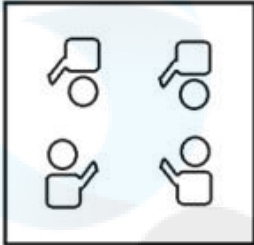
Question ID : 264330112732
 Option 1 ID : 264330443014
 Option 2 ID : 264330443013
 Option 3 ID : 264330443015
 Option 4 ID : 264330443016
 Status : Answered
 Chosen Option : 3

Q.8 The sequence of folding a piece of paper and the manner in which the folded paper has been cut is shown below. Choose a figure which would most closely resemble the unfolded form of the paper.




Ans

✗ 1.



✓ 2.



✗ 3.



✗ 4.



Question ID : 264330112319

Option 1 ID : 264330441362

Option 2 ID : 264330441364

Option 3 ID : 264330441361

Option 4 ID : 264330441363

Status : Answered

Chosen Option : 2

Q.9 Select the correct mirror image of the given figure when the mirror is placed at PQ as shown below.

R B U K E A



- Ans
- 1. R B U K E A
 - 2. A K E U B R
 - 3. R B U K E A
 - 4. A K E U B R

Question ID : 26433080770
Option 1 ID : 264330317014
Option 2 ID : 264330317015
Option 3 ID : 264330317013
Option 4 ID : 264330317016
Status : Answered
Chosen Option : 1

Q.10 Six people, A, B, C, D, E and F, are sitting in a straight row facing north. Only two people sit to the left of D. Only two people sit between D and E. F sits to the immediate right of C. A sits to the immediate left of B. B is not a neighbour of D. Who sits at the extreme left end of the row?

- Ans
- 1. A
 - 2. F
 - 3. C
 - 4. B

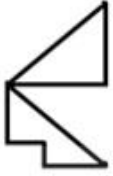
Question ID : 26433089501
Option 1 ID : 264330351505
Option 2 ID : 264330351507
Option 3 ID : 264330351508
Option 4 ID : 264330351506
Status : Answered
Chosen Option : 3

Q.11 Which of the following terms will replace the question mark (?) in the given series?
PDRY, QFQW, RHPU, ?, TLNQ

- Ans
- 1. JOSS
 - 2. SOJS
 - 3. SJOS
 - 4. JSOS

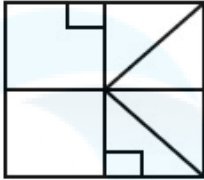
Question ID : 264330102168
Option 1 ID : 264330401139
Option 2 ID : 264330401138
Option 3 ID : 264330401137
Option 4 ID : 264330401140
Status : Answered
Chosen Option : 3

Q.12 The given figure is followed by four option figures. Select the option figure in which this figure is embedded (i.e., contains this figure in the same form; rotation is NOT allowed).

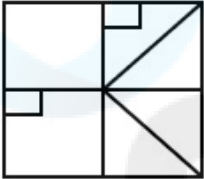


Ans

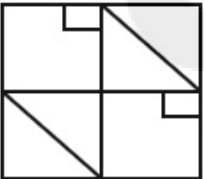
✓ 1.



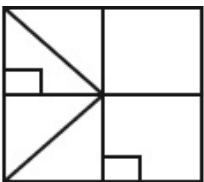
✗ 2.



✗ 3.



✗ 4.



Question ID : 264330121618

Option 1 ID : 264330476644

Option 2 ID : 264330476645

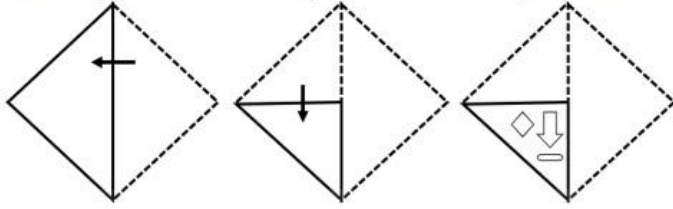
Option 3 ID : 264330476643

Option 4 ID : 264330476646

Status : Answered

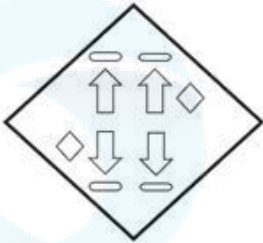
Chosen Option : 1

Q.13 A paper is folded and cut as shown below. How will it appear when unfolded?

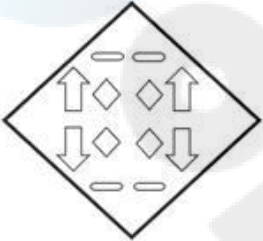


Ans

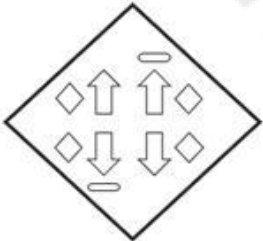
X 1.



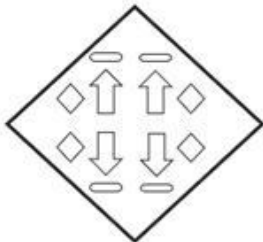
X 2.



X 3.



✓ 4.



Question ID : 26433076507

Option 1 ID : 264330300092

Option 2 ID : 264330300093

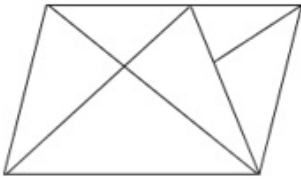
Option 3 ID : 264330300095

Option 4 ID : 264330300094

Status : Answered

Chosen Option : 4

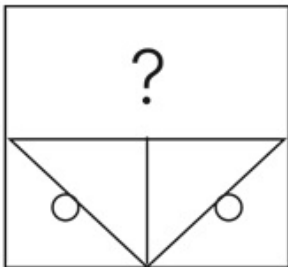
Q.14 How many triangles are there in the given figure?



- Ans 1. 12
 2. 9
 3. 8
 4. 10

Question ID : 26433080452
Option 1 ID : 264330315756
Option 2 ID : 264330315757
Option 3 ID : 264330315759
Option 4 ID : 264330315758
Status : Not Answered
Chosen Option : --

Q.15 Select the figure from the given options that will replace the question mark (?) in the figure given below to complete the pattern so that the final image is symmetrical.

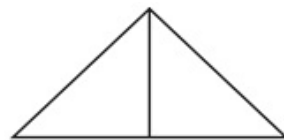


Ans

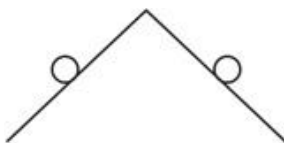
1.



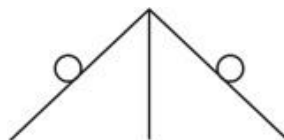
2.



3.



4.



Question ID : 264330114734
Option 1 ID : 264330451024
Option 2 ID : 264330451021
Option 3 ID : 264330451023
Option 4 ID : 264330451022
Status : Answered
Chosen Option : 4

Q.16 Select the option that is related to the fourth term in the same way as the first term is related to the second term and the fifth term is related to the sixth term.

21 : 35 :: ? : 31 :: 23 : 37

- Ans
- 1. 19
 - 2. 18
 - 3. 20
 - 4. 17

Question ID : 26433052094
Option 1 ID : 264330203680
Option 2 ID : 264330203679
Option 3 ID : 264330203681
Option 4 ID : 264330203678
Status : Answered
Chosen Option : 4

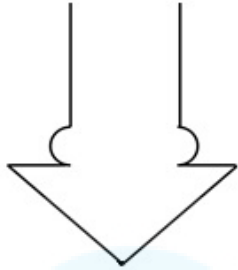
Q.17 Which two signs should be interchanged to make the following equation correct?

$$84 \div 6 + 9 - 12 \times 3 = 41$$

- Ans
- 1. - and ×
 - 2. + and ×
 - 3. + and ×
 - 4. - and +

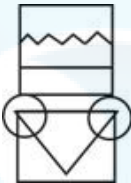
Question ID : 264330101080
Option 1 ID : 264330396867
Option 2 ID : 264330396865
Option 3 ID : 264330396868
Option 4 ID : 264330396866
Status : Answered
Chosen Option : 4

Q.18 Select the option in which the given figure is embedded (rotation is NOT allowed).

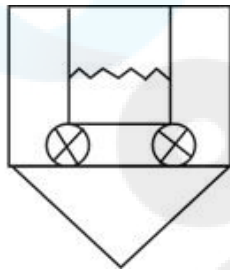


Ans


✗ 1.



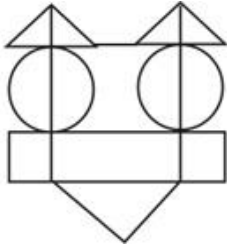
✓ 2.



✗ 3.



✗ 4.



Question ID : 264330119181

Option 1 ID : 264330467014

Option 2 ID : 264330467011

Option 3 ID : 264330467013

Option 4 ID : 264330467012

Status : Answered

Chosen Option : 2

Q.19 Select the number from the given options that can replace the question mark (?) in the following series.

9.9, 9, 8.2, 7.5, 6.9, ?

Ans ✗ 1. 6.1

✗ 2. 6.2

✓ 3. 6.4

✗ 4. 6.5

Question ID : 264330106383

Option 1 ID : 264330417835

Option 2 ID : 264330417836

Option 3 ID : 264330417833

Option 4 ID : 264330417834

Status : Answered

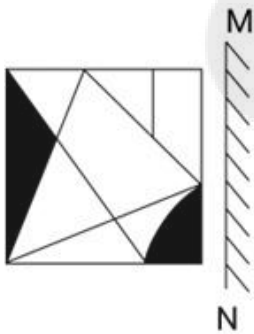
Chosen Option : 3

Q.20 If @ denotes \div , # denotes \times , \$ denotes $+$ and % denotes $-$, then what will be the value of the following equation?
 $9 \# 2 @ 2 \$ 9 \% 9 = ?$

- Ans
- 1. 36
 - 2. 27
 - 3. 9
 - 4. 18

Question ID : 26433085651
 Option 1 ID : 264330336306
 Option 2 ID : 264330336307
 Option 3 ID : 264330336308
 Option 4 ID : 264330336305
 Status : Answered
 Chosen Option : 3

Q.21 Select the correct mirror image of the given combination when the mirror is placed at 'MN' as shown below.

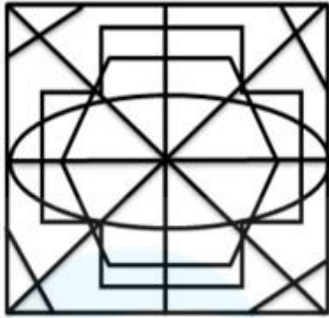


Ans

- 1.
- 2.
- 3.
- 4.

Question ID : 264330130770
 Option 1 ID : 264330512194
 Option 2 ID : 264330512192
 Option 3 ID : 264330512193
 Option 4 ID : 264330512191
 Status : Answered
 Chosen Option : 2

Q.22 Select the option figure that is embedded in the given figure. (Rotation is not allowed)

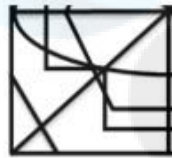


Ans

✗ 1.



✓ 2.



✗ 3.



✗ 4.



Question ID : 264330114406

Option 1 ID : 264330449710

Option 2 ID : 264330449709

Option 3 ID : 264330449711

Option 4 ID : 264330449712

Status : Answered

Chosen Option : 2

Q.23 Select the option figure that will replace the question mark (?) in the figure given below to complete the pattern.



Ans

✗ 1.



✓ 2.



✗ 3.



✗ 4.



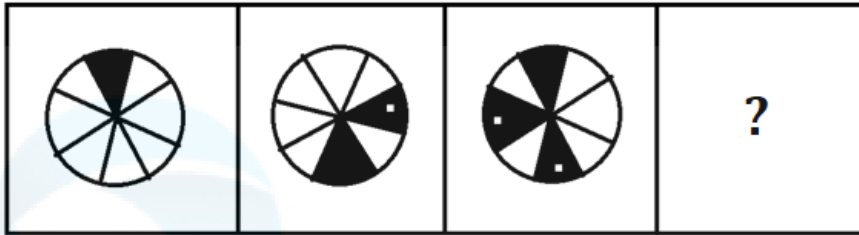
Question ID : 26433085566

Option 1 ID : 264330335967

Option 2 ID : 264330335966

Option 3 ID : 264330335965
Option 4 ID : 264330335968
Status : Answered
Chosen Option : 2

Q.24 Select the figure that will come next in the following figure series.



Ans

- 1.
- 2.
- 3.
- 4.

Question ID : 264330129654
Option 1 ID : 264330507983
Option 2 ID : 264330507984
Option 3 ID : 264330507982
Option 4 ID : 264330507985
Status : Answered
Chosen Option : 2

Q.25 Which figure should replace the question mark (?) in the following series to continue the pattern?

☆ 3	△ ☆	D △	S D	?
△	D	S	A	
S D	A S	7 A	□ 7	

Ans

✗ 1.

A	S
7	
D	□

✗ 2.

A	□
7	
D	S

✗ 3.

7	□
S	
D	A

✓ 4.

A	S
7	
+	□

Question ID : 264330129619
 Option 1 ID : 264330507842
 Option 2 ID : 264330507845
 Option 3 ID : 264330507843
 Option 4 ID : 264330507844
 Status : Answered
 Chosen Option : 4

Section : Numerical Ability

Q.1 The LCM of two numbers is 1728 and their HCF is 4. If one of the numbers is 64, then the other number is:

- Ans
- ✗ 1. 54
 - ✗ 2. 216
 - ✓ 3. 108
 - ✗ 4. 144

Question ID : 264330104226
 Option 1 ID : 264330409207
 Option 2 ID : 264330409206
 Option 3 ID : 264330409205
 Option 4 ID : 264330409208
 Status : Answered
 Chosen Option : 3

Q.2 एक व्यापारी अपने माल को विक्रय मूल्य पर 12.5% की हानि पर बेचता है। उसका हानि प्रतिशत ज्ञात करें।

Ans

1. $11\frac{1}{3}\%$

2. $10\frac{1}{9}\%$

3. $10\frac{1}{3}\%$

4. $11\frac{1}{9}\%$

Question ID : 264330111462

Option 1 ID : 264330437936

Option 2 ID : 264330437934

Option 3 ID : 264330437933

Option 4 ID : 264330437935

Status : Answered

Chosen Option : 4

Q.3 If A's income is 70% more than B's income, then what percentage less does B earn than A?

Ans

1. $35\frac{1}{7}\%$

2. $41\frac{3}{17}\%$

3. $43\frac{1}{17}\%$

4. $39\frac{3}{17}\%$

Question ID : 264330104490

Option 1 ID : 264330410261

Option 2 ID : 264330410263

Option 3 ID : 264330410264

Option 4 ID : 264330410262

Status : Answered

Chosen Option : 2

Q.4 A sum, when invested at $12\frac{1}{2}\%$ simple interest per annum, amounts to ₹8,250 after 2 years. The simple interest is:

Ans

1. ₹1,910

2. ₹1,700

3. ₹1,650

4. ₹1,820

Question ID : 264330118426

Option 1 ID : 264330465108

Option 2 ID : 264330465106

Option 3 ID : 264330465105

Option 4 ID : 264330465107

Status : Answered

Chosen Option : 3

Q.5 What is the number of wax balls, each of radius 2 cm, that can be moulded out of a sphere of radius 6 cm? (Use $\pi = \frac{22}{7}$)

- Ans
- 1. 26
 - 2. 27
 - 3. 24
 - 4. 25

Question ID : 264330109539
Option 1 ID : 264330430435
Option 2 ID : 264330430436
Option 3 ID : 264330430433
Option 4 ID : 264330430434
Status : Answered
Chosen Option : 2

Q.6 If the price of sugar falls by 30%, by how much per cent must a householder increase its consumption, so as NOT to decrease its expenditure on sugar?

- Ans
- 1. $38\frac{6}{7}\%$
 - 2. $42\frac{6}{7}\%$
 - 3. $35\frac{6}{7}\%$
 - 4. $41\frac{6}{7}\%$

Question ID : 264330109241
Option 1 ID : 264330429243
Option 2 ID : 264330429241
Option 3 ID : 264330429244
Option 4 ID : 264330429242
Status : Answered
Chosen Option : 2

Q.7 दो मित्रों राम और श्याम की आयु का अनुपात 5 : 3 है। यदि राम, श्याम से 12 वर्ष बड़ा है, तो श्याम की आयु कितनी है?

- Ans
- 1. 20 वर्ष
 - 2. 22 वर्ष
 - 3. 24 वर्ष
 - 4. 18 वर्ष

Question ID : 264330130094
Option 1 ID : 264330509608
Option 2 ID : 264330509609
Option 3 ID : 264330509610
Option 4 ID : 264330509607
Status : Answered
Chosen Option : 4

Q.8 A thief escaped with a bike, riding at the speed of 70 km/h. A policeman arrived at the spot of the theft an hour after the bike was stolen and started chasing the thief. If the policeman drove his vehicle at the speed of 84 km/h, for how many hours did the policeman have to drive before catching the thief?

Ans

1. $4\frac{1}{2}$

2. 5

3. $5\frac{2}{5}$

4. 6

Question ID : 264330183825

Option 1 ID : 264330720976

Option 2 ID : 264330720977

Option 3 ID : 264330720978

Option 4 ID : 264330720979

Status : Answered

Chosen Option : 2

Q.9 A tent is in the form of a right circular cylinder surmounted by a cone. The diameter of the cylinder is 32 m, and the height of the cylinder is 14 m, while the vertex of the cone is 26 m above the ground. What is the area of the canvas required for this tent? (Where $\pi = 3.14$)

Ans

1. 2047.94 m²

2. 3411.50 m²

3. 3011.42 m²

4. 2411.52 m²

Question ID : 264330118144

Option 1 ID : 264330464392

Option 2 ID : 264330464394

Option 3 ID : 264330464391

Option 4 ID : 264330464393

Status : Not Answered

Chosen Option : --

Q.10 What is the average of 1.7, 2.4, $\frac{3}{5}$, 4.34, 2.6 and 5 (rounded off to 3 decimal places)?

Ans

1. 1.973

2. 1.873

3. 1.937

4. 2.773

Question ID : 264330130295

Option 1 ID : 264330510291

Option 2 ID : 264330510294

Option 3 ID : 264330510293

Option 4 ID : 264330510292

Status : Answered

Chosen Option : 4

Q.11 If 56 workers earn ₹4,080 in 5 days, how much will 48 workers earn in 14 days?

- Ans
- 1. ₹5,698
 - 2. ₹9,792
 - 3. ₹9,122
 - 4. ₹5,968

Question ID : 264330182584
Option 1 ID : 264330716129
Option 2 ID : 264330716128
Option 3 ID : 264330716127
Option 4 ID : 264330716130
Status : Not Answered
Chosen Option : --

Q.12 The number of prime numbers between 301 and 320 is:

- Ans
- 1. 3
 - 2. 5
 - 3. 2
 - 4. 4

Question ID : 264330106074
Option 1 ID : 264330416599
Option 2 ID : 264330416600
Option 3 ID : 264330416597
Option 4 ID : 264330416598
Status : Answered
Chosen Option : 4

Q.13 The marked price of an article is ₹420. It is sold for ₹368. If there is a loss of 8%, then by what percentage above the cost price is the article marked?

- Ans
- 1. 6%
 - 2. 8%
 - 3. 5%
 - 4. 4%

Question ID : 264330129419
Option 1 ID : 264330507043
Option 2 ID : 264330507044
Option 3 ID : 264330507045
Option 4 ID : 264330507042
Status : Answered
Chosen Option : 4

Q.14 What is the sum of all the prime numbers between 57 and 75?

- Ans
- 1. 431
 - 2. 331
 - 3. 221
 - 4. 421

Question ID : 264330105988
Option 1 ID : 264330416256
Option 2 ID : 264330416253
Option 3 ID : 264330416254
Option 4 ID : 264330416255
Status : Answered
Chosen Option : 2

Q.15 A sum of money doubles itself in 10 years at compound interest. In how many years will it become sixteen times?

- Ans
- 1. 35
 - 2. 30
 - 3. 45
 - 4. 40

Question ID : 264330103981
Option 1 ID : 264330408227
Option 2 ID : 264330408228
Option 3 ID : 264330408225
Option 4 ID : 264330408226
Status : Answered
Chosen Option : 4

Section : Computer Proficiency

Q.1 Which of the following features in MS Excel 365 involves setting the system to adjust cells to fit their contents automatically so that all the information is visible?

- Ans
- 1. Fit sheet on one page
 - 2. Cellwidth
 - 3. AutoFit
 - 4. FittoCell

Question ID : 264330180409
Option 1 ID : 264330707603
Option 2 ID : 264330707606
Option 3 ID : 264330707604
Option 4 ID : 264330707605
Status : Answered
Chosen Option : 3

Q.2 What is the main objective of the Inbox within an email mailbox?

- Ans
- 1. To store received emails
 - 2. To schedule email reminders
 - 3. To use as trash can
 - 4. To manage contacts and address book

Question ID : 264330177647
Option 1 ID : 264330696705
Option 2 ID : 264330696706
Option 3 ID : 264330696703
Option 4 ID : 264330696704
Status : Answered
Chosen Option : 1

Q.3 Which action should be taken to copy and paste text within a MS word 365 document?

- Ans
- 1. Use the 'Find and Replace' function to copy and move text to the desired location.
 - 2. Drag and drop the text to the desired location within the document.
 - 3. Delete the text and retype it in the desired location to move it.
 - 4. Select the text, press 'Ctrl+C' to copy, and 'Ctrl+V' to paste it to the desired location.

Question ID : 264330173330
Option 1 ID : 264330679799
Option 2 ID : 264330679801
Option 3 ID : 264330679802
Option 4 ID : 264330679800
Status : Answered
Chosen Option : 4

Q.4 In Microsoft Word 365, what is the purpose of text formatting?

- Ans
- 1. Adding decorative images
 - 2. Modifying the appearance of text
 - 3. Changing the document's font
 - 4. Enhancing page layout

Question ID : 264330180711
Option 1 ID : 264330708812
Option 2 ID : 264330708814
Option 3 ID : 264330708811
Option 4 ID : 264330708813
Status : Answered
Chosen Option : 2

Q.5 In MS Excel 365, the COUNT function is used to _____.

- Ans
- 1. count the numbers in the dataset
 - 2. count the objects in the dataset
 - 3. count the rows in the dataset
 - 4. count the columns in the dataset

Question ID : 264330182053
Option 1 ID : 264330714053
Option 2 ID : 264330714054
Option 3 ID : 264330714051
Option 4 ID : 264330714052
Status : Answered
Chosen Option : 1

Q.6 In MS-Word 365, which option allows you to apply a specific style to a selected portion of text, such as changing the font, font size, color and other formatting attributes, while keeping the rest of the text unaffected?

- Ans
- 1. Character Style
 - 2. Format Painter
 - 3. Quick Style
 - 4. Clear Formatting

Question ID : 264330178090
Option 1 ID : 264330698425
Option 2 ID : 264330698424
Option 3 ID : 264330698423
Option 4 ID : 264330698426
Status : Answered
Chosen Option : 2

Q.7 Which of the following shortcut keys is used in MS Excel 365 to enter data on a new line within a cell, enter a line break?

- Ans**
- 1. Shift + Enter
 - 2. Ctrl + Enter
 - 3. Ctrl + Shift + Enter
 - 4. Alt + Enter

Question ID : 264330180415
Option 1 ID : 264330707628
Option 2 ID : 264330707627
Option 3 ID : 264330707630
Option 4 ID : 264330707629
Status : Answered
Chosen Option : 1

Q.8 In MS word 365 Which statement accurately describes the difference between bullets and numbering in document formatting?

- Ans**
- 1. Bullets are used for unordered lists, while numbering is used for ordered lists.
 - 2. Bullets can be applied to individual paragraphs, while numbering applies only to entire sections.
 - 3. Bullets and numbering both serve the same purpose and can be used interchangeably.
 - 4. Bullets and numbering are not applicable in document formatting and are used for graphic design purposes.

Question ID : 264330173329
Option 1 ID : 264330679795
Option 2 ID : 264330679797
Option 3 ID : 264330679796
Option 4 ID : 264330679798
Status : Answered
Chosen Option : 3

Q.9 What is the role of routers in Internet architecture?

- Ans**
- 1. To provide security for Internet connections
 - 2. To receive and send data on computer networks.
 - 3. To translate IP addresses into domain names
 - 4. To connect devices to the Internet

Question ID : 264330173557
Option 1 ID : 264330680710
Option 2 ID : 264330680709
Option 3 ID : 264330680708
Option 4 ID : 264330680707
Status : Answered
Chosen Option : 4

Q.10 How do we combine regions from multiple authors into a single Microsoft Word 365 document?

Ans ✓ 1. By Combine

✗ 2. By Block Authors

✗ 3. By Restrict Editing

✗ 4. By Compare

Question ID : 264330182088

Option 1 ID : 264330714192

Option 2 ID : 264330714194

Option 3 ID : 264330714193

Option 4 ID : 264330714191

Status : Answered

Chosen Option : 1

Online Goodra