

## Constable Executive Male and Female in Delhi Police Examination 2023

Roll Number	
Candidate Name	
Venue Name	
Exam Date	15/11/2023
Exam Time	9:00 AM - 10:30 AM
Subject	Constable Executive Male and Female in Delhi Police Examination 2023

Section : General Knowledge

**Q.1** How many medals did India win in the International Shooting Sport Federation (ISSF) World Cup-2022, which was held in Cairo, Egypt?

- Ans
- 1. 5
  - 2. 4
  - 3. 7
  - 4. 6

Question ID : 264330113744  
Option 1 ID : 264330447063  
Option 2 ID : 264330447064  
Option 3 ID : 264330447061  
Option 4 ID : 264330447062  
Status : Not Answered  
Chosen Option : --

**Q.2** Narthaki Nataraj, awarded with Padma Shri in 2019 is an Indian \_\_\_\_\_ dancer.

- Ans
- 1. Odissi
  - 2. Bharatanatyam
  - 3. Kathakali
  - 4. Kathak

Question ID : 26433094878  
Option 1 ID : 264330372335  
Option 2 ID : 264330372334  
Option 3 ID : 264330372336  
Option 4 ID : 264330372333  
Status : Not Answered  
Chosen Option : --

**Q.3** The innermost sanctum of a Hindu temple where the idol of the main deity is placed is called:

- Ans
- 1. Garbhagriha
  - 2. Mandapa
  - 3. Pradakshina path
  - 4. Shikhara

Question ID : 26433072939  
Option 1 ID : 264330285948  
Option 2 ID : 264330285950  
Option 3 ID : 264330285949  
Option 4 ID : 264330285951  
Status : Answered  
Chosen Option : 1

**Q.4** In which state of India from the following is the old bamboo drip irrigation technology still used in the agriculture?

- Ans**
- 1. Maharashtra
  - 2. Chhattisgarh
  - 3. Meghalaya
  - 4. Telangana

Question ID : 264330182946  
Option 1 ID : 264330717519  
Option 2 ID : 264330717516  
Option 3 ID : 264330717518  
Option 4 ID : 264330717517  
Status : Not Answered  
Chosen Option : --

**Q.5** Which Constitutional Amendment Act has replaced the collegium system of appointing judges to the Supreme Court and High Courts?

- Ans**
- 1. 99<sup>th</sup> Amendment Act
  - 2. 65<sup>th</sup> Amendment Act
  - 3. 82<sup>nd</sup> Amendment Act
  - 4. 52<sup>nd</sup> Amendment Act

Question ID : 264330166153  
Option 1 ID : 264330651682  
Option 2 ID : 264330651680  
Option 3 ID : 264330651681  
Option 4 ID : 264330651679  
Status : Answered  
Chosen Option : 1

**Q.6** Who led the English Forces in the Battle of Buxar?

- Ans**
- 1. Hector Munro
  - 2. Sir Hugh Wheeler
  - 3. Henry Lawrence
  - 4. John Nicholson

Question ID : 264330171699  
Option 1 ID : 264330673399  
Option 2 ID : 264330673402  
Option 3 ID : 264330673401  
Option 4 ID : 264330673400  
Status : Answered  
Chosen Option : 1

**Q.7** Under which Article of the Indian Constitution are Fundamental Duties mentioned?

- Ans**
- 1. Article 50B
  - 2. Article 44C
  - 3. Article 51A
  - 4. Article 55D

Question ID : 264330114137  
Option 1 ID : 264330448634  
Option 2 ID : 264330448633  
Option 3 ID : 264330448635  
Option 4 ID : 264330448636  
Status : Answered  
Chosen Option : 3

Q.8 Which of the following Indian players has written the autobiography titled 'Ace Against Odds'?

- Ans
- 1. Saina Nehwal
  - 2. Maria Sharapova
  - 3. Monica Seles
  - 4. Sania Mirza

Question ID : 26433055355  
Option 1 ID : 264330216404  
Option 2 ID : 264330216405  
Option 3 ID : 264330216407  
Option 4 ID : 264330216406  
Status : Answered  
Chosen Option : 4

Q.9 The Ahaia Winter Festival is primarily organised by the North-Eastern state of \_\_\_\_\_ to promote tourism.

- Ans
- 1. Meghalaya
  - 2. Tripura
  - 3. Arunachal Pradesh
  - 4. Sikkim

Question ID : 264330182996  
Option 1 ID : 264330717716  
Option 2 ID : 264330717718  
Option 3 ID : 264330717717  
Option 4 ID : 264330717719  
Status : Not Answered  
Chosen Option : --

Q.10 Which of the following countries hosts the first para Asiad?

- Ans
- 1. South Korea
  - 2. China
  - 3. Japan
  - 4. India

Question ID : 264330132536  
Option 1 ID : 264330519242  
Option 2 ID : 264330519240  
Option 3 ID : 264330519241  
Option 4 ID : 264330519239  
Status : Answered  
Chosen Option : 2

Q.11 Who among the following Padma Bhushan awardee dancers was called to perform for the coronation festivities of Queen Elizabeth II?

- Ans
- 1. Birju Maharaj
  - 2. Kumari Kamala
  - 3. Yamini Krishnamurthy
  - 4. Alarmel Velli

Question ID : 264330112878  
Option 1 ID : 264330443597  
Option 2 ID : 264330443600  
Option 3 ID : 264330443598  
Option 4 ID : 264330443599  
Status : Not Answered  
Chosen Option : --

**Q.12 Freedom of Conscience provided in Article 25 of the Constitution of India is strengthened by which of the following two articles?**

- Ans**  1. Article 27 and 28  
 2. Article 27 and 29  
 3. Article 26 and 28  
 4. Article 24 and 28

Question ID : 264330110580  
Option 1 ID : 264330434600  
Option 2 ID : 264330434598  
Option 3 ID : 264330434599  
Option 4 ID : 264330434597  
Status : Not Answered  
Chosen Option : --

**Q.13 The Article 350 (B) of the Indian Constitution deals with the .**

- Ans**  1. finance commission  
 2. election commission  
 3. special officer for linguistic minorities  
 4. UPSC

Question ID : 26433089965  
Option 1 ID : 264330353340  
Option 2 ID : 264330353338  
Option 3 ID : 264330353339  
Option 4 ID : 264330353337  
Status : Answered  
Chosen Option : 3

**Q.14 Who wrote the novel 'Train to Pakistan'?**

- Ans**  1. Vikram Seth  
 2. Mulk Raj Anand  
 3. Khushwant Singh  
 4. Bisham Sahni

Question ID : 26433064225  
Option 1 ID : 264330251495  
Option 2 ID : 264330251492  
Option 3 ID : 264330251493  
Option 4 ID : 264330251494  
Status : Answered  
Chosen Option : 3

**Q.15 Which of the following union territories recorded the highest sex ratio at birth in India in 2020 as per annual report on vital statistics based on Civil Registration System Report?**

- Ans**  1. Jammu and Kashmir  
 2. Ladakh  
 3. Lakshadweep  
 4. Chandigarh

Question ID : 264330177911  
Option 1 ID : 264330697734  
Option 2 ID : 264330697733  
Option 3 ID : 264330697731  
Option 4 ID : 264330697732  
Status : Not Answered  
Chosen Option : --

Q.16 The original Constitution contained 395 Articles divided into \_\_\_\_\_ parts.

- Ans  1. 22  
 2. 19  
 3. 21  
 4. 24

Question ID : 264330134565  
Option 1 ID : 264330527215  
Option 2 ID : 264330527216  
Option 3 ID : 264330527217  
Option 4 ID : 264330527218  
Status : Answered  
Chosen Option : 1

Q.17 Norman Borlaug, known as the Father of Green Revolution for the world, belongs to which country?

- Ans  1. US  
 2. New Zealand  
 3. Australia  
 4. Germany

Question ID : 26433054811  
Option 1 ID : 264330214231  
Option 2 ID : 264330214229  
Option 3 ID : 264330214228  
Option 4 ID : 264330214230  
Status : Answered  
Chosen Option : 1

Q.18 In which country was the Theosophical Society founded?

- Ans  1. England  
 2. America  
 3. France  
 4. Japan

Question ID : 264330114050  
Option 1 ID : 264330448286  
Option 2 ID : 264330448288  
Option 3 ID : 264330448285  
Option 4 ID : 264330448287  
Status : Answered  
Chosen Option : 1

Q.19 What are the most common type of earthquakes?

- Ans  1. Volcanic earthquakes  
 2. Seismic earthquakes  
 3. Reservoir earthquakes  
 4. Tectonic earthquakes

Question ID : 264330134900  
Option 1 ID : 264330528535  
Option 2 ID : 264330528538  
Option 3 ID : 264330528536  
Option 4 ID : 264330528537  
Status : Answered  
Chosen Option : 4

**Q.20** Which government scheme's main aim is to 'transform rural poor youth into an economically independent and globally relevant workforce'?

- Ans
- 1. Shyama Prasad Mukherjee Rurban Mission
  - 2. National Career Service
  - 3. Deen Dayal Upadhyaya Grameen Kaushalya Yojana
  - 4. Deendayal Antyodaya Yojana- National Rural Livelihood Mission

Question ID : 264330109413  
Option 1 ID : 264330429931  
Option 2 ID : 264330429932  
Option 3 ID : 264330429930  
Option 4 ID : 264330429929  
Status : Answered  
Chosen Option : 3

**Q.21** Who among the following personalities is an award-winning Mohiniyattam Dancer?

- Ans
- 1. Meenakshi Chitharanjan
  - 2. Vasundhara Doraswamy
  - 3. Neena Prasad
  - 4. Sutapa Talukdar

Question ID : 264330181386  
Option 1 ID : 264330711467  
Option 2 ID : 264330711469  
Option 3 ID : 264330711468  
Option 4 ID : 264330711470  
Status : Not Answered  
Chosen Option : --

**Q.22** The scheme called Bringing Green Revolution to Eastern India is being implemented in how many eastern states?

- Ans
- 1. Four
  - 2. Seven
  - 3. Three
  - 4. Six

Question ID : 264330109401  
Option 1 ID : 264330429882  
Option 2 ID : 264330429884  
Option 3 ID : 264330429881  
Option 4 ID : 264330429883  
Status : Answered  
Chosen Option : 2

**Q.23** According to Census of India, 2011 Which of the following is in the top three states with highest population of age 0-6 years?

- Ans
- 1. Maharashtra
  - 2. Assam
  - 3. Kerala
  - 4. Madhya Pradesh

Question ID : 264330119969  
Option 1 ID : 264330470153  
Option 2 ID : 264330470151  
Option 3 ID : 264330470154  
Option 4 ID : 264330470152  
Status : Not Answered  
Chosen Option : --

Q.24 India announced the NEP in 1991. NEP stands for \_\_\_\_\_ .

- Ans  1. New Economic Policy  
 2. National Export Plan  
 3. National Economic Policy  
 4. New Economic Provision

Question ID : 264330109128  
Option 1 ID : 264330428790  
Option 2 ID : 264330428792  
Option 3 ID : 264330428791  
Option 4 ID : 264330428789  
Status : Answered  
Chosen Option : 3

Q.25 Shambhu Maharaj was conferred the Sangeet Natak Akademi Fellowship for which form of dance?

- Ans  1. Kuchipudi  
 2. Kathak  
 3. Bharatanatyam  
 4. Manipuri

Question ID : 26433074870  
Option 1 ID : 264330293569  
Option 2 ID : 264330293570  
Option 3 ID : 264330293571  
Option 4 ID : 264330293568  
Status : Answered  
Chosen Option : 2

Q.26 Gross national product is the total market value of all final goods and services produced by \_\_\_\_\_.

- Ans  1. nationals and NRIs of a country during a period of five years  
 2. Country's residents over a period of time  
 3. national and foreigners during a period of two years  
 4. nationals of a country during a period of five year

Question ID : 264330120880  
Option 1 ID : 264330473737  
Option 2 ID : 264330473735  
Option 3 ID : 264330473736  
Option 4 ID : 264330473738  
Status : Answered  
Chosen Option : 2

Q.27 At which Olympic Games did the Indian hockey men's team win its last gold medal?

- Ans  1. 2008  
 2. 1980  
 3. 2012  
 4. 1996

Question ID : 264330110374  
Option 1 ID : 264330433775  
Option 2 ID : 264330433773  
Option 3 ID : 264330433776  
Option 4 ID : 264330433774  
Status : Answered  
Chosen Option : 2

**Q.28** Select the most appropriate option with respect to the correctness of the following statements.

- a) India has great potential for the development of tidal energy.
- b) A geothermal energy plant has been commissioned at Manikaran in Himachal Pradesh.

- Ans**
- 1. Both a and b are correct
  - 2. Only a is correct
  - 3. Both a and b are incorrect
  - 4. Only b is correct

Question ID : 264330179017  
Option 1 ID : 264330702073  
Option 2 ID : 264330702071  
Option 3 ID : 264330702074  
Option 4 ID : 264330702072  
Status : Marked For Review  
Chosen Option : 1

**Q.29** Which of the following parts/structures is located at the topmost part of a Stupa?

- Ans**
- 1. Torana
  - 2. Harmika
  - 3. Vedika
  - 4. Medhi

Question ID : 264330165323  
Option 1 ID : 264330648374  
Option 2 ID : 264330648371  
Option 3 ID : 264330648373  
Option 4 ID : 264330648372  
Status : Answered  
Chosen Option : 1

**Q.30** Sandeep Das is famous for playing which of the following percussion instruments?

- Ans**
- 1. Pakhawaj
  - 2. Tabla
  - 3. Kanjira
  - 4. Ghatam

Question ID : 264330111939  
Option 1 ID : 264330439842  
Option 2 ID : 264330439844  
Option 3 ID : 264330439841  
Option 4 ID : 264330439843  
Status : Not Answered  
Chosen Option : --

Q.31 Arakan and Shan are recognised ethnic groups of \_\_\_\_\_.

- Ans  1. Myanmar  
 2. Sri Lanka  
 3. Nepal  
 4. Bhutan

Question ID : 264330177916  
Option 1 ID : 264330697753  
Option 2 ID : 264330697754  
Option 3 ID : 264330697752  
Option 4 ID : 264330697751  
Status : Not Answered  
Chosen Option : --

Q.32 In which of the following States was the 37<sup>th</sup> National Junior Athletics Championship held?

- Ans  1. Manipur  
 2. Nagaland  
 3. Assam  
 4. Mizoram

Question ID : 264330113757  
Option 1 ID : 264330447116  
Option 2 ID : 264330447115  
Option 3 ID : 264330447113  
Option 4 ID : 264330447114  
Status : Not Answered  
Chosen Option : --

Q.33 Who among the following introduced binominal nomenclature of biological classification?

- Ans  1. Aristotle  
 2. John Ray  
 3. Charles Darwin  
 4. Linnaeus

Question ID : 264330117587  
Option 1 ID : 264330462374  
Option 2 ID : 264330462375  
Option 3 ID : 264330462376  
Option 4 ID : 264330462373  
Status : Not Answered  
Chosen Option : --

Q.34 According to the PRS report of the Ministry of Agriculture, which two crops contributed to 78% of the country's food grain production till 2015-16?

- Ans  1. Maize and soybeans  
 2. Millets and pulses  
 3. Wheat and rice  
 4. Pulses and sugarcane

Question ID : 264330120359  
Option 1 ID : 264330471687  
Option 2 ID : 264330471690  
Option 3 ID : 264330471689  
Option 4 ID : 264330471688  
Status : Answered  
Chosen Option : 3

Q.35 Coal, petroleum, and kerosene are examples of:

- Ans
- 1. coal fuels
  - 2. fossil fuels
  - 3. renewable resources
  - 4. clean energy resources

Question ID : 264330120955  
Option 1 ID : 264330474035  
Option 2 ID : 264330474037  
Option 3 ID : 264330474036  
Option 4 ID : 264330474038  
Status : Answered  
Chosen Option : 2

Q.36 Which Constitutional Amendment Act amended Article 38, enumerated under the Directive Principles of State Policy, and directed 'State to minimise inequalities in income, status, facilities and opportunities'?

- Ans
- 1. 43
  - 2. 42
  - 3. 44
  - 4. 40

Question ID : 264330119697  
Option 1 ID : 264330469065  
Option 2 ID : 264330469064  
Option 3 ID : 264330469066  
Option 4 ID : 264330469063  
Status : Answered  
Chosen Option : 2

Q.37 Why did Mother Teresa establish the 'Nirmal Hriday' Hospice?

- Ans
- 1. To provide a place where the terminally ill could die in peace
  - 2. To provide a home for orphan girl-children
  - 3. To provide a refuge for patients of leprosy
  - 4. To provide a home for young widows

Question ID : 264330119011  
Option 1 ID : 264330466702  
Option 2 ID : 264330466700  
Option 3 ID : 264330466699  
Option 4 ID : 264330466701  
Status : Answered  
Chosen Option : 3

Q.38 Which of the following correctly describes chemotherapy?

- Ans
- 1. Use of motivational advice as treatment
  - 2. Use of physical exercise for treatment
  - 3. Use of chemicals for therapeutic purposes
  - 4. Use of treatment for behavioural disorder

Question ID : 264330120017  
Option 1 ID : 264330470325  
Option 2 ID : 264330470324  
Option 3 ID : 264330470323  
Option 4 ID : 264330470326  
Status : Answered  
Chosen Option : 3

Q.39 Who was the first Indian to qualify for the covenanted civil services in India?

- Ans
- 1. Surendra Nath Banerjee
  - 2. Subhas Chandra Bose
  - 3. Satyendra Nath Tagore
  - 4. Rajagopalachari

Question ID : 264330120303  
Option 1 ID : 264330471465  
Option 2 ID : 264330471464  
Option 3 ID : 264330471463  
Option 4 ID : 264330471466  
Status : Marked For Review  
Chosen Option : 3

Q.40 What is the sanctioned judge strength of the Supreme Court excluding Chief Justice of India as per the Supreme Court (Number of Judges) Amendment Act, 2019?

- Ans
- 1. Ten
  - 2. Thirty-Three
  - 3. Twenty-One
  - 4. Twenty-Eight

Question ID : 264330183153  
Option 1 ID : 264330718344  
Option 2 ID : 264330718347  
Option 3 ID : 264330718345  
Option 4 ID : 264330718346  
Status : Answered  
Chosen Option : 2

Q.41 'Shaka' is the Indian term used for the people called Scythians, who originally belonged to \_\_\_\_\_.

- Ans
- 1. central Asia
  - 2. south-western Asia
  - 3. south-eastern Asia
  - 4. eastern Asia

Question ID : 264330118961  
Option 1 ID : 264330466499  
Option 2 ID : 264330466502  
Option 3 ID : 264330466501  
Option 4 ID : 264330466500  
Status : Not Answered  
Chosen Option : --

Q.42 Who was the leader of the southern military campaign of Alauddin Khalji?

- Ans
- 1. Aadham Khan
  - 2. Mahmud Ganva
  - 3. Malik Kafur
  - 4. Malik Sarvar

Question ID : 264330114034  
Option 1 ID : 264330448223  
Option 2 ID : 264330448221  
Option 3 ID : 264330448224  
Option 4 ID : 264330448222  
Status : Answered  
Chosen Option : 3

Q.43 मुगल अधिकारी अमल-गुजार मुख्य रूप से \_\_\_\_\_ का कार्य करते थे।

- Ans
- 1. शाही उद्यान की बागवानी
  - 2. सैनिकों की भर्ती
  - 3. भू-राजस्व एकत्रित करने
  - 4. शाही परिवार को सुरक्षा प्रदान करने

Question ID : 264330119487  
Option 1 ID : 264330468232  
Option 2 ID : 264330468231  
Option 3 ID : 264330468234  
Option 4 ID : 264330468233  
Status : Not Answered  
Chosen Option : --

Q.44 साकेवा एक धार्मिक त्योहार है जो \_\_\_\_\_ के किरात खंबू राई समुदाय द्वारा मनाया जाता है।

- Ans
- 1. मध्य प्रदेश
  - 2. सिक्किम
  - 3. झारखंड
  - 4. पंजाब

Question ID : 264330106218  
Option 1 ID : 264330417173  
Option 2 ID : 264330417175  
Option 3 ID : 264330417174  
Option 4 ID : 264330417176  
Status : Not Answered  
Chosen Option : --

Q.45 Who among the following is known as the tabla maestro?

- Ans
- 1. Ustad Bismillah Khan
  - 2. Ghulam Ali
  - 3. Ustad Amjad Ali Khan
  - 4. Ustad Zakir Hussain

Question ID : 264330116425  
Option 1 ID : 264330457787  
Option 2 ID : 264330457788  
Option 3 ID : 264330457786  
Option 4 ID : 264330457785  
Status : Answered  
Chosen Option : 4

Q.46 A solution contains 50 g of sugar in 450 g of water. Calculate the concentration in terms of mass by mass percentage of the solution.

- Ans
- 1. 0.1%
  - 2. 10%
  - 3. 1%
  - 4. 0.01%

Question ID : 264330173643  
Option 1 ID : 264330681053  
Option 2 ID : 264330681051  
Option 3 ID : 264330681052  
Option 4 ID : 264330681054  
Status : Answered  
Chosen Option : 2

**Q.47** Which special symbol is commonly used by geologists to describe the orientation of rock beds, faults, fractures, cuestas, igneous dikes and sills?

- Ans
- 1. Scale Indicator
  - 2. Average directional index
  - 3. Strike and dip
  - 4. Compass rose

Question ID : 264330131020  
Option 1 ID : 264330513191  
Option 2 ID : 264330513192  
Option 3 ID : 264330513193  
Option 4 ID : 264330513194  
Status : Answered  
Chosen Option : 3

**Q.48** Which of the following dynasties arose as a result of Alexander's invasion?

- Ans
- 1. Maurya
  - 2. Pandya
  - 3. Chalukya
  - 4. Pallava

Question ID : 264330120134  
Option 1 ID : 264330470791  
Option 2 ID : 264330470792  
Option 3 ID : 264330470793  
Option 4 ID : 264330470794  
Status : Answered  
Chosen Option : 1

**Q.49** The phenomenon of liquidity trap is based upon which of the following aspects of demand for money?

- Ans
- 1. Precautionary
  - 2. Velocity of circulation
  - 3. Transaction
  - 4. Speculative

Question ID : 264330111567  
Option 1 ID : 264330438354  
Option 2 ID : 264330438356  
Option 3 ID : 264330438353  
Option 4 ID : 264330438355  
Status : Not Answered  
Chosen Option : --

**Q.50** The process of removing government-imposed limits or impediments is known as:

- Ans
- 1. liberalisation
  - 2. financial investments
  - 3. privatisation
  - 4. globalisation

Question ID : 264330110191  
Option 1 ID : 264330433044  
Option 2 ID : 264330433041  
Option 3 ID : 264330433042  
Option 4 ID : 264330433043  
Status : Answered  
Chosen Option : 1

Section : Reasoning

**Q.1** Study the given pattern carefully and select the number that can replace the question mark (?) in it.  
First row - 56, 16, 60  
Second row - 64, 18, 68  
Third row - 72, 20, ?  
(NOTE : Operations should be performed on the whole numbers, without breaking down the numbers into its constituent digits. Eg. 13 – Operations on 13 such as adding /subtracting/multiplying etc. to 13 can be performed. Breaking down 13 into 1 and 3 and then performing mathematical operations on 1 and 3 is not allowed)

- Ans
- 1. 75
  - 2. 74
  - 3. 76
  - 4. 78

Question ID : 26433087330  
Option 1 ID : 264330342957  
Option 2 ID : 264330342958  
Option 3 ID : 264330342960  
Option 4 ID : 264330342959  
Status : Answered  
Chosen Option : 3

**Q.2** Select the option that represents the letters that, when sequentially placed from left to right in the blanks below, will complete the letter series.  
D \_ A \_ W \_ S \_ E W \_ S A E \_ D \_ A E \_

- Ans
- 1. SEDADWSW
  - 2. SEDADWES
  - 3. SEDADSSW
  - 4. SEADESW

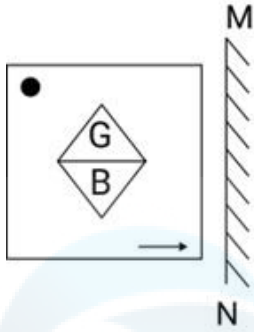
Question ID : 26433092540  
Option 1 ID : 264330363450  
Option 2 ID : 264330363452  
Option 3 ID : 264330363451  
Option 4 ID : 264330363449  
Status : Answered  
Chosen Option : 1

**Q.3** Six students are sitting around a circular table facing the centre. Udit is an immediate neighbour of both Uday and Unnati. Umesh is sitting second to the right of Unnati. Utpal is sitting third to the left of Uday. Utsav is an immediate neighbour of both Umesh and Uday. Who is an immediate neighbour of both Umesh and Unnati?

- Ans
- 1. Utpal
  - 2. Uday
  - 3. Utsav
  - 4. Udit

Question ID : 264330110717  
Option 1 ID : 264330435146  
Option 2 ID : 264330435148  
Option 3 ID : 264330435145  
Option 4 ID : 264330435147  
Status : Answered  
Chosen Option : 1

Q.4 Select the correct mirror image of the given combination when the mirror is placed at 'MN' as shown below.



Ans

- ✗ 1.
- ✗ 2.
- ✗ 3.
- ✓ 4.

Question ID : 264330130769  
 Option 1 ID : 264330512188  
 Option 2 ID : 264330512189  
 Option 3 ID : 264330512187  
 Option 4 ID : 264330512190  
 Status : Answered  
 Chosen Option : 4

**Q.5** Read the given statements and conclusions carefully. Assuming that the information given in the statements is true, even if it appears to be at variance with commonly known facts, decide which of the given conclusions logically follow(s) from the statements.

**Statements:**

Some stars are planets.

All stars are comets.

**Conclusions:**

I. Some comets are planets.

II. Some planets are stars.

- Ans**
- 1. Only conclusion I follows
  - 2. Only conclusion II follows
  - 3. Both conclusions I and II follow
  - 4. Neither conclusion I nor II follows

Question ID : 26433068294

Option 1 ID : 264330267688

Option 2 ID : 264330267689

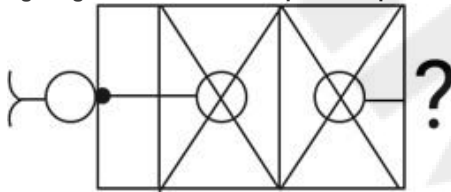
Option 3 ID : 264330267690

Option 4 ID : 264330267691

Status : Answered

Chosen Option : 3

**Q.6** Select the figure from the given options that will replace the question mark (?) in the figure given below and complete the pattern.



**Ans**

- 1.
- 2.
- 3.
- 4.

Question ID : 264330111713

Option 1 ID : 264330438937

Option 2 ID : 264330438940

Option 3 ID : 264330438938

Option 4 ID : 264330438939

Status : Answered

Chosen Option : 1

Q.7 Which figure should replace the question mark (?) in the following series to continue the pattern?

L O S T	8 S O L	L 8 T S	O T 8 L	?
8      □ □	T O      □ □	S		

Ans

✗ 1. 8 O T S  
L      □

✗ 2. L O T 8  
S      □

✓ 3. L O S T  
8      □

✗ 4. L O T S  
8      □

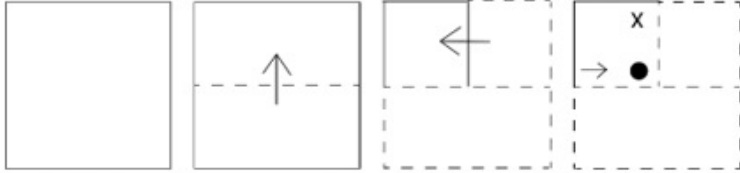
Question ID : 264330129615  
 Option 1 ID : 264330507828  
 Option 2 ID : 264330507826  
 Option 3 ID : 264330507827  
 Option 4 ID : 264330507829  
 Status : Answered  
 Chosen Option : 3

Q.8 14 is related to 27 following a certain logic. Following the same logic, 17 is related to 33. To which of the following is 24 related following the same logic?

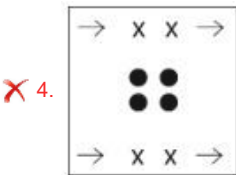
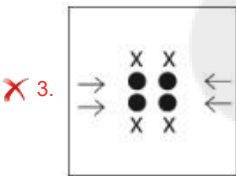
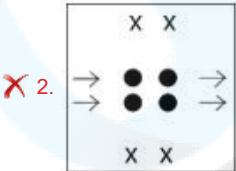
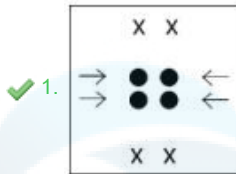
- Ans
- ✗ 1. 53
  - ✓ 2. 47
  - ✗ 3. 56
  - ✗ 4. 50

Question ID : 264330178748  
 Option 1 ID : 264330701021  
 Option 2 ID : 264330701020  
 Option 3 ID : 264330701019  
 Option 4 ID : 264330701022  
 Status : Answered  
 Chosen Option : 2

Q.9 A paper is folded and cut as shown below. How will it appear when unfolded?



Ans

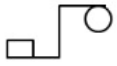


Question ID : 264330112988  
 Option 1 ID : 264330444038  
 Option 2 ID : 264330444040  
 Option 3 ID : 264330444039  
 Option 4 ID : 264330444037

Status : Answered

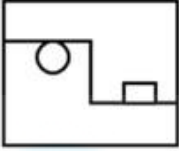
Chosen Option : 1

Q.10 Select the option in which the given figure is embedded (rotation is NOT allowed).

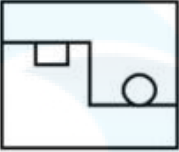


Ans

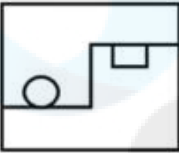
✗ 1.



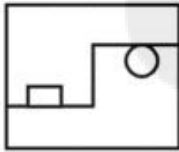
✗ 2.



✗ 3.



✓ 4.



Question ID : 264330101162

Option 1 ID : 264330397193

Option 2 ID : 264330397195

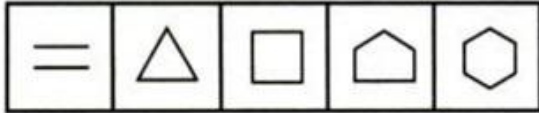
Option 3 ID : 264330397196

Option 4 ID : 264330397194





Status : Answered

Chosen Option : 4

Q.11 Select the figure that will come next in the following figure series.

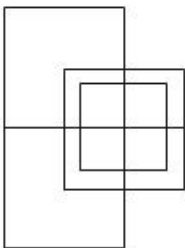


Ans

- ✓ 1. 
- ✗ 2. 
- ✗ 3. 
- ✗ 4. 

Question ID : 26433091695  
Option 1 ID : 264330360148  
Option 2 ID : 264330360145  
Option 3 ID : 264330360146  
Option 4 ID : 264330360147  
Status : Answered  
Chosen Option : 1

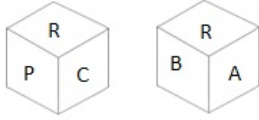
Q.12 How many squares are there in the following figure?



- Ans
- ✗ 1. 10
  - ✓ 2. 12
  - ✗ 3. 14
  - ✗ 4. 15

Question ID : 26433076733  
Option 1 ID : 264330300996  
Option 2 ID : 264330300997  
Option 3 ID : 264330300998  
Option 4 ID : 264330300999  
Status : Answered  
Chosen Option : 2

**Q.13** Six letters A, B, C, P, Q and R are written on different faces of a dice. Two positions of this dice are shown in the figure. Find the letter on the face opposite to C.



- Ans
- 1. B
  - 2. P
  - 3. A
  - 4. Q

Question ID : 264330109204

Option 1 ID : 264330429096

Option 2 ID : 264330429093

Option 3 ID : 264330429094

Option 4 ID : 264330429095

Status : Answered

Chosen Option : 3

Q.14 Which of the following option figures will complete the pattern in the figure given below?



Ans

✗ 1.



✓ 2.



✗ 3.



✗ 4.



Question ID : 26433080626

Option 1 ID : 264330316438

Option 2 ID : 264330316437

Option 3 ID : 264330316440

Option 4 ID : 264330316439

Status : Answered

Chosen Option : 2

Q.15 Select the correct mirror image of the given figure when the mirror is placed at PQ as shown below.

!@@\*\*~~)()() |  
P  
Q

Ans

✗ 1. )()()~~\*\*@@!

✗ 2. ()()(\*\*@@~~!

✗ 3. ()()(\*\*~~@@!

✓ 4. ()()(~~\*\*@@!

Question ID : 26433082020

Option 1 ID : 264330321914

Option 2 ID : 264330321916

Option 3 ID : 264330321915

Option 4 ID : 264330321913

Status : Answered

Chosen Option : 4

Q.16 Which two signs should be interchanged to make the given equation correct?  
 $35 + 76 - 98 \div 3 \times 6 = 62$

Ans ✓ 1. ÷ and ×

✗ 2. = and ×

✗ 3. + and ×

✗ 4. - and +

Question ID : 26433090220

Option 1 ID : 264330354359

Option 2 ID : 264330354360

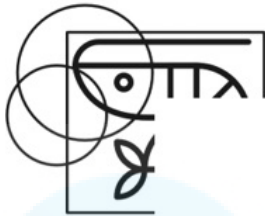
Option 3 ID : 264330354358

Option 4 ID : 264330354357

Status : Answered

Chosen Option : 1

Q.17 Which of the following option figures will complete the pattern in the figure given below?



Ans

X 1.



✓ 2.



X 3.



X 4.



Question ID : 26433080630

Option 1 ID : 264330316454

Option 2 ID : 264330316453

Option 3 ID : 264330316455

Option 4 ID : 264330316456

Status : Answered

Chosen Option : 2

Q.18 Which figure should replace the question mark (?) if the following series were to be continued?

X	S	S	D	D	S	S	↑	↑	S	?
2		X		2		D		2		
T	A	A	2	X	A	A	2	D	A	

Ans

✓ 1. 

S	N
↑	
A	2

✗ 2. 

S	2
↑	
A	D

✗ 3. 

S	D
↑	
A	2

✗ 4. 

S	N
A	
2	D

Question ID : 264330103897

Option 1 ID : 264330407889

Option 2 ID : 264330407890

Option 3 ID : 264330407891

Option 4 ID : 264330407892

Status : Answered

Chosen Option : 1

Q.19 Select the number from among the given options that can replace the question mark (?) in the following series.

3, 21, 57, 129, 273, ?

Ans ✗ 1. 234

✓ 2. 561

✗ 3. 456

✗ 4. 345

Question ID : 264330109768

Option 1 ID : 264330431349

Option 2 ID : 264330431352

Option 3 ID : 264330431351

Option 4 ID : 264330431350

Status : Answered

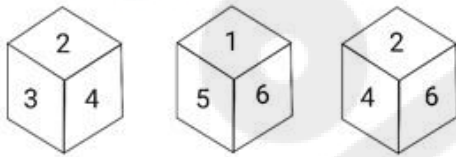
Chosen Option : 2

**Q.20** In a code language, if MUSIC is coded as 13-21-19-9-3 and BAND is coded as 2-1-14-4, then how will HARMONIUM be coded?

- Ans  1. 7-25-16-12-14-13-8-19-12  
 2. 8-1-18-13-15-14-9-21-13  
 3. 7-26-17-12-14-13-8-20-12  
 4. 8-2-19-12-15-14-9-20-12

Question ID : 26433089481  
Option 1 ID : 264330351428  
Option 2 ID : 264330351426  
Option 3 ID : 264330351427  
Option 4 ID : 264330351425  
Status : Answered  
Chosen Option : 2

**Q.21** Three different positions of the same dice are shown. Find the number on the face opposite the face showing '3'.



- Ans  1. 2  
 2. 4  
 3. 5  
 4. 6

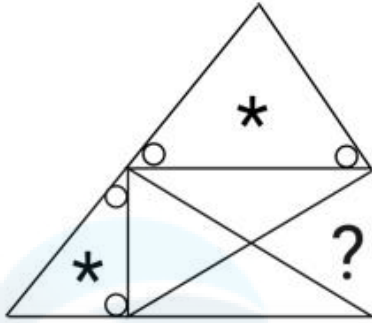
Question ID : 264330116955  
Option 1 ID : 264330459901  
Option 2 ID : 264330459902  
Option 3 ID : 264330459903  
Option 4 ID : 264330459904  
Status : Answered  
Chosen Option : 4

**Q.22** Select the option that is related to the third word in the same way as the second word is related to the first word. (The words must be considered as meaningful English words and must NOT be related to each other based on the number of letters/number of consonants/vowels in the word)  
Norway: Oslo:: Iran:?

- Ans  1. Baghdad  
 2. Moscow  
 3. Tehran  
 4. Madrid


Question ID : 26433069165  
Option 1 ID : 264330271173  
Option 2 ID : 264330271172  
Option 3 ID : 264330271174  
Option 4 ID : 264330271175  
Status : Answered  
Chosen Option : 3

Q.23 Select the figure from the given options that will replace the question mark (?) in the figure given below to complete the pattern.

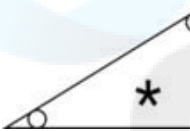


Ans

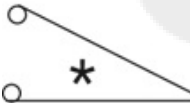
✗ 1.



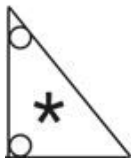
✗ 2.



✗ 3.



✓ 4.



Question ID : 264330116610

Option 1 ID : 264330458525

Option 2 ID : 264330458527

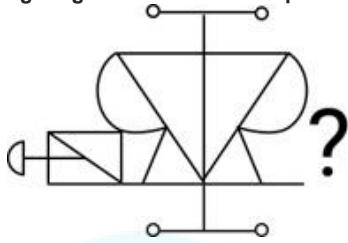
Option 3 ID : 264330458528

Option 4 ID : 264330458526

Status : Answered

Chosen Option : 4

Q.24 Select the figure from the given options that will replace the question mark (?) in the figure given below and complete the pattern.



Ans

- ✓ 1.
- ✗ 2.
- ✗ 3.
- ✗ 4.

Question ID : 264330111716

Option 1 ID : 264330438951

Option 2 ID : 264330438950

Option 3 ID : 264330438949

Option 4 ID : 264330438952

Status : Answered

Chosen Option : 1

Q.25 If A denotes '+', B denotes '×', C denotes '-', and D denotes '÷', then what will come in place of '?' in the following equation?  
 $24 D (1 A 7) C 2 A 7 B 12 B (5 C 4) = ?$

- ✗ 1. 96
- ✓ 2. 85
- ✗ 3. 88
- ✗ 4. 83

Question ID : 26433081676

Option 1 ID : 264330320538

Option 2 ID : 264330320540

Option 3 ID : 264330320537

Option 4 ID : 264330320539

Status : Answered

Chosen Option : 2

Section : Numerical Ability

Q.1 A certain sum is lent on simple interest at 4% p.a. for 3 years, 8% p.a. for the next 4 years, and 12% p.a. beyond 7 years. If for a period of 11 years, the simple interest obtained is ₹27,600, the sum is (in ₹):

- ✗ 1. 28,000
- ✗ 2. 25,000
- ✓ 3. 30,000
- ✗ 4. 32,000

Question ID : 264330119417

Option 1 ID : 264330467955

Option 2 ID : 264330467958

Option 3 ID : 264330467957

Option 4 ID : 264330467956

Status : Answered

Chosen Option : 3

Q.2 A sum of ₹66,550 is taken on loan. This is to be paid back in two equal instalments. If the rate of interest is 20% compounded annually, find the value of each instalment.

- Ans
- 1. ₹42,560
  - 2. ₹44,550
  - 3. ₹40,550
  - 4. ₹43,560

Question ID : 264330104313  
Option 1 ID : 264330409554  
Option 2 ID : 264330409556  
Option 3 ID : 264330409553  
Option 4 ID : 264330409555  
Status : Answered  
Chosen Option : 4

Q.3 The price of an item is to be increased by 25% in two years. This year, the price increased to ₹140 from ₹120. What is the percentage increase in the next year?

- Ans
- 1. 4.71%
  - 2. 4.17%
  - 3. 7.14%
  - 4. 7.41%

Question ID : 264330126101  
Option 1 ID : 264330494076  
Option 2 ID : 264330494077  
Option 3 ID : 264330494079  
Option 4 ID : 264330494078  
Status : Answered  
Chosen Option : 3

Q.4 What is the diameter of a sphere that has a surface area of  $2500\pi$  cm<sup>2</sup>?

- Ans
- 1. 40 cm
  - 2. 35 cm
  - 3. 50 cm
  - 4. 25 cm

Question ID : 264330111491  
Option 1 ID : 264330438051  
Option 2 ID : 264330438050  
Option 3 ID : 264330438052  
Option 4 ID : 264330438049  
Status : Answered  
Chosen Option : 3

Q.5 The price of an article has been reduced by 20%. In order to restore the original price, the new price must be increased by:

- Ans
- 1. 25%
  - 2. 20%
  - 3. 22%
  - 4. 28%

Question ID : 264330104160  
Option 1 ID : 264330408943  
Option 2 ID : 264330408941  
Option 3 ID : 264330408942  
Option 4 ID : 264330408944  
Status : Answered  
Chosen Option : 1

Q.6 Which of the following is the smallest ratio?

- Ans  1. 15 : 20  
 2. 7 : 21  
 3. 21 : 25  
 4. 17 : 25

Question ID : 264330119337  
Option 1 ID : 264330467636  
Option 2 ID : 264330467635  
Option 3 ID : 264330467637  
Option 4 ID : 264330467638  
Status : Answered  
Chosen Option : 2

Q.7 If Malay buys guavas at ₹300 per kg and sells them at ₹25 per 100 gm., then he will have (rounded off to 2 decimal places):

- Ans  1. a loss of 16.67%  
 2. a profit of 25.25%  
 3. a loss of 25.25%  
 4. a profit of 16.67%

Question ID : 264330112427  
Option 1 ID : 264330441794  
Option 2 ID : 264330441795  
Option 3 ID : 264330441796  
Option 4 ID : 264330441793  
Status : Answered  
Chosen Option : 1

Q.8 If 25 people, working 15 hours a day, can complete 5 units of work in 8 days, then how many days will be required by 12 people to complete 10 units of work, working 20 hours a day?

- Ans  1. 25 days  
 2. 24 days  
 3. 20 days  
 4. 22 days

Question ID : 264330182576  
Option 1 ID : 264330716098  
Option 2 ID : 264330716097  
Option 3 ID : 264330716095  
Option 4 ID : 264330716096  
Status : Answered  
Chosen Option : 1

**Q.9** If a solid sphere of radius 20 cm is moulded into 8 solid spherical balls of equal radius, then the radius of each ball will be: (Where  $\pi = \frac{22}{7}$ )

- Ans**  1. 10 cm  
 2. 12.5 cm  
 3. 11.5 cm  
 4. 11 cm

Question ID : 264330118139  
Option 1 ID : 264330464372  
Option 2 ID : 264330464374  
Option 3 ID : 264330464371  
Option 4 ID : 264330464373  
Status : Answered  
Chosen Option : 1

**Q.10** Meera made a profit of 5% by selling a bag after offering a discount of 10%. If the marked price of bag is ₹1,050, find its cost price.

- Ans**  1. ₹850  
 2. ₹900  
 3. ₹508  
 4. ₹1,000

Question ID : 264330118127  
Option 1 ID : 264330464323  
Option 2 ID : 264330464325  
Option 3 ID : 264330464326  
Option 4 ID : 264330464324  
Status : Answered  
Chosen Option : 2

**Q.11** What is the sum of the square of the prime numbers between 20 and 30?

- Ans**  1. 1500  
 2. 1370  
 3. 1290  
 4. 1276

Question ID : 264330104347  
Option 1 ID : 264330409690  
Option 2 ID : 264330409692  
Option 3 ID : 264330409689  
Option 4 ID : 264330409691  
Status : Answered  
Chosen Option : 2

Q.12 The average of  $1^2, 2^2, 3^2, 4^2, 5^2, 6^2, 7^2, 8^2$  and  $9^2$  is:

Ans

✓ 1.  $31\frac{2}{3}$

✗ 2.  $32\frac{1}{3}$

✗ 3.  $34\frac{2}{3}$

✗ 4.  $33\frac{1}{3}$

Question ID : 264330126169

Option 1 ID : 264330494349

Option 2 ID : 264330494350

Option 3 ID : 264330494351

Option 4 ID : 264330494348

Status : Answered

Chosen Option : 1

Q.13 What will be the least common multiple of four numbers 15, 35, 42 and 72?

Ans

✗ 1. 2550

✗ 2. 2050

✓ 3. 2520

✗ 4. 2025

Question ID : 264330103916

Option 1 ID : 264330407966

Option 2 ID : 264330407968

Option 3 ID : 264330407967

Option 4 ID : 264330407965

Status : Answered

Chosen Option : 3

Q.14 A train approaches a tunnel MN. Inside the tunnel is a dog located at a point that is  $\frac{2}{5}$  of the distance MN measured from the entrance M. When the train whistles, the dog runs. If the dog moves towards the entrance of the tunnel M, the train catches the dog exactly at the entrance M. If the dog moves towards the exit N, the train catches the dog exactly at the exit N. Find the ratio of the speed of the dog to that of the train?

Ans

✗ 1. 5 : 1

✗ 2. 2 : 1

✗ 3. 1 : 2

✓ 4. 1 : 5

Question ID : 264330106349

Option 1 ID : 264330417697

Option 2 ID : 264330417700

Option 3 ID : 264330417699

Option 4 ID : 264330417698

Status : Answered

Chosen Option : 4

Q.15 The highest common factor (HCF) of 256, 136 and 436 is \_\_\_\_\_.

- Ans
- 1. 2
  - 2. 4
  - 3. 8
  - 4. 12

Question ID : 264330112056  
Option 1 ID : 264330440309  
Option 2 ID : 264330440310  
Option 3 ID : 264330440311  
Option 4 ID : 264330440312  
Status : Answered  
Chosen Option : 2

Section : Computer Proficiency

Q.1 Which text alignment option in Microsoft Word 365 aligns text along the left margin?

- Ans
- 1. Center Align
  - 2. Left Align
  - 3. Right Align
  - 4. Justify

Question ID : 264330180729  
Option 1 ID : 264330708885  
Option 2 ID : 264330708883  
Option 3 ID : 264330708884  
Option 4 ID : 264330708886  
Status : Answered  
Chosen Option : 2

Q.2 What action should be taken to add a new row or column in a spreadsheet?

- Ans
- 1. Right-click on an existing row or column and select 'Insert' from the context menu.
  - 2. Use the 'Find and Replace' function to search for a specific cell, and then insert a new row or column using the results.
  - 3. Highlight a range of cells, right-click, and choose 'Delete' from the context menu to create space for the new row or column.
  - 4. Select a row or column, press the 'Ctrl+X' keyboard shortcut to cut it, and then press 'Ctrl+V' to paste it in the desired location.

Question ID : 264330173327  
Option 1 ID : 264330679787  
Option 2 ID : 264330679790  
Option 3 ID : 264330679789  
Option 4 ID : 264330679788  
Status : Answered  
Chosen Option : 1

Q.3 In Microsoft Excel 365, which tool should we use for creating or editing formulas in a worksheet?

- Ans
- 1. Formula bar
  - 2. Watch window
  - 3. Precedents
  - 4. Auditing toolbar

Question ID : 264330182055  
Option 1 ID : 264330714059  
Option 2 ID : 264330714062  
Option 3 ID : 264330714060  
Option 4 ID : 264330714061  
Status : Answered  
Chosen Option : 1

Q.4 In which of the following tabs in MS Word 365 is Bullets and Numbering present?

- Ans
- 1. Page layout
  - 2. Home
  - 3. Edit
  - 4. File

Question ID : 264330180419  
Option 1 ID : 264330707646  
Option 2 ID : 264330707644  
Option 3 ID : 264330707645  
Option 4 ID : 264330707643  
Status : Answered  
Chosen Option : 1

Q.5 What is the purpose of the CC field in an email?

- Ans
- 1. To include additional recipients who should be kept informed
  - 2. To request a read receipt from the recipient
  - 3. To encrypt the email for added security
  - 4. To indicate that the email is of high importance

Question ID : 264330174461  
Option 1 ID : 264330684263  
Option 2 ID : 264330684265  
Option 3 ID : 264330684266  
Option 4 ID : 264330684264  
Status : Answered  
Chosen Option : 1

Q.6 Which of the following shortcut key is used to insert a hyperlink in MS Word 365?

- Ans
- 1. Shift + H
  - 2. Ctrl + K
  - 3. Ctrl + H
  - 4. Shift + K

Question ID : 264330178571  
Option 1 ID : 264330700314  
Option 2 ID : 264330700311  
Option 3 ID : 264330700312  
Option 4 ID : 264330700313  
Status : Answered  
Chosen Option : 2

Q.7 What does the following icon resemble in MS Word 365 ?



- Ans
- 1. Justifying
  - 2. Right alignment
  - 3. Centre of text
  - 4. Left alignment

Question ID : 264330180451  
Option 1 ID : 264330707774  
Option 2 ID : 264330707771  
Option 3 ID : 264330707773  
Option 4 ID : 264330707772  
Status : Answered  
Chosen Option : 2

Q.8 What does the 'Orientation' option in the Page Setup menu in Microsoft Word 365 allow you to change?

- Ans
- 1. Text alignment
  - 2. Page layout (portrait or landscape)
  - 3. Font style
  - 4. Page size

Question ID : 264330180721  
Option 1 ID : 264330708853  
Option 2 ID : 264330708854  
Option 3 ID : 264330708851  
Option 4 ID : 264330708852  
Status : Answered  
Chosen Option : 2

Q.9 Which of the following is a private network that is typically open to external parties, such as business partners, suppliers, and key customers?

- Ans
- 1. Telnet
  - 2. Extranet
  - 3. Intranet
  - 4. Internet

Question ID : 264330178246  
Option 1 ID : 264330699042  
Option 2 ID : 264330699041  
Option 3 ID : 264330699039  
Option 4 ID : 264330699040  
Status : Answered  
Chosen Option : 1

**Q.10** Which of the following is the correct way to sort a range of cells in ascending order in MS Excel 365?

- Ans**
- 1. Select the range of cells and press 'Ctrl + Shift + S'.
  - 2. Click on the 'Review' tab and select 'Sort'.
  - 3. Click on the 'OK' button.
  - 4. In the 'Sort' dialog box, select the 'Ascending' option in the 'Order' section.

Question ID : 264330178564

Option 1 ID : 264330700283

Option 2 ID : 264330700284

Option 3 ID : 264330700286

Option 4 ID : 264330700285

Status : Answered

Chosen Option : 4