

Constable Executive Male and Female in Delhi Police Examination 2023

Roll Number	
Candidate Name	
Venue Name	
Exam Date	15/11/2023
Exam Time	3:00 PM - 4:30 PM
Subject	Constable Executive Male and Female in Delhi Police Examination 2023

Section : General Knowledge

Q.1 सरकार ने नवाचार के लिए सक्षम बुनियादी ढांचा और सुगमकारी माहौल प्रदान करके भारत के अल्पसेवित/असेवित क्षेत्रों में उद्यमिता की भावना को प्रोत्साहित करने के लिए _____ की शुरुआत की है।

- Ans
- 1. उत्पादन सम्बद्ध प्रोत्साहन योजना
 - 2. वन नेशन वन राशन नीति
 - 3. अटल समुदाय नवाचार केंद्र कार्यक्रम
 - 4. डिजिटल लाइब्रेरी मिशन

Question ID : 264330109124
Option 1 ID : 264330428776
Option 2 ID : 264330428775
Option 3 ID : 264330428773
Option 4 ID : 264330428774

Status : Answered

Chosen Option : 3

Q.2 Hydrogen ions cannot exist alone, but they exist after combining with water molecules. Which of the following is the correct way to show hydrogen ions?

- Ans
- 1. HO-
 - 2. H₃O⁺
 - 3. H₂
 - 4. H₂SO₄

Question ID : 264330138723
Option 1 ID : 264330543502
Option 2 ID : 264330543500
Option 3 ID : 264330543501
Option 4 ID : 264330543499

Status : Answered

Chosen Option : 2

Q.3 Which factor contributes to the occurrence of rainfall in the north-western parts of India during winters?

- Ans
- 1. Southwest Monsoon
 - 2. Trade Winds
 - 3. Western Disturbances
 - 4. Northeast Monsoon

Question ID : 264330174341
Option 1 ID : 264330683785
Option 2 ID : 264330683783
Option 3 ID : 264330683784
Option 4 ID : 264330683786

Status : Answered

Chosen Option : 3

Q.4 किस समिति ने सुझाव दिया कि करों का भुगतान करना भी नागरिकों का मौलिक कर्तव्य होना चाहिए?

- Ans 1. भूटा सिंह समिति
 2. स्वर्ण सिंह समिति
 3. चरण सिंह समिति
 4. जे एस वर्मा समिति

Question ID : 264330137413
Option 1 ID : 264330538280
Option 2 ID : 264330538282
Option 3 ID : 264330538281
Option 4 ID : 264330538279
Status : Answered
Chosen Option : 2

Q.5 Which of the following is NOT covered by the appellate jurisdiction of the Supreme Court?

- Ans 1. Civil cases
 2. Criminal cases
 3. Constitutional cases
 4. Conflicts between central and state

Question ID : 264330173527
Option 1 ID : 264330680587
Option 2 ID : 264330680588
Option 3 ID : 264330680589
Option 4 ID : 264330680590
Status : Not Answered
Chosen Option : --

Q.6 Har Ghar Tiranga movement was proposed in which year's Independence Day?

- Ans 1. 2020
 2. 2022
 3. 2021
 4. 2019

Question ID : 264330109616
Option 1 ID : 264330430742
Option 2 ID : 264330430744
Option 3 ID : 264330430743
Option 4 ID : 264330430741
Status : Answered
Chosen Option : 2

Q.7 Which of the following Constitutional Amendment Acts is related to the addition of eleventh fundamental duty in the Indian Constitution?

- Ans 1. 69th Constitutional Amendment Act
 2. 81st Constitutional Amendment Act
 3. 83rd Constitutional Amendment Act
 4. 86th Constitutional Amendment Act

Question ID : 264330180617
Option 1 ID : 264330708435
Option 2 ID : 264330708436
Option 3 ID : 264330708437
Option 4 ID : 264330708438
Status : Answered
Chosen Option : 4

Q.8 The festival of Pushkaralu is celebrated to promote the cultural heritage of which Indian state?

- Ans
- 1. Tamil Nadu
 - 2. Karnataka
 - 3. Kerala
 - 4. Andhra Pradesh

Question ID : 264330132419
Option 1 ID : 264330518771
Option 2 ID : 264330518774
Option 3 ID : 264330518773
Option 4 ID : 264330518772
Status : Answered
Chosen Option : 3

Q.9 The first edition of the Commonwealth Youth Games was held in the year:

- Ans
- 1. 2008
 - 2. 2004
 - 3. 2000
 - 4. 2011

Question ID : 264330118897
Option 1 ID : 264330466245
Option 2 ID : 264330466244
Option 3 ID : 264330466243
Option 4 ID : 264330466246
Status : Not Answered
Chosen Option : --

Q.10 विधान-परिषद के सदस्य के रूप में निर्वाचित होने के लिए किसी व्यक्ति की आयु वर्ष से कम नहीं होनी चाहिए।

- Ans
- 1. 25
 - 2. 35
 - 3. 30
 - 4. 21

Question ID : 264330120197
Option 1 ID : 264330471043
Option 2 ID : 264330471045
Option 3 ID : 264330471044
Option 4 ID : 264330471046
Status : Answered
Chosen Option : 1

Q.11 As we go down under water in a ocean the water pressure:

- Ans
- 1. decreases
 - 2. remains constant and equal to the atmospheric pressure
 - 3. increases
 - 4. remains less than atmospheric pressure

Question ID : 264330169097
Option 1 ID : 264330663193
Option 2 ID : 264330663194
Option 3 ID : 264330663192
Option 4 ID : 264330663191
Status : Answered
Chosen Option : 3

Q.12 1993-94 तक, गरीबी रेखा, _____ के आंकड़ों पर आधारित होती थी।

- Ans
- 1. मिश्रित संदर्भ अवधि (Mixed Reference Period)
 - 2. मिश्रित शोध अवधि (Mixed Research Period)
 - 3. समान संसाधन अवधि (Uniform Resource Period)
 - 4. समान शोध अवधि (Uniform Research Period)

Question ID : 264330183044
Option 1 ID : 264330717909
Option 2 ID : 264330717908
Option 3 ID : 264330717911
Option 4 ID : 264330717910
Status : Answered
Chosen Option : 4

Q.13 The ocean has _____ main temperature layers.

- Ans
- 1. five
 - 2. two
 - 3. four
 - 4. three

Question ID : 264330116382
Option 1 ID : 264330457613
Option 2 ID : 264330457614
Option 3 ID : 264330457616
Option 4 ID : 264330457615
Status : Not Answered
Chosen Option : --

Q.14 Which state does the noted Sindhi Sarangi player Lakha Khan belong to?

- Ans
- 1. Rajasthan
 - 2. Punjab
 - 3. Uttarakhand
 - 4. Haryana

Question ID : 264330110242
Option 1 ID : 264330433245
Option 2 ID : 264330433247
Option 3 ID : 264330433248
Option 4 ID : 264330433246
Status : Answered
Chosen Option : 1

Q.15 The headquarters of West Central Railway Zone of Indian Railway is located in _____.

- Ans
- 1. Jaipur
 - 2. Bhopal
 - 3. Agra
 - 4. Jabalpur

Question ID : 264330181118
Option 1 ID : 264330710417
Option 2 ID : 264330710416
Option 3 ID : 264330710415
Option 4 ID : 264330710418
Status : Answered
Chosen Option : 4

Q.16 मोरमुगाओ बंदरगाह किस राज्य में स्थित है?

- Ans
- 1. तमिलनाडु
 - 2. पश्चिम बंगाल
 - 3. गोवा
 - 4. महाराष्ट्र

Question ID : 264330182958
Option 1 ID : 264330717567
Option 2 ID : 264330717566
Option 3 ID : 264330717564
Option 4 ID : 264330717565
Status : Not Answered
Chosen Option : --

Q.17 दिए गए विकल्पों में से कौन-सा विकल्प, नागर मंदिर वास्तुकला में 'जगती' शब्द का सबसे अच्छा वर्णन करता है?

- Ans
- 1. ऊंचा चबूतरा, जो मुख्य देवी देवताओं का स्थान होता है
 - 2. ऊंचा चबूतरा, जिस पर ध्वज (झंडा) लगाया जाता है
 - 3. ऊंचा चबूतरा, जिस पर कलश होता है
 - 4. ऊंचा चबूतरा, जिस पर मंदिर बना होता है

Question ID : 264330165332
Option 1 ID : 264330648407
Option 2 ID : 264330648410
Option 3 ID : 264330648409
Option 4 ID : 264330648408
Status : Answered
Chosen Option : 4

Q.18 When was Rajiv Gandhi Khel Ratna Award renamed as Major Dhyan Chand Khel Ratna Award?

- Ans
- 1. 2022
 - 2. 2021
 - 3. 2020
 - 4. 2019

Question ID : 264330176746
Option 1 ID : 264330693202
Option 2 ID : 264330693200
Option 3 ID : 264330693199
Option 4 ID : 264330693201
Status : Answered
Chosen Option : 3

Q.19 कम्युनिस्ट जर्नल 'वैनगार्ड (Vanguard)' के संपादक बनने वाले स्वतंत्रता सेनानी का नाम बताइए।

- Ans
- 1. सी. राजगोपालाचारी
 - 2. एम.एन. रॉय
 - 3. के. केलप्पन
 - 4. पी. कृष्णा पिल्लई

Question ID : 264330171707
Option 1 ID : 264330673434
Option 2 ID : 264330673433
Option 3 ID : 264330673432
Option 4 ID : 264330673431
Status : Not Answered
Chosen Option : --

Q.20 The second edition of the Khelo India Winter Games 2021 was held in which of the following states/Union Territories?

- Ans**
- 1. Sikkim
 - 2. Himachal Pradesh
 - 3. Jammu and Kashmir
 - 4. Uttarakhand

Question ID : 264330118444
Option 1 ID : 264330465177
Option 2 ID : 264330465180
Option 3 ID : 264330465179
Option 4 ID : 264330465178
Status : Answered
Chosen Option : 2

Q.21 Vjayanthi Kashi is an exponent of which Indian classical dance form?

- Ans**
- 1. Kuchipudi
 - 2. Bharatanatyam
 - 3. Mohiniattam
 - 4. Odissi

Question ID : 264330141329
Option 1 ID : 264330553652
Option 2 ID : 264330553651
Option 3 ID : 264330553654
Option 4 ID : 264330553653
Status : Answered
Chosen Option : 4

Q.22 Globalisation is a _____ phenomenon.

- Ans**
- 1. multi-dimensional
 - 2. cultural only
 - 3. uni-dimensional only
 - 4. political only

Question ID : 264330117795
Option 1 ID : 264330462998
Option 2 ID : 264330462997
Option 3 ID : 264330462995
Option 4 ID : 264330462996
Status : Answered
Chosen Option : 1

Q.23 Which of the following statements is NOT correct about cell cycle?

- Ans**
- 1. M is a meiosis phase.
 - 2. In G₂, phase cell prepare to divide.
 - 3. The correct sequence of cell cycle is G₁, S, G₂, M.
 - 4. DNA replication takes place in S cycle.

Question ID : 264330111892
Option 1 ID : 264330439655
Option 2 ID : 264330439656
Option 3 ID : 264330439653
Option 4 ID : 264330439654
Status : Not Answered
Chosen Option : --

Q.24 Which of the following cricketers has written an autobiography titled 'Six Machine'?

- Ans 1. Brendon McCullum
 2. Chris Gayle
 3. Jacques Kallis
 4. Adam Gilchrist

Question ID : 26433055354
Option 1 ID : 264330216400
Option 2 ID : 264330216401
Option 3 ID : 264330216403
Option 4 ID : 264330216402
Status : Not Answered
Chosen Option : --

Q.25 Who among the following is a Sangeet Natak Akademi award-winning Bharatanatyam dancer?

- Ans 1. Jayalakshmi Eshwar
 2. Kumkum Dhar
 3. Sunanda Nair
 4. M Sailaja

Question ID : 264330182985
Option 1 ID : 264330717674
Option 2 ID : 264330717675
Option 3 ID : 264330717673
Option 4 ID : 264330717672
Status : Answered
Chosen Option : 1

Q.26 लघु उद्योग को परिभाषित करने के लिए एक मानदंड क्या है?

- Ans 1. एक वर्ष की अवधि के दौरान कारोबार की राशि
 2. इकाई का आकार
 3. किसी विशेष वर्ष के दौरान इकाई की कुल बिक्री
 4. एक इकाई की संपत्ति पर अधिकतम निवेश की अनुमति

Question ID : 26433054614
Option 1 ID : 264330213443
Option 2 ID : 264330213440
Option 3 ID : 264330213441
Option 4 ID : 264330213442
Status : Answered
Chosen Option : 3

Q.27 मक्कू, तुइवई, सोनाई और रुक्नी किस नदी की सहायक नदियाँ हैं?

- Ans 1. बराक
 2. पेन्नार
 3. साबरमती
 4. तापी

Question ID : 264330141743
Option 1 ID : 264330555294
Option 2 ID : 264330555292
Option 3 ID : 264330555293
Option 4 ID : 264330555291
Status : Not Answered
Chosen Option : --

Q.28 When was Tattvabodhini Sabha established?

- Ans
- 1. 1851
 - 2. 1831
 - 3. 1843
 - 4. 1839

Question ID : 264330123742
Option 1 ID : 264330485006
Option 2 ID : 264330485003
Option 3 ID : 264330485004
Option 4 ID : 264330485005
Status : Answered
Chosen Option : 4

Q.29 As per Census 2011, which of the following states/union territories has the highest male literacy rate?

- Ans
- 1. Kerala
 - 2. Mizoram
 - 3. Chandigarh
 - 4. Lakshadweep

Question ID : 264330183021
Option 1 ID : 264330717816
Option 2 ID : 264330717817
Option 3 ID : 264330717819
Option 4 ID : 264330717818
Status : Answered
Chosen Option : 1

Q.30 पुदुक्कोट्टई दक्षिणमूर्ति पिल्लई एक प्रसिद्ध _____ वादक है।

- Ans
- 1. मेज़
 - 2. गिटार
 - 3. बाँसुरी
 - 4. कंजीरा

Question ID : 264330111933
Option 1 ID : 264330439820
Option 2 ID : 264330439817
Option 3 ID : 264330439819
Option 4 ID : 264330439818
Status : Not Answered
Chosen Option : --

Q.31 Which of the following states was selected by the Indian Government to try a new variety of wheat seeds for the first time during the green revolution?

- Ans
- 1. Madhya Pradesh
 - 2. Punjab
 - 3. Uttar Pradesh
 - 4. Bihar

Question ID : 264330116531
Option 1 ID : 264330458212
Option 2 ID : 264330458209
Option 3 ID : 264330458211
Option 4 ID : 264330458210
Status : Answered
Chosen Option : 2

Q.32 1969 में बैंकों के राष्ट्रीयकरण के दौरान निम्नलिखित में से किस बैंक का राष्ट्रीयकरण नहीं किया गया था?

- Ans
- 1. केनरा बैंक
 - 2. एसबीआई
 - 3. यूको बैंक
 - 4. बैंक ऑफ बड़ौदा

Question ID : 264330118182
Option 1 ID : 264330464545
Option 2 ID : 264330464543
Option 3 ID : 264330464544
Option 4 ID : 264330464546
Status : Answered
Chosen Option : 4

Q.33 'Sunny Days: An Autobiography' is written by which of the following Indian cricketers?

- Ans
- 1. Sunil Gavaskar
 - 2. Rahul Dravid
 - 3. Mohinder Amarnath
 - 4. Kapil Dev

Question ID : 26433055353
Option 1 ID : 264330216396
Option 2 ID : 264330216399
Option 3 ID : 264330216397
Option 4 ID : 264330216398
Status : Not Answered
Chosen Option : --

Q.34 Which of the following is NOT an element of the Competition Act 2002?

- Ans
- 1. Prohibition of anti-competitive agreements
 - 2. Regulation of combination
 - 3. Abuse of dominant position
 - 4. Prohibition of trade

Question ID : 264330111621
Option 1 ID : 264330438572
Option 2 ID : 264330438570
Option 3 ID : 264330438569
Option 4 ID : 264330438571
Status : Answered
Chosen Option : 3

Q.35 In which language is the Hathigumpha Inscription engraved?

- Ans
- 1. Sanskrit
 - 2. Hindi
 - 3. Pali
 - 4. Marathi

Question ID : 264330120010
Option 1 ID : 264330470298
Option 2 ID : 264330470295
Option 3 ID : 264330470296
Option 4 ID : 264330470297
Status : Not Answered
Chosen Option : --

Q.36 Who among the following Gupta kings is popularly known as the Napoleon of India?

- Ans 1. Samudragupta
 2. Kumaragupta I
 3. Ghatotkacha
 4. Vishnugupta

Question ID : 264330119472
Option 1 ID : 264330468171
Option 2 ID : 264330468172
Option 3 ID : 264330468173
Option 4 ID : 264330468174
Status : Answered
Chosen Option : 1

Q.37 अनुच्छेद 166 के अनुसार किसी राज्य सरकार की समस्त कार्यपालिका कार्यवाही किसके नाम पर व्यक्त की जाएगी ?

- Ans 1. राज्यपाल
 2. मुख्यमंत्री
 3. राज्य महाधिवक्ता
 4. राष्ट्रपति

Question ID : 26433069889
Option 1 ID : 264330274061
Option 2 ID : 264330274062
Option 3 ID : 264330274063
Option 4 ID : 264330274060
Status : Answered
Chosen Option : 1

Q.38 Who among the following was given the title of 'Queen of Kathak' by Gurudev Rabindranath Tagore?

- Ans 1. Rukmini Devi Arundale
 2. Sanjukta Panigrahi
 3. Shanta Rao
 4. Sitara Devi

Question ID : 26433097125
Option 1 ID : 264330381197
Option 2 ID : 264330381199
Option 3 ID : 264330381200
Option 4 ID : 264330381198
Status : Answered
Chosen Option : 4

Q.39 इल्तुतमिश का कुतुबुद्दीन ऐबक से क्या संबंध था?

- Ans 1. दामाद
 2. भाई
 3. बहनोई
 4. पुत्र

Question ID : 264330120287
Option 1 ID : 264330471400
Option 2 ID : 264330471401
Option 3 ID : 264330471402
Option 4 ID : 264330471399
Status : Answered
Chosen Option : 1

Q.40 बौद्धों द्वारा निर्मित कन्हेरी गुफाएँ निम्नलिखित में से किस राज्य में स्थित हैं?

- Ans 1. गुजरात
 2. महाराष्ट्र
 3. बिहार
 4. मध्य प्रदेश

Question ID : 26433074095
Option 1 ID : 264330290502
Option 2 ID : 264330290503
Option 3 ID : 264330290500
Option 4 ID : 264330290501
Status : Answered
Chosen Option : 3

Q.41 Which of the following fundamental duties was added by the 86th Constitutional Act, 2002?

- Ans 1. To protect and improve the natural environment
 2. To safeguard public property
 3. To uphold and protect the sovereignty, unity and integrity of India
 4. To provide opportunities for education to his/her child between 6 and 14 years

Question ID : 264330110110
Option 1 ID : 264330432718
Option 2 ID : 264330432717
Option 3 ID : 264330432720
Option 4 ID : 264330432719
Status : Answered
Chosen Option : 4

Q.42 In which year did the Indian Government develop 'SMILE' ('Support for Marginalized Individuals for Livelihood and Enterprise')?

- Ans 1. 2019
 2. 2021
 3. 2022
 4. 2018

Question ID : 264330130601
Option 1 ID : 264330511517
Option 2 ID : 264330511516
Option 3 ID : 264330511515
Option 4 ID : 264330511518
Status : Not Answered
Chosen Option : --

Q.43 Qandahar was lost to the _____ during the reign of Shah Jahan.

- Ans 1. Seljuks
 2. Uzbegs
 3. Pahlavis
 4. Safavids

Question ID : 264330106568
Option 1 ID : 264330418575
Option 2 ID : 264330418573
Option 3 ID : 264330418576
Option 4 ID : 264330418574
Status : Not Answered
Chosen Option : --

Q.44 In which of the following kingdoms is the eukaryotic cell NOT found?

- Ans 1. Monera
 2. Animalia
 3. Protista
 4. Fungi

Question ID : 264330117589
Option 1 ID : 264330462383
Option 2 ID : 264330462381
Option 3 ID : 264330462382
Option 4 ID : 264330462384
Status : Answered
Chosen Option : 2

Q.45 1875 में स्थापित निम्नलिखित में से कौन-सा संगठन मूर्ति पूजा का विरोध करता है और वेदों की अचूकता का समर्थन करता है?

- Ans 1. आर्य समाज
 2. परमहंस मंडली
 3. प्रार्थना समाज
 4. रामकृष्ण मिशन

Question ID : 264330130558
Option 1 ID : 264330511346
Option 2 ID : 264330511344
Option 3 ID : 264330511343
Option 4 ID : 264330511345
Status : Answered
Chosen Option : 4

Q.46 The 97th Constitutional Amendment Act of 2011 added a new directive principle of state policy relating to _____.

- Ans 1. interstate relations
 2. quasi-judicial bodies
 3. cooperative societies
 4. rivers and water bodies

Question ID : 264330130455
Option 1 ID : 264330510932
Option 2 ID : 264330510931
Option 3 ID : 264330510933
Option 4 ID : 264330510934
Status : Not Answered
Chosen Option : --

Q.47 Through which of the following Government of India Acts the Montagu-Chelmsford Reforms introduced Dyarchy in the provinces?

- Ans 1. 1858
 2. 1894
 3. 1919
 4. 1935

Question ID : 264330118597
Option 1 ID : 264330465640
Option 2 ID : 264330465641
Option 3 ID : 264330465639
Option 4 ID : 264330465642
Status : Answered
Chosen Option : 3

Q.48 भारत सरकार ने क्षेत्रीय ग्रामीण बैंकों की स्थापना किस वर्ष शुरू की थी?

- Ans 1. 1975 में
 2. 1992 में
 3. 2005 में
 4. 1951 में

Question ID : 264330111726
Option 1 ID : 264330438990
Option 2 ID : 264330438991
Option 3 ID : 264330438992
Option 4 ID : 264330438989
Status : Not Answered
Chosen Option : --

Q.49 निम्नलिखित में से कौन एक प्रसिद्ध 'सत्रीया' नर्तकी है?

- Ans 1. शारोदी सैकिया
 2. अलुना काबुईनी
 3. सोनल मानसिंह
 4. मल्लिका साराभाई

Question ID : 264330106197
Option 1 ID : 264330417089
Option 2 ID : 264330417092
Option 3 ID : 264330417091
Option 4 ID : 264330417090
Status : Answered
Chosen Option : 2

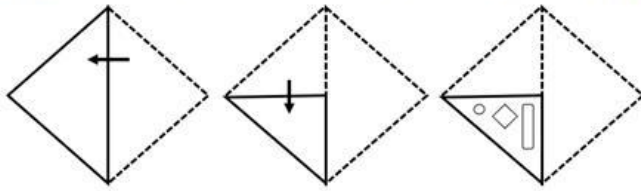
Q.50 निम्नलिखित में से कौन-सा अंतरराष्ट्रीय संगठन शतरंज का शासी निकाय है?

- Ans 1. ICC
 2. IOC
 3. FIDE
 4. FIFA

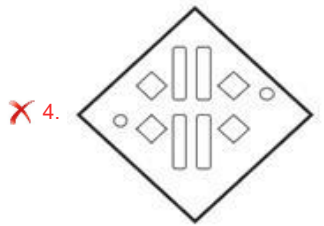
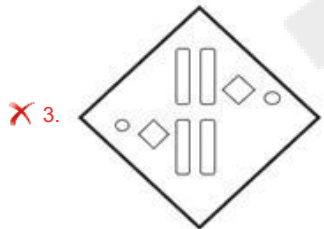
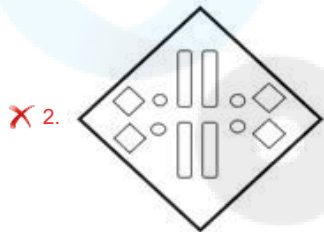
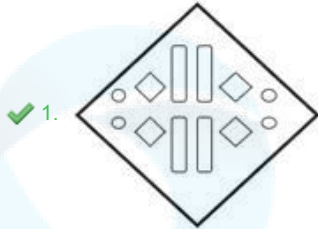
Question ID : 264330134271
Option 1 ID : 264330526082
Option 2 ID : 264330526081
Option 3 ID : 264330526080
Option 4 ID : 264330526079
Status : Answered
Chosen Option : 1

Section : Reasoning

Q.1 A paper is folded and cut as shown below. How will it appear when unfolded?



Ans



Question ID : 26433076502

Option 1 ID : 264330300073

Option 2 ID : 264330300075

Option 3 ID : 264330300074

Option 4 ID : 264330300072

Status : Answered

Chosen Option : 1

Q.2 Which figure should replace the question mark (?) if the series were to be continued?

N	9	2	9	
V 2 9 ☆	N 2	N V 9	☆ 2 V	?
☆	V	☆	N	

Ans

✗ 1.

N
V ☆ 2
9

✗ 2.

V
N ☆ 9
2

✓ 3.

V
2 N 9
☆

✗ 4.

V
9 2 N
☆

Question ID : 264330130802

Option 1 ID : 264330512322

Option 2 ID : 264330512320

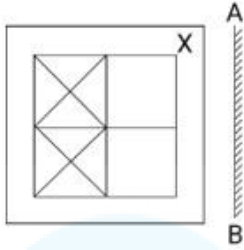
Option 3 ID : 264330512321

Option 4 ID : 264330512319

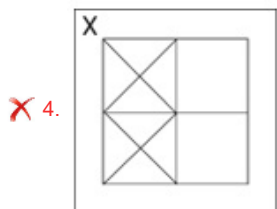
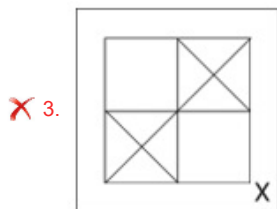
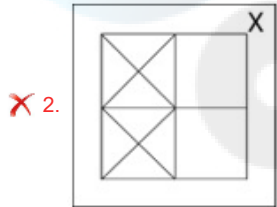
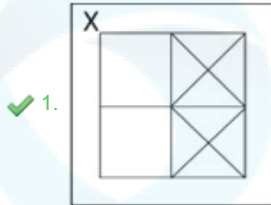
Status : Answered

Chosen Option : 3

Q.3 Select the correct mirror image of the given figure when the mirror is placed at 'AB' as shown.



Ans



Question ID : 264330114261

Option 1 ID : 264330449132

Option 2 ID : 264330449129

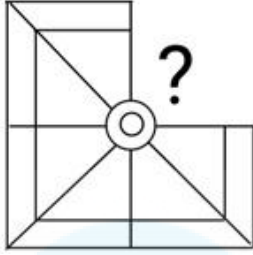
Option 3 ID : 264330449130

Option 4 ID : 264330449131

Status : Answered

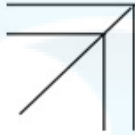
Chosen Option : 1

Q.4 Select the figure from the given options that will replace the question mark (?) in the figure given below to complete the pattern.



Ans

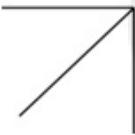
✓ 1.



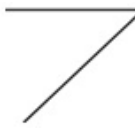
✗ 2.



✗ 3.



✗ 4.



Question ID : 264330118116

Option 1 ID : 264330464282

Option 2 ID : 264330464280

Option 3 ID : 264330464281

Option 4 ID : 264330464279

Status : Answered

Chosen Option : 1

Q.5 Read the given statements and conclusions carefully. Assuming that the information given in the statements is true, even if it appears to be at variance with commonly known facts, decide which of the given conclusions logically follow(s) from the statements.

Statements:

- All bags are pants.
- All pants are eggs.
- All eggs are flowers.

Conclusions:

- I. All pants are flowers.
- II. All pants are bags.
- III. All flowers are bags.
- IV. All flowers are pants.

Ans ✗ 1. Only conclusion III follows

✗ 2. Only conclusion IV follows

✓ 3. Only conclusion I follows

✗ 4. Only conclusion II follows

Question ID : 26433078847

Option 1 ID : 264330309402

Option 2 ID : 264330309403

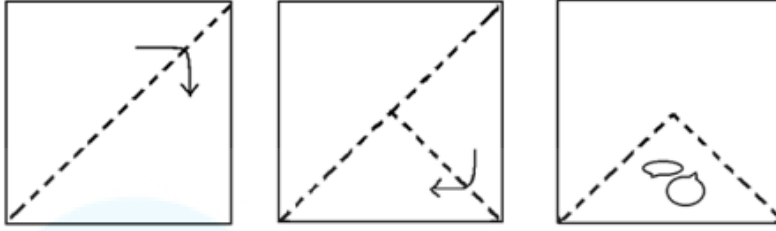
Option 3 ID : 264330309400

Option 4 ID : 264330309401

Status : Answered


Chosen Option : 3

Q.6 The sequence of folding a piece of paper and the manner in which the folded paper is cut is shown in the following figure. How would this paper look when unfolded?




Ans

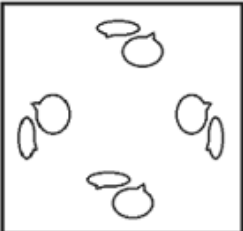
X 1.



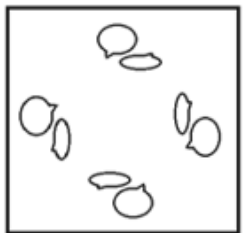
X 2.



X 3.



✓ 4.



Question ID : 26433011295

Option 1 ID : 264330437266

Option 2 ID : 264330437267

Option 3 ID : 264330437268

Option 4 ID : 264330437265

Status : Answered

Chosen Option : 4

Q.7 Six people, S, T, U, V, W and X, are sitting in a straight row facing north. Only two people sit to the left of U. Only two people sit between U and X. T sits to the immediate right of S. W sits to the immediate left of V. V is not a neighbour of X. Who sits at the extreme left end of the row?

- Ans 1. W
 2. X
 3. V
 4. S

Question ID : 26433089505
Option 1 ID : 264330351522
Option 2 ID : 264330351524
Option 3 ID : 264330351521
Option 4 ID : 264330351523
Status : Answered
Chosen Option : 1

Q.8 In a certain code language, 'SITE' is written as 'WMXI' and 'MAKE' is written as 'QEOI'. How will 'TERM' be written in that language?

- Ans 1. XHUP
 2. XIVQ
 3. WHVQ
 4. WIUO

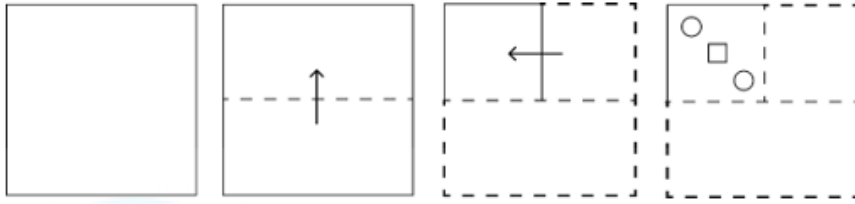
Question ID : 26433087173
Option 1 ID : 264330342330
Option 2 ID : 264330342331
Option 3 ID : 264330342329
Option 4 ID : 264330342332
Status : Answered
Chosen Option : 2

Q.9 Which of the following options will replace the question mark (?) in the given series?
286, 257, 230, 205, ?, 161

- Ans 1. 188
 2. 178
 3. 182
 4. 192

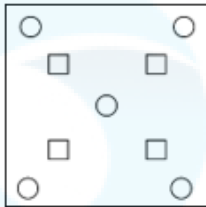
Question ID : 264330109430
Option 1 ID : 264330429997
Option 2 ID : 264330429999
Option 3 ID : 264330430000
Option 4 ID : 264330429998
Status : Answered
Chosen Option : 3

Q.10 A square sheet of paper is folded along the dotted line successively along the directions shown and is then punched in the last. How would the paper look when unfolded?

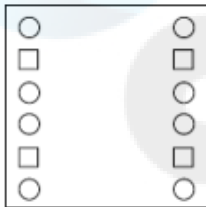


Ans

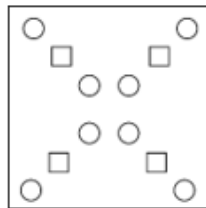
✗ 1.



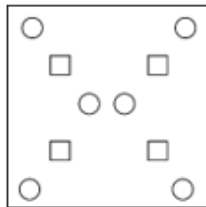
✗ 2.



✓ 3.



✗ 4.



Question ID : 264330172416

Option 1 ID : 264330676216

Option 2 ID : 264330676217

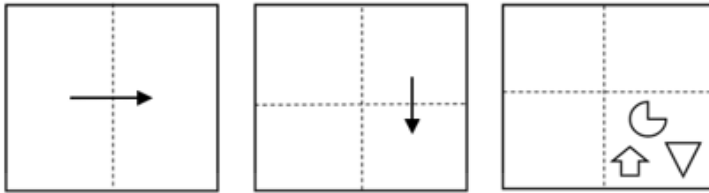
Option 3 ID : 264330676215

Option 4 ID : 264330676218

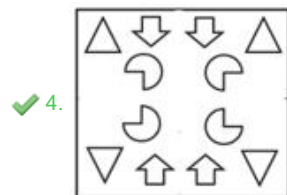
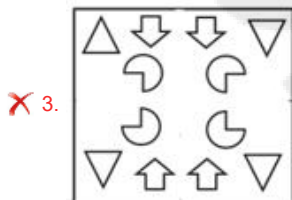
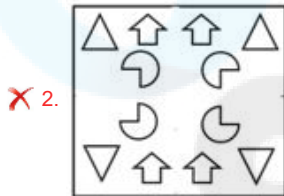
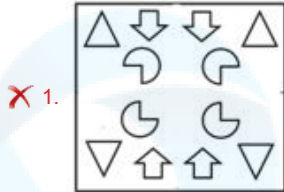
Status : Answered

Chosen Option : 3

Q.11 A paper is folded and cut as shown below. How will it appear when unfolded?



Ans



Question ID : 264330113650

Option 1 ID : 264330446685

Option 2 ID : 264330446687

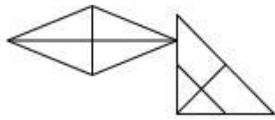
Option 3 ID : 264330446688

Option 4 ID : 264330446686

Status : Answered

Chosen Option : 4

Q.12 How many triangles are there in the given figure?



- Ans
- 1. 12
 - 2. 8
 - 3. 14
 - 4. 10

Question ID : 26433080667
Option 1 ID : 264330316603
Option 2 ID : 264330316601
Option 3 ID : 264330316604
Option 4 ID : 264330316602
Status : Answered
Chosen Option : 3

Q.13 1, 2, 3, 4, 5 and 6 are written on different faces of a dice. Three different positions of the same dice are shown below. Find the number on the face opposite to the one showing '6'.

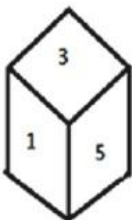


figure 1

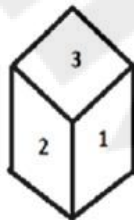


figure 2

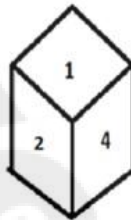


figure 3

- Ans
- 1. 4
 - 2. 5
 - 3. 2
 - 4. 1

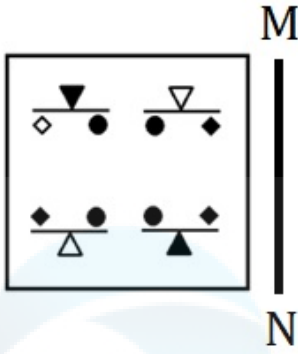
Question ID : 264330111677
Option 1 ID : 264330438794
Option 2 ID : 264330438795
Option 3 ID : 264330438796
Option 4 ID : 264330438793
Status : Answered
Chosen Option : 4

Q.14 Select the option that is related to the third term in the same way as the second term is related to the first term and the sixth term is related to the fifth term.
63 : 9 :: 84 : ? :: 119 : 17

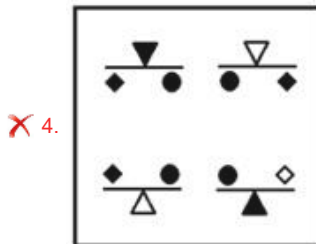
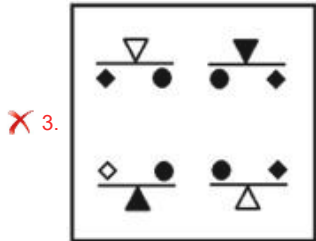
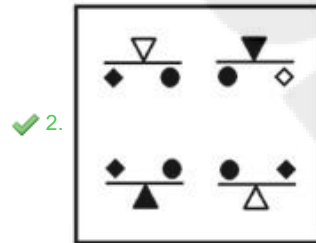
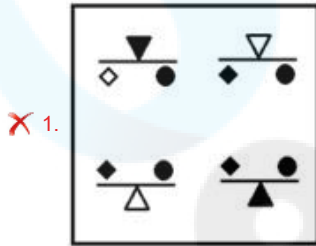
- Ans
- 1. 4
 - 2. 8
 - 3. 12
 - 4. 16

Question ID : 264330102256
Option 1 ID : 264330401489
Option 2 ID : 264330401490
Option 3 ID : 264330401492
Option 4 ID : 264330401491
Status : Answered
Chosen Option : 3

Q.15 Select the correct mirror image from the following options, when the mirror is placed on the right side of the given figure.



Ans



Question ID : 264330112311

Option 1 ID : 264330441329

Option 2 ID : 264330441331

Option 3 ID : 264330441332

Option 4 ID : 264330441330

Status : Answered

Chosen Option : 2

Q.16 Select the set in which the numbers are related in the same way as are the numbers of the following sets.

(NOTE : Operations should be performed on the whole numbers, without breaking down the numbers into its constituent digits. E.g. 13 – Operations on 13 such as adding /deleting /multiplying etc. to 13 can be performed. Breaking down 13 into 1 and 3 and then performing mathematical operations on 1 and 3 is NOT allowed)
(676, 553), (784, 661)

Ans 1. (547, 424)

2. (421, 301)

3. (691, 581)

4. (752, 628)

Question ID : 26433052036

Option 1 ID : 264330203447

Option 2 ID : 264330203446

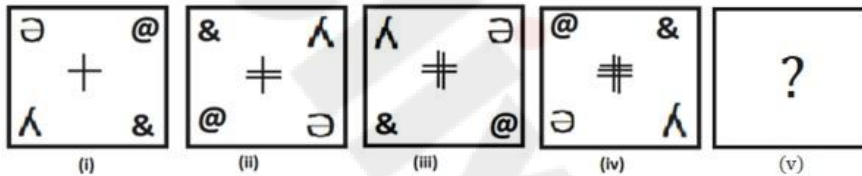
Option 3 ID : 264330203449

Option 4 ID : 264330203448

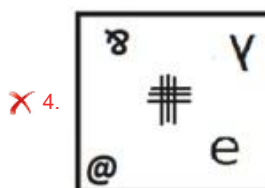
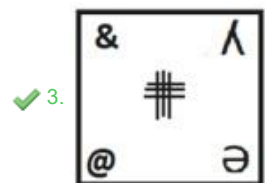
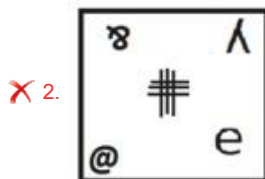
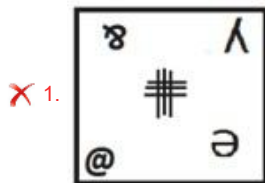
Status : Answered

Chosen Option : 1

Q.17 Select the figure from among the given options that can replace the question mark (?) in the following series.



Ans



Question ID : 264330106551

Option 1 ID : 264330418506

Option 2 ID : 264330418505

Option 3 ID : 264330418507

Option 4 ID : 264330418508

Status : Answered

Chosen Option : 3

Q.18 उस विकल्प का चयन कीजिए, जो तीसरे शब्द से उसी प्रकार संबंधित है ,जिस प्रकार दूसरा शब्द पहले शब्द से संबंधित है।
(शब्दों को अंग्रेजी/हिंदी के अर्थपूर्ण शब्दों के रूप में माना जाना चाहिए और ये शब्द, अक्षरों की संख्या/ व्यंजनों/स्वरों की संख्या के आधार पर एक-दूसरे से संबंधित नहीं होने चाहिए।)
चूजे (Chicken) : ब्रूड (Brood) :: मधुमक्खियां (Bees) : ?

- Ans
- 1. गैंग (Gang)
 - 2. मॉब (Mob)
 - 3. लीग (League)
 - 4. स्वार्म (Swarm)

Question ID : 26433069169
Option 1 ID : 264330271189
Option 2 ID : 264330271188
Option 3 ID : 264330271191
Option 4 ID : 264330271190
Status : Answered
Chosen Option : 4

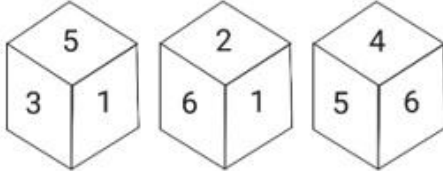
Q.19 Which two signs should be interchanged to make the following equation correct?

$$8 - 2 \times 49 \div 7 + 2 = 11$$

- Ans
- 1. + and -
 - 2. - and \times
 - 3. - and +
 - 4. + and \times

Question ID : 264330101086
Option 1 ID : 264330396889
Option 2 ID : 264330396891
Option 3 ID : 264330396890
Option 4 ID : 264330396892
Status : Answered
Chosen Option : 2

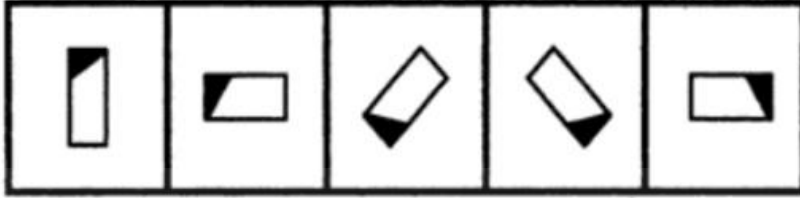
Q.20 Three different positions of the same dice are shown. Find the number on the face opposite to the face showing '6'.



- Ans
- 1. 4
 - 2. 5
 - 3. 3
 - 4. 1


Question ID : 264330112037
Option 1 ID : 264330440236
Option 2 ID : 264330440235
Option 3 ID : 264330440234
Option 4 ID : 264330440233
Status : Answered
Chosen Option : 3

Q.21 Select the figure that will come next in the following figure series.




Ans


✗ 1.



✗ 2.



✗ 3.



✓ 4.



Question ID : 26433090226

Option 1 ID : 264330354382

Option 2 ID : 264330354381

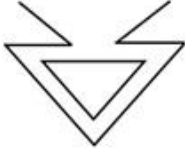
Option 3 ID : 264330354383

Option 4 ID : 264330354384

Status : Answered

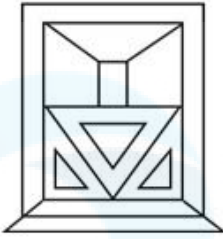
Chosen Option : 4

Q.22 Select the option in which the given figure is embedded (rotation is NOT allowed).



Ans

✗ 1.



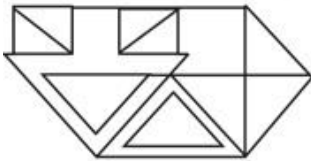
✗ 2.



✗ 3.



✓ 4.



Question ID : 264330114688

Option 1 ID : 264330450838

Option 2 ID : 264330450839

Option 3 ID : 264330450840

Option 4 ID : 264330450837

Status : Answered

Chosen Option : 4

Q.23 Which of the following terms will replace the question mark (?) in the given series?
BMXO, EOUM, ?, KSOI, NULG

Ans ✗ 1. FQRL

✓ 2. HQRK

✗ 3. HORL

✗ 4. FQSK

Question ID : 264330102174

Option 1 ID : 264330401161

Option 2 ID : 264330401162

Option 3 ID : 264330401163

Option 4 ID : 264330401164

Status : Answered

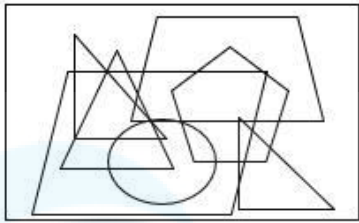
Chosen Option : 2

Q.24 Select the option in which the given figure is embedded. (Rotation is NOT allowed.)

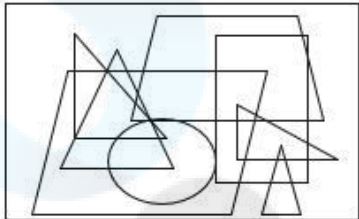


Ans

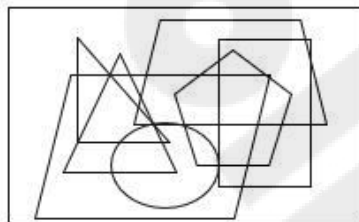
✗ 1.



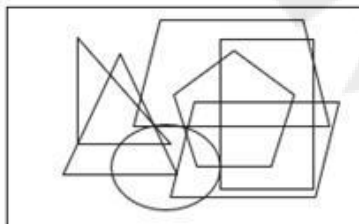
✗ 2.



✓ 3.



✗ 4.



Question ID : 26433092516
Option 1 ID : 264330363353
Option 2 ID : 264330363355
Option 3 ID : 264330363354
Option 4 ID : 264330363356
Status : Answered
Chosen Option : 3

Q.25 Select the correct combination of mathematical signs that can sequentially replace the * signs and balance the given equation.
 $12 * 6 * 3 * 2 * 8 * 4$

- Ans
- ✗ 1. +, x, -, ÷, =
 - ✗ 2. +, x, -, =, +
 - ✗ 3. +, -, x, +, =
 - ✓ 4. ÷, -, x, +, =

Question ID : 26433079085
Option 1 ID : 264330310344
Option 2 ID : 264330310346
Option 3 ID : 264330310347
Option 4 ID : 264330310345
Status : Answered
Chosen Option : 4

Q.1 A sum of money on compound interest becomes double of itself in 3 years. How many years will it take for the amount to become eight times of itself at the same rate of interest?

- Ans 1. 7
 2. 9
 3. 5
 4. 8

Question ID : 264330104409
Option 1 ID : 264330409937
Option 2 ID : 264330409939
Option 3 ID : 264330409940
Option 4 ID : 264330409938
Status : Answered
Chosen Option : 2

Q.2 Two numbers are in the ratio 5 : 7. The product of their HCF and LCM is 2835. What is the sum of the numbers?

- Ans 1. 108
 2. 107
 3. 109
 4. 106

Question ID : 264330104270
Option 1 ID : 264330409383
Option 2 ID : 264330409382
Option 3 ID : 264330409384
Option 4 ID : 264330409381
Status : Answered
Chosen Option : 1

Q.3 If ₹10,400 is divided into three parts among P, Q and R proportional to $\frac{1}{2} : \frac{1}{5} : \frac{1}{6}$, then Q's share (in ₹) will be:

- Ans 1. 2,800
 2. 2,000
 3. 1,600
 4. 2,400

Question ID : 264330129426
Option 1 ID : 264330507072
Option 2 ID : 264330507071
Option 3 ID : 264330507070
Option 4 ID : 264330507073
Status : Answered
Chosen Option : 4

Q.4 Ramesh lent some amount of money at 12% simple interest and an equal amount of money at 15% simple interest, each for 2 years. If his total interest was ₹675, the amount lent was (lent at 12%):

- Ans
- 1. ₹1,150
 - 2. ₹1,550
 - 3. ₹1,350
 - 4. ₹1,250

Question ID : 264330118423
Option 1 ID : 264330465093
Option 2 ID : 264330465096
Option 3 ID : 264330465095
Option 4 ID : 264330465094
Status : Answered
Chosen Option : 4

Q.5 A positive integer is said to be prime if it is not divisible by any positive integer other than itself and one. Let K be a prime number strictly greater than 5. When K^2+19 is divided by 12, the remainder will be:

- Ans
- 1. 8
 - 2. 1
 - 3. 7
 - 4. 5

Question ID : 264330104280
Option 1 ID : 264330409424
Option 2 ID : 264330409421
Option 3 ID : 264330409423
Option 4 ID : 264330409422
Status : Answered
Chosen Option : 1

Q.6 In a school, 45% of the staff is female. 80% of the female staff and 60% of the male staff are postgraduates. Find the percentage of the non-postgraduate staff in the school.

- Ans
- 1. 31%
 - 2. 64%
 - 3. 42%
 - 4. 53%

Question ID : 264330130072
Option 1 ID : 264330509519
Option 2 ID : 264330509522
Option 3 ID : 264330509520
Option 4 ID : 264330509521
Status : Answered
Chosen Option : 1

Q.7 Komal sold two devices, each for ₹4,982. If she made 6% profit on the first and 6% loss on the second, what is the total cost of both the devices?

- Ans
- 1. ₹11,000
 - 2. ₹9,000
 - 3. ₹8,000
 - 4. ₹10,000

Question ID : 264330103613

Option 1 ID : 264330406760

Option 2 ID : 264330406758

Option 3 ID : 264330406757

Option 4 ID : 264330406759

Status : Answered

Chosen Option : 4

Q.8 A is thrice as good a workman as B and is, therefore, able to finish a job in 60 days less than B. Working together, they can do it in:

- Ans
- 1. $23\frac{3}{4}$ days
 - 2. $22\frac{1}{2}$ days
 - 3. $22\frac{3}{4}$ days
 - 4. $23\frac{1}{2}$ days

Question ID : 264330104209

Option 1 ID : 264330409140

Option 2 ID : 264330409137

Option 3 ID : 264330409138

Option 4 ID : 264330409139

Status : Answered

Chosen Option : 2

Q.9 Simplify the following.

$$12 - [2.06 + \{2.57 + (9.91 - \overline{5.09 - 0.76})\}]$$

- Ans
- 1. 1.79
 - 2. 1.99
 - 3. 2.17
 - 4. 2.79

Question ID : 264330118037

Option 1 ID : 264330463966

Option 2 ID : 264330463965

Option 3 ID : 264330463964

Option 4 ID : 264330463963

Status : Answered

Chosen Option : 4

Q.10 What is the average of 144, 169,196, 225 and 256?

- Ans
- 1. 108
 - 2. 208
 - 3. 188
 - 4. 198

Question ID : 264330130907
Option 1 ID : 264330512742
Option 2 ID : 264330512741
Option 3 ID : 264330512740
Option 4 ID : 264330512739
Status : Answered
Chosen Option : 4

Q.11 A number is first decreased by 30% and then, increased by 40%. The resulting number is again increased by 5%. What is the net increase or decrease percentage?

- Ans
- 1. Decrease of 3.4%
 - 2. Increase of 3.4%
 - 3. Increase of 2.9%
 - 4. Decrease of 2.9%

Question ID : 264330177575
Option 1 ID : 264330696416
Option 2 ID : 264330696415
Option 3 ID : 264330696417
Option 4 ID : 264330696418
Status : Answered
Chosen Option : 3

Q.12 If the capacity of a cylindrical tank is $14,168 \text{ m}^3$ and the diameter of its base is 28 m, then find the depth of the tank (in m).

(Take $\pi = \frac{22}{7}$)

- Ans
- 1. 30
 - 2. 27
 - 3. 32
 - 4. 23

Question ID : 264330112439
Option 1 ID : 264330441842
Option 2 ID : 264330441844
Option 3 ID : 264330441841
Option 4 ID : 264330441843
Status : Answered
Chosen Option : 4

Q.13 Zeeshan travelled for 40 minutes at a speed of 75 km/h and for 20 minutes at 60 km/h.
Find his average speed (in km/h) during the journey.

Ans 1. 70

2. 65

3. 67.5

4. 72.5

Question ID : 264330122846

Option 1 ID : 264330481451

Option 2 ID : 264330481454

Option 3 ID : 264330481452

Option 4 ID : 264330481453

Status : Answered

Chosen Option : 1

Q.14 A shopkeeper sells his goods at a 30% discount. Find the marked price of an article whose selling price is ₹1,190.

Ans 1. ₹1,800

2. ₹1,500

3. ₹1,700

4. ₹1,600

Question ID : 264330109250

Option 1 ID : 264330429280

Option 2 ID : 264330429278

Option 3 ID : 264330429277

Option 4 ID : 264330429279

Status : Answered

Chosen Option : 3

Q.15 A tower is topped by a hemispherical dome that has a surface area of 363π sq.ft approximately. Find the volume of the dome (in cubic ft).

Ans 1. 665.7π

2. 887.3π

3. 792.7π

4. 724.3π

Question ID : 264330111495

Option 1 ID : 264330438065

Option 2 ID : 264330438068

Option 3 ID : 264330438067

Option 4 ID : 264330438066

Status : Answered

Chosen Option : 2

Q.1 In MS Excel 365 what is the cell address of the cell two columns to the right and three rows down from cell D7?

- Ans
- 1. F9
 - 2. E9
 - 3. G10
 - 4. F10

Question ID : 264330177654
Option 1 ID : 264330696733
Option 2 ID : 264330696734
Option 3 ID : 264330696731
Option 4 ID : 264330696732
Status : Answered
Chosen Option : 4

Q.2 Where is the position of the menu bar in accordance with the title bar in MS word 365?

- Ans
- 1. Menu bar is situated below the title bar.
 - 2. Menu bar is situated above the title bar.
 - 3. Menu bar is situated to the left of the title bar.
 - 4. Menu bar is situated to the right of the title bar.

Question ID : 264330171419
Option 1 ID : 264330672292
Option 2 ID : 264330672291
Option 3 ID : 264330672293
Option 4 ID : 264330672294
Status : Answered
Chosen Option : 1

Q.3 In MS Excel 365 what is the Microsoft Excel formula to create an absolute cell reference for cell B2?

- Ans
- 1. B2
 - 2. \$B\$2
 - 3. \$B2
 - 4. B\$2

Question ID : 264330180679
Option 1 ID : 264330708684
Option 2 ID : 264330708683
Option 3 ID : 264330708685
Option 4 ID : 264330708686
Status : Answered
Chosen Option : 1

Q.4 In Microsoft Excel 365, how do you start to write a formula?

- Ans
- 1. By typing =
 - 2. By typing ;
 - 3. By typing /
 - 4. By typing :

Question ID : 264330182752
Option 1 ID : 264330716780
Option 2 ID : 264330716781
Option 3 ID : 264330716782
Option 4 ID : 264330716779
Status : Answered
Chosen Option : 1

Q.5 Which of the following is an Internet accessing technique where computer uses its modem to dial a telephone number given to the user by an Internet Service Provider?

- Ans
- 1. Digital Subscriber Line
 - 2. Dial up Connection
 - 3. Broadband Connection
 - 4. Integrated Services Digital Network (ISDN) Service

Question ID : 264330182765
Option 1 ID : 264330716834
Option 2 ID : 264330716831
Option 3 ID : 264330716832
Option 4 ID : 264330716833
Status : Not Answered
Chosen Option : --

Q.6 In MS-Word 365, which action allows you to replace a specific word or phrase throughout the entire document?

- Ans
- 1. Cut
 - 2. Copy
 - 3. Paste
 - 4. Find and Replace

Question ID : 264330173352
Option 1 ID : 264330679890
Option 2 ID : 264330679887
Option 3 ID : 264330679888
Option 4 ID : 264330679889
Status : Answered
Chosen Option : 4

Q.7 In MS-Word 365, what is the primary difference between the 'Save' and 'Save As' commands?

- Ans
- 1. 'Save' is used to save the document with a new filename or in a different location, while 'Save As' is used to save the document for the first time.
 - 2. 'Save' is used to save the document in the cloud storage, while 'Save As' is used to save the document on the local computer.
 - 3. 'Save' is used to save the document for the first time, while 'Save As' is used to save the document with a new filename or in a different location.
 - 4. Both 'Save' and 'Save As' perform the same function of saving the document; they are just two different names for the same command.

Question ID : 264330173348
Option 1 ID : 264330679872
Option 2 ID : 264330679874
Option 3 ID : 264330679871
Option 4 ID : 264330679873
Status : Answered
Chosen Option : 3

Q.8 Which option in Page Setup of MS word 365 determines whether the content of the document is displayed vertically or horizontally?

- Ans**
- 1. Columns
 - 2. Paper Size
 - 3. Margins
 - 4. Orientation

Question ID : 264330173589
Option 1 ID : 264330680838
Option 2 ID : 264330680835
Option 3 ID : 264330680837
Option 4 ID : 264330680836
Status : Answered
Chosen Option : 4

Q.9 Which of the following is an effective method to handle SPAM emails?

- Ans**
- 1. Forward the email to all your contacts
 - 2. Mark the email as SPAM or Junk
 - 3. Unsubscribe from all mailing lists
 - 4. Reply to the sender asking them to stop

Question ID : 264330174459
Option 1 ID : 264330684258
Option 2 ID : 264330684257
Option 3 ID : 264330684255
Option 4 ID : 264330684256
Status : Answered
Chosen Option : 2

Q.10 Which of the following is the most appropriate option to print pages 1, 3, 5 and so on in MS Word 365?

- Ans**
- 1. Print Odd pages
 - 2. Print
 - 3. Print Even pages
 - 4. Print all

Question ID : 264330176716
Option 1 ID : 264330693079
Option 2 ID : 264330693082
Option 3 ID : 264330693080
Option 4 ID : 264330693081
Status : Answered
Chosen Option : 1