

Constable Executive Male and Female in Delhi Police Examination 2023

Roll Number	
Candidate Name	
Venue Name	
Exam Date	16/11/2023
Exam Time	12:00 PM - 1:30 PM
Subject	Constable Executive Male and Female in Delhi Police Examination 2023

Section : General Knowledge

Q.1 The sale of car results in _____.

- Ans
- 1. decrease in sale of final products
 - 2. no change
 - 3. decrease in GDP
 - 4. increase in GDP

Question ID : 264330116512
Option 1 ID : 264330458136
Option 2 ID : 264330458135
Option 3 ID : 264330458134
Option 4 ID : 264330458133
Status : Answered
Chosen Option : 4

Q.2 As of October 2022, fire altars are primarily found in which of the following Harappan cities?

- Ans
- 1. Rakhigarhi
 - 2. Banawali
 - 3. Mohenjo-Daro
 - 4. Kalibangan

Question ID : 264330109643
Option 1 ID : 264330430852
Option 2 ID : 264330430850
Option 3 ID : 264330430851
Option 4 ID : 264330430849
Status : Not Answered
Chosen Option : --

Q.3 Which of the following will NOT be included in the estimation of national income?

- (i) Expenses on electricity by a factory
- (ii) Financial help to earthquake victims
- (iii) Imputed value of production for self-consumption
- (iv) Brokerage on sale of bonds

- Ans
- 1. Both (iii) and (iv)
 - 2. All of (i), (ii), (iii) and (iv)
 - 3. Both (i) and (ii)
 - 4. None of (i), (ii), (iii) and (iv)

Question ID : 264330112893
Option 1 ID : 264330443658
Option 2 ID : 264330443659
Option 3 ID : 264330443657
Option 4 ID : 264330443660
Status : Not Answered
Chosen Option : --

Q.4 Which of the following is the hardest mineral?

- Ans
- 1. Gypsum
 - 2. Talc
 - 3. Calcite
 - 4. Diamond

Question ID : 264330131681
Option 1 ID : 264330515824
Option 2 ID : 264330515823
Option 3 ID : 264330515826
Option 4 ID : 264330515825
Status : Answered
Chosen Option : 4

Q.5 In which year was the city of Agra founded?

- Ans
- 1. 1404
 - 2. 1204
 - 3. 1504
 - 4. 1304

Question ID : 26433089133
Option 1 ID : 264330350049
Option 2 ID : 264330350052
Option 3 ID : 264330350050
Option 4 ID : 264330350051
Status : Not Answered
Chosen Option : --

Q.6 What is the approximate percentage of adolescents (10-19 years) in India as per Census 2011?

- Ans
- 1. 22.6%
 - 2. 18.3%
 - 3. 24.3%
 - 4. 20.9%

Question ID : 264330177908
Option 1 ID : 264330697721
Option 2 ID : 264330697719
Option 3 ID : 264330697722
Option 4 ID : 264330697720
Status : Not Answered
Chosen Option : --

Q.7 Industrial Licensing is compulsory for five industries. Which of the following is NOT one of those five industries?

- Ans
- 1. Cottage Industries
 - 2. Industrial Explosives
 - 3. Alcohol
 - 4. Cigarettes

Question ID : 264330110193
Option 1 ID : 264330433052
Option 2 ID : 264330433051
Option 3 ID : 264330433049
Option 4 ID : 264330433050
Status : Answered
Chosen Option : 2

Q.8 Kunbi is the folk dance of which Indian state?

- Ans
- 1. Jharkhand
 - 2. Goa
 - 3. Tamil Nadu
 - 4. Bihar

Question ID : 264330132394
Option 1 ID : 264330518672
Option 2 ID : 264330518673
Option 3 ID : 264330518671
Option 4 ID : 264330518674
Status : Not Answered
Chosen Option : --

Q.9 Which of the following is NOT generally used in milk adulteration?

- Ans
- 1. Urea
 - 2. Starch
 - 3. Saw dust
 - 4. Detergent

Question ID : 264330111904
Option 1 ID : 264330439701
Option 2 ID : 264330439703
Option 3 ID : 264330439704
Option 4 ID : 264330439702
Status : Not Answered
Chosen Option : --

Q.10 The maximum duration of a test match of cricket is _____ days.

- Ans 1. five
 2. two
 3. four
 4. three

Question ID : 264330130648
Option 1 ID : 264330511706
Option 2 ID : 264330511703
Option 3 ID : 264330511705
Option 4 ID : 264330511704
Status : Not Answered
Chosen Option : --

Q.11 Sultan Azlan Shah Cup is held in _____ .

- Ans 1. Malaysia
 2. Iran
 3. India
 4. Indonesia

Question ID : 264330132557
Option 1 ID : 264330519323
Option 2 ID : 264330519326
Option 3 ID : 264330519324
Option 4 ID : 264330519325
Status : Not Answered
Chosen Option : --

Q.12 King Kanishka was a famous ruler of which Indian dynasty?

- Ans 1. Hind Unani
 2. Kushan
 3. Satavahana
 4. Shaka

Question ID : 264330119729
Option 1 ID : 264330469191
Option 2 ID : 264330469194
Option 3 ID : 264330469192
Option 4 ID : 264330469193
Status : Not Answered
Chosen Option : --

Q.13 Name the autobiography written by Hillary Clinton, as an account of her eight years as the first lady of the United States.

- Ans 1. Living History
 2. In the Shadow of Man
 3. My Life, My Truth
 4. Express Yourself

Question ID : 26433055357
Option 1 ID : 264330216413
Option 2 ID : 264330216414
Option 3 ID : 264330216412
Option 4 ID : 264330216415
Status : Answered
Chosen Option : 2

Q.14 Kumaradevi, a Lichchhavi princess, was married to whom among the following Gupta kings?

- Ans 1. Chandragupta I
 2. Srigupta
 3. Chandragupta II
 4. Samudragupta

Question ID : 264330120281
Option 1 ID : 264330471375
Option 2 ID : 264330471376
Option 3 ID : 264330471377
Option 4 ID : 264330471378
Status : Not Answered
Chosen Option : --

Q.15 Under which Act was the Central Legislature made of two houses?

- Ans 1. Government of India Act, 1935
 2. Government of India Act, 1919
 3. Government of India Act, 1947
 4. The Indian Councils Act, 1909

Question ID : 264330120294
Option 1 ID : 264330471428
Option 2 ID : 264330471427
Option 3 ID : 264330471429
Option 4 ID : 264330471430
Status : Not Answered
Chosen Option : --

Q.16 Identify the iron and steel plant that was developed in collaboration with Germany.

- Ans 1. Durgapur
 2. Visvesvaraya
 3. Rourkela
 4. Salem

Question ID : 264330178710
Option 1 ID : 264330700870
Option 2 ID : 264330700868
Option 3 ID : 264330700867
Option 4 ID : 264330700869
Status : Not Answered
Chosen Option : --

Q.17 From which of the following years did the fourth five-year plan commence?

- Ans 1. 1969
 2. 1964
 3. 1966
 4. 1963

Question ID : 264330118245
Option 1 ID : 264330464798
Option 2 ID : 264330464796
Option 3 ID : 264330464797
Option 4 ID : 264330464795
Status : Not Answered
Chosen Option : --

Q.18 _____ grows well on well-drained fertile soils in the flood plains of India where soils are renewed every year.

- Ans 1. Natural silk
 2. Jute
 3. Saffron
 4. Bajra

Question ID : 264330182947
Option 1 ID : 264330717520
Option 2 ID : 264330717523
Option 3 ID : 264330717521
Option 4 ID : 264330717522
Status : Not Answered
Chosen Option : --

Q.19 Which Committee made recommendations for the inclusion of fundamental duties in the Indian Constitution?

- Ans 1. Sardar Swaran Singh Committee
 2. AP Jain Committee
 3. PK Watal Committee
 4. John Mathai Committee

Question ID : 264330114484
Option 1 ID : 264330450021
Option 2 ID : 264330450024
Option 3 ID : 264330450022
Option 4 ID : 264330450023
Status : Not Answered
Chosen Option : --

Q.20 Pradhan Mantri Kisan Maan Dhan Yojana is a government scheme meant for old age protection and social security of Small and Marginal Farmers (SMF). It provides for an assured Pension of _____ .

- Ans 1. ₹5,000 month
 2. ₹3,000 month
 3. ₹1,000 month
 4. ₹6,000 month

Question ID : 264330109125
Option 1 ID : 264330428780
Option 2 ID : 264330428778
Option 3 ID : 264330428777
Option 4 ID : 264330428779
Status : Not Answered
Chosen Option : --

Q.21 Who among the following social reformers was the inspiration behind the establishment of Prarthana Samaj in 1867?

- Ans
- 1. Raja Ram Mohan Roy
 - 2. Keshab Chandra Sen
 - 3. Durgaram Mehta
 - 4. Shiv Narayan Agnihotri

Question ID : 264330120271
Option 1 ID : 264330471342
Option 2 ID : 264330471341
Option 3 ID : 264330471340
Option 4 ID : 264330471339
Status : Not Answered
Chosen Option : --

Q.22 What are the paired organs of balance commonly found in aquatic invertebrates which are usually fluid-filled vesicles with sensory hairs?

- Ans
- 1. Statocysts
 - 2. Nephridia
 - 3. Radula
 - 4. Pharynx

Question ID : 26433055778
Option 1 ID : 264330218099
Option 2 ID : 264330218098
Option 3 ID : 264330218096
Option 4 ID : 264330218097
Status : Answered
Chosen Option : 2

Q.23 Natpuja dance is the folk dance of _____.

- Ans
- 1. Bihar
 - 2. Punjab
 - 3. Uttar Pradesh
 - 4. Assam

Question ID : 264330109288
Option 1 ID : 264330429431
Option 2 ID : 264330429429
Option 3 ID : 264330429430
Option 4 ID : 264330429432
Status : Answered
Chosen Option : 4

Q.24 Sulochana Chavan is a celebrated _____ singer who was awarded the Padma award in 2022.

- Ans
- 1. Carnatic
 - 2. Lavani
 - 3. Ghazal
 - 4. Sufi

Question ID : 264330111949
Option 1 ID : 264330439884
Option 2 ID : 264330439881
Option 3 ID : 264330439883
Option 4 ID : 264330439882
Status : Not Answered
Chosen Option : --

Q.25 _____ is the first Indian woman to have won a Grammy.

- Ans 1. Tanvi Shah
 2. Neeti Mohan
 3. Neha Bhasin
 4. Monali Thakur

Question ID : 264330113233
Option 1 ID : 264330445017
Option 2 ID : 264330445020
Option 3 ID : 264330445018
Option 4 ID : 264330445019
Status : Answered
Chosen Option : 4

Q.26 The Chairman and members of the State Public Service Commission are appointed by the _____.

- Ans 1. Governor
 2. President of India
 3. State Assembly
 4. Chief Minister

Question ID : 264330120169
Option 1 ID : 264330470933
Option 2 ID : 264330470934
Option 3 ID : 264330470932
Option 4 ID : 264330470931
Status : Answered
Chosen Option : 3

Q.27 'To Kill a Mockingbird', an English novel, was written by which of the following authors?

- Ans 1. Doris Lessing
 2. Harper Lee
 3. Muriel Spark
 4. Joseph Heller

Question ID : 26433055378
Option 1 ID : 264330216499
Option 2 ID : 264330216497
Option 3 ID : 264330216496
Option 4 ID : 264330216498
Status : Not Answered
Chosen Option : --

Q.28 Who among the following established the Ramakrishna Mission in 1897?

- Ans 1. Swami Dayananda Saraswati
 2. Swami Shraddhananda
 3. Swami Vivekananda
 4. Swami Acchutananda

Question ID : 264330114118
Option 1 ID : 264330448557
Option 2 ID : 264330448560
Option 3 ID : 264330448559
Option 4 ID : 264330448558
Status : Not Answered
Chosen Option : --

Q.29 'Lent' is a religious observance celebrated by the people who practice the _____ religion.

- Ans
- 1. Buddhist
 - 2. Jain
 - 3. Sikh
 - 4. Christian

Question ID : 264330113183
Option 1 ID : 264330444817
Option 2 ID : 264330444818
Option 3 ID : 264330444820
Option 4 ID : 264330444819
Status : Not Answered
Chosen Option : --

Q.30 What does the E stand for in SEZ?

- Ans
- 1. Economically
 - 2. External
 - 3. Economic
 - 4. Export

Question ID : 264330109406
Option 1 ID : 264330429902
Option 2 ID : 264330429903
Option 3 ID : 264330429901
Option 4 ID : 264330429904
Status : Answered
Chosen Option : 3

Q.31 r-selected species have maximum:

- Ans
- 1. reproductive rate
 - 2. mortality rate
 - 3. survival rate
 - 4. parental care

Question ID : 264330120959
Option 1 ID : 264330474052
Option 2 ID : 264330474053
Option 3 ID : 264330474054
Option 4 ID : 264330474051
Status : Answered
Chosen Option : 1

Q.32 Rahul decided to take a walk through a forest early in the morning. While he was inside the dense forest, he could see the beautiful sunrays through the small gaps within trees and clearly see the path taken by those rays. Of which effect was this a result?

- Ans
- 1. Reflection
 - 2. Diffraction
 - 3. Dispersion
 - 4. Tyndall effect

Question ID : 264330177004
Option 1 ID : 264330694211
Option 2 ID : 264330694212
Option 3 ID : 264330694214
Option 4 ID : 264330694213
Status : Answered
Chosen Option : 3

Q.33 'Food, Work and Productivity' were the focus of which Five-Year Plan?

- Ans
- 1. Ninth Five-Year Plan
 - 2. Fifth Five-Year Plan
 - 3. Seventh Five-Year Plan
 - 4. Fourth Five-Year Plan

Question ID : 264330112475
Option 1 ID : 264330441988
Option 2 ID : 264330441986
Option 3 ID : 264330441987
Option 4 ID : 264330441985
Status : Answered
Chosen Option : 4

Q.34 The Afghan noble Khan Jahan Lodi rebelled against the Mughal emperor _____ and was defeated.

- Ans
- 1. Bahadur Shah
 - 2. Shah Jahan
 - 3. Aurangzeb
 - 4. Muhammad Azam Shah

Question ID : 264330182274
Option 1 ID : 264330714921
Option 2 ID : 264330714922
Option 3 ID : 264330714919
Option 4 ID : 264330714920
Status : Not Answered
Chosen Option : --

Q.35 According to the census of India 2011, which group of states has the highest sex ratio?

- Ans** 1. Kerala and Tamil Nadu
 2. Kerala and Andhra Pradesh
 3. Andhra Pradesh and Chhattisgarh
 4. Tamil Nadu and Bihar

Question ID : 264330167031
Option 1 ID : 264330655127
Option 2 ID : 264330655129
Option 3 ID : 264330655130
Option 4 ID : 264330655128
Status : Answered
Chosen Option : 1

Q.36 Which of the following Fundamental Duties is mentioned first in the Constitution of India?

- Ans** 1. To uphold and protect the sovereignty, unity and integrity of India
 2. To cherish and follow the noble ideals which inspired our national struggle for freedom
 3. To defend the country and render national service when called upon to do so
 4. To abide by the Constitution and respect its ideals and institutions, the National Flag and the National Anthem

Question ID : 264330130439
Option 1 ID : 264330510869
Option 2 ID : 264330510868
Option 3 ID : 264330510867
Option 4 ID : 264330510870
Status : Answered
Chosen Option : 1

Q.37 Which of the following denotes the ideals that the state should keep in mind while formulating policies and enacting laws?

- Ans** 1. Directive Principles Of State Policy
 2. Preamble
 3. Fundamental Right
 4. Fundamental Duties

Question ID : 264330173502
Option 1 ID : 264330680489
Option 2 ID : 264330680490
Option 3 ID : 264330680487
Option 4 ID : 264330680488
Status : Answered
Chosen Option : 3

Q.38 Dr. Shyama Prasad Mukherjee Swimming Pool Complex is located at:

- Ans 1. Bangalore
 2. Kolkata
 3. New Delhi
 4. Patiala

Question ID : 264330118439
Option 1 ID : 264330465158
Option 2 ID : 264330465160
Option 3 ID : 264330465157
Option 4 ID : 264330465159
Status : Not Answered
Chosen Option : --

Q.39 Arrange the following Fundamental Duties in sequential order according to their mention in the Constitution of India.

- A. To abide by the Constitution and respect its ideals and institutions.
B. To uphold and protect the sovereignty, unity and integrity of India.
C. To cherish and follow the noble ideals which inspired our national struggle for freedom.
D. To safeguard public property and to abjure violence.

- Ans 1. B, A, D, C
 2. A, D, C, B
 3. A, C, B, D
 4. A, B, C, D

Question ID : 264330114752
Option 1 ID : 264330451096
Option 2 ID : 264330451094
Option 3 ID : 264330451095
Option 4 ID : 264330451093
Status : Answered
Chosen Option : 1

Q.40 Summer Olympics 1948, when Indian hockey team won gold medal was held in which of the following cities?

- Ans 1. Tokyo
 2. Los Angeles
 3. Rome
 4. London

Question ID : 264330176747
Option 1 ID : 264330693206
Option 2 ID : 264330693204
Option 3 ID : 264330693205
Option 4 ID : 264330693203
Status : Answered
Chosen Option : 1

Q.41 Champaner-Pavagadh Archaeological Park is situated in which of the following states of India?

- Ans
- 1. Bihar
 - 2. Rajasthan
 - 3. Haryana
 - 4. Gujarat

Question ID : 264330111848
Option 1 ID : 264330439477
Option 2 ID : 264330439479
Option 3 ID : 264330439480
Option 4 ID : 264330439478
Status : Answered
Chosen Option : 1

Q.42 In which year was Project Tiger launched in India to conserve the declining number of tigers?

- Ans
- 1. 1987
 - 2. 1973
 - 3. 1981
 - 4. 1970

Question ID : 264330179025
Option 1 ID : 264330702105
Option 2 ID : 264330702106
Option 3 ID : 264330702104
Option 4 ID : 264330702103
Status : Not Answered
Chosen Option : --

Q.43 Public Distribution System was relaunched by Government of India as _____ in 1997.

- Ans
- 1. Targeted Public Distribution System
 - 2. Targeted People Distribution System
 - 3. Cooperative Public Distribution System
 - 4. Public Food Distribution System

Question ID : 264330130671
Option 1 ID : 264330511797
Option 2 ID : 264330511796
Option 3 ID : 264330511795
Option 4 ID : 264330511798
Status : Answered
Chosen Option : 3

Q.44 Who is the first law officer of the Government of India?

- Ans
- 1. Law Commissioner
 - 2. Law Minister
 - 3. The Advocate-General for the State
 - 4. Attorney General of India

Question ID : 264330110590
Option 1 ID : 264330434639
Option 2 ID : 264330434640
Option 3 ID : 264330434638
Option 4 ID : 264330434637
Status : Answered
Chosen Option : 2

Q.45 What are sea salt, pollen, ash, smoke soot and fine soil associated with?

- Ans
- 1. Gases
 - 2. Dust particles
 - 3. Water vapour
 - 4. Meteors

Question ID : 264330137311
Option 1 ID : 264330537871
Option 2 ID : 264330537873
Option 3 ID : 264330537874
Option 4 ID : 264330537872
Status : Answered
Chosen Option : 2

Q.46 Sangeet Natak Akademi award winner Guru Bipin Singh is a famous _____ dancer.

- Ans
- 1. Manipuri
 - 2. Mohiniattam
 - 3. Odissi
 - 4. Sattriya

Question ID : 264330111968
Option 1 ID : 264330439958
Option 2 ID : 264330439957
Option 3 ID : 264330439959
Option 4 ID : 264330439960
Status : Not Answered
Chosen Option : --

Q.47 The _____ Tableau won 'People's Choice Award' at the 74th Republic Day Parade.

- Ans
- 1. Tripura
 - 2. Uttarakhand
 - 3. Gujarat
 - 4. Kerala

Question ID : 264330134252
Option 1 ID : 264330526006
Option 2 ID : 264330526004
Option 3 ID : 264330526003
Option 4 ID : 264330526005
Status : Not Answered
Chosen Option : --

Q.48 Sitara Devi and Lachhu Maharaj are popular for their mastery in which of the following styles of Indian dance?

- Ans
- 1. Manipuri
 - 2. Kuchipudi
 - 3. Bharatanatyam
 - 4. Kathak

Question ID : 264330130513
Option 1 ID : 264330511164
Option 2 ID : 264330511163
Option 3 ID : 264330511166
Option 4 ID : 264330511165
Status : Not Answered
Chosen Option : --

Q.49 Who is the head of the government among the following?

- Ans
- 1. President
 - 2. Speaker
 - 3. Vice President
 - 4. Prime Minister

Question ID : 264330173516
Option 1 ID : 264330680543
Option 2 ID : 264330680546
Option 3 ID : 264330680545
Option 4 ID : 264330680544
Status : Answered
Chosen Option : 1

Q.50 Who among the following was the founder of Satyashodhak Samaj, a society dedicated towards eradicating caste injustice?

- Ans
- 1. Bal Gangadhar Tilak
 - 2. Periyar Erode Venkata Ramasamy
 - 3. Jyotirao Govindrao Phule
 - 4. Mahatma Ayyankali

Question ID : 264330119005
Option 1 ID : 264330466677
Option 2 ID : 264330466678
Option 3 ID : 264330466675
Option 4 ID : 264330466676
Status : Not Answered
Chosen Option : --

Section : Reasoning

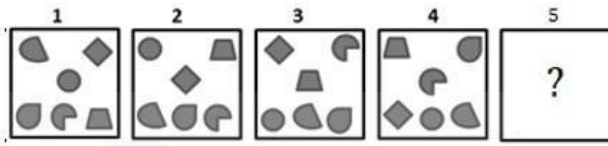
Q.1 Select the correct combination of mathematical signs that can sequentially replace the * signs and balance the given equation.

$$66 * 3 * 11 * 12 * 230$$

- Ans
- 1. $\times, -, =, +$
 - 2. $-, \times, +, =$
 - 3. $\div, \times, -, =$
 - 4. $\times, -, \div, =$

Question ID : 26433079091
Option 1 ID : 264330310370
Option 2 ID : 264330310371
Option 3 ID : 264330310369
Option 4 ID : 264330310368
Status : Not Answered
Chosen Option : --

Q.2 Each of the following questions consists of 4 figures marked 1, 2, 3 and 4 called the Problem Figures followed by 4 other figures. Select a figure from amongst the Answer Figures which will continue the same series as established by the four Problem Figures.



Ans

✗ 1.



✗ 2.



✗ 3.



✓ 4.



Question ID : 264330110540

Option 1 ID : 264330434440

Option 2 ID : 264330434437

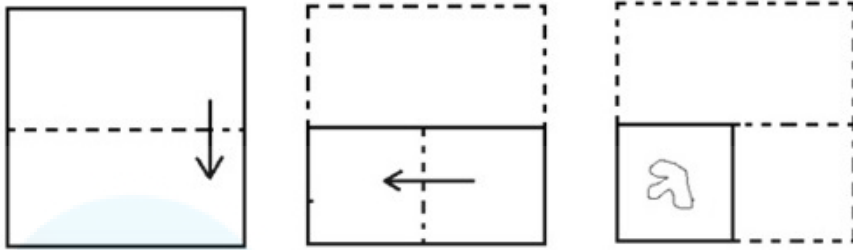
Option 3 ID : 264330434439

Option 4 ID : 264330434438

Status : Not Answered


Chosen Option : --

Q.3 The sequence of folding a piece of paper and the manner in which the folded paper has been cut is shown below. Choose a figure which would most closely resemble the unfolded form of the paper.




Ans

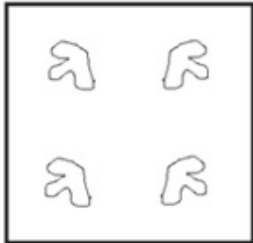
✓ 1.



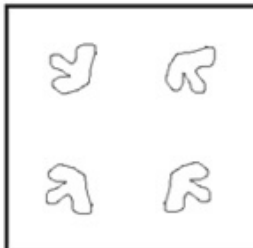
✗ 2.



✗ 3.



✗ 4.



Question ID : 264330112317

Option 1 ID : 264330441353

Option 2 ID : 264330441355

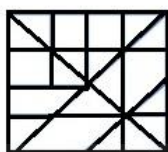
Option 3 ID : 264330441354

Option 4 ID : 264330441356

Status : Not Answered

Chosen Option : --

Q.4 Select the option figure that is embedded in the given figure (rotation is NOT allowed).



Ans



Question ID : 26433091722

Option 1 ID : 264330360254

Option 2 ID : 264330360253

Option 3 ID : 264330360256

Option 4 ID : 264330360255

Status : Not Answered

Chosen Option : --

Q.5 Which figure should replace the question mark (?) if the series were to be continued?

M	3	E	A	L	S	I	M	
E	I	M	3	I	E	L	S	?
A	V	I	L	M	3	E	6	

Ans

✗ 1.

6	M
E	I
L	S

✓ 2.

6	2
E	I
L	S

✗ 3.

6	2
E	S
L	I

✗ 4.

S	2
E	6
L	I

Question ID : 264330130817

Option 1 ID : 264330512380

Option 2 ID : 264330512382

Option 3 ID : 264330512381

Option 4 ID : 264330512379

Status : Not Answered

Chosen Option : --

Q.6 Six letters, M, N, O, P, Q and R are written on different faces of a dice. Three positions of this dice are shown here. Find the letter on the face opposite N.



Ans ✓ 1. M

✗ 2. P

✗ 3. R

✗ 4. O

Question ID : 264330106403

Option 1 ID : 264330417913

Option 2 ID : 264330417915

Option 3 ID : 264330417916

Option 4 ID : 264330417914

Status : Not Answered

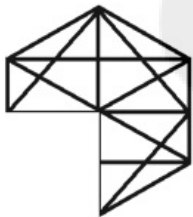
Chosen Option : --

Q.7 In a code language, if SMILE is coded as RLHKD and BELIEVE is coded as ADKHDUD, then how will LAUGHTER be coded?

- Ans
- 1. NCWIJVT
 - 2. MBVHIUFS
 - 3. MBHVIFSU
 - 4. KZTFGSDQ

Question ID : 26433089486
Option 1 ID : 264330351446
Option 2 ID : 264330351448
Option 3 ID : 264330351445
Option 4 ID : 264330351447
Status : Not Answered
Chosen Option : --

Q.8 Select a figure from amongst the four given options which, when placed in the blank space of figure (X), would complete the pattern.



X

Ans

- 1.
- 2.
- 3.
- 4.

Question ID : 264330102212
Option 1 ID : 264330401314
Option 2 ID : 264330401313
Option 3 ID : 264330401315
Option 4 ID : 264330401316
Status : Not Answered
Chosen Option : --

Q.9 Two statements are given followed by two conclusions numbered I and II. Assuming the statements to be true, even if they seem to be at variance with commonly known facts, decide which of the conclusions logically follow(s) from the statements.

Statements:

All insects are birds.

Some birds are fishes.

Conclusions:

I. All fishes are insects.

II. Some fishes are insects.

- Ans**
- 1. Only conclusion II follows
 - 2. Neither conclusion I nor II follows
 - 3. Both conclusions I and II follow
 - 4. Only conclusion I follows

Question ID : 26433045340

Option 1 ID : 264330177796

Option 2 ID : 264330177798

Option 3 ID : 264330177797

Option 4 ID : 264330177795

Status : Not Answered

Chosen Option : --

Q.10 Which two signs should be interchanged to make the given equation correct?

$$23 \times 7 - 76 + 87 \div 344 = 2$$

- Ans**
- 1. \times and $+$
 - 2. $+$ and $=$
 - 3. \times and $-$
 - 4. $+$ and \times

Question ID : 26433085734

Option 1 ID : 264330336640

Option 2 ID : 264330336637

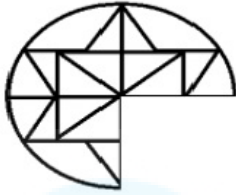
Option 3 ID : 264330336639

Option 4 ID : 264330336638

Status : Not Answered

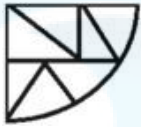
Chosen Option : --

Q.11 Select a figure from amongst the four given options which, when placed in the blank space of figure (X), would complete the pattern.

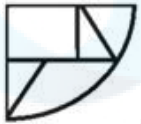


Ans

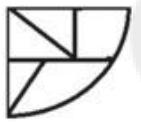
1.



2.



3.



4.



Question ID : 264330102218

Option 1 ID : 264330401340

Option 2 ID : 264330401339

Option 3 ID : 264330401338

Option 4 ID : 264330401337

Status : Answered

Chosen Option : 4

Q.12 Select the option that is related to the fifth letter cluster in the same way as the second letter cluster is related to the first letter cluster and the fourth letter cluster is related to the third letter cluster.

EGAK : WKSO :: JRCU : BVUY :: CLAG : ?

Ans 1. USPC

2. IHAL

3. UPSK

4. IHEN

Question ID : 26433074689

Option 1 ID : 264330292846

Option 2 ID : 264330292844

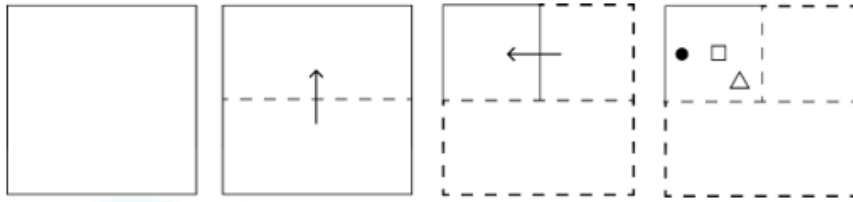
Option 3 ID : 264330292847

Option 4 ID : 264330292845

Status : Not Answered

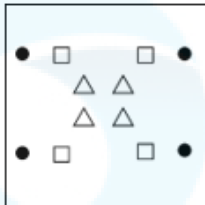
Chosen Option : --

Q.13 A square sheet of paper is folded along the dotted line successively along the directions shown and is then punched in the last. How would the paper look when unfolded?

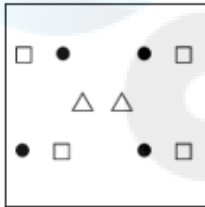


Ans

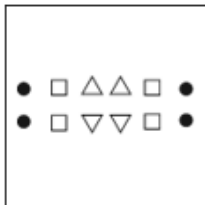
✗ 1.



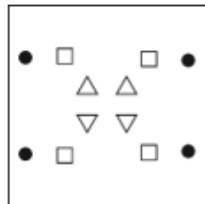
✗ 2.



✗ 3.



✓ 4.



Question ID : 264330172426

Option 1 ID : 264330676258

Option 2 ID : 264330676257

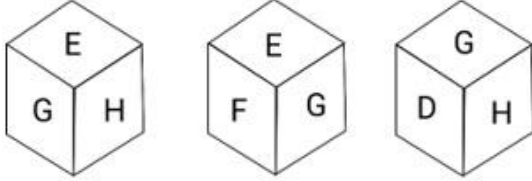
Option 3 ID : 264330676255

Option 4 ID : 264330676256

Status : Not Answered

Chosen Option : --

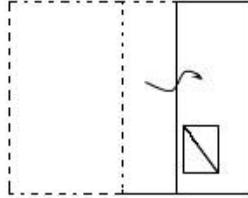
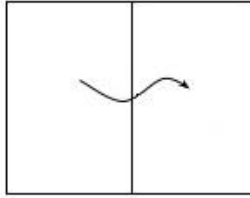
Q.14 Six letters, D, E, F, G, H and I are written on different faces of a dice. Three positions of this dice are shown here. Find the letter on the face opposite E.



- Ans
- 1. F
 - 2. D
 - 3. G
 - 4. I

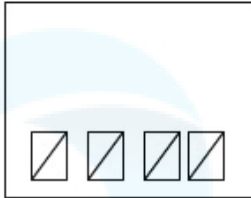
Question ID : 264330106406
Option 1 ID : 264330417926
Option 2 ID : 264330417925
Option 3 ID : 264330417927
Option 4 ID : 264330417928
Status : Answered
Chosen Option : 2

Q.15 A paper is folded and cut as shown below. How will it appear when unfolded?

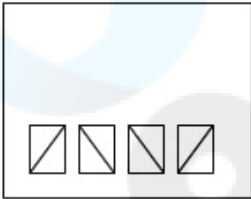


Ans

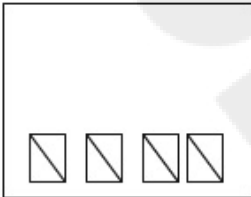
✗ 1.



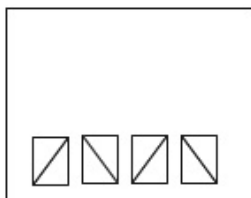
✗ 2.



✗ 3.



✓ 4.



Question ID : 264330118719

Option 1 ID : 264330466127

Option 2 ID : 264330466128

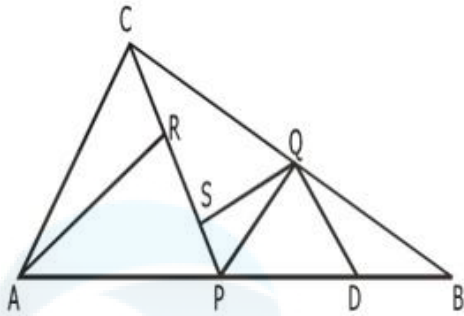
Option 3 ID : 264330466129

Option 4 ID : 264330466130

Status : Not Answered

Chosen Option : --

Q.16 How many triangles are there in the given figure?



- Ans
- 1. 13
 - 2. 11
 - 3. 10
 - 4. 12

Question ID : 26433080666

Option 1 ID : 264330316597

Option 2 ID : 264330316599

Option 3 ID : 264330316600

Option 4 ID : 264330316598

Status : Answered

Chosen Option : 2

Q.17 Muskan, Amrita, Pranjali, Deepti, Riya and Sonali are six friends sitting around a circle facing the centre. Muskan is between Amrita and Pranjali. Amrita is opposite to Deepti. Riya is not the immediate neighbour of Amrita. Who is opposite to Sonali?

- Ans
- 1. Deepti
 - 2. Riya
 - 3. Muskan
 - 4. Pranjali

Question ID : 26433086249

Option 1 ID : 264330338689

Option 2 ID : 264330338691

Option 3 ID : 264330338692

Option 4 ID : 264330338690

Status : Answered

Chosen Option : 4

Q.18 Select the option that is related to the fourth term in the same way as the first term is related to the second term and the fifth term is related to the sixth term.
 $144 : 12 :: ? : 25 :: 216 : 18$

- Ans
- 1. 280
 - 2. 260
 - 3. 300
 - 4. 250

Question ID : 264330102261

Option 1 ID : 264330401512

Option 2 ID : 264330401511

Option 3 ID : 264330401509

Option 4 ID : 264330401510

Status : Answered

Chosen Option : 3

Q.19 Select the option that represents the letters that, when sequentially placed from left to right in the blanks below, will complete the letter series.

A Q _ _ S A _ W E _ A _ _ E S _ Q W _ S

- Ans 1. WESQWAVE
 2. WEQSQWAE
 3. WEQSQAWE
 4. WSQSQAWE

Question ID : 26433092536

Option 1 ID : 264330363433

Option 2 ID : 264330363436

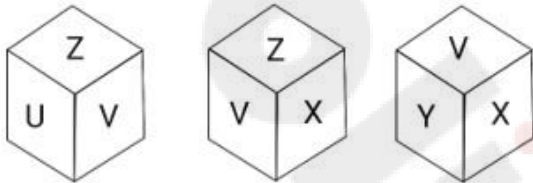
Option 3 ID : 264330363435

Option 4 ID : 264330363434

Status : Not Answered

Chosen Option : --

Q.20 Six letters, U, V, W, X, Y and Z are written on different faces of a dice. Three positions of this dice are shown here. Find the letter on the face opposite X.



- Ans 1. Z
 2. V
 3. U
 4. W

Question ID : 264330106414

Option 1 ID : 264330417960

Option 2 ID : 264330417958

Option 3 ID : 264330417957

Option 4 ID : 264330417959

Status : Not Answered

Chosen Option : --

Q.21 Select the set in which the numbers are related in the same way as are the numbers of the given sets.

(NOTE: Operations should be performed on the whole numbers, without breaking down the numbers into its constituent digits. E.g., 13 – Operations on 13 such as adding/ deleting/ multiplying etc. to 13 can be performed. Breaking down 13 into 1 and 3 and then performing mathematical operations on 1 and 3 is not allowed.)

(205, 146, 87)

(333, 274, 215)

- Ans 1. (222, 169, 123)
 2. (230, 181, 137)
 3. (188, 129, 70)
 4. (180, 130, 71)

Question ID : 264330178753

Option 1 ID : 264330701041

Option 2 ID : 264330701040

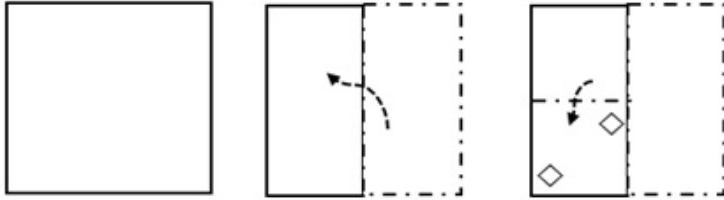
Option 3 ID : 264330701042

Option 4 ID : 264330701039

Status : Answered

Chosen Option : 3

Q.22 A paper is folded and cut as shown below. How will it appear when unfolded?

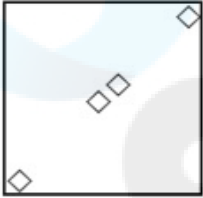


Ans

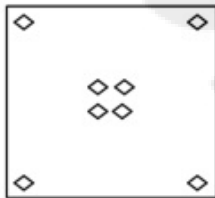
✗ 1.



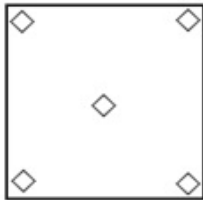
✗ 2.



✓ 3.



✗ 4.



Question ID : 264330117301

Option 1 ID : 264330461261

Option 2 ID : 264330461263

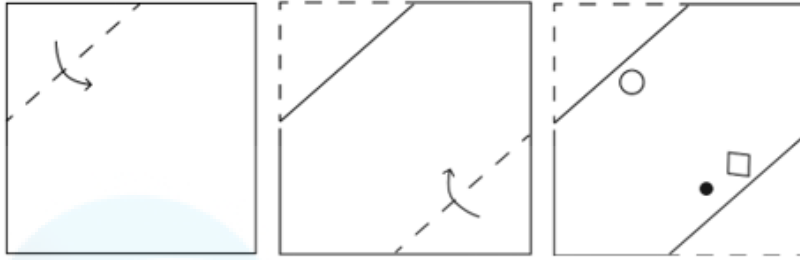
Option 3 ID : 264330461264

Option 4 ID : 264330461262

Status : Not Answered

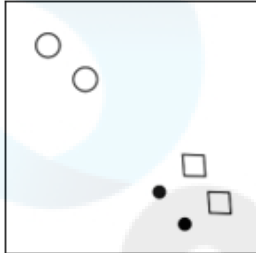
Chosen Option : --

Q.23 A square sheet of paper is folded along the dotted line successively along the directions shown and is then punched in the last. How would the paper look when unfolded?

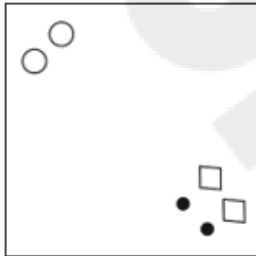


Ans

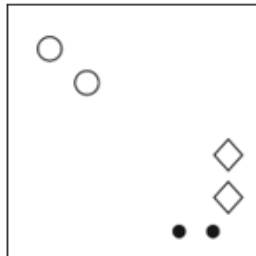
✓ 1.



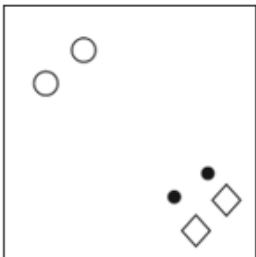
✗ 2.



✗ 3.



✗ 4.



Question ID : 264330172408

Option 1 ID : 264330676185

Option 2 ID : 264330676184

Option 3 ID : 264330676183

Option 4 ID : 264330676186

Status : Answered

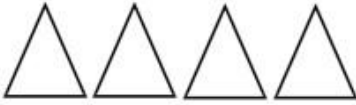
Chosen Option : 1

Q.24 Select the figure that will replace the question mark (?) in the following figure series.



Ans

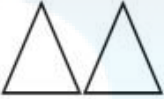
1.



2.



3.



4.



Question ID : 264330112027

Option 1 ID : 264330440195

Option 2 ID : 264330440196

Option 3 ID : 264330440193

Option 4 ID : 264330440194

Status : Answered

Chosen Option : 4

Q.25 Select the number from among the given options that can replace the question mark (?) in the following series.

2, 15, 41, 93, 197, ?

Ans 1. 324

2. 405

3. 320

4. 534

Question ID : 264330109770

Option 1 ID : 264330431358

Option 2 ID : 264330431357

Option 3 ID : 264330431359

Option 4 ID : 264330431360

Status : Not Answered

Chosen Option : --

Section : Numerical Ability

Q.1 The concentration of three wines A, B, and C is given as 15%, 30%, and 45%, respectively. They are mixed in the ratio of p : 5 : 3, resulting in a 30% concentration solution. What is the value of p?

Ans 1. 2

2. 3

3. 1

4. 4

Question ID : 264330178923

Option 1 ID : 264330701696

Option 2 ID : 264330701697

Option 3 ID : 264330701695

Option 4 ID : 264330701698

Status : Not Answered

Chosen Option : --

Q.2 The radius of a sphere is 1.8 cm. Find the exact volume (in cm^3) of this sphere.

- Ans
- 1. 7.776π
 - 2. 7.676π
 - 3. 7.786π
 - 4. 7.766π

Question ID : 264330112558
Option 1 ID : 264330442317
Option 2 ID : 264330442318
Option 3 ID : 264330442320
Option 4 ID : 264330442319
Status : Not Answered
Chosen Option : --

Q.3

Evaluate $\frac{(4.7)^2 - (1.3)^2}{4.7 - 1.3}$.

- Ans
- 1. 5
 - 2. 3
 - 3. 4
 - 4. 6

Question ID : 264330111436
Option 1 ID : 264330437831
Option 2 ID : 264330437832
Option 3 ID : 264330437830
Option 4 ID : 264330437829
Status : Not Answered
Chosen Option : --

Q.4 Simplify the following.
 $(8888 \div 88) \div 5$

- Ans
- 1. $22\frac{1}{5}$
 - 2. $25\frac{1}{4}$
 - 3. $20\frac{1}{5}$
 - 4. $15\frac{1}{5}$

Question ID : 264330119324
Option 1 ID : 264330467585
Option 2 ID : 264330467586
Option 3 ID : 264330467584
Option 4 ID : 264330467583
Status : Not Answered
Chosen Option : --

Q.5 There are 4 horses grazing at each corner of a square field of side 63 m. They are roped in such a way that they can touch the middle of each side. Find the remaining area of the ground where they do not graze. (Use $\pi = \frac{22}{7}$)

- Ans**
- 1. 780.50 m²
 - 2. 750.50 m²
 - 3. 850.50 m²
 - 4. 800.50 m²

Question ID : 26433091570
Option 1 ID : 264330359646
Option 2 ID : 264330359645
Option 3 ID : 264330359648
Option 4 ID : 264330359647
Status : Not Answered
Chosen Option : --

Q.6 Find the HCF of 3.6, 0.54 and 1.08.

- Ans**
- 1. 1.8
 - 2. 0.018
 - 3. 0.18
 - 4. 18

Question ID : 264330104224
Option 1 ID : 264330409198
Option 2 ID : 264330409200
Option 3 ID : 264330409199
Option 4 ID : 264330409197
Status : Not Answered
Chosen Option : --

Q.7 A man borrows ₹2,196 and agrees to return it with compound interest at the rate of 25% in three equal annual instalments at the end of the first, second and the third year. The amount of instalment (in ₹) is:

- Ans**
- 1. 1,125
 - 2. 984
 - 3. 1,072
 - 4. 732

Question ID : 264330103557
Option 1 ID : 264330406533
Option 2 ID : 264330406536
Option 3 ID : 264330406535
Option 4 ID : 264330406534
Status : Not Answered
Chosen Option : --

Q.8 If $A : B : C = 2 : 3 : 5$, then the ratio $\frac{A}{B} : \frac{B}{C} : \frac{C}{A}$ is equal to:

- Ans
- 1. 20 : 18 : 75
 - 2. 75 : 20 : 29
 - 3. 18 : 20 : 79
 - 4. 20 : 25 : 39

Question ID : 264330106077
Option 1 ID : 264330416609
Option 2 ID : 264330416612
Option 3 ID : 264330416611
Option 4 ID : 264330416610
Status : Not Answered
Chosen Option : --

Q.9 Find the time taken by a train 750 m long to cross a platform twice its length at a speed of 81 km/h.

- Ans
- 1. 80 sec
 - 2. 90 sec
 - 3. 100 sec
 - 4. 75 sec

Question ID : 264330183829
Option 1 ID : 264330720992
Option 2 ID : 264330720993
Option 3 ID : 264330720994
Option 4 ID : 264330720995
Status : Not Answered
Chosen Option : --

Q.10 A number y , when reduced by 25%, becomes 120% of a second number z . What percentage of z is y ?

- Ans
- 1. 160%
 - 2. 145%
 - 3. 175%
 - 4. 150%

Question ID : 264330131132
Option 1 ID : 264330513641
Option 2 ID : 264330513640
Option 3 ID : 264330513642
Option 4 ID : 264330513639
Status : Not Answered
Chosen Option : --

Q.11 A sum was invested at a certain rate of simple interest per annum for 2 years. Had it been invested at 3% per annum more rate than the existing rate, the simple interest accrued in the 2 years would have been ₹240 more. The sum invested was:

- Ans
- 1. ₹16,000
 - 2. ₹4,000
 - 3. ₹24,000
 - 4. ₹6,000

Question ID : 264330122721
Option 1 ID : 264330480982
Option 2 ID : 264330480979
Option 3 ID : 264330480980
Option 4 ID : 264330480981
Status : Not Answered
Chosen Option : --

Q.12 Deepak sold a bike to Sharath at a profit of 40%. Sharath sold his bike to Sivaji at a loss of 30%. If Deepak paid ₹8,000 for this bike, then find the cost price of the bike for Sivaji.

- Ans
- 1. ₹6,728
 - 2. ₹7,840
 - 3. ₹5,423
 - 4. ₹11,200

Question ID : 264330104351
Option 1 ID : 264330409706
Option 2 ID : 264330409707
Option 3 ID : 264330409705
Option 4 ID : 264330409708
Status : Not Answered
Chosen Option : --

Q.13 The marked price of a book is ₹767. A shopkeeper allows a discount of 20% and still earns a profit of 30%. Find the cost price of the book (in ₹).

- Ans
- 1. 680
 - 2. 450
 - 3. 472
 - 4. 525

Question ID : 264330126516
Option 1 ID : 264330495736
Option 2 ID : 264330495738
Option 3 ID : 264330495739
Option 4 ID : 264330495737
Status : Not Answered
Chosen Option : --

Q.14 P aims to get total 360 marks out of 500. He gets 5% less than his target. How much does he get?

- Ans 1. 335
 2. 325
 3. 340
 4. 330

Question ID : 264330126100
Option 1 ID : 264330494074
Option 2 ID : 264330494072
Option 3 ID : 264330494075
Option 4 ID : 264330494073
Status : Not Answered
Chosen Option : --

Q.15 If A and B together can complete a work in 15 days, B and C together in 12 days and C and A together in 10 days, then in how many days can B alone complete the work?

- Ans 1. 30
 2. 45
 3. 35
 4. 40

Question ID : 264330104327
Option 1 ID : 264330409609
Option 2 ID : 264330409612
Option 3 ID : 264330409610
Option 4 ID : 264330409611
Status : Not Answered
Chosen Option : --

Section : Computer Proficiency

Q.1 In MS Excel 365, which of the following is the correct sequence for deleting a column in MS-Excel spreadsheet?

- Ans 1. Select the cell<<Right click<<Delete<<Entire Row
 2. Select the cell<<Left click<<Delete<<Entire Row
 3. Select the cell<<Right click<<Delete<<Entire Column
 4. Select the cell<<Left click<<Delete<<Entire Column

Question ID : 264330176696
Option 1 ID : 264330693000
Option 2 ID : 264330693002
Option 3 ID : 264330692999
Option 4 ID : 264330693001
Status : Answered
Chosen Option : 3

Q.2 Which of the following is a shortcut key for Save as option in MS Word 365?

- Ans
- 1. F1
 - 2. F11
 - 3. F12
 - 4. F2

Question ID : 264330180434
Option 1 ID : 264330707703
Option 2 ID : 264330707704
Option 3 ID : 264330707705
Option 4 ID : 264330707706
Status : Answered
Chosen Option : 1

Q.3 What is the purpose of the 'Font Color' option in Microsoft Word 365?

- Ans
- 1. Changing the font style
 - 2. Changing the font size
 - 3. Applying a background colour to text
 - 4. Changing the colour of the text

Question ID : 264330180712
Option 1 ID : 264330708815
Option 2 ID : 264330708816
Option 3 ID : 264330708817
Option 4 ID : 264330708818
Status : Answered
Chosen Option : 4

Q.4 Which menu tab on Microsoft Word's 365 ribbon contains options for text formatting and editing?

- Ans
- 1. File
 - 2. Home
 - 3. View
 - 4. Insert

Question ID : 264330180733
Option 1 ID : 264330708899
Option 2 ID : 264330708900
Option 3 ID : 264330708901
Option 4 ID : 264330708902
Status : Answered
Chosen Option : 4

Q.5 In MS Excel 365, which of the following is NOT a method to open a spreadsheet in MS-Excel?

- Ans
- 1. Shift + Ctrl + N
 - 2. Alt + F + O
 - 3. Ctrl + N
 - 4. File -> open

Question ID : 264330178255
Option 1 ID : 264330699078
Option 2 ID : 264330699076
Option 3 ID : 264330699077
Option 4 ID : 264330699075
Status : Answered
Chosen Option : 1

Q.6 Which of the following is a common element in an MS Word 365 document's header or footer?

- Ans**
- 1. Document title
 - 2. Bullet points
 - 3. Page number
 - 4. Font colour

Question ID : 264330180861
Option 1 ID : 264330709408
Option 2 ID : 264330709409
Option 3 ID : 264330709407
Option 4 ID : 264330709410
Status : Answered
Chosen Option : 3

Q.7 What information is typically required to sign in to an email client?

- Ans**
- 1. Full name and date of birth
 - 2. Email address and password
 - 3. Social media account details
 - 4. Phone number and address

Question ID : 264330173551
Option 1 ID : 264330680684
Option 2 ID : 264330680683
Option 3 ID : 264330680686
Option 4 ID : 264330680685
Status : Answered
Chosen Option : 2

Q.8 In MS Excel 365 which of the following statements related to deleting rows in an excel sheet is correct?

- Ans**
- 1. If you want to delete multiple rows at once, simply select the rows by clicking and dragging over the row numbers, and then press 'Ctrl' and 'space'.
 - 2. If you want to delete multiple rows at once, simply select the rows by clicking and dragging over the row numbers, and then press 'Ctrl' and '←'.
 - 3. If you want to delete multiple rows at once, simply select the rows by clicking and dragging over the row numbers, and then press 'Ctrl' and '+'.
 - 4. If you want to delete multiple rows at once, simply select the rows by clicking and dragging over the row numbers, and then press 'Ctrl' and 'Enter'.

Question ID : 264330180417
Option 1 ID : 264330707637
Option 2 ID : 264330707636
Option 3 ID : 264330707635
Option 4 ID : 264330707638
Status : Answered
Chosen Option : 1

Q.9 Which of the following shortcut keys is used to copy formatting in MS Word 365?

- Ans**
- 1. Ctrl + Shift + A
 - 2. Ctrl + Shift + D
 - 3. Ctrl + Shift + C
 - 4. Ctrl + Shift + V

Question ID : 264330180432
Option 1 ID : 264330707697
Option 2 ID : 264330707698
Option 3 ID : 264330707695
Option 4 ID : 264330707696
Status : Answered
Chosen Option : 3

Q.10 Which of the following services allows users to buy and sell products online?

- Ans**
- 1. Instant messaging
 - 2. E-commerce
 - 3. Video conferencing
 - 4. Streaming

Question ID : 264330180807
Option 1 ID : 264330709193
Option 2 ID : 264330709192
Option 3 ID : 264330709194
Option 4 ID : 264330709191
Status : Answered
Chosen Option : 2