

Constable Executive Male and Female in Delhi Police Examination 2023

Roll Number	
Candidate Name	
Venue Name	
Exam Date	16/11/2023
Exam Time	3:00 PM - 4:30 PM
Subject	Constable Executive Male and Female in Delhi Police Examination 2023

Section : General Knowledge

Q.1 Which of the following was opened by Gour Mohan Addy in 1829?

- Ans
- 1. Hindi Seminary
 - 2. Anglo-India Seminary
 - 3. Anglo-Indian School
 - 4. Oriental Seminary

Question ID : 264330120154
Option 1 ID : 264330470874
Option 2 ID : 264330470872
Option 3 ID : 264330470871
Option 4 ID : 264330470873
Status : Not Answered
Chosen Option : --

Q.2 In which pair of states is Holi also celebrated as Dola Purnima?

- Ans
- 1. West Bengal and Odisha
 - 2. Rajasthan and Punjab
 - 3. Nagaland and Sikkim
 - 4. Maharashtra and Gujarat

Question ID : 264330111161
Option 1 ID : 264330436730
Option 2 ID : 264330436731
Option 3 ID : 264330436732
Option 4 ID : 264330436729
Status : Not Answered
Chosen Option : --

Q.3 Which political party was in power when Sardar Swaran Singh Committee made recommendations about Fundamental Duties?

- Ans
- 1. Indian National Congress
 - 2. Bharatiya Janata Party
 - 3. Janata Dal
 - 4. Communist Party of India

Question ID : 264330173480
Option 1 ID : 264330680399
Option 2 ID : 264330680400
Option 3 ID : 264330680401
Option 4 ID : 264330680402
Status : Answered
Chosen Option : 1

Q.4 Which Article of the Indian Constitution is related with promotion of co-operative societies?

- Ans
- 1. Article 31 B
 - 2. Article 51 A
 - 3. Article 43 B
 - 4. Article 39 A

Question ID : 264330180060
Option 1 ID : 264330706226
Option 2 ID : 264330706225
Option 3 ID : 264330706223
Option 4 ID : 264330706224
Status : Not Answered
Chosen Option : --

Q.5 The Indian government launched the 'Garib Kalyan Rojgar Abhiyaan' ('GKRA') on 20th June 2020 to provide work for how many days?

- Ans
- 1. 125 days
 - 2. 130 days
 - 3. 115 days
 - 4. 120 days

Question ID : 264330132755
Option 1 ID : 264330520117
Option 2 ID : 264330520118
Option 3 ID : 264330520115
Option 4 ID : 264330520116
Status : Answered
Chosen Option : 4

Q.6 In 2016, Yamini Krishnamurthy received the Padma Vibhushan for her contribution to which fields of classical dance?

- Ans
- 1. Bharatanatyam and Kathak
 - 2. Bharatanatyam and Manipuri
 - 3. Bharatanatyam and Odissi
 - 4. Bharatanatyam and Kuchipudi

Question ID : 264330111202
Option 1 ID : 264330436896
Option 2 ID : 264330436895
Option 3 ID : 264330436893
Option 4 ID : 264330436894
Status : Answered
Chosen Option : 4

Q.7 शतरंज में उपयोग होने वाले सफेद हाथियों (rooks) की संख्या _____ होती है।

- Ans
- 1. तीन
 - 2. एक
 - 3. दो
 - 4. चार

Question ID : 264330130639
Option 1 ID : 264330511669
Option 2 ID : 264330511667
Option 3 ID : 264330511668
Option 4 ID : 264330511670
Status : Answered
Chosen Option : 3

Q.8 As per Human Development Report 2021-22, what is the female Life Expectancy at birth in India?

- Ans
- 1. 63.9 years
 - 2. 68.9 years
 - 3. 73.9 years
 - 4. 65.9 years

Question ID : 264330179551
Option 1 ID : 264330704205
Option 2 ID : 264330704203
Option 3 ID : 264330704206
Option 4 ID : 264330704204
Status : Not Answered
Chosen Option : --

Q.9 जब लावा, भूमि में विकसित दरारें और विदरों से अपना रास्ता बनाता है, तो यह जमीन के लगभग लंबवत जम जाता है। यह दीवार जैसी संरचना को विकसित करने के लिए उसी स्थिति में ठंडा हो जाता है। इस संरचना को क्या कहा जाता है?

- Ans
- 1. लैकोलिथ (Lacolith)
 - 2. डाइक्स (Dykes)
 - 3. लापोलिथ (Lapolith)
 - 4. फैकोलिथ (Phacolith)

Question ID : 264330134904
Option 1 ID : 264330528554
Option 2 ID : 264330528552
Option 3 ID : 264330528551
Option 4 ID : 264330528553
Status : Answered
Chosen Option : 2

Q.10 Which of the following is NOT found in animal cells?

- Ans
- 1. Endoplasmic reticulum
 - 2. Mitochondria
 - 3. Plastid
 - 4. Golgi Complex

Question ID : 264330117604
Option 1 ID : 264330462444
Option 2 ID : 264330462441
Option 3 ID : 264330462442
Option 4 ID : 264330462443
Status : Answered
Chosen Option : 3

Q.11 Ustad Latafat Hussain Khan is associated with the _____.

- Ans
- 1. Patiala gharana
 - 2. Agra gharana
 - 3. Kirana gharana
 - 4. Gwalior gharana

Question ID : 264330116416
Option 1 ID : 264330457750
Option 2 ID : 264330457749
Option 3 ID : 264330457751
Option 4 ID : 264330457752
Status : Answered
Chosen Option : 4

Q.12 Which of the following Articles deals with the amendment of the Indian Constitution?

- Ans
- 1. Article 360
 - 2. Article 352
 - 3. Article 356
 - 4. Article 368

Question ID : 264330114135
Option 1 ID : 264330448627
Option 2 ID : 264330448625
Option 3 ID : 264330448626
Option 4 ID : 264330448628
Status : Answered
Chosen Option : 1

Q.13 Which canal has a head regulator capacity of 1133 cumecs (40000 cusecs) and a length of 532 km for which it is considered the world's largest lined irrigation canal?

- Ans
- 1. Trivandrum-Shoranur canal
 - 2. Kalingarayan Canal
 - 3. Cumbarjua Canal
 - 4. Narmada Main Canal

Question ID : 264330113524
Option 1 ID : 264330446181
Option 2 ID : 264330446184
Option 3 ID : 264330446183
Option 4 ID : 264330446182
Status : Not Answered
Chosen Option : --

Q.14 Which of the following statements is NOT true about the two-sector model?

- Ans
- 1. There is no foreign sector
 - 2. The government sector plays an important role.
 - 3. The economy is considered to be closed.
 - 4. Firms are the only producing sector in the economy.

Question ID : 264330120879
Option 1 ID : 264330473733
Option 2 ID : 264330473734
Option 3 ID : 264330473731
Option 4 ID : 264330473732
Status : Not Answered
Chosen Option : --

Q.15 Which concept is related to the disposal of the equity of public sector units in the market for covering the fiscal deficit of the central government?

- Ans
- 1. Liberalisation
 - 2. Denationalisation
 - 3. Disinvestment
 - 4. Globalisation

Question ID : 264330109137
Option 1 ID : 264330428827
Option 2 ID : 264330428826
Option 3 ID : 264330428825
Option 4 ID : 264330428828
Status : Answered
Chosen Option : 4

Q.16 Article 51 of Directive Principles of State Policy enumerates which of the following?

- Ans 1. Promotion of international peace and security
 2. Separation of judiciary from executive
 3. Uniform civil code for the citizens
 4. Organisation of agricultural and animal husbandry

Question ID : 264330110586
Option 1 ID : 264330434623
Option 2 ID : 264330434622
Option 3 ID : 264330434624
Option 4 ID : 264330434621
Status : Not Answered
Chosen Option : --

Q.17 Which species plays a keystone role in supporting insectivore populations with a year-round available food resource?

- Ans 1. Cycas species
 2. Ficus species
 3. Meliaceae species
 4. Ziziphus species

Question ID : 264330130998
Option 1 ID : 264330513103
Option 2 ID : 264330513105
Option 3 ID : 264330513106
Option 4 ID : 264330513104
Status : Not Answered
Chosen Option : --

Q.18 Which produce was available as a surplus marketed by the farmers in the market during the Green Revolution?

- Ans 1. Oil seeds
 2. Wheat and jowar
 3. Wheat and rice
 4. Rice and maize

Question ID : 264330174150
Option 1 ID : 264330683039
Option 2 ID : 264330683041
Option 3 ID : 264330683042
Option 4 ID : 264330683040
Status : Answered
Chosen Option : 3

Q.19 Sunayana Hazarilal won the Padma Shri for which form of classical dance?

- Ans 1. Kathakali
 2. Odissi
 3. Kathak
 4. Bharatanatyam

Question ID : 26433074886
Option 1 ID : 264330293632
Option 2 ID : 264330293633
Option 3 ID : 264330293634
Option 4 ID : 264330293635
Status : Answered
Chosen Option : 3

Q.20 In which state of India was the first train introduced in the year 1853?

- Ans
- 1. Rajasthan
 - 2. West Bengal
 - 3. Karnataka
 - 4. Maharashtra

Question ID : 264330178717
Option 1 ID : 264330700895
Option 2 ID : 264330700896
Option 3 ID : 264330700897
Option 4 ID : 264330700898
Status : Answered
Chosen Option : 4

Q.21 Who issued the silver rupee, which remained a standard coin for centuries after the ruler?

- Ans
- 1. Babur
 - 2. Sher Shah Suri
 - 3. Humayun
 - 4. Akbar

Question ID : 264330109026
Option 1 ID : 264330428381
Option 2 ID : 264330428383
Option 3 ID : 264330428382
Option 4 ID : 264330428384
Status : Answered
Chosen Option : 2

Q.22 Seema switched on an electric circuit and went away to drink some water. She came back after 2 minutes and noticed that the circuit had 2.5 A of current flowing through it. The net charge that had flown through the circuit is:

- Ans
- 1. 1.25 C
 - 2. 5 C
 - 3. 300 C
 - 4. 0.0833 C

Question ID : 264330177008
Option 1 ID : 264330694229
Option 2 ID : 264330694227
Option 3 ID : 264330694230
Option 4 ID : 264330694228
Status : Not Answered
Chosen Option : --

Q.23 In which year was Volleyball Federation of India established?

- Ans
- 1. 1948
 - 2. 1949
 - 3. 1950
 - 4. 1951

Question ID : 264330110371
Option 1 ID : 264330433761
Option 2 ID : 264330433762
Option 3 ID : 264330433763
Option 4 ID : 264330433764
Status : Answered
Chosen Option : 4

Q.24 Identify the artist who is NOT related to the Carnatic music family.

- Ans
- 1. TS Vinayakram
 - 2. Aruna Sairam
 - 3. Begum Akhtar
 - 4. MS Subbulakshmi

Question ID : 264330111186
Option 1 ID : 264330436830
Option 2 ID : 264330436832
Option 3 ID : 264330436831
Option 4 ID : 264330436829
Status : Answered
Chosen Option : 3

Q.25 'Imperfect' is the autobiography of which Indian cricketer?

- Ans
- 1. Sanjay Manjrekar
 - 2. Kapil Dev
 - 3. Sunil Gavaskar
 - 4. Ravi Shastri

Question ID : 26433092395
Option 1 ID : 264330362870
Option 2 ID : 264330362872
Option 3 ID : 264330362871
Option 4 ID : 264330362869
Status : Answered
Chosen Option : 3

Q.26 Who among the following was re-elected in 1938 as the president of the Indian National Congress session for 1939?

- Ans
- 1. Satyendra Prasanna Sinha
 - 2. Subhash Chandra Bose
 - 3. Lal Mohan Ghosh
 - 4. Pattabhi Sittaramayya

Question ID : 264330120428
Option 1 ID : 264330471963
Option 2 ID : 264330471964
Option 3 ID : 264330471966
Option 4 ID : 264330471965
Status : Answered
Chosen Option : 2

Q.27 Which of the following were the two major internal land routes through which trade and commerce took place in the post-Mauryan period?

- Ans
- 1. Pashchimpatha and Uttarapatha
 - 2. Uttarapatha and Dakshinapatha
 - 3. Dakshinapatha and Purvapatha
 - 4. Dakshinapatha and Pashchimpatha

Question ID : 264330114818
Option 1 ID : 264330451358
Option 2 ID : 264330451359
Option 3 ID : 264330451357
Option 4 ID : 264330451360
Status : Not Answered
Chosen Option : --

Q.28 Tariffs and quotas in the trade issues are used to _____.

- Ans 1. protect domestic companies
 2. promote free trade between countries
 3. protect only the public sector
 4. protect only the private sector

Question ID : 264330111753
Option 1 ID : 264330439099
Option 2 ID : 264330439100
Option 3 ID : 264330439097
Option 4 ID : 264330439098
Status : Answered
Chosen Option : 3

Q.29 When is the festival of Ram Navami celebrated in India?

- Ans 1. Ninth day of Ashwin month
 2. Ninth day of Pausha month
 3. Ninth day of Magha month
 4. Ninth day of Chaitra month

Question ID : 264330132972
Option 1 ID : 264330520947
Option 2 ID : 264330520950
Option 3 ID : 264330520949
Option 4 ID : 264330520948
Status : Answered
Chosen Option : 4

Q.30 Which Viceroy of India took initiative in creating local government bodies in India?

- Ans 1. Lord Harding II
 2. Lord Mayo
 3. Lord Rippon
 4. Lord Minto

Question ID : 264330168222
Option 1 ID : 264330659765
Option 2 ID : 264330659764
Option 3 ID : 264330659766
Option 4 ID : 264330659763
Status : Answered
Chosen Option : 3

Q.31 The originator of Buddhism, Gautam Buddha, was the prince of which of the following republican states during the Mahajanapada period in Ancient India?

- Ans 1. Kamboja
 2. Shakya
 3. Kuru
 4. Vajji

Question ID : 264330120237
Option 1 ID : 264330471204
Option 2 ID : 264330471206
Option 3 ID : 264330471203
Option 4 ID : 264330471205
Status : Answered
Chosen Option : 2

Q.32 Which of the following temples is built in the hoyasala architectural style?

- Ans 1. Kesava Temple
 2. Ladkhan Temple
 3. Konark temple
 4. Khajuraho Temple

Question ID : 264330106256
Option 1 ID : 264330417326
Option 2 ID : 264330417328
Option 3 ID : 264330417325
Option 4 ID : 264330417327
Status : Answered
Chosen Option : 3

Q.33 From which of the following states/union territories does the Yamuna River originate?

- Ans 1. Uttar Pradesh
 2. Uttarakhand
 3. Jammu and Kashmir
 4. Himachal Pradesh

Question ID : 264330178009
Option 1 ID : 264330698113
Option 2 ID : 264330698114
Option 3 ID : 264330698112
Option 4 ID : 264330698111
Status : Answered
Chosen Option : 3

Q.34 Which of the following methods can be used for liberalisation?

- Ans 1. Increase in taxes
 2. Abolishing licensing requirement in most industries
 3. Making procedures for imports and exports tough
 4. Restrictions in fixing the prices of goods and services

Question ID : 264330116551
Option 1 ID : 264330458290
Option 2 ID : 264330458291
Option 3 ID : 264330458292
Option 4 ID : 264330458289
Status : Answered
Chosen Option : 2

Q.35 Playing It My Way: My Autobiography, is the book written by whom among the following cricketers?

- Ans 1. Kapil Dev
 2. Rahul Dravid
 3. Virat Kohli
 4. Sachin Tendulkar

Question ID : 264330112860
Option 1 ID : 264330443527
Option 2 ID : 264330443526
Option 3 ID : 264330443525
Option 4 ID : 264330443528
Status : Answered
Chosen Option : 4

Q.36 Dr. Atmaram Pandurang and Justice Ranade founded the _____ in Maharashtra espousing principles of enlightenment based on Vedas.

- Ans 1. Prarthana Samaj
 2. Bharat Dharma Mahamandal
 3. Brahmo Samaj
 4. Arya Samaj

Question ID : 264330112403
Option 1 ID : 264330441698
Option 2 ID : 264330441697
Option 3 ID : 264330441699
Option 4 ID : 264330441700
Status : Answered
Chosen Option : 1

Q.37 Which Indian dance form has the Mahari dance style?

- Ans 1. Kathak
 2. Kathakali
 3. Odissi
 4. Mohiniyattam

Question ID : 264330110406
Option 1 ID : 264330433904
Option 2 ID : 264330433901
Option 3 ID : 264330433902
Option 4 ID : 264330433903
Status : Not Answered
Chosen Option : --

Q.38 Which Article allows the Council of Ministers to aid and advise the President?

- Ans 1. Article 70
 2. Article 52
 3. Article 61
 4. Article 74

Question ID : 264330166140
Option 1 ID : 264330651629
Option 2 ID : 264330651627
Option 3 ID : 264330651628
Option 4 ID : 264330651630
Status : Answered
Chosen Option : 1

Q.39 The Brahmo Samaj, which promotes the principal of social equality, was founded by _____.

- Ans 1. Raja Ram Mohan Roy
 2. Debendranath Tagore
 3. Swami Vivekananda
 4. Swami Dayanand

Question ID : 264330112405
Option 1 ID : 264330441705
Option 2 ID : 264330441707
Option 3 ID : 264330441706
Option 4 ID : 264330441708
Status : Answered
Chosen Option : 1

Q.40 Which portal was launched by SIDBI to improve accessibility of credit and handholding services to MSMEs?

- Ans
- 1. Samadhan
 - 2. Udyami Mitra
 - 3. MSME Champions
 - 4. Sampark

Question ID : 264330111592
Option 1 ID : 264330438453
Option 2 ID : 264330438455
Option 3 ID : 264330438456
Option 4 ID : 264330438454
Status : Answered
Chosen Option : 2

Q.41 In which year was the Malegam Committee appointed to study issues and concerns of the Micro Finance Sector?

- Ans
- 1. 2010
 - 2. 2018
 - 3. 2015
 - 4. 2005

Question ID : 264330141457
Option 1 ID : 264330554164
Option 2 ID : 264330554166
Option 3 ID : 264330554165
Option 4 ID : 264330554163
Status : Not Answered
Chosen Option : --

Q.42 Identify the southernmost major port of India.

- Ans
- 1. Mangaluru
 - 2. Kochi
 - 3. Tuticorin
 - 4. Chennai

Question ID : 264330120318
Option 1 ID : 264330471523
Option 2 ID : 264330471525
Option 3 ID : 264330471526
Option 4 ID : 264330471524
Status : Not Answered
Chosen Option : --

Q.43 _____ has a curving shape, a feature found in Nagara architecture.

- Ans
- 1. Shikhara
 - 2. Antarala
 - 3. Mandapa
 - 4. Kutina

Question ID : 264330106254
Option 1 ID : 264330417317
Option 2 ID : 264330417320
Option 3 ID : 264330417319
Option 4 ID : 264330417318
Status : Not Answered
Chosen Option : --

Q.44 The Hunta dance of Jharkhand is associated with which tribal community?

- Ans 1. Oraon
 2. Munda
 3. Santhal
 4. Kol

Question ID : 264330141328
Option 1 ID : 264330553649
Option 2 ID : 264330553647
Option 3 ID : 264330553648
Option 4 ID : 264330553650
Status : Not Answered
Chosen Option : --

Q.45 Who was the author of the famous work 'Shishupala Vadha'?

- Ans 1. Jayadeva
 2. Bhatti
 3. Bharavi
 4. Magha

Question ID : 264330120284
Option 1 ID : 264330471390
Option 2 ID : 264330471388
Option 3 ID : 264330471387
Option 4 ID : 264330471389
Status : Answered
Chosen Option : 3

Q.46 Which of the following countries won the highest number of Kabaddi World Cups, as of 2022?

- Ans 1. Bangladesh
 2. India
 3. Pakistan
 4. Iran

Question ID : 264330118453
Option 1 ID : 264330465213
Option 2 ID : 264330465216
Option 3 ID : 264330465214
Option 4 ID : 264330465215
Status : Answered
Chosen Option : 2

Q.47 The Annapurna Scheme was launched by the Government of India in the year _____ for providing food security.

- Ans 1. 2002
 2. 2000
 3. 2001
 4. 2003

Question ID : 264330120342
Option 1 ID : 264330471620
Option 2 ID : 264330471622
Option 3 ID : 264330471621
Option 4 ID : 264330471619
Status : Not Answered
Chosen Option : --

Q.48 In which of the following years was the first edition of the Indian Super League (ISL) held?

- Ans
- 1. 2016
 - 2. 2013
 - 3. 2014
 - 4. 2015

Question ID : 264330118463
Option 1 ID : 264330465256
Option 2 ID : 264330465253
Option 3 ID : 264330465254
Option 4 ID : 264330465255
Status : Answered
Chosen Option : 4

Q.49 Who described India as a 'Quasi-Federation'?

- Ans
- 1. KC Wheare
 - 2. KM Munshi
 - 3. Harold Joseph Laski
 - 4. Ivor Jennings

Question ID : 264330110823
Option 1 ID : 264330435570
Option 2 ID : 264330435572
Option 3 ID : 264330435571
Option 4 ID : 264330435569
Status : Answered
Chosen Option : 2

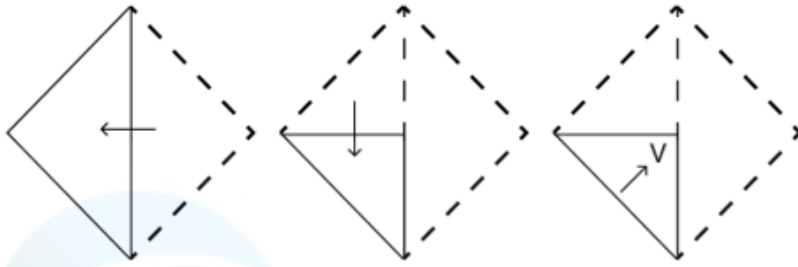
Q.50 Which of the given statements about Vitamin A are correct?
Statement A: Beta-carotene is a precursor to Vitamin A.
Statement B: Leafy green vegetables and yellow fruits are good sources of Vitamin A.

- Ans
- 1. Only Statement B
 - 2. Only Statement A
 - 3. Both Statements A and B
 - 4. Neither Statement A nor B

Question ID : 264330138002
Option 1 ID : 264330540618
Option 2 ID : 264330540616
Option 3 ID : 264330540615
Option 4 ID : 264330540617
Status : Not Answered
Chosen Option : --

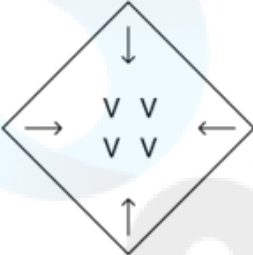
Section : Reasoning

Q.1 A square sheet of paper is folded along the dotted line successively along the directions shown and is then punched in the last. How would the paper look when unfolded?

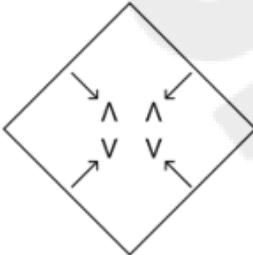


Ans

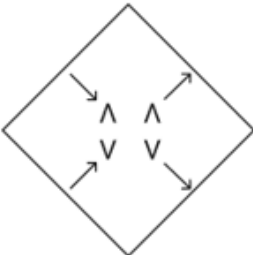
✗ 1.



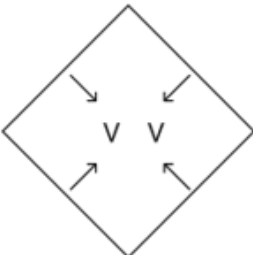
✓ 2.



✗ 3.



✗ 4.



Question ID : 264330172434

Option 1 ID : 264330676290

Option 2 ID : 264330676287

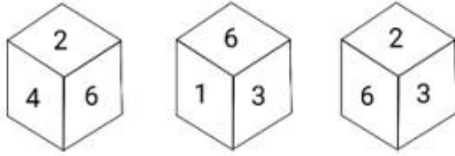
Option 3 ID : 264330676288

Option 4 ID : 264330676289

Status : Answered

Chosen Option : 2

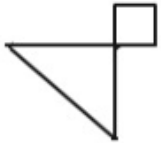
Q.2 A cube (dice) has six different numbers drawn over its six faces. Three different positions of this cube are shown in the given figure. Which number is on the face opposite to '1'?



- Ans
- 1. 4
 - 2. 2
 - 3. 6
 - 4. 3

Question ID : 264330113150
 Option 1 ID : 264330444688
 Option 2 ID : 264330444686
 Option 3 ID : 264330444685
 Option 4 ID : 264330444687
 Status : Answered
 Chosen Option : 2

Q.3 Select the option in which the given figure is embedded (rotation is NOT allowed).

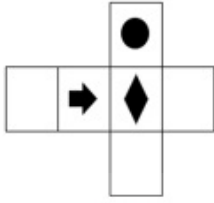


Ans

- 1.
- 2.
- 3.
- 4.

Question ID : 264330106328
 Option 1 ID : 264330417614
 Option 2 ID : 264330417615
 Option 3 ID : 264330417616
 Option 4 ID : 264330417613
 Status : Answered
 Chosen Option : 4

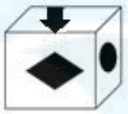
Q.4 Choose the dice from the given options that is similar to the dice formed from the given sheet of paper (X).



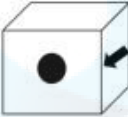
(X)

Ans

✓ 1.



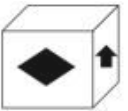
✗ 2.



✗ 3.



✗ 4.



Question ID : 264330111297

Option 1 ID : 264330437273

Option 2 ID : 264330437275

Option 3 ID : 264330437276

Option 4 ID : 264330437274

Status : Answered

Chosen Option : 2

Q.5 Which of the following letter clusters will replace the question mark (?) in the given series to make it logically complete?
DSB, GVY, JYV, MBS, ?

Ans ✓ 1. PEP

✗ 2. PDP

✗ 3. PEO

✗ 4. PEQ

Question ID : 264330102225

Option 1 ID : 264330401367

Option 2 ID : 264330401368

Option 3 ID : 264330401366

Option 4 ID : 264330401365

Status : Answered

Chosen Option : 1

Q.6 Six numbers, 1, 2, 3, 4, 5 and 6, are written on the different faces of a dice. Three different positions of the same dice are shown (Figures 1-3). Find the number on the face opposite to the face showing '4'.

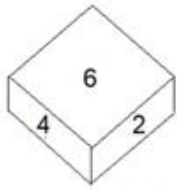


Figure 1

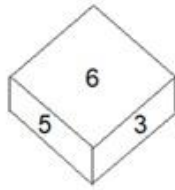


Figure 2

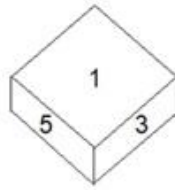


Figure 3

- Ans
- 1. 1
 - 2. 2
 - 3. 3
 - 4. 5

Question ID : 264330112582

Option 1 ID : 264330442415

Option 2 ID : 264330442413

Option 3 ID : 264330442416

Option 4 ID : 264330442414

Status : Answered

Chosen Option : 1

Q.7 Select the set in which the numbers are related in the same way as are the numbers of the following sets.

(NOTE : Operations should be performed on the whole numbers, without breaking down the numbers into its constituent digits. E.g. 13 – Operations on 13 such as adding /deleting /multiplying etc. to 13 can be performed. Breaking down 13 into 1 and 3 and then performing mathematical operations on 1 and 3 is not allowed.)

(33, 11, 66)

(45, 15, 90)

- Ans
- 1. (51, 19, 102)
 - 2. (51, 17, 104)
 - 3. (51, 17, 102)
 - 4. (53, 19, 102)

Question ID : 264330175038

Option 1 ID : 264330686530

Option 2 ID : 264330686527

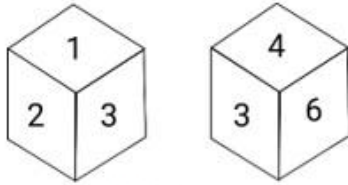
Option 3 ID : 264330686528

Option 4 ID : 264330686529

Status : Answered

Chosen Option : 3

Q.8 Six numbers, 1, 2, 3, 4, 5 and 6, are written on the different faces of a dice. Two positions of this dice are shown in the given figure. Find the number on the face opposite to 5.



- Ans 1. 3
 2. 1
 3. 2
 4. 6

Question ID : 264330106168
 Option 1 ID : 264330416974
 Option 2 ID : 264330416973
 Option 3 ID : 264330416976
 Option 4 ID : 264330416975
 Status : Answered
 Chosen Option : 1

Q.9 Select the option that is related to the fifth letter-cluster in the same way as the second letter-cluster is related to the first letter-cluster and the fourth letter-cluster is related to the third letter-cluster.
 LINK : NKPM :: PART : RCTV :: PATH : ?

- Ans 1. RCWJ
 2. RBVK
 3. NCVK
 4. RCVJ

Question ID : 26433076462
 Option 1 ID : 264330299915
 Option 2 ID : 264330299912
 Option 3 ID : 264330299914
 Option 4 ID : 264330299913
 Status : Answered
 Chosen Option : 4

Q.10 Select the correct combination of mathematical signs that can sequentially replace the * signs and balance the given expression.
 $72 * 5 * 7 * 64 * 8 * 45$

- Ans 1. +, x, -, +, =
 2. +, +, x, -, =
 3. -, +, +, x, =
 4. -, x, +, +, =

Question ID : 26433074789
 Option 1 ID : 264330293246
 Option 2 ID : 264330293244
 Option 3 ID : 264330293245
 Option 4 ID : 264330293247
 Status : Answered
 Chosen Option : 4

Q.11 Select the number from the given options that can replace the question mark (?) in the following series.
24, 21, 16, 13, 8, ?

- Ans 1. 2
 2. 5
 3. 7
 4. 3

Question ID : 264330106382
 Option 1 ID : 264330417831
 Option 2 ID : 264330417832
 Option 3 ID : 264330417829
 Option 4 ID : 264330417830
 Status : Answered
 Chosen Option : 2

Q.12 Which figure should replace the question mark (?) in the following series to continue the pattern?

△	3	3	S	B	△	△	U	
	B	U	U	H	S	9	9	3
S	H	△	B	U	3	B	S	?

Ans

1.

S	B
	U
9	△
2.

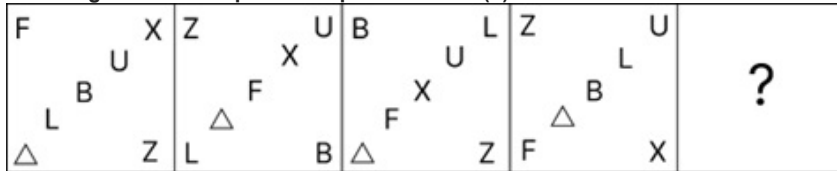
S	B
	△
U	9
3.

9	B
	S
U	△
4.

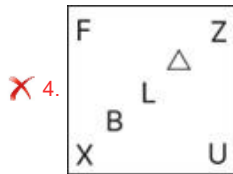
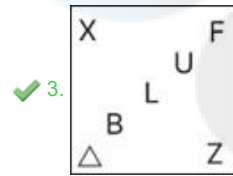
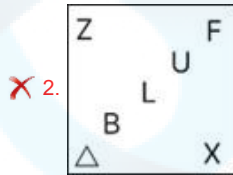
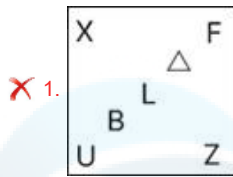
R	B
	U
9	3

Question ID : 264330129628
 Option 1 ID : 264330507879
 Option 2 ID : 264330507878
 Option 3 ID : 264330507880
 Option 4 ID : 264330507881
 Status : Answered
 Chosen Option : 1

Q.13 Which figure should replace the question mark (?) if the series were to be continued?



Ans



Question ID : 264330130813

Option 1 ID : 264330512364

Option 2 ID : 264330512366

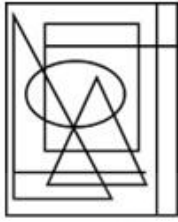
Option 3 ID : 264330512365

Option 4 ID : 264330512363

Status : Answered

Chosen Option : 3

Q.14 Select the option figure which is embedded in the given figure as its part (rotation is NOT allowed).



Ans

✗ 1.



✓ 2.



✗ 3.



✗ 4.



Question ID : 264330116993

Option 1 ID : 264330460055

Option 2 ID : 264330460054

Option 3 ID : 264330460053

Option 4 ID : 264330460056

Status : Answered

Chosen Option : 2

Q.15 H, I, J, K and L are five people sitting in a straight line facing North. I sits exactly between J and K. K sits to the immediate left of H. L sits at the extreme right end. Who sits at the extreme left end?

Ans ✓ 1. J

✗ 2. I

✗ 3. H

✗ 4. K

Question ID : 26433090118

Option 1 ID : 264330353950

Option 2 ID : 264330353952

Option 3 ID : 264330353951

Option 4 ID : 264330353949

Status : Answered

Chosen Option : 1

Q.16 Select the option that is related to the fourth number in the same way as the first number is related to the second number and the fifth number is related to the sixth number.

7586 : 8943 :: ? : 6749 :: 8405 : 9762

Ans 1. 5412

2. 5392

3. 5586

4. 6321

Question ID : 26433052022

Option 1 ID : 264330203393

Option 2 ID : 264330203391

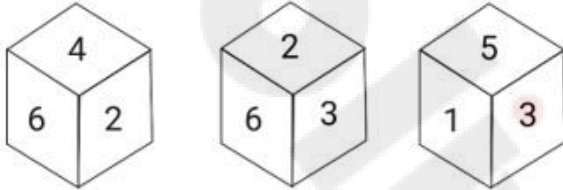
Option 3 ID : 264330203392

Option 4 ID : 264330203390

Status : Not Answered

Chosen Option : --

Q.17 Six numbers, 1, 2, 3, 4, 5 and 6 are written on different faces of a dice. Three positions of this dice are shown in here. Find the number on the face opposite 6.



Ans 1. 5

2. 4

3. 3

4. 1

Question ID : 264330106395

Option 1 ID : 264330417881

Option 2 ID : 264330417882

Option 3 ID : 264330417883

Option 4 ID : 264330417884

Status : Answered

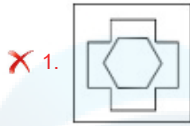
Chosen Option : 1

Q.18 Given below is a series of figures – A, B, C and D which follow a particular pattern. Which of the given option figures should come in place of E to continue the series?



(A) (B) (C) (D) (E)

Ans



Question ID : 264330111292

Option 1 ID : 264330437256

Option 2 ID : 264330437253

Option 3 ID : 264330437254

Option 4 ID : 264330437255

Status : Answered

Chosen Option : 2

Q.19 In a certain code language, 'live long' is coded as 'east west', 'long pole' is coded as 'east south', 'star wars' is coded as 'ward four', and 'pole star' is coded as 'south ward'. What is the code for the word 'wars'?

Ans ✗ 1. long

✗ 2. ward

✓ 3. four

✗ 4. pole

Question ID : 26433082864

Option 1 ID : 264330325290

Option 2 ID : 264330325289

Option 3 ID : 264330325291

Option 4 ID : 264330325292

Status : Answered

Chosen Option : 3

Q.20 Two statements are given followed by two conclusions numbered I and II. Assuming the statements to be true, even if they seem to be at variance from commonly known facts, decide which of the conclusions logically follow(s) from the statements.

Statements:

Some Witches are Humans.

All Humans are Cold.

Conclusions:

I. All Witches are Cold.

II. Some Witches are Cold.

Ans 1. Neither conclusion I nor II follows.

2. Both conclusions I and II follow.

3. Only conclusion I follows.

4. Only conclusion II follows.

Question ID : 26433076598

Option 1 ID : 264330300459

Option 2 ID : 264330300458

Option 3 ID : 264330300456

Option 4 ID : 264330300457

Status : Answered

Chosen Option : 4

Q.21 Select the correct mirror image of the given figure when the mirror is placed at PQ as shown below.

Ans

1. #!@#W\$^&+* _

2. #!@#M\$^&*+ _

3. #!@#W\$^&*+ _

4. #!@#W^&\$*+ _

Question ID : 26433082031

Option 1 ID : 264330321958

Option 2 ID : 264330321960

Option 3 ID : 264330321957

Option 4 ID : 264330321959

Status : Answered

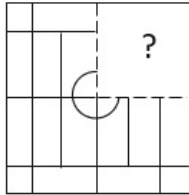
Chosen Option : 3

Q.22 Select the correct combination of mathematical signs that can sequentially replace the * signs and balance the given expression.
 $96 * 12 * 15 * 7 * 36 * 77$

- Ans
- 1. -, +, +, x, =
 - 2. -, x, +, +, =
 - 3. +, +, x, -, =
 - 4. +, x, -, +, =

Question ID : 26433074790
 Option 1 ID : 264330293249
 Option 2 ID : 264330293251
 Option 3 ID : 264330293248
 Option 4 ID : 264330293250
 Status : Answered
 Chosen Option : 3

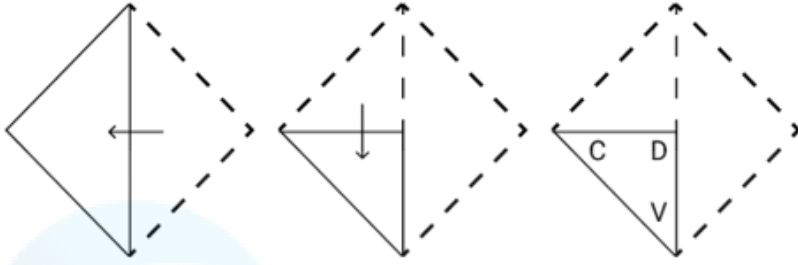
Q.23 Select the option figure that will replace the question mark (?) in the figure given below to complete the pattern.



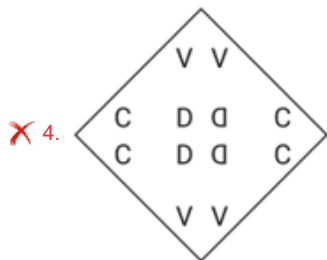
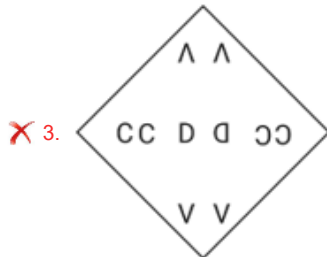
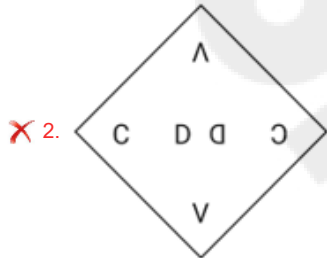
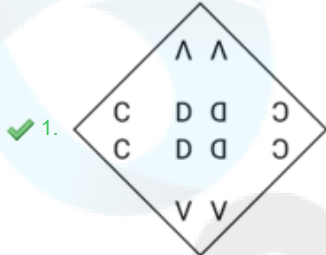
- Ans
- 1.
 - 2.
 - 3.
 - 4.

Question ID : 26433080832
 Option 1 ID : 264330317261
 Option 2 ID : 264330317263
 Option 3 ID : 264330317264
 Option 4 ID : 264330317262
 Status : Answered
 Chosen Option : 3

Q.24 A square sheet of paper is folded along the dotted line successively along the directions shown and is then punched in the last. How would the paper look when unfolded?



Ans



Question ID : 264330172437

Option 1 ID : 264330676301

Option 2 ID : 264330676299

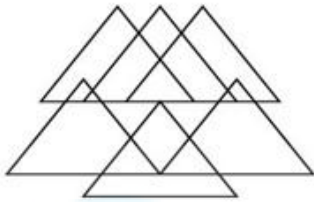
Option 3 ID : 264330676302

Option 4 ID : 264330676300

Status : Answered

Chosen Option : 1

Q.25 How many triangles are there in the given figure?



- Ans
- 1. 19
 - 2. 12
 - 3. 15
 - 4. 10

Question ID : 26433091704
Option 1 ID : 264330360184
Option 2 ID : 264330360182
Option 3 ID : 264330360183
Option 4 ID : 264330360181
Status : Answered
Chosen Option : 3

Section : Numerical Ability

Q.1 A dishonest financier claims to be lending money at simple interest, but he includes the interest every four months for calculating the principal. If he is charging an interest of 3%, the effective rate of interest becomes:

- Ans
- 1. 3.01%
 - 2. 2.01%
 - 3. 3.03%
 - 4. 2.06%

Question ID : 264330120039
Option 1 ID : 264330470412
Option 2 ID : 264330470414
Option 3 ID : 264330470411
Option 4 ID : 264330470413
Status : Not Answered
Chosen Option : --

Q.2 If the average of 6, 7, 12, $(x - 1)$ and 10 is 10, then the value of x is:

- Ans
- 1. 14
 - 2. 12
 - 3. 15
 - 4. 16

Question ID : 264330129386
Option 1 ID : 264330506912
Option 2 ID : 264330506913
Option 3 ID : 264330506910
Option 4 ID : 264330506911
Status : Answered
Chosen Option : 4

Q.3 If $a : b = 5 : 3$, then $(a^3 - b^3) : (a^3 + b^3) = ?$

- Ans
- 1. 11 : 25
 - 2. 49 : 16
 - 3. 49 : 76
 - 4. 25 : 76

Question ID : 264330119336
Option 1 ID : 264330467632
Option 2 ID : 264330467633
Option 3 ID : 264330467631
Option 4 ID : 264330467634
Status : Answered
Chosen Option : 3

Q.4 Let a and b be two numbers such that a and $b - a$ are co-primes and b and $b + a$ are co-primes, respectively. Which of the followings is true?

- Ans
- 1. a and b are not co-prime
 - 2. b is prime
 - 3. a is prime
 - 4. a and b are co-prime

Question ID : 264330112064
Option 1 ID : 264330440344
Option 2 ID : 264330440343
Option 3 ID : 264330440341
Option 4 ID : 264330440342
Status : Answered
Chosen Option : 1

Q.5 P invested a certain amount in shares. The shares rose successively by 20% and 30% on two consecutive days and fell by 25% and 11% in the next two days. What is the percentage increase or decrease in the value of the shares in four days?

- Ans
- 1. Increase of 3.62%
 - 2. Increase of 4.13%
 - 3. Decrease of 4.13%
 - 4. Decrease of 3.62%

Question ID : 264330177577
Option 1 ID : 264330696426
Option 2 ID : 264330696424
Option 3 ID : 264330696423
Option 4 ID : 264330696425
Status : Not Answered
Chosen Option : --

Q.6 What is the number between 2800 and 3000, which when divided by 24, 32 and 45, leaves no remainder?

- Ans
- 1. 2960
 - 2. 2920
 - 3. 2840
 - 4. 2880

Question ID : 264330103650
Option 1 ID : 264330406908
Option 2 ID : 264330406905
Option 3 ID : 264330406907
Option 4 ID : 264330406906
Status : Answered
Chosen Option : 4

Q.7 Let $x = \frac{6}{7}$ and let $y = \frac{1}{x}$. y is _____ more than x .

- Ans
- 1. 36.11%
 - 2. 36.66%
 - 3. 33.66%
 - 4. 33.33%

Question ID : 264330112071
Option 1 ID : 264330440370
Option 2 ID : 264330440372
Option 3 ID : 264330440371
Option 4 ID : 264330440369
Status : Not Answered
Chosen Option : --

Q.8 If Anand can do a piece of work in 9 days and Vinod can complete the same work in 6 days, then in how many days will both of them complete it together?

- Ans
- 1. $\frac{1}{96}$ days
 - 2. $\frac{1}{6}$ days
 - 3. $\frac{18}{5}$ days
 - 4. $\frac{96}{5}$ days

Question ID : 264330104365
Option 1 ID : 264330409762
Option 2 ID : 264330409761
Option 3 ID : 264330409763
Option 4 ID : 264330409764
Status : Answered
Chosen Option : 3

Q.9 Vishy needs to paint the surfaces of three different spherical balls, having radii of 30 cm, 40 cm, and 50 cm, respectively. If the cost of paint needed to paint $\pi \text{ cm}^2$ is given as ₹0.60, what will be the total cost (in ₹) of the quantity of paint required to paint the surfaces of all the three balls mentioned above?

- Ans
- 1. 11700
 - 2. 12000
 - 3. 11400
 - 4. 12600

Question ID : 264330112560
Option 1 ID : 264330442326
Option 2 ID : 264330442327
Option 3 ID : 264330442328
Option 4 ID : 264330442325
Status : Answered
Chosen Option : 4

Q.10 Simplify the following.

$$\sqrt{\frac{0.009 \times 0.025 \times 0.016 \times 0.08}{0.002 \times 0.0008 \times 0.0002}}$$

- Ans
- 1. 16
 - 2. 18
 - 3. 72
 - 4. 30

Question ID : 264330118120
Option 1 ID : 264330464295
Option 2 ID : 264330464296
Option 3 ID : 264330464298
Option 4 ID : 264330464297
Status : Not Answered
Chosen Option : --

Q.11 The marked price of an item is $\frac{9}{8}$ of the cost price. How much percentage discount should be offered to get a profit of 3%?

- Ans
- 1. 5.44%
 - 2. 7.44%
 - 3. 8.44%
 - 4. 6.44%

Question ID : 264330117923
Option 1 ID : 264330463507
Option 2 ID : 264330463509
Option 3 ID : 264330463508
Option 4 ID : 264330463510
Status : Not Answered
Chosen Option : --

Q.12 If the circumference of the great circle of a hemisphere is 9π cm, then find the total surface area of the hemisphere?

- Ans
- 1. 54.85π cm²
 - 2. 60.75π cm²
 - 3. 62.35π cm²
 - 4. 50.65π cm²

Question ID : 264330117944
Option 1 ID : 264330463593
Option 2 ID : 264330463592
Option 3 ID : 264330463594
Option 4 ID : 264330463591
Status : Not Answered
Chosen Option : --

Q.13 The difference between the compound interest and the simple interest on ₹80,000 at the same rate of interest per annum for 2 years is ₹98. What is the rate of interest per annum?

- Ans
- 1. $7\frac{1}{2}\%$
 - 2. $5\frac{1}{2}\%$
 - 3. $2\frac{1}{2}\%$
 - 4. $3\frac{1}{2}\%$

Question ID : 264330104528
Option 1 ID : 264330410416
Option 2 ID : 264330410414
Option 3 ID : 264330410413
Option 4 ID : 264330410415
Status : Not Answered
Chosen Option : --

Q.14 A machine is sold for ₹4,800 at a gain of 20%. What would have been the gain or loss percentage if it had been sold for ₹4,500?

- Ans
- 1. 25% gain
 - 2. 25% loss
 - 3. 12.5% gain
 - 4. 12.5% loss

Question ID : 264330104245
Option 1 ID : 264330409284
Option 2 ID : 264330409282
Option 3 ID : 264330409283
Option 4 ID : 264330409281
Status : Answered
Chosen Option : 3

Q.15 A train covers a distance of 54 km from station A to station G in an hour via stations B, C, D, E and F. On each station, the train stops for 72 seconds. What is the speed of the train in km/h?

- Ans
- 1. 64
 - 2. 62
 - 3. 58
 - 4. 60

Question ID : 264330112110
Option 1 ID : 264330440527
Option 2 ID : 264330440526
Option 3 ID : 264330440528
Option 4 ID : 264330440525
Status : Answered
Chosen Option : 4

Section : Computer Proficiency

Q.1 Which of the following options can be used when we need to retype the same text as it reduces time and effort in MS Word 365?

- Ans
- 1. Replace
 - 2. Find
 - 3. Copy
 - 4. Cut

Question ID : 264330180447
Option 1 ID : 264330707758
Option 2 ID : 264330707757
Option 3 ID : 264330707756
Option 4 ID : 264330707755
Status : Answered
Chosen Option : 3

Q.2 In MS Excel 365, which alignment option in Microsoft Excel is used to align the text to both the left and right sides of the cell, creating a neat and justified appearance?

- Ans
- 1. Right Align
 - 2. Justify
 - 3. Centre Align
 - 4. Left Align

Question ID : 264330173311
Option 1 ID : 264330679724
Option 2 ID : 264330679726
Option 3 ID : 264330679725
Option 4 ID : 264330679723
Status : Answered
Chosen Option : 3

Q.3 Which of the following fields tells the recipient what the message is about?

- Ans
- 1. Date
 - 2. To
 - 3. Subject
 - 4. Signature

Question ID : 264330178238
Option 1 ID : 264330699010
Option 2 ID : 264330699008
Option 3 ID : 264330699007
Option 4 ID : 264330699009
Status : Answered
Chosen Option : 3

Q.4 In MS word 365, What does the 'Number of Copies' option in the Print Settings dialog allow you to do?

- Ans
- 1. Specify how many copies of the document to print
 - 2. Choose the paper size
 - 3. Adjust the font size
 - 4. Specify the number of pages to print

Question ID : 264330180725
Option 1 ID : 264330708870
Option 2 ID : 264330708868
Option 3 ID : 264330708867
Option 4 ID : 264330708869
Status : Answered
Chosen Option : 1

Q.5 In MS word 365, what is the keyboard shortcut to copy selected text in most applications?

- Ans
- 1. Ctrl + X
 - 2. Ctrl + Z
 - 3. Ctrl + C
 - 4. Ctrl + V

Question ID : 264330178572
Option 1 ID : 264330700316
Option 2 ID : 264330700318
Option 3 ID : 264330700315
Option 4 ID : 264330700317
Status : Answered
Chosen Option : 3

Q.6 Which of the following is NOT a text alignment in MS-Word 365?

- Ans
- 1. Align Text Middle
 - 2. Align Text Center
 - 3. Align Text Right
 - 4. Align Text Justify

Question ID : 264330178267
Option 1 ID : 264330699126
Option 2 ID : 264330699123
Option 3 ID : 264330699124
Option 4 ID : 264330699125
Status : Answered
Chosen Option : 1

Q.7 In MS Excel 365 what does the 'Save As' option allow you to do that the regular 'Save' option does not?

- Ans
- 1. Save the workbook with a new name or location
 - 2. Save the workbook without any changes
 - 3. Save the workbook with the same name
 - 4. Save the workbook without confirmation

Question ID : 264330180685

Option 1 ID : 264330708708

Option 2 ID : 264330708709

Option 3 ID : 264330708707

Option 4 ID : 264330708710

Status : Answered

Chosen Option : 1

Q.8 एमएस वर्ड 365 (MS Word 365) में, पेज सेटअप समूह में ब्रेक के बाद टेक्स्ट को नए पेज या डॉक्यूमेंट पर शुरू करने के लिए फोर्स करने हेतु निम्नलिखित में से किसका उपयोग किया जाता है?

- Ans
- 1. पेज ब्रेक (Page Break)
 - 2. पेज साइज (Page Size)
 - 3. पेज मार्जिन (Page Margins)
 - 4. ओरिएंटेशन (Orientation)

Question ID : 264330182772

Option 1 ID : 264330716861

Option 2 ID : 264330716860

Option 3 ID : 264330716859

Option 4 ID : 264330716862

Status : Answered

Chosen Option : 1

Q.9 The term 'ISP' stands for _____, in the context of internet architecture.

- Ans
- 1. Internet Service Protocol
 - 2. International Service Provider
 - 3. Intranet Service Provider
 - 4. Internet Service Provider

Question ID : 264330182102

Option 1 ID : 264330714249

Option 2 ID : 264330714248

Option 3 ID : 264330714247

Option 4 ID : 264330714250

Status : Answered

Chosen Option : 4

Q.10 Which of the following is the correct combination of a column letter and a row number that identifies a cell on a worksheet in MS Excel?

- Ans
- 1. 33
 - 2. AA
 - 3. A3
 - 4. 3A

Question ID : 264330180397

Option 1 ID : 264330707557

Option 2 ID : 264330707558

Option 3 ID : 264330707555

Option 4 ID : 264330707556

Status : Answered

Chosen Option : 4