

Constable Executive Male and Female in Delhi Police Examination 2023

Roll Number	
Candidate Name	
Venue Name	
Exam Date	17/11/2023
Exam Time	12:00 PM - 1:30 PM
Subject	Constable Executive Male and Female in Delhi Police Examination 2023

Section : General Knowledge

Q.1 Which of the following festivals is celebrated primarily by the Parsi Community?

- Ans
- 1. Songkran
 - 2. Milad-un-Nabi
 - 3. Deepawali
 - 4. Jashan-e-Mihragan

Question ID : 264330109623
Option 1 ID : 264330430771
Option 2 ID : 264330430769
Option 3 ID : 264330430772
Option 4 ID : 264330430770

Status : Not Attempted and Marked For Review

Chosen Option : --

Q.2 Which of the following was NOT an effect of devaluation of the rupee in 1991 to make an international adjustment of Indian currency?

- Ans
- 1. Increased imports
 - 2. Increased exports
 - 3. Raised the influx of foreign capital
 - 4. Decreased imports

Question ID : 264330118253
Option 1 ID : 264330464829
Option 2 ID : 264330464827
Option 3 ID : 264330464830
Option 4 ID : 264330464828

Status : Answered

Chosen Option : 4

Q.3 How many writs are guaranteed under Article 32 of the Indian Constitution?

- Ans
- 1. Six
 - 2. Five
 - 3. Four
 - 4. Seven

Question ID : 264330134570
Option 1 ID : 264330527237
Option 2 ID : 264330527236
Option 3 ID : 264330527235
Option 4 ID : 264330527238

Status : Answered

Chosen Option : 2

Q.4 Who was the author of the book titled 'Poverty and Un-British Rule in India'?

- Ans 1. Sardar Vallabhbhai Patel
 2. Dadabhai Naoroji
 3. Mahatma Gandhi
 4. Subhash Chandra Bose

Question ID : 264330123748
Option 1 ID : 264330485029
Option 2 ID : 264330485030
Option 3 ID : 264330485027
Option 4 ID : 264330485028
Status : Answered
Chosen Option : 2

Q.5 Vijayalaya, who belonged to the ancient chiefly family of the Cholas from Uraiyur, captured the delta from the Muttaraiyar in the middle of the 9th century and built the town of _____.

- Ans 1. Kanchipuram
 2. Thanjavur
 3. Vengi
 4. Darasuram

Question ID : 264330166883
Option 1 ID : 264330654569
Option 2 ID : 264330654567
Option 3 ID : 264330654570
Option 4 ID : 264330654568
Status : Not Attempted and Marked For Review
Chosen Option : --

Q.6 Totaram Sharma, Pandit Ayodhya Prasad, Gopal Das and Babu Ram Shanker Pagaldas are noted players of which of the following instruments?

- Ans 1. Sarod
 2. Pakhawaj
 3. Mridangam
 4. Sarangi

Question ID : 264330144042
Option 1 ID : 264330564431
Option 2 ID : 264330564434
Option 3 ID : 264330564433
Option 4 ID : 264330564432
Status : Marked For Review
Chosen Option : 4

Q.7 In Ancient India, which of the following dynasties was empowered in Deccan by Gautamiputra Satakarni?

- Ans
- 1. Saka
 - 2. Satavahana
 - 3. Pahlava
 - 4. Kushana

Question ID : 264330182698
Option 1 ID : 264330716566
Option 2 ID : 264330716565
Option 3 ID : 264330716563
Option 4 ID : 264330716564
Status : Answered
Chosen Option : 2

Q.8 In which year was the Basketball Federation of India established?

- Ans
- 1. 1920
 - 2. 1950
 - 3. 1947
 - 4. 1951

Question ID : 264330176099
Option 1 ID : 264330690694
Option 2 ID : 264330690693
Option 3 ID : 264330690692
Option 4 ID : 264330690691
Status : Not Attempted and Marked For Review
Chosen Option : --

Q.9 Who among the following Gurus of Sikh religion was the last Guru?

- Ans
- 1. Guru Angad
 - 2. Guru Amar Das
 - 3. Guru Hargobind
 - 4. Guru Gobind Singh

Question ID : 264330120259
Option 1 ID : 264330471294
Option 2 ID : 264330471292
Option 3 ID : 264330471291
Option 4 ID : 264330471293
Status : Marked For Review
Chosen Option : 4

Q.10 Who among the following was not among the convicts sentenced to death by the British Government of India in the Lahore conspiracy case?

- Ans
- 1. Sukhdev Thapar
 - 2. Shivaram Rajguru
 - 3. Bhagat Singh
 - 4. Udham Singh

Question ID : 264330120265

Option 1 ID : 264330471316

Option 2 ID : 264330471318

Option 3 ID : 264330471317

Option 4 ID : 264330471315

Status : **Not Attempted and Marked For Review**

Chosen Option : --

Q.11 The decennial census of India is conducted under which Census Act?

- Ans
- 1. Census Act 2001
 - 2. Census Act 1955
 - 3. Census Act 1948
 - 4. Census Act 2010

Question ID : 264330179263

Option 1 ID : 264330703057

Option 2 ID : 264330703056

Option 3 ID : 264330703055

Option 4 ID : 264330703058

Status : **Not Attempted and Marked For Review**

Chosen Option : --

Q.12 According to Census of India 2011, which union territories have the lowest literacy rate?

- Ans
- 1. Chandigarh
 - 2. Lakshadweep
 - 3. Andaman and Nicobar
 - 4. Dadra and Nagar Haveli

Question ID : 264330132751

Option 1 ID : 264330520101

Option 2 ID : 264330520102

Option 3 ID : 264330520100

Option 4 ID : 264330520099

Status : **Answered**

Chosen Option : 4

Q.13 In Indo Islamic construction, _____ and lime mortar was an important factor in construction.

- Ans
- 1. stone
 - 2. mud
 - 3. wood
 - 4. concrete

Question ID : 264330106237
Option 1 ID : 264330417251
Option 2 ID : 264330417250
Option 3 ID : 264330417249
Option 4 ID : 264330417252
Status : Answered
Chosen Option : 1

Q.14 As of November 2022, in which of the following periods in Indian history was the Republic Day parade NOT performed at the Rajpath(now called Kartavya Path)?

- Ans
- 1. 2006-2008
 - 2. 2000-2004
 - 3. 1950-1954
 - 4. 1990-1994

Question ID : 264330119959
Option 1 ID : 264330470113
Option 2 ID : 264330470112
Option 3 ID : 264330470111
Option 4 ID : 264330470114
Status : Not Answered
Chosen Option : --

Q.15 It was decided to celebrate the Republic day on 26th January every year by the Constitution makers to pay homage to the 'Purna Swaraj' declaration which was promulgated on _____.

- Ans
- 1. 26th January 1932
 - 2. 26th January 1931
 - 3. 26th January 1929
 - 4. 26th January 1930

Question ID : 264330113365
Option 1 ID : 264330445547
Option 2 ID : 264330445546
Option 3 ID : 264330445548
Option 4 ID : 264330445545
Status : Answered
Chosen Option : 4

Q.16 तालाब पारिस्थितिकी तंत्र का सबसे गहरा, वनस्पति-रहित और दलदली क्षेत्र क्या कहलाता है?

- Ans
- 1. उष्णकटिबंधीय क्षेत्र (The tropical zone)
 - 2. समशीतोष्ण क्षेत्र (The temperate zone)
 - 3. लॉटिक क्षेत्र (The lotic zone)
 - 4. गहन क्षेत्र (The profundal zone)

Question ID : 264330169099

Option 1 ID : 264330663202

Option 2 ID : 264330663200

Option 3 ID : 264330663201

Option 4 ID : 264330663199

Status : **Not Attempted and Marked For Review**

Chosen Option : --

Q.17 In the year 2021-22, which country was the largest importer of Jute from India?

- Ans
- 1. USA
 - 2. France
 - 3. Italy
 - 4. Japan

Question ID : 264330180508

Option 1 ID : 264330708000

Option 2 ID : 264330708002

Option 3 ID : 264330708001

Option 4 ID : 264330707999

Status : **Not Answered**

Chosen Option : --

Q.18 _____ is the largest employer of labour force in India.

- Ans
- 1. Financial Services Sector
 - 2. Cottage Industries
 - 3. Agriculture
 - 4. Small Scale Industries

Question ID : 264330109107

Option 1 ID : 264330428707

Option 2 ID : 264330428708

Option 3 ID : 264330428705

Option 4 ID : 264330428706

Status : **Answered**

Chosen Option : 3

Q.19 Who popularised the movement of Theosophical Society in India?

- Ans
- 1. Keshav Chandra Sen
 - 2. Ramkrishna Bhandarkar
 - 3. Annie Besant
 - 4. Swami Vivekananda

Question ID : 264330120309

Option 1 ID : 264330471489

Option 2 ID : 264330471488

Option 3 ID : 264330471487

Option 4 ID : 264330471490

Status : **Marked For Review**

Chosen Option : 1

Q.20 Which of the following Peninsular rivers flows westward?

- Ans
- 1. Krishna
 - 2. Kaveri
 - 3. Narmada
 - 4. Godavari

Question ID : 264330176011
Option 1 ID : 264330690342
Option 2 ID : 264330690340
Option 3 ID : 264330690341
Option 4 ID : 264330690339
Status : Answered
Chosen Option : 3

Q.21 निम्नलिखित में से कौन-सा आज्ञापत्र किसी लोकसेवक को उसके आधिकारिक कर्तव्यों को ठीक से करने या शक्ति का दुरुपयोग न करने का आदेश देने के लिए न्यायालय द्वारा जारी किया जाता है?

- Ans
- 1. परमादेश (Mandamus)
 - 2. बन्दी प्रत्यक्षीकरण (Habeas corpus)
 - 3. निषेधाज्ञा (Prohibition)
 - 4. अधिकार पृच्छा (Quo-warranto)

Question ID : 264330110131
Option 1 ID : 264330432802
Option 2 ID : 264330432804
Option 3 ID : 264330432803
Option 4 ID : 264330432801
Status : Answered
Chosen Option : 4

Q.22 As per Census 2011, which Indian demographic group typically exhibits a higher literacy rate?

- Ans
- 1. Urban females
 - 2. Urban males
 - 3. Rural males
 - 4. Rural females

Question ID : 264330183038
Option 1 ID : 264330717886
Option 2 ID : 264330717884
Option 3 ID : 264330717885
Option 4 ID : 264330717887
Status : Answered
Chosen Option : 2

Q.23 Which method is used to separate ribosomes from the cell?

- Ans
- 1. Chromatography
 - 2. Distillation
 - 3. Filtration
 - 4. Ultracentrifugation

Question ID : 264330113331
Option 1 ID : 264330445410
Option 2 ID : 264330445412
Option 3 ID : 264330445409
Option 4 ID : 264330445411
Status : Not Attempted and Marked For Review
Chosen Option : --

Q.24 Which of the following is the most dominant flora of the plant kingdom?

- Ans 1. Bryophyta
 2. Angiosperm
 3. Gymnosperm
 4. Pteridophyte

Question ID : 264330120906
Option 1 ID : 264330473842
Option 2 ID : 264330473839
Option 3 ID : 264330473840
Option 4 ID : 264330473841
Status : Marked For Review
Chosen Option : 4

Q.25 Who among the following is the first ever recipient of Rajiv Gandhi Khel Ratna Award?

- Ans 1. Vishwanathan Anand
 2. Dhyan Chand
 3. Virat Kohli
 4. Sunil Chhetri

Question ID : 264330176741
Option 1 ID : 264330693180
Option 2 ID : 264330693182
Option 3 ID : 264330693181
Option 4 ID : 264330693179
Status : Not Answered
Chosen Option : --

Q.26 A new phase of which initiative of the Government of India was launched in 2022 with the overall vision of creating 'Garbage Free Cities' and with the new component of wastewater treatment including faecal sludge management?

- Ans 1. Wastewater Management Framework in India
 2. Rural Open Defecation Free Initiative
 3. Swachh Bharat Mission (Urban) 2.0
 4. Swachh Bharat Mission (Urban) 3.0

Question ID : 264330117584
Option 1 ID : 264330462361
Option 2 ID : 264330462362
Option 3 ID : 264330462363
Option 4 ID : 264330462364
Status : Not Attempted and Marked For Review
Chosen Option : --

Q.27 Which of the following causes the Tsunami waves?

- Ans 1. Exterior of the earth
 2. Interior of the earth
 3. Interior of the moon
 4. Exterior of the moon

Question ID : 264330120020
Option 1 ID : 264330470335
Option 2 ID : 264330470336
Option 3 ID : 264330470338
Option 4 ID : 264330470337
Status : Answered
Chosen Option : 2

Q.28 Which of the following is NOT a component of fiscal reforms?

- Ans 1. Change in interest rate
 2. Public expenditure reforms
 3. Taxation reforms
 4. Control of public debt

Question ID : 264330110180
Option 1 ID : 264330432999
Option 2 ID : 264330432998
Option 3 ID : 264330432997
Option 4 ID : 264330433000
Status : Answered
Chosen Option : 4

Q.29 In the year 2017, which of the following countries hosted the Under-17 Football World Cup?

- Ans 1. United Arab Emirates
 2. India
 3. United States of America
 4. Thailand

Question ID : 264330118467
Option 1 ID : 264330465270
Option 2 ID : 264330465269
Option 3 ID : 264330465271
Option 4 ID : 264330465272
Status : Not Attempted and Marked For Review
Chosen Option : --

Q.30 When did India win its last gold medal in Hockey in the Olympics?

- Ans 1. 1972
 2. 1976
 3. 1968
 4. 1980

Question ID : 264330176749
Option 1 ID : 264330693213
Option 2 ID : 264330693214
Option 3 ID : 264330693212
Option 4 ID : 264330693211
Status : Not Answered
Chosen Option : --

Q.31 The Chairman of the State Public Service Commission can be removed by:

- Ans 1. The President of India
 2. The Prime Minister of India
 3. The Governor of the State
 4. The Chief Minister of the State

Question ID : 264330177747
Option 1 ID : 264330697096
Option 2 ID : 264330697097
Option 3 ID : 264330697095
Option 4 ID : 264330697098
Status : Answered
Chosen Option : 3

Q.32 Where are the Ellora caves located?

- Ans 1. Fatehpur Sikri
 2. Aurangabad
 3. Indore
 4. Delhi

Question ID : 264330109320
Option 1 ID : 264330429557
Option 2 ID : 264330429559
Option 3 ID : 264330429560
Option 4 ID : 264330429558
Status : Answered
Chosen Option : 2

Q.33 Set in the holy city of Varanasi, 'Kashi Ka Assi' is written by:

- Ans 1. Kamleshwar
 2. Kedar Nath Singh
 3. Amrita Pritam
 4. Kashi Nath Singh

Question ID : 26433064626
Option 1 ID : 264330253096
Option 2 ID : 264330253098
Option 3 ID : 264330253099
Option 4 ID : 264330253097
Status : Not Answered
Chosen Option : --

Q.34 Which of the following percussion instruments is used in the popular folk dance 'Lavani'?

- Ans 1. Dholak
 2. Xylophone
 3. Piano
 4. Sleigh Bells

Question ID : 264330106189
Option 1 ID : 264330417059
Option 2 ID : 264330417057
Option 3 ID : 264330417058
Option 4 ID : 264330417060
Status : Not Attempted and Marked For Review
Chosen Option : --

Q.35 To file the nomination for the post of Vice President, the candidate must be proposed by at least _____ electors.

- Ans 1. 25
 2. 30
 3. 40
 4. 20

Question ID : 264330137419
Option 1 ID : 264330538306
Option 2 ID : 264330538304
Option 3 ID : 264330538303
Option 4 ID : 264330538305
Status : Not Answered
Chosen Option : --

Q.36 The Index of Industrial Production (IIP) is an index that shows the growth rates in different industry groups of the economy in a fixed period of time. What is the base year of IIP?

- Ans
- 1. 2010-11
 - 2. 2012-13
 - 3. 2011-12
 - 4. 2004-05

Question ID : 264330130664
Option 1 ID : 264330511769
Option 2 ID : 264330511768
Option 3 ID : 264330511770
Option 4 ID : 264330511767
Status : Answered
Chosen Option : 3

Q.37 A baking student started baking a cake. After some time he realised his cake was not rising and hard. This is because he forgotten to add the following ingredient:

- Ans
- 1. milk
 - 2. more cake flour
 - 3. baking powder
 - 4. vanilla extract

Question ID : 264330182813
Option 1 ID : 264330717025
Option 2 ID : 264330717024
Option 3 ID : 264330717023
Option 4 ID : 264330717026
Status : Answered
Chosen Option : 3

Q.38 Which region is the source of basaltic magma?

- Ans
- 1. Transition region
 - 2. Lower mantle
 - 3. The core
 - 4. Upper mantle

Question ID : 264330120083
Option 1 ID : 264330470587
Option 2 ID : 264330470589
Option 3 ID : 264330470590
Option 4 ID : 264330470588
Status : Not Answered
Chosen Option : --

Q.39 Who among the following wrote, 'The Autobiography of an Unknown Indian'?

- Ans
- 1. Swami Rama
 - 2. Nirad C Chaudhuri
 - 3. Prakash Tandon
 - 4. BR Ambedkar

Question ID : 26433071669
Option 1 ID : 264330281103
Option 2 ID : 264330281100
Option 3 ID : 264330281102
Option 4 ID : 264330281101
Status : Not Answered
Chosen Option : --

Q.40 Which of the following parts of the Indian Constitution deals with the Directive Principles of State Policy?

- Ans
- 1. Part XX
 - 2. Part IV
 - 3. Part XI
 - 4. Part XIV

Question ID : 264330113397
Option 1 ID : 264330445674
Option 2 ID : 264330445675
Option 3 ID : 264330445676
Option 4 ID : 264330445673
Status : Answered
Chosen Option : 2

Q.41 The Rajas(kings) did not have capital cities, palaces or regular armies, nor did they collect taxes during the _____ period.

- Ans
- 1. Rigvedic
 - 2. Huna
 - 3. Shunga
 - 4. Mauryan

Question ID : 264330182874
Option 1 ID : 264330717241
Option 2 ID : 264330717242
Option 3 ID : 264330717243
Option 4 ID : 264330717240
Status : Answered
Chosen Option : 1

Q.42 Famous dance personality Rajarshi Bhagya Chandra is also known as:

- Ans
- 1. Rewa Prasad Dwivedi
 - 2. Bharat Muni
 - 3. Bhasa
 - 4. Ningthou Ching-Thang Khomba

Question ID : 264330109304
Option 1 ID : 264330429493
Option 2 ID : 264330429494
Option 3 ID : 264330429496
Option 4 ID : 264330429495
Status : Not Answered
Chosen Option : --

Q.43 Which foreign power made the Indian pepper trade a royal monopoly?

- Ans
- 1. The Portuguese
 - 2. The French
 - 3. The Dutch
 - 4. The Spanish

Question ID : 264330120145
Option 1 ID : 264330470837
Option 2 ID : 264330470836
Option 3 ID : 264330470835
Option 4 ID : 264330470838
Status : Answered
Chosen Option : 1

Q.44 Part XIX of the Indian Constitution deals with:

- Ans
- 1. elections
 - 2. miscellaneous
 - 3. emergency provisions
 - 4. amendment of the Constitution

Question ID : 264330111506
Option 1 ID : 264330438111
Option 2 ID : 264330438109
Option 3 ID : 264330438110
Option 4 ID : 264330438112
Status : Marked For Review
Chosen Option : 2

Q.45 Who among the following received, in 1997, the Japan Art Association's Praemium Imperiale prize for music?

- Ans
- 1. Pandit Ravi Shankar
 - 2. Ustad Allarakha Khan
 - 3. Pandit Shiv Kumar Sharma
 - 4. Ustad Bismillah Khan

Question ID : 264330114168
Option 1 ID : 264330448758
Option 2 ID : 264330448760
Option 3 ID : 264330448759
Option 4 ID : 264330448757
Status : Not Answered
Chosen Option : --

Q.46 Which of the following is INCORRECT with respect to repo rate?

- Ans
- 1. It is a single policy rate to signal the stance of monetary policy to achieve macro-economic objectives of growth with price stability.
 - 2. It is a policy rate which is the key lending rate of the central bank, and its nomenclature varies from country to country.
 - 3. It is the rate at which banks place their funds with the RBI and receive collateral.
 - 4. It is the rate at which the commercial banks borrow funds from the RBI.

Question ID : 264330112463
Option 1 ID : 264330441938
Option 2 ID : 264330441939
Option 3 ID : 264330441940
Option 4 ID : 264330441937
Status : Answered
Chosen Option : 3

Q.47 Alarmel Valli and Rukmini Devi Arundale are associated with which of the following styles of Indian Dances?

- Ans
- 1. Kathakali
 - 2. Bharatanatyam
 - 3. Kathak
 - 4. Kuchipudi

Question ID : 264330130512
Option 1 ID : 264330511160
Option 2 ID : 264330511162
Option 3 ID : 264330511161
Option 4 ID : 264330511159
Status : Answered
Chosen Option : 2

Q.48 Select the personality who received the Sangeet Natak Akademi 2021 award for his/her contribution in Kuchipudi.

- Ans
- 1. N Sailaja
 - 2. Kalamandalam Girija
 - 3. Bhuvan Kumar
 - 4. Bijay Kumar Jena

Question ID : 264330130527
Option 1 ID : 264330511221
Option 2 ID : 264330511220
Option 3 ID : 264330511219
Option 4 ID : 264330511222
Status : Marked For Review
Chosen Option : 2

Q.49 Correctly match the following Indian season with their crops:

Season	Crop
1. Kharif	a. Fodder
2. Rabi	b. Wheat
3. Zaid	c. Rice

- Ans
- 1. 1-c, 2- a, 3-b
 - 2. 1-a, 2- b, 3-c
 - 3. 1-b, 2- c, 3-a
 - 4. 1-c, 2- b, 3-a

Question ID : 264330119882
Option 1 ID : 264330469803
Option 2 ID : 264330469806
Option 3 ID : 264330469804
Option 4 ID : 264330469805
Status : Answered
Chosen Option : 2

Q.50 Net national product at market price can be defined as:

- Ans
- 1. Gross national product at market price plus depreciation
 - 2. Net domestic product at market price plus net income from abroad
 - 3. Net domestic product at market price minus net income from abroad
 - 4. Net domestic product at market price minus depreciation

Question ID : 264330120881
Option 1 ID : 264330473739
Option 2 ID : 264330473742
Option 3 ID : 264330473740
Option 4 ID : 264330473741
Status : Answered
Chosen Option : 1

Section : Reasoning

Q.1 Which two signs should be interchanged to make the following equation correct?

$$99 \div 8 + 2 - 16 \times 4 = 39$$

- Ans
- 1. \times and $+$
 - 2. \div and $+$
 - 3. $-$ and \times
 - 4. \div and $-$

Question ID : 264330101081
Option 1 ID : 264330396870
Option 2 ID : 264330396869
Option 3 ID : 264330396871
Option 4 ID : 264330396872
Status : Answered
Chosen Option : 2

Q.2 Six students, Ram, Gopi, Sita, Vimal, Tony and John, are sitting in a straight row facing north. Only two people sit to the left of Sita. Only two people sit between Sita and Vimal. Ram sits to the immediate right of Tony. Gopi sits to the immediate left of John. John is not a neighbour of Vimal. Who sits second from the extreme left end of the row?

- Ans
- 1. John
 - 2. Vimal
 - 3. Tony
 - 4. Ram

Question ID : 26433089503
Option 1 ID : 264330351516
Option 2 ID : 264330351515
Option 3 ID : 264330351513
Option 4 ID : 264330351514
Status : Not Attempted and Marked For Review
Chosen Option : --

Q.3 Select the option that is related to the fourth term in the same way as the first term is related to the second term and the fifth term is related to the sixth term.
 $70 : 625 :: ? : 144 :: 37 : 196$

- Ans 1. 35
 2. 31
 3. 41
 4. 45



Question ID : 26433059945
 Option 1 ID : 264330234615
 Option 2 ID : 264330234614
 Option 3 ID : 264330234612
 Option 4 ID : 264330234613
 Status : Not Attempted and Marked For Review
 Chosen Option : --

Q.4 Which figure should replace the question mark (?) in the following series to continue the pattern?

7	P	8	S	
X 8 A	8 A ♡	A ♡ P	♡ P Y	?
♡	X	Y	A	

Ans

1.

♡
P Y S
6
2.

P
Y S ♡
6
3.

Y
S ♡ P
6
4.

A
P Y ♡
S

Question ID : 264330129630
 Option 1 ID : 264330507888
 Option 2 ID : 264330507889
 Option 3 ID : 264330507887
 Option 4 ID : 264330507886
 Status : Answered
 Chosen Option : 1

Q.5 Which figure should replace the question mark (?) if the following series were to be continued?

B	2	6	2	6	4	♡	8	Y	8	Y	S	6	2	T	
	4			8			S			2			4		?
8	♡	S	♡	S	Y	2	6	4	6	4	T	8	Y	S	

Ans

✗ 1.

S	6	2
	T	
4	8	Y

✓ 2.

2	T	4
	8	
Y	S	9

✗ 3.

9	6	2
	T	
4	8	Y

✗ 4.

2	T	4
	8	
Y	S	6

Question ID : 264330103865

Option 1 ID : 264330407764

Option 2 ID : 264330407763

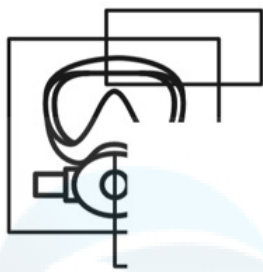
Option 3 ID : 264330407762

Option 4 ID : 264330407761

Status : Not Attempted and Marked For Review

Chosen Option : --

Q.6 Which of the following option figures will complete the pattern in the figure given below?



Ans

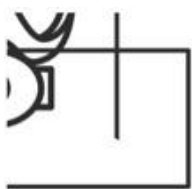
✗ 1.



✗ 2.



✗ 3.



✓ 4.



Question ID : 26433080624

Option 1 ID : 264330316431

Option 2 ID : 264330316430

Option 3 ID : 264330316432

Option 4 ID : 264330316429

Status : Answered

Chosen Option : 4

Q.7 In a certain code language, 'EXIT' is written as 'FJYU' and 'HIDE' is written as 'IEJF'. How will 'GAME' be written in that language?

Ans ✗ 1. FBND

✗ 2. HBNF

✓ 3. HNBF

✗ 4. FNBD

Question ID : 26433087179

Option 1 ID : 264330342354

Option 2 ID : 264330342353

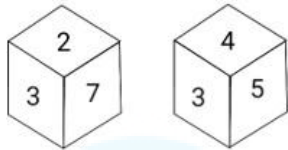
Option 3 ID : 264330342355

Option 4 ID : 264330342356

Status : Answered

Chosen Option : 3

Q.8 Six numbers 1, 2, 3, 4, 5 and 7 are written on different faces of a dice. Two positions of this dice are shown in the figure. If both the even numbers are written on opposite faces of the dice, find the number on the face opposite to '1'.



- Ans**
- 1. 5
 - 2. 7
 - 3. 2
 - 4. 3

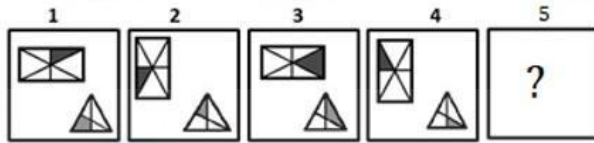
Question ID : 264330101268
Option 1 ID : 264330397618
Option 2 ID : 264330397617
Option 3 ID : 264330397620
Option 4 ID : 264330397619
Status : Answered
Chosen Option : 4

Q.9 Select the number from among the given options that can replace the question mark (?) in the following series.
4, 10, 17, 25, ?, 44

- Ans**
- 1. 32
 - 2. 34
 - 3. 33
 - 4. 31

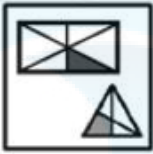
Question ID : 264330111623
Option 1 ID : 264330438578
Option 2 ID : 264330438577
Option 3 ID : 264330438579
Option 4 ID : 264330438580
Status : Answered
Chosen Option : 2

Q.10 Each of the following questions consists of 4 figures marked 1, 2, 3 and 4 called the Problem Figures followed by 4 other figures. Select a figure from amongst the Answer Figures which will continue the same series as established by the four Problem Figures.

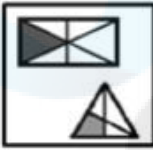


Ans

✓ 1.



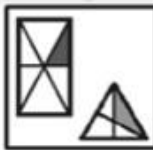
✗ 2.



✗ 3.



✗ 4.



Question ID : 264330110539

Option 1 ID : 264330434436

Option 2 ID : 264330434434

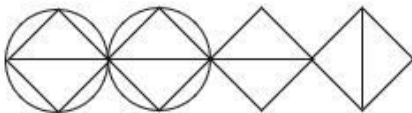
Option 3 ID : 264330434433

Option 4 ID : 264330434435

Status : Answered

Chosen Option : 1

Q.11 How many triangles are there in the given figure?



Ans ✗ 1.6

✗ 2.7

✓ 3.8

✗ 4.9

Question ID : 26433068630

Option 1 ID : 264330269035

Option 2 ID : 264330269034

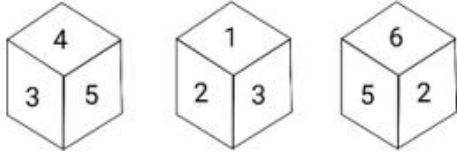
Option 3 ID : 264330269032

Option 4 ID : 264330269033

Status : Answered

Chosen Option : 3

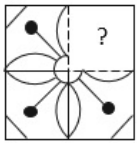
Q.12 A cube (dice) has six different numbers drawn over its six faces. Three different positions of this cube are shown in the given figure. Which number is on the face opposite to '1'?



- Ans
- 1. 4
 - 2. 6
 - 3. 2
 - 4. 5

Question ID : 264330113149
 Option 1 ID : 264330444681
 Option 2 ID : 264330444682
 Option 3 ID : 264330444683
 Option 4 ID : 264330444684
 Status : Answered
 Chosen Option : 4

Q.13 Select the option figure that will replace the question mark (?) in the figure given below to complete the pattern.



- Ans
- 1.
 - 2.
 - 3.
 - 4.

Question ID : 26433080834
 Option 1 ID : 264330317271
 Option 2 ID : 264330317269
 Option 3 ID : 264330317272
 Option 4 ID : 264330317270
 Status : Answered
 Chosen Option : 2

Q.14 Select the set in which the numbers are related in the same way as are the numbers of the following sets.

(NOTE : Operations should be performed on the whole numbers, without breaking down the numbers into its constituent digits. E.g. 13 – Operations on 13 such as adding /deleting /multiplying etc. to 13 can be performed. Breaking down 13 into 1 and 3 and then performing mathematical operations on 1 and 3 is NOT allowed)
(4, 39), (5, 100)

- Ans 1. (6, 192)
 2. (3, 2)
 3. (9, 684)
 4. (12, 153)

Question ID : 26433052042

Option 1 ID : 264330203471

Option 2 ID : 264330203470

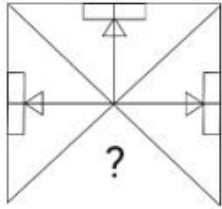
Option 3 ID : 264330203473

Option 4 ID : 264330203472

Status : Not Attempted and Marked For Review

Chosen Option : --

Q.15 Select the figure from the given options that will replace the question mark (?) in the figure given below to complete the pattern.

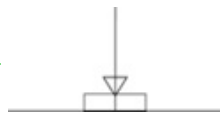


Ans

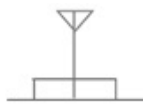
1.



2.



3.



4.



Question ID : 264330116609

Option 1 ID : 264330458522

Option 2 ID : 264330458523

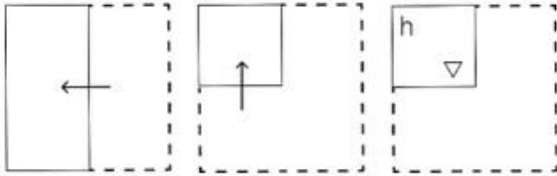
Option 3 ID : 264330458524

Option 4 ID : 264330458521

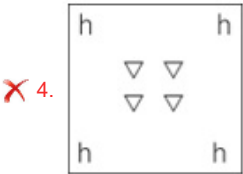
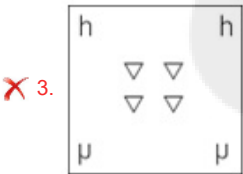
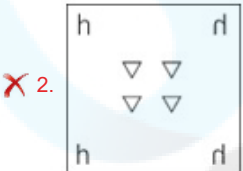
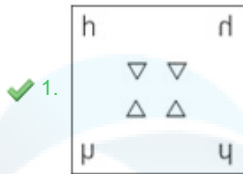
Status : Answered

Chosen Option : 2

Q.16 A paper is folded and cut as shown below. How will it appear when unfolded?



Ans



Question ID : 264330114713

Option 1 ID : 264330450937

Option 2 ID : 264330450938

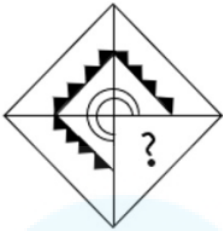
Option 3 ID : 264330450939

Option 4 ID : 264330450940

Status : Answered

Chosen Option : 1

Q.17 Select the option figure that will replace the question mark (?) in the figure given below to complete the pattern.

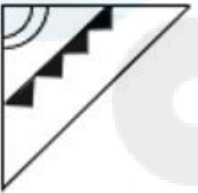


Ans

✗ 1.



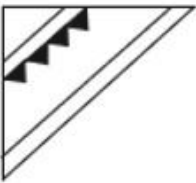
✓ 2.



✗ 3.



✗ 4.



Question ID : 26433085567

Option 1 ID : 264330335971

Option 2 ID : 264330335972

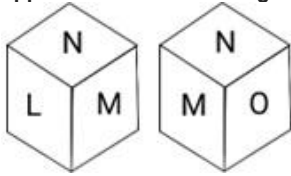
Option 3 ID : 264330335969

Option 4 ID : 264330335970

Status : Answered

Chosen Option : 2

Q.18 Six letters L, M, N, O, P and Q are written on different faces of a dice. Two different positions of this dice are shown in the figure. Select the letter that will be on the face opposite to the one having O.



- Ans
- 1. Q
 - 2. N
 - 3. P
 - 4. L

Question ID : 264330121791
 Option 1 ID : 264330477336
 Option 2 ID : 264330477335
 Option 3 ID : 264330477337
 Option 4 ID : 264330477338
 Status : Answered
 Chosen Option : 4

Q.19 Select the combination of letters that when sequentially placed in the blanks of the given series will complete the series.
 TP BD T R QT RB Q PRB T BDQ

- Ans
- 1. PBPRDTRQDPBR
 - 2. RQPBDPDTDQPR
 - 3. PBPTRQRDDPBR
 - 4. RQPBRDPBDTR

Question ID : 26433097292
 Option 1 ID : 264330381867
 Option 2 ID : 264330381866
 Option 3 ID : 264330381868
 Option 4 ID : 264330381865
 Status : Answered
 Chosen Option : 2

Q.20 Select the option that is related to the fifth letter-cluster in the same way as the second letter-cluster is related to the first letter-cluster and the fourth letter-cluster is related to the third letter-cluster.
 GIVE : JLYH :: TAKE : WDNH :: COPY : ?

- Ans
- 1. FRRC
 - 2. FRSB
 - 3. FRSC
 - 4. ERSB

Question ID : 26433076463
 Option 1 ID : 264330299917
 Option 2 ID : 264330299919
 Option 3 ID : 264330299918
 Option 4 ID : 264330299916
 Status : Answered
 Chosen Option : 2

Q.21 Select the correct combination of mathematical signs to sequentially replace the * signs and to balance the given equation.
 $16 * 4 * 20 * 82 * 14 * 148$

- Ans
- 1. $x + + - =$
 - 2. $+ + x - =$
 - 3. $+ x + - =$
 - 4. $+ x + - =$

Question ID : 26433085725

Option 1 ID : 264330336603

Option 2 ID : 264330336601

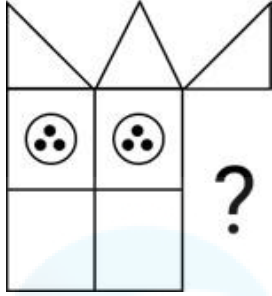
Option 3 ID : 264330336604

Option 4 ID : 264330336602

Status : Answered

Chosen Option : 4

Q.22 Select the figure from the given options that will replace the question mark (?) in the figure given below and complete the pattern.



Ans



✗ 2.



✗ 3.



✗ 4.



Question ID : 26433011710

Option 1 ID : 264330438925

Option 2 ID : 264330438927

Option 3 ID : 264330438926

Option 4 ID : 264330438928

Status : Answered

Chosen Option : 1

Q.23 Select the correct mirror image of the given combination when the mirror is placed at 'PQ' as shown below.

CZLSD7 | P
Q

Ans

- 1. ∇ D S L ∇ C
- 2. ∇ D S J ∇ C
- 3. ∇ D S J ∇ C
- 4. ∇ D S J ∇ C

Question ID : 264330129814

Option 1 ID : 264330508487

Option 2 ID : 264330508490

Option 3 ID : 264330508488

Option 4 ID : 264330508489

Status : Answered

Chosen Option : 3

Q.24 Select a figure from amongst the four given options which, when placed in the blank space of figure (X), would complete the pattern.



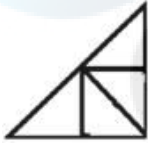
X

Ans

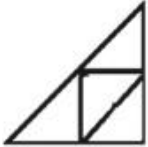
✗ 1.



✗ 2.



✗ 3.



✓ 4.



Question ID : 264330102217

Option 1 ID : 264330401336

Option 2 ID : 264330401333

Option 3 ID : 264330401334

Option 4 ID : 264330401335

Status : Answered

Chosen Option : 4

Q.25 Read the given statements and conclusions carefully. Assuming that the information given in the statements is true, even if it appears to be at variance with commonly known facts, decide which of the given conclusions logically follow(s) from the statements.

Statements:

All pens are laptops.

All laptops are computers.

Conclusions:

I. All pens are computers.

II. All laptops are pens.

Ans ✓ 1. Only conclusion I follows

✗ 2. Only conclusion II follows

✗ 3. Neither conclusion I nor II follows

✗ 4. Both conclusions I and II follow

Question ID : 26433068287

Option 1 ID : 264330267660

Option 2 ID : 264330267661

Option 3 ID : 264330267663

Option 4 ID : 264330267662

Status : Answered

Chosen Option : 1

Section : Numerical Ability

Q.1 The ratio of the age of a father to that of his son is 7 : 4. If the product of their ages (in years) is 1008, then what is the ratio of the age of the father to that of the son after 10 years?

Ans 1. 26 : 17

2. 17 : 13

3. 11 : 13

4. 23 : 21

Question ID : 264330118128

Option 1 ID : 264330464330

Option 2 ID : 264330464328

Option 3 ID : 264330464327

Option 4 ID : 264330464329

Status : Answered

Chosen Option : 1

Q.2 Which of the following fractions is the smallest?

$\frac{17}{21}$, $\frac{9}{11}$, $\frac{16}{19}$, $\frac{13}{15}$

Ans 1. $\frac{17}{21}$

2. $\frac{16}{19}$

3. $\frac{9}{11}$

4. $\frac{13}{15}$

Question ID : 264330106484

Option 1 ID : 264330418238

Option 2 ID : 264330418239

Option 3 ID : 264330418237

Option 4 ID : 264330418240

Status : Answered

Chosen Option : 1

Q.3 If the simple interest for 8 years is equal to 40% of the principal, then after how many years will it be equal to the principal?

Ans 1. 20

2. 15

3. 18

4. 25

Question ID : 264330119343

Option 1 ID : 264330467660

Option 2 ID : 264330467659

Option 3 ID : 264330467661

Option 4 ID : 264330467662

Status : Not Attempted and Marked For Review

Chosen Option : --

Q.4 The average of four numbers is 20, and one of these four numbers is 26. What is the average of the remaining three numbers?

Ans 1. 18

2. 16

3. 19

4. 17

Question ID : 264330131120

Option 1 ID : 264330513593

Option 2 ID : 264330513591

Option 3 ID : 264330513594

Option 4 ID : 264330513592

Status : Answered

Chosen Option : 1

Q.5 A temple top is a hollow hemispherical dome with an inner radius of 2 units and an outer radius of 3 units. How much concrete (in cubic units) is used to make the top of the temple?

Ans 1. $\frac{17\pi}{3}$

2. $\frac{38\pi}{3}$

3. $\frac{19\pi}{3}$

4. $\frac{19\pi}{6}$

Question ID : 264330112119

Option 1 ID : 264330440564

Option 2 ID : 264330440562

Option 3 ID : 264330440561

Option 4 ID : 264330440563

Status : Answered

Chosen Option : 2

Q.6 After successive discounts of 15% and 20%, an article was sold for ₹680. What is the marked price of the article?

Ans 1. ₹3,000

2. ₹1,000

3. ₹2,000

4. ₹1,500

Question ID : 264330119334

Option 1 ID : 264330467625

Option 2 ID : 264330467624

Option 3 ID : 264330467623

Option 4 ID : 264330467626

Status : Answered

Chosen Option : 2

Q.7 A camp has provisions for 60 pupils for 18 days. In how many days will the same provisions finish off if the strength of the camp is increased to 72 pupils?

- Ans
- 1. 18 days
 - 2. 15 days
 - 3. 12 days
 - 4. 8 days

Question ID : 264330182575
Option 1 ID : 264330716094
Option 2 ID : 264330716093
Option 3 ID : 264330716092
Option 4 ID : 264330716091
Status : Answered
Chosen Option : 2

Q.8 The compound interest on a certain sum of money at 8% per annum for 3 years is ₹4,058. Find the simple interest on the same sum for 4 years at 10% p.a.

- Ans
- 1. ₹6,520
 - 2. ₹6,052
 - 3. ₹6,250
 - 4. ₹6,025

Question ID : 264330104314
Option 1 ID : 264330409557
Option 2 ID : 264330409559
Option 3 ID : 264330409558
Option 4 ID : 264330409560
Status : Answered
Chosen Option : 3

Q.9 The selling price of an item is 15% more than the cost price and shopkeeper is able to earn ₹25. What is the selling price of the item?

- Ans
- 1. ₹166.67
 - 2. ₹177.67
 - 3. ₹191.67
 - 4. ₹181.67

Question ID : 264330112073
Option 1 ID : 264330440379
Option 2 ID : 264330440377
Option 3 ID : 264330440380
Option 4 ID : 264330440378
Status : Answered
Chosen Option : 3

Q.10

Calculate the HCF of $\frac{1.75}{9}$, $\frac{5.6}{12}$ and $\frac{7}{18}$.

Ans

1. $\frac{11}{180}$

2. $\frac{7}{180}$

3. $\frac{13}{180}$

4. $\frac{17}{180}$

Question ID : 264330118501

Option 1 ID : 264330465407

Option 2 ID : 264330465408

Option 3 ID : 264330465406

Option 4 ID : 264330465405

Status : Answered

Chosen Option : 2

Q.11 A hemisphere of lead of radius 8 cm is recast into a right circular cone of height 64 cm. Find the radius of the base of the cone. (Where $\pi = \frac{22}{7}$)

Ans

1. $4\sqrt{2}$ cm

2. 4 cm

3. $2\sqrt{2}$ cm

4. 8 cm

Question ID : 264330118141

Option 1 ID : 264330464381

Option 2 ID : 264330464379

Option 3 ID : 264330464380

Option 4 ID : 264330464382

Status : Answered

Chosen Option : 2

Q.12 What will be the HCF of $(2 \times 2 \times 3 \times 3 \times 5 \times 7 \times 7 \times 11)$, $(2 \times 3 \times 3 \times 5 \times 11)$, $(2 \times 3 \times 3 \times 5 \times 7 \times 11 \times 11)$, $(2 \times 3 \times 3 \times 5 \times 5 \times 11)$, $(2 \times 3 \times 5 \times 7 \times 7)$?

Ans

1. 66

2. 42

3. 30

4. 105

Question ID : 264330104331

Option 1 ID : 264330409627

Option 2 ID : 264330409626

Option 3 ID : 264330409625

Option 4 ID : 264330409628

Status : Answered

Chosen Option : 3

Q.13 It takes eight hours for a 600 km journey, if 120 km is done by train and the rest by car. It takes 20 minutes more, if 200 km is done by train and the rest by car. The ratio of the speed of the train to that of the cars is

- Ans
- 1. 2 : 3
 - 2. 1 : 3
 - 3. 3 : 4
 - 4. 1 : 2

Question ID : 264330106663

Option 1 ID : 264330418955

Option 2 ID : 264330418953

Option 3 ID : 264330418956

Option 4 ID : 264330418954

Status : **Not Attempted and Marked For Review**

Chosen Option : --

Q.14 Kiran sells an object to Varun at a profit of 10%. Varun sells that object to Arun for ₹1,155 and makes a profit of 5%. At what cost did Kiran purchase the object?

- Ans
- 1. ₹1,000
 - 2. ₹1,500
 - 3. ₹2,500
 - 4. ₹2,000

Question ID : 264330103710

Option 1 ID : 264330407145

Option 2 ID : 264330407146

Option 3 ID : 264330407148

Option 4 ID : 264330407147

Status : **Answered**

Chosen Option : 1

Q.15 The price of a commodity increased by 22%. By what percentage (correct to two decimal places) should its consumption be reduced so that the total expenditure remains the same?

- Ans
- 1. 19.89%
 - 2. 20.03%
 - 3. 21.22%
 - 4. 18.03%

Question ID : 264330118049

Option 1 ID : 264330464013

Option 2 ID : 264330464011

Option 3 ID : 264330464012

Option 4 ID : 264330464014

Status : **Not Answered**

Chosen Option : --

Q.1 In MS Word 365 If you want to print pages 1, 3, and 5 of a document, which of the following page ranges should you select?

- Ans
- 1. 1-3, 5
 - 2. 1-5
 - 3. 1, 3, 5
 - 4. 1, 3-5

Question ID : 264330173591
Option 1 ID : 264330680845
Option 2 ID : 264330680843
Option 3 ID : 264330680844
Option 4 ID : 264330680846
Status : Answered
Chosen Option : 3

Q.2 Which of the following is used to move text from one location to another in a word document of MS-Word 365?

- Ans
- 1. Copy and paste the text at desired location
 - 2. Copy the selected text
 - 3. Select and cut the selected text
 - 4. Cut and paste the text at desired location

Question ID : 264330178266
Option 1 ID : 264330699119
Option 2 ID : 264330699121
Option 3 ID : 264330699122
Option 4 ID : 264330699120
Status : Answered
Chosen Option : 1

Q.3 In MS Excel 365 which of the following keyboard shortcuts in MS Excel will allow us to open a new spreadsheet?

- Ans
- 1. Shift + N
 - 2. Ctrl + N
 - 3. Alt + O
 - 4. Ctrl + O

Question ID : 264330180813
Option 1 ID : 264330709218
Option 2 ID : 264330709216
Option 3 ID : 264330709217
Option 4 ID : 264330709215
Status : Answered
Chosen Option : 2

Q.4 In MS Excel 365, to insert a new row above the selected row in Microsoft Excel 365, which command should you use?

- Ans
- 1. Insert Column
 - 2. Insert Row
 - 3. Delete Row
 - 4. Delete Column

Question ID : 264330182117
Option 1 ID : 264330714308
Option 2 ID : 264330714307
Option 3 ID : 264330714309
Option 4 ID : 264330714310
Status : Answered
Chosen Option : 2

Q.5 How do you print a Microsoft Word 365 document?

- Ans
- 1. Select the Print command and then select 'Ok'
 - 2. Select the Ready Printer command and then select 'Ok'
 - 3. Select the Print command
 - 4. Select the Ready Printer command

Question ID : 264330182761
Option 1 ID : 264330716815
Option 2 ID : 264330716817
Option 3 ID : 264330716816
Option 4 ID : 264330716818
Status : Answered
Chosen Option : 1

Q.6 एमएस एक्सेल 365 (MS Excel 365) में, निम्नलिखित में से कौन-सा विकल्प माइक्रोसॉफ्ट एक्सेल (Microsoft Excel) में टेबल बनाने का एक लाभ नहीं है?

- Ans
- 1. बढ़ी हुई डेटा अखंडता और सटीकता
 - 2. ऑटोमेटिक फिल्टरिंग और सॉर्टिंग विकल्प
 - 3. बेहतर कैलकुलेशन क्षमता
 - 4. उन्नत विसुअल अपील और फॉर्मेटिंग

Question ID : 264330178081
Option 1 ID : 264330698389
Option 2 ID : 264330698387
Option 3 ID : 264330698390
Option 4 ID : 264330698388
Status : Not Answered
Chosen Option : --

Q.7 Which of the following is the correct structure of an email address?

- Ans
- 1. name_domain.com
 - 2. name@com_domain
 - 3. name@domain.com
 - 4. name.com

Question ID : 264330180790
Option 1 ID : 264330709124
Option 2 ID : 264330709125
Option 3 ID : 264330709123
Option 4 ID : 264330709126
Status : Answered
Chosen Option : 3

Q.8 Which of the following is the correct option to convert text into superscript?

- Ans
- 1. Shift+S
 - 2. Ctrl+Shift+ +
 - 3. Ctrl+Shift+U
 - 4. Ctrl+Shift+S

Question ID : 264330180710
Option 1 ID : 264330708809
Option 2 ID : 264330708807
Option 3 ID : 264330708810
Option 4 ID : 264330708808
Status : Answered
Chosen Option : 2

Q.9 Which of the following statements related to MS Word 365 is/are correct?

- 1) 'Save' allows you to update a previously saved file with new content.
- 2) 'Save As' allows you to save a new file or an existing file to a new place with the same name or a different name.

- Ans
- 1. Neither (1) nor (2)
 - 2. Only (1)
 - 3. Both (1) and (2)
 - 4. Only (2)

Question ID : 264330180638
Option 1 ID : 264330708522
Option 2 ID : 264330708519
Option 3 ID : 264330708521
Option 4 ID : 264330708520
Status : Answered
Chosen Option : 4

Q.10 A global network of interconnected computers and devices is called _____.

- Ans
- 1. Manet
 - 2. Ethernet
 - 3. Intranet
 - 4. Internet

Question ID : 264330177649
Option 1 ID : 264330696713
Option 2 ID : 264330696711
Option 3 ID : 264330696714
Option 4 ID : 264330696712
Status : Answered
Chosen Option : 4