

## Constable Executive Male and Female in Delhi Police Examination 2023

Roll Number	
Candidate Name	
Venue Name	
Exam Date	17/11/2023
Exam Time	3:00 PM - 4:30 PM
Subject	Constable Executive Male and Female in Delhi Police Examination 2023

### Section : General Knowledge

Q.1 Which country did India beat in the Thomas Cup Finals in 2022?

- Ans
- 1. Indonesia
  - 2. Malaysia
  - 3. Pakistan
  - 4. Singapore

Question ID : 264330113740  
Option 1 ID : 264330447047  
Option 2 ID : 264330447045  
Option 3 ID : 264330447048  
Option 4 ID : 264330447046  
Status : Answered  
Chosen Option : 1

Q.2 Who among the following is a famous performer of Kalbelia dance form?

- Ans
- 1. Minati Mishra
  - 2. Geeta Mahalik
  - 3. Gulabo Sapera
  - 4. Vyjayanti Kashi

Question ID : 264330141361  
Option 1 ID : 264330553780  
Option 2 ID : 264330553781  
Option 3 ID : 264330553779  
Option 4 ID : 264330553782  
Status : Answered  
Chosen Option : 3

Q.3 नलवाड़ी मेला किस भारतीय राज्य में आयोजित किया जाता है?

- Ans
- 1. पंजाब
  - 2. उत्तर प्रदेश
  - 3. हिमाचल प्रदेश
  - 4. हरियाणा

Question ID : 264330132418  
Option 1 ID : 264330518768  
Option 2 ID : 264330518770  
Option 3 ID : 264330518767  
Option 4 ID : 264330518769  
Status : Answered  
Chosen Option : 2

Q.4 Which of the following is an example of a Western coast port?

- Ans  1. Vishakhapatnam port  
 2. Kandla port  
 3. Haldia port  
 4. Tuticorin port

Question ID : 264330173603  
Option 1 ID : 264330680891  
Option 2 ID : 264330680894  
Option 3 ID : 264330680892  
Option 4 ID : 264330680893  
Status : Answered  
Chosen Option : 2

Q.5 रथ सप्तमी का सांस्कृतिक उत्सव मुख्य रूप से भारत के किस राज्य में मनाया जाता है?

- Ans  1. पश्चिम बंगाल  
 2. बिहार  
 3. हिमाचल प्रदेश  
 4. आंध्र प्रदेश

Question ID : 264330109611  
Option 1 ID : 264330430722  
Option 2 ID : 264330430721  
Option 3 ID : 264330430724  
Option 4 ID : 264330430723  
Status : Answered  
Chosen Option : 1

Q.6 Who has the power to grant pardons?

- Ans  1. Chief Justice of India  
 2. Attorney General  
 3. Chief Minister  
 4. President

Question ID : 264330169051  
Option 1 ID : 264330663010  
Option 2 ID : 264330663009  
Option 3 ID : 264330663007  
Option 4 ID : 264330663008  
Status : Answered  
Chosen Option : 4

Q.7 The aim of 'Poorna Swaraj' was adopted during the 1929 session of the \_\_\_\_\_ Congress.

- Ans  1. Lucknow  
 2. Poona  
 3. Amritsar  
 4. Lahore

Question ID : 264330118992  
Option 1 ID : 264330466624  
Option 2 ID : 264330466623  
Option 3 ID : 264330466626  
Option 4 ID : 264330466625  
Status : Answered  
Chosen Option : 4

Q.8 Which of the following Articles mentions that the state shall not deny to any person equality before the law or the equal protection of the laws within the territory of India?

- Ans
- 1. Article 12
  - 2. Article13
  - 3. Article15
  - 4. Article14

Question ID : 264330180042  
Option 1 ID : 264330706151  
Option 2 ID : 264330706152  
Option 3 ID : 264330706154  
Option 4 ID : 264330706153  
Status : Answered  
Chosen Option : 4

Q.9 नादिर शाह \_\_\_\_\_ का शासक था जिसने 1739 में दिल्ली शहर पर विजय प्राप्त करके इसे लूट लिया था।

- Ans
- 1. ईरान
  - 2. इराक
  - 3. तुर्की
  - 4. मंगोलिया

Question ID : 264330114089  
Option 1 ID : 264330448444  
Option 2 ID : 264330448441  
Option 3 ID : 264330448442  
Option 4 ID : 264330448443  
Status : Answered  
Chosen Option : 1

Q.10 Nanjiamma received the National Award \_\_\_\_\_ for the song Kalakkatha Sandana from the Malayalam film Ayyappanum Koshiyum.

- Ans
- 1. 2019
  - 2. 2018
  - 3. 2020
  - 4. 2021

Question ID : 264330114171  
Option 1 ID : 264330448769  
Option 2 ID : 264330448772  
Option 3 ID : 264330448770  
Option 4 ID : 264330448771  
Status : Answered  
Chosen Option : 1

Q.11 State legislature has the concurrent powers enumerated in List \_\_\_\_\_ of the Seventh Schedule of the Constitution of India.

- Ans
- 1. I
  - 2. IV
  - 3. II
  - 4. III

Question ID : 26433086864  
Option 1 ID : 264330341097  
Option 2 ID : 264330341100  
Option 3 ID : 264330341098  
Option 4 ID : 264330341099  
Status : Answered  
Chosen Option : 4

Q.12 Who among the following social reformers of British India was known as Lokhitwadi?

- Ans
- 1. VeeresalingamPantulu
  - 2. Gopal Hari Deshmukh
  - 3. Narayan Guru
  - 4. Jyotiba Phule

Question ID : 264330182742  
Option 1 ID : 264330716742  
Option 2 ID : 264330716741  
Option 3 ID : 264330716740  
Option 4 ID : 264330716739  
Status : Answered  
Chosen Option : 2

Q.13 Sonal Mansingh got the Sangeet Natak Akademi Award for which form of dance?

- Ans
- 1. Manipuri
  - 2. Kuchipudi
  - 3. Mohiniattam
  - 4. Odissi

Question ID : 26433074871  
Option 1 ID : 264330293574  
Option 2 ID : 264330293572  
Option 3 ID : 264330293573  
Option 4 ID : 264330293575  
Status : Answered  
Chosen Option : 4

Q.14 Who among the following established the Arya Samaj and in which year?

- Ans
- 1. Swami Dayananda Sarasvati in 1875
  - 2. Swami Vivekananda in 1785
  - 3. Swami Vivekananda in 1875
  - 4. Swami Dayananda Sarasvati in 1785

Question ID : 264330118997  
Option 1 ID : 264330466643  
Option 2 ID : 264330466646  
Option 3 ID : 264330466644  
Option 4 ID : 264330466645  
Status : Answered  
Chosen Option : 1

Q.15 How many fundamental duties were enumerated in the 42nd Amendment of the Constitution?

- Ans  1. 10  
 2. 8  
 3. 12  
 4. 18

Question ID : 264330116389  
Option 1 ID : 264330457642  
Option 2 ID : 264330457641  
Option 3 ID : 264330457643  
Option 4 ID : 264330457644  
Status : Answered  
Chosen Option : 1

Q.16 Which natural form of vitamin B helps to prevent some of the major birth defects of the baby's brain (anencephaly) and spina bifida?

- Ans  1. Pyridoxine  
 2. Cobalamin  
 3. Pantothenic acid  
 4. Folate

Question ID : 264330130987  
Option 1 ID : 264330513062  
Option 2 ID : 264330513059  
Option 3 ID : 264330513061  
Option 4 ID : 264330513060  
Status : Answered  
Chosen Option : 3

Q.17 Which is the largest brackish water lagoon in Asia that was designated as a 'Ramsar Site' in 1981?

- Ans  1. Loktak lake  
 2. Chilika lake  
 3. Tampara lake  
 4. Harike lake

Question ID : 264330141745  
Option 1 ID : 264330555301  
Option 2 ID : 264330555302  
Option 3 ID : 264330555300  
Option 4 ID : 264330555299  
Status : Answered  
Chosen Option : 2

Q.18 Which of the following Trophies/Cups is related to cricket?

- Ans  1. Thomas Cup  
 2. Santosh Trophy  
 3. Durand Cup  
 4. Duleep Trophy

Question ID : 264330132554  
Option 1 ID : 264330519313  
Option 2 ID : 264330519312  
Option 3 ID : 264330519314  
Option 4 ID : 264330519311  
Status : Answered  
Chosen Option : 4

**Q.19** In which of the following states was the first edition of the Khelo India University Games held in 2020?

- Ans  1. Odisha  
 2. Assam  
 3. Haryana  
 4. Karnataka

Question ID : 264330118458  
Option 1 ID : 264330465234  
Option 2 ID : 264330465235  
Option 3 ID : 264330465233  
Option 4 ID : 264330465236  
Status : Answered  
Chosen Option : 1

**Q.20** Who became the first Indian woman to win an Olympic medal?

- Ans  1. Sakshi Malik  
 2. Mary Kom  
 3. Saina Nehwal  
 4. Karnam Malleswari

Question ID : 264330119258  
Option 1 ID : 264330467322  
Option 2 ID : 264330467319  
Option 3 ID : 264330467321  
Option 4 ID : 264330467320  
Status : Answered  
Chosen Option : 4

**Q.21** Vacuoles in plant cells can occupy up to what percentage of the cell's volume?

- Ans  1. 20  
 2. 60  
 3. 90  
 4. 40

Question ID : 264330131729  
Option 1 ID : 264330516018  
Option 2 ID : 264330516016  
Option 3 ID : 264330516015  
Option 4 ID : 264330516017  
Status : Answered  
Chosen Option : 2

**Q.22** Which of the following replaced the Planning Commission in 2014?

- Ans  1. NABARD  
 2. NITI Aayog  
 3. SEBI  
 4. Stand Up India Scheme

Question ID : 264330110169  
Option 1 ID : 264330432955  
Option 2 ID : 264330432954  
Option 3 ID : 264330432953  
Option 4 ID : 264330432956  
Status : Answered  
Chosen Option : 2

**Q.23** The following are the features of which initiative of the Government of India?  
a. It is devised to transform India into a global design and manufacturing hub.  
b. It has an Investor Facilitation Cell to assist investors in seeking regulatory approvals, hand-holding services through the pre-investment phase, execution and after-care support.  
c. It aspires to facilitate investment, foster innovation, enhance skill development and build best-in-class manufacturing infrastructure.

- Ans**
- 1. Start-up India
  - 2. Stand up India
  - 3. Skill India
  - 4. Make in India

Question ID : 264330112498  
Option 1 ID : 264330442079  
Option 2 ID : 264330442077  
Option 3 ID : 264330442080  
Option 4 ID : 264330442078  
Status : Answered  
Chosen Option : 1

**Q.24** उस मौर्य राजा का नाम बताइए जिसने अफगानिस्तान और बलूचिस्तान के रूप में उत्तर पश्चिम तक नियंत्रण बढ़ाया।

- Ans**
- 1. सम्रति
  - 2. चंद्रगुप्त मौर्य
  - 3. दशरथ
  - 4. बिन्दुसार

Question ID : 264330119470  
Option 1 ID : 264330468163  
Option 2 ID : 264330468164  
Option 3 ID : 264330468166  
Option 4 ID : 264330468165  
Status : Answered  
Chosen Option : 2

**Q.25** Which river basin has a catchment area of 5,179 km<sup>2</sup>, which originates from the Belgaum district of Karnataka and falls in Karwar Bay?

- Ans**
- 1. Brahmani
  - 2. Kalinadi
  - 3. Bharathapuzha
  - 4. Palar

Question ID : 264330113533  
Option 1 ID : 264330446219  
Option 2 ID : 264330446218  
Option 3 ID : 264330446217  
Option 4 ID : 264330446220  
Status : Answered  
Chosen Option : 3

Q.26 How many layers of structures consist of the cell envelope?

- Ans
- 1. One
  - 2. Four
  - 3. Three
  - 4. Two

Question ID : 264330113329  
Option 1 ID : 264330445401  
Option 2 ID : 264330445404  
Option 3 ID : 264330445403  
Option 4 ID : 264330445402  
Status : Answered  
Chosen Option : 4

Q.27 विशेष रूप से 1988 में ऑपरेशन कैक्टस के बाद भारत ने किस देश को व्यापक सुरक्षा सहयोग की पेशकश की थी?

- Ans
- 1. भूटान
  - 2. मालदीव
  - 3. नेपाल
  - 4. श्रीलंका

Question ID : 264330130606  
Option 1 ID : 264330511535  
Option 2 ID : 264330511537  
Option 3 ID : 264330511538  
Option 4 ID : 264330511536  
Status : Answered  
Chosen Option : 4

Q.28 Which of the following is NOT listed in the Directive Principles of State Policy?

- Ans
- 1. Equal pay for equal work
  - 2. Promote the welfare of the people
  - 3. Uniform civil code for citizens
  - 4. Rights for transgenders in certain cases

Question ID : 264330130780  
Option 1 ID : 264330512232  
Option 2 ID : 264330512231  
Option 3 ID : 264330512234  
Option 4 ID : 264330512233  
Status : Answered  
Chosen Option : 4

Q.29 Pandit Ram Dayal Sharma was awarded the Padma Shri in 2022 for Nautangi, Swang, Bhagat, \_\_\_\_\_ and Rasiya forms.

- Ans
- 1. Khoria
  - 2. Phag
  - 3. Rasleela
  - 4. Matki

Question ID : 264330111974  
Option 1 ID : 264330439981  
Option 2 ID : 264330439982  
Option 3 ID : 264330439983  
Option 4 ID : 264330439984  
Status : Answered  
Chosen Option : 3

Q.30 In which state is coffee a major plantation crop?

- Ans  1. Haryana  
 2. Karnataka  
 3. Assam  
 4. Madhya Pradesh

Question ID : 264330173602  
Option 1 ID : 264330680887  
Option 2 ID : 264330680889  
Option 3 ID : 264330680888  
Option 4 ID : 264330680890  
Status : Answered  
Chosen Option : 2

Q.31 Which of the following elements has the highest atomic number?

- Ans  1. Copper  
 2. Gold  
 3. Silver  
 4. Iron

Question ID : 264330173655  
Option 1 ID : 264330681102  
Option 2 ID : 264330681099  
Option 3 ID : 264330681100  
Option 4 ID : 264330681101  
Status : Answered  
Chosen Option : 2

Q.32 निम्नलिखित विजयनगर शासकों में से किसने विजयनगर के पास नागलापुरम नामक एक उपनगरीय बस्ती की स्थापना की?

- Ans  1. राम राय  
 2. कृष्ण देव राय  
 3. सदाशिव राय  
 4. अच्युत देव राय

Question ID : 264330179077  
Option 1 ID : 264330702311  
Option 2 ID : 264330702312  
Option 3 ID : 264330702314  
Option 4 ID : 264330702313  
Status : Answered  
Chosen Option : 2

Q.33 निम्नलिखित में से कौन-सा राज्य का नीति निर्देशक सिद्धांत है?

- Ans  1. राष्ट्रीय संघर्ष के आदर्शों को संजोए रखना और उनका पालन करना  
 2. व्यक्तिगत और सामूहिक गतिविधि के सभी क्षेत्रों में उत्कृष्टता की दिशा में प्रयास करना  
 3. संविधान और उसके आदर्शों का पालन करना  
 4. लोक कल्याण की अभिवृद्धि के लिए सामाजिक व्यवस्था बनाए रखना

Question ID : 264330110128  
Option 1 ID : 264330432791  
Option 2 ID : 264330432789  
Option 3 ID : 264330432790  
Option 4 ID : 264330432792  
Status : Answered  
Chosen Option : 4

Q.34 Which of the following statements is correct?

- a) India is the only country in the world that has both tigers and lions.  
b) The natural habitat of the Indian lion is the Gir forest in Gujarat. Tigers are found in the forests of Madhya Pradesh, the Sundarbans of West Bengal and the Himalayan region.

- Ans  1. Only a is correct.  
 2. Only b is correct.  
 3. Both a and b are incorrect.  
 4. Both a and b are correct.

Question ID : 264330178105  
Option 1 ID : 264330698483  
Option 2 ID : 264330698484  
Option 3 ID : 264330698486  
Option 4 ID : 264330698485  
Status : Answered  
Chosen Option : 2

Q.35 'The Test of My Life: From Cricket to Cancer and Back', is the autobiography of which famous Indian cricketer?

- Ans  1. Robin Utthappa  
 2. Akash Chopra  
 3. Suresh Raina  
 4. Yuvraj Singh

Question ID : 264330112855  
Option 1 ID : 264330443507  
Option 2 ID : 264330443505  
Option 3 ID : 264330443506  
Option 4 ID : 264330443508  
Status : Answered  
Chosen Option : 4

Q.36 According to the 2011 census, which state has the highest sex ratio?

- Ans  1. Kerala  
 2. Uttar Pradesh  
 3. Maharashtra  
 4. West Bengal

Question ID : 264330131754  
Option 1 ID : 264330516115  
Option 2 ID : 264330516117  
Option 3 ID : 264330516118  
Option 4 ID : 264330516116  
Status : Answered  
Chosen Option : 1

Q.37 Who wrote the famous autobiography titled 'Becoming'?

- Ans
- 1. Johnny Marr
  - 2. Steffi Graf
  - 3. Andre Agassi
  - 4. Michelle Obama

Question ID : 26433071467  
Option 1 ID : 264330280295  
Option 2 ID : 264330280294  
Option 3 ID : 264330280293  
Option 4 ID : 264330280292  
Status : Answered  
Chosen Option : 4

Q.38 Padma Shri awardee Madhuri Barthwal from \_\_\_\_\_ is a legendary folk singer. She was the first woman music composer for All India Radio.

- Ans
- 1. Punjab
  - 2. Uttar Pradesh
  - 3. Uttarakhand
  - 4. Haryana

Question ID : 264330111954  
Option 1 ID : 264330439903  
Option 2 ID : 264330439904  
Option 3 ID : 264330439901  
Option 4 ID : 264330439902  
Status : Answered  
Chosen Option : 2

Q.39 बिष्णुपुर मंदिर समूह भारत के किस राज्य में स्थित है?

- Ans
- 1. पश्चिम बंगाल
  - 2. मध्य प्रदेश
  - 3. असम
  - 4. बिहार

Question ID : 264330109651  
Option 1 ID : 264330430883  
Option 2 ID : 264330430884  
Option 3 ID : 264330430881  
Option 4 ID : 264330430882  
Status : Answered  
Chosen Option : 2

Q.40 What is the purpose of the 'EShakti' programme?

- Ans
- 1. Digitisation of Self-Help Group details for banks
  - 2. Giving electricity to women farmers
  - 3. Providing credit cards for women
  - 4. Providing loans to buy e-rickshaws

Question ID : 264330111721  
Option 1 ID : 264330438970  
Option 2 ID : 264330438972  
Option 3 ID : 264330438971  
Option 4 ID : 264330438969  
Status : Answered  
Chosen Option : 1

Q.41 Shovana Narayan is associated with which of these dance forms?

- Ans
- 1. Kathakali
  - 2. Kathak
  - 3. Bharatnatyam
  - 4. Mohiniyattam

Question ID : 264330109303  
Option 1 ID : 264330429489  
Option 2 ID : 264330429492  
Option 3 ID : 264330429491  
Option 4 ID : 264330429490  
Status : Answered  
Chosen Option : 2

Q.42 In which of the following states is the Thousand Pillar temple located, in which thousand pillars are built?

- Ans
- 1. Tamil Nadu
  - 2. Maharashtra
  - 3. Kerala
  - 4. Telangana

Question ID : 264330106250  
Option 1 ID : 264330417302  
Option 2 ID : 264330417301  
Option 3 ID : 264330417304  
Option 4 ID : 264330417303  
Status : Answered  
Chosen Option : 1

Q.43 Windfall gains are NOT included while calculating national income as

- Ans
- 1. there is value addition
  - 2. it has already been included
  - 3. there is no income
  - 4. there is no productive activity connected with them

Question ID : 264330116513  
Option 1 ID : 264330458139  
Option 2 ID : 264330458140  
Option 3 ID : 264330458138  
Option 4 ID : 264330458137  
Status : Answered  
Chosen Option : 4

Q.44 Which body was responsible for formulating, implementing and regulating the five year plans before the year 2015?

- Ans
- 1. Reserve Bank of India
  - 2. Ministry of Rural Development
  - 3. Ministry of Finance
  - 4. Planning Commission

Question ID : 264330117738  
Option 1 ID : 264330462770  
Option 2 ID : 264330462769  
Option 3 ID : 264330462767  
Option 4 ID : 264330462768  
Status : Answered  
Chosen Option : 4

Q.45 In \_\_\_\_\_, as an immediate measure to resolve the balance of payments crisis, the Indian rupee was devalued against foreign currencies.

- Ans
- 1. 1971
  - 2. 1981
  - 3. 1991
  - 4. 1961

Question ID : 264330111574  
Option 1 ID : 264330438382  
Option 2 ID : 264330438383  
Option 3 ID : 264330438384  
Option 4 ID : 264330438381  
Status : Answered  
Chosen Option : 3

Q.46 \_\_\_\_\_ scheme was announced based on the five pillars to overcome difficulties caused due to COVID-19 in India.

- Ans
- 1. Atmanirbhar Bharat Abhiyan
  - 2. Swachh Bharat Abhiyan
  - 3. PM-JAY
  - 4. Ayushman Bharat

Question ID : 264330110007  
Option 1 ID : 264330432305  
Option 2 ID : 264330432306  
Option 3 ID : 264330432308  
Option 4 ID : 264330432307  
Status : Answered  
Chosen Option : 4

Q.47 The 'Sinhalese' ethnic group is found in which of the following countries?

- Ans
- 1. Nepal
  - 2. Myanmar
  - 3. Indonesia
  - 4. Sri Lanka

Question ID : 264330119828  
Option 1 ID : 264330469590  
Option 2 ID : 264330469587  
Option 3 ID : 264330469589  
Option 4 ID : 264330469588  
Status : Answered  
Chosen Option : 4

Q.48 Gandhiji participated in the \_\_\_\_\_ as a result of Gandhi-Irwin Pact.

- Ans
- 1. Second Round Table Conference
  - 2. Quit India Movement
  - 3. First Round Table Conference
  - 4. Khilafat movement

Question ID : 264330130557  
Option 1 ID : 264330511342  
Option 2 ID : 264330511341  
Option 3 ID : 264330511339  
Option 4 ID : 264330511340  
Status : Answered  
Chosen Option : 1

Q.49 Who composed the play 'Mrichhakatika'?

- Ans
- 1. Bhans
  - 2. Atul
  - 3. Kalidasa
  - 4. Sudraka

Question ID : 264330119728  
Option 1 ID : 264330469187  
Option 2 ID : 264330469190  
Option 3 ID : 264330469189  
Option 4 ID : 264330469188  
Status : Answered  
Chosen Option : 4

Q.50 The Chief Justice of India will take prior permission from the \_\_\_\_\_, while appointing Adhoc Judges.

- Ans
- 1. Prime Minister of India
  - 2. Collegium of the Supreme Court
  - 3. Parliament
  - 4. President of India

Question ID : 264330120174  
Option 1 ID : 264330470954  
Option 2 ID : 264330470953  
Option 3 ID : 264330470952  
Option 4 ID : 264330470951  
Status : Answered  
Chosen Option : 4

Section : Reasoning

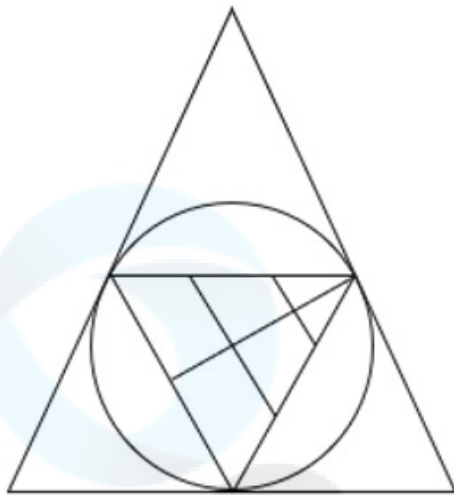
Q.1 Select the set in which the numbers are related in the same way as are the numbers of the following sets.

(NOTE : Operations should be performed on the whole numbers, without breaking down the numbers into its constituent digits. E.g. 13 – Operations on 13 such as adding /deleting /multiplying etc. to 13 can be performed. Breaking down 13 into 1 and 3 and then performing mathematical operations on 1 and 3 is not allowed.)  
(63, 9, 36)  
(105, 15, 60)

- Ans
- 1. (133, 17, 74)
  - 2. (129, 19, 74)
  - 3. (129, 17, 76)
  - 4. (133, 19, 76)

Question ID : 264330175039  
Option 1 ID : 264330686531  
Option 2 ID : 264330686532  
Option 3 ID : 264330686533  
Option 4 ID : 264330686534  
Status : Answered  
Chosen Option : 4

Q.2 How many triangles are there in the given figure?



- Ans
- 1. 14
  - 2. 12
  - 3. 11
  - 4. 13

Question ID : 26433091708

Option 1 ID : 264330360197

Option 2 ID : 264330360199

Option 3 ID : 264330360198

Option 4 ID : 264330360200

Status : Answered

Chosen Option : 1

Q.3 Select the correct combination of mathematical signs to sequentially replace the \* signs and to balance the given equation.  
 $8 * 14 * 3 * 24 * 7 = 168$

- Ans
- 1.  $\times, \times, -, \times$
  - 2.  $+, \times, -, \times$
  - 3.  $+, \times, -, +$
  - 4.  $\times, -, \times, +$

Question ID : 26433092502

Option 1 ID : 264330363299

Option 2 ID : 264330363300

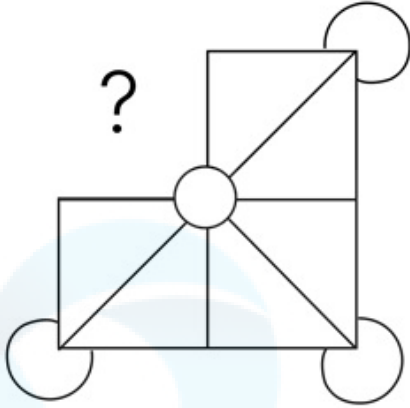
Option 3 ID : 264330363298

Option 4 ID : 264330363297

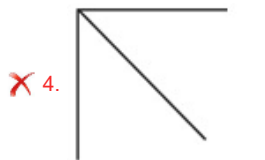
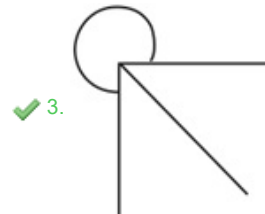
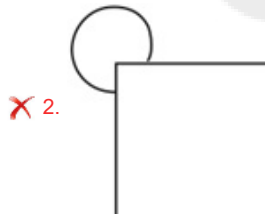

Status : Answered

Chosen Option : 1

Q.4 Select the figure from the given options that will replace the question mark (?) in the figure given below to complete the pattern so that the final image is symmetrical.



Ans



Question ID : 264330114728

Option 1 ID : 264330450999

Option 2 ID : 264330450998

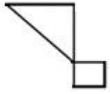
Option 3 ID : 264330451000

Option 4 ID : 264330450997

Status : Answered

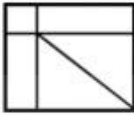
Chosen Option : 3

Q.5 Select the option in which the given figure is embedded (rotation is NOT allowed).



Ans

✗ 1.



✗ 2.



✗ 3.



✓ 4.



Question ID : 264330101168

Option 1 ID : 264330397219

Option 2 ID : 264330397218

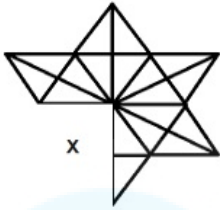
Option 3 ID : 264330397217

Option 4 ID : 264330397220

Status : Answered

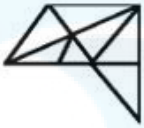
Chosen Option : 4

Q.6 Select a figure from amongst the four given options which, when placed in the blank space of figure (X), would complete the pattern.

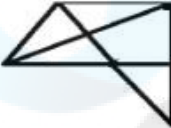


Ans

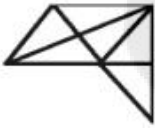
✗ 1.



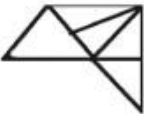
✗ 2.



✓ 3.



✗ 4.



Question ID : 264330102306

Option 1 ID : 264330401692

Option 2 ID : 264330401690

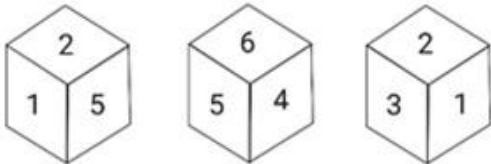
Option 3 ID : 264330401689

Option 4 ID : 264330401691

Status : Answered

Chosen Option : 3

Q.7 Three different positions of the same dice are shown. Find the number on the face opposite the face showing '3'.



Ans ✗ 1. 2

✓ 2. 5

✗ 3. 4

✗ 4. 1

Question ID : 264330116959

Option 1 ID : 264330459918

Option 2 ID : 264330459920

Option 3 ID : 264330459917

Option 4 ID : 264330459919

Status : Answered

Chosen Option : 2

Q.8 Which figure should replace the question mark (?) in the following series to continue the pattern?

B E U T	T U E O	U E O T	T O E Δ	?
7 ↑ 0	B Δ 7	7 B Δ	U 6 7	
Δ	↑	6	B	

Ans

✗ 1.

O T Δ E
6 7 B
U

✗ 2.

T O E Δ
7 U 6
☆

✓ 3.

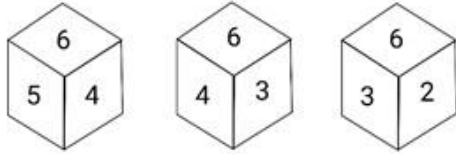
O E Δ T
7 U 6
☆

✗ 4.

O E Δ T
6 7 B
U

Question ID : 264330129622  
 Option 1 ID : 264330507857  
 Option 2 ID : 264330507854  
 Option 3 ID : 264330507856  
 Option 4 ID : 264330507855  
 Status : Answered  
 Chosen Option : 3

Q.9 Three different positions of the same dice are shown. Find the number on the face opposite the face showing '3'.



- Ans
- 1. 6
  - 2. 1
  - 3. 4
  - 4. 5

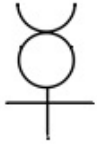
Question ID : 264330116957  
Option 1 ID : 264330459910  
Option 2 ID : 264330459912  
Option 3 ID : 264330459909  
Option 4 ID : 264330459911  
Status : Answered  
Chosen Option : 4

Q.10 If 'A' denotes '+', 'B' denotes '×', 'C' denotes '-' and 'D' denotes '÷', then what will come in place of '?' in the following equation?  
 $80 C 4 B 5 A 20 = ?$

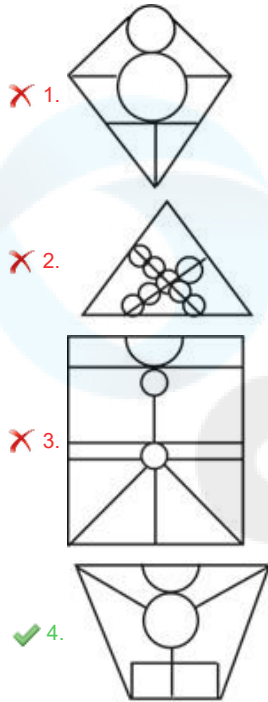
- Ans
- 1. 20
  - 2. 80
  - 3. 40
  - 4. 120

Question ID : 26433082475  
Option 1 ID : 264330323733  
Option 2 ID : 264330323734  
Option 3 ID : 264330323736  
Option 4 ID : 264330323735  
Status : Answered  
Chosen Option : 2

Q.11 Select the option in which the given figure is embedded (rotation is NOT allowed).



Ans



Question ID : 264330111672

Option 1 ID : 264330438776

Option 2 ID : 264330438773

Option 3 ID : 264330438774

Option 4 ID : 264330438775

Status : Answered

Chosen Option : 4

Q.12 Which of the following letter clusters will replace the question mark (?) in the given series to make it logically complete?  
TVU, QSS, NPQ, KMO, ?

- Ans
- ✗ 1. HKM
  - ✗ 2. HKL
  - ✗ 3. IKM
  - ✓ 4. HJM

Question ID : 264330102227

Option 1 ID : 264330401373

Option 2 ID : 264330401374

Option 3 ID : 264330401375

Option 4 ID : 264330401376

Status : Answered

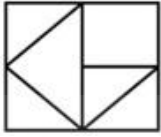
Chosen Option : 4

Q.13 Select the option in which the given figure is embedded (rotation is NOT allowed).

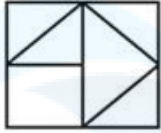


Ans

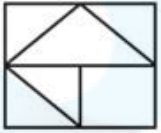
✗ 1.



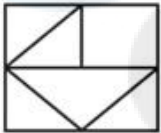
✓ 2.



✗ 3.



✗ 4.



Question ID : 264330101166

Option 1 ID : 264330397209

Option 2 ID : 264330397210

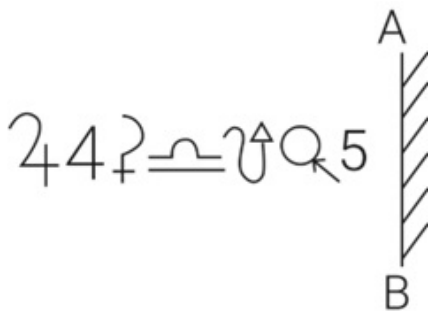
Option 3 ID : 264330397212

Option 4 ID : 264330397211

Status : Answered

Chosen Option : 2

Q.14 Select the correct mirror image of the given figure when the mirror is placed at 'AB' as shown.



Ans

✓ 1.



✗ 2.



✗ 3.



✗ 4.



Question ID : 264330114693

Option 1 ID : 264330450858

Option 2 ID : 264330450857

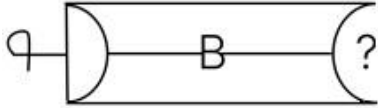
Option 3 ID : 264330450859

Option 4 ID : 264330450860



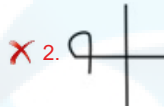

Status : Answered

Chosen Option : 1

Q.15 Select the figure from the given options that will replace the question mark (?) in the figure given below to complete the pattern so that the final image is symmetrical.



Ans



Question ID : 264330114724

Option 1 ID : 264330450981

Option 2 ID : 264330450984

Option 3 ID : 264330450983

Option 4 ID : 264330450982

Status : Answered

Chosen Option : 1

Q.16 Select the option that is related to the third term in the same way as the second term is related to the first term and the sixth term is related to the fifth term.  
23 : 92 :: 44 : ? :: 32 : 128

Ans ✗ 1. 204

✗ 2. 160

✗ 3. 172

✓ 4. 176

Question ID : 264330102258

Option 1 ID : 264330401500

Option 2 ID : 264330401497

Option 3 ID : 264330401498

Option 4 ID : 264330401499

Status : Answered

Chosen Option : 4

Q.17 In a certain code language, 'HAND' is written as '16' and 'ENTRY' is written as '20'. How will 'AIRPORT' be written in that language?

Ans ✗ 1. 24

✗ 2. 26

✓ 3. 28

✗ 4. 22

Question ID : 26433089413

Option 1 ID : 264330351153

Option 2 ID : 264330351155

Option 3 ID : 264330351154

Option 4 ID : 264330351156

Status : Answered

Chosen Option : 3

Q.18 Select the option that is related to the fifth letter cluster in the same way as the second letter cluster is related to the first letter cluster and the fourth letter cluster is related to the third letter cluster.  
GBEJ : DGBO :: TJDG : QOAL :: BAHQ : ?

- Ans
- 1. PLWM
  - 2. YFEV
  - 3. YFRM
  - 4. OJEH

Question ID : 26433074688  
Option 1 ID : 264330292843  
Option 2 ID : 264330292842  
Option 3 ID : 264330292840  
Option 4 ID : 264330292841  
Status : Answered  
Chosen Option : 2

Q.19 Select the number from the given options that can replace the question mark (?) in the following series.  
3, 6, 12, 24, ?, 96

- Ans
- 1. 48
  - 2. 36
  - 3. 72
  - 4. 84

Question ID : 264330106386  
Option 1 ID : 264330417846  
Option 2 ID : 264330417845  
Option 3 ID : 264330417847  
Option 4 ID : 264330417848  
Status : Answered  
Chosen Option : 1

Q.20 Which figure should replace the question mark (?) in the following series to continue the pattern?

	☆		9		Z		∩	
∩	R		R	∩	☆	9	9	☆
Z	9	☆	Z	R	∩	Z	R	?

Ans

✓ 1.

		R
	Z	∩
9		☆

✗ 2.

		☆
	Z	∩
R		9

✗ 3.

		R
	∩	Z
☆		9

✗ 4.

		☆
	Z	R
9		∩

Question ID : 264330129608

Option 1 ID : 264330507798

Option 2 ID : 264330507801

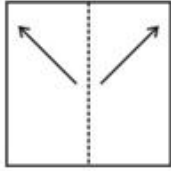
Option 3 ID : 264330507799

Option 4 ID : 264330507800

Status : Answered

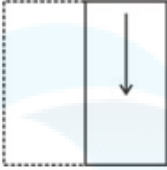
Chosen Option : 1

Q.21 A square transparent sheet with a pattern is shown in the given figure. How will the pattern appear when the transparent sheet is folded at the dotted line.

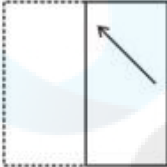


Ans

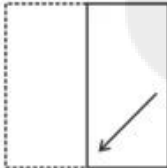
✗ 1.



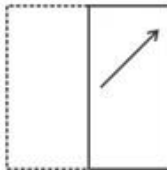
✗ 2.



✗ 3.



✓ 4.



Question ID : 264330117837

Option 1 ID : 264330463165

Option 2 ID : 264330463163

Option 3 ID : 264330463166

Option 4 ID : 264330463164

Status : Answered

Chosen Option : 4

Q.22 Which figure should replace the question mark (?) in the following series to continue the pattern?

P	D	E	3	P	I	O	E	P	D	O	I	
3	O		O	D		D	3		3	E		?
	X	I		E	X		X	I		P	X	

Ans

✗ 1.

I	D	O
X	3	
	E	P

✗ 2.

E	P	D
X	O	
	E	I

✗ 3.

3	I	X
E	D	
	O	P

✓ 4.

3	P	O
E	D	
	X	I

Question ID : 264330129623

Option 1 ID : 264330507858

Option 2 ID : 264330507860

Option 3 ID : 264330507861

Option 4 ID : 264330507859

Status : Answered

Chosen Option : 4

**Q.23** Read the given statements and conclusions carefully. Assuming that the information given in the statements is true, even if it appears to be at variance with commonly known facts, decide which of the given conclusions logically follow(s) from the statements.

**Statements:**

Some balloons are cars.

Some cars are rockets.

**Conclusions:**

I. Some rockets are balloons.

II. All rockets are balloons.

**Ans** ✓ 1. Neither conclusion I nor II follows

✗ 2. Only conclusion I follows

✗ 3. Only conclusion II follows

✗ 4. Both conclusions I and II follow

Question ID : 26433068292

Option 1 ID : 264330267683

Option 2 ID : 264330267680

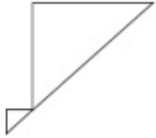
Option 3 ID : 264330267681

Option 4 ID : 264330267682

Status : Answered

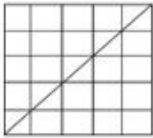
Chosen Option : 1

**Q.24** Select the option in which the given figure is embedded (rotation is NOT allowed).




**Ans**

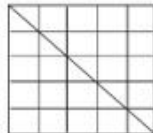
✓ 1.



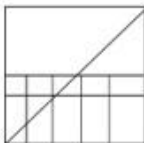
✗ 2.



✗ 3.



✗ 4.



Question ID : 264330112983

Option 1 ID : 264330444020

Option 2 ID : 264330444017

Option 3 ID : 264330444019

Option 4 ID : 264330444018

Status : Answered

Chosen Option : 1

**Q.25** 6 persons are sitting around a circular table facing the centre, with each person facing another person. Anshu is between Rohin and Sonal. Rohin is opposite to Leena. Fizza is not the immediate neighbour of Rohin. Who is sitting opposite to Prabhleen?

- Ans
- 1. Sonal
  - 2. Leena
  - 3. Anshu
  - 4. Fizza

Question ID : 26433086246  
Option 1 ID : 264330338680  
Option 2 ID : 264330338678  
Option 3 ID : 264330338677  
Option 4 ID : 264330338679  
Status : Answered  
Chosen Option : 1

Section : Numerical Ability

**Q.1** A shopkeeper is offering 10% discount on a shirt marked at ₹4,000 and still earns a profit of 20%. What is the cost price (in ₹)?

- Ans
- 1. 3,200
  - 2. 3,333
  - 3. 3,600
  - 4. 3,000

Question ID : 264330130002  
Option 1 ID : 264330509242  
Option 2 ID : 264330509240  
Option 3 ID : 264330509239  
Option 4 ID : 264330509241  
Status : Answered  
Chosen Option : 4

**Q.2** Find the volume (in  $\text{cm}^3$ ) of a cylinder with the diameter of base 8 cm and height 35 cm.

(Take  $\pi = \frac{22}{7}$ )

- Ans
- 1. 1760
  - 2. 1792
  - 3. 1780
  - 4. 1731

Question ID : 264330112437  
Option 1 ID : 264330441833  
Option 2 ID : 264330441836  
Option 3 ID : 264330441835  
Option 4 ID : 264330441834  
Status : Answered  
Chosen Option : 1

Q.3 The average weight of the first 14 persons among 15 persons is 80 kg. The weight of the 15<sup>th</sup> person is 42 kg more than the average weight of all 15 persons. Find the weight (in Kg) of the 15<sup>th</sup> person.

- Ans
- 1. 127
  - 2. 121
  - 3. 125
  - 4. 123

Question ID : 264330131841  
Option 1 ID : 264330516466  
Option 2 ID : 264330516463  
Option 3 ID : 264330516465  
Option 4 ID : 264330516464  
Status : Answered  
Chosen Option : 3

Q.4 Find the area (in square cm) of a right angled triangle whose altitude is 7 cm less than its base and its hypotenuse is 17 cm.

- Ans
- 1. 48
  - 2. 84
  - 3. 72
  - 4. 60

Question ID : 264330130123  
Option 1 ID : 264330509723  
Option 2 ID : 264330509726  
Option 3 ID : 264330509725  
Option 4 ID : 264330509724  
Status : Answered  
Chosen Option : 4

Q.5 How much should you invest today at 10% compound interest annually to accumulate ₹1,46,410 in 4 years?

- Ans
- 1. ₹1,00,000
  - 2. ₹1,10,000
  - 3. ₹1,11,100
  - 4. ₹1,00,500

Question ID : 264330106011  
Option 1 ID : 264330416347  
Option 2 ID : 264330416345  
Option 3 ID : 264330416348  
Option 4 ID : 264330416346  
Status : Answered  
Chosen Option : 1

**Q.6** Deepa deposited ₹10,000 in a bank on simple interest. After 4 years, she received an amount of ₹12,400. Find the rate of interest.

- Ans**  1. 6% p.a.  
 2. 7% p.a.  
 3. 5.5% p.a.  
 4. 6.5% p.a.

Question ID : 264330118082  
Option 1 ID : 264330464145  
Option 2 ID : 264330464143  
Option 3 ID : 264330464146  
Option 4 ID : 264330464144  
Status : Answered  
Chosen Option : 1

**Q.7** The largest 4-digit prime number is:

- Ans**  1. 9991  
 2. 9967  
 3. 9983  
 4. 9973

Question ID : 264330104480  
Option 1 ID : 264330410224  
Option 2 ID : 264330410221  
Option 3 ID : 264330410223  
Option 4 ID : 264330410222  
Status : Answered  
Chosen Option : 3

**Q.8** A man takes 40 minutes to cover a certain distance at a speed of 9 km/h. If he walks with a speed of 12 km/h, he covers the same distance in:

- Ans**  1. 28 minutes  
 2. 32 minutes  
 3. 25 minutes  
 4. 30 minutes

Question ID : 264330106014  
Option 1 ID : 264330416358  
Option 2 ID : 264330416360  
Option 3 ID : 264330416357  
Option 4 ID : 264330416359  
Status : Answered  
Chosen Option : 4

Q.9 Ram and Naresh can complete a work together in 20 days and Naresh and Shyam together in 15 days. All three together can complete the work in 12 days. In how many days can Ram and Shyam together complete the work?

- Ans
- 1. 26
  - 2. 28
  - 3. 20
  - 4. 25

Question ID : 264330104326  
Option 1 ID : 264330409607  
Option 2 ID : 264330409608  
Option 3 ID : 264330409605  
Option 4 ID : 264330409606  
Status : Answered  
Chosen Option : 3

Q.10 If  $3y = A$  and  $6A = 3B$ , then  $\frac{y}{B}$  is:

- Ans
- 1.  $\frac{6}{1}$
  - 2.  $\frac{1}{5}$
  - 3.  $\frac{1}{3}$
  - 4.  $\frac{1}{6}$

Question ID : 264330130936  
Option 1 ID : 264330512857  
Option 2 ID : 264330512858  
Option 3 ID : 264330512856  
Option 4 ID : 264330512855  
Status : Answered  
Chosen Option : 4

Q.11 What is the smallest number which leaves remainder 3 when divided by any of the numbers 5, 8 and 9, but leaves no remainder when it is divided by 11?

- Ans
- 1. 363
  - 2. 563
  - 3. 463
  - 4. 663

Question ID : 264330104268  
Option 1 ID : 264330409373  
Option 2 ID : 264330409375  
Option 3 ID : 264330409374  
Option 4 ID : 264330409376  
Status : Answered  
Chosen Option : 1

Q.12 Amit received his monthly salary. The ratio of his expenditure to savings is 3 : 2. What percentage of his salary did he spend and what percentage was saved by him, respectively?

- Ans  1. 60% and 40%
2. 65% and 35%
3. 70% and 30%
4. 55% and 45%

Question ID : 264330104393  
Option 1 ID : 264330409875  
Option 2 ID : 264330409874  
Option 3 ID : 264330409873  
Option 4 ID : 264330409876  
Status : Answered  
Chosen Option : 1

Q.13 Find the number of ways in which 960 can be written as the product of two numbers that are co-prime to each other.

- Ans  1. 6
2. 2
3. 4
4. 8

Question ID : 264330111447  
Option 1 ID : 264330437875  
Option 2 ID : 264330437873  
Option 3 ID : 264330437874  
Option 4 ID : 264330437876  
Status : Answered  
Chosen Option : 3

Q.14 A person has some amount initially. He gives 30% of the amount to his wife. Then from the remaining amount, he gives 20%, 20% and 15%, respectively, to both his sons and one daughter. Now from the amount left, he pays  $\frac{1}{3}$  of the amount as house rent and the remaining amount of ₹33,600 he deposits in the bank. Find his initial amount.

- Ans  1. ₹1,00,000
2. ₹1,40,000
3. ₹1,60,000
4. ₹1,20,000

Question ID : 264330129926  
Option 1 ID : 264330508937  
Option 2 ID : 264330508935  
Option 3 ID : 264330508936  
Option 4 ID : 264330508938  
Status : Answered  
Chosen Option : 3

**Q.15** The selling price of 61 items is equal to the cost price of 53 items. What is the profit or loss percentage (rounded off to two decimal places)?

- Ans**
- 1. 8.25% loss
  - 2. 8.25% profit
  - 3. 13.11% loss
  - 4. 13.11% profit

Question ID : 264330126514  
Option 1 ID : 264330495729  
Option 2 ID : 264330495728  
Option 3 ID : 264330495731  
Option 4 ID : 264330495730  
Status : Answered  
Chosen Option : 3

Section : Computer Proficiency

**Q.1** When replying to an email, what is the key difference between 'Reply' and 'Reply all'?

- Ans**
- 1. 'Reply' forwards email to specific contacts, while 'Reply all' forwards the original email to all contacts in the address book.
  - 2. 'Reply' allows you to edit the original email's content before sending the response, while 'Reply all' automatically includes the entire original email's content in the response.
  - 3. 'Reply' sends the response only to the original sender, while 'Reply all' sends the response to all recipients of the original email.
  - 4. 'Reply' attaches any files from the original email, while 'Reply all' includes any attachments along with the entire original email's content in response.

Question ID : 264330176673  
Option 1 ID : 264330692910  
Option 2 ID : 264330692907  
Option 3 ID : 264330692908  
Option 4 ID : 264330692909  
Status : Answered  
Chosen Option : 3

**Q.2** In MS word 365 To change the formatting of the text to match the formatting of other text in a document, which of the following tools can be used?

- Ans**
- 1. Format painter
  - 2. Paragraph alignment
  - 3. SmartArt
  - 4. Change styles

Question ID : 264330175973  
Option 1 ID : 264330690188  
Option 2 ID : 264330690189  
Option 3 ID : 264330690187  
Option 4 ID : 264330690190  
Status : Answered  
Chosen Option : 1

**Q.3** In MS Excel 365 which of the following keyboard shortcuts is used to save a workbook in MS-Excel?

- Ans**
- 1. Ctrl + S
  - 2. Ctrl + Alt + S
  - 3. Shift + S
  - 4. Ctrl + Shift + S

Question ID : 264330178259  
Option 1 ID : 264330699091  
Option 2 ID : 264330699093  
Option 3 ID : 264330699094  
Option 4 ID : 264330699092  
Status : Answered  
Chosen Option : 1

**Q.4** In Microsoft Word 2019, which option is common in both the 'Indents & Spacing' and 'Line & Page Breaks' tabs of the 'Paragraph' dialog box?

- Ans**
- 1. Preview
  - 2. General
  - 3. Textbox options
  - 4. Indentation

Question ID : 264330182755  
Option 1 ID : 264330716792  
Option 2 ID : 264330716791  
Option 3 ID : 264330716793  
Option 4 ID : 264330716794  
Status : Answered  
Chosen Option : 1

**Q.5** In MS Excel 365, when you right-click on a cell and select 'Filter,' which of the following options is NOT visible?

- Ans**
- 1. Filter by selected cell colour
  - 2. Filter by selected cell font
  - 3. Filter by selected cell height
  - 4. Filter by selected cell values

Question ID : 264330182056  
Option 1 ID : 264330714065  
Option 2 ID : 264330714064  
Option 3 ID : 264330714066  
Option 4 ID : 264330714063  
Status : Answered  
Chosen Option : 3

**Q.6** In MS Excel 2007, which option is used for opening a new or existing spreadsheet?

- Ans**
- 1. Home
  - 2. Insert
  - 3. Format
  - 4. Office button

Question ID : 264330180684  
Option 1 ID : 264330708703  
Option 2 ID : 264330708704  
Option 3 ID : 264330708706  
Option 4 ID : 264330708705  
Status : Answered  
Chosen Option : 1

Q.7 Which of the following is the correct option to draw a line through the middle of text in MS Word 365?

- Ans
- 1. Line
  - 2. Strikethrough
  - 3. Dash
  - 4. Underline

Question ID : 264330176723  
Option 1 ID : 264330693109  
Option 2 ID : 264330693107  
Option 3 ID : 264330693110  
Option 4 ID : 264330693108  
Status : Answered  
Chosen Option : 2

Q.8 Which layer of the internet architecture model is responsible for routing packets between networks?

- Ans
- 1. Transport layer
  - 2. Data link layer
  - 3. Network layer
  - 4. Application layer

Question ID : 264330178550  
Option 1 ID : 264330700228  
Option 2 ID : 264330700230  
Option 3 ID : 264330700229  
Option 4 ID : 264330700227  
Status : Answered  
Chosen Option : 2

Q.9 Which of the following best describes the difference between Save and Save As?

- Ans
- 1. 'Save' is used to save file in a local computer, while 'Save As' is used to save it on cloud.
  - 2. 'Save' is used to save file as read only file, while 'Save As' is used to save it as editable file.
  - 3. 'Save' is used to save the document for the first time, while 'Save As' is used to save the document with a new name or different file format.
  - 4. 'Save' is used to save file in compressed manner, while 'Save As' is used to save it as it is.

Question ID : 264330176718  
Option 1 ID : 264330693088  
Option 2 ID : 264330693087  
Option 3 ID : 264330693089  
Option 4 ID : 264330693090  
Status : Answered  
Chosen Option : 3

**Q.10** Which of the following options will allow you to set text within a paragraph at different margins in MS Word 365?

- Ans**
- 1. Page breaks
  - 2. Border
  - 3. Line spacing
  - 4. Indenting

Question ID : 264330180838

Option 1 ID : 264330709315

Option 2 ID : 264330709317

Option 3 ID : 264330709316

Option 4 ID : 264330709318

Status : Answered

Chosen Option : 4