

Constable Executive Male and Female in Delhi Police Examination 2023

Roll Number	
Candidate Name	
Venue Name	
Exam Date	02/12/2023
Exam Time	9:00 AM - 10:30 AM
Subject	Constable Executive Male and Female in Delhi Police Examination 2023

Section : General Knowledge

Q.1 Which of the following is the key aspect of Constitutional bodies?

- Ans
- 1. Made by the Parliament
 - 2. Made by the President and PM
 - 3. Temporary status
 - 4. Mentioned in the Constitution

Question ID : 264330158677
Option 1 ID : 264330622067
Option 2 ID : 264330622069
Option 3 ID : 264330622070
Option 4 ID : 264330622068
Status : Answered
Chosen Option : 4

Q.2 Which State has the maximum strength of members in Lok Sabha?

- Ans
- 1. Andhra Pradesh
 - 2. Uttar Pradesh
 - 3. Karnataka
 - 4. Maharashtra

Question ID : 264330110135
Option 1 ID : 264330432820
Option 2 ID : 264330432818
Option 3 ID : 264330432819
Option 4 ID : 264330432817
Status : Answered
Chosen Option : 2

Q.3 What is the name of the phenomenon by which light splits into its component colours upon passing through a prism?

- Ans
- 1. Diffraction
 - 2. Dispersion
 - 3. Reflection
 - 4. Refraction

Question ID : 264330177003
Option 1 ID : 264330694210
Option 2 ID : 264330694208
Option 3 ID : 264330694209
Option 4 ID : 264330694207
Status : Answered
Chosen Option : 1

Q.4 The dance-pavilion (mandapa), the vast complex within a quadrilateral precinct of the Odisha school of architecture, is known as _____.

- Ans
- 1. Jagamohana
 - 2. Vimana
 - 3. Deul
 - 4. Gopuram

Question ID : 264330111857
Option 1 ID : 264330439514
Option 2 ID : 264330439516
Option 3 ID : 264330439513
Option 4 ID : 264330439515
Status : Answered
Chosen Option : 2

Q.5 Who among the following Buddhist monks came from China to India during the reign of Chandragupta II?

- Ans
- 1. Song Yun
 - 2. Fa-Hien
 - 3. Hiuen-Tsang
 - 4. I-Tsing

Question ID : 264330182694
Option 1 ID : 264330716549
Option 2 ID : 264330716547
Option 3 ID : 264330716550
Option 4 ID : 264330716548
Status : Answered
Chosen Option : 3

Q.6 The Lingayats community of present-day Karnataka originated in the 12th century CE due to the emergence of a movement led by _____.

- Ans
- 1. Tevaram
 - 2. Basavanna
 - 3. Sambandar
 - 4. Shivanaris

Question ID : 264330118969
Option 1 ID : 264330466532
Option 2 ID : 264330466533
Option 3 ID : 264330466534
Option 4 ID : 264330466531
Status : Answered
Chosen Option : 4

Q.7 Which of the following movements was started by Khan Abdul Ghaffar Khan?

- Ans
- 1. Khudai Khidmatgars
 - 2. Ghadhar Movement
 - 3. The Deccan Revolt
 - 4. Individual Satyagraha

Question ID : 264330114113
Option 1 ID : 264330448539
Option 2 ID : 264330448538
Option 3 ID : 264330448537
Option 4 ID : 264330448540
Status : Answered
Chosen Option : 1

Q.8 Khullam and Cheraw are the dance forms of which of the following states?

- Ans 1. Manipur
 2. Mizoram
 3. Assam
 4. Tripura

Question ID : 264330110418
Option 1 ID : 264330433950
Option 2 ID : 264330433949
Option 3 ID : 264330433951
Option 4 ID : 264330433952
Status : Answered
Chosen Option : 4

Q.9 Which of the given statements about Phylum Angiosperms are correct?

- A. Angiosperms are non-vascular plants with stems, roots and leaves.
B. The seeds of the angiosperm are naked.
C. These make up the majority of all plants on earth.
D. The seeds develop inside the plant organs and form fruit.

- Ans 1. Only A and C
 2. Only C and D
 3. Only A, B and C
 4. Only B, C and D

Question ID : 264330137999
Option 1 ID : 264330540603
Option 2 ID : 264330540606
Option 3 ID : 264330540604
Option 4 ID : 264330540605
Status : Answered
Chosen Option : 3

Q.10 What is the minimum age required for the appointment of a person as a governor?

- Ans 1. 30 years
 2. 25 years
 3. 35 years
 4. 18 years

Question ID : 264330173536
Option 1 ID : 264330680625
Option 2 ID : 264330680624
Option 3 ID : 264330680626
Option 4 ID : 264330680623
Status : Answered
Chosen Option : 1

Q.11 Which of the following neighbouring countries of India ranks the least in Human Development Index (HDI) 2021-22 among other countries?

- Ans
- 1. Bangladesh
 - 2. Afghanistan
 - 3. Pakistan
 - 4. Myanmar

Question ID : 264330120352
Option 1 ID : 264330471660
Option 2 ID : 264330471662
Option 3 ID : 264330471659
Option 4 ID : 264330471661
Status : Answered
Chosen Option : 1

Q.12 Which of the following pairs is correctly matched?

- Ans
- 1. Third man – Cricket
 - 2. Header – Hockey
 - 3. Dribble – Hockey
 - 4. Bicycle kick – Basketball

Question ID : 264330118912
Option 1 ID : 264330466304
Option 2 ID : 264330466303
Option 3 ID : 264330466306
Option 4 ID : 264330466305
Status : Answered
Chosen Option : 1

Q.13 In which of the following Articles of the Constitution of India is it mentioned that “it shall be the duty of every citizen of India to defend the country and render national service when called upon to do so”?

- Ans
- 1. 51A (i)
 - 2. 51A (k)
 - 3. 51A (d)
 - 4. 51A (j)

Question ID : 264330133058
Option 1 ID : 264330521284
Option 2 ID : 264330521286
Option 3 ID : 264330521283
Option 4 ID : 264330521285
Status : Answered
Chosen Option : 3

Q.14 Who was the first president of the All-India Trade Union Congress?

- Ans
- 1. Lala Lajpat Rai
 - 2. MN Roy
 - 3. NM Lokhande
 - 4. Lokmanya Tilak

Question ID : 264330120300
Option 1 ID : 264330471452
Option 2 ID : 264330471453
Option 3 ID : 264330471454
Option 4 ID : 264330471451
Status : Answered
Chosen Option : 4

Q.15 The first five year plan was presented to the parliament by which of the following personalities?

- Ans 1. Jawaharlal Nehru
 2. Indira Gandhi
 3. PC Mahalanobis
 4. Rajendra Prasad

Question ID : 264330117741
Option 1 ID : 264330462782
Option 2 ID : 264330462781
Option 3 ID : 264330462779
Option 4 ID : 264330462780
Status : Answered
Chosen Option : 3

Q.16 Who was selected as the 'Best Male Athlete' in the National Games-2022?

- Ans 1. Sajan Prakash
 2. Siva Subaramani
 3. Jeswin Aldrin
 4. Ram Baboo

Question ID : 264330113748
Option 1 ID : 264330447079
Option 2 ID : 264330447078
Option 3 ID : 264330447077
Option 4 ID : 264330447080
Status : Answered
Chosen Option : 2

Q.17 Which of the following fundamental duties is violated when a person purposefully spoils an ancient monument?

- Ans 1. To preserve our rich heritage and composite culture.
 2. To protect the unity and integrity of India.
 3. To develop a scientific outlook and humanism.
 4. To defend the country when the need arises.

Question ID : 264330116388
Option 1 ID : 264330457637
Option 2 ID : 264330457640
Option 3 ID : 264330457639
Option 4 ID : 264330457638
Status : Answered
Chosen Option : 1

Q.18 Which of the following is the correct pair of autobiography and its autobiographer?

- Ans 1. Long Walk to Freedom: Malcolm X
 2. Mein Kampf: Adolf Hitler
 3. On Writing: Ernest Hemingway
 4. Open: Anne Frank

Question ID : 26433071425
Option 1 ID : 264330280124
Option 2 ID : 264330280125
Option 3 ID : 264330280127
Option 4 ID : 264330280126
Status : Answered
Chosen Option : 3

Q.19 Which of the following Acts was replaced by the Competition Act 2002?

- Ans
- 1. LERMS
 - 2. FERA
 - 3. MRTP
 - 4. FEMA

Question ID : 26433059314
Option 1 ID : 264330232135
Option 2 ID : 264330232132
Option 3 ID : 264330232134
Option 4 ID : 264330232133
Status : Answered
Chosen Option : 4

Q.20 Which of the following plutonic rocks is usually black or dark green in colour and is mainly composed of plagioclase and augite minerals?

- Ans
- 1. Dolomite
 - 2. Gabbro
 - 3. Zeolites
 - 4. Quartzite

Question ID : 264330114166
Option 1 ID : 264330448749
Option 2 ID : 264330448752
Option 3 ID : 264330448750
Option 4 ID : 264330448751
Status : Answered
Chosen Option : 1

Q.21 What percentage of the water that falls on land returns to the atmosphere through evaporation from over the oceans as well as from other places?

- Ans
- 1. 29%
 - 2. 49%
 - 3. 59%
 - 4. 39%

Question ID : 264330134906
Option 1 ID : 264330528562
Option 2 ID : 264330528560
Option 3 ID : 264330528559
Option 4 ID : 264330528561
Status : Answered
Chosen Option : 2

Q.22 Consider the following statements with respect to the purpose of privatisation:

- (i) It improves financial discipline.
 - (ii) It facilitates modernization.
 - (iii) It helps in improving performance of the PSUs.
- Choose the correct answer.

Ans 1. All (i), (ii) and (iii) are true

2. Only (ii) is true

3. Only (iii) is true

4. Only (i) is true

Question ID : 264330116558

Option 1 ID : 264330458320

Option 2 ID : 264330458318

Option 3 ID : 264330458319

Option 4 ID : 264330458317

Status : Answered

Chosen Option : 1

Q.23 Indian music director AR Rahman won the Oscar in the year _____.

Ans 1. 2009

2. 2008

3. 2005

4. 2011

Question ID : 264330114584

Option 1 ID : 264330450423

Option 2 ID : 264330450422

Option 3 ID : 264330450421

Option 4 ID : 264330450424

Status : Answered

Chosen Option : 4

Q.24 The promotion and development of a strong banking system is the function of _____

Ans 1. foreign bank

2. commercial bank

3. regional rural bank

4. central bank

Question ID : 264330120874

Option 1 ID : 264330473714

Option 2 ID : 264330473711

Option 3 ID : 264330473712

Option 4 ID : 264330473713

Status : Answered

Chosen Option : 4

Q.25 Which of the following is NOT an example of a public sector industry in India?

- Ans 1. Tata Iron and Steel company
 2. National Thermal Power Corporation
 3. Steel Authority of India Limit
 4. Bharat Heavy Electrical Limit

Question ID : 264330132717
Option 1 ID : 264330519966
Option 2 ID : 264330519965
Option 3 ID : 264330519964
Option 4 ID : 264330519963
Status : Answered
Chosen Option : 1

Q.26 Which Indian American music composer received the ASCAP Screen Music Awards 2020 for his NBC's drama series 'This is Us'?

- Ans 1. Sid Sriram
 2. Siddhartha Khosla
 3. Mickey Singh
 4. Paul Sabu

Question ID : 264330112514
Option 1 ID : 264330442142
Option 2 ID : 264330442143
Option 3 ID : 264330442144
Option 4 ID : 264330442141
Status : Not Answered
Chosen Option : --

Q.27 On which of the following days, that is celebrated as a national festival, did India become a Sovereign, Democratic and Republic state?

- Ans 1. Republic Day
 2. Independence Day
 3. Martyr's Day
 4. Gandhi Jayanti

Question ID : 264330118264
Option 1 ID : 264330464873
Option 2 ID : 264330464871
Option 3 ID : 264330464872
Option 4 ID : 264330464874
Status : Answered
Chosen Option : 1

Q.28 Who among the following led the rebels in Kanpur in the revolt of 1857?

- Ans 1. Tatyia Tope
 2. Nana Saheb Peshwa
 3. Kunwar Singh
 4. Birjis Qadr

Question ID : 264330120267
Option 1 ID : 264330471326
Option 2 ID : 264330471325
Option 3 ID : 264330471324
Option 4 ID : 264330471323
Status : Answered
Chosen Option : 2

Q.29 In which type of sale minimum 51% of stake of PSE is sold to private sector ?

- Ans
- 1. minority
 - 2. mixed
 - 3. standard
 - 4. strategic

Question ID : 264330117577
Option 1 ID : 264330462334
Option 2 ID : 264330462336
Option 3 ID : 264330462335
Option 4 ID : 264330462333
Status : Answered
Chosen Option : 4

Q.30 Which of the following trees are found in the Deciduous forests of India?

- Ans
- 1. Teak
 - 2. Ebony
 - 3. Rosewood
 - 4. Mahogany

Question ID : 264330179023
Option 1 ID : 264330702096
Option 2 ID : 264330702095
Option 3 ID : 264330702098
Option 4 ID : 264330702097
Status : Answered
Chosen Option : 4

Q.31 In which year was the Ranji Trophy cricket event series launched?

- Ans
- 1. 1938
 - 2. 1955
 - 3. 1934
 - 4. 1930

Question ID : 264330176078
Option 1 ID : 264330690607
Option 2 ID : 264330690608
Option 3 ID : 264330690609
Option 4 ID : 264330690610
Status : Not Answered
Chosen Option : --

Q.32 Who among the following is NOT associated with the introduction of Green Revolution in India?

- Ans
- 1. MS Swaminathan
 - 2. Inder kumar Gujral
 - 3. Vandana Shiva
 - 4. Norman Borlaug

Question ID : 264330111764
Option 1 ID : 264330439143
Option 2 ID : 264330439142
Option 3 ID : 264330439144
Option 4 ID : 264330439141
Status : Answered
Chosen Option : 2

Q.33 What is the full form of IOA?

- Ans
- 1. International Olympic Association
 - 2. Indian Olympic Amateur
 - 3. Indian Olympic Association
 - 4. India Olympic Association

Question ID : 264330118482
Option 1 ID : 264330465332
Option 2 ID : 264330465331
Option 3 ID : 264330465329
Option 4 ID : 264330465330
Status : Answered
Chosen Option : 1

Q.34 Which of the following is an example of Pteridophytes?

- Ans
- 1. Funaria
 - 2. Sphagnum
 - 3. Polytrichum
 - 4. Salvinia

Question ID : 264330113315
Option 1 ID : 264330445345
Option 2 ID : 264330445347
Option 3 ID : 264330445348
Option 4 ID : 264330445346
Status : Answered
Chosen Option : 1

Q.35 Kumudini Lakhia won the Padma Bhushan for which form of dance?

- Ans
- 1. Kathak
 - 2. Kathakali
 - 3. Kuchipudi
 - 4. Bharatnatyam

Question ID : 26433074881
Option 1 ID : 264330293614
Option 2 ID : 264330293612
Option 3 ID : 264330293615
Option 4 ID : 264330293613
Status : Answered
Chosen Option : 1

Q.36 According to Arthashastra, Megasthenes was a Greek ambassador sent by which of the following rulers?

- Ans
- 1. Seleucus I Nicator
 - 2. Leonidas I
 - 3. Peisistratos
 - 4. Pericles

Question ID : 264330171664
Option 1 ID : 264330673259
Option 2 ID : 264330673260
Option 3 ID : 264330673262
Option 4 ID : 264330673261
Status : Answered
Chosen Option : 1

Q.37 Which of the following dances is performed by monks and Lamas in monastery to ward off evils and spirits?

Ans 1. Cham

2. Kullu Nati

3. Hikar

4. Rauf

Question ID : 264330110433

Option 1 ID : 264330434009

Option 2 ID : 264330434010

Option 3 ID : 264330434012

Option 4 ID : 264330434011

Status : Answered

Chosen Option : 1

Q.38 Courage and Conviction: An Autobiography, is written by whom among the following army generals turned politicians?

Ans 1. Bhuwan Chandra Khanduri

2. Vijay Kumar Singh

3. Joginder Jaswant Singh

4. Rajyawardhan Singh Rathod

Question ID : 264330112858

Option 1 ID : 264330443520

Option 2 ID : 264330443518

Option 3 ID : 264330443517

Option 4 ID : 264330443519

Status : Answered

Chosen Option : 2

Q.39 Which Amendment Act established that Article 20 and 21 of the Constitution of India cannot be suspended, even in emergency?

Ans 1. 41st Amendment Act

2. 43rd Amendment Act

3. 42nd Amendment Act

4. 44th Amendment Act

Question ID : 264330110576

Option 1 ID : 264330434581

Option 2 ID : 264330434583

Option 3 ID : 264330434582

Option 4 ID : 264330434584

Status : Answered

Chosen Option : 3

Q.40 Who among the following made significant contribution to the formation of Hindustan Socialist Republican Association (HSRA) in 1928?

- Ans
- 1. Bal Gangadhar Tilak
 - 2. Lala Lajpat Rai
 - 3. Subhash Chandra Bose
 - 4. Bhagat Singh

Question ID : 264330123747
Option 1 ID : 264330485026
Option 2 ID : 264330485025
Option 3 ID : 264330485024
Option 4 ID : 264330485023
Status : Answered
Chosen Option : 4

Q.41 What is the term used for a group of people in India, who are always poor and those who are usually poor but who may sometimes have a little more money?

- Ans
- 1. Relative poor
 - 2. Churning poor
 - 3. Chronic poor
 - 4. Transient poor

Question ID : 264330119818
Option 1 ID : 264330469550
Option 2 ID : 264330469548
Option 3 ID : 264330469547
Option 4 ID : 264330469549
Status : Answered
Chosen Option : 2

Q.42 'Transform rural poor youth into an economically independent and globally relevant workforce' is the vision of which rural livelihood mission?

- Ans
- 1. Deen Dayal Upadhyaya Grameen Kaushalya Yojana
 - 2. Employment Assurance Scheme
 - 3. National Rural Employment Programme
 - 4. Pradhan Mantri Rozgar Yojana

Question ID : 264330130604
Option 1 ID : 264330511530
Option 2 ID : 264330511528
Option 3 ID : 264330511527
Option 4 ID : 264330511529
Status : Answered
Chosen Option : 1

Q.43 The Majuli festival of North-East India is celebrated on the banks of which river?

- Ans
- 1. Dhansiri
 - 2. Kolong
 - 3. Barak
 - 4. Luit

Question ID : 264330110454
Option 1 ID : 264330434095
Option 2 ID : 264330434096
Option 3 ID : 264330434093
Option 4 ID : 264330434094
Status : Answered
Chosen Option : 1

Q.44 Which of the following trophic levels has maximum energy?

- Ans 1. Trophic level-1
 2. Trophic level-3
 3. Trophic level-2
 4. Trophic level-4

Question ID : 264330120958
Option 1 ID : 264330474047
Option 2 ID : 264330474049
Option 3 ID : 264330474048
Option 4 ID : 264330474050
Status : Answered
Chosen Option : 1

Q.45 Which traditional dance of Goa is performed during the Shigmo festival?

- Ans 1. Lavani
 2. Jagar
 3. Morulem
 4. Kalbelia

Question ID : 264330111790
Option 1 ID : 264330439246
Option 2 ID : 264330439247
Option 3 ID : 264330439245
Option 4 ID : 264330439248
Status : Answered
Chosen Option : 3

Q.46 Which of following states/union territories is a leading producer of saffron?

- Ans 1. Arunachal Pradesh
 2. Jammu and Kashmir
 3. Uttarakhand
 4. Punjab

Question ID : 264330183059
Option 1 ID : 264330717971
Option 2 ID : 264330717970
Option 3 ID : 264330717968
Option 4 ID : 264330717969
Status : Answered
Chosen Option : 2

Q.47 Vivekananda Rock Memorial, a place of great scenic beauty, is located in _____, which has both historical and religious significance.

- Ans 1. Chennai
 2. Hyderabad
 3. Mangalore
 4. Kanyakumari

Question ID : 264330111852
Option 1 ID : 264330439493
Option 2 ID : 264330439495
Option 3 ID : 264330439496
Option 4 ID : 264330439494
Status : Answered
Chosen Option : 4

Q.48 Who among the following was the author of Gita Govinda, composed during the reign of Lakshmana Sena?

- Ans 1. Vishakhadatta
 2. Jayadeva
 3. Somadeva
 4. Vatsyayana

Question ID : 264330176887
Option 1 ID : 264330693750
Option 2 ID : 264330693749
Option 3 ID : 264330693748
Option 4 ID : 264330693747
Status : Answered
Chosen Option : 2

Q.49 Fundamental duties are narrated in which Article of the Indian Constitution?

- Ans 1. Article 16 (A)
 2. Article 21
 3. Article 51 (A)
 4. Article 42

Question ID : 264330116386
Option 1 ID : 264330457629
Option 2 ID : 264330457630
Option 3 ID : 264330457632
Option 4 ID : 264330457631
Status : Answered
Chosen Option : 3

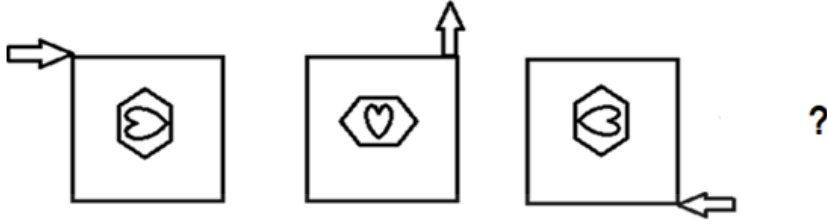
Q.50 Which of the following is NOT an important and direct contribution of a well-developed commercial banking sector?

- Ans 1. Facilitation of successful implementation of the monetary policy
 2. Mobilisation of savings
 3. Establishment of the agricultural market
 4. Capital formation

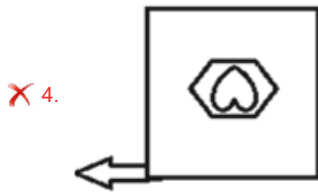
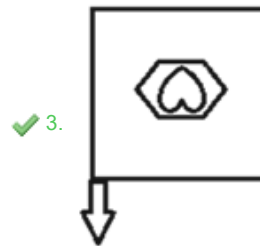
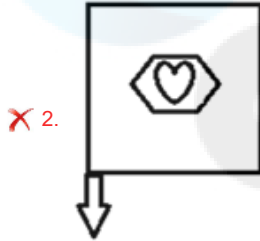
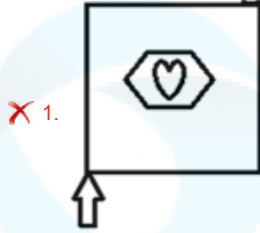
Question ID : 264330118154
Option 1 ID : 264330464433
Option 2 ID : 264330464431
Option 3 ID : 264330464434
Option 4 ID : 264330464432
Status : Answered
Chosen Option : 3

Section : Reasoning

Q.1 Select the figure that can replace the question mark (?) in the following series.



Ans



Question ID : 264330118231

Option 1 ID : 264330464739

Option 2 ID : 264330464741

Option 3 ID : 264330464740

Option 4 ID : 264330464742

Status : Answered

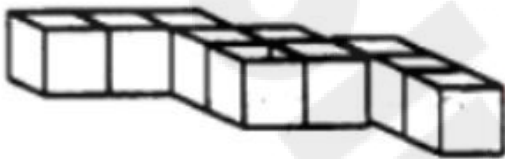
Chosen Option : 3

Q.2 Select the option that is related to the fifth letter-cluster in the same way as the second letter-cluster is related to the first letter-cluster and the fourth letter-cluster is related to the third letter-cluster.
SIGN : JCEO :: ONLY : UHJK :: MORE : ?

- Ans 1. ANLJ
 2. ANKI
 3. BMLI
 4. BNKI

Question ID : 26433076460
Option 1 ID : 264330299905
Option 2 ID : 264330299906
Option 3 ID : 264330299904
Option 4 ID : 264330299907
Status : Answered
Chosen Option : 2

Q.3 How many cubes are there in the given figure?



- Ans 1. 10
 2. 11
 3. 12
 4. 13

Question ID : 26433080661
Option 1 ID : 264330316579
Option 2 ID : 264330316578
Option 3 ID : 264330316577
Option 4 ID : 264330316580
Status : Answered
Chosen Option : 1

Q.4 Select the number from among the given options that can replace the question mark (?) in the following series.

5, 6, 8, 12, 20, ?

- Ans 1. 13
 2. 34
 3. 32
 4. 36

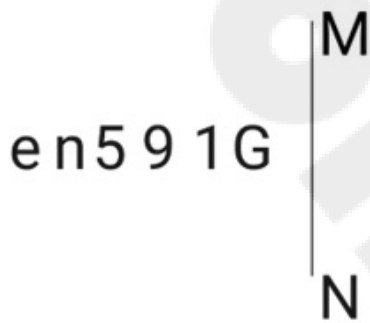
Question ID : 264330109764
Option 1 ID : 264330431336
Option 2 ID : 264330431334
Option 3 ID : 264330431335
Option 4 ID : 264330431333
Status : Answered
Chosen Option : 4

Q.5 Which of the following letter clusters will replace the question mark (?) in the given series to make it logically complete?
EHD, GJF, ILH, KNJ, ?

- Ans 1. MQL
 2. MPL
 3. NPK
 4. MPK

Question ID : 264330102231
Option 1 ID : 264330401391
Option 2 ID : 264330401390
Option 3 ID : 264330401389
Option 4 ID : 264330401392
Status : Answered
Chosen Option : 2


Q.6 Select the correct mirror image of the given figure when the mirror is placed at MN as shown below.



- Ans 1. ɹ19 ǝnə
 2. ɹ19 ǝnə
 3. ɹ19 ǝnə
 4. ɹ19 ǝnə

Question ID : 264330126680
Option 1 ID : 264330496394
Option 2 ID : 264330496392
Option 3 ID : 264330496395
Option 4 ID : 264330496393
Status : Answered
Chosen Option : 3

Q.7 Which of the following option figures will complete the pattern in the figure given below?



Ans

X 1.

X 2.

X 3.

✓ 4.

Question ID : 26433080605

Option 1 ID : 264330316353

Option 2 ID : 264330316356

Option 3 ID : 264330316354

Option 4 ID : 264330316355

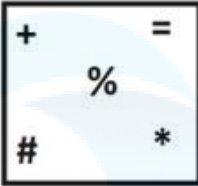
Status : Answered


Chosen Option : 4

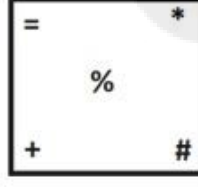
Q.8 Select the figure from among the given options that can replace the question mark (?) in the following series.


# + % * =	= * % + #	* # % = +	+ = % # *	?
(i)	(ii)	(iii)	(iv)	(v)

Ans

✗ 1. 

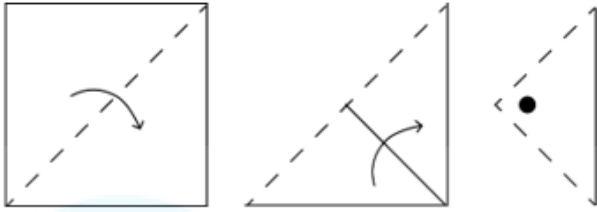
✗ 2. 

✓ 3. 

✗ 4. 

Question ID : 264330106547
 Option 1 ID : 264330418492
 Option 2 ID : 264330418491
 Option 3 ID : 264330418490
 Option 4 ID : 264330418489
 Status : Answered
 Chosen Option : 3

Q.9 A square sheet of paper is folded along the dotted line successively along the directions shown and is then punched in the last. How would the paper look when unfolded?




Ans


✗ 1.




✗ 2.



✓ 3.



✗ 4.



Question ID : 264330172149

Option 1 ID : 264330675173

Option 2 ID : 264330675174

Option 3 ID : 264330675172

Option 4 ID : 264330675171

Status : Answered

Chosen Option : 3

Q.10 1 is related to 24 following a certain logic. Following the same logic, 16 is related to 84.
 To which of the following is 21 related, following the same logic?
 (NOTE: Operations should be performed on the whole numbers, without breaking down the numbers into its constituent digits. E.g. 13 – Operations on 13 such as adding/subtracting/multiplying etc. to 13 can be performed. Breaking down 13 into 1 and 3 and then performing mathematical operations on 1 and 3 is not allowed.)

- Ans**
- 1. 108
 - 2. 98
 - 3. 104
 - 4. 112

Question ID : 264330175606
 Option 1 ID : 264330688743
 Option 2 ID : 264330688745
 Option 3 ID : 264330688746
 Option 4 ID : 264330688744
 Status : Answered
 Chosen Option : 3

Q.11 Which of the following option figures will complete the pattern in the figure given below?

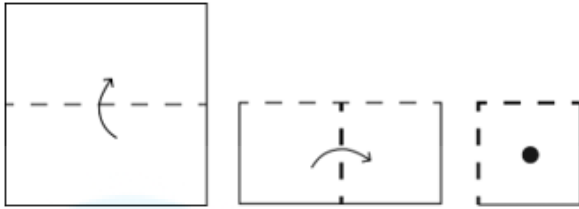


Ans

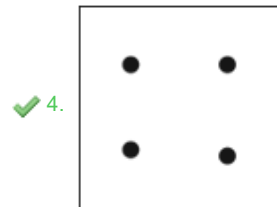
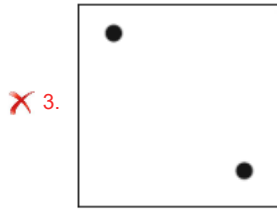
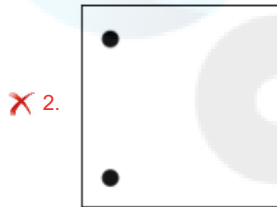
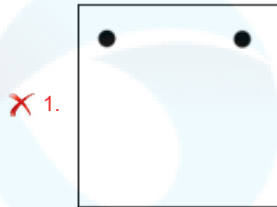
- 1.
- 2.
- 3.
- 4.

Question ID : 26433080621
 Option 1 ID : 264330316418
 Option 2 ID : 264330316417
 Option 3 ID : 264330316419
 Option 4 ID : 264330316420
 Status : Answered
 Chosen Option : 4

Q.12 A square sheet of paper is folded along the dotted line successively along the directions shown and is then punched in the last. How would the paper look when unfolded?



Ans



Question ID : 264330172154

Option 1 ID : 264330675192

Option 2 ID : 264330675191

Option 3 ID : 264330675194

Option 4 ID : 264330675193

Status : Answered

Chosen Option : 4

Q.13 Select the correct mirror image of the given figure when the mirror is placed at 'AB' as shown.



Ans

- ✓ 1.
- ✗ 2.
- ✗ 3.
- ✗ 4.

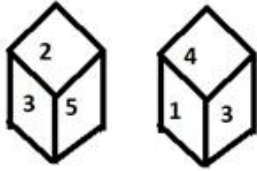
Question ID : 264330114694
 Option 1 ID : 264330450863
 Option 2 ID : 264330450861
 Option 3 ID : 264330450862
 Option 4 ID : 264330450864
 Status : Answered
 Chosen Option : 1

Q.14 In a code language, if RIVER is coded as 9-18-5-22-9 and VALLEY is coded as 5-26-15-15-22-2, then how will MOUNTAIN be coded?

- ✗ 1. 14-11-6-12-6-26-18-13
- ✗ 2. 15-13-7-14-8-1-19-14
- ✓ 3. 14-12-6-13-7-26-18-13
- ✗ 4. 13-11-5-12-6-25-17-12

Question ID : 26433089484
 Option 1 ID : 264330351437
 Option 2 ID : 264330351438
 Option 3 ID : 264330351440
 Option 4 ID : 264330351439
 Status : Answered
 Chosen Option : 3

Q.15 Six numbers 1, 2, 3, 4, 5 and 6 are written on different faces of a dice. Two positions of this dice are shown in the figure. Find the number on the face opposite to 3.



- Ans
- 1. 2
 - 2. 6
 - 3. 1
 - 4. 5

Question ID : 264330117904
Option 1 ID : 264330463433
Option 2 ID : 264330463434
Option 3 ID : 264330463431
Option 4 ID : 264330463432
Status : Answered
Chosen Option : 2

Q.16 Select the set in which the numbers are related in the same way as are the numbers of the following sets.

(NOTE : Operations should be performed on the whole numbers, without breaking down the numbers into its constituent digits. E.g. 13 – Operations on 13 such as adding/subtracting/multiplying etc. to 13 can be performed. Breaking down 13 into 1 and 3 and then performing mathematical operations on 1 and 3 is not allowed)

(30, 2, 3)
(100, 4, 5)

- Ans
- 1. (100, 6, 4)
 - 2. (64, 4, 2)
 - 3. (75, 3, 5)
 - 4. (120, 7, 3)

Question ID : 26433087043
Option 1 ID : 264330341816
Option 2 ID : 264330341814
Option 3 ID : 264330341813
Option 4 ID : 264330341815
Status : Answered
Chosen Option : 3

Q.17 Two statements are given, followed by three conclusions numbered I, II and III. Assuming the statements to be true, even if they seem to be at variance with commonly known facts, decide which of the conclusions logically follow(s) from the statements.

Statements:

All roses are lilies.

All lilies are flowers.

Conclusions:

I. All roses are flowers.

II. Some roses are not flowers.

III. No rose is a flower.

- Ans
- 1. Only conclusion III follows
 - 2. Either conclusion I or III follows
 - 3. Only conclusion I follows
 - 4. Only conclusion II follows

Question ID : 26433068827

Option 1 ID : 264330269822

Option 2 ID : 264330269823

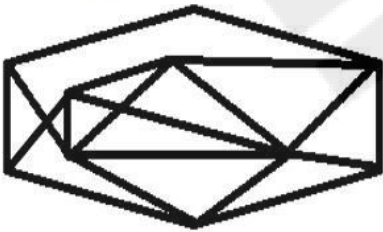
Option 3 ID : 264330269820

Option 4 ID : 264330269821

Status : Answered

Chosen Option : 3

Q.18 Select the option figure which is embedded in the given figure. (Rotation is not allowed.)



Ans

- 1.
- 2.
- 3.
- 4.

Question ID : 26433080749

Option 1 ID : 264330316931

Option 2 ID : 264330316930

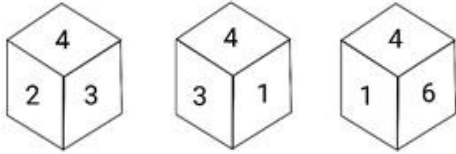
Option 3 ID : 264330316929

Option 4 ID : 264330316932

Status : Answered

Chosen Option : 2

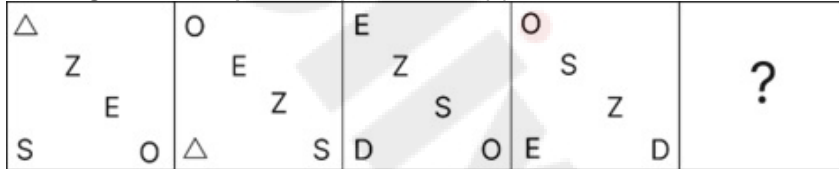
Q.19 Three different positions of the same dice are shown. Find the number on the face opposite the face showing '6'.



- Ans
- 1. 4
 - 2. 3
 - 3. 2
 - 4. 1

Question ID : 264330116960
 Option 1 ID : 264330459923
 Option 2 ID : 264330459921
 Option 3 ID : 264330459924
 Option 4 ID : 264330459922
 Status : Answered
 Chosen Option : 2

Q.20 Which figure should replace the question mark (?) if the series were to be continued?



- Ans
- 1.

S
Z
D
E O
 - 2.

D
Z
S
O E
 - 3.

D
O
S
X Z
 - 4.

S
Z
D
X O

Question ID : 264330130791
 Option 1 ID : 264330512275
 Option 2 ID : 264330512278
 Option 3 ID : 264330512276
 Option 4 ID : 264330512277
 Status : Answered
 Chosen Option : 1

Q.21 Select the correct combination of mathematical signs that can sequentially replace the * signs and balance the given expression.
 $101 * 32 * 4 * 5 * 7 * 128$

Ans 1. -, x, +, +, =

2. -, +, +, x, =

3. +, +, x, -, =

4. +, x, -, +, =

Question ID : 26433074787

Option 1 ID : 264330293239

Option 2 ID : 264330293237

Option 3 ID : 264330293236

Option 4 ID : 264330293238

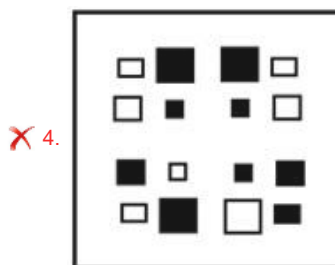
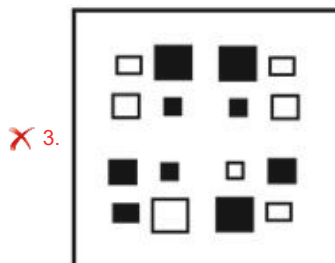
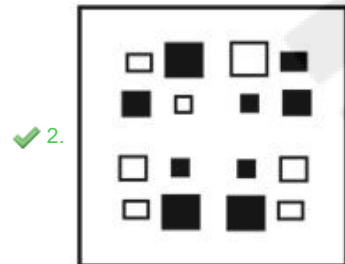
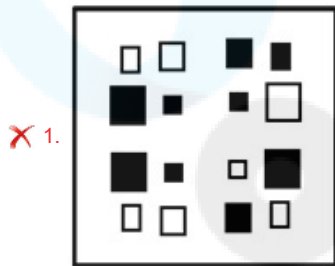
Status : Answered

Chosen Option : 2

Q.22 Select the correct mirror image of the given figure when the mirror is placed at MN as shown below.



Ans



Question ID : 264330113100

Option 1 ID : 264330444485

Option 2 ID : 264330444487

Option 3 ID : 264330444488

Option 4 ID : 264330444486

Status : Answered

Chosen Option : 2

Q.23 Which figure should replace the question mark (?) in the following series to continue the pattern?

Y O U T H	O A T B H	H O A T B	O C T S B	?
-----------	-----------	-----------	-----------	---

Ans

✓ 1. B O C T S

✗ 2. C O T B S

✗ 3. C T S B O

✗ 4. T O C B S

Question ID : 264330129609

Option 1 ID : 264330507804

Option 2 ID : 264330507803

Option 3 ID : 264330507802

Option 4 ID : 264330507805

Status : Answered

Chosen Option : 1

Q.24 Which two signs should be interchanged to make the given equation correct?

$$88 \div 4 - 15 \times 3 = 1 + 4$$

Ans ✗ 1. = and +

✗ 2. = and -

✗ 3. = and ×

✓ 4. = and ÷

Question ID : 26433085736

Option 1 ID : 264330336647

Option 2 ID : 264330336646

Option 3 ID : 264330336648

Option 4 ID : 264330336645

Status : Answered

Chosen Option : 4

Q.25 Six friends, J, K, L, M, N and O, are sitting on a circular bench, facing away from the centre but not necessarily in the same order. O and J are the neighbours of N. M is sitting to the immediate right of J. L is sitting third to the left of N. Who is sitting second to the right of M?

- Ans
- 1. N
 - 2. K
 - 3. O
 - 4. L

Question ID : 26433089543
Option 1 ID : 264330351675
Option 2 ID : 264330351674
Option 3 ID : 264330351676
Option 4 ID : 264330351673
Status : Answered
Chosen Option : 2

Section : Numerical Ability

Q.1 What is the percentage change in the population if the total number of persons was 245000 in 2021 and 294000 in 2022?

- Ans
- 1. 20% increase
 - 2. 16.67 % decrease
 - 3. 15% increase
 - 4. 22% increase

Question ID : 264330103307
Option 1 ID : 264330405533
Option 2 ID : 264330405534
Option 3 ID : 264330405535
Option 4 ID : 264330405536
Status : Answered
Chosen Option : 1

Q.2 Mohit purchased a table for ₹3,500 and due to some scratches on it top, he sold it for ₹3,200. What is his loss percentage (rounded off to two decimals)?

- Ans
- 1. 8.56%
 - 2. 8.57%
 - 3. 8.58%
 - 4. 8.55%

Question ID : 264330122568
Option 1 ID : 264330480396
Option 2 ID : 264330480397
Option 3 ID : 264330480398
Option 4 ID : 264330480395
Status : Answered
Chosen Option : 2

Q.3 A hemispherical bowl has 7 cm radius. It is to be painted inside as well as outside. The cost (in ₹) of painting it at the rate of ₹6 per 4 cm^2 is: (Take $\pi = \frac{22}{7}$)

- Ans
- 1. 785
 - 2. 980
 - 3. 880
 - 4. 924

Question ID : 264330109952
Option 1 ID : 264330432086
Option 2 ID : 264330432088
Option 3 ID : 264330432085
Option 4 ID : 264330432087
Status : Answered
Chosen Option : 4

Q.4 A alone can finish a work in 12 days and B can finish it in 18 days. If they work together and finish it, then out of the total of ₹6,000, A will get:

- Ans
- 1. ₹3,800
 - 2. ₹3,600
 - 3. ₹2,400
 - 4. ₹3,200

Question ID : 264330104207
Option 1 ID : 264330409132
Option 2 ID : 264330409131
Option 3 ID : 264330409129
Option 4 ID : 264330409130
Status : Answered
Chosen Option : 2

Q.5 The smallest 5-digit prime number is:

- Ans
- 1. 10007
 - 2. 10003
 - 3. 10001
 - 4. 10009

Question ID : 264330104481
Option 1 ID : 264330410228
Option 2 ID : 264330410226
Option 3 ID : 264330410225
Option 4 ID : 264330410227
Status : Answered
Chosen Option : 3

Q.6 If the average of ten numbers is 16.2 and if 3 is subtracted from each number, then the new average of the ten numbers is:

- Ans
- 1. 16.1
 - 2. 13.2
 - 3. 15.1
 - 4. 14.3

Question ID : 264330119394
Option 1 ID : 264330467863
Option 2 ID : 264330467864
Option 3 ID : 264330467866
Option 4 ID : 264330467865
Status : Answered
Chosen Option : 2

Q.7 A trader marked his goods at 12% above the cost price. He sold half the stock at the marked price, one quarter at a discount of 12% on the marked price and the rest at a discount of 30% on the marked price. His total gain is:

- Ans
- 1. 0.24%
 - 2. 1.24%
 - 3. 1.85%
 - 4. 0.79%

Question ID : 264330183857
Option 1 ID : 264330721104
Option 2 ID : 264330721105
Option 3 ID : 264330721106
Option 4 ID : 264330721107
Status : Answered
Chosen Option : 1

Q.8 At simple interest, a certain sum of money amounts to ₹1,250 in 2 years and to ₹2,000 in 5 years. The rate of interest per annum (rounded off to two places of decimal) is:

- Ans
- 1. 27.27%
 - 2. 33.33%
 - 3. 11.11%
 - 4. 16.67%

Question ID : 264330182514
Option 1 ID : 264330715849
Option 2 ID : 264330715850
Option 3 ID : 264330715847
Option 4 ID : 264330715848
Status : Answered
Chosen Option : 2

Q.9 Find the greatest number by which, when the numbers 47, 95 and 187 are divided, it leaves the same remainder in each case.

Ans 1.4

2.8

3.2

4.6

Question ID : 264330104146

Option 1 ID : 264330408886

Option 2 ID : 264330408888

Option 3 ID : 264330408885

Option 4 ID : 264330408887

Status : Answered

Chosen Option : 1

Q.10 An athlete crosses a distance of 1800 m in 12 minutes. What is his speed in km per hour?

Ans 1.7

2.9

3.8

4.6

Question ID : 264330106013

Option 1 ID : 264330416354

Option 2 ID : 264330416356

Option 3 ID : 264330416355

Option 4 ID : 264330416353

Status : Answered

Chosen Option : 2

Q.11 Find the number of coins, 0.2 cm thick and 2 cm in diameter, to be melted to form a right circular cylinder of height 12 cm and diameter 5 cm.

Ans 1.405

2.425

3.375

4.470

Question ID : 264330118146

Option 1 ID : 264330464401

Option 2 ID : 264330464399

Option 3 ID : 264330464402

Option 4 ID : 264330464400

Status : Answered

Chosen Option : 3

Q.12 The difference between the CI and SI on a certain sum of money for 3 years at 4% percent per annum is ₹152. Find the sum invested.

- Ans
- 1. ₹31,275
 - 2. ₹31,225
 - 3. ₹31,250
 - 4. ₹31,200

Question ID : 264330106012
Option 1 ID : 264330416352
Option 2 ID : 264330416350
Option 3 ID : 264330416351
Option 4 ID : 264330416349
Status : Answered
Chosen Option : 3

Q.13 If the numerator of a fraction is increased by 17% and its denominator is decreased by 12%, the value of the fraction is $\frac{39}{44}$. What is the original fraction?

- Ans
- 1. $\frac{1}{3}$
 - 2. $\frac{3}{7}$
 - 3. $\frac{7}{8}$
 - 4. $\frac{2}{3}$

Question ID : 264330103936
Option 1 ID : 264330408045
Option 2 ID : 264330408047
Option 3 ID : 264330408046
Option 4 ID : 264330408048
Status : Answered
Chosen Option : 4

Q.14 If $\frac{p}{q} = 0.5$, then $\frac{3p-q}{3p+q}$ is:

- Ans
- 1. $\frac{1}{2}$
 - 2. $\frac{1}{5}$
 - 3. $\frac{1}{3}$
 - 4. $\frac{1}{4}$

Question ID : 264330111435
Option 1 ID : 264330437825
Option 2 ID : 264330437828
Option 3 ID : 264330437826
Option 4 ID : 264330437827
Status : Answered
Chosen Option : 2

Q.15 The salaries of P, Q and R are in the ratio 3:4:6. If R's salary is ₹15,000 more than that of P, then Q's salary is:

- Ans
- 1. ₹25,000
 - 2. ₹20,000
 - 3. ₹30,000
 - 4. ₹35,000

Question ID : 264330111468
Option 1 ID : 264330437958
Option 2 ID : 264330437957
Option 3 ID : 264330437959
Option 4 ID : 264330437960
Status : Answered
Chosen Option : 2

Section : Computer Proficiency

Q.1 Which of the following options can be used in MS Word 365 if you want to save your document in another location with the same or different name?

- Ans
- 1. Print
 - 2. Save As
 - 3. New
 - 4. Open

Question ID : 264330180433
Option 1 ID : 264330707702
Option 2 ID : 264330707701
Option 3 ID : 264330707700
Option 4 ID : 264330707699
Status : Answered
Chosen Option : 2

Q.2 In Microsoft Excel 365, what is the cell address of the intersection between column L and row 26?

- Ans
- 1. L26
 - 2. 125L
 - 3. 26L
 - 4. L125

Question ID : 264330174488
Option 1 ID : 264330684371
Option 2 ID : 264330684374
Option 3 ID : 264330684372
Option 4 ID : 264330684373
Status : Answered
Chosen Option : 1

Q.3 What is the purpose of the 'Help' feature in Microsoft Word 365?

- Ans 1. It allows you to print the current document.
2. It provides assistance and information about using Microsoft Word.
3. It opens a new blank document.
4. It creates a backup copy of the document.

Question ID : 264330180739
Option 1 ID : 264330708924
Option 2 ID : 264330708925
Option 3 ID : 264330708923
Option 4 ID : 264330708926
Status : Answered
Chosen Option : 2

Q.4 Which of the following is used to save text temporarily when it is copied or cut in MS word 365?

- Ans 1. Memoryboard
2. Clipboard
3. Textboard
4. Copyboard

Question ID : 264330176724
Option 1 ID : 264330693112
Option 2 ID : 264330693114
Option 3 ID : 264330693111
Option 4 ID : 264330693113
Status : Answered
Chosen Option : 2

Q.5 In MS Excel 365, which of the following keyboard shortcuts opens the Print option?

- Ans 1. Shift + P
2. Ctrl + P
3. Alt + P
4. Ctrl + Alt + P

Question ID : 264330180814
Option 1 ID : 264330709222
Option 2 ID : 264330709221
Option 3 ID : 264330709220
Option 4 ID : 264330709219
Status : Answered
Chosen Option : 2

Q.6 In MS-Word 365, what is the purpose of the 'Tell me what you want to do' feature in the Help menu?

- Ans 1. It automatically corrects formatting errors in the document.
2. It allows you to search for specific commands and features within the application.
3. It offers grammar and spelling suggestions for the selected text.
4. It provides a list of recent documents for quick access.

Question ID : 264330173358
Option 1 ID : 264330679914
Option 2 ID : 264330679912
Option 3 ID : 264330679913
Option 4 ID : 264330679911
Status : Answered
Chosen Option : 2

Q.7 In MS Excel 365, which of the following is the correct way to address the cell located in the third row and fifth column?

- Ans
- 1. 5A
 - 2. 35
 - 3. 3A
 - 4. E3

Question ID : 264330178558
Option 1 ID : 264330700262
Option 2 ID : 264330700260
Option 3 ID : 264330700259
Option 4 ID : 264330700261
Status : Answered
Chosen Option : 4

Q.8 Which of the following is used when the sender does NOT want one or more of the recipients to know that someone else was copied on the message?

- Ans
- 1. From
 - 2. BCC
 - 3. CC
 - 4. To

Question ID : 264330178235
Option 1 ID : 264330698998
Option 2 ID : 264330698996
Option 3 ID : 264330698995
Option 4 ID : 264330698997
Status : Answered
Chosen Option : 2

Q.9 What do you mean by LAN?

- Ans
- 1. Local Around Network
 - 2. Local Area Network
 - 3. Last Active Network
 - 4. Live Area Network

Question ID : 264330175502
Option 1 ID : 264330688328
Option 2 ID : 264330688330
Option 3 ID : 264330688329
Option 4 ID : 264330688327
Status : Answered
Chosen Option : 2

Q.10 In MS Word 365 which of the following shortcut keys is used to go to the beginning of the document?

- Ans**
- 1. Ctrl + Del
 - 2. Ctrl + End
 - 3. Ctrl + Home
 - 4. Ctrl + Ins

Question ID : 264330175987

Option 1 ID : 264330690244

Option 2 ID : 264330690245

Option 3 ID : 264330690243

Option 4 ID : 264330690246

Status : Answered

Chosen Option : 4