

## Constable Executive Male and Female in Delhi Police Examination 2023

Roll Number	
Candidate Name	
Venue Name	
Exam Date	02/12/2023
Exam Time	12:00 PM - 1:30 PM
Subject	Constable Executive Male and Female in Delhi Police Examination 2023

Section : General Knowledge

**Q.1** Read the below statements and select the correct option with respect to self-help groups.

- (i) A self-help group is a registered group of micro-entrepreneurs.  
(ii) The micro-entrepreneurs of self-help groups have similar social and economic backgrounds.

- Ans
- 1. Both (i) and (ii) are true
  - 2. Both (i) and (ii) are false
  - 3. Only (ii) is true
  - 4. Only (i) is true

Question ID : 264330118239

Option 1 ID : 264330464773

Option 2 ID : 264330464774

Option 3 ID : 264330464772

Option 4 ID : 264330464771

Status : Answered

Chosen Option : 4

**Q.2** Ranjeet Singh belonged to which Misal of the Sikh community?

- Ans
- 1. Bhangi
  - 2. Ahluwalia
  - 3. Kanhaiya
  - 4. Sukarchakia

Question ID : 264330118006

Option 1 ID : 264330463841

Option 2 ID : 264330463839

Option 3 ID : 264330463842

Option 4 ID : 264330463840

Status : Answered

Chosen Option : 4

Q.3 In which of the following years did young leaders in Satara in Maharashtra set up a parallel government Parti Sarkar that ran People's court and organised constructive work?

- Ans  1. 1943  
 2. 1934  
 3. 1918  
 4. 1904

Question ID : 264330119015

Option 1 ID : 264330466715

Option 2 ID : 264330466716

Option 3 ID : 264330466717

Option 4 ID : 264330466718

Status : **Not Attempted and Marked For Review**

Chosen Option : --

Q.4 Ramchandra Manjhi, Padma Shri 2021 awardee, was conferred the award for which of the following contributions to art?

- Ans  1. Playing and folk singing of tribal Kinneras  
 2. Conserving ancient Carnatic musical instruments  
 3. Carrying forward the legacy of Gramin Natak and folk dancing  
 4. Adapting the clarinet to Carnatic music

Question ID : 26433071516

Option 1 ID : 264330280489

Option 2 ID : 264330280488

Option 3 ID : 264330280491

Option 4 ID : 264330280490

Status : **Answered**

Chosen Option : 3

Q.5 Who among the following rulers strengthened the Satavahana empire in the Deccan in ancient India?

- Ans  1. Simuka  
 2. Shiva Skanda Satakarni  
 3. Yajna Sri Satakarni  
 4. Gautamiputra Satakarni

Question ID : 264330120242

Option 1 ID : 264330471223

Option 2 ID : 264330471224

Option 3 ID : 264330471225

Option 4 ID : 264330471226

Status : **Answered**

Chosen Option : 4

Q.6 For which of the following dance forms was Kamalini Asthana awarded the Padma Shri in 2022?

- Ans
- 1. Odissi
  - 2. Kuchipudi
  - 3. Kathak
  - 4. Sattriya

Question ID : 264330111971  
Option 1 ID : 264330439970  
Option 2 ID : 264330439969  
Option 3 ID : 264330439972  
Option 4 ID : 264330439971  
Status : Answered  
Chosen Option : 3

Q.7 The Cholas as a ruling power rose to eminence in the 9th century CE when \_\_\_\_\_ seized Tanjavur from a feudatory chief of the Pallavas called Muttarayas.

- Ans
- 1. Parantaka I
  - 2. Rajaraja Chola I
  - 3. Vijayalaya
  - 4. Uttama Chola

Question ID : 264330119760  
Option 1 ID : 264330469315  
Option 2 ID : 264330469317  
Option 3 ID : 264330469316  
Option 4 ID : 264330469318  
Status : Answered  
Chosen Option : 3

Q.8 'The Race of My Life: An Autobiography' is written by which Indian athlete?

- Ans
- 1. Shivnath Singh
  - 2. PT Usha
  - 3. Milkha Singh
  - 4. Hima Das

Question ID : 26433092393  
Option 1 ID : 264330362864  
Option 2 ID : 264330362862  
Option 3 ID : 264330362863  
Option 4 ID : 264330362861  
Status : Answered  
Chosen Option : 3

Q.9 Taxes levied on commodities are known as which types of taxes?

- Ans
- 1. Corporation taxes
  - 2. Direct taxes
  - 3. Indirect taxes
  - 4. Both direct and indirect taxes

Question ID : 264330111608  
Option 1 ID : 264330438518  
Option 2 ID : 264330438517  
Option 3 ID : 264330438519  
Option 4 ID : 264330438520  
Status : Answered  
Chosen Option : 3

Q.10 Which Article of the Constitution of India declares the Supreme Court to be a court of record?

- Ans
- 1. Article 126
  - 2. Article 128
  - 3. Article 125
  - 4. Article 129

Question ID : 264330177761  
Option 1 ID : 264330697152  
Option 2 ID : 264330697153  
Option 3 ID : 264330697151  
Option 4 ID : 264330697154  
Status : Answered  
Chosen Option : 4

Q.11 Fort of Kushalghadh is located in which Indian state?

- Ans
- 1. Chhattisgarh
  - 2. Maharashtra
  - 3. Madhya Pradesh
  - 4. Uttar Pradesh

Question ID : 264330109650  
Option 1 ID : 264330430879  
Option 2 ID : 264330430880  
Option 3 ID : 264330430878  
Option 4 ID : 264330430877  
Status : Answered  
Chosen Option : 3

Q.12 The Gopurams of the Chidambaram temple contain many poses of which dance form?

- Ans
- 1. Kathakali
  - 2. Oddisi
  - 3. Bharatnatyam
  - 4. Kuchipudi

Question ID : 264330110413  
Option 1 ID : 264330433931  
Option 2 ID : 264330433930  
Option 3 ID : 264330433932  
Option 4 ID : 264330433929  
Status : Answered  
Chosen Option : 3

Q.13 Which of the following statements is INCORRECT with regard to microfinance?

- Ans
- 1. Microfinance in India evolved to fill the gaps created by the formal banking institutions.
  - 2. Microfinance initiative in India was taken by NABARD.
  - 3. Microfinancing started in India majorly due the nationalisation of banks.
  - 4. The Reserve Bank of India had appointed the Malegam Committee to go into the regulation of microfinance institutions

Question ID : 264330112455  
Option 1 ID : 264330441906  
Option 2 ID : 264330441907  
Option 3 ID : 264330441908  
Option 4 ID : 264330441905  
Status : Answered  
Chosen Option : 3

Q.14 Against which oppressive law did Mahatma Gandhi launch a movement in 1919 that made him a truly national leader?

- Ans
- 1. Morley Minto Reforms
  - 2. Salt Tax
  - 3. Vernacular Press Act
  - 4. Rowlatt Act

Question ID : 264330118991  
Option 1 ID : 264330466620  
Option 2 ID : 264330466621  
Option 3 ID : 264330466622  
Option 4 ID : 264330466619  
Status : Answered  
Chosen Option : 4

Q.15 In the initial years of independence, the state had complete control of those industries that were:

- Ans
- 1. vital for the economy
  - 2. inconsequential to the economy
  - 3. only complementary to the policies of the private sector
  - 4. not profitable by design

Question ID : 264330117749  
Option 1 ID : 264330462811  
Option 2 ID : 264330462812  
Option 3 ID : 264330462813  
Option 4 ID : 264330462814  
Status : Answered  
Chosen Option : 1

Q.16 'Lai Haraoba' is a style of which of the following Classical dances of India?

- Ans
- 1. Kathakali
  - 2. Kathak
  - 3. Manipuri
  - 4. Odissi

Question ID : 264330114462  
Option 1 ID : 264330449936  
Option 2 ID : 264330449935  
Option 3 ID : 264330449934  
Option 4 ID : 264330449933  
Status : Answered  
Chosen Option : 3

Q.17 The Federal Structure, Judiciary, Governor System and Emergency Powers — these features of the Indian Constitution are drawn from the:\_\_\_\_\_

- Ans
- 1. Government of India Act of 1909
  - 2. Indian Independence Act of 1947
  - 3. Government of India Act of 1919
  - 4. Government of India Act of 1935

Question ID : 264330114743  
Option 1 ID : 264330451057  
Option 2 ID : 264330451060  
Option 3 ID : 264330451058  
Option 4 ID : 264330451059  
Status : Answered  
Chosen Option : 4

Q.18 When is the Maru Mahotsava at Jaiselmer held?

- Ans
- 1. March-April
  - 2. September-October
  - 3. November-December
  - 4. January-February

Question ID : 264330130874  
Option 1 ID : 264330512608  
Option 2 ID : 264330512609  
Option 3 ID : 264330512610  
Option 4 ID : 264330512607  
Status : Not Answered  
Chosen Option : --

Q.19 By which of the following authors was the English novel 'Jude the Obscure' written?

- Ans
- 1. Jane Austen
  - 2. Arthur Conan Doyle
  - 3. Charlotte Bronte
  - 4. Thomas Hardy

Question ID : 26433066681  
Option 1 ID : 264330261249  
Option 2 ID : 264330261248  
Option 3 ID : 264330261250  
Option 4 ID : 264330261251  
Status : Not Answered  
Chosen Option : --

Q.20 The first ICC Men's T20 Cricket World Cup was won by \_\_\_\_\_.

- Ans
- 1. West Indies
  - 2. India
  - 3. England
  - 4. Australia

Question ID : 264330130624  
Option 1 ID : 264330511609  
Option 2 ID : 264330511608  
Option 3 ID : 264330511607  
Option 4 ID : 264330511610  
Status : Answered  
Chosen Option : 2

Q.21 Which of the following is NOT a 'Navratna' or 'Maharatna' company in India?

- Ans
- 1. National Thermal Power Corporation
  - 2. Industrial Finance Corporation of India
  - 3. Indian Oil Corporation
  - 4. Oil & Natural Gas Corporation

Question ID : 264330109135  
Option 1 ID : 264330428819  
Option 2 ID : 264330428820  
Option 3 ID : 264330428817  
Option 4 ID : 264330428818  
Status : Answered  
Chosen Option : 2

**Q.22** How many industries have been reserved for the public sector under the Industrial Policy Resolution, 1956?

- Ans  1. 17  
 2. 21  
 3. 2  
 4. 15

Question ID : 264330110175  
Option 1 ID : 264330432979  
Option 2 ID : 264330432980  
Option 3 ID : 264330432977  
Option 4 ID : 264330432978  
Status : **Not Attempted and Marked For Review**  
Chosen Option : --

**Q.23** Which of the following state High Court's jurisdiction extends to the Union Territories of Daman and Diu?

- Ans  1. Guwahati High Court  
 2. Bombay High Court  
 3. Kerala High Court  
 4. Calcutta High Court

Question ID : 26433086841  
Option 1 ID : 264330341005  
Option 2 ID : 264330341006  
Option 3 ID : 264330341007  
Option 4 ID : 264330341008  
Status : **Answered**  
Chosen Option : 2

**Q.24** Which of the following states showed highest levels of poverty, in the 2011 census?

- Ans  1. Uttar Pradesh  
 2. Bihar  
 3. Maharashtra  
 4. Karnataka

Question ID : 264330120339  
Option 1 ID : 264330471608  
Option 2 ID : 264330471609  
Option 3 ID : 264330471607  
Option 4 ID : 264330471610  
Status : **Answered**  
Chosen Option : 2

Q.25 Budhaditya Mukharjee, Vilayat Khan and Mustaq Ali Khan are associated with which musical instrument?

- Ans
- 1. Surbahar
  - 2. Sarod
  - 3. Santoor
  - 4. Sitar

Question ID : 264330111190  
Option 1 ID : 264330436848  
Option 2 ID : 264330436845  
Option 3 ID : 264330436847  
Option 4 ID : 264330436846  
Status : Answered  
Chosen Option : 4

Q.26 Terrace farming is commonly practiced in which of the following regions of India?

- Ans
- 1. Himalayan region
  - 2. Thar Desert
  - 3. Gangetic Plains
  - 4. Coastal Plain

Question ID : 264330183061  
Option 1 ID : 264330717976  
Option 2 ID : 264330717978  
Option 3 ID : 264330717977  
Option 4 ID : 264330717979  
Status : Answered  
Chosen Option : 1

Q.27 In archery, what is the maximum time permitted to shoot an end of three arrows?

- Ans
- 1. 2 minutes
  - 2. 5 minutes
  - 3. 8 minutes
  - 4. 7 minutes

Question ID : 264330113775  
Option 1 ID : 264330447185  
Option 2 ID : 264330447186  
Option 3 ID : 264330447188  
Option 4 ID : 264330447187  
Status : Not Attempted and Marked For Review  
Chosen Option : --

Q.28 Name a genus of widely distributed floating aquatic plants that is the smallest monocot plant known to date and has the highest total protein content.

- Ans
- 1. Azolla
  - 2. Pistia
  - 3. Wolffia
  - 4. Water Hyacinth

Question ID : 26433055779  
Option 1 ID : 264330218100  
Option 2 ID : 264330218102  
Option 3 ID : 264330218103  
Option 4 ID : 264330218101  
Status : Not Answered  
Chosen Option : --

**Q.29** What is the common biological phenomenon by which one organism produces biochemicals that influence the growth, survival, development, and reproduction of other organisms known as?

- Ans
- 1. Allotropy
  - 2. Allopathy
  - 3. Allelopathy
  - 4. Allelomorph

Question ID : 264330120960

Option 1 ID : 264330474055

Option 2 ID : 264330474056

Option 3 ID : 264330474058

Option 4 ID : 264330474057

Status : **Not Attempted and Marked For Review**

Chosen Option : --

**Q.30** What is/are known as enzymes?

- Ans
- 1. Biological catalysts
  - 2. Physical activity
  - 3. Substrates
  - 4. Receptors

Question ID : 264330113341

Option 1 ID : 264330445450

Option 2 ID : 264330445452

Option 3 ID : 264330445451

Option 4 ID : 264330445449

Status : **Answered**

Chosen Option : 1

**Q.31** 'West Meets East' is an album by American violinist Yehudi Menuhin and Indian sitar virtuoso \_\_\_\_\_.

- Ans
- 1. Shahed Parvez
  - 2. Prem Joshua
  - 3. Vilayat Khan
  - 4. Ravi Shankar

Question ID : 264330113243

Option 1 ID : 264330445059

Option 2 ID : 264330445060

Option 3 ID : 264330445057

Option 4 ID : 264330445058

Status : **Answered**

Chosen Option : 4

**Q.32** The 97th Constitutional Amendment Act of 2011 has added a new Directive Principle of State Policy related to:

- Ans
- 1. Maternity Leave
  - 2. Child Labour
  - 3. Environment
  - 4. Cooperative Societies

Question ID : 264330114765

Option 1 ID : 264330451146

Option 2 ID : 264330451145

Option 3 ID : 264330451147

Option 4 ID : 264330451148

Status : **Not Attempted and Marked For Review**

Chosen Option : --

**Q.33** Which of the following Articles of the Indian Constitution deals with fundamental duties?

- Ans
- 1. Article 41A
  - 2. Article 41
  - 3. Article 51A
  - 4. Article 71

Question ID : 264330113383

Option 1 ID : 264330445618

Option 2 ID : 264330445617

Option 3 ID : 264330445619

Option 4 ID : 264330445620

Status : **Answered**

Chosen Option : 3

**Q.34** According to the census of India 2011, identify the state in which 'Total Literacy Rate' and 'Male Literacy Rate' both were more than 90%?

- Ans
- 1. Himachal Pradesh
  - 2. Goa
  - 3. Mizoram
  - 4. Tripura

Question ID : 264330120336

Option 1 ID : 264330471598

Option 2 ID : 264330471596

Option 3 ID : 264330471595

Option 4 ID : 264330471597

Status : **Answered**

Chosen Option : 3

Q.35 Which of the following is the most reactive metal?

- Ans  1. Lead  
 2. Magnesium  
 3. Zinc  
 4. Mercury

Question ID : 264330173654  
Option 1 ID : 264330681096  
Option 2 ID : 264330681098  
Option 3 ID : 264330681097  
Option 4 ID : 264330681095  
Status : Answered  
Chosen Option : 2

Q.36 In which year did India and Maldives sign a trade agreement which provides for export of vital commodities?

- Ans  1. 1981  
 2. 2003  
 3. 1984  
 4. 2001

Question ID : 264330130607  
Option 1 ID : 264330511540  
Option 2 ID : 264330511542  
Option 3 ID : 264330511539  
Option 4 ID : 264330511541  
Status : Not Answered  
Chosen Option : --

Q.37 \_\_\_\_\_ members of the State Legislative Council are nominated by the Governor of the State.

- Ans  1. 1/6  
 2. 1/12  
 3. 1/9  
 4. 1/15

Question ID : 264330120196  
Option 1 ID : 264330471039  
Option 2 ID : 264330471040  
Option 3 ID : 264330471042  
Option 4 ID : 264330471041  
Status : Answered  
Chosen Option : 1

Q.38 The first edition of the Khelo India University Games was hosted in which of the following years?

- Ans  1. 2019  
 2. 2021  
 3. 2020  
 4. 2018

Question ID : 264330176944  
Option 1 ID : 264330693972  
Option 2 ID : 264330693974  
Option 3 ID : 264330693973  
Option 4 ID : 264330693971  
Status : Answered  
Chosen Option : 2

**Q.39** Under the Liberalisation Policy, a lot of industries were reserved for the public sector. Which of the following industries are still reserved under public sector?

- Ans
- 1. Atomic and Railway Operations
  - 2. Coal and Mineral Oils
  - 3. Copper and zinc
  - 4. Hazardous Chemicals and Alcohol

Question ID : 264330111602  
Option 1 ID : 264330438493  
Option 2 ID : 264330438495  
Option 3 ID : 264330438496  
Option 4 ID : 264330438494  
Status : Answered  
Chosen Option : 1

**Q.40** From which country is the power of judicial review taken in the Indian Constitution?

- Ans
- 1. United Kingdom
  - 2. United States of America
  - 3. France
  - 4. Japan

Question ID : 264330183142  
Option 1 ID : 264330718302  
Option 2 ID : 264330718303  
Option 3 ID : 264330718301  
Option 4 ID : 264330718300  
Status : Answered  
Chosen Option : 2

**Q.41** Which of the following is a watershed development scheme of the Ministry of Rural Development of India?

- Ans
- 1. Hariyali
  - 2. Digging hand-pump wells
  - 3. Dam construction
  - 4. Khushali

Question ID : 264330131820  
Option 1 ID : 264330516379  
Option 2 ID : 264330516382  
Option 3 ID : 264330516381  
Option 4 ID : 264330516380  
Status : Not Answered  
Chosen Option : --

**Q.42** On the first Republic Day, 26 January 1950, the Constitution of India replaced which British Act?

- Ans
- 1. Government of India Act (1919)
  - 2. Government of India Act (1858)
  - 3. Government of India Act (1930)
  - 4. Government of India Act (1935)

Question ID : 264330110458  
Option 1 ID : 264330434111  
Option 2 ID : 264330434109  
Option 3 ID : 264330434112  
Option 4 ID : 264330434110  
Status : Answered  
Chosen Option : 4

Q.43 In which Indian state is the cave site of Bagh located?

- Ans
- 1. Maharashtra
  - 2. Odisha
  - 3. Madhya Pradesh
  - 4. Uttar Pradesh

Question ID : 264330109632  
Option 1 ID : 264330430808  
Option 2 ID : 264330430807  
Option 3 ID : 264330430806  
Option 4 ID : 264330430805  
Status : Answered  
Chosen Option : 3

Q.44 Surya Sen was associated with which of the following radical activities against British?

- Ans
- 1. Kakori Conspiracy
  - 2. Muzaffarpur Conspiracy Case
  - 3. Delhi Conspiracy Case
  - 4. Chittagong Armory Raid

Question ID : 264330183103  
Option 1 ID : 264330718144  
Option 2 ID : 264330718145  
Option 3 ID : 264330718147  
Option 4 ID : 264330718146  
Status : Answered  
Chosen Option : 4

Q.45 As per the Indus Water Treaty 1960, how much per cent water can India use from the river?

- Ans
- 1. 25
  - 2. 22
  - 3. 20
  - 4. 28

Question ID : 264330177104  
Option 1 ID : 264330694611  
Option 2 ID : 264330694613  
Option 3 ID : 264330694612  
Option 4 ID : 264330694614  
Status : Not Answered  
Chosen Option : --

Q.46 Which dynasty ruled after the Tuglaq dynasty?

- Ans
- 1. Lodi dynasty
  - 2. Sayyid dynasty
  - 3. Khalji dynasty
  - 4. Mamluk dynasty

Question ID : 264330166882  
Option 1 ID : 264330654565  
Option 2 ID : 264330654563  
Option 3 ID : 264330654564  
Option 4 ID : 264330654566  
Status : Answered  
Chosen Option : 2

Q.47 In Olympic archery events, how many concentric rings are there which represent different scoring sectors?

- Ans
- 1. 7
  - 2. 5
  - 3. 2
  - 4. 10

Question ID : 264330113774  
Option 1 ID : 264330447183  
Option 2 ID : 264330447182  
Option 3 ID : 264330447184  
Option 4 ID : 264330447181  
Status : Answered  
Chosen Option : 2

Q.48 Which elements act as hygroscopic nuclei around which water vapour condenses to produce clouds?

- Ans
- 1. Water and dust
  - 2. Salt and water
  - 3. Dust and rock
  - 4. Dust and sea salt

Question ID : 264330118513  
Option 1 ID : 264330465455  
Option 2 ID : 264330465453  
Option 3 ID : 264330465456  
Option 4 ID : 264330465454  
Status : Not Answered  
Chosen Option : --

Q.49 The first electric train ran in which state of India in the year 1925?

- Ans
- 1. Haryana
  - 2. Rajasthan
  - 3. West Bengal
  - 4. Maharashtra

Question ID : 264330181470  
Option 1 ID : 264330711805  
Option 2 ID : 264330711804  
Option 3 ID : 264330711806  
Option 4 ID : 264330711803  
Status : Answered  
Chosen Option : 4

Q.50 Initially, which of the following was the capital of Magadha Mahajanapada?

- Ans
- 1. Rajagaha
  - 2. Vikramshila
  - 3. Pataliputra
  - 4. Vaishali

Question ID : 264330118948  
Option 1 ID : 264330466448  
Option 2 ID : 264330466449  
Option 3 ID : 264330466447  
Option 4 ID : 264330466450  
Status : Answered  
Chosen Option : 3

Section : Reasoning

**Q.1** Select the correct combination of mathematical signs that can sequentially replace the \* signs and balance the given equation.  
 $30*6*5*4*2*7$

**Ans** ✓ 1. ÷, ×, +, −, =

✗ 2. +, −, ×, ÷, =

✗ 3. +, ×, −, =, ÷

✗ 4. +, ×, −, ÷, =

Question ID : 26433079094

Option 1 ID : 264330310381

Option 2 ID : 264330310383

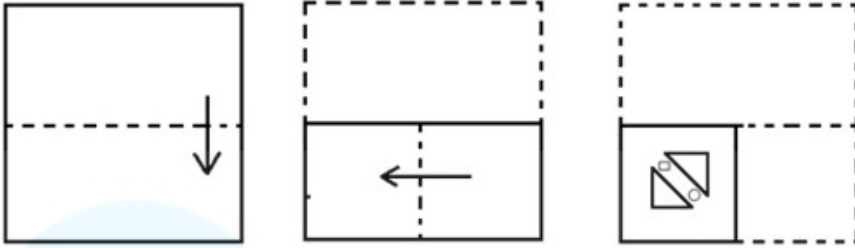
Option 3 ID : 264330310382

Option 4 ID : 264330310380

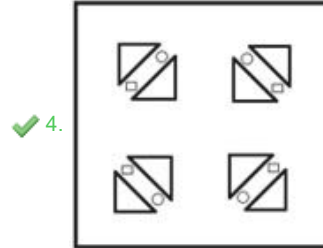
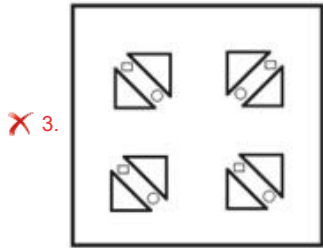
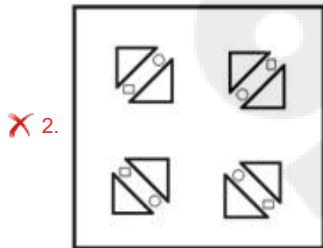
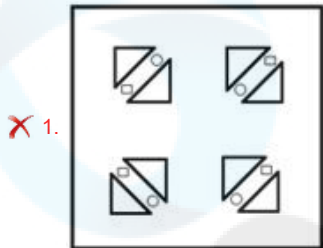
Status : Answered

Chosen Option : 1

Q.2 The sequence of folding a piece of paper and the manner in which the folded paper has been cut is shown below. Choose a figure which would most closely resemble the unfolded form of the paper.



Ans



Question ID : 264330112320

Option 1 ID : 264330441366

Option 2 ID : 264330441367

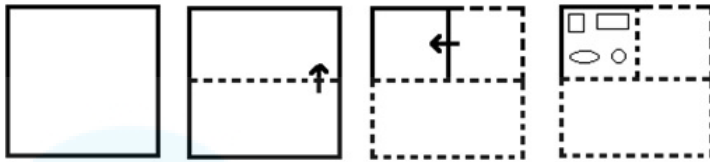
Option 3 ID : 264330441368

Option 4 ID : 264330441365

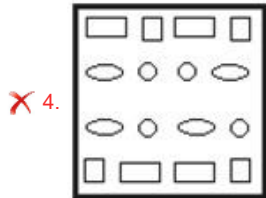
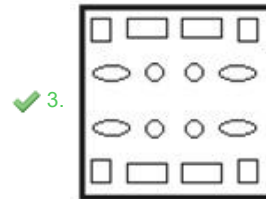
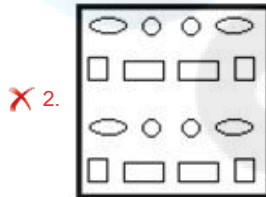
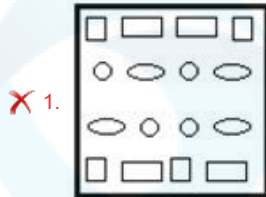
Status : Answered

Chosen Option : 4

**Q.3** The sequence of folding a piece of paper and the manner in which the folded paper is cut is shown in the following figures. How would this paper look when unfolded?



Ans



Question ID : 26433074797  
 Option 1 ID : 264330293278  
 Option 2 ID : 264330293279  
 Option 3 ID : 264330293276  
 Option 4 ID : 264330293277  
 Status : Answered  
 Chosen Option : 3

Q.4 Seven people, P, Q, R, S, T, U and V, are sitting in a straight row facing north. Only two people sit to the right of S. Only three people sit between Q and S. R sits to the immediate right of S and to the immediate left of U. T sits to the immediate right of P. P is not a neighbour of Q.

Who sits second from the extreme left end of the row?

- Ans
- 1. Q
  - 2. V
  - 3. R
  - 4. P

Question ID : 26433089502

Option 1 ID : 264330351509

Option 2 ID : 264330351510

Option 3 ID : 264330351512

Option 4 ID : 264330351511

Status : Answered

Chosen Option : 1

Q.5 In a certain code language, 'BASKET' is written as '64' and 'TANKER' is written as '75'. How will 'VACATION' be written in that language?

- Ans
- 1. 93
  - 2. 102
  - 3. 101
  - 4. 90

Question ID : 26433092581

Option 1 ID : 264330363614

Option 2 ID : 264330363616

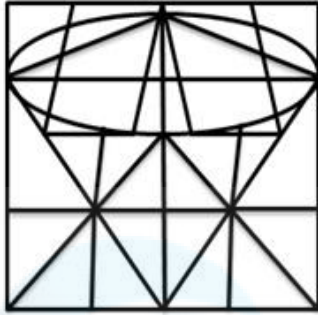
Option 3 ID : 264330363615

Option 4 ID : 264330363613

Status : Answered

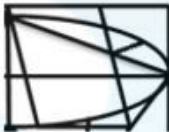
Chosen Option : 1

Q.6 Select the option figure that is embedded in the given figure. (Rotation is not allowed).




Ans

✗ 1.



✓ 2.



✗ 3.



✗ 4.



Question ID : 264330114397

Option 1 ID : 264330449673

Option 2 ID : 264330449676

Option 3 ID : 264330449675

Option 4 ID : 264330449674

Status : Answered

Chosen Option : 2

Q.7 Select the set in which the numbers are related in the same way as are the numbers of the following sets.

(NOTE: Operations should be performed on the whole numbers, without breaking down the numbers into its constituent digits. E.g. 13 – Operations on 13 such as adding/deleting/multiplying etc. to 13 can be performed. Breaking down 13 into 1 and 3 and then performing mathematical operations on 1 and 3 is not allowed)

(13, 40, 115)

(5, 16, 43)

Ans ✓ 1. (11, 34, 97)

✗ 2. (6, 19, 72)

✗ 3. (9, 26, 73)

✗ 4. (7, 22, 71)

Question ID : 26433052102

Option 1 ID : 264330203712

Option 2 ID : 264330203711

Option 3 ID : 264330203713

Option 4 ID : 264330203710

Status : Answered

Chosen Option : 1

Q.8 Select the number from among the given options that can replace the question mark (?) in the following series.

5, 12, 40, 152, 600, ?

- Ans
- 1. 3233
  - 2. 3123
  - 3. 2392
  - 4. 4344

Question ID : 264330109762  
 Option 1 ID : 264330431328  
 Option 2 ID : 264330431325  
 Option 3 ID : 264330431326  
 Option 4 ID : 264330431327  
 Status : Answered  
 Chosen Option : 3

Q.9 Which figure should replace the question mark (?) in the following series to continue the pattern?

L	I	C	△	△	C	I	A	
	△		I		A		C	?
K		C	A	L	L	I	▷	△

Ans

- 1. 

C	△
I	A
- 2. 

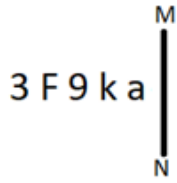
△	▷
A	C
- 3. 

△	C
A	I
- 4. 

A	I
△	C

Question ID : 264330129625  
 Option 1 ID : 264330507869  
 Option 2 ID : 264330507868  
 Option 3 ID : 264330507867  
 Option 4 ID : 264330507866  
 Status : Not Answered  
 Chosen Option : --

Q.10 Select the correct mirror image of the given figure when the mirror is placed at MN as shown below.



Ans

- ✓ 1. ɹ Ɔ ɹ ǝ ɹ ɹ
- ✗ 2. 9 Ɔ 6 7 ɛ
- ✗ 3. ɹ 9 k 7 ɛ
- ✗ 4. a Ɔ ǝ ɹ ɹ

Question ID : 264330166656

Option 1 ID : 264330653665

Option 2 ID : 264330653664

Option 3 ID : 264330653666

Option 4 ID : 264330653663

Status : Answered

Chosen Option : 1

Q.11 Two statements are given, followed by two conclusions numbered I and II. Assuming the statements to be true, even if they seem to be at variance with commonly known facts, decide which of the conclusions logically follow(s) from the statements.

Statements:

All crows are birds.

Some crows are pets.

Conclusions:

I. All pets are birds.

II. Some birds are crows.

Ans

- ✓ 1. Only Conclusion II follows.
- ✗ 2. Both Conclusions I and II follow.
- ✗ 3. Only Conclusion I follows.
- ✗ 4. Neither Conclusion I nor II follows.

Question ID : 26433081678

Option 1 ID : 264330320546

Option 2 ID : 264330320547

Option 3 ID : 264330320545

Option 4 ID : 264330320548

Status : Answered

Chosen Option : 1

Q.12 Which of the following option figures will complete the pattern in the figure given below?



Ans

1.



2.



3.

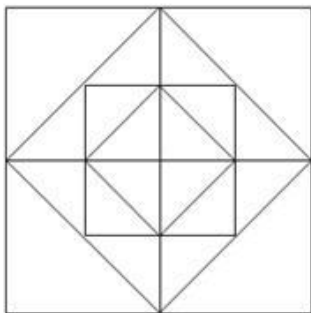


4.



Question ID : 26433080607  
 Option 1 ID : 264330316363  
 Option 2 ID : 264330316364  
 Option 3 ID : 264330316361  
 Option 4 ID : 264330316362  
 Status : Answered  
 Chosen Option : 4

Q.13 How many squares are there in the following figure?



Ans  1. 12

2. 10

3. 14

4. 16

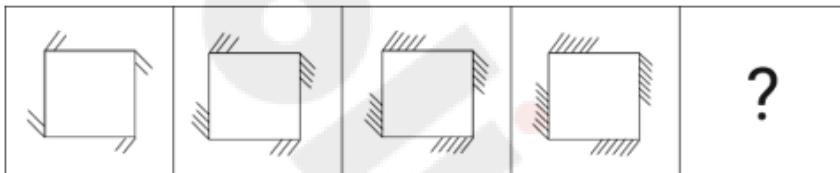
Question ID : 26433076734  
 Option 1 ID : 264330301001  
 Option 2 ID : 264330301000  
 Option 3 ID : 264330301002  
 Option 4 ID : 264330301003  
 Status : Answered  
 Chosen Option : 1

Q.14 Select the option that is related to the fourth term in the same way as the first term is related to the second term and the fifth term is related to the sixth term.  
 $18 : 27 :: ? : 36 :: 16 : 24$

- Ans  1. 24  
 2. 23  
 3. 32  
 4. 42

Question ID : 26433059930  
 Option 1 ID : 264330234553  
 Option 2 ID : 264330234555  
 Option 3 ID : 264330234554  
 Option 4 ID : 264330234552  
 Status : Answered  
 Chosen Option : 1

Q.15 Select the figure from among the given options that can replace the question mark (?) in the following series.



- Ans  1.   
 2.   
 3.   
 4.

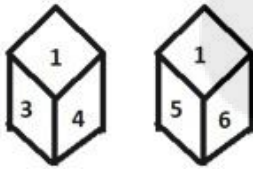
Question ID : 264330110108  
 Option 1 ID : 264330432711  
 Option 2 ID : 264330432712  
 Option 3 ID : 264330432709  
 Option 4 ID : 264330432710  
 Status : Answered  
 Chosen Option : 2

Q.16 Which of the following letter clusters will replace the question mark (?) in the given series to make it logically complete?  
HLS, KJP, NHM, QFJ, ?

- Ans
- 1. TDF
  - 2. TDH
  - 3. UDG
  - 4. TDG

Question ID : 264330102222  
 Option 1 ID : 264330401356  
 Option 2 ID : 264330401355  
 Option 3 ID : 264330401353  
 Option 4 ID : 264330401354  
 Status : Answered  
 Chosen Option : 4

Q.17 Six numbers 1, 2, 3, 4, 5 and 6 are written on different faces of a dice. Two positions of this dice are shown in the figure. Find the number on the face opposite to 5.



- Ans
- 1. 4
  - 2. 6
  - 3. 2
  - 4. 3

Question ID : 264330117894  
 Option 1 ID : 264330463393  
 Option 2 ID : 264330463394  
 Option 3 ID : 264330463391  
 Option 4 ID : 264330463392  
 Status : Answered  
 Chosen Option : 4

Q.18 Select the figure that will replace the question mark (?) in the following figure series.



- Ans
- 1.
  - 2.
  - 3.
  - 4.

Question ID : 264330108958  
 Option 1 ID : 264330428111  
 Option 2 ID : 264330428109  
 Option 3 ID : 264330428112  
 Option 4 ID : 264330428110  
 Status : Answered  
 Chosen Option : 1

Q.19 Select the correct combination of mathematical signs to sequentially replace the \* signs and to balance the given equation.

$$32 * 6 * 12 * 67 * 2 = 81$$

- Ans
- 1. +, x, -, +
  - 2. +, -, x, +
  - 3. -, x, +, -
  - 4. x, +, +, -

Question ID : 26433092505

Option 1 ID : 264330363310

Option 2 ID : 264330363309

Option 3 ID : 264330363312

Option 4 ID : 264330363311

Status : Answered

Chosen Option : 3

Q.20 Which of the following option figures will complete the pattern in the figure given below?



Ans

- 1.
- 2.
- 3.
- 4.

Question ID : 26433080640

Option 1 ID : 264330316494

Option 2 ID : 264330316495

Option 3 ID : 264330316496

Option 4 ID : 264330316493

Status : Answered

Chosen Option : 4

**Q.21** Which of the following option figures will complete the pattern in the figure given below?



Ans

- 1.
- 2.
- 3.
- 4.

Question ID : 26433080608

Option 1 ID : 264330316367

Option 2 ID : 264330316366

Option 3 ID : 264330316365

Option 4 ID : 264330316368

Status : Answered

Chosen Option : 2

**Q.22** Select the option that is related to the fifth letter-cluster in the same way as the second letter-cluster is related to the first letter-cluster and the fourth letter-cluster is related to the third letter-cluster.

HEAD : IGDH :: HAND : ICQH :: BACK : ?

- 1. DCFO
- 2. CCEO
- 3. CDFO
- 4. CCFO

Question ID : 26433076455

Option 1 ID : 264330299886

Option 2 ID : 264330299887

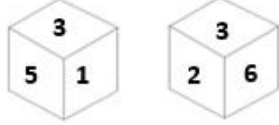
Option 3 ID : 264330299885

Option 4 ID : 264330299884

Status : Answered

Chosen Option : 4

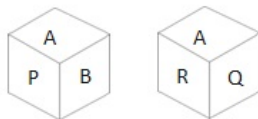
Q.23 Six numbers 3, 2, 5, 1, 7 and 6 are written on different faces of a dice. Two positions of this dice are shown in the figure. Find the number on the face opposite to 5.



- Ans
- 1. 3
  - 2. 6
  - 3. 1
  - 4. 2

Question ID : 264330129790  
Option 1 ID : 264330508391  
Option 2 ID : 264330508393  
Option 3 ID : 264330508392  
Option 4 ID : 264330508394  
Status : Answered  
Chosen Option : 4

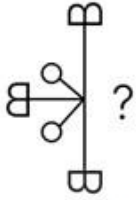
Q.24 Six letters A, B, C, P, Q and R are written on different faces of a dice. Two positions of this dice are shown in the figure. Find the letter on the face opposite to Q.



- Ans
- 1. C
  - 2. R
  - 3. P
  - 4. B

Question ID : 264330109202  
Option 1 ID : 264330429085  
Option 2 ID : 264330429086  
Option 3 ID : 264330429088  
Option 4 ID : 264330429087  
Status : Answered  
Chosen Option : 4

Q.25 Select the figure from the given options that will replace the question mark (?) in the figure given below to complete the pattern so that the final image is symmetrical.



Ans

- 1.
- 2.
- 3.
- 4.

Question ID : 264330114729

Option 1 ID : 264330451003

Option 2 ID : 264330451004

Option 3 ID : 264330451002

Option 4 ID : 264330451001

Status : Answered

Chosen Option : 2

Section : Numerical Ability

Q.1 The product of two numbers is 8427. If the HCF of these numbers is 53, then find the greater number.

- Ans
- 1. 159
  - 2. 189
  - 3. 109
  - 4. 119

Question ID : 264330112793

Option 1 ID : 264330443257

Option 2 ID : 264330443258

Option 3 ID : 264330443259

Option 4 ID : 264330443260

Status : Answered

Chosen Option : 1

Q.2 Three successive discounts of 15%, 10% and 8% are equivalent to a single discount of k%. Find the value of k.

- Ans
- 1. 27.62%
  - 2. 28.62%
  - 3. 29.62%
  - 4. 30.62%

Question ID : 264330183820

Option 1 ID : 264330720956

Option 2 ID : 264330720957

Option 3 ID : 264330720958

Option 4 ID : 264330720959

Status : Answered

Chosen Option : 1

Q.3 A cloth merchant sold half of his clothes at 30% profit, half of the remaining clothes at 20% loss, and the rest was sold at his cost price. In the total transaction, what is his gain or loss percentage?

- Ans
- 1. Profit 12%
  - 2. Profit 10%
  - 3. Loss 10%
  - 4. Loss 12%

Question ID : 264330118420  
Option 1 ID : 264330465083  
Option 2 ID : 264330465081  
Option 3 ID : 264330465082  
Option 4 ID : 264330465084  
Status : Answered  
Chosen Option : 2

Q.4 The monthly income of a person is ₹45,000. If his income is increased by 25%, then find his new monthly income (in ₹).

- Ans
- 1. 55,500
  - 2. 58,250
  - 3. 56,250
  - 4. 11,250

Question ID : 264330103464  
Option 1 ID : 264330406161  
Option 2 ID : 264330406162  
Option 3 ID : 264330406164  
Option 4 ID : 264330406163  
Status : Answered  
Chosen Option : 1

Q.5 Area of the first triangle is  $420 \text{ cm}^2$  and its base is 60 cm, whereas, area of the second triangle is  $1500 \text{ cm}^2$  and its base is 7.5 cm. What will be the ratio of the height of the first triangle to that of the second triangle?

- Ans
- 1. 6 : 325
  - 2. 7 : 200
  - 3. 7 : 250
  - 4. 5 : 242

Question ID : 264330131357  
Option 1 ID : 264330514540  
Option 2 ID : 264330514541  
Option 3 ID : 264330514542  
Option 4 ID : 264330514539  
Status : Not Answered  
Chosen Option : --

Q.6

The value of  $\frac{0.0203 \times 2.92}{0.7 \times 0.0365 \times 2.9}$  is:

- Ans
- 1. 0.8
  - 2. 0.3
  - 3. 0.7
  - 4. 0.5

Question ID : 264330103651  
Option 1 ID : 264330406910  
Option 2 ID : 264330406912  
Option 3 ID : 264330406911  
Option 4 ID : 264330406909  
Status : Answered  
Chosen Option : 1

Q.7

For what value of  $n$  are  $3^n - 2^n$  and  $3^n + 2^n$  prime?

- Ans
- 1. 4
  - 2. 2
  - 3. 5
  - 4. 3

Question ID : 264330104276  
Option 1 ID : 264330409407  
Option 2 ID : 264330409405  
Option 3 ID : 264330409408  
Option 4 ID : 264330409406  
Status : Answered  
Chosen Option : 2

Q.8 The average of 10 terms is 50 and the average of the first 5 terms is 45. What is the average of the remaining 5 terms?

- Ans
- 1. 55
  - 2. 40
  - 3. 45
  - 4. 50

Question ID : 264330129919  
Option 1 ID : 264330508910  
Option 2 ID : 264330508909  
Option 3 ID : 264330508908  
Option 4 ID : 264330508907  
Status : Answered  
Chosen Option : 1

Q.9 A person takes a loan of ₹4,000 for 3 years at 8% per annum compound interest. He repaid ₹2,000 in each of the first and second years. The amount he should pay at the end of the third year to clear all his debt is:

- Ans
- 1. ₹500.20
  - 2. ₹567.12
  - 3. ₹546.05
  - 4. ₹525.34

Question ID : 264330103736  
Option 1 ID : 264330407249  
Option 2 ID : 264330407252  
Option 3 ID : 264330407251  
Option 4 ID : 264330407250  
Status : Not Answered  
Chosen Option : --

Q.10 A man decides to travel 90 kilometres in 9 hours, partly by foot and partly on a bicycle. If his speed on foot is 9 kilometres/hour and bicycle is 18 kilometres/hour, what is the distance he travels on foot?

- Ans
- 1. 72 kilometres
  - 2. 85 kilometres
  - 3. 100 kilometres
  - 4. 68 kilometres

Question ID : 264330104363  
Option 1 ID : 264330409754  
Option 2 ID : 264330409755  
Option 3 ID : 264330409756  
Option 4 ID : 264330409753  
Status : Answered  
Chosen Option : 1

Q.11 A solid metallic hemisphere of radius 9 cm is melted and recast into a right circular cone of height 72 cm. The radius of the base of the cone is:

- Ans
- 1.  $5\frac{1}{2}$  cm
  - 2.  $8\frac{1}{2}$  cm
  - 3.  $3\frac{1}{2}$  cm
  - 4.  $4\frac{1}{2}$  cm

Question ID : 264330119369  
Option 1 ID : 264330467766  
Option 2 ID : 264330467765  
Option 3 ID : 264330467763  
Option 4 ID : 264330467764  
Status : Not Answered  
Chosen Option : --

Q.12 Bhumika deposited ₹8,000, which amounted to ₹9,200 after 3 years at  $r\%$  p.a. simple interest. Had the interest rate been 2% more, that is,  $(r + 2)\%$  per annum, what amount would she have received?

- Ans
- 1. ₹9,680
  - 2. ₹9,890
  - 3. ₹9,700
  - 4. ₹9,600

Question ID : 264330182530  
Option 1 ID : 264330715912  
Option 2 ID : 264330715914  
Option 3 ID : 264330715911  
Option 4 ID : 264330715913  
Status : Answered  
Chosen Option : 1

Q.13 The monthly incomes of A and B are in the ratio of 3 : 4, and their monthly expenditures are in the ratio 2 : 3. If each saves ₹6,000 per month, then find the monthly income of the B.

- Ans
- 1. ₹22,000
  - 2. ₹23,000
  - 3. ₹25,000
  - 4. ₹24,000

Question ID : 264330105996  
Option 1 ID : 264330416285  
Option 2 ID : 264330416286  
Option 3 ID : 264330416288  
Option 4 ID : 264330416287  
Status : Answered  
Chosen Option : 4

Q.14 Radha and Shama undertake a piece of work for ₹36,000. Radha can do it in 20 days and Shama can do it in 60 days. With the help of Rama, they finished it in 10 days. How much should Rama be paid for her contribution?

- Ans
- 1. ₹15,000
  - 2. ₹20,000
  - 3. ₹12,000
  - 4. ₹8,000

Question ID : 264330104223  
Option 1 ID : 264330409193  
Option 2 ID : 264330409194  
Option 3 ID : 264330409196  
Option 4 ID : 264330409195  
Status : Answered  
Chosen Option : 3

Q.15 A man increases his consumption of sugar by 44.44% because the price of sugar is reduced by P%. Find P. (Expenditure remains constant.)

Ans

✓ 1.  $30\frac{10}{13}\%$

✗ 2.  $32\frac{10}{13}\%$

✗ 3.  $20\frac{10}{13}\%$

✗ 4.  $25\frac{10}{13}\%$

Question ID : 264330129397

Option 1 ID : 264330506956

Option 2 ID : 264330506957

Option 3 ID : 264330506954

Option 4 ID : 264330506955

Status : Answered

Chosen Option : 1

Section : Computer Proficiency

Q.1 Which of the following is a shortcut key to open the Font dialog box in MS Word 365?

Ans ✓ 1. Ctrl+Shift+F

✗ 2. Ctrl+Alt+F

✗ 3. Alt+F

✗ 4. Ctrl+F

Question ID : 264330178602

Option 1 ID : 264330700435

Option 2 ID : 264330700436

Option 3 ID : 264330700438

Option 4 ID : 264330700437

Status : Answered

Chosen Option : 3

Q.2 Which organisation oversees the development and standardisation of technologies for the World Wide Web?

Ans ✗ 1. IEEE

✗ 2. IEIT

✗ 3. WHO

✓ 4. W3C

Question ID : 264330182113

Option 1 ID : 264330714291

Option 2 ID : 264330714292

Option 3 ID : 264330714294

Option 4 ID : 264330714293

Status : Answered

Chosen Option : 4

Q.3 What is the default page orientation in Microsoft Word 365?

- Ans
- 1. Portrait
  - 2. Square
  - 3. Pentagon
  - 4. Landscape

Question ID : 264330180714  
Option 1 ID : 264330708824  
Option 2 ID : 264330708825  
Option 3 ID : 264330708826  
Option 4 ID : 264330708823  
Status : Answered  
Chosen Option : 1

Q.4 In MS Excel 365, the default row height and the column width, respectively, are:

- Ans
- 1. 10 and 8.52
  - 2. 20 and 10.51
  - 3. 5 and 10.43
  - 4. 15 and 8.43

Question ID : 264330175960  
Option 1 ID : 264330690135  
Option 2 ID : 264330690136  
Option 3 ID : 264330690138  
Option 4 ID : 264330690137  
Status : Not Answered  
Chosen Option : --

Q.5 Under which of the following tabs of the MS Word 365 ribbon are the Bullets and Numbering options present?

- Ans
- 1. Insert
  - 2. Mailings
  - 3. Home
  - 4. File

Question ID : 264330180832  
Option 1 ID : 264330709293  
Option 2 ID : 264330709292  
Option 3 ID : 264330709291  
Option 4 ID : 264330709294  
Status : Answered  
Chosen Option : 1

Q.6 In MS Excel 365, A Contour map is an example of which of the following charts?

- Ans
- 1. Surface Chart
  - 2. Scatter chart
  - 3. Radar chart
  - 4. Doughnut chart

Question ID : 264330175954  
Option 1 ID : 264330690112  
Option 2 ID : 264330690111  
Option 3 ID : 264330690113  
Option 4 ID : 264330690114  
Status : Answered  
Chosen Option : 3

Q.7 Which of the following features can you use if you are having problems or want to find out how to do something in MS Word 365?

- Ans
- 1. Review
  - 2. Insert
  - 3. Help
  - 4. Edit

Question ID : 264330178604  
Option 1 ID : 264330700446  
Option 2 ID : 264330700445  
Option 3 ID : 264330700444  
Option 4 ID : 264330700443  
Status : Answered  
Chosen Option : 3

Q.8 Which of the following shortcut keys is used in MS Word 365 to move by one preview page when zoomed out?

- Ans
- 1. Ctrl+Alt+I
  - 2. Page UP or Page Down
  - 3. Ctrl+P
  - 4. Ctrl+D

Question ID : 264330178600  
Option 1 ID : 264330700427  
Option 2 ID : 264330700429  
Option 3 ID : 264330700428  
Option 4 ID : 264330700430  
Status : Answered  
Chosen Option : 2

Q.9 In Microsoft Excel 365, what is a function?

- Ans
- 1. A method to create animations in spreadsheets
  - 2. A design tool for creating charts and graphs
  - 3. A predefined formula that performs calculations using values in a specific order
  - 4. A text formatting option for cells

Question ID : 264330180688  
Option 1 ID : 264330708722  
Option 2 ID : 264330708720  
Option 3 ID : 264330708719  
Option 4 ID : 264330708721  
Status : Answered  
Chosen Option : 3

Q.10 Files or documents that are included with the email are commonly referred to as

- Ans
- 1. add-ons
  - 2. appends
  - 3. attachments
  - 4. supplements

Question ID : 264330173546

Option 1 ID : 264330680663

Option 2 ID : 264330680666

Option 3 ID : 264330680665

Option 4 ID : 264330680664

Status : Answered

Chosen Option : 3