

Constable Executive Male and Female in Delhi Police Examination 2023

Roll Number	
Candidate Name	
Venue Name	
Exam Date	02/12/2023
Exam Time	3:00 PM - 4:30 PM
Subject	Constable Executive Male and Female in Delhi Police Examination 2023

Section : General Knowledge

Q.1 When did Italian traveller Marco Polo visit Kerala?

- Ans
- 1. 15th CE
 - 2. 8th CE
 - 3. 10th CE
 - 4. 13th CE

Question ID : 264330119732
Option 1 ID : 264330469206
Option 2 ID : 264330469205
Option 3 ID : 264330469203
Option 4 ID : 264330469204
Status : Answered
Chosen Option : 4

Q.2 The Bombay Presidency Association was started by Badruddin Tyabji, Pherozshah Mehta and KT Telang in which of the following years?

- Ans
- 1. 1887
 - 2. 1885
 - 3. 1886
 - 4. 1888

Question ID : 264330171704
Option 1 ID : 264330673421
Option 2 ID : 264330673419
Option 3 ID : 264330673420
Option 4 ID : 264330673422
Status : Answered
Chosen Option : 2

Q.3 Mahatma Gandhi started the Dandi March in 1930 from _____.

- Ans
- 1. Yerawada Ashram
 - 2. Dandi Ashram
 - 3. Surat Ashram
 - 4. Sabarmati Ashram

Question ID : 264330114104
Option 1 ID : 264330448501
Option 2 ID : 264330448504
Option 3 ID : 264330448503
Option 4 ID : 264330448502
Status : Answered
Chosen Option : 4

Q.4 The famous Hindi novel 'Gaban' is written by:

- Ans
- 1. Dharmveer Bharati
 - 2. Amrita Pritam
 - 3. Munshi Premchand
 - 4. Mahadevi Verma

Question ID : 26433064629
Option 1 ID : 264330253109
Option 2 ID : 264330253108
Option 3 ID : 264330253110
Option 4 ID : 264330253111
Status : Answered
Chosen Option : 3

Q.5 In which of the following states is the famous Rumtek monastery located?

- Ans
- 1. Uttarakhand
 - 2. Assam
 - 3. Sikkim
 - 4. West Bengal

Question ID : 264330106246
Option 1 ID : 264330417288
Option 2 ID : 264330417285
Option 3 ID : 264330417286
Option 4 ID : 264330417287
Status : Answered
Chosen Option : 3

Q.6 Monolithic pillars of sandstone during Ashoka's reign, were crowned with animal figures like _____ elephant and lion along with inscriptions of Buddhist concepts.

- Ans
- 1. bull
 - 2. dog
 - 3. horse
 - 4. cat

Question ID : 264330106355
Option 1 ID : 264330417722
Option 2 ID : 264330417721
Option 3 ID : 264330417723
Option 4 ID : 264330417724
Status : Answered
Chosen Option : 1

Q.7 In which of the following years did India start celebrating National Sports Day?

- Ans
- 1. 2015
 - 2. 2010
 - 3. 2013
 - 4. 2012

Question ID : 264330118455
Option 1 ID : 264330465224
Option 2 ID : 264330465223
Option 3 ID : 264330465222
Option 4 ID : 264330465221
Status : Answered
Chosen Option : 1

Q.8 Padma Vibhushan awardee Kathak dancer and choreographer, Birju Maharaj belonged to which of the following Gharanas?

- Ans 1. Jaipur
 2. Kalka - Bindadin
 3. Gwalior
 4. Benaras

Question ID : 264330112879
Option 1 ID : 264330443601
Option 2 ID : 264330443603
Option 3 ID : 264330443604
Option 4 ID : 264330443602
Status : Answered
Chosen Option : 2

Q.9 Identify the correct statement in the context of five-year plans in India.
(i) In the first five-year plan, the top priority was given to agriculture.
(ii) In the second five-year plan, the top priority was given to industry.

- Ans 1. Only (ii)
 2. Both (i) and (ii)
 3. Only (i)
 4. Neither (i) nor (ii)

Question ID : 264330109099
Option 1 ID : 264330428674
Option 2 ID : 264330428675
Option 3 ID : 264330428673
Option 4 ID : 264330428676
Status : Answered
Chosen Option : 2

Q.10 पारिस्थितिक अनुक्रम के बारे में निम्नलिखित में से कौन-सा/से कथन सत्य है/हैं?
कथन 1: यह किसी दिए गए क्षेत्र के जाति-संघटन में क्रमिक और स्पष्ट पूर्वानुमेय परिवर्तन है।
कथन 2: यह पारिस्थितिकी संरक्षण की विधि है।

- Ans 1. केवल कथन 1 सत्य है
 2. केवल कथन 2 सत्य है
 3. कथन 1 और 2 दोनों असत्य हैं
 4. कथन 1 और 2 दोनों सत्य हैं

Question ID : 264330138005
Option 1 ID : 264330540627
Option 2 ID : 264330540628
Option 3 ID : 264330540629
Option 4 ID : 264330540630
Status : Answered
Chosen Option : 4

Q.11 The Constitution of India provides for a _____ integrated judicial system.

- Ans 1. single-level
 2. multi-level
 3. dual-level
 4. three-level

Question ID : 264330169056
Option 1 ID : 264330663028
Option 2 ID : 264330663030
Option 3 ID : 264330663027
Option 4 ID : 264330663029
Status : Answered
Chosen Option : 4

Q.12 In which state is the Gandhi Sagar Wildlife Sanctuary located?

- Ans 1. Nagaland
 2. Assam
 3. Madhya Pradesh
 4. Karnataka

Question ID : 264330173630
Option 1 ID : 264330681002
Option 2 ID : 264330681001
Option 3 ID : 264330680999
Option 4 ID : 264330681000
Status : Answered
Chosen Option : 3

Q.13 Ngozi Okonjo-Iweala is currently heading which of the following institutions?

- Ans 1. IMF
 2. Asian Development Bank
 3. WTO
 4. World Bank

Question ID : 26433059301
Option 1 ID : 264330232080
Option 2 ID : 264330232083
Option 3 ID : 264330232081
Option 4 ID : 264330232082
Status : Answered
Chosen Option : 2

Q.14 National Sports University is situated in _____.

- Ans 1. Imphal
 2. Itanagar
 3. New Delhi
 4. Chennai

Question ID : 264330110375
Option 1 ID : 264330433779
Option 2 ID : 264330433780
Option 3 ID : 264330433777
Option 4 ID : 264330433778
Status : Not Answered
Chosen Option : --

Q.15 In which of the following years was the National Human Rights Commission formed?

- Ans
- 1. 1965
 - 2. 1980
 - 3. 2000
 - 4. 1993

Question ID : 26433086824
Option 1 ID : 264330340940
Option 2 ID : 264330340939
Option 3 ID : 264330340937
Option 4 ID : 264330340938
Status : Not Answered
Chosen Option : --

Q.16 Which of the following Articles lays down the duty of the State to raise the level of nutrition and the standard of living and to improve public health?

- Ans
- 1. Article 44
 - 2. Article 46
 - 3. Article 45
 - 4. Article 47

Question ID : 264330120100
Option 1 ID : 264330470655
Option 2 ID : 264330470657
Option 3 ID : 264330470656
Option 4 ID : 264330470658
Status : Answered
Chosen Option : 3

Q.17 Chandrayaan-3 leaves Earth's surface by burning a huge amount of fuel. The gases released then push the rocket upwards against gravity. Which law of motion is applied here?

- Ans
- 1. Newton's 1st law of motion
 - 2. Newton's law of gravitation
 - 3. Newton's 3rd law of motion
 - 4. Newton's 2nd law of motion

Question ID : 264330177011
Option 1 ID : 264330694242
Option 2 ID : 264330694241
Option 3 ID : 264330694240
Option 4 ID : 264330694239
Status : Answered
Chosen Option : 3

Q.18 At which of the following places did Gandhiji conduct his first experiment of Satyagraha in India?

- Ans 1. Champaran
 2. Calcutta
 3. Cawnpore
 4. Ahmedabad

Question ID : 264330113589
Option 1 ID : 264330446443
Option 2 ID : 264330446441
Option 3 ID : 264330446442
Option 4 ID : 264330446444
Status : Answered
Chosen Option : 1

Q.19 Which of the following statements about Fundamental Duties is correct?

- I) Sardar Swaran Singh recommended the inclusion of a chapter on fundamental duties in the Constitution of India.
II) Promotion of cooperative societies is a fundamental duty.

- Ans 1. Only 2
 2. Both 1 and 2
 3. Only 1
 4. Neither 1 nor 2

Question ID : 264330110109
Option 1 ID : 264330432714
Option 2 ID : 264330432715
Option 3 ID : 264330432713
Option 4 ID : 264330432716
Status : Answered
Chosen Option : 3

Q.20 The Multidimensional Poverty Index of India does NOT consider which of the following for calculating the index?

- Ans 1. Environmental quality
 2. Health
 3. Education
 4. Standard of Living

Question ID : 264330120347
Option 1 ID : 264330471642
Option 2 ID : 264330471639
Option 3 ID : 264330471640
Option 4 ID : 264330471641
Status : Answered
Chosen Option : 1

Q.21 Which of the following organisations was founded by Vinayak Damodar Savarkar in 1904?

- Ans
- 1. Free India Society
 - 2. Jugantar
 - 3. Indian Independence League
 - 4. Abhinav Bharat Society

Question ID : 264330120263
Option 1 ID : 264330471308
Option 2 ID : 264330471309
Option 3 ID : 264330471310
Option 4 ID : 264330471307
Status : Answered
Chosen Option : 4

Q.22 स्वतंत्रता के बाद पहले राष्ट्रीय खेलों का आयोजन _____ में किया गया था।

- Ans
- 1. जबलपुर
 - 2. मद्रास
 - 3. लखनऊ
 - 4. नई दिल्ली

Question ID : 264330132532
Option 1 ID : 264330519225
Option 2 ID : 264330519224
Option 3 ID : 264330519223
Option 4 ID : 264330519226
Status : Answered
Chosen Option : 4

Q.23 Which of the following is an example of a joint sector industry?

- Ans
- 1. Hindustan Aeronautics Limited
 - 2. National Highway Authority of India
 - 3. Steel Authority of India Limited
 - 4. Oil India Limited

Question ID : 264330173607
Option 1 ID : 264330680907
Option 2 ID : 264330680908
Option 3 ID : 264330680909
Option 4 ID : 264330680910
Status : Answered
Chosen Option : 3

Q.24 Lalitha and Saroja Chidambaram are the noted _____ singers.

- Ans
- 1. folk
 - 2. Sufi
 - 3. Hindustani classical
 - 4. Carnatic

Question ID : 264330110246
Option 1 ID : 264330433263
Option 2 ID : 264330433261
Option 3 ID : 264330433262
Option 4 ID : 264330433264
Status : Answered
Chosen Option : 4

Q.25 Vijayanagar Emperor Achyuta Deva Raya belonged to the _____ dynasty.

- Ans
- 1. Sangama
 - 2. Saluva
 - 3. Tuluva
 - 4. Aravidu

Question ID : 264330106566
Option 1 ID : 264330418568
Option 2 ID : 264330418565
Option 3 ID : 264330418567
Option 4 ID : 264330418566
Status : Answered
Chosen Option : 3

Q.26 निम्नलिखित में से वह कौन-सी मोहिनीअट्टम नृत्यांगना हैं जिन्होंने 'मोहिनीअट्टम: चरित्रवम आट्टापराकरवम' पुस्तक लिखी है, और जिनको 1997 में प्रतिष्ठित कालिदास सम्मान प्राप्त हुआ?

- Ans
- 1. कलामंडलम कल्याणिकुट्टी अम्मा
 - 2. रुक्मिणी देवी अरुडेल
 - 3. यामिनी कृष्णमूर्ति
 - 4. शोभना नारायण

Question ID : 264330112880
Option 1 ID : 264330443607
Option 2 ID : 264330443608
Option 3 ID : 264330443606
Option 4 ID : 264330443605
Status : Answered
Chosen Option : 1

Q.27 Patanjali is well known for the compilation of:

- Ans
- 1. Ayurveda
 - 2. Yoga Sutra
 - 3. Bramhasutra
 - 4. Panchatantra

Question ID : 264330123734
Option 1 ID : 264330484974
Option 2 ID : 264330484971
Option 3 ID : 264330484973
Option 4 ID : 264330484972
Status : Answered
Chosen Option : 1

Q.28 _____ is the largest slum in Asia.

- Ans
- 1. Dharavi
 - 2. Kathputli
 - 3. Baiganwadi
 - 4. Banganga

Question ID : 26433092857
Option 1 ID : 264330364712
Option 2 ID : 264330364709
Option 3 ID : 264330364710
Option 4 ID : 264330364711
Status : Answered
Chosen Option : 1

Q.29 निम्नलिखित में से कौन-सा एक एन.बी.एफ.सी.-एम.एफ.आई. (NBFC-MFI) है, जो ग्रामीण के संयुक्त देयता समूह उधार मॉडल में काम करता है?

- Ans
- 1. आरोहण फाइनेंशियल सर्विसेज लिमिटेड
 - 2. फ्यूजन माइक्रोफाइनेंस प्राइवेट लिमिटेड
 - 3. इक्विटास स्मॉल फाइनेंस बैंक
 - 4. बंधन फाइनेंशियल सर्विसेज प्राइवेट लिमिटेड

Question ID : 264330116496
Option 1 ID : 264330458071
Option 2 ID : 264330458072
Option 3 ID : 264330458070
Option 4 ID : 264330458069
Status : Marked For Review
Chosen Option : 4

Q.30 Who among the following used the term Evergreen Revolution for increasing agricultural production in India?

- Ans
- 1. Raj Krishna
 - 2. RKV Rao
 - 3. MS Swaminathan
 - 4. Norman Borlaug

Question ID : 264330110001
Option 1 ID : 264330432283
Option 2 ID : 264330432284
Option 3 ID : 264330432282
Option 4 ID : 264330432281
Status : Answered
Chosen Option : 3

Q.31 Cell nucleus was discovered by _____.

- Ans
- 1. Robert Brown
 - 2. Matthias Schleiden
 - 3. Rudolf Virchow
 - 4. Robert Hook

Question ID : 264330117605
Option 1 ID : 264330462445
Option 2 ID : 264330462448
Option 3 ID : 264330462447
Option 4 ID : 264330462446
Status : Answered
Chosen Option : 4

Q.32 Where is the headquarters of the National Rifle Association of India situated?

- Ans
- 1. New Delhi
 - 2. Bengaluru
 - 3. Kolkata
 - 4. Mumbai

Question ID : 264330118457
Option 1 ID : 264330465231
Option 2 ID : 264330465230
Option 3 ID : 264330465229
Option 4 ID : 264330465232
Status : Not Answered
Chosen Option : --

Q.33 Baliyatra is the cultural festival of which Indian state?

- Ans 1. Kerala
 2. Odisha
 3. Jharkhand
 4. West Bengal

Question ID : 264330109610
Option 1 ID : 264330430718
Option 2 ID : 264330430717
Option 3 ID : 264330430719
Option 4 ID : 264330430720
Status : Answered
Chosen Option : 2

Q.34 Which of the following ministries is the implementing ministry for 'PM CARES for Children Scheme'?

- Ans 1. Ministry of Social Justice and Empowerment
 2. Ministry of Health and Family Welfare
 3. Ministry of Home Affairs
 4. Ministry of Women and Child Development

Question ID : 264330111588
Option 1 ID : 264330438439
Option 2 ID : 264330438437
Option 3 ID : 264330438440
Option 4 ID : 264330438438
Status : Answered
Chosen Option : 4

Q.35 Who was the author of 'The Great Indian Novel'?

- Ans 1. Anees Salim
 2. Anuj Dhar
 3. Salim Khan
 4. Shashi Tharoor

Question ID : 26433064226
Option 1 ID : 264330251496
Option 2 ID : 264330251499
Option 3 ID : 264330251498
Option 4 ID : 264330251497
Status : Answered
Chosen Option : 4

Q.36 Which cargo port in India has the biggest capacity from the followings?

- Ans 1. Marmagao Port
 2. Jawaharlal Nehru Port
 3. Tuticorin Port
 4. New Mangalore Port

Question ID : 264330182954
Option 1 ID : 264330717548
Option 2 ID : 264330717550
Option 3 ID : 264330717551
Option 4 ID : 264330717549
Status : Answered
Chosen Option : 2

Q.37 Part IV-A of the Constitution of India contains _____ Articles.

- Ans
- 1. four
 - 2. three
 - 3. one
 - 4. two

Question ID : 264330130437
Option 1 ID : 264330510862
Option 2 ID : 264330510861
Option 3 ID : 264330510859
Option 4 ID : 264330510860
Status : Answered
Chosen Option : 3

Q.38 Phytoplanktons are _____.

- Ans
- 1. primary consumers of lake ecosystem
 - 2. tertiary consumers of pond ecosystem
 - 3. producers in pond ecosystem
 - 4. secondary consumers of ocean ecosystem

Question ID : 264330111898
Option 1 ID : 264330439678
Option 2 ID : 264330439680
Option 3 ID : 264330439677
Option 4 ID : 264330439679
Status : Answered
Chosen Option : 3

Q.39 Who among the following was the founder of Raigarh gharana of Kathak?

- Ans
- 1. Raja Chakradhar Singh
 - 2. Shambhu Maharaj
 - 3. Ishwari Prasad
 - 4. Janaki Prasad

Question ID : 26433086937
Option 1 ID : 264330341390
Option 2 ID : 264330341392
Option 3 ID : 264330341389
Option 4 ID : 264330341391
Status : Answered
Chosen Option : 2

Q.40 The Strait of Gibraltar connects which of the following Ocean with the Mediterranean Sea and separates Spain on the European continent from Morocco on the African continent?

- Ans
- 1. Indian Ocean
 - 2. Pacific Ocean
 - 3. Southern Ocean
 - 4. Atlantic Ocean

Question ID : 264330131029
Option 1 ID : 264330513229
Option 2 ID : 264330513227
Option 3 ID : 264330513230
Option 4 ID : 264330513228
Status : Answered
Chosen Option : 2

Q.41 Rajya Sabha enjoys which special power under Article 312 of the Constitution of India?

- Ans**
- 1. To put restriction on Government
 - 2. To appoint members of Human Rights Commission
 - 3. To create new All India service
 - 4. To extend special rights to certain people

Question ID : 264330130484
Option 1 ID : 264330511049
Option 2 ID : 264330511050
Option 3 ID : 264330511047
Option 4 ID : 264330511048
Status : Answered
Chosen Option : 2

Q.42 Which of the following is the outcome of globalisation of a country's economy?

- Ans**
- 1. Outsourcing
 - 2. Monetary policy reforms
 - 3. Dis-investment
 - 4. Fiscal policy reforms

Question ID : 264330111571
Option 1 ID : 264330438369
Option 2 ID : 264330438371
Option 3 ID : 264330438372
Option 4 ID : 264330438370
Status : Answered
Chosen Option : 3

Q.43 Music composer Debojyoti Mishra has won the Best Music Director award at the 20th Imagine India Film Festival in _____ for his work in film 'Bansuri: The Flute'.

- Ans**
- 1. Spain
 - 2. France
 - 3. Germany
 - 4. Italy

Question ID : 264330110251
Option 1 ID : 264330433283
Option 2 ID : 264330433281
Option 3 ID : 264330433282
Option 4 ID : 264330433284
Status : Not Answered
Chosen Option : --

Q.44 नीचे दिए गए कथनों पर विचार कीजिए और भारतीय लोक और जनजातीय नृत्य शैलियों के संबंध में सही विकल्प का चयन कीजिए।

- i) चैलम (Chailam), मिजोरम का लोक नृत्य है।
ii) होजागिरी, गुजरात का लोक नृत्य है।
iii) बिदेसिया, बिहार का लोक नृत्य है।

- Ans 1. केवल (ii) सही है।
 2. (i) और (iii), दोनों सही हैं।
 3. (ii) और (iii), दोनों सही हैं।
 4. केवल (i) सही है।

Question ID : 264330181382

Option 1 ID : 264330711453

Option 2 ID : 264330711452

Option 3 ID : 264330711454

Option 4 ID : 264330711451

Status : Answered

Chosen Option : 4

Q.45 If NDP at factor cost = ₹1,050 crore
Subsidies = ₹40 crore
Net factor income from abroad = ₹10 crore
How much is NNP at factor cost?

- Ans 1. ₹1,060 crore
 2. ₹1,100 crore
 3. ₹1,090 crore
 4. ₹1,040 crore

Question ID : 264330112892

Option 1 ID : 264330443654

Option 2 ID : 264330443656

Option 3 ID : 264330443655

Option 4 ID : 264330443653

Status : Answered

Chosen Option : 2

Q.46 In which of the following Articles of the Constitution of India is it mentioned that "it shall be the duty of every citizen of India to abide by the Constitution and respect its ideals and institutions, the National Flag and the National Anthem"?

- Ans 1. 51A (f)
 2. 51A (a)
 3. 51A (k)
 4. 51A (j)

Question ID : 264330133061

Option 1 ID : 264330521295

Option 2 ID : 264330521298

Option 3 ID : 264330521297

Option 4 ID : 264330521296

Status : Answered

Chosen Option : 2

Q.47 Showcasing its wildlife and religious sites at the 74th parade, which of the following states' tableau won 1st prize at the 2023 Republic Day?

- Ans
- 1. Jharkhand
 - 2. Uttarakhand
 - 3. Gujarat
 - 4. Arunachal Pradesh

Question ID : 264330134253
Option 1 ID : 264330526009
Option 2 ID : 264330526008
Option 3 ID : 264330526010
Option 4 ID : 264330526007
Status : Answered
Chosen Option : 2

Q.48 चंद्रगुप्त मौर्य द्वारा प्राचीन भारत में मौर्य साम्राज्य की स्थापना के ठीक पहले निम्नलिखित में से किस राजवंश ने मगध पर शासन किया था?

- Ans
- 1. बृहद्रथ
 - 2. प्रद्योत
 - 3. शिशुनाग
 - 4. नंद

Question ID : 264330120238
Option 1 ID : 264330471207
Option 2 ID : 264330471209
Option 3 ID : 264330471208
Option 4 ID : 264330471210
Status : Answered
Chosen Option : 4

Q.49 Match the columns with respect to the ranking of the given countries on the Human Development Index 2021/2022 out of 191 countries.

Country	Rank
1. China	a. 161
2. Nepal	b. 143
3. Pakistan	c. 79

- Ans
- 1. 1-c, 2-b, 3-a
 - 2. 1-a, 2-c, 3-b
 - 3. 1-a, 2-b, 3-c
 - 4. 1-c, 2-a, 3-b

Question ID : 264330132763
Option 1 ID : 264330520147
Option 2 ID : 264330520150
Option 3 ID : 264330520148
Option 4 ID : 264330520149
Status : Answered
Chosen Option : 1

Q.50 Chitrakot Falls is a natural waterfall known as Niagara Falls of India, located on the _____ river in the state of Chhattisgarh, India.

- Ans**
- 1. Varahi River
 - 2. Indravati River
 - 3. Mandovi River
 - 4. Chandravanka River

Question ID : 264330113531
Option 1 ID : 264330446209
Option 2 ID : 264330446212
Option 3 ID : 264330446210
Option 4 ID : 264330446211
Status : Answered
Chosen Option : 2

Section : Reasoning

Q.1 1, 2, 3, 4, 5 and 6 are written on different faces of a dice. Three different positions of the same dice are shown below. Find the number on the face opposite to the one showing '4'.

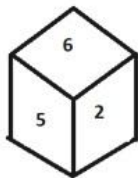


figure 1

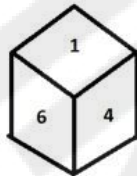


figure 2



figure 3

- Ans**
- 1. 6
 - 2. 1
 - 3. 5
 - 4. 2

Question ID : 264330113926
Option 1 ID : 264330447791
Option 2 ID : 264330447790
Option 3 ID : 264330447789
Option 4 ID : 264330447792
Status : Answered
Chosen Option : 3

Q.2 Select the correct mirror image of the given figure when the mirror is placed at MN as shown below.



Ans

1. g3NiЯ

2. εg RiN

3. εgNiЯ

4. εgNiЯ

Question ID : 26433016660

Option 1 ID : 264330653681

Option 2 ID : 264330653682

Option 3 ID : 264330653679

Option 4 ID : 264330653680

Status : Answered

Chosen Option : 4

Q.3 Which of the following terms will replace the question mark (?) in the given series?
XPEQ, TNIS, ?, LJQW, HHUY

Ans

1. PLNU

2. OLNU

3. OKNV

4. PLMU

Question ID : 264330102185

Option 1 ID : 264330401207

Option 2 ID : 264330401205

Option 3 ID : 264330401208

Option 4 ID : 264330401206

Status : Answered

Chosen Option : 4

Q.4 Two statements are given followed by two conclusions numbered I and II. Assuming the statements to be true, even if they seem to be at variance from commonly known facts, decide which of the conclusions logically follow(s) from the statements.

Statements:

Some Fishes are Cats.

All Cats are Soft.

Conclusions:

I. All Soft are Cats.

II. Some Fishes are Soft.

Ans

1. Neither conclusion I nor II follows.

2. Only conclusion II follows.

3. Both conclusions I and II follow.

4. Only conclusion I follows.

Question ID : 26433076606

Option 1 ID : 264330300491

Option 2 ID : 264330300489

Option 3 ID : 264330300490

Option 4 ID : 264330300488

Status : Answered

Chosen Option : 2

Q.5 Which figure should replace the question mark (?) in the following series to continue the pattern?

R	S	O	E	
O ▽ E	E R O	S R ▽	▽ O S	?
S	▽	E	R	

Ans

✗ 1.

S		
R	O	E
	▽	

✗ 2.

R		
S	▽	O
	E	

✓ 3.

S		
E	O	R
	▽	

✗ 4.

▽		
R	O	E
	S	

Question ID : 264330129626

Option 1 ID : 264330507872

Option 2 ID : 264330507871

Option 3 ID : 264330507873

Option 4 ID : 264330507870

Status : Marked For Review

Chosen Option : 1

Q.6 Select the correct mirror image of the given figure when the mirror is placed at PQ as shown below.

TResT4121@1



Ans

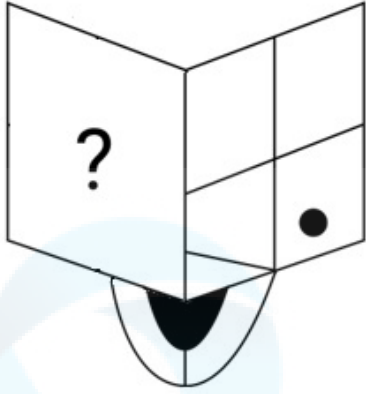
- 1. TResT4121@1
- 2. TResT4121@1
- 3. TResT4222@1
- 4. TRes121T4@1

Question ID : 26433082021
Option 1 ID : 264330321919
Option 2 ID : 264330321918
Option 3 ID : 264330321920
Option 4 ID : 264330321917

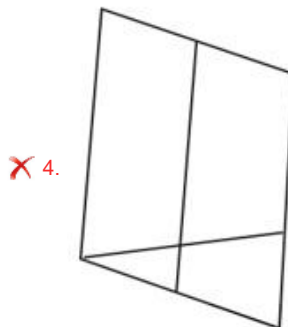
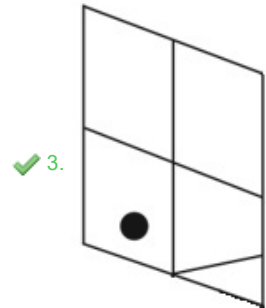
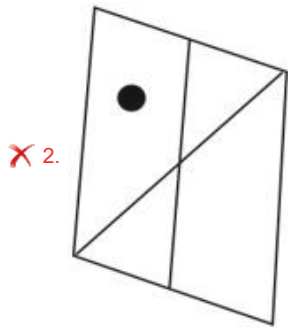
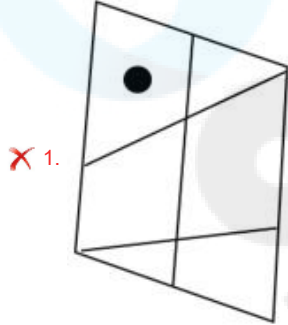
Status : Answered

Chosen Option : 2

Q.7 Select the figure from the options that can replace the question mark (?) and complete the given pattern.

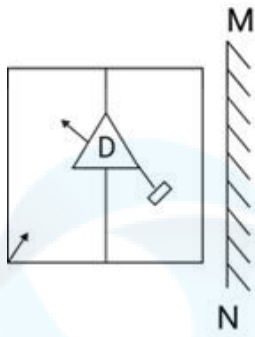


Ans

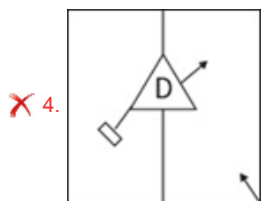
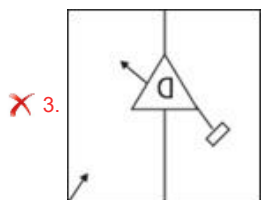
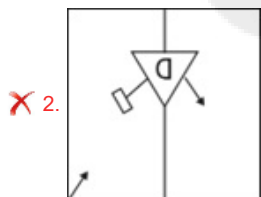
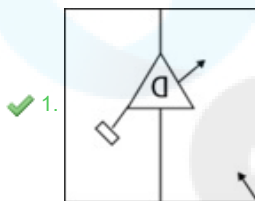


Question ID : 264330106475
Option 1 ID : 264330418204
Option 2 ID : 264330418201
Option 3 ID : 264330418203
Option 4 ID : 264330418202

Q.8 Select the correct mirror image of the given combination when the mirror is placed at 'MN' as shown below.



Ans



Question ID : 264330130771

Option 1 ID : 264330512196

Option 2 ID : 264330512195

Option 3 ID : 264330512197

Option 4 ID : 264330512198

Status : Answered

Chosen Option : 1

Q.9 In a certain code language, 'SUGAR' is written as 'VHBST' and 'TEAPOT' is written as 'FBQPUU'. How will 'PAINT' be written in that language?

- Ans
- 1. UOJBQ
 - 2. QBJOU
 - 3. BJOUQ
 - 4. BJOQU

Question ID : 26433087167
Option 1 ID : 264330342308
Option 2 ID : 264330342305
Option 3 ID : 264330342306
Option 4 ID : 264330342307
Status : Answered
Chosen Option : 3

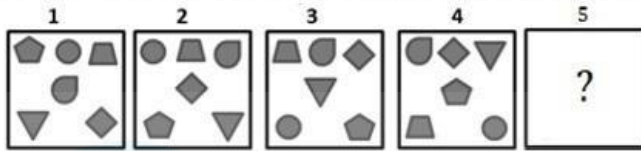
Q.10 Select the number from among the given options that can replace the question mark (?) in the following series.

56, 97, 179, 343, 671, ?

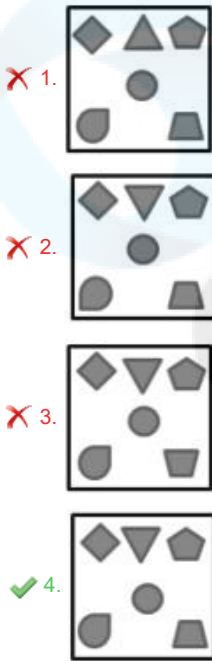
- Ans
- 1. 3231
 - 2. 1327
 - 3. 3442
 - 4. 4232

Question ID : 264330109747
Option 1 ID : 264330431266
Option 2 ID : 264330431265
Option 3 ID : 264330431267
Option 4 ID : 264330431268
Status : Answered
Chosen Option : 2

Q.11 Following question consists of 4 figures marked 1, 2, 3 and 4 called the Problem Figures followed by 4 other figures called the Answer Figures. Select a figure from amongst the Answer Figures which will continue the same series as established by the four Problem Figures.



Ans



Question ID : 264330110541

Option 1 ID : 264330434442

Option 2 ID : 264330434441

Option 3 ID : 264330434444

Option 4 ID : 264330434443

Status : Answered

Chosen Option : 4

Q.12 If 'A' denotes '+', 'B' denotes 'x', 'C' denotes '-' and 'D' denotes '÷', then what will come in place of '?' in the following equation?
(98 C 8) B 2 A 16 = ?

- Ans
- 1. 104
 - 2. 98
 - 3. 196
 - 4. 16

Question ID : 26433082474

Option 1 ID : 264330323731

Option 2 ID : 264330323729

Option 3 ID : 264330323732

Option 4 ID : 264330323730

Status : Answered

Chosen Option : 3

Q.13 Select the option figure that is embedded in the given figure (rotation is NOT allowed).



Ans

✓ 1.



✗ 2.



✗ 3.



✗ 4.



Question ID : 26433091724

Option 1 ID : 264330360263

Option 2 ID : 264330360264

Option 3 ID : 264330360261

Option 4 ID : 264330360262

Status : Answered

Chosen Option : 1

Q.14 Select the set in which the numbers are related in the same way as are the numbers of the following sets.

(NOTE : Operations should be performed on the whole numbers, without breaking down the numbers into its constituent digits. E.g. 13 – Operations on 13 such as adding /deleting /multiplying etc. to 13 can be performed. Breaking down 13 into 1 and 3 and then performing mathematical operations on 1 and 3 is NOT allowed)
(12, 44), (17, 64)

Ans ✗ 1. (27, 94)

✗ 2. (31, 124)

✓ 3. (22, 84)

✗ 4. (18, 74)

Question ID : 26433052039

Option 1 ID : 264330203459

Option 2 ID : 264330203461

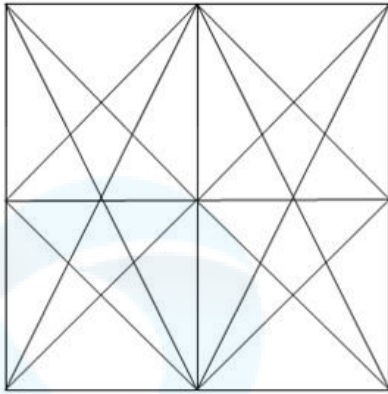
Option 3 ID : 264330203458

Option 4 ID : 264330203460

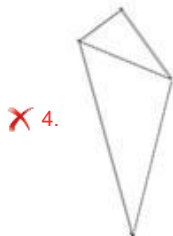
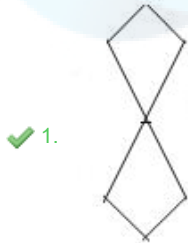
Status : Answered

Chosen Option : 3

Q.15 Which of the figures given in the options is embedded in the following figure?
(Rotation is not allowed.)

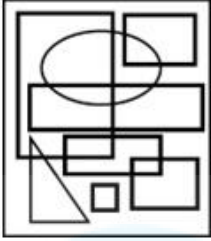


Ans



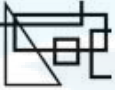
Question ID : 26433076730
Option 1 ID : 264330300984
Option 2 ID : 264330300986
Option 3 ID : 264330300987
Option 4 ID : 264330300985
Status : Answered
Chosen Option : 1

Q.16 Select the option figure which is embedded in the given figure as its part (rotation is NOT allowed).

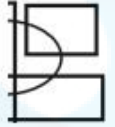


Ans

✗ 1.



✓ 2.



✗ 3.



✗ 4.



Question ID : 264330116992

Option 1 ID : 264330460050

Option 2 ID : 264330460052

Option 3 ID : 264330460049

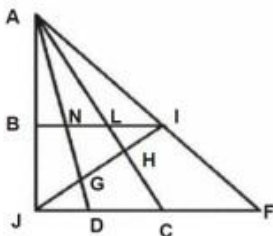
Option 4 ID : 264330460051

Status : Answered

Chosen Option : 2

Q.17

How many triangles are there in the given figure?



Ans

✗ 1. 23

✗ 2. 29

✗ 3. 25

✓ 4. 24

Question ID : 26433091707

Option 1 ID : 264330360194

Option 2 ID : 264330360196

Option 3 ID : 264330360193

Option 4 ID : 264330360195

Status : Marked For Review

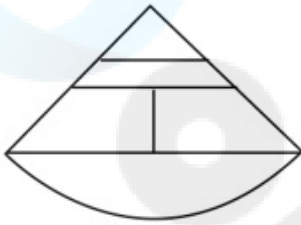
Chosen Option : 1

Q.18 Select the figure from the options that can replace the question mark (?) and complete the given pattern.

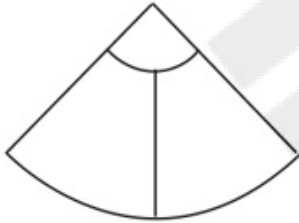


Ans

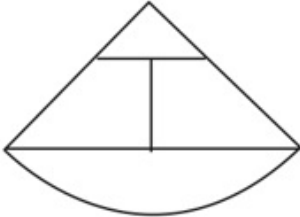
✓ 1.



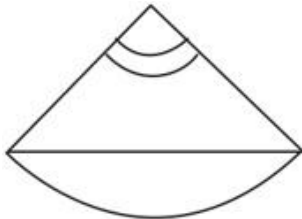
✗ 2.



✗ 3.



✗ 4.



Question ID : 264330106477

Option 1 ID : 264330418210

Option 2 ID : 264330418211

Option 3 ID : 264330418212

Option 4 ID : 264330418209

Status : Answered

Chosen Option : 1

Q.19 Which figure should replace the question mark (?) if the following series were to be continued?

0	9	W	=	0	A	A	=	0	9	A	△	△	9	A	?
A	U	=	W	9	U	△	W	9	0	=	W	U	0	=	
2	☆	△	△	2	☆	2	☆	U	U	2	☆	2	☆	W	

Ans

✓ 1.

=	△	U
A	9	0
W	2	☆

✗ 2.

U	△	9
0	=	A
W	2	☆

✗ 3.

A	△	9
=	U	0
W	2	☆

✗ 4.

W	△	9
A	U	0
=	2	☆

Question ID : 264330103888

Option 1 ID : 264330407855

Option 2 ID : 264330407856

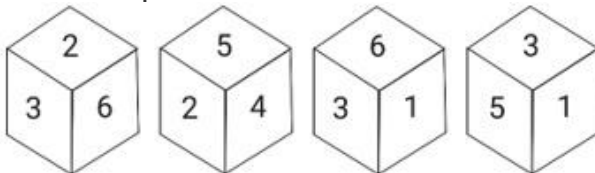
Option 3 ID : 264330407853

Option 4 ID : 264330407854

Status : Answered

Chosen Option : 4

Q.20 Four different positions of the same dice are shown below. What is opposite to 3?



Ans ✗ 1. 6

✗ 2. 1

✓ 3. 4

✗ 4. 2

Question ID : 264330112038

Option 1 ID : 264330440237

Option 2 ID : 264330440239

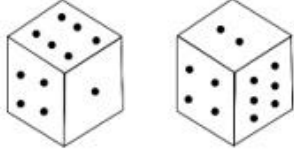
Option 3 ID : 264330440238

Option 4 ID : 264330440240

Status : Answered

Chosen Option : 3

Q.21 Observe the dots on a dice (one to six dots) in the following figures. How many dots are contained on the face opposite to that containing two dots?



- Ans
- 1. Five
 - 2. Six
 - 3. Three
 - 4. One

Question ID : 264330111298

Option 1 ID : 264330437280

Option 2 ID : 264330437279

Option 3 ID : 264330437278

Option 4 ID : 264330437277

Status : Answered

Chosen Option : 1

Q.22 Select the option that is related to the fifth letter-cluster in the same way as the second letter-cluster is related to the first letter-cluster and the fourth letter-cluster is related to the third letter-cluster.

NEVER : PGXGT :: BELOW : DGNQY :: AGAIN : _____

- Ans
- 1. DJDLQ
 - 2. BHBJO
 - 3. CICKP
 - 4. ZFZHM

Question ID : 26433074587

Option 1 ID : 264330292439

Option 2 ID : 264330292437

Option 3 ID : 264330292438

Option 4 ID : 264330292436

Status : Answered

Chosen Option : 3

Q.23 Select the option that is related to the third term in the same way as the second term is related to the first term and the sixth term is related to the fifth term.

34 : 170 :: 68 : ? :: 17 : 85

- Ans
- 1. 360
 - 2. 340
 - 3. 320
 - 4. 300

Question ID : 264330102255

Option 1 ID : 264330401488

Option 2 ID : 264330401487

Option 3 ID : 264330401486

Option 4 ID : 264330401485

Status : Answered

Chosen Option : 2

Q.24 Which two signs should be interchanged to make the following equation correct?

$$2 \times 4 \div 5 - 25 + 5 = 8$$

- Ans
- 1. - and ×
 - 2. - and +
 - 3. + and +
 - 4. + and ×

Question ID : 264330101087
Option 1 ID : 264330396895
Option 2 ID : 264330396894
Option 3 ID : 264330396893
Option 4 ID : 264330396896
Status : Answered
Chosen Option : 3

Q.25 Seven girls - H, J, K, L, M, N and O - are sitting in a straight row, facing north. Only four girls sit between O and N. Only O sits to the right of L. H sits exactly between J and K. Who among the following sits at the extreme left end of the row?

- Ans
- 1. J
 - 2. M
 - 3. K
 - 4. N

Question ID : 26433087015
Option 1 ID : 264330341703
Option 2 ID : 264330341704
Option 3 ID : 264330341702
Option 4 ID : 264330341701
Status : Marked For Review
Chosen Option : 2

Section : Numerical Ability

Q.1 Raju sold a watch to Sanjeev at a 20% gain; Sanjeev sold it to Mukesh at a loss of 10%. If Mukesh bought it for ₹4,860, then at what price did Raju purchase it?

- Ans
- 1. ₹4,450
 - 2. ₹4,500
 - 3. ₹4,400
 - 4. ₹4,550

Question ID : 264330105993
Option 1 ID : 264330416274
Option 2 ID : 264330416275
Option 3 ID : 264330416273
Option 4 ID : 264330416276
Status : Answered
Chosen Option : 2

Q.2 The ratio of a Aman's age to Shivam's age is 4 : 3. The product of their ages is 588. The ratio of their ages after 5 years will be:

- Ans
- 1. 31 : 25
 - 2. 33 : 24
 - 3. 35 : 26
 - 4. 33 : 26

Question ID : 264330105997
Option 1 ID : 264330416289
Option 2 ID : 264330416291
Option 3 ID : 264330416292
Option 4 ID : 264330416290
Status : Answered
Chosen Option : 4

Q.3 The population of a village 4 years ago was 3,20,000. Due to migration to cities, it decreases at the rate of 5% every year. Find the decrease in its population in the last 4 years.

- Ans
- 1. 83,595
 - 2. 59,358
 - 3. 53,985
 - 4. 93,558

Question ID : 264330104316
Option 1 ID : 264330409567
Option 2 ID : 264330409565
Option 3 ID : 264330409568
Option 4 ID : 264330409566
Status : Answered
Chosen Option : 4

Q.4 A thief was noticed by a policeman from a distance of 300 m. Seeing the policeman, the thief started running at 12 km/h and the policeman chased him at 13 km/h. What is the distance between them after 12 minutes?

- Ans
- 1. 90 m
 - 2. 120 m
 - 3. 105 m
 - 4. 100 m

Question ID : 264330183828
Option 1 ID : 264330720988
Option 2 ID : 264330720989
Option 3 ID : 264330720990
Option 4 ID : 264330720991
Status : Answered
Chosen Option : 2

Q.5 Which of the following numbers is a prime number?

- Ans
- 1. 143
 - 2. 137
 - 3. 141
 - 4. 133

Question ID : 264330106070
Option 1 ID : 264330416584
Option 2 ID : 264330416582
Option 3 ID : 264330416583
Option 4 ID : 264330416581
Status : Answered
Chosen Option : 2

Q.6 What is the value of $4 \times 0.4 \times 0.04 \times 0.004 \times 40$?

- Ans
- 1. 0.1024
 - 2. 0.0256
 - 3. 0.01024
 - 4. 0.00256

Question ID : 264330104341
Option 1 ID : 264330409665
Option 2 ID : 264330409668
Option 3 ID : 264330409667
Option 4 ID : 264330409666
Status : Answered
Chosen Option : 3

Q.7 A shopkeeper marks up the price of an article by 60%. He offers two successive discounts of 10% and 15% on it. He earns X% profit. What is the value of X?

- Ans
- 1. 20.4
 - 2. 22.4
 - 3. 23.60
 - 4. 25.60

Question ID : 264330183842
Option 1 ID : 264330721044
Option 2 ID : 264330721045
Option 3 ID : 264330721046
Option 4 ID : 264330721047
Status : Answered
Chosen Option : 2

Q.8

Simplify the following.

$$\frac{0.4 \times 0.4 + 0.2 \times 0.02}{0.016}$$

Ans

1. $10\frac{1}{8}$

2. $10\frac{1}{4}$

3. $10\frac{1}{2}$

4. $10\frac{1}{5}$

Question ID : 264330106065

Option 1 ID : 264330416564

Option 2 ID : 264330416562

Option 3 ID : 264330416561

Option 4 ID : 264330416563

Status : Answered

Chosen Option : 2

Q.9 The average of 7 consecutive integers is 7. What is the value of the greatest number in these?

Ans 1. 10

2. 12

3. 11

4. 9

Question ID : 264330126094

Option 1 ID : 264330494048

Option 2 ID : 264330494051

Option 3 ID : 264330494050

Option 4 ID : 264330494049

Status : Answered

Chosen Option : 1

Q.10 A student's marks (out of 100 in each subject) changed from the first term exams to the second term exams as follows: in Mathematics from 60 to 78, in Science 84 to 82, in Social studies 76 to 64. What is the percentage change in his marks from the first term exams to the second term exams?

Ans 1. 1.81% increase

2. 2.24% increase

3. 2.24% decrease

4. 1.81% decrease

Question ID : 264330103695

Option 1 ID : 264330407086

Option 2 ID : 264330407088

Option 3 ID : 264330407085

Option 4 ID : 264330407087

Status : Answered

Chosen Option : 1

Q.11 A pillar 42 cm in diameter is 15 m high. How much material (in cm^3) was used to construct it?

(Take $\pi = \frac{22}{7}$)

- Ans
- 1. 2.079×10^6
 - 2. 2.079×10^{-4}
 - 3. 2.079×10^5
 - 4. 2.079×10^{-3}

Question ID : 264330112442
Option 1 ID : 264330441856
Option 2 ID : 264330441854
Option 3 ID : 264330441855
Option 4 ID : 264330441853
Status : Answered
Chosen Option : 1

Q.12 A sum becomes two times in 4 years at a certain rate of simple interest. Find the time (in years) in which the same amount will be seven times at the same rate of interest.

- Ans
- 1. 12
 - 2. 20
 - 3. 13
 - 4. 24

Question ID : 264330119201
Option 1 ID : 264330467092
Option 2 ID : 264330467094
Option 3 ID : 264330467093
Option 4 ID : 264330467091
Status : Answered
Chosen Option : 4

Q.13 Ram and Shyam together can complete a work in 12 days. Shyam alone can complete the work in 15 days. Shyam alone worked for 5 days. After that, how long will Ram alone take to complete the work?

- Ans
- 1. 29 days
 - 2. 38 days
 - 3. 35 days
 - 4. 40 days

Question ID : 264330104325
Option 1 ID : 264330409601
Option 2 ID : 264330409603
Option 3 ID : 264330409602
Option 4 ID : 264330409604
Status : Answered
Chosen Option : 4

Q.14 The price of CNG is increased by 12%. By what percentage (correct up to two decimal places) must Shalini reduce consumption of CNG for her car so that there is no increment in her expenditure on CNG?

- Ans
- 1. 13.64%
 - 2. 12.00%
 - 3. 10.71%
 - 4. 9.33%

Question ID : 264330106665
Option 1 ID : 264330418963
Option 2 ID : 264330418961
Option 3 ID : 264330418962
Option 4 ID : 264330418964
Status : Answered
Chosen Option : 3

Q.15 How many litres of water can a hemispherical bowl of radius 3 cm hold?
(Use $\pi = 3.14$)

- Ans
- 1. 56.52
 - 2. 0.05652
 - 3. 54.34
 - 4. 0.05275

Question ID : 264330111494
Option 1 ID : 264330438063
Option 2 ID : 264330438064
Option 3 ID : 264330438062
Option 4 ID : 264330438061
Status : Answered
Chosen Option : 1

Section : Computer Proficiency

Q.1 F1 is the shortcut key used by almost every Windows program to display which of the following menus?

- Ans
- 1. Rename
 - 2. Edit
 - 3. Help
 - 4. Refresh

Question ID : 264330175985
Option 1 ID : 264330690238
Option 2 ID : 264330690236
Option 3 ID : 264330690237
Option 4 ID : 264330690235
Status : Answered
Chosen Option : 3

Q.2 In MS Excel 365, how can you set a specific print area in MS Excel?

- Ans
- 1. By selecting the cells to be printed and defining the print area
 - 2. By adjusting the page margins in the print settings
 - 3. By changing the font size and style in the spreadsheet
 - 4. By applying conditional formatting to the data

Question ID : 264330177919
Option 1 ID : 264330697764
Option 2 ID : 264330697763
Option 3 ID : 264330697765
Option 4 ID : 264330697766
Status : Answered
Chosen Option : 1

Q.3 Which of the following is the correct software used for Word processing?

- Ans
- 1. MS Excel
 - 2. MS PowerPoint
 - 3. MS Word
 - 4. MS Access

Question ID : 264330176731
Option 1 ID : 264330693139
Option 2 ID : 264330693140
Option 3 ID : 264330693142
Option 4 ID : 264330693141
Status : Answered
Chosen Option : 3

Q.4 What is the purpose of spellcheck in email composition?

- Ans
- 1. To check for and correct spelling errors
 - 2. To format the email text
 - 3. To add attachments to the email
 - 4. To translate the email into another language

Question ID : 264330180657
Option 1 ID : 264330708597
Option 2 ID : 264330708596
Option 3 ID : 264330708598
Option 4 ID : 264330708595
Status : Answered
Chosen Option : 1

Q.5 If the custom format of a number is XX,XX,XXX then how will 4482023 be displayed in Microsoft Excel 365?

- Ans
- 1. 448,20,23
 - 2. 4,48,2023
 - 3. 44,82,023
 - 4. 4482, 02,3

Question ID : 264330182057
Option 1 ID : 264330714069
Option 2 ID : 264330714067
Option 3 ID : 264330714068
Option 4 ID : 264330714070
Status : Answered
Chosen Option : 3

Q.6 Which of the following is NOT an example of Instant Messaging in Internet?

- Ans
- 1. Discord
 - 2. Telegram
 - 3. WhatsApp
 - 4. Email

Question ID : 264330180394
Option 1 ID : 264330707546
Option 2 ID : 264330707545
Option 3 ID : 264330707544
Option 4 ID : 264330707543
Status : Answered
Chosen Option : 1

Q.7 What is the default alignment for text entered in Microsoft Excel 365 cells?

- Ans
- 1. Left aligned
 - 2. Justified
 - 3. Right aligned
 - 4. Center aligned

Question ID : 264330180699
Option 1 ID : 264330708763
Option 2 ID : 264330708766
Option 3 ID : 264330708765
Option 4 ID : 264330708764
Status : Answered
Chosen Option : 1

Q.8 In MS word 365, in word-processing software, what is the key difference between copying of text and cutting of text?

- Ans
- 1. Copying is reversible, while cutting is irreversible.
 - 2. Copying removes the text from the original location, while cutting retains the text in the original location.
 - 3. Copying duplicates the text to a new location, while cutting moves the text to a new location.
 - 4. Copying requires the use of a keyboard shortcut, while cutting is performed by using the mouse.

Question ID : 264330178087
Option 1 ID : 264330698414
Option 2 ID : 264330698412
Option 3 ID : 264330698411
Option 4 ID : 264330698413
Status : Answered
Chosen Option : 3

Q.9 What is the keyboard shortcut for changing text alignment to the left in MS Word 365?

- Ans
- 1. Ctrl + J
 - 2. Ctrl + C
 - 3. Ctrl + L
 - 4. Ctrl + R

Question ID : 264330180852
Option 1 ID : 264330709374
Option 2 ID : 264330709372
Option 3 ID : 264330709371
Option 4 ID : 264330709373
Status : Answered
Chosen Option : 3

Q.10 Which of the following is NOT a word processing package?

Ans ✓ 1. Adobe Photoshop

✗ 2. Microsoft Word

✗ 3. Apple Pages

✗ 4. Google Docs

Question ID : 264330179463

Option 1 ID : 264330703854

Option 2 ID : 264330703851

Option 3 ID : 264330703853

Option 4 ID : 264330703852

Status : Answered

Chosen Option : 1