

Constable Executive Male and Female in Delhi Police Examination 2023

Roll Number	
Candidate Name	
Venue Name	
Exam Date	20/11/2023
Exam Time	9:00 AM - 10:30 AM
Subject	Constable Executive Male and Female in Delhi Police Examination 2023

Section : General Knowledge

Q.1 " _____ is the writer of the book 'India Wins Freedom'."

Ans 1. Maulana Abul Kalam Azad

2. APJ Abdul Kalam

3. Jawahar Lal Nehru

4. Mahatma Gandhi

Question ID : 26433054234

Option 1 ID : 264330211922

Option 2 ID : 264330211923

Option 3 ID : 264330211921

Option 4 ID : 264330211920

Status : Answered

Chosen Option : 2

Q.2 _____ accounts for the difference between the concept of market price and factor cost in national income measurement.

Ans 1. Indirect taxes

2. Subsidies

3. Direct taxes

4. Net indirect taxes

Question ID : 264330120864

Option 1 ID : 264330473674

Option 2 ID : 264330473672

Option 3 ID : 264330473671

Option 4 ID : 264330473673

Status : Answered

Chosen Option : 2

Q.3 Madan Singh Chauhan, also known as 'Guruji', is a folk and Sufi singer from _____.

Ans 1. Jharkhand

2. Uttarakhand

3. Haryana

4. Chhattisgarh

Question ID : 264330110245

Option 1 ID : 264330433258

Option 2 ID : 264330433259

Option 3 ID : 264330433260

Option 4 ID : 264330433257

Status : Not Answered

Chosen Option : --

Q.4 Which Article of the Indian Constitution mentions that the laws inconsistent with or in derogation of the fundamental rights will be void?

- Ans
- 1. Article15
 - 2. Article 13
 - 3. Article14
 - 4. Article16

Question ID : 264330180044
Option 1 ID : 264330706161
Option 2 ID : 264330706159
Option 3 ID : 264330706160
Option 4 ID : 264330706162
Status : Answered
Chosen Option : 2

Q.5 Which of the following was the last Five-Year Plan in India before its replacement with NITI Aayog?

- Ans
- 1. 12th Five-Year Plan 2012-2017
 - 2. 11th Five-Year Plan 2007-2012
 - 3. 9th Five-Year Plan 2007-2012
 - 4. 10th Five-Year Plan 2007-2012

Question ID : 264330118542
Option 1 ID : 264330465572
Option 2 ID : 264330465571
Option 3 ID : 264330465569
Option 4 ID : 264330465570
Status : Answered
Chosen Option : 1

Q.6 Pillared Verandah and cells are integral parts of which of the following Buddhist structures?

- Ans
- 1. Tawang Monastery
 - 2. Ajanta Caves
 - 3. Bodhgaya Temple
 - 4. Sanchi Stupa

Question ID : 264330109636
Option 1 ID : 264330430824
Option 2 ID : 264330430821
Option 3 ID : 264330430823
Option 4 ID : 264330430822
Status : Not Answered
Chosen Option : --

Q.7 Manipuri dance often depicts scenes from the life of which of the following Hindu Gods or Goddess?

- Ans**
- 1. Goddess Durga
 - 2. Lord Krishna
 - 3. Lord Ram
 - 4. Lord Hanuman

Question ID : 264330110399
Option 1 ID : 264330433873
Option 2 ID : 264330433875
Option 3 ID : 264330433874
Option 4 ID : 264330433876
Status : Answered
Chosen Option : 2

Q.8 Who can give the order and directives to the government for the enforcement of fundamental rights?

- Ans**
- 1. Prime Minister of India
 - 2. President of India
 - 3. Governor
 - 4. Supreme Court and High Court

Question ID : 264330116391
Option 1 ID : 264330457651
Option 2 ID : 264330457650
Option 3 ID : 264330457652
Option 4 ID : 264330457649
Status : Answered
Chosen Option : 4

Q.9 When government wants to increase the money supply, it:

- Ans**
- 1. purchases government bonds
 - 2. sells government bonds
 - 3. increases the Cash Reserve Ratio
 - 4. increases the Statutory Liquidity Ratio

Question ID : 264330116505
Option 1 ID : 264330458108
Option 2 ID : 264330458107
Option 3 ID : 264330458105
Option 4 ID : 264330458106
Status : Answered
Chosen Option : 2

Q.10 In which of the following years was the peasant movement in Kheda led by Mahatma Gandhi?

- Ans**
- 1. 1918
 - 2. 1909
 - 3. 1922
 - 4. 1912

Question ID : 264330112409
Option 1 ID : 264330441723
Option 2 ID : 264330441721
Option 3 ID : 264330441724
Option 4 ID : 264330441722
Status : Answered
Chosen Option : 1

Q.11 The _____ Rebellion in central India broke out in 1910.

- Ans
- 1. Warli
 - 2. Pabna
 - 3. Kol
 - 4. Bastar

Question ID : 264330114103
Option 1 ID : 264330448497
Option 2 ID : 264330448499
Option 3 ID : 264330448498
Option 4 ID : 264330448500
Status : Answered
Chosen Option : 1

Q.12 Consider the following factors.

- a) Extreme climatic conditions in the Himalayas and the Indian Thar Desert.
- b) Lack of medical facilities in rural areas.
- c) Availability of employment in metro cities.
- d) Poverty in rural India.
- e) Education facilities in urban areas.

Which of the given factors are NOT pull factor(s) for migration in India?

- Ans
- 1. Only a, b and d
 - 2. All except d
 - 3. Only c and e
 - 4. Only b and d

Question ID : 264330120340
Option 1 ID : 264330471611
Option 2 ID : 264330471612
Option 3 ID : 264330471613
Option 4 ID : 264330471614
Status : Answered
Chosen Option : 2

Q.13 The 'Make in India' programme, which started in 2014, is similar to _____ of the 1970s and 1980s in India.

- Ans
- 1. Import substitution policy
 - 2. License permit raj
 - 3. Export-oriented industrial development
 - 4. Free trade policy

Question ID : 264330111747
Option 1 ID : 264330439073
Option 2 ID : 264330439074
Option 3 ID : 264330439076
Option 4 ID : 264330439075
Status : Answered
Chosen Option : 2

Q.14 The Ajanta Caves are located on the left bank of which of the following rivers?

- Ans 1. Waghora
 2. Krishna
 3. Mahanadi
 4. Tungabhadra

Question ID : 264330111846
Option 1 ID : 264330439472
Option 2 ID : 264330439469
Option 3 ID : 264330439471
Option 4 ID : 264330439470
Status : Answered
Chosen Option : 2

Q.15 Rajaraja I, who assumed power in 985 CE and was known as one of the most powerful kings in South India, belonged to the _____ dynasty.

- Ans 1. Chalukaya
 2. Chola
 3. Pallava
 4. Pandya

Question ID : 264330118967
Option 1 ID : 264330466526
Option 2 ID : 264330466524
Option 3 ID : 264330466523
Option 4 ID : 264330466525
Status : Answered
Chosen Option : 2

Q.16 Junagadh Rock Inscription belongs to whom among the following rulers?

- Ans 1. Bindusara
 2. Satakarni I
 3. Rudradaman I
 4. Kanishka

Question ID : 264330171477
Option 1 ID : 264330672525
Option 2 ID : 264330672524
Option 3 ID : 264330672523
Option 4 ID : 264330672526
Status : Answered
Chosen Option : 3

Q.17 Nadaswaran instrument is played by _____ .

- Ans 1. Sheikh Chinna Moula
 2. KV Prasad
 3. Panalal Ghosh
 4. Totaram Sarma

Question ID : 264330111943
Option 1 ID : 264330439858
Option 2 ID : 264330439860
Option 3 ID : 264330439859
Option 4 ID : 264330439857
Status : Answered
Chosen Option : 4

Q.18 Non-stick pans are coated with _____.

- Ans
- 1. polytetrafluoroethylene
 - 2. polytetrachloroethylene
 - 3. polytetrafluoromethylene
 - 4. polytetrafluoroethylene

Question ID : 264330117616
Option 1 ID : 264330462492
Option 2 ID : 264330462491
Option 3 ID : 264330462490
Option 4 ID : 264330462489
Status : Not Answered
Chosen Option : --

Q.19 Kalyani Kutti Amma received the Sangeet Natak Akademi Award for which form of dance?

- Ans
- 1. Kathakali
 - 2. Kuchipudi
 - 3. Mohiniattam
 - 4. Kathak

Question ID : 26433074872
Option 1 ID : 264330293577
Option 2 ID : 264330293576
Option 3 ID : 264330293579
Option 4 ID : 264330293578
Status : Answered
Chosen Option : 1

Q.20 Who is the author of the work 'Kadambari'?

- Ans
- 1. Banabhatta
 - 2. Vilhad
 - 3. Aryabhata
 - 4. Bhans

Question ID : 264330120008
Option 1 ID : 264330470290
Option 2 ID : 264330470288
Option 3 ID : 264330470287
Option 4 ID : 264330470289
Status : Answered
Chosen Option : 1

Q.21 Which of the following taxes was related to the land revenue (tax on agricultural land) system of the Delhi sultanate?

- Ans
- 1. Khams
 - 2. Zakat
 - 3. Kharaj
 - 4. Jizya

Question ID : 264330111378
Option 1 ID : 264330437599
Option 2 ID : 264330437597
Option 3 ID : 264330437600
Option 4 ID : 264330437598
Status : Answered
Chosen Option : 3

Q.22 Wangala is a popular harvest festival of which Indian state?

- Ans
- 1. Uttar Pradesh
 - 2. Bihar
 - 3. Meghalaya
 - 4. West Bengal

Question ID : 264330132408
Option 1 ID : 264330518727
Option 2 ID : 264330518729
Option 3 ID : 264330518728
Option 4 ID : 264330518730
Status : Answered
Chosen Option : 3

Q.23 In which state of Myanmar do the Rohingyas primarily reside?

- Ans
- 1. Shan
 - 2. Kayah
 - 3. Chin
 - 4. Rakhine

Question ID : 264330179304
Option 1 ID : 264330703220
Option 2 ID : 264330703222
Option 3 ID : 264330703221
Option 4 ID : 264330703219
Status : Not Answered
Chosen Option : --

Q.24 Which of the following is an INCORRECT statement related to dental health?

- Ans
- 1. Tooth enamel, made up of calcium hydroxyapatite is the hardest substance in the body.
 - 2. Bacteria present in the mouth produce acids by degradation of sugar and food particles remaining in the mouth after eating.
 - 3. Tooth decay starts when the pH of the mouth is lower than 5.5.
 - 4. Toothpaste, which is generally acidic, prevents tooth decay.

Question ID : 264330177336
Option 1 ID : 264330695538
Option 2 ID : 264330695536
Option 3 ID : 264330695535
Option 4 ID : 264330695537
Status : Answered
Chosen Option : 4

Q.25 Padma Shri awardee Pratibha Prahald is an exponent of which of the following dance forms?

- Ans
- 1. Kathak
 - 2. Kuchipudi
 - 3. Odissi
 - 4. Bharatanatyam

Question ID : 264330106200
Option 1 ID : 264330417102
Option 2 ID : 264330417103
Option 3 ID : 264330417104
Option 4 ID : 264330417101
Status : Not Answered
Chosen Option : --

Q.26 Raja Reddy is associated with which of the following dance forms?

- Ans 1. Bharatanatyam
 2. Kuchipudi
 3. Kathakali
 4. Kathak

Question ID : 264330109300
Option 1 ID : 264330429477
Option 2 ID : 264330429480
Option 3 ID : 264330429478
Option 4 ID : 264330429479
Status : Answered
Chosen Option : 2

Q.27 The atomic number of oxygen is _____.

- Ans 1. 7
 2. 16
 3. 8
 4. 14

Question ID : 264330173657
Option 1 ID : 264330681110
Option 2 ID : 264330681107
Option 3 ID : 264330681109
Option 4 ID : 264330681108
Status : Answered
Chosen Option : 3

Q.28 Which of the following years is related to the SARFAESI Act?

- Ans 1. 2002
 2. 2000
 3. 1999
 4. 2004

Question ID : 26433059324
Option 1 ID : 264330232174
Option 2 ID : 264330232173
Option 3 ID : 264330232172
Option 4 ID : 264330232175
Status : Not Answered
Chosen Option : --

Q.29 Which mineral composed of silicon and oxygen with chemical composition of SiO_2 is mainly used in glass making, abrasive, foundry sand, hydraulic fracturing proppant, gemstone?

- Ans 1. Olivine
 2. Muscovite
 3. Augite
 4. Quartz

Question ID : 264330141736
Option 1 ID : 264330555264
Option 2 ID : 264330555265
Option 3 ID : 264330555266
Option 4 ID : 264330555263
Status : Answered
Chosen Option : 4

Q.30 Which of the following Union territories has the lowest population density according to the 2011 census?

- Ans
- 1. Delhi
 - 2. Andaman and Nicobar Islands
 - 3. Daman and Diu
 - 4. Puducherry

Question ID : 264330120321
Option 1 ID : 264330471535
Option 2 ID : 264330471538
Option 3 ID : 264330471537
Option 4 ID : 264330471536
Status : Answered
Chosen Option : 2

Q.31 The level of urbanisation in India is measured in terms of _____ of urban population to total population.

- Ans
- 1. decimal
 - 2. ratio
 - 3. fraction
 - 4. percentage

Question ID : 264330120314
Option 1 ID : 264330471510
Option 2 ID : 264330471508
Option 3 ID : 264330471507
Option 4 ID : 264330471509
Status : Answered
Chosen Option : 4

Q.32 The 'Rashtriya Swayamsevak Sangh' was founded in which of the following districts of Maharashtra?

- Ans
- 1. Amravati
 - 2. Nagpur
 - 3. Ahmednagar
 - 4. Pune

Question ID : 264330119019
Option 1 ID : 264330466733
Option 2 ID : 264330466731
Option 3 ID : 264330466734
Option 4 ID : 264330466732
Status : Not Answered
Chosen Option : --

Q.33 The Joint Sitting of the Lok Sabha and Rajya Sabha need a _____ quorum of the Indian Parliament.

- Ans
- 1. 15%
 - 2. 5%
 - 3. 20%
 - 4. 10%

Question ID : 264330120182
Option 1 ID : 264330470984
Option 2 ID : 264330470983
Option 3 ID : 264330470986
Option 4 ID : 264330470985
Status : Answered
Chosen Option : 4

Q.34 The length of a tennis court is _____ .

- Ans
- 1. 78 ft
 - 2. 70 ft
 - 3. 80 ft
 - 4. 73 ft

Question ID : 264330113768
Option 1 ID : 264330447159
Option 2 ID : 264330447157
Option 3 ID : 264330447160
Option 4 ID : 264330447158
Status : Answered
Chosen Option : 4

Q.35 Suryakumar Yadav is associated with which of the following games?

- Ans
- 1. Boxing
 - 2. Football
 - 3. Cricket
 - 4. Wrestling

Question ID : 264330118901
Option 1 ID : 264330466261
Option 2 ID : 264330466259
Option 3 ID : 264330466260
Option 4 ID : 264330466262
Status : Answered
Chosen Option : 3

Q.36 The method of Election of the President of the India in the Constitution was taken from the Constitution of _____.

- Ans
- 1. Ireland
 - 2. Canada
 - 3. South Africa
 - 4. the Unites States of America

Question ID : 264330134563
Option 1 ID : 264330527210
Option 2 ID : 264330527208
Option 3 ID : 264330527209
Option 4 ID : 264330527207
Status : Answered
Chosen Option : 1

Q.37 President Sukarno of _____ was the Guest of Honour during India's first Republic Day event in 1950.

- Ans 1. Indonesia
 2. Malaysia
 3. Maldives
 4. Singapore

Question ID : 264330113180
Option 1 ID : 264330444807
Option 2 ID : 264330444805
Option 3 ID : 264330444808
Option 4 ID : 264330444806
Status : Answered
Chosen Option : 1

Q.38 Under 'Atal Beemit Vyakti Kalyan Yojana', up to how much per cent of average wages is provided as payment relief which is payable up to maximum 90 days of unemployment?

- Ans 1. 50%
 2. 30%
 3. 25%
 4. 33%

Question ID : 264330111591
Option 1 ID : 264330438452
Option 2 ID : 264330438450
Option 3 ID : 264330438449
Option 4 ID : 264330438451
Status : Not Answered
Chosen Option : --

Q.39 Which of the following is a push factor of globalisation of business?

- Ans 1. Availability of cheap raw material in the host country
 2. Higher rates of return in host economies
 3. Availability of cheap labour in the host country
 4. Saturation of domestic market

Question ID : 264330112491
Option 1 ID : 264330442050
Option 2 ID : 264330442052
Option 3 ID : 264330442049
Option 4 ID : 264330442051
Status : Answered
Chosen Option : 2

Q.40 The Bokaro Steel Plant is located in:

- Ans 1. Maharashtra
 2. Chhattisgarh
 3. Rajasthan
 4. Jharkhand

Question ID : 264330178711
Option 1 ID : 264330700871
Option 2 ID : 264330700873
Option 3 ID : 264330700874
Option 4 ID : 264330700872
Status : Answered
Chosen Option : 4

Q.41 The term 'village panchayats' is mentioned in which of the following Articles of the Constitution of India?

- Ans
- 1. Article 47
 - 2. Article 40
 - 3. Article 49
 - 4. Article 51

Question ID : 264330180881
Option 1 ID : 264330709488
Option 2 ID : 264330709487
Option 3 ID : 264330709489
Option 4 ID : 264330709490
Status : Answered
Chosen Option : 2

Q.42 The Siberian Shelf, one of the coastal shelves of the Arctic Ocean, is the largest continental shelf on Earth. How many kilometres does it extend offshore?

- Ans
- 1. 600 km
 - 2. 910 km
 - 3. 1,700 km
 - 4. 1,500 km

Question ID : 264330113526
Option 1 ID : 264330446189
Option 2 ID : 264330446190
Option 3 ID : 264330446192
Option 4 ID : 264330446191
Status : Answered
Chosen Option : 4

Q.43 Which of the following does NOT play a crucial role in shaping Indian monsoons?

- Ans
- 1. Jet Stream
 - 2. Western Disturbances
 - 3. Intertropical Convergence Zone (ITCZ)
 - 4. Tibetan Plateau

Question ID : 264330179011
Option 1 ID : 264330702048
Option 2 ID : 264330702050
Option 3 ID : 264330702049
Option 4 ID : 264330702047
Status : Answered
Chosen Option : 1

Q.44 The English novel 'Little Women' was written by which of the following authors?

- Ans
- 1. George Eliot
 - 2. Herman Melville
 - 3. Louisa May Alcott
 - 4. Anthony Trollope

Question ID : 26433055370
Option 1 ID : 264330216464
Option 2 ID : 264330216465
Option 3 ID : 264330216466
Option 4 ID : 264330216467
Status : Not Answered
Chosen Option : --

Q.45 After independence, the 1st national games were hosted by which of the following cities?

- Ans
- 1. Delhi
 - 2. Kolkata
 - 3. Bombay
 - 4. Lucknow

Question ID : 264330176924
Option 1 ID : 264330693893
Option 2 ID : 264330693894
Option 3 ID : 264330693892
Option 4 ID : 264330693891
Status : Answered
Chosen Option : 1

Q.46 How many seats are reserved for scheduled castes in Lok Sabha?

- Ans
- 1. 86
 - 2. 82
 - 3. 84
 - 4. 85

Question ID : 264330168206
Option 1 ID : 264330659702
Option 2 ID : 264330659699
Option 3 ID : 264330659700
Option 4 ID : 264330659701
Status : Not Answered
Chosen Option : --

Q.47 In food processing, which miscellaneous constituent obtained from the maize plant is mixed with water or juice and boiled to form fillings and give products a glossy semi-clear finish?

- Ans
- 1. Cornstarch
 - 2. Acacia
 - 3. Gelatin
 - 4. Algin

Question ID : 264330114604
Option 1 ID : 264330450504
Option 2 ID : 264330450503
Option 3 ID : 264330450501
Option 4 ID : 264330450502
Status : Not Answered
Chosen Option : --

Q.48 भारत के संविधान का निम्नलिखित में से कौन-सा अनुच्छेद, राज्य की कार्यकारी शक्तियों की सीमा के विषय में उल्लेख करता है?

- Ans
- 1. अनुच्छेद 168
 - 2. अनुच्छेद 177
 - 3. अनुच्छेद 165
 - 4. अनुच्छेद 162

Question ID : 26433086829
Option 1 ID : 264330340959
Option 2 ID : 264330340960
Option 3 ID : 264330340958
Option 4 ID : 264330340957
Status : Answered
Chosen Option : 1

Q.49 Who among the following founded an organisation called the Indian Association, in 1876, along with Surendranath Banerjee?

- Ans
- 1. Benoy Krishna Bose
 - 2. Jatindranath Mukherjee
 - 3. Ananda Mohan Bose
 - 4. Chittaranjan Das

Question ID : 264330117809
Option 1 ID : 264330463053
Option 2 ID : 264330463052
Option 3 ID : 264330463051
Option 4 ID : 264330463054
Status : Answered
Chosen Option : 4

Q.50 Which State won the 11th Junior National Men's Hockey Championship?

- Ans
- 1. Uttar Pradesh
 - 2. Madhya Pradesh
 - 3. Rajasthan
 - 4. Haryana

Question ID : 264330113746
Option 1 ID : 264330447069
Option 2 ID : 264330447072
Option 3 ID : 264330447071
Option 4 ID : 264330447070
Status : Answered
Chosen Option : 1

Section : Reasoning

Q.1 Which of the following terms will replace the question mark (?) in the given series?
WIP, ULN, SOL, ?, OUH

- Ans
- 1. RRK
 - 2. QSK
 - 3. QRJ
 - 4. RSJ

Question ID : 264330102180
Option 1 ID : 264330401186
Option 2 ID : 264330401187
Option 3 ID : 264330401185
Option 4 ID : 264330401188
Status : Answered
Chosen Option : 3

Q.2 A, B, C, D, E, F and G were sitting in a straight row, facing north. G was second to the left of A. Only C was to the right of F. A was exactly between B and D. E was to the immediate left of F. Who among the following was at the extreme left end of the row?

- Ans
- 1. D
 - 2. B
 - 3. G
 - 4. E

Question ID : 26433087020
Option 1 ID : 264330341722
Option 2 ID : 264330341721
Option 3 ID : 264330341723
Option 4 ID : 264330341724
Status : Answered
Chosen Option : 3

Q.3 Select the set in which the numbers are related in the same way as are the numbers of the following sets.

(NOTE: Operations should be performed on the whole numbers, without breaking down the numbers into its constituent digits. E.g. 13 – Operations on 13 such as adding/deleting/multiplying etc. to 13 can be performed. Breaking down 13 into 1 and 3 and then performing mathematical operations on 1 and 3 is not allowed)
(16, 40, 5),(3, 27, 18)

- Ans
- 1. (8, 29, 7)
 - 2. (9, 27, 6)
 - 3. (7, 26, 8)
 - 4. (9, 35, 6)

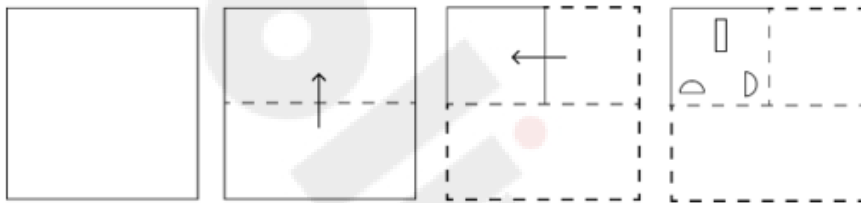
Question ID : 26433097172
Option 1 ID : 264330381387
Option 2 ID : 264330381385
Option 3 ID : 264330381386
Option 4 ID : 264330381388
Status : Answered
Chosen Option : 2

Q.4 In a certain code language, 'FOOD' is coded as 'HMQB' and 'EDGE' is coded as 'GBIC'.
How will 'MEAT' be coded in the same language?

- Ans
- 1. OCDS
 - 2. PCCR
 - 3. PDCR
 - 4. OCCR

Question ID : 264330102193
 Option 1 ID : 264330401239
 Option 2 ID : 264330401238
 Option 3 ID : 264330401237
 Option 4 ID : 264330401240
 Status : Answered
 Chosen Option : 4

Q.5 A square sheet of paper is folded along the dotted line successively along the directions shown and is then punched in the last. How would the paper look when unfolded?



Ans

- 1.
- 2.
- 3.
- 4.

Question ID : 264330172423
 Option 1 ID : 264330676244
 Option 2 ID : 264330676243
 Option 3 ID : 264330676245
 Option 4 ID : 264330676246
 Status : Answered
 Chosen Option : 3

Q.6 Select the word-pair that best represents a similar relationship to the one expressed in the pair of words given below.
(The words must be considered as meaningful English words and must not be related to each other based on the number of letters/number of consonants/vowels in the word.)

Clarify : Explain

Ans 1. Raise : Lift

2. Boring : Exciting

3. Blow : Air

4. Mother : Home

Question ID : 26433053233

Option 1 ID : 264330208234

Option 2 ID : 264330208235

Option 3 ID : 264330208236

Option 4 ID : 264330208237

Status : Answered

Chosen Option : 1

Q.7 Which of the following option figures will complete the pattern in the figure given below?



Ans



Question ID : 26433080609

Option 1 ID : 264330316369

Option 2 ID : 264330316371

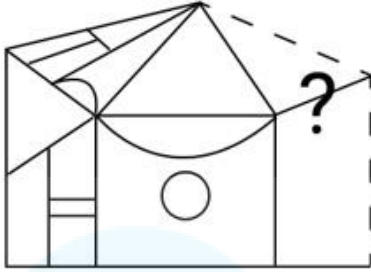
Option 3 ID : 264330316372

Option 4 ID : 264330316370

Status : Answered

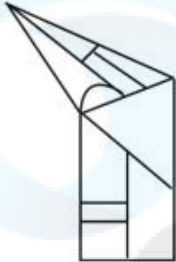
Chosen Option : 4

Q.8 Select the figure from the options that can replace the question mark (?) and complete the given pattern.



Ans

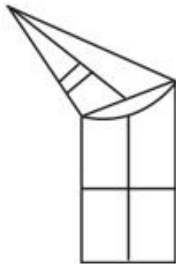
✓ 1.



✗ 2.



✗ 3.



✗ 4.



Question ID : 264330106466

Option 1 ID : 264330418166

Option 2 ID : 264330418167

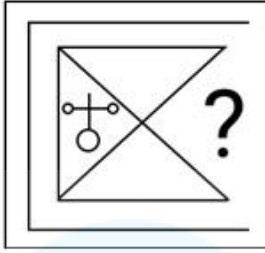
Option 3 ID : 264330418168

Option 4 ID : 264330418165

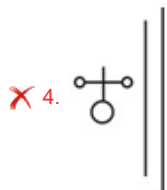
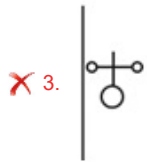
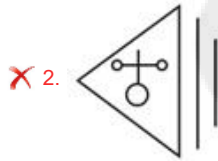
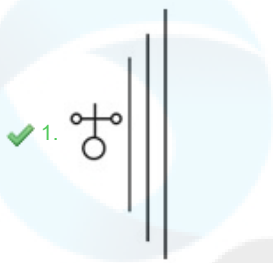
Status : Answered

Chosen Option : 1

Q.9 Select the figure from the given options that will replace the question mark (?) in the figure given below to complete the pattern.



Ans



Question ID : 264330118117

Option 1 ID : 264330464285

Option 2 ID : 264330464286

Option 3 ID : 264330464283

Option 4 ID : 264330464284

Status : Answered

Chosen Option : 1

Q.10 Which figure should replace the question mark (?) in the following series to continue the pattern?

G	V	☆	9	
△ ☆	☆ ↑	↑ V	V 3	?
↑	△	3	↑	

Ans

✓ 1.

V		
3	9	□

✗ 2.

3		
9	V	□

✗ 3.

↑		
9	□	
	V	

✗ 4.

↑		
3	V	
	9	

Question ID : 264330129634

Option 1 ID : 264330507904

Option 2 ID : 264330507905

Option 3 ID : 264330507902

Option 4 ID : 264330507903

Status : Answered

Chosen Option : 1

Q.11 Six letters, L, M, N, O, P and Q are written on different faces of a dice. Three positions of this dice are shown here. Find the letter on the face opposite M.



- Ans
- 1. Q
 - 2. L
 - 3. O
 - 4. P

Question ID : 264330106394

Option 1 ID : 264330417880

Option 2 ID : 264330417877

Option 3 ID : 264330417879

Option 4 ID : 264330417878

Status : Answered

Chosen Option : 4

Q.12 Which figure should replace the question mark (?) in the following series to continue the pattern?

D O U X	T A O 3	X T 3 D	U A T R	?
3 A R T	X R U D	R A O U	D O 3 X	

Ans

✓ 1.

D	U	R	X
O	A	T	3

✗ 2.

D	O	A	U
X	3	T	R

✗ 3.

R	U	A	T
X	D	O	3

✗ 4.

A	O	3	T
U	D	X	R

Question ID : 264330129610

Option 1 ID : 264330507807

Option 2 ID : 264330507808

Option 3 ID : 264330507806

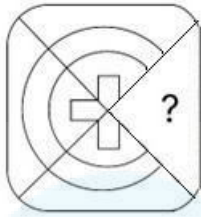
Option 4 ID : 264330507809

Status : Answered

Chosen Option : 3

Q.13

Select the option figure that will replace the question mark (?) in the figure given below to complete the pattern.



Ans

1.



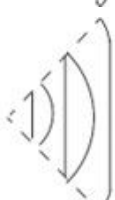
2.



3.



4.



Question ID : 264330117033

Option 1 ID : 264330460214

Option 2 ID : 264330460213

Option 3 ID : 264330460216

Option 4 ID : 264330460215

Status : Answered

Chosen Option : 2

Q.14 Select the correct combination of mathematical signs that can sequentially replace the * signs and balance the given expression.

$23 * 9 * 13 * 96 * 2 * 92$

Ans 1. $\times, +, -, \div, =$

2. $\div, +, \times, -, =$

3. $+, -, \times, \div, =$

4. $+, \times, -, \div, =$

Question ID : 26433074785

Option 1 ID : 264330293229

Option 2 ID : 264330293228

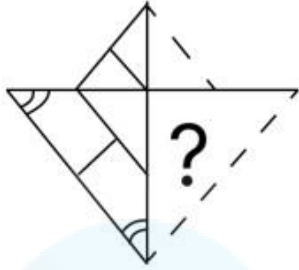
Option 3 ID : 264330293231

Option 4 ID : 264330293230

Status : Answered

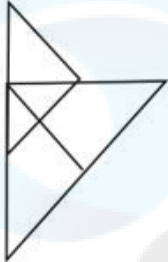
Chosen Option : 4

Q.15 Select the figure from the options that can replace the question mark (?) and complete the given pattern.

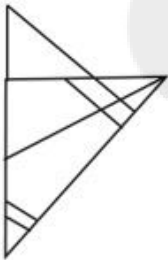


Ans

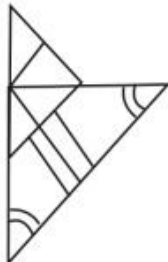
✗ 1.



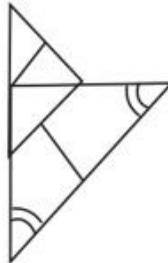
✗ 2.



✗ 3.



✓ 4.



Question ID : 264330106482

Option 1 ID : 264330418230

Option 2 ID : 264330418231

Option 3 ID : 264330418229

Option 4 ID : 264330418232

Status : Answered

Chosen Option : 4

Q.16 Select the correct mirror image of the given figure when the mirror is placed at PQ as shown below.

^\$@#FFAERG | P
Q

Ans

- ✓ 1. ^\$@#FFAERG
- ✗ 2. ^\$@#FFAREG
- ✗ 3. ^\$@#FFAERG
- ✗ 4. ^\$@#FFAERG

Question ID : 26433082024
Option 1 ID : 264330321931
Option 2 ID : 264330321930
Option 3 ID : 264330321932
Option 4 ID : 264330321929
Status : Answered
Chosen Option : 1

Q.17 Which of the following options will replace the question mark (?) in the given series?
109, 101, 93, 85, 77, ?

- Ans ✗ 1. 52
- ✗ 2. 61
- ✓ 3. 69
- ✗ 4. 58

Question ID : 264330109429
Option 1 ID : 264330429995
Option 2 ID : 264330429994
Option 3 ID : 264330429993
Option 4 ID : 264330429996
Status : Answered
Chosen Option : 3

Q.18 Select the option that is related to the third term in the same way as the second term is related to the first term and the sixth term is related to the fifth term.
4 : 125 :: 9 : ? :: 11 : 1728

- Ans ✗ 1. 999
- ✗ 2. 512
- ✓ 3. 1000
- ✗ 4. 729

Question ID : 264330101050
Option 1 ID : 264330396748
Option 2 ID : 264330396745
Option 3 ID : 264330396747
Option 4 ID : 264330396746
Status : Answered
Chosen Option : 3

Q.19 Two statements are given, followed by two conclusions numbered I and II. Assuming the statements to be true, even if they seem to be at variance with commonly known facts, decide which of the conclusions logically follow(s) from the statements.

Statements:

All computers are machines.

Some computers are robots.

Conclusions:

I. All robots are computers.

II. Some machines are robots.

- Ans**
- 1. Only Conclusion I follows.
 - 2. Only Conclusion II follows.
 - 3. Both Conclusions I and II follow.
 - 4. Neither Conclusion I nor II follows.

Question ID : 26433081680

Option 1 ID : 264330320553

Option 2 ID : 264330320554

Option 3 ID : 264330320555

Option 4 ID : 264330320556

Status : Answered

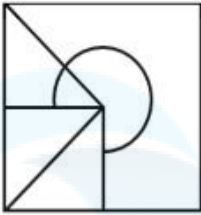
Chosen Option : 4

Q.20 Select the option in which the given figure is embedded (rotation is NOT allowed).

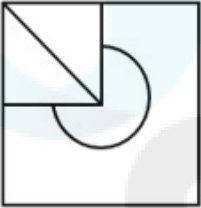


Ans

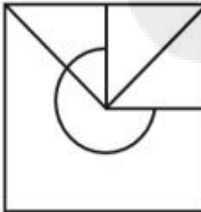
✗ 1.



✗ 2.



✗ 3.



✓ 4.



Question ID : 264330106331

Option 1 ID : 264330417627

Option 2 ID : 264330417625

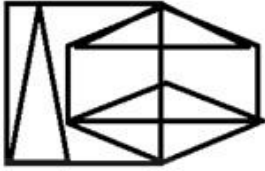
Option 3 ID : 264330417628

Option 4 ID : 264330417626

Status : Answered

Chosen Option : 4

Q.21 How many triangles are there in the given figure?



- Ans
- 1. 12
 - 2. 10
 - 3. 11
 - 4. 13

Question ID : 26433085409

Option 1 ID : 264330335338

Option 2 ID : 264330335340

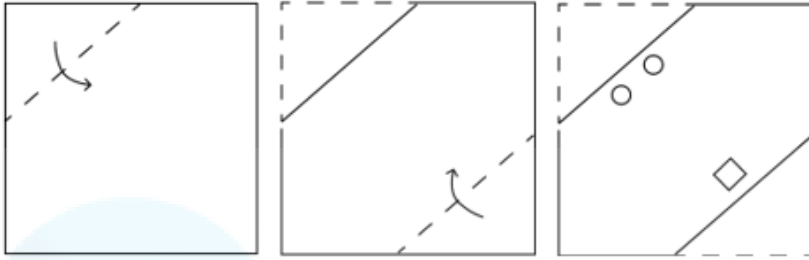
Option 3 ID : 264330335339

Option 4 ID : 264330335337

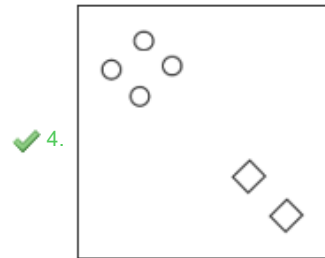
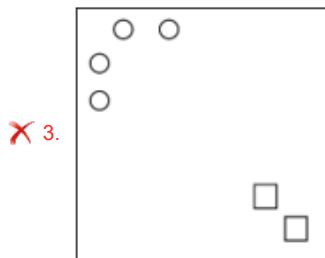
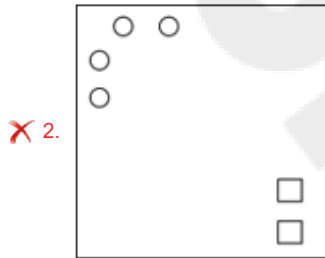
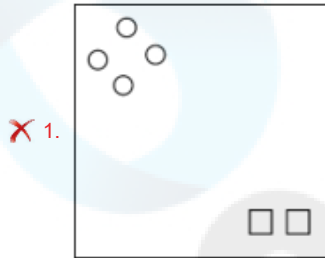
Status : Answered

Chosen Option : 4

Q.22 A square sheet of paper is folded along the dotted line successively along the directions shown and is then punched in the last. How would the paper look when unfolded?



Ans

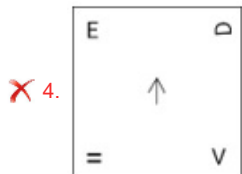
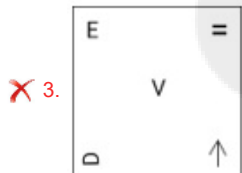
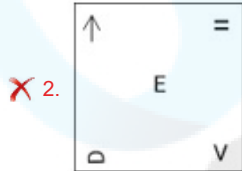
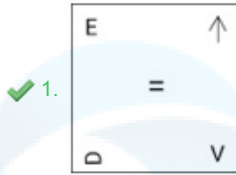


Question ID : 264330172411
 Option 1 ID : 264330676196
 Option 2 ID : 264330676197
 Option 3 ID : 264330676195
 Option 4 ID : 264330676198
 Status : Answered
 Chosen Option : 4

Q.23 Which figure should replace the question mark (?) if the following series were to be continued?

Z	E	E	8	8	V	V	=	=	E	
	8		Z		=		8		↑	?
V	∩	∩	V	E	∩	∩	E	V	∩	

Ans



Question ID : 264330103861

Option 1 ID : 264330407747

Option 2 ID : 264330407748

Option 3 ID : 264330407745

Option 4 ID : 264330407746

Status : Answered

Chosen Option : 3

Q.24 Which two signs should be interchanged to make the given equation correct?
 $87 + 85 - 25 \times 3 \div 291 = 3$

Ans ✗ 1. + and +

✗ 2. + and -

✓ 3. = and +

✗ 4. - and ×

Question ID : 26433090218

Option 1 ID : 264330354352

Option 2 ID : 264330354349

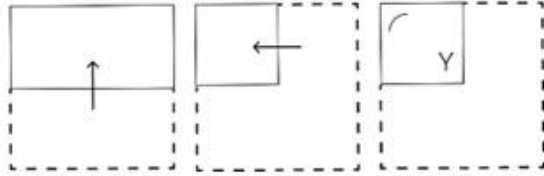
Option 3 ID : 264330354350

Option 4 ID : 264330354351

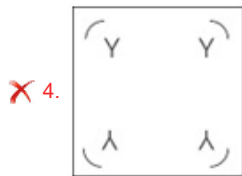
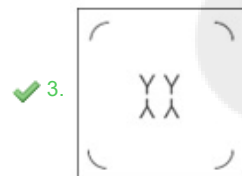
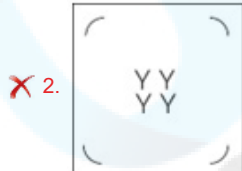
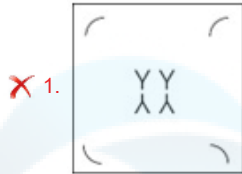
Status : Answered

Chosen Option : 3

Q.25 A paper is folded and cut as shown below. How will it appear when unfolded?



Ans



Question ID : 264330114715

Option 1 ID : 264330450947

Option 2 ID : 264330450946

Option 3 ID : 264330450948

Option 4 ID : 264330450945

Status : Answered

Chosen Option : 3

Section : Numerical Ability

Q.1 If the breadth of the rectangle is decreased by 40% and its length is increased by 25%, find the percentage change in its area.

- Ans
- ✗ 1. 5% increase
 - ✗ 2. 90% decrease
 - ✗ 3. 75% decrease
 - ✓ 4. 25% decrease

Question ID : 264330104233

Option 1 ID : 264330409234

Option 2 ID : 264330409233

Option 3 ID : 264330409236

Option 4 ID : 264330409235

Status : Answered

Chosen Option : 4

Q.2 When 24 is subtracted from a number, it reduces to 60%. The two-fifth of that number is:

- Ans
- 1. 48
 - 2. 36
 - 3. 24
 - 4. 60

Question ID : 26433097577
Option 1 ID : 264330382980
Option 2 ID : 264330382979
Option 3 ID : 264330382977
Option 4 ID : 264330382978
Status : Answered
Chosen Option : 4

Q.3 A bus is moving at a speed of $40 \frac{\text{km}}{\text{h}}$ and is ahead of a car, which is moving at a speed of $75 \frac{\text{km}}{\text{h}}$. What is the distance (in km) between the bus and the car, if it takes 15 minutes for the car to catch up with the bus?

- Ans
- 1. 8.75
 - 2. 8.54
 - 3. 5.87
 - 4. 9.12

Question ID : 264330119350
Option 1 ID : 264330467689
Option 2 ID : 264330467688
Option 3 ID : 264330467687
Option 4 ID : 264330467690
Status : Answered
Chosen Option : 1

Q.4 Simplify the following.

$$2 - \frac{1}{5 + \frac{1}{6 - \frac{2}{5}}}$$

- Ans
- 1. $\frac{165}{325}$
 - 2. $\frac{262}{145}$
 - 3. $\frac{145}{262}$
 - 4. $\frac{51}{28}$

Question ID : 264330104227
Option 1 ID : 264330409209
Option 2 ID : 264330409210
Option 3 ID : 264330409211
Option 4 ID : 264330409212
Status : Answered
Chosen Option : 3

Q.5 A machine was offered a 16% trade discount on the marked price of ₹30,000. After some cash discount, the machine was sold for ₹23,184. The cash discount is:

- Ans
- 1. 10%
 - 2. 9%
 - 3. 6%
 - 4. 8%

Question ID : 264330183854
Option 1 ID : 264330721092
Option 2 ID : 264330721093
Option 3 ID : 264330721094
Option 4 ID : 264330721095
Status : Answered
Chosen Option : 4

Q.6 A camp has provisions for 60 persons for 18 days. In how many days will the same provisions finish off if the strength of the camp is increased to 90 persons?

- Ans
- 1. 12 days
 - 2. 18 days
 - 3. 8 days
 - 4. 15 days

Question ID : 264330182578
Option 1 ID : 264330716104
Option 2 ID : 264330716106
Option 3 ID : 264330716103
Option 4 ID : 264330716105
Status : Answered
Chosen Option : 1

Q.7 The average marks of three classes of 50, 65 and 45 students, respectively, are 75, 80 and 90. Find the average marks of all the students.

- Ans
- 1. 91.65
 - 2. 81.25
 - 3. 75.81
 - 4. 71.65

Question ID : 264330130063
Option 1 ID : 264330509486
Option 2 ID : 264330509484
Option 3 ID : 264330509485
Option 4 ID : 264330509483
Status : Answered
Chosen Option : 2

Q.8 A device is available for ₹8,000 cash or ₹500 down payment followed by four equal monthly instalments. If the rate of simple interest charged is 25% per annum, then find the instalment, to the nearest rupee.

- Ans
- 1. ₹1,977
 - 2. ₹1,987
 - 3. ₹1,970
 - 4. ₹1,790

Question ID : 264330118087
Option 1 ID : 264330464165
Option 2 ID : 264330464166
Option 3 ID : 264330464164
Option 4 ID : 264330464163
Status : Not Answered
Chosen Option : --

Q.9 Which of the following numbers is NOT a prime number?

- Ans
- 1. 1571
 - 2. 1471
 - 3. 1271
 - 4. 1171

Question ID : 264330109233
Option 1 ID : 264330429212
Option 2 ID : 264330429211
Option 3 ID : 264330429210
Option 4 ID : 264330429209
Status : Answered
Chosen Option : 3

Q.10 The cost price of an item is one-fourth of its selling price. What is the gain or loss percentage on that item?

- Ans
- 1. Gain of 300%
 - 2. Loss of 100%
 - 3. Gain of 100%
 - 4. Loss of 300%

Question ID : 264330103471
Option 1 ID : 264330406192
Option 2 ID : 264330406189
Option 3 ID : 264330406190
Option 4 ID : 264330406191
Status : Answered
Chosen Option : 1

Q.11 The sum of five consecutive integers is 235. Which of the five integers is prime?

- Ans
- 1. 47
 - 2. 51
 - 3. 43
 - 4. 53

Question ID : 264330104411
Option 1 ID : 264330409946
Option 2 ID : 264330409947
Option 3 ID : 264330409945
Option 4 ID : 264330409948
Status : Answered
Chosen Option : 1

Q.12 The ratio of the number of boys to that of the girls in a school is 5 : 7. If there are 1148 girls in the school, how many boys are there in that school?

- Ans
- 1. 830
 - 2. 840
 - 3. 820
 - 4. 810

Question ID : 264330131164
Option 1 ID : 264330513769
Option 2 ID : 264330513767
Option 3 ID : 264330513768
Option 4 ID : 264330513770
Status : Answered
Chosen Option : 3

Q.13 The internal radius of a metallic pipe is 2 cm and its external radius is 2.7 cm. If the length of the pipe is 10 cm, then find the volume of the metal used for this pipe.
(Use $\pi = \frac{22}{7}$)

- Ans
- 1. 110.5 cm³
 - 2. 101.2 cm³
 - 3. 93.4 cm³
 - 4. 103.4 cm³

Question ID : 264330118112
Option 1 ID : 264330464266
Option 2 ID : 264330464263
Option 3 ID : 264330464265
Option 4 ID : 264330464264
Status : Answered
Chosen Option : 4

Q.14 A sum of ₹32,760 was taken as a loan. This is to be paid in three equal annual instalments. If the rate of interest is 20% compounded annually, then the value of each instalment is:

- Ans
- 1. ₹11,000
 - 2. ₹10,000
 - 3. ₹15,552
 - 4. ₹16,552

Question ID : 264330109257
Option 1 ID : 264330429305
Option 2 ID : 264330429307
Option 3 ID : 264330429308
Option 4 ID : 264330429306
Status : Answered
Chosen Option : 3

Q.15 If 27 identical small spheres are made out of a big sphere of diameter 6 cm, what is the radius (in cm) of the small sphere?

- Ans 1. 1
 2. 2
 3. 1.5
 4. 0.5

Question ID : 264330109353
Option 1 ID : 264330429690
Option 2 ID : 264330429692
Option 3 ID : 264330429691
Option 4 ID : 264330429689
Status : Answered
Chosen Option : 1

Section : Computer Proficiency

Q.1 Which of the following components is responsible for translating domain names (e.g., www.example.com) into IP addresses (e.g. 192.168.1.1) to enable communication over the internet?

- Ans 1. Firewall
 2. Modem
 3. DNS Server
 4. Router

Question ID : 264330173297
Option 1 ID : 264330679670
Option 2 ID : 264330679668
Option 3 ID : 264330679669
Option 4 ID : 264330679667
Status : Answered
Chosen Option : 3

Q.2 Which of the following shortcut keys is used to get context sensitive Help in MS Word 365?

- Ans 1. Press F6
 2. Press F10
 3. Press F1
 4. Press F7

Question ID : 264330176728
Option 1 ID : 264330693128
Option 2 ID : 264330693129
Option 3 ID : 264330693127
Option 4 ID : 264330693130
Status : Answered
Chosen Option : 3

Q.3 In Microsoft Word 2019, which of the following settings is NOT found in the 'Indents and Spacing' tab of the 'Paragraph' dialog box?

- Ans
- 1. General
 - 2. Indentation
 - 3. Spacing
 - 4. Pagnation

Question ID : 264330182754
Option 1 ID : 264330716787
Option 2 ID : 264330716788
Option 3 ID : 264330716790
Option 4 ID : 264330716789
Status : Answered
Chosen Option : 1

Q.4 When editing data in an MS Excel 365 worksheet, which of the following actions will allow you to reverse your recent changes?

- Ans
- 1. Paste
 - 2. Undo
 - 3. Save
 - 4. Copy

Question ID : 264330178568
Option 1 ID : 264330700300
Option 2 ID : 264330700302
Option 3 ID : 264330700301
Option 4 ID : 264330700299
Status : Answered
Chosen Option : 2

Q.5 What is the shortcut command in MS-Word 365 for selecting all the words from the file?

- Ans
- 1. Ctrl + X
 - 2. Ctrl + C
 - 3. Ctrl + A
 - 4. Ctrl + Z

Question ID : 264330171410
Option 1 ID : 264330672255
Option 2 ID : 264330672257
Option 3 ID : 264330672258
Option 4 ID : 264330672256
Status : Answered
Chosen Option : 3

Q.6 Which keyboard shortcut allows you to edit the content of a selected cell directly in the cell itself in Microsoft Excel 365?

- Ans
- 1. Ctrl + E
 - 2. Ctrl + C
 - 3. F12
 - 4. F2

Question ID : 264330180697
Option 1 ID : 264330708755
Option 2 ID : 264330708756
Option 3 ID : 264330708758
Option 4 ID : 264330708757
Status : Answered
Chosen Option : 4

Q.7 Which of the following keyboard shortcut keys is used to pick a new font for the selected text in MS-Word 365?

- Ans
- 1. Ctrl + Alt + F
 - 2. Ctrl + Shift + F
 - 3. Ctrl + F
 - 4. Shift + F

Question ID : 264330178287
Option 1 ID : 264330699206
Option 2 ID : 264330699203
Option 3 ID : 264330699204
Option 4 ID : 264330699205
Status : Answered
Chosen Option : 2

Q.8 What is the category of software that enables word processing, database management, graphic manipulation and spreadsheet creation?

- Ans
- 1. Structure
 - 2. Application
 - 3. Framework
 - 4. System

Question ID : 264330182763
Option 1 ID : 264330716826
Option 2 ID : 264330716824
Option 3 ID : 264330716825
Option 4 ID : 264330716823
Status : Answered
Chosen Option : 2

Q.9 Which social networking platform is known for its character limit on posts and real-time updates?

- Ans**
- 1. Facebook
 - 2. LinkedIn
 - 3. Instagram
 - 4. Twitter

Question ID : 264330174463
Option 1 ID : 264330684271
Option 2 ID : 264330684273
Option 3 ID : 264330684274
Option 4 ID : 264330684272
Status : Answered
Chosen Option : 4

Q.10 In MS Excel 365, What is the main purpose of using a chart in MS Excel?

- Ans**
- 1. To format text
 - 2. To perform calculations
 - 3. To store data
 - 4. To visually represent data

Question ID : 264330182122
Option 1 ID : 264330714330
Option 2 ID : 264330714328
Option 3 ID : 264330714327
Option 4 ID : 264330714329
Status : Answered
Chosen Option : 4