

Q.4 Which of the following pairs is NOT correctly matched with respect to the player and sport?

- Ans** 1. Yogesh Kathuniya – Discuss throw
 2. Bhavina Patel – Para-shooting
 3. Nishad Kumar – High jump
 4. LY Suhas – Para-badminton

Question ID : 264330118892
Option 1 ID : 264330466226
Option 2 ID : 264330466224
Option 3 ID : 264330466225
Option 4 ID : 264330466223
Status : Answered
Chosen Option : 3

Q.5 Under which function of the Union Budget does the Government of India build roads and hospitals?

- Ans** 1. Stabilisation
 2. Redistribution
 3. Surplus generation
 4. Allocation

Question ID : 264330113538
Option 1 ID : 264330446239
Option 2 ID : 264330446238
Option 3 ID : 264330446240
Option 4 ID : 264330446237
Status : Answered
Chosen Option : 4

Q.6 As per the CMIE's report in December 2022, what was the unemployment rate of the urban population in India?

- Ans** 1. 8.12%
 2. 10.09%
 3. 11.09%
 4. 12.03%

Question ID : 264330132754
Option 1 ID : 264330520114
Option 2 ID : 264330520111
Option 3 ID : 264330520113
Option 4 ID : 264330520112
Status : Answered
Chosen Option : 2

Q.7 Belgium won the Men's International Federation Hockey (FIH) 2018 World Cup, which was held in _____.

- Ans
- 1. Australia
 - 2. India
 - 3. Germany
 - 4. Belgium

Question ID : 264330118464
Option 1 ID : 264330465258
Option 2 ID : 264330465257
Option 3 ID : 264330465259
Option 4 ID : 264330465260
Status : Answered
Chosen Option : 2

Q.8 Who among the following became the first Indian musician to be honoured with the Ramon Magsaysay award, which is considered to be Asia's Nobel Prize?

- Ans
- 1. Lata Mangeshkar
 - 2. MS Subbulakshmi
 - 3. Pandit Ravi Shankar
 - 4. Pandit Kumar Gandarva

Question ID : 264330113245
Option 1 ID : 264330445066
Option 2 ID : 264330445065
Option 3 ID : 264330445067
Option 4 ID : 264330445068
Status : Answered
Chosen Option : 3

Q.9 Which of the following organisations regulates international trade?

- Ans
- 1. UNICEF
 - 2. UNESCO
 - 3. IMF
 - 4. WTO

Question ID : 264330108911
Option 1 ID : 264330427923
Option 2 ID : 264330427922
Option 3 ID : 264330427921
Option 4 ID : 264330427924
Status : Answered
Chosen Option : 4

Q.10 भारत के पश्चिमी तटीय क्षेत्रों में मानसून का मौसम समाप्त होने के उपलक्ष्य में हिंदू माह श्रावण के आखिरी दिन कौन सा पर्व मनाया जाता है?

- Ans
- 1. नराली पूर्णिमा
 - 2. कोजागिरी पूर्णिमा
 - 3. साम्बा दशमी
 - 4. गुरु पूर्णिमा

Question ID : 264330182994
Option 1 ID : 264330717709
Option 2 ID : 264330717708
Option 3 ID : 264330717710
Option 4 ID : 264330717711
Status : Answered
Chosen Option : 4

Q.11 From where does most of the refracted light rays enter the eyes?

- Ans 1. From the outer surface of the cornea
 2. From the outer surface of the retina
 3. From the outer surface of the iris
 4. From the inner surface of the cornea

Question ID : 264330135587
Option 1 ID : 264330531248
Option 2 ID : 264330531250
Option 3 ID : 264330531247
Option 4 ID : 264330531249
Status : Answered
Chosen Option : 1

Q.12 साहित्य अकादमी पुरस्कार विजेता माया खुटेगांवकर एक प्रसिद्ध _____ नृत्यांगना हैं।

- Ans 1. बिहु
 2. सुग्गी
 3. लावणी
 4. झूमर

Question ID : 264330106199
Option 1 ID : 264330417098
Option 2 ID : 264330417097
Option 3 ID : 264330417099
Option 4 ID : 264330417100
Status : Answered
Chosen Option : 3

Q.13 संसद _____ की सिफारिश पर राज्य विधान-परिषद बना या समाप्त कर सकती है।

- Ans 1. राज्य विधानसभा
 2. राज्य के राज्यपाल
 3. मुख्यमंत्री
 4. भारत के राष्ट्रपति

Question ID : 264330120194
Option 1 ID : 264330471033
Option 2 ID : 264330471032
Option 3 ID : 264330471034
Option 4 ID : 264330471031
Status : Answered
Chosen Option : 1

Q.14 निम्नलिखित में से कौन-सा अनुच्छेद निर्देशक सिद्धांतों को 'देश के शासन में मौलिक' के रूप में निहित करता है और 'कानून बनाने में इन सिद्धांतों को लागू करने की राज्य से अपेक्षा करता है?'

- Ans 1. अनुच्छेद 37
 2. अनुच्छेद 38
 3. अनुच्छेद 39
 4. अनुच्छेद 36

Question ID : 264330118012
Option 1 ID : 264330463864
Option 2 ID : 264330463865
Option 3 ID : 264330463866
Option 4 ID : 264330463863
Status : Answered
Chosen Option : 1

Q.15 हरित क्रांति द्वारा पारंपरिक खेती के विरुद्ध किस कृषि तकनीक को बढ़ावा दिया गया?

- Ans
- 1. जैविक खेती
 - 2. श्रम प्रधान खेती
 - 3. वैज्ञानिक खेती
 - 4. स्वदेशी खेती

Question ID : 264330174153
Option 1 ID : 264330683052
Option 2 ID : 264330683053
Option 3 ID : 264330683054
Option 4 ID : 264330683051
Status : Answered
Chosen Option : 4

Q.16 क्षमादान देने, सजा में राहत देने, स्थगन देने या छूट देने की शक्ति किसके पास है?

- Ans
- 1. राष्ट्रपति
 - 2. प्रधान मंत्री
 - 3. उप-राष्ट्रपति
 - 4. अध्यक्ष (स्पीकर)

Question ID : 264330110597
Option 1 ID : 264330434668
Option 2 ID : 264330434666
Option 3 ID : 264330434665
Option 4 ID : 264330434667
Status : Answered
Chosen Option : 1

Q.17 In which year did Lord Curzon arrive in India as Viceroy?

- Ans
- 1. 1898
 - 2. 1891
 - 3. 1899
 - 4. 1892

Question ID : 264330120152
Option 1 ID : 264330470865
Option 2 ID : 264330470863
Option 3 ID : 264330470866
Option 4 ID : 264330470864
Status : Answered
Chosen Option : 1

Q.18 1882 में, थियोसोफिकल सोसायटी का मुख्यालय _____ में स्थापित किया गया था।

- Ans
- 1. खालियर
 - 2. कलकत्ता
 - 3. अड्यार
 - 4. इलाहाबाद

Question ID : 264330114108
Option 1 ID : 264330448519
Option 2 ID : 264330448517
Option 3 ID : 264330448520
Option 4 ID : 264330448518
Status : Answered
Chosen Option : 2

Q.19 The amphibians of plant kingdom are _____.

- Ans
- 1. Pteridophytes
 - 2. Bryophytes
 - 3. Algae
 - 4. Fungi

Question ID : 264330117593
Option 1 ID : 264330462398
Option 2 ID : 264330462397
Option 3 ID : 264330462399
Option 4 ID : 264330462400
Status : Answered
Chosen Option : 2

Q.20 Which unusual flavour is observed in dairy products due to the formation of ethyl esters catalysed by esterases produced by lactic acid bacteria?

- Ans
- 1. Fishy flavour
 - 2. Musty flavour
 - 3. Fruity flavour
 - 4. Bitty flavour

Question ID : 264330131005
Option 1 ID : 264330513131
Option 2 ID : 264330513133
Option 3 ID : 264330513132
Option 4 ID : 264330513134
Status : Answered
Chosen Option : 4

Q.21 निम्नलिखित में से क्या, भारत की जनगणना वाले किसी नगर की परिभाषा के अंतर्गत नहीं आता है?

- Ans
- 1. जनसंख्या घनत्व 400 व्यक्ति प्रति km^2
 - 2. नगर पालिका, नगर निगम आदि की उपस्थिति
 - 3. प्राथमिक क्षेत्र में लगी हुई 75% से अधिक जनसंख्या
 - 4. 5000 व्यक्तियों की न्यूनतम जनसंख्या

Question ID : 264330182968
Option 1 ID : 264330717604
Option 2 ID : 264330717605
Option 3 ID : 264330717606
Option 4 ID : 264330717607
Status : Answered
Chosen Option : 1

Q.22 Which crop is also known as 'golden fibre'?

- Ans
- 1. Cotton
 - 2. Wheat
 - 3. Rice
 - 4. Jute

Question ID : 264330183058
Option 1 ID : 264330717965
Option 2 ID : 264330717967
Option 3 ID : 264330717966
Option 4 ID : 264330717964
Status : Answered
Chosen Option : 4

Q.23 The 'Infant Mortality Rate' is defined as the number of deaths of infants aged less than one year per _____ live births in a given year.

- Ans
- 1. 5000
 - 2. 1000
 - 3. 100
 - 4. 500

Question ID : 264330179270
Option 1 ID : 264330703086
Option 2 ID : 264330703085
Option 3 ID : 264330703083
Option 4 ID : 264330703084
Status : Answered
Chosen Option : 2

Q.24 मंदिर वास्तुकला की निम्नलिखित में से किस शैली में शिखर को देउल कहा जाता है?

- Ans
- 1. ओडिशा
 - 2. द्रविड़
 - 3. नागर
 - 4. वेसरा

Question ID : 264330111856
Option 1 ID : 264330439509
Option 2 ID : 264330439511
Option 3 ID : 264330439510
Option 4 ID : 264330439512
Status : Answered
Chosen Option : 2

Q.25 Which of the following is NOT an amphibian animal?

- Ans
- 1. Salamander
 - 2. Toad
 - 3. Tortoise
 - 4. Frog

Question ID : 26433064423
Option 1 ID : 264330252284
Option 2 ID : 264330252285
Option 3 ID : 264330252287
Option 4 ID : 264330252286
Status : Answered
Chosen Option : 1

Q.26 Which of the following authors has written the famous novel 'Gulliver's Travels'?

- Ans
- 1. Oscar Wilde
 - 2. Samuel Richardson
 - 3. Jonathan Swift
 - 4. Ruskin Bond

Question ID : 26433066678
Option 1 ID : 264330261239
Option 2 ID : 264330261236
Option 3 ID : 264330261238
Option 4 ID : 264330261237
Status : Answered
Chosen Option : 4

Q.27 आर्य संस्कृति के विभिन्न स्रोतों में _____ प्रमुख हैं।

- Ans 1. अनुष्ठान ग्रंथ
 2. स्मारक
 3. शिलालेख
 4. पुरातात्विक कलाकृतियाँ

Question ID : 264330120133
Option 1 ID : 264330470787
Option 2 ID : 264330470789
Option 3 ID : 264330470790
Option 4 ID : 264330470788
Status : Answered
Chosen Option : 3

Q.28 बादशाह नामा के लेखक कौन थे ?

- Ans 1. सादुल्लाह खान
 2. अबुल फजल
 3. अब्दुल हमीद लाहौरी
 4. बैरम खान

Question ID : 264330114842
Option 1 ID : 264330451455
Option 2 ID : 264330451453
Option 3 ID : 264330451454
Option 4 ID : 264330451456
Status : Answered
Chosen Option : 3

Q.29 Who was the author of 'Raag Darbari'?

- Ans 1. Dharamvir Bharati
 2. Suryakant Tripathi 'Nirala'
 3. Shrilal Shukla
 4. Harivansh Rai Bachchan

Question ID : 26433086914
Option 1 ID : 264330341297
Option 2 ID : 264330341298
Option 3 ID : 264330341300
Option 4 ID : 264330341299
Status : Answered
Chosen Option : 4

Q.30 What is 25-Ponders with reference to the celebration at the Republic Day Parade?

- Ans 1. March-past by the Cavalry
 2. Salute by seven canons of the Indian Army
 3. Salute to the National Flag by the President's bodyguards
 4. Presentation of the tableaux from different states

Question ID : 264330110459
Option 1 ID : 264330434113
Option 2 ID : 264330434114
Option 3 ID : 264330434115
Option 4 ID : 264330434116
Status : Answered
Chosen Option : 4

Q.31 Amaravati Stupa is located in which of these states?

- Ans 1. West Bengal
 2. Andhra Pradesh
 3. Gujarat
 4. Madhya Pradesh

Question ID : 264330109322
Option 1 ID : 264330429566
Option 2 ID : 264330429567
Option 3 ID : 264330429568
Option 4 ID : 264330429565
Status : Answered
Chosen Option : 4

Q.32 Which female singer got the 'Best Playback Singer (Female)' award at the Filmfare Awards 2022?

- Ans 1. Shreya Ghoshal
 2. Priya Saria
 3. Neha Kakkar
 4. Asees Kaur

Question ID : 264330113239
Option 1 ID : 264330445044
Option 2 ID : 264330445042
Option 3 ID : 264330445041
Option 4 ID : 264330445043
Status : Answered
Chosen Option : 3

Q.33 निम्नलिखित में से किसका संबंध किसी हिमनदीय स्थलरूप से है?

- Ans 1. जलोढ़ पंखा (Alluvial fan)
 2. प्लाय (Playas)
 3. यारडांग (Yardangs)
 4. हॉर्न (Horns)

Question ID : 264330131745
Option 1 ID : 264330516080
Option 2 ID : 264330516082
Option 3 ID : 264330516081
Option 4 ID : 264330516079
Status : Answered
Chosen Option : 2

Q.34 Which of the following Constitutional Amendment Acts made it a fundamental duty of parents to educate their child?

- Ans 1. 88th Amendment Act
 2. 87th Amendment Act
 3. 86th Amendment Act
 4. 85th Amendment Act

Question ID : 264330110567
Option 1 ID : 264330434548
Option 2 ID : 264330434547
Option 3 ID : 264330434546
Option 4 ID : 264330434545
Status : Answered
Chosen Option : 3

Q.35 'Samagra Shiksha', a scheme in the area of education subsumes the earlier schemes pertaining to _____.

- Ans 1. Sarva Shiksha Abhiyan, Rashtriya Madhyamik Shiksha Abhiyan and Teacher Education only
 2. Sarva Shiksha Abhiyan and Rashtriya Madhyamik Shiksha Abhiyan only
 3. Sarva Shiksha Abhiyan only
 4. Sarva Shiksha Abhiyan, Teacher Education and Rashtriya Avishkar Abhiyan only

Question ID : 264330111778
Option 1 ID : 264330439200
Option 2 ID : 264330439198
Option 3 ID : 264330439197
Option 4 ID : 264330439199
Status : Answered
Chosen Option : 2

Q.36 In which year was the Right to Education (RTE) Act implemented?

- Ans 1. 2009
 2. 2010
 3. 2015
 4. 2012

Question ID : 264330173490
Option 1 ID : 264330680439
Option 2 ID : 264330680440
Option 3 ID : 264330680442
Option 4 ID : 264330680441
Status : Answered
Chosen Option : 1

Q.37 भारत का पहला महिला संगठन, भारत स्त्री महामंडल की स्थापना _____ के द्वारा की गई थी।

- Ans 1. एनी बेसेंट
 2. सरला देवी चौधरानी
 3. सरोजिनी नायडू
 4. सावित्रीबाई फुले

Question ID : 264330171705
Option 1 ID : 264330673426
Option 2 ID : 264330673423
Option 3 ID : 264330673424
Option 4 ID : 264330673425
Status : Answered
Chosen Option : 2

Q.38 Which of the following is a famous folk dance of Bihar?

- Ans 1. Jhijhiya
 2. Naga dance
 3. Maharas
 4. Khel gopal

Question ID : 264330109287
Option 1 ID : 264330429426
Option 2 ID : 264330429427
Option 3 ID : 264330429428
Option 4 ID : 264330429425
Status : Answered
Chosen Option : 1

Q.39 Who among the following is associated with Kathak?

- Ans 1. Kalamandalam Krishnan Nair
 2. Nahid Siddiqui
 3. V Satyanarayana Sarma
 4. Anokhelal Mishra

Question ID : 264330131310
Option 1 ID : 264330514353
Option 2 ID : 264330514352
Option 3 ID : 264330514354
Option 4 ID : 264330514351
Status : Answered
Chosen Option : 4

Q.40 पाल वंश के धर्मपाल को निम्नलिखित में से किस राष्ट्रकूट शासक ने पराजित किया था?

- Ans 1. अमोघवर्ष द्वितीय
 2. गोविंद द्वितीय
 3. कृष्ण प्रथम
 4. ध्रुव

Question ID : 264330183118
Option 1 ID : 264330718206
Option 2 ID : 264330718207
Option 3 ID : 264330718205
Option 4 ID : 264330718204
Status : Answered
Chosen Option : 3

Q.41 निम्नलिखित में से किस नृत्यांगना ने प्रसिद्ध बैलेरीना अन्ना पावलोवा (Anna Pavlova) के अनुरोध पर बैले सीखा?

- Ans 1. सितारा देवी
 2. रुक्मिणी देवी अरुंडेल
 3. सोनल मानसिंह
 4. यामिनी कृष्णमूर्ति

Question ID : 26433086940
Option 1 ID : 264330341401
Option 2 ID : 264330341403
Option 3 ID : 264330341404
Option 4 ID : 264330341402
Status : Answered
Chosen Option : 4

Q.42 In which of the following years was Sati, the practice of widow-burning, banned in India?

- Ans 1. 1875
 2. 1819
 3. 1897
 4. 1829

Question ID : 264330119020
Option 1 ID : 264330466737
Option 2 ID : 264330466735
Option 3 ID : 264330466738
Option 4 ID : 264330466736
Status : Answered
Chosen Option : 4

Q.43 The thickness of the continental crust beneath the Central Himalayas is of the order of _____, marking the end of volcanic activity in the region.

- Ans
- 1. 35–37 km
 - 2. 60–65 km
 - 3. 50–63 km
 - 4. 70–72 km

Question ID : 264330114165
Option 1 ID : 264330448745
Option 2 ID : 264330448746
Option 3 ID : 264330448748
Option 4 ID : 264330448747
Status : Answered
Chosen Option : 1

Q.44 महारौली में लौह स्तंभ का निर्माण निम्नलिखित में से किस राजवंश के शासकों द्वारा करवाया गया था?

- Ans
- 1. मौखरी
 - 2. गुप्त
 - 3. कुषाण
 - 4. मौर्य

Question ID : 264330119955
Option 1 ID : 264330470098
Option 2 ID : 264330470097
Option 3 ID : 264330470096
Option 4 ID : 264330470095
Status : Answered
Chosen Option : 3

Q.45 Which of the following measures is NOT related to the tax reform measures undertaken during the liberalisation phase?

- Ans
- 1. Reduction in rates of income tax
 - 2. Devaluation of Rupee
 - 3. Reforms related to indirect taxes
 - 4. Simplification of tax procedures

Question ID : 264330111604
Option 1 ID : 264330438502
Option 2 ID : 264330438501
Option 3 ID : 264330438503
Option 4 ID : 264330438504
Status : Answered
Chosen Option : 3

Q.46 निम्नलिखित में से कौन-सा 37वें राष्ट्रीय खेलों का शुभंकर है?

- Ans
- 1. मोगा
 - 2. ऑली
 - 3. सावज
 - 4. भीमा

Question ID : 264330176922
Option 1 ID : 264330693883
Option 2 ID : 264330693886
Option 3 ID : 264330693885
Option 4 ID : 264330693884
Status : Answered
Chosen Option : 1

Q.47 Which month marks the approximate arrival of the monsoon in India?

- Ans
- 1. Early January
 - 2. Early June
 - 3. Early February
 - 4. Early October

Question ID : 264330174342
Option 1 ID : 264330683787
Option 2 ID : 264330683789
Option 3 ID : 264330683788
Option 4 ID : 264330683790
Status : Answered
Chosen Option : 2

Q.48 Which system was prevalent before the invention of money?

- Ans
- 1. Bretton woods system
 - 2. Liquidity system
 - 3. Fiscal system
 - 4. Barter system

Question ID : 264330120873
Option 1 ID : 264330473707
Option 2 ID : 264330473709
Option 3 ID : 264330473708
Option 4 ID : 264330473710
Status : Answered
Chosen Option : 4

Q.49 निम्नलिखित में से कौन संसद की संयुक्त बैठक की अध्यक्षता करता है?

- Ans
- 1. भारत के राष्ट्रपति
 - 2. राज्यसभा के सभापति
 - 3. भारत के प्रधानमंत्री
 - 4. लोकसभा अध्यक्ष

Question ID : 264330177755
Option 1 ID : 264330697129
Option 2 ID : 264330697128
Option 3 ID : 264330697130
Option 4 ID : 264330697127
Status : Answered
Chosen Option : 4

Q.50 In which Olympics did Khashaba Jadhav, the first Indian win an individual Olympic medal for India?

- Ans
- 1. 1972 Munich Olympics
 - 2. 1948 London Olympics
 - 3. 1952 Helsinki Olympics
 - 4. 1936 Berlin Olympics

Question ID : 264330119275
Option 1 ID : 264330467388
Option 2 ID : 264330467389
Option 3 ID : 264330467390
Option 4 ID : 264330467387
Status : Answered
Chosen Option : 3

Section : Reasoning

Q.1 Which two signs should be interchanged to make the following equation correct?

$$48 \div 16 \times 24 - 5 + 3 = 12$$

- Ans
- 1. \div and \times
 - 2. \div and $+$
 - 3. $-$ and $+$
 - 4. $+$ and \times

Question ID : 264330101082

Option 1 ID : 264330396873

Option 2 ID : 264330396874

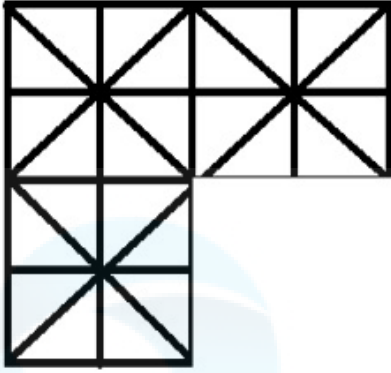
Option 3 ID : 264330396875

Option 4 ID : 264330396876

Status : Answered

Chosen Option : 4


Q.2 Select a figure from amongst the four given options, which when placed in the blank space of figure (X) would complete the pattern.



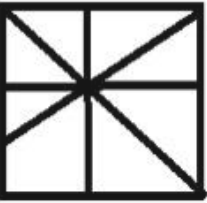
X

Ans

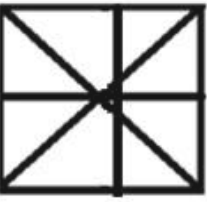
✗ 1.



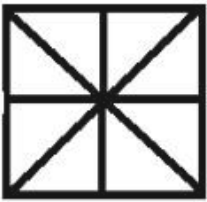
✗ 2.



✗ 3.



✓ 4.



Question ID : 264330113836

Option 1 ID : 264330447430

Option 2 ID : 264330447431

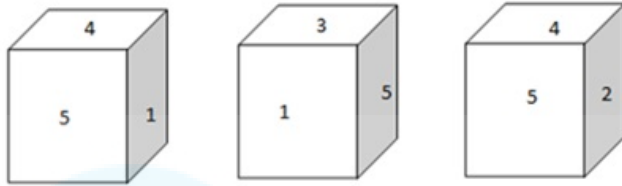
Option 3 ID : 264330447429

Option 4 ID : 264330447432

Status : Answered

Chosen Option : 4

Q.3 Three different positions of the same dice are shown. Find the number on the face opposite the face showing '5'.



Ans 1. 6

2. 4

3. 1

4. 3

Question ID : 264330106476

Option 1 ID : 264330418208

Option 2 ID : 264330418207

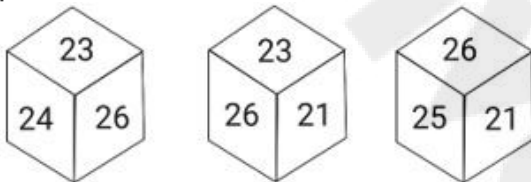
Option 3 ID : 264330418205

Option 4 ID : 264330418206

Status : Answered

Chosen Option : 1

Q.4 Six numbers, 21, 22, 23, 24, 25 and 26 are written on different faces of a dice. Three positions of this dice are shown here. Find the number on the face opposite 26.



Ans 1. 23

2. 22

3. 21

4. 24

Question ID : 264330106412

Option 1 ID : 264330417951

Option 2 ID : 264330417950

Option 3 ID : 264330417949

Option 4 ID : 264330417952

Status : Answered

Chosen Option : 2

Q.5 How many triangles are there in the given figure?



- Ans
- 1. 12
 - 2. 14
 - 3. 17
 - 4. 15

Question ID : 26433078990
Option 1 ID : 264330309972
Option 2 ID : 264330309973
Option 3 ID : 264330309975
Option 4 ID : 264330309974
Status : Answered
Chosen Option : 3

Q.6 Select the word-pair that best represents a similar relationship to the one expressed in the pair of words given below.
(The words must be considered as meaningful English words and must not be related to each other based on the number of letters/number of consonants/vowels in the word.)

False : Untrue

- Ans
- 1. Trip : Journey
 - 2. Fault : Line
 - 3. Higher : Hire
 - 4. Blanket : Winter

Question ID : 26433053232
Option 1 ID : 264330208233
Option 2 ID : 264330208230
Option 3 ID : 264330208232
Option 4 ID : 264330208231
Status : Answered
Chosen Option : 4

Q.7 Anu, Geeta, Mittal, Radha, Hema and Kriti were sitting around a circular table, facing the centre. They were sitting at an equal distance from one another. Hema and Radha were sitting exactly next to each other. Anu was to the immediate right of Kriti. Geeta was to the immediate left of Hema. Mittal is to the immediate right of Radha. Who among the following is sitting to the immediate left of Geeta?

- Ans
- 1. Hema
 - 2. Radha
 - 3. Anu
 - 4. Kriti

Question ID : 26433087007
Option 1 ID : 264330341669
Option 2 ID : 264330341670
Option 3 ID : 264330341671
Option 4 ID : 264330341672
Status : Answered
Chosen Option : 3

Q.8 Which figure should replace the question mark (?) if the series were to be continued?

L	E	O	O	L	E	B	E	S	S	B	E	
	T			B			O			T		?
S	B		T	S		L	T		O	L		

Ans

✓ 1.

T	E	L
	S	
	B	O

✗ 2.

T	E	B
	S	
	L	O

✗ 3.

S	E	L
	T	
	B	O

✗ 4.

B	E	S
	T	
	L	O

Question ID : 264330130819

Option 1 ID : 264330512389

Option 2 ID : 264330512388

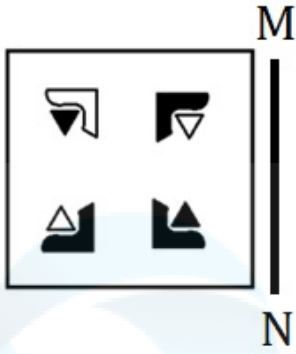
Option 3 ID : 264330512387

Option 4 ID : 264330512390

Status : Answered

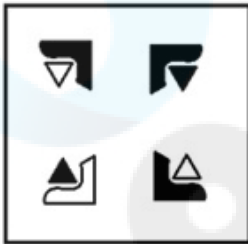
Chosen Option : 1

Q.9 Select the correct mirror image of the given figure when the mirror is placed at MN as shown below.




Ans

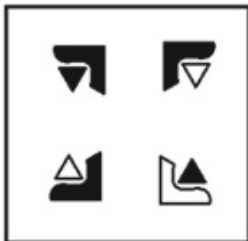
X 1.



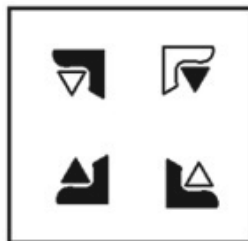
X 2.



X 3.



✓ 4.



Question ID : 264330117427

Option 1 ID : 264330461749

Option 2 ID : 264330461751

Option 3 ID : 264330461752

Option 4 ID : 264330461750

Status : Answered

Chosen Option : 4

Q.10 Select the option that represents the letters that, when sequentially placed from left to right in the blanks below, will complete the letter series.

W _ _ S D _ E A S _ W _ A _ D W E A _ _

- Ans
- 1. EAWSES
 - 2. EAWSES
 - 3. EAWSES
 - 4. EAWSES

Question ID : 26433092543

Option 1 ID : 264330363463

Option 2 ID : 264330363462

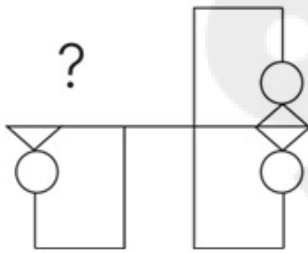
Option 3 ID : 264330363464

Option 4 ID : 264330363461

Status : Answered

Chosen Option : 4

Q.11 Select the figure from the given options that will replace the question mark (?) in the figure given below to complete the pattern so that the final image is symmetrical.



Ans

- 1.
- 2.
- 3.
- 4.

Question ID : 264330114732

Option 1 ID : 264330451014

Option 2 ID : 264330451013

Option 3 ID : 264330451015

Option 4 ID : 264330451016

Status : Answered

Chosen Option : 4

Q.12 Select the correct combination of mathematical signs to sequentially replace the * signs and to balance the given equation.
 $18 * 90 * 3 * 27 * 8 = 0$

- Ans
- 1. +, -, x, +
 - 2. -, x, ÷, -
 - 3. +, x, -, ÷
 - 4. x, ÷, +, -

Question ID : 26433092504
Option 1 ID : 264330363305
Option 2 ID : 264330363308
Option 3 ID : 264330363306
Option 4 ID : 264330363307
Status : Answered
Chosen Option : 2

Q.13 Select the option that is related to the third term in the same way as the second term is related to the first term and the sixth term is related to the fifth term.
 $20 : 205 :: 75 : ? :: 105 : 1055$

- Ans
- 1. 720
 - 2. 750
 - 3. 785
 - 4. 755

Question ID : 264330101053
Option 1 ID : 264330396760
Option 2 ID : 264330396758
Option 3 ID : 264330396757
Option 4 ID : 264330396759
Status : Answered
Chosen Option : 4

Q.14 Select the set in which the numbers are related in the same way as are the numbers of the following sets.

(NOTE: Operations should be performed on the whole numbers, without breaking down the numbers into its constituent digits. E.g. 13 – Operations on 13 such as adding/subtracting/multiplying etc. to 13 can be performed. Breaking down 13 into 1 and 3 and then performing mathematical operations on 1 and 3 is not allowed)
(24, 86, 67)
(39, 64, 71)

- Ans
- 1. (37, 51, 88)
 - 2. (16, 54, 43)
 - 3. (18, 45, 63)
 - 4. (28, 89, 117)

Question ID : 26433087215
Option 1 ID : 264330342497
Option 2 ID : 264330342500
Option 3 ID : 264330342498
Option 4 ID : 264330342499
Status : Answered
Chosen Option : 2

Q.15 Select the number from among the given options that can replace the question mark (?) in the following series.

3, 18, 63, 198, 603, ?

- Ans
- 1. 1479
 - 2. 1200
 - 3. 1500
 - 4. 1818

Question ID : 264330109769
Option 1 ID : 264330431354
Option 2 ID : 264330431353
Option 3 ID : 264330431355
Option 4 ID : 264330431356
Status : Answered
Chosen Option : 4

Q.16 Select the correct mirror image of the given combination when the mirror is placed at 'PQ' as shown below.

A 2 4 G P K



- Ans
- 1. K 9 5 4 2 A
 - 2. K 9 5 4 2 A
 - 3. A 5 4 2 K
 - 4. A 5 4 2 K

Question ID : 264330129815
Option 1 ID : 264330508493
Option 2 ID : 264330508494
Option 3 ID : 264330508492
Option 4 ID : 264330508491
Status : Answered
Chosen Option : 4

Q.17 Which figure from the given options would replace the question mark (?) if the following figure series were to be continued?

2	□	V	8	?
8	V	C	V	C
□	8	2	P	□
	2	8	P	□
		8	V	2

Ans

✓ 1.

	P	
V	O	8
	2	

✗ 2.

	P	
V	□	8
	2	

✗ 3.

	2	
8	O	V
	P	

✗ 4.

	V	
□	2	P
	8	

Question ID : 26433044933

Option 1 ID : 264330176170

Option 2 ID : 264330176168

Option 3 ID : 264330176167

Option 4 ID : 264330176169

Status : Answered

Chosen Option : 1

Q.18 In a certain code language, 'STAY' is written as '2732221' and 'FROM' is written as '1517208'. How will 'FIT' be written in that language?

- Ans
- 1. 6920
 - 2. 81221
 - 3. 11226
 - 4. 22118

Question ID : 26433089415
Option 1 ID : 264330351162
Option 2 ID : 264330351163
Option 3 ID : 264330351164
Option 4 ID : 264330351161
Status : Answered
Chosen Option : 4

Q.19 Which of the following option figures will complete the pattern in the figure given below?

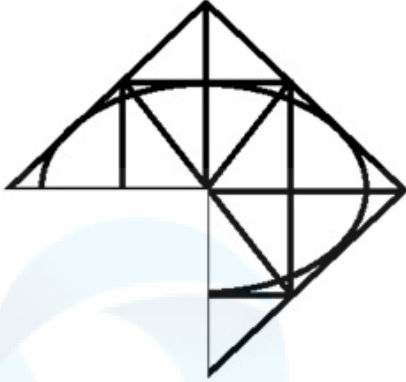


Ans

- 1.
- 2.
- 3.
- 4.

Question ID : 26433080617
Option 1 ID : 264330316404
Option 2 ID : 264330316401
Option 3 ID : 264330316403
Option 4 ID : 264330316402
Status : Answered
Chosen Option : 1

Q.20 Select the option which when placed in the blank space of the given figure will complete the pattern.

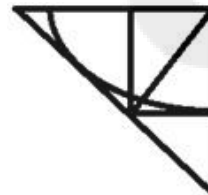


Ans

✗ 1.



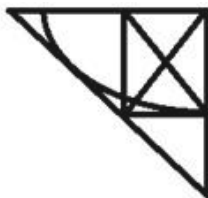
✓ 2.



✗ 3.



✗ 4.



Question ID : 264330112984

Option 1 ID : 264330444024

Option 2 ID : 264330444021

Option 3 ID : 264330444023

Option 4 ID : 264330444022

Status : Answered

Chosen Option : 2

Q.21 Two statements are given followed by two conclusions numbered I and II. Assuming the statements to be true, even if they seem to be at variance with commonly known facts, decide which of the conclusions logically follow(s) from the statements.

Statements:

Some camels are donkeys.

Some donkeys are cows.

Conclusions:

I. Some cows are camels.

II. Some donkeys are camels.

- Ans
- 1. Only conclusion I follows
 - 2. Both conclusions I and II follow
 - 3. Only conclusion II follows
 - 4. Neither conclusion I nor II follows

Question ID : 26433068874

Option 1 ID : 264330270008

Option 2 ID : 264330270010

Option 3 ID : 264330270009

Option 4 ID : 264330270011

Status : Answered

Chosen Option : 3

Q.22 Select the figure that will replace the question mark (?) in the following figure series.



Ans

- 1.
- 2.
- 3.
- 4.

Question ID : 264330112028

Option 1 ID : 264330440200

Option 2 ID : 264330440198

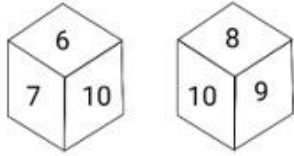
Option 3 ID : 264330440199

Option 4 ID : 264330440197

Status : Answered

Chosen Option : 2

Q.23 Six numbers, 5, 6, 7, 8, 9 and 10, are written on the different faces of a dice. Two positions of this dice are shown in the given figure. Find the number on the face opposite to 5.



Ans 1. 10

2. 6

3. 7

4. 9

Question ID : 264330116607

Option 1 ID : 264330458514

Option 2 ID : 264330458513

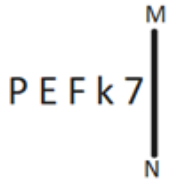
Option 3 ID : 264330458516

Option 4 ID : 264330458515

Status : Answered

Chosen Option : 1

Q.24 Select the correct mirror image of the given figure when the mirror is placed at MN as shown below.



Ans 1. P E F K 7

2. P E F K 7

3. P E F K 7

4. P E F K 7

Question ID : 264330166653

Option 1 ID : 264330653651

Option 2 ID : 264330653653

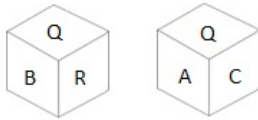
Option 3 ID : 264330653652

Option 4 ID : 264330653654

Status : Answered

Chosen Option : 2

Q.25 Six letters A, B, C, P, Q and R are written on different faces of a dice. Two positions of this dice are shown in the figure. Find the letter on the face opposite to A.



Ans 1. B

2. C

3. P

4. R

Question ID : 264330109203

Option 1 ID : 264330429090

Option 2 ID : 264330429092

Option 3 ID : 264330429091

Option 4 ID : 264330429089

Status : Answered

Chosen Option : 1

Section : Numerical Ability

Q.1 If a man walks at five-sixth of his usual speed from his home towards his office, he is 20 minutes late. Find the usual time (in minutes) to cover the distance between his home and his office.

Ans 1. 90

2. 105

3. 100

4. 120

Question ID : 264330119427

Option 1 ID : 264330467997

Option 2 ID : 264330467998

Option 3 ID : 264330467995

Option 4 ID : 264330467996

Status : Answered

Chosen Option : 3

Q.2 Simplify $47\frac{37}{50} \times 4\frac{1}{6} \times 24$.

Ans 1. 4782.0

2. 4774.0

3. 4790.0

4. 4762.0

Question ID : 264330111442

Option 1 ID : 264330437853

Option 2 ID : 264330437855

Option 3 ID : 264330437854

Option 4 ID : 264330437856

Status : Answered

Chosen Option : 2

Q.3 A alone can build a house in 16 days, but B alone can build it in 12 days. A and B work on alternate days. If A works on the first day, the house will be built in how many days?

- Ans
- ✓ 1. $13\frac{3}{4}$
 - ✗ 2. $11\frac{3}{4}$
 - ✗ 3. $10\frac{3}{4}$
 - ✗ 4. $15\frac{3}{4}$

Question ID : 264330103678

Option 1 ID : 264330407017

Option 2 ID : 264330407018

Option 3 ID : 264330407020

Option 4 ID : 264330407019

Status : Answered

Chosen Option : 1

Q.4 A shopkeeper purchased 12 dozen eggs at the rate of ₹60 per dozen. He sold the eggs at ₹6 per piece. What was his profit percentage?

- Ans
- ✗ 1. 25%
 - ✗ 2. 15%
 - ✓ 3. 20%
 - ✗ 4. 10%

Question ID : 264330104175

Option 1 ID : 264330409004

Option 2 ID : 264330409002

Option 3 ID : 264330409003

Option 4 ID : 264330409001

Status : Answered

Chosen Option : 3

Q.5 An isosceles right-angled triangle has hypotenuse length as 10 units. What is the area of the triangle (in square units)?

- Ans
- ✗ 1. $50\sqrt{2}$
 - ✓ 2. 25
 - ✗ 3. 50
 - ✗ 4. $25\sqrt{2}$

Question ID : 264330126152

Option 1 ID : 264330494283

Option 2 ID : 264330494281

Option 3 ID : 264330494280

Option 4 ID : 264330494282

Status : Answered

Chosen Option : 3

Q.6 किसी संख्या में 18 जोड़ने पर प्राप्त संख्या मूल संख्या की $122\frac{1}{2}\%$ हो जाती है। नई संख्या ज्ञात करें।

- Ans
- 1. 80
 - 2. 82
 - 3. 98
 - 4. 100

Question ID : 264330119506
Option 1 ID : 264330468308
Option 2 ID : 264330468309
Option 3 ID : 264330468310
Option 4 ID : 264330468307
Status : Answered
Chosen Option : 1

Q.7 निम्नलिखित में से किस संख्या समूह में सबसे कम अभाज्य संख्याएँ हैं?

- Ans
- 1. 30 से 49 तक
 - 2. 40 से 60 तक
 - 3. 21 से 40 तक
 - 4. 60 से 80 तक

Question ID : 264330105976
Option 1 ID : 264330416206
Option 2 ID : 264330416207
Option 3 ID : 264330416205
Option 4 ID : 264330416208
Status : Answered
Chosen Option : 3

Q.8 The value of a machine, purchased 3 years ago, depreciates at the annual rate of 15%. If its present value is ₹51,20,000, find its value after 4 years.

- Ans
- 1. ₹26,72,672
 - 2. ₹27,62,267
 - 3. ₹27,76,622
 - 4. ₹26,67,722

Question ID : 264330104318
Option 1 ID : 264330409573
Option 2 ID : 264330409576
Option 3 ID : 264330409574
Option 4 ID : 264330409575
Status : Answered
Chosen Option : 1

Q.9 Three solid cubes of sides 3 cm, 4 cm and 5 cm are melted to form a new solid cube.
Find the surface area (in cm^2) of the cube so formed.

- Ans
- 1. 343
 - 2. 125
 - 3. 216
 - 4. 144

Question ID : 264330112444
Option 1 ID : 264330441864
Option 2 ID : 264330441862
Option 3 ID : 264330441863
Option 4 ID : 264330441861
Status : Answered
Chosen Option : 3

Q.10 An article is marked at a price which gives a profit of 20%. After allowing a certain discount, the profit reduces to 10%. The discount percentage is:

- Ans
- 1. $8\frac{1}{3}\%$
 - 2. $8\frac{2}{3}\%$
 - 3. $7\frac{2}{3}\%$
 - 4. $7\frac{1}{3}\%$

Question ID : 264330111466
Option 1 ID : 264330437952
Option 2 ID : 264330437951
Option 3 ID : 264330437950
Option 4 ID : 264330437949
Status : Answered
Chosen Option : 1

Q.11 The ratio of two numbers is 5:6. If their HCF is 8, what is the LCM of these two numbers?

- Ans
- 1. 480
 - 2. 120
 - 3. 240
 - 4. 360

Question ID : 264330103917
Option 1 ID : 264330407969
Option 2 ID : 264330407971
Option 3 ID : 264330407970
Option 4 ID : 264330407972
Status : Answered
Chosen Option : 3

Q.12 A sum of ₹18,910 is divided among Arjun, Raima and Sohan such that Arjun receives 20% less than Raima, while Sohan receives 25% more than Raima's share. What is the share (in ₹) of Sohan?

- Ans 1. 7,750
 2. 7,700
 3. 8,470
 4. 8,750

Question ID : 264330129994
Option 1 ID : 264330509208
Option 2 ID : 264330509207
Option 3 ID : 264330509210
Option 4 ID : 264330509209
Status : Answered
Chosen Option : 1

Q.13 The ratio of P's salary to Q's salary is 2 : 3. The ratio of Q's salary to R's salary is 4 : 5. What will be the ratio of P's salary to R's salary?

- Ans 1. 3 : 5
 2. 12 : 15
 3. 8 : 12
 4. 8 : 15

Question ID : 264330126578
Option 1 ID : 264330495984
Option 2 ID : 264330495987
Option 3 ID : 264330495986
Option 4 ID : 264330495985
Status : Answered
Chosen Option : 4

Q.14 In how much time will a sum of money double itself at a rate of simple interest of 5% per annum?

- Ans 1. 12 years
 2. 10 years
 3. 20 years
 4. 18 years

Question ID : 264330182519
Option 1 ID : 264330715869
Option 2 ID : 264330715867
Option 3 ID : 264330715870
Option 4 ID : 264330715868
Status : Answered
Chosen Option : 3

Q.15 The average of a, b and c is 35 and the average of a, c and d is 40. If d = 25, then find the value of b.

- Ans
- 1. 38
 - 2. 10
 - 3. 15
 - 4. 22

Question ID : 264330130064
Option 1 ID : 264330509490
Option 2 ID : 264330509487
Option 3 ID : 264330509488
Option 4 ID : 264330509489
Status : Answered
Chosen Option : 2

Section : Computer Proficiency

Q.1 Which of the following functions in MS Excel 365, generates a real number greater than 0 and is really simple and traditionally used for statistical analysis, cryptography, gaming, gambling, and probability theory, among dozens of other things?

- Ans
- 1. RAND
 - 2. AVERAGE
 - 3. SUM
 - 4. VLOOKUP

Question ID : 264330180407
Option 1 ID : 264330707597
Option 2 ID : 264330707596
Option 3 ID : 264330707595
Option 4 ID : 264330707598
Status : Answered
Chosen Option : 4

Q.2 माइक्रोसॉफ्ट वर्ड 365 (Microsoft Word 365) में टेक्स्ट पेस्ट करते समय, यदि गंतव्य में पहले से ही टेक्स्ट मौजूद है तो डिफ़ॉल्ट व्यवहार क्या होता है?

- Ans
- 1. पेस्ट किए गए टेक्स्ट के साथ एक नया डाक्यूमेंट बनाना।
 - 2. मौजूदा टेक्स्ट ओवरराइट हो जाता है।
 - 3. टेक्स्ट को ओवरराइट करने या मर्ज करने के बीच चयन करने के लिए उपयोगकर्ता को संकेत (Prompt) देना।
 - 4. पेस्ट किया गया टेक्स्ट मौजूदा टेक्स्ट के साथ मर्ज हो जाता है।

Question ID : 264330177681
Option 1 ID : 264330696841
Option 2 ID : 264330696839
Option 3 ID : 264330696842
Option 4 ID : 264330696840
Status : Answered
Chosen Option : 4

Q.3 In Microsoft Word 365, on which page is the header or the footer displayed by default?

- Ans
- 1. On first page
 - 2. On every page
 - 3. On last page
 - 4. On middle page

Question ID : 264330182068
Option 1 ID : 264330714111
Option 2 ID : 264330714113
Option 3 ID : 264330714112
Option 4 ID : 264330714114
Status : Answered
Chosen Option : 1

Q.4 Which of the following shortcut keys is used to justify the text in MS Word 365?

- Ans
- 1. Ctrl + B
 - 2. Ctrl + J
 - 3. Ctrl + I
 - 4. Ctrl + U

Question ID : 264330180428
Option 1 ID : 264330707680
Option 2 ID : 264330707679
Option 3 ID : 264330707681
Option 4 ID : 264330707682
Status : Answered
Chosen Option : 2

Q.5 What is the primary purpose of a word processing package like Microsoft Word 365?

- Ans
- 1. Creating spreadsheets
 - 2. Designing presentations
 - 3. Creating and editing documents
 - 4. Sending emails

Question ID : 264330180741
Option 1 ID : 264330708932
Option 2 ID : 264330708933
Option 3 ID : 264330708934
Option 4 ID : 264330708931
Status : Answered
Chosen Option : 3

Q.6 By default, what number of emails in Gmail can be sorted that a user recently received.

- Ans
- 1. 100
 - 2. 25
 - 3. 75
 - 4. 50

Question ID : 264330178094
Option 1 ID : 264330698442
Option 2 ID : 264330698439
Option 3 ID : 264330698441
Option 4 ID : 264330698440
Status : Answered
Chosen Option : 1

Q.7 In MS Excel _____ have a dollar sign (\$) in front of the row number and/or column letter.

- Ans 1. Both absolute reference and mixed reference
 2. Only mixed reference
 3. Only absolute reference
 4. Only relative reference

Question ID : 264330178253
Option 1 ID : 264330699070
Option 2 ID : 264330699069
Option 3 ID : 264330699067
Option 4 ID : 264330699068
Status : Answered
Chosen Option : 2

Q.8 Which of the following shortcut keys is used to get the Help Menu in MS-Word 365?

- Ans 1. F1
 2. Ctrl + F1
 3. Alt + F1
 4. Shift + F1

Question ID : 264330178291
Option 1 ID : 264330699222
Option 2 ID : 264330699219
Option 3 ID : 264330699221
Option 4 ID : 264330699220
Status : Answered
Chosen Option : 1

Q.9 Which of the following is the full form of GPRS?

- Ans 1. General Packet Radio Service
 2. General Packet Release Service
 3. General Protocol Radio Service
 4. Group Packet Radio Service

Question ID : 264330180393
Option 1 ID : 264330707540
Option 2 ID : 264330707542
Option 3 ID : 264330707541
Option 4 ID : 264330707539
Status : Answered
Chosen Option : 1

Q.10 एमएस एक्सेल 365 (MS Excel 365) में कोई फॉर्मूला शुरू करने के लिए निम्नलिखित में से किस प्रतीक का उपयोग किया जाता है?

- Ans 1. \$
 2. &
 3. *
 4. =

Question ID : 264330180822
Option 1 ID : 264330709254
Option 2 ID : 264330709251
Option 3 ID : 264330709253
Option 4 ID : 264330709252
Status : Answered
Chosen Option : 4