

## Constable Executive Male and Female in Delhi Police Examination 2023

Roll Number	
Candidate Name	
Venue Name	
Exam Date	21/11/2023
Exam Time	3:00 PM - 4:30 PM
Subject	Constable Executive Male and Female in Delhi Police Examination 2023

### Section : General Knowledge

**Q.1** Pandit Birju Maharaj, Padma Bhushan awardee, was a globally renowned dancer of which of the following gharanas of Kathak?

- Ans  1. Kalka-Bindadin  
 2. Raigarh  
 3. Janaki Prasad  
 4. Jaipur

Question ID : 26433071518  
Option 1 ID : 264330280498  
Option 2 ID : 264330280496  
Option 3 ID : 264330280499  
Option 4 ID : 264330280497  
Status : Answered  
Chosen Option : 4

**Q.2** In which of the following cases is a member of the State Legislature NOT required to vacate his/her seat?

- Ans  1. Disqualification  
 2. Double membership  
 3. Absence for a week without permission  
 4. Resignation

Question ID : 264330173544  
Option 1 ID : 264330680656  
Option 2 ID : 264330680655  
Option 3 ID : 264330680657  
Option 4 ID : 264330680658  
Status : Answered  
Chosen Option : 2

**Q.3** Name the monument constructed by Akbar in 1575 to celebrate his victory over Gujarat.

- Ans  1. Jama Masjid  
 2. Buland Darwaja  
 3. Sheikh Salim Chisti Dargah  
 4. Panch Mahal

Question ID : 264330113800  
Option 1 ID : 264330447286  
Option 2 ID : 264330447285  
Option 3 ID : 264330447287  
Option 4 ID : 264330447288  
Status : Marked For Review  
Chosen Option : 2

Q.4 What does 'E' stand for in SEBI?

- Ans
- 1. Electronic
  - 2. Electronically
  - 3. Exchange
  - 4. Energy

Question ID : 26433059325  
Option 1 ID : 264330232177  
Option 2 ID : 264330232179  
Option 3 ID : 264330232176  
Option 4 ID : 264330232178  
Status : Answered  
Chosen Option : 3

Q.5 Pandit Bhimsen Joshi is associated with the \_\_\_\_\_.

- Ans
- 1. Banaras gharana
  - 2. Patiala gharana
  - 3. Agra gharana
  - 4. Kirana gharana

Question ID : 264330116418  
Option 1 ID : 264330457759  
Option 2 ID : 264330457757  
Option 3 ID : 264330457758  
Option 4 ID : 264330457760  
Status : Marked For Review  
Chosen Option : 2

Q.6 The 'Kachin Manaw Festival' is associated with which of the following countries?

- Ans
- 1. Maldives
  - 2. Myanmar
  - 3. Sri Lanka
  - 4. Pakistan

Question ID : 264330119829  
Option 1 ID : 264330469594  
Option 2 ID : 264330469591  
Option 3 ID : 264330469592  
Option 4 ID : 264330469593  
Status : Marked For Review  
Chosen Option : 2

Q.7 Which of the following is NOT a primary objective of the Special Economic Zone?

- Ans
- 1. Development of infrastructure
  - 2. Providing employment
  - 3. Promoting export
  - 4. Promoting clean technology

Question ID : 264330109407  
Option 1 ID : 264330429908  
Option 2 ID : 264330429906  
Option 3 ID : 264330429905  
Option 4 ID : 264330429907  
Status : Answered  
Chosen Option : 2

Q.8 Gurmeet Bawa, who received the Padma Bhushan posthumously in 2022, hails from which of the following states?

- Ans
- 1. Uttarakhand
  - 2. Maharashtra
  - 3. Punjab
  - 4. Haryana

Question ID : 264330111953  
Option 1 ID : 264330439900  
Option 2 ID : 264330439899  
Option 3 ID : 264330439898  
Option 4 ID : 264330439897  
Status : Answered  
Chosen Option : 3

Q.9 Which weather phenomenon is defined as the movement of large-scale winds around a central region of high atmospheric pressure?

- Ans
- 1. Tropical cyclone
  - 2. Extratropical cyclone
  - 3. Polar cyclone
  - 4. Anticyclone

Question ID : 264330131011  
Option 1 ID : 264330513155  
Option 2 ID : 264330513157  
Option 3 ID : 264330513158  
Option 4 ID : 264330513156  
Status : Answered  
Chosen Option : 3

Q.10 Which of the following Acts created a unified administration system for India?

- Ans
- 1. Pitt's India Act of 1784
  - 2. Regulating Act of 1793
  - 3. Regulating Act of 1813
  - 4. Regulating Act of 1773

Question ID : 264330114852  
Option 1 ID : 264330451495  
Option 2 ID : 264330451494  
Option 3 ID : 264330451496  
Option 4 ID : 264330451493  
Status : Not Answered  
Chosen Option : --

Q.11 Meenakshisundaram Pillai, a dance guru from the village of Pandanallur, was famous for which of the following dance forms?

- Ans
- 1. Mohiniyattam
  - 2. Odissi
  - 3. Bharatnatyam
  - 4. Kathak

Question ID : 264330110442  
Option 1 ID : 264330434048  
Option 2 ID : 264330434046  
Option 3 ID : 264330434045  
Option 4 ID : 264330434047  
Status : Answered  
Chosen Option : 1

Q.12 Which of the following forts is located in Goa?

- Ans
- 1. Jaigarh Fort
  - 2. Bekal Fort
  - 3. Fort Aguada
  - 4. Chandragiri Fort

Question ID : 264330109645  
Option 1 ID : 264330430857  
Option 2 ID : 264330430859  
Option 3 ID : 264330430860  
Option 4 ID : 264330430858  
Status : Answered  
Chosen Option : 3

Q.13 'Lone Fox Dancing' is an autobiography by which of the following novelists?

- Ans
- 1. Arvind Adiga
  - 2. Amitav Ghosh
  - 3. Ruskin Bond
  - 4. Khushwant Singh

Question ID : 26433055360  
Option 1 ID : 264330216426  
Option 2 ID : 264330216427  
Option 3 ID : 264330216425  
Option 4 ID : 264330216424  
Status : Answered  
Chosen Option : 1

Q.14 Which of the following is needed for the formation of haemoglobin?

- Ans
- 1. Cu
  - 2. P
  - 3. Fe
  - 4. Ca

Question ID : 264330120065  
Option 1 ID : 264330470517  
Option 2 ID : 264330470516  
Option 3 ID : 264330470515  
Option 4 ID : 264330470518  
Status : Answered  
Chosen Option : 3

Q.15 In which of the following years did the badminton player PV Sindhu win the Olympics Medal?

- Ans
- 1. 2004 and 2008
  - 2. 2008 and 2012
  - 3. 2012 and 2020
  - 4. 2016 and 2020

Question ID : 264330118462  
Option 1 ID : 264330465250  
Option 2 ID : 264330465252  
Option 3 ID : 264330465251  
Option 4 ID : 264330465249  
Status : Answered  
Chosen Option : 4

Q.16 Article 32 of the Constitution of India deals with \_\_\_\_\_ .

- Ans
- 1. the Right to Freedom and Religion
  - 2. the Right to Constitutional Remedies
  - 3. Cultural and Educational Rights
  - 4. the Right to Freedom

Question ID : 264330116393  
Option 1 ID : 264330457657  
Option 2 ID : 264330457660  
Option 3 ID : 264330457659  
Option 4 ID : 264330457658  
Status : Answered  
Chosen Option : 2

Q.17 Where was the Prarthana Samaj established in the 1860s?

- Ans
- 1. Maharashtra
  - 2. Bengal
  - 3. United Provinces
  - 4. Madras

Question ID : 264330119027  
Option 1 ID : 264330466763  
Option 2 ID : 264330466764  
Option 3 ID : 264330466765  
Option 4 ID : 264330466766  
Status : Answered  
Chosen Option : 1

Q.18 Football 2027 Asian Cup will be hosted by \_\_\_\_\_ .

- Ans
- 1. Bangladesh
  - 2. India
  - 3. Saudi Arabia
  - 4. Japan

Question ID : 264330132538  
Option 1 ID : 264330519250  
Option 2 ID : 264330519248  
Option 3 ID : 264330519247  
Option 4 ID : 264330519249  
Status : Answered  
Chosen Option : 2

Q.19 Where did Dadabhai Naoroji establish the East India Company Association?

- Ans
- 1. Paris
  - 2. Delhi
  - 3. Lucknow
  - 4. London

Question ID : 264330114047  
Option 1 ID : 264330448276  
Option 2 ID : 264330448273  
Option 3 ID : 264330448275  
Option 4 ID : 264330448274  
Status : Marked For Review  
Chosen Option : 4

**Q.20** Which of the following Articles of the Constitution of India lays down that it is our duty to defend the country and render national service when called upon to do so?

- Ans  1. Article 51 A (d)  
 2. Article 51 A (g)  
 3. Article 51 A (e)  
 4. Article 51 A (f)

Question ID : 264330110568  
Option 1 ID : 264330434549  
Option 2 ID : 264330434552  
Option 3 ID : 264330434550  
Option 4 ID : 264330434551  
Status : Answered  
Chosen Option : 1

**Q.21** With reference to electric charges, identify the INCORRECT statement.

- Ans  1. Lightning conductor can be used to predict lightning strike.  
 2. The electrical charges produced by rubbing are called static charges.  
 3. Lightning conductor can protect a building from lightning.  
 4. Like charges repel and unlike charges attract each other.

Question ID : 264330182933  
Option 1 ID : 264330717467  
Option 2 ID : 264330717464  
Option 3 ID : 264330717466  
Option 4 ID : 264330717465  
Status : Answered  
Chosen Option : 1

**Q.22** According to India Brand Equity Foundation (IBEF), India has the \_\_\_\_\_ largest road network in the world (as of August 2022).

- Ans  1. first  
 2. fourth  
 3. second  
 4. third

Question ID : 264330119884  
Option 1 ID : 264330469813  
Option 2 ID : 264330469814  
Option 3 ID : 264330469811  
Option 4 ID : 264330469812  
Status : Answered  
Chosen Option : 4

**Q.23** Chandertal, Renuka and Pong Dam are the three Ramsar wetland sites of which state?

- Ans  1. Karnataka  
 2. Assam  
 3. Gujarat  
 4. Himachal Pradesh

Question ID : 264330131025  
Option 1 ID : 264330513214  
Option 2 ID : 264330513213  
Option 3 ID : 264330513212  
Option 4 ID : 264330513211  
Status : Answered  
Chosen Option : 4

Q.24 According to the Agricultural and Processed food products Export Development Authority (APEDA) 2021-2022, which state of India has the first rank in mango production?

- Ans  1. Bihar  
 2. Uttar Pradesh  
 3. Karnataka  
 4. Maharashtra

Question ID : 264330132710  
Option 1 ID : 264330519938  
Option 2 ID : 264330519935  
Option 3 ID : 264330519937  
Option 4 ID : 264330519936  
Status : Answered  
Chosen Option : 4

Q.25 According to the census of India 2011, which state has the second highest density of population per square kilometre?

- Ans  1. Bihar  
 2. Uttar Pradesh  
 3. Andhra Pradesh  
 4. West Bengal

Question ID : 264330167030  
Option 1 ID : 264330655126  
Option 2 ID : 264330655124  
Option 3 ID : 264330655123  
Option 4 ID : 264330655125  
Status : Answered  
Chosen Option : 4

Q.26 Which of the following is NOT correct about agriculture industry?

- Ans  1. Green revolution enabled India to achieve self-sufficiency in food grain production.  
 2. Green revolution started the usage of HYV seeds.  
 3. Green revolution resulted in the improvement in oilseeds.  
 4. Green revolution led to the introduction of new technology.

Question ID : 26433082167  
Option 1 ID : 264330322504  
Option 2 ID : 264330322503  
Option 3 ID : 264330322501  
Option 4 ID : 264330322502  
Status : Answered  
Chosen Option : 3

Q.27 The post of Vice President has been taken from the Constitution of \_\_\_\_\_.

- Ans  1. Australia  
 2. Germany  
 3. The UK  
 4. The US

Question ID : 264330110819  
Option 1 ID : 264330435556  
Option 2 ID : 264330435555  
Option 3 ID : 264330435554  
Option 4 ID : 264330435553  
Status : Answered  
Chosen Option : 3

Q.28 When did Dipa Karmakar win the Major Dhyan Chand Khel Ratna Award in Gymnastics?

- Ans  1. 2016  
 2. 2017  
 3. 2018  
 4. 2015

Question ID : 264330176745  
Option 1 ID : 264330693196  
Option 2 ID : 264330693197  
Option 3 ID : 264330693198  
Option 4 ID : 264330693195  
Status : Marked For Review  
Chosen Option : 3

Q.29 The Harike Barrage has been constructed at the confluence of which two rivers?

- Ans  1. Beas and Sutlej  
 2. Ganga and Yamuna  
 3. Luni and Subarnarekha  
 4. Mahanadi and Damodar

Question ID : 264330179021  
Option 1 ID : 264330702087  
Option 2 ID : 264330702089  
Option 3 ID : 264330702088  
Option 4 ID : 264330702090  
Status : Answered  
Chosen Option : 2

Q.30 Fa-Hien visited India during the reign of which of the following Gupta Kings?

- Ans  1. Chandragupta II  
 2. Bhanugupta  
 3. Samudragupta  
 4. Budhagupta

Question ID : 264330171668  
Option 1 ID : 264330673278  
Option 2 ID : 264330673277  
Option 3 ID : 264330673275  
Option 4 ID : 264330673276  
Status : Answered  
Chosen Option : 3

Q.31 The study of cell structure is called \_\_\_\_\_.

- Ans  1. Fisheries  
 2. Anatomy  
 3. cytology  
 4. Morphology

Question ID : 264330117601  
Option 1 ID : 264330462431  
Option 2 ID : 264330462430  
Option 3 ID : 264330462429  
Option 4 ID : 264330462432  
Status : Answered  
Chosen Option : 3

**Q.32 Which Article of the Constitution of India empowers the Indian President to constitute a GST Council by an order?**

- Ans  1. Article 279-A  
 2. Article 277-A  
 3. Article 280-A  
 4. Article 278-A

Question ID : 264330130461  
Option 1 ID : 264330510957  
Option 2 ID : 264330510955  
Option 3 ID : 264330510958  
Option 4 ID : 264330510956  
Status : Answered  
Chosen Option : 1

**Q.33 Kolayat festival is celebrated in which Indian state?**

- Ans  1. Bihar  
 2. Rajasthan  
 3. Jharkhand  
 4. Madhya Pradesh

Question ID : 264330109609  
Option 1 ID : 264330430716  
Option 2 ID : 264330430714  
Option 3 ID : 264330430715  
Option 4 ID : 264330430713  
Status : Answered  
Chosen Option : 1

**Q.34 In which of the following Articles of India is it mentioned that "it shall be the duty of every citizen of India to cherish and follow the noble ideals which inspired our national struggle for freedom"?**

- Ans  1. 51A (b)  
 2. 51A (f)  
 3. 51A (a)  
 4. 51A (i)

Question ID : 264330133060  
Option 1 ID : 264330521294  
Option 2 ID : 264330521293  
Option 3 ID : 264330521291  
Option 4 ID : 264330521292  
Status : Answered  
Chosen Option : 1

**Q.35** Guru Vempati Chinna Satyam has gained global recognition for the spread of which of the following classical dance forms of India?

- Ans  1. Bharatanatyam  
 2. Kuchipudi  
 3. Sattriya  
 4. Kathak

Question ID : 264330112881  
Option 1 ID : 264330443610  
Option 2 ID : 264330443609  
Option 3 ID : 264330443612  
Option 4 ID : 264330443611  
Status : Answered  
Chosen Option : 1

**Q.36** Who among the following is the author of the book Kitab-ul-Hind?

- Ans  1. Al Masudi  
 2. Al-Biruni  
 3. Shihabuddin al-Umari  
 4. Ibn Battuta

Question ID : 264330120422  
Option 1 ID : 264330471941  
Option 2 ID : 264330471942  
Option 3 ID : 264330471939  
Option 4 ID : 264330471940  
Status : Answered  
Chosen Option : 2

**Q.37** Kelucharan Mohapatra has been awarded the Padma Bhushan for which form of classical dance?

- Ans  1. Odissi  
 2. Bharatanatyam  
 3. Kuchipudi  
 4. Kathak

Question ID : 26433074873  
Option 1 ID : 264330293582  
Option 2 ID : 264330293583  
Option 3 ID : 264330293580  
Option 4 ID : 264330293581  
Status : Answered  
Chosen Option : 1

**Q.38** Who among the following Indian reformers is credited with the campaign for widow remarriage and on whose suggestion a law was passed by the British officials in 1856, permitting the same?

- Ans
- 1. Ayyankali
  - 2. Ishwar Chandra Vidyasagar
  - 3. Mumtaz Ali
  - 4. Savitri Bai Phule

Question ID : 264330119021  
Option 1 ID : 264330466740  
Option 2 ID : 264330466741  
Option 3 ID : 264330466742  
Option 4 ID : 264330466739  
Status : Answered  
Chosen Option : 2

**Q.39** Identify the correct statements about Independence Day and Republic Day of India.  
i) Independence Day is celebrated on 15th August since 1947.  
ii) Republic Day is celebrated on 26th January since 1950.  
iii) Independence Day is celebrated as Independence from British rule.  
iv) Republic day is celebrated since the Constituent Assembly of India adopted the Constitution of India in 1949.

- Ans
- 1. i, iii and iv
  - 2. ii, iii and iv
  - 3. i, ii and iii
  - 4. i, ii and iv

Question ID : 264330118266  
Option 1 ID : 264330464880  
Option 2 ID : 264330464879  
Option 3 ID : 264330464881  
Option 4 ID : 264330464882  
Status : Answered  
Chosen Option : 3

**Q.40** The 11th Fundamental Duty was added to the Indian Constitution by the \_\_\_\_\_ Constitutional Amendment Act.

- Ans
- 1. 87<sup>th</sup>
  - 2. 84<sup>th</sup>
  - 3. 88<sup>th</sup>
  - 4. 86<sup>th</sup>

Question ID : 264330114749  
Option 1 ID : 264330451083  
Option 2 ID : 264330451082  
Option 3 ID : 264330451084  
Option 4 ID : 264330451081  
Status : Answered  
Chosen Option : 4

Q.41 Who converted Menander to Buddhism?

- Ans
- 1. Bhadrabahu
  - 2. Buddhaghosh
  - 3. Nagasena
  - 4. Asvaghosha

Question ID : 264330134229  
Option 1 ID : 264330525911  
Option 2 ID : 264330525914  
Option 3 ID : 264330525912  
Option 4 ID : 264330525913  
Status : Answered  
Chosen Option : 3

Q.42 Which of the following is NOT one of the problems with microfinance?

- Ans
- 1. Skewed growth across the country
  - 2. Lack of transparency and absence of governance structure
  - 3. Operational, attitudinal and policy-level constraints
  - 4. Excess flow of funds towards microfinance

Question ID : 264330112457  
Option 1 ID : 264330441916  
Option 2 ID : 264330441913  
Option 3 ID : 264330441914  
Option 4 ID : 264330441915  
Status : Answered  
Chosen Option : 4

Q.43 When were female participants formally admitted to the Olympic Games?

- Ans
- 1. Paris, 1900
  - 2. London, 1908
  - 3. Helsinki, 1952
  - 4. Berlin, 1936

Question ID : 264330110370  
Option 1 ID : 264330433760  
Option 2 ID : 264330433759  
Option 3 ID : 264330433758  
Option 4 ID : 264330433757  
Status : Answered  
Chosen Option : 2

Q.44 Which of the following is NOT true regarding the antioxidants?

- Ans
- 1. It prevents the damage of cellular functions.
  - 2. It helps in the repair of cellular functions.
  - 3. Animal products are the chief source of antioxidants.
  - 4. It delays the ageing process.

Question ID : 264330177326  
Option 1 ID : 264330695497  
Option 2 ID : 264330695495  
Option 3 ID : 264330695498  
Option 4 ID : 264330695496  
Status : Marked For Review  
Chosen Option : 3

Q.45 The city of Hampi was named after the local mother goddess called \_\_\_\_\_ .

- Ans
- 1. Hampini
  - 2. Hidimba
  - 3. Hampidevi
  - 4. Pampadevi

Question ID : 264330118977  
Option 1 ID : 264330466565  
Option 2 ID : 264330466566  
Option 3 ID : 264330466563  
Option 4 ID : 264330466564  
Status : Answered  
Chosen Option : 2

Q.46 In foreign technology agreements, automatic permission is provided in high priority industry up to a sum of \_\_\_\_\_ .

- Ans
- 1. ₹1 crore
  - 2. ₹2.5 crore
  - 3. ₹2 crores
  - 4. ₹1.5 crore

Question ID : 264330118254  
Option 1 ID : 264330464831  
Option 2 ID : 264330464834  
Option 3 ID : 264330464833  
Option 4 ID : 264330464832  
Status : Answered  
Chosen Option : 4

Q.47 Who pioneered the concept of microfinance?

- Ans
- 1. Medha Patkar
  - 2. Ela Bhatt
  - 3. Mohammad Yunus
  - 4. Anna Hazare

Question ID : 264330112453  
Option 1 ID : 264330441900  
Option 2 ID : 264330441897  
Option 3 ID : 264330441898  
Option 4 ID : 264330441899  
Status : Marked For Review  
Chosen Option : 3

Q.48 According to the Census of India 2011, which state recorded the highest sex ratio?

- Ans
- 1. Karnataka
  - 2. Tamil Nadu
  - 3. Kerala
  - 4. Andhra Pradesh

Question ID : 264330182971  
Option 1 ID : 264330717619  
Option 2 ID : 264330717616  
Option 3 ID : 264330717617  
Option 4 ID : 264330717618  
Status : Answered  
Chosen Option : 3

Q.49 'Both Feet on the Ground' is an autobiography of which of the following players?

- Ans
- 1. Cristiano Ronaldo
  - 2. Lionel Messi
  - 3. Bobby Moore
  - 4. David Beckham

Question ID : 26433055361  
Option 1 ID : 264330216430  
Option 2 ID : 264330216429  
Option 3 ID : 264330216428  
Option 4 ID : 264330216431  
Status : Answered  
Chosen Option : 3

Q.50 Which of the following was NOT a reason for emphasizing industrial development in the five year plans?

- Ans
- 1. Industry doesn't require high investment
  - 2. Industry promotes modernisation
  - 3. Industry promotes overall prosperity
  - 4. Industry provides more stable employment than agriculture

Question ID : 264330117748  
Option 1 ID : 264330462810  
Option 2 ID : 264330462808  
Option 3 ID : 264330462809  
Option 4 ID : 264330462807  
Status : Answered  
Chosen Option : 1

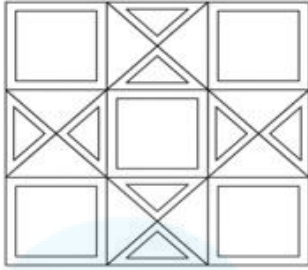
Section : Reasoning

Q.1 Select the correct combination of mathematical signs to sequentially replace the \* signs and to balance the given equation.  
 $200 * 13 * 9 * 200 * 25 = 75$

- Ans
- 1. +, x, -, +
  - 2. +, -, x, +
  - 3. x, +, +, -
  - 4. -, x, -, ÷

Question ID : 26433092503  
Option 1 ID : 264330363302  
Option 2 ID : 264330363301  
Option 3 ID : 264330363303  
Option 4 ID : 264330363304  
Status : Answered  
Chosen Option : 4

Q.2 How many triangles are there in the given figure?



- Ans
- 1. 24
  - 2. 40
  - 3. 52
  - 4. 44

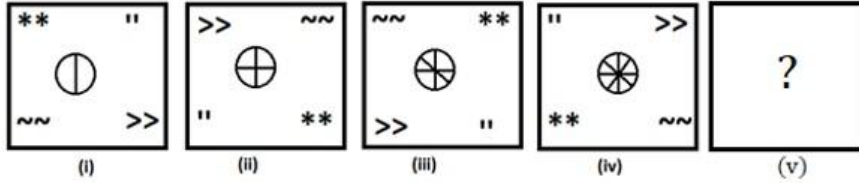
Question ID : 26433091709  
Option 1 ID : 264330360204  
Option 2 ID : 264330360202  
Option 3 ID : 264330360201  
Option 4 ID : 264330360203  
Status : Answered  
Chosen Option : 3

Q.3 Which of the following terms will replace the question mark (?) in the given series?  
XUEJ, TRIM, ?, LLQS, HIUV

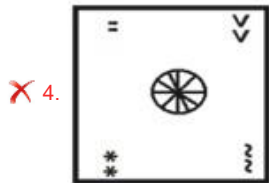

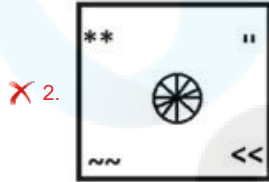
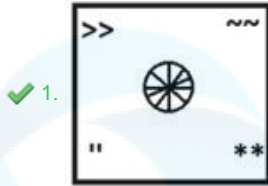
- Ans
- 1. POMP
  - 2. QONN
  - 3. QONO
  - 4. PPMO

Question ID : 264330102176  
Option 1 ID : 264330401171  
Option 2 ID : 264330401169  
Option 3 ID : 264330401172  
Option 4 ID : 264330401170  
Status : Answered  
Chosen Option : 1

Q.4 Select the figure from among the given options that can replace the question mark (?) in the following series.



Ans



Question ID : 264330106552

Option 1 ID : 264330418510

Option 2 ID : 264330418511

Option 3 ID : 264330418512

Option 4 ID : 264330418509

Status : Answered

Chosen Option : 1

Q.5 Two statements are given followed by two conclusions numbered I and II. Assuming the statements to be true, even if they seem to be at variance with commonly known facts, decide which of the conclusions logically follow(s) from the statements.

Statements:

All cakes are candies.

No pastry is a candy.

Conclusions:

I. All pastries are cakes.

II. Some cakes are pastries.

Ans ✓ 1. Neither conclusion I nor II follows

✗ 2. Both conclusions I and II follow

✗ 3. Only conclusion I follows

✗ 4. Only conclusion II follows

Question ID : 26433045343

Option 1 ID : 264330177810

Option 2 ID : 264330177809

Option 3 ID : 264330177807

Option 4 ID : 264330177808

Status : Answered

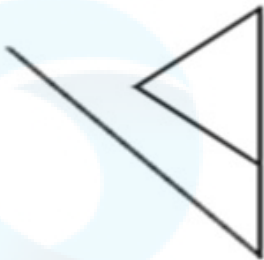
Chosen Option : 1

Q.6 Select the option figure which is embedded in the given figure. (Rotation is NOT allowed).




Ans

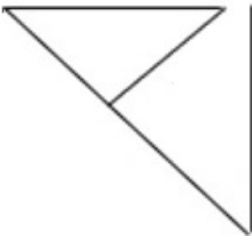
✗ 1.



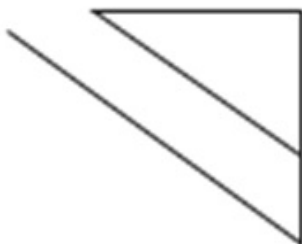
✗ 2.



✓ 3.



✗ 4.



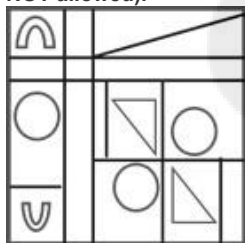
Question ID : 26433085531  
Option 1 ID : 264330335826  
Option 2 ID : 264330335828  
Option 3 ID : 264330335825  
Option 4 ID : 264330335827  
Status : Answered  
Chosen Option : 3

Q.7 Select the number from among the given options that can replace the question mark (?) in the following series.  
2, 4, 12, 48, ?, 1440

- Ans  1. 960  
 2. 240  
 3. 640  
 4. 480

Question ID : 264330111625  
 Option 1 ID : 264330438587  
 Option 2 ID : 264330438588  
 Option 3 ID : 264330438585  
 Option 4 ID : 264330438586  
 Status : Answered  
 Chosen Option : 2

Q.8 Select the option figure which is embedded in the given figure as its part (rotation is NOT allowed).



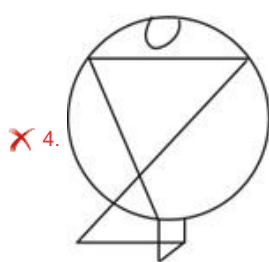
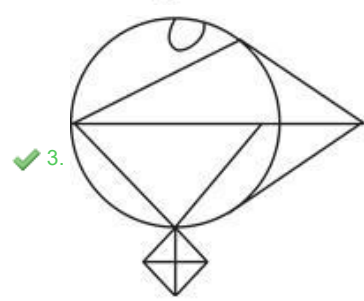
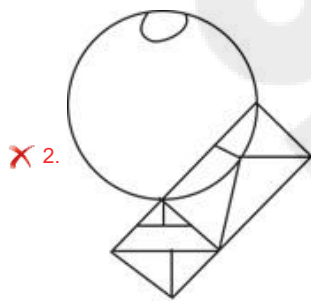
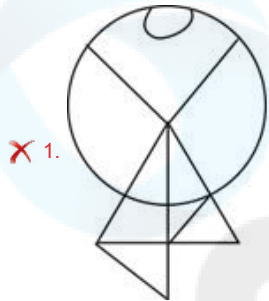
- Ans  1.   
 2.   
 3.   
 4.

Question ID : 264330116996  
 Option 1 ID : 264330460066  
 Option 2 ID : 264330460068  
 Option 3 ID : 264330460065  
 Option 4 ID : 264330460067  
 Status : Answered  
 Chosen Option : 1

Q.9 Select the option in which the given figure is embedded (rotation is NOT allowed).



Ans



Question ID : 264330114683

Option 1 ID : 264330450819

Option 2 ID : 264330450820

Option 3 ID : 264330450818

Option 4 ID : 264330450817

Status : Answered

Chosen Option : 3

**Q.10** Select the option that is related to the third term in the same way as the second term is related to the first term and the sixth term is related to the fifth term.  
8 : 2 :: 12 : ? :: 24 : 10

- Ans  1. 4  
 2. 2  
 3. 6  
 4. 8

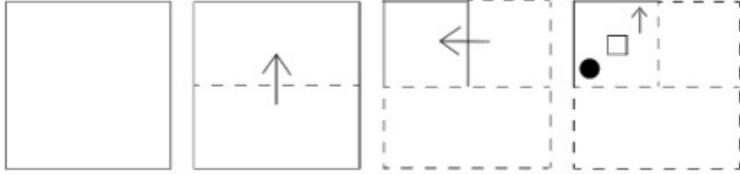
Question ID : 264330101055  
Option 1 ID : 264330396766  
Option 2 ID : 264330396768  
Option 3 ID : 264330396767  
Option 4 ID : 264330396765  
Status : Answered  
Chosen Option : 1

**Q.11** Q, R, S, T, U and V were six doctors sitting around a circular table, facing the centre. They were equidistant from each other. Q was to the immediate right of U. R was exactly in between V and T. S was to the immediate right of Q. T was second to the left of Q. Who among the following was sitting third to the right of U?

- Ans  1. T  
 2. R  
 3. S  
 4. V

Question ID : 26433087009  
Option 1 ID : 264330341680  
Option 2 ID : 264330341679  
Option 3 ID : 264330341678  
Option 4 ID : 264330341677  
Status : Answered  
Chosen Option : 4

Q.12 A paper is folded and cut as shown below. How will it appear when unfolded?



Ans

- ✗ 1.
- ✓ 2.
- ✗ 3.
- ✗ 4.

Question ID : 264330112989

Option 1 ID : 264330444041

Option 2 ID : 264330444042

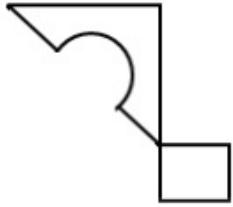
Option 3 ID : 264330444043

Option 4 ID : 264330444044

Status : Answered

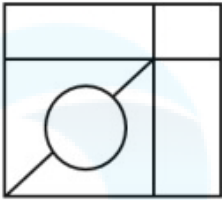
Chosen Option : 2

Q.13 Select the option in which the given figure is embedded (rotation is NOT allowed).

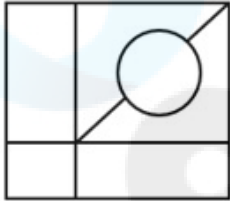


Ans

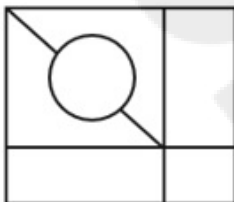
✗ 1.



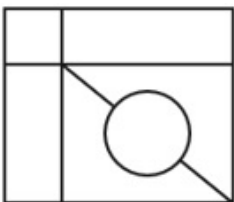
✗ 2.



✓ 3.



✗ 4.



Question ID : 264330106330

Option 1 ID : 264330417621

Option 2 ID : 264330417622

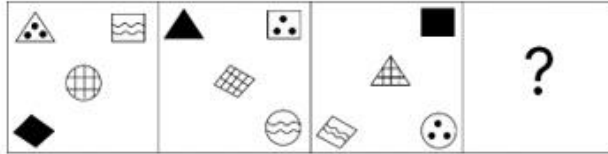
Option 3 ID : 264330417624

Option 4 ID : 264330417623

Status : Answered

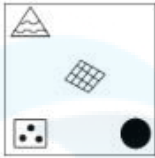
Chosen Option : 3

Q.14 Select the figure from the given options that can replace the question mark (?) in the following series.

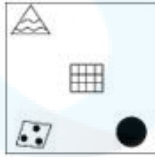


Ans

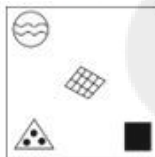
✗ 1.




✓ 2.



✗ 3.



✗ 4.



Question ID : 264330106164

Option 1 ID : 264330416960

Option 2 ID : 264330416959

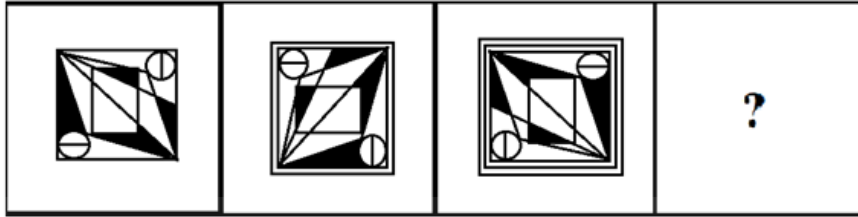
Option 3 ID : 264330416958

Option 4 ID : 264330416957

Status : Answered

Chosen Option : 2

Q.15 Select the figure that will come next in the following figure series.



Ans

✗ 1.



✓ 2.



✗ 3.



✗ 4.



Question ID : 264330132142

Option 1 ID : 264330517664

Option 2 ID : 264330517665

Option 3 ID : 264330517663

Option 4 ID : 264330517666

Status : Answered

Chosen Option : 2

Q.16 Select the correct mirror image of the given figure when the mirror is placed at MN as shown below.

XWS369

M

N

Ans

- 1. 9322WX
- 2. 93εSWX
- 3. 932SWX
- 4. 93ε2WX

Question ID : 264330126681

Option 1 ID : 264330496397

Option 2 ID : 264330496396

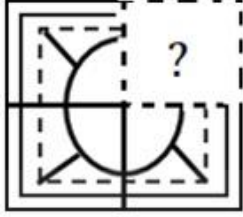
Option 3 ID : 264330496399

Option 4 ID : 264330496398

Status : Answered

Chosen Option : 4

Q.17 Select the option figure that will replace the question mark (?) in the figure given below to complete the pattern.



Ans

✗ 1.



✗ 2.



✗ 3.



✓ 4.



Question ID : 264330131104

Option 1 ID : 264330513530

Option 2 ID : 264330513528

Option 3 ID : 264330513529

Option 4 ID : 264330513527

Status : Answered

Chosen Option : 4

Q.18 In a certain code language, 'PIG' is written as '49' and 'HAT' is written as '52'. How will 'CAB' be written in that language?

Ans ✗ 1. 79

✗ 2. 51

✓ 3. 75

✗ 4. 63

Question ID : 26433089420

Option 1 ID : 264330351183

Option 2 ID : 264330351184

Option 3 ID : 264330351181

Option 4 ID : 264330351182

Status : Answered

Chosen Option : 3

Q.19 Select the correct combination of mathematical signs to sequentially replace the \* signs and to balance the given equation.

$$12 * 5 * 9 * 54 * 9 = 1$$

- Ans
- 1.  $\times, \times, \div, -$
  - 2.  $+, \times, \div, -$
  - 3.  $\times, \times, -, -$
  - 4.  $\times, \times, +, +$

Question ID : 26433092508

Option 1 ID : 264330363324

Option 2 ID : 264330363322

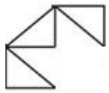
Option 3 ID : 264330363321

Option 4 ID : 264330363323

Status : Answered

Chosen Option : 1

Q.20 Select the option in which the given figure is embedded (rotation is NOT allowed).



Ans

- 1.
- 2.
- 3.
- 4.

Question ID : 264330101167

Option 1 ID : 264330397213

Option 2 ID : 264330397216

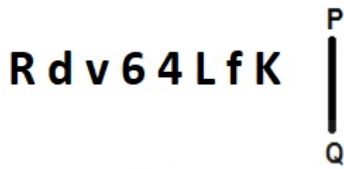
Option 3 ID : 264330397215

Option 4 ID : 264330397214

Status : Answered

Chosen Option : 3

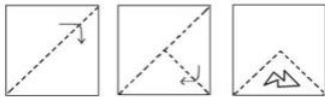
**Q.21** Select the correct mirror image of the given figure when the mirror is placed at PQ as shown below.



- Ans
- 1. K f 4 L v b R
  - 2. K f J P v b R
  - 3. K f J P 9 v P R
  - 4. K J L f 9 v P R

Question ID : 26433080780  
 Option 1 ID : 264330317055  
 Option 2 ID : 264330317054  
 Option 3 ID : 264330317053  
 Option 4 ID : 264330317056  
 Status : Answered  
 Chosen Option : 2

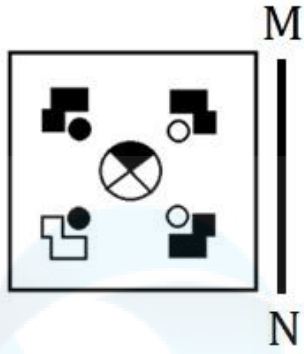
**Q.22** The following figures show the sequence of folding a piece of paper. The last figure shows the manner in which the folded paper has been cut. Choose a figure which would most closely resemble the unfolded form of the paper.



- Ans
- 1. [Diagram of a square with four jagged cutouts at the corners, each pointing towards the center.]
  - 2. [Diagram of a square with four jagged cutouts at the corners, each pointing away from the center.]
  - 3. [Diagram of a square with four jagged cutouts at the corners, each pointing towards the center, but with different orientations.]
  - 4. [Diagram of a square with four jagged cutouts at the corners, each pointing away from the center, but with different orientations.]

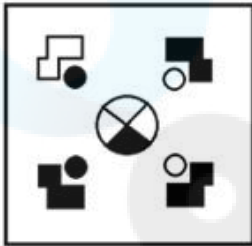
Question ID : 26433074798  
 Option 1 ID : 264330293281  
 Option 2 ID : 264330293282  
 Option 3 ID : 264330293283  
 Option 4 ID : 264330293280  
 Status : Answered  
 Chosen Option : 1

Q.23 Select the correct mirror image of the given figure when the mirror is placed at MN as shown below.

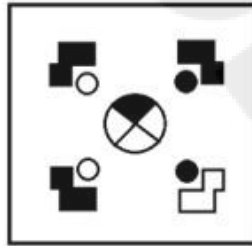


Ans

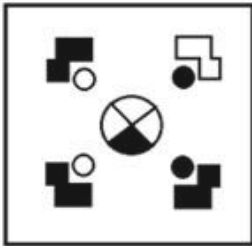
✗ 1.



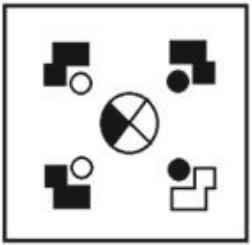
✓ 2.



✗ 3.



✗ 4.



Question ID : 264330112309

Option 1 ID : 264330441321

Option 2 ID : 264330441322

Option 3 ID : 264330441323

Option 4 ID : 264330441324

Status : Answered

Chosen Option : 2

**Q.24** Select the set in which the numbers are related in the same way as are the numbers of the following sets.

(NOTE: Operations should be performed on the whole numbers, without breaking down the numbers into its constituent digits. E.g. 13 – Operations on 13 such as adding/deleting/multiplying etc. to 13 can be performed. Breaking down 13 into 1 and 3 and then performing mathematical operations on 1 and 3 is not allowed)

(18, 28, 38)  
(11, 26, 41)

- Ans
- 1. (17, 48, 53)
  - 2. (13, 24, 37)
  - 3. (9, 27, 43)
  - 4. (18, 35, 52)

Question ID : 26433052097

Option 1 ID : 264330203693

Option 2 ID : 264330203690

Option 3 ID : 264330203692

Option 4 ID : 264330203691

Status : Answered

Chosen Option : 4

**Q.25** Select the word-pair that best represents a similar relationship to the one expressed in the pair of words given below.

(The words must be considered as meaningful English words and must not be related to each other based on the number of letters/number of consonants/vowels in the word.)

Hexagon : Septagon

- Ans
- 1. Radius : Diameter
  - 2. Triangle : Rectangle
  - 3. Chord : Circle
  - 4. Area : Square

Question ID : 26433053237

Option 1 ID : 264330208250

Option 2 ID : 264330208251

Option 3 ID : 264330208253

Option 4 ID : 264330208252

Status : Answered

Chosen Option : 2

Section : Numerical Ability

**Q.1** Which ratio is the greatest among the following?

- Ans
- 1. 5 : 8
  - 2. 4 : 7
  - 3. 3 : 5
  - 4. 1 : 3

Question ID : 264330118079

Option 1 ID : 264330464131

Option 2 ID : 264330464133

Option 3 ID : 264330464134

Option 4 ID : 264330464132

Status : Answered

Chosen Option : 4

Q.2 A sum of ₹2,400 yields a simple interest of ₹460 in 2 years and 4 months. The rate of interest per annum is:

Ans

1.  $5\frac{3}{14}\%$

2.  $7\frac{5}{14}\%$

3.  $7\frac{3}{14}\%$

4.  $8\frac{3}{14}\%$

Question ID : 264330119338

Option 1 ID : 264330467641

Option 2 ID : 264330467642

Option 3 ID : 264330467639

Option 4 ID : 264330467640

Status : Answered

Chosen Option : 4

Q.3 Anjali and Manju together can do a piece of work in 5 days. If Anjali does twice as much work as Manju in a given time, how long would Anjali alone take to do the work?

Ans

1. 6 days

2. 7.5 days

3. 7 days

4. 6.5 days

Question ID : 264330103630

Option 1 ID : 264330406825

Option 2 ID : 264330406828

Option 3 ID : 264330406827

Option 4 ID : 264330406826

Status : Answered

Chosen Option : 2

Q.4 If the loss is  $\frac{1}{6}$  of the selling price of an article, then the loss percentage is:

Ans

1.  $13\frac{1}{7}\%$

2.  $14\frac{2}{7}\%$

3.  $12\frac{3}{7}\%$

4.  $16\frac{1}{7}\%$

Question ID : 264330119331

Option 1 ID : 264330467611

Option 2 ID : 264330467613

Option 3 ID : 264330467612

Option 4 ID : 264330467614

Status : Answered

Chosen Option : 2

Q.5 The price of a car increased by 25%. By what percentage should the price now be reduced to bring it to the actual price?

- Ans  1. 20%  
 2. 25%  
 3. 15%  
 4. 35%

Question ID : 264330118048  
Option 1 ID : 264330464009  
Option 2 ID : 264330464007  
Option 3 ID : 264330464008  
Option 4 ID : 264330464010  
Status : Answered  
Chosen Option : 1

Q.6 A train covers a distance of 10 km in 10 minutes. If its speed is decreased by 20 km/h, then the time taken by it to cover the same distance will be:

- Ans  1. 18 minutes  
 2. 15 minutes  
 3. 20 minutes  
 4. 12 minutes

Question ID : 264330168933  
Option 1 ID : 264330662537  
Option 2 ID : 264330662536  
Option 3 ID : 264330662538  
Option 4 ID : 264330662535  
Status : Answered  
Chosen Option : 2

Q.7 A shopkeeper offers a discount of 15% on the marked price of an article and still makes a profit of 25%. If its marked price is ₹2,100, then find the cost price of the article.

- Ans  1. ₹1,248  
 2. ₹1,842  
 3. ₹1,428  
 4. ₹1,284

Question ID : 264330130087  
Option 1 ID : 264330509580  
Option 2 ID : 264330509581  
Option 3 ID : 264330509579  
Option 4 ID : 264330509582  
Status : Answered  
Chosen Option : 3

Q.8 Joy borrowed some amount from a bank at the rate of 6% per annum, compounded annually. If he finished paying his loan by paying ₹20,000 at the end of 5 years, then the amount of loan that he had taken (rounded to the nearest thousand rupees) was:

- Ans
- 1. ₹12,000
  - 2. ₹15,000
  - 3. ₹16,000
  - 4. ₹13,000

Question ID : 264330103737  
Option 1 ID : 264330407253  
Option 2 ID : 264330407255  
Option 3 ID : 264330407256  
Option 4 ID : 264330407254  
Status : Answered  
Chosen Option : 2

Q.9 The ratio of the salaries of Ram and Shyam is 8 : 5. If the salaries of Ram and Shyam are increased by ₹2,600, then their ratio becomes 15 : 11. What is the salary of Shyam?

- Ans
- 1. ₹5,000
  - 2. ₹3,500
  - 3. ₹4,000
  - 4. ₹4,500

Question ID : 264330130075  
Option 1 ID : 264330509534  
Option 2 ID : 264330509531  
Option 3 ID : 264330509532  
Option 4 ID : 264330509533  
Status : Answered  
Chosen Option : 3

Q.10 The highest common factor of 161 and 207 is:

- Ans
- 1. 9
  - 2. 1
  - 3. 7
  - 4. 23

Question ID : 264330103577  
Option 1 ID : 264330406616  
Option 2 ID : 264330406613  
Option 3 ID : 264330406615  
Option 4 ID : 264330406614  
Status : Answered  
Chosen Option : 4

Q.11 If  $\frac{844}{0.844} = \frac{84.4}{K}$ , then what is the value of K?

- Ans
- 1. 8.44
  - 2. 0.0844
  - 3. 0.844
  - 4. 0.00844

Question ID : 264330105982  
Option 1 ID : 264330416232  
Option 2 ID : 264330416230  
Option 3 ID : 264330416231  
Option 4 ID : 264330416229  
Status : Answered  
Chosen Option : 2

Q.12 What is the area of an equilateral triangle whose sides are  $8\sqrt{3}$  cm?

- Ans
- 1.  $46\sqrt{3}$  cm<sup>2</sup>
  - 2.  $38\sqrt{3}$  cm<sup>2</sup>
  - 3.  $42\sqrt{3}$  cm<sup>2</sup>
  - 4.  $48\sqrt{3}$  cm<sup>2</sup>

Question ID : 264330106026  
Option 1 ID : 264330416407  
Option 2 ID : 264330416405  
Option 3 ID : 264330416406  
Option 4 ID : 264330416408  
Status : Answered  
Chosen Option : 4

Q.13 The average of n natural odd numbers is \_\_\_\_\_, where n is odd.

- Ans
- 1.  $n + 1$
  - 2.  $\frac{n + 1}{2}$
  - 3.  $n$
  - 4.  $\frac{n}{2}$

Question ID : 264330130165  
Option 1 ID : 264330509772  
Option 2 ID : 264330509774  
Option 3 ID : 264330509771  
Option 4 ID : 264330509773  
Status : Answered  
Chosen Option : 3

Q.14 If the area of great circle is  $36\pi \text{ m}^2$ , then find the volume of a hemisphere.  
(Use  $\pi=3.14$ )

- Ans
- 1. 445.68  $\text{m}^3$
  - 2. 464.32  $\text{m}^3$
  - 3. 452.16  $\text{m}^3$
  - 4. 458.74  $\text{m}^3$

Question ID : 264330111493  
Option 1 ID : 264330438058  
Option 2 ID : 264330438059  
Option 3 ID : 264330438057  
Option 4 ID : 264330438060  
Status : Answered  
Chosen Option : 3

Q.15  $\frac{17}{250}$  is equivalent to:

- Ans
- 1. 0.0068
  - 2. 0.068
  - 3. 0.68
  - 4. 0.088

Question ID : 264330111434  
Option 1 ID : 264330437823  
Option 2 ID : 264330437822  
Option 3 ID : 264330437821  
Option 4 ID : 264330437824  
Status : Answered  
Chosen Option : 2

Section : Computer Proficiency

Q.1 Which of the following is an example of web browser?

- Ans
- 1. Mozilla Firefox
  - 2. Outlook 365
  - 3. Yahoo mail
  - 4. Google Search

Question ID : 264330178590  
Option 1 ID : 264330700390  
Option 2 ID : 264330700388  
Option 3 ID : 264330700387  
Option 4 ID : 264330700389  
Status : Answered  
Chosen Option : 1

**Q.2** What does the 'Grammar Check' feature in MS-Word 365 do?

- Ans
- 1. It provides suggestions to improve the document's structure.
  - 2. It formats the text based on predefined style rules.
  - 3. It highlights correct spelling and offers suggestions.
  - 4. It identifies and provides suggestions to correct grammatical errors in the text.

Question ID : 264330181818  
Option 1 ID : 264330713120  
Option 2 ID : 264330713122  
Option 3 ID : 264330713121  
Option 4 ID : 264330713119  
Status : Answered  
Chosen Option : 4

**Q.3** What is the maximum number of columns existing in MS-Excel 2010?

- Ans
- 1. 8,382 columns
  - 2. 2,048 columns
  - 3. 32,386 columns
  - 4. 16,384 columns

Question ID : 264330171404  
Option 1 ID : 264330672232  
Option 2 ID : 264330672231  
Option 3 ID : 264330672234  
Option 4 ID : 264330672233  
Status : Answered  
Chosen Option : 4

**Q.4** Which of the following tabs on the MS Excel 365 ribbon has the 'Sort & Filter' group?

- Ans
- 1. Review
  - 2. Edit
  - 3. Data
  - 4. Formula

Question ID : 264330180820  
Option 1 ID : 264330709246  
Option 2 ID : 264330709243  
Option 3 ID : 264330709245  
Option 4 ID : 264330709244  
Status : Answered  
Chosen Option : 1

**Q.5** Which protocol is commonly used for sending emails from a client to a server?

- Ans
- 1. Internet Messaging Access Protocol (IMAP)
  - 2. Hypertext Transfer Protocol (HTTP)
  - 3. Simple Mail Transfer Protocol (SMTP)
  - 4. Post office Protocol (POP3)

Question ID : 264330182464  
Option 1 ID : 264330715647  
Option 2 ID : 264330715650  
Option 3 ID : 264330715648  
Option 4 ID : 264330715649  
Status : Answered  
Chosen Option : 3

Q.6 In MS Excel 365, which menu or tab is used to access the 'Save' or 'Save as' options?

- Ans
- 1. File
  - 2. Home
  - 3. Edit
  - 4. Insert

Question ID : 264330182120  
Option 1 ID : 264330714319  
Option 2 ID : 264330714320  
Option 3 ID : 264330714322  
Option 4 ID : 264330714321  
Status : Answered  
Chosen Option : 1

Q.7 Which of the following is NOT used to modify selected text in MS-Word 365?

- Ans
- 1. Ctrl + I
  - 2. Ctrl + O
  - 3. Ctrl + U
  - 4. Ctrl + B

Question ID : 264330178269  
Option 1 ID : 264330699133  
Option 2 ID : 264330699134  
Option 3 ID : 264330699132  
Option 4 ID : 264330699131  
Status : Answered  
Chosen Option : 2

Q.8 In Print Preview mode in Microsoft Word 365, what can you review and modify before printing the document?

- Ans
- 1. Page layout
  - 2. Document content and editing options
  - 3. Printer connectivity and network settings
  - 4. Font styles and sizes

Question ID : 264330177675  
Option 1 ID : 264330696816  
Option 2 ID : 264330696817  
Option 3 ID : 264330696818  
Option 4 ID : 264330696815  
Status : Answered  
Chosen Option : 1

Q.9 What is the function of the 'Superscript' feature in Microsoft Word 365?

- Ans
- 1. Makes the text bold and italic
  - 2. Adds a line under the text
  - 3. Makes the text larger and below the baseline
  - 4. Makes the text smaller and above the baseline

Question ID : 264330180717  
Option 1 ID : 264330708838  
Option 2 ID : 264330708837  
Option 3 ID : 264330708836  
Option 4 ID : 264330708835  
Status : Answered  
Chosen Option : 3

**Q.10** When we open MS-Word 365, which of the following could be found?

- Ans**  1. Blank page without any default name  
 2. Blank page with a default name "Document1"  
 3. Blank page with a default name "Doc 1"  
 4. Blank page with a default name "page 1"

Question ID : 264330175976

Option 1 ID : 264330690202

Option 2 ID : 264330690199

Option 3 ID : 264330690201

Option 4 ID : 264330690200

Status : Answered

Chosen Option : 2