

Constable Executive Male and Female in Delhi Police Examination 2023

Roll Number	
Candidate Name	
Venue Name	
Exam Date	23/11/2023
Exam Time	9:00 AM - 10:30 AM
Subject	Constable Executive Male and Female in Delhi Police Examination 2023

Section : General Knowledge

Q.1 Who among the following is NOT a tabla player?

- Ans 1. Pannalal Ghosh
 2. Sabir Khan
 3. Zakir Hussain
 4. Sandeep Das

Question ID : 264330111932
Option 1 ID : 264330439815
Option 2 ID : 264330439814
Option 3 ID : 264330439816
Option 4 ID : 264330439813
Status : Answered
Chosen Option : 1

Q.2 जतिन गोस्वामी, जिन्हें संगीत नाटक अकादमी फेलोशिप से सम्मानित किया गया था, _____ नृत्य शैली के प्रसिद्ध नर्तक हैं।

- Ans 1. कथक
 2. छऊ
 3. मणिपुरी
 4. सत्रिया

Question ID : 264330111978
Option 1 ID : 264330439997
Option 2 ID : 264330439998
Option 3 ID : 264330439999
Option 4 ID : 264330440000
Status : Answered
Chosen Option : 4

Q.3 The melting point of a solid is defined as:

- Ans 1. the minimum temperature at which the solid melts to become liquid at the atmospheric pressure
 2. the minimum temperature at which the solid melts to become liquid at a high pressure
 3. the minimum temperature at which the solid melts to become liquid at a low pressure
 4. the maximum temperature at which the solid melts to become liquid at atmospheric pressure

Question ID : 264330173649
Option 1 ID : 264330681075
Option 2 ID : 264330681077
Option 3 ID : 264330681076
Option 4 ID : 264330681078
Status : Answered
Chosen Option : 1

Q.4 Who among the following has played the highest number of ODI matches as the Captain of the Indian cricket team, as of 2021?

- Ans 1. Mahendra Singh Dhoni
 2. Kapil Dev
 3. Sachin Ramesh Tendulkar
 4. Virat Kohli

Question ID : 264330118454
Option 1 ID : 264330465218
Option 2 ID : 264330465219
Option 3 ID : 264330465220
Option 4 ID : 264330465217
Status : Answered
Chosen Option : 3

Q.5 Which of the following schedules vests additional discretionary powers to the Governors of Mizoram and Tripura?

- Ans 1. 6th Schedule
 2. 4th Schedule
 3. 5th Schedule
 4. 7th Schedule

Question ID : 26433086855
Option 1 ID : 264330341063
Option 2 ID : 264330341061
Option 3 ID : 264330341062
Option 4 ID : 264330341064
Status : Answered
Chosen Option : 1

Q.6 विभाजन की कठोर वास्तविकताओं पर आधारित उपन्यास 'कितने पाकिस्तान' के उपन्यासकार _____ हैं।

- Ans 1. फणीश्वर नाथ रेणु
 2. कमलेश्वर
 3. काशी नाथ सिंह
 4. मुंशी प्रेमचंद

Question ID : 26433064628
Option 1 ID : 264330253104
Option 2 ID : 264330253105
Option 3 ID : 264330253107
Option 4 ID : 264330253106
Status : Not Answered
Chosen Option : --

Q.7 What is time period under Article 22 (2) of the Constitution of India for every person who is arrested and detained in custody to be produced before the nearest magistrate?

- Ans 1. Within 24 hours
 2. Within 48 hours
 3. Within 12 hours
 4. Within 30 hours

Question ID : 264330133064
Option 1 ID : 264330521307
Option 2 ID : 264330521310
Option 3 ID : 264330521308
Option 4 ID : 264330521309
Status : Answered
Chosen Option : 1

Q.8 निम्नलिखित में से किस स्थान पर 'अखिल भारतीय मुस्लिम लीग' (All India Muslim League) की स्थापना की गई थी?

- Ans 1. लाहौर
 2. ढाका
 3. कराची
 4. कलकत्ता

Question ID : 264330120298
Option 1 ID : 264330471443
Option 2 ID : 264330471445
Option 3 ID : 264330471446
Option 4 ID : 264330471444
Status : Answered
Chosen Option : 2

Q.9 In which of the following years was there an all-India campaign in opposition to the all-white Simon Commission?

- Ans 1. 1939
 2. 1922
 3. 1942
 4. 1928

Question ID : 264330112408
Option 1 ID : 264330441719
Option 2 ID : 264330441720
Option 3 ID : 264330441718
Option 4 ID : 264330441717
Status : Answered
Chosen Option : 4

Q.10 भारतीय संविधान के किस अनुच्छेद में उल्लेख किया गया है कि किसी भी अपराध के आरोपी व्यक्ति को अपने खिलाफ गवाह बनने के लिए मजबूर नहीं किया जाएगा?

- Ans
- 1. अनुच्छेद 16
 - 2. अनुच्छेद 26
 - 3. अनुच्छेद 20
 - 4. अनुच्छेद 24

Question ID : 264330180870
Option 1 ID : 264330709443
Option 2 ID : 264330709446
Option 3 ID : 264330709444
Option 4 ID : 264330709445
Status : Answered
Chosen Option : 3

Q.11 The Hindustan Socialist Republican Association was founded in _____ by famous revolutionaries like Chandrasekhar Azad, Bhagat Singh, Batukeshwar Dutt and others.

- Ans
- 1. 1921
 - 2. 1928
 - 3. 1925
 - 4. 1919

Question ID : 264330114867
Option 1 ID : 264330451555
Option 2 ID : 264330451553
Option 3 ID : 264330451554
Option 4 ID : 264330451556
Status : Answered
Chosen Option : 2

Q.12 What is the maximum limit of loan under MUDRA Yojana?

- Ans
- 1. ₹1 lakh
 - 2. ₹5 lakh
 - 3. ₹50,000
 - 4. ₹10 lakh

Question ID : 264330110190
Option 1 ID : 264330433038
Option 2 ID : 264330433039
Option 3 ID : 264330433037
Option 4 ID : 264330433040
Status : Answered
Chosen Option : 4

Q.13 Lohri is a popular folk festival of which of these states?

- Ans
- 1. Punjab
 - 2. Goa
 - 3. Gujarat
 - 4. Himachal Pradesh

Question ID : 264330109314
Option 1 ID : 264330429536
Option 2 ID : 264330429535
Option 3 ID : 264330429534
Option 4 ID : 264330429533
Status : Answered
Chosen Option : 1

Q.14 The colossal monolithic statue of Gomateshwara at Shravanabelagola is carved out of a single block of _____ .

- Ans 1. marble
 2. granite
 3. stone
 4. rock

Question ID : 264330106248

Option 1 ID : 264330417293

Option 2 ID : 264330417296

Option 3 ID : 264330417294

Option 4 ID : 264330417295

Status : Not Attempted and
Marked For Review

Chosen Option : --

Q.15 Which of the following has universal acceptability in discharge of debt & payment obligations?

- Ans 1. Bonds
 2. Legal tender money
 3. Houses
 4. Landed property

Question ID : 264330119673

Option 1 ID : 264330468968

Option 2 ID : 264330468967

Option 3 ID : 264330468970

Option 4 ID : 264330468969

Status : Answered

Chosen Option : 4

Q.16 The hydrological cycle deals with _____ .

- Ans 1. soil
 2. water
 3. air
 4. rocks

Question ID : 264330118518

Option 1 ID : 264330465474

Option 2 ID : 264330465473

Option 3 ID : 264330465476

Option 4 ID : 264330465475

Status : Answered

Chosen Option : 2

Q.17 Sangeet Natak Akademi is a society under which ministry of the Government of India?

- Ans 1. Ministry of Home Affairs
 2. Ministry of Tourism
 3. Ministry of Culture
 4. Ministry of Youth Affairs and Sports

Question ID : 264330111208

Option 1 ID : 264330436918

Option 2 ID : 264330436919

Option 3 ID : 264330436917

Option 4 ID : 264330436920

Status : Answered

Chosen Option : 3

Q.18 Which of the following organisations has declared October 2 as the International Day of Non-violence to honour Gandhi's ways?

- Ans 1. International Federation Red Cross and Red Crescent
 2. United National General Assembly
 3. United Nations Development Fund
 4. Amnesty International

Question ID : 264330130871
Option 1 ID : 264330512596
Option 2 ID : 264330512595
Option 3 ID : 264330512598
Option 4 ID : 264330512597
Status : Answered
Chosen Option : 2

Q.19 Which of the following is a communication mail channel to facilitate quick delivery of mails in large towns and cities of India?

- Ans 1. Pink channel
 2. State channel
 3. Bulk mail channel
 4. Small mail channel

Question ID : 264330180511
Option 1 ID : 264330708011
Option 2 ID : 264330708013
Option 3 ID : 264330708014
Option 4 ID : 264330708012
Status : Not Answered
Chosen Option : --

Q.20 Which of the following is NOT the lead bank?

- Ans 1. HDFC Bank
 2. Canara Bank
 3. State Bank of India
 4. Indian bank

Question ID : 264330120088
Option 1 ID : 264330470608
Option 2 ID : 264330470610
Option 3 ID : 264330470609
Option 4 ID : 264330470607
Status : Answered
Chosen Option : 4

Q.21 Who among the following is the writer of 'Train to Pakistan', 'Good, Bad and Ridiculous' and 'Delhi: A Novel'?

- Ans 1. Ruskin Bond
 2. Khushwant Singh
 3. Vikram Seth
 4. Amitav Ghosh

Question ID : 26433071478
Option 1 ID : 264330280339
Option 2 ID : 264330280338
Option 3 ID : 264330280336
Option 4 ID : 264330280337
Status : Answered
Chosen Option : 2

Q.22 In which of the following states/UTs were Khelo India Youth Games 2023 organised?

- Ans 1. Punjab
 2. Madhya Pradesh
 3. Maharashtra
 4. Delhi

Question ID : 264330176943
Option 1 ID : 264330693970
Option 2 ID : 264330693968
Option 3 ID : 264330693969
Option 4 ID : 264330693967
Status : Answered
Chosen Option : 2

Q.23 कृषि सांख्यिकी - एक झलक 2015 के अनुसार, भारत वर्ष 2013 में किस फसल का सबसे बड़ा उत्पादक था, जिसका वैश्विक उत्पादन में लगभग 25 प्रतिशत योगदान होता था?

- Ans 1. बाजरा
 2. दाल
 3. तिलहन
 4. गन्ना

Question ID : 264330120357
Option 1 ID : 264330471682
Option 2 ID : 264330471679
Option 3 ID : 264330471681
Option 4 ID : 264330471680
Status : Answered
Chosen Option : 2

Q.24 To provide opportunities for education to his/her children between the ages of _____ is the fundamental duty of the parents according to the 86th Constitutional Amendment Act.

- Ans 1. 6 to 14
 2. 5 to 18
 3. 4 to 14
 4. 6 to 18

Question ID : 264330114755
Option 1 ID : 264330451107
Option 2 ID : 264330451106
Option 3 ID : 264330451105
Option 4 ID : 264330451108
Status : Answered
Chosen Option : 1

Q.25 Who among the following received the title 'Nur Jahan'?

- Ans 1. Ratan Bai
 2. Hamida Banu
 3. Man Bai
 4. Meherunissa

Question ID : 264330118983
Option 1 ID : 264330466588
Option 2 ID : 264330466587
Option 3 ID : 264330466589
Option 4 ID : 264330466590
Status : Answered
Chosen Option : 2

Q.26 What was the name of the official mascot for the 44th International Chess Olympiad, which was held in India in 2022?

- Ans
- 1. Thambi
 - 2. Chess Base
 - 3. Bathusa Turtlestein
 - 4. Chess mate

Question ID : 264330113739
Option 1 ID : 264330447043
Option 2 ID : 264330447044
Option 3 ID : 264330447041
Option 4 ID : 264330447042
Status : Not Answered
Chosen Option : --

Q.27 The condition, when the environment becomes enriched with nutrients, increasing the amount of plant and algae growth in estuaries and coastal waters, is called:

- Ans
- 1. mineralisation
 - 2. ozone depletion
 - 3. greenhouse effect
 - 4. eutrophication

Question ID : 264330111902
Option 1 ID : 264330439694
Option 2 ID : 264330439695
Option 3 ID : 264330439696
Option 4 ID : 264330439693
Status : Answered
Chosen Option : 4

Q.28 How many fundamental rights are provided by the Constitution as of November 2022?

- Ans
- 1. 5
 - 2. 7
 - 3. 8
 - 4. 6

Question ID : 264330120507
Option 1 ID : 264330472279
Option 2 ID : 264330472281
Option 3 ID : 264330472282
Option 4 ID : 264330472280
Status : Answered
Chosen Option : 4

Q.29 The Tumakuru mining belt is located in which state?

- Ans
- 1. Odisha
 - 2. Jharkhand
 - 3. Rajasthan
 - 4. Karnataka

Question ID : 264330181229
Option 1 ID : 264330710841
Option 2 ID : 264330710840
Option 3 ID : 264330710842
Option 4 ID : 264330710839
Status : Not Answered
Chosen Option : --

Q.30 The Brihadeshwara Temple at Thanjavur was built by which of these rulers?

- Ans 1. Raja Raja Chola I
 2. Rajadhiraja Chola II
 3. Raja Raja Chola III
 4. Rajendra Chola III

Question ID : 264330109323
Option 1 ID : 264330429570
Option 2 ID : 264330429571
Option 3 ID : 264330429569
Option 4 ID : 264330429572
Status : Answered
Chosen Option : 1

Q.31 Pandit Gopal Prasad Dubey won the Padma Shri for which form of dance?

- Ans 1. Kathakali
 2. Bihu
 3. Chhau
 4. Sattriya

Question ID : 26433074879
Option 1 ID : 264330293607
Option 2 ID : 264330293604
Option 3 ID : 264330293606
Option 4 ID : 264330293605
Status : Answered
Chosen Option : 1

Q.32 निम्नलिखित में से किस नीति में घरेलू अर्थव्यवस्था को वैश्विक अर्थव्यवस्था के साथ एकीकृत करना शामिल है?

- Ans 1. भूमंडलीकरण (वैश्वीकरण)
 2. निजीकरण
 3. उदारीकरण
 4. पूंजीवादी अर्थव्यवस्था

Question ID : 264330110181
Option 1 ID : 264330433001
Option 2 ID : 264330433002
Option 3 ID : 264330433003
Option 4 ID : 264330433004
Status : Answered
Chosen Option : 4

Q.33 Kongampattu AV Murugaiyan, a _____ exponent, was awarded the Padma Shri in 2022.

- Ans 1. dholak
 2. sitar
 3. thavil
 4. guitar

Question ID : 264330111952
Option 1 ID : 264330439895
Option 2 ID : 264330439894
Option 3 ID : 264330439893
Option 4 ID : 264330439896
Status : Answered
Chosen Option : 4

Q.34 The ground water of Bihar and West Bengal is mostly contaminated by which metal?

- Ans
- 1. Radium
 - 2. Mercury
 - 3. Arsenic
 - 4. Lead

Question ID : 264330131821
Option 1 ID : 264330516386
Option 2 ID : 264330516385
Option 3 ID : 264330516383
Option 4 ID : 264330516384
Status : Answered
Chosen Option : 3

Q.35 How many general electoral rolls are there for every territorial constituency for election of the Parliament?

- Ans
- 1. 3
 - 2. 1
 - 3. 4
 - 4. 2

Question ID : 264330173520
Option 1 ID : 264330680561
Option 2 ID : 264330680559
Option 3 ID : 264330680562
Option 4 ID : 264330680560
Status : Not Answered
Chosen Option : --

Q.36 The Jaffna Peninsula, known for its cultural heritage and Tamil population, is located in which part of Sri Lanka?

- Ans
- 1. Eastern Province
 - 2. Northern Province
 - 3. Western Province
 - 4. Central Province

Question ID : 264330179305
Option 1 ID : 264330703224
Option 2 ID : 264330703223
Option 3 ID : 264330703225
Option 4 ID : 264330703226
Status : Answered
Chosen Option : 2

Q.37 Which of the following is NOT responsible for hypertension?

- Ans
- 1. Excess weight and lack of exercise
 - 2. Intake of nicotine either through smoking or chewing tobacco
 - 3. Living under stress and worry
 - 4. Consuming less salt

Question ID : 264330177325
Option 1 ID : 264330695493
Option 2 ID : 264330695491
Option 3 ID : 264330695492
Option 4 ID : 264330695494
Status : Answered
Chosen Option : 4

Q.38 Pavri Naach, a tribal dance of Maharashtra and Gujarat region is performed by which of the following tribes?

- Ans
- 1. Kokna
 - 2. Khatola
 - 3. Koli
 - 4. Kalanga

Question ID : 264330110430
Option 1 ID : 264330433999
Option 2 ID : 264330434000
Option 3 ID : 264330433997
Option 4 ID : 264330433998
Status : Not Answered
Chosen Option : --

Q.39 The National Social Assistance Programme (NSAP) is a welfare programme being administered by the _____.

- Ans
- 1. Ministry of Women and Child Development
 - 2. Ministry of Social Justice and Empowerment
 - 3. Ministry of Rural Development
 - 4. Ministry of Home Affairs

Question ID : 264330120341
Option 1 ID : 264330471617
Option 2 ID : 264330471618
Option 3 ID : 264330471616
Option 4 ID : 264330471615
Status : Not Answered
Chosen Option : --

Q.40 Which of the following cities hosted the 44th World Chess Olympiad in 2022?

- Ans
- 1. Kolkata
 - 2. Mumbai
 - 3. New Delhi
 - 4. Chennai

Question ID : 264330118446
Option 1 ID : 264330465188
Option 2 ID : 264330465187
Option 3 ID : 264330465185
Option 4 ID : 264330465186
Status : Not Answered
Chosen Option : --

Q.41 During which year was the first Industrial Policy Resolution passed?

- Ans
- 1. 1957
 - 2. 1967
 - 3. 1948
 - 4. 1958

Question ID : 264330118250
Option 1 ID : 264330464817
Option 2 ID : 264330464816
Option 3 ID : 264330464815
Option 4 ID : 264330464818
Status : Answered
Chosen Option : 3

Q.42 सातवाहन साम्राज्य के अधीन प्रशासन का सबसे निचला स्तर एक ग्राम था, जो एक _____ की देख-रेख के अधीन था।

- Ans
- 1. राजुक
 - 2. अमात्य
 - 3. ग्रामिक
 - 4. नागरिक

Question ID : 264330114817
Option 1 ID : 264330451355
Option 2 ID : 264330451353
Option 3 ID : 264330451354
Option 4 ID : 264330451356
Status : Not Answered
Chosen Option : --

Q.43 A removal motion of a judge must be signed by _____ members if it is initiated in the Lok Sabha.

- Ans
- 1. 75
 - 2. 50
 - 3. 100
 - 4. 54

Question ID : 264330120173
Option 1 ID : 264330470949
Option 2 ID : 264330470947
Option 3 ID : 264330470950
Option 4 ID : 264330470948
Status : Not Answered
Chosen Option : --

Q.44 As per the Industrial Policy Resolution 1956, Schedule B comprises of _____ industries.

- Ans
- 1. 14
 - 2. 12
 - 3. 13
 - 4. 15

Question ID : 264330116523
Option 1 ID : 264330458178
Option 2 ID : 264330458180
Option 3 ID : 264330458179
Option 4 ID : 264330458177
Status : Answered
Chosen Option : 4

Q.45 According to the 2011 census, how many districts were there in India?

- Ans
- 1. 610
 - 2. 570
 - 3. 640
 - 4. 680

Question ID : 264330120323
Option 1 ID : 264330471544
Option 2 ID : 264330471546
Option 3 ID : 264330471545
Option 4 ID : 264330471543
Status : Not Answered
Chosen Option : --

Q.46 Which of the following reports or missions mainly recommended that control over some aspects of provincial government be passed to Indian ministers responsible to an Indian electorate?

- Ans
- 1. Morley Minto report
 - 2. Cripps' Mission
 - 3. Montagu Chelmsford report
 - 4. Simon Commission report

Question ID : 264330118995
Option 1 ID : 264330466636
Option 2 ID : 264330466638
Option 3 ID : 264330466637
Option 4 ID : 264330466635
Status : Answered
Chosen Option : 2

Q.47 Which of the following is the most common saccharide found in peach juice puree, accounting for about 55% to 80% of the total sugar content?

- Ans
- 1. Galactose
 - 2. Oligofructose
 - 3. Raffinose
 - 4. Sucrose

Question ID : 264330131004
Option 1 ID : 264330513130
Option 2 ID : 264330513128
Option 3 ID : 264330513127
Option 4 ID : 264330513129
Status : Answered
Chosen Option : 2

Q.48 भारत में पुरापाषाण युग के कितने चरण हैं?

- Ans
- 1. तीन
 - 2. एक
 - 3. दो
 - 4. चार

Question ID : 264330134579
Option 1 ID : 264330527272
Option 2 ID : 264330527274
Option 3 ID : 264330527271
Option 4 ID : 264330527273
Status : Answered
Chosen Option : 1

Q.49 Which of the following elements was NOT part of the Financial Sector Reforms under the Liberalisation Model?

- Ans
- 1. Permission to set up private banks
 - 2. Setting of new branches without RBI approval
 - 3. Investment limit in foreign banks up to 74%
 - 4. RBI's role was enhanced to gain control over banks

Question ID : 264330111609

Option 1 ID : 264330438522

Option 2 ID : 264330438523

Option 3 ID : 264330438521

Option 4 ID : 264330438524

Status : Answered

Chosen Option : 4

Q.50 मातृ पक्ष की ओर से, मुग़ल _____ के वंशज थे।

- Ans
- 1. चंगेज़ खां
 - 2. ताजुद्दीन यल्दौज़
 - 3. तैमूर
 - 4. मोहम्मद गोरी

Question ID : 264330182273

Option 1 ID : 264330714917

Option 2 ID : 264330714918

Option 3 ID : 264330714915

Option 4 ID : 264330714916

Status : Answered

Chosen Option : 1

Section : Reasoning

Q.1 Which two signs should be interchanged to make the given equation correct?
 $335 \times 5 \div 7 + 65 - 213 = 321$

- Ans
- 1. + and =
 - 2. + and ×
 - 3. + and -
 - 4. + and ÷

Question ID : 26433090219

Option 1 ID : 264330354354

Option 2 ID : 264330354355

Option 3 ID : 264330354356

Option 4 ID : 264330354353

Status : Answered

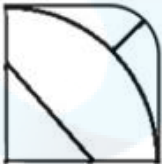
Chosen Option : 2

Q.2 Select the option figure that will replace the question mark (?) in the figure given below to complete the pattern.



Ans

✗ 1.



✓ 2.



✗ 3.



✗ 4.



Question ID : 264330112055

Option 1 ID : 264330440306

Option 2 ID : 264330440305

Option 3 ID : 264330440308

Option 4 ID : 264330440307

Status : Answered

Chosen Option : 2

Q.3 Select the option that is related to the fifth letter cluster in the same way as the second letter cluster is related to the first letter cluster and the fourth letter cluster is related to the third letter cluster.

KFUB : BKLG :: PNTD : GSKI :: IVFQ : ?

Ans ✓ 1. ZAWV

✗ 2. WKNY

✗ 3. ZDPA

✗ 4. WNZA

Question ID : 26433074696

Option 1 ID : 264330292874

Option 2 ID : 264330292875

Option 3 ID : 264330292873

Option 4 ID : 264330292872

Status : Answered

Chosen Option : 1

Q.4 Three different positions of the same dice are shown (Figures 1-3). Find the number on the face opposite to the face showing '2'.

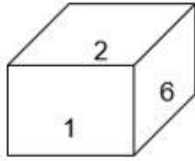


Figure 1

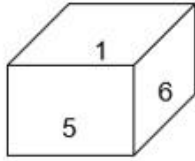


Figure 2

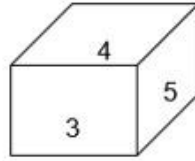


Figure 3

- Ans
- 1. 4
 - 2. 1
 - 3. 5
 - 4. 3

Question ID : 264330117296

Option 1 ID : 264330461244

Option 2 ID : 264330461241

Option 3 ID : 264330461243

Option 4 ID : 264330461242

Status : Answered

Chosen Option : 3

Q.5 Select the correct mirror image of the given combination when the mirror is placed at MN as shown below.



- Ans
- 1. y4t9t2bE
 - 2. Y49t5qe
 - 3. Ep5t94y
 - 4. Y4t9t2bE

Question ID : 264330117002

Option 1 ID : 264330460089

Option 2 ID : 264330460092

Option 3 ID : 264330460091

Option 4 ID : 264330460090

Status : Answered

Chosen Option : 1

Q.6 Which figure should replace the question mark (?) if the series were to be continued?

P I C E S I	P O S E E I	P O A I E M A O	?
-------------	-------------	-----------------	---

Ans

1. O I E M A

2. O I E M X

3. X I O M A

4. X I E M A

Question ID : 264330130793

Option 1 ID : 264330512284

Option 2 ID : 264330512283

Option 3 ID : 264330512286

Option 4 ID : 264330512285

Status : Answered

Chosen Option : 2

Q.7 Select the option that is related to the fourth number in the same way as the first number is related to the second number and the fifth number is related to the sixth number.

121 : 23 :: ? : 14 :: 166 : 32

Ans 1. 80

2. 81

3. 76

4. 71

Question ID : 26433052020

Option 1 ID : 264330203383

Option 2 ID : 264330203384

Option 3 ID : 264330203385

Option 4 ID : 264330203382

Status : Answered

Chosen Option : 3

Q.8 Two statements are given followed by two conclusions numbered I and II. Assuming the statements to be true, even if they seem to be at variance with commonly known facts, decide which of the conclusions logically follow(s) from the statements.

Statements:

Some balloons are bags.

All belts are bags.

Conclusions:

I. Some bags are balloons.

II. Some belts are balloons.

- Ans
- 1. Only conclusion II follows
 - 2. Neither conclusion I nor II follows
 - 3. Only conclusion I follows
 - 4. Both conclusions I and II follow

Question ID : 26433068873

Option 1 ID : 264330270005

Option 2 ID : 264330270007

Option 3 ID : 264330270004

Option 4 ID : 264330270006

Status : Answered

Chosen Option : 4

Q.9 छह विद्यार्थी एक गोल मेज के परितः केंद्र की ओर अभिमुख होकर बैठे हैं। पलक और रूचि दोनों का निकटतम पड़ोसी साहिल है। तनय, पलक के बाएं से दूसरे स्थान पर बैठा है। उर्मी, रूचि के दाएं से तीसरे स्थान पर बैठी है। रूचि और तनय दोनों का निकटतम पड़ोसी क्रासिम है। उर्मी और क्रासिम दोनों का निकटतम पड़ोसी कौन है?

- Ans
- 1. रूचि
 - 2. तनय
 - 3. पलक
 - 4. साहिल

Question ID : 264330110711

Option 1 ID : 264330435121

Option 2 ID : 264330435124

Option 3 ID : 264330435123

Option 4 ID : 264330435122

Status : Answered

Chosen Option : 2

Q.10 1, 2, 3, 4, 5 and 6 are written on different faces of a dice. Three different positions of the same dice are shown below. Find the number on the face opposite to the one showing '5'.

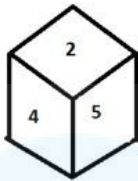


figure 1

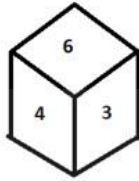


figure 2

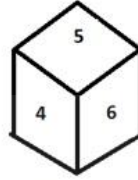


figure 3

- Ans
- 1. 2
 - 2. 6
 - 3. 3
 - 4. 1

Question ID : 264330106479

Option 1 ID : 264330418219

Option 2 ID : 264330418220

Option 3 ID : 264330418217

Option 4 ID : 264330418218

Status : Answered

Chosen Option : 3

Q.11 Which figure should replace the question mark (?) in the following series to continue the pattern?

	X		8		B		8	
8	B	△	X	V	B	8	♡	△
	V			△		X		△
								?

Ans

✓ 1.

		♡
8	C	△
		B

✗ 2.

		♡
C	8	△
		X

✗ 3.

		B
8	C	△
		♡

✗ 4.

		△
♡	B	X
		8

Question ID : 264330129612

Option 1 ID : 264330507817

Option 2 ID : 264330507816

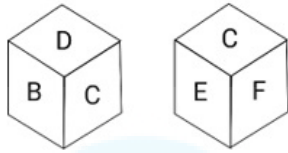
Option 3 ID : 264330507814

Option 4 ID : 264330507815

Status : Answered

Chosen Option : 1

Q.12 Six letters A, B, C, D, E and F are written on different faces of a dice. Two positions of this dice are shown in the figure. Find the letter on the face opposite to 'D'.



- Ans
- 1. F
 - 2. E
 - 3. B
 - 4. A

Question ID : 264330106415
 Option 1 ID : 264330417963
 Option 2 ID : 264330417964
 Option 3 ID : 264330417961
 Option 4 ID : 264330417962
 Status : Answered
 Chosen Option : 2

Q.13 Select the option that represents the letters that, when sequentially placed from left to right in the blanks below, will complete the letter series.

b _ d _ p b c _ p _ _ c _ p p b _ _ p p

- Ans
- 1. cpdpdbdc
 - 2. cpdpbdcd
 - 3. cdppbdc
 - 4. pcdpbdc

Question ID : 26433095973
 Option 1 ID : 264330376663
 Option 2 ID : 264330376661
 Option 3 ID : 264330376662
 Option 4 ID : 264330376664
 Status : Answered
 Chosen Option : 2

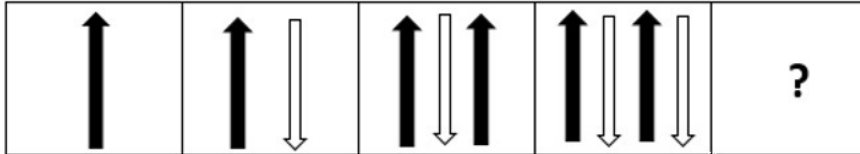
Q.14 Select the number from among the given options that can replace the question mark (?) in the following series.

21, 22, 24, 28, 36, ?

- Ans
- 1. 67
 - 2. 52
 - 3. 43
 - 4. 47

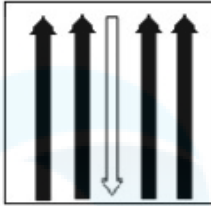
Question ID : 264330109766
 Option 1 ID : 264330431344
 Option 2 ID : 264330431343
 Option 3 ID : 264330431341
 Option 4 ID : 264330431342
 Status : Answered
 Chosen Option : 2

Q.15 Select the figure that will replace the question mark (?) in the following figure series.

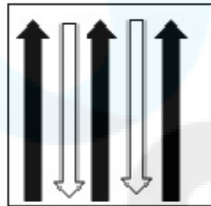


Ans

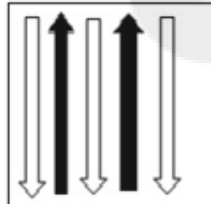
✗ 1.



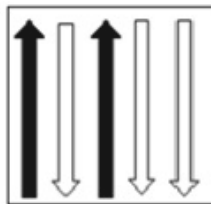
✓ 2.



✗ 3.



✗ 4.



Question ID : 264330108960

Option 1 ID : 264330428119

Option 2 ID : 264330428117

Option 3 ID : 264330428120

Option 4 ID : 264330428118

Status : Answered

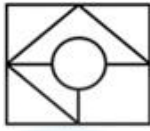
Chosen Option : 2

Q.16 Select the option in which the given figure is embedded (rotation is NOT allowed).

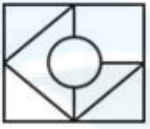


Ans

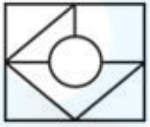
✓ 1.



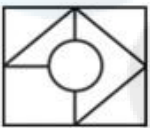
✗ 2.



✗ 3.



✗ 4.



Question ID : 264330101172

Option 1 ID : 264330397236

Option 2 ID : 264330397233

Option 3 ID : 264330397235

Option 4 ID : 264330397234

Status : Answered

Chosen Option : 1

Q.17 Select the correct combination of mathematical signs that can sequentially replace the * signs and balance the given equation.

$$18 * 14 * 6 * 16 * 4 * 254$$

Ans ✗ 1. +, x, -, =, +

✗ 2. +, -, x, +, =

✓ 3. x, +, -, +, =

✗ 4. +, x, -, +, =

Question ID : 26433079088

Option 1 ID : 264330310358

Option 2 ID : 264330310357

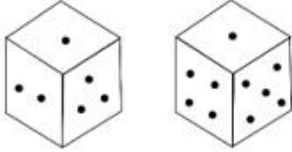
Option 3 ID : 264330310359

Option 4 ID : 264330310356

Status : Answered

Chosen Option : 3

Q.18 Observe the dots on a dice (one to six dots) in the following figures. How many dots are contained on the face opposite to that containing four dots?



Ans 1. Six

2. Two

3. One

4. Five

Question ID : 264330111300

Option 1 ID : 264330437287

Option 2 ID : 264330437286

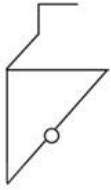
Option 3 ID : 264330437288

Option 4 ID : 264330437285

Status : Answered

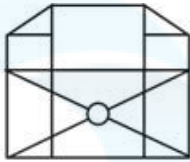
Chosen Option : 2

Q.19 Select the option in which the given figure is embedded (rotation is NOT allowed).

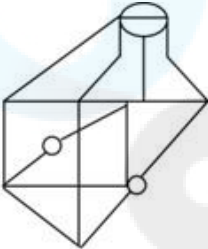


Ans

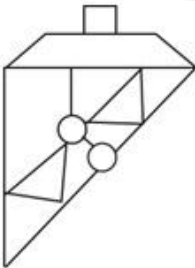
✗ 1.



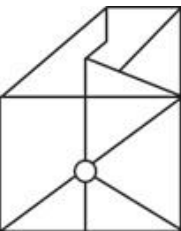
✓ 2.



✗ 3.



✗ 4.



Question ID : 264330114687

Option 1 ID : 264330450834

Option 2 ID : 264330450835

Option 3 ID : 264330450836

Option 4 ID : 264330450833

Status : Answered


Chosen Option : 2

Q.20 Which of the following option figures will complete the pattern in the figure given below?



Ans

X 1.



X 2.



✓ 3.



X 4.



Question ID : 26433089618

Option 1 ID : 264330351973

Option 2 ID : 264330351976

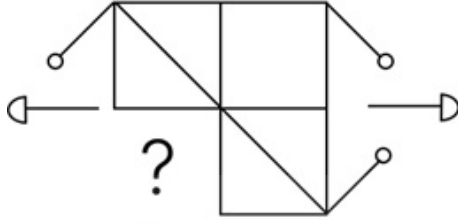
Option 3 ID : 264330351974

Option 4 ID : 264330351975

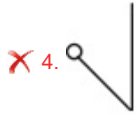
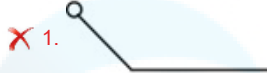
Status : Answered

Chosen Option : 3

Q.21 Select the figure from the given options that will replace the question mark (?) in the figure given below to complete the pattern so that the final image is symmetrical.



Ans



Question ID : 264330114731

Option 1 ID : 264330451012

Option 2 ID : 264330451010

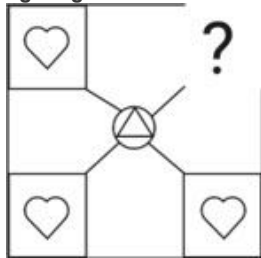
Option 3 ID : 264330451009

Option 4 ID : 264330451011

Status : Answered

Chosen Option : 2

Q.22 Select the figure from the given options that will replace the question mark (?) in the figure given below and complete the pattern.



Ans



Question ID : 264330111708

Option 1 ID : 264330438920

Option 2 ID : 264330438918

Option 3 ID : 264330438919

Option 4 ID : 264330438917

Status : Answered

Chosen Option : 4

Q.23 How many cubes are there in the given figure?



- Ans
- 1. 17
 - 2. 5
 - 3. 11
 - 4. 15

Question ID : 26433080662
Option 1 ID : 264330316583
Option 2 ID : 264330316584
Option 3 ID : 264330316581
Option 4 ID : 264330316582
Status : Answered
Chosen Option : 3

Q.24 Select the set in which the numbers are related in the same way as are the numbers of the following sets.

(NOTE: Operations should be performed on the whole numbers, without breaking down the numbers into its constituent digits. E.g. 13 – Operations on 13 such as adding/subtracting/multiplying etc. to 13 can be performed. Breaking down 13 into 1 and 3 and then performing mathematical operations on 1 and 3 is not allowed)
(12, 26, 57)
(13, 27, 60)

- Ans
- 1. (8, 91, 83)
 - 2. (19, 25, 66)
 - 3. (17, 21, 38)
 - 4. (45, 64, 119)

Question ID : 26433087214
Option 1 ID : 264330342495
Option 2 ID : 264330342496
Option 3 ID : 264330342493
Option 4 ID : 264330342494
Status : Answered
Chosen Option : 2

Q.25 In a certain code language, 'NATION' is written as 'RZLRQM' and 'MARINE' is written as 'SZNRRV'. How will 'ADVICE' be written as in that language?

- Ans
- 1. FNERCV
 - 2. EWJRCV
 - 3. ERZCWV
 - 4. FNZPVR

Question ID : 26433082948
Option 1 ID : 264330325625
Option 2 ID : 264330325628
Option 3 ID : 264330325626
Option 4 ID : 264330325627
Status : Answered
Chosen Option : 2

Q.1 Arun receives a monthly salary. The ratio of his expenditure to savings is 8 : 2. What percentage of his salary does he spend?

- Ans 1. 80%
 2. 60%
 3. 40%
 4. 20%

Question ID : 264330129404
Option 1 ID : 264330506983
Option 2 ID : 264330506982
Option 3 ID : 264330506985
Option 4 ID : 264330506984
Status : Answered
Chosen Option : 4

Q.2 A man can complete a work in 15 days, and a woman can complete the same work in 25 days. In how many days will 3 men and 5 women complete the same work?

- Ans 1. 3.5
 2. 2
 3. 2.5
 4. 5

Question ID : 264330104266
Option 1 ID : 264330409365
Option 2 ID : 264330409367
Option 3 ID : 264330409366
Option 4 ID : 264330409368
Status : Answered
Chosen Option : 3

Q.3 If $P : Q = 5 : 3$, then find the value of $(P^4 - Q^4) : (P^4 + Q^4)$.

- Ans 1. 227 : 335
 2. - 227 : 353
 3. - 272 : 353
 4. 272 : 353

Question ID : 264330130091
Option 1 ID : 264330509597
Option 2 ID : 264330509598
Option 3 ID : 264330509595
Option 4 ID : 264330509596
Status : Answered
Chosen Option : 4

Q.4 A cone shape tent is made with canvas. The radius of the tent is 7 units and total 308 square units of canvas is used to make it. What is the volume of the tent in cubic units?

(Take $\pi = \frac{22}{7}$)

- Ans
- 1. $1087\sqrt{3}$
 - 2. $1078\sqrt{3}$
 - 3. $\frac{1078}{\sqrt{3}}$
 - 4. $\frac{1087}{\sqrt{3}}$

Question ID : 264330112121

Option 1 ID : 264330440569

Option 2 ID : 264330440571

Option 3 ID : 264330440572

Option 4 ID : 264330440570

Status : Answered

Chosen Option : 3

Q.5 Ratnesh marked the price of a pencil box at ₹80. What is the cost price (in ₹) of the pencil box if after giving a discount of 10%, Ratnesh still gains 20%?

- Ans
- 1. 58
 - 2. 60
 - 3. 72
 - 4. 70

Question ID : 264330123977

Option 1 ID : 264330485743

Option 2 ID : 264330485742

Option 3 ID : 264330485740

Option 4 ID : 264330485741

Status : Answered

Chosen Option : 2

Q.6 वह अधिकतम संभावित लंबाई ज्ञात करें जिसका उपयोग 5 मीटर 95 सेंटीमीटर, 8 मीटर और 16 मीटर 65 सेंटीमीटर की लंबाई को सटीकता से मापने के लिए किया जा सकता है?

- Ans
- 1. 5 सेंटीमीटर
 - 2. 50 मीटर
 - 3. 50 सेंटीमीटर
 - 4. 5 मीटर

Question ID : 264330104333

Option 1 ID : 264330409634

Option 2 ID : 264330409636

Option 3 ID : 264330409635

Option 4 ID : 264330409633

Status : Answered

Chosen Option : 1

Q.7 A person sells two articles for ₹5,000 each with no loss and no profit in the overall transaction. If one is sold at a $16\frac{2}{3}\%$ loss, then the other is sold at a profit of:

- Ans
- 1. 24%
 - 2. 25%
 - 3. 20%
 - 4. 15%

Question ID : 264330103664
Option 1 ID : 264330406963
Option 2 ID : 264330406962
Option 3 ID : 264330406961
Option 4 ID : 264330406964
Status : Answered
Chosen Option : 3

Q.8 A music player is sold for ₹4,510 cash, or ₹1,200 cash down payment and the balance in three equal easy installments. If 10% is the rate of interest compounded annually, find the amount of instalment.

- Ans
- 1. ₹1,331
 - 2. ₹1,330
 - 3. ₹1,333
 - 4. ₹1,332

Question ID : 264330106010
Option 1 ID : 264330416342
Option 2 ID : 264330416341
Option 3 ID : 264330416344
Option 4 ID : 264330416343
Status : Answered
Chosen Option : 1

Q.9 The population of a town decreased from 3,68,000 in 2017 to 3,27,200 in 2020. What is the percentage decrease (to the nearest integer) in the population of the town?

- Ans
- 1. 10%
 - 2. 12%
 - 3. 15%
 - 4. 11%

Question ID : 264330103516
Option 1 ID : 264330406370
Option 2 ID : 264330406369
Option 3 ID : 264330406372
Option 4 ID : 264330406371
Status : Answered
Chosen Option : 4

Q.10 If a,b,c,d and e are distinct prime numbers and the sum of these five numbers is odd, then $a + b + c + d$ is:

- Ans
- 1. an even prime number
 - 2. an odd prime number
 - 3. an odd number
 - 4. an even number

Question ID : 264330111450
Option 1 ID : 264330437887
Option 2 ID : 264330437888
Option 3 ID : 264330437886
Option 4 ID : 264330437885
Status : Answered
Chosen Option : 4

Q.11 Which of the following pairs of numbers are relatively prime to each other?

- Ans
- 1. (51, 119)
 - 2. (98, 567)
 - 3. (27, 51)
 - 4. (103, 113)

Question ID : 264330104483
Option 1 ID : 264330410236
Option 2 ID : 264330410235
Option 3 ID : 264330410234
Option 4 ID : 264330410233
Status : Answered
Chosen Option : 4

Q.12 If Ram walks at a speed of 8 km/h, he misses a train by 7 minutes. However, if he walks at a speed of 10 km/h, he reaches the station 5 minutes before the departure of the train. Find the distance (in km) between Ram's house and the station.

- Ans
- 1. 9
 - 2. 7
 - 3. 6
 - 4. 8

Question ID : 264330104319
Option 1 ID : 264330409580
Option 2 ID : 264330409577
Option 3 ID : 264330409578
Option 4 ID : 264330409579
Status : Answered
Chosen Option : 1

Q.13 A closed metallic cylindrical box is 1.08 m high and its base radius is 42 cm. If the sheet of metal costs ₹90 per m², then the cost of the material used in the box is:
(Where $\pi = \frac{22}{7}$)

- Ans**
- 1. ₹555.8
 - 2. ₹356.4
 - 3. ₹456.5
 - 4. ₹750.4

Question ID : 264330118149
Option 1 ID : 264330464414
Option 2 ID : 264330464411
Option 3 ID : 264330464412
Option 4 ID : 264330464413
Status : Answered
Chosen Option : 2

Q.14 A cricketer has an average score of 52 runs in 10 innings. Find the number of runs to be scored by him in the 11th inning to raise the average score to 58.

- Ans**
- 1. 98
 - 2. 107
 - 3. 122
 - 4. 118

Question ID : 264330118042
Option 1 ID : 264330463985
Option 2 ID : 264330463986
Option 3 ID : 264330463983
Option 4 ID : 264330463984
Status : Answered
Chosen Option : 4

Q.15 A person borrows ₹12,000 for 3 years at 2% per annum simple interest. He immediately lends it to another person at 4% per annum for 3 years. Find his gain in the transaction per year.

- Ans**
- 1. ₹240
 - 2. ₹360
 - 3. ₹720
 - 4. ₹630

Question ID : 264330118509
Option 1 ID : 264330465439
Option 2 ID : 264330465438
Option 3 ID : 264330465437
Option 4 ID : 264330465440
Status : Answered
Chosen Option : 1

Q.1 In MS Word 365, which of the following commands allows the user to preview the document before printing it on paper?

- Ans
- 1. Print
 - 2. View
 - 3. Layout Print Layout
 - 4. Print Preview

Question ID : 264330179158
Option 1 ID : 264330702635
Option 2 ID : 264330702636
Option 3 ID : 264330702638
Option 4 ID : 264330702637
Status : Answered
Chosen Option : 4

Q.2 Which of the following can be done by using the Spelling and Grammar tool in MS Word 365?
A. Indicate grammatical errors
B. Correct spelling errors as you type
C. Identify words with capitalisation problems

- Ans
- 1. A and C only
 - 2. A and B only
 - 3. B and C only
 - 4. A, B and C

Question ID : 264330180634
Option 1 ID : 264330708505
Option 2 ID : 264330708503
Option 3 ID : 264330708504
Option 4 ID : 264330708506
Status : Answered
Chosen Option : 2

Q.3 Which of the following is the shortcut key to Cut text in MS Word 365?

- Ans
- 1. Shift+X
 - 2. Ctrl+C
 - 3. Ctrl+X
 - 4. Ctrl+Shift+X

Question ID : 264330176726
Option 1 ID : 264330693122
Option 2 ID : 264330693119
Option 3 ID : 264330693120
Option 4 ID : 264330693121
Status : Answered
Chosen Option : 3

Q.4 In MS Excel 365, which of the following functions is used to find the smallest value in a range of cells?

- Ans
- 1. AVERAGE
 - 2. MIN
 - 3. SUM
 - 4. COUNT

Question ID : 264330178563
Option 1 ID : 264330700280
Option 2 ID : 264330700282
Option 3 ID : 264330700279
Option 4 ID : 264330700281
Status : Answered
Chosen Option : 2

Q.5 In MS Excel 365, Which of the following is the correct way to save a duplicate MS Excel workbook with the same name as the original workbook, but in a different folder?

- Ans
- 1. Select the desired folder in the 'Save in' field of the 'Save As' dialog box and click on the 'Save' button.
 - 2. Press Ctrl +V
 - 3. Press 'Ctrl + D'
 - 4. Click on the 'Insert' menu and select 'Save'.

Question ID : 264330180601
Option 1 ID : 264330708374
Option 2 ID : 264330708373
Option 3 ID : 264330708372
Option 4 ID : 264330708371
Status : Answered
Chosen Option : 1

Q.6 In MS Excel 365 which of the following keyboard shortcuts is used for saving a workbook in MS Excel 365?

- Ans
- 1. Ctrl + S
 - 2. Shift + S
 - 3. Shift + C
 - 4. Ctrl + V

Question ID : 264330180816
Option 1 ID : 264330709229
Option 2 ID : 264330709230
Option 3 ID : 264330709228
Option 4 ID : 264330709227
Status : Answered
Chosen Option : 1

Q.7 Which of the following is NOT a type of network?

- Ans 1. ROR
 2. MAN
 3. LAN
 4. WAN

Question ID : 264330182041
Option 1 ID : 264330714006
Option 2 ID : 264330714004
Option 3 ID : 264330714003
Option 4 ID : 264330714005
Status : Answered
Chosen Option : 1

Q.8 Which option is used to save changes made to an existing document in Microsoft Word 365?

- Ans 1. Save
 2. Save Changes
 3. Save All
 4. Save With

Question ID : 264330173592
Option 1 ID : 264330680850
Option 2 ID : 264330680848
Option 3 ID : 264330680849
Option 4 ID : 264330680847
Status : Answered
Chosen Option : 2

Q.9 Which of the following components is typically included in the header of an email?

- Ans 1. Body text
 2. Subject line
 3. Salutation
 4. Signature

Question ID : 264330174460
Option 1 ID : 264330684262
Option 2 ID : 264330684259
Option 3 ID : 264330684261
Option 4 ID : 264330684260
Status : Answered
Chosen Option : 2

Q.10 Which of the following terms is used to describe the space between the edge of the paper and the text in MS word 365?

- Ans 1. Orientation
 2. Columns
 3. Size
 4. Margins

Question ID : 264330176711
Option 1 ID : 264330693060
Option 2 ID : 264330693062
Option 3 ID : 264330693059
Option 4 ID : 264330693061
Status : Answered
Chosen Option : 4