

## Constable Executive Male and Female in Delhi Police Examination 2023

Roll Number	
Candidate Name	
Venue Name	
Exam Date	23/11/2023
Exam Time	12:00 PM - 1:30 PM
Subject	Constable Executive Male and Female in Delhi Police Examination 2023

Section : General Knowledge

**Q.1** In which of the following cities of British India was the Communist Party of India founded, in 1925?

- Ans
- 1. Calcutta
  - 2. Lucknow
  - 3. Kanpur
  - 4. Delhi

Question ID : 264330117808  
Option 1 ID : 264330463047  
Option 2 ID : 264330463049  
Option 3 ID : 264330463048  
Option 4 ID : 264330463050  
Status : Not Answered  
Chosen Option : --

**Q.2** Who among the following won the '67th Filmfare Award 2022 for Best Choreography' for the film Atrangi Re?

- Ans
- 1. Remo D' Souza
  - 2. Vijay Ganguly
  - 3. Farah Khan
  - 4. Prabhu Deva

Question ID : 264330130524  
Option 1 ID : 264330511207  
Option 2 ID : 264330511209  
Option 3 ID : 264330511208  
Option 4 ID : 264330511210  
Status : Not Answered  
Chosen Option : --

**Q.3** During the census 2011, which of the following states recorded the lowest growth rate?

- Ans
- 1. Nagaland
  - 2. Sikkim
  - 3. Uttar Pradesh
  - 4. Madhya Pradesh

Question ID : 264330179548  
Option 1 ID : 264330704194  
Option 2 ID : 264330704193  
Option 3 ID : 264330704191  
Option 4 ID : 264330704192  
Status : Answered  
Chosen Option : 1

# Test Prime

ALL EXAMS,  
ONE SUBSCRIPTION



**70,000+**  
Mock Tests



Personalised  
Report Card



Unlimited  
Re-Attempt



**600+**  
Exam Covered



Previous Year  
Papers



**500%**  
Refund



**ATTEMPT FREE MOCK NOW**

Q.4 Which of the following statements is correct with regard to the effect of globalisation on India and other developing countries?

- Ans
- 1. Flow of information became highly restricted.
  - 2. It led to increased inequality between countries.
  - 3. Flow of international capital got restricted.
  - 4. It reduced interdependence between countries.

Question ID : 264330111773  
Option 1 ID : 264330439179  
Option 2 ID : 264330439178  
Option 3 ID : 264330439180  
Option 4 ID : 264330439177  
Status : Not Answered  
Chosen Option : --

Q.5 According to the Planning Commission of India (2011-12), which state has the highest percentage of the population below the poverty line?

- Ans
- 1. Chhattisgarh
  - 2. Assam
  - 3. Madhya Pradesh
  - 4. Bihar

Question ID : 264330119920  
Option 1 ID : 264330469956  
Option 2 ID : 264330469958  
Option 3 ID : 264330469957  
Option 4 ID : 264330469955  
Status : Answered  
Chosen Option : 4

Q.6 Guru Amubi Singh won the Sangeet Natak Akademi Award for which form of dance?

- Ans
- 1. Manipuri
  - 2. Bihu
  - 3. Odissi
  - 4. Kathakali

Question ID : 26433074876  
Option 1 ID : 264330293595  
Option 2 ID : 264330293593  
Option 3 ID : 264330293594  
Option 4 ID : 264330293592  
Status : Answered  
Chosen Option : 1

Q.7 The Teliya Dam is located in which state of India?

- Ans
- 1. Andhra Pradesh
  - 2. Jharkhand
  - 3. Karnataka
  - 4. Rajasthan

Question ID : 264330178704  
Option 1 ID : 264330700845  
Option 2 ID : 264330700843  
Option 3 ID : 264330700846  
Option 4 ID : 264330700844  
Status : Answered  
Chosen Option : 1

Q.8 Who inaugurated the 44<sup>th</sup> Chess Olympiad, which was organised in 2022?

- Ans
- 1. MK Stalin
  - 2. Anurag Thakur
  - 3. Viswanathan Anand
  - 4. Narendra Modi

Question ID : 264330113738  
Option 1 ID : 264330447038  
Option 2 ID : 264330447037  
Option 3 ID : 264330447040  
Option 4 ID : 264330447039  
Status : Answered  
Chosen Option : 1

Q.9 Who among the following dancers and choreographers is credited to bring fusion art into a dance where European style is mixed with Indian Classical Dance?

- Ans
- 1. Uday Shankar
  - 2. Kelucharan Mohapatra
  - 3. Rukmini Devi Arundale
  - 4. Birju Maharaj

Question ID : 264330112875  
Option 1 ID : 264330443587  
Option 2 ID : 264330443585  
Option 3 ID : 264330443588  
Option 4 ID : 264330443586  
Status : Not Answered  
Chosen Option : --

Q.10 Which scheme was rolled out to effectively integrate India's manufacturing capabilities with the demands of global supply chains and to promote domestic value addition and exports?

- Ans
- 1. Startup India
  - 2. Merchandise Exports from India Scheme
  - 3. Make in India initiative
  - 4. Production Linked Incentive Scheme

Question ID : 264330111581  
Option 1 ID : 264330438412  
Option 2 ID : 264330438409  
Option 3 ID : 264330438410  
Option 4 ID : 264330438411  
Status : Not Answered  
Chosen Option : --

Q.11 What is the name of the autobiography written by the 14th Dalai Lama?

- Ans
- 1. My Country My Life
  - 2. Living with the Himalayan Masters
  - 3. Freedom in Exile
  - 4. Long Walk to Freedom

Question ID : 26433071508  
Option 1 ID : 264330280458  
Option 2 ID : 264330280459  
Option 3 ID : 264330280456  
Option 4 ID : 264330280457  
Status : Answered  
Chosen Option : 3

Q.12 From which country did India import wheat seeds during the Green Revolution?

- Ans
- 1. USA
  - 2. Russia
  - 3. Britain
  - 4. Mexico

Question ID : 264330120216  
Option 1 ID : 264330471120  
Option 2 ID : 264330471121  
Option 3 ID : 264330471122  
Option 4 ID : 264330471119  
Status : Not Answered  
Chosen Option : --

Q.13 Ayushman Bharat Programme is an umbrella of \_\_\_\_\_ scheme launched in 2018.

- Ans
- 1. employment
  - 2. education
  - 3. health
  - 4. livelihood

Question ID : 264330110012  
Option 1 ID : 264330432326  
Option 2 ID : 264330432325  
Option 3 ID : 264330432327  
Option 4 ID : 264330432328  
Status : Answered  
Chosen Option : 3

Q.14 Which of the following is NOT a type of budget of the Government?

- Ans
- 1. Surplus budget
  - 2. Deficit budget
  - 3. Circle budget
  - 4. Balanced budget

Question ID : 264330112446  
Option 1 ID : 264330441871  
Option 2 ID : 264330441872  
Option 3 ID : 264330441870  
Option 4 ID : 264330441869  
Status : Not Answered  
Chosen Option : --

Q.15 Stainless steel cookware contains \_\_\_\_\_.

- Ans
- 1. chromium
  - 2. magnesium
  - 3. calcium
  - 4. manganese

Question ID : 264330117617  
Option 1 ID : 264330462493  
Option 2 ID : 264330462494  
Option 3 ID : 264330462496  
Option 4 ID : 264330462495  
Status : Answered  
Chosen Option : 4

Q.16 Which of the following Articles of the Indian Constitution deals with the District Planning Committee?

- Ans  1. 243-XD  
 2. 243-ZD  
 3. 243-YD  
 4. 243- WD

Question ID : 264330120192  
Option 1 ID : 264330471025  
Option 2 ID : 264330471023  
Option 3 ID : 264330471024  
Option 4 ID : 264330471026  
Status : Not Answered  
Chosen Option : --

Q.17 'Vrittayata' is a major sub-division of \_\_\_\_\_ style of temple architecture.

- Ans  1. Hoysala  
 2. Nagara  
 3. Dravidian  
 4. Vijayanagara

Question ID : 26433086648  
Option 1 ID : 264330340235  
Option 2 ID : 264330340236  
Option 3 ID : 264330340233  
Option 4 ID : 264330340234  
Status : Answered  
Chosen Option : 3

Q.18 Which of the following statements about plastids is INCORRECT?

- Ans  1. Leucoplasts are primarily organelles in which materials such as starch, oils and protein granules are stored.  
 2. Leucoplasts are white or colourless plastids.  
 3. Plastids do not have their own DNA and ribosomes.  
 4. Chromoplasts are responsible for photosynthesis in plants.

Question ID : 264330177329  
Option 1 ID : 264330695508  
Option 2 ID : 264330695507  
Option 3 ID : 264330695509  
Option 4 ID : 264330695510  
Status : Answered  
Chosen Option : 3

Q.19 Which of the following dances means 'dance of the enchantress'?

- Ans  1. Kathak  
 2. Sattriya  
 3. Kuchipudi  
 4. Mohiniyattam

Question ID : 264330110405  
Option 1 ID : 264330433900  
Option 2 ID : 264330433897  
Option 3 ID : 264330433898  
Option 4 ID : 264330433899  
Status : Not Answered  
Chosen Option : --

Q.20 'Faster, More Inclusive and Sustainable Growth' was the centre point of which Five-Year Plan?

- Ans
- 1. Tenth
  - 2. Twelfth
  - 3. Ninth
  - 4. Seventh

Question ID : 264330109386  
Option 1 ID : 264330429823  
Option 2 ID : 264330429824  
Option 3 ID : 264330429822  
Option 4 ID : 264330429821  
Status : Answered  
Chosen Option : 2

Q.21 The Constitution (42<sup>nd</sup> Amendment) Act, 1976, Chapter IV-A introduced a code of ten \_\_\_\_\_ for citizens.

- Ans
- 1. Fundamental Rights
  - 2. Fundamental Duties
  - 3. Fundamental Principles
  - 4. Directive Principles

Question ID : 264330110774  
Option 1 ID : 264330435374  
Option 2 ID : 264330435373  
Option 3 ID : 264330435376  
Option 4 ID : 264330435375  
Status : Answered  
Chosen Option : 2

Q.22 Which of the following is NOT a national festival?

- Ans
- 1. Diwali
  - 2. Gandhi Jayanti
  - 3. Republic Day
  - 4. Independence Day

Question ID : 264330106213  
Option 1 ID : 264330417155  
Option 2 ID : 264330417153  
Option 3 ID : 264330417154  
Option 4 ID : 264330417156  
Status : Not Answered  
Chosen Option : --

Q.23 What does LPG cooking gas contain?

- Ans
- 1. Methane and ethylene
  - 2. Propane and ethane
  - 3. Propane and butane
  - 4. Methane and propane

Question ID : 264330120974  
Option 1 ID : 264330474111  
Option 2 ID : 264330474114  
Option 3 ID : 264330474113  
Option 4 ID : 264330474112  
Status : Answered  
Chosen Option : 3

**Q.24 Under which Constitutional Amendment Act were the Fundamental Duties first added to the Indian Constitution?**

- Ans
- 1. 40th Constitutional Amendment Act
  - 2. 43rd Constitutional Amendment Act
  - 3. 41st Constitutional Amendment Act
  - 4. 42nd Constitutional Amendment Act

Question ID : 264330114483  
Option 1 ID : 264330450017  
Option 2 ID : 264330450020  
Option 3 ID : 264330450018  
Option 4 ID : 264330450019  
Status : Answered  
Chosen Option : 4

**Q.25 \_\_\_\_\_ delegates from all over the country congregated for the first session of the Indian National Congress at Bombay in December 1885.**

- Ans
- 1. 105
  - 2. 72
  - 3. 51
  - 4. 179

Question ID : 264330114109  
Option 1 ID : 264330448521  
Option 2 ID : 264330448522  
Option 3 ID : 264330448523  
Option 4 ID : 264330448524  
Status : Answered  
Chosen Option : 2

**Q.26 Purushottam Dadheech is a famous and recognised Indian \_\_\_\_\_ dancer.**

- Ans
- 1. Kathak
  - 2. Kuchipudi
  - 3. Sattriya
  - 4. Kathakali

Question ID : 264330110247  
Option 1 ID : 264330433266  
Option 2 ID : 264330433267  
Option 3 ID : 264330433268  
Option 4 ID : 264330433265  
Status : Not Answered  
Chosen Option : --

**Q.27 Which directive principle provides for a uniform civil code for citizens?**

- Ans
- 1. Article 44
  - 2. Article 41
  - 3. Article 42
  - 4. Article 43

Question ID : 264330120101  
Option 1 ID : 264330470662  
Option 2 ID : 264330470659  
Option 3 ID : 264330470660  
Option 4 ID : 264330470661  
Status : Answered  
Chosen Option : 3

**Q.28** According to the Köppen classification, which group of climate is generally found at higher latitudes or higher altitudes?

- Ans
- 1. D group
  - 2. E group
  - 3. C group
  - 4. A group

Question ID : 264330141727  
Option 1 ID : 264330555229  
Option 2 ID : 264330555228  
Option 3 ID : 264330555230  
Option 4 ID : 264330555227  
Status : Answered  
Chosen Option : 2

**Q.29** The final event in decathlon is always:

- Ans
- 1. 110 m hurdle
  - 2. 1500 m race
  - 3. javelin throw
  - 4. 800 m race

Question ID : 264330110393  
Option 1 ID : 264330433851  
Option 2 ID : 264330433852  
Option 3 ID : 264330433849  
Option 4 ID : 264330433850  
Status : Not Answered  
Chosen Option : --

**Q.30** Which State has the maximum number of members in Rajya Sabha?

- Ans
- 1. Haryana
  - 2. Bihar
  - 3. Uttar Pradesh
  - 4. Punjab

Question ID : 264330173530  
Option 1 ID : 264330680601  
Option 2 ID : 264330680602  
Option 3 ID : 264330680599  
Option 4 ID : 264330680600  
Status : Answered  
Chosen Option : 3

**Q.31** Which of the following Acts was passed by Governor General Lord William Bentinck in 1829?

- Ans
- 1. Indian Telegraph Act
  - 2. Bengal Sati Regulation Act
  - 3. Indian Slavery Act
  - 4. Criminal Tribes Act

Question ID : 264330183130  
Option 1 ID : 264330718255  
Option 2 ID : 264330718253  
Option 3 ID : 264330718252  
Option 4 ID : 264330718254  
Status : Answered  
Chosen Option : 2

Q.32 Identify the Headquarters of the East Coast Railway Zone of India?

- Ans  1. Bhubaneswar  
 2. Kolkata  
 3. New Delhi  
 4. Mumbai

Question ID : 264330138061  
Option 1 ID : 264330540854  
Option 2 ID : 264330540852  
Option 3 ID : 264330540851  
Option 4 ID : 264330540853  
Status : Answered  
Chosen Option : 1

Q.33 In which of the following Articles of the Constitution of India, is it mentioned that "it shall be the duty of every citizen of India to value and preserve the rich heritage of our composite culture"?

- Ans  1. 51A (f)  
 2. 51A (b)  
 3. 51A (h)  
 4. 51A (m)

Question ID : 264330133056  
Option 1 ID : 264330521276  
Option 2 ID : 264330521275  
Option 3 ID : 264330521277  
Option 4 ID : 264330521278  
Status : Answered  
Chosen Option : 3

Q.34 When is National Unity Day observed?

- Ans  1. 31 November  
 2. 8 November  
 3. 31 October  
 4. 11 March

Question ID : 264330118630  
Option 1 ID : 264330465772  
Option 2 ID : 264330465773  
Option 3 ID : 264330465774  
Option 4 ID : 264330465771  
Status : Answered  
Chosen Option : 3

Q.35 Who among the following is credited for laying the foundation of microfinance institutions?

- Ans  1. Amartya Sen  
 2. Jagdish Bhagwati  
 3. PV Narasimha Rao  
 4. Muhammad Yunus

Question ID : 264330116498  
Option 1 ID : 264330458079  
Option 2 ID : 264330458080  
Option 3 ID : 264330458077  
Option 4 ID : 264330458078  
Status : Not Answered  
Chosen Option : --

Q.36 Who among the following defeated Mughal emperor Humayun in the Battle of Kannauj in 1540?

- Ans
- 1. Bahadur Shah
  - 2. Islam Shah
  - 3. Tatar Khan
  - 4. Sher Shah Suri

Question ID : 264330113573  
Option 1 ID : 264330446379  
Option 2 ID : 264330446377  
Option 3 ID : 264330446380  
Option 4 ID : 264330446378  
Status : Answered  
Chosen Option : 4

Q.37 In which state is the Kanha National Park located?

- Ans
- 1. Bihar
  - 2. Himachal Pradesh
  - 3. Madhya Pradesh
  - 4. Karnataka

Question ID : 264330173627  
Option 1 ID : 264330680988  
Option 2 ID : 264330680987  
Option 3 ID : 264330680989  
Option 4 ID : 264330680990  
Status : Answered  
Chosen Option : 3

Q.38 Identify the first Gurjara Partihara ruler who successfully defeated the Arab invaders.

- Ans
- 1. Nagabhata I
  - 2. Vatsaraja
  - 3. Mahendrapala I
  - 4. Mahipala

Question ID : 264330182258  
Option 1 ID : 264330714856  
Option 2 ID : 264330714855  
Option 3 ID : 264330714858  
Option 4 ID : 264330714857  
Status : Answered  
Chosen Option : 1

Q.39 Ustad Amjad Ali Khan is the maestro in playing the \_\_\_\_\_.

- Ans
- 1. sitar
  - 2. sarod
  - 3. bansuri
  - 4. tabla

Question ID : 264330116423  
Option 1 ID : 264330457777  
Option 2 ID : 264330457779  
Option 3 ID : 264330457780  
Option 4 ID : 264330457778  
Status : Answered  
Chosen Option : 2

**Q.40** Which neighbouring country of India was the eighth most populous country in the world, as per the US Census Bureau, by July 2022?

- Ans
- 1. Nepal
  - 2. Bangladesh
  - 3. Bhutan
  - 4. Myanmar

Question ID : 264330120383  
Option 1 ID : 264330471784  
Option 2 ID : 264330471786  
Option 3 ID : 264330471785  
Option 4 ID : 264330471783  
Status : Answered  
Chosen Option : 2

**Q.41** Who became India's first weightlifter to win a gold medal at the IWF Junior World Championships, in 2022?

- Ans
- 1. Harshada Sharad Garud
  - 2. T Madhavan
  - 3. Anjali Patel
  - 4. Muna Nayak

Question ID : 264330113743  
Option 1 ID : 264330447057  
Option 2 ID : 264330447059  
Option 3 ID : 264330447060  
Option 4 ID : 264330447058  
Status : Not Answered  
Chosen Option : --

**Q.42** Which of the following is the first published novel of the famous author Salman Rushdie?

- Ans
- 1. Grimus
  - 2. The Moor's Last Sigh
  - 3. The Satanic Verses
  - 4. Shame

Question ID : 264330112867  
Option 1 ID : 264330443556  
Option 2 ID : 264330443555  
Option 3 ID : 264330443553  
Option 4 ID : 264330443554  
Status : Not Answered  
Chosen Option : --

**Q.43** Minister of state can attend the cabinet meeting \_\_\_\_\_.

- Ans
- 1. on his own will
  - 2. only when the speaker invites him
  - 3. only when invited
  - 4. because its compulsory for him

Question ID : 26433089967  
Option 1 ID : 264330353345  
Option 2 ID : 264330353348  
Option 3 ID : 264330353346  
Option 4 ID : 264330353347  
Status : Answered  
Chosen Option : 3

**Q.44** In which of the following places were the remains of Mahaparinirvana Buddha found?  
It is at this location that a 6.1 m long reclining Buddha has been constructed.

- Ans
- 1. Vaishali
  - 2. Bodhgaya
  - 3. Kushinagar
  - 4. Vethipada

Question ID : 264330113552  
Option 1 ID : 264330446296  
Option 2 ID : 264330446294  
Option 3 ID : 264330446293  
Option 4 ID : 264330446295  
Status : Answered  
Chosen Option : 3

**Q.45** The term 'checkmate' is used in \_\_\_\_\_.

- Ans
- 1. Badminton
  - 2. Golf
  - 3. Chess
  - 4. Tennis

Question ID : 264330134273  
Option 1 ID : 264330526088  
Option 2 ID : 264330526090  
Option 3 ID : 264330526087  
Option 4 ID : 264330526089  
Status : Answered  
Chosen Option : 3

**Q.46** Which king of the Mauryan dynasty succeeded Chandragupta Maurya?

- Ans
- 1. Brihadratha
  - 2. Samprati
  - 3. Ashoka
  - 4. Bindusara

Question ID : 264330183230  
Option 1 ID : 264330718654  
Option 2 ID : 264330718655  
Option 3 ID : 264330718653  
Option 4 ID : 264330718652  
Status : Answered  
Chosen Option : 3

**Q.47** The famous Chinese Buddhist pilgrim, Fa Hein visited India during the reign of which of the following Gupta rulers?

- Ans
- 1. Sri Gupta
  - 2. Samudragupta
  - 3. Kumargupta
  - 4. Chandragupta II

Question ID : 264330114813  
Option 1 ID : 264330451339  
Option 2 ID : 264330451337  
Option 3 ID : 264330451340  
Option 4 ID : 264330451338  
Status : Answered  
Chosen Option : 4

Q.48 Who coined the name 'Pakistan'?

- Ans
- 1. Aga Khan
  - 2. Chaudhry Rehmat Ali
  - 3. Md Iqbal
  - 4. Md Ali Jinnah

Question ID : 264330119000  
Option 1 ID : 264330466656  
Option 2 ID : 264330466658  
Option 3 ID : 264330466657  
Option 4 ID : 264330466655  
Status : Answered  
Chosen Option : 3

Q.49 As per Köppen climate classification, the climate of which place is classified as 'Cwg' (meso thermal with dry winters)?

- Ans
- 1. North-western Gujarat
  - 2. Extreme western Rajasthan
  - 3. South of Goa
  - 4. Gangetic plains

Question ID : 264330114160  
Option 1 ID : 264330448728  
Option 2 ID : 264330448725  
Option 3 ID : 264330448726  
Option 4 ID : 264330448727  
Status : Not Answered  
Chosen Option : --

Q.50 In order to preserve pickles, a mixture of 5% to 8% of acetic acid in water is used. This preservative is also commonly known as:

- Ans
- 1. oil
  - 2. salt
  - 3. vinegar
  - 4. lemon juice

Question ID : 264330177017  
Option 1 ID : 264330694265  
Option 2 ID : 264330694264  
Option 3 ID : 264330694263  
Option 4 ID : 264330694266  
Status : Answered  
Chosen Option : 3

Section : Reasoning

Q.1 Six letters, G, H, I, J, K and L are written on different faces of a dice. Three positions of this dice are shown here. Find the letter on the face opposite L.



- Ans
- 1. J
  - 2. I
  - 3. H
  - 4. G

Question ID : 264330106396  
 Option 1 ID : 264330417885  
 Option 2 ID : 264330417886  
 Option 3 ID : 264330417888  
 Option 4 ID : 264330417887  
 Status : Answered  
 Chosen Option : 2

Q.2 Which of the following option figures will complete the pattern in the figure given below?



Ans

- 1.
- 2.
- 3.
- 4.

Question ID : 26433089627  
 Option 1 ID : 264330352010  
 Option 2 ID : 264330352009  
 Option 3 ID : 264330352011  
 Option 4 ID : 264330352012  
 Status : Answered  
 Chosen Option : 3

**Q.3** Select the set in which the numbers are related in the same way as are the numbers of the following sets.

(NOTE : Operations should be performed on the whole numbers, without breaking down the numbers into its constituent digits. E.g. 13 – Operations on 13 such as adding /deleting /multiplying etc. to 13 can be performed. Breaking down 13 into 1 and 3 and then performing mathematical operations on 1 and 3 is NOT allowed)  
(50, 63), (101, 120)

Ans  1. (226, 253)

2. (145, 168)

3. (402, 440)

4. (169, 196)

Question ID : 26433052043

Option 1 ID : 264330203474

Option 2 ID : 264330203475

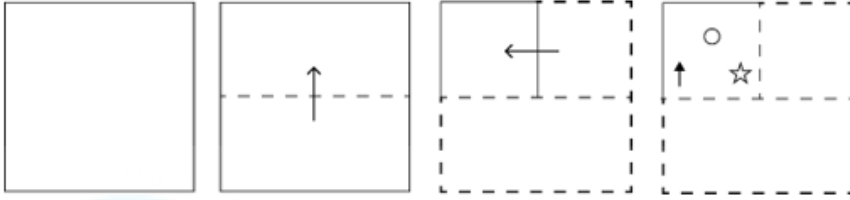
Option 3 ID : 264330203476

Option 4 ID : 264330203477

Status : Answered

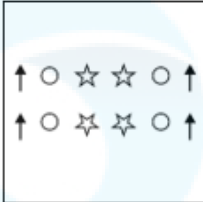
Chosen Option : 2

Q.4 A square sheet of paper is folded along the dotted line successively along the directions shown and is then punched in the last. How would the paper look when unfolded?

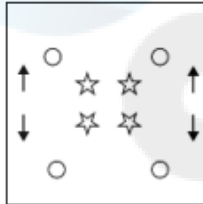


Ans

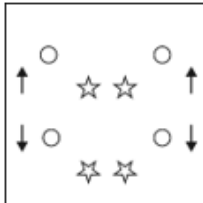
✗ 1.



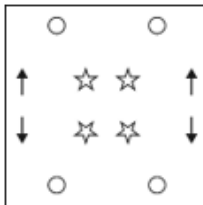
✓ 2.



✗ 3.



✗ 4.



Question ID : 264330172422

Option 1 ID : 264330676241

Option 2 ID : 264330676240

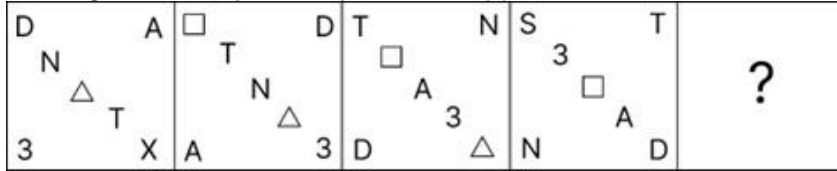
Option 3 ID : 264330676242

Option 4 ID : 264330676239

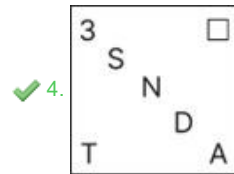
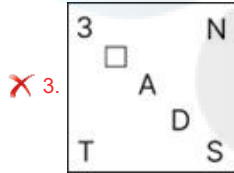
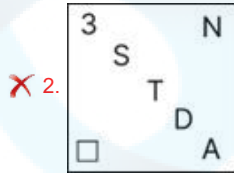
Status : Answered

Chosen Option : 2

Q.5 Which figure should replace the question mark (?) if the series were to be continued?



Ans



Question ID : 264330130800

Option 1 ID : 264330512313

Option 2 ID : 264330512314

Option 3 ID : 264330512311

Option 4 ID : 264330512312

Status : Answered

Chosen Option : 4

Q.6 In a certain code language, if NOVEL is coded as 67 and HISTORY is coded as 75, then how will SCIENCE be coded?

Ans ✗ 1. 120

✓ 2. 131

✗ 3. 130

✗ 4. 126

Question ID : 26433097449

Option 1 ID : 264330382485

Option 2 ID : 264330382488

Option 3 ID : 264330382487

Option 4 ID : 264330382486

Status : Answered

Chosen Option : 2

Q.7 Select the correct combination of mathematical signs that can sequentially replace the \* signs and balance the given expression.

$$73 * 12 * 5 * 2 * 39 * 64$$

- Ans
- 1. +, +, x, -, =
  - 2. x, +, -, +, =
  - 3. +, x, +, -, =
  - 4. +, -, x, +, =

Question ID : 26433074782  
Option 1 ID : 264330293216  
Option 2 ID : 264330293217  
Option 3 ID : 264330293218  
Option 4 ID : 264330293219  
Status : Answered  
Chosen Option : 3

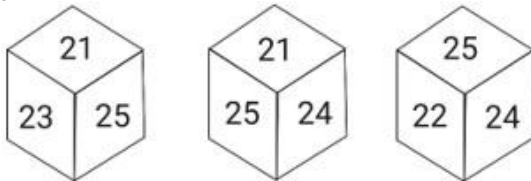
Q.8 Select the option that is related to the third term in the same way as the second term is related to the first term and the sixth term is related to the fifth term.

$$9 : 729 :: 11 : ? :: 4 : 64$$

- Ans
- 1. 99
  - 2. 1331
  - 3. 121
  - 4. 1342

Question ID : 264330101041  
Option 1 ID : 264330396710  
Option 2 ID : 264330396711  
Option 3 ID : 264330396709  
Option 4 ID : 264330396712  
Status : Answered  
Chosen Option : 2

Q.9 Six numbers, 21, 22, 23, 24, 25 and 26 are written on different faces of a dice. Three positions of this dice are shown here. Find the number on the face opposite 25.



- Ans
- 1. 24
  - 2. 21
  - 3. 26
  - 4. 22

Question ID : 264330106411  
Option 1 ID : 264330417947  
Option 2 ID : 264330417945  
Option 3 ID : 264330417948  
Option 4 ID : 264330417946  
Status : Answered  
Chosen Option : 3

Q.10 Select the option that represents the letters that, when sequentially placed from left to right in the blanks below, will complete the letter series.

S \_ \_ A D \_ Q W \_ D \_ Q W A \_ S Q \_ \_ D

- Ans
- 1. QWSASAWD
  - 2. QWSASDWA
  - 3. QWSAADWA
  - 4. QWSASDQA

Question ID : 26433092539  
Option 1 ID : 264330363447  
Option 2 ID : 264330363445  
Option 3 ID : 264330363446  
Option 4 ID : 264330363448  
Status : Answered  
Chosen Option : 2

Q.11 Select the correct mirror image of the given figure when the mirror is placed at PQ as shown below.

B\$#@wer#sd4



- Ans
- 1. B\$#@wer#sd4
  - 2. B\$#@wer#sd4
  - 3. B\$#@wer#sd4
  - 4. B\$#@wer#sd4

Question ID : 26433082033  
Option 1 ID : 264330321966  
Option 2 ID : 264330321967  
Option 3 ID : 264330321965  
Option 4 ID : 264330321968  
Status : Answered  
Chosen Option : 3

Q.12 Which of the following option figures will complete the pattern in the figure given below?



Ans

✓ 1.



✗ 2.



✗ 3.



✗ 4.



Question ID : 26433080639

Option 1 ID : 264330316490

Option 2 ID : 264330316489

Option 3 ID : 264330316492

Option 4 ID : 264330316491

Status : Answered

Chosen Option : 1

Q.13 Select the figure that will replace the question mark (?) in the following figure series.



Ans



Question ID : 264330108956

Option 1 ID : 264330428102

Option 2 ID : 264330428103

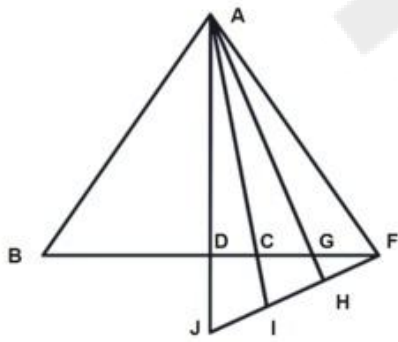
Option 3 ID : 264330428104

Option 4 ID : 264330428101

Status : Answered

Chosen Option : 1

Q.14 How many triangles are there in the given figure?



Ans ✗ 1. 15

✓ 2. 19

✗ 3. 22

✗ 4. 17

Question ID : 26433080668

Option 1 ID : 264330316605

Option 2 ID : 264330316607

Option 3 ID : 264330316608

Option 4 ID : 264330316606

Status : Answered

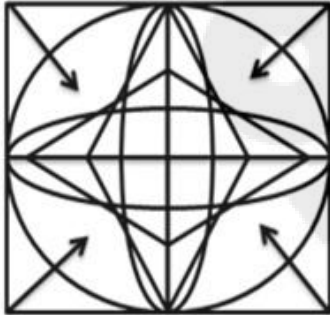
Chosen Option : 2

Q.15 Select the correct combination of mathematical signs to sequentially replace the \* signs and to balance the given equation.  
 $225 * 15 * 10 * 50 * 25 * 125$

- Ans
- 1. +, x, -, +, =
  - 2. +, x, +, -, =
  - 3. +, +, -, x, =
  - 4. +, x, -, +, =

Question ID : 26433076552  
 Option 1 ID : 264330300272  
 Option 2 ID : 264330300275  
 Option 3 ID : 264330300273  
 Option 4 ID : 264330300274  
 Status : Answered  
 Chosen Option : 4

Q.16 Select the option figure that is embedded in the given figure. (Rotation is not allowed)



Ans

- 1.
- 2.
- 3.
- 4.

Question ID : 264330114405  
 Option 1 ID : 264330449706  
 Option 2 ID : 264330449708  
 Option 3 ID : 264330449707  
 Option 4 ID : 264330449705  
 Status : Answered  
 Chosen Option : 1

Q.17 Select the correct mirror image of the given combination when the mirror is placed at MN as shown below.

R d 9 K p 6 w



Ans

- ✓ 1. w ə q k e b Я
- ✗ 2. w ə q k 6 p Я
- ✗ 3. Я b e k q ə W
- ✗ 4. Я q ə k b e w

Question ID : 264330116998

Option 1 ID : 264330460073

Option 2 ID : 264330460076

Option 3 ID : 264330460075

Option 4 ID : 264330460074

Status : Answered

Chosen Option : 1

Q.18 Two statements are given, followed by three conclusions numbered I, II and III.

Assuming the statements to be true, even if they seem to be at variance with commonly known facts, decide which of the conclusions logically follow(s) from the statements.

Statements:

All chips are snacks.

Some fried foods are chips.

Conclusions:

I. All fried foods are snacks.

II. Some snacks are fried foods.

III. No fried food is snack.

Ans

- ✓ 1. Only conclusion II follows
- ✗ 2. Only conclusion III follows
- ✗ 3. Only conclusions II and III follow
- ✗ 4. Either conclusion I or III follows

Question ID : 26433068826

Option 1 ID : 264330269819

Option 2 ID : 264330269818

Option 3 ID : 264330269817

Option 4 ID : 264330269816

Status : Answered

Chosen Option : 1

**Q.19** Select the option that is related to the fifth letter-cluster in the same way as the second letter-cluster is related to the first letter-cluster and the fourth letter-cluster is related to the third letter-cluster.

GAIN : PKCI :: KEYS : UAGM :: ACHE : \_\_\_\_\_

- Ans
- 1. EJCE
  - 2. ECHA
  - 3. BDIF
  - 4. GJEC

Question ID : 26433074586  
 Option 1 ID : 264330292432  
 Option 2 ID : 264330292435  
 Option 3 ID : 264330292434  
 Option 4 ID : 264330292433  
 Status : Answered  
 Chosen Option : 4

**Q.20** Select the option figure that will replace the question mark (?) in the figure given below to complete the pattern.



Ans

- 1.
- 2.
- 3.
- 4.

Question ID : 26433089464  
 Option 1 ID : 264330351357  
 Option 2 ID : 264330351359  
 Option 3 ID : 264330351358  
 Option 4 ID : 264330351360  
 Status : Answered  
 Chosen Option : 4

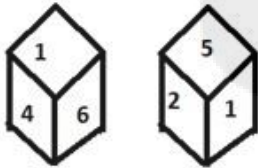
Q.21 Select the number from among the given options that can replace the question mark (?) in the following series.

10, 15, 30, 75, 210, ?

- Ans
- 1. 600
  - 2. 567
  - 3. 435
  - 4. 615

Question ID : 264330109763  
Option 1 ID : 264330431329  
Option 2 ID : 264330431332  
Option 3 ID : 264330431331  
Option 4 ID : 264330431330  
Status : Answered  
Chosen Option : 4

Q.22 Six numbers 1, 2, 3, 4, 5 and 6 are written on different faces of a dice. Two positions of this dice are shown in the figure. Find the number on the face opposite to 2.



- Ans
- 1. 5
  - 2. 3
  - 3. 4
  - 4. 6

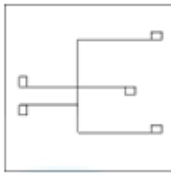
Question ID : 264330117905  
Option 1 ID : 264330463438  
Option 2 ID : 264330463435  
Option 3 ID : 264330463437  
Option 4 ID : 264330463436  
Status : Answered  
Chosen Option : 4

Q.23 Select the option in which the given figure is embedded (rotation is NOT allowed).

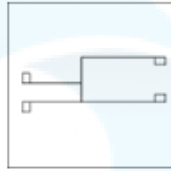


Ans

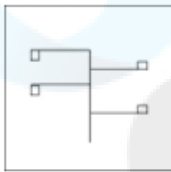
✗ 1.



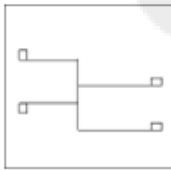
✓ 2.



✗ 3.



✗ 4.



Question ID : 264330117866

Option 1 ID : 264330463281

Option 2 ID : 264330463279

Option 3 ID : 264330463282

Option 4 ID : 264330463280

Status : Answered

Chosen Option : 2

Q.24 Five people A, B, C, D and E are sitting in a straight row, facing north. Only two people are seated to the left of C. D is sitting at the extreme right end. B is not an immediate neighbour of D, and is second to the left of A. Where is B sitting?

Ans ✓ 1. To the immediate right of E

✗ 2. To the immediate right of C

✗ 3. Fourth to the left of D

✗ 4. Third to the left of A

Question ID : 26433091434

Option 1 ID : 264330359102

Option 2 ID : 264330359101

Option 3 ID : 264330359103

Option 4 ID : 264330359104

Status : Answered

Chosen Option : 1

Q.25 Which figure should replace the question mark (?) if the following series were to be continued?

☆	=	B	△	☆	F	=	△	☆	B		?				
O	F	△	☆	=	Z	O	B	△	☆	F		Z	O	=	△
B		Z	O	F	=	Z	O	B	F	Z					

Ans

✓ 1.

F		△
☆	B	Z
O		=

✗ 2.

F	=	
☆	Z	B
O		△

✗ 3.

F		Z
☆	=	B
O		△

✗ 4.

O		Z
F	☆	B
=		△

Question ID : 264330103884

Option 1 ID : 264330407837

Option 2 ID : 264330407838

Option 3 ID : 264330407840

Option 4 ID : 264330407839

Status : Answered

Chosen Option : 1

Section : Numerical Ability

Q.1 What is the area (in  $\text{cm}^2$ ) of a parallelogram whose base length and height are 4 cm and 5 cm, respectively?

Ans ✗ 1. 18

✗ 2. 15

✓ 3. 20

✗ 4. 10

Question ID : 264330112236

Option 1 ID : 264330441032

Option 2 ID : 264330441029

Option 3 ID : 264330441030

Option 4 ID : 264330441031

Status : Answered

Chosen Option : 3

Q.2 Sushil's income is 22% less than Abhishek's income. Abhishek's income is what % more than Sushil's income?

- Ans
- 1. 27.8%
  - 2. 28.20%
  - 3. 30.8%
  - 4. 25.8%

Question ID : 264330131827  
Option 1 ID : 264330516409  
Option 2 ID : 264330516407  
Option 3 ID : 264330516408  
Option 4 ID : 264330516410  
Status : Answered  
Chosen Option : 2

Q.3 Find the difference between the compound interests on ₹2,000 for 1 year at 8% p.a. compounded annually and half-yearly.

- Ans
- 1. ₹2.20
  - 2. ₹3.00
  - 3. ₹3.20
  - 4. ₹2.00

Question ID : 264330103984  
Option 1 ID : 264330408240  
Option 2 ID : 264330408237  
Option 3 ID : 264330408238  
Option 4 ID : 264330408239  
Status : Answered  
Chosen Option : 3

Q.4 The sum of two numbers is 1904 and their HCF 56. The number of such number pairs is:

- Ans
- 1. 3
  - 2. 9
  - 3. 8
  - 4. 4

Question ID : 264330103918  
Option 1 ID : 264330407974  
Option 2 ID : 264330407976  
Option 3 ID : 264330407973  
Option 4 ID : 264330407975  
Status : Not Attempted and Marked For Review  
Chosen Option : --

Q.5 If the radius of a sphere is increased by 3 cm, then its surface area increases by  $156\pi$   $\text{cm}^2$ . The radius of the sphere before the increase was:

- Ans
- 1. 7 cm
  - 2. 8 cm
  - 3. 6 cm
  - 4. 5 cm

Question ID : 264330119365  
Option 1 ID : 264330467748  
Option 2 ID : 264330467750  
Option 3 ID : 264330467747  
Option 4 ID : 264330467749  
Status : Answered  
Chosen Option : 4

Q.6 A bag contains 4800 g of rice. 20% of rice is added in the bag after which 10% quantity is taken out. Then 15% quantity is added back in the bag. Lastly, 25% of rice is taken out of the bag. What is the weight of the bag now, in grams?

- Ans
- 1. 4471.2
  - 2. 4173.12
  - 3. 4473.2
  - 4. 7452

Question ID : 264330129995  
Option 1 ID : 264330509214  
Option 2 ID : 264330509212  
Option 3 ID : 264330509211  
Option 4 ID : 264330509213  
Status : Answered  
Chosen Option : 1

Q.7 Two erasers cost ₹2 each and are free with one packet of pencils costing ₹15. The discount will be:

- Ans
- 1.  $21\frac{1}{19}\%$
  - 2.  $26\frac{2}{3}\%$
  - 3.  $78\frac{18}{19}\%$
  - 4.  $13\frac{1}{3}\%$

Question ID : 264330183852  
Option 1 ID : 264330721084  
Option 2 ID : 264330721085  
Option 3 ID : 264330721086  
Option 4 ID : 264330721087  
Status : Answered  
Chosen Option : 1

Q.8 Rajan covered a total distance of 108 km at an average speed of 12 km/h. He covers  $\frac{1}{6}$  of total distance in 2 hours while  $\frac{1}{4}$  of the total distance at a speed of 9 km/h. In how much time did he cover the remaining distance?

- Ans
- 1. 2 hours
  - 2. 3 hours
  - 3. 4 hours
  - 4. 5 hours

Question ID : 264330133280  
Option 1 ID : 264330522169  
Option 2 ID : 264330522167  
Option 3 ID : 264330522168  
Option 4 ID : 264330522170  
Status : Answered  
Chosen Option : 3

Q.9 Mr. Sharma deposits his retirement benefit of ₹5 lakhs, partly in a post office and partly in a bank, at 12% and 10% p.a. rate of interest, respectively. If his monthly interest income was ₹4,500, then the difference between the deposit in the post office and in the bank is:

- Ans
- 1. ₹1,50,000
  - 2. ₹1,60,000
  - 3. ₹1,40,000
  - 4. ₹1,00,000

Question ID : 264330118425  
Option 1 ID : 264330465103  
Option 2 ID : 264330465101  
Option 3 ID : 264330465104  
Option 4 ID : 264330465102  
Status : Answered  
Chosen Option : 4

Q.10 Gopi purchased an article at  $\frac{7}{8}$  of its selling price. Had he sold it at 20% more than the selling price, then what would his profit percentage be?

- Ans
- 1. 37%
  - 2. 35%
  - 3.  $37\frac{1}{7}\%$
  - 4.  $35\frac{1}{7}\%$

Question ID : 264330111463  
Option 1 ID : 264330437937  
Option 2 ID : 264330437939  
Option 3 ID : 264330437940  
Option 4 ID : 264330437938  
Status : Answered  
Chosen Option : 3

Q.11 Which of the following numbers is prime?

- Ans
- 1. 144765
  - 2. 144723
  - 3. 144757
  - 4. 144393

Question ID : 264330104348  
Option 1 ID : 264330409695  
Option 2 ID : 264330409696  
Option 3 ID : 264330409693  
Option 4 ID : 264330409694  
Status : Answered  
Chosen Option : 3

Q.12 A goods train travelling at a constant speed crosses two persons walking in the same direction (as that of the train) in 10.6 seconds and 11 seconds, respectively. The first person was walking at 5.4 km/h, while the second was walking at 6.3 km/h. What was the length of the train (in m)?

- Ans
- 1. 72.975
  - 2. 72.875
  - 3. 72.675
  - 4. 72.725

Question ID : 264330183821  
Option 1 ID : 264330720960  
Option 2 ID : 264330720961  
Option 3 ID : 264330720962  
Option 4 ID : 264330720963  
Status : Not Answered  
Chosen Option : --

Q.13 If  $a : b = 3 : 4$ , then the  $(5a + 7b) : (7a + 5b)$  is:

- Ans
- 1. 43 : 31
  - 2. 31 : 32
  - 3. 31 : 41
  - 4. 43 : 41

Question ID : 264330168928  
Option 1 ID : 264330662516  
Option 2 ID : 264330662515  
Option 3 ID : 264330662517  
Option 4 ID : 264330662518  
Status : Answered  
Chosen Option : 4

Q.14 If A can do a piece of work in 16 days and B can do the same work in 24 days, the least whole number of days to complete the work, if they start working on alternate days, is:

- Ans
- 1. 18
  - 2. 19
  - 3. 21
  - 4. 20

Question ID : 264330103569  
Option 1 ID : 264330406583  
Option 2 ID : 264330406581  
Option 3 ID : 264330406584  
Option 4 ID : 264330406582  
Status : Answered  
Chosen Option : 2

Q.15 If  $0.2x = 0.04y$ , then the value of  $\frac{x+y}{y-x}$  is:

- Ans
- 1.  $\frac{3}{2}$
  - 2.  $\frac{1}{3}$
  - 3.  $\frac{2}{3}$
  - 4.  $\frac{1}{2}$

Question ID : 264330111438  
Option 1 ID : 264330437839  
Option 2 ID : 264330437840  
Option 3 ID : 264330437837  
Option 4 ID : 264330437838  
Status : Answered  
Chosen Option : 1

Section : Computer Proficiency

Q.1 Which option in Microsoft Excel allows you to create a custom bullet style for a bulleted list?

- Ans
- 1. Format Cells
  - 2. Define New Bullet
  - 3. Styles
  - 4. Text Box

Question ID : 264330173310  
Option 1 ID : 264330679720  
Option 2 ID : 264330679722  
Option 3 ID : 264330679719  
Option 4 ID : 264330679721  
Status : Answered  
Chosen Option : 2

Q.2 Which of the following keyboard shortcuts can be used to paste cut text after moving it?

- Ans
- 1. Ctrl + X
  - 2. Ctrl + P
  - 3. Ctrl + V
  - 4. Ctrl + C

Question ID : 264330180833  
Option 1 ID : 264330709297  
Option 2 ID : 264330709295  
Option 3 ID : 264330709296  
Option 4 ID : 264330709298  
Status : Answered  
Chosen Option : 3

Q.3 What does URL stand for?

- Ans
- 1. Uniform Resource Locator
  - 2. Uniform Resource Location
  - 3. United Resources Locator
  - 4. Uniform Receivers Locator

Question ID : 264330182033  
Option 1 ID : 264330713972  
Option 2 ID : 264330713974  
Option 3 ID : 264330713971  
Option 4 ID : 264330713973  
Status : Answered  
Chosen Option : 1

Q.4 Which tab in Microsoft Word 365 contains the 'Open' option to open an existing document?

- Ans
- 1. File
  - 2. View
  - 3. Home
  - 4. Insert

Question ID : 264330180719  
Option 1 ID : 264330708843  
Option 2 ID : 264330708846  
Option 3 ID : 264330708844  
Option 4 ID : 264330708845  
Status : Answered  
Chosen Option : 1

Q.5 'Contact Us' is present in which of the following sections in MS Word 365?

- Ans
- 1. Help
  - 2. Review
  - 3. Mailings
  - 4. References

Question ID : 264330176729  
Option 1 ID : 264330693131  
Option 2 ID : 264330693134  
Option 3 ID : 264330693133  
Option 4 ID : 264330693132  
Status : Answered  
Chosen Option : 1

**Q.6 Which of the following is used to select an entire line or paragraph from the cursor place in MS-Word 365?**

- Ans**
- 1. Triple mouse click
  - 2. Both single and double mouse click
  - 3. Single mouse click
  - 4. Double mouse click

Question ID : 264330178273  
Option 1 ID : 264330699149  
Option 2 ID : 264330699150  
Option 3 ID : 264330699147  
Option 4 ID : 264330699148  
Status : Answered  
Chosen Option : 1

**Q.7 Which of the following signs appears when you drag the fill handle while creating text, number and data series in MS Excel 365?**

- Ans**
- 1. \$
  - 2. =
  - 3. \*
  - 4. +

Question ID : 264330182345  
Option 1 ID : 264330715205  
Option 2 ID : 264330715206  
Option 3 ID : 264330715204  
Option 4 ID : 264330715203  
Status : Answered  
Chosen Option : 1

**Q.8 Which of the following is an area where the outgoing messages or messages that are in the process of sending or which failed to send are stored?**

- Ans**
- 1. Outbox
  - 2. Inbox
  - 3. Trash
  - 4. Sentmail

Question ID : 264330178240  
Option 1 ID : 264330699016  
Option 2 ID : 264330699015  
Option 3 ID : 264330699018  
Option 4 ID : 264330699017  
Status : Answered  
Chosen Option : 1

**Q.9 Which of the following is true about sort A to Z in MS-Excel 365?**

- Ans**
- 1. Sorts the selected column in an descending order
  - 2. Sorts the selected column in an ascending order
  - 3. Sorts data in multiple column by applying different sort criteria
  - 4. Sorts the selected row in an descending order

Question ID : 264330178261  
Option 1 ID : 264330699099  
Option 2 ID : 264330699100  
Option 3 ID : 264330699101  
Option 4 ID : 264330699102  
Status : Answered  
Chosen Option : 2

**Q.10** What is the purpose of the 'Track Changes' feature in Microsoft Word 365?

- Ans**
- 1. To highlight spelling and grammar errors in a document.
  - 2. To keep a record of edits made to a document by different authors.
  - 3. To create a backup copy of the document.
  - 4. To automatically save changes made to a document.

Question ID : 264330173587

Option 1 ID : 264330680828

Option 2 ID : 264330680829

Option 3 ID : 264330680830

Option 4 ID : 264330680827

Status : Answered

Chosen Option : 3