

## Constable Executive Male and Female in Delhi Police Examination 2023

Roll Number	
Candidate Name	
Venue Name	
Exam Date	24/11/2023
Exam Time	12:00 PM - 1:30 PM
Subject	Constable Executive Male and Female in Delhi Police Examination 2023

Section : General Knowledge

**Q.1 The structural part of the Indian Constitution is derived from:**

- Ans
- 1. Government of India Act 1919
  - 2. Government of India Act 1935
  - 3. Government of India Act 1909
  - 4. Government of India Act 1958

Question ID : 264330111508  
Option 1 ID : 264330438119  
Option 2 ID : 264330438120  
Option 3 ID : 264330438118  
Option 4 ID : 264330438117  
Status : Answered  
Chosen Option : 2

**Q.2 Padma Shri awardee, Shivnath Mishra is an exponent of Benaras Gharana and he plays \_\_\_\_\_ styles of Benaras Gayaki Ang.**

- Ans
- 1. Six
  - 2. Three
  - 3. Two
  - 4. Four

Question ID : 264330111955  
Option 1 ID : 264330439906  
Option 2 ID : 264330439905  
Option 3 ID : 264330439908  
Option 4 ID : 264330439907  
Status : Answered  
Chosen Option : 4

**Q.3 What is the full form of NADA?**

- Ans
- 1. National Age-Detecting Agency
  - 2. National Assessment and Development Agency
  - 3. National Athletes-Development Agency
  - 4. National Anti-Doping Agency

Question ID : 264330176142  
Option 1 ID : 264330690865  
Option 2 ID : 264330690866  
Option 3 ID : 264330690863  
Option 4 ID : 264330690864  
Status : Answered  
Chosen Option : 4

# Test Prime

ALL EXAMS,  
ONE SUBSCRIPTION



**70,000+**  
Mock Tests



Personalised  
Report Card



Unlimited  
Re-Attempt



**600+**  
Exam Covered



Previous Year  
Papers



**500%**  
Refund



**ATTEMPT FREE MOCK NOW**

Q.4 What is the primary factor contributing to structural unemployment in India?

- Ans
- 1. Lack of education
  - 2. Seasonal variations
  - 3. Unavailability of jobs
  - 4. Technological advancements

Question ID : 264330179291  
Option 1 ID : 264330703169  
Option 2 ID : 264330703167  
Option 3 ID : 264330703170  
Option 4 ID : 264330703168  
Status : Answered  
Chosen Option : 4

Q.5 My times: An autobiography, is authored by whom among the following famous freedom fighters of India?

- Ans
- 1. Vinoba Bhave
  - 2. J B Kriplani
  - 3. Motilal Nehru
  - 4. C R Das

Question ID : 264330112861  
Option 1 ID : 264330443530  
Option 2 ID : 264330443529  
Option 3 ID : 264330443532  
Option 4 ID : 264330443531  
Status : Answered  
Chosen Option : 1

Q.6 The term 'bouncer' is used in which of the following games?

- Ans
- 1. Hockey
  - 2. Football
  - 3. Tennis
  - 4. Cricket

Question ID : 264330130645  
Option 1 ID : 264330511693  
Option 2 ID : 264330511692  
Option 3 ID : 264330511694  
Option 4 ID : 264330511691  
Status : Answered  
Chosen Option : 4

Q.7 Who of the following wrote 'Prithviraj Raso'?

- Ans
- 1. Rajasekhara
  - 2. Jaidev
  - 3. Chand Bardai
  - 4. Padmagupta

Question ID : 264330119958  
Option 1 ID : 264330470108  
Option 2 ID : 264330470110  
Option 3 ID : 264330470109  
Option 4 ID : 264330470107  
Status : Answered  
Chosen Option : 3

Q.8 Shovana Narayan an officer with the Indian Audit and Account Services, has won many awards for her contribution to the field of dance at the international level and has recently acted in a movie. She is an exponent of which of the following dance forms?

- Ans
- 1. Bharatanatyam
  - 2. Kathak
  - 3. Odissi
  - 4. Kuchipudi

Question ID : 26433071521  
Option 1 ID : 264330280511  
Option 2 ID : 264330280508  
Option 3 ID : 264330280509  
Option 4 ID : 264330280510  
Status : Answered  
Chosen Option : 2

Q.9 Article 76 of the Constitution of India provides for:

- Ans
- 1. Ombudsman
  - 2. Finance Commission Chairman
  - 3. Election Commissioner
  - 4. Attorney General

Question ID : 264330110811  
Option 1 ID : 264330435523  
Option 2 ID : 264330435524  
Option 3 ID : 264330435521  
Option 4 ID : 264330435522  
Status : Answered  
Chosen Option : 4

Q.10 Who among the following kings founded a suburban township near Vijayanagara called Nagalapuram?

- Ans
- 1. Deva Raya II
  - 2. Rajaraja Chola
  - 3. Rajendra I
  - 4. Krishnadevaraya

Question ID : 264330117686  
Option 1 ID : 264330462742  
Option 2 ID : 264330462741  
Option 3 ID : 264330462740  
Option 4 ID : 264330462739  
Status : Answered  
Chosen Option : 2

Q.11 During the British era India was an exporter of:

- Ans
- 1. capital goods
  - 2. industrial products
  - 3. Manufacturing products
  - 4. primary products

Question ID : 264330120889  
Option 1 ID : 264330473774  
Option 2 ID : 264330473772  
Option 3 ID : 264330473773  
Option 4 ID : 264330473771  
Status : Answered  
Chosen Option : 1

Q.12 In the game of discus throw what is the standard weight of a discus for women?

- Ans
- 1. 1500 gm
  - 2. 1000 gm
  - 3. 1200 gm
  - 4. 800 gm

Question ID : 264330118480  
Option 1 ID : 264330465324  
Option 2 ID : 264330465322  
Option 3 ID : 264330465323  
Option 4 ID : 264330465321  
Status : Answered  
Chosen Option : 4

Q.13 Which of the following is referred to as a relaxation of Government restrictions?

- Ans
- 1. Disinvestment
  - 2. Liberalisation
  - 3. Globalisation
  - 4. Privatisation

Question ID : 26433082173  
Option 1 ID : 264330322526  
Option 2 ID : 264330322525  
Option 3 ID : 264330322527  
Option 4 ID : 264330322528  
Status : Answered  
Chosen Option : 1

Q.14 In which of the following states of India is the Nokrek Biosphere Reserve located?

- Ans
- 1. Nagaland
  - 2. Meghalaya
  - 3. Karnataka
  - 4. Telangana

Question ID : 264330178014  
Option 1 ID : 264330698131  
Option 2 ID : 264330698132  
Option 3 ID : 264330698133  
Option 4 ID : 264330698134  
Status : Answered  
Chosen Option : 2

Q.15 Which of the following communities of Sikkim celebrates 'Sonam Lochar' as its New Year on the first day of the twelfth month in the lunar calendar?

- Ans
- 1. Kirat Khambu Rai
  - 2. Lepcha
  - 3. Tamang
  - 4. Gurung

Question ID : 264330106208  
Option 1 ID : 264330417135  
Option 2 ID : 264330417134  
Option 3 ID : 264330417136  
Option 4 ID : 264330417133  
Status : Answered  
Chosen Option : 2

Q.16 In the Commonwealth Games, 2022, India won \_\_\_\_\_ .

- Ans
- 1. 25 gold medals
  - 2. 22 gold medals
  - 3. 24 gold medals
  - 4. 23 gold medals

Question ID : 264330132521  
Option 1 ID : 264330519182  
Option 2 ID : 264330519179  
Option 3 ID : 264330519181  
Option 4 ID : 264330519180  
Status : Answered  
Chosen Option : 2

Q.17 Identify the precipitate formed when carbon dioxide gas is passed through lime water.

- Ans
- 1. Zinc carbonate
  - 2. Calcium oxide
  - 3. Sodium oxide
  - 4. Calcium carbonate

Question ID : 264330134892  
Option 1 ID : 264330528506  
Option 2 ID : 264330528503  
Option 3 ID : 264330528505  
Option 4 ID : 264330528504  
Status : Answered  
Chosen Option : 4

Q.18 Which Article of the Constitution of India mentions that the State shall, in particular, direct its policy towards securing equal pay for equal work for both, men and women?

- Ans
- 1. Article 30
  - 2. Article 37
  - 3. Article 39
  - 4. Article 33

Question ID : 264330180879  
Option 1 ID : 264330709479  
Option 2 ID : 264330709481  
Option 3 ID : 264330709482  
Option 4 ID : 264330709480  
Status : Answered  
Chosen Option : 3

Q.19 In which of the following years did the Muslim League demand Pakistan, a separate nation for Indian Muslims?

- Ans
- 1. 1932
  - 2. 1940
  - 3. 1937
  - 4. 1943

Question ID : 264330120258  
Option 1 ID : 264330471290  
Option 2 ID : 264330471289  
Option 3 ID : 264330471288  
Option 4 ID : 264330471287  
Status : Answered  
Chosen Option : 3

Q.20 Padmaja Reddy is a famous \_\_\_\_\_ classical dancer.

- Ans
- 1. Kathak
  - 2. Kathakali
  - 3. Kuchipudi
  - 4. Bharatnatyam

Question ID : 264330106195  
Option 1 ID : 264330417083  
Option 2 ID : 264330417084  
Option 3 ID : 264330417082  
Option 4 ID : 264330417081  
Status : Answered  
Chosen Option : 3

Q.21 The process of removing silica from soil is known as:

- Ans
- 1. salinisation
  - 2. polarisation
  - 3. leaching
  - 4. desilication

Question ID : 264330131743  
Option 1 ID : 264330516071  
Option 2 ID : 264330516074  
Option 3 ID : 264330516073  
Option 4 ID : 264330516072  
Status : Answered  
Chosen Option : 1

Q.22 Who is considered as the highest law officer in the country?

- Ans
- 1. Chief Election Commissioner
  - 2. Chairman of NITI AAYOG
  - 3. Attorney General of India
  - 4. Chief Justice of India

Question ID : 264330173509  
Option 1 ID : 264330680517  
Option 2 ID : 264330680515  
Option 3 ID : 264330680516  
Option 4 ID : 264330680518  
Status : Answered  
Chosen Option : 3

Q.23 Ponnayya, Vadivelu, Shivanandam and Chinnayya who were renowned as Tanjore Bandhu, were well-known exponents of which dance?

- Ans
- 1. Kuchipudi
  - 2. Kathakali
  - 3. Bharatnatyam
  - 4. Mohiniyattam

Question ID : 264330110441  
Option 1 ID : 264330434043  
Option 2 ID : 264330434041  
Option 3 ID : 264330434044  
Option 4 ID : 264330434042  
Status : Answered  
Chosen Option : 1

Q.24 Which dynasty's king was the first ruler to issue gold coins on a large scale in India?

- Ans
- 1. Shaka
  - 2. Unani
  - 3. Pahlava
  - 4. Kushan

Question ID : 264330119727  
Option 1 ID : 264330469183  
Option 2 ID : 264330469184  
Option 3 ID : 264330469186  
Option 4 ID : 264330469185  
Status : Answered  
Chosen Option : 1

Q.25 Which Article of the Constitution of India mentions that "it shall be the duty of every citizen of India to protect and improve the natural environment including forests, lakes, rivers and wild life, and to have compassion for living creatures"?

- Ans
- 1. 51A (b)
  - 2. 51A (j)
  - 3. 51A (g)
  - 4. 51A (e)

Question ID : 264330133055  
Option 1 ID : 264330521273  
Option 2 ID : 264330521272  
Option 3 ID : 264330521274  
Option 4 ID : 264330521271  
Status : Answered  
Chosen Option : 2

Q.26 Identify the artist who is NOT associated with the musical instrument sarangi.

- Ans
- 1. Pandit Ram Narayan
  - 2. Ustad Binda Khan
  - 3. Pandit Vishwa Mohan Bhat
  - 4. Shakoor Khan

Question ID : 264330111188  
Option 1 ID : 264330436839  
Option 2 ID : 264330436840  
Option 3 ID : 264330436838  
Option 4 ID : 264330436837  
Status : Answered  
Chosen Option : 3

Q.27 Which of the following schemes come under the Ministry of Commerce and Industry?

- Ans
- 1. Swachh Bharat Abhiyan
  - 2. National Digital Health Mission
  - 3. National Bal Swachhta
  - 4. Make in India

Question ID : 264330110014  
Option 1 ID : 264330432333  
Option 2 ID : 264330432335  
Option 3 ID : 264330432334  
Option 4 ID : 264330432336  
Status : Answered  
Chosen Option : 4

Q.28 Pandrethan temple of Srinagar is associated with which of the following religions?

- Ans
- 1. Hinduism
  - 2. Sikhism
  - 3. Jainism
  - 4. Buddhism

Question ID : 264330111858  
Option 1 ID : 264330439517  
Option 2 ID : 264330439520  
Option 3 ID : 264330439519  
Option 4 ID : 264330439518  
Status : Answered  
Chosen Option : 4

Q.29 The Charter Act of \_\_\_\_\_ suspended the monopoly of the East India Company over trade with India.

- Ans
- 1. 1973
  - 2. 1853
  - 3. 1833
  - 4. 1813

Question ID : 264330114851  
Option 1 ID : 264330451492  
Option 2 ID : 264330451491  
Option 3 ID : 264330451489  
Option 4 ID : 264330451490  
Status : Answered  
Chosen Option : 2

Q.30 In which of the following years was the Railway budget merged with the Union budget?

- Ans
- 1. 2015
  - 2. 2017
  - 3. 2012
  - 4. 2019

Question ID : 264330116489  
Option 1 ID : 264330458042  
Option 2 ID : 264330458043  
Option 3 ID : 264330458041  
Option 4 ID : 264330458044  
Status : Answered  
Chosen Option : 2

**Q.31** Who among the following won the '66th Filmfare Award 2021 for Best Choreography' for the song Dil Bechara?

- Ans
- 1. Ganesh Acharya
  - 2. Prabhu Deva
  - 3. Farah Khan
  - 4. Remo D'Souza

Question ID : 264330130525  
Option 1 ID : 264330511213  
Option 2 ID : 264330511214  
Option 3 ID : 264330511212  
Option 4 ID : 264330511211  
Status : Answered  
Chosen Option : 2

**Q.32** The process by which the mix of species and habitat in an area changes over time is called:

- Ans
- 1. ecological balance
  - 2. ecological degradation
  - 3. ecological succession
  - 4. ecological saturation

Question ID : 264330111901  
Option 1 ID : 264330439689  
Option 2 ID : 264330439692  
Option 3 ID : 264330439691  
Option 4 ID : 264330439690  
Status : Answered  
Chosen Option : 1

**Q.33** Who is known as the 'Father of Microfinance'? He founded Grameen Bank to make small loans available to the poor.

- Ans
- 1. Amartya Sen
  - 2. Muhammad Yunus
  - 3. Mahatma Gandhi
  - 4. Mahbub Haq

Question ID : 264330166886  
Option 1 ID : 264330654581  
Option 2 ID : 264330654582  
Option 3 ID : 264330654580  
Option 4 ID : 264330654579  
Status : Answered  
Chosen Option : 2

**Q.34** Through which Constitution Amendment Act was Article 39A inserted into the Constitution of India?

- Ans
- 1. 48<sup>th</sup> Amendment Act
  - 2. 46<sup>th</sup> Amendment Act
  - 3. 44<sup>th</sup> Amendment Act
  - 4. 42<sup>nd</sup> Amendment Act

Question ID : 264330180880  
Option 1 ID : 264330709486  
Option 2 ID : 264330709485  
Option 3 ID : 264330709484  
Option 4 ID : 264330709483  
Status : Answered  
Chosen Option : 3

**Q.35** Banganga Festival, held every year in the city of Mumbai, is a musical tribute to\_\_\_\_\_.

- Ans
- 1. Lord Brahma
  - 2. Lord Rama
  - 3. Lord Ganesh
  - 4. Lord Shiva

Question ID : 264330134254  
Option 1 ID : 264330526014  
Option 2 ID : 264330526012  
Option 3 ID : 264330526011  
Option 4 ID : 264330526013  
Status : Answered  
Chosen Option : 3

**Q.36** Identify the group of crops that are associated with Kharif season in the northern states of India?

- Ans
- 1. Rice, Cotton, Bajra, Rapeseeds, Mustard
  - 2. Cotton, Bajra, Maize, Wheat, Gram
  - 3. Wheat, Gram, Rapeseeds, Mustard, Barley
  - 4. Rice, Cotton, Bajra, Maize, Jowar

Question ID : 264330120312  
Option 1 ID : 264330471501  
Option 2 ID : 264330471502  
Option 3 ID : 264330471500  
Option 4 ID : 264330471499  
Status : Answered  
Chosen Option : 1

**Q.37** When was the Jan Dhan Yojana launched?

- Ans
- 1. 2015
  - 2. 2016
  - 3. 2013
  - 4. 2014

Question ID : 264330112497  
Option 1 ID : 264330442075  
Option 2 ID : 264330442076  
Option 3 ID : 264330442073  
Option 4 ID : 264330442074  
Status : Answered  
Chosen Option : 2

Q.38 Which of the following was co-founded by Subhas Chandra Bose?

- Ans  1. All India Forward Bloc  
 2. All India Students Federation  
 3. Kisan Majdoor Praja Party  
 4. Congress Socialist Party

Question ID : 264330120429  
Option 1 ID : 264330471967  
Option 2 ID : 264330471968  
Option 3 ID : 264330471970  
Option 4 ID : 264330471969  
Status : Answered  
Chosen Option : 2

Q.39 In the states, No Demand for Grants can be made EXCEPT on the recommendation of the \_\_\_\_\_.

- Ans  1. Governor  
 2. Chief Minister  
 3. Finance Minister of the State  
 4. President of India

Question ID : 264330120187  
Option 1 ID : 264330471005  
Option 2 ID : 264330471004  
Option 3 ID : 264330471006  
Option 4 ID : 264330471003  
Status : Answered  
Chosen Option : 1

Q.40 The famous Hindu Temple 'Koneswaram' is located in which country?

- Ans  1. Pakistan  
 2. Nepal  
 3. Bhutan  
 4. Sri Lanka

Question ID : 264330120351  
Option 1 ID : 264330471655  
Option 2 ID : 264330471656  
Option 3 ID : 264330471658  
Option 4 ID : 264330471657  
Status : Answered  
Chosen Option : 2

Q.41 Which of the following statement is related to Koeppen's 'A' type of climate?

- Ans  1. Average temperature for all months is below 10°C  
 2. Cold due to elevation  
 3. Average temperature of the coldest month is 18°C or higher  
 4. Possible evaporation is equal to precipitation

Question ID : 264330131109  
Option 1 ID : 264330513548  
Option 2 ID : 264330513550  
Option 3 ID : 264330513549  
Option 4 ID : 264330513547  
Status : Answered  
Chosen Option : 4

Q.42 'Mails Aanchal', one of the finest examples of regional novels is written by:

- Ans  1. Phanishwar Nath Renu  
 2. Kamleshwar  
 3. Kedar Nath Singh  
 4. Munshi Premchand

Question ID : 26433064627  
Option 1 ID : 264330253100  
Option 2 ID : 264330253101  
Option 3 ID : 264330253102  
Option 4 ID : 264330253103  
Status : Answered  
Chosen Option : 1

Q.43 According to the Ministry of Fisheries, Animal Husbandry and Dairying, Government of India, what was India's rank in milk production in the world in 2022?

- Ans  1. First  
 2. Third  
 3. Fifth  
 4. Second

Question ID : 264330138057  
Option 1 ID : 264330540837  
Option 2 ID : 264330540836  
Option 3 ID : 264330540835  
Option 4 ID : 264330540838  
Status : Answered  
Chosen Option : 1

Q.44 The lower portion of Dhamekh Stupa at Sarnath is covered with carved \_\_\_\_\_ .

- Ans  1. granite  
 2. marble  
 3. stone  
 4. wood

Question ID : 264330106226  
Option 1 ID : 264330417205  
Option 2 ID : 264330417206  
Option 3 ID : 264330417208  
Option 4 ID : 264330417207  
Status : Answered  
Chosen Option : 1

Q.45 Who among the following Muslim leaders of British India joined the All-India Muslim League in 1913?

- Ans  1. Maulana Shaukat Ali  
 2. Maulana Abul Kalam Azad  
 3. Muhammad Ali Jinnah  
 4. Hakim Ajmal Khan

Question ID : 264330113584  
Option 1 ID : 264330446422  
Option 2 ID : 264330446423  
Option 3 ID : 264330446424  
Option 4 ID : 264330446421  
Status : Answered  
Chosen Option : 3

**Q.46** Which of the following committees was constituted in 1955 for village and small-scale industries?

- Ans
- 1. Kohli Committee
  - 2. Karve Committee
  - 3. Hussain Committee
  - 4. Nayak Committee

Question ID : 264330109394  
Option 1 ID : 264330429856  
Option 2 ID : 264330429853  
Option 3 ID : 264330429855  
Option 4 ID : 264330429854  
Status : Answered  
Chosen Option : 4

**Q.47** Gorgonia ventalina is the scientific name of which saltwater invertebrate?

- Ans
- 1. Sea cucumber
  - 2. Sea urchin
  - 3. Common sea fan
  - 4. Sea anemone

Question ID : 264330130979  
Option 1 ID : 264330513029  
Option 2 ID : 264330513030  
Option 3 ID : 264330513027  
Option 4 ID : 264330513028  
Status : Answered  
Chosen Option : 1

**Q.48** What was the capital of North-western province under Ashoka?

- Ans
- 1. Ujjayini
  - 2. Tosali
  - 3. Taxila
  - 4. Suvarnagiri

Question ID : 264330120280  
Option 1 ID : 264330471371  
Option 2 ID : 264330471372  
Option 3 ID : 264330471374  
Option 4 ID : 264330471373  
Status : Answered  
Chosen Option : 2

**Q.49** According to the 2011 Census, which state has the least population in India?

- Ans
- 1. Sikkim
  - 2. Nagaland
  - 3. Tripura
  - 4. Arunachal Pradesh

Question ID : 264330130591  
Option 1 ID : 264330511475  
Option 2 ID : 264330511477  
Option 3 ID : 264330511476  
Option 4 ID : 264330511478  
Status : Answered  
Chosen Option : 2

**Q.50** Consider the following statements and select the correct option.

**A:** All the objects must change from solids into liquids before changing into gases.

**B:** Evaporation is the process by which solids can change into gases.

- Ans**
- 1. A is false, but B is true
  - 2. Both A and B are true
  - 3. Both A and B are false
  - 4. A is true, but B is false

Question ID : 264330177023

Option 1 ID : 264330694287

Option 2 ID : 264330694290

Option 3 ID : 264330694289

Option 4 ID : 264330694288

Status : Answered

Chosen Option : 3

Section : Reasoning

**Q.1** Select the correct combination of mathematical signs that can sequentially replace the \* signs and balance the given equation.

$$20*60*40*20*10*0$$

- Ans**
- 1. +, -, ×, ÷, =
  - 2. +, ×, -, ÷, =
  - 3. +, ×, -, =, ÷
  - 4. +, -, ×, ÷, =

Question ID : 26433079095

Option 1 ID : 264330310387

Option 2 ID : 264330310384

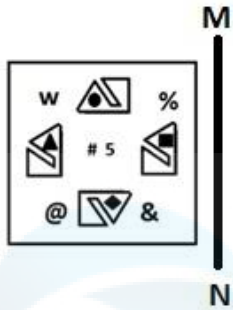
Option 3 ID : 264330310386

Option 4 ID : 264330310385

Status : Answered

Chosen Option : 1

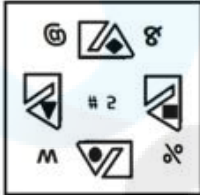
Q.2 Select the correct mirror image of the given combination when the mirror is placed at 'MN' as shown below.



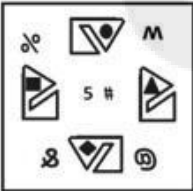
Problem figure:

Ans

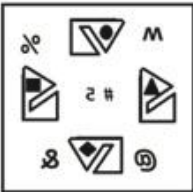
✗ 1.



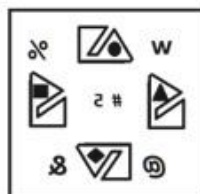
✗ 2.



✗ 3.



✓ 4.



Question ID : 264330122257

Option 1 ID : 264330479162

Option 2 ID : 264330479160

Option 3 ID : 264330479161

Option 4 ID : 264330479159

Status : Answered

Chosen Option : 4

Q.3 Which two signs should be interchanged to make the given equation correct?

$$144 \div 12 + 12 - 12 \times 12 = 1$$

Ans  1. = and  $\times$

2. + and -

3. + and +

4.  $\times$  and -

Question ID : 26433085731

Option 1 ID : 264330336625

Option 2 ID : 264330336626

Option 3 ID : 264330336627

Option 4 ID : 264330336628

Status : Answered

Chosen Option : 1

Q.4 Which of the following option figures will complete the pattern in the figure given below?



Ans



Question ID : 26433080613

Option 1 ID : 264330316386

Option 2 ID : 264330316387

Option 3 ID : 264330316385

Option 4 ID : 264330316388

Status : Answered

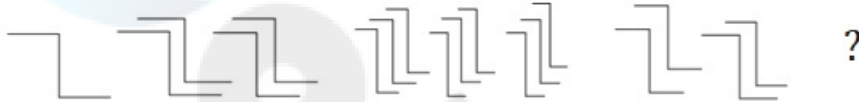
Chosen Option : 2

Q.5 Which of the following options will replace the question mark (?) in the given series?  
43, 301, 236, 1652, 1587, ?, 11044

- Ans
- 1. 963
  - 2. 11109
  - 3. 1173
  - 4. 709

Question ID : 264330109431  
Option 1 ID : 264330430003  
Option 2 ID : 264330430001  
Option 3 ID : 264330430004  
Option 4 ID : 264330430002  
Status : Answered  
Chosen Option : 2

Q.6 Select the figure that will replace the question mark (?) in the following figure series.



- Ans
- 1.
  - 2.
  - 3.
  - 4.

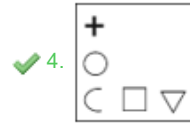

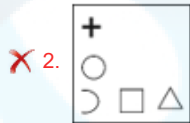
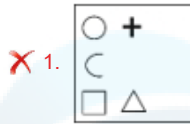
Question ID : 264330112024  
Option 1 ID : 264330440183  
Option 2 ID : 264330440184  
Option 3 ID : 264330440181  
Option 4 ID : 264330440182  
Status : Answered  
Chosen Option : 4

Q.7 Given below is a series of figures – A, B, C and D which follow a particular pattern. Which of the given option figures should come in place of E to continue the series?



(A) (B) (C) (D) (E)

Ans



Question ID : 264330113644

Option 1 ID : 264330446662

Option 2 ID : 264330446663

Option 3 ID : 264330446661

Option 4 ID : 264330446664

Status : Answered

Chosen Option : 4

Q.8 Two statements are given, followed by three conclusions numbered I, II and III. Assuming the statements to be true, even if they seem to be at variance with commonly known facts, decide which of the conclusions logically follow(s) from the statements.

Statements:

All shrubs are trees.

Some plants are shrubs.

Conclusions:

I. All plants are trees.

II. Some trees are shrubs.

III. No plant is a tree.

Ans ✗ 1. Only conclusions II and III follow

✗ 2. Only conclusion III follows

✓ 3. Only conclusion II follows

✗ 4. Either conclusion I or III follows

Question ID : 26433068825

Option 1 ID : 264330269813

Option 2 ID : 264330269812

Option 3 ID : 264330269815

Option 4 ID : 264330269814

Status : Answered

Chosen Option : 3

Q.9 Which figure should replace the question mark (?) in the following series to continue the pattern?

□	8	↑	F	
8 ☆ F	Z 5 □	F 8 V	□ A ↑	?
Z V ↑	V ↑ F	□ 5 Z	5 Z V	

Ans

✗ 1.

A
↑ Z V
□ F 5

✗ 2.

5
A ↑ Z
V □ F

✗ 3.

Z
5 F □
V A ↑

✓ 4.

Z
V F 5
↑ A □

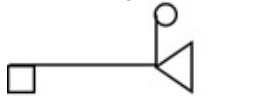
Question ID : 264330129627  
 Option 1 ID : 264330507875  
 Option 2 ID : 264330507877  
 Option 3 ID : 264330507874  
 Option 4 ID : 264330507876  
 Status : Answered  
 Chosen Option : 4

Q.10 In a certain code language, 'CODY' is written as 'CQDA' and 'DINO' is written as 'DKNQ'. How will 'RAIN' be written in that language?

- Ans
- ✗ 1. PCIP
  - ✓ 2. RCIP
  - ✗ 3. RCPI
  - ✗ 4. RPIC

Question ID : 26433087257  
 Option 1 ID : 264330342668  
 Option 2 ID : 264330342666  
 Option 3 ID : 264330342665  
 Option 4 ID : 264330342667  
 Status : Answered  
 Chosen Option : 2

Q.11 Select the option in which the given figure is embedded (rotation is NOT allowed).

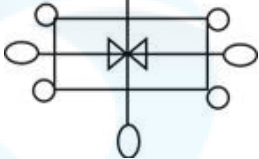


Ans

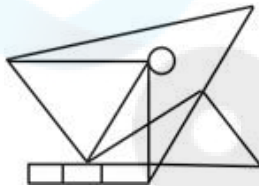
✓ 1.



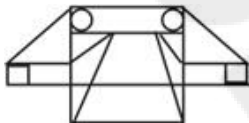
✗ 2.



✗ 3.



✗ 4.



Question ID : 264330172420

Option 1 ID : 264330676232

Option 2 ID : 264330676233

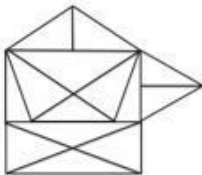
Option 3 ID : 264330676234

Option 4 ID : 264330676231

Status : Answered

Chosen Option : 1

Q.12 How many triangles are there in the figure given below?



Ans

✓ 1. 24

✗ 2. 22

✗ 3. 16

✗ 4. 20

Question ID : 26433085673

Option 1 ID : 264330336396

Option 2 ID : 264330336393

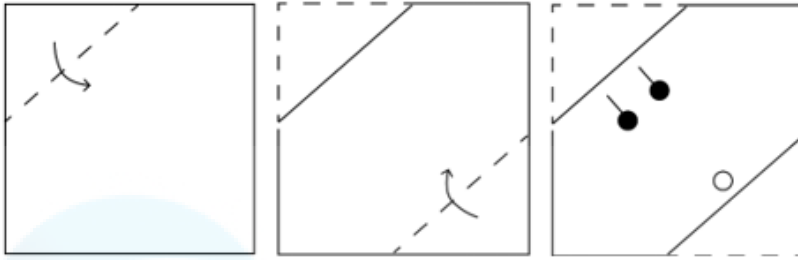
Option 3 ID : 264330336395

Option 4 ID : 264330336394

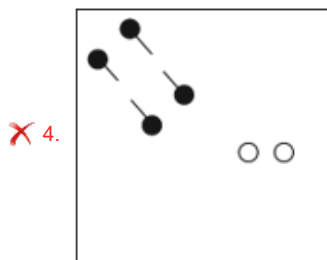
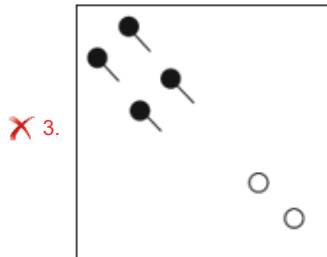
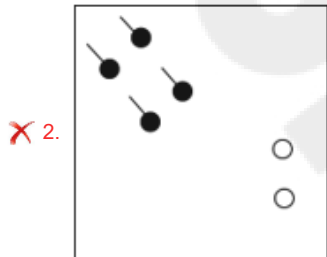
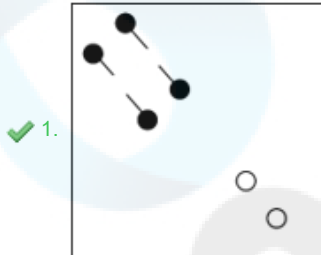
Status : Answered

Chosen Option : 1

Q.13 A square sheet of paper is folded along the dotted line successively along the directions shown and is then punched in the last. How would the paper look when unfolded?



Ans



Question ID : 264330172412

Option 1 ID : 264330676200

Option 2 ID : 264330676201

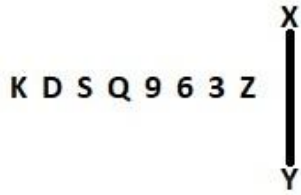
Option 3 ID : 264330676202

Option 4 ID : 264330676199

Status : Answered

Chosen Option : 1

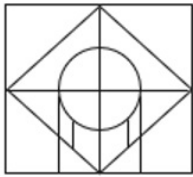
Q.14 Select the correct mirror image of the given combination when the mirror is placed at 'XY' as shown below.



- Ans
- 1. K D 2 0 a e 3 2
  - 2. 2 e a e 0 2 0 K
  - 3. Z 3 6 9 Q S D K
  - 4. 2 3 e a 0 2 D K

Question ID : 264330129695  
 Option 1 ID : 264330508147  
 Option 2 ID : 264330508146  
 Option 3 ID : 264330508148  
 Option 4 ID : 264330508149  
 Status : Answered  
 Chosen Option : 2

Q.15 Select the option figure which is embedded in the given figure. (Rotation is NOT allowed).



- Ans
- 1.
  - 2.
  - 3.
  - 4.

Question ID : 26433085529  
 Option 1 ID : 264330335818  
 Option 2 ID : 264330335817  
 Option 3 ID : 264330335819  
 Option 4 ID : 264330335820  
 Status : Answered  
 Chosen Option : 1

**Q.16** Select the set in which the numbers are related in the same way as are the numbers of the given sets.

(NOTE: Operations should be performed on the whole numbers, without breaking down the numbers into its constituent digits. E.g., 13 – Operations on 13 such as adding/ deleting/ multiplying etc. to 13 can be performed. Breaking down 13 into 1 and 3 and then performing mathematical operations on 1 and 3 is not allowed.)  
(101, 106, 111)  
(214, 198, 182)

- Ans  1. (123, 129, 133)  
 2. (89, 95, 99)  
 3. (78, 136, 190)  
 4. (163, 156, 149)

Question ID : 264330178751

Option 1 ID : 264330701033

Option 2 ID : 264330701031

Option 3 ID : 264330701032

Option 4 ID : 264330701034

Status : Answered

Chosen Option : 4

**Q.17** Which of the following terms will replace the question mark (?) in the given series?  
CYFW, GUIT, KQLQ, ?, SIRK

- Ans  1. ONOM  
 2. PMON  
 3. PNON  
 4. OMON

Question ID : 264330102184

Option 1 ID : 264330401202

Option 2 ID : 264330401203

Option 3 ID : 264330401204

Option 4 ID : 264330401201

Status : Answered

Chosen Option : 4

Q.18 Select the correct mirror image of the given figure when the mirror is placed at MN as shown below.



Ans

- 1. 96RGX
- 2. 96R9X
- 3. 96R9X
- 4. 96RGX

Question ID : 264330132126

Option 1 ID : 264330517600

Option 2 ID : 264330517602

Option 3 ID : 264330517601

Option 4 ID : 264330517599

Status : Answered

Chosen Option : 3

Q.19 Which of the following option figures will complete the pattern in the figure given below?



Ans

✓ 1.



✗ 2.



✗ 3.



✗ 4.



Question ID : 26433080635

Option 1 ID : 264330316475

Option 2 ID : 264330316474

Option 3 ID : 264330316473

Option 4 ID : 264330316476

Status : Answered

Chosen Option : 1

Q.20 Select the option that is related to the fifth letter-cluster in the same way as the second letter-cluster is related to the first letter-cluster and the fourth letter-cluster is related to the third letter-cluster.  
EDGE : CEBC :: ICON : LMAG :: KICK : ?

- Ans
- 1. IAGJ
  - 2. IAGI
  - 3. JAGJ
  - 4. IAHI

Question ID : 26433076458  
 Option 1 ID : 264330299896  
 Option 2 ID : 264330299899  
 Option 3 ID : 264330299898  
 Option 4 ID : 264330299897  
 Status : Answered  
 Chosen Option : 2

Q.21 O, P, Q, R, W and X are sitting around a circular table facing the centre. W sits second to the left of R. Q sits to the immediate left of W. O sits to the immediate left of X. Who sits to the immediate left of R?

- Ans
- 1. P
  - 2. O
  - 3. Q
  - 4. X

Question ID : 264330104023  
 Option 1 ID : 264330408394  
 Option 2 ID : 264330408393  
 Option 3 ID : 264330408395  
 Option 4 ID : 264330408396  
 Status : Answered  
 Chosen Option : 1

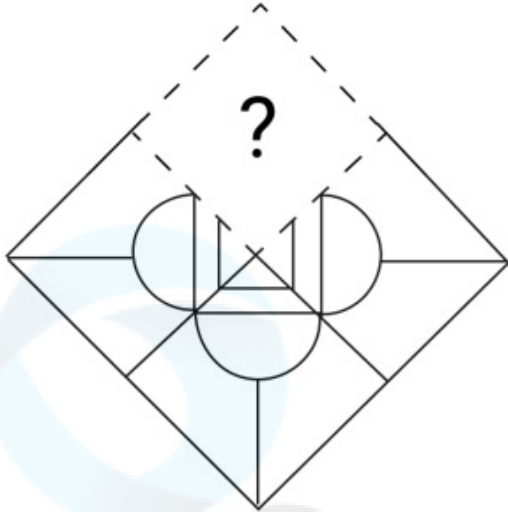
Q.22 Select the correct mirror image of the given figure when the mirror is placed at PQ as shown below.

&HGF%LOR! 

- Ans
- 1. &RQAF%O!GH!
  - 2. !RQAF%O!GH&
  - 3. !RQAF%O!GH&
  - 4. &HGF%LOR!

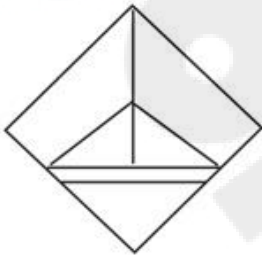
Question ID : 26433082019  
 Option 1 ID : 264330321912  
 Option 2 ID : 264330321911  
 Option 3 ID : 264330321909  
 Option 4 ID : 264330321910  
 Status : Answered  
 Chosen Option : 4

Q.23 Select the figure from the options that can replace the question mark (?) and complete the given pattern.

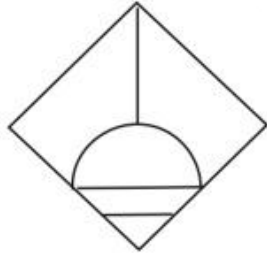


Ans

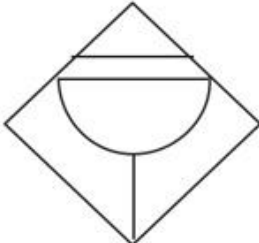
✗ 1.



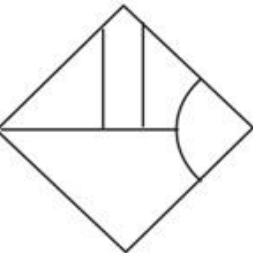
✓ 2.



✗ 3.



✗ 4.



Question ID : 264330106472

Option 1 ID : 264330418192

Option 2 ID : 264330418190

Option 3 ID : 264330418189

Option 4 ID : 264330418191

Status : Answered

Chosen Option : 2

Q.24 Select the correct mirror image of the given figure when the mirror is placed at MN as shown below.

V L M c 3 8 S

M ————— N

Ans

✗ 1.  $\Lambda J W c 3 8 2$

✓ 2.  $\Lambda \Gamma W c 3 8 2$

✗ 3.  $\Lambda \Gamma W \rho 3 8 S$

✗ 4.  $\Lambda \Gamma W c \epsilon 8 2$

Question ID : 26433080792

Option 1 ID : 264330317101

Option 2 ID : 264330317104

Option 3 ID : 264330317103

Option 4 ID : 264330317102

Status : Answered

Chosen Option : 2

Q.25 Select the option that is related to the third term in the same way as the second term is related to the first term and the sixth term is related to the fifth term.  
1278 : 1478 :: 1926 : ? :: 3798 : 3998

Ans ✗ 1. 2026

✗ 2. 1986

✗ 3. 1876

✓ 4. 2126

Question ID : 264330101051

Option 1 ID : 264330396751

Option 2 ID : 264330396749

Option 3 ID : 264330396750

Option 4 ID : 264330396752

Status : Answered

Chosen Option : 4

Section : Numerical Ability

Q.1 Which of the ratio is the smallest?

$$\frac{4}{5}, \frac{12}{14}, \frac{21}{23}, \frac{16}{19}, \frac{79}{85} = ?$$

Ans

1.  $\frac{16}{19}$

2.  $\frac{12}{14}$

3.  $\frac{79}{85}$

4.  $\frac{4}{5}$

Question ID : 264330130176

Option 1 ID : 264330509816

Option 2 ID : 264330509818

Option 3 ID : 264330509817

Option 4 ID : 264330509815

Status : Answered

Chosen Option : 4

Q.2 What is the result of the expression  $4.5 \times 2.8 + 3.6 \times 2.5 - 1.7 \times 12$ ?  
(Use decimal upto 1 point)

Ans  1. 2.3

2. 1.9

3. 3.4

4. 1.2

Question ID : 264330104343

Option 1 ID : 264330409674

Option 2 ID : 264330409673

Option 3 ID : 264330409676

Option 4 ID : 264330409675

Status : Answered

Chosen Option : 4

Q.3 The radius of the base and height of a solid right circular cylinder are in the ratio 7:3 and its volume is  $12474 \text{ cm}^3$ . What is the total surface area of the cylinder?

(Use  $\pi = \frac{22}{7}$ )

Ans  1.  $1760 \text{ cm}^2$

2.  $2960 \text{ cm}^2$

3.  $3960 \text{ cm}^2$

4.  $2160 \text{ cm}^2$

Question ID : 264330119379

Option 1 ID : 264330467804

Option 2 ID : 264330467803

Option 3 ID : 264330467806

Option 4 ID : 264330467805

Status : Answered

Chosen Option : 3

Q.4 Ram received an annual salary of ₹48,580 in the year 2008. This was 25% more than his salary in 2007. What was his salary in 2007?

- Ans
- 1. ₹31,750
  - 2. ₹39,670
  - 3. ₹33,864
  - 4. ₹38,864

Question ID : 264330104292  
Option 1 ID : 264330409471  
Option 2 ID : 264330409469  
Option 3 ID : 264330409472  
Option 4 ID : 264330409470  
Status : Answered  
Chosen Option : 4

Q.5 The price of an article is reduced by 25% and its daily sale is increased by 30%. The net effect on the daily sale receipts is:

- Ans
- 1.  $2\frac{1}{2}\%$  decrease
  - 2. 3% decrease
  - 3.  $2\frac{1}{2}\%$  increase
  - 4. 3% increase

Question ID : 264330104161  
Option 1 ID : 264330408945  
Option 2 ID : 264330408947  
Option 3 ID : 264330408946  
Option 4 ID : 264330408948  
Status : Answered  
Chosen Option : 1

Q.6 If a person walked 14 km/h instead of 10 km/h, he would have walked 20 km more. The actual distance travelled by him is:

- Ans
- 1. 100 km
  - 2. 70 km
  - 3. 50 km
  - 4. 150 km

Question ID : 264330104529  
Option 1 ID : 264330410417  
Option 2 ID : 264330410420  
Option 3 ID : 264330410419  
Option 4 ID : 264330410418  
Status : Answered  
Chosen Option : 3

Q.7 Find the average of 72, 81, 90, 68, 61.

- Ans
- 1. 78.6
  - 2. 72.2
  - 3. 74.4
  - 4. 76.8

Question ID : 264330129385  
Option 1 ID : 264330506908  
Option 2 ID : 264330506906  
Option 3 ID : 264330506909  
Option 4 ID : 264330506907  
Status : Answered  
Chosen Option : 3

Q.8 Four years ago, the population of a city was 10,000. The annual growth rate of the population during the first two years was 20%. In the third and fourth years, there was a decrease in the population at the rate of 10% and 5%, respectively. What is the current population of the city after four years?

- Ans
- 1. 10500
  - 2. 14288
  - 3. 16632
  - 4. 12312

Question ID : 264330106666  
Option 1 ID : 264330418965  
Option 2 ID : 264330418967  
Option 3 ID : 264330418966  
Option 4 ID : 264330418968  
Status : Answered  
Chosen Option : 4

Q.9 8 men can complete a work in 6 hours. In how many hours can 12 men complete the same work?

- Ans
- 1. 4
  - 2. 6
  - 3. 5
  - 4. 3

Question ID : 264330182569  
Option 1 ID : 264330716068  
Option 2 ID : 264330716070  
Option 3 ID : 264330716069  
Option 4 ID : 264330716067  
Status : Answered  
Chosen Option : 1

Q.10 Lalita bought 10 water bottles for ₹18 each and sold them for ₹20 each. What is her overall profit percentage?

- Ans
- 1.  $13\frac{2}{9}\%$
  - 2. 11%
  - 3.  $11\frac{1}{9}\%$
  - 4. 13%

Question ID : 264330103950  
Option 1 ID : 264330408101  
Option 2 ID : 264330408104  
Option 3 ID : 264330408102  
Option 4 ID : 264330408103  
Status : Answered  
Chosen Option : 3

Q.11 The market price of a toy is 25% above the cost price. If the shopkeeper gives 12% discount, then find the gain in the deal.

- Ans
- 1. 12%
  - 2. 10%
  - 3. 15%
  - 4. 13%

Question ID : 264330122072  
Option 1 ID : 264330478423  
Option 2 ID : 264330478425  
Option 3 ID : 264330478424  
Option 4 ID : 264330478426  
Status : Answered  
Chosen Option : 2

Q.12 What is the difference between the total surface area and the curved surface area of a hemisphere (in  $\text{cm}^2$ ) when the radius is 21 cm? (Take  $\pi = \frac{22}{7}$ )

- Ans
- 1. 1386
  - 2. 1495
  - 3. 1586
  - 4. 1376

Question ID : 264330112237  
Option 1 ID : 264330441035  
Option 2 ID : 264330441033  
Option 3 ID : 264330441034  
Option 4 ID : 264330441036  
Status : Answered  
Chosen Option : 1

Q.13 An amount of ₹4,000 was divided into two parts in such a way that, when the first part was invested at 3% per annum simple interest and the second at 5% per annum simple interest, the total annual interest from both the investments was ₹144. How much was put at 3% per annum simple interest?

- Ans
- 1. ₹2,100
  - 2. ₹1,400
  - 3. ₹2,800
  - 4. ₹700

Question ID : 264330182532  
Option 1 ID : 264330715921  
Option 2 ID : 264330715920  
Option 3 ID : 264330715922  
Option 4 ID : 264330715919  
Status : Answered  
Chosen Option : 3

Q.14 What is the difference between the smallest and the largest prime numbers between 1 to 100?

- Ans
- 1. 95
  - 2. 94
  - 3. 87
  - 4. 86

Question ID : 264330106073  
Option 1 ID : 264330416596  
Option 2 ID : 264330416595  
Option 3 ID : 264330416594  
Option 4 ID : 264330416593  
Status : Answered  
Chosen Option : 1

Q.15 The smallest four-digit number which is divisible by 15, 25, 40 and 75 is:

- Ans
- 1. 1080
  - 2. 1120
  - 3. 1100
  - 4. 1200

Question ID : 264330119384  
Option 1 ID : 264330467824  
Option 2 ID : 264330467825  
Option 3 ID : 264330467826  
Option 4 ID : 264330467823  
Status : Answered  
Chosen Option : 4

Q.1 In Microsoft Word 365, what does paragraph formatting primarily control?

- Ans
- 1. Font style and colour
  - 2. Document headers and footers
  - 3. Line spacing and alignment
  - 4. Page layout and margins

Question ID : 264330180709  
Option 1 ID : 264330708804  
Option 2 ID : 264330708806  
Option 3 ID : 264330708805  
Option 4 ID : 264330708803  
Status : Answered  
Chosen Option : 4

Q.2 How can we combine names and addresses with a standard document in Microsoft Word 365?

- Ans
- 1. Mail Merge
  - 2. Mail Formatting
  - 3. Document Merge
  - 4. Document Formatting

Question ID : 264330182079  
Option 1 ID : 264330714155  
Option 2 ID : 264330714158  
Option 3 ID : 264330714157  
Option 4 ID : 264330714156  
Status : Answered  
Chosen Option : 4

Q.3 In MS Excel 365 , which of the following keyboard shortcuts will open the 'Open' dialog box, where you can navigate to the location of a spreadsheet file and open it?

- Ans
- 1. Alt + O
  - 2. Shift + Alt + O
  - 3. Ctrl + O
  - 4. Ctrl + Shift + O

Question ID : 264330180812  
Option 1 ID : 264330709212  
Option 2 ID : 264330709213  
Option 3 ID : 264330709211  
Option 4 ID : 264330709214  
Status : Answered  
Chosen Option : 3

Q.4 Which of the following signs is always the first part of the formula followed by an expression that calculates a value in MS-Excel 365?

- Ans
- 1. / (Division)
  - 2. - (Subtraction)
  - 3. = (Equal to)
  - 4. + (Addition)

Question ID : 264330176690  
Option 1 ID : 264330692978  
Option 2 ID : 264330692977  
Option 3 ID : 264330692975  
Option 4 ID : 264330692976  
Status : Answered  
Chosen Option : 3

**Q.5** Which of the following shortcut keys is used to perform right alignment in MS Word 365?

- Ans**
- 1. Ctrl + L
  - 2. Ctrl + Shift + >
  - 3. Ctrl + Shift + <
  - 4. Ctrl + R

Question ID : 264330180446  
Option 1 ID : 264330707754  
Option 2 ID : 264330707751  
Option 3 ID : 264330707752  
Option 4 ID : 264330707753  
Status : Answered  
Chosen Option : 4

**Q.6** Which of the following is an email client offered by Microsoft?

- Ans**
- 1. Thunderbird
  - 2. Gmail
  - 3. Apple
  - 4. Outlook

Question ID : 264330178242  
Option 1 ID : 264330699024  
Option 2 ID : 264330699026  
Option 3 ID : 264330699025  
Option 4 ID : 264330699023  
Status : Answered  
Chosen Option : 4

**Q.7** Which of the following in communication of internet is a process of transferring real-time messages between users that facilitates private chat room atmosphere?

- Ans**
- 1. Collaboration
  - 2. Remote access
  - 3. File sharing
  - 4. Instant messaging

Question ID : 264330182766  
Option 1 ID : 264330716835  
Option 2 ID : 264330716837  
Option 3 ID : 264330716838  
Option 4 ID : 264330716836  
Status : Answered  
Chosen Option : 4

**Q.8** In MS Excel 365, how can a full name in MS-Excel 365 be split into separate first name and last name columns?

- Ans**
- 1. Using the TEXT function
  - 2. Using the CONCATENATE function
  - 3. Using the Data Validation feature
  - 4. Using the Text to Columns feature

Question ID : 264330173574  
Option 1 ID : 264330680776  
Option 2 ID : 264330680775  
Option 3 ID : 264330680777  
Option 4 ID : 264330680778  
Status : Answered  
Chosen Option : 1

**Q.9** In MS word 365. Which of the following menus has icons to Add Text, Update A Table, Insert Footnote, and Index in the Word Processing Package?

- Ans**
- 1. Page Layout
  - 2. References
  - 3. Mailings
  - 4. Design

Question ID : 264330175986  
Option 1 ID : 264330690239  
Option 2 ID : 264330690242  
Option 3 ID : 264330690240  
Option 4 ID : 264330690241  
Status : Answered  
Chosen Option : 1

**Q.10** Which button in the Home tab of Microsoft Word 365 can be used to cut selected text?

- Ans**
- 1. Clipboard icon
  - 2. Scissors icon
  - 3. Arrow pointing down icon
  - 4. Double sheets of paper icon

Question ID : 264330173597  
Option 1 ID : 264330680868  
Option 2 ID : 264330680867  
Option 3 ID : 264330680869  
Option 4 ID : 264330680870  
Status : Answered  
Chosen Option : 2