

Constable Executive Male and Female in Delhi Police Examination 2023

Roll Number	
Candidate Name	
Venue Name	
Exam Date	24/11/2023
Exam Time	3:00 PM - 4:30 PM
Subject	Constable Executive Male and Female in Delhi Police Examination 2023

Section : General Knowledge

Q.1 In which year did Anil Kumble take 10 wickets in a cricket test match?

- Ans
- 1. 1987
 - 2. 1986
 - 3. 1998
 - 4. 1999

Question ID : 264330119277
Option 1 ID : 264330467398
Option 2 ID : 264330467396
Option 3 ID : 264330467395
Option 4 ID : 264330467397
Status : Answered
Chosen Option : 4

Q.2 In which city of Maharashtra is Kalidasa Festival organised every year?

- Ans
- 1. Nasik
 - 2. Nagpur
 - 3. Pune
 - 4. Mumbai

Question ID : 264330109627
Option 1 ID : 264330430787
Option 2 ID : 264330430786
Option 3 ID : 264330430788
Option 4 ID : 264330430785
Status : Answered
Chosen Option : 1

Q.3 As per Article 170 of the Constitution of India, the Legislative Assembly of each State shall consist of NOT more than _____ members.

- Ans
- 1. 500
 - 2. 450
 - 3. 300
 - 4. 250

Question ID : 26433053631
Option 1 ID : 264330209826
Option 2 ID : 264330209827
Option 3 ID : 264330209828
Option 4 ID : 264330209829
Status : Answered
Chosen Option : 4

Q.4 Who appoints the Attorney-General of India?

- Ans
- 1. Chief Minister
 - 2. Governor
 - 3. Prime Minister
 - 4. President

Question ID : 264330169048
Option 1 ID : 264330662998
Option 2 ID : 264330662997
Option 3 ID : 264330662995
Option 4 ID : 264330662996
Status : Answered
Chosen Option : 4

Q.5 Which Indian cricketer has written the book 'The Test of My Life'?

- Ans
- 1. Yuvraj Singh
 - 2. MS Dhoni
 - 3. Sachin Tendulkar
 - 4. Kapil Dev

Question ID : 26433055352
Option 1 ID : 264330216394
Option 2 ID : 264330216393
Option 3 ID : 264330216392
Option 4 ID : 264330216395
Status : Answered
Chosen Option : 3

Q.6 Which of the following is a negative impact of globalisation on Indian economy?

- Ans
- 1. Rise of straight-jacketed approach to leadership styles
 - 2. Rise in female participation in employment
 - 3. Rise in relative deprivation
 - 4. Loss of child labour

Question ID : 264330112492
Option 1 ID : 264330442053
Option 2 ID : 264330442055
Option 3 ID : 264330442054
Option 4 ID : 264330442056
Status : Answered
Chosen Option : 3

Q.7 According to the National Jute Board 2022-23, which state is the largest producer of jute?

- Ans
- 1. Madhya Pradesh
 - 2. Bihar
 - 3. Gujarat
 - 4. West Bengal

Question ID : 264330173608
Option 1 ID : 264330680914
Option 2 ID : 264330680913
Option 3 ID : 264330680912
Option 4 ID : 264330680911
Status : Answered
Chosen Option : 4

Q.8 The density of population in India (Census 2011) is _____ persons per sq km.

- Ans
- 1. 296
 - 2. 357
 - 3. 382
 - 4. 284

Question ID : 264330177907
Option 1 ID : 264330697716
Option 2 ID : 264330697717
Option 3 ID : 264330697718
Option 4 ID : 264330697715
Status : Answered
Chosen Option : 3

Q.9 Which of the following is/are correct about curd formation?

Statement 1.

The bacteria present in milk breakdown lactose into lactic acid.

Statement 2.

Production of lactic acid reduces the pH of the milk, coagulating it to form curd.

Statement 3.

Curd and yoghurt are the synonyms and their texture and taste is exactly same.

- Ans
- 1. Only statements 1 and 2 are correct
 - 2. Only statement 1 is correct
 - 3. All statements 1, 2 and 3 are correct
 - 4. Only statement 3 is correct

Question ID : 264330134275
Option 1 ID : 264330526097
Option 2 ID : 264330526095
Option 3 ID : 264330526096
Option 4 ID : 264330526098
Status : Answered
Chosen Option : 3

Q.10 Which of the following rivers passes through the maximum number of states in India?

- Ans
- 1. Damodar
 - 2. Indus
 - 3. Ganga
 - 4. Mahanadi

Question ID : 264330179020
Option 1 ID : 264330702084
Option 2 ID : 264330702086
Option 3 ID : 264330702083
Option 4 ID : 264330702085
Status : Answered
Chosen Option : 3

Q.11 The correct order of percentage of gases in atmosphere is:

- Ans 1. $N_2 > O_2 > Ar > CO_2$
 2. $N_2 > O_2 > CO_2 > Ar$
 3. $N_2 > Ar > O_2 > CO_2$
 4. $O_2 > N_2 > Ar > CO_2$

Question ID : 264330120076
Option 1 ID : 264330470559
Option 2 ID : 264330470560
Option 3 ID : 264330470561
Option 4 ID : 264330470562
Status : Answered
Chosen Option : 1

Q.12 Who led the Young Bengal Movement?

- Ans 1. Henry Vivian Derozio
 2. Raja Ram Mohan Roy
 3. Keshav Chandra Sen
 4. Devendra Nath Tagore

Question ID : 264330120307
Option 1 ID : 264330471480
Option 2 ID : 264330471481
Option 3 ID : 264330471482
Option 4 ID : 264330471479
Status : Answered
Chosen Option : 4

Q.13 Select the INCORRECT pair of festival and the respective state.

- Ans 1. Chhath Puja – Bihar
 2. Maghi – Himachal Pradesh
 3. Dang Darbar – Gujarat
 4. Sarhul – Tamil Nadu

Question ID : 264330118491
Option 1 ID : 264330465365
Option 2 ID : 264330465367
Option 3 ID : 264330465368
Option 4 ID : 264330465366
Status : Answered
Chosen Option : 4

Q.14 Which of the following books was written by Kautilya, Prime Minister of Chandragupta Maurya?

- Ans 1. Bhagavati Sutra
 2. Arthashastra
 3. Anguttara Nikaya
 4. Purva Mimamsa Sutras

Question ID : 264330120240
Option 1 ID : 264330471215
Option 2 ID : 264330471217
Option 3 ID : 264330471216
Option 4 ID : 264330471218
Status : Answered
Chosen Option : 2

Q.15 Which of the following pairs is INCORRECT?

- Ans
- 1. Part III – Fundamental Rights
 - 2. Part I – The Union and its Territory
 - 3. Part VIII – The Union Territories
 - 4. Part II – Fundamental Duties

Question ID : 264330110784
Option 1 ID : 264330435413
Option 2 ID : 264330435415
Option 3 ID : 264330435416
Option 4 ID : 264330435414
Status : Answered
Chosen Option : 4

Q.16 Which of the following is NOT a major jute producing state in India?

- Ans
- 1. Meghalaya
 - 2. West Bengal
 - 3. Telangana
 - 4. Assam

Question ID : 264330119776
Option 1 ID : 264330469380
Option 2 ID : 264330469379
Option 3 ID : 264330469382
Option 4 ID : 264330469381
Status : Answered
Chosen Option : 3

Q.17 Whose name among the following is associated with the second five-year plan?

- Ans
- 1. Jayanta Kumar Ghosh
 - 2. Kantilal Mardia
 - 3. Debabrata Basu
 - 4. Prasanta Chandra Mahalanobis

Question ID : 264330116519
Option 1 ID : 264330458164
Option 2 ID : 264330458162
Option 3 ID : 264330458163
Option 4 ID : 264330458161
Status : Answered
Chosen Option : 4

Q.18 'Permanent Settlement' in Bengal was started by which of the following Governor-Generals?

- Ans
- 1. Lord Minto
 - 2. Thomas Munro
 - 3. Alexander Reed
 - 4. Lord Cornwallis

Question ID : 264330114853
Option 1 ID : 264330451500
Option 2 ID : 264330451497
Option 3 ID : 264330451499
Option 4 ID : 264330451498
Status : Answered
Chosen Option : 4

Q.19 The term 'Protozoa' was coined by _____.

- Ans 1. Goldfuss
 2. Robert Grant
 3. Lamarck
 4. Charles Darwin

Question ID : 264330117588
Option 1 ID : 264330462379
Option 2 ID : 264330462380
Option 3 ID : 264330462377
Option 4 ID : 264330462378
Status : Answered
Chosen Option : 3

Q.20 Identify the artist who popularised the guitar as an instrument in Indian classical music.

- Ans 1. N Ramani
 2. Sandeep Das
 3. EM Subramaniam
 4. Brij Bhushan Kabra

Question ID : 264330111191
Option 1 ID : 264330436850
Option 2 ID : 264330436851
Option 3 ID : 264330436852
Option 4 ID : 264330436849
Status : Answered
Chosen Option : 3

Q.21 PMJJBY (Pradhan Mantri Jeevan Jyoti Bima Yojana) scheme is a type of ___.

- Ans 1. life insurance scheme
 2. AD&D scheme
 3. pension scheme
 4. loan scheme

Question ID : 264330110187
Option 1 ID : 264330433026
Option 2 ID : 264330433025
Option 3 ID : 264330433027
Option 4 ID : 264330433028
Status : Answered
Chosen Option : 1

Q.22 Who among the following is associated with Kathakali?

- Ans 1. Sujata Mohapatra
 2. Kalamandalam Krishnan Nair
 3. Swapana Sundari
 4. Kaushalya Reddy

Question ID : 264330131311
Option 1 ID : 264330514358
Option 2 ID : 264330514357
Option 3 ID : 264330514356
Option 4 ID : 264330514355
Status : Answered
Chosen Option : 2

Q.23 Dollu Kunita, a high energy popular folk dance of Karnataka region is primarily performed for which of the following deities?

- Ans 1. Lord Shiva
 2. Lord Rama
 3. Lord Vishnu
 4. Lord Krishna

Question ID : 264330110435
Option 1 ID : 264330434018
Option 2 ID : 264330434019
Option 3 ID : 264330434017
Option 4 ID : 264330434020
Status : Answered
Chosen Option : 1

Q.24 The garbhagriha and shikhara are made in a Rekha-Prasada or Latina style and the mandapa of an old form of wooden architecture. These features of temple architecture are present in which part of India?

- Ans 1. Western
 2. Northern
 3. Southern
 4. Eastern

Question ID : 264330106255
Option 1 ID : 264330417322
Option 2 ID : 264330417324
Option 3 ID : 264330417321
Option 4 ID : 264330417323
Status : Answered
Chosen Option : 3

Q.25 Consider the given the values and answer the question that follows.

GNP at market prices = ₹15,50,113 crore

Indirect taxes = ₹1,75,386 crore

Subsidies = ₹38,504

Net factor income from abroad = (-)₹13,439

What will be the value of GDP at factor cost?

- Ans 1. ₹13,99,792
 2. ₹14,13,231
 3. ₹17,00,434
 4. ₹14,26,670

Question ID : 264330119671
Option 1 ID : 264330468961
Option 2 ID : 264330468959
Option 3 ID : 264330468960
Option 4 ID : 264330468962
Status : Answered
Chosen Option : 3

Q.26 Which of the following is not correct about Article 19 of the Indian Constitution?

- Ans
- 1. All citizens shall have the right to form associations or unions.
 - 2. All citizens shall have the right to assemble peaceably and without arms.
 - 3. All citizens shall have the right to move freely outside the territory of India.
 - 4. All citizens shall have the right to freedom of speech and expression.

Question ID : 264330180047
Option 1 ID : 264330706173
Option 2 ID : 264330706172
Option 3 ID : 264330706174
Option 4 ID : 264330706171
Status : Answered
Chosen Option : 3

Q.27 Name the popular dance of North-West India in which dancers balance multiple pots or pitchers on their head while standing on top of glass bottles or on the rim of a brass plate.

- Ans
- 1. Bhavai
 - 2. Ghoomar
 - 3. Garba
 - 4. Tera Tali

Question ID : 264330110421
Option 1 ID : 264330433962
Option 2 ID : 264330433963
Option 3 ID : 264330433961
Option 4 ID : 264330433964
Status : Answered
Chosen Option : 2

Q.28 Who was known as the 'Frontier Gandhi of India' and was the leader of North West Frontier province of British India?

- Ans
- 1. Mahatma Gandhi
 - 2. Jawaharlal Nehru
 - 3. Subhash Chandra Bose
 - 4. Khan Abdul Gaffar Khan

Question ID : 264330123749
Option 1 ID : 264330485033
Option 2 ID : 264330485034
Option 3 ID : 264330485032
Option 4 ID : 264330485031
Status : Answered
Chosen Option : 4

Q.29 Which of the following equations correctly measures national income by expenditure method?

- Ans
- 1. $Y = C + I + G - X + M$
 - 2. $Y = C + I + G + X + M$
 - 3. $Y = C + I + G + X - M$
 - 4. $Y = C - I + G + X - M$

Question ID : 264330120882
Option 1 ID : 264330473744
Option 2 ID : 264330473743
Option 3 ID : 264330473745
Option 4 ID : 264330473746
Status : Not Answered
Chosen Option : --

Q.30 In which of following Yajnas was a horse let loose to wander freely and guarded by the raja's men in ancient India?

- Ans
- 1. Ashvadhari Yajna
 - 2. Naramedha Yajna
 - 3. Brahma Yajna
 - 4. Ashvamedha Yajna

Question ID : 264330183092
Option 1 ID : 264330718103
Option 2 ID : 264330718100
Option 3 ID : 264330718102
Option 4 ID : 264330718101
Status : Answered
Chosen Option : 4

Q.31 The stratosphere is located between which of the following atmospheric layers?

- Ans
- 1. Stratopause and Mesopause
 - 2. Mesopause and Exosphere
 - 3. Mesosphere and Thermosphere
 - 4. Tropopause and Stratopause

Question ID : 264330131746
Option 1 ID : 264330516084
Option 2 ID : 264330516083
Option 3 ID : 264330516086
Option 4 ID : 264330516085
Status : Answered
Chosen Option : 3

Q.32 Gangwon is the host city of which of the following sports events?

- Ans
- 1. Summer Olympics 2024
 - 2. Summer Youth Olympic Games 2024
 - 3. Winter Youth Olympic Games 2024
 - 4. Winter Olympics 2024

Question ID : 264330118903
Option 1 ID : 264330466267
Option 2 ID : 264330466269
Option 3 ID : 264330466270
Option 4 ID : 264330466268
Status : Answered
Chosen Option : 2

Q.33 Bacteria are the sole members of which of the following kingdoms?

- Ans
- 1. Animalia
 - 2. Plantae
 - 3. Protista
 - 4. Monera

Question ID : 264330117590
Option 1 ID : 264330462388
Option 2 ID : 264330462387
Option 3 ID : 264330462385
Option 4 ID : 264330462386
Status : Answered
Chosen Option : 3

Q.34 Which of the following awards is given in the field of dance by the government of Madhya Pradesh?

- Ans
- 1. Nandi Award for Best Choreographer
 - 2. Kalidas Samman
 - 3. Sanatan Sangeet Sanskriti
 - 4. Tagore Ratna

Question ID : 26433086663
Option 1 ID : 264330340296
Option 2 ID : 264330340293
Option 3 ID : 264330340294
Option 4 ID : 264330340295
Status : Answered
Chosen Option : 1

Q.35 In India, poverty estimations are based on surveys conducted by the National Sample Survey Organisation (NSSO). Under which ministry does the NSSO function?

- Ans
- 1. Ministry of Consumer Affairs
 - 2. Ministry of Statistics and Programme Implementation
 - 3. Ministry of Finance
 - 4. Ministry of Labour and Employment

Question ID : 264330120346
Option 1 ID : 264330471635
Option 2 ID : 264330471636
Option 3 ID : 264330471638
Option 4 ID : 264330471637
Status : Answered
Chosen Option : 2

Q.36 Neeraj Chopra became the first Indian to win the prestigious _____ Final in Switzerland in 2022.

- Ans
- 1. National Open Athletics Championships
 - 2. European Athletics Championships
 - 3. World Athletics Championships
 - 4. Zurich Diamond League

Question ID : 264330113734
Option 1 ID : 264330447021
Option 2 ID : 264330447024
Option 3 ID : 264330447023
Option 4 ID : 264330447022
Status : Answered
Chosen Option : 3

Q.37 'A shot at History' is an autobiography of whom among the following Olympic medal awardees?

- Ans 1. PV Sindhu
 2. Abhinav Bindra
 3. Sushil Kumar
 4. Leander Paes

Question ID : 26433064219
Option 1 ID : 264330251469
Option 2 ID : 264330251470
Option 3 ID : 264330251468
Option 4 ID : 264330251471
Status : Answered
Chosen Option : 2

Q.38 Who was the Viceroy of India when the Indian National Congress was founded?

- Ans 1. Lord Elgin II
 2. Lord Dufferin
 3. Lord Lansdowne
 4. Lord Ripon

Question ID : 264330171700
Option 1 ID : 264330673406
Option 2 ID : 264330673404
Option 3 ID : 264330673405
Option 4 ID : 264330673403
Status : Answered
Chosen Option : 2

Q.39 The Directive Principle of State Policy that requires the State 'to minimise inequalities in income, status, facilities and opportunities' was added by the _____ Constitution Amendment Act.

- Ans 1. 44th
 2. 40th
 3. 43rd
 4. 41st

Question ID : 264330130454
Option 1 ID : 264330510930
Option 2 ID : 264330510927
Option 3 ID : 264330510929
Option 4 ID : 264330510928
Status : Answered
Chosen Option : 1

Q.40 Who among the following discovered the ruins of Hampi in 1800?

- Ans 1. Robert Fitzroy
 2. Colonel Colin Mackenzie
 3. Robert Mackenzie
 4. Colin Fitzroy

Question ID : 264330118978
Option 1 ID : 264330466569
Option 2 ID : 264330466570
Option 3 ID : 264330466568
Option 4 ID : 264330466567
Status : Answered
Chosen Option : 3

Q.41 The official mascot of the Commonwealth Games 2022 was _____ .

- Ans 1. Perry
 2. Miraitova
 3. La'eeb
 4. Bing Dwen

Question ID : 264330132520
Option 1 ID : 264330519175
Option 2 ID : 264330519178
Option 3 ID : 264330519176
Option 4 ID : 264330519177
Status : Answered
Chosen Option : 2

Q.42 Which of the following statements is true with regard to the establishment of Central Public Sector Undertakings in India?

- Ans 1. They are established to fulfil the objective of a self-reliant India.
 2. They are supposed to reduce the importance of the private sector in India.
 3. They are only expected to generate greater profits to fund the Indian budget.
 4. They are established solely for export-oriented industrialisation.

Question ID : 264330117982
Option 1 ID : 264330463746
Option 2 ID : 264330463744
Option 3 ID : 264330463743
Option 4 ID : 264330463745
Status : Answered
Chosen Option : 1

Q.43 Contingency Fund of India is operated by the _____ .

- Ans 1. Executive action
 2. Reserve Bank's action
 3. Judicial action
 4. Parliamentary action

Question ID : 264330120183
Option 1 ID : 264330470987
Option 2 ID : 264330470990
Option 3 ID : 264330470988
Option 4 ID : 264330470989
Status : Answered
Chosen Option : 4

Q.44 In 2009, AR Rehman won Oscars in which of the given pair of categories?

- Ans 1. Best Sound Mixing and Best Original Song
 2. Best Original Musical and Best Sound Mixing
 3. Best Original Score and Best Sound Mixing
 4. Best Original Score and Best Original Song

Question ID : 264330111192
Option 1 ID : 264330436853
Option 2 ID : 264330436854
Option 3 ID : 264330436855
Option 4 ID : 264330436856
Status : Not Answered
Chosen Option : --

Q.45 The process of depositing a layer of any desired metal on another material by means of electricity is called _____.

- Ans 1. electroplating
 2. photocatalysis
 3. photoelectrochemical
 4. electrolysis

Question ID : 264330173636
Option 1 ID : 264330681026
Option 2 ID : 264330681023
Option 3 ID : 264330681025
Option 4 ID : 264330681024
Status : Answered
Chosen Option : 4

Q.46 According to Census of India 2011, in how many States / Union Territories was the female literacy rate recorded more than 90%?

- Ans 1. Four
 2. Two
 3. One
 4. Three

Question ID : 264330179430
Option 1 ID : 264330703723
Option 2 ID : 264330703725
Option 3 ID : 264330703726
Option 4 ID : 264330703724
Status : Answered
Chosen Option : 2

Q.47 Which of the following is abolished, and its practice forbidden in any form, according to Article 17 of the Constitution?

- Ans 1. Untouchability
 2. Exploitation
 3. Discrimination
 4. Freedom of speech

Question ID : 264330173495
Option 1 ID : 264330680460
Option 2 ID : 264330680462
Option 3 ID : 264330680459
Option 4 ID : 264330680461
Status : Answered
Chosen Option : 1

Q.48 Famous Scholar Al-Biruni wrote Kitab-ul-Hind in _____ language.

- Ans 1. Sanskrit
 2. Arabic
 3. Urdu
 4. Persian

Question ID : 264330119479
Option 1 ID : 264330468202
Option 2 ID : 264330468201
Option 3 ID : 264330468200
Option 4 ID : 264330468199
Status : Answered
Chosen Option : 4

Q.49 Lost wax casting technique was used to make _____ statues during Harappan civilisation.

- Ans** 1. bronze
 2. marble
 3. wood
 4. rock

Question ID : 264330106235
Option 1 ID : 264330417242
Option 2 ID : 264330417241
Option 3 ID : 264330417244
Option 4 ID : 264330417243
Status : Answered
Chosen Option : 1

Q.50 Gold Monetisation Scheme (GMS) was launched by the Government of India in _____. Under this scheme, one can deposit their gold in any form in a GMS account to earn interest as the price of the gold metal goes up.

- Ans** 1. 2005
 2. 2015
 3. 2020
 4. 2010

Question ID : 264330109123
Option 1 ID : 264330428769
Option 2 ID : 264330428771
Option 3 ID : 264330428772
Option 4 ID : 264330428770
Status : Not Answered
Chosen Option : --

Section : Reasoning

Q.1 Which of the following letter clusters will replace the question mark (?) in the given series to make it logically complete?
GMU, IKW, KIY, MGA, ?

- Ans** 1. OEC
 2. OIC
 3. OEB
 4. OCI

Question ID : 264330102224
Option 1 ID : 264330401364
Option 2 ID : 264330401361
Option 3 ID : 264330401362
Option 4 ID : 264330401363
Status : Answered
Chosen Option : 1

Q.2 Which of the following options will replace the question mark (?) in the given series?
512, 490, 468, 446, 424, ?

Ans 1. 402

2. 400

3. 399

4. 396

Question ID : 264330109432

Option 1 ID : 264330430005

Option 2 ID : 264330430007

Option 3 ID : 264330430006

Option 4 ID : 264330430008

Status : Answered

Chosen Option : 1

Q.3 Seven people - A, B, C, D, E, F and G - are sitting in a straight row, facing north. Only two people sit to the left of B. Only three people sit between G and B. D sits second to the right of A. D is not an immediate neighbour of B. E sits to the immediate right of F. Who among the following sits at the extreme left end of the line?

Ans 1. F

2. G

3. A

4. C

Question ID : 26433087014

Option 1 ID : 264330341697

Option 2 ID : 264330341700

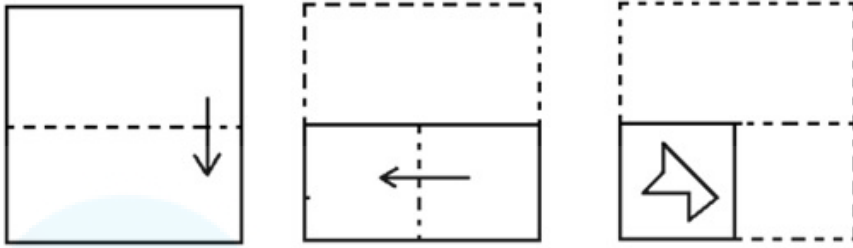
Option 3 ID : 264330341699

Option 4 ID : 264330341698

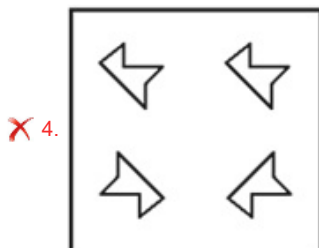
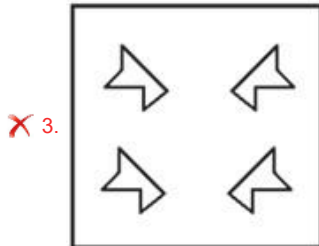
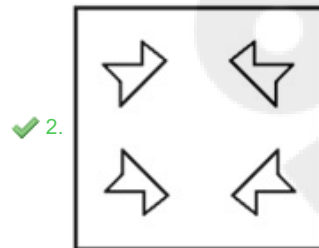
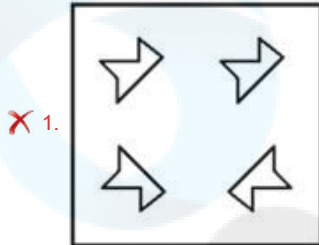
Status : Answered

Chosen Option : 1

Q.4 The sequence of folding a piece of paper and the manner in which the folded paper has been cut is shown below. Choose a figure which would most closely resemble the unfolded form of the paper.



Ans



Question ID : 264330112316

Option 1 ID : 264330441349

Option 2 ID : 264330441351

Option 3 ID : 264330441352

Option 4 ID : 264330441350

Status : Answered

Chosen Option : 2

Q.5 In a certain code language, 'WONDER' is written as 'KLTWCI' and 'SPRING' is written as 'OKPRTT'. How will 'PLAYER' be written as in that language?

- Ans
- 1. RTLSUX
 - 2. ROGBCI
 - 3. RPLSWZ
 - 4. RBOICG

Question ID : 26433082950
Option 1 ID : 264330325635
Option 2 ID : 264330325633
Option 3 ID : 264330325636
Option 4 ID : 264330325634
Status : Answered
Chosen Option : 2

Q.6 Select the option in which the given figure is embedded (rotation is NOT allowed).



Ans

- 1.
- 2.
- 3.
- 4.

Question ID : 264330114259
Option 1 ID : 264330449121
Option 2 ID : 264330449124
Option 3 ID : 264330449123
Option 4 ID : 264330449122
Status : Answered
Chosen Option : 2

Q.7 Select the set in which the numbers are related in the same way as are the numbers of the following sets.

(NOTE : Operations should be performed on the whole numbers, without breaking down the numbers into its constituent digits. E.g. 13 – Operations on 13 such as adding /deleting /multiplying etc. to 13 can be performed. Breaking down 13 into 1 and 3 and then performing mathematical operations on 1 and 3 is NOT allowed)
(184, 23), (264, 33)

Ans 1. (376, 47)

2. (270, 39)

3. (341, 41)

4. (250, 36)

Question ID : 26433052038

Option 1 ID : 264330203457

Option 2 ID : 264330203454

Option 3 ID : 264330203456

Option 4 ID : 264330203455

Status : Answered

Chosen Option : 1

Q.8 Two statements are given followed by two conclusions numbered I and II. Assuming the statements to be true, even if they seem to be at variance with commonly known facts, decide which of the conclusions logically follow(s) from the statements.

Statements:

All potatoes are vegetables.

All carrots are vegetables.

Conclusions:

I. Some carrots are potatoes.

II. All vegetables are carrots.

Ans 1. Neither conclusion I nor II follows

2. Only conclusion I follows

3. Both conclusions I and II follow

4. Only conclusion II follows

Question ID : 26433045341

Option 1 ID : 264330177802

Option 2 ID : 264330177799

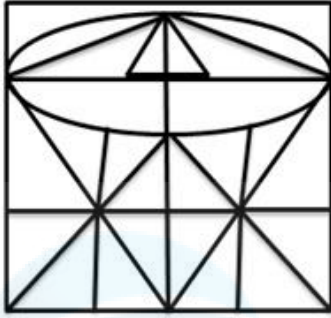
Option 3 ID : 264330177801

Option 4 ID : 264330177800

Status : Answered

Chosen Option : 1

Q.9 Select the option figure that is embedded in the given figure. (Rotation is not allowed).



Ans

✓ 1.



✗ 2.



✗ 3.



✗ 4.



Question ID : 264330114395

Option 1 ID : 264330449666

Option 2 ID : 264330449668

Option 3 ID : 264330449667

Option 4 ID : 264330449665

Status : Answered

Chosen Option : 1

Q.10 1, 2, 3, 4, 5 and 6 are written on different faces of a dice. Three different positions of the same dice are shown below. Find the number on the face opposite to the one showing '6'.

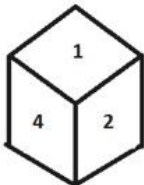


figure 1

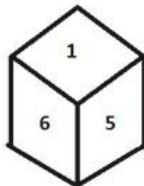


figure 2

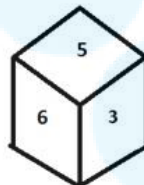


figure 3

Ans ✗ 1. 5

✓ 2. 4

✗ 3. 1

✗ 4. 2

Question ID : 264330110555

Option 1 ID : 264330434497

Option 2 ID : 264330434498

Option 3 ID : 264330434500

Option 4 ID : 264330434499

Status : Answered

Chosen Option : 2

Q.11 Select the correct combination of mathematical signs to sequentially replace the * signs and to balance the given equation.

$$36 * 16 * 4 * 20 * 90 * 46$$

- Ans
- 1. $\times, +, +, -, =$
 - 2. $+, +, \times, -, =$
 - 3. $-, +, +, \times, =$
 - 4. $-, +, \times, +, =$

Question ID : 26433076557

Option 1 ID : 264330300294

Option 2 ID : 264330300292


Option 3 ID : 264330300295

Option 4 ID : 264330300293

Status : Answered

Chosen Option : 4

Q.12 Select the figure that will replace the question mark (?) in the following figure series.



Ans

- 1.
- 2.
- 3.
- 4.

Question ID : 264330108955

Option 1 ID : 264330428099

Option 2 ID : 264330428098

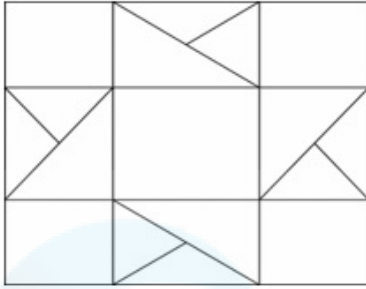
Option 3 ID : 264330428097

Option 4 ID : 264330428100

Status : Answered

Chosen Option : 2

Q.13 How many triangles are there in the given figure?



- Ans
- 1. 10
 - 2. 16
 - 3. 12
 - 4. 8

Question ID : 26433085671
 Option 1 ID : 264330336386
 Option 2 ID : 264330336385
 Option 3 ID : 264330336388
 Option 4 ID : 264330336387
 Status : Answered
 Chosen Option : 2

Q.14 A paper is folded and cut as shown below. How will it appear when unfolded?



- Ans
- 1.
 - 2.
 - 3.
 - 4.

Question ID : 264330108977
 Option 1 ID : 264330428187
 Option 2 ID : 264330428188
 Option 3 ID : 264330428186
 Option 4 ID : 264330428185
 Status : Answered
 Chosen Option : 1

Q.15 Which figure should replace the question mark (?) in the following series to continue the pattern?

O	D	O	A	
D	O	A	O	?
9 = A	A 9 =	= 2 D	D = 2	

Ans

✓ 1.

O
D
2 + A

✗ 2.

O
D
= 2 A

✗ 3.

=
A
2 O D

✗ 4.

A
D
2 + O

Question ID : 264330129613

Option 1 ID : 264330507818

Option 2 ID : 264330507820

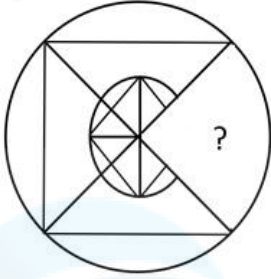
Option 3 ID : 264330507819

Option 4 ID : 264330507821

Status : Answered

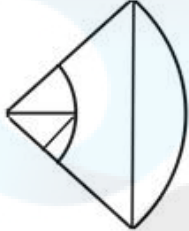
Chosen Option : 1

Q.16 Select the figure from the options that can replace the question mark (?) and complete the given pattern.

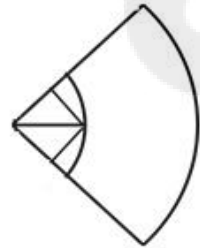


Ans

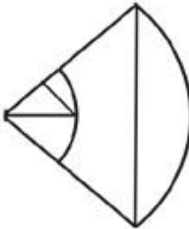
✗ 1.



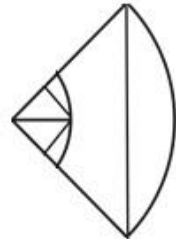
✗ 2.



✗ 3.



✓ 4.



Question ID : 26433082911

Option 1 ID : 264330325477

Option 2 ID : 264330325480

Option 3 ID : 264330325478

Option 4 ID : 264330325479

Status : Answered

Chosen Option : 4

Q.17 Which of the following option figures will complete the pattern in the figure given below?



Ans

✗ 1.



✓ 2.



✗ 3.



✗ 4.



Question ID : 26433089628
Option 1 ID : 264330352016
Option 2 ID : 264330352015
Option 3 ID : 264330352014
Option 4 ID : 264330352013
Status : Answered
Chosen Option : 2

Q.18 Select the option figure that will replace the question mark (?) in the figure given below to complete the pattern.




Ans

✗ 1.



✓ 2.



✗ 3.



✗ 4.



Question ID : 26433085564

Option 1 ID : 264330335958

Option 2 ID : 264330335959

Option 3 ID : 264330335957

Option 4 ID : 264330335960

Status : Answered

Chosen Option : 2

Q.19 Select the option that is related to the fifth letter cluster in the same way as the second letter cluster is related to the first letter cluster and the fourth letter cluster is related to the third letter cluster.
 KFCZ : HLZF :: LVEG : IBBM :: PROD : ?

- Ans
- 1. MXLJ
 - 2. IHEX
 - 3. IBNX
 - 4. MKXJ

Question ID : 26433074691
 Option 1 ID : 264330292853
 Option 2 ID : 264330292855
 Option 3 ID : 264330292852
 Option 4 ID : 264330292854
 Status : Answered
 Chosen Option : 1

Q.20 Select the correct combination of mathematical signs to sequentially replace the * signs and to balance the given equation.
 $60 * 40 * 10 * 50 * 100 * 160$

- Ans
- 1. $\times, +, -, +, =$
 - 2. $+, +, \times, -, =$
 - 3. $+, \times, -, +, =$
 - 4. $-, +, \times, +, =$

Question ID : 26433076554
 Option 1 ID : 264330300283
 Option 2 ID : 264330300281
 Option 3 ID : 264330300280
 Option 4 ID : 264330300282
 Status : Answered
 Chosen Option : 2

Q.21 Six numbers, 1, 2, 3, 4, 5 and 6, are written on the different faces of a dice. Three different positions of the same dice are shown (Figures 1-3). Find the number on the face opposite to the face showing '2'.

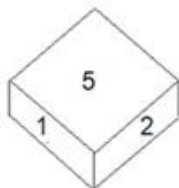


Figure 1

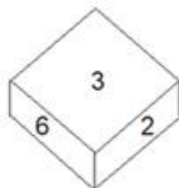


Figure 2

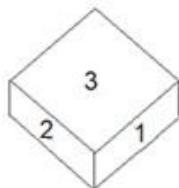


Figure 3

- Ans
- 1. 1
 - 2. 4
 - 3. 3
 - 4. 6

Question ID : 264330112584
 Option 1 ID : 264330442424
 Option 2 ID : 264330442421
 Option 3 ID : 264330442423
 Option 4 ID : 264330442422
 Status : Answered
 Chosen Option : 2

Q.22 Select the correct mirror image of the given combination when the mirror is placed at 'PQ' as shown below.

Q W 7 K J P
P
|
Q

Ans

✗ 1. Q W 7 K J P

✓ 2. Q W 7 K J P

✗ 3. P K J 7 W Q

✗ 4. P K J 7 W Q

Question ID : 264330129818

Option 1 ID : 264330508504

Option 2 ID : 264330508503

Option 3 ID : 264330508505

Option 4 ID : 264330508506

Status : Answered

Chosen Option : 2

Q.23 Which figure should replace the question mark (?) if the following series were to be continued?

P	O	T	D	8	P	T	D	S	Z	8	T	S	Z	△	
	△			O		P			D			T			?
S	8	4	T	△	S	△	8	O	S	P	△	P	8	D	

Ans

✗ 1.

P	8	S
	Z	
D	T	△

✗ 2.

P	S	D
	△	
8	Z	T

✓ 3.

F	8	S
	Z	
△	T	P

✗ 4.

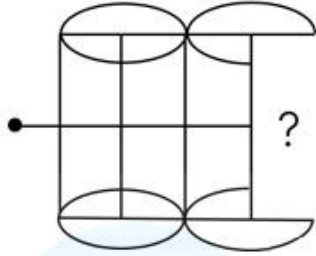
D	8	S
	Z	
△	T	P

Question ID : 264330103881
 Option 1 ID : 264330407827
 Option 2 ID : 264330407825
 Option 3 ID : 264330407828
 Option 4 ID : 264330407826

Status : Answered

Chosen Option : 3

Q.24 Select the figure from the given options that will replace the question mark (?) in the figure given below to complete the pattern so that the final image is symmetrical.



Ans

✗ 1.



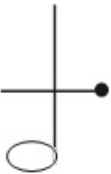
✓ 2.



✗ 3.



✗ 4.



Question ID : 264330114726

Option 1 ID : 264330450991

Option 2 ID : 264330450989

Option 3 ID : 264330450990

Option 4 ID : 264330450992

Status : Answered

Chosen Option : 2

Q.25 Select the option that is related to the third term in the same way as the second term is related to the first term and the sixth term is related to the fifth term.
 $15 : 135 :: 13 : ? :: 24 : 216$

Ans ✗ 1. 121

✓ 2. 117

✗ 3. 104

✗ 4. 91

Question ID : 264330102257

Option 1 ID : 264330401496

Option 2 ID : 264330401494

Option 3 ID : 264330401493

Option 4 ID : 264330401495

Status : Answered

Chosen Option : 2

Q.1 Find the sum of all those prime numbers which are less than 28.

- Ans
- 1. 97
 - 2. 120
 - 3. 110
 - 4. 100

Question ID : 264330105989
Option 1 ID : 264330416257
Option 2 ID : 264330416260
Option 3 ID : 264330416259
Option 4 ID : 264330416258
Status : Answered
Chosen Option : 4

Q.2 $0.\overline{63}$ expressed in the form $\frac{p}{q}$ equals:

- Ans
- 1. $\frac{9}{11}$
 - 2. $\frac{3}{11}$
 - 3. $\frac{7}{11}$
 - 4. $\frac{6}{11}$

Question ID : 264330119325
Option 1 ID : 264330467590
Option 2 ID : 264330467588
Option 3 ID : 264330467589
Option 4 ID : 264330467587
Status : Answered
Chosen Option : 3

Q.3 Select the correct statement.

- Ans
- 1. Loss % = $\frac{SP - CP}{CP} \times 100$
 - 2. Profit % = $\frac{SP - CP}{CP} \times 100$
 - 3. Profit % = $\frac{CP - SP}{CP} \times 100$
 - 4. Loss % = $\frac{SP + CP}{CP} \times 100$

Question ID : 264330122069
Option 1 ID : 264330478412
Option 2 ID : 264330478413
Option 3 ID : 264330478411
Option 4 ID : 264330478414
Status : Answered
Chosen Option : 2

Q.4 Let $x = \frac{6}{5}$, then arrange the numbers $6x, \frac{37}{6}, 6 - x$ and $5 + x$ in ascending order.

Ans

✓ 1. $6 - x, \frac{37}{6}, 5 + x, 6x$

✗ 2. $6 - x, 5 + x, 6x, \frac{37}{6}$

✗ 3. $6 - x, 5 + x, \frac{37}{6}, 6x$

✗ 4. $6 - x, \frac{37}{6}, 6x, 5 + x$

Question ID : 264330112094

Option 1 ID : 264330440461

Option 2 ID : 264330440463

Option 3 ID : 264330440462

Option 4 ID : 264330440464

Status : Answered

Chosen Option : 1

Q.5 The LCM of $\frac{9}{10}, \frac{12}{25}, \frac{18}{35}, \frac{21}{40}$ is:

Ans

✗ 1. $\frac{100}{9}$

✓ 2. $\frac{252}{5}$

✗ 3. $\frac{9}{100}$

✗ 4. $\frac{151}{7}$

Question ID : 264330104338

Option 1 ID : 264330409654

Option 2 ID : 264330409655

Option 3 ID : 264330409653

Option 4 ID : 264330409656

Status : Answered

Chosen Option : 2

Q.6 The sum of money A initially had was 20% less than the sum of money B had. If B gave 16% of her money to her brother, by what percentage should A's sum increase so that A and B finally have identical amounts?

Ans

✗ 1. 4.5%

✓ 2. 5%

✗ 3. 4%

✗ 4. 6%

Question ID : 264330130673

Option 1 ID : 264330511803

Option 2 ID : 264330511806

Option 3 ID : 264330511805

Option 4 ID : 264330511804

Status : Answered

Chosen Option : 2

Q.7 A, B and C can do a piece of work in 10 days, 20 days and 40 days, respectively. On the first day A is assisted by B, and on the second day C assists A. This 2-day cycle is repeated starting with A and B, till the work gets completed. How long (in whole number of days) would it take to complete the work?

- Ans
- 1. 10
 - 2. 6
 - 3. 4
 - 4. 8

Question ID : 264330103568
Option 1 ID : 264330406579
Option 2 ID : 264330406580
Option 3 ID : 264330406577
Option 4 ID : 264330406578
Status : Answered
Chosen Option : 4

Q.8 Find the compound interest (in ₹) on ₹24,000 at 10% per annum for 3 years?

- Ans
- 1. 7044
 - 2. 7200
 - 3. 7494
 - 4. 7944

Question ID : 264330104259
Option 1 ID : 264330409337
Option 2 ID : 264330409339
Option 3 ID : 264330409338
Option 4 ID : 264330409340
Status : Answered
Chosen Option : 4

Q.9 The vertical height of a conical tent is 42 decimetre and the diameter of its base is 5.4 m. Find the number of persons it can accommodate if each person is to be allowed 2,673 cu. decimetre of space. (Use $\pi = \frac{22}{7}$)

- Ans
- 1. 13
 - 2. 17
 - 3. 12
 - 4. 11

Question ID : 264330118111
Option 1 ID : 264330464260
Option 2 ID : 264330464261
Option 3 ID : 264330464259
Option 4 ID : 264330464262
Status : Not Answered
Chosen Option : --

Q.10 The area of a right triangle is 48 m^2 and one of the two sides containing the right angle is 8 m long. What is the length (in m) of the other side containing the right angle?

- Ans
- 1. 6
 - 2. 16
 - 3. 12
 - 4. 24

Question ID : 264330131200
Option 1 ID : 264330513911
Option 2 ID : 264330513913
Option 3 ID : 264330513912
Option 4 ID : 264330513914
Status : Answered
Chosen Option : 3

Q.11 A shopkeeper offers a discount of 10% on an article and gains 15%. Calculate the marked price of an article which he purchased for ₹1,350.

- Ans
- 1. ₹1,450
 - 2. ₹1,550
 - 3. ₹1,630
 - 4. ₹1,725

Question ID : 264330183848
Option 1 ID : 264330721068
Option 2 ID : 264330721069
Option 3 ID : 264330721070
Option 4 ID : 264330721071
Status : Answered
Chosen Option : 4

Q.12 If the income of P is 25% less than Q, then the combined income of P and Q is what percentage more than P?

- Ans
- 1. 75%
 - 2. 133.33%
 - 3. 25%
 - 4. 125%

Question ID : 264330111460
Option 1 ID : 264330437926
Option 2 ID : 264330437925
Option 3 ID : 264330437927
Option 4 ID : 264330437928
Status : Answered
Chosen Option : 2

Q.13 The average of 24, 39 and y is 33. What is the value of y?

- Ans 1. 37
 2. 36
 3. 35
 4. 38

Question ID : 264330131119
Option 1 ID : 264330513589
Option 2 ID : 264330513588
Option 3 ID : 264330513587
Option 4 ID : 264330513590
Status : Answered
Chosen Option : 2

Q.14 Ramu takes 1 hour 20 minutes in walking a distance and riding back to the starting place. He could walk both ways in 2 hours 30 minutes. The time taken by him to ride back both ways is:

- Ans 1. 22 minutes
 2. 20 minutes
 3. 18 minutes
 4. 10 minutes

Question ID : 264330183859
Option 1 ID : 264330721112
Option 2 ID : 264330721113
Option 3 ID : 264330721114
Option 4 ID : 264330721115
Status : Answered
Chosen Option : 4

Q.15 Radha invested a certain sum on simple interest, which will amount to ₹16,200 in 3 years and to ₹17,400 in 4 years. Find the sum she invested.

- Ans 1. ₹11,400
 2. ₹14,000
 3. ₹12,600
 4. ₹13,800

Question ID : 264330118083
Option 1 ID : 264330464149
Option 2 ID : 264330464147
Option 3 ID : 264330464148
Option 4 ID : 264330464150
Status : Answered
Chosen Option : 3

Q.1 Which is the correct syntax for writing SUMIF() function in MS Excel?

- Ans
- 1. SUMIF(criteria)
 - 2. SUMIF(range, criteria, [sum_range])
 - 3. SUMIF(range, criteria)
 - 4. SUMIF(range)

Question ID : 264330182124
Option 1 ID : 264330714337
Option 2 ID : 264330714336
Option 3 ID : 264330714338
Option 4 ID : 264330714335
Status : Not Answered
Chosen Option : --

Q.2 _____ is used to describe the page direction in which the contents of the page are to be displayed or printed in MS Word 365.

- Ans
- 1. Columns
 - 2. Page margin
 - 3. Page orientation
 - 4. Page size

Question ID : 264330180633
Option 1 ID : 264330708501
Option 2 ID : 264330708502
Option 3 ID : 264330708499
Option 4 ID : 264330708500
Status : Answered
Chosen Option : 3

Q.3 Which of the following is used to move a selected text from one place to another in MS word 365?

- Ans
- 1. Cut-Copy
 - 2. Cut-Paste
 - 3. Copy-Copy
 - 4. Copy-Paste

Question ID : 264330180644
Option 1 ID : 264330708545
Option 2 ID : 264330708544
Option 3 ID : 264330708546
Option 4 ID : 264330708543
Status : Answered
Chosen Option : 2

Q.4 Which Internet access technique uses the existing cable television infrastructure to provide high-speed Internet access to users?

- Ans
- 1. Cable Internet
 - 2. DSL (Digital Subscriber Line)
 - 3. Dial-up
 - 4. Fiber-optic

Question ID : 264330173301
Option 1 ID : 264330679686
Option 2 ID : 264330679683
Option 3 ID : 264330679685
Option 4 ID : 264330679684
Status : Answered
Chosen Option : 4

Q.5 Which of the following is a unique identifier for each user, typically in the format of name@domain.com?

- Ans
- 1. Password
 - 2. Email server
 - 3. Email address
 - 4. Email client

Question ID : 264330180381
Option 1 ID : 264330707494
Option 2 ID : 264330707492
Option 3 ID : 264330707493
Option 4 ID : 264330707491
Status : Answered
Chosen Option : 3

Q.6 Which of the following tabs in the MS Word 365, ribbon has the Spelling and Grammar option?

- Ans
- 1. Review
 - 2. Layout
 - 3. Insert
 - 4. Edit

Question ID : 264330178598
Option 1 ID : 264330700421
Option 2 ID : 264330700422
Option 3 ID : 264330700420
Option 4 ID : 264330700419
Status : Answered
Chosen Option : 1

Q.7 In MS Excel 365, which option in Microsoft Excel allows you to move the selected text or cells to a different worksheet or workbook?

- Ans
- 1. Print
 - 2. Copy
 - 3. Move
 - 4. Cut

Question ID : 264330178080
Option 1 ID : 264330698385
Option 2 ID : 264330698384
Option 3 ID : 264330698386
Option 4 ID : 264330698383
Status : Answered
Chosen Option : 1

Q.8 In MS Excel 365, what is the shortcut to move to the last cell on a worksheet, to the lowest used row of the rightmost used column?

- Ans**
- 1. Ctrl + Home
 - 2. Shift + Home
 - 3. Ctrl + End
 - 4. Shift + End

Question ID : 264330182753
Option 1 ID : 264330716785
Option 2 ID : 264330716786
Option 3 ID : 264330716783
Option 4 ID : 264330716784
Status : Answered
Chosen Option : 4

Q.9 What is the primary purpose of creating a table in Microsoft Word 365?

- Ans**
- 1. For enhancing the page layout and margins
 - 2. For organising and presenting information in rows and columns
 - 3. For adding decorative elements to the document
 - 4. For applying font styles and colours to text

Question ID : 264330180707
Option 1 ID : 264330708796
Option 2 ID : 264330708797
Option 3 ID : 264330708795
Option 4 ID : 264330708798
Status : Answered
Chosen Option : 2

Q.10 Where is the Help button located in MS-Word 2010?

- Ans**
- 1. Lower left corner
 - 2. Top left corner
 - 3. Lower right corner
 - 4. Top right corner

Question ID : 264330178095
Option 1 ID : 264330698446
Option 2 ID : 264330698445
Option 3 ID : 264330698443
Option 4 ID : 264330698444
Status : Answered
Chosen Option : 4