

## Constable Executive Male and Female in Delhi Police Examination 2023

Roll Number	
Candidate Name	
Venue Name	
Exam Date	28/11/2023
Exam Time	9:00 AM - 10:30 AM
Subject	Constable Executive Male and Female in Delhi Police Examination 2023

Section : General Knowledge

**Q.1** The structures of temples located in India are classified as phamsana and latina on the basis of which of their parts?

- Ans
- 1. Garbagriha
  - 2. Amalaka
  - 3. Shikhara
  - 4. Mandap

Question ID : 264330141824  
Option 1 ID : 264330555616  
Option 2 ID : 264330555618  
Option 3 ID : 264330555615  
Option 4 ID : 264330555617  
Status : Answered  
Chosen Option : 2

**Q.2** Which of the following is the major reservoir of carbon on earth?

- Ans
- 1. Ponds
  - 2. Rivers
  - 3. Ocean
  - 4. Lakes

Question ID : 264330117608  
Option 1 ID : 264330462458  
Option 2 ID : 264330462460  
Option 3 ID : 264330462457  
Option 4 ID : 264330462459  
Status : Answered  
Chosen Option : 3

**Q.3** If nominal GDP is ₹1,800 and real GDP is ₹1,000. What will be the value of GDP deflator?

- Ans
- 1. 180%
  - 2. 200%
  - 3. 190%
  - 4. 150%

Question ID : 264330141492  
Option 1 ID : 264330554304  
Option 2 ID : 264330554306  
Option 3 ID : 264330554305  
Option 4 ID : 264330554303  
Status : Answered  
Chosen Option : 1

**Q.4 Which of the following dance forms is performed by the tribal people of Andhra Pradesh?**

- Ans**
- 1. Bihu
  - 2. Garba
  - 3. Jawara
  - 4. Dhimsa

Question ID : 264330132393  
Option 1 ID : 264330518667  
Option 2 ID : 264330518669  
Option 3 ID : 264330518670  
Option 4 ID : 264330518668  
Status : Answered  
Chosen Option : 3

**Q.5 At what degree from the epicentre does the seismograph record the arrival of P-waves but NOT S-waves?**

- Ans**
- 1. Beyond 105°
  - 2. Between 90° and 115°
  - 3. Beyond 145°
  - 4. Within 90°

Question ID : 264330141738  
Option 1 ID : 264330555271  
Option 2 ID : 264330555272  
Option 3 ID : 264330555274  
Option 4 ID : 264330555273  
Status : Answered  
Chosen Option : 4

**Q.6 Which of the following statements is/are true about globalisation?**

- I. It is about integration with world economies
- II. It promotes competition among producers
- III. Appreciation of domestic currency improves exports

- Ans**
- 1. Only I and II
  - 2. Only I and III
  - 3. Only I
  - 4. Only II and III

Question ID : 264330109408  
Option 1 ID : 264330429909  
Option 2 ID : 264330429910  
Option 3 ID : 264330429912  
Option 4 ID : 264330429911  
Status : Answered  
Chosen Option : 3

Q.7 What was the fraction of sales price collected as tax under the Mauryans?

- Ans
- ✓ 1.  $\frac{1}{10}$
  - ✗ 2.  $\frac{1}{15}$
  - ✗ 3.  $\frac{1}{5}$
  - ✗ 4.  $\frac{1}{20}$

Question ID : 264330117995  
Option 1 ID : 264330463796  
Option 2 ID : 264330463797  
Option 3 ID : 264330463795  
Option 4 ID : 264330463798  
Status : Answered  
Chosen Option : 1

Q.8 In which of the following years was the Arjuna Award started in India?

- Ans
- ✗ 1. 1963
  - ✓ 2. 1961
  - ✗ 3. 1964
  - ✗ 4. 1962

Question ID : 264330118443  
Option 1 ID : 264330465175  
Option 2 ID : 264330465173  
Option 3 ID : 264330465176  
Option 4 ID : 264330465174  
Status : Answered  
Chosen Option : 4

Q.9 Hydrogenation of vegetable oils is catalysed by \_\_\_\_\_.

- Ans
- ✗ 1. Al
  - ✗ 2. Cu
  - ✓ 3. Ni
  - ✗ 4. Fe

Question ID : 264330117618  
Option 1 ID : 264330462499  
Option 2 ID : 264330462497  
Option 3 ID : 264330462498  
Option 4 ID : 264330462500  
Status : Answered  
Chosen Option : 1

**Q.10** Which of the following Articles of the Indian Constitution states that 'The Directive Principles of State Policy are fundamental in the governance of the country and it shall be the duty of the State to apply the Principles in making laws'?

- Ans**
- 1. Article 51
  - 2. Article 38
  - 3. Article 37
  - 4. Article 36

Question ID : 264330114766  
Option 1 ID : 264330451152  
Option 2 ID : 264330451151  
Option 3 ID : 264330451150  
Option 4 ID : 264330451149  
Status : Answered  
Chosen Option : 4

**Q.11** Sarva Shiksha Abhiyan is a flagship programme of the government of India, that was started in 2001 to achieve \_\_\_\_\_.

- Ans**
- 1. Universalisation of Higher Education (UHE)
  - 2. Universalisation of School Education (USE)
  - 3. Universalisation of Pre-primary Education (UPPE)
  - 4. Universalisation of Elementary Education (UEE)

Question ID : 264330110008  
Option 1 ID : 264330432310  
Option 2 ID : 264330432311  
Option 3 ID : 264330432312  
Option 4 ID : 264330432309  
Status : Answered  
Chosen Option : 4

**Q.12** The Finance Commission submits its report to the:

- Ans**
- 1. President of India
  - 2. Finance Minister
  - 3. Prime Minister of India
  - 4. Parliament

Question ID : 264330177748  
Option 1 ID : 264330697101  
Option 2 ID : 264330697102  
Option 3 ID : 264330697100  
Option 4 ID : 264330697099  
Status : Answered  
Chosen Option : 1

Q.13 Which among the following states has the lowest poverty ratio as per the Multidimensional Poverty Index (2021) of the NITI Aayog?

- Ans  1. Kerala  
 2. Tamil Nadu  
 3. Goa  
 4. Sikkim

Question ID : 264330177861  
Option 1 ID : 264330697534  
Option 2 ID : 264330697533  
Option 3 ID : 264330697531  
Option 4 ID : 264330697532  
Status : Answered  
Chosen Option : 1

Q.14 The 'Valmiki Ambedkar Awas Yojana' (VAMBAY) was launched in which year by the Government of India?

- Ans  1. 2007  
 2. 2003  
 3. 2001  
 4. 2005

Question ID : 264330120377  
Option 1 ID : 264330471762  
Option 2 ID : 264330471760  
Option 3 ID : 264330471759  
Option 4 ID : 264330471761  
Status : Answered  
Chosen Option : 1

Q.15 The Teesta low dam is located in which of the following states?

- Ans  1. Sikkim  
 2. Bihar  
 3. Arunachal Pradesh  
 4. Tripura

Question ID : 264330182886  
Option 1 ID : 264330717288  
Option 2 ID : 264330717291  
Option 3 ID : 264330717289  
Option 4 ID : 264330717290  
Status : Answered  
Chosen Option : 1

Q.16 The main source of ocean heat is \_\_\_\_\_.

- Ans  1. gases under water  
 2. air  
 3. sunlight  
 4. minerals under water

Question ID : 264330118519  
Option 1 ID : 264330465478  
Option 2 ID : 264330465477  
Option 3 ID : 264330465479  
Option 4 ID : 264330465480  
Status : Answered  
Chosen Option : 3

Q.17 Swami Vivekananda established which of the following social organisations in 1897?

- Ans
- 1. Arya Samaj
  - 2. Prarthana Samaj
  - 3. Paramhansa Sabha
  - 4. Ramakrishna Mission

Question ID : 264330183133  
Option 1 ID : 264330718264  
Option 2 ID : 264330718267  
Option 3 ID : 264330718265  
Option 4 ID : 264330718266  
Status : Answered  
Chosen Option : 4

Q.18 'Kim', the English novel about a boy, was written by which of the following authors?

- Ans
- 1. Joseph Conrad
  - 2. Ruskin Bond
  - 3. Jerome K Jerome
  - 4. Rudyard Kipling

Question ID : 26433055373  
Option 1 ID : 264330216478  
Option 2 ID : 264330216476  
Option 3 ID : 264330216479  
Option 4 ID : 264330216477  
Status : Answered  
Chosen Option : 4

Q.19 In which of the following years was the Central Vigilance Commission set up by the Government of India?

- Ans
- 1. 1975
  - 2. 1964
  - 3. 1970
  - 4. 1984

Question ID : 26433086823  
Option 1 ID : 264330340934  
Option 2 ID : 264330340936  
Option 3 ID : 264330340935  
Option 4 ID : 264330340933  
Status : Answered  
Chosen Option : 4

Q.20 Tamladu is the religious festival of the Digaru Mishmis tribe of which Indian state?

- Ans
- 1. Madhya Pradesh
  - 2. Jharkhand
  - 3. Arunachal Pradesh
  - 4. Odisha

Question ID : 264330132412  
Option 1 ID : 264330518746  
Option 2 ID : 264330518744  
Option 3 ID : 264330518745  
Option 4 ID : 264330518743  
Status : Answered  
Chosen Option : 2

**Q.21 Which of the following is NOT a Fundamental Duty?**

- Ans
- 1. To develop the scientific temper
  - 2. To pay income tax in time
  - 3. To value rich heritage
  - 4. To protect the natural environment

Question ID : 264330130777  
Option 1 ID : 264330512222  
Option 2 ID : 264330512221  
Option 3 ID : 264330512219  
Option 4 ID : 264330512220  
Status : Answered  
Chosen Option : 2

**Q.22 Name the employee of the East India Company who deciphered Asokan Brahmi in 1830s.**

- Ans
- 1. James Prinsep
  - 2. James Mills
  - 3. William Risley
  - 4. William Crookes

Question ID : 264330119468  
Option 1 ID : 264330468158  
Option 2 ID : 264330468156  
Option 3 ID : 264330468157  
Option 4 ID : 264330468155  
Status : Answered  
Chosen Option : 1

**Q.23 In 2022, Air India was privatised. Which of the following private business groups has taken over Air India?**

- Ans
- 1. Adani
  - 2. Birla
  - 3. TATA
  - 4. Reliance

Question ID : 26433064590  
Option 1 ID : 264330252953  
Option 2 ID : 264330252955  
Option 3 ID : 264330252954  
Option 4 ID : 264330252952  
Status : Answered  
Chosen Option : 3

**Q.24 The Halda festival of Himachal Pradesh is primarily celebrated by which religious community?**

- Ans
- 1. Hindu
  - 2. Jain
  - 3. Buddhist
  - 4. Parsi

Question ID : 264330109622  
Option 1 ID : 264330430767  
Option 2 ID : 264330430765  
Option 3 ID : 264330430766  
Option 4 ID : 264330430768  
Status : Answered  
Chosen Option : 3

**Q.25 Which of the following is NOT a Directive Principle of State Policy?**

- Ans  1. Valuing the rich heritage of our culture  
 2. Promotion of co-operative societies  
 3. Uniform civil code for the citizens  
 4. Separation of judiciary from executive

Question ID : 264330110587  
Option 1 ID : 264330434626  
Option 2 ID : 264330434625  
Option 3 ID : 264330434628  
Option 4 ID : 264330434627  
Status : Answered  
Chosen Option : 1

**Q.26 In which year did India qualify for the FIFA World Cup?**

- Ans  1. 1958  
 2. 1954  
 3. 1946  
 4. 1950

Question ID : 264330119273  
Option 1 ID : 264330467382  
Option 2 ID : 264330467380  
Option 3 ID : 264330467379  
Option 4 ID : 264330467381  
Status : Answered  
Chosen Option : 3

**Q.27 In India, there are various crops produced. Which group of crops belong to the pulses?**

- Ans  1. Tea and coffee  
 2. Jute and cotton  
 3. Wheat and rice  
 4. Gram and tur

Question ID : 264330119881  
Option 1 ID : 264330469801  
Option 2 ID : 264330469802  
Option 3 ID : 264330469799  
Option 4 ID : 264330469800  
Status : Answered  
Chosen Option : 4

**Q.28 Which of the following Statutory Commissions was set up to study the working of the government after the Government of India Act 1919 was passed?**

- Ans  1. The Hunter Commission  
 2. The Butler Commission  
 3. The Simon Commission  
 4. The Campbell Commission

Question ID : 264330182876  
Option 1 ID : 264330717248  
Option 2 ID : 264330717250  
Option 3 ID : 264330717249  
Option 4 ID : 264330717251  
Status : Answered  
Chosen Option : 3

**Q.29** Kummi dance, usually performed during harvest festivals and Navratri, is a popular dance of which southern state?

- Ans
- 1. Karnataka
  - 2. Tamil Nadu
  - 3. Telangana
  - 4. Andhra Pradesh

Question ID : 264330110424  
Option 1 ID : 264330433974  
Option 2 ID : 264330433973  
Option 3 ID : 264330433976  
Option 4 ID : 264330433975  
Status : Answered  
Chosen Option : 4

**Q.30** Which mountain range includes the Shivalik range as a part?

- Ans
- 1. Western Ghats
  - 2. Eastern Ghats
  - 3. Himalayas
  - 4. Aravalli

Question ID : 264330174347  
Option 1 ID : 264330683807  
Option 2 ID : 264330683809  
Option 3 ID : 264330683808  
Option 4 ID : 264330683810  
Status : Answered  
Chosen Option : 3

**Q.31** Which of the following nations won the inaugural under-19 women's cricket world championship?

- Ans
- 1. New Zealand
  - 2. England
  - 3. Australia
  - 4. India

Question ID : 264330176926  
Option 1 ID : 264330693901  
Option 2 ID : 264330693902  
Option 3 ID : 264330693900  
Option 4 ID : 264330693899  
Status : Answered  
Chosen Option : 4

**Q.32** Schedule A of the Industrial Policy Resolution 1956 comprised of industries which would be:

- Ans
- 1. in the private sector
  - 2. owned by both private and public sector
  - 3. exclusively owned by foreign nationals
  - 4. exclusively owned by the state

Question ID : 264330117747  
Option 1 ID : 264330462803  
Option 2 ID : 264330462805  
Option 3 ID : 264330462806  
Option 4 ID : 264330462804  
Status : Answered  
Chosen Option : 4

Q.33 The disintegration of the Bahamani Empire gave rise to \_\_\_\_\_ independent kingdoms in Deccan.

- Ans
- 1. four
  - 2. five
  - 3. two
  - 4. seven

Question ID : 264330114083  
Option 1 ID : 264330448420  
Option 2 ID : 264330448419  
Option 3 ID : 264330448418  
Option 4 ID : 264330448417  
Status : Answered  
Chosen Option : 1

Q.34 Articles 36 to 51 of the Indian Constitution does NOT deal with which issues?

- Ans
- 1. Equal justice and free legal aid
  - 2. Secure suitable legislation and living wage for workers
  - 3. Secure a social order for promotion of welfare of the people
  - 4. Control of economic fluctuations for the benefits of a person or group

Question ID : 264330118538  
Option 1 ID : 264330465553  
Option 2 ID : 264330465555  
Option 3 ID : 264330465554  
Option 4 ID : 264330465556  
Status : Answered  
Chosen Option : 4

Q.35 The famous tripartite struggle between the Gurjara-Pratihara, Rashtrakuta and Pala dynasties was fought for control over \_\_\_\_\_.

- Ans
- 1. Panipat
  - 2. Manyakheta
  - 3. Avanti
  - 4. Kannauj

Question ID : 264330182257  
Option 1 ID : 264330714854  
Option 2 ID : 264330714851  
Option 3 ID : 264330714852  
Option 4 ID : 264330714853  
Status : Answered  
Chosen Option : 4

Q.36 Which state of the matter has LEAST force of attraction between its particles?

- Ans
- 1. Solid
  - 2. Plasma
  - 3. Liquid
  - 4. Gas

Question ID : 264330173651  
Option 1 ID : 264330681084  
Option 2 ID : 264330681083  
Option 3 ID : 264330681086  
Option 4 ID : 264330681085  
Status : Answered  
Chosen Option : 4

Q.37 Madhu Mansuri Hasmukh is a singer, song writer and activist from the state of \_\_\_\_\_.

- Ans
- 1. Madhya Pradesh
  - 2. Andhra Pradesh
  - 3. Jharkhand
  - 4. Chhattisgarh

Question ID : 264330111958  
Option 1 ID : 264330439920  
Option 2 ID : 264330439919  
Option 3 ID : 264330439918  
Option 4 ID : 264330439917  
Status : Answered  
Chosen Option : 4

Q.38 The 'Population Projection' in demographics refers to \_\_\_\_\_.

- Ans
- 1. measuring the population growth rate
  - 2. identifying the sex ratio in a particular area
  - 3. calculating the population density of a region
  - 4. estimating future population size based on past data and trends

Question ID : 264330179269  
Option 1 ID : 264330703081  
Option 2 ID : 264330703082  
Option 3 ID : 264330703079  
Option 4 ID : 264330703080  
Status : Answered  
Chosen Option : 4

Q.39 Part \_\_\_\_\_ of the Constitution of India deals with the Union Executive.

- Ans
- 1. V
  - 2. VI
  - 3. I
  - 4. III

Question ID : 264330130466  
Option 1 ID : 264330510975  
Option 2 ID : 264330510978  
Option 3 ID : 264330510977  
Option 4 ID : 264330510976  
Status : Answered  
Chosen Option : 1

Q.40 The term 'slip' is related to which of the following games?

- Ans
- 1. Cricket
  - 2. Hockey
  - 3. Badminton
  - 4. Football

Question ID : 264330118910  
Option 1 ID : 264330466295  
Option 2 ID : 264330466297  
Option 3 ID : 264330466298  
Option 4 ID : 264330466296  
Status : Answered  
Chosen Option : 1

**Q.41 Which of the following is an example of the most 'Liquid form of Money'?**

- Ans  1. National savings deposits  
 2. Currency notes  
 3. Fixed deposit receipts  
 4. Bonds

Question ID : 264330118240  
Option 1 ID : 264330464776  
Option 2 ID : 264330464777  
Option 3 ID : 264330464775  
Option 4 ID : 264330464778  
Status : Answered  
Chosen Option : 2

**Q.42 Who among the following established the Academy of Performing Arts and Research in Switzerland?**

- Ans  1. Pandit Kumar Gandharva  
 2. Pandit Bhimsen Joshi  
 3. Dr. M Balamuralikrishna  
 4. Pandit Jasraj

Question ID : 264330114170  
Option 1 ID : 264330448768  
Option 2 ID : 264330448766  
Option 3 ID : 264330448765  
Option 4 ID : 264330448767  
Status : Answered  
Chosen Option : 4

**Q.43 The interim Government was provisioned under which Plan/Act of the Government of India, by the Britishers?**

- Ans  1. Cripps Mission Plan  
 2. Cabinet Mission Plan  
 3. Government of India Act, 1935  
 4. Government of India Act, 1919

Question ID : 264330118004  
Option 1 ID : 264330463832  
Option 2 ID : 264330463833  
Option 3 ID : 264330463831  
Option 4 ID : 264330463834  
Status : Answered  
Chosen Option : 2

**Q.44 Who founded the Abhinav Bharat Society?**

- Ans  1. Lala Hardayal  
 2. Madan Lal Dhingra  
 3. P Mitra  
 4. Savarkar Brothers

Question ID : 264330119716  
Option 1 ID : 264330469139  
Option 2 ID : 264330469141  
Option 3 ID : 264330469142  
Option 4 ID : 264330469140  
Status : Answered  
Chosen Option : 4

**Q.45** The fundamental objective of the second five year plan was to initiate and accelerate the process of \_\_\_\_\_ so that the development of Indian economy takes a firm base.

- Ans**
- 1. liberalisation
  - 2. globalisation
  - 3. industrialisation
  - 4. privatisation

Question ID : 264330109990  
Option 1 ID : 264330432240  
Option 2 ID : 264330432239  
Option 3 ID : 264330432237  
Option 4 ID : 264330432238  
Status : Answered  
Chosen Option : 3

**Q.46** Who among the following is a famous Chhau dancer?

- Ans**
- 1. Sadashiva Pradhan
  - 2. Alloka Kanungo
  - 3. Pratibha Prahlad
  - 4. Chhaya Khutegaonkar

Question ID : 264330106201  
Option 1 ID : 264330417106  
Option 2 ID : 264330417107  
Option 3 ID : 264330417105  
Option 4 ID : 264330417108  
Status : Answered  
Chosen Option : 1

**Q.47** Tanjore Bala saraswati was a prominent dancer of which form of Indian Classical Dance?

- Ans**
- 1. Manipuri
  - 2. Bharatanatyam
  - 3. Odissi
  - 4. Kuchipudi

Question ID : 264330111203  
Option 1 ID : 264330436900  
Option 2 ID : 264330436899  
Option 3 ID : 264330436898  
Option 4 ID : 264330436897  
Status : Answered  
Chosen Option : 4

**Q.48** The Stupa sculptures found at Sanghol in Punjab belongs to which of the following schools?

- Ans**
- 1. Gandhara
  - 2. Sarnath
  - 3. Amravati
  - 4. Mathura

Question ID : 264330109629  
Option 1 ID : 264330430794  
Option 2 ID : 264330430796  
Option 3 ID : 264330430795  
Option 4 ID : 264330430793  
Status : Answered  
Chosen Option : 1

**Q.49** Select the correct sequence of the following steps during the process of photosynthesis.  
i. Chlorophyll helps in absorbing light energy.  
ii. Light energy is converted into chemical energy and the water molecule is split into oxygen and hydrogen molecules.  
iii. Carbon dioxide is converted into carbohydrates.

- Ans**
- 1. Step i and step ii always occur together and step iii can occur any other time
  - 2. They always occur sequentially in the order i → ii → iii
  - 3. Step i occurs first and steps ii and iii occur together next
  - 4. These steps need not occur one after another immediately

Question ID : 264330181669  
Option 1 ID : 264330712561  
Option 2 ID : 264330712559  
Option 3 ID : 264330712560  
Option 4 ID : 264330712562  
Status : Answered  
Chosen Option : 4

**Q.50** Which of the following cricketers has written the autobiography titled 'At the Close of Play'?

- Ans**
- 1. Ricky Ponting
  - 2. Matthew Hayden
  - 3. Kevin Pieterse
  - 4. Chris Gayle

Question ID : 26433066676  
Option 1 ID : 264330261230  
Option 2 ID : 264330261228  
Option 3 ID : 264330261229  
Option 4 ID : 264330261231  
Status : Answered  
Chosen Option : 1

Section : Reasoning

**Q.1** Two statements are given followed by two conclusions numbered I and II. Assuming the statements to be true, even if they seem to be at variance with commonly known facts, decide which of the conclusions logically follow(s) from the statements.

**Statements:**  
All bats are balls.  
All balls are wickets.  
**Conclusions:**  
I. All wickets are balls.  
II. All bats are wickets.

- Ans**
- 1. Neither conclusion I nor II follows
  - 2. Only conclusion II follows
  - 3. Both conclusions I and II follow
  - 4. Only conclusion I follows

Question ID : 26433045344  
Option 1 ID : 264330177814  
Option 2 ID : 264330177812  
Option 3 ID : 264330177813  
Option 4 ID : 264330177811  
Status : Answered  
Chosen Option : 3

Q.2 Select the set in which the numbers are related in the same way as are the numbers of the following sets.

(NOTE : Operations should be performed on the whole numbers, without breaking down the numbers into its constituent digits. E.g. 13 – Operations on 13 such as adding/deleting/multiplying etc. to 13 can be performed. Breaking down 13 into 1 and 3 and then performing mathematical operations on 1 and 3 is not allowed)  
(3, 198, 6)  
(5, 495, 9)

- Ans  1. (9, 1288, 12)  
 2. (5, 424, 8)  
 3. (4, 352, 8)  
 4. (7, 827, 11)

Question ID : 26433097436

Option 1 ID : 264330382436

Option 2 ID : 264330382434

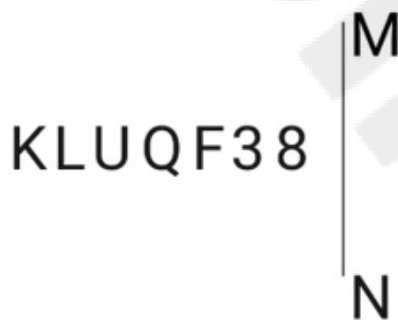
Option 3 ID : 264330382435

Option 4 ID : 264330382433

Status : Answered

Chosen Option : 3

Q.3 Select the correct mirror image of the given figure when the mirror is placed at MN as shown below.



- Ans  1. 83FQUJK  
 2. 8EFQUJK  
 3. 8EFQJUK  
 4. 83FQJUK

Question ID : 264330126679

Option 1 ID : 264330496388

Option 2 ID : 264330496391

Option 3 ID : 264330496389

Option 4 ID : 264330496390

Status : Answered

Chosen Option : 3

Q.4 Which figure should replace the question mark (?) if the following series were to be continued?

Y	I	L	D	O	L	Y	I	C	Y						
C	Z	D	I	C	Z	Z	D	I	L	Z	D	D	I	L	?
O	L	Y	O	C	Y	O	C	Z	O						

Ans

✗ 1.

Y	O	
L	D	I
C	Z	

✓ 2.

O	L	
Y	D	I
C	Z	

✗ 3.

O	C	
I	L	D
Y	Z	

✗ 4.

Z	L	
Y	D	I
O	C	

Question ID : 264330103896

Option 1 ID : 264330407885

Option 2 ID : 264330407886

Option 3 ID : 264330407887

Option 4 ID : 264330407888

Status : Answered

Chosen Option : 3

Q.5 Select the option that is related to the fifth letter cluster in the same way as the second letter cluster is related to the first letter cluster and the fourth letter cluster is related to the third letter cluster.

KGMQ : EQGA :: LZUD : FJON :: JRCO : ?

Ans ✗ 1. DNSY

✓ 2. DBWY

✗ 3. KXWB

✗ 4. KRWY

Question ID : 26433074695

Option 1 ID : 264330292868

Option 2 ID : 264330292869

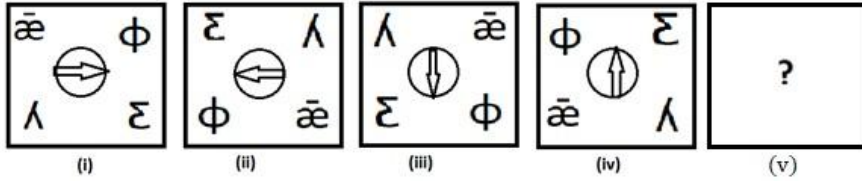
Option 3 ID : 264330292870

Option 4 ID : 264330292871

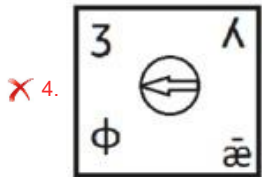
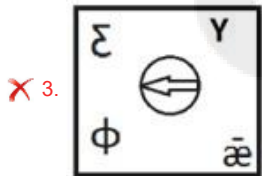
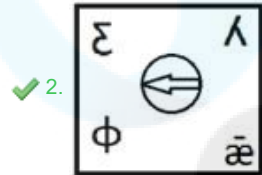
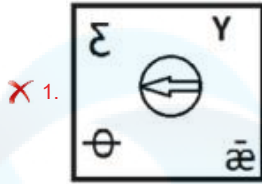
Status : Answered

Chosen Option : 2

Q.6 Select the figure from among the given options that can replace the question mark (?) in the following series.



Ans



Question ID : 264330106548

Option 1 ID : 264330418496

Option 2 ID : 264330418495

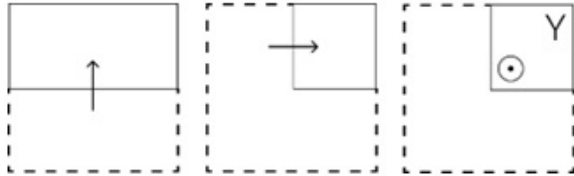
Option 3 ID : 264330418494

Option 4 ID : 264330418493

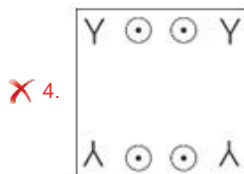
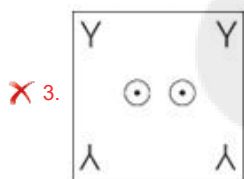
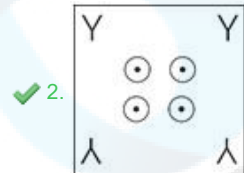
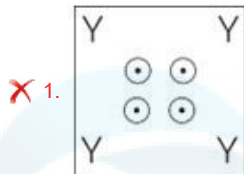
Status : Answered

Chosen Option : 3

Q.7 A paper is folded and cut as shown below. How will it appear when unfolded?



Ans



Question ID : 264330114708  
 Option 1 ID : 264330450920  
 Option 2 ID : 264330450919  
 Option 3 ID : 264330450918  
 Option 4 ID : 264330450917

Status : Answered

Chosen Option : 2

Q.8 Seven friends, Gauri, Vinod, Ridima, Jiya, Ritik, Vishal and Karishma, are sitting on a circular bench, facing towards the centre but not necessarily in the same order. Vinod and Jiya are not the neighbours of Ritik. Karishma is sitting third to the left of Ritik. Gauri is sitting to the immediate right of Karishma. Ridima is sitting to the immediate left of Ritik. Who is sitting second to the right of Gauri?

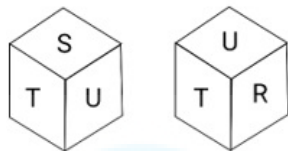
- Ans
- ✗ 1. Vinod
  - ✗ 2. Jiya
  - ✗ 3. Ridima
  - ✓ 4. Ritik

Question ID : 26433089544  
 Option 1 ID : 264330351679  
 Option 2 ID : 264330351677  
 Option 3 ID : 264330351680  
 Option 4 ID : 264330351678

Status : Answered

Chosen Option : 4

**Q.9** Six letters P, Q, R, S, T and U are written on different faces of a dice. Two positions of this dice are shown in the figure. Find the letter on the face opposite to 'R'.



- Ans**
- 1. Q
  - 2. T
  - 3. P
  - 4. S

Question ID : 264330106469

Option 1 ID : 264330418180

Option 2 ID : 264330418179

Option 3 ID : 264330418178

Option 4 ID : 264330418177

Status : Answered

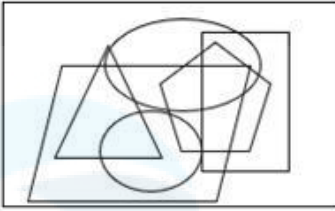
Chosen Option : 4

**Q.10** Select the option in which the given figure is embedded. (Rotation is NOT allowed.)

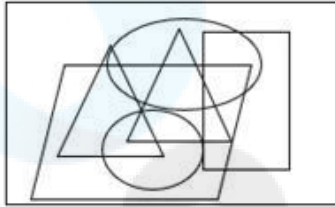


**Ans**

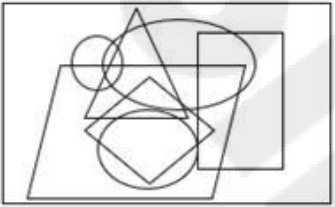
✗ 1.



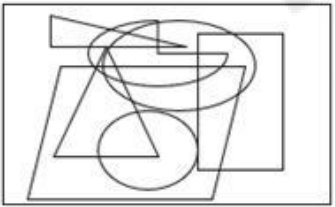
✓ 2.



✗ 3.



✗ 4.



Question ID : 26433092514

Option 1 ID : 264330363348

Option 2 ID : 264330363347

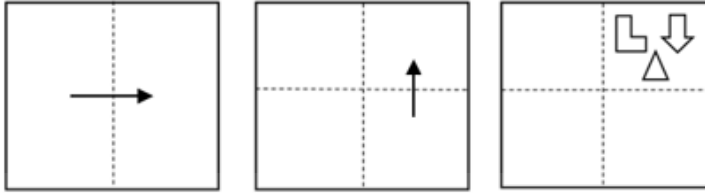
Option 3 ID : 264330363346

Option 4 ID : 264330363345

Status : Answered

Chosen Option : 2

Q.11 A paper is folded and cut as shown below. How will it appear when unfolded?



Ans

- ✗ 1.
- ✗ 2.
- ✓ 3.
- ✗ 4.

Question ID : 264330113648

Option 1 ID : 264330446680

Option 2 ID : 264330446679

Option 3 ID : 264330446678

Option 4 ID : 264330446677

Status : Answered

Chosen Option : 3

Q.12 If + means -, - means ×, × means ÷ and ÷ means +, what is the value of the following expression?

$$8 - 2 + 6 \times 3 \div 5$$

- Ans
- ✗ 1. 20
  - ✗ 2. 21
  - ✓ 3. 19
  - ✗ 4. 23

Question ID : 26433085650

Option 1 ID : 264330336302

Option 2 ID : 264330336304

Option 3 ID : 264330336301

Option 4 ID : 264330336303

Status : Answered

Chosen Option : 3

Q.13 Select the correct mirror image of the given figure when the mirror is placed at PQ as shown below.

^^VV098&\*()\_ / |  
P  
Q

Ans

- ✗ 1. \\_)(\*88e0VV^^
- ✗ 2. \\_()\*88e0VV^^
- ✓ 3. \\_()\*88e0VV^^
- ✗ 4. \\_()\*880eVV^^

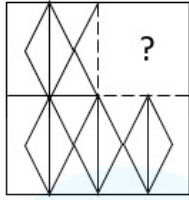
Question ID : 26433082029  
Option 1 ID : 264330321951  
Option 2 ID : 264330321950  
Option 3 ID : 264330321952  
Option 4 ID : 264330321949  
Status : Answered  
Chosen Option : 3

Q.14 Which of the following terms will replace the question mark (?) in the given series?  
RTV, PQR, ?, LKJ, JHF

- Ans
- ✗ 1. MNO
  - ✗ 2. MNM
  - ✗ 3. NOM
  - ✓ 4. NNN

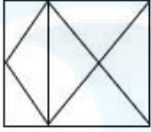
Question ID : 264330102177  
Option 1 ID : 264330401176  
Option 2 ID : 264330401174  
Option 3 ID : 264330401175  
Option 4 ID : 264330401173  
Status : Answered  
Chosen Option : 4

**Q.15** Select the option figure that will replace the question mark (?) in the figure given below to complete the pattern.

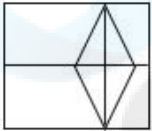


**Ans**

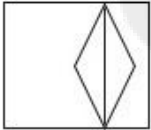
✗ 1.



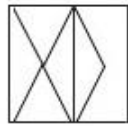
✗ 2.



✗ 3.



✓ 4.



Question ID : 26433080837  
Option 1 ID : 264330317284  
Option 2 ID : 264330317282  
Option 3 ID : 264330317283  
Option 4 ID : 264330317281

Status : Answered

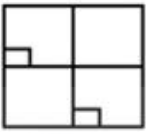
Chosen Option : 4

Q.16 Select the option in which the given figure is embedded (rotation is NOT allowed).

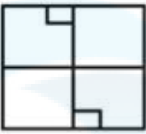


Ans

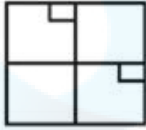
✗ 1.



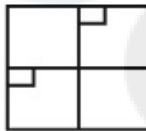
✗ 2.



✗ 3.



✓ 4.



Question ID : 264330101154

Option 1 ID : 264330397164

Option 2 ID : 264330397162

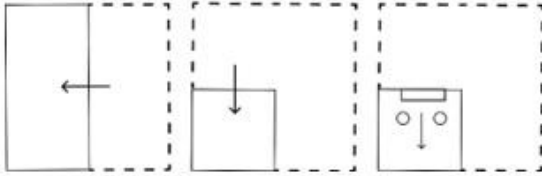
Option 3 ID : 264330397161

Option 4 ID : 264330397163

Status : Answered

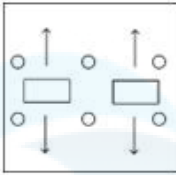
Chosen Option : 4

Q.17 A paper is folded and cut as shown below. How will it appear when unfolded?

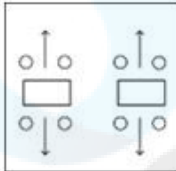


Ans

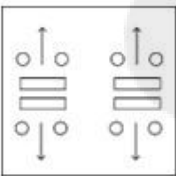
✗ 1.



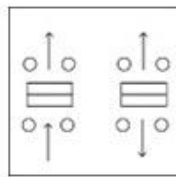
✓ 2.



✗ 3.



✗ 4.



Question ID : 264330114710

Option 1 ID : 264330450925

Option 2 ID : 264330450927

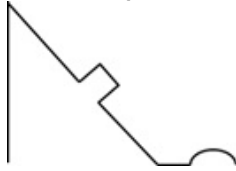
Option 3 ID : 264330450928

Option 4 ID : 264330450926

Status : Answered

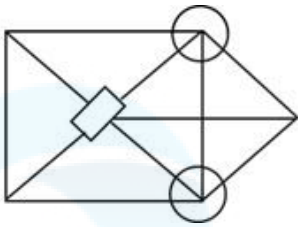
Chosen Option : 4

Q.18 Select the option in which the given figure is embedded (rotation is NOT allowed).

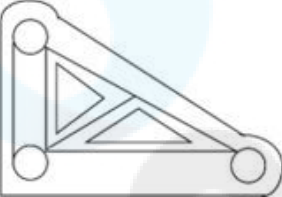


Ans

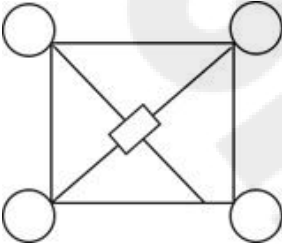
✗ 1.



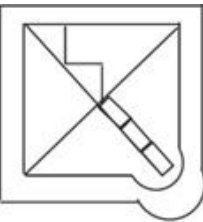
✗ 2.



✓ 3.



✗ 4.



Question ID : 264330111675

Option 1 ID : 264330438785

Option 2 ID : 264330438788

Option 3 ID : 264330438786

Option 4 ID : 264330438787

Status : Answered

Chosen Option : 3

Q.19 Select the option that is related to the third term in the same way as the second term is related to the first term and the sixth term is related to the fifth term.  
5 : 45 :: 4 : ? :: 12 : 108

Ans ✗ 1. 24

✓ 2. 36

✗ 3. 40

✗ 4. 48

Question ID : 264330101040

Option 1 ID : 264330396706

Option 2 ID : 264330396705

Option 3 ID : 264330396707

Option 4 ID : 264330396708

Status : Answered

Chosen Option : 2

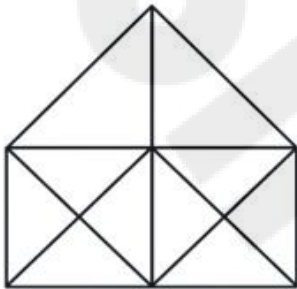
Q.20 Select the number from among the given options that can replace the question mark (?) in the following series.

7, 11, 23, 59, 167, ?

- Ans
- 1. 324
  - 2. 678
  - 3. 491
  - 4. 346

Question ID : 264330109765  
Option 1 ID : 264330431338  
Option 2 ID : 264330431339  
Option 3 ID : 264330431337  
Option 4 ID : 264330431340  
Status : Answered  
Chosen Option : 3

Q.21 How many triangles are there in the given figure?



- Ans
- 1. 28
  - 2. 25
  - 3. 32
  - 4. 23

Question ID : 26433080669  
Option 1 ID : 264330316610  
Option 2 ID : 264330316611  
Option 3 ID : 264330316612  
Option 4 ID : 264330316609  
Status : Answered  
Chosen Option : 4

Q.22 Select the correct mirror image of the given combination when the mirror is placed at MN as shown below.

L 1 d 2 z 6 k

M

|

N

Ans

✓ 1. k 6 z 2 d 1 L

✗ 2. k 6 z 2 d 1 L

✗ 3. k 2 d 1 z 6 L

✗ 4. k 6 z 2 d 1 L

Question ID : 264330117003

Option 1 ID : 264330460095

Option 2 ID : 264330460094

Option 3 ID : 264330460096

Option 4 ID : 264330460093

Status : Answered

Chosen Option : 1

Q.23 Select the correct combination of mathematical signs to sequentially replace the \* signs and to balance the given equation.

$$658 * 14 * 3 * 32 * 56 * 165$$

Ans

✗ 1. = + x - +

✓ 2. ÷ x - + =

✗ 3. x + - + =

✗ 4. ÷ x + - =

Question ID : 26433085728

Option 1 ID : 264330336613

Option 2 ID : 264330336614

Option 3 ID : 264330336615

Option 4 ID : 264330336616

Status : Answered

Chosen Option : 2

Q.24 Which figure should replace the question mark (?) if the series were to be continued?

6	8	2	X	6	8	8	X	6	↑	8	X	
X	♥	=	2	=	↑	↑	2	=	6	=	♥	?
	↑				♥		♥				2	

Ans

✗ 1. 

8	X	♥
↑	6	=
	2	

✓ 2. 

X	↑	8
♥	6	=
	2	

✗ 3. 

6	↑	8
X	♥	2
	=	

✗ 4. 

X	2	↑
♥	8	6
	=	

Question ID : 264330130823

Option 1 ID : 264330512405

Option 2 ID : 264330512403

Option 3 ID : 264330512406

Option 4 ID : 264330512404

Status : Answered

Chosen Option : 2

Q.25 In a certain code language, 'PENCIL' is written as 'NEPLIC' and 'ERASER' is written as 'ARERES'. How will 'GEOMETRY' be written in that language?

Ans ✗ 1. MEOGRYTE

✗ 2. MEOGR RTE

✓ 3. MOEGYRTE

✗ 4. MEOGYRET

Question ID : 26433087255

Option 1 ID : 264330342657

Option 2 ID : 264330342659

Option 3 ID : 264330342658

Option 4 ID : 264330342660

Status : Answered

Chosen Option : 3

Q.1 In a chief election, a candidate got 55% of the total valid votes. 6% of the total votes were declared invalid. If the total number of votes is 30,000, then the number of valid votes polled in favour of the candidate is:

- Ans  1. 15,510  
 2. 15,000  
 3. 16,000  
 4. 15,500

Question ID : 264330130917  
Option 1 ID : 264330512782  
Option 2 ID : 264330512779  
Option 3 ID : 264330512780  
Option 4 ID : 264330512781  
Status : Answered  
Chosen Option : 1

Q.2 Namita deposited ₹9,000 which amounted to ₹10,200 after 3 years at simple interest per annum. Had the interest been 2% more, what amount (in ₹) would she get?

- Ans  1. 11400  
 2. 12480  
 3. 10740  
 4. 11260

Question ID : 264330119524  
Option 1 ID : 264330468379  
Option 2 ID : 264330468380  
Option 3 ID : 264330468382  
Option 4 ID : 264330468381  
Status : Answered  
Chosen Option : 1

Q.3 Anil's income is 18% more than Ramesh's income. By what percentage is Ramesh's income less than Anil's income?

- Ans  1. 15.25%  
 2. 10.25%  
 3. 12.25%  
 4. 18.25%

Question ID : 26433099038  
Option 1 ID : 264330388791  
Option 2 ID : 264330388789  
Option 3 ID : 264330388790  
Option 4 ID : 264330388792  
Status : Answered  
Chosen Option : 4

Q.4 P and Q can finish a work individually in 30 and 45 days, respectively. P starts the work and works alone for 5 days. Then Q joins him and they work together for 6 days, after which P leaves. The part of the work left at that point is:

- Ans  1. 0.5  
 2. 0.6  
 3. 0.2  
 4. 0.4

Question ID : 264330103749  
Option 1 ID : 264330407303  
Option 2 ID : 264330407302  
Option 3 ID : 264330407304  
Option 4 ID : 264330407301  
Status : Answered  
Chosen Option : 1

Q.5 What is the area of a triangle whose sides are of lengths 9 cm, 40 cm and 41 cm?

- Ans  1. 170 cm<sup>2</sup>  
 2. 180 cm<sup>2</sup>  
 3. 160 cm<sup>2</sup>  
 4. 210 cm<sup>2</sup>

Question ID : 264330119357  
Option 1 ID : 264330467716  
Option 2 ID : 264330467715  
Option 3 ID : 264330467718  
Option 4 ID : 264330467717  
Status : Answered  
Chosen Option : 2

Q.6 If 66 cm<sup>3</sup> of silver is drawn into a wire having a diameter of 2 mm, then the length of the wire, in m, will be: (Use  $\pi = \frac{22}{7}$ )

- Ans  1. 27  
 2. 23  
 3. 15  
 4. 21

Question ID : 264330118114  
Option 1 ID : 264330464274  
Option 2 ID : 264330464272  
Option 3 ID : 264330464271  
Option 4 ID : 264330464273  
Status : Answered  
Chosen Option : 4

Q.7 A train moving at uniform speed crosses a pole in 3 seconds and a 700 m long bridge in 10 seconds. What is the speed of the train?

- Ans
- 1. 150 m/s
  - 2. 110 m/s
  - 3. 120 m/s
  - 4. 100 m/s

Question ID : 264330122990  
Option 1 ID : 264330482025  
Option 2 ID : 264330482026  
Option 3 ID : 264330482023  
Option 4 ID : 264330482024  
Status : Answered  
Chosen Option : 4

Q.8 Simplify  $\frac{6.1 \times 61 \times 6.1 - 1}{6.1 \times 6.1 + 6.1 + 1}$ .

- Ans
- 1. 3.1
  - 2. 5.1
  - 3. 4.1
  - 4. 6.1

Question ID : 264330104337  
Option 1 ID : 264330409652  
Option 2 ID : 264330409650  
Option 3 ID : 264330409651  
Option 4 ID : 264330409649  
Status : Answered  
Chosen Option : 4

Q.9 The average of the prime numbers between 57 and 99 (both inclusive) is:  
(Rounded off to one decimal place)

- Ans
- 1. 85.6
  - 2. 75.4
  - 3. 87.7
  - 4. 79.3

Question ID : 264330112414  
Option 1 ID : 264330441742  
Option 2 ID : 264330441743  
Option 3 ID : 264330441744  
Option 4 ID : 264330441741  
Status : Answered  
Chosen Option : 3

**Q.10** Let  $N$  be a three-digit positive integer such that the unit digit of  $N$  is prime and the product of all the digits of  $N$  is also prime. The number of possible values of  $N$  is:

- Ans  1. 4  
 2. 12  
 3. 3  
 4. 8

Question ID : 264330111446  
Option 1 ID : 264330437870  
Option 2 ID : 264330437872  
Option 3 ID : 264330437869  
Option 4 ID : 264330437871  
Status : Answered  
Chosen Option : 3

**Q.11** The ratio of the sixth and seventh terms of the sequence 1, 3, 6, 10, ... is:

- Ans  1. 4 : 3  
 2. 3 : 5  
 3. 5 : 3  
 4. 3 : 4

Question ID : 264330130937  
Option 1 ID : 264330512860  
Option 2 ID : 264330512859  
Option 3 ID : 264330512861  
Option 4 ID : 264330512862  
Status : Answered  
Chosen Option : 4

**Q.12** The average of 6 terms is 30. The first term is twice the sum of the remaining terms. Find the first term.

- Ans  1. 120  
 2. 60  
 3. 80  
 4. 100

Question ID : 264330168540  
Option 1 ID : 264330660973  
Option 2 ID : 264330660974  
Option 3 ID : 264330660971  
Option 4 ID : 264330660972  
Status : Answered  
Chosen Option : 1

**Q.13** A book is sold at three successive discounts of 20%, 30% and 10%. The net discount in percentage is:

- Ans  1. 49.60%  
 2. 60%  
 3. 37.60%  
 4. 47.60%

Question ID : 264330168982  
Option 1 ID : 264330662733  
Option 2 ID : 264330662732  
Option 3 ID : 264330662731  
Option 4 ID : 264330662734  
Status : Answered  
Chosen Option : 1

**Q.14** A moneylender borrows money at 4% per annum and pays the interest at the end of the year. He lends it at 8% per annum compound interest, compounded half-yearly, and receives the interest at the end of the year. In this way, he gains ₹166.4 a year. Find the amount of money he borrows.

- Ans**
- 1. ₹4,500
  - 2. ₹6,500
  - 3. ₹5,050
  - 4. ₹4,000

Question ID : 264330104361  
Option 1 ID : 264330409747  
Option 2 ID : 264330409748  
Option 3 ID : 264330409746  
Option 4 ID : 264330409745  
Status : Answered  
Chosen Option : 4

**Q.15** A dealer sells an item for ₹500 by making a profit of 25%. He sells another item at a loss of 10%, and on the whole, makes neither profit nor loss. What did the second item cost him?

- Ans**
- 1. ₹1,000
  - 2. ₹500
  - 3. ₹750
  - 4. ₹800

Question ID : 264330118066  
Option 1 ID : 264330464080  
Option 2 ID : 264330464079  
Option 3 ID : 264330464082  
Option 4 ID : 264330464081  
Status : Answered  
Chosen Option : 1

Section : Computer Proficiency

**Q.1** Which of the following chart types is best suited for showing trends over time?

- Ans**
- 1. Line chart
  - 2. Scatter plot
  - 3. Pie chart
  - 4. Bar chart

Question ID : 264330178561  
Option 1 ID : 264330700271  
Option 2 ID : 264330700274  
Option 3 ID : 264330700273  
Option 4 ID : 264330700272  
Status : Answered  
Chosen Option : 1

**Q.2 Which of the following options quickly changes the font of the selected text in Microsoft Word 365 without opening the Font dialog box?**

- Ans**
- 1. Right-click and select "Font"
  - 2. Press Ctrl + + F
  - 3. Use the Font drop-down menu on the Status bar
  - 4. Double-click the text

Question ID : 264330182788  
Option 1 ID : 264330716923  
Option 2 ID : 264330716924  
Option 3 ID : 264330716925  
Option 4 ID : 264330716926  
Status : Answered  
Chosen Option : 1

**Q.3 The \_\_\_\_\_ symbol is employed to separate the username and domain name within an email address.**

- Ans**
- 1. &
  - 2. . (dot)
  - 3. @
  - 4. \$

Question ID : 264330177642  
Option 1 ID : 264330696686  
Option 2 ID : 264330696683  
Option 3 ID : 264330696685  
Option 4 ID : 264330696684  
Status : Answered  
Chosen Option : 3

**Q.4 Which of the following is NOT a Change Case option in MS word 365?**

- Ans**
- 1. Sentence case
  - 2. Page case
  - 3. Uppercase
  - 4. Toggle case

Question ID : 264330177671  
Option 1 ID : 264330696799  
Option 2 ID : 264330696800  
Option 3 ID : 264330696801  
Option 4 ID : 264330696802  
Status : Answered  
Chosen Option : 2

**Q.5 What is the primary differentiating factor between broadband and dialup connections offered by ISPs?**

- Ans**
- 1. Dialup connections offer higher security levels than broadband.
  - 2. Broadband provides faster internet speeds compared to dialup.
  - 3. Dialup connections are wireless, while broadband requires wired connections.
  - 4. Dialup offers unlimited data usage, unlike broadband.

Question ID : 264330178553  
Option 1 ID : 264330700242  
Option 2 ID : 264330700239  
Option 3 ID : 264330700240  
Option 4 ID : 264330700241  
Status : Answered  
Chosen Option : 2

**Q.6 What is the purpose of the Help feature in Microsoft Word 365?**

- Ans
- 1. To provide access to online tutorials and resources
  - 2. To provide assistance in creating documents
  - 3. To allow customisation of the user interface
  - 4. To offer grammar and spelling suggestions

Question ID : 264330173598  
Option 1 ID : 264330680873  
Option 2 ID : 264330680871  
Option 3 ID : 264330680874  
Option 4 ID : 264330680872  
Status : Answered  
Chosen Option : 2

**Q.7 How do you change the font style and size of selected text in MS-Excel 365?**

- Ans
- 1. Access the 'Home' tab, use the 'Font' group.
  - 2. Apply a new cell style to the selected text.
  - 3. Press the 'Ctrl+F' shortcut keys together.
  - 4. Right-click the text and choose 'Font'.

Question ID : 264330181817  
Option 1 ID : 264330713115  
Option 2 ID : 264330713118  
Option 3 ID : 264330713117  
Option 4 ID : 264330713116  
Status : Answered  
Chosen Option : 1

**Q.8 Which of the following is the correct option to create a table in MS-Word 2010?**

- Ans
- 1. Home Tab -> Create Table
  - 2. Home Tab -> Insert Table
  - 3. Create Tab -> Insert Table
  - 4. Insert Tab -> Table Button

Question ID : 264330176701  
Option 1 ID : 264330693022  
Option 2 ID : 264330693019  
Option 3 ID : 264330693021  
Option 4 ID : 264330693020  
Status : Answered  
Chosen Option : 4

**Q.9 Which of the following functions is executed in MS Word 365 when Ctrl + V is used?**

- Ans
- 1. Copy the data
  - 2. Cut the data
  - 3. Paste the data
  - 4. Select all the data

Question ID : 264330180421  
Option 1 ID : 264330707653  
Option 2 ID : 264330707651  
Option 3 ID : 264330707652  
Option 4 ID : 264330707654  
Status : Answered  
Chosen Option : 3

**Q.10** In a worksheet, there is a list of student scores in a column. To count the number of students who scored above 90, which Excel 365 function should be used?

- Ans
- 1. COUNT
  - 2. COUNTIF
  - 3. COUNTBLANK
  - 4. COUNTA

Question ID : 264330177661

Option 1 ID : 264330696759

Option 2 ID : 264330696761

Option 3 ID : 264330696762

Option 4 ID : 264330696760

Status : Answered

Chosen Option : 2