

## Constable Executive Male and Female in Delhi Police Examination 2023

Roll Number	
Candidate Name	
Venue Name	
Exam Date	28/11/2023
Exam Time	12:00 PM - 1:30 PM
Subject	Constable Executive Male and Female in Delhi Police Examination 2023

Section : General Knowledge

**Q.1** As per India Skills Report 2022, which Indian state got the first rank with the most employable talent?

- Ans
- 1. Goa
  - 2. Kerala
  - 3. Uttar Pradesh
  - 4. Maharashtra

Question ID : 264330177910  
Option 1 ID : 264330697730  
Option 2 ID : 264330697728  
Option 3 ID : 264330697727  
Option 4 ID : 264330697729  
Status : Not Answered  
Chosen Option : --

**Q.2** Baishagu is celebrated in which of the following states?

- Ans
- 1. Punjab
  - 2. Assam
  - 3. Goa
  - 4. Bihar

Question ID : 264330118632  
Option 1 ID : 264330465782  
Option 2 ID : 264330465780  
Option 3 ID : 264330465779  
Option 4 ID : 264330465781  
Status : Answered  
Chosen Option : 1

**Q.3** What do you mean by 'cant' in kabaddi?

- Ans
- 1. A player in whose court a raid is made
  - 2. A special point is given to an opponent
  - 3. A player who enters the court
  - 4. Repeating round of the word 'kabaddi'

Question ID : 264330118476  
Option 1 ID : 264330465306  
Option 2 ID : 264330465308  
Option 3 ID : 264330465305  
Option 4 ID : 264330465307  
Status : Not Answered  
Chosen Option : --

Q.4 Which of the following is the oldest atomic power plant of India?

- Ans  1. Tarapur  
 2. Kaiga  
 3. Kakrapar  
 4. Narora

Question ID : 264330181282  
Option 1 ID : 264330711051  
Option 2 ID : 264330711054  
Option 3 ID : 264330711053  
Option 4 ID : 264330711052  
Status : Answered  
Chosen Option : 1

Q.5 Which of the following is NOT included in Article 19 of the Constitution of India?

- Ans  1. To reside and settle in any part of India  
 2. To practice any profession or occupation  
 3. To form associations and unions  
 4. To prohibit ineligibility in respect of employment

Question ID : 264330110579  
Option 1 ID : 264330434595  
Option 2 ID : 264330434596  
Option 3 ID : 264330434594  
Option 4 ID : 264330434593  
Status : Answered  
Chosen Option : 4

Q.6 Where is the secretariat of the Goods and Services Tax Council located?

- Ans  1. Chandigarh  
 2. Mumbai  
 3. Kolkata  
 4. New Delhi

Question ID : 264330173511  
Option 1 ID : 264330680523  
Option 2 ID : 264330680525  
Option 3 ID : 264330680526  
Option 4 ID : 264330680524  
Status : Answered  
Chosen Option : 4

Q.7 Some qualities of Samudragupta are shown on coins, such as on one of the coins he is shown playing the \_\_\_\_\_.

- Ans  1. Table  
 2. sarangi  
 3. veena  
 4. bansuri

Question ID : 264330119756  
Option 1 ID : 264330469299  
Option 2 ID : 264330469302  
Option 3 ID : 264330469301  
Option 4 ID : 264330469300  
Status : Answered  
Chosen Option : 3

Q.8 Which of the following is the largest, double membrane-bound organelles, which contain all the cell's genetic information?

- Ans
- 1. Ribosome
  - 2. Peroxisomes
  - 3. Lysosome
  - 4. Nucleus

Question ID : 264330111889  
Option 1 ID : 264330439641  
Option 2 ID : 264330439644  
Option 3 ID : 264330439643  
Option 4 ID : 264330439642  
Status : Answered  
Chosen Option : 1

Q.9 Which of the following is NOT a central bank's function?

- Ans
- 1. Lending to commercial banks
  - 2. Banking facilities for the public
  - 3. Financial services for the government
  - 4. Lending to the government

Question ID : 264330117792  
Option 1 ID : 264330462983  
Option 2 ID : 264330462984  
Option 3 ID : 264330462985  
Option 4 ID : 264330462986  
Status : Answered  
Chosen Option : 2

Q.10 Which Treaty resulted in the demarcation of territories between Ranjit Singh and the East India Company?

- Ans
- 1. Lahore
  - 2. Surat
  - 3. Amritsar
  - 4. Bhaironwal

Question ID : 264330120295  
Option 1 ID : 264330471433  
Option 2 ID : 264330471431  
Option 3 ID : 264330471434  
Option 4 ID : 264330471432  
Status : Answered  
Chosen Option : 3

Q.11 Capital market is a market for \_\_\_\_\_ funds.

- Ans
- 1. long term
  - 2. medium term only
  - 3. short term
  - 4. both short term and long term

Question ID : 264330119659  
Option 1 ID : 264330468913  
Option 2 ID : 264330468912  
Option 3 ID : 264330468911  
Option 4 ID : 264330468914  
Status : Answered  
Chosen Option : 1

Q.12 As per Article 350 B of the Constitution of India, who appoints the Special Officer for Linguistic Minorities?

- Ans
- 1. Governor
  - 2. Chief Justice of India
  - 3. Prime Minister
  - 4. President

Question ID : 264330110593  
Option 1 ID : 264330434652  
Option 2 ID : 264330434651  
Option 3 ID : 264330434649  
Option 4 ID : 264330434650  
Status : Answered  
Chosen Option : 4

Q.13 NITI Aayog came into existence in 2015. On which date was it formed?

- Ans
- 1. 31<sup>st</sup> January
  - 2. 15<sup>th</sup> August
  - 3. 1<sup>st</sup> March
  - 4. 1<sup>st</sup> January

Question ID : 264330109389  
Option 1 ID : 264330429834  
Option 2 ID : 264330429836  
Option 3 ID : 264330429835  
Option 4 ID : 264330429833  
Status : Answered  
Chosen Option : 3

Q.14 Name the place where "independent" parallel government by Indians was established during the Quit India movement as a mark of revolt against British government.

- Ans
- 1. Satara
  - 2. Kalpi
  - 3. Rohtak
  - 4. Kanpur

Question ID : 264330119491  
Option 1 ID : 264330468250  
Option 2 ID : 264330468249  
Option 3 ID : 264330468247  
Option 4 ID : 264330468248  
Status : Answered  
Chosen Option : 4

Q.15 Who proposed to pass an Act for the repair and protection of historical monuments of the country?

- Ans
- 1. Lord Mayo
  - 2. Lord Northbrook
  - 3. Lord Curzon
  - 4. Lord Canning

Question ID : 264330119714  
Option 1 ID : 264330469132  
Option 2 ID : 264330469134  
Option 3 ID : 264330469133  
Option 4 ID : 264330469131  
Status : Not Answered  
Chosen Option : --

Q.16 In the popular traditions of Vijayanagara, the Deccan Sultans are termed as \_\_\_\_\_.

- Ans
- 1. Gajapati
  - 2. Narapati
  - 3. Sherapati
  - 4. Ashvapati

Question ID : 264330119485  
Option 1 ID : 264330468225  
Option 2 ID : 264330468224  
Option 3 ID : 264330468226  
Option 4 ID : 264330468223  
Status : Answered  
Chosen Option : 1

Q.17 When was the first edition of the Durand Cup played in India?

- Ans
- 1. 1988
  - 2. 1900
  - 3. 1880
  - 4. 1888

Question ID : 264330176081  
Option 1 ID : 264330690620  
Option 2 ID : 264330690621  
Option 3 ID : 264330690622  
Option 4 ID : 264330690619  
Status : Not Answered  
Chosen Option : --

Q.18 With which of the following gharanas is Ustad Bade Ghulam Ali Khan associated?

- Ans
- 1. Kirana gharana
  - 2. Patiala gharana
  - 3. Agra gharana
  - 4. Banaras gharana

Question ID : 264330116417  
Option 1 ID : 264330457756  
Option 2 ID : 264330457753  
Option 3 ID : 264330457754  
Option 4 ID : 264330457755  
Status : Not Answered  
Chosen Option : --

Q.19 Who conceptualised the idea about animal ecology in 1927?

- Ans
- 1. Rachel Carson
  - 2. Arthur George Tansle
  - 3. Charles Elton
  - 4. Aldo Leopold

Question ID : 264330130997  
Option 1 ID : 264330513100  
Option 2 ID : 264330513102  
Option 3 ID : 264330513099  
Option 4 ID : 264330513101  
Status : Not Answered  
Chosen Option : --

**Q.20 What is the duration of a Kabaddi match?**

- Ans
- 1. Two halves of 40 minutes, with a half time break of 5 minutes
  - 2. Two halves of 30 minutes, with a half time break of 10 minutes
  - 3. Two halves of 20 minutes, with a half time break of 5 minutes
  - 4. Two halves of 45 minutes, with a half time break of 10 minutes

Question ID : 264330113771  
Option 1 ID : 264330447170  
Option 2 ID : 264330447169  
Option 3 ID : 264330447172  
Option 4 ID : 264330447171  
Status : Not Answered  
Chosen Option : --

**Q.21 Select the INCORRECT combination of festival and its significance.**

- Ans
- 1. Eid-Milad-ul-Nabi – The birth anniversary of Prophet Muhammad
  - 2. KarvaChauth – Married women observe a fast from sunrise to moonrise
  - 3. Kartik Purnima – Marks the birth anniversary of Guru Gobind Singh
  - 4. Makar Sankranti – Also known as Uttarayana, Lohri, Pongal, Bihu and the Khichdi festival

Question ID : 264330111155  
Option 1 ID : 264330436707  
Option 2 ID : 264330436708  
Option 3 ID : 264330436705  
Option 4 ID : 264330436706  
Status : Answered  
Chosen Option : 4

**Q.22 Fundamental duties are mentioned in which part of the Indian Constitution?**

- Ans
- 1. Part III-B
  - 2. Part III-A
  - 3. Part IV-A
  - 4. Part II-A

Question ID : 264330120505  
Option 1 ID : 264330472272  
Option 2 ID : 264330472274  
Option 3 ID : 264330472273  
Option 4 ID : 264330472271  
Status : Answered  
Chosen Option : 3

**Q.23 पुणे में लड़कियों के लिए देश के पहले स्कूल की पहली प्रधानाध्यापिका कौन थीं?**

- Ans
- 1. पंडिता रमाबाई
  - 2. सावित्री बाई फुले
  - 3. एनी बेसेंट
  - 4. विजया लक्ष्मी पंडित

Question ID : 264330119013  
Option 1 ID : 264330466707  
Option 2 ID : 264330466709  
Option 3 ID : 264330466710  
Option 4 ID : 264330466708  
Status : Answered  
Chosen Option : 2

Q.24 Even in 1990, what proportion of the country's population continued to be employed in agriculture?

- Ans  1. 35%
2. 65%
3. 90%
4. 50%

Question ID : 264330117756  
Option 1 ID : 264330462839  
Option 2 ID : 264330462842  
Option 3 ID : 264330462840  
Option 4 ID : 264330462841  
Status : Answered  
Chosen Option : 2

Q.25 Which of the following dances of Assam is associated with the worship of the snake goddess Manasa?

- Ans  1. Bhor Tal Nritya
2. Deodhani
3. Jhumur
4. Bagurumba

Question ID : 264330106192  
Option 1 ID : 264330417072  
Option 2 ID : 264330417071  
Option 3 ID : 264330417069  
Option 4 ID : 264330417070  
Status : Answered  
Chosen Option : 4

Q.26 Which of the following dancers is associated with the following two dances - Bharatanatyam and Odissi?

- Ans  1. Shovana Narayan
2. Padma Subrahmanyam
3. Sonal Mansingh
4. Guru Bipin Singh

Question ID : 264330109301  
Option 1 ID : 264330429484  
Option 2 ID : 264330429482  
Option 3 ID : 264330429483  
Option 4 ID : 264330429481  
Status : Answered  
Chosen Option : 3

**Q.27 Gulabo, a world-renowned dancer, is best known for which of the following dance forms?**

- Ans**
- 1. Pandwani
  - 2. Ghoomar
  - 3. Panthi
  - 4. Kalbeliya

Question ID : 264330110439  
Option 1 ID : 264330434033  
Option 2 ID : 264330434036  
Option 3 ID : 264330434034  
Option 4 ID : 264330434035  
Status : Not Answered  
Chosen Option : --

**Q.28 What kind of image does the eye lens form of the object on the retina?**

- Ans**
- 1. Inverted real image
  - 2. No image
  - 3. Real and opaque image
  - 4. Inverted virtual image

Question ID : 264330135588  
Option 1 ID : 264330531251  
Option 2 ID : 264330531253  
Option 3 ID : 264330531254  
Option 4 ID : 264330531252  
Status : Not Answered  
Chosen Option : --

**Q.29 Liberalisation means:**

- Ans**
- 1. increase in restrictions on imports and exports
  - 2. increase in control of government over the private sector
  - 3. reduction in control of government over the private sector
  - 4. free play of market forces in all sectors with no controls

Question ID : 264330109131  
Option 1 ID : 264330428804  
Option 2 ID : 264330428802  
Option 3 ID : 264330428801  
Option 4 ID : 264330428803  
Status : Answered  
Chosen Option : 3

**Q.30 Which of the following movements is included in volcanism?**

- Ans**
- 1. Molten rock
  - 2. Sedimentary rocks
  - 3. Hard rocks
  - 4. Metamorphic rock

Question ID : 264330119717  
Option 1 ID : 264330469146  
Option 2 ID : 264330469145  
Option 3 ID : 264330469144  
Option 4 ID : 264330469143  
Status : Answered  
Chosen Option : 1

Q.31 According to the Ministry of Commerce and Industry 2022, which state is the largest producer of grapes?

- Ans  1. Maharashtra  
 2. Andhra Pradesh  
 3. West Bengal  
 4. Arunachal Pradesh

Question ID : 264330173601  
Option 1 ID : 264330680884  
Option 2 ID : 264330680886  
Option 3 ID : 264330680883  
Option 4 ID : 264330680885  
Status : Answered  
Chosen Option : 1

Q.32 The 'Mission Solar Charkha' scheme was launched in the year 2018 by \_\_\_\_\_ of the Government of India.

- Ans  1. Ministry of Skill Development and Entrepreneurship  
 2. Ministry of Commerce and Industry  
 3. Ministry of Rural Development  
 4. Ministry of Micro, Small and Medium Enterprises

Question ID : 264330120344  
Option 1 ID : 264330471629  
Option 2 ID : 264330471628  
Option 3 ID : 264330471627  
Option 4 ID : 264330471630  
Status : Not Answered  
Chosen Option : --

Q.33 Which of the following countries is the second most populous country in South Asia?

- Ans  1. Bangladesh  
 2. Nepal  
 3. Afghanistan  
 4. Pakistan

Question ID : 264330183026  
Option 1 ID : 264330717838  
Option 2 ID : 264330717839  
Option 3 ID : 264330717837  
Option 4 ID : 264330717836  
Status : Answered  
Chosen Option : 4

Q.34 Which of the following committees observed that "essentially all that is contained in the fundamental duties is just a codification of tasks integral to the Indian way of life"?

- Ans  1. Rangrajan committee  
 2. Santhanam Committee  
 3. Verma Committee  
 4. Moily committee

Question ID : 264330133050  
Option 1 ID : 264330521254  
Option 2 ID : 264330521251  
Option 3 ID : 264330521252  
Option 4 ID : 264330521253  
Status : Not Answered  
Chosen Option : --

**Q.35** Which of the following Constitutional Amendment Acts has created the Union territories in India?

- Ans
- 1. 5<sup>th</sup>
  - 2. 7<sup>th</sup>
  - 3. 4<sup>th</sup>
  - 4. 6<sup>th</sup>

Question ID : 264330120190  
Option 1 ID : 264330471016  
Option 2 ID : 264330471018  
Option 3 ID : 264330471015  
Option 4 ID : 264330471017  
Status : Not Answered  
Chosen Option : --

**Q.36** Which of the following area pair of barrel-shaped organelles located in the cytoplasm of animal cells near the nuclear envelope, which give orientation to the 'mitotic spindle' formed during cell division?

- Ans
- 1. Centrioles
  - 2. Flagella
  - 3. Centrosomes
  - 4. Basal bodies

Question ID : 26433064276  
Option 1 ID : 264330251698  
Option 2 ID : 264330251699  
Option 3 ID : 264330251697  
Option 4 ID : 264330251696  
Status : Not Answered  
Chosen Option : --

**Q.37** The Ministry of Rural Development had launched 'Garib Kalyan Rozgar Abhiyan' in 2020 to provide immediate employment and livelihood opportunities to returnee migrants and rural population. From which state was the scheme launched?

- Ans
- 1. Bihar
  - 2. Uttar Pradesh
  - 3. Gujarat
  - 4. Rajasthan

Question ID : 264330111583  
Option 1 ID : 264330438419  
Option 2 ID : 264330438418  
Option 3 ID : 264330438417  
Option 4 ID : 264330438420  
Status : Not Answered  
Chosen Option : --

Q.38 Who among the following is a Padma Vibhushan awardee and a torch bearer of the Kalka-Bindadin Gharana of Lucknow?

- Ans  1. Pandit Birju Maharaj  
 2. Pandit Lacchu Maharaj  
 3. Pandit Gopi Krishna  
 4. Pandit Shambhu Maharaj

Question ID : 264330111795  
Option 1 ID : 264330439268  
Option 2 ID : 264330439265  
Option 3 ID : 264330439266  
Option 4 ID : 264330439267  
Status : Answered  
Chosen Option : 1

Q.39 In which of the following years did India host the Asian Games?

- Ans  1. 1951 and 1982  
 2. 1951 and 1985  
 3. 1955 and 1982  
 4. 1960 and 1983

Question ID : 264330118465  
Option 1 ID : 264330465262  
Option 2 ID : 264330465263  
Option 3 ID : 264330465261  
Option 4 ID : 264330465264  
Status : Answered  
Chosen Option : 1

Q.40 Atal Bhujal Yojana (Atal Jal) is targeted at sustainable \_\_\_\_\_ management.

- Ans  1. groundwater  
 2. pollution  
 3. green  
 4. waste

Question ID : 264330110016  
Option 1 ID : 264330432342  
Option 2 ID : 264330432343  
Option 3 ID : 264330432344  
Option 4 ID : 264330432341  
Status : Answered  
Chosen Option : 1

Q.41 Megasthenes, a Greek, was the ambassador in the court of which of the following kings?

- Ans  1. Ashoka  
 2. Chandragupta Maurya  
 3. Bimbisara  
 4. Mahapadma Nanda

Question ID : 264330118950  
Option 1 ID : 264330466456  
Option 2 ID : 264330466455  
Option 3 ID : 264330466458  
Option 4 ID : 264330466457  
Status : Answered  
Chosen Option : 2

Q.42 The Kathiawar Peninsula is a part of which state of India?

- Ans
- 1. West Bengal
  - 2. Tamil Nadu
  - 3. Gujarat
  - 4. Andhra Pradesh

Question ID : 264330181257  
Option 1 ID : 264330710953  
Option 2 ID : 264330710952  
Option 3 ID : 264330710951  
Option 4 ID : 264330710954  
Status : Not Answered  
Chosen Option : --

Q.43 Who among the following was the Sultan of Delhi sultanate from 1296 A.D. to 1316 A.D.?

- Ans
- 1. Ghiasuddin Balban
  - 2. Ghiasuddin Tughluq
  - 3. Alauddin Khalji
  - 4. Khizr Khan

Question ID : 264330114078  
Option 1 ID : 264330448399  
Option 2 ID : 264330448397  
Option 3 ID : 264330448400  
Option 4 ID : 264330448398  
Status : Answered  
Chosen Option : 3

Q.44 To which of the following places would a school teacher take her students for a field trip to see Hoshang Shah's tomb, Hindola Mahal, Champa Baoli and Jahaaz Mahal?

- Ans
- 1. Mandu, Madhya Pradesh
  - 2. Varanasi, Uttar Pradesh
  - 3. Agra, Uttar Pradesh
  - 4. Ratlam, Madhya Pradesh

Question ID : 264330141819  
Option 1 ID : 264330555596  
Option 2 ID : 264330555595  
Option 3 ID : 264330555597  
Option 4 ID : 264330555598  
Status : Not Answered  
Chosen Option : --

Q.45 'My Dateless Diary' is a novel written by whom among the following authors?

- Ans
- 1. Robin Singh
  - 2. RK Narayan
  - 3. Ruskin Bond
  - 4. Chetan Bhagat

Question ID : 264330112865  
Option 1 ID : 264330443546  
Option 2 ID : 264330443547  
Option 3 ID : 264330443545  
Option 4 ID : 264330443548  
Status : Answered  
Chosen Option : 4

**Q.46** Which Article of the Constitution of India mentions that “it shall be the duty of every citizen of India to promote harmony and the spirit of common brotherhood amongst all the people of India transcending religious, linguistic and regional or sectional diversities; to renounce practices derogatory to the dignity of women”?

- Ans
- 1. 51A (k)
  - 2. 51A (e)
  - 3. 51A (d)
  - 4. 51A (a)

Question ID : 264330133057  
Option 1 ID : 264330521282  
Option 2 ID : 264330521279  
Option 3 ID : 264330521281  
Option 4 ID : 264330521280  
Status : Not Answered  
Chosen Option : --

**Q.47** Which of the following earthquake waves is more destructive?

- Ans
- 1. Body Waves
  - 2. S-Waves
  - 3. Surface waves
  - 4. P-Waves

Question ID : 264330134902  
Option 1 ID : 264330528546  
Option 2 ID : 264330528544  
Option 3 ID : 264330528545  
Option 4 ID : 264330528543  
Status : Not Answered  
Chosen Option : --

**Q.48** Which of the following palaces is located in Mysore, Karnataka?

- Ans
- 1. Kowdiar Palace
  - 2. Amba Vilas Palace
  - 3. Ujjayanta Palace
  - 4. Kangla Palace

Question ID : 264330141820  
Option 1 ID : 264330555602  
Option 2 ID : 264330555599  
Option 3 ID : 264330555600  
Option 4 ID : 264330555601  
Status : Not Answered  
Chosen Option : --

**Q.49** Who among the following physicists wrote an autobiography 'Autobiographical Notes'?

- Ans
- 1. Michael Faraday
  - 2. Albert Einstein
  - 3. Isaac Newton
  - 4. James Maxwell

Question ID : 26433086905  
Option 1 ID : 264330341264  
Option 2 ID : 264330341261  
Option 3 ID : 264330341262  
Option 4 ID : 264330341263  
Status : Not Answered  
Chosen Option : --

**Q.50** Who among the following was a renowned pianist and founder of the Shillong Chamber Choir?

- Ans
- 1. Damon Lyndem
  - 2. Kynsai Lyngdoh
  - 3. William Basaiawmoit
  - 4. Neil Nongkynrih

Question ID : 264330110252  
Option 1 ID : 264330433286  
Option 2 ID : 264330433288  
Option 3 ID : 264330433285  
Option 4 ID : 264330433287  
Status : Not Answered  
Chosen Option : --


Section : Reasoning

Q.1 Which of the following option figures will complete the pattern in the figure given below?

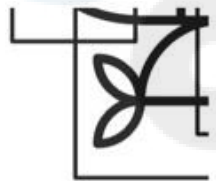


Ans

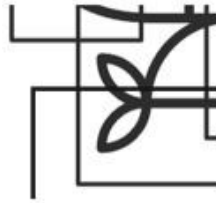
✗ 1.




✓ 2.



✗ 3.



✗ 4.



Question ID : 26433080634

Option 1 ID : 264330316471

Option 2 ID : 264330316469

Option 3 ID : 264330316470

Option 4 ID : 264330316472

Status : Answered

Chosen Option : 2

Q.2 Which two signs should be interchanged to make the following equation correct?

$$36 - 9 \times 15 + 8 \div 3 = 65$$

Ans ✗ 1. + and ×

✗ 2. + and ×

✓ 3. - and +

✗ 4. - and +

Question ID : 264330101088

Option 1 ID : 264330396900

Option 2 ID : 264330396897

Option 3 ID : 264330396899

Option 4 ID : 264330396898

Status : Answered

Chosen Option : 3

Q.3 In a certain code language, 'DESK' is written as '23179' and 'FLOW' is written as '4101321'. How will 'HUNT' be written in that language?

Ans  1. 6191218

2. 6111219

3. 5998795

4. 5894566

Question ID : 26433089419

Option 1 ID : 264330351180

Option 2 ID : 264330351179

Option 3 ID : 264330351178

Option 4 ID : 264330351177

Status : Answered

Chosen Option : 1

Q.4 Select the figure that will come next in the following figure series.



Ans



Question ID : 264330129651

Option 1 ID : 264330507970

Option 2 ID : 264330507971

Option 3 ID : 264330507973

Option 4 ID : 264330507972

Status : Answered

Chosen Option : 1

Q.5 Select the option that is related to the third word in the same way as the second word is related to the first word. (The words must be considered as meaningful English words and must NOT be related to each other based on the number of letters/number of consonants/vowels in the word)  
Snow : Mountain :: Sand : ?

- Ans  1. Beach  
 2. Sun  
 3. Water  
 4. Bucket

Question ID : 26433069141  
Option 1 ID : 264330271079  
Option 2 ID : 264330271076  
Option 3 ID : 264330271078  
Option 4 ID : 264330271077  
Status : Answered  
Chosen Option : 1

Q.6 Which of the following option figures will complete the pattern in the figure given below?




Ans

- 1.
- 2.
- 3.
- 4.

Question ID : 26433089626  
Option 1 ID : 264330352005  
Option 2 ID : 264330352007  
Option 3 ID : 264330352008  
Option 4 ID : 264330352006  
Status : Answered  
Chosen Option : 1

Q.7 Select the figure from the given options that will replace the question mark (?) in the figure given below and complete the pattern.



Ans

- 1.
- 2.
- 3.
- 4.

Question ID : 264330111717

Option 1 ID : 264330438954

Option 2 ID : 264330438953

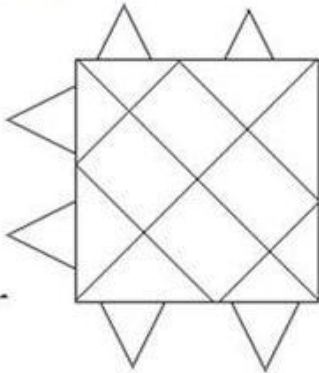
Option 3 ID : 264330438956

Option 4 ID : 264330438955

Status : Answered

Chosen Option : 1

Q.8 How many triangles are there in the given figure?



- 1. 24
- 2. 22
- 3. 26
- 4. 28

Question ID : 26433078989

Option 1 ID : 264330309969

Option 2 ID : 264330309968

Option 3 ID : 264330309970

Option 4 ID : 264330309971

Status : Answered

Chosen Option : 2

Q.9 Select the option in which the given figure is embedded (rotation is NOT allowed).

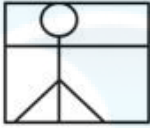


Ans

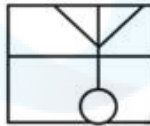
✗ 1.



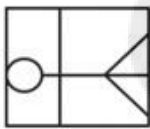
✗ 2.



✓ 3.



✗ 4.



Question ID : 264330101161

Option 1 ID : 264330397191

Option 2 ID : 264330397189

Option 3 ID : 264330397192

Option 4 ID : 264330397190

Status : Answered

Chosen Option : 3

Q.10 Select the correct combination of mathematical signs to sequentially replace the \* signs and to balance the given equation.

$$99 * 11 * 5 * 25 * 15 * 5$$

Ans

✗ 1.  $+ - \times = +$

✗ 2.  $- + \times + =$

✓ 3.  $+ \times - = +$

✗ 4.  $+ - \times + =$

Question ID : 26433085717

Option 1 ID : 264330336569

Option 2 ID : 264330336572

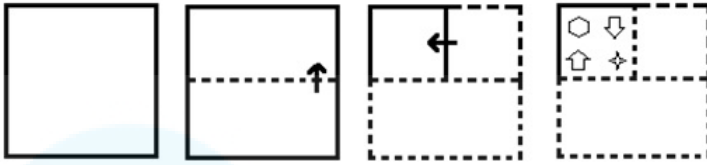
Option 3 ID : 264330336570

Option 4 ID : 264330336571

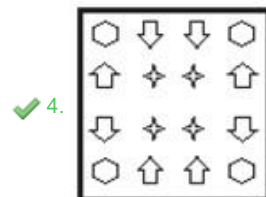
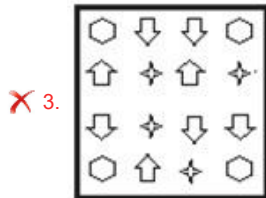
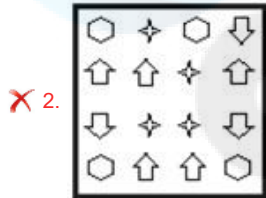
Status : Answered

Chosen Option : 3

Q.11 The sequence of folding a piece of paper and the manner in which the folded paper is cut is shown in the following figures. How would this paper look when unfolded?



Ans



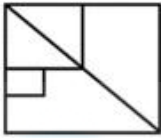
Question ID : 26433074795  
 Option 1 ID : 264330293268  
 Option 2 ID : 264330293270  
 Option 3 ID : 264330293269  
 Option 4 ID : 264330293271  
 Status : Answered  
 Chosen Option : 4

Q.12 Select the option in which the given figure is embedded (rotation is NOT allowed).

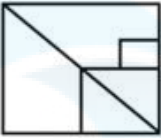


Ans

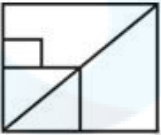
✓ 1.



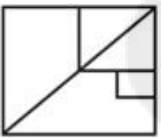
✗ 2.



✗ 3.



✗ 4.



Question ID : 264330101163

Option 1 ID : 264330397198

Option 2 ID : 264330397200

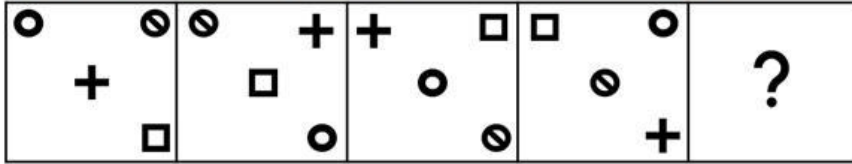
Option 3 ID : 264330397199

Option 4 ID : 264330397197

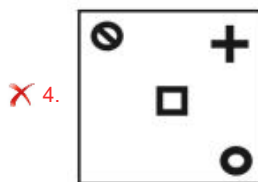
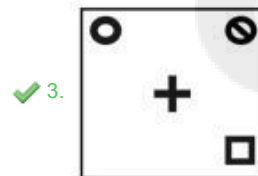
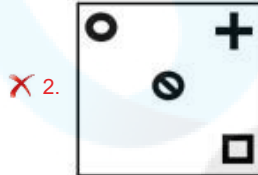
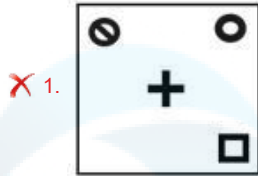
Status : Answered

Chosen Option : 1

Q.13 Select the figure that will come next in the following figure series.



Ans



Question ID : 26433076496

Option 1 ID : 264330300050

Option 2 ID : 264330300048

Option 3 ID : 264330300049

Option 4 ID : 264330300051

Status : Answered

Chosen Option : 3

Q.14 छह विद्यार्थी एक गोल मेज के परितः केंद्र की ओर अभिमुख होकर बैठे हैं। अदिति और अमोल दोनों का निकटतम पड़ोसी अभय है। आभा, अदिति के दाएं से दूसरे स्थान पर बैठी है। अब्दुल, अमोल के दाएं से तीसरे स्थान पर बैठा है। आशना, अभय के बाएं से दूसरे स्थान पर बैठी है। अदिति और आभा दोनों का निकटतम पड़ोसी कौन है?

Ans ✗ 1. अमोल

✓ 2. अब्दुल

✗ 3. अभय

✗ 4. आशना

Question ID : 264330110712

Option 1 ID : 264330435125

Option 2 ID : 264330435127

Option 3 ID : 264330435128

Option 4 ID : 264330435126

Status : Answered

Chosen Option : 2

**Q.15** Read the given statements and conclusions carefully. Assuming that the information given in the statements is true, even if it appears to be at variance with commonly known facts, decide which of the given conclusions logically follow(s) from the statements.

Statements:

- All peacocks are lion.
- Some lions are dogs.
- No dog is a cat.

Conclusions:

- Some lions are not cats.
- Some peacocks are dogs.
- Some peacocks are not lion.

- Ans
- 1. Conclusions I, II and III follow
  - 2. Only conclusion III follows
  - 3. Only conclusion I follows
  - 4. Only conclusion II and III follow

Question ID : 26433078848

Option 1 ID : 264330309405

Option 2 ID : 264330309407

Option 3 ID : 264330309404

Option 4 ID : 264330309406

Status : Answered

Chosen Option : 4

**Q.16** Select the set in which the numbers are related in the same way as are the numbers of the following sets.

(NOTE : Operations should be performed on the whole numbers, without breaking down the numbers into its constituent digits. E.g. 13 – Operations on 13 such as adding /deleting /multiplying etc. to 13 can be performed. Breaking down 13 into 1 and 3 and then performing mathematical operations on 1 and 3 is NOT allowed)  
(49, 12), (81, 14)

- Ans
- 1. (400, 22)
  - 2. (169, 14)
  - 3. (144, 20)
  - 4. (361, 24)

Question ID : 26433052040

Option 1 ID : 264330203465

Option 2 ID : 264330203462

Option 3 ID : 264330203464

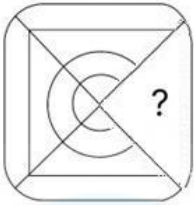
Option 4 ID : 264330203463

Status : Answered

Chosen Option : 4

Q.17

Select the option figure that will replace the question mark (?) in the figure given below to complete the pattern.



Ans

✓ 1.

✗ 2.

✗ 3.

✗ 4.

Question ID : 264330117031

Option 1 ID : 264330460207

Option 2 ID : 264330460205

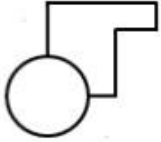
Option 3 ID : 264330460208

Option 4 ID : 264330460206

Status : Answered

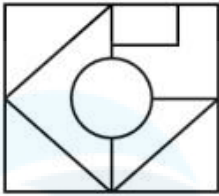
Chosen Option : 1

Q.18 Select the option in which the given figure is embedded (rotation is NOT allowed).

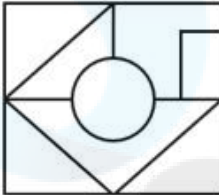


Ans

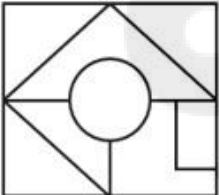
✗ 1.



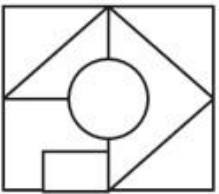
✓ 2.



✗ 3.



✗ 4.



Question ID : 264330106332

Option 1 ID : 264330417629

Option 2 ID : 264330417632

Option 3 ID : 264330417631

Option 4 ID : 264330417630

Status : Answered

Chosen Option : 2

Q.19 Select the figure from among the given options that can replace the question mark (?) in the following series.

!      \$ #      @	@      # \$      !	#      ! @      \$	\$      @ !      #	?
(i)	(ii)	(iii)	(iv)	(v)

Ans

✗ 1. 

@      #
\$      i

✓ 2. 

@      #
\$      !

✗ 3. 

@      #
&      i

✗ 4. 

@      #
&      !

Question ID : 264330106544  
 Option 1 ID : 264330418480  
 Option 2 ID : 264330418479  
 Option 3 ID : 264330418478  
 Option 4 ID : 264330418477  
 Status : Answered  
 Chosen Option : 2

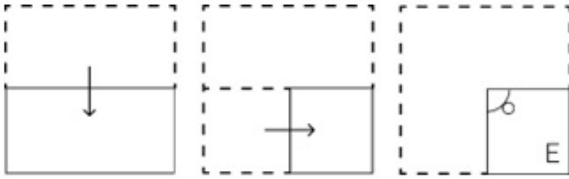
Q.20 Which of the following terms will replace the question mark (?) in the given series?

CNWF, FMZE, ?, LKFC, OJIB

- Ans ✓ 1. ILCD  
 ✗ 2. CMBE  
 ✗ 3. CNCD  
 ✗ 4. IIBC

Question ID : 26433090969  
 Option 1 ID : 264330357287  
 Option 2 ID : 264330357288  
 Option 3 ID : 264330357286  
 Option 4 ID : 264330357285  
 Status : Answered  
 Chosen Option : 1

Q.21 A paper is folded and cut as shown below. How will it appear when unfolded?



Ans

- 1.
- 2.
- 3.
- 4.

Question ID : 264330114703

Option 1 ID : 264330450897

Option 2 ID : 264330450899

Option 3 ID : 264330450898

Option 4 ID : 264330450900

Status : Answered

Chosen Option : 2

Q.22 Select the option that is related to the third term in the same way as the second term is related to the first term and the sixth term is related to the fifth term.  
 $12 : 169 :: 15 : ? :: 25 : 676$

- 1. 256
- 2. 196
- 3. 225
- 4. 289

Question ID : 264330101047

Option 1 ID : 264330396733

Option 2 ID : 264330396735

Option 3 ID : 264330396734

Option 4 ID : 264330396736

Status : Answered

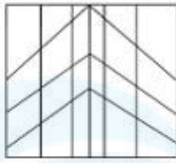
Chosen Option : 1

Q.23 Select the option in which the given figure is embedded (rotation is NOT allowed).

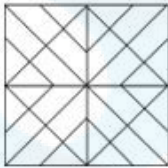


Ans

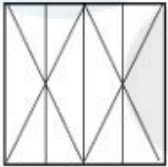
✗ 1.



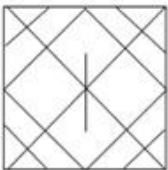
✓ 2.



✗ 3.



✗ 4.



Question ID : 264330114257

Option 1 ID : 264330449114

Option 2 ID : 264330449115

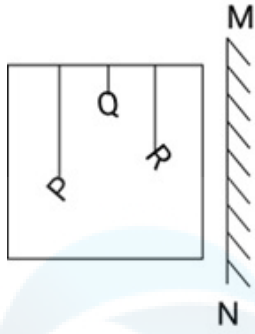
Option 3 ID : 264330449116

Option 4 ID : 264330449113

Status : Answered

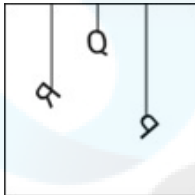
Chosen Option : 2

Q.24 Select the correct mirror image of the given combination when the mirror is placed at 'MN' as shown below.

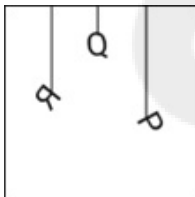


Ans

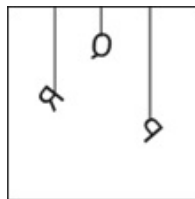
X 1.



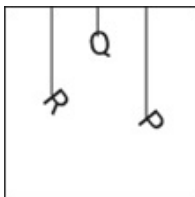
X 2.



✓ 3.



X 4.



Question ID : 264330130765

Option 1 ID : 264330512173

Option 2 ID : 264330512174

Option 3 ID : 264330512172

Option 4 ID : 264330512171

Status : Answered

Chosen Option : 3

Q.25 Select the number from among the given options that can replace the question mark (?) in the following series.

10, 22, 13, 28, 16, ?

- Ans  1. 67  
 2. 34  
 3. 78  
 4. 43

Question ID : 264330109754  
Option 1 ID : 264330431295  
Option 2 ID : 264330431293  
Option 3 ID : 264330431296  
Option 4 ID : 264330431294  
Status : Answered  
Chosen Option : 2

Section : Numerical Ability

Q.1 वह सबसे बड़ी संख्या \_\_\_\_\_ होगी, जिससे 275 और 146 को भाग देने पर क्रमशः 5 और 6 शेषफल आता है।

- Ans  1. 12  
 2. 10  
 3. 8  
 4. 15

Question ID : 264330109326  
Option 1 ID : 264330429583  
Option 2 ID : 264330429582  
Option 3 ID : 264330429581  
Option 4 ID : 264330429584  
Status : Answered  
Chosen Option : 3

Q.2 एक दुकानदार अपने सहयोगी को 12% लाभ अर्जित करने के लिए एक वस्तु पर ₹152 का विक्रय मूल्य टैग लगाने के लिए कहता है। गलती से, सहयोगी ₹125 का मूल्य टैग लगा देता है। नए विक्रय मूल्य टैग से दुकानदार का हानि या लाभ प्रतिशत (दो दशमलव स्थानों तक पूर्णांकित) क्या है?

- Ans  1. 6.99% लाभ  
 2. 7.89% हानि  
 3. 9.66% लाभ  
 4. 8.77% हानि

Question ID : 264330117913  
Option 1 ID : 264330463467  
Option 2 ID : 264330463469  
Option 3 ID : 264330463468  
Option 4 ID : 264330463470  
Status : Not Answered  
Chosen Option : --

Q.3 एक वस्तु को ₹1,800 में बेचने से प्राप्त प्रतिशत लाभ उसी वस्तु को ₹1,160 में बेचने पर हुई हानि के प्रतिशत के बराबर है। 20% का लाभ प्राप्त के लिए वस्तु को किस मूल्य पर बेचा जाना चाहिए?

- Ans  1. ₹1,776  
 2. ₹1,650  
 3. ₹1,550  
 4. ₹1,480

Question ID : 264330109336  
Option 1 ID : 264330429624  
Option 2 ID : 264330429623  
Option 3 ID : 264330429622  
Option 4 ID : 264330429621  
Status : Not Answered  
Chosen Option : --

Q.4 यदि 78, 104, 338 का HCF, A है और 136, 357 का HCF, B है, तो A + B का मान ज्ञात कीजिए।

- Ans  1. 43  
 2. 38  
 3. 56  
 4. 39

Question ID : 264330103682  
Option 1 ID : 264330407036  
Option 2 ID : 264330407034  
Option 3 ID : 264330407035  
Option 4 ID : 264330407033  
Status : Answered  
Chosen Option : 1

Q.5 The price of tea has decreased by 15%. By what percentage can a person increase the consumption of tea so that there is no change in the expenditure?

- Ans  1.  $18\frac{7}{18}$   
 2.  $17\frac{11}{17}$   
 3.  $19\frac{7}{19}$   
 4.  $16\frac{11}{16}$

Question ID : 264330130227  
Option 1 ID : 264330510022  
Option 2 ID : 264330510021  
Option 3 ID : 264330510020  
Option 4 ID : 264330510019  
Status : Not Answered  
Chosen Option : --

Q.6 The length of a diagonal of a quadrilateral is 30 m and length of the perpendiculars from two vertices to the diagonal are 15 m and 25 m. Find the area of the quadrilateral.

- Ans
- 1.  $325 \text{ m}^2$
  - 2.  $600 \text{ m}^2$
  - 3.  $300 \text{ m}^2$
  - 4.  $250 \text{ m}^2$

Question ID : 264330111488  
Option 1 ID : 264330438040  
Option 2 ID : 264330438038  
Option 3 ID : 264330438039  
Option 4 ID : 264330438037  
Status : Not Answered  
Chosen Option : --

Q.7 If  $a : b = 9 : 14$  and  $b : c = 16 : 7$ , then what is  $a : b : c$  ?

- Ans
- 1.  $72 : 112 : 49$
  - 2.  $72 : 102 : 49$
  - 3.  $9 : 112 : 49$
  - 4.  $9 : 112 : 7$

Question ID : 264330129424  
Option 1 ID : 264330507062  
Option 2 ID : 264330507065  
Option 3 ID : 264330507063  
Option 4 ID : 264330507064  
Status : Answered  
Chosen Option : 1

Q.8 The ratio of the radius and the height of a cone is  $5 : 18$ . If its volume is  $1,61,700 \text{ cm}^3$ , find its slant height (in cm).

(Take  $\pi = \frac{22}{7}$ )

- Ans
- 1.  $\sqrt{27101}$
  - 2.  $\sqrt{17108}$
  - 3.  $\sqrt{17101}$
  - 4.  $\sqrt{27108}$

Question ID : 264330112434  
Option 1 ID : 264330441821  
Option 2 ID : 264330441823  
Option 3 ID : 264330441822  
Option 4 ID : 264330441824  
Status : Not Answered  
Chosen Option : --

Q.9 In how much time will ₹800 amount to ₹926.10 at 10% per annum, compounded half-yearly?

- Ans
- 1. 1 year
  - 2.  $1\frac{1}{2}$  years
  - 3.  $2\frac{1}{2}$  years
  - 4. 2 years

Question ID : 264330104197  
Option 1 ID : 264330409089  
Option 2 ID : 264330409090  
Option 3 ID : 264330409092  
Option 4 ID : 264330409091  
Status : Answered  
Chosen Option : 2

Q.10 नितीश अपने माल पर लागत मूल्य से 20% अधिक मूल्य अंकित करता है लेकिन नकद भुगतान पर 15% की छूट देता है। यदि वह वस्तु को ₹1,020 में बेचता है, तो उसका क्रय मूल्य (₹ में) ज्ञात कीजिए।

- Ans
- 1. 1109
  - 2. 1000
  - 3. 1200
  - 4. 1300

Question ID : 264330108886  
Option 1 ID : 264330427824  
Option 2 ID : 264330427822  
Option 3 ID : 264330427823  
Option 4 ID : 264330427821  
Status : Answered  
Chosen Option : 2

Q.11 एक परिवार में दादा-दादी, माता-पिता और दो पोते-पोतियां हैं। पोते-पोतियों की औसत आयु 12 वर्ष, माता-पिता की औसत आयु 40 वर्ष और दादा-दादी की औसत आयु 68 वर्ष है। परिवार की औसत आयु की गणना करें।

- Ans
- 1. 40 वर्ष
  - 2. 30 वर्ष
  - 3. 35 वर्ष
  - 4. 45 वर्ष

Question ID : 264330126556  
Option 1 ID : 264330495897  
Option 2 ID : 264330495898  
Option 3 ID : 264330495899  
Option 4 ID : 264330495896  
Status : Answered  
Chosen Option : 1

Q.12 यदि रमेश 25 km/h की चाल से स्कूल जाता है तो वह 9 मिनट की देरी से पहुँचता है। यदि वह 30 km/h की चाल से चलता है, तो वह 9 मिनट पहले पहुँचता है। उसके घर और स्कूल के बीच की दूरी ज्ञात कीजिए।

- Ans
- 1. 40 km
  - 2. 45 km
  - 3. 48 km
  - 4. 43 km

Question ID : 264330104320  
Option 1 ID : 264330409581  
Option 2 ID : 264330409583  
Option 3 ID : 264330409584  
Option 4 ID : 264330409582  
Status : Answered  
Chosen Option : 2

Q.13 Krisha alone takes 4 hours more to complete a job than if both Krisha and Krupa work together. If Krupa works alone, she takes 9 hours more to complete the job than if Krisha and Krupa worked together. What time would they take to complete the job if both Krisha and Krupa worked together?

- Ans
- 1. 6 hours
  - 2. 9 hours
  - 3. 7 hours
  - 4. 8 hours

Question ID : 264330103631  
Option 1 ID : 264330406829  
Option 2 ID : 264330406832  
Option 3 ID : 264330406830  
Option 4 ID : 264330406831  
Status : Not Answered  
Chosen Option : --

Q.14 किसी निश्चित धनराशि पर 5% वार्षिक दर से 9 वर्ष के लिए साधारण ब्याज ₹1,260 है। किस ब्याज दर पर 5 वर्ष बाद समान धनराशि पर समान ब्याज प्राप्त किया जा सकता है?

- Ans
- 1. 10%
  - 2. 9%
  - 3. 8.6%
  - 4. 11%

Question ID : 264330118129  
Option 1 ID : 264330464332  
Option 2 ID : 264330464333  
Option 3 ID : 264330464331  
Option 4 ID : 264330464334  
Status : Answered  
Chosen Option : 2

**Q.15** Which of the following numbers is greater than the sum of all the prime factors of 2145?

- Ans**  1. 41  
 2. 32  
 3. 31  
 4. 29

Question ID : 264330109531  
Option 1 ID : 264330430404  
Option 2 ID : 264330430403  
Option 3 ID : 264330430402  
Option 4 ID : 264330430401  
Status : Answered  
Chosen Option : 1

Section : Computer Proficiency

**Q.1** Which of the following is an example of a web browser?

- Ans**  1. MS-Word  
 2. Adobe Photoshop  
 3. Mozilla Firefox  
 4. Notepad

Question ID : 264330173559  
Option 1 ID : 264330680715  
Option 2 ID : 264330680716  
Option 3 ID : 264330680717  
Option 4 ID : 264330680718  
Status : Answered  
Chosen Option : 3

**Q.2** In MS Excel 365, how we highlight an entire column?

- Ans**  1. By pressing 'Ctrl + F'  
 2. By pressing 'Ctrl + H'  
 3. By pressing 'Ctrl + Space bar'  
 4. By pressing 'Ctrl + Enter'

Question ID : 264330182062  
Option 1 ID : 264330714089  
Option 2 ID : 264330714087  
Option 3 ID : 264330714090  
Option 4 ID : 264330714088  
Status : Answered  
Chosen Option : 3

Q.3 In Microsoft Excel 365, how can you sort data in ascending or descending order?

- Ans
- 1. Data -> Form
  - 2. Data -> Sort
  - 3. Data -> Find
  - 4. Data -> Select

Question ID : 264330182054  
Option 1 ID : 264330714056  
Option 2 ID : 264330714055  
Option 3 ID : 264330714057  
Option 4 ID : 264330714058  
Status : Answered  
Chosen Option : 2

Q.4 In MS Word 365, Ctrl + E key is pressed to perform which of the following tasks?

- Ans
- 1. Justify
  - 2. Left Alignment
  - 3. Center Alignment
  - 4. Right Alignment

Question ID : 264330176719  
Option 1 ID : 264330693094  
Option 2 ID : 264330693091  
Option 3 ID : 264330693093  
Option 4 ID : 264330693092  
Status : Answered  
Chosen Option : 3

Q.5 Which formatting option in MS-Word 365 allows you to slant or tilt the selected text to the right, commonly used for indicating emphasis or to differentiate titles from the main text?

- Ans
- 1. Text Colour
  - 2. Bold
  - 3. Underline
  - 4. Italics

Question ID : 264330173335  
Option 1 ID : 264330679819  
Option 2 ID : 264330679820  
Option 3 ID : 264330679822  
Option 4 ID : 264330679821  
Status : Answered  
Chosen Option : 4

Q.6 What is the primary purpose of 'sorting and searching emails' when using email services?

- Ans
- 1. Organising emails based on various criteria for easy retrieval
  - 2. Sending emails to multiple recipients simultaneously
  - 3. Changing the background colour of email messages
  - 4. Creating animated GIFs to embed in email content

Question ID : 264330178549  
Option 1 ID : 264330700225  
Option 2 ID : 264330700224  
Option 3 ID : 264330700223  
Option 4 ID : 264330700226  
Status : Answered  
Chosen Option : 1

Q.7 Which of the following coloured wavy lines is used to represent spelling errors in an MS Word 365, document?

- Ans
- 1. Black line
  - 2. Blue line
  - 3. Red line
  - 4. Green line

Question ID : 264330179156  
Option 1 ID : 264330702630  
Option 2 ID : 264330702629  
Option 3 ID : 264330702627  
Option 4 ID : 264330702628  
Status : Answered  
Chosen Option : 3

Q.8 What does the 'Font Size' refer to in Microsoft Word 365?

- Ans
- 1. The alignment of the text
  - 2. The size of the text characters
  - 3. The boldness of the text
  - 4. The colour of the text

Question ID : 264330180736  
Option 1 ID : 264330708914  
Option 2 ID : 264330708913  
Option 3 ID : 264330708911  
Option 4 ID : 264330708912  
Status : Answered  
Chosen Option : 2

Q.9 Which of the following options in MS Word 365 means the page is oriented vertically?

- Ans
- 1. PageSet
  - 2. Landscape
  - 3. Portrait
  - 4. Page Setup

Question ID : 264330180436  
Option 1 ID : 264330707714  
Option 2 ID : 264330707711  
Option 3 ID : 264330707712  
Option 4 ID : 264330707713  
Status : Not Answered  
Chosen Option : --

Q.10 एमएस एक्सेल 365 (MS Excel 365) में, एमएस एक्सेल (MS Excel) में, केटेगरी नेम लंबे होने पर या किसी समय अवधि में डेटा की तुलना करते समय, निम्नलिखित में से किस चार्ट का उपयोग किया जाता है?

- Ans
- 1. पाई चार्ट (Pie chart)
  - 2. बार चार्ट (Bar chart)
  - 3. कॉलम चार्ट (Column chart)
  - 4. लाइन चार्ट (Line chart)

Question ID : 264330180817

Option 1 ID : 264330709234

Option 2 ID : 264330709232

Option 3 ID : 264330709231

Option 4 ID : 264330709233

Status : Answered

Chosen Option : 2