

Constable Executive Male and Female in Delhi Police Examination 2023

Roll Number	
Candidate Name	
Venue Name	
Exam Date	28/11/2023
Exam Time	3:00 PM - 4:30 PM
Subject	Constable Executive Male and Female in Delhi Police Examination 2023

Section : General Knowledge

Q.1 Which of the following Chola Kings raided the Ganga Valley region?

- Ans
- 1. Rajendra I
 - 2. Uttama Chola
 - 3. Arinjaya Chola
 - 4. Gandaraditya

Question ID : 264330119758
Option 1 ID : 264330469308
Option 2 ID : 264330469307
Option 3 ID : 264330469310
Option 4 ID : 264330469309
Status : Not Answered
Chosen Option : --

Q.2 In 1991, India met with an economic crisis due to _____.

- Ans
- 1. low inflation
 - 2. political instability
 - 3. rise in foreign exchange reserves
 - 4. huge debts burden

Question ID : 26433065487
Option 1 ID : 264330256509
Option 2 ID : 264330256511
Option 3 ID : 264330256508
Option 4 ID : 264330256510
Status : Not Answered
Chosen Option : --

Q.3 The Sangeet Natak Akademi gives fellowships to eminent artists. Radha Sridhar received it for Bharatanatyam which is a dance form of which state?

- Ans
- 1. Kerala
 - 2. Andhra Pradesh
 - 3. Karnataka
 - 4. Tamil Nadu

Question ID : 26433071523
Option 1 ID : 264330280519
Option 2 ID : 264330280516
Option 3 ID : 264330280517
Option 4 ID : 264330280518
Status : Answered
Chosen Option : 4

Q.4 'Per Drop More Crop' is the main tag line of which government scheme?

- Ans
- 1. Pradhan Mantri Fasal Bima Yojana
 - 2. Pradhan Mantri Krishi Sinchai Yojana
 - 3. Atal Bhujal Yojana
 - 4. National Action Plan for Climate Change

Question ID : 264330109412
Option 1 ID : 264330429925
Option 2 ID : 264330429928
Option 3 ID : 264330429926
Option 4 ID : 264330429927
Status : Not Answered
Chosen Option : --

Q.5 'India wins Freedom' is an autobiography written by whom among the following Freedom Fighters?

- Ans
- 1. Pattabhi Sitaramayya
 - 2. Abul Kalam Azad
 - 3. Lokmanya Tilak
 - 4. Annie Besant

Question ID : 26433064218
Option 1 ID : 264330251466
Option 2 ID : 264330251465
Option 3 ID : 264330251467
Option 4 ID : 264330251464
Status : Answered
Chosen Option : 4

Q.6 To which mineral group do galena, chalcopryrite and molybdenite belong?

- Ans
- 1. Halides
 - 2. Sulphides
 - 3. Phosphides
 - 4. Oxides

Question ID : 264330131019
Option 1 ID : 264330513190
Option 2 ID : 264330513187
Option 3 ID : 264330513189
Option 4 ID : 264330513188
Status : Not Answered
Chosen Option : --

Q.7 Who presides over the Lok Sabha in absence of the Speaker and the Deputy Speaker?

- Ans
- 1. Chief Justice of Supreme Court
 - 2. Person appointed by Prime Minister
 - 3. Person from amongst the members of the panel nominated by the Speaker
 - 4. President

Question ID : 264330110605
Option 1 ID : 264330434699
Option 2 ID : 264330434698
Option 3 ID : 264330434700
Option 4 ID : 264330434697
Status : Answered
Chosen Option : 4

Q.8 Pradhan Mantri Garib Kalyan Deposit Scheme (PMGKDS) was launched in which year by the Government of India?

- Ans**
- 1. 2009
 - 2. 2014
 - 3. 2016
 - 4. 2020

Question ID : 264330120379
Option 1 ID : 264330471770
Option 2 ID : 264330471768
Option 3 ID : 264330471767
Option 4 ID : 264330471769
Status : Answered
Chosen Option : 3

Q.9 Which of the following High Courts were established in 1866?

- Ans**
- 1. Allahabad High Court
 - 2. Kerala High Court
 - 3. Gujarat High Court
 - 4. Bombay High Court

Question ID : 264330177760
Option 1 ID : 264330697148
Option 2 ID : 264330697150
Option 3 ID : 264330697149
Option 4 ID : 264330697147
Status : Answered
Chosen Option : 4

Q.10 Which of the following is an example of indirect tax?

- Ans**
- 1. Customs duty
 - 2. Individual income tax
 - 3. Gift tax
 - 4. Corporate income tax

Question ID : 264330112448
Option 1 ID : 264330441879
Option 2 ID : 264330441878
Option 3 ID : 264330441880
Option 4 ID : 264330441877
Status : Answered
Chosen Option : 1

Q.11 Match list I to list II.

List I

- a) Regional Rural Banks
- b) NABARD
- c) Nationalisation of State Bank of India

List II

- i) 1982
- ii) 1975
- iii) 1955

- Ans
- 1. a-i, b-ii, c-iii
 - 2. a-iii, b-i, c-ii
 - 3. a-i, b-iii, c-ii
 - 4. a-ii, b-i, c-iii

Question ID : 264330141475

Option 1 ID : 264330554238

Option 2 ID : 264330554236

Option 3 ID : 264330554237

Option 4 ID : 264330554235

Status : Answered

Chosen Option : 1

Q.12 Article 51 of the Indian Constitution says that the state shall endeavour to:

- Ans
- 1. protect and improve the environment and to safeguard forests and wildlife
 - 2. protect monuments, places and objects of artistic or historic interest
 - 3. separate judiciary from the executive
 - 4. promote international peace and security

Question ID : 264330113400

Option 1 ID : 264330445685

Option 2 ID : 264330445686

Option 3 ID : 264330445687

Option 4 ID : 264330445688

Status : Answered

Chosen Option : 2

Q.13 The President of India and the Governor of States enjoy the immunities as mentioned under Article _____.

- Ans
- 1. 360
 - 2. 362
 - 3. 361
 - 4. 359

Question ID : 264330130447

Option 1 ID : 264330510900

Option 2 ID : 264330510902

Option 3 ID : 264330510901

Option 4 ID : 264330510899

Status : Not Answered

Chosen Option : --

Q.14 The Theosophical Society was started by which of the following social reformers?

- Ans
- 1. Raja Ram Mohan Roy
 - 2. Swami Vivekananda
 - 3. Annie Besant
 - 4. Syed Ahmed Khan

Question ID : 264330114880
Option 1 ID : 264330451607
Option 2 ID : 264330451608
Option 3 ID : 264330451606
Option 4 ID : 264330451605
Status : Answered
Chosen Option : 1

Q.15 Which dynasty under the Delhi Sultanate was the first Afghan Pashtun Dynasty in India?

- Ans
- 1. Khilji
 - 2. Mamluk
 - 3. Sayyed
 - 4. Lodhi

Question ID : 264330114826
Option 1 ID : 264330451390
Option 2 ID : 264330451391
Option 3 ID : 264330451389
Option 4 ID : 264330451392
Status : Answered
Chosen Option : 1

Q.16 Under which of the following Acts were the commercial activities to be taken care by the East India Company and the political activities by the British parliament?

- Ans
- 1. Government of India Act of 1935
 - 2. Indian Councils Act of 1861
 - 3. Regulating Act of 1773
 - 4. Pitts India Act, 1784

Question ID : 264330130554
Option 1 ID : 264330511329
Option 2 ID : 264330511330
Option 3 ID : 264330511328
Option 4 ID : 264330511327
Status : Answered
Chosen Option : 3

Q.17 When were the two annual plans carried out?

- Ans
- 1. After the ninth Five-Year Plan
 - 2. After the eight Five-Year Plan
 - 3. After the sixth Five-Year Plan
 - 4. After the seventh Five-Year Plan

Question ID : 264330120885
Option 1 ID : 264330473755
Option 2 ID : 264330473756
Option 3 ID : 264330473758
Option 4 ID : 264330473757
Status : Answered
Chosen Option : 1

Q.18 The Bidar Fort is located in which Indian state?

- Ans
- 1. Andhra Pradesh
 - 2. Rajasthan
 - 3. Karnataka
 - 4. Maharashtra

Question ID : 264330109644
Option 1 ID : 264330430855
Option 2 ID : 264330430853
Option 3 ID : 264330430854
Option 4 ID : 264330430856
Status : Answered
Chosen Option : 4

Q.19 In general, what will happen with rainfall as we move from the equator to the poles?

- Ans
- 1. Rainfall is doubled
 - 2. Rainfall goes on decreasing steadily
 - 3. Rainfall remains constant
 - 4. Rainfall goes on increasing steadily

Question ID : 264330131679
Option 1 ID : 264330515815
Option 2 ID : 264330515816
Option 3 ID : 264330515817
Option 4 ID : 264330515818
Status : Not Answered
Chosen Option : --

Q.20 In which state is New Mangalore port located?

- Ans
- 1. Kerala
 - 2. Karnataka
 - 3. Tamil Nadu
 - 4. Goa

Question ID : 264330173605
Option 1 ID : 264330680901
Option 2 ID : 264330680900
Option 3 ID : 264330680902
Option 4 ID : 264330680899
Status : Answered
Chosen Option : 2

Q.21 The 23rd Commonwealth Games will be hosted by _____ .

- Ans
- 1. England
 - 2. Australia
 - 3. Canada
 - 4. India

Question ID : 264330132541
Option 1 ID : 264330519259
Option 2 ID : 264330519261
Option 3 ID : 264330519262
Option 4 ID : 264330519260
Status : Not Answered
Chosen Option : --

Q.22 Who is the author of the popular novel Pinjar?

- Ans 1. Amrita Pritam
 2. Yashpal
 3. Bhisham Sahni
 4. Dharamvir Bharati

Question ID : 26433064222
Option 1 ID : 264330251483
Option 2 ID : 264330251481
Option 3 ID : 264330251480
Option 4 ID : 264330251482
Status : Not Answered
Chosen Option : --

Q.23 When a carbon compound is burnt resulting in a clean flame, it indicates that it is:

- Ans 1. saturated hydrocarbon compounds
 2. unsaturated hydrocarbon compounds
 3. sulphur containing compounds
 4. nitrogen containing compounds

Question ID : 264330182811
Option 1 ID : 264330717018
Option 2 ID : 264330717015
Option 3 ID : 264330717017
Option 4 ID : 264330717016
Status : Not Answered
Chosen Option : --

Q.24 The Republic Day Parade in India is presided over by the ____.

- Ans 1. Chief of Defence
 2. Vice President of India
 3. President of India
 4. Prime Minister of India

Question ID : 264330109617
Option 1 ID : 264330430748
Option 2 ID : 264330430747
Option 3 ID : 264330430745
Option 4 ID : 264330430746
Status : Answered
Chosen Option : 3

Q.25 During the period 600 BCE - 600 CE, who among the following was the first ruler who inscribed his messages to his subjects and officials on stone surfaces — natural rocks as well as polished pillars?

- Ans 1. Ajatasattu
 2. Ashoka
 3. Bimbisara
 4. Mahapadma Nanda

Question ID : 264330118949
Option 1 ID : 264330466452
Option 2 ID : 264330466453
Option 3 ID : 264330466451
Option 4 ID : 264330466454
Status : Not Answered
Chosen Option : --

Q.26 Which of the following Amendment Acts laid down fundamental duties for Indian citizens?

- Ans
- 1. The 44th Amendment Act
 - 2. The 43rd Amendment Act
 - 3. The 41st Amendment Act
 - 4. The 42nd Amendment Act

Question ID : 264330109837
Option 1 ID : 264330431628
Option 2 ID : 264330431627
Option 3 ID : 264330431625
Option 4 ID : 264330431626
Status : Answered
Chosen Option : 1

Q.27 Chanakya had received his education at _____ .

- Ans
- 1. Vikramashila
 - 2. Nalanda
 - 3. Ujjain
 - 4. Taxila

Question ID : 264330118955
Option 1 ID : 264330466476
Option 2 ID : 264330466475
Option 3 ID : 264330466478
Option 4 ID : 264330466477
Status : Not Answered
Chosen Option : --

Q.28 Champaran Satyagraha was led by whom among the following freedom fighters of British India?

- Ans
- 1. Lal Bahadur Shastri
 - 2. Rajendra Prasad
 - 3. Mahatma Gandhi
 - 4. Subhash Chandra Bose

Question ID : 264330182736
Option 1 ID : 264330716715
Option 2 ID : 264330716716
Option 3 ID : 264330716717
Option 4 ID : 264330716718
Status : Answered
Chosen Option : 1

Q.29 Which of the following dances was influenced by the Ras Leela of North India?

- Ans
- 1. Bharatnatyam
 - 2. Kuchipudi
 - 3. Odissi
 - 4. Kathak

Question ID : 264330110411
Option 1 ID : 264330433924
Option 2 ID : 264330433922
Option 3 ID : 264330433921
Option 4 ID : 264330433923
Status : Answered
Chosen Option : 3

Q.30 Purnamasi Jani is a tribal singer and social activist who has sung thousands of songs promoting social causes in _____.

- Ans
- 1. Kumauni
 - 2. Odia
 - 3. Marwari
 - 4. Bodo

Question ID : 264330110244
Option 1 ID : 264330433256
Option 2 ID : 264330433255
Option 3 ID : 264330433254
Option 4 ID : 264330433253
Status : Not Answered
Chosen Option : --

Q.31 Which form of art was showcased in the show "Vande Bharatam" organised by the Ministry of Culture on the occasion of Republic Day, 2023?

- Ans
- 1. Painting
 - 2. Dance
 - 3. Music
 - 4. Literature

Question ID : 264330132409
Option 1 ID : 264330518733
Option 2 ID : 264330518734
Option 3 ID : 264330518731
Option 4 ID : 264330518732
Status : Answered
Chosen Option : 3

Q.32 In karate, how many points are awarded for an 'Ippon'?

- Ans
- 1. 1
 - 2. 4
 - 3. 2
 - 4. 3

Question ID : 264330113778
Option 1 ID : 264330447199
Option 2 ID : 264330447200
Option 3 ID : 264330447198
Option 4 ID : 264330447197
Status : Not Answered
Chosen Option : --

Q.33 For the propagation of which faith was the Sattriya dance form introduced in Assam by Sankaradeva?

- Ans
- 1. Buddhism
 - 2. Vaishnavism
 - 3. Jainism
 - 4. Shaivism

Question ID : 264330111787
Option 1 ID : 264330439234
Option 2 ID : 264330439236
Option 3 ID : 264330439233
Option 4 ID : 264330439235
Status : Not Answered
Chosen Option : --

Q.34 Under Article 21 A of the Constitution of India, what is the age for children to be provided with free and compulsory education?

- Ans
- 1. Eight to fourteen years
 - 2. Eight to twelve years
 - 3. Six to fourteen years
 - 4. Ten to fourteen years

Question ID : 264330133063
Option 1 ID : 264330521306
Option 2 ID : 264330521305
Option 3 ID : 264330521303
Option 4 ID : 264330521304
Status : Answered
Chosen Option : 3

Q.35 Identify the correct combination of musical instrument and the artist associated with that instrument.

- Ans
- 1. Ali Akbar Khan – Tabla
 - 2. Zakir Hussain – Sarod
 - 3. Bismillah Khan – Flute
 - 4. Shiv Kumar Sharma – Santoor

Question ID : 264330111195
Option 1 ID : 264330436868
Option 2 ID : 264330436865
Option 3 ID : 264330436866
Option 4 ID : 264330436867
Status : Not Answered
Chosen Option : --

Q.36 Read the given statements and select the most appropriate option.

- i) A white blood cell (WBC) in human blood can change its shape.
- ii) The shape of amoeba appears irregular.

- Ans
- 1. Only statement two is correct.
 - 2. Both statements are correct.
 - 3. Both statements are incorrect.
 - 4. Only statement one is correct.

Question ID : 264330113332
Option 1 ID : 264330445416
Option 2 ID : 264330445413
Option 3 ID : 264330445414
Option 4 ID : 264330445415
Status : Not Answered
Chosen Option : --

Q.37 Which of the following rivers forms the 'Dhuadhar Falls' in Madhya Pradesh?

- Ans 1. Narmada
 2. Tapi
 3. Godavari
 4. Mahanadi

Question ID : 264330176008
Option 1 ID : 264330690328
Option 2 ID : 264330690330
Option 3 ID : 264330690327
Option 4 ID : 264330690329
Status : Answered
Chosen Option : 1

Q.38 Which of the following associations was established by Dr BR Ambedkar in 1930?

- Ans 1. All India Harijan Sewak Sangh
 2. Satyashodhak Samaj
 3. Depressed Classes Association
 4. Depressed Classes' Education Society

Question ID : 264330114107
Option 1 ID : 264330448514
Option 2 ID : 264330448513
Option 3 ID : 264330448515
Option 4 ID : 264330448516
Status : Answered
Chosen Option : 2

Q.39 Which of the following is a state where more people are engaged in work than are really needed?

- Ans 1. Frictional Unemployment
 2. Open Unemployment
 3. Seasonal Unemployment
 4. Disguised Unemployment

Question ID : 264330183052
Option 1 ID : 264330717941
Option 2 ID : 264330717943
Option 3 ID : 264330717942
Option 4 ID : 264330717940
Status : Not Answered
Chosen Option : --

Q.40 Match column A with column B.

Column-A

- i. Producer
- ii. Primary consumer
- iii. Tertiary consumer
- iv. Decomposer

Column-B

- a. Carnivorous predators
- b. Green plants
- c. Bacteria
- d. Herbivorous animals

- Ans
- 1. i-b, ii-a, iii-d, iv-c
 - 2. i-b, ii-d, iii-a, iv-c
 - 3. i-a, ii-b, iii-c, iv-d
 - 4. i-b, ii-a, iii-c, iv-d

Question ID : 264330120956

Option 1 ID : 264330474041

Option 2 ID : 264330474040

Option 3 ID : 264330474039

Option 4 ID : 264330474042

Status : Not Answered

Chosen Option : --

Q.41 Which of the following constitutes a food chain starting from producer to top carnivores?

- Ans
- 1. Insects → Frogs → Snakes → Vultures
 - 2. Small Plants → Insects → Fish → Birds → Tigers
 - 3. Soil → Grass → Deer → Tiger
 - 4. Grass → Insects → Snakes → Birds → Tigers

Question ID : 264330182361

Option 1 ID : 264330715268

Option 2 ID : 264330715267

Option 3 ID : 264330715270

Option 4 ID : 264330715269

Status : Not Answered

Chosen Option : --

Q.42 Which of the following temples is located at the centre point of the world's magnetic equator?

- Ans
- 1. Kailasanathar Temple
 - 2. Meenakshi Temple
 - 3. Chidambaram Temple
 - 4. Srirangam Temple

Question ID : 264330106252

Option 1 ID : 264330417312

Option 2 ID : 264330417309

Option 3 ID : 264330417311

Option 4 ID : 264330417310

Status : Not Answered

Chosen Option : --

Q.43 What is the approximate circumference of a cricket ball?

- Ans 1. Around 9 inches
 2. Around 6 inches
 3. Around 5 inches
 4. Around 12 inches

Question ID : 264330113759
Option 1 ID : 264330447121
Option 2 ID : 264330447124
Option 3 ID : 264330447123
Option 4 ID : 264330447122
Status : Answered
Chosen Option : 1

Q.44 Which of the following industrial plants is supplied water from Bhadravati River?

- Ans 1. Bokaro Steel Plant
 2. Durgapur Steel Plant
 3. Rourkela Steel Plant
 4. Visvesvaraya Iron and Steel Plant

Question ID : 264330178712
Option 1 ID : 264330700878
Option 2 ID : 264330700875
Option 3 ID : 264330700877
Option 4 ID : 264330700876
Status : Not Answered
Chosen Option : --

Q.45 R.L.V Ramakrishnan won the Akademi Award for Mohiniyattam in 2021. It is the classical dance form of which of the following States?

- Ans 1. Andhra Pradesh
 2. Odisha
 3. Kerala
 4. Assam

Question ID : 26433086665
Option 1 ID : 264330340304
Option 2 ID : 264330340302
Option 3 ID : 264330340303
Option 4 ID : 264330340301
Status : Not Answered
Chosen Option : --

Q.46 Which of the following is the first grand slam of the year?

- Ans 1. French Open
 2. Australian Open
 3. Wimbledon
 4. US Open

Question ID : 264330130649
Option 1 ID : 264330511709
Option 2 ID : 264330511710
Option 3 ID : 264330511707
Option 4 ID : 264330511708
Status : Not Answered
Chosen Option : --

Q.47 In which year was India's first post-Independence census conducted?

- Ans
- 1. 1954
 - 2. 1960
 - 3. 1958
 - 4. 1951

Question ID : 264330182967
Option 1 ID : 264330717600
Option 2 ID : 264330717602
Option 3 ID : 264330717601
Option 4 ID : 264330717603
Status : Answered
Chosen Option : 4

Q.48 The _____ is empowered to direct that an act of parliament does NOT apply to a scheduled area in the state.

- Ans
- 1. Supreme Court
 - 2. Governor
 - 3. Chief Minister
 - 4. High Court

Question ID : 264330120168
Option 1 ID : 264330470928
Option 2 ID : 264330470930
Option 3 ID : 264330470929
Option 4 ID : 264330470927
Status : Not Answered
Chosen Option : --

Q.49 Under the Liberalisation Measure, the Monopolies and Restrictive Trade Practices (MRTP) Act 1969 was repealed by which of the following Acts?

- Ans
- 1. Industries Development and Regulation Act 1951
 - 2. Competition Act 2002
 - 3. Foreign Exchange Regulation Act 1973
 - 4. Foreign Exchange Management Act 1999

Question ID : 264330111600
Option 1 ID : 264330438488
Option 2 ID : 264330438485
Option 3 ID : 264330438486
Option 4 ID : 264330438487
Status : Not Answered
Chosen Option : --

Q.50 According to a new definition of MSMEs 2020, medium enterprise turnover should NOT exceed how much amount?

- Ans 1. ₹250 crore
 2. ₹150 crore
 3. ₹200 crore
 4. ₹100 crore

Question ID : 264330109393
Option 1 ID : 264330429852
Option 2 ID : 264330429850
Option 3 ID : 264330429851
Option 4 ID : 264330429849
Status : Not Answered
Chosen Option : --

Section : Reasoning

Q.1 Select the correct mirror image of the given pattern when the mirror is placed at 'AB' as shown.



- Ans 1. A mirror image of the pattern where the symbols are reversed horizontally.
 2. A mirror image of the pattern where the symbols are reversed horizontally and vertically.
 3. A mirror image of the pattern where the symbols are reversed horizontally.
 4. A mirror image of the pattern where the symbols are reversed horizontally and the vertical line is also mirrored.

Question ID : 264330121805
Option 1 ID : 264330477394
Option 2 ID : 264330477391
Option 3 ID : 264330477392
Option 4 ID : 264330477393
Status : Answered
Chosen Option : 3

Q.2 Read the given statements and conclusions carefully. Assuming that the information given in the statements is true, even if it appears to be at variance with commonly known facts, decide which of the given conclusions logically follow(s) from the statements.

Statements:

All mangoes are grapes.

All grapes are guavas.

Conclusions:

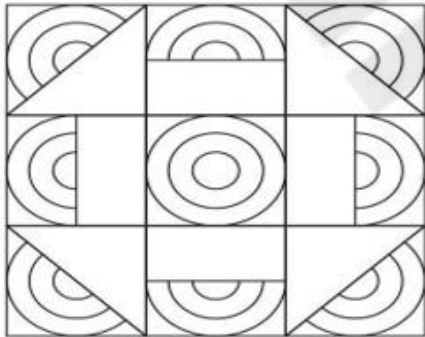
I. Some guavas are mangoes.

II. All mangoes are guavas.

- Ans
- 1. Neither conclusion I nor II follows
 - 2. Only conclusion I follows
 - 3. Both conclusions I and II follow
 - 4. Only conclusion II follows

Question ID : 26433069511
Option 1 ID : 264330272559
Option 2 ID : 264330272556
Option 3 ID : 264330272558
Option 4 ID : 264330272557
Status : Answered
Chosen Option : 3

Q.3 How many semicircles are there in the given figure?



- Ans
- 1. 27
 - 2. 24
 - 3. 30
 - 4. 33

Question ID : 26433080671
Option 1 ID : 264330316620
Option 2 ID : 264330316619
Option 3 ID : 264330316617
Option 4 ID : 264330316618
Status : Answered
Chosen Option : 1

Q.4 Select the correct combination of mathematical signs to sequentially replace the * signs and to balance the given equation.

$$17 * 17 * 50 * 28 * 7 * 243$$

- Ans
- 1. -, +, x, +, =
 - 2. x, -, +, +, =
 - 3. +, +, -, x, =
 - 4. x, +, -, +, =

Question ID : 26433076553

Option 1 ID : 264330300277

Option 2 ID : 264330300279

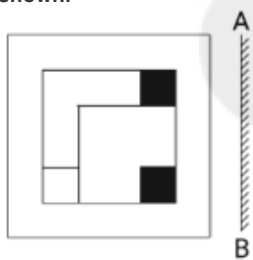
Option 3 ID : 264330300278

Option 4 ID : 264330300276

Status : Answered

Chosen Option : 2

Q.5 Select the correct mirror image of the given figure when the mirror is placed at 'AB' as shown.



Ans

- 1.
- 2.
- 3.
- 4.

Question ID : 264330113093

Option 1 ID : 264330444458

Option 2 ID : 264330444460

Option 3 ID : 264330444457

Option 4 ID : 264330444459

Status : Answered

Chosen Option : 2

Q.6 Select the option that is related to the fifth letter-cluster in the same way as the second letter-cluster is related to the first letter-cluster and the fourth letter-cluster is related to the third letter-cluster.

LOVE : BSLI :: WORK : HOLT :: SORT : ?

- Ans
- 1. QQLP
 - 2. QQLR
 - 3. ROLQ
 - 4. QOMP

Question ID : 26433076459
Option 1 ID : 264330299900
Option 2 ID : 264330299903
Option 3 ID : 264330299902
Option 4 ID : 264330299901
Status : Not Answered
Chosen Option : --

Q.7 Select the set in which the numbers are related in the same way as are the numbers of the following sets.

(NOTE : Operations should be performed on the whole numbers, without breaking down the numbers into its constituent digits. E.g. 13 – Operations on 13 such as adding /deleting /multiplying etc. to 13 can be performed. Breaking down 13 into 1 and 3 and then performing mathematical operations on 1 and 3 is not allowed.)

(63, 9, 27)
(105, 15, 45)

- Ans
- 1. (147, 21, 65)
 - 2. (149, 21, 63)
 - 3. (147, 21, 63)
 - 4. (149, 21, 65)

Question ID : 264330175036
Option 1 ID : 264330686521
Option 2 ID : 264330686519
Option 3 ID : 264330686522
Option 4 ID : 264330686520
Status : Answered
Chosen Option : 3

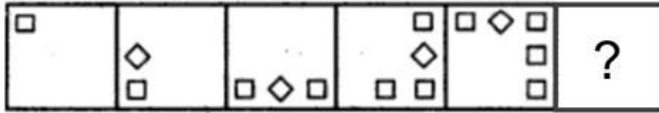
Q.8 Select the correct combination of mathematical signs that can sequentially replace the * signs and balance the given expression.

$53 * 19 * 8 * 32 * 4 * 197$

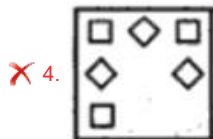
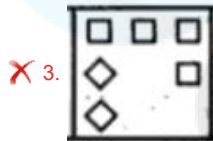
- Ans
- 1. +, +, x, -, =
 - 2. +, x, -, +, =
 - 3. +, -, x, +, =
 - 4. x, +, -, +, =

Question ID : 26433074783
Option 1 ID : 264330293220
Option 2 ID : 264330293222
Option 3 ID : 264330293223
Option 4 ID : 264330293221
Status : Answered
Chosen Option : 2

Q.9 Select the figure from among the given options that can replace the question mark (?) in the following series.



Ans

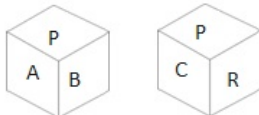


Question ID : 26433080524
 Option 1 ID : 264330316030
 Option 2 ID : 264330316031
 Option 3 ID : 264330316032
 Option 4 ID : 264330316029

Status : Answered

Chosen Option : 2

Q.10 Six letters A, B, C, P, Q and R are written on different faces of a dice. Two positions of this dice are shown in the figure. Find the letter on the face opposite to B.



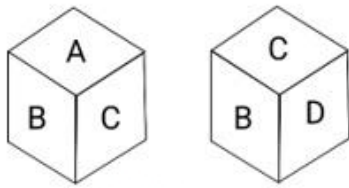
Ans ✗ 1. Q
 ✓ 2. R
 ✗ 3. A
 ✗ 4. C

Question ID : 264330109207
 Option 1 ID : 264330429107
 Option 2 ID : 264330429108
 Option 3 ID : 264330429105
 Option 4 ID : 264330429106

Status : Answered

Chosen Option : 2

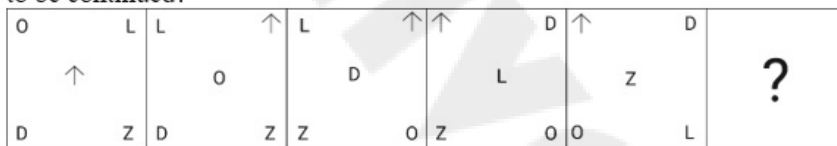
Q.11 Six letters, A, B, C, D, E and F, are written on the different faces of a dice. Two positions of this dice are shown in the given figure. Find the letter on the face opposite to D.



- Ans
- 1. E
 - 2. B
 - 3. F
 - 4. A

Question ID : 264330106167
 Option 1 ID : 264330416970
 Option 2 ID : 264330416972
 Option 3 ID : 264330416971
 Option 4 ID : 264330416969
 Status : Answered
 Chosen Option : 4

Q.12 Which figure should replace the question mark (?) if the following series were to be continued?



Ans

- 1.

D	Z
↑	
L	O
- 2.

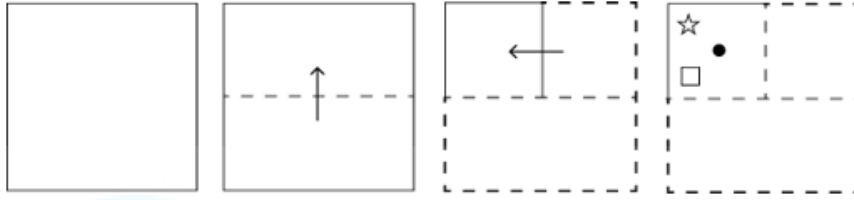
D	Z
↑	
O	L
- 3.

Z	↑
	D
O	L
- 4.

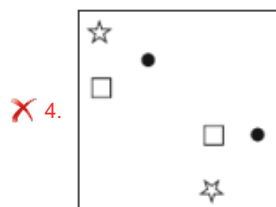
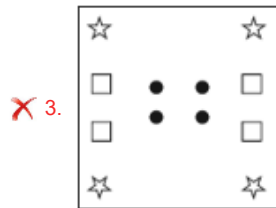
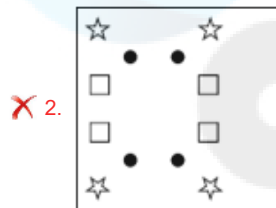
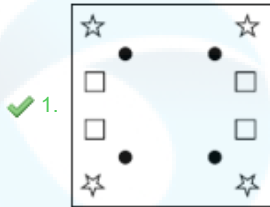
Z	↑
	D
L	O

Question ID : 264330103850
 Option 1 ID : 264330407704
 Option 2 ID : 264330407701
 Option 3 ID : 264330407702
 Option 4 ID : 264330407703
 Status : Answered
 Chosen Option : 1

Q.13 A square sheet of paper is folded along the dotted line successively along the directions shown and is then punched in the last. How would the paper look when unfolded?



Ans



Question ID : 264330172427

Option 1 ID : 264330676260

Option 2 ID : 264330676259

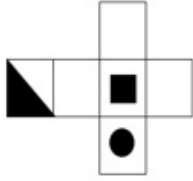
Option 3 ID : 264330676261

Option 4 ID : 264330676262

Status : Answered

Chosen Option : 1

Q.14 Choose the dice from the given options that is similar to the dice formed from the given sheet of paper (X).



(X)

Ans

✗ 1.



✗ 2.



✗ 3.



✓ 4.



Question ID : 264330111296

Option 1 ID : 264330437271

Option 2 ID : 264330437270

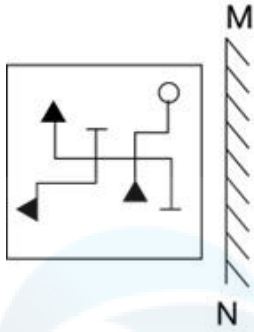
Option 3 ID : 264330437269

Option 4 ID : 264330437272

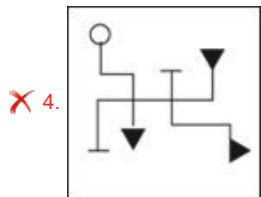
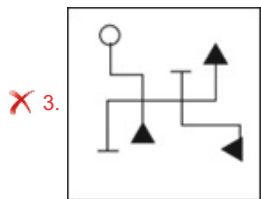
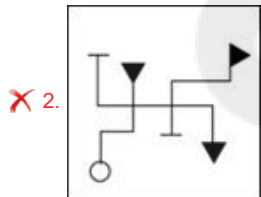
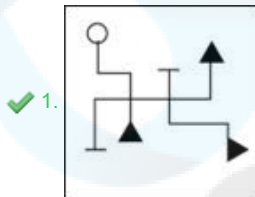
Status : Answered

Chosen Option : 3

Q.15 Select the correct mirror image of the given combination when the mirror is placed at 'MN' as shown below.



Ans



Question ID : 264330130767

Option 1 ID : 264330512180

Option 2 ID : 264330512179

Option 3 ID : 264330512182

Option 4 ID : 264330512181

Status : Answered

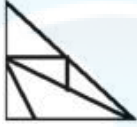
Chosen Option : 1

Q.16 Select a figure from amongst the four given options which, when placed in the blank space of figure (X), would complete the pattern.

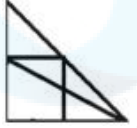


Ans

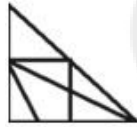
✗ 1.



✗ 2.



✓ 3.



✗ 4.



Question ID : 264330102214

Option 1 ID : 264330401323

Option 2 ID : 264330401322

Option 3 ID : 264330401324

Option 4 ID : 264330401321

Status : Answered

Chosen Option : 3

Q.17 Which of the following terms will replace the question mark (?) in the given series?
GSJV, IQLT, KONR, ?, OKRN

Ans ✗ 1. NMOP

✗ 2. MNPO

✓ 3. MMPP

✗ 4. LMPO

Question ID : 264330102172

Option 1 ID : 264330401155

Option 2 ID : 264330401154

Option 3 ID : 264330401156

Option 4 ID : 264330401153

Status : Answered

Chosen Option : 3

Q.18 In a certain code language, 'TIDE' is written as 'EDJS' and 'MARS' is written as 'BLSR'.
How will 'HOPE' be written in that language?

- Ans
- 1. EPFG
 - 2. FIQP
 - 3. PEHO
 - 4. FGPO

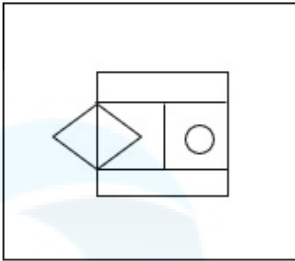
Question ID : 26433087178
Option 1 ID : 264330342350
Option 2 ID : 264330342352
Option 3 ID : 264330342349
Option 4 ID : 264330342351
Status : Not Answered
Chosen Option : --

Q.19 Select the option figure in which the given figure is embedded. (Rotation is not allowed)

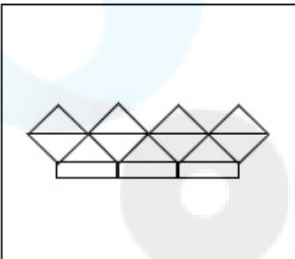


Ans

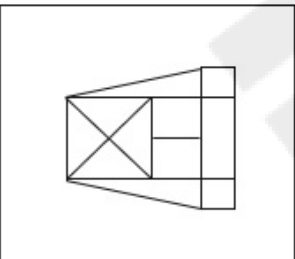
✗ 1.



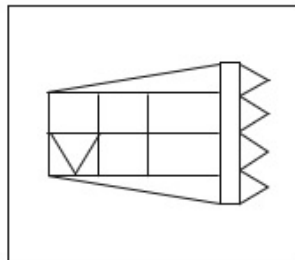
✗ 2.



✗ 3.



✓ 4.



Question ID : 264330101316

Option 1 ID : 264330397811

Option 2 ID : 264330397812


Option 3 ID : 264330397809

Option 4 ID : 264330397810

Status : Answered

Chosen Option : 4

Q.20 Select the figure that will come next in the following figure series.



Ans

- 1.
- 2.
- 3.
- 4.

Question ID : 264330129649

Option 1 ID : 264330507964

Option 2 ID : 264330507962

Option 3 ID : 264330507963

Option 4 ID : 264330507965

Status : Answered

Chosen Option : 4

Q.21 Seven children - T, U, V, W, X, Y and Z - are sitting in a straight row, facing north. U sits second to left of Z. Y sits third to the left of T. Only one child sits to the right of X. Only two children sit to the left of W. Who among the following children sits at the extreme left end of the row?

- Ans
- 1. T
 - 2. Y
 - 3. U
 - 4. V

Question ID : 26433087019

Option 1 ID : 264330341720

Option 2 ID : 264330341719

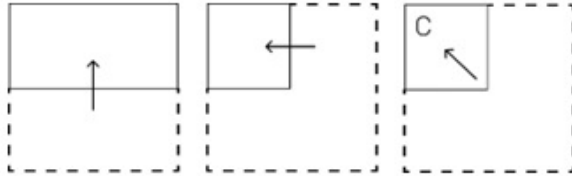
Option 3 ID : 264330341717

Option 4 ID : 264330341718

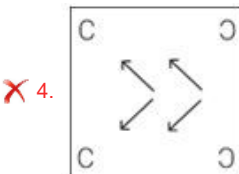
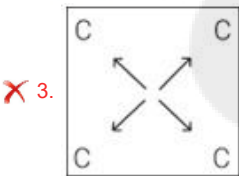
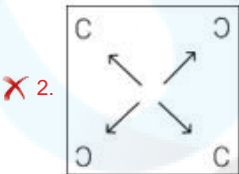
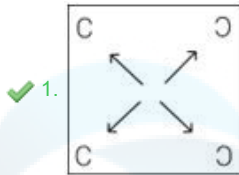
Status : Answered

Chosen Option : 1

Q.22 A paper is folded and cut as shown below. How will it appear when unfolded?



Ans



Question ID : 264330114707
 Option 1 ID : 264330450916
 Option 2 ID : 264330450915
 Option 3 ID : 264330450914
 Option 4 ID : 264330450913

Status : Answered

Chosen Option : 1

Q.23 Which of the following options will replace the question mark (?) in the given series?
 150, 230, 322, 402, ?, 574

Ans ✗ 1. 488

✓ 2. 494

✗ 3. 477

✗ 4. 459

Question ID : 264330109428
 Option 1 ID : 264330429992
 Option 2 ID : 264330429989
 Option 3 ID : 264330429990
 Option 4 ID : 264330429991

Status : Answered

Chosen Option : 2


Q.24 Select the option that is related to the third term in the same way as the second term is related to the first term and the sixth term is related to the fifth term.
24 : 566 :: 12 : ? :: 8 : 54

- Ans 1. 134
 2. 124
 3. 120
 4. 154

Question ID : 264330101054
Option 1 ID : 264330396762
Option 2 ID : 264330396763
Option 3 ID : 264330396764
Option 4 ID : 264330396761
Status : Answered
Chosen Option : 4

Q.25 Select the correct mirror image of the given figure when the mirror is placed at PQ as shown below.

A C P 2 d Z k



- Ans 1. A C b 5 q Z K
 2. K Z b 5 q A
 3. K Z b 5 q A
 4. K Z d 5 q A

Question ID : 26433080782
Option 1 ID : 264330317061
Option 2 ID : 264330317064
Option 3 ID : 264330317063
Option 4 ID : 264330317062
Status : Answered
Chosen Option : 3

Section : Numerical Ability

Q.1 Find the average of all the even numbers from 22 to 30 (inclusive both).

- Ans 1. 26.0
 2. 25.5
 3. 24.5
 4. 25.0

Question ID : 264330131440
Option 1 ID : 264330514866
Option 2 ID : 264330514865
Option 3 ID : 264330514863
Option 4 ID : 264330514864
Status : Answered
Chosen Option : 1

Q.2 200 men have provisions for 30 days. If 50 of these men leave, for how many days will the same provisions last for the remaining men?

- Ans
- 1. 28 days
 - 2. 32 days
 - 3. 40 days
 - 4. 24 days

Question ID : 264330182572
Option 1 ID : 264330716080
Option 2 ID : 264330716081
Option 3 ID : 264330716082
Option 4 ID : 264330716079
Status : Answered
Chosen Option : 4

Q.3 The ratio of the number of boys to that of the girls in a school is 7 : 9. If there are 1183 boys in the school, what is the total number of boys and girls in that school?

- Ans
- 1. 2736
 - 2. 2688
 - 3. 2704
 - 4. 2720

Question ID : 264330131165
Option 1 ID : 264330513774
Option 2 ID : 264330513772
Option 3 ID : 264330513771
Option 4 ID : 264330513773
Status : Answered
Chosen Option : 3

Q.4 If $\frac{52416}{168} = 312$, then the value of $\frac{52.416}{0.0168}$ is:

- Ans
- 1. 3120
 - 2. 3.12
 - 3. 31.2
 - 4. 312

Question ID : 264330111439
Option 1 ID : 264330437844
Option 2 ID : 264330437842
Option 3 ID : 264330437841
Option 4 ID : 264330437843
Status : Not Answered
Chosen Option : --

Q.5 If $\frac{b}{a} = 0.75$, then $\frac{2a - b}{2a + b} + \frac{8}{9}$ is equal to:

- Ans
- ✓ 1. $\frac{133}{99}$
 - ✗ 2. $\frac{13}{9}$
 - ✗ 3. $\frac{19}{111}$
 - ✗ 4. $\frac{17}{99}$

Question ID : 264330104340
Option 1 ID : 264330409663
Option 2 ID : 264330409661
Option 3 ID : 264330409664
Option 4 ID : 264330409662
Status : Not Answered
Chosen Option : --

Q.6 A woman gains 20% by selling an article for a certain price. If she sells it at double the price, then the profit made is:

- Ans
- ✗ 1. 110%
 - ✓ 2. 140%
 - ✗ 3. 120%
 - ✗ 4. 130%

Question ID : 264330104499
Option 1 ID : 264330410298
Option 2 ID : 264330410299
Option 3 ID : 264330410297
Option 4 ID : 264330410300
Status : Answered
Chosen Option : 2

Q.7 The monthly income of Lucas is ₹42,500. If his income is increased by 18%, then find his new monthly income (in ₹).

- Ans
- ✗ 1. 47,500
 - ✗ 2. 43,000
 - ✗ 3. 48,120
 - ✓ 4. 50,150

Question ID : 264330102323
Option 1 ID : 264330401760
Option 2 ID : 264330401759
Option 3 ID : 264330401757
Option 4 ID : 264330401758
Status : Answered
Chosen Option : 4

Q.8 If the volume and surface area of a sphere are numerically the same, then its radius is:

- Ans 1. 3 units
 2. 4 units
 3. 1 unit
 4. 2 units

Question ID : 264330119364
Option 1 ID : 264330467745
Option 2 ID : 264330467746
Option 3 ID : 264330467743
Option 4 ID : 264330467744
Status : Not Answered
Chosen Option : --

Q.9 If 125 identical small solid spheres are made out of a big solid sphere of radius 5 cm, what is the surface area (in cm^2) of each small sphere?

- Ans 1. 8π
 2. 25π
 3. 12π
 4. 4π

Question ID : 264330112431
Option 1 ID : 264330441810
Option 2 ID : 264330441812
Option 3 ID : 264330441811
Option 4 ID : 264330441809
Status : Not Answered
Chosen Option : --

Q.10 A man completes his journey in 6 h. He covers half the distance at the speed of 30 km/h and the rest at 50 km/h. The length of the journey (in km) is:

- Ans 1. 125
 2. 225
 3. 252
 4. 112.5

Question ID : 264330183833
Option 1 ID : 264330721008
Option 2 ID : 264330721009
Option 3 ID : 264330721010
Option 4 ID : 264330721011
Status : Answered
Chosen Option : 2

Q.11 For a sum of Rs.7,500, the rate of interest is 7.5% per annum simple interest. Find the interest earned in 4 years 9 months.

- Ans
- 1. Rs.2,617.875
 - 2. Rs.2,871
 - 3. Rs.2,671.875
 - 4. Rs.2761.875

Question ID : 264330122076
Option 1 ID : 264330478441
Option 2 ID : 264330478440
Option 3 ID : 264330478442
Option 4 ID : 264330478439
Status : Answered
Chosen Option : 3

Q.12 An almirah is sold at ₹6,500 after allowing a discount of 20%. Find its marked price (in ₹).

- Ans
- 1. 8,125
 - 2. 8,235
 - 3. 8,000
 - 4. 7,546

Question ID : 264330126575
Option 1 ID : 264330495975
Option 2 ID : 264330495972
Option 3 ID : 264330495974
Option 4 ID : 264330495973
Status : Answered
Chosen Option : 1

Q.13 The compound interest on ₹50,000 at 8% per annum is ₹8,320. Find the period.

- Ans
- 1. 2 years
 - 2. 5 years
 - 3. 3 years
 - 4. 4 years

Question ID : 264330106006
Option 1 ID : 264330416325
Option 2 ID : 264330416328
Option 3 ID : 264330416326
Option 4 ID : 264330416327
Status : Answered
Chosen Option : 1

Q.14 In an election between two candidates, 10% of voters didn't participate in voting, 20% votes were declared invalid and the winner got 70% of the total valid votes and won by 6480 votes. Find the total number of votes in the voting list.

- Ans
- 1. 22,500
 - 2. 28,400
 - 3. 26,700
 - 4. 25,600

Question ID : 264330129401

Option 1 ID : 264330506972

Option 2 ID : 264330506970

Option 3 ID : 264330506973

Option 4 ID : 264330506971

Status : **Not Attempted and Marked For Review**

Chosen Option : --

Q.15 The simplified value of $2.5 \times (4 - (2^4 - 3^3)) \div \left(\frac{11}{4}\right) \div 8 \times \left(\frac{4}{3}\right)$ is _____.

- Ans
- 1. $\frac{8}{3}$
 - 2. $\frac{10}{3}$
 - 3. $-\frac{2}{3}$
 - 4. $\frac{4}{3}$

Question ID : 264330112060

Option 1 ID : 264330440326

Option 2 ID : 264330440325

Option 3 ID : 264330440327

Option 4 ID : 264330440328

Status : **Not Answered**

Chosen Option : --

Section : Computer Proficiency

Q.1 Which of the following keyboard shortcut keys is used to cut the selected text in MS-Word 365?

- Ans
- 1. Ctrl + c
 - 2. Ctrl + x
 - 3. Ctrl + p
 - 4. Ctrl + v

Question ID : 264330178289

Option 1 ID : 264330699211

Option 2 ID : 264330699213

Option 3 ID : 264330699214

Option 4 ID : 264330699212

Status : **Not Answered**

Chosen Option : --

Q.2 What does the Uniform Resource Locator (URL) specify?

- Ans
- 1. HTML
 - 2. Unique address assigned to each web resource
 - 3. ISP
 - 4. Internet protocol

Question ID : 264330182104
Option 1 ID : 264330714258
Option 2 ID : 264330714256
Option 3 ID : 264330714257
Option 4 ID : 264330714255
Status : Not Answered
Chosen Option : --

Q.3 In MS Word 365 Which of the following best describes the use of justify text?

- Ans
- 1. To align evenly along left margins
 - 2. To align evenly along right margins
 - 3. To center the text
 - 4. To align evenly along left and right margins

Question ID : 264330176720
Option 1 ID : 264330693097
Option 2 ID : 264330693098
Option 3 ID : 264330693095
Option 4 ID : 264330693096
Status : Not Answered
Chosen Option : --

Q.4 In MS Excel 365, which of the following is the correct option to open an existing spreadsheet in MS-Excel?

- Ans
- 1. Click on File tab<<Click on Open
 - 2. Click on File tab<<Click on New
 - 3. Click on Home tab<<Click on New
 - 4. Click on Home tab<<Click on Open

Question ID : 264330176681
Option 1 ID : 264330692940
Option 2 ID : 264330692939
Option 3 ID : 264330692941
Option 4 ID : 264330692942
Status : Not Answered
Chosen Option : --

Q.5 In MS Excel 365, which Microsoft Excel view allows you to see how the printed worksheet will look before actually printing it?

- Ans
- 1. Full Screen view
 - 2. Page Layout view
 - 3. Print Preview
 - 4. Normal view

Question ID : 264330180683
Option 1 ID : 264330708702
Option 2 ID : 264330708699
Option 3 ID : 264330708701
Option 4 ID : 264330708700
Status : Not Answered
Chosen Option : --

Q.6 Which of the following options allows you to choose whether to keep or discard the formatting of pasted text in MS Word 365?

- Ans**
- 1. Font Selection
 - 2. Cut and Paste
 - 3. Paste Special
 - 4. Format Painter

Question ID : 264330180857
Option 1 ID : 264330709394
Option 2 ID : 264330709393
Option 3 ID : 264330709391
Option 4 ID : 264330709392
Status : Not Answered
Chosen Option : --

Q.7 In MS-Word 365, which action allows you to duplicate selected text and place a copy of it on the clipboard?

- Ans**
- 1. Select All
 - 2. Cut
 - 3. Paste
 - 4. Copy

Question ID : 264330173356
Option 1 ID : 264330679906
Option 2 ID : 264330679903
Option 3 ID : 264330679905
Option 4 ID : 264330679904
Status : Not Answered
Chosen Option : --

Q.8 Which of the following windows is used when we want to write an email in Gmail?

- Ans**
- 1. Compose
 - 2. Send
 - 3. Spam
 - 4. Draft

Question ID : 264330178239
Option 1 ID : 264330699012
Option 2 ID : 264330699014
Option 3 ID : 264330699013
Option 4 ID : 264330699011
Status : Not Answered
Chosen Option : --

Q.9 Which of the following is the default font when a new blank document is created in MS Word 365?

- Ans**
- 1. Calibri
 - 2. Times New Roman
 - 3. Arial
 - 4. Cambria

Question ID : 264330176725
Option 1 ID : 264330693115
Option 2 ID : 264330693116
Option 3 ID : 264330693117
Option 4 ID : 264330693118
Status : Not Answered
Chosen Option : --

Q.10 In MS Excel 365 which of the following is an example of absolute reference pointing to cell A1 in MS Excel?

Ans ✓ 1. \$A\$1

✗ 2. A1

✗ 3. @A1

✗ 4. 1A

Question ID : 264330180398

Option 1 ID : 264330707561

Option 2 ID : 264330707559

Option 3 ID : 264330707562

Option 4 ID : 264330707560

Status : Not Answered

Chosen Option : --