

## Constable Executive Male and Female in Delhi Police Examination 2023

Roll Number	
Candidate Name	
Venue Name	
Exam Date	29/11/2023
Exam Time	9:00 AM - 10:30 AM
Subject	Constable Executive Male and Female in Delhi Police Examination 2023

Section : General Knowledge

Q.1 Who was the President of India between the years 1987 and 1992?

- Ans
- 1. Giani Zail Singh
  - 2. R Venkataraman
  - 3. Fakhruddin Ali Ahmed
  - 4. Shankar Dayal Sharma

Question ID : 264330110815  
Option 1 ID : 264330435540  
Option 2 ID : 264330435538  
Option 3 ID : 264330435539  
Option 4 ID : 264330435537  
Status : Marked For Review  
Chosen Option : 4

Q.2 Buddhist texts called Dipavamsa and Mahavamsa, which are the sources of information to Mauryan times, belong to which of the following countries?

- Ans
- 1. India
  - 2. China
  - 3. Myanmar
  - 4. Sri Lanka

Question ID : 264330130539  
Option 1 ID : 264330511270  
Option 2 ID : 264330511267  
Option 3 ID : 264330511268  
Option 4 ID : 264330511269  
Status : Answered  
Chosen Option : 1

Q.3 The Nalanda University was built in \_\_\_\_\_.

- Ans
- 1. Magadha
  - 2. Kuru
  - 3. Matsya
  - 4. Vatsa

Question ID : 26433086598  
Option 1 ID : 264330340036  
Option 2 ID : 264330340034  
Option 3 ID : 264330340033  
Option 4 ID : 264330340035  
Status : Marked For Review  
Chosen Option : 1

Q.4 In which year did India win its first Olympic gold in hockey?

- Ans  1. 1922  
 2. 1956  
 3. 1928  
 4. 1960

Question ID : 264330134260  
Option 1 ID : 264330526035  
Option 2 ID : 264330526037  
Option 3 ID : 264330526036  
Option 4 ID : 264330526038  
Status : Answered  
Chosen Option : 3

Q.5 Read the given statements and select the correct option regarding 'High Powered Money'.

- (i) High Powered Money consists of currency and cash reserves with the bank.  
(ii) High Powered Money includes demand deposits of the banks.

- Ans  1. Both (i) and (ii) are true  
 2. Only (i) is true  
 3. Both (i) and (ii) are false  
 4. Only (ii) is true

Question ID : 264330118242  
Option 1 ID : 264330464785  
Option 2 ID : 264330464783  
Option 3 ID : 264330464786  
Option 4 ID : 264330464784  
Status : Not Attempted and Marked For Review  
Chosen Option : --

Q.6 Who set up the task force on Supportive Policy and Regulatory Framework for Micro-Finance in India in 1999?

- Ans  1. RRB  
 2. Finance minister  
 3. NABARD  
 4. SBI

Question ID : 264330120872  
Option 1 ID : 264330473705  
Option 2 ID : 264330473706  
Option 3 ID : 264330473704  
Option 4 ID : 264330473703  
Status : Marked For Review  
Chosen Option : 3

Q.7 Which component of the cytoskeleton are rigid hollow rods, about 25 nm in diameter, that play an important role in the cell cycle by forming the mitotic spindle?

- Ans
- 1. Microfibers
  - 2. Intermediate filaments
  - 3. Actin filaments
  - 4. Microtubules

Question ID : 264330114600

Option 1 ID : 264330450485

Option 2 ID : 264330450488

Option 3 ID : 264330450486

Option 4 ID : 264330450487

Status : Not Attempted and  
Marked For Review

Chosen Option : --

Q.8 From which of the following cities did the Revolt of 1857 begin on 10 May 1857 in British India?

- Ans
- 1. Meerut
  - 2. Kanpur
  - 3. Delhi
  - 4. Jhansi

Question ID : 264330120257

Option 1 ID : 264330471286

Option 2 ID : 264330471285

Option 3 ID : 264330471283

Option 4 ID : 264330471284

Status : Answered

Chosen Option : 1

Q.9 Annatto seeds and extract is used as adulterant in:

- Ans
- 1. dairy products
  - 2. turmeric powder
  - 3. rice powder
  - 4. wheat flour

Question ID : 264330111906

Option 1 ID : 264330439709

Option 2 ID : 264330439710

Option 3 ID : 264330439711

Option 4 ID : 264330439712

Status : Answered

Chosen Option : 2

**Q.10 Whose song 'Shaabaash' became the anthem of Indian athletes at the Commonwealth Games 2022?**

- Ans
- 1. Jim Ankan Deka
  - 2. Jayanta Nath
  - 3. Nilotpal Bora
  - 4. Zubeen Garg

Question ID : 264330110250

Option 1 ID : 264330433278

Option 2 ID : 264330433277

Option 3 ID : 264330433279

Option 4 ID : 264330433280

Status : **Not Attempted and Marked For Review**

Chosen Option : --

**Q.11 Under which Act was the legislative powers of making and amending laws restored to the provinces?**

- Ans
- 1. Indian Council Act, 1892
  - 2. Indian Council Act, 1861
  - 3. Indian Council Act, 1909
  - 4. Regulating Act, 1773

Question ID : 264330132665

Option 1 ID : 264330519756

Option 2 ID : 264330519758

Option 3 ID : 264330519757

Option 4 ID : 264330519755

Status : **Marked For Review**

Chosen Option : 3

**Q.12 How many medals did India win in the Commonwealth Games-2022?**

- Ans
- 1. 61
  - 2. 59
  - 3. 58
  - 4. 57

Question ID : 264330113736

Option 1 ID : 264330447029

Option 2 ID : 264330447030

Option 3 ID : 264330447032

Option 4 ID : 264330447031

Status : **Not Attempted and Marked For Review**

Chosen Option : --

Q.13 Guru Bipin Singh was conferred the Kalidas Samman Award for which form of dance?

- Ans  1. Manipuri  
 2. Kuchipudi  
 3. Odissi  
 4. Kathakali

Question ID : 26433080966  
Option 1 ID : 264330317788  
Option 2 ID : 264330317787  
Option 3 ID : 264330317785  
Option 4 ID : 264330317786  
Status : Answered  
Chosen Option : 1

Q.14 Who among the following musicians was shortlisted for the Bharat Ratna in 2019?

- Ans  1. Bhupen Hazarika  
 2. Pandit Ravi Shankar  
 3. Lata Mangeshkar  
 4. Pandit Bhimsen Joshi

Question ID : 26433086941  
Option 1 ID : 264330341408  
Option 2 ID : 264330341405  
Option 3 ID : 264330341406  
Option 4 ID : 264330341407  
Status : Answered  
Chosen Option : 3

Q.15 Guru Vempati Chinna Satyam is associated with which of these dance forms?

- Ans  1. Kuchipudi  
 2. Bharatanatyam  
 3. Manipuri  
 4. Odissi

Question ID : 264330109299  
Option 1 ID : 264330429476  
Option 2 ID : 264330429475  
Option 3 ID : 264330429474  
Option 4 ID : 264330429473  
Status : Marked For Review  
Chosen Option : 3

Q.16 \_\_\_\_\_ refers to the measure related to the sale of assets for the achievement of some purpose.

- Ans  1. Total denationalisation  
 2. Joint venture  
 3. Management buyout  
 4. Liquidation

Question ID : 264330111617  
Option 1 ID : 264330438553  
Option 2 ID : 264330438554  
Option 3 ID : 264330438556  
Option 4 ID : 264330438555  
Status : Answered  
Chosen Option : 4

Q.17 Who among the following said that Raziyya was more able and /qualified than all her brothers for the Sultan of Delhi Sultanate?

- Ans
- 1. Qutb ud-Din Aibak
  - 2. Abdul Malik Isami
  - 3. Minhaj-i Siraj
  - 4. Ahmad Yadgar

Question ID : 264330111375  
Option 1 ID : 264330437585  
Option 2 ID : 264330437586  
Option 3 ID : 264330437588  
Option 4 ID : 264330437587  
Status : Not Answered  
Chosen Option : --

Q.18 निम्नलिखित में से कौन-सा कॉलम-A का कॉलम-B के साथ सही मिलान है?

कॉलम -A (अपमिश्रक)

- i. पपीते के बीज
- ii. आर्जीमोन के बीज
- iii. डिटर्जेंट
- iv. पीला ऐनिलीन रंजक

कॉलम -B (खाद्य सामग्री)

- a. हल्दी
- b. दुग्ध
- c. सरसों का तेल
- d. काली मिर्च

- Ans
- 1. i-c, ii-a, iii-b, iv-d
  - 2. i-c, ii-d, iii-a, iv-b
  - 3. i-d, ii-c, iii-b, iv-a
  - 4. i-c, ii-d, iii-b, iv-a

Question ID : 264330131807  
Option 1 ID : 264330516327  
Option 2 ID : 264330516328  
Option 3 ID : 264330516330  
Option 4 ID : 264330516329  
Status : Answered  
Chosen Option : 3

Q.19 The term 'chui' in judo means \_\_\_\_\_.

- Ans
- 1. warning
  - 2. throwing technique
  - 3. holding technique
  - 4. light penalty

Question ID : 264330118487  
Option 1 ID : 264330465350  
Option 2 ID : 264330465351  
Option 3 ID : 264330465352  
Option 4 ID : 264330465349  
Status : Not Answered  
Chosen Option : --

**Q.20** Which of the following dams was NOT funded during the First Five-Year Plan for development of irrigation facility?

- Ans
- 1. Bhakra Nangal dam
  - 2. Hirakund dam
  - 3. Mettur dam
  - 4. Gosi Khurd dam

Question ID : 264330120884  
Option 1 ID : 264330473751  
Option 2 ID : 264330473752  
Option 3 ID : 264330473753  
Option 4 ID : 264330473754  
Status : Marked For Review  
Chosen Option : 4

**Q.21** Which of the following deities was known as breaker of forts in the Rig Veda?

- Ans
- 1. Indra
  - 2. Agni
  - 3. Varuna
  - 4. Marut

Question ID : 264330119708  
Option 1 ID : 264330469107  
Option 2 ID : 264330469108  
Option 3 ID : 264330469109  
Option 4 ID : 264330469110  
Status : Answered  
Chosen Option : 1

**Q.22** Which of the following Articles of the Indian Constitution, related to fundamental rights, CANNOT be suspended during an emergency?

- Ans
- 1. Articles 29-30
  - 2. Articles 17-18
  - 3. Articles 20-21
  - 4. Articles 31-32

Question ID : 264330113388  
Option 1 ID : 264330445640  
Option 2 ID : 264330445638  
Option 3 ID : 264330445637  
Option 4 ID : 264330445639  
Status : Answered  
Chosen Option : 3

**Q.23** In the year 1855, the first jute mill was set up at Rishra, which is located in:

- Ans
- 1. Odisha
  - 2. West Bengal
  - 3. Andhra Pradesh
  - 4. Bihar

Question ID : 264330178713  
Option 1 ID : 264330700880  
Option 2 ID : 264330700882  
Option 3 ID : 264330700879  
Option 4 ID : 264330700881  
Status : Marked For Review  
Chosen Option : 2

Q.24 Dr. Karni Singh Shooting Range is located at:

- Ans  1. New Delhi  
 2. Jaipur  
 3. Bangalore  
 4. Mumbai

Question ID : 264330118438  
Option 1 ID : 264330465154  
Option 2 ID : 264330465155  
Option 3 ID : 264330465156  
Option 4 ID : 264330465153  
Status : Answered  
Chosen Option : 2

Q.25 Which festival is also known as the foundation day of Khalsa Panth?

- Ans  1. Baisakhi  
 2. Basant Panchami  
 3. Gurupurab  
 4. Lohri

Question ID : 264330111142  
Option 1 ID : 264330436655  
Option 2 ID : 264330436653  
Option 3 ID : 264330436656  
Option 4 ID : 264330436654  
Status : Marked For Review  
Chosen Option : 1

Q.26 Which of the following censuses recorded the highest gap in male and female literacy rates in India?

- Ans  1. 2001  
 2. 1971  
 3. 1991  
 4. 1981

Question ID : 264330179555  
Option 1 ID : 264330704222  
Option 2 ID : 264330704219  
Option 3 ID : 264330704221  
Option 4 ID : 264330704220  
Status : Marked For Review  
Chosen Option : 2

Q.27 Who has written the famous novel 'Apsara'?

- Ans  1. Suryakant Tripathi Nirala  
 2. Mahadevi Verma  
 3. Sumitranandan Pant  
 4. Jaishankar Prasad

Question ID : 26433064234  
Option 1 ID : 264330251530  
Option 2 ID : 264330251529  
Option 3 ID : 264330251531  
Option 4 ID : 264330251528  
Status : Not Answered  
Chosen Option : --

Q.28 The chemical name of Plaster of Paris is \_\_\_\_\_.

- Ans  1. calcium sulphate hemihydrate  
 2. calcium sulphate semihydrate  
 3. calcium hydrogen semihydrate  
 4. calcium hydrogen hemihydrate

Question ID : 264330173639  
Option 1 ID : 264330681035  
Option 2 ID : 264330681038  
Option 3 ID : 264330681037  
Option 4 ID : 264330681036  
Status : Marked For Review  
Chosen Option : 2

Q.29 'Roads to Mussoorie', the famous novel is written by whom among the following Sahitya Akademi Awardee?

- Ans  1. Shobha Dey  
 2. Ruskin Bond  
 3. Mulk Raj Anand  
 4. R K Narayan

Question ID : 264330112866  
Option 1 ID : 264330443551  
Option 2 ID : 264330443550  
Option 3 ID : 264330443549  
Option 4 ID : 264330443552  
Status : Answered  
Chosen Option : 4

Q.30 Which Article of the Indian Constitution mentions that it shall be the duty of every citizen of India to develop scientific temper?

- Ans  1. 51 A (j)  
 2. 51 A (k)  
 3. 51 A (h)  
 4. 51 A (i)

Question ID : 264330183150  
Option 1 ID : 264330718334  
Option 2 ID : 264330718335  
Option 3 ID : 264330718332  
Option 4 ID : 264330718333  
Status : Answered  
Chosen Option : 2

Q.31 The Indira Sagar Multipurpose Project is located in which state?

- Ans  1. Madhya Pradesh  
 2. Rajasthan  
 3. Himachal Pradesh  
 4. Tamil Nadu

Question ID : 264330120313  
Option 1 ID : 264330471506  
Option 2 ID : 264330471503  
Option 3 ID : 264330471505  
Option 4 ID : 264330471504  
Status : Marked For Review  
Chosen Option : 2

Q.32 Which of the following is the international partner in the implementation of 'PM Grameen Digital Saksharta Abhiyan'?

- Ans
- 1. UNDP
  - 2. World Bank
  - 3. UNESCO
  - 4. UNICEF

Question ID : 264330111590  
Option 1 ID : 264330438448  
Option 2 ID : 264330438447  
Option 3 ID : 264330438446  
Option 4 ID : 264330438445  
Status : Answered  
Chosen Option : 1

Q.33 Which part of the Constitution of India states that the citizen has to defend the country and render national service when called upon to do so?

- Ans
- 1. Part III A
  - 2. Part IV A
  - 3. Part II A
  - 4. Part V A

Question ID : 264330110783  
Option 1 ID : 264330435410  
Option 2 ID : 264330435411  
Option 3 ID : 264330435409  
Option 4 ID : 264330435412  
Status : Answered  
Chosen Option : 2

Q.34 Who among the following founded the Ramakrishna Mission in 1897?

- Ans
- 1. Sri Aurobindo
  - 2. Swami Vivekananda
  - 3. Sri Ramakrishna Paramhansa
  - 4. Raja Ram Mohan Roy

Question ID : 264330119007  
Option 1 ID : 264330466685  
Option 2 ID : 264330466684  
Option 3 ID : 264330466683  
Option 4 ID : 264330466686  
Status : Answered  
Chosen Option : 3

Q.35 \_\_\_\_\_ wrote a three-volume history of Akbar's reign, titled 'Akbar Nama'.

- Ans
- 1. Humayun
  - 2. Abul Fazl
  - 3. Bahadur Shah II
  - 4. Faizi

Question ID : 264330119769  
Option 1 ID : 264330469353  
Option 2 ID : 264330469352  
Option 3 ID : 264330469354  
Option 4 ID : 264330469351  
Status : Answered  
Chosen Option : 2

Q.36 Which Mughal emperor is known for designing a series of inlays behind his throne in the court at Delhi that depicted the legendary Greek god Orpheus playing the lute?

- Ans
- 1. Babur
  - 2. Humayun
  - 3. Shah Jahan
  - 4. Akbar

Question ID : 264330141814  
Option 1 ID : 264330555575  
Option 2 ID : 264330555578  
Option 3 ID : 264330555576  
Option 4 ID : 264330555577  
Status : Answered  
Chosen Option : 4

Q.37 The Dachigam National Park is best known as the home of the \_\_\_\_\_.

- Ans
- 1. hangul
  - 2. rhinoceros
  - 3. lion
  - 4. crocodile

Question ID : 264330181226  
Option 1 ID : 264330710830  
Option 2 ID : 264330710827  
Option 3 ID : 264330710828  
Option 4 ID : 264330710829  
Status : Marked For Review  
Chosen Option : 1

Q.38 Under which of the following Articles can a person directly approach the Supreme Court for the enforcement of his Fundamental Rights?

- Ans
- 1. Article 34
  - 2. Article 31
  - 3. Article 32
  - 4. Article 33

Question ID : 264330120097  
Option 1 ID : 264330470646  
Option 2 ID : 264330470643  
Option 3 ID : 264330470644  
Option 4 ID : 264330470645  
Status : Answered  
Chosen Option : 3

Q.39 Abdel Fattah al-Sisi, the Chief Guest of the Republic Day 2023 celebration in Delhi, is associated with which country?

- Ans
- 1. Syria
  - 2. Bahrain
  - 3. Egypt
  - 4. Israel

Question ID : 264330134251  
Option 1 ID : 264330526000  
Option 2 ID : 264330526002  
Option 3 ID : 264330526001  
Option 4 ID : 264330525999  
Status : Answered  
Chosen Option : 3

**Q.40** Mount Fuji, the highest mountain in Japan, which is made of felsic to intermediate rock, represents which type of volcanoes?

- Ans  1. Composite  
 2. Shield  
 3. Fissure  
 4. Cinder cone

Question ID : 264330141739  
Option 1 ID : 264330555276  
Option 2 ID : 264330555277  
Option 3 ID : 264330555278  
Option 4 ID : 264330555275  
Status : Marked For Review  
Chosen Option : 3

**Q.41** Identify the Navratna of Akbar's court who played a pivotal role in the development of the classical genre of Hindustani music.

- Ans  1. Tansen  
 2. Swami Haridas  
 3. Mirabai  
 4. Amir Khusro

Question ID : 264330111184  
Option 1 ID : 264330436822  
Option 2 ID : 264330436821  
Option 3 ID : 264330436824  
Option 4 ID : 264330436823  
Status : Answered  
Chosen Option : 1

**Q.42** In 1991, India met with an economic crisis due to \_\_\_\_\_.

- Ans  1. political instability  
 2. the rise in foreign exchange reserves  
 3. low inflation  
 4. huge debts burden

Question ID : 264330110019  
Option 1 ID : 264330432356  
Option 2 ID : 264330432353  
Option 3 ID : 264330432354  
Option 4 ID : 264330432355  
Status : Answered  
Chosen Option : 4

**Q.43** Which of the following layers is important for living things?

- Ans  1. Troposphere  
 2. Mesosphere  
 3. Exosphere  
 4. Stratosphere

Question ID : 264330116376  
Option 1 ID : 264330457591  
Option 2 ID : 264330457590  
Option 3 ID : 264330457589  
Option 4 ID : 264330457592  
Status : Answered  
Chosen Option : 4

**Q.44** During the Fourth Five-Year Plan, the process of nationalisation of banks took place. How many banks were nationalised during this period?

- Ans  1. 6  
 2. 14  
 3. 10  
 4. 20

Question ID : 264330109387  
Option 1 ID : 264330429825  
Option 2 ID : 264330429827  
Option 3 ID : 264330429826  
Option 4 ID : 264330429828  
Status : Answered  
Chosen Option : 2

**Q.45** According to the census of India 2011, select the Union Territory that had less than 1 lakh population?

- Ans  1. Daman and Diu  
 2. Lakshadweep  
 3. Dadra and Nagar Haveli  
 4. Puducherry

Question ID : 264330120327  
Option 1 ID : 264330471561  
Option 2 ID : 264330471562  
Option 3 ID : 264330471560  
Option 4 ID : 264330471559  
Status : Answered  
Chosen Option : 2

**Q.46** According to the census of India 2011, what is the female literacy rate in Dadra and Nagar Haveli?

- Ans  1. 61.12%  
 2. 76.48%  
 3. 68.43%  
 4. 64.32%

Question ID : 264330120478  
Option 1 ID : 264330472165  
Option 2 ID : 264330472163  
Option 3 ID : 264330472166  
Option 4 ID : 264330472164  
Status : Answered  
Chosen Option : 1

**Q.47** What is the tenure of the President of India?

- Ans  1. 2 years  
 2. 6 years  
 3. 5 years  
 4. 10 years

Question ID : 264330173514  
Option 1 ID : 264330680535  
Option 2 ID : 264330680537  
Option 3 ID : 264330680536  
Option 4 ID : 264330680538  
Status : Answered  
Chosen Option : 3

Q.48 In which of the following years was the Vernacular Press Act passed?

- Ans  1. 1878  
 2. 1859  
 3. 1902  
 4. 1919

Question ID : 264330118596  
Option 1 ID : 264330465636  
Option 2 ID : 264330465635  
Option 3 ID : 264330465637  
Option 4 ID : 264330465638  
Status : Answered  
Chosen Option : 1

Q.49 Which of the following powers is NOT enjoyed by the Governor of a State?

- Ans  1. Judiciary powers  
 2. Executive powers  
 3. Diplomatic/Military powers  
 4. Legislative powers

Question ID : 264330120510  
Option 1 ID : 264330472293  
Option 2 ID : 264330472291  
Option 3 ID : 264330472294  
Option 4 ID : 264330472292  
Status : Answered  
Chosen Option : 3

Q.50 For which of the following dance forms was Gaddam Padmaja Reddy awarded the Padma Shri in 2022?

- Ans  1. Kuchipudi  
 2. Kathak  
 3. Bharatanatyam  
 4. Sattriya

Question ID : 264330111973  
Option 1 ID : 264330439978  
Option 2 ID : 264330439979  
Option 3 ID : 264330439977  
Option 4 ID : 264330439980  
Status : Answered  
Chosen Option : 1

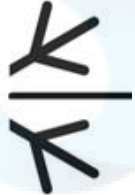
Section : Reasoning

Q.1 Which of the following option figures will complete the pattern in the figure given below?

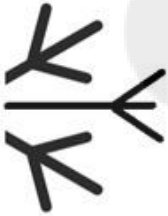


Ans

X 1.



X 2.



✓ 3.



X 4.



Question ID : 26433080604

Option 1 ID : 264330316349

Option 2 ID : 264330316352

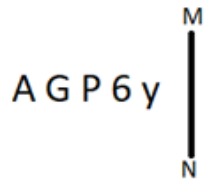
Option 3 ID : 264330316351

Option 4 ID : 264330316350

Status : Answered

Chosen Option : 3

Q.2 Select the correct mirror image of the given figure when the mirror is placed at MN as shown below.



- Ans
- 1.  $\gamma \partial \rho \rho \nabla$
  - 2.  $\gamma \partial G P A$
  - 3.  $\nabla \rho \epsilon \beta \nabla$
  - 4.  $\gamma \partial \rho \rho A$

Question ID : 26433016662

Option 1 ID : 264330653687

Option 2 ID : 264330653688

Option 3 ID : 264330653690

Option 4 ID : 264330653689

Status : Answered

Chosen Option : 4

Q.3 Select the option that is related to the fifth number in the same way as the second number is related to the first number and fourth number is related to the third number.  
64 : 23 :: 121 : 26 :: 256 : ?

- Ans
- 1. 27
  - 2. 31
  - 3. 29
  - 4. 33

Question ID : 264330102517

Option 1 ID : 264330402499

Option 2 ID : 264330402498

Option 3 ID : 264330402497

Option 4 ID : 264330402500

Status : Not Attempted and Marked For Review

Chosen Option : --

Q.4 Which of the following terms will replace the question mark (?) in the given series?  
RNVG, PPRK, ?, LTJS, JVFW

- Ans
- 1. MSNP
  - 2. NSNP
  - 3. MRMO
  - 4. NRNO

Question ID : 264330102186

Option 1 ID : 264330401212

Option 2 ID : 264330401211

Option 3 ID : 264330401209

Option 4 ID : 264330401210

Status : Answered

Chosen Option : 4

Q.5 Which two signs should be interchanged to make the following equation correct?

$$6 + 108 \div 12 - 24 \times 8 = 38$$

- Ans
- 1. - and  $\times$
  - 2. - and +
  - 3. + and -
  - 4. + and  $\times$

Question ID : 264330101079

Option 1 ID : 264330396863

Option 2 ID : 264330396862

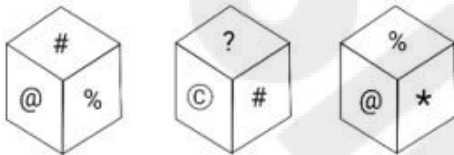
Option 3 ID : 264330396861

Option 4 ID : 264330396864

Status : Answered

Chosen Option : 4

Q.6 A cube (dice) has six different symbols drawn over its six faces. Three different positions of this cube are shown in the given figure. Which symbol is on the face opposite to '\*' (star)?



- Ans
- 1. %
  - 2. ?
  - 3. @
  - 4. #

Question ID : 264330113148

Option 1 ID : 264330444678

Option 2 ID : 264330444680

Option 3 ID : 264330444679

Option 4 ID : 264330444677

Status : Answered

Chosen Option : 4

Q.7 Select the figure that will replace the question mark (?) in the following figure series.



Ans

- 1.
- 2.
- 3.
- 4.

Question ID : 264330112032  
Option 1 ID : 264330440213  
Option 2 ID : 264330440216  
Option 3 ID : 264330440214  
Option 4 ID : 264330440215  
Status : Answered  
Chosen Option : 3

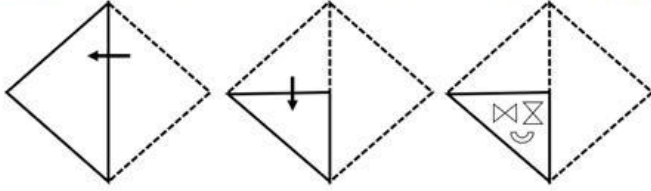
Q.8 Select the number from among the given options that can replace the question mark (?) in the following series.

300000, 90000, 27000, 8100, 2430, ?

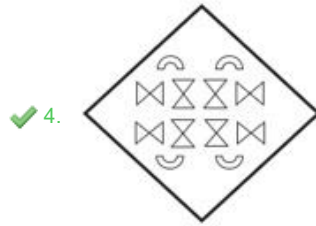
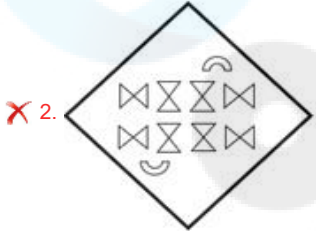

- Ans
- 1. 645
  - 2. 729
  - 3. 3255
  - 4. 323

Question ID : 264330109751  
Option 1 ID : 264330431284  
Option 2 ID : 264330431282  
Option 3 ID : 264330431283  
Option 4 ID : 264330431281  
Status : Answered  
Chosen Option : 2

Q.9 A paper is folded and cut as shown below. How will it appear when unfolded?



Ans



Question ID : 26433076504

Option 1 ID : 264330300081

Option 2 ID : 264330300083

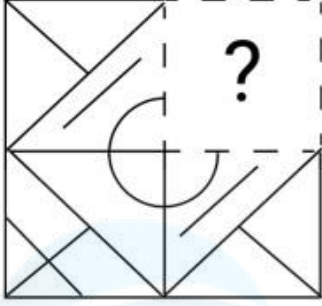
Option 3 ID : 264330300080

Option 4 ID : 264330300082

Status : Answered

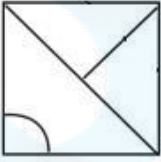
Chosen Option : 4

Q.10 Select the figure from the options that can replace the question mark (?) and complete the given pattern.



Ans

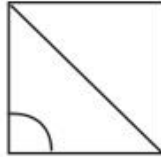
✗ 1.



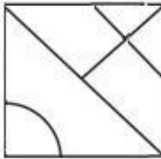
✗ 2.



✗ 3.



✓ 4.



Question ID : 264330106464

Option 1 ID : 264330418157

Option 2 ID : 264330418160

Option 3 ID : 264330418159

Option 4 ID : 264330418158

Status : Answered

Chosen Option : 4

Q.11 छह विद्यार्थी एक गोल मेज के परितः केंद्र की ओर अभिमुख होकर बैठे हैं। योजना और योगिता दोनों की निकटतम पड़ोसी यामिनी है। यशमिता, योजना के बाएं से दूसरे स्थान पर बैठी है। युक्ति, यामिनी के दाएं से दूसरे स्थान पर बैठी है। यश्वी, योगिता के दाएं से तीसरे स्थान पर बैठी है। युक्ति और यामिनी दोनों का निकटतम पड़ोसी कौन है?

Ans ✗ 1. यशमिता

✗ 2. योजना

✓ 3. योगिता

✗ 4. यश्वी

Question ID : 264330110716

Option 1 ID : 264330435143

Option 2 ID : 264330435144

Option 3 ID : 264330435141

Option 4 ID : 264330435142

Status : Answered

Chosen Option : 3

Q.12 Which figure should replace the question mark (?) if the following series were to be continued?

C	S	P	D	K	P	V	S	Z	V											
P	K	X	D	Z	C	S	V	V	Z	C	S	X	K	P	D	D	X	K	P	?
Z		V	K		X	X		D	Z		C	C		S						

Ans

✓ 1.

D	P		
C	Z	V	S
X	K		

✗ 2.

C	S		
Z	K	X	V
D	P		

✗ 3.

C	S		
P	K	X	D
Z	V		

✗ 4.

D	P		
C	X	K	S
Z	V		

Question ID : 264330103863

Option 1 ID : 264330407754

Option 2 ID : 264330407753

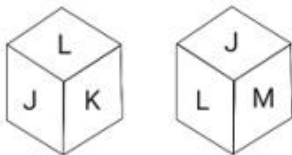
Option 3 ID : 264330407756

Option 4 ID : 264330407755

Status : Not Answered

Chosen Option : --

Q.13 Six letters, J, K, L, M, N and O, are written on the different faces of a dice. Two positions of this dice are shown in the given figure. Find the letter on the face opposite to K?



- Ans
- ✗ 1. N
  - ✓ 2. M
  - ✗ 3. L
  - ✗ 4. J

Question ID : 264330113147

Option 1 ID : 264330444676

Option 2 ID : 264330444673

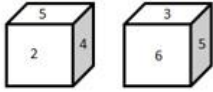
Option 3 ID : 264330444674

Option 4 ID : 264330444675

Status : Answered

Chosen Option : 2

Q.14 A dice with six faces is marked with six numbers 1, 2,3,4,5 and 6, respectively. It is rolled 2 times and lands on the positions shown below. Which number is on the opposite plane of 5?



Ans  1. 1

2. 6

3. 2

4. 3

Question ID : 264330110543

Option 1 ID : 264330434452

Option 2 ID : 264330434450

Option 3 ID : 264330434449

Option 4 ID : 264330434451

Status : Not Attempted and Marked For Review

Chosen Option : --

Q.15 If A denotes  $\div$ , B denotes  $\times$ , C denotes  $+$  and D denotes  $-$ , then what will be the value of the following equation?  
8 B 8 A 4 C 5 D 3 =?

Ans  1. 17

2. 19

3. 21

4. 18

Question ID : 26433085652

Option 1 ID : 264330336312

Option 2 ID : 264330336309

Option 3 ID : 264330336311

Option 4 ID : 264330336310

Status : Answered

Chosen Option : 4

Q.16 Select the correct mirror image of the given combination when the mirror is placed at 'PQ' as shown below.



Ans  1. KRCRKA

2. KRCRKA

3. KRCRKA

4. KRCRKA

Question ID : 264330129819

Option 1 ID : 264330508508

Option 2 ID : 264330508509

Option 3 ID : 264330508507

Option 4 ID : 264330508510

Status : Answered

Chosen Option : 4

Q.17 In a certain code language, if BEAUTY is coded as 3-6-2-22-21-26 and CREAM is coded as 4-19-6-2-14, then how will HONESTY be coded?

- Ans
- 1. 8-15-14-5-19-20-25
  - 2. 7-14-14-4-19-19-24
  - 3. 7-14-13-4-18-19-24
  - 4. 9-16-15-6-20-21-26

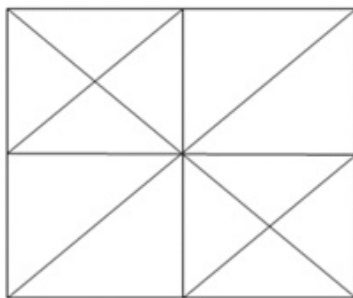
Question ID : 26433097448  
Option 1 ID : 264330382481  
Option 2 ID : 264330382484  
Option 3 ID : 264330382482  
Option 4 ID : 264330382483  
Status : Answered  
Chosen Option : 4

Q.18 Select the option that is related to the fifth letter-cluster in the same way as the second letter-cluster is related to the first letter-cluster and the fourth letter-cluster is related to the third letter-cluster.  
TRUE : RPSC :: COPY : AMNW :: MIND : ?

- Ans
- 1. KGKB
  - 2. KGLB
  - 3. KGLA
  - 4. KGKA

Question ID : 26433076464  
Option 1 ID : 264330299923  
Option 2 ID : 264330299921  
Option 3 ID : 264330299920  
Option 4 ID : 264330299922  
Status : Answered  
Chosen Option : 2

Q.19 How many triangles are there in the following figure?



- Ans
- 1. 23
  - 2. 28
  - 3. 25
  - 4. 20

Question ID : 26433069080  
Option 1 ID : 264330270834  
Option 2 ID : 264330270833  
Option 3 ID : 264330270835  
Option 4 ID : 264330270832  
Status : Answered  
Chosen Option : 2

Q.20 Identify the figure given in the options which when put in place of the question mark (?), will logically complete the series.

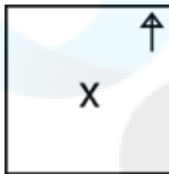
	X	X			
↑	↑		↑	↑	?
	X			X	

Ans

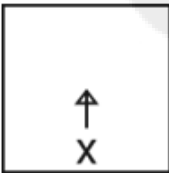
✗ 1.



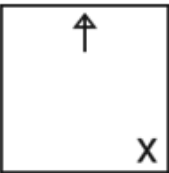
✓ 2.



✗ 3.



✗ 4.



Question ID : 264330178425

Option 1 ID : 264330699745

Option 2 ID : 264330699744

Option 3 ID : 264330699746

Option 4 ID : 264330699743

Status : Answered

Chosen Option : 2

**Q.21** Three statements are given followed by conclusions numbered 1, 2 and 3. Assuming the statements to be true, even if they seem to be at variance with commonly known facts, decide which of the conclusions logically follow(s) from the statements.

**Statements:**

1. All books are journals.
2. All journals are novels.
3. Some poems are novels.

**Conclusions:**

1. Some novels are books.
2. Some poems are journals.
3. All the journals are books.

- Ans**
- 1. Both conclusions 1 and 2 follow.
  - 2. Both conclusions 2 and 3 follow.
  - 3. Only conclusion 2 follows
  - 4. Only conclusion 1 follows.

Question ID : 26433068089

Option 1 ID : 264330266868

Option 2 ID : 264330266869

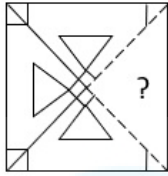
Option 3 ID : 264330266870

Option 4 ID : 264330266871

Status : Answered

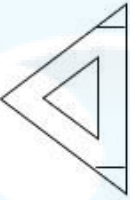
Chosen Option : 1

**Q.22** Select the option figure that will replace the question mark (?) in the figure given below to complete the pattern.

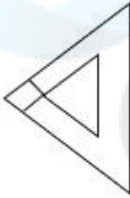


**Ans**

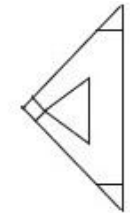
✗ 1.



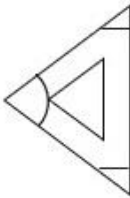
✗ 2.



✓ 3.



✗ 4.



Question ID : 26433080838

Option 1 ID : 264330317287

Option 2 ID : 264330317285

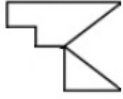
Option 3 ID : 264330317288

Option 4 ID : 264330317286

Status : Answered

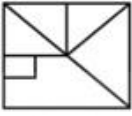
Chosen Option : 3

Q.23 Select the option in which the given figure is embedded (rotation is NOT allowed).

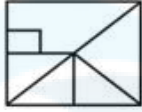


Ans

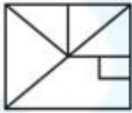
✗ 1.



✓ 2.



✗ 3.



✗ 4.



Question ID : 264330101169

Option 1 ID : 264330397223

Option 2 ID : 264330397222

Option 3 ID : 264330397221

Option 4 ID : 264330397224

Status : Answered

Chosen Option : 2

Q.24 Select the set in which the numbers are related in the same way as are the numbers of the following sets.

(NOTE : Operations should be performed on the whole numbers, without breaking down the numbers into its constituent digits. E.g. 13 – Operations on 13 such as adding /deleting /multiplying etc. to 13 can be performed. Breaking down 13 into 1 and 3 and then performing mathematical operations on 1 and 3 is not allowed.)

(6, 36, 144)

(9, 81, 324)

Ans ✗ 1. (14, 196, 764)

✓ 2. (14, 196, 784)

✗ 3. (14, 186, 784)

✗ 4. (15, 195, 784)

Question ID : 264330175040

Option 1 ID : 264330686537

Option 2 ID : 264330686535

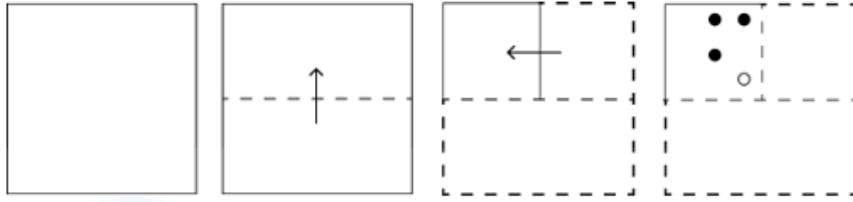
Option 3 ID : 264330686538

Option 4 ID : 264330686536

Status : Answered

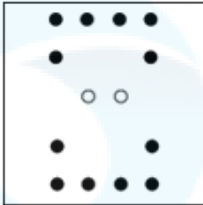
Chosen Option : 2

Q.25 A square sheet of paper is folded along the dotted line successively along the directions shown and is then punched in the last. How would the paper look when unfolded?

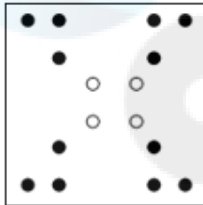


Ans


✗ 1.



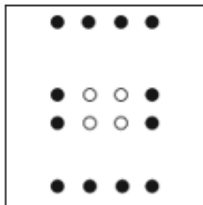
✗ 2.



✓ 3.



✗ 4.



Question ID : 264330172429

Option 1 ID : 264330676269

Option 2 ID : 264330676270

Option 3 ID : 264330676268

Option 4 ID : 264330676267

Status : Answered

Chosen Option : 3

Q.1 एक कार अपनी वास्तविक चाल के  $\frac{5}{8}$  से चलते हुए 1 घंटा 20 मिनट 40 सेकंड में 52 km की दूरी तय करती है। कार की वास्तविक चाल (km/h में) कितनी है?

- Ans
- 1. 65.82
  - 2. 61.88
  - 3. 68.78
  - 4. 75.87

Question ID : 264330106079

Option 1 ID : 264330416617

Option 2 ID : 264330416618

Option 3 ID : 264330416619

Option 4 ID : 264330416620

Status : Not Attempted and Marked For Review

Chosen Option : --

Q.2 दसवीं कक्षा की एक परीक्षा में सभी विद्यार्थियों के औसत अंक 85 हैं। यदि सभी लड़कियों के अंकों का योग 3500 है और लड़कों के अंकों का योग 2025 है, तो कक्षा में विद्यार्थियों की संख्या ज्ञात कीजिए।

- Ans
- 1. 55
  - 2. 65
  - 3. 68
  - 4. 64

Question ID : 264330168959

Option 1 ID : 264330662639

Option 2 ID : 264330662641

Option 3 ID : 264330662642

Option 4 ID : 264330662640

Status : Answered

Chosen Option : 2

Q.3 एक दुकानदार किसी वस्तु का अंकित मूल्य उसके क्रय मूल्य से 45% अधिक पर निर्धारित करता है। 16% लाभ प्राप्त करने के लिए कितने प्रतिशत छूट दी जाएगी?

- Ans
- 1. 26%
  - 2. 29%
  - 3. 25%
  - 4. 20%

Question ID : 264330108885

Option 1 ID : 264330427820

Option 2 ID : 264330427819

Option 3 ID : 264330427818

Option 4 ID : 264330427817

Status : Answered

Chosen Option : 4

Q.4 यदि  $483y718$ , अभाज्य संख्या 11 से विभाज्य है, जहाँ  $y$  एक अंक है, तो  $y$  का मान ज्ञात करें।

- Ans
- 1. 4
  - 2. 3
  - 3. 5
  - 4. 2

Question ID : 264330104349  
Option 1 ID : 264330409699  
Option 2 ID : 264330409698  
Option 3 ID : 264330409700  
Option 4 ID : 264330409697  
Status : Answered  
Chosen Option : 4

Q.5 ₹54,000 के मूलधन पर 2 वर्ष की अवधि के लिए समान वार्षिक ब्याज दर पर चक्रवृद्धि ब्याज और साधारण ब्याज के बीच का अंतर ₹1,215 है। ब्याज दर ज्ञात करें।

- Ans
- 1. 18%
  - 2. 10%
  - 3. 15%
  - 4. 12%

Question ID : 264330103987  
Option 1 ID : 264330408252  
Option 2 ID : 264330408249  
Option 3 ID : 264330408251  
Option 4 ID : 264330408250  
Status : Not Attempted and Marked For Review  
Chosen Option : --

Q.6 वह बड़ी से बड़ी संख्या ज्ञात करें, जो 60, 135 और 235 को विभाजित करने पर हर मामले में एक समान शेषफल देती है।

- Ans
- 1. 35
  - 2. 45
  - 3. 25
  - 4. 50

Question ID : 264330103914  
Option 1 ID : 264330407959  
Option 2 ID : 264330407960  
Option 3 ID : 264330407957  
Option 4 ID : 264330407958  
Status : Answered  
Chosen Option : 3

Q.7 AB = AC और शीर्षलम्ब AD = 9 cm वाले एक समद्विबाहु त्रिभुज ABC का क्षेत्रफल  $36 \text{ cm}^2$  है। इसका परिमाण क्या है?

- Ans
- 1.  $4 + 2\sqrt{97}$  cm
  - 2.  $10 + \sqrt{97}$  cm
  - 3.  $8 + 2\sqrt{97}$  cm
  - 4.  $6 + 2\sqrt{97}$  cm

Question ID : 264330119356

Option 1 ID : 264330467711

Option 2 ID : 264330467714

Option 3 ID : 264330467713

Option 4 ID : 264330467712

Status : Not Attempted and Marked For Review

Chosen Option : --

Q.8 The LCM of 148 and 205 is:

- Ans
- 1. 32640
  - 2. 25441
  - 3. 28540
  - 4. 30340

Question ID : 264330106059

Option 1 ID : 264330416538

Option 2 ID : 264330416537

Option 3 ID : 264330416540

Option 4 ID : 264330416539

Status : Answered

Chosen Option : 4

Q.9 दो उम्मीदवारों के बीच हुए एक चुनाव में, जीतने वाले उम्मीदवार को डाले गए मतों के 60% मत प्राप्त हुए और उसने 18,600 मतों से जीत दर्ज की। हारने वाले उम्मीदवार को कितने मत प्राप्त हुए?

- Ans
- 1. 36,400
  - 2. 34,600
  - 3. 37,200
  - 4. 35,800

Question ID : 264330129400

Option 1 ID : 264330506968

Option 2 ID : 264330506966

Option 3 ID : 264330506969

Option 4 ID : 264330506967

Status : Answered

Chosen Option : 3

Q.10 राहुल के पास 12 केले हैं। वह उनमें से x केलों को 20% के लाभ पर और शेष को 20% की हानि पर बेचता है। उसे पूरे परिव्यय पर 10% का लाभ होता है। x का मान ज्ञात कीजिए।

Ans  1. 10

2. 7

3. 9

4. 8

Question ID : 264330109533

Option 1 ID : 264330430412

Option 2 ID : 264330430409

Option 3 ID : 264330430411

Option 4 ID : 264330430410

Status : Answered

Chosen Option : 3

Q.11 एक पाइप को दो टुकड़ों में काटा जाता है। यदि छोटा टुकड़ा पाइप की लंबाई का 40% है तो छोटा टुकड़ा बड़े टुकड़े से कितने प्रतिशत छोटा है?

Ans  1.  $33\frac{1}{3}\%$

2.  $31\frac{2}{3}\%$

3.  $28\frac{2}{3}\%$

4.  $25\frac{1}{3}\%$

Question ID : 264330118202

Option 1 ID : 264330464623

Option 2 ID : 264330464625

Option 3 ID : 264330464624

Option 4 ID : 264330464626

Status : Answered

Chosen Option : 4

Q.12 यदि किसी पुस्तक के एक कॉलम में प्रिंट की गई 9 पंक्तियों में 36 शब्द हैं, तो 51 पंक्तियों के एक कॉलम में कितने शब्द होंगे?

Ans  1. 192

2. 196

3. 204

4. 208

Question ID : 264330182573

Option 1 ID : 264330716083

Option 2 ID : 264330716084

Option 3 ID : 264330716085

Option 4 ID : 264330716086

Status : Answered

Chosen Option : 3

Q.13 3 cm, 6 cm और 7 cm भुजाओं वाले त्रिभुज का क्षेत्रफल (cm<sup>2</sup> में) ज्ञात करें।

Ans  1.  $5\sqrt{6}$

2. 4

3.  $\sqrt{5}$

4.  $4\sqrt{5}$

Question ID : 264330103997

Option 1 ID : 264330408292

Option 2 ID : 264330408290

Option 3 ID : 264330408291

Option 4 ID : 264330408289

Status : Not Attempted and  
Marked For Review

Chosen Option : --

Q.14 किस वार्षिक ब्याज दर पर ₹1,300 की राशि पर 10 वर्षों में साधारण ब्याज के रूप में ₹650 प्राप्त होगा?

Ans  1. 7%

2. 8%

3. 4%

4. 5%

Question ID : 264330182518

Option 1 ID : 264330715865

Option 2 ID : 264330715866

Option 3 ID : 264330715863

Option 4 ID : 264330715864

Status : Answered

Chosen Option : 4

Q.15 ₹1,900 की एक धनराशि को A, B और C में इस प्रकार बांटा जाता है कि B को A से ₹100 अधिक मिलते हैं और C को B से ₹200 अधिक मिलते हैं। उनके हिस्सों का अनुपात क्या है?

Ans  1. 5 : 6 : 8

2. 4 : 5 : 7

3. 5 : 7 : 8

4. 6 : 7 : 9

Question ID : 264330129428

Option 1 ID : 264330507078

Option 2 ID : 264330507079

Option 3 ID : 264330507081

Option 4 ID : 264330507080

Status : Answered

Chosen Option : 1

Q.1 एमएस एक्सेल 365 (MS Excel 365) में, एमएस एक्सेल (MS Excel) का निम्नलिखित में से कौन-सा चार्ट, ऐसे डेटा के विभिन्न आइटम (items) की तुलना करता है, जो समयावधि के साथ बदलते हैं और जिसमें कैटेगरी (categories) को क्षेत्रीय अक्ष तथा वैल्यू को ऊर्ध्वाधर अक्ष में व्यवस्थित किया जाता है?

- Ans
- 1. लाइन चार्ट (Line chart)
  - 2. कॉलम चार्ट (Column chart)
  - 3. पाई चार्ट (Pie chart)
  - 4. बार चार्ट (Bar chart)

Question ID : 264330180403  
Option 1 ID : 264330707582  
Option 2 ID : 264330707580  
Option 3 ID : 264330707581  
Option 4 ID : 264330707579  
Status : Answered  
Chosen Option : 1

Q.2 In MS Excel 365, how can we change page orientation in Print Preview?

- Ans
- 1. By using Show Margins
  - 2. By using Page Setup dialog box
  - 3. By using Zoom
  - 4. By using Print dialog box

Question ID : 264330182048  
Option 1 ID : 264330714033  
Option 2 ID : 264330714031  
Option 3 ID : 264330714034  
Option 4 ID : 264330714032  
Status : Answered  
Chosen Option : 4

Q.3 Which of the following parts of the email contains the address of the sender and recipient?

- Ans
- 1. Body
  - 2. Header
  - 3. Footer
  - 4. Complimentary close

Question ID : 264330175929  
Option 1 ID : 264330690013  
Option 2 ID : 264330690012  
Option 3 ID : 264330690014  
Option 4 ID : 264330690011  
Status : Answered  
Chosen Option : 2

**Q.4 Which wireless technology allows devices to connect to the internet within the limited range of a wireless router?**

- Ans
- 1. DSL
  - 2. LTE
  - 3. Wi-Fi
  - 4. 3G

Question ID : 264330182107  
Option 1 ID : 264330714269  
Option 2 ID : 264330714267  
Option 3 ID : 264330714270  
Option 4 ID : 264330714268  
Status : Answered  
Chosen Option : 3

**Q.5 What is the general functionality of Mail Merge in the MS-Word 365?**

- Ans
- 1. To restore the deleted emails
  - 2. To delete and remove bulk emails
  - 3. To create and receive bulk emails
  - 4. To create and send bulk emails

Question ID : 264330171413  
Option 1 ID : 264330672269  
Option 2 ID : 264330672267  
Option 3 ID : 264330672270  
Option 4 ID : 264330672268  
Status : Answered  
Chosen Option : 4

**Q.6 Which area in MS-Word 365 contains icons for common tasks and actions, providing quick access to frequently used commands?**

- Ans
- 1. Status Bar
  - 2. Ribbon
  - 3. Navigation Pane
  - 4. Quick Access Toolbar

Question ID : 264330173360  
Option 1 ID : 264330679919  
Option 2 ID : 264330679920  
Option 3 ID : 264330679922  
Option 4 ID : 264330679921  
Status : Answered  
Chosen Option : 4

**Q.7 What is the definition of a workbook in Microsoft Excel 365?**

- Ans
- 1. A workbook is a group of cells.
  - 2. A workbook is a group of worksheets.
  - 3. A workbook is a group of blocks.
  - 4. A workbook is a group of rows.

Question ID : 264330182046  
Option 1 ID : 264330714024  
Option 2 ID : 264330714025  
Option 3 ID : 264330714026  
Option 4 ID : 264330714023  
Status : Answered  
Chosen Option : 2

Q.8 Which of the following is used in MS Word 365 to split text into two or more columns?

- Ans
- 1. Rows
  - 2. Columns
  - 3. Margins
  - 4. Orientation

Question ID : 264330176712  
Option 1 ID : 264330693063  
Option 2 ID : 264330693064  
Option 3 ID : 264330693066  
Option 4 ID : 264330693065  
Status : Answered  
Chosen Option : 3

Q.9 Which option is used to paste copied text at a specific location in Microsoft Word 365?

- Ans
- 1. Paste As Hyperlink
  - 2. Paste Link
  - 3. Paste Special
  - 4. Paste Destination Styles

Question ID : 264330180705  
Option 1 ID : 264330708789  
Option 2 ID : 264330708788  
Option 3 ID : 264330708787  
Option 4 ID : 264330708790  
Status : Answered  
Chosen Option : 1

Q.10 What is the shortcut key to initiate a spelling check in Microsoft Word 365?

- Ans
- 1. F8
  - 2. F7
  - 3. F5
  - 4. F6

Question ID : 264330173584  
Option 1 ID : 264330680818  
Option 2 ID : 264330680817  
Option 3 ID : 264330680815  
Option 4 ID : 264330680816  
Status : Answered  
Chosen Option : 2