

Constable Executive Male and Female in Delhi Police Examination 2023

Roll Number	
Candidate Name	
Venue Name	
Exam Date	29/11/2023
Exam Time	12:00 PM - 1:30 PM
Subject	Constable Executive Male and Female in Delhi Police Examination 2023

Section : General Knowledge

Q.1 Who among the following is the founder of the Vrindavan Gurukul in Mumbai and Vrindavan Gurukul in Bhubaneshwar?

- Ans
- 1. Shivkumar Sharma
 - 2. M Balamurlikrishnan
 - 3. Hariprasad Chaurasia
 - 4. Bhimsen Joshi

Question ID : 264330114313
Option 1 ID : 264330449337
Option 2 ID : 264330449340
Option 3 ID : 264330449339
Option 4 ID : 264330449338
Status : Answered
Chosen Option : 2

Q.2 In 1889, _____ established the Mukti Mission, in Pune, a refuge for young widows who had been deserted and abused by their families.

- Ans
- 1. Pandita Ramabai
 - 2. Laxmi Sehgal
 - 3. Sarojini Naidu
 - 4. Kasturba Gandhi

Question ID : 264330114116
Option 1 ID : 264330448549
Option 2 ID : 264330448552
Option 3 ID : 264330448550
Option 4 ID : 264330448551
Status : Answered
Chosen Option : 1

Q.3 Which of the following is NOT an objective of the Fundamental Rights which are mentioned in the Indian Constitution?

- Ans
- 1. Promote the ideal of political democracy
 - 2. Prevent the establishment of an authoritarian and despotic rule
 - 3. Establish a government of laws and not of men
 - 4. Drive the citizens towards the objectives of the government

Question ID : 264330114756
Option 1 ID : 264330451109
Option 2 ID : 264330451110
Option 3 ID : 264330451111
Option 4 ID : 264330451112
Status : Answered
Chosen Option : 2

Q.4 The tribal dance Daang is associated with which Indian state?

- Ans 1. Gujarat
 2. Odisha
 3. Madhya Pradesh
 4. Karnataka

Question ID : 264330132395
Option 1 ID : 264330518676
Option 2 ID : 264330518675
Option 3 ID : 264330518677
Option 4 ID : 264330518678
Status : Answered
Chosen Option : 4

Q.5 Due to the need for irrigation facilities and pesticides/fertilisers, the first phase of the Green Revolution benefitted few affluent states such as _____.

- Ans 1. Punjab, Andhra Pradesh and Bihar
 2. Punjab, Andhra Pradesh and Tamil Nadu
 3. Punjab, Andhra Pradesh and Uttar Pradesh
 4. Punjab, Arunachal Pradesh and Uttar Pradesh

Question ID : 264330114281
Option 1 ID : 264330449211
Option 2 ID : 264330449212
Option 3 ID : 264330449209
Option 4 ID : 264330449210
Status : Answered
Chosen Option : 3

Q.6 The brittle crust and the top part of the upper mantle of the earth is called:

- Ans 1. asthenosphere
 2. lithosphere
 3. mesosphere
 4. stratosphere

Question ID : 264330131814
Option 1 ID : 264330516355
Option 2 ID : 264330516356
Option 3 ID : 264330516358
Option 4 ID : 264330516357
Status : Answered
Chosen Option : 2

Q.7 Consider the following statements with respect to establishment of SEWA Bank, a microfinance institution in India.

(i) SEWA Bank was established in 1974.

(ii) SEWA Bank was established in Gujarat.

(iii) SEWA Bank was established by the Self-employed Women's Association.

Choose the correct answer.

- Ans 1. Only (iii) is true
2. (i), (ii) and (iii) are true
3. Only (i) is true
4. Only (ii) is true

Question ID : 264330116501
Option 1 ID : 264330458091
Option 2 ID : 264330458092
Option 3 ID : 264330458089
Option 4 ID : 264330458090
Status : Not Answered
Chosen Option : --

Q.8 From which country is the concept of independence of the judiciary in the Indian Constitution taken?

- Ans 1. Australia
2. United States of America
3. Germany
4. South Africa

Question ID : 264330183144
Option 1 ID : 264330718309
Option 2 ID : 264330718311
Option 3 ID : 264330718310
Option 4 ID : 264330718308
Status : Answered
Chosen Option : 2

Q.9 In which Olympics did PV Sindhu win a silver medal?

- Ans 1. 2016 Summer Olympics (Rio)
2. 2008 Summer Olympics (Beijing)
3. 2012 Summer Olympics (London)
4. 2020 Summer Olympics (Tokyo)

Question ID : 264330144214
Option 1 ID : 264330565117
Option 2 ID : 264330565115
Option 3 ID : 264330565118
Option 4 ID : 264330565116
Status : Answered
Chosen Option : 1

Q.10 Which of the following mausoleum shapes was found in the architecture of the Lodhi dynasty?

- Ans 1. Cylindrical
 2. Octagonal
 3. Circular
 4. Spherical

Question ID : 264330106238
Option 1 ID : 264330417254
Option 2 ID : 264330417256
Option 3 ID : 264330417253
Option 4 ID : 264330417255
Status : Answered
Chosen Option : 4

Q.11 Name the dance form of North-West India in which dancers emulate the movements of snakes?

- Ans 1. Siddi Dhamal
 2. Tera Tali
 3. Garba
 4. Kalbeliya

Question ID : 264330110422
Option 1 ID : 264330433965
Option 2 ID : 264330433967
Option 3 ID : 264330433966
Option 4 ID : 264330433968
Status : Answered
Chosen Option : 4

Q.12 Who among the following is the fourth Chief Election Commissioner of India?

- Ans 1. T Swaminathan
 2. Nagendra Singh
 3. SP Sen Verma
 4. KVK Sundaram

Question ID : 264330139435
Option 1 ID : 264330546174
Option 2 ID : 264330546173
Option 3 ID : 264330546172
Option 4 ID : 264330546171
Status : Not Answered
Chosen Option : --

Q.13 In which of the following cases does revenue deficit occur?

- Ans 1. When the government's total revenue exceeds its expenditure
 2. When the government's revenue is added to its expenditure
 3. When the government's total revenue is less than its expenditure
 4. When the government's total revenue is equal to its expenditure

Question ID : 264330120870
Option 1 ID : 264330473697
Option 2 ID : 264330473698
Option 3 ID : 264330473696
Option 4 ID : 264330473695
Status : Answered
Chosen Option : 3

Q.14 In which year was the Pradhan Mantri Kaushal Vikas Yojana launched?

- Ans
- 1. 2017
 - 2. 2016
 - 3. 2014
 - 4. 2015

Question ID : 264330138079
Option 1 ID : 264330540926
Option 2 ID : 264330540924
Option 3 ID : 264330540925
Option 4 ID : 264330540923
Status : Answered
Chosen Option : 4

Q.15 Kalaguru Bishnu Rabha Award is given by which government in the field of dance and music?

- Ans
- 1. Assam
 - 2. West Bengal
 - 3. Tripura
 - 4. Arunachal Pradesh

Question ID : 26433086664
Option 1 ID : 264330340299
Option 2 ID : 264330340298
Option 3 ID : 264330340297
Option 4 ID : 264330340300
Status : Not Answered
Chosen Option : --

Q.16 The Khilafat Movement started in India _____.

- Ans
- 1. to defend the Islamic caliphate in Turkey
 - 2. to oppose the massacre at Jallianwala Bagh
 - 3. to protest against communal electorates
 - 4. to oppose the restrictions upon freedom of press

Question ID : 264330118996
Option 1 ID : 264330466642
Option 2 ID : 264330466639
Option 3 ID : 264330466641
Option 4 ID : 264330466640
Status : Answered
Chosen Option : 2

Q.17 Chhath Pooja is mainly celebrated in which of these states?

- Ans
- 1. Bihar
 - 2. Haryana
 - 3. Odisha
 - 4. Punjab

Question ID : 264330108884
Option 1 ID : 264330427814
Option 2 ID : 264330427813
Option 3 ID : 264330427816
Option 4 ID : 264330427815
Status : Answered
Chosen Option : 1

Q.18 As per the recent NFHS-5 (2019-21) report, what percentage of children under the age of five are underweight in our country?

- Ans
- 1. 29.2%
 - 2. 32.1%
 - 3. 21.0%
 - 4. 38.1%

Question ID : 264330141710
Option 1 ID : 264330555160
Option 2 ID : 264330555162
Option 3 ID : 264330555161
Option 4 ID : 264330555159
Status : Not Answered
Chosen Option : --

Q.19 Which of the following features conveys the meaning 'creating equalitarian society' ?

- Ans
- 1. Written Constitution
 - 2. Emergency provisions
 - 3. Federal system
 - 4. Fundamental Rights

Question ID : 264330110559
Option 1 ID : 264330434516
Option 2 ID : 264330434513
Option 3 ID : 264330434514
Option 4 ID : 264330434515
Status : Answered
Chosen Option : 4

Q.20 In which of the following countries will you find the Magar and Tharu ethnic communities?

- Ans
- 1. Nepal
 - 2. Afghanistan
 - 3. Bhutan
 - 4. Sri Lanka

Question ID : 264330177917
Option 1 ID : 264330697755
Option 2 ID : 264330697756
Option 3 ID : 264330697757
Option 4 ID : 264330697758
Status : Answered
Chosen Option : 4

Q.21 Which of the following sets consists of only compounds?
A) Sugar solution, Calcium carbonate, Methane, Baking soda
B) Sugar, Calcium carbonate, Methane, Baking soda
C) Sugar solution, Calcium, Methane, Baking soda
D) Sugar solution, Calcium carbonate, Methane, Soda water

Ans 1. A
 2. C
 3. B
 4. D

Question ID : 264330182938
Option 1 ID : 264330717484
Option 2 ID : 264330717486
Option 3 ID : 264330717485
Option 4 ID : 264330717487
Status : Answered
Chosen Option : 1

Q.22 What was the launch year of 'Pandit Deen Dayal Upadhyay Unnat Krishi Shiksha Yojana'?

Ans 1. 2000
 2. 1998
 3. 2016
 4. 2015

Question ID : 264330111585
Option 1 ID : 264330438426
Option 2 ID : 264330438425
Option 3 ID : 264330438428
Option 4 ID : 264330438427
Status : Answered
Chosen Option : 3

Q.23 The city of Kolar in Karnataka is renowned for its _____ mines.

Ans 1. gold
 2. silver
 3. limestone
 4. copper

Question ID : 264330176004
Option 1 ID : 264330690314
Option 2 ID : 264330690311
Option 3 ID : 264330690313
Option 4 ID : 264330690312
Status : Answered
Chosen Option : 3

Q.24 Which article empowers the Supreme Court to exercise the jurisdiction and powers of the federal court under any pre-constitution law?

- Ans
- 1. Article 135
 - 2. Article 139
 - 3. Article 144
 - 4. Article 140

Question ID : 264330166152
Option 1 ID : 264330651675
Option 2 ID : 264330651676
Option 3 ID : 264330651678
Option 4 ID : 264330651677
Status : Not Answered
Chosen Option : --

Q.25 Which climatologist collaborated with Koppen in 1961 to modify the scheme of climate classification?

- Ans
- 1. Nerilie Abram
 - 2. Richard Alley
 - 3. Jacob Bjerknes
 - 4. Rudolf Geiger

Question ID : 264330131013
Option 1 ID : 264330513163
Option 2 ID : 264330513165
Option 3 ID : 264330513164
Option 4 ID : 264330513166
Status : Not Answered
Chosen Option : --

Q.26 In which year did Indian Railways start its first computerised reservation in New Delhi?

- Ans
- 1. 1992
 - 2. 1996
 - 3. 2001
 - 4. 1986

Question ID : 264330181290
Option 1 ID : 264330711083
Option 2 ID : 264330711084
Option 3 ID : 264330711086
Option 4 ID : 264330711085
Status : Answered
Chosen Option : 2

Q.27 Which hymn from the Rigveda was used by the Brahmanas of ancient India to justify the Varna system?

- Ans
- 1. Varna Sukta
 - 2. Brahm Sukta
 - 3. Manas Sukta
 - 4. Purusha Sukta

Question ID : 264330118963
Option 1 ID : 264330466507
Option 2 ID : 264330466508
Option 3 ID : 264330466510
Option 4 ID : 264330466509
Status : Answered
Chosen Option : 1

Q.28 IR-8 is a dwarf variety of which crop?

- Ans 1. Maize
 2. Rice
 3. Barley
 4. Wheat

Question ID : 264330109402
Option 1 ID : 264330429888
Option 2 ID : 264330429885
Option 3 ID : 264330429887
Option 4 ID : 264330429886
Status : Answered
Chosen Option : 2

Q.29 The Olympic Games was organised in Asia for the first time in _____.

- Ans 1. 1968
 2. 1956
 3. 1960
 4. 1964

Question ID : 264330110373
Option 1 ID : 264330433771
Option 2 ID : 264330433772
Option 3 ID : 264330433769
Option 4 ID : 264330433770
Status : Answered
Chosen Option : 4

Q.30 The Chandela dynasty of Rajput clan ruled which of the following regions between 9th and 13th century in early medieval period of India?

- Ans 1. Amarkot
 2. Jaisalmer
 3. Bundelkhand
 4. Mewar

Question ID : 264330176886
Option 1 ID : 264330693745
Option 2 ID : 264330693746
Option 3 ID : 264330693744
Option 4 ID : 264330693743
Status : Answered
Chosen Option : 3

Q.31 Who among the following started the 'Shuddhi Movement' to bring back converted Hindus to the main Hindu society?

- Ans 1. Ishwar Chand Vidyasagar
 2. Swami Sahjanand
 3. Swami Dayanand
 4. Swami Vivekanand

Question ID : 264330117689
Option 1 ID : 264330462754
Option 2 ID : 264330462752
Option 3 ID : 264330462753
Option 4 ID : 264330462751
Status : Answered
Chosen Option : 3

Q.32 Who among the following was chosen by Gandhiji as the first Satyagrahi of the individual Satyagraha movement?

- Ans
- 1. Dr. BR Ambedkar
 - 2. C Rajagopalachari
 - 3. Gopal Krishna Gokhale
 - 4. Acharya Vinoba Bhave

Question ID : 264330119746
Option 1 ID : 264330469260
Option 2 ID : 264330469261
Option 3 ID : 264330469259
Option 4 ID : 264330469262
Status : Answered
Chosen Option : 2

Q.33 Who among the following chroniclers wrote his first chronicle in 1356?

- Ans
- 1. Minhaj-us-Siraj
 - 2. Ziyauddin Barani
 - 3. Ibn-Sina
 - 4. Al-Biruni

Question ID : 264330183099
Option 1 ID : 264330718128
Option 2 ID : 264330718130
Option 3 ID : 264330718131
Option 4 ID : 264330718129
Status : Answered
Chosen Option : 4

Q.34 Deba Prasad Das, Pankaj Charan Das and Gangadhar Pradhan were the famous exponents of which of the following dance forms?

- Ans
- 1. Odissi
 - 2. Sattriya
 - 3. Bharatnatyam
 - 4. Kathak

Question ID : 264330110440
Option 1 ID : 264330434038
Option 2 ID : 264330434040
Option 3 ID : 264330434039
Option 4 ID : 264330434037
Status : Answered
Chosen Option : 2

Q.35 The deficiency of iodine causes _____.

- Ans
- 1. Beriberi
 - 2. Scurvy
 - 3. Rickets
 - 4. goitre

Question ID : 264330117598
Option 1 ID : 264330462418
Option 2 ID : 264330462419
Option 3 ID : 264330462420
Option 4 ID : 264330462417
Status : Answered
Chosen Option : 2

Q.36 By which of the following authors is the English novel 'Three Men in a Boat' written?

- Ans
- 1. Robert Louis Stevenson
 - 2. Arthur Conan Doyle
 - 3. Mark Twain
 - 4. Jerome K Jerome

Question ID : 26433066680
Option 1 ID : 264330261246
Option 2 ID : 264330261245
Option 3 ID : 264330261244
Option 4 ID : 264330261247
Status : Answered
Chosen Option : 3

Q.37 मानव विकास रिपोर्ट 2021-22 के अनुसार, भारत की समग्र बहुआयामी निर्धनता में स्वास्थ्य अभाव (health deprivation) का प्रतिशत अंश कितना है?

- Ans
- 1. 41.3%
 - 2. 18.5%
 - 3. 31.9%
 - 4. 31.3%

Question ID : 264330179560
Option 1 ID : 264330704240
Option 2 ID : 264330704241
Option 3 ID : 264330704239
Option 4 ID : 264330704242
Status : Answered
Chosen Option : 4

Q.38 Which of the following was the revenue collecting officer (collector general of revenue) in the Mauryan administration?

- Ans
- 1. Antapala
 - 2. Samaharta
 - 3. Sannidhata
 - 4. Amatya

Question ID : 264330120418
Option 1 ID : 264330471923
Option 2 ID : 264330471926
Option 3 ID : 264330471924
Option 4 ID : 264330471925
Status : Not Answered
Chosen Option : --

Q.39 The English novel 'The Rainbow' was written by which of the following authors?

- Ans
- 1. Thomas Hardy
 - 2. Joseph Conrad
 - 3. Emily Bronte
 - 4. D. H. Lawrence

Question ID : 26433055374
Option 1 ID : 264330216481
Option 2 ID : 264330216480
Option 3 ID : 264330216483
Option 4 ID : 264330216482
Status : Not Answered
Chosen Option : --

Q.40 भारत की पशुधन जनगणना 2019 के अनुसार, निम्नलिखित में से किस श्रेणी के पशुधन की जनसंख्या सबसे अधिक दर्ज की गई?

- Ans 1. मवेशी
 2. बकरी
 3. भैंस
 4. भेड़

Question ID : 264330181104
Option 1 ID : 264330710359
Option 2 ID : 264330710362
Option 3 ID : 264330710360
Option 4 ID : 264330710361
Status : Answered
Chosen Option : 3

Q.41 Which of the following was first introduced in bacterial cells by the American molecular biologist Joshua Lederberg in 1952?

- Ans 1. Pili
 2. Capsule
 3. Plasmid
 4. Cytoplasm

Question ID : 264330130991
Option 1 ID : 264330513076
Option 2 ID : 264330513075
Option 3 ID : 264330513078
Option 4 ID : 264330513077
Status : Answered
Chosen Option : 4

Q.42 Who among the following became the first Indian to be signed by Elektra Records, a U.S. company in October 2020?

- Ans 1. Vipin Aneja
 2. Prateek Kuhad
 3. Kulwinder Dhillon
 4. Jim Ankan Deka

Question ID : 264330113244
Option 1 ID : 264330445061
Option 2 ID : 264330445062
Option 3 ID : 264330445064
Option 4 ID : 264330445063
Status : Not Answered
Chosen Option : --

Q.43 Mumbai's famous Gateway of India was built in the memory of which British emperor's first arrival in India?

- Ans
- 1. Ani Stuart
 - 2. William IV
 - 3. Charles I
 - 4. King George V

Question ID : 26433074101
Option 1 ID : 264330290526
Option 2 ID : 264330290527
Option 3 ID : 264330290525
Option 4 ID : 264330290524
Status : Answered
Chosen Option : 4

Q.44 Habeas Corpus is the writ issued by the Court to bring before a court _____.

- Ans
- 1. a person from illegal custody
 - 2. a person to perform his legal duty
 - 3. a tribunal from doing something in excess
 - 4. a person who occupies a public office

Question ID : 264330110132
Option 1 ID : 264330432807
Option 2 ID : 264330432808
Option 3 ID : 264330432805
Option 4 ID : 264330432806
Status : Answered
Chosen Option : 1

Q.45 _____ refers to relaxation of government restrictions.

- Ans
- 1. Liberalisation
 - 2. Disinvestment
 - 3. Privatisation
 - 4. Globalisation

Question ID : 264330110018
Option 1 ID : 264330432352
Option 2 ID : 264330432351
Option 3 ID : 264330432349
Option 4 ID : 264330432350
Status : Answered
Chosen Option : 1

Q.46 निम्नलिखित में से किस मंत्रालय के पास दिल्ली में गणतंत्र दिवस परेड आयोजित करने की जिम्मेदारी है?

- Ans
- 1. संस्कृति मंत्रालय
 - 2. नागरिक उड्डयन मंत्रालय
 - 3. रक्षा मंत्रालय
 - 4. गृह मंत्रालय

Question ID : 264330118489
Option 1 ID : 264330465358
Option 2 ID : 264330465360
Option 3 ID : 264330465357
Option 4 ID : 264330465359
Status : Answered
Chosen Option : 3

Q.47 Which of the following Articles of the Indian Constitution declares that all laws that are inconsistent with or in derogation of the Fundamental Rights shall be void?

- Ans
- 1. Article 226
 - 2. Article 32
 - 3. Article 13
 - 4. Article 12

Question ID : 264330114758
Option 1 ID : 264330451119
Option 2 ID : 264330451118
Option 3 ID : 264330451120
Option 4 ID : 264330451117
Status : Answered
Chosen Option : 3

Q.48 U19 T20 Women's World Cup 2023 was organised by _____ .

- Ans
- 1. England
 - 2. New Zealand
 - 3. Australia
 - 4. South Africa

Question ID : 264330132539
Option 1 ID : 264330519251
Option 2 ID : 264330519252
Option 3 ID : 264330519253
Option 4 ID : 264330519254
Status : Answered
Chosen Option : 3

Q.49 Which of the following bodies looked after the various aspects of the Competition Act 2002?

- Ans
- 1. SEBI
 - 2. UPSC
 - 3. Competition Commission of India
 - 4. Reserve Bank of India

Question ID : 264330111622
Option 1 ID : 264330438576
Option 2 ID : 264330438573
Option 3 ID : 264330438574
Option 4 ID : 264330438575
Status : Answered
Chosen Option : 3

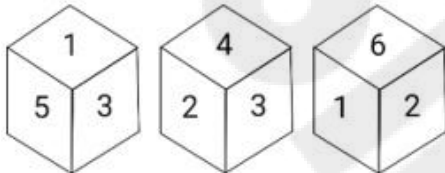
Q.50 In Kabaddi, how many players per team are allowed on the field of play at any one time?

- Ans 1. 12
 2. 10
 3. 8
 4. 7

Question ID : 264330113770
Option 1 ID : 264330447166
Option 2 ID : 264330447168
Option 3 ID : 264330447167
Option 4 ID : 264330447165
Status : Answered
Chosen Option : 3

Section : Reasoning

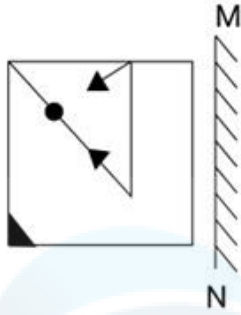
Q.1 Three different positions of the same dice are shown. Find the number on the face opposite to the face showing '2'.



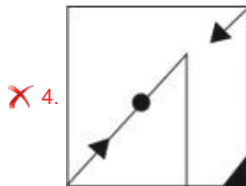
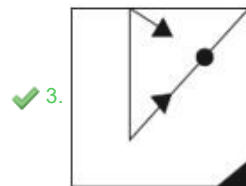
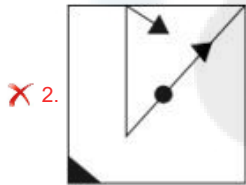
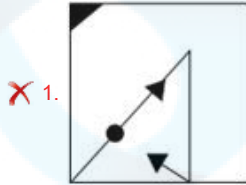
- Ans 1. 1
 2. 4
 3. 3
 4. 5

Question ID : 264330112036
Option 1 ID : 264330440229
Option 2 ID : 264330440230
Option 3 ID : 264330440231
Option 4 ID : 264330440232
Status : Answered
Chosen Option : 4

Q.2 Select the correct mirror image of the given combination when the mirror is placed at 'MN' as shown below.



Ans



Question ID : 264330130763

Option 1 ID : 264330512166

Option 2 ID : 264330512164

Option 3 ID : 264330512165

Option 4 ID : 264330512163

Status : Answered

Chosen Option : 3

Q.3 In a certain code language, 'BATH' is written as '542311' and 'FUND' is written as '924177'. How will 'GOLD' be written in that language?

Ans ✗ 1. 914156

✗ 2. 915157

✗ 3. 1016179

✓ 4. 1018157

Question ID : 26433089408

Option 1 ID : 264330351136

Option 2 ID : 264330351133

Option 3 ID : 264330351134

Option 4 ID : 264330351135

Status : Answered

Chosen Option : 4

Q.4 Which two signs should be interchanged to make the following equation correct?

$$144 \div 12 + 6 \times 3 - 14 = 8$$

- Ans
- 1. + and ×
 - 2. + and ×
 - 3. - and ×
 - 4. - and +

Question ID : 264330101084
Option 1 ID : 264330396884
Option 2 ID : 264330396881
Option 3 ID : 264330396883
Option 4 ID : 264330396882
Status : Answered
Chosen Option : 4

Q.5 Select the option in which the given figure is embedded (rotation is NOT allowed).



Ans

- 1.
- 2.
- 3.
- 4.

Question ID : 264330101170
Option 1 ID : 264330397227
Option 2 ID : 264330397226
Option 3 ID : 264330397228
Option 4 ID : 264330397225
Status : Answered
Chosen Option : 3

Q.6 Select the number from among the given options that can replace the question mark (?) in the following series.

15, 24, 42, 78, 150, ?

- Ans
- 1. 5432
 - 2. 323
 - 3. 294
 - 4. 452

Question ID : 264330109749
Option 1 ID : 264330431274
Option 2 ID : 264330431273
Option 3 ID : 264330431276
Option 4 ID : 264330431275
Status : Answered
Chosen Option : 3

Q.7 Select the option figure that will replace the question mark (?) in the figure given below to complete the pattern.



Ans

- 1.
- 2.
- 3.
- 4.

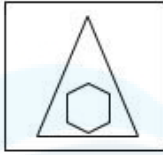
Question ID : 26433089463
Option 1 ID : 264330351356
Option 2 ID : 264330351355
Option 3 ID : 264330351354
Option 4 ID : 264330351353
Status : Answered
Chosen Option : 2

Q.8 Select the figure that will replace the question mark (?) in the following figure series.

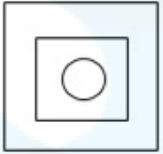


Ans

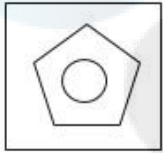
✓ 1.



✗ 2.



✗ 3.



✗ 4.



Question ID : 264330108961

Option 1 ID : 264330428121

Option 2 ID : 264330428122

Option 3 ID : 264330428123

Option 4 ID : 264330428124

Status : Answered

Chosen Option : 1

Q.9 Two statements are given followed by two conclusions numbered I and II. Assuming the statements to be true, even if they seem to be at variance from commonly known facts, decide which of the conclusions logically follow(s) from the statements.

Statements:

All Mugs are Buckets.

Some Mugs are Tumblers.

Conclusions:

I. All Tumblers are Mugs.

II. All Buckets are Tumblers.

Ans ✗ 1. Only conclusion I follows.

✗ 2. Both conclusions I and II follow.

✓ 3. Neither conclusion I nor II follows.

✗ 4. Only conclusion II follows.

Question ID : 26433076599

Option 1 ID : 264330300460

Option 2 ID : 264330300462

Option 3 ID : 264330300463

Option 4 ID : 264330300461

Status : Answered

Chosen Option : 3

Q.10 Select the correct mirror image of the given combination when the mirror is placed at 'PQ' as shown below.

G Z E K 4 L | P
Q

Ans

- ✓ 1. J A K E Z G
- ✗ 2. G Z E K 4 L
- ✗ 3. G Z E K 4 L
- ✗ 4. Z G E K 4 L

Question ID : 264330129812

Option 1 ID : 264330508479

Option 2 ID : 264330508481

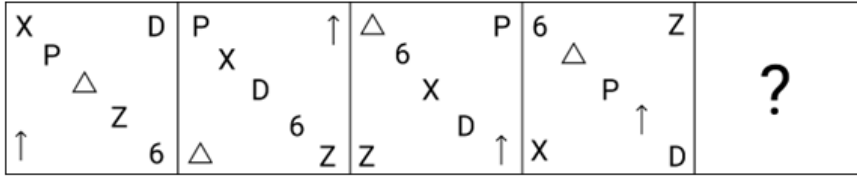
Option 3 ID : 264330508480

Option 4 ID : 264330508482

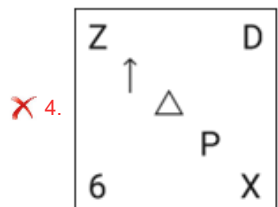
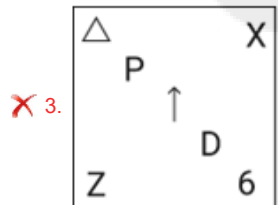
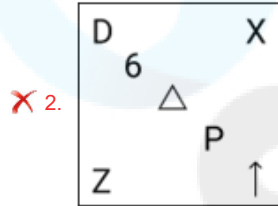
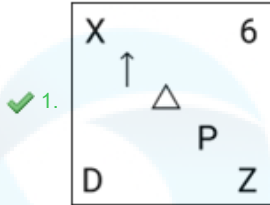
Status : Answered

Chosen Option : 1

Q.11 Which figure should replace the question mark (?) in the following series to continue the pattern?



Ans



Question ID : 264330129616

Option 1 ID : 264330507832

Option 2 ID : 264330507830

Option 3 ID : 264330507833

Option 4 ID : 264330507831

Status : Answered

Chosen Option : 2

Q.12 Which figure should replace the question mark (?) in the following series to continue the pattern?

0	3	3	S	S	=	=	0	
	D		=		3		6	?
6	=	S	0	D	6	D	6	0
						S	3	D

Ans

✗ 1.

D		6
	S	
0	=	3

✗ 2.

6		=
	0	
D	S	3

✗ 3.

D		=
	0	
6	S	3

✓ 4.

0		6
	=	
3	D	S

Question ID : 264330129618

Option 1 ID : 264330507839

Option 2 ID : 264330507840

Option 3 ID : 264330507841

Option 4 ID : 264330507838

Status : Answered

Chosen Option : 4

Q.13 Select the option that is related to the fourth term in the same way as the first term is related to the second term and the fifth term is related to the sixth term.
126 : 14 :: ? : 38 :: 207 : 23

Ans ✓ 1. 342

✗ 2. 364

✗ 3. 380

✗ 4. 354

Question ID : 264330102263

Option 1 ID : 264330401517

Option 2 ID : 264330401518

Option 3 ID : 264330401519

Option 4 ID : 264330401520

Status : Answered

Chosen Option : 1

Q.14 Select the option that is related to the third word in the same way as the second word is related to the first word.

(The words must be considered as meaningful English words and must not be related to each other based on the number of letters / number of consonants / vowels in the word)

Phycology : Algae :: Palaeontology : ?

Ans 1. Fossils

2. Insects

3. Plants

4. Fungi

Question ID : 26433082581

Option 1 ID : 264330324160

Option 2 ID : 264330324157

Option 3 ID : 264330324159

Option 4 ID : 264330324158

Status : Answered

Chosen Option : 4

Q.15 Select the option that represents the letters that, when sequentially placed from left to right in the blanks below, will complete the letter series.

HA__E__YNEHAY__H__NE

Ans 1. YHNENEAY

2. YHNAEAEY

3. YNHANEAY

4. YHNANEAY

Question ID : 26433092538

Option 1 ID : 264330363444

Option 2 ID : 264330363442

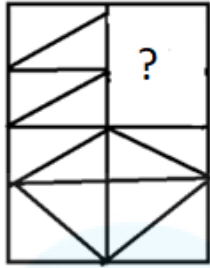
Option 3 ID : 264330363443

Option 4 ID : 264330363441

Status : Answered

Chosen Option : 3

Q.16 Select the option figure that will replace the question mark (?) in the figure given below to complete the pattern.



Ans

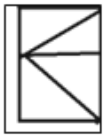
✗ 1.



✓ 2.



✗ 3.



✗ 4.



Question ID : 264330118232

Option 1 ID : 264330464746

Option 2 ID : 264330464745

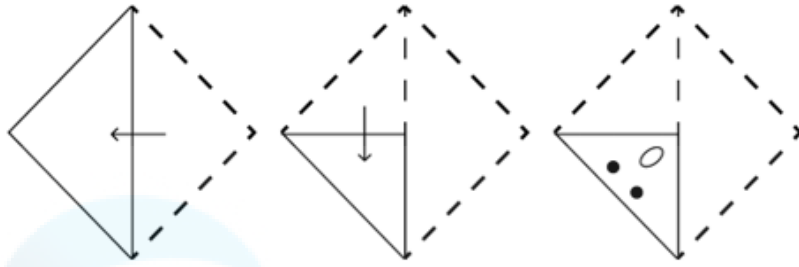
Option 3 ID : 264330464744

Option 4 ID : 264330464743

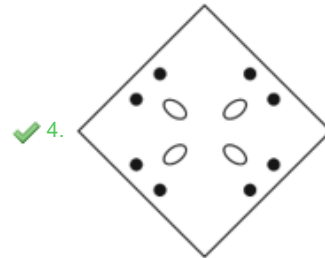
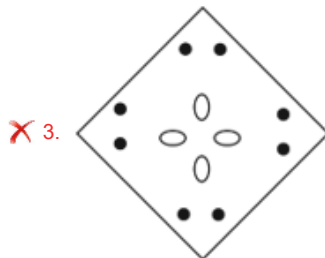
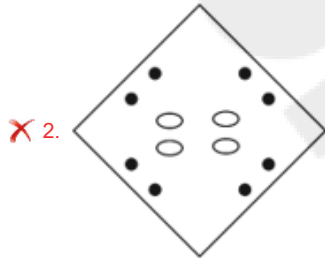
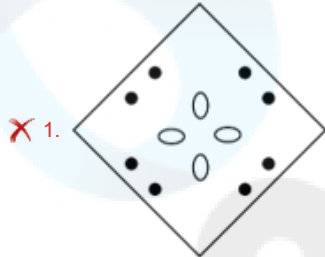
Status : Answered

Chosen Option : 2

Q.17 A square sheet of paper is folded along the dotted line successively along the directions shown and is then punched in the last. How would the paper look when unfolded?



Ans



Question ID : 264330172436

Option 1 ID : 264330676297

Option 2 ID : 264330676298

Option 3 ID : 264330676296

Option 4 ID : 264330676295

Status : Answered

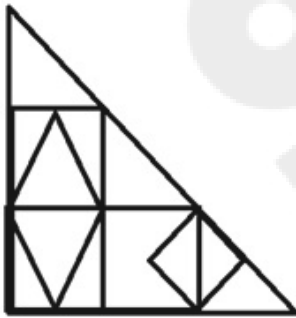
Chosen Option : 4

Q.18 Select the correct combination of mathematical signs that can sequentially replace the * signs and balance the given equation.
 $7*10*5*6*4*15$

- Ans
- 1. +, -, ×, +, =
 - 2. +, ×, -, +, =
 - 3. +, +, ×, -, =
 - 4. +, -, ×, +, =

Question ID : 26433079087
Option 1 ID : 264330310353
Option 2 ID : 264330310352
Option 3 ID : 264330310354
Option 4 ID : 264330310355
Status : Answered
Chosen Option : 3

Q.19 How many triangles are there in the given figure?



- Ans
- 1. 18
 - 2. 16
 - 3. 15
 - 4. 14

Question ID : 26433085412
Option 1 ID : 264330335349
Option 2 ID : 264330335352
Option 3 ID : 264330335351
Option 4 ID : 264330335350
Status : Answered
Chosen Option : 2

Q.20 Six students are sitting around a circular table facing the centre. Jasbir is an immediate neighbour of both Charan and Jagdish. Chetan is sitting second to the right of Jagdish. Palash is sitting third to the right of Charan. Pankaj is an immediate neighbour of both Charan and Chetan. Who is an immediate neighbour of both Jasbir and Palash?

- Ans
- 1. Charan
 - 2. Chetan
 - 3. Pankaj
 - 4. Jagdish

Question ID : 264330110714
Option 1 ID : 264330435133
Option 2 ID : 264330435136
Option 3 ID : 264330435135
Option 4 ID : 264330435134
Status : Answered
Chosen Option : 4

Q.21 Which of the following option figures will complete the pattern in the figure given below?



Ans

X 1.



X 2.



✓ 3.



X 4.



Question ID : 26433080622

Option 1 ID : 264330316421

Option 2 ID : 264330316424

Option 3 ID : 264330316422

Option 4 ID : 264330316423


Status : Answered

Chosen Option : 3

Q.22 Which of the following option figures will complete the pattern in the figure given below?



Ans



Question ID : 26433080623

Option 1 ID : 264330316425

Option 2 ID : 264330316427

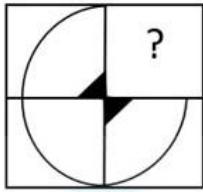
Option 3 ID : 264330316426

Option 4 ID : 264330316428

Status : Answered

Chosen Option : 3

Q.23 Select the option figure that will replace the question mark (?) in the figure given below to complete the pattern.



Ans

✓ 1.



✗ 2.



✗ 3.



✗ 4.



Question ID : 264330101320

Option 1 ID : 264330397826

Option 2 ID : 264330397827

Option 3 ID : 264330397825

Option 4 ID : 264330397828

Status : Answered

Chosen Option : 1

Q.24 Select the set in which the numbers are NOT related in the same way as are the numbers of the following sets.

(7, 245, 7), (8, 200, 5)

(NOTE: Operations should be performed on the whole numbers, without breaking down the numbers into its constituent digits.)

Ans ✗ 1. (16, 560, 7)

✗ 2. (6, 270, 9)

✓ 3. (11, 396, 9)

✗ 4. (12, 420, 7)

Question ID : 26433097241

Option 1 ID : 264330381664

Option 2 ID : 264330381662

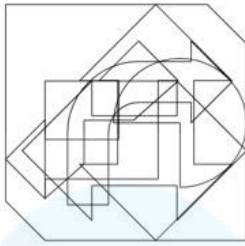
Option 3 ID : 264330381661

Option 4 ID : 264330381663

Status : Answered

Chosen Option : 3

Q.25 Select the option figure which is embedded in the given figure (Rotation is NOT allowed).



Ans

✗ 1.



✗ 2.



✓ 3.



✗ 4.



Question ID : 26433082016

Option 1 ID : 264330321897

Option 2 ID : 264330321898

Option 3 ID : 264330321899

Option 4 ID : 264330321900

Status : Answered

Chosen Option : 3

Section : Numerical Ability

Q.1 6 boys can complete a work in 18 hours. In how many hours will 16 boys complete the same work?

Ans

1. $3\frac{1}{4}$

2. $5\frac{3}{4}$

3. $6\frac{3}{4}$

4. $6\frac{1}{4}$

Question ID : 264330104537

Option 1 ID : 264330410451

Option 2 ID : 264330410450

Option 3 ID : 264330410449

Option 4 ID : 264330410452

Status : Answered

Chosen Option : 3

Q.2 What is the remainder obtained when a prime number greater than 7 is divided by 6?

Ans

1. 3 or 5

2. 1 or 5

3. 2 or 3

4. 2 or 5

Question ID : 264330104281

Option 1 ID : 264330409426

Option 2 ID : 264330409428

Option 3 ID : 264330409425

Option 4 ID : 264330409427

Status : Answered

Chosen Option : 2

Q.3 The monthly income of Amara is ₹80,200. If her income is decreased by 11%, then find her new monthly income (in ₹).

Ans

1. 71,250

2. 71,500

3. 71,820

4. 71,378

Question ID : 264330102324

Option 1 ID : 264330401762

Option 2 ID : 264330401761

Option 3 ID : 264330401764

Option 4 ID : 264330401763

Status : Answered

Chosen Option : 4

Q.4 On a certain sum of money, the difference between the compound interest for a year payable half-yearly, and the simple interest for a year is ₹729. If the rate of interest in both the cases is 6%, then the sum is:

- Ans
- 1. ₹8,50,000
 - 2. ₹7,90,000
 - 3. ₹8,10,000
 - 4. ₹8,30,000

Question ID : 264330103625
Option 1 ID : 264330406808
Option 2 ID : 264330406805
Option 3 ID : 264330406806
Option 4 ID : 264330406807
Status : Answered
Chosen Option : 3

Q.5 The number 0.0623 is how much less than $\frac{1}{16}$?

- Ans
- 1. $\frac{1}{500}$
 - 2. $\frac{1}{1500}$
 - 3. $\frac{1}{15000}$
 - 4. $\frac{1}{5000}$

Question ID : 264330111440
Option 1 ID : 264330437845
Option 2 ID : 264330437847
Option 3 ID : 264330437848
Option 4 ID : 264330437846
Status : Answered
Chosen Option : 4

Q.6 If the average of 5 consecutive even numbers is 70, then the largest even number is:

- Ans
- 1. 70
 - 2. 74
 - 3. 68
 - 4. 66

Question ID : 264330129388
Option 1 ID : 264330506920
Option 2 ID : 264330506921
Option 3 ID : 264330506919
Option 4 ID : 264330506918
Status : Answered
Chosen Option : 2

Q.7 Simplify.

$$0.7 \times 0.7 + 0.7 \div 7 + 7 \div 700$$

- Ans
- 1. 0.59
 - 2. 0.70
 - 3. 0.69
 - 4. 0.60

Question ID : 264330103920
Option 1 ID : 264330407981
Option 2 ID : 264330407984
Option 3 ID : 264330407982
Option 4 ID : 264330407983
Status : Answered
Chosen Option : 4

Q.8 The area of a triangle is 182 cm^2 and the length of one of its sides is 28 cm. What is the length of the perpendicular line segment drawn to this side of the triangle from the opposite vertex (in cm)?

- Ans
- 1. 6.5
 - 2. 13
 - 3. 14
 - 4. 12

Question ID : 264330112557
Option 1 ID : 264330442313
Option 2 ID : 264330442314
Option 3 ID : 264330442315
Option 4 ID : 264330442316
Status : Answered
Chosen Option : 2

Q.9 What number must be added to each term of ratio 3 : 5 so that it may equal to 5 : 6?

- Ans
- 1. 6
 - 2. 7
 - 3. 8
 - 4. 9

Question ID : 264330130934
Option 1 ID : 264330512850
Option 2 ID : 264330512849
Option 3 ID : 264330512847
Option 4 ID : 264330512848
Status : Answered
Chosen Option : 2

Q.10 The price of an article is first decreased by 25% and then increased by 35%. If the resulting price is ₹405, what was the original price of the article?

- Ans
- 1. ₹350
 - 2. ₹300
 - 3. ₹450
 - 4. ₹400

Question ID : 264330104285
Option 1 ID : 264330409443
Option 2 ID : 264330409441
Option 3 ID : 264330409444
Option 4 ID : 264330409442
Status : Answered
Chosen Option : 4

Q.11 The radii of the bases of two cylinders are in the ratio 3 : 7 and their heights are in the ratio 7 : 9. Find the ratio of their curved surface areas.

(Take $\pi = \frac{22}{7}$)

- Ans
- 1. 2 : 3
 - 2. 3 : 1
 - 3. 1 : 3
 - 4. 3 : 4

Question ID : 264330112440
Option 1 ID : 264330441845
Option 2 ID : 264330441847
Option 3 ID : 264330441846
Option 4 ID : 264330441848
Status : Answered
Chosen Option : 3

Q.12 A fruit seller sells $\left(\frac{2}{5}\right)$ part of the fruits at a profit of 15%, and remaining at a loss 5%. If the total profit is ₹1,800, then what is the total cost price of the fruits?

- Ans
- 1. ₹50,000
 - 2. ₹45,000
 - 3. ₹60,000
 - 4. ₹55,000

Question ID : 264330103612
Option 1 ID : 264330406755
Option 2 ID : 264330406756
Option 3 ID : 264330406753
Option 4 ID : 264330406754
Status : Answered
Chosen Option : 3

Q.13 A train travelling at a speed of 54 km/h catches another train travelling in the same direction and then leaves it 70 m behind in 14 seconds. The speed of the second train is:

- Ans 1. 54 km/h
 2. 36 km/h
 3. 24 km/h
 4. 48 km/h

Question ID : 264330104420
Option 1 ID : 264330409984
Option 2 ID : 264330409982
Option 3 ID : 264330409981
Option 4 ID : 264330409983
Status : Answered
Chosen Option : 2

Q.14 The annual instalment of ₹750 in 5 years at 5% per annum simple interest will discharge a debt of _____.

- Ans 1. ₹4,025
 2. ₹4,215
 3. ₹3,937.5
 4. ₹4,125

Question ID : 264330120028
Option 1 ID : 264330470370
Option 2 ID : 264330470367
Option 3 ID : 264330470368
Option 4 ID : 264330470369
Status : Answered
Chosen Option : 3

Q.15 The marked price of a commodity was ₹2,875. The seller offered a discount of 8% on its sale and still made a profit of 15%. What was the cost price (in ₹) of the commodity?

- Ans 1. 2248.25
 2. 2375
 3. 2275.75
 4. 2300

Question ID : 264330112541
Option 1 ID : 264330442252
Option 2 ID : 264330442250
Option 3 ID : 264330442249
Option 4 ID : 264330442251
Status : Answered
Chosen Option : 4

Q.1 Which folder in an email client is used to store received emails?

- Ans
- 1. Inbox
 - 2. Sent Items
 - 3. Drafts
 - 4. Outbox

Question ID : 264330174464
Option 1 ID : 264330684275
Option 2 ID : 264330684278
Option 3 ID : 264330684277
Option 4 ID : 264330684276
Status : Answered
Chosen Option : 1

Q.2 What is the primary function of FTP (File Transfer Protocol)?

- Ans
- 1. Video streaming
 - 2. Browsing websites
 - 3. Transferring files between computers
 - 4. Sending emails

Question ID : 264330180672
Option 1 ID : 264330708658
Option 2 ID : 264330708656
Option 3 ID : 264330708657
Option 4 ID : 264330708655
Status : Answered
Chosen Option : 3

Q.3 Which of the following options is NOT used to set page margins in MS Word 365?

- Ans
- 1. Left
 - 2. Header
 - 3. Bottom
 - 4. Right

Question ID : 264330178579
Option 1 ID : 264330700344
Option 2 ID : 264330700346
Option 3 ID : 264330700343
Option 4 ID : 264330700345
Status : Answered
Chosen Option : 2

Q.4 In MS Excel 365, to enable the edit mode in MS-Excel worksheet, we should follow:

- Ans
- 1. File > Advanced > Editing options > Options
 - 2. File > Options > Editing options
 - 3. File > Options > Advanced > Editing options
 - 4. File > Advanced > Editing options

Question ID : 264330175964
Option 1 ID : 264330690152
Option 2 ID : 264330690154
Option 3 ID : 264330690151
Option 4 ID : 264330690153
Status : Answered
Chosen Option : 3

Q.5 In MS-word 365, the keyboard shortcut Shift + F3 can be used to change the text document as:

- Ans
- 1. Capitalize Each Word
 - 2. Size of Font
 - 3. Bold Font
 - 4. Highlight Text color

Question ID : 264330175983
Option 1 ID : 264330690229
Option 2 ID : 264330690228
Option 3 ID : 264330690227
Option 4 ID : 264330690230
Status : Answered
Chosen Option : 3

Q.6 In MS Excel 365, which of the following functions can be used to display the formula applied to a specific cell?

- Ans
- 1. =RETFORMULA(Cell_Reference)
 - 2. =FORMULATEXT(Cell_Reference)
 - 3. =CALLFORMULA(Cell_Reference)
 - 4. =TEXTFORMULA(Cell_Reference)

Question ID : 264330182052
Option 1 ID : 264330714049
Option 2 ID : 264330714050
Option 3 ID : 264330714048
Option 4 ID : 264330714047
Status : Answered
Chosen Option : 4

Q.7 Which operation can be used to move the text in a document of MS word 365?

- Ans
- 1. Cut-paste
 - 2. Cut-copy-paste
 - 3. Move-paste
 - 4. Copy-paste

Question ID : 264330175968
Option 1 ID : 264330690168
Option 2 ID : 264330690170
Option 3 ID : 264330690167
Option 4 ID : 264330690169
Status : Answered
Chosen Option : 1

Q.8 In Microsoft Excel 365, which of the following keyboard shortcuts enables you to save a workbook?

- Ans
- 1. Ctrl + A
 - 2. Ctrl + S
 - 3. Ctrl + G
 - 4. Ctrl + F

Question ID : 264330182050
Option 1 ID : 264330714040
Option 2 ID : 264330714039
Option 3 ID : 264330714041
Option 4 ID : 264330714042
Status : Answered
Chosen Option : 2

Q.9 What does the menu bar do in MS-Word 365?

- Ans** 1. Finds program essential functions
 2. Displays the title of the software
 3. It moves the window moving area upside
 4. Displays the current page number of the document

Question ID : 264330171418
Option 1 ID : 264330672287
Option 2 ID : 264330672288
Option 3 ID : 264330672290
Option 4 ID : 264330672289
Status : Answered
Chosen Option : 1

Q.10 What is the shortcut key for closing the documents in MS-Word 365?

- Ans** 1. Ctrl + C
 2. Ctrl + W
 3. Ctrl + Alt + S
 4. Ctrl + B

Question ID : 264330171415
Option 1 ID : 264330672275
Option 2 ID : 264330672277
Option 3 ID : 264330672276
Option 4 ID : 264330672278
Status : Answered
Chosen Option : 1