

Constable Executive Male and Female in Delhi Police Examination 2023

Roll Number	
Candidate Name	
Venue Name	
Exam Date	29/11/2023
Exam Time	3:00 PM - 4:30 PM
Subject	Constable Executive Male and Female in Delhi Police Examination 2023

Section : General Knowledge

Q.1 अल्लाह रक्खा, साबिर खान, पंडित किशन महाराज, पंडित ज्ञान प्रकाश घोष और संदीप दास निम्नलिखित में से किस वाद्य यंत्र के प्रसिद्ध वादक हैं?

- Ans
- 1. तबला
 - 2. मृदंगम
 - 3. पखवाज
 - 4. घटम

Question ID : 264330144043
Option 1 ID : 264330564435
Option 2 ID : 264330564437
Option 3 ID : 264330564436
Option 4 ID : 264330564438
Status : Answered
Chosen Option : 2

Q.2 राष्ट्रीय आय लेखांकन की किस पद्धति में उत्पादन केंद्रों को प्राथमिक, द्वितीयक और तृतीयक क्षेत्रों में वर्गीकृत करना शामिल है?

- Ans
- 1. अवशिष्ट उपागम
 - 2. उत्पादन उपागम
 - 3. आय उपागम
 - 4. व्यय उपागम

Question ID : 264330112469
Option 1 ID : 264330441964
Option 2 ID : 264330441961
Option 3 ID : 264330441962
Option 4 ID : 264330441963
Status : Answered
Chosen Option : 2

Q.3 Which Indian state has the world's longest highway tunnel (as of July 2023)?

- Ans
- 1. West Bengal
 - 2. Himachal Pradesh
 - 3. Gujarat
 - 4. Rajasthan

Question ID : 264330182957
Option 1 ID : 264330717561
Option 2 ID : 264330717560
Option 3 ID : 264330717563
Option 4 ID : 264330717562
Status : Answered
Chosen Option : 2

Q.4 निम्नलिखित में से कौन 1867 में स्थापित एक सुधारवादी समाज 'प्रार्थना समाज' से संबंधित नहीं है?

- Ans 1. बाल गंगाधर तिलक
 2. आर. जी. भंडारकर
 3. गोविन्द रानाडे
 4. आत्माराम पांडुरंग

Question ID : 264330130561
Option 1 ID : 264330511355
Option 2 ID : 264330511356
Option 3 ID : 264330511357
Option 4 ID : 264330511358
Status : Answered
Chosen Option : 4

Q.5 According to Census 2011, which union territory has the highest male literacy rate?

- Ans 1. Delhi
 2. Daman & Diu
 3. Lakshadweep
 4. Puducherry

Question ID : 264330132748
Option 1 ID : 264330520089
Option 2 ID : 264330520088
Option 3 ID : 264330520087
Option 4 ID : 264330520090
Status : Answered
Chosen Option : 3

Q.6 Which of the following Schedules of the Constitution of India have immunity from Judicial Review?

- Ans 1. 4th
 2. 6th
 3. 10th
 4. 9th

Question ID : 264330130477
Option 1 ID : 264330511022
Option 2 ID : 264330511019
Option 3 ID : 264330511021
Option 4 ID : 264330511020
Status : Answered
Chosen Option : 4

Q.7 The Mahabodhi Temple is in which of these states?

- Ans 1. Uttar Pradesh
 2. Bihar
 3. Chhattisgarh
 4. Madhya Pradesh

Question ID : 264330109315
Option 1 ID : 264330429539
Option 2 ID : 264330429540
Option 3 ID : 264330429537
Option 4 ID : 264330429538
Status : Answered
Chosen Option : 2

Q.8 Which of the following statements about cell is correct?

- Ans
- 1. Bacterial cell contains cellulose.
 - 2. Powerhouse of a cell is plastid.
 - 3. Cell is a functional unit of life.
 - 4. Cell membrane of a cell is hard and rigid.

Question ID : 264330120944
Option 1 ID : 264330473992
Option 2 ID : 264330473993
Option 3 ID : 264330473994
Option 4 ID : 264330473991
Status : Answered
Chosen Option : 3

Q.9 Which of the following is an example of double displacement reaction?

- Ans
- 1. $2\text{Pb}(\text{NO}_3)_2 (\text{s}) + \text{Heat} \rightarrow 2\text{PbO} (\text{s}) + 4\text{NO}_2 (\text{g}) + \text{O}_2 (\text{g})$
 - 2. $\text{ZnO} + \text{C} \rightarrow \text{Zn} + \text{CO}$
 - 3. $\text{Fe} (\text{s}) + \text{CuSO}_4 (\text{aq}) \rightarrow \text{FeSO}_4 (\text{aq}) + \text{Cu} (\text{s})$
 - 4. $\text{Na}_2\text{SO}_4 (\text{aq}) + \text{BaCl}_2 (\text{aq}) \rightarrow \text{BaSO}_4 (\text{s}) + 2\text{NaCl} (\text{aq})$

Question ID : 264330182936
Option 1 ID : 264330717479
Option 2 ID : 264330717478
Option 3 ID : 264330717476
Option 4 ID : 264330717477
Status : Answered
Chosen Option : 4

Q.10 Which part of our body is responsible for digestion?

- Ans
- 1. Kidney
 - 2. Hands
 - 3. Gastric glands
 - 4. Heart

Question ID : 264330118271
Option 1 ID : 264330464901
Option 2 ID : 264330464899
Option 3 ID : 264330464900
Option 4 ID : 264330464902
Status : Answered
Chosen Option : 3

Q.11 Which of the following is the darkest, or least reflective object in the Solar System with an albedo of 0.03?

- Ans
- 1. 9P/Tempel 1
 - 2. 2P/Encke
 - 3. 1P/Halley
 - 4. 19P/Borrelly

Question ID : 264330114167
Option 1 ID : 264330448755
Option 2 ID : 264330448754
Option 3 ID : 264330448756
Option 4 ID : 264330448753
Status : Not Answered
Chosen Option : --

Q.12 The voting age was reduced from 21 years to 18 years by the _____ Constitutional Amendment Act of 1988.

- Ans
- 1. 51st
 - 2. 61st
 - 3. 71st
 - 4. 41st

Question ID : 264330130432
Option 1 ID : 264330510840
Option 2 ID : 264330510841
Option 3 ID : 264330510842
Option 4 ID : 264330510839
Status : Answered
Chosen Option : 3

Q.13 Which of the following players won the Major Dhyan Chand Khel Ratna Award in Hockey in 2021?

- Ans
- 1. PR Sreejesh
 - 2. Lovlina Borgohain
 - 3. Sumit Antil
 - 4. Ravi Kumar Dahiya

Question ID : 264330176744
Option 1 ID : 264330693193
Option 2 ID : 264330693191
Option 3 ID : 264330693194
Option 4 ID : 264330693192
Status : Not Answered
Chosen Option : --

Q.14 निम्नलिखित में से कौन-सा युग्म गलत है?

- Ans
- 1. चौथी पंचवर्षीय योजना-गरीबी हटाओ लक्ष्य
 - 2. प्रथम पंचवर्षीय योजना - कृषि विकास
 - 3. दूसरी पंचवर्षीय योजना - नेहरू महालनोबिस मॉडल
 - 4. तीसरी पंचवर्षीय योजना - गाडगिल योजना

Question ID : 264330131566
Option 1 ID : 264330515370
Option 2 ID : 264330515367
Option 3 ID : 264330515368
Option 4 ID : 264330515369
Status : Answered
Chosen Option : 3

Q.15 इलाहाबाद के स्तम्भ पर हरिषेण द्वारा लिखित अभिलेख किस भाषा में है?

- Ans
- 1. फ़ारसी
 - 2. संस्कृत
 - 3. प्राकृत
 - 4. पाली

Question ID : 264330130541
Option 1 ID : 264330511277
Option 2 ID : 264330511275
Option 3 ID : 264330511276
Option 4 ID : 264330511278
Status : Answered
Chosen Option : 3

Q.16 What percentage of people were below the poverty line in India in 2011-2012 as per the Economic Survey 2013-14, released by the Ministry of Finance, Government of India?

- Ans
- 1. 12.4%
 - 2. 21.9%
 - 3. 10.2%
 - 4. 18.7%

Question ID : 264330179282
Option 1 ID : 264330703132
Option 2 ID : 264330703134
Option 3 ID : 264330703131
Option 4 ID : 264330703133
Status : Answered
Chosen Option : 2

Q.17 निम्नलिखित में से वह कौन तुर्की शासक था जिसने 1398 में लूट के इरादे से भारत पर आक्रमण किया था?

- Ans
- 1. शाहरुख मिर्ज़ा
 - 2. तैमूर लंग
 - 3. चंगेज़ खान
 - 4. गुयुक खान

Question ID : 264330182710
Option 1 ID : 264330716613
Option 2 ID : 264330716614
Option 3 ID : 264330716612
Option 4 ID : 264330716611
Status : Answered
Chosen Option : 2

Q.18 निम्नलिखित में से कौन-सा विकल्प, पृथ्वी के अंतरंग का कोई भाग है?

- Ans
- 1. समताप मंडल
 - 2. दुर्बलता मंडल
 - 3. ताप मंडल
 - 4. क्षोभ मंडल

Question ID : 264330131740
Option 1 ID : 264330516060
Option 2 ID : 264330516062
Option 3 ID : 264330516061
Option 4 ID : 264330516059
Status : Answered
Chosen Option : 4

Q.19 In the context of external debt, what do ECBs stands for?

- Ans
- 1. Essential Commercial Borrowings
 - 2. Essential Common Borrowings
 - 3. External Commercial Borrowings
 - 4. External Common Borrowings

Question ID : 264330109395
Option 1 ID : 264330429858
Option 2 ID : 264330429857
Option 3 ID : 264330429860
Option 4 ID : 264330429859
Status : Answered
Chosen Option : 3

Q.20 Srimanta Sankar Dev is associated with which of these dance forms?

- Ans
- 1. Odissi
 - 2. Manipuri
 - 3. Sattriya
 - 4. Kathak

Question ID : 264330109302
Option 1 ID : 264330429486
Option 2 ID : 264330429488
Option 3 ID : 264330429487
Option 4 ID : 264330429485
Status : Answered
Chosen Option : 1

Q.21 _____ का उद्देश्य, शेल्डर फॉर अर्बन होमलेस (SUH) योजना के तहत चरणबद्ध तरीके से शहरी बेघरों को आवश्यक सेवाओं सहित स्थायी आवास प्रदान करना है।

- Ans
- 1. ग्रामीण आवास योजना
 - 2. राजीव आवास योजना
 - 3. प्रधानमंत्री आवास योजना
 - 4. राष्ट्रीय शहरी अजीविका मिशन (NULM)

Question ID : 264330182975
Option 1 ID : 264330717634
Option 2 ID : 264330717632
Option 3 ID : 264330717635
Option 4 ID : 264330717633
Status : Answered
Chosen Option : 3

Q.22 भारतीय भूवैज्ञानिक सर्वेक्षण (GSI) की स्थापना 1851 में मुख्य रूप से _____ के लिए कोयला भंडार खोजने हेतु की गई थी।

- Ans
- 1. जापान को निर्यात करने
 - 2. समुद्री परिवहन
 - 3. रेलवे
 - 4. कपड़ा मील

Question ID : 264330181231
Option 1 ID : 264330710847
Option 2 ID : 264330710848
Option 3 ID : 264330710850
Option 4 ID : 264330710849
Status : Answered
Chosen Option : 3

Q.23 मयूर सिंहासन के नाम से मशहूर रत्न जड़ित सिंहासन को _____ द्वारा साधिकार किया गया था।

- Ans
- 1. औरंगजेब
 - 2. हुमायूँ
 - 3. अकबर
 - 4. शाहजहाँ

Question ID : 264330114844
Option 1 ID : 264330451464
Option 2 ID : 264330451461
Option 3 ID : 264330451462
Option 4 ID : 264330451463
Status : Answered
Chosen Option : 4

Q.24 निम्नलिखित में से कौन-सी नीति निजीकरण को बढ़ावा देती है?

- A. विनिवेश
- B. आउटसोर्सिंग
- C. शहरीकरण

- Ans
- 1. केवल A और B
 - 2. A और C दोनों
 - 3. सभी – A, B और C
 - 4. केवल A

Question ID : 264330109136

Option 1 ID : 264330428822

Option 2 ID : 264330428821

Option 3 ID : 264330428824

Option 4 ID : 264330428823

Status : Answered

Chosen Option : 2

Q.25 भारतीय संविधान के किस अनुच्छेद में उल्लेख है कि कलात्मक या ऐतिहासिक रुचि के प्रत्येक स्मारक या स्थान या वस्तु की रक्षा करना राज्य का दायित्व होगा?

- Ans
- 1. अनुच्छेद 51
 - 2. अनुच्छेद 47
 - 3. अनुच्छेद 45
 - 4. अनुच्छेद 49

Question ID : 264330183152

Option 1 ID : 264330718343

Option 2 ID : 264330718341

Option 3 ID : 264330718340

Option 4 ID : 264330718342

Status : Answered

Chosen Option : 1

Q.26 भारत के संविधान में निम्नलिखित में से कौन-सी विशेषता भारत सरकार अधिनियम, 1935 से ली गई है?

- Ans
- 1. आपातकाल के दौरान मौलिक अधिकारों का निलंबन
 - 2. संघीय योजना
 - 3. संसद के दोनों सदनों की संयुक्त बैठक
 - 4. गणतंत्र की कल्पना

Question ID : 264330133047

Option 1 ID : 264330521241

Option 2 ID : 264330521240

Option 3 ID : 264330521242

Option 4 ID : 264330521239

Status : Answered

Chosen Option : 2

Q.27 Under the LERMS system, what percentage of foreign exchange earnings can be converted at the official rate?

- Ans 1. 35
 2. 40
 3. 25
 4. 20

Question ID : 264330109419
Option 1 ID : 264330429955
Option 2 ID : 264330429956
Option 3 ID : 264330429954
Option 4 ID : 264330429953
Status : Not Answered
Chosen Option : --

Q.28 निम्नलिखित में से किस खिलाड़ी का संबंध तलवारबाजी (fencing) से है?

- Ans 1. सी.ए. भवानी देवी
 2. नवजीत कौर दिल्ली
 3. पारुल चौधरी
 4. हिमा दास

Question ID : 264330118893
Option 1 ID : 264330466227
Option 2 ID : 264330466230
Option 3 ID : 264330466228
Option 4 ID : 264330466229
Status : Not Answered
Chosen Option : --

Q.29 In which of the following years was the Telangana Legislative Assembly established?

- Ans 1. 2012
 2. 2013
 3. 2014
 4. 2010

Question ID : 26433086857
Option 1 ID : 264330341070
Option 2 ID : 264330341071
Option 3 ID : 264330341072
Option 4 ID : 264330341069
Status : Answered
Chosen Option : 3

Q.30 In a cricket match, the number of balls in an over is _____.

- Ans 1. 5
 2. 7
 3. 6
 4. 8

Question ID : 264330132558
Option 1 ID : 264330519327
Option 2 ID : 264330519329
Option 3 ID : 264330519328
Option 4 ID : 264330519330
Status : Answered
Chosen Option : 3

Q.31 Which of the following Indian states is known for its extensive tea plantations?

- Ans 1. Rajasthan
 2. Assam
 3. Punjab
 4. Gujarat

Question ID : 264330183057
Option 1 ID : 264330717962
Option 2 ID : 264330717963
Option 3 ID : 264330717960
Option 4 ID : 264330717961
Status : Answered
Chosen Option : 2

Q.32 जब एक कोशिका विभाजित नहीं हो रही होती है, तो उसके नाभिक में अत्यधिक विस्तारित और विस्तृत न्यूक्लियो प्रोटीन तंतु होते हैं। इसे क्या कहते हैं?

- Ans 1. फाइब्रोमैटिन
 2. ब्रोमैटिन
 3. क्रोमैटिन
 4. व्युबुलिन

Question ID : 264330134881
Option 1 ID : 264330528462
Option 2 ID : 264330528460
Option 3 ID : 264330528461
Option 4 ID : 264330528459
Status : Answered
Chosen Option : 1

Q.33 भारतीय संविधान के किस अनुच्छेद में यह उल्लेख है कि 'मंत्रियों द्वारा राज्यपाल को दी गई सलाह की किसी भी न्यायालय में जांच नहीं की जाएगी'?

- Ans 1. अनुच्छेद 167
 2. अनुच्छेद 161
 3. अनुच्छेद 168
 4. अनुच्छेद 163

Question ID : 264330178908
Option 1 ID : 264330701637
Option 2 ID : 264330701636
Option 3 ID : 264330701638
Option 4 ID : 264330701635
Status : Answered
Chosen Option : 1

Q.34 With which Indian classical dance form is Sujata Mohapatra associated?

- Ans 1. Bharatanatyam
 2. Odissi
 3. Sattriya
 4. Kathak

Question ID : 264330132402
Option 1 ID : 264330518705
Option 2 ID : 264330518704
Option 3 ID : 264330518703
Option 4 ID : 264330518706
Status : Answered
Chosen Option : 2

Q.35 Karaikudi R Mani is India's renowned player of the _____.

- Ans
- 1. santoor
 - 2. mridangam
 - 3. violin
 - 4. sitar

Question ID : 264330113241
Option 1 ID : 264330445051
Option 2 ID : 264330445052
Option 3 ID : 264330445050
Option 4 ID : 264330445049
Status : Not Answered
Chosen Option : --

Q.36 Makar Dhwaaja Darogha was honoured with the Padma Shri for which form of dance?

- Ans
- 1. Chhau
 - 2. Kalbelia
 - 3. Mohiniattam
 - 4. Kathak

Question ID : 26433074885
Option 1 ID : 264330293630
Option 2 ID : 264330293629
Option 3 ID : 264330293631
Option 4 ID : 264330293628
Status : Not Answered
Chosen Option : --

Q.37 Cricketer Ravi Shastri represented the _____ team in the Ranji Trophy tournament.

- Ans
- 1. Calcutta
 - 2. Karnataka
 - 3. Delhi
 - 4. Mumbai

Question ID : 264330118477
Option 1 ID : 264330465312
Option 2 ID : 264330465310
Option 3 ID : 264330465309
Option 4 ID : 264330465311
Status : Answered
Chosen Option : 4

Q.38 निजीकरण के अर्थ के संबंध में निम्नलिखित कथनों पर विचार करें।
(i) सार्वजनिक क्षेत्र के उद्यमों के स्वामित्व का हस्तांतरण निजी क्षेत्र के उद्यमियों को न करना।
(ii) सार्वजनिक क्षेत्र के उद्यमों के प्रबंधन का हस्तांतरण निजी क्षेत्र के उद्यमियों को करना।
सही उत्तर का चयन करें।

- Ans
- 1. केवल (i) सत्य है
 - 2. (i) और (ii) दोनों असत्य हैं
 - 3. (i) और (ii) दोनों सत्य हैं
 - 4. केवल (ii) सत्य है

Question ID : 264330116557
Option 1 ID : 264330458313
Option 2 ID : 264330458316
Option 3 ID : 264330458315
Option 4 ID : 264330458314
Status : Answered
Chosen Option : 4

Q.39 श्यामजी कृष्णवर्मा ने किस स्थान पर इंडिया होम रूल (India Home Rule) सोसाइटी की स्थापना की, जिसे इंडिया हाउस फॉर इंडियाज लिबरेशन (India House for India's liberation) के नाम से जाना जाता है?

- Ans
- 1. बर्लिन
 - 2. सैन-फ्रैन्सिस्को
 - 3. लंदन
 - 4. पेरिस

Question ID : 264330120302
Option 1 ID : 264330471462
Option 2 ID : 264330471461
Option 3 ID : 264330471460
Option 4 ID : 264330471459
Status : Answered
Chosen Option : 1

Q.40 Which liberal Viceroy enacted local self-government for municipalities and repealed the unpopular Vernacular Press Act of 1878?

- Ans
- 1. Lord Ripon
 - 2. Lord Ilbert
 - 3. Lord Dufferin
 - 4. Lord Lytton

Question ID : 264330120151
Option 1 ID : 264330470860
Option 2 ID : 264330470859
Option 3 ID : 264330470862
Option 4 ID : 264330470861
Status : Answered
Chosen Option : 1

Q.41 एलोरा का कैलाश मंदिर और महाबलीपुरम का रथ मंदिर किस प्रकार की मंदिर वास्तुकला के उदाहरण हैं?

- Ans
- 1. विशालकाय
 - 2. पंचायतन
 - 3. निम्न आधार
 - 4. रॉक-कट

Question ID : 264330111853
Option 1 ID : 264330439497
Option 2 ID : 264330439500
Option 3 ID : 264330439499
Option 4 ID : 264330439498
Status : Answered
Chosen Option : 4

Q.42 वेम्पति चित्रा सत्यम ने किस प्रकार के नृत्य के लिए वर्ष 1998 में पद्म भूषण प्राप्त किया था?

- Ans
- 1. कथक
 - 2. कुचिपुड़ी
 - 3. कथकली
 - 4. भरतनाट्यम

Question ID : 26433074874
Option 1 ID : 264330293585
Option 2 ID : 264330293586
Option 3 ID : 264330293587
Option 4 ID : 264330293584
Status : Answered
Chosen Option : 3

Q.43 निम्नलिखित में से किस संविधान संशोधन अधिनियम में यह प्रावधान किया गया है कि सभी नागरिकों को सहकारी समितियाँ गठित करने का मौलिक अधिकार होगा?

- Ans
- 1. 89वां संशोधन अधिनियम
 - 2. 99वां संशोधन अधिनियम
 - 3. 91वां संशोधन अधिनियम
 - 4. 97वां संशोधन अधिनियम

Question ID : 264330180868
Option 1 ID : 264330709438
Option 2 ID : 264330709436
Option 3 ID : 264330709437
Option 4 ID : 264330709435
Status : Not Answered
Chosen Option : --

Q.44 After MK Gandhi's returning to India in 1915, who among the following advised him to travel around India to know the land and its people?

- Ans 1. Gopal Krishna Gokhale
 2. Chittaranjan Das
 3. Bipin Chandra Pal
 4. Bal Gangadhar Tilak

Question ID : 264330119018

Option 1 ID : 264330466730

Option 2 ID : 264330466729

Option 3 ID : 264330466727

Option 4 ID : 264330466728

Status : Answered

Chosen Option : 1

Q.45 गुप्त काल में कालिदास द्वारा लिखित राजा दुष्यंत की प्रेम कहानी पर आधारित नाटक निम्नलिखित में से कौन-सा था?

- Ans 1. रघुवंशम्
 2. विक्रमोर्वशी
 3. कुमारसंभव
 4. अभिज्ञानशाकुंतल

Question ID : 264330120241

Option 1 ID : 264330471221

Option 2 ID : 264330471219

Option 3 ID : 264330471220

Option 4 ID : 264330471222

Status : Answered

Chosen Option : 3

Q.46 पूर्वोत्तर भारत में, अहोम इस त्योहार को हर साल 31 जनवरी को सभी पारंपरिक वेशभूषा और धूमधाम से अपने पूर्वजों की पूजा करने के लिए एक आम जगह पर मनाते हैं। त्योहार की पहचान करें।

- Ans 1. डोलजात्रा
 2. जोनबील मेला
 3. रोंगकर
 4. मे दम मे फी

Question ID : 264330141779

Option 1 ID : 264330555437

Option 2 ID : 264330555438

Option 3 ID : 264330555435

Option 4 ID : 264330555436

Status : Not Answered

Chosen Option : --

Q.47 भारत के पूर्व प्रधानमंत्रियों में से एक, आई.के. गुजराल ने निम्नलिखित में से कौन-सी आत्मकथा लिखी है?

- Ans
- 1. फ्रॉम कॉरिडोर ऑफ पॉवर
 - 2. मैटर्स ऑफ डिस्क्रिशन
 - 3. माई टाइम्स
 - 4. लिविंग हिस्ट्री

Question ID : 26433055362
Option 1 ID : 264330216435
Option 2 ID : 264330216432
Option 3 ID : 264330216433
Option 4 ID : 264330216434
Status : Not Answered
Chosen Option : --

Q.48 Who is the writer of the famous autobiography 'The Story of My Life'?

- Ans
- 1. Helen Keller
 - 2. Steve Jobs
 - 3. Anne Frank
 - 4. Mahatma Gandhi

Question ID : 26433071468
Option 1 ID : 264330280297
Option 2 ID : 264330280299
Option 3 ID : 264330280296
Option 4 ID : 264330280298
Status : Answered
Chosen Option : 3

Q.49 मुद्रा आपूर्ति के निम्नलिखित उपायों में से किस उपाय को 'समाज के कुल मौद्रिक संसाधनों' के रूप में भी जाना जाता है?

- Ans
- 1. M1
 - 2. M4
 - 3. M2
 - 4. M3

Question ID : 264330116502
Option 1 ID : 264330458093
Option 2 ID : 264330458096
Option 3 ID : 264330458094
Option 4 ID : 264330458095
Status : Not Answered
Chosen Option : --

Q.50 Bihu festival is majorly celebrated in which of these states?

- Ans
- 1. Goa
 - 2. Maharashtra
 - 3. Assam
 - 4. Kerala

Question ID : 264330109307
Option 1 ID : 264330429505
Option 2 ID : 264330429506
Option 3 ID : 264330429508
Option 4 ID : 264330429507
Status : Answered
Chosen Option : 3

Section : Reasoning

Q.1 Select the set in which the numbers are related in the same way as are the numbers of the following sets.

(NOTE: Operations should be performed on the whole numbers, without breaking down the numbers into its constituent digits. E.g., 13 – Operations on 13 such as adding/deleting/multiplying etc. to 13 can be performed. Breaking down 13 into 1 and 3 and then performing mathematical operations on 1 and 3 is not allowed)

(13, 5, 87)
(17, 6, 115)

Ans 1. (21, 7, 153)

2. (9, 4, 6)

3. (29, 9, 207)

4. (25, 8, 171)

Question ID : 26433052103

Option 1 ID : 264330203716

Option 2 ID : 264330203714

Option 3 ID : 264330203717

Option 4 ID : 264330203715

Status : Answered

Chosen Option : 4

Q.2 Which of the following option figures will complete the pattern in the figure given below?



Ans



Question ID : 26433080606

Option 1 ID : 264330316358

Option 2 ID : 264330316357

Option 3 ID : 264330316360

Option 4 ID : 264330316359

Status : Answered

Chosen Option : 4

Q.3 Select the correct mirror image of the given combination when the mirror is placed at MN as shown below.

F c 7 q 4 k n

M
|
N

Ans

1. u k Δ b ∟ c F

2. F c ∟ p Δ k n

3. F c d ∟ k n

4. F c ∟ p Δ k n

Question ID : 264330116999

Option 1 ID : 264330460077

Option 2 ID : 264330460080

Option 3 ID : 264330460079

Option 4 ID : 264330460078

Status : Answered

Chosen Option : 4

Q.4 Select the correct combination of mathematical signs to sequentially replace the * signs and to balance the given equation.
 $65 * 81 * 9 * 10 * 8 * 8$

Ans

1. + + - × =

2. + + - × =

3. + + - = ×

4. + - + × =

Question ID : 26433085716

Option 1 ID : 264330336565

Option 2 ID : 264330336568

Option 3 ID : 264330336566

Option 4 ID : 264330336567

Status : Answered

Chosen Option : 3

Q.5 Which figure should replace the question mark (?) if the series were to be continued?

S	2	T	S	
△ X 2	O S X	E 2 S	△ T 2	?
P O	△ P	O △	E O	

Ans

✗ 1.

2		
O 7 T		
↑	△	

✗ 2.

7		
↑ E T		
O 2		

✓ 3.

7		
↑ S T		
△ E		

✗ 4.

2		
O S T		
△ E		

Question ID : 264330130816

Option 1 ID : 264330512377

Option 2 ID : 264330512378

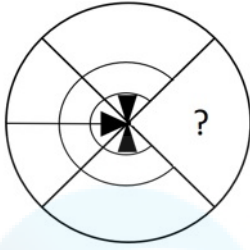
Option 3 ID : 264330512376

Option 4 ID : 264330512375

Status : Answered

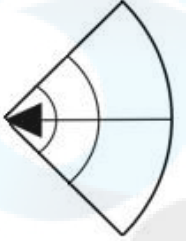
Chosen Option : 4

Q.6 Select the figure from the options that can replace the question mark (?) and complete the given pattern.

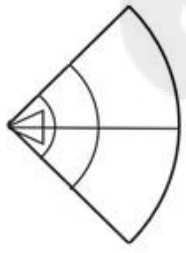


Ans

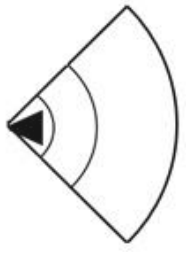
✓ 1.



✗ 2.



✗ 3.



✗ 4.



Question ID : 26433082914

Option 1 ID : 264330325492

Option 2 ID : 264330325489

Option 3 ID : 264330325491

Option 4 ID : 264330325490

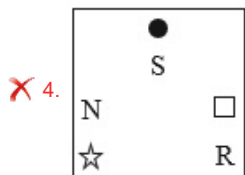
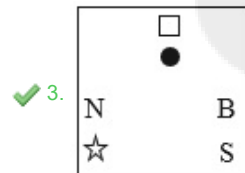
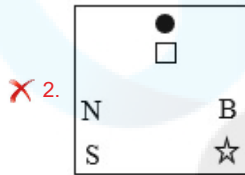
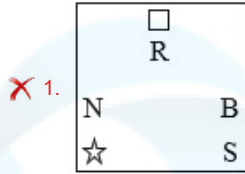
Status : Answered

Chosen Option : 1

Q.7 Select the figure from among the given options that can replace the question mark (?) in the following series.

T R	□ E	V ☆	B R	
N E	V S	N R	□ S	□ S
	N R		N ☆	?

Ans



Question ID : 26433090949

Option 1 ID : 264330357208

Option 2 ID : 264330357207

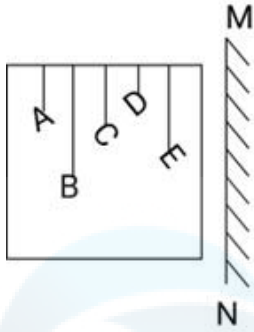
Option 3 ID : 264330357206

Option 4 ID : 264330357205

Status : Answered

Chosen Option : 4

Q.8 Select the correct mirror image of the given combination when the mirror is placed at 'MN' as shown below.



Ans

- 1.
- 2.
- 3.
- 4.

Question ID : 264330130764
 Option 1 ID : 264330512168
 Option 2 ID : 264330512170
 Option 3 ID : 264330512167
 Option 4 ID : 264330512169

Status : Answered
 Chosen Option : 2

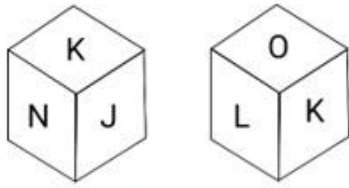
Q.9 Select the option that represents the letters that, when sequentially placed from left to right in the blanks below, will complete the letter series.
 D _ P _ U D N _ T _ _ _ P T U D _ _ T U

- Ans
- 1. TNUPDNNP
 - 2. NTUPNDPN
 - 3. TNPUNDPN
 - 4. NTPUDNNP

Question ID : 26433095980
 Option 1 ID : 264330376689
 Option 2 ID : 264330376690
 Option 3 ID : 264330376692
 Option 4 ID : 264330376691

Status : Answered
 Chosen Option : 4

Q.10 Six letters, J, K, L, M, N and O, are written on the different faces of a dice. Two positions of this dice are shown in the given figure. Find the letter on the face opposite to M.



Ans 1. L

2. K

3. O

4. N

Question ID : 264330106170

Option 1 ID : 264330416984

Option 2 ID : 264330416982

Option 3 ID : 264330416981

Option 4 ID : 264330416983

Status : Answered

Chosen Option : 2

Q.11 Six persons U, V, W, X, Y, Z are sitting in a circle facing each other. V is between X and W. U is between Y and W. Z is to the immediate right of X. Who is the immediate neighbour of both U and Z?

Ans 1. V

2. W

3. X

4. Y

Question ID : 26433086248

Option 1 ID : 264330338686

Option 2 ID : 264330338687

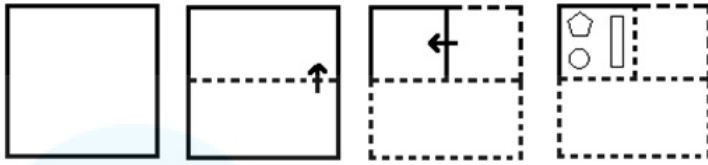
Option 3 ID : 264330338688

Option 4 ID : 264330338685

Status : Answered

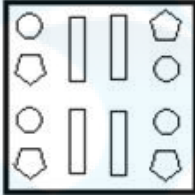
Chosen Option : 4

Q.12 The sequence of folding a piece of paper and the manner in which the folded paper is cut is shown in the following figures. How would this paper look when unfolded?

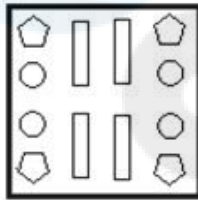


Ans

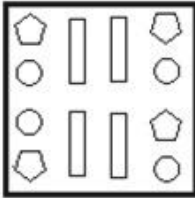
✗ 1.



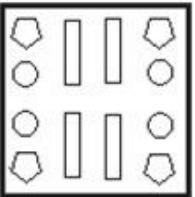
✓ 2.



✗ 3.



✗ 4.



Question ID : 26433074799
 Option 1 ID : 264330293284
 Option 2 ID : 264330293286
 Option 3 ID : 264330293287
 Option 4 ID : 264330293285

Status : Answered

Chosen Option : 2

Q.13 Which of the following option figures will complete the pattern in the figure given below?

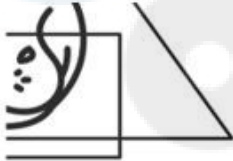


Ans

X 1.



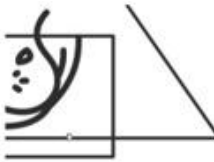
✓ 2.



X 3.



X 4.



Question ID : 26433089625

Option 1 ID : 264330352004

Option 2 ID : 264330352003

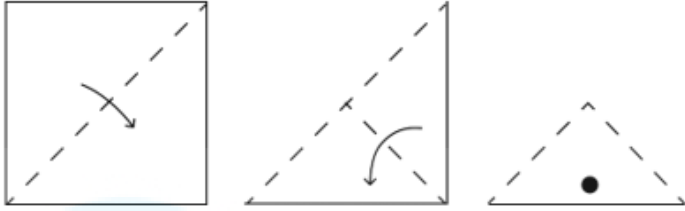
Option 3 ID : 264330352001

Option 4 ID : 264330352002

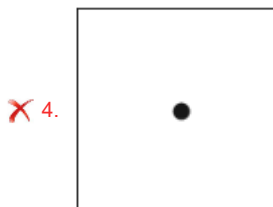
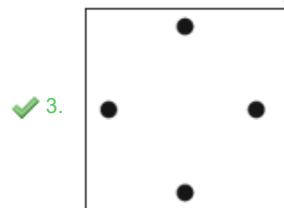
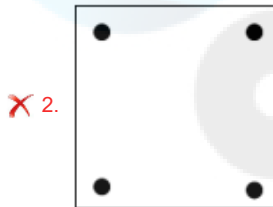
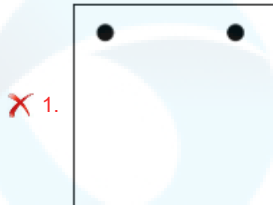
Status : Answered

Chosen Option : 4

Q.14 A square sheet of paper is folded along the dotted line successively along the directions shown and is then punched in the last. How would the paper look when unfolded?



Ans



Question ID : 264330172153

Option 1 ID : 264330675187

Option 2 ID : 264330675190

Option 3 ID : 264330675189

Option 4 ID : 264330675188

Status : Answered

Chosen Option : 3

Q.15 Select the number from among the given options that can replace the question mark (?) in the following series.

30, 45, 75, 135, 255, ?

Ans 1. 495

2. 634

3. 430

4. 568

Question ID : 264330109756

Option 1 ID : 264330431301

Option 2 ID : 264330431304

Option 3 ID : 264330431302

Option 4 ID : 264330431303

Status : Answered

Chosen Option : 1

Q.16 Which two signs should be interchanged to make the given equation correct?

$16 \div 4 + 20 \times 82 - 14 = 148$

Ans 1. = and \times

2. + and -

3. + and \times

4. + and =

Question ID : 26433085733

Option 1 ID : 264330336636

Option 2 ID : 264330336633

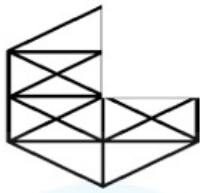
Option 3 ID : 264330336634

Option 4 ID : 264330336635

Status : Answered

Chosen Option : 3


Q.17 Select a figure from amongst the four given options which, when placed in the blank space of figure (X), would complete the pattern.



X

Ans

1.



2.



3.



4.



Question ID : 264330102216

Option 1 ID : 264330401330

Option 2 ID : 264330401332

Option 3 ID : 264330401331

Option 4 ID : 264330401329

Status : Answered

Chosen Option : 2

Q.18 In a certain code, if 15-20-17-2-7-0-18-5 denotes PURCHASE and 14-17-3-4-18 denotes ORDER, then what does 15-17-14-2-4-18-19 denote?

Ans 1. ARRANGE

2. PACKETS

3. PROCESS

4. PROCEED

Question ID : 264330100890

Option 1 ID : 264330396108

Option 2 ID : 264330396107

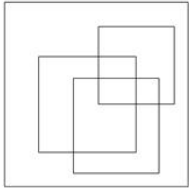
Option 3 ID : 264330396105

Option 4 ID : 264330396106

Status : Answered

Chosen Option : 3

Q.19 Select the option figure which is embedded in the given figure as its part (rotation is NOT allowed).



Ans

✓ 1.

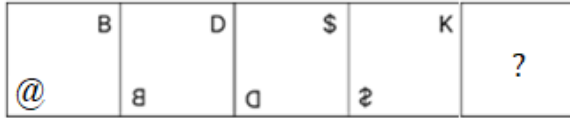
✗ 2.

✗ 3.

✗ 4.


Question ID : 26433076729
Option 1 ID : 264330300980
Option 2 ID : 264330300982
Option 3 ID : 264330300981
Option 4 ID : 264330300983
Status : Answered
Chosen Option : 1

Q.20 Given below is a series of figures – A, B, C and D which follow a particular pattern. Which of the given option figures should come in place of E to continue the series?



(A) (B) (C) (D) (E)

Ans



Question ID : 264330113643

Option 1 ID : 264330446657

Option 2 ID : 264330446659

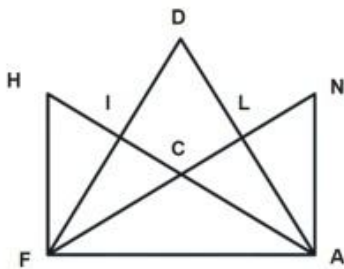
Option 3 ID : 264330446660

Option 4 ID : 264330446658

Status : Answered

Chosen Option : 4

Q.21 How many triangles are there in the given figure?



Ans ✗ 1. 25

✗ 2. 19

✗ 3. 11

✓ 4. 14

Question ID : 26433080670

Option 1 ID : 264330316616

Option 2 ID : 264330316614

Option 3 ID : 264330316613

Option 4 ID : 264330316615

Status : Answered

Chosen Option : 3

Q.22 Select the option that is related to the fourth number in the same way as the first number is related to the second number and the fifth number is related to the sixth number.

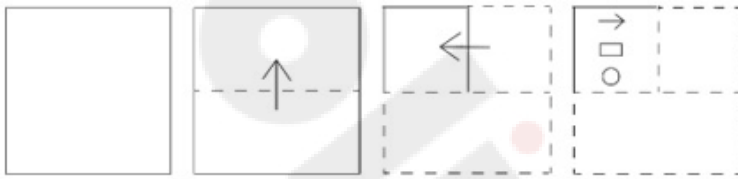
311 : 1244 :: ? : 1760 :: 531 : 2124

- Ans
- 1. 395
 - 2. 410
 - 3. 440
 - 4. 352



Question ID : 26433052017
 Option 1 ID : 264330203370
 Option 2 ID : 264330203371
 Option 3 ID : 264330203372
 Option 4 ID : 264330203373
 Status : Answered
 Chosen Option : 3

Q.23 A paper is folded and cut as shown below. How will it appear when unfolded?



Ans

- 1.
- 2.
- 3.
- 4.

Question ID : 264330112987
 Option 1 ID : 264330444033
 Option 2 ID : 264330444035
 Option 3 ID : 264330444034
 Option 4 ID : 264330444036
 Status : Answered
 Chosen Option : 4

Q.24 Select the option that is related to the fifth letter-cluster in the same way as the second letter-cluster is related to the first letter-cluster and the fourth letter-cluster is related to the third letter-cluster.
INCH : EKAG :: INKS : EKIR :: IDOL : ?

- Ans
- 1. DAML
 - 2. EANJ
 - 3. EAMK
 - 4. EANK

Question ID : 26433076457
Option 1 ID : 264330299892
Option 2 ID : 264330299894
Option 3 ID : 264330299893
Option 4 ID : 264330299895
Status : Answered
Chosen Option : 3

Q.25 Two statements are given followed by two conclusions numbered I and II. Assuming the statements to be true, even if they seem to be at variance from commonly known facts, decide which of the conclusions logically follow(s) from the statements.

Statements:
Some Baskets are Cakes.
Some Cakes are Tarts.

Conclusions:
I. Some Cakes are Baskets.
II. Some Tarts are Cakes.

- Ans
- 1. Only conclusion I follows.
 - 2. Only conclusion II follows.
 - 3. Neither conclusion I nor II follows.
 - 4. Both conclusions I and II follow.

Question ID : 26433076605
Option 1 ID : 264330300484
Option 2 ID : 264330300485
Option 3 ID : 264330300487
Option 4 ID : 264330300486
Status : Answered
Chosen Option : 4

Section : Numerical Ability

Q.1 The radius of a sphere is 1.65 cm. Find the exact surface area (in cm^2) of this sphere.

- Ans
- 1. 10.79π
 - 2. 10.69π
 - 3. 10.89π
 - 4. 10.99π

Question ID : 264330112559
Option 1 ID : 264330442322
Option 2 ID : 264330442321
Option 3 ID : 264330442324
Option 4 ID : 264330442323
Status : Answered
Chosen Option : 3

Q.2 The ratio of the number of boys to that of the girls in a school is 9 : 13. If the total number of boys and girls in the school is 2134, what is the number of boys in that school?

- Ans
- 1. 855
 - 2. 891
 - 3. 882
 - 4. 873

Question ID : 264330131166
Option 1 ID : 264330513778
Option 2 ID : 264330513775
Option 3 ID : 264330513776
Option 4 ID : 264330513777
Status : Answered
Chosen Option : 4

Q.3 The price of a computer is ₹34,000. What will be the price of the computer (in ₹) after a reduction of 17%?

- Ans
- 1. 26,200
 - 2. 30,500
 - 3. 28,220
 - 4. 27,380

Question ID : 264330103465
Option 1 ID : 264330406168
Option 2 ID : 264330406166
Option 3 ID : 264330406165
Option 4 ID : 264330406167
Status : Answered
Chosen Option : 3

Q.4 The average height of 16 students of a group is 160 cm. If the average height of the first 6 students in the group is 150 cm and those of the last 8 students is 165 cm, then find the average height of the remaining two students, in cm.

- Ans
- 1. 340
 - 2. 260
 - 3. 170
 - 4. 150

Question ID : 264330118041
Option 1 ID : 264330463979
Option 2 ID : 264330463980
Option 3 ID : 264330463981
Option 4 ID : 264330463982
Status : Answered
Chosen Option : 3

Q.5 The salaries of P and Q together amount to ₹4,32,000. P and Q spend 75% and 61% of their salaries, respectively. If their savings are equal, then what is P's salary?

- Ans
- 1. ₹2,36,750
 - 2. ₹2,63,750
 - 3. ₹2,63,250
 - 4. ₹2,36,250

Question ID : 264330177579
Option 1 ID : 264330696432
Option 2 ID : 264330696434
Option 3 ID : 264330696433
Option 4 ID : 264330696431
Status : Answered
Chosen Option : 3

Q.6 The simple interest on ₹24,000 at a certain rate of interest for 3 years is ₹7,200. What will be the compound interest(compounded annually) on the same sum at the same rate and for the same time?

- Ans
- 1. ₹7,954
 - 2. ₹7,854
 - 3. ₹7,845
 - 4. ₹7,944

Question ID : 264330104196
Option 1 ID : 264330409085
Option 2 ID : 264330409087
Option 3 ID : 264330409088
Option 4 ID : 264330409086
Status : Answered
Chosen Option : 4

Q.7 What is the difference between the total surface area and the curved area of a hemisphere having a diameter of 14 cm? (Use $\pi = \frac{22}{7}$)

- Ans
- 1. 180 cm²
 - 2. 108 cm²
 - 3. 154 cm²
 - 4. 148 cm²

Question ID : 264330119368
Option 1 ID : 264330467762
Option 2 ID : 264330467759
Option 3 ID : 264330467761
Option 4 ID : 264330467760
Status : Answered
Chosen Option : 3

Q.8 A garrison of 1500 men has provisions for 12 days. How long will the provisions last if the garrison is increased to 2000 men?

- Ans 1. 12 days
 2. 9 days
 3. 10 days
 4. 6 days

Question ID : 264330182581
Option 1 ID : 264330716118
Option 2 ID : 264330716116
Option 3 ID : 264330716117
Option 4 ID : 264330716115
Status : Answered
Chosen Option : 2

Q.9 Which of the following numbers is greater than the sum of all the prime factors of 1560?

- Ans 1. 21
 2. 22
 3. 23
 4. 41

Question ID : 264330109232
Option 1 ID : 264330429206
Option 2 ID : 264330429208
Option 3 ID : 264330429205
Option 4 ID : 264330429207
Status : Answered
Chosen Option : 4

Q.10 राम ने किशन से 20% साधारण ब्याज पर ₹30,000 का ऋण लिया। वह 4 वर्ष के लिए 1 वर्ष के अंत में चार समान किस्तों में ब्याज सहित ऋण चुकाने के लिए सहमत होता है। हालाँकि, किशन एक शर्त रखता है कि वह तब तक उधार दी गई मूल राशि पर ब्याज की गणना करता रहेगा, जब तक कि राम पूरी तरह से अपना ऋण चुका नहीं देता। प्रत्येक किस्त की धनराशि क्या होगी?

- Ans 1. ₹12,450
 2. ₹11,500
 3. ₹13,500
 4. ₹13,000

Question ID : 264330118086
Option 1 ID : 264330464160
Option 2 ID : 264330464162
Option 3 ID : 264330464159
Option 4 ID : 264330464161
Status : Answered
Chosen Option : 3

Q.11 Simplify $(0.85 \times 3.4 \times 2.4) \div 0.3$.

- Ans
- 1. 24.04
 - 2. 24.34
 - 3. 23.02
 - 4. 23.12

Question ID : 264330111443
Option 1 ID : 264330437857
Option 2 ID : 264330437858
Option 3 ID : 264330437859
Option 4 ID : 264330437860
Status : Answered
Chosen Option : 4

Q.12 The marked price of a table lamp is ₹1,500. If the marked price is 20% above the cost price and the table lamp is sold at a discount of 10%, then find the profit percentage.

- Ans
- 1. 7%
 - 2. 9%
 - 3. 8%
 - 4. 10%

Question ID : 264330123978
Option 1 ID : 264330485744
Option 2 ID : 264330485746
Option 3 ID : 264330485745
Option 4 ID : 264330485747
Status : Answered
Chosen Option : 3

Q.13 Aman bought two chairs for ₹1,800. He sold the first chair at a 12% profit and the second one at a 20% profit. Had he sold the first chair at a 20% profit and the second one at a 12% profit, he would have received ₹36 more. Find the difference between the cost-price of the two chairs.

- Ans
- 1. ₹450
 - 2. ₹650
 - 3. ₹525
 - 4. ₹675

Question ID : 264330104406
Option 1 ID : 264330409925
Option 2 ID : 264330409928
Option 3 ID : 264330409927
Option 4 ID : 264330409926
Status : Answered
Chosen Option : 1

Q.14 The LCM of two numbers is 18 times their HCF. The sum of the LCM and HCF is 855. If one number is 81, then what is the other number?

- Ans
- 1. 458
 - 2. 450
 - 3. 440
 - 4. 448

Question ID : 264330104269
Option 1 ID : 264330409377
Option 2 ID : 264330409378
Option 3 ID : 264330409380
Option 4 ID : 264330409379
Status : Answered
Chosen Option : 2

Q.15 काजल अपनी साइकिल से स्कूल जाती है। यदि वह 4 km/h अधिक चाल से चलती है, तो वह निर्धारित समय से 3 मिनट पहले स्कूल पहुंचती है, यदि वह 2 km/h कम चाल से चलती है, तो वह निर्धारित समय से 2 मिनट बाद स्कूल पहुंचती है। उसके घर से स्कूल की दूरी (Km में) कितनी है?

- Ans
- 1. 4
 - 2. 3
 - 3. 8
 - 4. 6

Question ID : 264330108985
Option 1 ID : 264330428217
Option 2 ID : 264330428220
Option 3 ID : 264330428219
Option 4 ID : 264330428218
Status : Answered
Chosen Option : 2

Section : Computer Proficiency

Q.1 Which of the following statements related to attaching a file to an email is correct?

- Ans
- 1. Writing a subject field is mandatory while sending an attachment.
 - 2. We can't use CC field while sending an attachment.
 - 3. We can't attach an audio file in an email attachment.
 - 4. In Gmail, If your file is greater than 25 MB, Gmail automatically adds a Google Drive link in the email instead of including it as an attachment.

Question ID : 264330180383
Option 1 ID : 264330707501
Option 2 ID : 264330707500
Option 3 ID : 264330707499
Option 4 ID : 264330707502
Status : Answered
Chosen Option : 1

Q.2 एमएस वर्ड 365 (MS Word 365) में निम्नलिखित में से किस विकल्प से आप किसी डॉक्यूमेंट के लेआउट के विभिन्न पहलुओं, जैसे पेपर साइज़, मार्जिन, ओरिएंटेशन और पेज नंबरिंग को अनुकूलित कर सकते हैं?

- Ans
- 1. डॉक्यूमेंट इंस्पेक्टर
 - 2. प्रिंट लेआउट व्यू
 - 3. पेज सेटअप
 - 4. नेविगेशन पेन

Question ID : 264330173343
Option 1 ID : 264330679854
Option 2 ID : 264330679851
Option 3 ID : 264330679852
Option 4 ID : 264330679853
Status : Answered
Chosen Option : 3

Q.3 Which of the following is NOT a characteristic of communication on the internet?

- Ans
- 1. It is asynchronous.
 - 2. It is interactive.
 - 3. It is global.
 - 4. It is always private.

Question ID : 264330178555
Option 1 ID : 264330700247
Option 2 ID : 264330700248
Option 3 ID : 264330700249
Option 4 ID : 264330700250
Status : Answered
Chosen Option : 2

Q.4 In MS Excel 365, if you set a row height to 0 (zero), what happens to the row?

- Ans
- 1. It hides the row.
 - 2. It asks for a new value.
 - 3. It sets the default height.
 - 4. It returns to the last entered value.

Question ID : 264330180632
Option 1 ID : 264330708497
Option 2 ID : 264330708495
Option 3 ID : 264330708496
Option 4 ID : 264330708498
Status : Answered
Chosen Option : 2

Q.5 In Microsoft Excel 365, which of the following functions is used for displaying the current date?

- Ans
- 1. Time()
 - 2. Now()
 - 3. Today()
 - 4. Day()

Question ID : 264330182058
Option 1 ID : 264330714072
Option 2 ID : 264330714071
Option 3 ID : 264330714073
Option 4 ID : 264330714074
Status : Answered
Chosen Option : 2

Q.6 In MS Excel 365, what is the keyboard shortcut to automatically adjust the width of a column to fit the content in Excel?

- Ans
- 1. Ctrl + W
 - 2. Ctrl + Spacebar
 - 3. Ctrl + A
 - 4. ALT + H then O and then I

Question ID : 264330177664
Option 1 ID : 264330696771
Option 2 ID : 264330696774
Option 3 ID : 264330696772
Option 4 ID : 264330696773
Status : Answered
Chosen Option : 2

Q.7 When we press the control key with the letter E, what happens to the text in the MS-Word 365?

- Ans
- 1. It selects the whole content on the file.
 - 2. Right aligns the contents on the page.
 - 3. Centers the contents on the page.
 - 4. Left aligns the contents on the page.

Question ID : 264330171417
Option 1 ID : 264330672286
Option 2 ID : 264330672284
Option 3 ID : 264330672285
Option 4 ID : 264330672283
Status : Answered
Chosen Option : 3

Q.8 Which action in MS-Word 365, allows you to remove selected text from its original location and place it on the clipboard?

- Ans
- 1. Copy
 - 2. Cut
 - 3. Paste
 - 4. Select All

Question ID : 264330173355
Option 1 ID : 264330679900
Option 2 ID : 264330679899
Option 3 ID : 264330679901
Option 4 ID : 264330679902
Status : Answered
Chosen Option : 2

Q.9 Which of the following is the shortcut key to Paste text in MS Word 365?

- Ans
- 1. Ctrl+Shift+V
 - 2. Shift+V
 - 3. Ctrl+V
 - 4. Ctrl+C

Question ID : 264330176727
Option 1 ID : 264330693125
Option 2 ID : 264330693126
Option 3 ID : 264330693123
Option 4 ID : 264330693124
Status : Answered
Chosen Option : 3

Q.10 Which of the following is NOT a common method of opening a document in a web-based document editor like Google Docs?

- Ans**
- ✓ 1. Typing the entire document from scratch
 - ✗ 2. Creating a new document from a template
 - ✗ 3. Importing a document from a web link
 - ✗ 4. Uploading the document from your computer

Question ID : 264330180843

Option 1 ID : 264330709336

Option 2 ID : 264330709337

Option 3 ID : 264330709338

Option 4 ID : 264330709335

Status : Answered

Chosen Option : 4