

## Constable Executive Male and Female in Delhi Police Examination 2023

Roll Number	
Candidate Name	
Venue Name	
Exam Date	03/12/2023
Exam Time	9:00 AM - 10:30 AM
Subject	Constable Executive Male and Female in Delhi Police Examination 2023

Section : General Knowledge

Q.1 Which of the following players is associated with para-badminton?

- Ans
- 1. Sumit Antil
  - 2. Manish Narwal
  - 3. Avani Lekhara
  - 4. Krishna Nagar

Question ID : 264330118891  
Option 1 ID : 264330466222  
Option 2 ID : 264330466221  
Option 3 ID : 264330466220  
Option 4 ID : 264330466219  
Status : Not Answered  
Chosen Option : --

Q.2 According to the Census of India 2011, which is the second most literate state in India?

- Ans
- 1. Mizoram
  - 2. Karnataka
  - 3. Odisha
  - 4. Tripura

Question ID : 264330182972  
Option 1 ID : 264330717621  
Option 2 ID : 264330717620  
Option 3 ID : 264330717623  
Option 4 ID : 264330717622  
Status : Not Answered  
Chosen Option : --

Q.3 Sitara Devi was a \_\_\_\_\_ dancer of India.

- Ans
- 1. Kuchipudi
  - 2. Kathak
  - 3. Bharatanatyam
  - 4. Kathakali

Question ID : 26433094876  
Option 1 ID : 264330372328  
Option 2 ID : 264330372326  
Option 3 ID : 264330372327  
Option 4 ID : 264330372325  
Status : Not Answered  
Chosen Option : --

Q.4 Avani Lekhara is associated with which of the following sports?

- Ans
- 1. Freestyle wrestling
  - 2. Para-athletics
  - 3. Para-badminton
  - 4. Paralympic shooting

Question ID : 264330176742  
Option 1 ID : 264330693185  
Option 2 ID : 264330693183  
Option 3 ID : 264330693184  
Option 4 ID : 264330693186  
Status : Not Answered  
Chosen Option : --

Q.5 Which of the following Articles are related to Right Against Exploitation?

- Ans
- 1. Article 28-29
  - 2. Article 23-24
  - 3. Article 31-32
  - 4. Article 25-26

Question ID : 264330173491  
Option 1 ID : 264330680445  
Option 2 ID : 264330680443  
Option 3 ID : 264330680446  
Option 4 ID : 264330680444  
Status : Answered  
Chosen Option : 3

Q.6 In 8<sup>th</sup> century India, Nagabhata I established which of the following Rajput dynasties in Malwa region?

- Ans
- 1. Tomara
  - 2. Gurjara-Pratihara
  - 3. Chauhan
  - 4. Parmara

Question ID : 264330175620  
Option 1 ID : 264330688802  
Option 2 ID : 264330688799  
Option 3 ID : 264330688800  
Option 4 ID : 264330688801  
Status : Answered  
Chosen Option : 2

Q.7 In which of the following years was the Election Commission of India established?

- Ans
- 1. 1954
  - 2. 1957
  - 3. 1950
  - 4. 1960

Question ID : 26433086825  
Option 1 ID : 264330340943  
Option 2 ID : 264330340942  
Option 3 ID : 264330340944  
Option 4 ID : 264330340941  
Status : Not Answered  
Chosen Option : --

Q.8 Which Satavahana king restored the Satavahana realm to its earlier greatness around 125 CE?

- Ans  1. Gautamiputra  
 2. Krishna III  
 3. Mihira Bhoja  
 4. Rajaraja I

Question ID : 264330120140  
Option 1 ID : 264330470815  
Option 2 ID : 264330470817  
Option 3 ID : 264330470816  
Option 4 ID : 264330470818  
Status : Not Answered  
Chosen Option : --

Q.9 Harmika is one of the features of \_\_\_\_\_ in Buddhist architecture.

- Ans  1. chaityas  
 2. pillars  
 3. viharas  
 4. stupas

Question ID : 26433086647  
Option 1 ID : 264330340229  
Option 2 ID : 264330340232  
Option 3 ID : 264330340231  
Option 4 ID : 264330340230  
Status : Not Answered  
Chosen Option : --

Q.10 The federal scheme, Judiciary and Governors system of the Constitution of India are drawn from the \_\_\_\_\_.

- Ans  1. Government of India Act, 1919  
 2. Government of India Act, 1935  
 3. Government of India Act of 1942  
 4. Government of India Act of 1945

Question ID : 264330130429  
Option 1 ID : 264330510827  
Option 2 ID : 264330510828  
Option 3 ID : 264330510829  
Option 4 ID : 264330510830  
Status : Answered  
Chosen Option : 2

Q.11 In which Olympics did Abhinav Bindra win the gold medal in Men's 10 m air rifle shooting?

- Ans  1. London 2012  
 2. Athens 2004  
 3. Beijing 2008  
 4. Rio 2016

Question ID : 264330119261  
Option 1 ID : 264330467332  
Option 2 ID : 264330467331  
Option 3 ID : 264330467333  
Option 4 ID : 264330467334  
Status : Not Answered  
Chosen Option : --

**Q.12 Who among the following gave the famous words, 'One Caste, One Religion, One God for all men'?**

- Ans**  1. Sri Narayana Guru  
 2. Jyotirao Phule  
 3. Swami Vivekananda  
 4. Raja Ram Mohan Roy

Question ID : 264330119012  
Option 1 ID : 264330466705  
Option 2 ID : 264330466706  
Option 3 ID : 264330466703  
Option 4 ID : 264330466704  
Status : Not Answered  
Chosen Option : --

**Q.13 By which Constitutional Amendment Act can the same person be appointed as the Governor of two or more states?**

- Ans**  1. 9<sup>th</sup> Constitutional Amendment Act  
 2. 11<sup>th</sup> Constitutional Amendment Act  
 3. 7<sup>th</sup> Constitutional Amendment Act  
 4. 18<sup>th</sup> Constitutional Amendment Act

Question ID : 264330177771  
Option 1 ID : 264330697192  
Option 2 ID : 264330697193  
Option 3 ID : 264330697191  
Option 4 ID : 264330697194  
Status : Not Answered  
Chosen Option : --

**Q.14 Dark patches on the sun are referred to as:**

- Ans**  1. sun spots  
 2. dark spots  
 3. moon spots  
 4. earth spots

Question ID : 264330131733  
Option 1 ID : 264330516034  
Option 2 ID : 264330516031  
Option 3 ID : 264330516032  
Option 4 ID : 264330516033  
Status : Answered  
Chosen Option : 1

**Q.15 which of the following materials were pillars in Stupas built during Ashoka's reign?**

- Ans**  1. Granite  
 2. Stone  
 3. Marble  
 4. Bricks

Question ID : 264330106225  
Option 1 ID : 264330417201  
Option 2 ID : 264330417203  
Option 3 ID : 264330417204  
Option 4 ID : 264330417202  
Status : Answered  
Chosen Option : 2

Q.16 जीडीपी (GDP) के संबंध में निम्नलिखित में से कौन सा कथन सही है?  
I. जीडीपी का उपयोग मानव विकास को मापने के लिए किया जाता है।  
II. जीडीपी का प्राक्कलन करते समय बाह्यताओं को नहीं लिया जाता है।  
III. जीडीपी का प्राक्कलन करते समय गृहिणियों द्वारा प्रदान की जाने वाली सेवाओं को शामिल किया जाता है।

- Ans
- 1. केवल III
  - 2. केवल II
  - 3. केवल I और II
  - 4. केवल I

Question ID : 264330141493  
Option 1 ID : 264330554310  
Option 2 ID : 264330554309  
Option 3 ID : 264330554308  
Option 4 ID : 264330554307  
Status : Answered  
Chosen Option : 2

Q.17 Who among the following was the son of Ustad Allauddin Khan?

- Ans
- 1. Aamir Khan
  - 2. Ali Akbar Khan
  - 3. Amjad Ali Khan
  - 4. Jakir Husain

Question ID : 26433074125  
Option 1 ID : 264330290622  
Option 2 ID : 264330290621  
Option 3 ID : 264330290620  
Option 4 ID : 264330290623  
Status : Not Answered  
Chosen Option : --

Q.18 In which Five-Year Plan was the family planning programme undertaken?

- Ans
- 1. 4th Five-Year Plan
  - 2. 5th Five-Year Plan
  - 3. 7th Five-Year Plan
  - 4. 2nd Five-Year Plan

Question ID : 264330120209  
Option 1 ID : 264330471092  
Option 2 ID : 264330471093  
Option 3 ID : 264330471094  
Option 4 ID : 264330471091  
Status : Not Answered  
Chosen Option : --

Q.19 Which of the following is NOT an Indian multinational company?

- Ans
- 1. Arvind Mills Limited
  - 2. General Motors Company
  - 3. Tata Consultancy Services Limited
  - 4. Asian Paints Limited

Question ID : 264330112489  
Option 1 ID : 264330442041  
Option 2 ID : 264330442044  
Option 3 ID : 264330442042  
Option 4 ID : 264330442043  
Status : Answered  
Chosen Option : 2

Q.20 The HPCL Rajasthan Refinery Ltd (HRRL) is being constructed in which district (as of December 2022)?

- Ans
- 1. Barmer
  - 2. Jalore
  - 3. Jaisalmer
  - 4. Bikaner

Question ID : 264330120316  
Option 1 ID : 264330471515  
Option 2 ID : 264330471518  
Option 3 ID : 264330471516  
Option 4 ID : 264330471517  
Status : Not Answered  
Chosen Option : --

Q.21 A follower of Gokhale, Narayan Malhar Joshi founded the Social Service League in Bombay, in which of the following years?

- Ans
- 1. 1914
  - 2. 1913
  - 3. 1911
  - 4. 1912

Question ID : 264330171701  
Option 1 ID : 264330673410  
Option 2 ID : 264330673409  
Option 3 ID : 264330673407  
Option 4 ID : 264330673408  
Status : Not Answered  
Chosen Option : --

Q.22 'Unbreakable' is an autobiography of an Indian Boxer \_\_\_\_\_ and co-authored by Dina Serto.

- Ans
- 1. Mary Kom
  - 2. Laishram Sarita Devi
  - 3. Lovlina Borgohain
  - 4. Vijender Singh

Question ID : 264330112859  
Option 1 ID : 264330443523  
Option 2 ID : 264330443524  
Option 3 ID : 264330443521  
Option 4 ID : 264330443522  
Status : Not Answered  
Chosen Option : --

**Q.23** Conservation of biological diversity and sustainable use of its components are the main objectives of which of the following treaties/protocols?

- Ans  1. Nagoya protocol  
 2. Rio protocol  
 3. Geneva protocol  
 4. Montreal protocol

Question ID : 264330111900  
Option 1 ID : 264330439686  
Option 2 ID : 264330439687  
Option 3 ID : 264330439688  
Option 4 ID : 264330439685  
Status : Not Answered  
Chosen Option : --

**Q.24** The Hindustan Republican Association was reorganised into Hindustan Socialist Republican Association (HSRA) at Feroz Shah Kotla Ground in Delhi on 8<sup>th</sup> and 9<sup>th</sup> September \_\_\_\_\_.

- Ans  1. 1927  
 2. 1930  
 3. 1929  
 4. 1928

Question ID : 264330166875  
Option 1 ID : 264330654535  
Option 2 ID : 264330654538  
Option 3 ID : 264330654537  
Option 4 ID : 264330654536  
Status : Not Answered  
Chosen Option : --

**Q.25** Gopika Verma, the famous \_\_\_\_\_ dancer received various awards, including the Sangeet Natak Akademi Award in 2018.

- Ans  1. Mohiniattam  
 2. Odissi  
 3. Bharatanatyam  
 4. Sattriya

Question ID : 264330111966  
Option 1 ID : 264330439950  
Option 2 ID : 264330439949  
Option 3 ID : 264330439952  
Option 4 ID : 264330439951  
Status : Not Answered  
Chosen Option : --

Q.26 Which of the following is the first national park that was established in India?

- Ans
- 1. Gir National Park
  - 2. Kaziranga National Park
  - 3. Jim Corbett National Park
  - 4. Rajaji National Park

Question ID : 264330179024  
Option 1 ID : 264330702102  
Option 2 ID : 264330702101  
Option 3 ID : 264330702100  
Option 4 ID : 264330702099  
Status : Answered  
Chosen Option : 4

Q.27 The government budget is prepared under which article of the Constitution of India?

- Ans
- 1. Article 109
  - 2. Article 101
  - 3. Article 100
  - 4. Article 112

Question ID : 264330120863  
Option 1 ID : 264330473669  
Option 2 ID : 264330473668  
Option 3 ID : 264330473667  
Option 4 ID : 264330473670  
Status : Answered  
Chosen Option : 4

Q.28 Who among the following is the exponent of mandolin?

- Ans
- 1. N Rajam
  - 2. N Ramani
  - 3. U Srinivas
  - 4. Annapurna Devi

Question ID : 264330111938  
Option 1 ID : 264330439839  
Option 2 ID : 264330439837  
Option 3 ID : 264330439838  
Option 4 ID : 264330439840  
Status : Not Answered  
Chosen Option : --

Q.29 The terms Mahari and Gotipua are associated with which Indian classical dance form?

- Ans
- 1. Kuchipudi
  - 2. Odissi
  - 3. Sattriya
  - 4. Manipuri

Question ID : 264330132387  
Option 1 ID : 264330518646  
Option 2 ID : 264330518644  
Option 3 ID : 264330518645  
Option 4 ID : 264330518643  
Status : Not Answered  
Chosen Option : --

**Q.30** Who among the following was the Chief Guest in the Republic Day Parade organised at Rajpath in the year 1955?

- Ans
- 1. Abdel Fatah-al-Sisi
  - 2. General Malik Ghulam Muhammad
  - 3. Queen Elizabeth II
  - 4. Nelson Mandela

Question ID : 264330182990  
Option 1 ID : 264330717694  
Option 2 ID : 264330717695  
Option 3 ID : 264330717693  
Option 4 ID : 264330717692  
Status : Not Answered  
Chosen Option : --

**Q.31** \_\_\_\_\_ is related to hockey.

- Ans
- 1. Thomas Cup
  - 2. Ranji Trophy
  - 3. Aga Khan Cup
  - 4. Davis Cup

Question ID : 264330133032  
Option 1 ID : 264330521185  
Option 2 ID : 264330521184  
Option 3 ID : 264330521183  
Option 4 ID : 264330521186  
Status : Not Answered  
Chosen Option : --

**Q.32** The Make in India Scheme of the Government is administered under the \_\_\_\_\_ .

- Ans
- 1. Ministry of External Affairs
  - 2. Ministry of Commerce & Industry
  - 3. Ministry of Finance
  - 4. Ministry of Electronics & Information Technology

Question ID : 264330109117  
Option 1 ID : 264330428748  
Option 2 ID : 264330428745  
Option 3 ID : 264330428746  
Option 4 ID : 264330428747  
Status : Answered  
Chosen Option : 2

**Q.33** As per Census of India 2011, identify the state in which the population density was recorded more than 100 people / sq.km.

- Ans
- 1. Arunachal Pradesh
  - 2. Mizoram
  - 3. Sikkim
  - 4. Rajasthan

Question ID : 264330179428  
Option 1 ID : 264330703715  
Option 2 ID : 264330703718  
Option 3 ID : 264330703717  
Option 4 ID : 264330703716  
Status : Not Answered  
Chosen Option : --

**Q.34** What was the major approach of the Second Five-Year Plan towards industrialisation?

- Ans
- 1. Focus on infrastructure so as to create employment opportunities in the urban areas
  - 2. Expansion of the public sector so as to create a base of heavy industry
  - 3. Focus on mass consumption goods so as to control inflation
  - 4. Expansion of the cottage industry so as to create employment opportunities in the rural areas

Question ID : 264330112479  
Option 1 ID : 264330442004  
Option 2 ID : 264330442003  
Option 3 ID : 264330442001  
Option 4 ID : 264330442002  
Status : Not Answered  
Chosen Option : --

**Q.35** Which of the following rivers is known as Dakshin Ganga?

- Ans
- 1. Tapi
  - 2. Narmada
  - 3. Kaveri
  - 4. Godavari

Question ID : 264330117637  
Option 1 ID : 264330462576  
Option 2 ID : 264330462573  
Option 3 ID : 264330462574  
Option 4 ID : 264330462575  
Status : Not Answered  
Chosen Option : --

**Q.36** In which state is the Kundang Lem Festival celebrated?

- Ans
- 1. Madhya Pradesh
  - 2. Punjab
  - 3. Kerala
  - 4. Nagaland

Question ID : 264330113176  
Option 1 ID : 264330444792  
Option 2 ID : 264330444789  
Option 3 ID : 264330444791  
Option 4 ID : 264330444790  
Status : Not Answered  
Chosen Option : --

**Q.37** Which state is the leading producer of Jowar as of 2022?

- Ans
- 1. Andhra Pradesh
  - 2. Uttar Pradesh
  - 3. Maharashtra
  - 4. Odisha

Question ID : 264330131749  
Option 1 ID : 264330516095  
Option 2 ID : 264330516098  
Option 3 ID : 264330516096  
Option 4 ID : 264330516097  
Status : Not Answered  
Chosen Option : --

Q.38 In which of the following years was the Child Marriage Restraint Act passed in India?

- Ans
- 1. 1951
  - 2. 1929
  - 3. 1936
  - 4. 1947

Question ID : 264330119023  
Option 1 ID : 264330466747  
Option 2 ID : 264330466750  
Option 3 ID : 264330466749  
Option 4 ID : 264330466748  
Status : Answered  
Chosen Option : 1

Q.39 Which of the following type of biome have the subtype called as 'Tropical Savannah'?

- Ans
- 1. desert
  - 2. forest
  - 3. aquatic
  - 4. grassland

Question ID : 264330178109  
Option 1 ID : 264330698500  
Option 2 ID : 264330698499  
Option 3 ID : 264330698502  
Option 4 ID : 264330698501  
Status : Not Answered  
Chosen Option : --

Q.40 Which Ministry is responsible for collecting data and publishing literacy rates in India?

- Ans
- 1. Ministry of Statistics and Programme Implementation
  - 2. Ministry of Rural Development
  - 3. Ministry of External Affairs
  - 4. Ministry of Education

Question ID : 264330183037  
Option 1 ID : 264330717881  
Option 2 ID : 264330717882  
Option 3 ID : 264330717883  
Option 4 ID : 264330717880  
Status : Answered  
Chosen Option : 1

Q.41 The collegium system of appointment of Judges to the High Court and Supreme Court came into existence by virtue of \_\_\_\_\_.

- Ans
- 1. a decision by the Cabinet Committee
  - 2. a Constitutional Amendment
  - 3. an act of Parliament
  - 4. a result of three separate cases before the Supreme Court

Question ID : 264330130478  
Option 1 ID : 264330511026  
Option 2 ID : 264330511024  
Option 3 ID : 264330511025  
Option 4 ID : 264330511023  
Status : Answered  
Chosen Option : 3

Q.42 The last ruler of the Mauryan Empire was:

- Ans
- 1. Dasharatha Maurya
  - 2. Shalishuka
  - 3. Samprati
  - 4. Brihadratha

Question ID : 264330171663  
Option 1 ID : 264330673256  
Option 2 ID : 264330673257  
Option 3 ID : 264330673255  
Option 4 ID : 264330673258  
Status : Answered  
Chosen Option : 4

Q.43 The Anglo-Mysore Wars were a series of \_\_\_\_\_ wars fought during the 18th century between the rulers of Mysore and the English East India Company.

- Ans
- 1. three
  - 2. six
  - 3. two
  - 4. four

Question ID : 264330119767  
Option 1 ID : 264330469346  
Option 2 ID : 264330469343  
Option 3 ID : 264330469345  
Option 4 ID : 264330469344  
Status : Answered  
Chosen Option : 1

Q.44 From which of the following countries were the principles of liberty, equality and fraternity taken in the Indian Constitution?

- Ans
- 1. United Kingdom
  - 2. France
  - 3. Ireland
  - 4. United States of America

Question ID : 264330130446  
Option 1 ID : 264330510897  
Option 2 ID : 264330510895  
Option 3 ID : 264330510896  
Option 4 ID : 264330510898  
Status : Answered  
Chosen Option : 4

Q.45 Which of the following classical dances is associated with Saint Srimanta Sankardev?

- Ans
- 1. Mohiniyattam
  - 2. Odissi
  - 3. Sattriya
  - 4. Kathakali

Question ID : 264330110403  
Option 1 ID : 264330433890  
Option 2 ID : 264330433891  
Option 3 ID : 264330433892  
Option 4 ID : 264330433889  
Status : Not Answered  
Chosen Option : --

Q.46 In an pond ecosystem, the first trophic level includes \_\_\_\_\_.

- Ans
- 1. grasshopper
  - 2. zooplankton
  - 3. phytoplankton
  - 4. cow

Question ID : 264330117607  
Option 1 ID : 264330462455  
Option 2 ID : 264330462454  
Option 3 ID : 264330462453  
Option 4 ID : 264330462456  
Status : Answered  
Chosen Option : 1

Q.47 The Fundamental Rights can be suspended during the operation of a National Emergency except the rights guaranteed by \_\_\_\_\_.

- Ans
- 1. Articles 14 and 15
  - 2. Articles 20 and 21
  - 3. Article 23 and 24
  - 4. Articles 18 and 19

Question ID : 264330110792  
Option 1 ID : 264330435445  
Option 2 ID : 264330435446  
Option 3 ID : 264330435448  
Option 4 ID : 264330435447  
Status : Answered  
Chosen Option : 4

Q.48 'Wings of Fire' is an autobiography of which of the following personalities?

- Ans
- 1. Inder Kumar Gujral
  - 2. APJ Abdul Kalam
  - 3. K Sivan
  - 4. Pranab Mukherjee

Question ID : 26433055356  
Option 1 ID : 264330216411  
Option 2 ID : 264330216410  
Option 3 ID : 264330216408  
Option 4 ID : 264330216409  
Status : Answered  
Chosen Option : 2

Q.49 Which of the following is/are NOT a part of the financial sector?

- Ans
- 1. Department of Agriculture & Farmers Welfare
  - 2. Investment banks
  - 3. Commercial banks
  - 4. Stock exchange operations

Question ID : 264330111606  
Option 1 ID : 264330438512  
Option 2 ID : 264330438510  
Option 3 ID : 264330438509  
Option 4 ID : 264330438511  
Status : Answered  
Chosen Option : 1

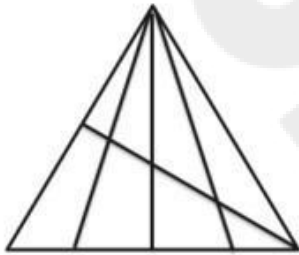
Q.50 The phenomenon of change of liquid into vapours at any temperature below its boiling point is called:

- Ans
- 1. Melting
  - 2. Fusion
  - 3. Sublimation
  - 4. Evaporation

Question ID : 264330182939  
Option 1 ID : 264330717488  
Option 2 ID : 264330717490  
Option 3 ID : 264330717489  
Option 4 ID : 264330717491  
Status : Answered  
Chosen Option : 4

Section : Reasoning

Q.1 How many triangles are there in the given figure?



- Ans
- 1. 25
  - 2. 24
  - 3. 23
  - 4. 18

Question ID : 26433069081  
Option 1 ID : 264330270837  
Option 2 ID : 264330270838  
Option 3 ID : 264330270836  
Option 4 ID : 264330270839  
Status : Answered  
Chosen Option : 3

Q.2 Select the option that is related to the third word in the same way as the second word is related to the first word.  
(The words must be considered as meaningful English words and must not be related to each other based on the number of letters/number of consonants/vowels in the word)

Linen : Flax :: Road : ?

- Ans
- 1. Copper
  - 2. Ore
  - 3. Brass
  - 4. Asphalt

Question ID : 26433070283  
Option 1 ID : 264330275608  
Option 2 ID : 264330275611  
Option 3 ID : 264330275609  
Option 4 ID : 264330275610  
Status : Answered  
Chosen Option : 2

Q.3 Select the number from among the given options that can replace the question mark (?) in the following series.

5, 21, 69, 213, 645, ?

Ans  1. 3224

2. 323

3. 6343

4. 1941

Question ID : 264330109748

Option 1 ID : 264330431270

Option 2 ID : 264330431269

Option 3 ID : 264330431272

Option 4 ID : 264330431271

Status : Answered

Chosen Option : 4

Q.4 Select the set in which the numbers are related in the same way as do the numbers of the following sets.

(NOTE: Operations should be performed on the whole numbers, without breaking down the numbers into their constituent digits. E.g. 13 – Operations on 13 such as adding/subtracting/multiplying etc. to 13 can be performed. Breaking down 13 into 1 and 3 and then performing mathematical operations on 1 and 3 is not allowed.)

(58, 34, 72)

(46, 28, 54)

Ans  1. (56, 32, 68)

2. (62, 34, 84)

3. (48, 26, 56)

4. (52, 24, 94)

Question ID : 264330177414

Option 1 ID : 264330695829

Option 2 ID : 264330695830

Option 3 ID : 264330695827

Option 4 ID : 264330695828

Status : Answered

Chosen Option : 1

Q.5 In a code language, if PIGEON is coded as 11-18-20-22-12-13 and NEST is coded as 13-22-8-7, then how will WOODPECKER be coded?

Ans  1. 4-12-12-23-11-22-24-16-22-9

2. 5-13-13-24-12-23-25-17-23-10

3. 3-11-11-22-10-21-23-15-21-8

4. 4-11-11-23-11-21-24-15-21-9

Question ID : 26433089483

Option 1 ID : 264330351433

Option 2 ID : 264330351436

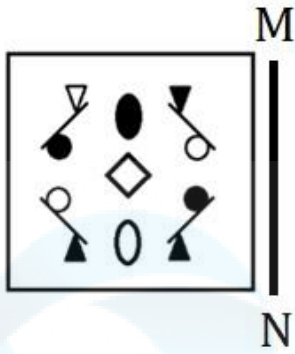
Option 3 ID : 264330351434

Option 4 ID : 264330351435

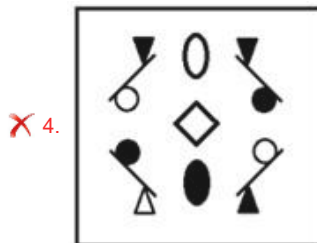
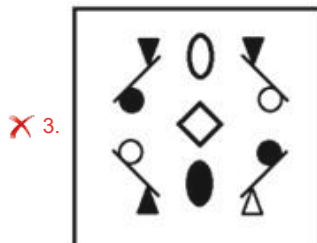
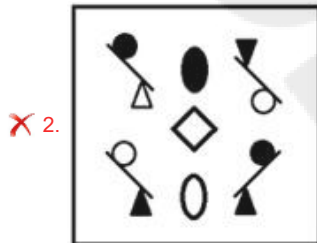
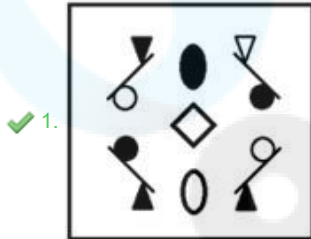
Status : Answered

Chosen Option : 1

Q.6 Select the correct mirror image of the given figure when the mirror is placed at MN as shown below.



Ans



Question ID : 264330114700

Option 1 ID : 264330450886

Option 2 ID : 264330450887

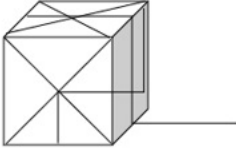
Option 3 ID : 264330450888

Option 4 ID : 264330450885

Status : Answered

Chosen Option : 1

Q.7 Select the option that is embedded in the given figure (rotation is NOT allowed).

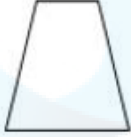


Ans

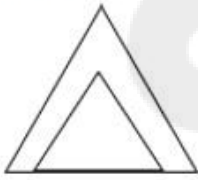
✗ 1.




✗ 2.



✗ 3.



✓ 4.



Question ID : 26433082893

Option 1 ID : 264330325407

Option 2 ID : 264330325408


Option 3 ID : 264330325405

Option 4 ID : 264330325406

Status : Answered

Chosen Option : 4

Q.8 Select the figure that will come next in the following figure series.



Ans

- 1.
- 2.
- 3.
- 4.

Question ID : 264330129652

Option 1 ID : 264330507974

Option 2 ID : 264330507975

Option 3 ID : 264330507976

Option 4 ID : 264330507977

Status : Answered

Chosen Option : 4

Q.9 Six letters, K, L, M, N, O and P are written on different faces of a dice. Three positions of this dice are shown here. Find the letter on the face opposite K.



- 1. L
- 2. M
- 3. N
- 4. O

Question ID : 264330106400

Option 1 ID : 264330417901

Option 2 ID : 264330417903

Option 3 ID : 264330417904

Option 4 ID : 264330417902

Status : Answered

Chosen Option : 4

**Q.10** Seven people - A, B, C, D, X, Y and Z - are sitting in a straight row, facing north. Only two people sit to the left of D. B sits second to the left of Z. Y sits third to the left of A. Only one person sits to the right of X. Who among the following sits at the second position from the left?

- Ans
- 1. B
  - 2. C
  - 3. Y
  - 4. A

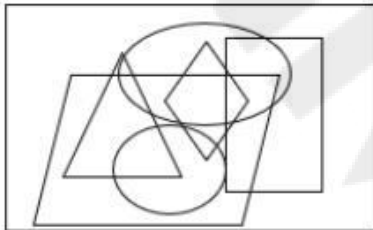
Question ID : 26433087022  
 Option 1 ID : 264330341731  
 Option 2 ID : 264330341729  
 Option 3 ID : 264330341730  
 Option 4 ID : 264330341732  
 Status : Answered  
 Chosen Option : 2

**Q.11** Select the option in which the given figure is embedded. (Rotation is NOT allowed.)

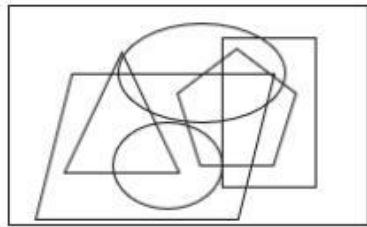


Ans

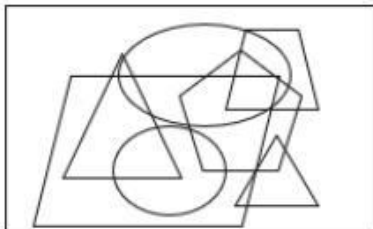
1.



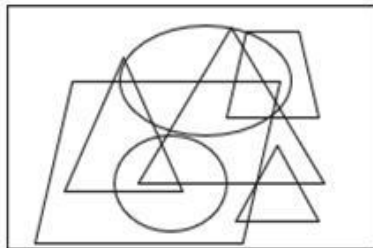
2.



3.

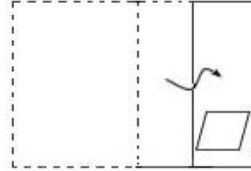
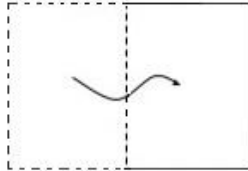


4.



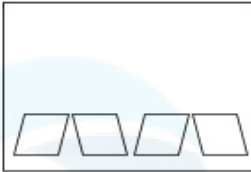
Question ID : 26433092515  
 Option 1 ID : 264330363351  
 Option 2 ID : 264330363352  
 Option 3 ID : 264330363350  
 Option 4 ID : 264330363349  
 Status : Answered  
 Chosen Option : 2

Q.12 A paper is folded and cut as shown below. How will it appear when unfolded?

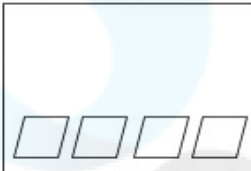


Ans

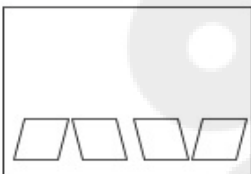
✗ 1.



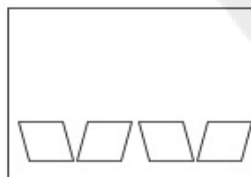
✗ 2.



✗ 3.



✓ 4.



Question ID : 264330118717

Option 1 ID : 264330466122

Option 2 ID : 264330466121

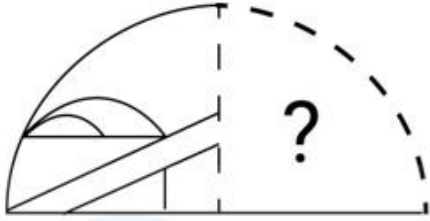
Option 3 ID : 264330466119

Option 4 ID : 264330466120

Status : Answered

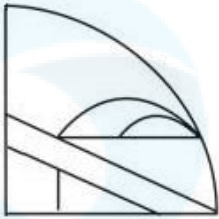
Chosen Option : 4

Q.13 Select the figure from the options that can replace the question mark (?) and complete the given pattern.

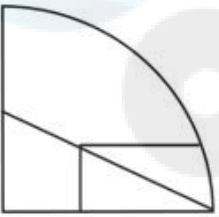


Ans

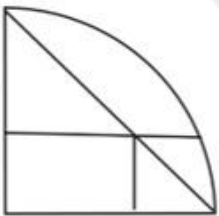
✓ 1.



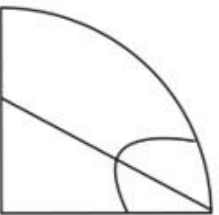
✗ 2.



✗ 3.



✗ 4.



Question ID : 264330106473

Option 1 ID : 264330418196

Option 2 ID : 264330418195

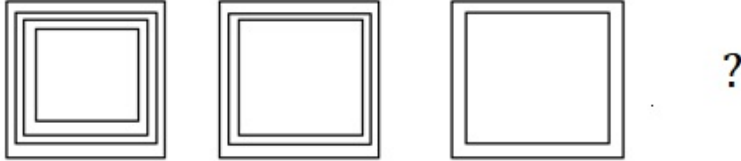
Option 3 ID : 264330418194

Option 4 ID : 264330418193

Status : Answered

Chosen Option : 1

Q.14 Select the figure that will replace the question mark (?) in the following figure series.



Ans

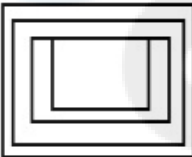
✓ 1.



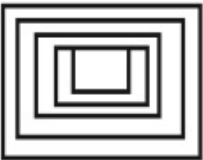
✗ 2.



✗ 3.



✗ 4.



Question ID : 264330112029

Option 1 ID : 264330440201

Option 2 ID : 264330440204

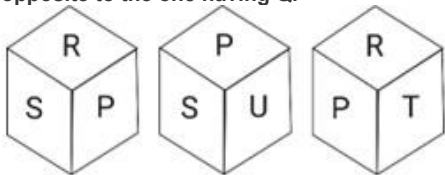
Option 3 ID : 264330440202

Option 4 ID : 264330440203

Status : Answered

Chosen Option : 1

Q.15 Six letters P, Q, R, S, T and U are written on different faces of a dice. Three different positions of this dice are shown in the figure. Select the letter that will be on the face opposite to the one having Q.



Ans ✗ 1. R

✓ 2. P

✗ 3. U

✗ 4. T

Question ID : 264330121790

Option 1 ID : 264330477332

Option 2 ID : 264330477334

Option 3 ID : 264330477333

Option 4 ID : 264330477331

Status : Answered

Chosen Option : 2

Q.16 Select the correct combination of mathematical signs to sequentially replace the \* signs and to balance the given equation.  
 $23*2*10*20*5 = 40$

- Ans  1. + × - +  
 2. × - + +  
 3. - + + ×  
 4. + - × +

Question ID : 26433085645

Option 1 ID : 264330336281

Option 2 ID : 264330336282

Option 3 ID : 264330336284

Option 4 ID : 264330336283

Status : Answered

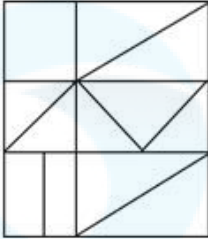
Chosen Option : 2

Q.17 Select the option in which the given figure is embedded (rotation is NOT allowed).

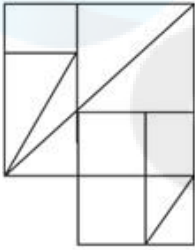


Ans

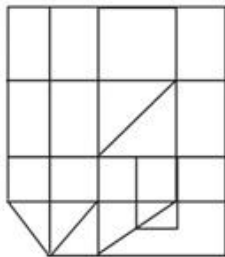
✗ 1.



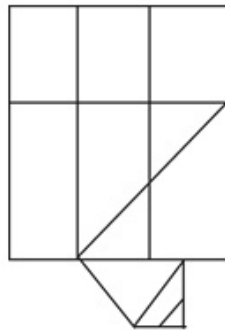
✗ 2.



✓ 3.



✗ 4.



Question ID : 264330114684

Option 1 ID : 264330450821

Option 2 ID : 264330450824

Option 3 ID : 264330450823

Option 4 ID : 264330450822

Status : Answered

Chosen Option : 3

Q.18 8 is related to 67 following a certain logic. Following the same logic, 4 is related to 19.  
To which of the following is 6 related following the same logic?

- Ans
- 1. 31
  - 2. 32
  - 3. 39
  - 4. 28

Question ID : 264330178749  
Option 1 ID : 264330701023  
Option 2 ID : 264330701025  
Option 3 ID : 264330701026  
Option 4 ID : 264330701024  
Status : Answered  
Chosen Option : 3

Q.19 Which of the following terms will replace the question mark (?) in the given series?

JASX, LWUT, NSWP, POYL, ?

- Ans
- 1. SJAH
  - 2. RJBG
  - 3. SKBF
  - 4. RKAH

Question ID : 26433090968  
Option 1 ID : 264330357283  
Option 2 ID : 264330357282  
Option 3 ID : 264330357281  
Option 4 ID : 264330357284  
Status : Answered  
Chosen Option : 4

Q.20 Read the given statements and conclusions carefully. Assuming that the information given in the statements is true, even if it appears to be at variance with commonly known facts, decide which of the given conclusions logically follow(s) from the statements.

Statements:

Some blankets are quilts.

Some quilts are bedsheets.

Conclusions:

I. All bedsheets are blankets.

II. Some bedsheets are blankets.

- Ans
- 1. Neither conclusion I nor II follows
  - 2. Only conclusion II follows
  - 3. Only conclusion I follows
  - 4. Both conclusions I and II follow

Question ID : 26433069509  
Option 1 ID : 264330272551  
Option 2 ID : 264330272549  
Option 3 ID : 264330272548  
Option 4 ID : 264330272550  
Status : Answered  
Chosen Option : 1

**Q.21** Select the correct combination of mathematical signs to replace the \* signs and to balance the given equation.  
 $264 * 4 * 7 * 87 * 370 * 5$

- Ans
- 1.  $\times - = + +$
  - 2.  $+ \times - + =$
  - 3.  $+ \times - = +$
  - 4.  $+ \times = + -$



Question ID : 26433085726  
 Option 1 ID : 264330336605  
 Option 2 ID : 264330336608  
 Option 3 ID : 264330336607  
 Option 4 ID : 264330336606  
 Status : Answered  
 Chosen Option : 3

**Q.22** Given below is a series of figures – A, B, C and D which follow a particular pattern. Which of the given option figures should come in place of E to continue the series?

$\Omega$	+	$\Upsilon$	B	$\Delta$	$\nabla$	+	$\square$	?
$\Upsilon$	$\Delta$	$\Delta$	+	+	B	B	$\nabla$	

- (A)      (B)      (C)      (D)      (E)

- Ans
- 1. 

$\nabla$	G
$\square$	●
  - 2. 

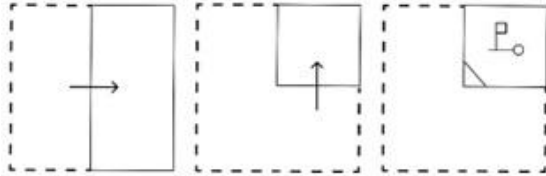
B	●
$\nabla$	$\square$
  - 3. 

B	$\Upsilon$
$\nabla$	$\square$
  - 4. 

●	B
$\nabla$	$\square$

Question ID : 264330111287  
 Option 1 ID : 264330437235  
 Option 2 ID : 264330437236  
 Option 3 ID : 264330437233  
 Option 4 ID : 264330437234  
 Status : Answered  
 Chosen Option : 2

Q.23 A paper is folded and cut as shown below. How will it appear when unfolded?



Ans

- ✗ 1.
- ✓ 2.
- ✗ 3.
- ✗ 4.

Question ID : 264330114711

Option 1 ID : 264330450929

Option 2 ID : 264330450931

Option 3 ID : 264330450932

Option 4 ID : 264330450930

Status : Answered

Chosen Option : 2

Q.24 Select the correct mirror image of the given figure when the mirror is placed at MN as shown below.

gFz721L

M

N

Ans

✗ 1. J127zFg

✓ 2. gFz721L

✗ 3. gFz721L

✗ 4. gFz721L

Question ID : 264330126677

Option 1 ID : 264330496383

Option 2 ID : 264330496380

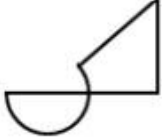
Option 3 ID : 264330496382

Option 4 ID : 264330496381

Status : Answered

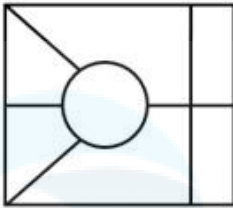
Chosen Option : 2

Q.25 Select the option in which the given figure is embedded (rotation is NOT allowed).

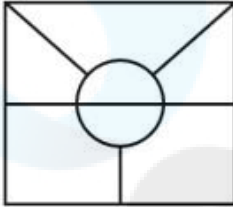


Ans

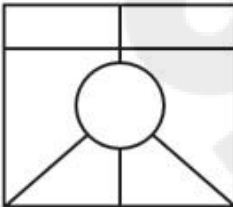
✗ 1.



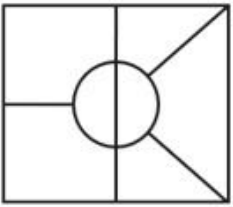
✓ 2.



✗ 3.



✗ 4.



Question ID : 264330106329

Option 1 ID : 264330417618

Option 2 ID : 264330417619

Option 3 ID : 264330417620

Option 4 ID : 264330417617

Status : Answered

Chosen Option : 2

Section : Numerical Ability

Q.1 A boy goes to his school from his house at a speed of 5 km/h and returns at a speed of 10 km/h, then the average speed of the boy is:

- Ans
- 1.  $4\frac{1}{3}$  km/h
  - 2.  $3\frac{2}{3}$  km/h
  - 3.  $3\frac{1}{3}$  km/h
  - 4.  $6\frac{2}{3}$  km/h

Question ID : 264330122989  
Option 1 ID : 264330482020  
Option 2 ID : 264330482021  
Option 3 ID : 264330482019  
Option 4 ID : 264330482022  
Status : Answered  
Chosen Option : 4

Q.2 For a cylinder with a radius of 3 units and height of 8 units, what is the length of the largest straight rod that can be put inside it?

- Ans
- 1. 10
  - 2. 12
  - 3. 9
  - 4. 11

Question ID : 264330112124  
Option 1 ID : 264330440583  
Option 2 ID : 264330440584  
Option 3 ID : 264330440582  
Option 4 ID : 264330440581  
Status : Not Answered  
Chosen Option : --

Q.3 The income of a person first increased by 10% and then it is decreased by 10%. What is the change in his income?

- Ans
- 1. 2% (increase)
  - 2. 1% (decrease)
  - 3. 5% (decrease)
  - 4. 2% (decrease)

Question ID : 264330126177  
Option 1 ID : 264330494381  
Option 2 ID : 264330494380  
Option 3 ID : 264330494383  
Option 4 ID : 264330494382  
Status : Answered  
Chosen Option : 2

Q.4 The HCF of 408 and 1309 is:

- Ans
- 1. 19
  - 2. 21
  - 3. 17
  - 4. 15

Question ID : 264330104467  
Option 1 ID : 264330410170  
Option 2 ID : 264330410172  
Option 3 ID : 264330410171  
Option 4 ID : 264330410169  
Status : Answered  
Chosen Option : 3

Q.5 एक इलेक्ट्रिक बाइक ₹1 लाख में उपलब्ध है। एक ग्राहक को ₹20,800 का डाउन पेमेंट देना होगा, इसके बाद 4 बराबर किश्तें देनी होंगी। यदि ब्याज की दर 25% वार्षिक साधारण ब्याज है, तो 4 वार्षिक किश्तों की गणना करें।

- Ans
- 1. ₹21,210
  - 2. ₹22,110
  - 3. ₹28,800
  - 4. ₹21,120

Question ID : 264330122077  
Option 1 ID : 264330478444  
Option 2 ID : 264330478443  
Option 3 ID : 264330478446  
Option 4 ID : 264330478445  
Status : Not Answered  
Chosen Option : --

Q.6 If the ratio of A and B is 4 : 3 and the ratio of B and C is 7 : 2, what is the ratio of A, B and C?

- Ans
- 1. 28 : 21 : 6
  - 2. 8 : 21 : 14
  - 3. 28 : 6 : 8
  - 4. 21 : 28 : 6

Question ID : 264330130005  
Option 1 ID : 264330509252  
Option 2 ID : 264330509253  
Option 3 ID : 264330509251  
Option 4 ID : 264330509254  
Status : Answered  
Chosen Option : 1

Q.7 The concentration of three acids, P, Q and R, is given as 15%, 25% and 35%, respectively. They are mixed in the ratio of  $x : 3 : 5$ , resulting in a 28% concentration solution. What is the value of  $x$ ?

- Ans  1. 2  
 2. 4  
 3. 1  
 4. 3

Question ID : 264330179322  
Option 1 ID : 264330703292  
Option 2 ID : 264330703294  
Option 3 ID : 264330703291  
Option 4 ID : 264330703293  
Status : Answered  
Chosen Option : 3

Q.8 The sum of the smallest three-digit prime number and the largest three-digit prime number is:

- Ans  1. 1098  
 2. 1100  
 3. 1104  
 4. 1093

Question ID : 264330112413  
Option 1 ID : 264330441737  
Option 2 ID : 264330441738  
Option 3 ID : 264330441739  
Option 4 ID : 264330441740  
Status : Answered  
Chosen Option : 1

Q.9 The radius of a giant metal spherical ball is 12 cm. Its outer surface is required to be painted. What will be the cost of the painting at the rate of ₹7 per  $\text{cm}^2$ . (Approximate to the nearest integer) (Take  $\pi = \frac{22}{7}$ )

- Ans  1. ₹12,672  
 2. ₹11,664  
 3. ₹10,684  
 4. ₹13,168

Question ID : 26433091573  
Option 1 ID : 264330359659  
Option 2 ID : 264330359658  
Option 3 ID : 264330359657  
Option 4 ID : 264330359660  
Status : Answered  
Chosen Option : 1

Q.10 Rohan's monthly salary is increased from ₹40,000 to ₹45,000. What is the percentage increment in his monthly salary?

- Ans
- 1. 10.5%
  - 2. 12%
  - 3. 11%
  - 4. 12.5%

Question ID : 264330103935  
Option 1 ID : 264330408041  
Option 2 ID : 264330408044  
Option 3 ID : 264330408043  
Option 4 ID : 264330408042  
Status : Answered  
Chosen Option : 4

Q.11 The tag price of an item is ₹250. After a discount of  $x\%$  of tag price, the shopkeeper earns  $1.25x\%$  profit. What is the cost of the item if  $x=10$ ?

- Ans
- 1. ₹210
  - 2. ₹190
  - 3. ₹220
  - 4. ₹200

Question ID : 264330126117  
Option 1 ID : 264330494141  
Option 2 ID : 264330494143  
Option 3 ID : 264330494142  
Option 4 ID : 264330494140  
Status : Answered  
Chosen Option : 4

Q.12 Ayush buys an old digital camera for ₹9,200 and spends ₹1,200 on its repair. If Ayush sells the digital camera for ₹12,000, what is his profit percentage (correct up to two decimal places)?

- Ans
- 1. 15.38%
  - 2. 13.58%
  - 3. 19.73%
  - 4. 17.39%

Question ID : 264330103951  
Option 1 ID : 264330408107  
Option 2 ID : 264330408105  
Option 3 ID : 264330408108  
Option 4 ID : 264330408106  
Status : Answered  
Chosen Option : 1

Q.13 The LCM of 98, 145 and 505 is:

- Ans
- 1. 1852010
  - 2. 1636120
  - 3. 1715201
  - 4. 1435210

Question ID : 264330104469  
Option 1 ID : 264330410180  
Option 2 ID : 264330410177  
Option 3 ID : 264330410179  
Option 4 ID : 264330410178  
Status : Answered  
Chosen Option : 4

Q.14 Prakash can do a piece of work in 18 days. If Mukesh works twice as fast as Prakash, how long would it take to finish the work, working together?

- Ans
- 1. 6 days
  - 2. 5 days
  - 3. 7 days
  - 4. 4 days

Question ID : 264330103629  
Option 1 ID : 264330406823  
Option 2 ID : 264330406822  
Option 3 ID : 264330406824  
Option 4 ID : 264330406821  
Status : Answered  
Chosen Option : 1

Q.15 What is the rate of compound interest if a sum becomes  $\frac{1331}{729}$  times of itself in 3 years?

- Ans
- 1.  $33\frac{1}{9}\%$
  - 2.  $21\frac{7}{9}\%$
  - 3.  $22\frac{2}{9}\%$
  - 4.  $11\frac{7}{9}\%$

Question ID : 264330104402  
Option 1 ID : 264330409910  
Option 2 ID : 264330409912  
Option 3 ID : 264330409909  
Option 4 ID : 264330409911  
Status : Answered  
Chosen Option : 4

**Q.1** In MS Word 365, which of the following is the default font style and size in the Font style and size dropdown list when a new document is opened in Windows 10?

- Ans**
- 1. Calibri, 11
  - 2. Aharoni, 11
  - 3. Times New Roman, 11
  - 4. Arial, 11

Question ID : 264330180642  
Option 1 ID : 264330708535  
Option 2 ID : 264330708538  
Option 3 ID : 264330708536  
Option 4 ID : 264330708537  
Status : Not Answered  
Chosen Option : --

**Q.2** Which option allows you to create a table in MS-Word 365?

- Ans**
- 1. Table Insertion
  - 2. Table Creation
  - 3. Table Design
  - 4. Table Layout

Question ID : 264330173332  
Option 1 ID : 264330679810  
Option 2 ID : 264330679809  
Option 3 ID : 264330679808  
Option 4 ID : 264330679807  
Status : Answered  
Chosen Option : 2

**Q.3** If an email is sent to more than one person, the email addresses are separated by which of the following symbols?

- Ans**
- 1. Paper clip icon
  - 2. Comma
  - 3. Equal
  - 4. At the rate of

Question ID : 264330175933  
Option 1 ID : 264330690029  
Option 2 ID : 264330690027  
Option 3 ID : 264330690030  
Option 4 ID : 264330690028  
Status : Answered  
Chosen Option : 1

**Q.4** In MS-Word 365, which option allows you to manually review and correct spelling and grammar errors in your document by providing suggestions and explanations for each flagged item?

- Ans**
- 1. Thesaurus
  - 2. Word Count
  - 3. Spelling and Grammar Check
  - 4. AutoCorrect

Question ID : 264330178089  
Option 1 ID : 264330698422  
Option 2 ID : 264330698420  
Option 3 ID : 264330698421  
Option 4 ID : 264330698419  
Status : Answered  
Chosen Option : 3

**Q.5** In Microsoft Excel 365, which keyboard shortcut is used to copy the selected text or cells for pasting them to a new location within the same worksheet?

- Ans**
- 1. Ctrl + D
  - 2. Ctrl + C
  - 3. Ctrl + X
  - 4. Ctrl + V

Question ID : 264330178747  
Option 1 ID : 264330701018  
Option 2 ID : 264330701015  
Option 3 ID : 264330701016  
Option 4 ID : 264330701017  
Status : Not Answered  
Chosen Option : --

**Q.6** Which is the following methods is used in unguided transmission media?

- Ans**
- 1. Infrared
  - 2. Coaxial cable
  - 3. Twisted pair cable
  - 4. Optical fibre cable

Question ID : 264330182750  
Option 1 ID : 264330716771  
Option 2 ID : 264330716772  
Option 3 ID : 264330716773  
Option 4 ID : 264330716774  
Status : Answered  
Chosen Option : 1

**Q.7** Which of the following charts is used in MS Excel 365 to display data as a series of points connected by straight lines and is used for showing trends over time?

- Ans**
- 1. Line chart
  - 2. Bar chart
  - 3. Pie chart
  - 4. Column chart

Question ID : 264330180818  
Option 1 ID : 264330709237  
Option 2 ID : 264330709236  
Option 3 ID : 264330709238  
Option 4 ID : 264330709235  
Status : Answered  
Chosen Option : 1

**Q.8** In MS Excel 365 how can you quickly delete a row in Excel without using the context menu or ribbon options?

- Ans**
- 1. Select the row and press Ctrl and the - (minus) key.
  - 2. Select the row and press Shift+Delete.
  - 3. Select the row and press the Delete key.
  - 4. Select the row and press Alt+Delete.

Question ID : 264330177668  
Option 1 ID : 264330696788  
Option 2 ID : 264330696789  
Option 3 ID : 264330696787  
Option 4 ID : 264330696790  
Status : Answered  
Chosen Option : 3

**Q.9** What does the 'Search' or 'Find' allow you to do in MS Word 365?

- Ans**
- 1. Change the document's font
  - 2. Open a new document
  - 3. Print the current document
  - 4. Locate specific words or topics in the Help content

Question ID : 264330180858  
Option 1 ID : 264330709395  
Option 2 ID : 264330709398  
Option 3 ID : 264330709397  
Option 4 ID : 264330709396  
Status : Answered  
Chosen Option : 4

**Q.10** Which option in Microsoft Word 365 allows you to search for a specific word or phrase in the document and replace it with another?

- Ans**
- 1. Font Formatting
  - 2. Cut and Paste
  - 3. Spelling & Grammar
  - 4. Find and Replace

Question ID : 264330180718

Option 1 ID : 264330708842

Option 2 ID : 264330708841

Option 3 ID : 264330708840

Option 4 ID : 264330708839

Status : Answered

Chosen Option : 4