

Constable Executive Male and Female in Delhi Police Examination 2023

Roll Number	
Candidate Name	
Venue Name	
Exam Date	30/11/2023
Exam Time	9:00 AM - 10:30 AM
Subject	Constable Executive Male and Female in Delhi Police Examination 2023

Section : General Knowledge

Q.1 Annapurna Finance Private Limited had its origin as a not-for-profit company called _____, an NGO that helped poor women in Odisha.

- Ans
- 1. Alternative for Rural Movement
 - 2. Peoples Forum
 - 3. All India Development Trust
 - 4. Action for Rural Transformation

Question ID : 264330116495
Option 1 ID : 264330458066
Option 2 ID : 264330458067
Option 3 ID : 264330458065
Option 4 ID : 264330458068
Status : Marked For Review
Chosen Option : 3

Q.2 Hanukkah is a _____ festival.

- Ans
- 1. Jain
 - 2. Jewish
 - 3. Sikh
 - 4. Buddhist

Question ID : 264330109313
Option 1 ID : 264330429529
Option 2 ID : 264330429530
Option 3 ID : 264330429532
Option 4 ID : 264330429531
Status : Not Answered
Chosen Option : --

Q.3 In which year did Mihir Sen create history by being the only man to swim the five oceans in one calendar year?

- Ans
- 1. 1958
 - 2. 1966
 - 3. 1949
 - 4. 1950

Question ID : 264330119276
Option 1 ID : 264330467392
Option 2 ID : 264330467391
Option 3 ID : 264330467393
Option 4 ID : 264330467394
Status : Not Answered
Chosen Option : --

Q.4 Match the diseases in group I with the modes of transmission in group II.

Group I		Group II	
(a) Meningitis	(i)	inoculation into skin or mucosa	
(b) Rabies	(ii)	contaminated food or water	
(c) Typhoid	(iii)	contact with soil	
(d) Tetanus	(iv)	droplet infection	

- Ans
- 1. (a)-(iv), (b)-(i), (c)-(iii), (d)-(ii)
 - 2. (a)-(i), (b)-(iv), (c)-(ii), (d)-(iii)
 - 3. (a)-(ii), (b)-(i), (c)-(iv), (d)-(iii)
 - 4. (a)-(iv), (b)-(i), (c)-(ii), (d)-(iii)

Question ID : 264330182449
Option 1 ID : 264330715598
Option 2 ID : 264330715595
Option 3 ID : 264330715596
Option 4 ID : 264330715597
Status : Answered
Chosen Option : 4

Q.5 Which edition of the FIFA U-17 Women's World Cup was hosted by India in 2022?

- Ans
- 1. Fifth
 - 2. Sixth
 - 3. Fourth
 - 4. Seventh

Question ID : 264330113733
Option 1 ID : 264330447019
Option 2 ID : 264330447017
Option 3 ID : 264330447020
Option 4 ID : 264330447018
Status : Marked For Review
Chosen Option : 2

Q.6 According to Planning commission of India (2011-12), which group of states has the highest poverty ratio?

- Ans
- 1. Maharashtra and Gujarat
 - 2. Madhya Pradesh and Uttar Pradesh
 - 3. Chhattisgarh and Jharkhand
 - 4. Punjab and Haryana

Question ID : 264330119915
Option 1 ID : 264330469937
Option 2 ID : 264330469935
Option 3 ID : 264330469938
Option 4 ID : 264330469936
Status : Answered
Chosen Option : 3

Q.7 When did the Pro Wrestling League start in India?

Ans 1. 2015

2. 2017

3. 2010

4. 2014

Question ID : 264330176079
Option 1 ID : 264330690612
Option 2 ID : 264330690613
Option 3 ID : 264330690614
Option 4 ID : 264330690611
Status : Not Answered
Chosen Option : --

Q.8 The Ramakrishna Mission was founded by _____ to regenerate Indian society by promoting the Vedanta philosophy.

Ans 1. Swami Vivekananda

2. Swami Dayananda Saraswati

3. Debendranath Tagore

4. Raja Ram Mohan Roy

Question ID : 264330112402
Option 1 ID : 264330441693
Option 2 ID : 264330441695
Option 3 ID : 264330441694
Option 4 ID : 264330441696
Status : Answered
Chosen Option : 2

Q.9 'Koman' and 'Kuruwa' are the names of _____ in India.

Ans 1. peaks of Western Ghats

2. artificial lakes

3. tribes of Himalaya

4. slash and burn agriculture

Question ID : 264330120311
Option 1 ID : 264330471498
Option 2 ID : 264330471497
Option 3 ID : 264330471496
Option 4 ID : 264330471495
Status : Marked For Review
Chosen Option : 3

Q.10 In which of the following sessions did the Indian National Congress decide to boycott the Simon Commission?

Ans 1. Poona session

2. Madras session

3. Bombay session

4. Allahabad session

Question ID : 264330117807
Option 1 ID : 264330463045
Option 2 ID : 264330463043
Option 3 ID : 264330463044
Option 4 ID : 264330463046
Status : Not Attempted and Marked For Review
Chosen Option : --

Q.11 In 1991, India met with an economic crisis where the _____ reserves fell so low that they were not sufficient for even a _____ .

- Ans
- 1. foreign exchange; quarter
 - 2. gold; month
 - 3. gold; year
 - 4. foreign exchange; fortnight

Question ID : 264330109129
Option 1 ID : 264330428793
Option 2 ID : 264330428794
Option 3 ID : 264330428796
Option 4 ID : 264330428795
Status : Answered
Chosen Option : 1

Q.12 Kailasa temple is made up of which of the following types of rock?

- Ans
- 1. Basalt
 - 2. Granite
 - 3. Marble
 - 4. Pumice

Question ID : 264330106251
Option 1 ID : 264330417306
Option 2 ID : 264330417307
Option 3 ID : 264330417308
Option 4 ID : 264330417305
Status : Not Answered
Chosen Option : --

Q.13 Suppose a person has four acres of land in India, and he actually needs only two workers and himself to carry out various operations on his farm in a year, but if he employs five workers and his family members such as his wife and children", this situation known as _____.

- Ans
- 1. Transitional Unemployment
 - 2. Open Unemployment
 - 3. Seasonal Unemployment
 - 4. Disguised Unemployment

Question ID : 264330119824
Option 1 ID : 264330469573
Option 2 ID : 264330469574
Option 3 ID : 264330469571
Option 4 ID : 264330469572
Status : Not Answered
Chosen Option : --

Q.14 The horizontal distance between two adjacent crests or troughs is known as the _____.

- Ans
- 1. wave speed
 - 2. wave frequency
 - 3. wave period
 - 4. wave length

Question ID : 264330118521
Option 1 ID : 264330465485
Option 2 ID : 264330465488
Option 3 ID : 264330465486
Option 4 ID : 264330465487
Status : Not Answered
Chosen Option : --

Q.15 Fundamental duties were first added by which Constitutional Amendment Act?

- Ans
- 1. 48th Constitutional Amendment Act
 - 2. 46th Constitutional Amendment Act
 - 3. 42nd Constitutional Amendment Act
 - 4. 44th Constitutional Amendment Act

Question ID : 264330111517
Option 1 ID : 264330438156
Option 2 ID : 264330438155
Option 3 ID : 264330438153
Option 4 ID : 264330438154
Status : Answered
Chosen Option : 3

Q.16 How many of the main fixed instruments can be found in the Jantar Mantar, Jaipur?

- Ans
- 1. 25
 - 2. 17
 - 3. 20
 - 4. 15

Question ID : 26433090745
Option 1 ID : 264330356403
Option 2 ID : 264330356402
Option 3 ID : 264330356404
Option 4 ID : 264330356401
Status : Not Answered
Chosen Option : --

Q.17 Which of the following were NOT part of the comprehensive liberalisation reforms introduced in July 1991?

- Ans
- 1. Disinvestment and public enterprise reforms
 - 2. Demographic reforms
 - 3. Financial sector reforms
 - 4. Trade and capital flow reforms

Question ID : 264330120212
Option 1 ID : 264330471106
Option 2 ID : 264330471105
Option 3 ID : 264330471104
Option 4 ID : 264330471103
Status : Not Answered
Chosen Option : --

Q.18 The inscription in Sanskrit, recording the repairing of the Mauryan dam at Junagarh belonged to whom among the following?

- Ans
- 1. Gautamiputra Satakarni
 - 2. Menander
 - 3. Kanishka
 - 4. Rudradaman

Question ID : 264330120283
Option 1 ID : 264330471385
Option 2 ID : 264330471386
Option 3 ID : 264330471383
Option 4 ID : 264330471384
Status : Not Answered
Chosen Option : --

Q.19 Who among the following published the book 'Stripurushtulna', criticising the social differences between men and women?

- Ans
- 1. Tarabai Shinde
 - 2. Pandita Ramabai
 - 3. Ishwar Chandra Vidyasagar
 - 4. Vijaya Laxmi Pandit

Question ID : 264330119022
Option 1 ID : 264330466745
Option 2 ID : 264330466743
Option 3 ID : 264330466746
Option 4 ID : 264330466744
Status : Not Answered
Chosen Option : --

Q.20 Which of the following rivers is also known as 'Dakshin Ganga'?

- Ans
- 1. Bhargavi River
 - 2. Mahanadi River
 - 3. Pranrita River
 - 4. Godavari River

Question ID : 264330178011
Option 1 ID : 264330698121
Option 2 ID : 264330698120
Option 3 ID : 264330698122
Option 4 ID : 264330698119
Status : Answered
Chosen Option : 4

Q.21 Which Article of the Indian Constitution restricts and prohibits religious instructions in the educational institutions which are maintained by the Government and funded by the government?

- Ans
- 1. Article 29
 - 2. Article 25
 - 3. Article 23
 - 4. Article 28

Question ID : 264330119681
Option 1 ID : 264330469002
Option 2 ID : 264330469000
Option 3 ID : 264330468999
Option 4 ID : 264330469001
Status : Answered
Chosen Option : 2

Q.22 Which of the following Articles of the Indian Constitution is related with equal justice and free legal aid?

- Ans
- 1. Article 39 A
 - 2. Article 48 A
 - 3. Article 51 A
 - 4. Article 43 A

Question ID : 264330180055
Option 1 ID : 264330706203
Option 2 ID : 264330706205
Option 3 ID : 264330706206
Option 4 ID : 264330706204
Status : Answered
Chosen Option : 4

Q.23 In an economy, if the gross national product at factor cost is ₹10,000 crores, depreciation is ₹250 crores, the net factor income from abroad is ₹500 crores, what is the value of national income?

- Ans
- 1. ₹10,750 crores
 - 2. ₹9,250 crores
 - 3. ₹10,250 crores
 - 4. ₹9,750 crores

Question ID : 264330117976
Option 1 ID : 264330463719
Option 2 ID : 264330463722
Option 3 ID : 264330463720
Option 4 ID : 264330463721
Status : Answered
Chosen Option : 3

Q.24 From which country is the legislative procedure in the Indian Constitution taken from?

- Ans
- 1. Australia
 - 2. Ireland
 - 3. Japan
 - 4. United Kingdom

Question ID : 264330183146
Option 1 ID : 264330718316
Option 2 ID : 264330718318
Option 3 ID : 264330718317
Option 4 ID : 264330718319
Status : Answered
Chosen Option : 4

Q.25 Which of the following countries is the winner of the FIFA Football World Cup 2022?

- Ans
- 1. Argentina
 - 2. Brazil
 - 3. England
 - 4. Japan

Question ID : 264330130622
Option 1 ID : 264330511600
Option 2 ID : 264330511599
Option 3 ID : 264330511602
Option 4 ID : 264330511601
Status : Answered
Chosen Option : 1

Q.26 The jurisdiction of the Supreme Court is guaranteed by the:

- Ans
- 1. Chief Justice
 - 2. Constitution
 - 3. President
 - 4. Parliament

Question ID : 264330173525
Option 1 ID : 264330680581
Option 2 ID : 264330680579
Option 3 ID : 264330680582
Option 4 ID : 264330680580
Status : Answered
Chosen Option : 1

Q.27 The capital of Satakarni I of the Satavahanas was _____.

- Ans
- 1. Anahilapura
 - 2. Prabhas Patan
 - 3. Anahilapatan
 - 4. Pratisthana

Question ID : 264330120139
Option 1 ID : 264330470813
Option 2 ID : 264330470811
Option 3 ID : 264330470814
Option 4 ID : 264330470812
Status : Not Answered
Chosen Option : --

Q.28 Majority of India's foreign trade is carried out by which means of transportation?

- Ans
- 1. Road transportation
 - 2. Sea transportation
 - 3. Rail transportation
 - 4. Air transportation

Question ID : 264330120317
Option 1 ID : 264330471522
Option 2 ID : 264330471521
Option 3 ID : 264330471519
Option 4 ID : 264330471520
Status : Answered
Chosen Option : 2

Q.29 Who among the following, as Indian slide instrumentalist, vocalist and composer, initiated the Planet Symphony Orchestra in 2019?

- Ans
- 1. Mohan Kannon
 - 2. Rahul Ram
 - 3. Abhay Jodhpurkar
 - 4. Narasimhan Ravikiran

Question ID : 264330111959
Option 1 ID : 264330439923
Option 2 ID : 264330439924
Option 3 ID : 264330439921
Option 4 ID : 264330439922
Status : Not Answered
Chosen Option : --

Q.30 Bhagat Singh and _____ threw a bomb in the Central Legislative Assembly on 8 April 1929.

- Ans
- 1. Jaidev Kapoor
 - 2. Batukeshwar Dutt
 - 3. Sukhdev Thapar
 - 4. Shivaram Rajguru

Question ID : 264330114112
Option 1 ID : 264330448536
Option 2 ID : 264330448535
Option 3 ID : 264330448533
Option 4 ID : 264330448534
Status : Answered
Chosen Option : 3

Q.31 On which of the following matters of the State List can Delhi's Legislature make laws?

- Ans
- 1. Police
 - 2. Public order
 - 3. Land
 - 4. Health

Question ID : 264330120199
Option 1 ID : 264330471053
Option 2 ID : 264330471051
Option 3 ID : 264330471054
Option 4 ID : 264330471052
Status : Answered
Chosen Option : 4

Q.32 Which festival is celebrated to commemorate the birth anniversary of Lord Buddha?

- Ans
- 1. Parinirvana Day
 - 2. Vesak
 - 3. Ullambana
 - 4. Kathina

Question ID : 264330118490
Option 1 ID : 264330465362
Option 2 ID : 264330465361
Option 3 ID : 264330465363
Option 4 ID : 264330465364
Status : Marked For Review
Chosen Option : 1

Q.33 Lai Haraoba, which literally means 'the festival of gods', is primarily celebrated in which state of India?

- Ans
- 1. Kerala
 - 2. Uttarakhand
 - 3. Himachal Pradesh
 - 4. Manipur

Question ID : 264330111789
Option 1 ID : 264330439241
Option 2 ID : 264330439244
Option 3 ID : 264330439243
Option 4 ID : 264330439242
Status : Answered
Chosen Option : 4

Q.34 Which of the following is the function of trade barriers?

- Ans
- 1. Restrict the flow of international goods and services
 - 2. Restrict the flow of Indian goods and services in India
 - 3. Ban making goods
 - 4. Restrict packed goods

Question ID : 264330117794
Option 1 ID : 264330462991
Option 2 ID : 264330462992
Option 3 ID : 264330462993
Option 4 ID : 264330462994
Status : Not Answered
Chosen Option : --

Q.35 Which of the following is known as the power house of cells?

- Ans
- 1. Nucleus
 - 2. Ribosomes
 - 3. Mitochondria
 - 4. Cytoplasm

Question ID : 264330117603
Option 1 ID : 264330462439
Option 2 ID : 264330462438
Option 3 ID : 264330462437
Option 4 ID : 264330462440
Status : Answered
Chosen Option : 3

Q.36 In the context of globalisation, FDI is an important term. What does the I stand for in FDI?

- Ans
- 1. Investor
 - 2. International
 - 3. Interest
 - 4. Investment

Question ID : 264330109405
Option 1 ID : 264330429900
Option 2 ID : 264330429898
Option 3 ID : 264330429897
Option 4 ID : 264330429899
Status : Answered
Chosen Option : 4

Q.37 Bhajan Sopori is associated with which of the following instruments?

- Ans
- 1. Violin
 - 2. Santoor
 - 3. Sarod
 - 4. Been

Question ID : 264330111944
Option 1 ID : 264330439861
Option 2 ID : 264330439863
Option 3 ID : 264330439862
Option 4 ID : 264330439864
Status : Not Answered
Chosen Option : --

Q.38 Who among the following wrote 'Nirmala'?

- Ans
- 1. Munshi Premchand
 - 2. Jaishankar Prasad
 - 3. Shrilal Shukla
 - 4. Ramdhari Singh

Question ID : 26433086912
Option 1 ID : 264330341291
Option 2 ID : 264330341289
Option 3 ID : 264330341292
Option 4 ID : 264330341290
Status : Not Answered
Chosen Option : --

Q.39 Which form of dance does Kumudini Lakhia perform?

- Ans
- 1. Manipuri
 - 2. Bharatanatyam
 - 3. Kathakali
 - 4. Kathak

Question ID : 26433086933
Option 1 ID : 264330341373
Option 2 ID : 264330341376
Option 3 ID : 264330341374
Option 4 ID : 264330341375
Status : Not Answered
Chosen Option : --

Q.40 Which of the following statements about water resource is correct?

- Ans 1. Water is a cyclic resource.
 2. Water is a biotic resource.
 3. Water is a non-renewable resource.
 4. Water is both, biotic and abiotic resource.

Question ID : 264330138013
Option 1 ID : 264330540662
Option 2 ID : 264330540659
Option 3 ID : 264330540661
Option 4 ID : 264330540660
Status : Not Answered
Chosen Option : --

Q.41 Veeranatyam is an ancient form of dance from which of these states?

- Ans 1. Rajasthan
 2. Andhra Pradesh
 3. Uttar Pradesh
 4. Punjab

Question ID : 264330109281
Option 1 ID : 264330429401
Option 2 ID : 264330429404
Option 3 ID : 264330429402
Option 4 ID : 264330429403
Status : Answered
Chosen Option : 2

Q.42 'The Story of My Experiments with Truth' is an autobiography of _____.

- Ans 1. Mahatma Gandhi
 2. Sardar Vallabhbhai Patel
 3. Jawaharlal Nehru
 4. Bhimrao Ambedkar

Question ID : 26433054171
Option 1 ID : 264330211669
Option 2 ID : 264330211670
Option 3 ID : 264330211668
Option 4 ID : 264330211671
Status : Answered
Chosen Option : 1

Q.43 According to the 2011 Census, the literacy rate among females in India is _____ compared to males.

- Ans 1. unpredictable
 2. equal
 3. lower
 4. higher

Question ID : 264330179275
Option 1 ID : 264330703106
Option 2 ID : 264330703105
Option 3 ID : 264330703104
Option 4 ID : 264330703103
Status : Answered
Chosen Option : 3

Q.44 Irregular growth of teeth is due to the deficiencies of vitamin ____.

- Ans
- 1. K
 - 2. A
 - 3. B
 - 4. D

Question ID : 264330120063
Option 1 ID : 264330470509
Option 2 ID : 264330470507
Option 3 ID : 264330470508
Option 4 ID : 264330470510
Status : Not Answered
Chosen Option : --

Q.45 Rashtrakuta ruler Dantidurga died without a male heir and was succeeded by his uncle_____.

- Ans
- 1. Amoghavarsha I
 - 2. Indra I
 - 3. Govinda I
 - 4. Krishna I

Question ID : 264330182259
Option 1 ID : 264330714861
Option 2 ID : 264330714860
Option 3 ID : 264330714859
Option 4 ID : 264330714862
Status : Not Answered
Chosen Option : --

Q.46 Which famous chemist refuted the theory of 'vitalism' by saying that organic substances can only be produced from living things?

- Ans
- 1. John Dalton
 - 2. Antoine Lavoisier
 - 3. Friedrich Wohler
 - 4. Marcellin Berthelot

Question ID : 264330177874
Option 1 ID : 264330697586
Option 2 ID : 264330697585
Option 3 ID : 264330697583
Option 4 ID : 264330697584
Status : Not Answered
Chosen Option : --

Q.47 With which of the following states is the 'Popir' dance associated?

- Ans
- 1. Arunachal Pradesh
 - 2. Madhya Pradesh
 - 3. Jharkhand
 - 4. Chhattisgarh

Question ID : 264330106193
Option 1 ID : 264330417073
Option 2 ID : 264330417075
Option 3 ID : 264330417074
Option 4 ID : 264330417076
Status : Answered
Chosen Option : 1

Q.48 The first Battle of Panipat was fought on 20 April 1526 between Babur and _____.

- Ans
- 1. Sikandar Lodi
 - 2. Mahmud Lodi
 - 3. Ibrahim Lodi
 - 4. Bahlul Lodi

Question ID : 264330113572
Option 1 ID : 264330446375
Option 2 ID : 264330446373
Option 3 ID : 264330446376
Option 4 ID : 264330446374
Status : Answered
Chosen Option : 3

Q.49 Who among the following has the power to make provision as he/she may think fit for the discharge of the functions of the Governor of a State in any contingency?

- Ans
- 1. Chief Justice of India
 - 2. President
 - 3. Prime Minister
 - 4. Chief Justice of the High Court

Question ID : 26433053627
Option 1 ID : 264330209811
Option 2 ID : 264330209810
Option 3 ID : 264330209813
Option 4 ID : 264330209812
Status : Answered
Chosen Option : 2

Q.50 From which Five-Year Plan period was the formulation and implementation of the Five-Year Plan discontinued by the Government of India?

- Ans
- 1. Twelfth Five-Year Plan
 - 2. Tenth Five-Year Plan
 - 3. Eleventh Five-Year Plan
 - 4. Ninth Five-Year Plan

Question ID : 264330111742
Option 1 ID : 264330439056
Option 2 ID : 264330439054
Option 3 ID : 264330439055
Option 4 ID : 264330439053
Status : Answered
Chosen Option : 1

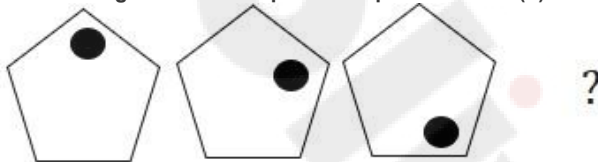
Section : Reasoning

Q.1 16 is related to 24 following a certain logic. Following the same logic, 22 is related to 33. To which of the following is 36 related, following the same logic?
(NOTE: Operations should be performed on the whole numbers, without breaking down the numbers into their constituent digits. E.g. 13 – Operations on 13 such as adding/subtracting/multiplying etc. to 13 can be performed. Breaking down 13 into 1 and 3 and then performing mathematical operations on 1 and 3 is not allowed.)

- Ans
- 1. 49
 - 2. 45
 - 3. 51
 - 4. 54

Question ID : 264330177413
Option 1 ID : 264330695824
Option 2 ID : 264330695825
Option 3 ID : 264330695826
Option 4 ID : 264330695823
Status : Answered
Chosen Option : 4

Q.2 Select the figure that will replace the question mark (?) in the following figure series.

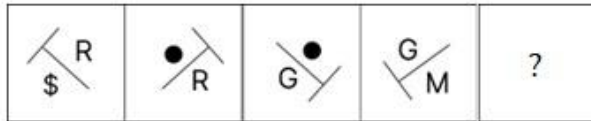


Ans

- 1.
- 2.
- 3.
- 4.

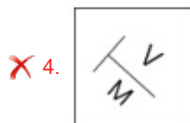

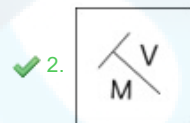
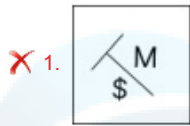
Question ID : 264330112030
Option 1 ID : 264330440207
Option 2 ID : 264330440205
Option 3 ID : 264330440206
Option 4 ID : 264330440208
Status : Answered
Chosen Option : 1

Q.3 Given below is a series of figures – A, B, C and D which follow a particular pattern. Which of the given option figures should come in place of E to continue the series?



(A) (B) (C) (D) (E)

Ans



Question ID : 264330111289

Option 1 ID : 264330437243

Option 2 ID : 264330437242

Option 3 ID : 264330437244

Option 4 ID : 264330437241

Status : Answered

Chosen Option : 2

Q.4 Two statements are given, followed by two conclusions numbered I and II. Assuming the statements to be true, even if they seem to be at variance with commonly known facts, decide which of the conclusions logically follow(s) from the statements.

Statements:

All houses are buildings.

Some houses are apartments.

Conclusions:

I. All buildings are houses.

II. Some buildings are apartments.

Ans ✗ 1. Both Conclusions I and II follow.

✗ 2. Neither Conclusion I nor II follows.

✗ 3. Only Conclusion I follows.

✓ 4. Only Conclusion II follows.

Question ID : 26433081677

Option 1 ID : 264330320543

Option 2 ID : 264330320544

Option 3 ID : 264330320541

Option 4 ID : 264330320542

Status : Answered

Chosen Option : 4

Q.5 Which figure should replace the question mark (?) if the following series were to be continued?

	♡		P		K		♡		I											
P	I	3	K	N	3	I	♡	♡	N	3	I	P	3	N	K	K	P	3	N	?
N				K				P				I								

Ans

✗ 1.

			♡
N	3	P	K
I			

✓ 2.

			K
♡	3	P	I
N			

✗ 3.

			♡
N	K	P	3
I			

✗ 4.

			N
♡	3	P	I
K			

Question ID : 264330103886
 Option 1 ID : 264330407847
 Option 2 ID : 264330407846
 Option 3 ID : 264330407848
 Option 4 ID : 264330407845
 Status : Answered
 Chosen Option : 2

Q.6 Which of the following option figures will complete the pattern in the figure given below?



Ans

X 1.



X 2.



✓ 3.



X 4.



Question ID : 26433080615

Option 1 ID : 264330316393

Option 2 ID : 264330316396

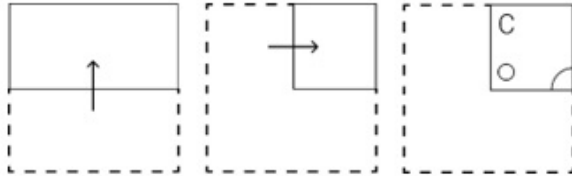
Option 3 ID : 264330316394

Option 4 ID : 264330316395

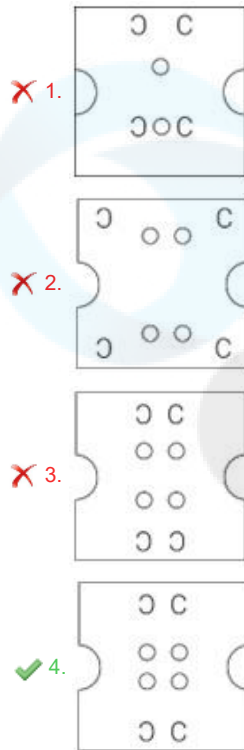
Status : Answered

Chosen Option : 3

Q.7 A paper is folded and cut as shown below. How will it appear when unfolded?



Ans



Question ID : 264330114712

Option 1 ID : 264330450934

Option 2 ID : 264330450933

Option 3 ID : 264330450935

Option 4 ID : 264330450936

Status : Answered

Chosen Option : 4

Q.8 If P denotes '×', Q denotes '+', R denotes '+', and S denotes '-', then what will come in place of '?' in the following equation?

$$(7)^2 R (8 Q 2) P 13 R (63 Q 7) P 8 S 41 = ?$$

Ans 1. 136

2. 132

3. 140

4. 128

Question ID : 26433069207

Option 1 ID : 264330271343

Option 2 ID : 264330271340

Option 3 ID : 264330271341

Option 4 ID : 264330271342

Status : Answered

Chosen Option : 2

Q.9 Select the option that represents the letters that, when sequentially placed from left to right in the blanks below, will complete the letter series.

_ L _ O P H _ N _ P H L N _ _ H L _ O _

- Ans
- 1. HNOLOPPN
 - 2. NHLOPONP
 - 3. NHOLOPPN
 - 4. HNLOOPNP

Question ID : 26433095982

Option 1 ID : 264330376700

Option 2 ID : 264330376697

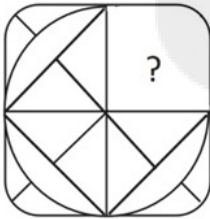
Option 3 ID : 264330376699

Option 4 ID : 264330376698

Status : Answered

Chosen Option : 4

Q.10 Select the figure from the options that can replace the question mark (?) and complete the given pattern.

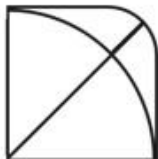


Ans

1.



2.



3.



4.



Question ID : 26433082910

Option 1 ID : 264330325474

Option 2 ID : 264330325476

Option 3 ID : 264330325475

Option 4 ID : 264330325473

Status : Answered

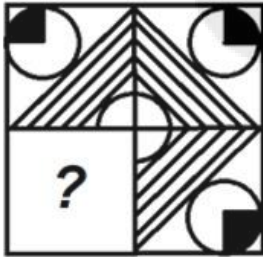
Chosen Option : 4

Q.11 Select the correct combination of mathematical signs that can sequentially replace the * signs and balance the given equation.
 $6 * 12 * 3 * 8 * 3 * 35$

- Ans
- 1. +, -, x, +, =
 - 2. +, -, x, +, =
 - 3. +, +, x, -, =
 - 4. +, x, -, +, =

Question ID : 26433079093
 Option 1 ID : 264330310379
 Option 2 ID : 264330310377
 Option 3 ID : 264330310378
 Option 4 ID : 264330310376
 Status : Answered
 Chosen Option : 3

Q.12 Which of the following answer figures complete the pattern by replacing the question mark? (rotation is NOT allowed).



Ans

- 1.
- 2.
- 3.
- 4.

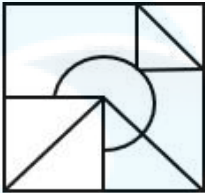
Question ID : 26433069252
 Option 1 ID : 264330271523
 Option 2 ID : 264330271522
 Option 3 ID : 264330271521
 Option 4 ID : 264330271520
 Status : Answered
 Chosen Option : 3

Q.13 The given figure is followed by four option figures. Select the option figure in which this figure is embedded (i.e., contains this figure in the same form; rotation is NOT allowed).

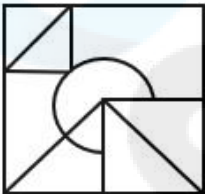


Ans

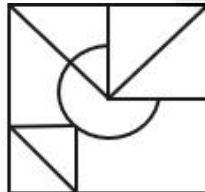
✗ 1.



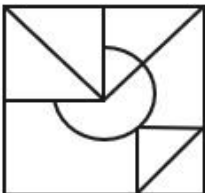
✗ 2.



✓ 3.



✗ 4.



Question ID : 264330121620

Option 1 ID : 264330476652

Option 2 ID : 264330476654

Option 3 ID : 264330476653

Option 4 ID : 264330476651

Status : Answered

Chosen Option : 3

Q.14 In a certain code language, 'JAM' is written as 'KCP' and 'MUG' is written as 'NWJ'. How will 'TEA' be written in that language?

Ans ✓ 1. UGD

✗ 2. UGC

✗ 3. UFB

✗ 4. UFC

Question ID : 26433087176

Option 1 ID : 264330342343

Option 2 ID : 264330342344

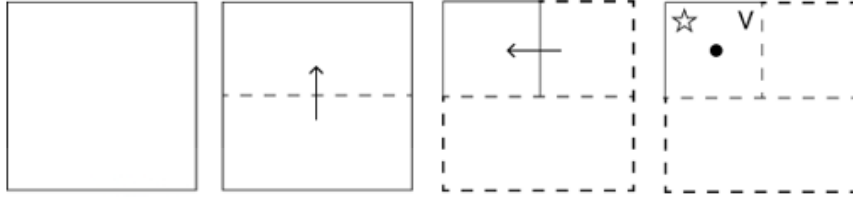
Option 3 ID : 264330342342

Option 4 ID : 264330342341

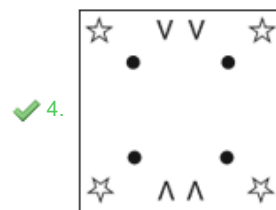
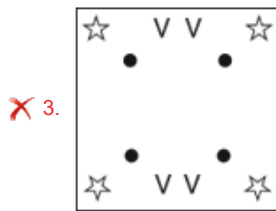
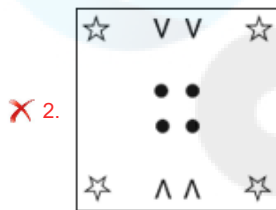
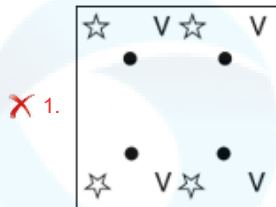
Status : Answered

Chosen Option : 1

Q.15 A square sheet of paper is folded along the dotted line successively along the directions shown and is then punched in the last. How would the paper look when unfolded?



Ans



Question ID : 264330172425

Option 1 ID : 264330676252

Option 2 ID : 264330676254

Option 3 ID : 264330676251

Option 4 ID : 264330676253

Status : Answered

Chosen Option : 4

Q.16 Seven kids, G, H, I, J, K, L and M, are sitting in a straight row facing north. Only two people sit to the right of H. Only three people sit between H and I. J sits to the immediate right of H and to the immediate left of G. K sits to the immediate right of L and is not a neighbour of H.

Who sits second from the extreme left end of the row?

- Ans
- 1. I
 - 2. H
 - 3. K
 - 4. L

Question ID : 26433089504
Option 1 ID : 264330351517
Option 2 ID : 264330351520
Option 3 ID : 264330351518
Option 4 ID : 264330351519
Status : Answered
Chosen Option : 4

Q.17 Select the option that is related to the third word in the same way as the second word is related to the first word. (The words must be considered as meaningful English words and must NOT be related to each other based on the number of letters/number of consonants/vowels in the word)
Hot : Summer :: Cold : ?

- Ans
- 1. Winter
 - 2. August
 - 3. April
 - 4. February

Question ID : 26433069139
Option 1 ID : 264330271069
Option 2 ID : 264330271071
Option 3 ID : 264330271070
Option 4 ID : 264330271068
Status : Answered
Chosen Option : 1

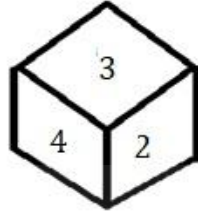
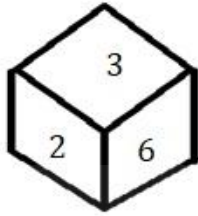
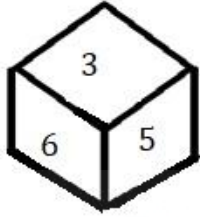
Q.18 Select the set in which the numbers are related in the same way as are the numbers of the following sets.

(NOTE : Operations should be performed on the whole numbers, without breaking down the numbers into its constituent digits. E.g. 13 – Operations on 13 such as adding /deleting /multiplying etc. to 13 can be performed. Breaking down 13 into 1 and 3 and then performing mathematical operations on 1 and 3 is NOT allowed)
(6, 48), (12, 168)

- Ans
- 1. (14, 224)
 - 2. (13, 182)
 - 3. (16, 278)
 - 4. (19, 342)

Question ID : 26433052041
Option 1 ID : 264330203468
Option 2 ID : 264330203466
Option 3 ID : 264330203467
Option 4 ID : 264330203469
Status : Answered
Chosen Option : 1

Q.19 Three different positions of the same dice are shown. Find the number on the face opposite the face having '1'.



Ans 1. 6

2. 3

3. 4

4. 2

Question ID : 264330118175

Option 1 ID : 264330464515

Option 2 ID : 264330464517

Option 3 ID : 264330464518

Option 4 ID : 264330464516

Status : Answered

Chosen Option : 2

Q.20 Which of the following option figures will complete the pattern in the figure given below?



Ans

✗ 1.



✗ 2.



✗ 3.



✓ 4.



Question ID : 26433089620

Option 1 ID : 264330351981

Option 2 ID : 264330351983

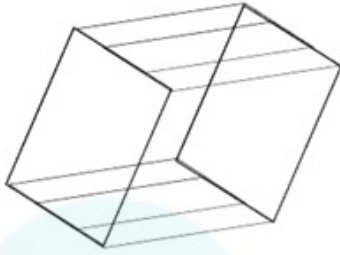
Option 3 ID : 264330351982

Option 4 ID : 264330351984

Status : Answered

Chosen Option : 4

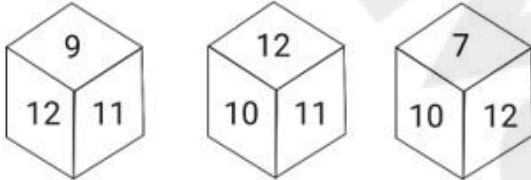
Q.21 How many triangles are there in the given figure?



- Ans
- 1. 6
 - 2. 4
 - 3. 7
 - 4. 5

Question ID : 26433085578
Option 1 ID : 264330336015
Option 2 ID : 264330336013
Option 3 ID : 264330336016
Option 4 ID : 264330336014
Status : Answered
Chosen Option : 1

Q.22 Six numbers, 7, 8, 9, 10, 11 and 12 are written on different faces of a dice. Three positions of this dice are shown here. Find the number on the face opposite 11.



- Ans
- 1. 9
 - 2. 10
 - 3. 8
 - 4. 7

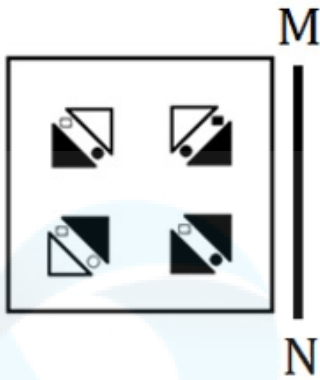
Question ID : 264330106399
Option 1 ID : 264330417899
Option 2 ID : 264330417900
Option 3 ID : 264330417898
Option 4 ID : 264330417897
Status : Answered
Chosen Option : 4

Q.23 Which of the following options will replace the question mark (?) in the given series?
47, 56.4, 67.68, 81.216, ?

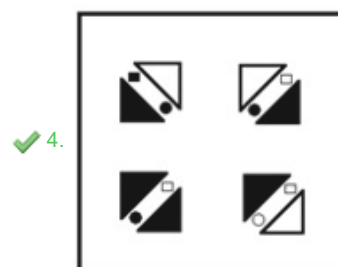
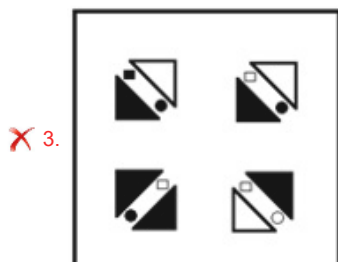
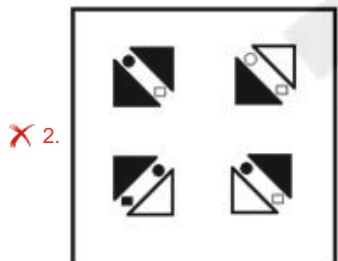
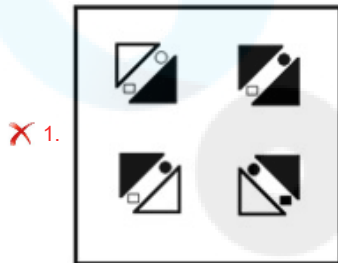
- Ans
- 1. 97.4592
 - 2. 9.7632
 - 3. 86.9544
 - 4. 91.3462

Question ID : 264330109441
Option 1 ID : 264330430041
Option 2 ID : 264330430044
Option 3 ID : 264330430043
Option 4 ID : 264330430042
Status : Marked For Review
Chosen Option : 1

Q.24 Select the correct mirror image of the given combination when the mirror is placed at 'MN' as shown below.



Ans



Question ID : 264330112990

Option 1 ID : 264330444047

Option 2 ID : 264330444046

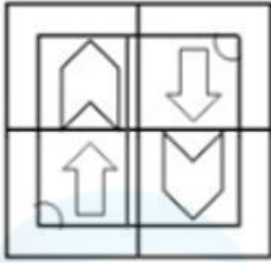
Option 3 ID : 264330444045

Option 4 ID : 264330444048

Status : Answered

Chosen Option : 4

Q.25 Select the option figure which is embedded in the given figure as its part (rotation is NOT allowed).



Ans

- 1.
- 2.
- 3.
- 4.

Question ID : 264330116995
Option 1 ID : 264330460063
Option 2 ID : 264330460062
Option 3 ID : 264330460061
Option 4 ID : 264330460064
Status : Answered
Chosen Option : 4

Section : Numerical Ability

Q.1 A sum of money was lent at 12.5% rate of yearly compound interest for three years. If the present value (i.e. after three years) of the sum of money is ₹13,851, then how much money (in ₹) was lent?

- Ans
- 1. 10000
 - 2. 10278
 - 3. 8728
 - 4. 9728

Question ID : 264330108984
Option 1 ID : 264330428215
Option 2 ID : 264330428216
Option 3 ID : 264330428213
Option 4 ID : 264330428214
Status : Answered
Chosen Option : 4

Q.2 A, B and C can do a piece of work in 40, 60 and 120 days, respectively. In how many days can A do the work if he is assisted by B and C on every third day?

- Ans 1. 30
 2. 20
 3. 25
 4. 35

Question ID : 264330104222
Option 1 ID : 264330409190
Option 2 ID : 264330409189
Option 3 ID : 264330409191
Option 4 ID : 264330409192
Status : Answered
Chosen Option : 1

Q.3 The average of 7.012, 4.018, 6.012, 4.048, and 3.91, is:

- Ans 1. 3.5
 2. 7
 3. 5
 4. 4.5

Question ID : 264330168924
Option 1 ID : 264330662499
Option 2 ID : 264330662501
Option 3 ID : 264330662500
Option 4 ID : 264330662502
Status : Answered
Chosen Option : 3

Q.4 If $184 \div 11.5 = 16$, then $1.84 \div 1.15$ is:

- Ans 1. 1.6
 2. 0.6
 3. 1.06
 4. 0.16

Question ID : 264330111437
Option 1 ID : 264330437834
Option 2 ID : 264330437833
Option 3 ID : 264330437835
Option 4 ID : 264330437836
Status : Answered
Chosen Option : 1

Q.5 Find the number of lead balls, each 2 cm in diameter, that can be made from a sphere of diameter 20 cm.

- Ans 1. 1000
 2. 150
 3. 1500
 4. 100

Question ID : 264330168564
Option 1 ID : 264330661070
Option 2 ID : 264330661067
Option 3 ID : 264330661068
Option 4 ID : 264330661069
Status : Answered
Chosen Option : 1

Q.6 If the diameter of a solid sphere is 28 cm, its hemisphere will have curved surface area (in cm^2) of:

(Take $\pi = \frac{22}{7}$)

- Ans**
- 1. 1731
 - 2. 1844
 - 3. 1232
 - 4. 1764

Question ID : 264330112433
Option 1 ID : 264330441818
Option 2 ID : 264330441817
Option 3 ID : 264330441820
Option 4 ID : 264330441819
Status : Answered
Chosen Option : 3

Q.7 In an election, there were three candidates: Ram, Ramesh and Ganesh. Ram received 48% votes and Ramesh received 36% votes. If the total number of votes polled was 40,000, find the number of votes received by Ganesh.

- Ans**
- 1. 6900
 - 2. 7400
 - 3. 6400
 - 4. 7800

Question ID : 264330104289
Option 1 ID : 264330409459
Option 2 ID : 264330409458
Option 3 ID : 264330409457
Option 4 ID : 264330409460
Status : Answered
Chosen Option : 3

Q.8 A table is sold for ₹5,862 with 20% profit. The gain or loss percentage (to one decimal place) if it had been sold at ₹5,000, is:

- Ans**
- 1. 1.5% loss
 - 2. 2.4% profit
 - 3. 2.3% loss
 - 4. 1.6% profit

Question ID : 264330106348
Option 1 ID : 264330417695
Option 2 ID : 264330417694
Option 3 ID : 264330417693
Option 4 ID : 264330417696
Status : Answered
Chosen Option : 3

Q.9 What is the principal on a certain sum of money at 5% per annum for $2\frac{2}{5}$ years if the amount is ₹1,120?

- Ans
- 1. ₹1,000
 - 2. ₹5,000
 - 3. ₹500
 - 4. ₹2,000

Question ID : 264330182527
Option 1 ID : 264330715900
Option 2 ID : 264330715902
Option 3 ID : 264330715899
Option 4 ID : 264330715901
Status : Answered
Chosen Option : 1

Q.10 If $x : y = 2 : 3$, $y : z = 4 : 7$ and $z : w = 7 : 3$, then $x : y : z : w$ is:

- Ans
- 1. 12 : 8 : 21 : 9
 - 2. 8 : 4 : 21 : 9
 - 3. 8 : 12 : 21 : 9
 - 4. 4 : 21 : 9 : 8

Question ID : 264330106076
Option 1 ID : 264330416608
Option 2 ID : 264330416605
Option 3 ID : 264330416606
Option 4 ID : 264330416607
Status : Answered
Chosen Option : 3

Q.11 Simplify $\frac{7 \div (7 \times 7)}{(7 \div 7) \times 7}$.

- Ans
- 1. 1
 - 2. 49
 - 3. $\frac{1}{49}$
 - 4. 7

Question ID : 264330103919
Option 1 ID : 264330407978
Option 2 ID : 264330407980
Option 3 ID : 264330407979
Option 4 ID : 264330407977
Status : Answered
Chosen Option : 3

Q.12 A person spends 80% of his income. His income increases by 30% and his expenditure also increases by 10%. By what percentage will his savings increase?

- Ans
- 1. 90%
 - 2. 110%
 - 3. 104%
 - 4. 98%

Question ID : 264330129402
Option 1 ID : 264330506974
Option 2 ID : 264330506977
Option 3 ID : 264330506976
Option 4 ID : 264330506975
Status : Answered
Chosen Option : 2

Q.13 Ramesh sells an article at a discount of 15% of the marked price and he gains 25%. If the marked price of the article is ₹7,600, then the cost price of the article is:

- Ans
- 1. ₹5,168
 - 2. ₹5,188
 - 3. ₹5,178
 - 4. ₹5,198

Question ID : 264330179637
Option 1 ID : 264330704543
Option 2 ID : 264330704546
Option 3 ID : 264330704544
Option 4 ID : 264330704545
Status : Marked For Review
Chosen Option : 1

Q.14 The number of all prime numbers less than 40 is:

- Ans
- 1. 12
 - 2. 13
 - 3. 11
 - 4. 10

Question ID : 264330104477
Option 1 ID : 264330410210
Option 2 ID : 264330410211
Option 3 ID : 264330410209
Option 4 ID : 264330410212
Status : Answered
Chosen Option : 2

Q.15 A missile travels at 1152 km/h. How much distance (in m) does it travel in one second?

- Ans
- 1. 380
 - 2. 320
 - 3. 340
 - 4. 360

Question ID : 264330122988
Option 1 ID : 264330482016
Option 2 ID : 264330482017
Option 3 ID : 264330482015
Option 4 ID : 264330482018
Status : Answered
Chosen Option : 2

Section : Computer Proficiency

Q.1 Which of the following types of networking is used to connect all the computers within a school or within an office?

- Ans**
- 1. Metropolitan Area Network
 - 2. Personal Area Network
 - 3. Wide Area Network
 - 4. Local Area Network

Question ID : 264330178245
Option 1 ID : 264330699037
Option 2 ID : 264330699038
Option 3 ID : 264330699036
Option 4 ID : 264330699035
Status : Marked For Review
Chosen Option : 2

Q.2 What is the full form of email?

- Ans**
- 1. Express mail
 - 2. Efficient mail
 - 3. Electro mail
 - 4. Electronic mail

Question ID : 264330182023
Option 1 ID : 264330713933
Option 2 ID : 264330713934
Option 3 ID : 264330713931
Option 4 ID : 264330713932
Status : Answered
Chosen Option : 4

Q.3 In MS Excel 365, Which option is typically used to save a new spreadsheet for the first time?

- Ans**
- 1. Save and New
 - 2. Save and Print
 - 3. Save As
 - 4. Close

Question ID : 264330177659
Option 1 ID : 264330696753
Option 2 ID : 264330696754
Option 3 ID : 264330696751
Option 4 ID : 264330696752
Status : Answered
Chosen Option : 1

Q.4 Which of the following is used to select the entire paragraph in MS-Word 365?

- Ans 1. Triple-click
 2. Double-click
 3. Scroll
 4. Single-click

Question ID : 264330175971
Option 1 ID : 264330690181
Option 2 ID : 264330690180
Option 3 ID : 264330690182
Option 4 ID : 264330690179
Status : Answered
Chosen Option : 2

Q.5 The keyboard shortcut _____ is used to create bullets in MS Word 2010.

- Ans 1. Ctrl + Shift + B
 2. Ctrl + Shift + L
 3. Ctrl + Alt + L
 4. Ctrl + Alt + B

Question ID : 264330181073
Option 1 ID : 264330710235
Option 2 ID : 264330710237
Option 3 ID : 264330710236
Option 4 ID : 264330710238
Status : Not Answered
Chosen Option : --

Q.6 Which of the following shortcut key is used to convert the selected font to subscript in MS Word 365?

- Ans 1. Shift + =
 2. Ctrl + +
 3. Ctrl + =
 4. Shift + +

Question ID : 264330179440
Option 1 ID : 264330703765
Option 2 ID : 264330703764
Option 3 ID : 264330703763
Option 4 ID : 264330703766
Status : Not Answered
Chosen Option : --

Q.7 Which is the following options defines the 'Clipboard' in Microsoft Word 365?

- Ans 1. Accessing the internet
 2. Changing font settings
 3. Creating hyperlinks
 4. Storing and managing copied or cut text and objects

Question ID : 264330182787
Option 1 ID : 264330716919
Option 2 ID : 264330716921
Option 3 ID : 264330716922
Option 4 ID : 264330716920
Status : Answered
Chosen Option : 4

Q.8 In MS Excel 365, Which of the following is used to open a save dialog box in MS-Excel?

- Ans
- 1. View -> save
 - 2. Home -> save
 - 3. Data -> save
 - 4. File -> save

Question ID : 264330178258
Option 1 ID : 264330699087
Option 2 ID : 264330699090
Option 3 ID : 264330699088
Option 4 ID : 264330699089
Status : Answered
Chosen Option : 1

Q.9 The thesaurus tool in MS word 365 is used for _____.

- Ans
- 1. finding similar words in the document
 - 2. checking for nouns and verbs
 - 3. checking for synonyms and antonyms
 - 4. finding repeated words in the document

Question ID : 264330182070
Option 1 ID : 264330714121
Option 2 ID : 264330714122
Option 3 ID : 264330714119
Option 4 ID : 264330714120
Status : Marked For Review
Chosen Option : 4

Q.10 In Microsoft Excel 365, which type of sorting places values from smallest to largest?

- Ans
- 1. Ascending order
 - 2. Random order
 - 3. Descending order
 - 4. Alphanumeric order

Question ID : 264330180691
Option 1 ID : 264330708732
Option 2 ID : 264330708733
Option 3 ID : 264330708731
Option 4 ID : 264330708734
Status : Answered
Chosen Option : 1