

Constable Executive Male and Female in Delhi Police Examination 2023

Roll Number	
Candidate Name	
Venue Name	
Exam Date	30/11/2023
Exam Time	12:00 PM - 1:30 PM
Subject	Constable Executive Male and Female in Delhi Police Examination 2023

Section : General Knowledge

Q.1 A 20-page autobiography, 'Waiting for a Visa', is written by _____, which is about his experiences with untouchability.

- Ans
- 1. Jyotiba Phule
 - 2. Gopal Krishna Gokhale
 - 3. Bhimrao Ramji Ambedkar
 - 4. Mahatma Gandhi

Question ID : 264330112856
Option 1 ID : 264330443512
Option 2 ID : 264330443511
Option 3 ID : 264330443509
Option 4 ID : 264330443510
Status : Answered
Chosen Option : 3

Q.2 Terekhol, Chapora, Mapusa, Sal, Zuari etc. are the major rivers of which state?

- Ans
- 1. Telangana
 - 2. Goa
 - 3. Chhattisgarh
 - 4. Gujarat

Question ID : 264330113532
Option 1 ID : 264330446215
Option 2 ID : 264330446213
Option 3 ID : 264330446216
Option 4 ID : 264330446214
Status : Marked For Review
Chosen Option : 3

Q.3 Which of the below mentioned items are NOT the part of revenue expenditure as per government budget?

- Ans
- 1. Infrastructural Development Expenditure
 - 2. Salaries and Pensions
 - 3. Subsidies
 - 4. Interest payments

Question ID : 264330130650
Option 1 ID : 264330511713
Option 2 ID : 264330511714
Option 3 ID : 264330511712
Option 4 ID : 264330511711
Status : Answered
Chosen Option : 3

Q.4 Which of the following Constitutional Amendment Acts of the Indian Constitution facilitated the appointment of the same person as governor for two or more states?

- Ans
- 1. 7th
 - 2. 5th
 - 3. 8th
 - 4. 10th

Question ID : 264330120185
Option 1 ID : 264330470996
Option 2 ID : 264330470995
Option 3 ID : 264330470997
Option 4 ID : 264330470998
Status : Not Answered
Chosen Option : --

Q.5 Choose the correct group of greenhouse gases.

- Ans
- 1. CH₄, O₂, CO₂, N₂
 - 2. CH₄, O₂, CO₂, O₃
 - 3. CH₄, N₂O, CO₂, O₃
 - 4. H₂, O₂, CO₂, N₂

Question ID : 264330111899
Option 1 ID : 264330439682
Option 2 ID : 264330439684
Option 3 ID : 264330439681
Option 4 ID : 264330439683
Status : Answered
Chosen Option : 3

Q.6 In which year did India's 'National Food for Work Programme' begin?

- Ans
- 1. 2003
 - 2. 2002
 - 3. 2004
 - 4. 2000

Question ID : 264330130598
Option 1 ID : 264330511505
Option 2 ID : 264330511504
Option 3 ID : 264330511506
Option 4 ID : 264330511503
Status : Not Answered
Chosen Option : --

Q.7 Which of the following was NOT a disadvantage of the green revolution?

- Ans
- 1. High use of fertilisers and pesticides resulted in health illnesses.
 - 2. Most of the crops introduced during green revolution were intensive crops.
 - 3. It promoted extensive use of chemicals.
 - 4. It reduced India's import of food grains

Question ID : 264330120894
Option 1 ID : 264330473794
Option 2 ID : 264330473793
Option 3 ID : 264330473792
Option 4 ID : 264330473791
Status : Answered
Chosen Option : 4

Q.8 Terraces that are level on opposite sides of the valley are referred to as _____ terraces.

- Ans
- 1. horizontal
 - 2. paired
 - 3. symmetrical
 - 4. triangular

Question ID : 264330131744
Option 1 ID : 264330516075
Option 2 ID : 264330516077
Option 3 ID : 264330516076
Option 4 ID : 264330516078
Status : Answered
Chosen Option : 1

Q.9 Which of these festivals commemorates the resurrection of Jesus from the dead?

- Ans
- 1. Good Friday
 - 2. New Year
 - 3. Christmas
 - 4. Easter

Question ID : 264330109312
Option 1 ID : 264330429527
Option 2 ID : 264330429525
Option 3 ID : 264330429526
Option 4 ID : 264330429528
Status : Answered
Chosen Option : 4

Q.10 Rural Self-Employment Training Institute is an initiative of which Ministry of the Government of India?

- Ans
- 1. Ministry of Agriculture
 - 2. Ministry of Rural Development
 - 3. Ministry of Labour and Employment
 - 4. Ministry of Finance

Question ID : 264330138078
Option 1 ID : 264330540921
Option 2 ID : 264330540920
Option 3 ID : 264330540922
Option 4 ID : 264330540919
Status : Answered
Chosen Option : 2

Q.11 Which of the following statements is correct with respect to the Attorney General of India?

- Ans** 1. He/She can participate in sessions of the parliament.
 2. He/She can vote in the Lok Sabha during the passage of confidence motion and no-confidence motion.
 3. He/She cannot participate in joint sitting of the parliament.
 4. He/She does not enjoy any immunity or privileges as compared to members of the parliament.

Question ID : 264330177749

Option 1 ID : 264330697103

Option 2 ID : 264330697104

Option 3 ID : 264330697105

Option 4 ID : 264330697106

Status : **Not Attempted and Marked For Review**

Chosen Option : --

Q.12 Consider the below mentioned statements and select the correct option with respect to the Indian folk and tribal dance forms:

- i) Matki is the folk dance of Assam.
ii) Thang Ta is the folk dance of Manipur.
iii) Fugdi is the folk dance of Goa.

- Ans** 1. Only (ii) is right.
 2. Both (i) and (ii) are right.
 3. Both (ii) and (iii) are right.
 4. Only (i) is right.

Question ID : 264330181381

Option 1 ID : 264330711449

Option 2 ID : 264330711448

Option 3 ID : 264330711450

Option 4 ID : 264330711447

Status : **Answered**

Chosen Option : 3

Q.13 The students in a physics lab have been asked to measure the amount of electric current in a circuit. Which device should they use?

- Ans** 1. Altimeter
 2. Ammeter
 3. Ohmmeter
 4. Voltmeter

Question ID : 264330177007

Option 1 ID : 264330694226

Option 2 ID : 264330694223

Option 3 ID : 264330694225

Option 4 ID : 264330694224

Status : **Answered**

Chosen Option : 2

Q.14 Which American President has written 'Dreams from My Father', an autobiography?

- Ans
- 1. George Bush
 - 2. John Kennedy
 - 3. Barack Obama
 - 4. George Washington

Question ID : 26433086906
Option 1 ID : 264330341265
Option 2 ID : 264330341268
Option 3 ID : 264330341267
Option 4 ID : 264330341266
Status : Answered
Chosen Option : 3

Q.15 Which Article of the Constitution of India mentions that the state shall make effective provision for securing public assistance in cases of unemployment, old age, sickness and disablement?

- Ans
- 1. Article 45
 - 2. Article 47
 - 3. Article 39
 - 4. Article 41

Question ID : 264330180882
Option 1 ID : 264330709493
Option 2 ID : 264330709494
Option 3 ID : 264330709491
Option 4 ID : 264330709492
Status : Not Answered
Chosen Option : --

Q.16 In the game of javelin throw the weight of Javelin for women is:

- Ans
- 1. 600 gm
 - 2. 800 gm
 - 3. 700 gm
 - 4. 825 gm

Question ID : 264330112521
Option 1 ID : 264330442169
Option 2 ID : 264330442171
Option 3 ID : 264330442172
Option 4 ID : 264330442170
Status : Not Answered
Chosen Option : --

Q.17 प्रसिद्ध कलाकार तीजन बाई का संबंध निम्नलिखित में से किससे है?

- Ans
- 1. पंडवानी
 - 2. टिप्पनी
 - 3. कालबेलिया
 - 4. भवाई

Question ID : 264330110436
Option 1 ID : 264330434021
Option 2 ID : 264330434024
Option 3 ID : 264330434022
Option 4 ID : 264330434023
Status : Not Answered
Chosen Option : --

Q.18 Liberalisation is a part of _____ reforms.

- Ans
- 1. social
 - 2. political
 - 3. land
 - 4. economic

Question ID : 264330110192
Option 1 ID : 264330433045
Option 2 ID : 264330433048
Option 3 ID : 264330433046
Option 4 ID : 264330433047
Status : Answered
Chosen Option : 2

Q.19 The victory of the _____ marked the foundation stone of the Delhi Sultanate in India.

- Ans
- 1. Afghans
 - 2. Arabs
 - 3. Persians
 - 4. Turks

Question ID : 264330114825
Option 1 ID : 264330451387
Option 2 ID : 264330451385
Option 3 ID : 264330451388
Option 4 ID : 264330451386
Status : Answered
Chosen Option : 4

Q.20 Goods and services that are provided by the government to all the people and whose consumption is not rivalrous are known as:

- Ans
- 1. public goods
 - 2. final goods
 - 3. private goods
 - 4. intermediate goods

Question ID : 264330111566
Option 1 ID : 264330438350
Option 2 ID : 264330438352
Option 3 ID : 264330438349
Option 4 ID : 264330438351
Status : Answered
Chosen Option : 1

Q.21 Excessive use of pesticides, insecticides and inorganic fertilisers is not good for human health. This is due to the phenomena called:

- Ans
- 1. biomagnification
 - 2. intoxication
 - 3. biotransformation
 - 4. biodilution

Question ID : 264330181673
Option 1 ID : 264330712577
Option 2 ID : 264330712575
Option 3 ID : 264330712578
Option 4 ID : 264330712576
Status : Answered
Chosen Option : 2

Q.22 Padma Bhushan and Sangeet Natak Akademi award winner Rukmini Devi Arundale was an exponent of _____ .

- Ans 1. Bharatanatyam
 2. Kathakali
 3. Kathak
 4. Sattriya

Question ID : 264330111984
Option 1 ID : 264330440022
Option 2 ID : 264330440024
Option 3 ID : 264330440023
Option 4 ID : 264330440021
Status : Answered
Chosen Option : 1

Q.23 Which of the following structures stores carbohydrates?

- Ans 1. Aleuroplast
 2. Elaioplast
 3. Amyloplast
 4. Chloroplast

Question ID : 264330113330
Option 1 ID : 264330445407
Option 2 ID : 264330445408
Option 3 ID : 264330445406
Option 4 ID : 264330445405
Status : Not Answered
Chosen Option : --

Q.24 Who among the following Gupta emperors held the title of Vikramaditya?

- Ans 1. Chandragupta I
 2. Skandagupta
 3. Chandragupta II
 4. Budhagupta

Question ID : 264330182693
Option 1 ID : 264330716545
Option 2 ID : 264330716543
Option 3 ID : 264330716546
Option 4 ID : 264330716544
Status : Answered
Chosen Option : 3

Q.25 Who among the following received the National Award for 'Best Music Direction' in September 2022 for his song 'Marange Toh Vahin Jaa Kar' in the documentary film '1232 KMs'?

- Ans 1. Vishal Bharadwaj
 2. Swanand Kirkire
 3. Amit Trivedi
 4. Ajay Atul

Question ID : 264330113238
Option 1 ID : 264330445037
Option 2 ID : 264330445039
Option 3 ID : 264330445038
Option 4 ID : 264330445040
Status : Not Answered
Chosen Option : --

Q.26 After which infamous incident of 1919 was the Hunter Commission appointed?

- Ans
- 1. Indian educational reforms
 - 2. Kheda mill strike
 - 3. Jallianwala Bagh massacre
 - 4. Komagata Maru

Question ID : 264330114858
Option 1 ID : 264330451517
Option 2 ID : 264330451518
Option 3 ID : 264330451520
Option 4 ID : 264330451519
Status : Answered
Chosen Option : 3

Q.27 The first National Winter Games were hosted by _____ .

- Ans
- 1. Gulmarg
 - 2. Manali
 - 3. Srinagar
 - 4. Auli

Question ID : 264330132534
Option 1 ID : 264330519231
Option 2 ID : 264330519232
Option 3 ID : 264330519234
Option 4 ID : 264330519233
Status : Answered
Chosen Option : 1

Q.28 The Statue of Unity is located at the bank of which of these rivers?

- Ans
- 1. Narmada
 - 2. Krishna
 - 3. Yamuna
 - 4. Ganga

Question ID : 264330109321
Option 1 ID : 264330429563
Option 2 ID : 264330429561
Option 3 ID : 264330429562
Option 4 ID : 264330429564
Status : Answered
Chosen Option : 1

Q.29 भारत के संविधान के निम्नलिखित में से किस भाग को 'भारतीय संविधान की अंतरात्मा' के रूप में संदर्भित किया गया है?

- Ans
- 1. केंद्र-राज्य संबंध
 - 2. मौलिक कर्तव्य
 - 3. मौलिक अधिकार
 - 4. नागरिकता

Question ID : 264330133042
Option 1 ID : 264330521222
Option 2 ID : 264330521220
Option 3 ID : 264330521219
Option 4 ID : 264330521221
Status : Answered
Chosen Option : 3

Q.30 मोहनजोदड़ो नगर नियोजन में निम्नलिखित में से किस प्रकार के पैटर्न का पालन किया गया था?

- Ans
- 1. वृत्तीय
 - 2. आयताकार
 - 3. जाल
 - 4. बेलनाकार

Question ID : 264330106231
Option 1 ID : 264330417227
Option 2 ID : 264330417228
Option 3 ID : 264330417225
Option 4 ID : 264330417226
Status : Answered
Chosen Option : 2

Q.31 Which ethnic group is the largest in China, accounting for over 90% of the population?

- Ans
- 1. Uighur
 - 2. Zhuang
 - 3. Manchu
 - 4. Han

Question ID : 264330179300
Option 1 ID : 264330703203
Option 2 ID : 264330703206
Option 3 ID : 264330703205
Option 4 ID : 264330703204
Status : Answered
Chosen Option : 2

Q.32 How many gold medals has the Indian Hockey team won in the Olympics till 2023?

- Ans
- 1. 11
 - 2. 7
 - 3. 8
 - 4. 10

Question ID : 264330176748
Option 1 ID : 264330693210
Option 2 ID : 264330693209
Option 3 ID : 264330693207
Option 4 ID : 264330693208
Status : Answered
Chosen Option : 2

Q.33 Under Liberalisation in 1991, several foreign exchange reforms were initiated. In this context, which of the following is true for devaluation of domestic currency?

- Ans
- 1. Fixing the domestic currency to all foreign currency
 - 2. Lowering the value of foreign currency in relation to domestic currency
 - 3. Increasing value of domestic currency in relation to foreign currency
 - 4. Lowering the value of domestic currency in relation to foreign currency

Question ID : 264330109130
Option 1 ID : 264330428800
Option 2 ID : 264330428797
Option 3 ID : 264330428799
Option 4 ID : 264330428798
Status : Answered
Chosen Option : 4

Q.34 The All India Trade Union Congress worked for the improvement of the workers' working and living conditions. One of the main leaders of this was _____.

- Ans
- 1. Jyotirao Phule
 - 2. MN Roy
 - 3. GB Pant
 - 4. MG Ranade

Question ID : 264330114868
Option 1 ID : 264330451560
Option 2 ID : 264330451557
Option 3 ID : 264330451559
Option 4 ID : 264330451558
Status : Answered
Chosen Option : 4

Q.35 From which of the following countries has 'advisory jurisdiction of the Supreme Court' been adopted in the Constitution of India?

- Ans
- 1. Cuba
 - 2. Canada
 - 3. Germany
 - 4. Portugal

Question ID : 264330133048
Option 1 ID : 264330521244
Option 2 ID : 264330521245
Option 3 ID : 264330521243
Option 4 ID : 264330521246
Status : Answered
Chosen Option : 2

Q.36 Who among the following was the Secretary of State of India and a member of the Cabinet Mission sent to India by the British Government in 1946?

- Ans
- 1. John Simon
 - 2. Stafford Cripps
 - 3. Lord Irwin
 - 4. Lord Pethick-Lawrence

Question ID : 264330183101
Option 1 ID : 264330718136
Option 2 ID : 264330718137
Option 3 ID : 264330718138
Option 4 ID : 264330718139
Status : Answered
Chosen Option : 2

Q.37 Which Article of the Constitution of India debars the courts to inquire into the proceedings of the State Legislature?

- Ans
- 1. Article 209
 - 2. Article 211
 - 3. Article 210
 - 4. Article 212

Question ID : 26433069860
Option 1 ID : 264330273944
Option 2 ID : 264330273946
Option 3 ID : 264330273945
Option 4 ID : 264330273947
Status : Not Answered
Chosen Option : --

Q.38 Which of the following statements are correct regarding the tribal Festival Medaram

Jathara?

- A. This is the largest tribal festival of India.
- B. This festival is celebrated by the Koya community of Telangana.
- C. This festival is celebrated once in two years in the month of 'Magha' (February) on the full moon day.

- Ans
- 1. A,B and C
 - 2. B and C only
 - 3. A and C only
 - 4. A and B only

Question ID : 264330119835
Option 1 ID : 264330469615
Option 2 ID : 264330469616
Option 3 ID : 264330469617
Option 4 ID : 264330469618
Status : Answered
Chosen Option : 3

Q.39 With reference to the travellers who visited India, who among the following was from Portugal?

- Ans
- 1. François Bernier
 - 2. Nicolo Conti
 - 3. Ibn Batuta
 - 4. Duarte Barbosa

Question ID : 264330119771
Option 1 ID : 264330469360
Option 2 ID : 264330469362
Option 3 ID : 264330469361
Option 4 ID : 264330469359
Status : Answered
Chosen Option : 4

Q.40 Of which state was Mirza Wajid Ali Shah the king in 1856, when it was annexed into the British Empire in India under the doctrine of lapse policy?

- Ans
- 1. Nagpur
 - 2. Satara
 - 3. Jhansi
 - 4. Awadh

Question ID : 264330113574
Option 1 ID : 264330446383
Option 2 ID : 264330446381
Option 3 ID : 264330446382
Option 4 ID : 264330446384
Status : Answered
Chosen Option : 4

Q.41 The Konkan Railway line passes through which of the following groups of states?

- Ans
- 1. Madhya Pradesh, Goa and Karnataka
 - 2. Maharashtra, Goa and Telangana
 - 3. Maharashtra, Goa and Karnataka
 - 4. Maharashtra, Gujarat and Karnataka

Question ID : 264330178721
Option 1 ID : 264330700914
Option 2 ID : 264330700913
Option 3 ID : 264330700911
Option 4 ID : 264330700912
Status : Answered
Chosen Option : 3

Q.42 Which Five-Year Plan was formulated by governments of two political parties?

- Ans
- 1. Eighth Five-Year Plan
 - 2. Sixth Five-Year Plan
 - 3. Fifth Five-Year Plan
 - 4. Ninth Five-Year Plan

Question ID : 264330111740
Option 1 ID : 264330439047
Option 2 ID : 264330439046
Option 3 ID : 264330439045
Option 4 ID : 264330439048
Status : Answered
Chosen Option : 1

Q.43 मनुष्य इतिहास में किस काल से खाद्य उत्पादक बना?

- Ans
- 1. नवपाषाण युग
 - 2. मध्यपाषाण युग
 - 3. पुरापाषाण युग
 - 4. ताम्रपाषाण युग

Question ID : 264330119715
Option 1 ID : 264330469136
Option 2 ID : 264330469135
Option 3 ID : 264330469137
Option 4 ID : 264330469138
Status : Answered
Chosen Option : 1

Q.44 पूर्ण रूप से भारतीय अक्षत वनस्पति को स्थानिक या देशज प्रजाति कहा जाता है, जबकि जो वनस्पतियां भारत के बाहर से आती हैं, उन्हें _____ कहा जाता है।

- Ans
- 1. स्थानीय प्रजाति
 - 2. विदेशज प्रजाति
 - 3. गैर-स्थानीय प्रजाति
 - 4. लुप्तप्राय प्रजाति

Question ID : 264330174353
Option 1 ID : 264330683831
Option 2 ID : 264330683832
Option 3 ID : 264330683834
Option 4 ID : 264330683833
Status : Answered
Chosen Option : 2

Q.45 The Dancer Couple Dhananjays were awarded the Rashtriya Kalidas Samman Award (2019-2020) for their contribution to which Indian dance form?

- Ans
- 1. Mohiniyattam
 - 2. Kathak
 - 3. Bharatanatyam
 - 4. Kuchipudi

Question ID : 264330120414
Option 1 ID : 264330471910
Option 2 ID : 264330471909
Option 3 ID : 264330471907
Option 4 ID : 264330471908
Status : Answered
Chosen Option : 3

Q.46 Which of the following is the correct statement about the directive principles of state policy?

- Ans
- 1. Articles 12-35 of the constitution of India deals with directive principles.
 - 2. Articles 36-51 of the constitution of India deals with directive principles.
 - 3. Articles 62-71 of the constitution of India deals with directive principles.
 - 4. Articles 52-62 of the constitution of India deals with directive principles.

Question ID : 264330118539
Option 1 ID : 264330465557
Option 2 ID : 264330465558
Option 3 ID : 264330465560
Option 4 ID : 264330465559
Status : Answered
Chosen Option : 2

Q.47 Surat, Navsari and Bhavnagar are known for their involvement in which industry?

- Ans
- 1. Software industry
 - 2. Iron and steel industry
 - 3. Automobile industry
 - 4. Diamond industry

Question ID : 264330183063
Option 1 ID : 264330717986
Option 2 ID : 264330717985
Option 3 ID : 264330717987
Option 4 ID : 264330717984
Status : Answered
Chosen Option : 4

Q.48 Which scheme was started in 2000 for additional central assistance to be given to states for basic services such as primary health, primary education, rural shelter, etc.?

- Ans
- 1. Swarnajayanti Gram Swarojgar Yojana
 - 2. Prime Minister Rojgar Yojana
 - 3. Rural Employment Generation Programme
 - 4. Pradhan Mantri Gramodaya Yojana

Question ID : 26433082172

Option 1 ID : 264330322522

Option 2 ID : 264330322523

Option 3 ID : 264330322521

Option 4 ID : 264330322524

Status : **Not Attempted and Marked For Review**

Chosen Option : --

Q.49 In which year did the Indian Badminton team create history by winning the Thomas Cup tournament?

- Ans
- 1. 2020
 - 2. 2019
 - 3. 2022
 - 4. 2021

Question ID : 264330119272

Option 1 ID : 264330467375

Option 2 ID : 264330467377

Option 3 ID : 264330467378

Option 4 ID : 264330467376

Status : **Answered**

Chosen Option : 3

Q.50 The movie RRR has recently been honoured with the prestigious Golden Globe award for the Best Original Song for the track 'Natu Natu'. Who are the singers of this song?

- Ans
- 1. Rahul Sipligunj and Kaala Bhairava
 - 2. Silambarasan TR and Vineeth Sreenivasan
 - 3. KJ Yesudas and Anirudh Ravichander
 - 4. Shankar Mahadevan and Rajesh Krishnan

Question ID : 264330130892

Option 1 ID : 264330512681

Option 2 ID : 264330512679

Option 3 ID : 264330512682

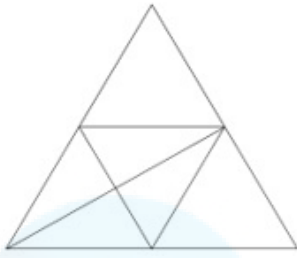
Option 4 ID : 264330512680

Status : **Answered**

Chosen Option : 2

Section : Reasoning

Q.1 How many triangles are there in the given figure?



- Ans
- 1. 13
 - 2. 12
 - 3. 14
 - 4. 11

Question ID : 26433085672

Option 1 ID : 264330336389

Option 2 ID : 264330336390

Option 3 ID : 264330336392

Option 4 ID : 264330336391

Status : Answered

Chosen Option : 1

Q.2 Select the set in which the numbers are related in the same way as are the numbers of the following sets.

(NOTE : Operations should be performed on the whole numbers, without breaking down the numbers into its constituent digits. E.g. 13 – Operations on 13 such as adding /deleting /multiplying etc. to 13 can be performed. Breaking down 13 into 1 and 3 and then performing mathematical operations on 1 and 3 is not allowed.)

(40, 8, 24)

(60, 12, 36)

- Ans
- 1. (70, 14, 44)
 - 2. (80, 14, 42)
 - 3. (70, 14, 42)
 - 4. (80, 14, 44)

Question ID : 264330175035

Option 1 ID : 264330686518

Option 2 ID : 264330686517

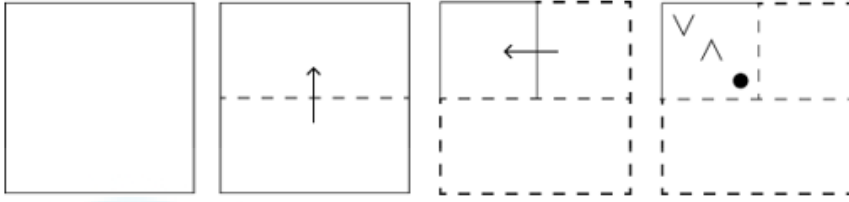
Option 3 ID : 264330686515

Option 4 ID : 264330686516

Status : Answered

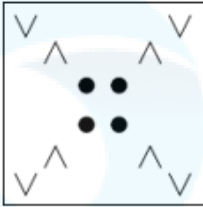
Chosen Option : 3

Q.3 A square sheet of paper is folded along the dotted line successively along the directions shown and is then punched in the last. How would the paper look when unfolded?

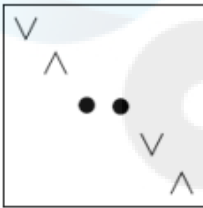


Ans

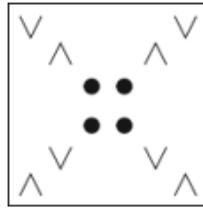
X 1.



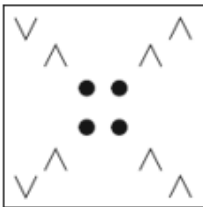
X 2.



✓ 3.



X 4.



Question ID : 264330172430

Option 1 ID : 264330676272

Option 2 ID : 264330676271

Option 3 ID : 264330676274

Option 4 ID : 264330676273

Status : Answered

Chosen Option : 3

Q.4 Which of the following terms will replace the question mark (?) in the given series?
YXQM, UUOL, QRMK, MOKJ, ?

Ans ✓ 1. ILII

X 2. OLJI

X 3. NKII

X 4. INJI

Question ID : 264330102171

Option 1 ID : 264330401149

Option 2 ID : 264330401151

Option 3 ID : 264330401152

Option 4 ID : 264330401150

Status : Answered

Chosen Option : 1

Q.5 Select the correct mirror image of the given combination when the mirror is placed at 'XY' as shown below.

C J R Q 7 5 1 R

X
↓
Y

- Ans
- 1. B T 2 1 0 B 1 C
 - 2. R 1 5 7 Q R J C
 - 3. R 1 5 7 Q R J C
 - 4. C J R Q 7 5 1 R

Question ID : 264330129694

Option 1 ID : 264330508144

Option 2 ID : 264330508142

Option 3 ID : 264330508143

Option 4 ID : 264330508145

Status : Answered

Chosen Option : 2

Q.6 Which figure should replace the question mark (?) if the following series were to be continued?

C	O	T	T	3	↑	3	↑	T	T	O	X	O	X	T	
3		V	V		O	O		V	V	↑	↑			V	?
	↑			C			X			3			6		

Ans

- 1.

T	↑	6
V		X
		O
- 2.

6	↑	O
V		X
		T
- 3.

T	O	X
V		6
		↑
- 4.

T	V	6
X		↑
		O

Question ID : 264330103885

Option 1 ID : 264330407843

Option 2 ID : 264330407841

Option 3 ID : 264330407844

Option 4 ID : 264330407842

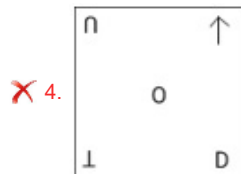
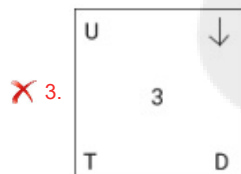
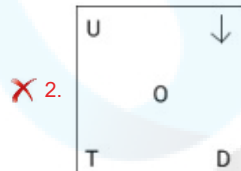
Status : Answered

Chosen Option : 1

Q.7 Which figure should replace the question mark (?) if the following series were to be continued?

U	↓	□	→	←	←	□	↑	□	□	↓	
Z		♡		B		S		3			?
T	D	←	□	□	←	n	↓	↑	n		

Ans



Question ID : 264330103880

Option 1 ID : 264330407823

Option 2 ID : 264330407824

Option 3 ID : 264330407821

Option 4 ID : 264330407822

Status : Answered

Chosen Option : 1

Q.8 Six dogs - P, Q, R, S, T and U - were sitting around a circular table, equidistant to one another. They were facing the centre of the table. Q was exactly between P and S. U was to the immediate right of R. T was to the immediate left of S. Who among the following was sitting third to the left of S?

Ans ✓ 1. R

✗ 2. P

✗ 3. U

✗ 4. Q

Question ID : 26433087006

Option 1 ID : 264330341667

Option 2 ID : 264330341665

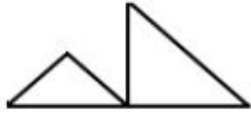
Option 3 ID : 264330341668

Option 4 ID : 264330341666

Status : Answered

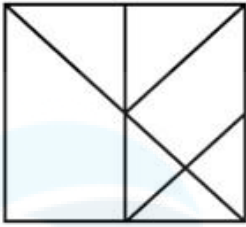
Chosen Option : 1

Q.9 Select the option in which the given figure is embedded (rotation is NOT allowed).

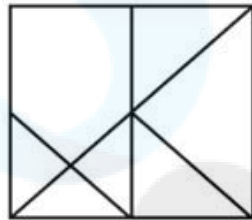


Ans

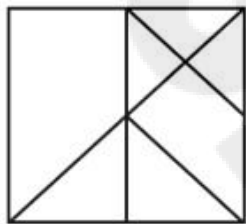
✗ 1.



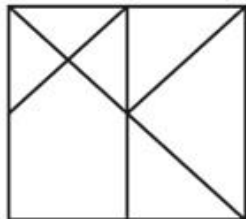
✓ 2.



✗ 3.



✗ 4.



Question ID : 264330106327

Option 1 ID : 264330417612

Option 2 ID : 264330417611

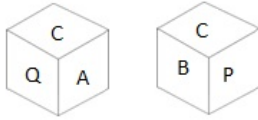
Option 3 ID : 264330417609

Option 4 ID : 264330417610

Status : Answered

Chosen Option : 2

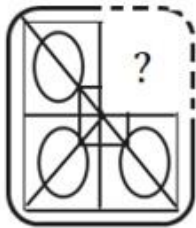
Q.10 Six letters A, B, C, P, Q and R are written on different faces of a dice. Two positions of this dice are shown in the figure. Find the letter on the face opposite to A.



- Ans
- 1. B
 - 2. Q
 - 3. R
 - 4. P

Question ID : 264330109206
 Option 1 ID : 264330429103
 Option 2 ID : 264330429101
 Option 3 ID : 264330429104
 Option 4 ID : 264330429102
 Status : Answered
 Chosen Option : 4

Q.11 Select the option figure that will replace the question mark (?) in the figure given below to complete the pattern.



- Ans
- 1.
 - 2.
 - 3.
 - 4.

Question ID : 264330131105
 Option 1 ID : 264330513534
 Option 2 ID : 264330513533
 Option 3 ID : 264330513531
 Option 4 ID : 264330513532
 Status : Answered
 Chosen Option : 4

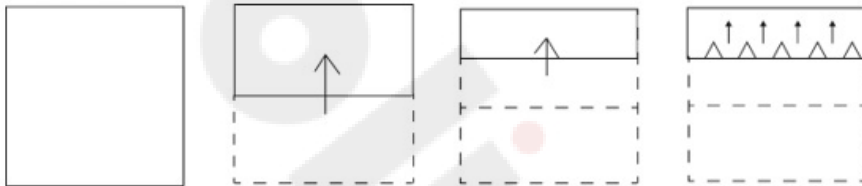
Q.12 Select the option that is related to the third term in the same way as the second term is related to the first term and the sixth term is related to the fifth term.
 $8 : 17 :: 14 : ? :: 20 : 41$

- Ans
- 1. 44
 - 2. 29
 - 3. 30
 - 4. 53



Question ID : 264330101042
 Option 1 ID : 264330396716
 Option 2 ID : 264330396713
 Option 3 ID : 264330396714
 Option 4 ID : 264330396715
 Status : Answered
 Chosen Option : 2

Q.13 The sequence of folding a piece of paper and the manner in which the folded paper is cut are shown in the following figures. How would this paper look when unfolded?

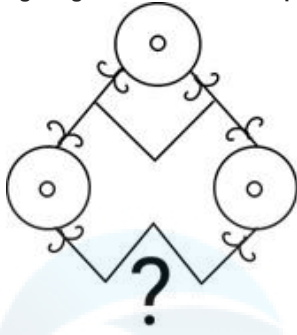


Ans

- 1.
- 2.
- 3.
- 4.

Question ID : 264330118718
 Option 1 ID : 264330466123
 Option 2 ID : 264330466124
 Option 3 ID : 264330466126
 Option 4 ID : 264330466125
 Status : Answered
 Chosen Option : 1

Q.14 Select the figure from the given options that will replace the question mark (?) in the figure given below and complete the pattern.



Ans

1.



2.



3.



4.



Question ID : 264330111714

Option 1 ID : 264330438942

Option 2 ID : 264330438943

Option 3 ID : 264330438941

Option 4 ID : 264330438944

Status : Answered

Chosen Option : 4

Q.15 In a certain code language, 'SENSE' is written as 'GUPGU' and 'PAINT' is written as 'VPKCR'. How will 'KNIFE' be written in that language?

Ans 1. MOKHG

2. GHMPK

3. GHKPM

4. GHOMK

Question ID : 26433087168

Option 1 ID : 264330342309

Option 2 ID : 264330342310

Option 3 ID : 264330342312

Option 4 ID : 264330342311

Status : Answered

Chosen Option : 3

Q.16 Two statements are given followed by two conclusions numbered I and II. Assuming the statements to be true, even if they seem to be at variance from commonly known facts, decide which of the conclusions logically follow(s) from the statements.

Statements:

All Peanuts are Almonds.

All Almonds are Butters.

Conclusions:

I. All Butters are Almonds.

II. All Peanuts are Butters.

- Ans
- 1. Both conclusions I and II follow.
 - 2. Neither conclusion I nor II follows.
 - 3. Only conclusion I follows.
 - 4. Only conclusion II follows.

Question ID : 26433076603

Option 1 ID : 264330300478

Option 2 ID : 264330300479

Option 3 ID : 264330300476

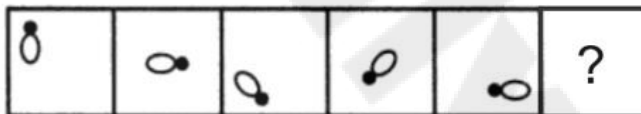
Option 4 ID : 264330300477

Status : Marked For Review

Chosen Option : 4

Q.17 Select the figure from among the given options that can replace the question mark

(?) in the following series.



Ans

- 1.
- 2.
- 3.
- 4.

Question ID : 26433080536

Option 1 ID : 264330316080

Option 2 ID : 264330316077

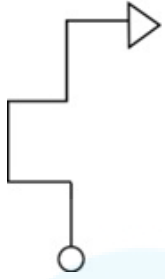
Option 3 ID : 264330316079

Option 4 ID : 264330316078

Status : Answered

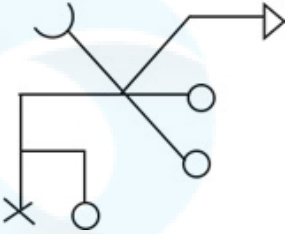
Chosen Option : 2

Q.18 Select the option in which the given figure is embedded (rotation is NOT allowed).

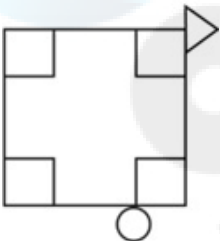


Ans

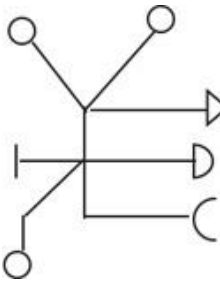
✗ 1.



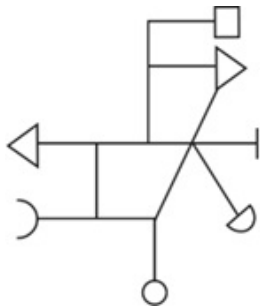
✗ 2.



✗ 3.



✓ 4.



Question ID : 264330111674

Option 1 ID : 264330438783

Option 2 ID : 264330438781

Option 3 ID : 264330438784

Option 4 ID : 264330438782

Status : Answered

Chosen Option : 4

Q.19 Select the number from among the given options that can replace the question mark (?) in the following series.

9, 20, 53, 152, 449, ?

Ans 1. 4344

2. 1340

3. 4233

4. 3146

Question ID : 264330109757

Option 1 ID : 264330431306

Option 2 ID : 264330431307

Option 3 ID : 264330431305

Option 4 ID : 264330431308

Status : Answered

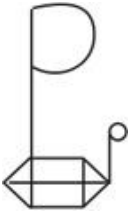
Chosen Option : 2

Q.20 Select the option in which the given figure is embedded (rotation is NOT allowed).

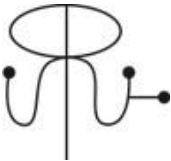


Ans

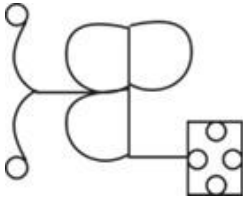
1.




2.



3.



4.



Question ID : 264330111669

Option 1 ID : 264330438763

Option 2 ID : 264330438764

Option 3 ID : 264330438762

Option 4 ID : 264330438761

Status : Answered

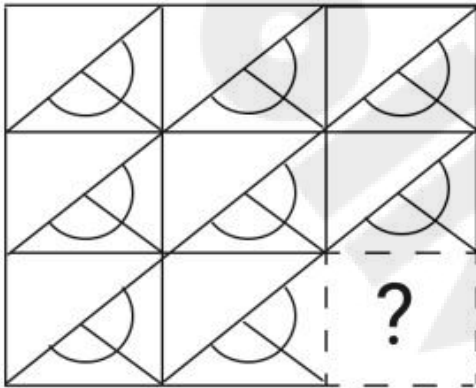
Chosen Option : 3

Q.21 Select the correct combination of mathematical signs to sequentially replace the * signs and to balance the given equation.
 $88 * 4 * 15 * 3 * 1 * 4$

- Ans
- 1. $- + = \times +$
 - 2. $- = \times + +$
 - 3. $+ - = \times +$
 - 4. $+ - \times + =$

Question ID : 26433085727
 Option 1 ID : 264330336609
 Option 2 ID : 264330336611
 Option 3 ID : 264330336612
 Option 4 ID : 264330336610
 Status : Answered
 Chosen Option : 3

Q.22 Select the figure from the options that can replace the question mark (?) and complete the given pattern.



Ans

- 1.
- 2.
- 3.
- 4.

Question ID : 264330106480
 Option 1 ID : 264330418223
 Option 2 ID : 264330418221
 Option 3 ID : 264330418222
 Option 4 ID : 264330418224
 Status : Answered
 Chosen Option : 4

Q.23 उस विकल्प का चयन करें जो तीसरे शब्द से उसी प्रकार संबंधित है, जिस प्रकार दूसरा शब्द पहले शब्द से संबंधित है।
(शब्दों को अर्थपूर्ण हिंदी शब्दों के रूप में माना जाना चाहिए और शब्द में अक्षरों की संख्या/व्यंजनों की संख्या/स्वरों की संख्या के आधार पर उन्हें एक-दूसरे से संबंधित नहीं किया जाना चाहिए)
संपादक : समाचार पत्र :: नाटककार : ?

- Ans
- 1. डिजाइन
 - 2. भूमिका/किरदार
 - 3. सृजन
 - 4. नाटक

Question ID : 26433082578
Option 1 ID : 264330324145
Option 2 ID : 264330324147
Option 3 ID : 264330324146
Option 4 ID : 264330324148
Status : Answered
Chosen Option : 4

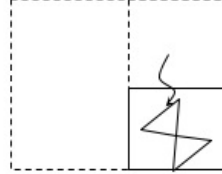
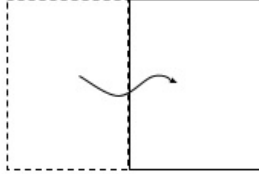
Q.24 Which two signs should be interchanged to make the following equation correct?

$$59 - 44 \div 11 \times 13 + 2 = 81$$

- Ans
- 1. + and +
 - 2. + and -
 - 3. - and ×
 - 4. + and ×

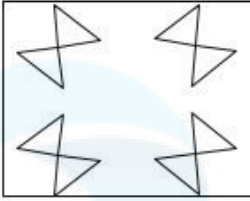
Question ID : 264330101083
Option 1 ID : 264330396877
Option 2 ID : 264330396880
Option 3 ID : 264330396879
Option 4 ID : 264330396878
Status : Answered
Chosen Option : 4

Q.25 A paper is folded and cut as shown below. How will it appear when unfolded?

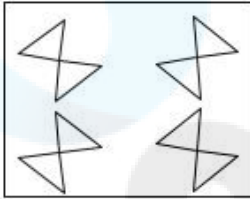


Ans

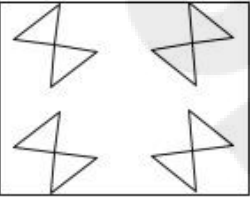
✗ 1.



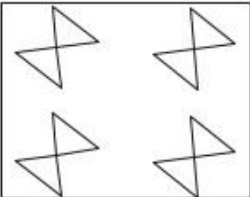
✓ 2.



✗ 3.



✗ 4.



Question ID : 264330118715

Option 1 ID : 264330466112

Option 2 ID : 264330466111

Option 3 ID : 264330466113

Option 4 ID : 264330466114

Status : Answered

Chosen Option : 2

Section : Numerical Ability

Q.1 A shopkeeper gains 35% after allowing a discount of 15% on the marked price of an article. Find his profit per cent if the articles are sold at a marked price allowing no discount.

Ans ✓ 1. 58.82%

✗ 2. 65%

✗ 3. 60%

✗ 4. 62%

Question ID : 264330131833

Option 1 ID : 264330516432

Option 2 ID : 264330516433

Option 3 ID : 264330516431

Option 4 ID : 264330516434

Status : Answered

Chosen Option : 1

Q.2 एक आदमी ने दो अलमारियों को ₹650 प्रत्येक में बेचा, एक पर 30% का लाभ और दूसरी पर 20% की हानि हुई। यदि उसने दोनों अलमारियों को ₹875 प्रत्येक में बेचा होता, तो उसका शुद्ध लाभ/हानि प्रतिशत (निकटतम पूर्णांक तक) कितना होता?

- Ans
- 1. 35% लाभ
 - 2. 42% हानि
 - 3. 33% लाभ
 - 4. 36% हानि

Question ID : 264330106347
Option 1 ID : 264330417689
Option 2 ID : 264330417690
Option 3 ID : 264330417691
Option 4 ID : 264330417692
Status : Answered
Chosen Option : 1

Q.3 The sum of the radius of the base and the height of a solid cylinder is 42 m. If the total surface area of the cylinder is 3696 m^2 , then find its volume.

(Where $\pi = \frac{22}{7}$)

- Ans
- 1. 19240 m^3
 - 2. 17248 m^3
 - 3. 18258 m^3
 - 4. 16445 m^3

Question ID : 264330118148
Option 1 ID : 264330464409
Option 2 ID : 264330464410
Option 3 ID : 264330464407
Option 4 ID : 264330464408
Status : Answered
Chosen Option : 2

Q.4 Meena has ₹20,000 in her savings account. If she spends ₹6,000, what is the decrease in saving as a percentage?

- Ans
- 1. 12%
 - 2. 22%
 - 3. 30%
 - 4. 20%

Question ID : 264330104413
Option 1 ID : 264330409953
Option 2 ID : 264330409955
Option 3 ID : 264330409956
Option 4 ID : 264330409954
Status : Answered
Chosen Option : 3

Q.5 The length of the rectangle is increased by 5% and its breadth is decreased by 5%. The area of the new rectangle is:

- Ans 1. decreased by 0.25%
2. decreased by 1%
3. increased by 0.25%
4. neither increased nor decreased

Question ID : 264330109333
Option 1 ID : 264330429611
Option 2 ID : 264330429612
Option 3 ID : 264330429610
Option 4 ID : 264330429609
Status : Answered
Chosen Option : 1

Q.6 Ritika is riding her motorcycle at a speed of 84 km/h. How many metres will Ritika cover in 45 seconds if she rides at the same speed?

- Ans 1. 1080
2. 1050
3. 1020
4. 1035

Question ID : 264330122845
Option 1 ID : 264330481449
Option 2 ID : 264330481450
Option 3 ID : 264330481448
Option 4 ID : 264330481447
Status : Answered
Chosen Option : 2

Q.7 If 56 workers earn ₹4,050 in 5 days, how much will 48 workers earn in 14 days?

- Ans 1. ₹5,968
2. ₹6,128
3. ₹9,720
4. ₹9,980

Question ID : 264330182585
Option 1 ID : 264330716134
Option 2 ID : 264330716131
Option 3 ID : 264330716132
Option 4 ID : 264330716133
Status : Answered
Chosen Option : 3

Q.8 The sum of two numbers is 72 and their difference is $\frac{1}{9}$ of their sum. Their LCM is:

- Ans
- 1. 120
 - 2. 8
 - 3. 320
 - 4. 160

Question ID : 264330104225
Option 1 ID : 264330409204
Option 2 ID : 264330409201
Option 3 ID : 264330409203
Option 4 ID : 264330409202
Status : Answered
Chosen Option : 4

Q.9 Mr. Singh invests (Simple interest) a sum of ₹1,264 at 5% p.a. in a bank. What is the amount that he will get after 3 years?

- Ans
- 1. ₹2,145.80
 - 2. ₹1,285.80
 - 3. ₹1,453.60
 - 4. ₹1,848.80

Question ID : 264330182520
Option 1 ID : 264330715873
Option 2 ID : 264330715872
Option 3 ID : 264330715874
Option 4 ID : 264330715871
Status : Answered
Chosen Option : 3

Q.10 To wrap a cylinder from all sides, the cloth required to cover the curved area is double the cloth required to cover the flat areas. What is the ratio of the height of the cylinder to the radius of the cylinder?

- Ans
- 1. 2 : 1
 - 2. 1 : 2
 - 3. $1 : \sqrt{2}$
 - 4. $\sqrt{2} : 1$

Question ID : 264330112123
Option 1 ID : 264330440577
Option 2 ID : 264330440578
Option 3 ID : 264330440580
Option 4 ID : 264330440579
Status : Answered
Chosen Option : 1

Q.11 P,Q,R and S are four prime numbers such that their sum equals 45. If it is given that $P < Q < R < S$; then the value of $P^4 + 2P$ is:

- Ans
- 1. 220
 - 2. 635
 - 3. 20
 - 4. 87

Question ID : 264330111449
Option 1 ID : 264330437884
Option 2 ID : 264330437882
Option 3 ID : 264330437883
Option 4 ID : 264330437881
Status : Not Answered
Chosen Option : --

Q.12 If $x = 0.35$ and $y = \frac{6}{5}$, then the value of $x \times y \div (100x - 30y) \times \left(\frac{y}{2.1}\right) + \frac{6}{y}$ is _____.

- Ans
- 1. 6.47
 - 2. 7.46
 - 3. 4.67
 - 4. 4.76

Question ID : 264330112061
Option 1 ID : 264330440332
Option 2 ID : 264330440331
Option 3 ID : 264330440330
Option 4 ID : 264330440329
Status : Answered
Chosen Option : 4

Q.13 Ankit is twice as old as Reena, while Reena is three times older than Sanjana. What is the ratio of the ages of Ankit, Reena and Sanjana?

- Ans
- 1. 8:4:3
 - 2. 6:3:1
 - 3. 2:1:3
 - 4. 1:3:6

Question ID : 264330105973
Option 1 ID : 264330416194
Option 2 ID : 264330416195
Option 3 ID : 264330416193
Option 4 ID : 264330416196
Status : Answered
Chosen Option : 2

Q.14 The population of a village is 8,00,865. If it increases at the rate of 11% per annum, then what was the population of the village 2 years ago?

- Ans
- 1. 4,50,000
 - 2. 6,50,000
 - 3. 8,65,000
 - 4. 5,65,000

Question ID : 264330104525
Option 1 ID : 264330410404
Option 2 ID : 264330410403
Option 3 ID : 264330410402
Option 4 ID : 264330410401
Status : Answered
Chosen Option : 3

Q.15 What is the average of the numbers 15, 27, 34 and 48?

- Ans
- 1. 29
 - 2. 32
 - 3. 33
 - 4. 31

Question ID : 264330131118
Option 1 ID : 264330513585
Option 2 ID : 264330513584
Option 3 ID : 264330513586
Option 4 ID : 264330513583
Status : Answered
Chosen Option : 4

Section : Computer Proficiency

Q.1 Among the following, under which tab will you find the Bullets and Numbering in MS-Word 365?

- Ans
- 1. Page Layout
 - 2. Insert
 - 3. Home
 - 4. References

Question ID : 264330171406
Option 1 ID : 264330672241
Option 2 ID : 264330672240
Option 3 ID : 264330672239
Option 4 ID : 264330672242
Status : Marked For Review
Chosen Option : 1

Q.2 एक नया ई-मेल कम्पोज़ करने की प्रक्रिया में, प्राथमिक प्राप्तकर्ता का ई-मेल एड्रेस इंटर करने का सामान्य स्थान कौन-सा होता है?

- Ans
- 1. ई-मेल का मुख्य भाग (Body of the email)
 - 2. 'CC' फ़ील्ड ('CC' field)
 - 3. सब्जेक्ट लाइन (Subject line)
 - 4. 'To' फ़ील्ड ('To' field)

Question ID : 264330177646
Option 1 ID : 264330696700
Option 2 ID : 264330696702
Option 3 ID : 264330696699
Option 4 ID : 264330696701
Status : Answered
Chosen Option : 4

Q.3 Which of the following keyboard shortcuts helps you copy data in MS Excel 365?

- Ans
- 1. Ctrl + C
 - 2. Ctrl + Y
 - 3. Ctrl + Z
 - 4. Ctrl + X

Question ID : 264330180829
Option 1 ID : 264330709279
Option 2 ID : 264330709281
Option 3 ID : 264330709282
Option 4 ID : 264330709280
Status : Answered
Chosen Option : 1

Q.4 What is the purpose of sorting data in Microsoft Excel 365?

- Ans
- 1. To create charts and graphs
 - 2. To organise data in a specific order based on values
 - 3. To apply formatting to the cells only
 - 4. To calculate averages of the data

Question ID : 264330180690
Option 1 ID : 264330708730
Option 2 ID : 264330708729
Option 3 ID : 264330708727
Option 4 ID : 264330708728
Status : Answered
Chosen Option : 1

Q.5 In Microsoft Word 365, what does the 'B' icon usually represent?

- Ans
- 1. Bold formatting
 - 2. Italic formatting
 - 3. Page break
 - 4. Bullet points

Question ID : 264330180743
Option 1 ID : 264330708939
Option 2 ID : 264330708942
Option 3 ID : 264330708941
Option 4 ID : 264330708940
Status : Answered
Chosen Option : 1

Q.6 Which option in the context menu allows you to paste the copied text with formatting removed in Microsoft Word 365?

- Ans
- 1. Paste
 - 2. Paste as Plain Text
 - 3. Paste Special
 - 4. Paste as Unformatted Text

Question ID : 264330173578
Option 1 ID : 264330680791
Option 2 ID : 264330680793
Option 3 ID : 264330680792
Option 4 ID : 264330680794
Status : Answered
Chosen Option : 4

Q.7 In MS Excel 365, which of the following is the correct shortcut key used to paste data in MS Excel?

- Ans
- 1. Ctrl + C
 - 2. Shift + V
 - 3. Alt + V
 - 4. Ctrl + V

Question ID : 264330176694
Option 1 ID : 264330692991
Option 2 ID : 264330692992
Option 3 ID : 264330692994
Option 4 ID : 264330692993
Status : Answered
Chosen Option : 4

Q.8 Which keyboard shortcut is commonly used to create a new blank document in MS Word 365?

- Ans
- 1. Ctrl + S
 - 2. Ctrl + C
 - 3. Ctrl + O
 - 4. Ctrl + N

Question ID : 264330180854
Option 1 ID : 264330709381
Option 2 ID : 264330709382
Option 3 ID : 264330709380
Option 4 ID : 264330709379
Status : Answered
Chosen Option : 4

Q.9 What does 'ISP' stand for in the context of internet access?

- Ans
- 1. International Security Protocol
 - 2. Internet System Protocol
 - 3. Internet Service Provider
 - 4. Internet Security Program

Question ID : 264330180668
Option 1 ID : 264330708640
Option 2 ID : 264330708639
Option 3 ID : 264330708641
Option 4 ID : 264330708642
Status : Answered
Chosen Option : 2

Q.10 Which of the following icons are a part of the Design menu in MS Word 365?

Ans ✓ 1. Icons to change themes, colours, fonts, effects and page borders

✗ 2. Icons for zooming in and out, print layout, switching windows and splitting windows

✗ 3. Icons for spelling and grammar check, thesaurus and word count

✗ 4. Icons to change font size, style, alignment and borders

Question ID : 264330180645

Option 1 ID : 264330708547

Option 2 ID : 264330708550

Option 3 ID : 264330708549

Option 4 ID : 264330708548

Status : **Marked For Review**

Chosen Option : 2