

Constable Executive Male and Female in Delhi Police Examination 2023

Roll Number	
Candidate Name	
Venue Name	
Exam Date	30/11/2023
Exam Time	3:00 PM - 4:30 PM
Subject	Constable Executive Male and Female in Delhi Police Examination 2023

Section : General Knowledge

Q.1 As per Article 118 of the Constitution of India, who presides over the joint sitting of the two houses?

- Ans
- 1. Prime Minister
 - 2. President
 - 3. Chairman
 - 4. Speaker

Question ID : 264330110599
Option 1 ID : 264330434674
Option 2 ID : 264330434673
Option 3 ID : 264330434676
Option 4 ID : 264330434675
Status : Answered
Chosen Option : 2

Q.2 In 1953, who among the following dancers was called to perform for the coronation festivities of Queen Elizabeth (II)?

- Ans
- 1. Sonal Mansingh
 - 2. Shovana Narayan
 - 3. Kumari Kamala
 - 4. Mrinalini Sarabhai

Question ID : 26433086934
Option 1 ID : 264330341378
Option 2 ID : 264330341380
Option 3 ID : 264330341379
Option 4 ID : 264330341377
Status : Answered
Chosen Option : 4

Q.3 The chemical name of baking soda is:

- Ans
- 1. sodium carbonate (Na_2CO_3)
 - 2. sodium citrate ($\text{Na}_3\text{C}_6\text{H}_5\text{O}_7$)
 - 3. sodium hydrogen carbonate (NaHCO_3)
 - 4. calcium hydrogen bicarbonate (CaHCO_3)₂

Question ID : 264330182935
Option 1 ID : 264330717474
Option 2 ID : 264330717475
Option 3 ID : 264330717472
Option 4 ID : 264330717473
Status : Answered
Chosen Option : 3

Q.4 Which among the following is NOT a basic attribute of Dhamma mentioned in the Ashokan edicts?

- Ans
- 1. Truthfulness
 - 2. Compassion
 - 3. Charity
 - 4. Celibacy

Question ID : 264330130540
Option 1 ID : 264330511273
Option 2 ID : 264330511271
Option 3 ID : 264330511272
Option 4 ID : 264330511274
Status : Not Answered
Chosen Option : --

Q.5 What is the ornate mountain-like entrance gateway before entering the premises of temples located in South India called?

- Ans
- 1. Kalasha
 - 2. Jagati
 - 3. Gopuram
 - 4. Garbagriha

Question ID : 264330141825
Option 1 ID : 264330555622
Option 2 ID : 264330555621
Option 3 ID : 264330555619
Option 4 ID : 264330555620
Status : Answered
Chosen Option : 3

Q.6 According to Census 2011, which union territory of India has the lowest population?

- Ans
- 1. Dadra and Nagar Haveli
 - 2. Puducherry
 - 3. Daman and Diu
 - 4. Lakshadweep

Question ID : 264330132740
Option 1 ID : 264330520058
Option 2 ID : 264330520056
Option 3 ID : 264330520055
Option 4 ID : 264330520057
Status : Answered
Chosen Option : 1

Q.7 Which athlete won the gold medal in the Men's Javelin Throw F46 category at the Para Athletics World Championships 2023?

- Ans
- 1. Ajeet Singh
 - 2. Nishad Kumar
 - 3. Sumit Antil
 - 4. Khilari Sachin

Question ID : 264330176140
Option 1 ID : 264330690856
Option 2 ID : 264330690858
Option 3 ID : 264330690855
Option 4 ID : 264330690857
Status : Answered
Chosen Option : 3

Q.8 India topped the medals tally in the International Shooting Sport Federation (ISSF) World Cup-2022, which was held in Cairo, Egypt from _____.

- Ans**
- 1. 12 January 2022 to 22 January 2022
 - 2. 5 June 2022 to 15 June 2022
 - 3. 10 April 2022 to 19 April 2022
 - 4. 26 February 2022 to 8 March 2022

Question ID : 264330113756
Option 1 ID : 264330447109
Option 2 ID : 264330447111
Option 3 ID : 264330447112
Option 4 ID : 264330447110
Status : Not Answered
Chosen Option : --

Q.9 Which is the lengthiest written Constitution in the world?

- Ans**
- 1. Indian Constitution
 - 2. US Constitution
 - 3. British Constitution
 - 4. French Constitution

Question ID : 264330116384
Option 1 ID : 264330457621
Option 2 ID : 264330457623
Option 3 ID : 264330457622
Option 4 ID : 264330457624
Status : Answered
Chosen Option : 1

Q.10 Who wrote the novel 'Vanity Fair'?

- Ans**
- 1. Lewis Carroll
 - 2. William Thackeray
 - 3. Charles Dickens
 - 4. George Eliot

Question ID : 26433064233
Option 1 ID : 264330251526
Option 2 ID : 264330251525
Option 3 ID : 264330251524
Option 4 ID : 264330251527
Status : Not Answered
Chosen Option : --

Q.11 Who among the following social reformers founded the Ramakrishna Mission?

- Ans**
- 1. Swami Shradhanand
 - 2. Swami Dayanand
 - 3. Swami Vivekananda
 - 4. Swami Vrajananda

Question ID : 264330120308
Option 1 ID : 264330471485
Option 2 ID : 264330471483
Option 3 ID : 264330471484
Option 4 ID : 264330471486
Status : Answered
Chosen Option : 3

Q.12 According to the Economic Survey 2019-20, the top five trading partners of India continue to be USA, China, UAE and _____.
a) Saudi Arabia, b) Hong Kong, c) Singapore, d) Sri Lanka

- Ans
- 1. Both C and D
 - 2. Both A and B
 - 3. Both A and D
 - 4. Both B and C

Question ID : 264330109996
Option 1 ID : 264330432261
Option 2 ID : 264330432264
Option 3 ID : 264330432263
Option 4 ID : 264330432262
Status : Answered
Chosen Option : 4

Q.13 Who founded the Satya Shodhak Samaj ?

- Ans
- 1. Narayan Guru
 - 2. CN Annadurai
 - 3. Jyotirao Phule
 - 4. BR Ambedkar

Question ID : 264330120305
Option 1 ID : 264330471471
Option 2 ID : 264330471474
Option 3 ID : 264330471472
Option 4 ID : 264330471473
Status : Answered
Chosen Option : 3

Q.14 Which musical instrument does Gulam Ahmed, who hails from Uttar Pradesh and has made contributions in the field of art, play apart from Sarod?

- Ans
- 1. Afghani Rabab
 - 2. Doyra
 - 3. Zirbaghali
 - 4. Afghani Ghichak

Question ID : 264330110241
Option 1 ID : 264330433241
Option 2 ID : 264330433243
Option 3 ID : 264330433242
Option 4 ID : 264330433244
Status : Not Answered
Chosen Option : --

Q.15 MK Saroja, a Padma Shri awardee, is known for which form of dance?

- Ans
- 1. Kathak
 - 2. Garba
 - 3. Bharatnatyam
 - 4. Kathakali

Question ID : 26433074884
Option 1 ID : 264330293627
Option 2 ID : 264330293625
Option 3 ID : 264330293626
Option 4 ID : 264330293624
Status : Answered
Chosen Option : 1

Q.16 Who among the following personalities is a Sangeet Natak Akademi award-winning folk dancer from Punjab?

- Ans
- 1. Ram Lal
 - 2. Mamta Chandrakar
 - 3. Nathoo Lal Solanki
 - 4. Balkar Singh Sidhu

Question ID : 264330182986
Option 1 ID : 264330717677
Option 2 ID : 264330717676
Option 3 ID : 264330717679
Option 4 ID : 264330717678
Status : Not Answered
Chosen Option : --

Q.17 The 'Kalol', 'Mehsana' and 'Nawagam' oil fields are associated with which state?

- Ans
- 1. Rajasthan
 - 2. Assam
 - 3. Gujarat
 - 4. Maharashtra

Question ID : 264330181230
Option 1 ID : 264330710843
Option 2 ID : 264330710844
Option 3 ID : 264330710846
Option 4 ID : 264330710845
Status : Answered
Chosen Option : 4

Q.18 Which of the following elements is present in common table salt?

- Ans
- 1. Magnesium
 - 2. Copper
 - 3. Sodium
 - 4. Calcium

Question ID : 264330117614
Option 1 ID : 264330462483
Option 2 ID : 264330462484
Option 3 ID : 264330462481
Option 4 ID : 264330462482
Status : Answered
Chosen Option : 3

Q.19 The Directive Principles of State Policy resembles the 'Instrument of Instructions' enumerated in the _____.

- Ans
- 1. Government of India Act of 1909
 - 2. Government of India Act of 1942
 - 3. Government of India Act of 1935
 - 4. Government of India Act of 1919

Question ID : 264330130451
Option 1 ID : 264330510915
Option 2 ID : 264330510918
Option 3 ID : 264330510917
Option 4 ID : 264330510916
Status : Answered
Chosen Option : 3

Q.20 In which year did the Central Government merge the CSO and NSSO and establish NSO under the Ministry of Statistics and Programme Implementation (MoSPI)?

- Ans 1. 2019
 2. 2017
 3. 2018
 4. 2016

Question ID : 264330130660
Option 1 ID : 264330511751
Option 2 ID : 264330511753
Option 3 ID : 264330511752
Option 4 ID : 264330511754
Status : Answered
Chosen Option : 2

Q.21 Which Indian classical dance is shown in the sculptures at the ancient Konark Sun Temple?

- Ans 1. Odissi
 2. Kuchipudi
 3. Mohiniyattam
 4. Manipuri

Question ID : 264330110401
Option 1 ID : 264330433883
Option 2 ID : 264330433882
Option 3 ID : 264330433884
Option 4 ID : 264330433881
Status : Answered
Chosen Option : 1

Q.22 From which of the following countries did India adopt the 'procedure established by the law'?

- Ans 1. The US
 2. Brazil
 3. Sri Lanka
 4. Japan

Question ID : 264330133046
Option 1 ID : 264330521237
Option 2 ID : 264330521236
Option 3 ID : 264330521238
Option 4 ID : 264330521235
Status : Answered
Chosen Option : 4

Q.23 Chaupakhya Festival is celebrated in the state of _____.

- Ans 1. Rajasthan
 2. Jharkhand
 3. Uttarakhand
 4. Chhattisgarh

Question ID : 264330113175
Option 1 ID : 264330444785
Option 2 ID : 264330444787
Option 3 ID : 264330444788
Option 4 ID : 264330444786
Status : Not Answered
Chosen Option : --

Q.24 The Chief Minister of Delhi is appointed by the _____.

- Ans
- 1. Governor
 - 2. Lieutenant Governor
 - 3. Prime Minister
 - 4. President of India

Question ID : 264330120191
Option 1 ID : 264330471019
Option 2 ID : 264330471022
Option 3 ID : 264330471021
Option 4 ID : 264330471020
Status : Answered
Chosen Option : 1

Q.25 The fifth Khelo India Youth Games was hosted by _____.

- Ans
- 1. Madhya Pradesh
 - 2. Maharashtra
 - 3. Haryana
 - 4. Punjab

Question ID : 264330130635
Option 1 ID : 264330511651
Option 2 ID : 264330511652
Option 3 ID : 264330511654
Option 4 ID : 264330511653
Status : Answered
Chosen Option : 1

Q.26 Which of the following is an example of eastern coast port?

- Ans
- 1. Kandla Port
 - 2. New Mangalore port
 - 3. Mumbai Port
 - 4. Chennai port

Question ID : 264330132714
Option 1 ID : 264330519953
Option 2 ID : 264330519951
Option 3 ID : 264330519954
Option 4 ID : 264330519952
Status : Answered
Chosen Option : 4

Q.27 According to their notion of kingship, many Kushana rulers adopted the title of _____.

- Ans
- 1. Dhartiputra
 - 2. Devaputra
 - 3. Aryaputra
 - 4. Suryaputra

Question ID : 264330119475
Option 1 ID : 264330468184
Option 2 ID : 264330468183
Option 3 ID : 264330468186
Option 4 ID : 264330468185
Status : Not Answered
Chosen Option : --

Q.28 In a food chain, the base of energy pyramid consists of:

- Ans
- 1. primary consumers
 - 2. secondary consumers
 - 3. producers
 - 4. tertiary consumers

Question ID : 264330120071
Option 1 ID : 264330470540
Option 2 ID : 264330470541
Option 3 ID : 264330470539
Option 4 ID : 264330470542
Status : Answered
Chosen Option : 3

Q.29 Who of the following Chola rulers initially occupied the northern part of Sri Lanka in his raids?

- Ans
- 1. Rajaraja I
 - 2. Parantaka I
 - 3. Rajadhiraja I
 - 4. Rajendra I

Question ID : 264330118000
Option 1 ID : 264330463815
Option 2 ID : 264330463816
Option 3 ID : 264330463818
Option 4 ID : 264330463817
Status : Answered
Chosen Option : 4

Q.30 Which of the following educational institute was established by Raja Ram Mohan Roy with the cooperation of David Hare in 1817 in Calcutta?

- Ans
- 1. Vedanta College
 - 2. Sanskrit College
 - 3. Hindu College
 - 4. Calcutta Madrasa

Question ID : 264330120270
Option 1 ID : 264330471336
Option 2 ID : 264330471338
Option 3 ID : 264330471335
Option 4 ID : 264330471337
Status : Answered
Chosen Option : 1

Q.31 Who among the following social reformers developed the modern Bengali Alphabet in British India?

- Ans
- 1. Keshab Chandra Sen
 - 2. Bankim Chandra Chatterjee
 - 3. Ishwar Chandra Vidyasagar
 - 4. Rabindra Nath Tagore

Question ID : 264330120431
Option 1 ID : 264330471976
Option 2 ID : 264330471975
Option 3 ID : 264330471978
Option 4 ID : 264330471977
Status : Answered
Chosen Option : 1

Q.32 According to the Census of India 2011, which Union Territory recorded the lowest literacy rate?

- Ans
- 1. Lakshadweep
 - 2. Puducherry
 - 3. Dadra and Nagar Haveli
 - 4. Daman and Diu

Question ID : 264330131755
Option 1 ID : 264330516122
Option 2 ID : 264330516120
Option 3 ID : 264330516121
Option 4 ID : 264330516119
Status : Answered
Chosen Option : 4

Q.33 Who is the author of the historical fiction 'Legend of Suheldev: The King Who Saved India'?

- Ans
- 1. Ramchandra Guha
 - 2. Ranjit Desai
 - 3. Nandini Sengupta
 - 4. Amish Tripathi

Question ID : 26433092402
Option 1 ID : 264330362897
Option 2 ID : 264330362899
Option 3 ID : 264330362900
Option 4 ID : 264330362898
Status : Not Answered
Chosen Option : --

Q.34 In the Eleventh Five-Year Plan, the Planning Commission targeted reducing the gender gap in literacy to _____ percentage points by 2011-2012.

- Ans
- 1. 10
 - 2. 20
 - 3. 30
 - 4. 40

Question ID : 264330179276
Option 1 ID : 264330703107
Option 2 ID : 264330703108
Option 3 ID : 264330703109
Option 4 ID : 264330703110
Status : Answered
Chosen Option : 2

Q.35 In which year was the National Rural Health Mission launched in India to provide accessible, affordable and quality health care to the rural population?

- Ans 1. 2005
 2. 2010
 3. 2007
 4. 2001

Question ID : 264330130577
Option 1 ID : 264330511420
Option 2 ID : 264330511422
Option 3 ID : 264330511421
Option 4 ID : 264330511419
Status : Not Answered
Chosen Option : --

Q.36 The Nizam Shahi dynasty of Ahmednagar was founded by _____ in 1490.

- Ans 1. Mohammed Shah I
 2. Alauddin Bahman Shah
 3. Tajuddin Firuz Shah
 4. Malik Ahmed Nizamul Mulk Bahri

Question ID : 264330114084
Option 1 ID : 264330448424
Option 2 ID : 264330448421
Option 3 ID : 264330448422
Option 4 ID : 264330448423
Status : Not Answered
Chosen Option : --

Q.37 Which Article of the Constitution of India is associated with the protection and improvement of the environment and safeguarding of forests and wild life?

- Ans 1. Article 39 A
 2. Article 48 A
 3. Article 43 A
 4. Article 51 A

Question ID : 264330181428
Option 1 ID : 264330711635
Option 2 ID : 264330711637
Option 3 ID : 264330711636
Option 4 ID : 264330711638
Status : Answered
Chosen Option : 2

Q.38 In the northern hemisphere, summer solstice occurs on:

- Ans 1. 21st June
 2. 21st May
 3. 21st April
 4. 21st March

Question ID : 264330117625
Option 1 ID : 264330462528
Option 2 ID : 264330462527
Option 3 ID : 264330462526
Option 4 ID : 264330462525
Status : Answered
Chosen Option : 4

Q.39 In which of the following places is the Losar Festival celebrated?

- Ans
- 1. Himachal Pradesh
 - 2. Nagaland
 - 3. Ladakh
 - 4. Lakshadweep

Question ID : 264330130870
Option 1 ID : 264330512593
Option 2 ID : 264330512592
Option 3 ID : 264330512591
Option 4 ID : 264330512594
Status : Answered
Chosen Option : 3

Q.40 Faiyyaz Khan, Latafat Hussein Khan and Dinkar Kaikini are famous exponents from which of the following Gharanas?

- Ans
- 1. Agra
 - 2. Jaipur
 - 3. Benaras
 - 4. Patiala

Question ID : 264330112678
Option 1 ID : 264330442799
Option 2 ID : 264330442798
Option 3 ID : 264330442797
Option 4 ID : 264330442800
Status : Not Answered
Chosen Option : --

Q.41 WTO was formed in the year 1995 to replace which of the following institutions?

- Ans
- 1. Industrial Board of Reconstruction and Development
 - 2. World Bank
 - 3. General Agreement of Trade and Tariff
 - 4. International Monetary Fund

Question ID : 264330111572
Option 1 ID : 264330438376
Option 2 ID : 264330438374
Option 3 ID : 264330438373
Option 4 ID : 264330438375
Status : Answered
Chosen Option : 3

Q.42 What process was discovered in the early 1990s that is currently used to remove ammonia from wastewater and contributes significantly to the loss of fixed nitrogen from the oceans?

- Ans
- 1. Pervasion
 - 2. Anammox
 - 3. Coalescence
 - 4. Volatilisation

Question ID : 264330141724
Option 1 ID : 264330555216
Option 2 ID : 264330555217
Option 3 ID : 264330555218
Option 4 ID : 264330555215
Status : Not Answered
Chosen Option : --

Q.43 Which of the following won the highest number of gold medals in the 36th national games?

- Ans
- 1. Punjab
 - 2. Services Sports Control Board
 - 3. Haryana
 - 4. Maharashtra

Question ID : 264330176925
Option 1 ID : 264330693898
Option 2 ID : 264330693895
Option 3 ID : 264330693897
Option 4 ID : 264330693896
Status : Answered
Chosen Option : 1

Q.44 Which of the following Harappan structures had a thin lining of bitumen to prevent the seepage of water ?

- Ans
- 1. Drainage
 - 2. Great Bath
 - 3. Roads
 - 4. Granaries

Question ID : 264330113553
Option 1 ID : 264330446297
Option 2 ID : 264330446298
Option 3 ID : 264330446299
Option 4 ID : 264330446300
Status : Answered
Chosen Option : 4

Q.45 Under competitive assets market condition, the price of a bond must always be _____ to its present value in equilibrium.

- Ans
- 1. twice
 - 2. half
 - 3. equal
 - 4. thrice

Question ID : 264330116506
Option 1 ID : 264330458109
Option 2 ID : 264330458111
Option 3 ID : 264330458110
Option 4 ID : 264330458112
Status : Answered
Chosen Option : 3

Q.46 Which letter code of Köppen climate characterises a hot-summer humid continental climate?

- Ans
- 1. Cfc
 - 2. BSh
 - 3. ETf
 - 4. Dfa

Question ID : 264330141725
Option 1 ID : 264330555221
Option 2 ID : 264330555222
Option 3 ID : 264330555219
Option 4 ID : 264330555220
Status : Not Answered
Chosen Option : --

Q.47 According to the seventh schedule of the Indian Constitution, Agriculture is in which list?

- Ans
- 1. Both Union and State List
 - 2. Concurrent list
 - 3. State list
 - 4. Union list

Question ID : 264330117572
Option 1 ID : 264330462316
Option 2 ID : 264330462315
Option 3 ID : 264330462314
Option 4 ID : 264330462313
Status : Answered
Chosen Option : 3

Q.48 Who among the following does NOT participate in the election of the President of India?

- Ans
- 1. Elected members of Lok Sabha
 - 2. Elected members of Rajya Sabha
 - 3. Elected members of legislative assembly
 - 4. Elected members of legislative council of state

Question ID : 264330177752
Option 1 ID : 264330697115
Option 2 ID : 264330697116
Option 3 ID : 264330697118
Option 4 ID : 264330697117
Status : Answered
Chosen Option : 4

Q.49 In which Budget was Disinvestment Fund and Asset Management Company set up?

- Ans
- 1. 2003-04
 - 2. 1991-92
 - 3. 1992-93
 - 4. 2000-01

Question ID : 264330109424
Option 1 ID : 264330429976
Option 2 ID : 264330429973
Option 3 ID : 264330429974
Option 4 ID : 264330429975
Status : Not Answered
Chosen Option : --

Q.50 The most common route for MNC investment is to buy up _____.

- Ans
- 1. local resources
 - 2. local technology
 - 3. local companies
 - 4. excess land and factories

Question ID : 264330110003
Option 1 ID : 264330432289
Option 2 ID : 264330432290
Option 3 ID : 264330432292
Option 4 ID : 264330432291
Status : Not Answered
Chosen Option : --

Section : Reasoning

Q.1 Select the set in which the numbers are related in the same way as are the numbers of the following sets.

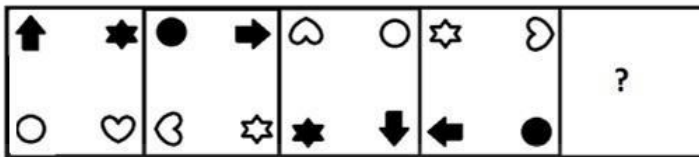
(NOTE: Operations should be performed on the whole numbers, without breaking down the numbers into its constituent digits. E.g. 13 – Operations on 13 such as adding/deleting/multiplying etc. to 13 can be performed. Breaking down 13 into 1 and 3 and then performing mathematical operations on 1 and 3 is not allowed)

(4, 9, 95)
(6, 10, 134)

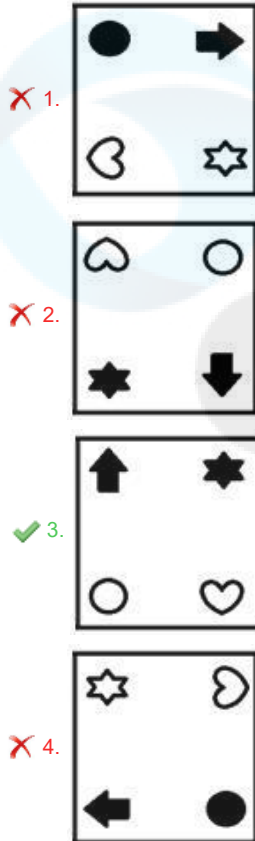
- Ans
- 1. (7, 10, 174)
 - 2. (9, 12, 232)
 - 3. (8, 11, 183)
 - 4. (5, 8, 86)

Question ID : 26433052098
Option 1 ID : 264330203695
Option 2 ID : 264330203697
Option 3 ID : 264330203696
Option 4 ID : 264330203694
Status : Answered
Chosen Option : 3

Q.2 Select the figure from among the given options that can replace the question mark (?) in the following series.



Ans



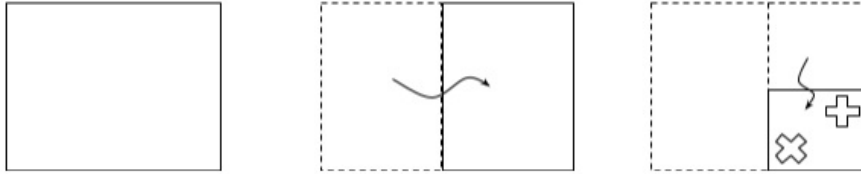
Question ID : 26433096025
 Option 1 ID : 264330376872
 Option 2 ID : 264330376871
 Option 3 ID : 264330376870
 Option 4 ID : 264330376869
 Status : Answered
 Chosen Option : 3

Q.3 In a certain code language, 'LAND' is written as 'BLYJ' and 'BIRD' is written as 'BPGZ'. How will 'WAIT' be written in that language?

- Ans ✓ 1. RGYU
 ✗ 2. YURG
 ✗ 3. UYGR
 ✗ 4. RGUY

Question ID : 26433087169
 Option 1 ID : 264330342313
 Option 2 ID : 264330342315
 Option 3 ID : 264330342314
 Option 4 ID : 264330342316
 Status : Answered
 Chosen Option : 1

Q.4 A paper is folded and cut as shown below. How will it appear when unfolded?



Ans

- ✗ 1.
- ✓ 2.
- ✗ 3.
- ✗ 4.

Question ID : 264330118712

Option 1 ID : 264330466100

Option 2 ID : 264330466099

Option 3 ID : 264330466101

Option 4 ID : 264330466102

Status : Answered

Chosen Option : 2

Q.5 Select the correct combination of mathematical signs to sequentially replace the * signs and to balance the given equation.

$$87 * 2 * 80 * 4 * 150 * 4$$

- Ans ✗ 1. $x - + + =$
- ✗ 2. $x - = + +$
- ✗ 3. $+ x - = +$
- ✓ 4. $x - + = +$

Question ID : 26433085724

Option 1 ID : 264330336597

Option 2 ID : 264330336600

Option 3 ID : 264330336598

Option 4 ID : 264330336599

Status : Answered

Chosen Option : 4

Q.6 Select the option that is related to the fifth letter cluster in the same way as the second letter cluster is related to the first letter cluster and the fourth letter cluster is related to the third letter cluster.

JFBW : FMXD :: KDZI : GKVP :: PRDY : ?

- Ans
- 1. GRUE
 - 2. LAPD
 - 3. NRHX
 - 4. LYZF

Question ID : 26433074694

Option 1 ID : 264330292866

Option 2 ID : 264330292865

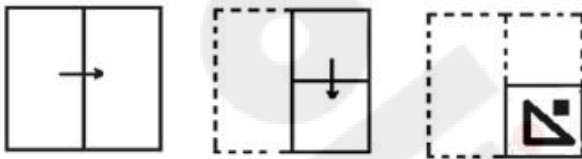
Option 3 ID : 264330292864

Option 4 ID : 264330292867

Status : Answered

Chosen Option : 4

Q.7 A paper is folded and cut as shown below. How will it appear when unfolded?



Ans

- 1.
- 2.
- 3.
- 4.

Question ID : 264330117428

Option 1 ID : 264330461753

Option 2 ID : 264330461754

Option 3 ID : 264330461756

Option 4 ID : 264330461755

Status : Answered

Chosen Option : 3

Q.8 Two statements are given, followed by two conclusions numbered I and II. Assuming the statements to be true, even if they seem to be at variance with commonly known facts, decide which of the conclusions logically follow(s) from the statements.

Statements :

All trees are greens.

Some trees are conifers.

Conclusions:

I. All conifers are greens.

II. Some greens are trees.

Ans ✓ 1. Only Conclusion II follows.

✗ 2. Only Conclusion I follows.

✗ 3. Neither Conclusion I nor II follows.

✗ 4. Both Conclusions I and II follow.

Question ID : 26433081681

Option 1 ID : 264330320558

Option 2 ID : 264330320557

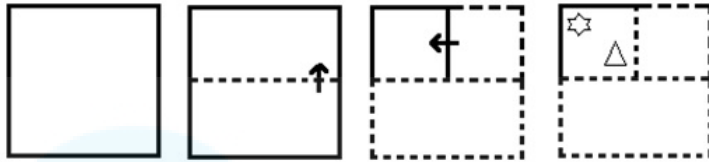
Option 3 ID : 264330320560

Option 4 ID : 264330320559

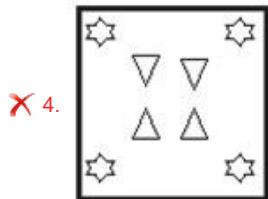
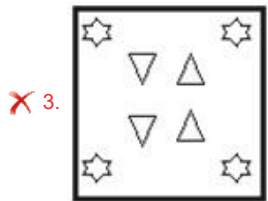
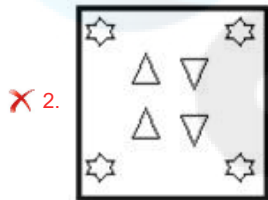
Status : Answered

Chosen Option : 1

Q.9 The sequence of folding a piece of paper and the manner in which the folded paper is cut is shown in the following figures. How would this paper look when unfolded?



Ans

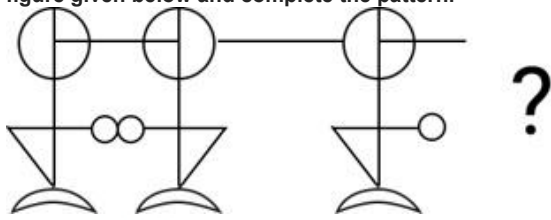


Question ID : 26433074796
 Option 1 ID : 264330293273
 Option 2 ID : 264330293274
 Option 3 ID : 264330293272
 Option 4 ID : 264330293275

Status : Answered

Chosen Option : 1

Q.10 Select the figure from the given options that will replace the question mark (?) in the figure given below and complete the pattern.

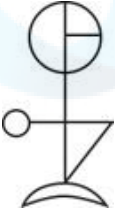


Ans


✗ 1.



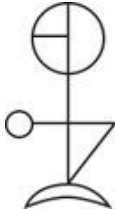
✗ 2.



✗ 3.



✓ 4.



Question ID : 264330111711

Option 1 ID : 264330438931

Option 2 ID : 264330438929

Option 3 ID : 264330438932

Option 4 ID : 264330438930

Status : Answered

Chosen Option : 4

Q.11 Which figure should replace the question mark (?) in the following series to continue the pattern?

2	△	0	9	9	T	2	A									
A	S	T	E	R	△	△	O	E	S	R	9	S	O	E	T	?
0	9	A	R	2	A	△	R									

Ans

✗ 1.

△	2			
S	O	E	T	9
R	A			

✓ 2.

A	E			
T	2	S	O	R
9	△			

✗ 3.

E	R			
A	9	2	S	T
△	0			

✗ 4.

A	R			
T	9	S	O	E
2	△			

Question ID : 264330129611

Option 1 ID : 264330507811

Option 2 ID : 264330507812

Option 3 ID : 264330507813

Option 4 ID : 264330507810

Status : Answered

Chosen Option : 2

Q.12 Six letters, M, N, O, P, Q and R are written on different faces of a dice. Three positions of this dice are shown here. Find the letter on the face opposite O.



- Ans
- 1. P
 - 2. R
 - 3. Q
 - 4. N

Question ID : 264330106404

Option 1 ID : 264330417918

Option 2 ID : 264330417920

Option 3 ID : 264330417919

Option 4 ID : 264330417917

Status : Answered

Chosen Option : 3

Q.13 Which of the following option figures will complete the pattern in the figure given below?



Ans

✓ 1.



✗ 2.



✗ 3.



✗ 4.



Question ID : 26433080601

Option 1 ID : 264330316340

Option 2 ID : 264330316339

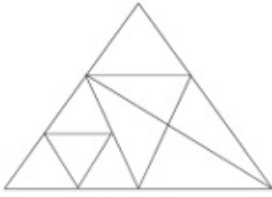
Option 3 ID : 264330316338

Option 4 ID : 264330316337

Status : Answered

Chosen Option : 1

Q.14 How many triangles are there in the given figure?



- Ans
- 1. 15
 - 2. 12
 - 3. 14
 - 4. 17

Question ID : 26433080451

Option 1 ID : 264330315754

Option 2 ID : 264330315752

Option 3 ID : 264330315753

Option 4 ID : 264330315755

Status : Answered

Chosen Option : 1

Q.15 If + means \div , - means +, \times means - and \div means \times , what is the value of the following expressions?

$$20 \div 4 - 27 + 3 \times 12 = ?$$

- Ans
- 1. 75
 - 2. 79
 - 3. 80
 - 4. 77

Question ID : 26433085649

Option 1 ID : 264330336298

Option 2 ID : 264330336299

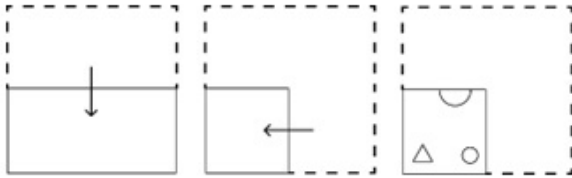
Option 3 ID : 264330336297

Option 4 ID : 264330336300

Status : Answered

Chosen Option : 4

Q.16 A paper is folded and cut as shown below. How will it appear when unfolded?



Ans

- 1.
- 2.
- 3.
- 4.

Question ID : 264330114701

Option 1 ID : 264330450889

Option 2 ID : 264330450892

Option 3 ID : 264330450891

Option 4 ID : 264330450890

Status : Answered

Chosen Option : 3

Q.17 Select the correct mirror image of the given figure when the mirror is placed at PQ as shown below.

(-)/(=+*&#)(X)#

P
|
Q

Ans

- ✗ 1. #(X)(#&#+*=)\(-)
- ✗ 2. #)X)(#&#*+=)\(-)
- ✗ 3. #(X()#&#*+=)\(-)
- ✓ 4. #(X)(#&#*+=)\(-)

Question ID : 26433082025
 Option 1 ID : 264330321936
 Option 2 ID : 264330321934
 Option 3 ID : 264330321933
 Option 4 ID : 264330321935
 Status : Answered
 Chosen Option : 4

Q.18 Six students are sitting around a circular table facing the centre. Dwiti is an immediate neighbour of both Durga and Dheeraj. Dilip is sitting second to the right of Dwiti. Dev is sitting third to the left of Dheeraj. Dilip is an immediate neighbour of both Daksh and Dheeraj. Who is an immediate neighbour of both Daksh and Durga?

- Ans ✓ 1. Dev
- ✗ 2. Dilip
- ✗ 3. Dwiti
- ✗ 4. Dheeraj

Question ID : 264330110709
 Option 1 ID : 264330435115
 Option 2 ID : 264330435114
 Option 3 ID : 264330435113
 Option 4 ID : 264330435116
 Status : Answered
 Chosen Option : 1

Q.19 Select the option that represents the letters that, when sequentially placed from left to right in the blanks below, will complete the letter series.
 T__ES_YR_STY_E_TY__S

- Ans ✓ 1. YRTERSRE
- ✗ 2. YRETRSRE
- ✗ 3. YTRERSRE
- ✗ 4. YETERESE

Question ID : 26433092537
 Option 1 ID : 264330363438
 Option 2 ID : 264330363440
 Option 3 ID : 264330363439
 Option 4 ID : 264330363437
 Status : Answered
 Chosen Option : 1

Q.20 Select the option that is related to the third term in the same way as the second term is related to the first term and the sixth term is related to the fifth term.
 225 : 15 :: 1225 : ? :: 2025 : 45

- Ans 1. 25
 2. 35
 3. 20
 4. 30

Question ID : 264330102260
 Option 1 ID : 264330401506
 Option 2 ID : 264330401508
 Option 3 ID : 264330401505
 Option 4 ID : 264330401507
 Status : Answered
 Chosen Option : 2

Q.21 Which figure should replace the question mark (?) if the series were to be continued?

S	T	T	O	A	U	U	Z	
D	O	U	R	S	D	T	Z	O
R	A	A	U	R	D	D	O	?

Ans

1.

D	O
T	B
U	Z
2.

D	U
T	R
O	Z
3.

D	O
U	B
R	T
4.

D	T
U	B
R	Z

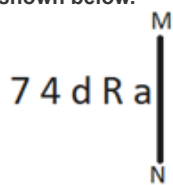
Question ID : 264330130815
 Option 1 ID : 264330512374
 Option 2 ID : 264330512371
 Option 3 ID : 264330512373
 Option 4 ID : 264330512372
 Status : Answered
 Chosen Option : 3

Q.22 Select the number from among the given options that can replace the question mark (?) in the following series.
1, ?, 42, 78, 127, 191

- Ans 1. 17
 2. 21
 3. 16
 4. 15

Question ID : 264330111624
Option 1 ID : 264330438583
Option 2 ID : 264330438584
Option 3 ID : 264330438581
Option 4 ID : 264330438582
Status : Answered
Chosen Option : 1

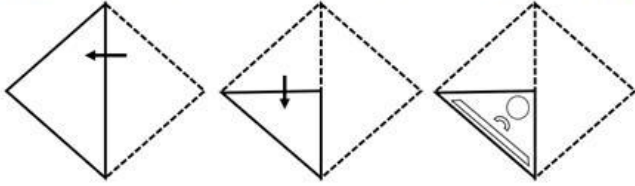
Q.23 Select the correct mirror image of the given figure when the mirror is placed at MN as shown below.



- Ans 1. R a b 4 7
 2. 7 4 d R a
 3. a R b 4 7
 4. 7 4 d R a

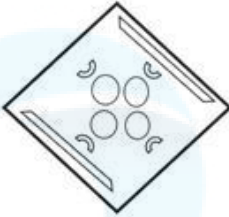
Question ID : 264330166659
Option 1 ID : 264330653677
Option 2 ID : 264330653678
Option 3 ID : 264330653675
Option 4 ID : 264330653676
Status : Answered
Chosen Option : 3

Q.24 A paper is folded and cut as shown below. How will it appear when unfolded?

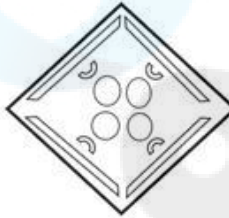


Ans

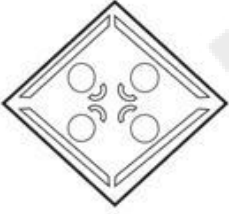
✗ 1.



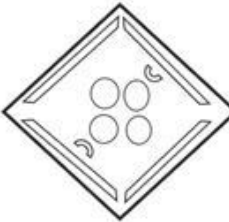
✓ 2.



✗ 3.



✗ 4.

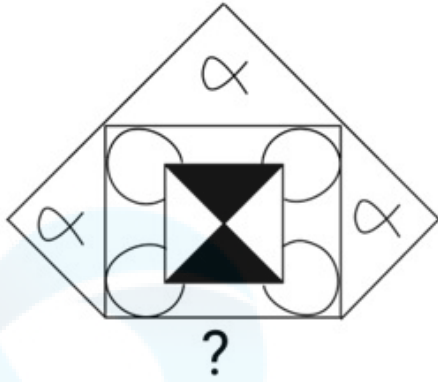


Question ID : 26433076501
Option 1 ID : 264330300069
Option 2 ID : 264330300071
Option 3 ID : 264330300068
Option 4 ID : 264330300070

Status : Answered

Chosen Option : 2

Q.25 Select the figure from the given options that will replace the question mark (?) in the figure given below to complete the pattern.

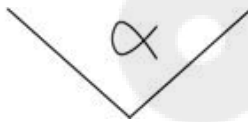


Ans

✗ 1.



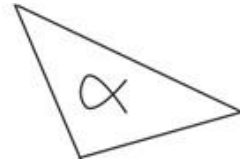
✓ 2.



✗ 3.



✗ 4.



Question ID : 264330116611

Option 1 ID : 264330458531

Option 2 ID : 264330458529

Option 3 ID : 264330458530

Option 4 ID : 264330458532

Status : Answered

Chosen Option : 1

Section : Numerical Ability

Q.1 What is the LCM of 9, 8.1, 0.27, 0.09?

Ans ✗ 1. 8100

✓ 2. 81

✗ 3. 810

✗ 4. 801

Question ID : 264330104335

Option 1 ID : 264330409644

Option 2 ID : 264330409641

Option 3 ID : 264330409643

Option 4 ID : 264330409642

Status : Answered

Chosen Option : 2

Q.2 If the diameter of a hemisphere is 8 cm, then the volume of the hemisphere (in cm^3) is:

Ans

1. $41\frac{2}{3}\pi$

2. $42\frac{2}{3}\pi$

3. $48\frac{1}{3}\pi$

4. $46\frac{1}{3}\pi$

Question ID : 264330119367

Option 1 ID : 264330467755

Option 2 ID : 264330467756

Option 3 ID : 264330467757

Option 4 ID : 264330467758

Status : Answered

Chosen Option : 2

Q.3 How many digits will be there after the decimal point in the product of 0.325 and 1.0302?

Ans

1. 8

2. 5

3. 7

4. 6

Question ID : 264330109327

Option 1 ID : 264330429588

Option 2 ID : 264330429585

Option 3 ID : 264330429587

Option 4 ID : 264330429586

Status : Answered

Chosen Option : 3

Q.4 The HCF of $\frac{1}{3}$, $\frac{2}{3}$, $\frac{2}{9}$ and $\frac{3}{12}$ is:

Ans

1. $\frac{1}{36}$

2. $\frac{1}{60}$

3. $\frac{1}{48}$

4. $\frac{1}{12}$

Question ID : 264330106058

Option 1 ID : 264330416536

Option 2 ID : 264330416535

Option 3 ID : 264330416534

Option 4 ID : 264330416533

Status : Answered

Chosen Option : 1

Q.5 Ram sold a chair at a profit of $7\frac{1}{2}\%$. If he had sold it for ₹1,430 more, he would have gained 35%. What is the cost price of the chair?

- Ans
- 1. ₹5,200
 - 2. ₹4,000
 - 3. ₹5,000
 - 4. ₹4,800

Question ID : 264330118126
Option 1 ID : 264330464322
Option 2 ID : 264330464319
Option 3 ID : 264330464321
Option 4 ID : 264330464320
Status : Answered
Chosen Option : 1

Q.6 A sum of money was borrowed and paid back in two annual installments of ₹960 each, allowing 5% compound interest. The sum borrowed was:

- Ans
- 1. ₹1,785.03
 - 2. ₹1,850.05
 - 3. ₹1,695.05
 - 4. ₹1,875.03

Question ID : 264330104526
Option 1 ID : 264330410407
Option 2 ID : 264330410405
Option 3 ID : 264330410408
Option 4 ID : 264330410406
Status : Not Answered
Chosen Option : --

Q.7 After allowing a discount of 20% on the marked price of an article, it is sold for ₹500. Find its marked price.

- Ans
- 1. ₹550
 - 2. ₹520
 - 3. ₹625
 - 4. ₹525

Question ID : 264330183851
Option 1 ID : 264330721080
Option 2 ID : 264330721081
Option 3 ID : 264330721082
Option 4 ID : 264330721083
Status : Answered
Chosen Option : 3

Q.8 The ratio of incomes of A, B and C is 3 : 5 : 4. If the income of A is tripled, the income of C is doubled and the income of B remains the same, what is the ratio of their new incomes?

- Ans
- 1. 8 : 5 : 9
 - 2. 9 : 5 : 8
 - 3. 9 : 8 : 5
 - 4. 5 : 8 : 9

Question ID : 264330112095
Option 1 ID : 264330440468
Option 2 ID : 264330440465
Option 3 ID : 264330440466
Option 4 ID : 264330440467
Status : Answered
Chosen Option : 2

Q.9 Farida shifted to a job in the social sector at a monthly salary that was 28% less than the monthly salary she was getting in her previous job. If Farida's monthly salary in the job in the social sector is ₹27,000, what was her monthly salary (in ₹) in the previous job?

- Ans
- 1. 36000
 - 2. 37500
 - 3. 38250
 - 4. 38500

Question ID : 264330103243
Option 1 ID : 264330405279
Option 2 ID : 264330405280
Option 3 ID : 264330405277
Option 4 ID : 264330405278
Status : Answered
Chosen Option : 2

Q.10 The difference between the simple interests on ₹1,800 for 3 years at different rates is ₹40. The difference between the rates of interest is:

- Ans
- 1. $\frac{20}{27}\%$
 - 2. $\frac{13}{27}\%$
 - 3. $\frac{23}{27}\%$
 - 4. $\frac{11}{27}\%$

Question ID : 264330119342
Option 1 ID : 264330467657
Option 2 ID : 264330467656
Option 3 ID : 264330467655
Option 4 ID : 264330467658
Status : Answered
Chosen Option : 1

Q.11 A works twice as fast as B. If both of them together can finish a piece of work in 12 days, then B alone can do it in:

- Ans
- 1. 34 days
 - 2. 38 days
 - 3. 36 days
 - 4. 32 days

Question ID : 264330104210
Option 1 ID : 264330409142
Option 2 ID : 264330409144
Option 3 ID : 264330409143
Option 4 ID : 264330409141
Status : Answered
Chosen Option : 3

Q.12 If the average of 5 consecutive numbers is 24, then the smallest number is:

- Ans
- 1. 21
 - 2. 22
 - 3. 23
 - 4. 20

Question ID : 264330129387
Option 1 ID : 264330506915
Option 2 ID : 264330506916
Option 3 ID : 264330506917
Option 4 ID : 264330506914
Status : Answered
Chosen Option : 2

Q.13 There are only two hostels in XYZ University, Hostel P and Hostel Q, wherein an equal number of students were living in year 2021. The total number of persons living in both hostels of XYZ University fell by 33% to 8,375 in 2022 from 2021. How many students were living in Hostel P in 2021?

- Ans
- 1. 12,500
 - 2. 5,750
 - 3. 6,250
 - 4. 5,612

Question ID : 264330112209
Option 1 ID : 264330440923
Option 2 ID : 264330440921
Option 3 ID : 264330440924
Option 4 ID : 264330440922
Status : Answered
Chosen Option : 3

Q.14 A student goes to school at a speed of 20 km/h and reaches 6 min late. If he goes at a speed of 30 km/h, he is 6 min early. What is the distance to the school?

- Ans
- 1. 17 km
 - 2. 16 km
 - 3. 12 km
 - 4. 18 km

Question ID : 264330104530
Option 1 ID : 264330410424
Option 2 ID : 264330410422
Option 3 ID : 264330410423
Option 4 ID : 264330410421
Status : Answered
Chosen Option : 3

Q.15 The side of a triangle is 17 cm and height of the triangle from this side is 10 cm. Find the area of the triangle.

- Ans
- 1. 95 cm^2
 - 2. 90 cm^2
 - 3. 85 cm^2
 - 4. 75 cm^2

Question ID : 264330130969
Option 1 ID : 264330512990
Option 2 ID : 264330512988
Option 3 ID : 264330512987
Option 4 ID : 264330512989
Status : Answered
Chosen Option : 3

Section : Computer Proficiency

Q.1 When you 'reply' to an email, what does it mean?

- Ans
- 1. You're sending the same email back to the original sender.
 - 2. You're sending the email to a different recipient.
 - 3. You're sending a new email to the same recipient.
 - 4. You're deleting the email.

Question ID : 264330182465
Option 1 ID : 264330715652
Option 2 ID : 264330715653
Option 3 ID : 264330715651
Option 4 ID : 264330715654
Status : Answered
Chosen Option : 3

Q.2 Which protocol allows users to make real-time voice and video calls over the internet?

- Ans
- 1. FTP
 - 2. VoIP
 - 3. Email
 - 4. DNS

Question ID : 264330174469
Option 1 ID : 264330684296
Option 2 ID : 264330684297
Option 3 ID : 264330684295
Option 4 ID : 264330684298
Status : Answered
Chosen Option : 1

Q.3 In MS Excel 365, which of the following is the correct shortcut key to open an existing spreadsheet in MS Excel?

- Ans
- 1. Press Alternate (Alt) + N
 - 2. Press Control (Ctrl) + O
 - 3. Press Control (Ctrl) + N
 - 4. Press Alternate (Alt) + O

Question ID : 264330176682
Option 1 ID : 264330692944
Option 2 ID : 264330692946
Option 3 ID : 264330692943
Option 4 ID : 264330692945
Status : Answered
Chosen Option : 2

Q.4 In MS Word 365 which of the following menus is used to open a word document?

- Ans
- 1. Start
 - 2. Mozilla
 - 3. Power
 - 4. Control panel

Question ID : 264330180448
Option 1 ID : 264330707759
Option 2 ID : 264330707761
Option 3 ID : 264330707760
Option 4 ID : 264330707762
Status : Answered
Chosen Option : 1

Q.5 In Microsoft Word 365, the AutoCorrect feature is used for _____.

- Ans
- 1. misspelled text
 - 2. outside margin text
 - 3. formulas
 - 4. short repetitive text

Question ID : 264330182071
Option 1 ID : 264330714126
Option 2 ID : 264330714124
Option 3 ID : 264330714125
Option 4 ID : 264330714123
Status : Answered
Chosen Option : 1

Q.6 In MS Excel 365, which of the following groups contains the Insert and Delete command in the Home tab of the ribbon in MS-Excel 365?

- Ans
- 1. Editing
 - 2. Cells
 - 3. Alignment
 - 4. Font

Question ID : 264330175965
Option 1 ID : 264330690157
Option 2 ID : 264330690158
Option 3 ID : 264330690156
Option 4 ID : 264330690155
Status : Answered
Chosen Option : 1

Q.7 एमएस वर्ड 365 (MS Word 365) में, कौन-सा टेक्स्ट अलाइनमेंट विकल्प आमतौर पर कानूनी दस्तावेजों के लिए उपयोग किया जाता है, क्योंकि यह टेक्स्ट को बाएं और दाएं दोनों हाशिये पर अलाइन करता है, जिससे दाईं ओर एक दंतुरित किनारा (jagged edge) रह जाता है?

- Ans
- 1. लेफ्ट अलाइन (Left Align)
 - 2. सेंटर अलाइन (Center Align)
 - 3. राइट अलाइन (Right Align)
 - 4. जस्टीफाई (Justify)

Question ID : 264330178091
Option 1 ID : 264330698427
Option 2 ID : 264330698429
Option 3 ID : 264330698428
Option 4 ID : 264330698430
Status : Answered
Chosen Option : 2

Q.8 In MS Excel 365, Which of the following keyboard shortcuts is used to auto fit row height manually in MS Excel?

- Ans
- 1. Alt + H + O + A
 - 2. Alt + O + C + W
 - 3. Alt + H + O + H
 - 4. Alt + O + C + N

Question ID : 264330181071
Option 1 ID : 264330710228
Option 2 ID : 264330710229
Option 3 ID : 264330710227
Option 4 ID : 264330710230
Status : Answered
Chosen Option : 1

Q.9 Which of the following tabs is used in MS Word 365 if we want to delete a table?

- Ans
- 1. Insert tab
 - 2. Edit tab
 - 3. File tab
 - 4. Layout tab

Question ID : 264330180423
Option 1 ID : 264330707659
Option 2 ID : 264330707660
Option 3 ID : 264330707661
Option 4 ID : 264330707662
Status : Answered
Chosen Option : 2

Q.10 Which of the following shortcut keys is used to make Centre-aligned text in MS-Word 365?

- Ans
- 1. Ctrl + E
 - 2. Ctrl + R
 - 3. Ctrl + J
 - 4. Ctrl + C

Question ID : 264330173593
Option 1 ID : 264330680851
Option 2 ID : 264330680853
Option 3 ID : 264330680854
Option 4 ID : 264330680852
Status : Answered
Chosen Option : 4