

## Constable Executive Male and Female in Delhi Police Examination 2023

Roll Number	
Candidate Name	
Venue Name	
Exam Date	14/11/2023
Exam Time	9:00 AM - 10:30 AM
Subject	Constable Executive Male and Female in Delhi Police Examination 2023

Section : General Knowledge

**Q.1** When is Maha Shivaratri celebrated according to the Drik Panchang?

- Ans
- 1. Magha, Krishna Paksha, Chaturdashi
  - 2. Ashadh, Krishna Paksha, Trayodashi
  - 3. Phalgun, Shukla Paksha, Ekadashi
  - 4. Chaitra, Shukla Paksha, Ekam

Question ID : 264330110462  
Option 1 ID : 264330434127  
Option 2 ID : 264330434128  
Option 3 ID : 264330434126  
Option 4 ID : 264330434125

Status : Not Attempted and Marked For Review

Chosen Option : --

**Q.2** Which of the following Indian Olympians has written the autobiography titled 'Playing to Win'?

- Ans
- 1. Abhinav Bindra
  - 2. Saina Nehwal
  - 3. Lovlina Borgohain
  - 4. Karnam Malleswari

Question ID : 26433066677  
Option 1 ID : 264330261234  
Option 2 ID : 264330261235  
Option 3 ID : 264330261233  
Option 4 ID : 264330261232

Status : Answered

Chosen Option : 2

**Q.3** Which of the following is/are the goals of five year plans?

- Ans
- 1. Growth, Modernisation, and Equity only
  - 2. Growth only
  - 3. Growth, and Abolition of intermediaries
  - 4. Growth, Modernisation, Equity and Self-reliance

Question ID : 264330117742  
Option 1 ID : 264330462783  
Option 2 ID : 264330462784  
Option 3 ID : 264330462786  
Option 4 ID : 264330462785

Status : Answered

Chosen Option : 4

Q.4 Which of the following cultural festivals is organised by the Uttar Pradesh tourism department?

- Ans  1. Taj Mahotsav  
 2. Hampi Dance Utsav  
 3. Natyanjali Utsav  
 4. Nishagandhi Festival

Question ID : 264330141780  
Option 1 ID : 264330555441  
Option 2 ID : 264330555439  
Option 3 ID : 264330555442  
Option 4 ID : 264330555440  
Status : Answered  
Chosen Option : 1

Q.5 Who among the following was the Prime Minister when the Globalisation Policy as part of 'New Economic Policy' was introduced?

- Ans  1. Manmohan Singh  
 2. PV Narasimha Rao  
 3. Narendra Modi  
 4. Atal Bihari Vajpayee

Question ID : 264330111577  
Option 1 ID : 264330438395  
Option 2 ID : 264330438396  
Option 3 ID : 264330438394  
Option 4 ID : 264330438393  
Status : Answered  
Chosen Option : 2

Q.6 Which Article of the Indian Constitution deals with the Governor's assent to Bills?

- Ans  1. Article 201  
 2. Article 164  
 3. Article 264  
 4. Article 200

Question ID : 26433089974  
Option 1 ID : 264330353375  
Option 2 ID : 264330353373  
Option 3 ID : 264330353374  
Option 4 ID : 264330353376  
Status : Marked For Review  
Chosen Option : 3

Q.7 Which part of the food is defecated?

- Ans  1. Vitamins in food  
 2. Glucose in food  
 3. Nutrients in food  
 4. Unused food

Question ID : 264330118272  
Option 1 ID : 264330464904  
Option 2 ID : 264330464906  
Option 3 ID : 264330464903  
Option 4 ID : 264330464905  
Status : Answered  
Chosen Option : 4

Q.8 Who summons each house of State Legislature to meet from time to time?

- Ans
- 1. Deputy Speaker
  - 2. Chief Minister
  - 3. Governor
  - 4. Speaker

Question ID : 264330173545  
Option 1 ID : 264330680662  
Option 2 ID : 264330680660  
Option 3 ID : 264330680659  
Option 4 ID : 264330680661  
Status : Answered  
Chosen Option : 3

Q.9 Who among the following performed religious rituals for the king during the Vedic period?

- Ans
- 1. Vrajpati
  - 2. Purohita
  - 3. Gramani
  - 4. Senani

Question ID : 264330120235  
Option 1 ID : 264330471195  
Option 2 ID : 264330471196  
Option 3 ID : 264330471197  
Option 4 ID : 264330471198  
Status : Answered  
Chosen Option : 2

Q.10 National Waterways 10 (NW-10) is located in which state?

- Ans
- 1. Kerala
  - 2. West Bengal
  - 3. Tamil Nadu
  - 4. Maharashtra

Question ID : 264330119887  
Option 1 ID : 264330469823  
Option 2 ID : 264330469825  
Option 3 ID : 264330469824  
Option 4 ID : 264330469826  
Status : Not Attempted and Marked For Review  
Chosen Option : --

Q.11 Which of the following pairs is INCORRECT?

- Ans
- 1. Non-ferrous metal – Zinc
  - 2. Precious metal – Platinum
  - 3. Ferrous metal – Iron
  - 4. Non-metal – Lead

Question ID : 264330116378  
Option 1 ID : 264330457599  
Option 2 ID : 264330457597  
Option 3 ID : 264330457598  
Option 4 ID : 264330457600  
Status : Answered  
Chosen Option : 1

Q.12 In which of the following years was the Rowlatt Act passed to suppress the political violence?

- Ans  1. 1919  
 2. 1915  
 3. 1921  
 4. 1924

Question ID : 264330118598  
Option 1 ID : 264330465646  
Option 2 ID : 264330465645  
Option 3 ID : 264330465644  
Option 4 ID : 264330465643  
Status : Answered  
Chosen Option : 1

Q.13 Ustad Allah Rakha, Sabir Khan, Pandit Kishan Maharaj and Pandit Jnan Prakash Ghosh are associated with which musical instrument?

- Ans  1. Shehnai  
 2. Tabla  
 3. Mridangam  
 4. Violin

Question ID : 264330111187  
Option 1 ID : 264330436834  
Option 2 ID : 264330436835  
Option 3 ID : 264330436833  
Option 4 ID : 264330436836  
Status : Answered  
Chosen Option : 2

Q.14 Which of the given monuments is NOT located in Karnataka?

- Ans  1. Kittur Fort  
 2. Hoysaleswara Temple  
 3. Gol Gumbaz  
 4. Palakkad Fort

Question ID : 264330165328  
Option 1 ID : 264330648391  
Option 2 ID : 264330648393  
Option 3 ID : 264330648392  
Option 4 ID : 264330648394  
Status : Answered  
Chosen Option : 4

Q.15 The Indian Parliament approved the 86<sup>th</sup> Constitutional Amendment Act of 2002, which establishes the fundamental right to elementary education for children aged \_\_\_\_\_.

- Ans  1. 5-11 years  
 2. 6-14 Years  
 3. 6-17 Years  
 4. 7-16 Years

Question ID : 264330182974  
Option 1 ID : 264330717628  
Option 2 ID : 264330717629  
Option 3 ID : 264330717631  
Option 4 ID : 264330717630  
Status : Answered  
Chosen Option : 2

Q.16 What was the name of the first dynasty that ruled over Magadh kingdom?

- Ans  1. Haryank dynasty  
 2. Nanda dynasty  
 3. Mauryan dynasty  
 4. Shishunga dynasty

Question ID : 264330123735  
Option 1 ID : 264330484975  
Option 2 ID : 264330484977  
Option 3 ID : 264330484978  
Option 4 ID : 264330484976  
Status : Answered  
Chosen Option : 2

Q.17 Through which of the following Acts does the government check restrictive trade?

- Ans  1. FEMA Act  
 2. Industrial Policy Act 1991  
 3. MRTP Act  
 4. Foreign Trade Policy

Question ID : 264330110194  
Option 1 ID : 264330433054  
Option 2 ID : 264330433055  
Option 3 ID : 264330433053  
Option 4 ID : 264330433056  
Status : Answered  
Chosen Option : 3

Q.18 The 'pawn' is associated with which of the following games?

- Ans  1. Cricket  
 2. Chess  
 3. Tennis  
 4. Badminton

Question ID : 264330130641  
Option 1 ID : 264330511678  
Option 2 ID : 264330511675  
Option 3 ID : 264330511677  
Option 4 ID : 264330511676  
Status : Answered  
Chosen Option : 2

Q.19 Which of the following States hosted the fourth edition of the Khelo India Youth Games?

- Ans  1. Telangana  
 2. Haryana  
 3. Karnataka  
 4. Assam

Question ID : 264330113755  
Option 1 ID : 264330447107  
Option 2 ID : 264330447105  
Option 3 ID : 264330447106  
Option 4 ID : 264330447108  
Status : Answered  
Chosen Option : 2

Q.20 Which of the following stations receives the highest annual rainfall?

- Ans  1. Shillong  
 2. Chennai  
 3. Jodhpur  
 4. Nagpur

Question ID : 264330175825  
Option 1 ID : 264330689599  
Option 2 ID : 264330689601  
Option 3 ID : 264330689602  
Option 4 ID : 264330689600  
Status : Answered  
Chosen Option : 1

Q.21 Which country hosted the IBA Women's World Boxing Championship-2023?

- Ans  1. Bangladesh  
 2. Sri Lanka  
 3. India  
 4. Pakistan

Question ID : 264330113729  
Option 1 ID : 264330447004  
Option 2 ID : 264330447003  
Option 3 ID : 264330447001  
Option 4 ID : 264330447002  
Status : Marked For Review  
Chosen Option : 3

Q.22 Which of the following Articles of the Indian Constitution is related with right to work, to education and to public assistance in certain cases?

- Ans  1. Article 41  
 2. Article 44  
 3. Article 43  
 4. Article 42

Question ID : 264330180057  
Option 1 ID : 264330706211  
Option 2 ID : 264330706214  
Option 3 ID : 264330706213  
Option 4 ID : 264330706212  
Status : Answered  
Chosen Option : 4

Q.23 Which of the following is an example of igneous rock?

- Ans  1. Breccia  
 2. Chert  
 3. Conglomerate  
 4. Rhyolite

Question ID : 264330131680  
Option 1 ID : 264330515821  
Option 2 ID : 264330515822  
Option 3 ID : 264330515820  
Option 4 ID : 264330515819  
Status : Answered  
Chosen Option : 2

**Q.24 Siddi Dhamal is performed in which of the following states as a dance to celebrate successful hunting activity?.**

- Ans**
- 1. Rajasthan
  - 2. Punjab
  - 3. Haryana
  - 4. Gujarat

Question ID : 264330110420  
Option 1 ID : 264330433957  
Option 2 ID : 264330433959  
Option 3 ID : 264330433960  
Option 4 ID : 264330433958  
Status : Answered  
Chosen Option : 1

**Q.25 Who among the following was the Sultan of the Delhi Sultanate when the Bahmani Kingdom was established in South India?**

- Ans**
- 1. Ghiyasuddin Tughluq
  - 2. Muhammad Bin Tughluq
  - 3. Nasir-ud-din Mohammed Tughluq
  - 4. Firuz Shah Tughluq

Question ID : 264330119763  
Option 1 ID : 264330469327  
Option 2 ID : 264330469330  
Option 3 ID : 264330469329  
Option 4 ID : 264330469328  
Status : Answered  
Chosen Option : 3

**Q.26 It is a Fundamental Duty of parents to provide educational opportunities to wards aged \_\_\_\_\_.**

- Ans**
- 1. 7-14 years
  - 2. 6-16 years
  - 3. 6-14 years
  - 4. 6-15 years

Question ID : 264330130778  
Option 1 ID : 264330512224  
Option 2 ID : 264330512226  
Option 3 ID : 264330512225  
Option 4 ID : 264330512223  
Status : Answered  
Chosen Option : 3

Q.27 Which of the following pairs regarding the judicial powers of the Indian President and their definition is INCORRECTLY matched?

- Ans
- 1. Commutation – It denotes the substitution of one form of punishment for a lighter form
  - 2. Respite – It denotes awarding a lesser sentence in place of that which was originally awarded
  - 3. Reprieve – It implies reducing the period of sentence without changing its character
  - 4. Pardon – it removes both the sentences and the conviction

Question ID : 264330130468  
Option 1 ID : 264330510984  
Option 2 ID : 264330510985  
Option 3 ID : 264330510986  
Option 4 ID : 264330510983  
Status : Answered  
Chosen Option : 3

Q.28 Which of the following is an RBI-registered NBFC- MFI that works on a Joint Liability Group lending model of Grameen?

- Ans
- 1. Asirvad Microfinance Limited
  - 2. ESAF Microfinance and Investments (P) Ltd
  - 3. Fusion Microfinance Pvt Ltd
  - 4. BSS Microfinance Limited

Question ID : 264330116500  
Option 1 ID : 264330458085  
Option 2 ID : 264330458087  
Option 3 ID : 264330458088  
Option 4 ID : 264330458086  
Status : Not Attempted and Marked For Review  
Chosen Option : --

Q.29 Which of the following is an example of subsistence crop of Uttar Pradesh?

- Ans
- 1. Jute
  - 2. Cotton
  - 3. Wheat
  - 4. Sugarcane

Question ID : 264330119879  
Option 1 ID : 264330469791  
Option 2 ID : 264330469794  
Option 3 ID : 264330469792  
Option 4 ID : 264330469793  
Status : Answered  
Chosen Option : 4

Q.30 Annie Besant was a Fabian socialist under the influence of \_\_\_\_\_ .

- Ans
- 1. Charles Turner
  - 2. George Bernard Shaw
  - 3. Sigmund Freud
  - 4. Arthur Miller

Question ID : 264330119028  
Option 1 ID : 264330466769  
Option 2 ID : 264330466767  
Option 3 ID : 264330466768  
Option 4 ID : 264330466770  
Status : Answered  
Chosen Option : 4

Q.31 Ibn Battuta's book of travels, called Rihla was originally written in:

- Ans
- 1. Persian
  - 2. Prakrit
  - 3. Arabic
  - 4. Urdu

Question ID : 264330111377  
Option 1 ID : 264330437593  
Option 2 ID : 264330437596  
Option 3 ID : 264330437595  
Option 4 ID : 264330437594  
Status : Answered  
Chosen Option : 3

Q.32 Which Article of the Indian Constitution states that no citizen of India shall accept any title from any foreign State?

- Ans
- 1. Article 18 (3)
  - 2. Article 18 (4)
  - 3. Article 18 (2)
  - 4. Article 18 (1)

Question ID : 264330180046  
Option 1 ID : 264330706169  
Option 2 ID : 264330706170  
Option 3 ID : 264330706168  
Option 4 ID : 264330706167  
Status : Not Attempted and Marked For Review  
Chosen Option : --

Q.33 Anantha R Krishnan is a famous \_\_\_\_\_ player.

- Ans
- 1. flute
  - 2. mridangam
  - 3. santoor
  - 4. sitar

Question ID : 264330111962  
Option 1 ID : 264330439934  
Option 2 ID : 264330439933  
Option 3 ID : 264330439936  
Option 4 ID : 264330439935  
Status : Answered  
Chosen Option : 2

**Q.34** Prior to India, which country introduced Five-Year Plans for policy-making purposes?

- Ans
- 1. Great Britain
  - 2. Germany
  - 3. The US
  - 4. The Union of Soviet Socialist Republics

Question ID : 264330111737  
Option 1 ID : 264330439034  
Option 2 ID : 264330439036  
Option 3 ID : 264330439033  
Option 4 ID : 264330439035  
Status : Answered  
Chosen Option : 4

**Q.35** The Great Bath in Mohenjo-Daro was excavated in which of the following areas?

- Ans
- 1. Citadel
  - 2. Residential complex
  - 3. Lower town
  - 4. House courtyard

Question ID : 264330109639  
Option 1 ID : 264330430834  
Option 2 ID : 264330430836  
Option 3 ID : 264330430833  
Option 4 ID : 264330430835  
Status : Answered  
Chosen Option : 2

**Q.36** Which of the following options is/are correct about cropland ecosystem?

Statement 1. Cropland is a man-made ecosystem.  
Statement 2. Very less genetic diversity is found in cropland ecosystem.

- Ans
- 1. Only statement 1 correct
  - 2. Both statements 1 and 2 correct
  - 3. Both statements 1 and 2 incorrect
  - 4. Only statement 2 correct

Question ID : 264330131804  
Option 1 ID : 264330516315  
Option 2 ID : 264330516318  
Option 3 ID : 264330516317  
Option 4 ID : 264330516316  
Status : Answered  
Chosen Option : 2

**Q.37** Bharatanatyam has originated from which of these states?

- Ans
- 1. Tamil Nadu
  - 2. Maharashtra
  - 3. Andhra Pradesh
  - 4. Telangana

Question ID : 264330109276  
Option 1 ID : 264330429382  
Option 2 ID : 264330429381  
Option 3 ID : 264330429384  
Option 4 ID : 264330429383  
Status : Answered  
Chosen Option : 1

**Q.38 Who won India's first medal at the Tokyo Olympics 2021?**

- Ans  1. Lovlina Borgohain  
 2. Mirabai Chanu  
 3. Mary Kom  
 4. PV Sindhu

Question ID : 264330119259  
Option 1 ID : 264330467326  
Option 2 ID : 264330467324  
Option 3 ID : 264330467323  
Option 4 ID : 264330467325  
Status : Answered  
Chosen Option : 2

**Q.39 Which of the following is NOT a noble gas?**

- Ans  1. Argon (Ar)  
 2. Nitrogen (N)  
 3. Neon (Ne)  
 4. Helium (He)

Question ID : 264330173653  
Option 1 ID : 264330681093  
Option 2 ID : 264330681094  
Option 3 ID : 264330681092  
Option 4 ID : 264330681091  
Status : Answered  
Chosen Option : 2

**Q.40 National income at current prices are calculated based on \_\_\_\_\_**

- Ans  1. constant prices  
 2. future prices  
 3. comparative prices  
 4. prevailing prices

Question ID : 264330120878  
Option 1 ID : 264330473728  
Option 2 ID : 264330473729  
Option 3 ID : 264330473730  
Option 4 ID : 264330473727  
Status : Answered  
Chosen Option : 1

Q.41 Which of the following is the correct match between column-A and column-B?

**Column-A**

- i. Producer
- ii. Primary consumer
- iii. Secondary consumer
- iv. Decomposer

**Column-B**

- a. Rabbit
- b. Green plants
- c. Bacteria and fungus
- d. Fox

Ans  1. i-b, ii-a, iii-d, iv-c

2. i-d, ii-c, iii-b, iv-a

3. i-a, ii-b, iii-c, iv-d

4. i-c, ii-d, iii-a, iv-b

Question ID : 264330111896

Option 1 ID : 264330439671

Option 2 ID : 264330439672

Option 3 ID : 264330439669

Option 4 ID : 264330439670

Status : Answered

Chosen Option : 1

Q.42 The much-loved English novel, 'Alice's Adventures in Wonderland' was written by which of the following authors?

Ans  1. Herman Melville

2. Edgar Allan Poe

3. Lewis Carroll

4. Mary Shelly

Question ID : 26433055369

Option 1 ID : 264330216462

Option 2 ID : 264330216463

Option 3 ID : 264330216460

Option 4 ID : 264330216461

Status : Answered

Chosen Option : 4

Q.43 Which of the following words were added in the Preamble by the Forty-second Amendment Act?

Ans  1. Justice, social

2. Fraternity assuring dignity

3. Liberty of thought

4. Socialist, secular

Question ID : 264330110560

Option 1 ID : 264330434517

Option 2 ID : 264330434520

Option 3 ID : 264330434519

Option 4 ID : 264330434518

Status : Answered

Chosen Option : 4

Q.44 Identify the scheme that was launched by the Prime Minister on 8 April 2015 for providing loans upto ₹10 lakh to the non-corporate, non-farm small/micro enterprises?

- Ans
- 1. Bharat Rojgar Yojana
  - 2. Pradhan Mantri Mudra Yojana
  - 3. Mahatma Gandhi National Rural Employment Guarantee Act
  - 4. Pradhan Mantri Shram Yogi Maan-dhan

Question ID : 264330130603  
Option 1 ID : 264330511526  
Option 2 ID : 264330511523  
Option 3 ID : 264330511524  
Option 4 ID : 264330511525  
Status : Answered  
Chosen Option : 2

Q.45 According to the census of India 2011, which group of states and union territories from the following recorded the highest literacy rate?

- Ans
- 1. Goa and Lakshadweep
  - 2. Mizoram and Delhi
  - 3. Kerala and Lakshadweep
  - 4. Kerala and Puducherry

Question ID : 264330167029  
Option 1 ID : 264330655120  
Option 2 ID : 264330655122  
Option 3 ID : 264330655121  
Option 4 ID : 264330655119  
Status : Answered  
Chosen Option : 3

Q.46 Who among the following founded the Forward Bloc in 1939?

- Ans
- 1. Mahatma Gandhi
  - 2. Chittaranjan Das
  - 3. Subhash Chandra Bose
  - 4. Jawaharlal Nehru

Question ID : 264330119004  
Option 1 ID : 264330466671  
Option 2 ID : 264330466674  
Option 3 ID : 264330466673  
Option 4 ID : 264330466672  
Status : Answered  
Chosen Option : 3

Q.47 The Pradhan Mantri Garib Kalyan Yojana (PMGKY) was launched in the year \_\_\_\_\_.

- Ans
- 1. 2014
  - 2. 2017
  - 3. 2016
  - 4. 2015

Question ID : 264330110010  
Option 1 ID : 264330432317  
Option 2 ID : 264330432320  
Option 3 ID : 264330432319  
Option 4 ID : 264330432318  
Status : Answered  
Chosen Option : 1

**Q.48** Who among the following Bharatnatyam dancers received the prestigious Natya Kalandhi award in 2021?

- Ans**  1. Chitra Visweswaran  
 2. Padma Subrahmanyam  
 3. Guru Bipin Singh  
 4. Pandit Birju Maharaj

Question ID : 264330112873  
Option 1 ID : 264330443580  
Option 2 ID : 264330443579  
Option 3 ID : 264330443578  
Option 4 ID : 264330443577  
Status : Answered  
Chosen Option : 2

**Q.49** Who among the following was known for creating fusion arts by adapting European theatrical techniques to Indian Classical dance combined with Indian folk and tribal dance?

- Ans**  1. Uday Shankar  
 2. Kelucharan Mahapatra  
 3. Vempi Chinna Satyam  
 4. Bipin Singh

Question ID : 264330111967  
Option 1 ID : 264330439955  
Option 2 ID : 264330439953  
Option 3 ID : 264330439956  
Option 4 ID : 264330439954  
Status : Answered  
Chosen Option : 1

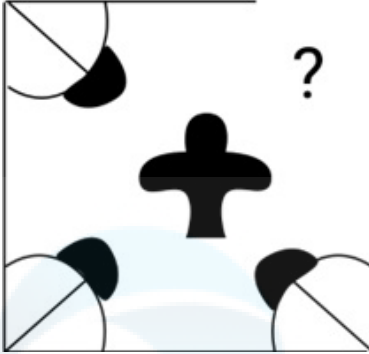
**Q.50** The great poet and humanist writer Rabindra Nath Thakur returned his knighthood in protest of which incident?

- Ans**  1. Bengal partition, 1905  
 2. Pitt's India Act of 1784  
 3. Kamagatamaru case, 1914  
 4. Jallianwala Bagh Massacre, 1919

Question ID : 264330123743  
Option 1 ID : 264330485007  
Option 2 ID : 264330485010  
Option 3 ID : 264330485008  
Option 4 ID : 264330485009  
Status : Answered  
Chosen Option : 4

Section : Reasoning

Q.1 Select the figure from the given options that will replace the question mark (?) in the figure given below to complete the pattern.



Ans

- 1.
- 2.
- 3.
- 4.

Question ID : 264330116616

Option 1 ID : 264330458550

Option 2 ID : 264330458549

Option 3 ID : 264330458552

Option 4 ID : 264330458551

Status : Answered

Chosen Option : 4

Q.2 Which figure should replace the question mark (?) if the following series were to be continued?

L D 3 A	B L D R	= □ L D	A = □ R	3 S = □	?
S	A	B	D	A	
B = □ R	= □ 3 S	A 3 S R	3 S L B	D L B R	

Ans

1.    
 = 3 S A  
 B D L R
2.    
 S = B R  
 3 D L A
3.    
 D 3 S R  
 L B = A
4.    
 D 3 S =  
 L B R A

Question ID : 264330103898

Option 1 ID : 264330407896

Option 2 ID : 264330407893

Option 3 ID : 264330407895

Option 4 ID : 264330407894

Status : Answered

Chosen Option : 4

Q.3 Which of the following options will replace the question mark (?) in the given series?  
9000, 7200, 5760, ?, 3686.4

- Ans
1.  4600
2.  3860
3.  4608
4.  3456

Question ID : 264330109436

Option 1 ID : 264330430023

Option 2 ID : 264330430024

Option 3 ID : 264330430021

Option 4 ID : 264330430022

Status : Answered

Chosen Option : 3

Q.4 Which of the following option figures will complete the pattern in the figure given below?



Ans

X 1.



X 2.



✓ 3.



X 4.



Question ID : 26433080598

Option 1 ID : 264330316325

Option 2 ID : 264330316328

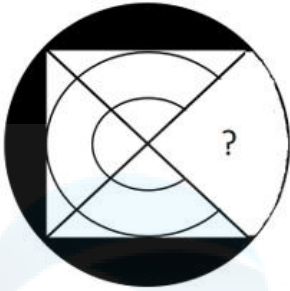
Option 3 ID : 264330316327

Option 4 ID : 264330316326

Status : Answered

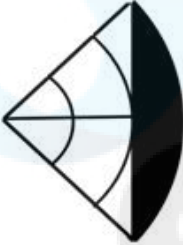
Chosen Option : 3

Q.5 Select the figure from the options that can replace the question mark (?) and complete the given pattern.



Ans

✗ 1.



✗ 2.



✗ 3.



✓ 4.



Question ID : 26433082913

Option 1 ID : 264330325485

Option 2 ID : 264330325488

Option 3 ID : 264330325487

Option 4 ID : 264330325486

Status : Answered

Chosen Option : 4

Q.6 Which of the following option figures will complete the pattern in the figure given below?



Ans

X 1.



✓ 2.



X 3.

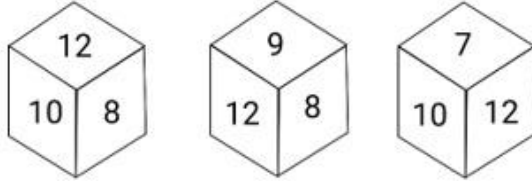


X 4.



Question ID : 26433080631  
Option 1 ID : 264330316459  
Option 2 ID : 264330316457  
Option 3 ID : 264330316460  
Option 4 ID : 264330316458  
Status : Answered  
Chosen Option : 2

Q.7 Six numbers, 7, 8, 9, 10, 11 and 12 are written on different faces of a dice. Three positions of this dice are shown here. Find the number on the face opposite 12.



- Ans
- 1. 10
  - 2. 9
  - 3. 11
  - 4. 8

Question ID : 264330106398  
 Option 1 ID : 264330417895  
 Option 2 ID : 264330417894  
 Option 3 ID : 264330417896  
 Option 4 ID : 264330417893  
 Status : Answered  
 Chosen Option : 3

Q.8 Select the correct combination of mathematical signs to sequentially replace the \* signs and to balance the given equation.

$$198 * 11 * 18 * 20 * 50 * 294$$

- Ans
- 1. +, x, =, +, -
  - 2. +, +, x, -, =
  - 3. +, x, -, +, =
  - 4. +, x, +, -, =

Question ID : 26433076550  
 Option 1 ID : 264330300267  
 Option 2 ID : 264330300265  
 Option 3 ID : 264330300264  
 Option 4 ID : 264330300266  
 Status : Answered  
 Chosen Option : 4

Q.9 Read the given statements and conclusions carefully. Assuming that the information given in the statements is true, even if it appears to be at variance with commonly known facts, decide which of the given conclusions logically follow(s) from the statements.

Statements:

Some roses are lilies.

Some lilies are jasmine.

Conclusions:

I. Some jasmines are roses.

II. All jasmines are roses.

- Ans
- 1. Only conclusion II follows
  - 2. Neither conclusion I nor II follows
  - 3. Both conclusions I and II follow
  - 4. Only conclusion I follows

Question ID : 26433069508  
 Option 1 ID : 264330272545  
 Option 2 ID : 264330272547  
 Option 3 ID : 264330272546  
 Option 4 ID : 264330272544  
 Status : Answered  
 Chosen Option : 2

Q.10 Which of the following option figures will complete the pattern in the figure given below?

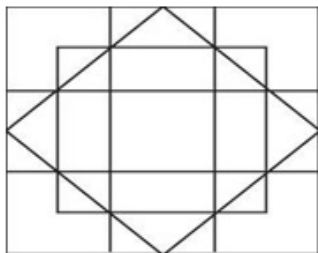


Ans



Question ID : 26433080610  
 Option 1 ID : 264330316375  
 Option 2 ID : 264330316374  
 Option 3 ID : 264330316373  
 Option 4 ID : 264330316376  
 Status : Answered  
 Chosen Option : 1

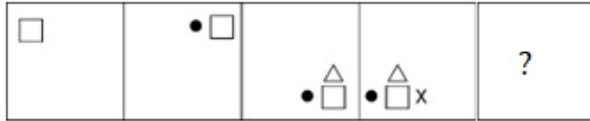
Q.11 How many triangles are there in the given figure?



Ans  1. 32  
 2. 24  
 3. 28  
 4. 20

Question ID : 26433091712  
 Option 1 ID : 264330360216  
 Option 2 ID : 264330360215  
 Option 3 ID : 264330360214  
 Option 4 ID : 264330360213  
 Status : Answered  
 Chosen Option : 3

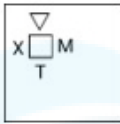
Q.12 Given below is a series of figures – A, B, C and D which follow a particular pattern. Which of the given option figures should come in place of E to continue the series?



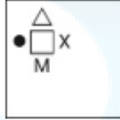
(A) (B) (C) (D) (E)

Ans


✗ 1.



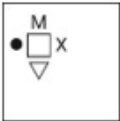
✓ 2.



✗ 3.



✗ 4.



Question ID : 26433011291

Option 1 ID : 264330437249

Option 2 ID : 264330437252

Option 3 ID : 264330437250

Option 4 ID : 264330437251

Status : Answered

Chosen Option : 2

Q.13 Select the option that is related to the third word in the same way as the second word is related to the first word.

(The words must be considered as meaningful English words and must not be related to each other based on the number of letters/number of consonants/vowels in the word)

Virus : Influenza :: Fungus : ?

Ans ✗ 1. Algae

✗ 2. Amaltas

✗ 3. Bacteria

✓ 4. Aspergillosis

Question ID : 26433070281

Option 1 ID : 264330275602

Option 2 ID : 264330275601

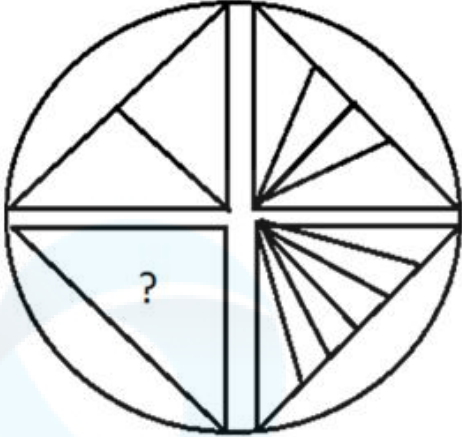
Option 3 ID : 264330275603

Option 4 ID : 264330275600

Status : Answered

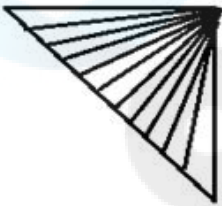
Chosen Option : 4

Q.14 Select the option figure that will replace the question mark (?) in the figure given below to complete the pattern.

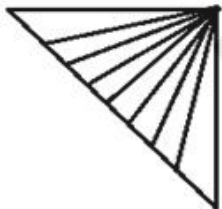


Ans

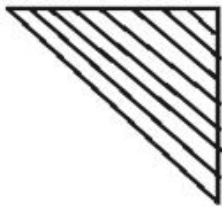
✗ 1.



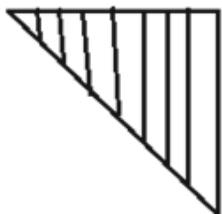
✓ 2.



✗ 3.



✗ 4.



Question ID : 264330118230

Option 1 ID : 264330464738

Option 2 ID : 264330464737

Option 3 ID : 264330464736

Option 4 ID : 264330464735

Status : Answered

Chosen Option : 2

Q.15 Select the option that is related to the fourth term in the same way as the first term is related to the second term and the fifth term is related to the sixth term.  
 $7 : 46 :: ? : 78 :: 11 : 118$

- Ans
- 1. 13
  - 2. 11
  - 3. 9
  - 4. 10

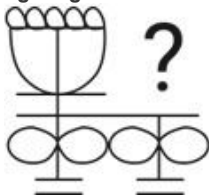
Question ID : 26433052093  
 Option 1 ID : 264330203677  
 Option 2 ID : 264330203676  
 Option 3 ID : 264330203674  
 Option 4 ID : 264330203675  
 Status : Answered  
 Chosen Option : 3

Q.16 Which of the following terms will replace the question mark (?) in the given series?  
 KYIB, IUKF, GQMJ, ?, CIQR

- Ans
- 1. HNON
  - 2. ENOM
  - 3. HMNO
  - 4. EMON

Question ID : 264330102175  
 Option 1 ID : 264330401165  
 Option 2 ID : 264330401168  
 Option 3 ID : 264330401167  
 Option 4 ID : 264330401166  
 Status : Answered  
 Chosen Option : 4

Q.17 Select the figure from the given options that will replace the question mark (?) in the figure given below and complete the pattern.



- Ans
- 1.
  - 2.
  - 3.
  - 4.

Question ID : 264330111712  
 Option 1 ID : 264330438933  
 Option 2 ID : 264330438934  
 Option 3 ID : 264330438936  
 Option 4 ID : 264330438935  
 Status : Answered  
 Chosen Option : 1

Q.18 Select the correct mirror image of the given figure when the mirror is placed at 'AB' as shown.



Ans

1. V 2 33 5° t e

2. V 2 33 5° t e

3. V 2 33 5° t e

4. e t 5° 33 2 V

Question ID : 264330114699

Option 1 ID : 264330450882

Option 2 ID : 264330450884

Option 3 ID : 264330450881

Option 4 ID : 264330450883

Status : Answered

Chosen Option : 2

Q.19 Select the correct mirror image of the given combination when the mirror is placed at 'XY' as shown below.



Ans

1. V N I 2 e 5 0 D

2. D Q Z 6 5 I N A

3. D 0 Z 9 5 I N V

4. D 0 5 e 2 I N A

Question ID : 264330129693

Option 1 ID : 264330508139

Option 2 ID : 264330508141

Option 3 ID : 264330508138

Option 4 ID : 264330508140

Status : Answered

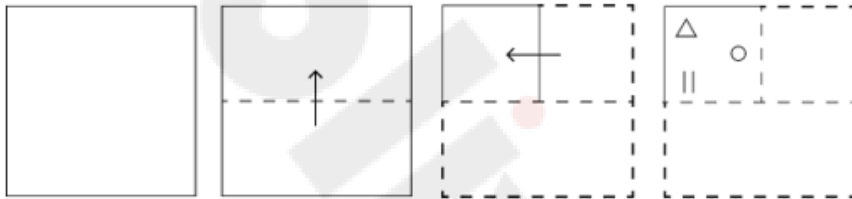
Chosen Option : 4

**Q.20** Select the correct combination of mathematical signs to sequentially replace the \* signs and to balance the given equation.  
 $242 * 11 * 76 * 34 * 2 * 32$

- Ans
- 1.  $+ - + \times =$
  - 2.  $+ + - \times =$
  - 3.  $+ + - = \times$
  - 4.  $+ + - = \times$

Question ID : 26433085722  
 Option 1 ID : 264330336591  
 Option 2 ID : 264330336589  
 Option 3 ID : 264330336592  
 Option 4 ID : 264330336590  
 Status : Answered  
 Chosen Option : 4

**Q.21** A square sheet of paper is folded along the dotted line successively along the directions shown and is then punched in the last. How would the paper look when unfolded?



Ans

- 1.
- 2.
- 3.
- 4.

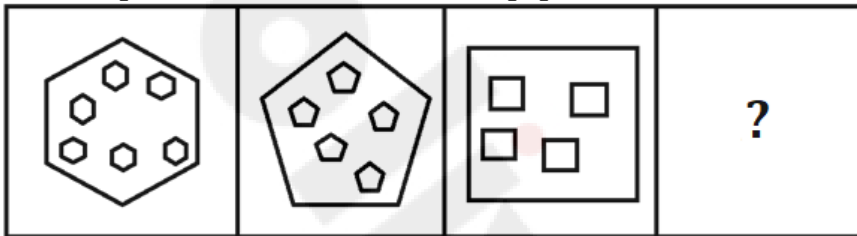
Question ID : 264330172431  
 Option 1 ID : 264330676277  
 Option 2 ID : 264330676275  
 Option 3 ID : 264330676278  
 Option 4 ID : 264330676276  
 Status : Answered  
 Chosen Option : 1

Q.22 C, D, E, F, M and N are sitting around a circular table facing the centre. D sits second to the right of M. F sits to the immediate left of N. N is not an immediate neighbour of M. C is not an immediate neighbour of D. Who among the following is an immediate neighbour of E?

- Ans
- 1. N
  - 2. F
  - 3. D
  - 4. C

Question ID : 264330104021  
 Option 1 ID : 264330408387  
 Option 2 ID : 264330408385  
 Option 3 ID : 264330408386  
 Option 4 ID : 264330408388  
 Status : Answered  
 Chosen Option : 3

Q.23 Select the figure that will come next in the following figure series.



Ans

- 1.
- 2.
- 3.
- 4.

Question ID : 264330129653  
 Option 1 ID : 264330507980  
 Option 2 ID : 264330507979  
 Option 3 ID : 264330507981  
 Option 4 ID : 264330507978  
 Status : Answered  
 Chosen Option : 1

Q.24 In a certain code language, 'CALIBER' is written as 'ECNGDGT' and 'BURNING' is written as 'DWTLKPI'. How will 'AUCTION' be written in that language?

- Ans
- 1. BVERQKST
  - 2. CVBTKQR
  - 3. BWDSKPR
  - 4. CWERKQP

Question ID : 26433089418  
Option 1 ID : 264330351173  
Option 2 ID : 264330351175  
Option 3 ID : 264330351176  
Option 4 ID : 264330351174  
Status : Answered  
Chosen Option : 4

Q.25 Select the set in which the numbers are related in the same way as are the numbers of the following sets.

(NOTE : Operations should be performed on the whole numbers, without breaking down the numbers into its constituent digits. E.g. 13 – Operations on 13 such as adding/deleting/multiplying etc. to 13 can be performed. Breaking down 13 into 1 and 3 and then performing mathematical operations on 1 and 3 is NOT allowed)  
(40, 253, 17)  
(30, 187, 13)

- Ans
- 1. (50, 385, 15)
  - 2. (25, 100, 15)
  - 3. (40, 240, 20)
  - 4. (17, 77, 9)

Question ID : 26433097438  
Option 1 ID : 264330382443  
Option 2 ID : 264330382442  
Option 3 ID : 264330382441  
Option 4 ID : 264330382444  
Status : Answered  
Chosen Option : 1

Section : Numerical Ability

Q.1 The simple interest on a sum of ₹1,500 at 5% p.a. for 3 years is:

- Ans
- 1. ₹192
  - 2. ₹195
  - 3. ₹180
  - 4. ₹225

Question ID : 264330182517  
Option 1 ID : 264330715861  
Option 2 ID : 264330715859  
Option 3 ID : 264330715860  
Option 4 ID : 264330715862  
Status : Answered  
Chosen Option : 4

Q.2 A shopkeeper marks an article 35% above the cost price, and offers 20% discount on the marked price, what is his gain percentage?

- Ans  1. 8%  
 2. 7%  
 3. 5%  
 4. 9%

Question ID : 264330168926  
Option 1 ID : 264330662510  
Option 2 ID : 264330662508  
Option 3 ID : 264330662507  
Option 4 ID : 264330662509  
Status : Answered  
Chosen Option : 1

Q.3 What is the unit digit of the product of all the prime numbers between 51 and 78?

- Ans  1. 2  
 2. 3  
 3. 7  
 4. 6

Question ID : 264330104275  
Option 1 ID : 264330409403  
Option 2 ID : 264330409404  
Option 3 ID : 264330409402  
Option 4 ID : 264330409401  
Status : Answered  
Chosen Option : 3

Q.4 If a box was sold at a loss of ₹350 for ₹4,650, then the percentage loss is equal to:

- Ans  1. 7%  
 2. 6%  
 3. 5%  
 4. 8%

Question ID : 264330169418  
Option 1 ID : 264330664429  
Option 2 ID : 264330664428  
Option 3 ID : 264330664427  
Option 4 ID : 264330664430  
Status : Answered  
Chosen Option : 1

Q.5 The product of the LCM and HCF of two numbers is 48. The difference between the two numbers is 13. Find the numbers.

- Ans  1. 9 and 22  
 2. 6 and 19  
 3. 3 and 16  
 4. 10 and 23

Question ID : 264330104267  
Option 1 ID : 264330409372  
Option 2 ID : 264330409369  
Option 3 ID : 264330409370  
Option 4 ID : 264330409371  
Status : Answered  
Chosen Option : 3

Q.6 The slant height of a cone is 5 cm and its diameter is 8 cm. What is the volume of the cone (correct to two decimal places)? (Where  $\pi = \frac{22}{7}$ )

- Ans
- 1. 35.66 cm<sup>3</sup>
  - 2. 50.28 cm<sup>3</sup>
  - 3. 59.82 cm<sup>3</sup>
  - 4. 28.28 cm<sup>3</sup>

Question ID : 264330118142  
Option 1 ID : 264330464384  
Option 2 ID : 264330464385  
Option 3 ID : 264330464386  
Option 4 ID : 264330464383  
Status : Answered  
Chosen Option : 2

Q.7 After a 15% decline, the income of Ajay stands at ₹2,12,500. What was his original income (in ₹)?

- Ans
- 1. 2,25,000
  - 2. 1,80,625
  - 3. 2,50,000
  - 4. 2,40,000

Question ID : 264330103308  
Option 1 ID : 264330405540  
Option 2 ID : 264330405538  
Option 3 ID : 264330405539  
Option 4 ID : 264330405537  
Status : Answered  
Chosen Option : 3

Q.8 In a 600 m race, A gave B a head start of 5 seconds and still won the race by 20 seconds. If the ratio of the speed of A to the speed of B is 2 : 1, then the speed of B is:

- Ans
- 1. 21 m/sec
  - 2. 12 m/sec
  - 3. 10 m/sec
  - 4. 18 m/sec

Question ID : 264330168935  
Option 1 ID : 264330662546  
Option 2 ID : 264330662544  
Option 3 ID : 264330662543  
Option 4 ID : 264330662545  
Status : Answered  
Chosen Option : 2

Q.9 There are 50 students in a class. The average marks of 20 students is 70 and the remaining 30 have average marks of 80. Calculate the average score of the whole class.

- Ans
- 1. 70
  - 2. 75
  - 3. 76
  - 4. 74

Question ID : 264330126555  
Option 1 ID : 264330495892  
Option 2 ID : 264330495894  
Option 3 ID : 264330495893  
Option 4 ID : 264330495895  
Status : Answered  
Chosen Option : 3

Q.10 A man borrowed a sum of money and agreed to pay off by paying ₹4,200 at the end of the first year and ₹4,410 at the end of the second year. If the rate of compound interest was 5% per annum, find the sum borrowed.

- Ans
- 1. ₹7,500
  - 2. ₹7,000
  - 3. ₹8,500
  - 4. ₹8,000

Question ID : 264330104317  
Option 1 ID : 264330409570  
Option 2 ID : 264330409569  
Option 3 ID : 264330409572  
Option 4 ID : 264330409571  
Status : Answered  
Chosen Option : 4

Q.11 By what percentage should a woman increase the speed of her car to reduce the time by 80% to cover a fixed distance?

- Ans
- 1. 400%
  - 2. 100%
  - 3. 300%
  - 4. 200%

Question ID : 264330112845  
Option 1 ID : 264330443467  
Option 2 ID : 264330443466  
Option 3 ID : 264330443468  
Option 4 ID : 264330443465  
Status : Answered  
Chosen Option : 1

Q.12 A, B, C work one after the other in that order. Each can finish a work individually in 10, 16, 12 days, respectively. After working for 3 such cycles ABC, ABC, ABC, then A and C leave the work. B alone will complete the rest of the work in:

- Ans
- ✓ 1.  $4\frac{1}{5}$  days
  - ✗ 2.  $1\frac{4}{5}$  days
  - ✗ 3.  $5\frac{4}{5}$  days
  - ✗ 4.  $5\frac{1}{4}$  days

Question ID : 264330103748  
Option 1 ID : 264330407297  
Option 2 ID : 264330407299  
Option 3 ID : 264330407298  
Option 4 ID : 264330407300  
Status : Answered  
Chosen Option : 1

Q.13 An ice cream cone is to be made to have volume  $\frac{128}{3}\pi$  and the height of the cone is double the radius of the cone. What is the slant height of the cone?

- Ans
- ✗ 1.  $\sqrt{40}$
  - ✗ 2.  $\sqrt{90}$
  - ✗ 3.  $\sqrt{60}$
  - ✓ 4.  $\sqrt{80}$

Question ID : 264330112120  
Option 1 ID : 264330440567  
Option 2 ID : 264330440568  
Option 3 ID : 264330440565  
Option 4 ID : 264330440566  
Status : Answered  
Chosen Option : 4

Q.14 Which of the following is a pair of co-primes?

- Ans
- ✗ 1. (7, 35)
  - ✗ 2. (217, 651)
  - ✗ 3. (32, 62)
  - ✓ 4. (198, 175)

Question ID : 264330105984  
Option 1 ID : 264330416237  
Option 2 ID : 264330416239  
Option 3 ID : 264330416240  
Option 4 ID : 264330416238  
Status : Answered  
Chosen Option : 1

Q.15 Let  $x = 5, y = 8$ . Arrange the following numbers in ascending order.

$$\frac{x+1}{y-1}, \frac{2x}{2y-3}, \frac{y+1}{2x-1}, \frac{y+1}{3x-y}$$

Ans

1.  $\frac{2x}{2y-3}, \frac{x+1}{y-1}, \frac{y+1}{3x-y}, \frac{y+1}{2x-1}$

2.  $\frac{2x}{2y-3}, \frac{y+1}{2x-1}, \frac{x+1}{y-1}, \frac{y+1}{3x-y}$

3.  $\frac{2x}{2y-3}, \frac{x+1}{y-1}, \frac{y+1}{2x-1}, \frac{y+1}{3x-y}$

4.  $\frac{x+1}{y-1}, \frac{2x}{2y-3}, \frac{y+1}{2x-1}, \frac{y+1}{3x-y}$

Question ID : 264330126120

Option 1 ID : 264330494154

Option 2 ID : 264330494152

Option 3 ID : 264330494155

Option 4 ID : 264330494153

Status : Answered

Chosen Option : 3

Section : Computer Proficiency

Q.1 In MS-Word 2010, Page number option comes under which of the following menus?

Ans  1. Pages

2. Header and Footer

3. Home Tab

4. Page layout

Question ID : 264330176705

Option 1 ID : 264330693038

Option 2 ID : 264330693035

Option 3 ID : 264330693037

Option 4 ID : 264330693036

Status : Answered

Chosen Option : 1

Q.2 In MS Excel 365, when entering data into an MS Excel 365 spreadsheet, which data type is most suitable for a person's first name?

Ans  1. Date

2. Currency

3. Text

4. Number

Question ID : 264330178569

Option 1 ID : 264330700303

Option 2 ID : 264330700306

Option 3 ID : 264330700304

Option 4 ID : 264330700305

Status : Answered

Chosen Option : 3

Q.3 Which option allows you to adjust the line spacing between lines of text in a paragraph in MS-Word 365?

- Ans
- 1. Line Spacing
  - 2. Text Indentation
  - 3. Paragraph Border
  - 4. Paragraph Alignment

Question ID : 264330173333  
Option 1 ID : 264330679813  
Option 2 ID : 264330679811  
Option 3 ID : 264330679814  
Option 4 ID : 264330679812  
Status : Answered  
Chosen Option : 1

Q.4 What is the default print range in Microsoft Excel 365, when printing an entire worksheet?

- Ans
- 1. Entire Workbook
  - 2. Active Sheet
  - 3. Selected Range
  - 4. All Sheets

Question ID : 264330178082  
Option 1 ID : 264330698394  
Option 2 ID : 264330698392  
Option 3 ID : 264330698393  
Option 4 ID : 264330698391  
Status : Answered  
Chosen Option : 2

Q.5 In MS Excel 365, you are working on an Excel worksheet and need to select an entire row above the current row. Which keyboard shortcut combination should you use?

- Ans
- 1. Ctrl + Spacebar
  - 2. Shift + Spacebar
  - 3. Alt + Spacebar
  - 4. Ctrl + +

Question ID : 264330182782  
Option 1 ID : 264330716900  
Option 2 ID : 264330716899  
Option 3 ID : 264330716902  
Option 4 ID : 264330716901  
Status : Not Attempted and Marked For Review  
Chosen Option : --

Q.6 Which of the following is NOT a layer of the Internet Protocol Suite (TCP/IP)?

- Ans
- 1. Application layer
  - 2. Physical layer
  - 3. Network layer
  - 4. Transport layer

Question ID : 264330178552  
Option 1 ID : 264330700235  
Option 2 ID : 264330700238  
Option 3 ID : 264330700237  
Option 4 ID : 264330700236  
Status : Answered  
Chosen Option : 2

Q.7 In MS Word 365, what happens when you select text and then press the 'Backspace' key?

- Ans
- 1. The text is moved to the end of the document
  - 2. The text is formatted with a bold style
  - 3. The text is copied to the clipboard
  - 4. The text is deleted to the left of the cursor

Question ID : 264330180855  
Option 1 ID : 264330709386  
Option 2 ID : 264330709384  
Option 3 ID : 264330709383  
Option 4 ID : 264330709385  
Status : Answered  
Chosen Option : 4

Q.8 Which of the following operations is done using shortcut key Ctrl + Shift + > in MS Word 365?

- Ans
- 1. Increase the font size
  - 2. Decrease the font size
  - 3. Left Alignment of text
  - 4. Right Alignment of text

Question ID : 264330180445  
Option 1 ID : 264330707747  
Option 2 ID : 264330707748  
Option 3 ID : 264330707749  
Option 4 ID : 264330707750  
Status : Answered  
Chosen Option : 1

Q.9 Which formatting feature in MS Word 365, is used to emphasise text by making it bold, italic or underlined in documents?

- Ans
- 1. Hyperlinking
  - 2. Page margins
  - 3. Font styling
  - 4. Text wrapping

Question ID : 264330178578  
Option 1 ID : 264330700340  
Option 2 ID : 264330700342  
Option 3 ID : 264330700341  
Option 4 ID : 264330700339  
Status : Answered  
Chosen Option : 3

**Q.10** An attachment in an E-mail can be:

- 1) Digital photos
- 2) Documents

- Ans
- 1. Only (2)
  - 2. Only (1)
  - 3. Both (1) and (2)
  - 4. Neither (1) nor (2)

Question ID : 264330175931

Option 1 ID : 264330690020

Option 2 ID : 264330690019

Option 3 ID : 264330690021

Option 4 ID : 264330690022

Status : Answered

Chosen Option : 3